



GOVT. OF NCT OF DELHI
Delhi Subordinate Services Selection Board
FC-18, Institutional Area, Karkardooma, Delhi – 110092.
www.dsssb.delhigovt.nic.in

Participant ID	Teachingninja.in
Participant Name	
Test Center Name	
Test Date	06/09/2019
Test Time	4:30 PM - 6:30 PM
Subject	Multi Tasking Staff (MTS)

Section : Mental Ability1

Q.1 Find the wrong term in the series:

LJH, IGE, FCB, CAY

- Ans
- 1. CAY
 - 2. FCB
 - 3. LJH
 - 4. IGE

Question ID : 54592730303

Q.2 Ani is the daughter of Mani. Mani's mother is Amaya. Emi is Amaya's mother. Emi's husband is Herry. Krishna is the mother in law of Herry. How is Ani related to Herry?

- Ans
- 1. Great Grand Daughter
 - 2. Grand Niece
 - 3. Daughter
 - 4. Great Grandson's Daughter

Question ID : 54592730317

Q.3 In the following question, select the related letter / word / number from the given alternatives.

Brain : human :: _____ : computer

- Ans
- 1. Keyboard
 - 2. RAM
 - 3. Hard disk
 - 4. CPU

Question ID : 54592730307

Q.4 Find out the next term:

GH10, MN15, RS20, _____

- Ans
- 1. WX25
 - 2. YZ1
 - 3. G1F

 4. EF7

Question ID : 54592730302

Q.5 Choose the odd one from the given alternatives.

- Ans  1. FEC
 2. VUT
 3. RQO
 4. IHF

Question ID : 54592730305

Q.6 In the following question, select the related letter/word/number from the given alternatives.

GROW : COMV :: SHOW : _____

- Ans  1. OMEV
 2. OEMV
 3. PFVM
 4. ROMV

Question ID : 54592730309





Q.7 In the question below is a statement followed by two conclusions numbered I and II. You have to assume everything in the statement to be true, then consider the two conclusions together and decide which of them logically follows beyond a reasonable doubt from the information given in the statement.

Statement:

I. All employees who do not work properly bring a bad name for themselves and also are a liability to an organization.

Conclusions:

- I. Such employees should be fired from the organisation.
 II. Strict action is required in such cases.

- Ans  1. Only conclusion I follows
 2. Only conclusion II follows
 3. Neither conclusion I nor conclusion II follows
 4. Both conclusion I and conclusion II follow

Question ID : 54592730319



Q.8 In the question below, there are three statements followed by two conclusions. You have to take the given statements to be true even if they seem to be at variance with commonly known facts and then decide which of the given conclusion logically follow(s) from the given statements.

Statements:

- I. All fans are bulbs.
 II. Some bulbs are walls.
 III. All walls are roofs.

Conclusions:

- I. Some walls are bulbs.
 II. Some roofs are fans.

- Ans  1. Either conclusion I or II follows
 2. Only conclusion I follows

3. Only conclusion II follows

4. Neither conclusion I nor II follows

Question ID : 54592730318

Q.9 In a psychology test of 6 students- P, Q, R, A, B, and C, the teacher found following information regarding the intelligence level of students.

P is more intelligent than A.

R is less intelligent than C.

P is more intelligent than Y.

Q is as much intelligent as B.

If B and C are not the most intelligent student, than who will be the most intelligent student?

Ans 1. A

2. Q

3. R

4. P

Question ID : 54592730313

Q.10 In the following question, a group of letters is given which are numbered 1, 2, 3, 4, 5 and 6. Below are given four alternatives containing combinations of these numbers. Select that combination of numbers so that letters arranged accordingly, form a meaningful word.

L R P E A Y

1 2 3 4 5 6

Ans 1. 425613

2. 315624

3. 314625

4. 315642

Question ID : 54592730312

Q.11 If 'ball' is 'tennis', 'tennis' is 'chess', 'chess' is 'hockey', 'hockey' is 'ludo' and 'ludo' is 'basketball', what is cricket played with?

Ans 1. Ludo

2. Ball

3. Tennis

4. Hockey

Question ID : 54592730311

Q.12 If HEAD is coded as 1438 and BRING is coded as 76952, what do the figures 6438952 stands for?

Ans 1. HIGHER

2. DIEING

3. HEATING

4. READING

Question ID : 54592730310

Q.13 Find the odd one out from the given alternatives.

- Ans 1. Brass
 2. Zinc
 3. Silver
 4. Iron

Question ID : 54592730304

Q.14 From the given responses, find the missing letter in the series:

GJ, KH,IL,MJ,?

- Ans 1. KN
 2. KL
 3. MN
 4. LM

Question ID : 54592730301

Q.15 Choose the odd one from the given alternatives.

- Ans 1. HI : SR
 2. EF : VU
 3. CD : XW
 4. LM : PQ

Question ID : 54592730306

Q.16 A, B, C, D and E play Hockey. 3 players from Hockey were selected to form Team 1.

- I. A is always selected.
II. Exactly one among B and C is always selected
III. D will not participate if B is selected.
IV. E will not play with C

Which among the given option is a possibility of team to be selected?

- Ans 1. ABE
 2. ADE
 3. BEC
 4. ADB

Question ID : 54592730316

Q.17 There are five books kept one over the other. Two books are of English language, two books are of Management, and one book is of Statistic. One book of Management is in the top shelf and other one is in the last shelf. Book of Statistic is kept just above English language book. One book of English is kept just above Management book. English books are kept adjacent to each other.

Which book is kept in second shelf?

- Ans 1. Statistic
 2. Either English language or Statistic
 3. Management

 4. English language

Question ID : 54592730315




Q.18 Five students Karan, Charan, Lavan, Pavan, and Sravan, are top five rankers of a class. No two students got same rank. The number of students who got better rank than Pavan is same as those who got a worse rank than Lavan. Only one student got a worse rank than Karan. Who among the following is the first ranker?

- Ans  1. Lavan
-  2. Sravan
-  3. Pavan
-  4. Karan

Question ID : 54592730314

Q.19 Complete the following series:





10, 20, 60, 300, ?

- Ans  1. 2100
-  2. 2120
-  3. 3500
-  4. 1200

Question ID : 54592730320

Q.20 In the following question, select the related letter / word / number from the given alternatives.

TIME : CLOCK :: _____ : _____





- Ans  1. Hair spring : wrist watch
-  2. Date : calendar
-  3. Sincerity : disloyal
-  4. Paper : pen

Question ID : 54592730308

Section : Mental Ability2

Q.1 In the following question, select the related letter / word / number from the given alternatives.

420, 425, 440

- Ans  1. 465
-  2. 470
-  3. 475
-  4. 455

Question ID : 54592730325

Q.2 In the following question an unfolded dice is given. From the given alternatives which of the following will be opposite of A?



- Ans
- 1. O
 - 2. U
 - 3. E
 - 4. I

Question ID : 54592730339

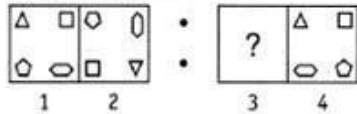
Q.3 In the following questions, element (ii) is related to element (i) in a particular way in four pairs of figures. Find out the pair of figures in which the element (ii) is not related to element (i).

- Ans
- 1.
 - 2.
 - 3.
 - 4.

Question ID : 54592730335

Q.4 The second figure in the first unit of the problem figures bears a certain relationship to the first figure. You have to select that figure from the set of answer figures which would come in the place of question mark (?)

Problem Figures

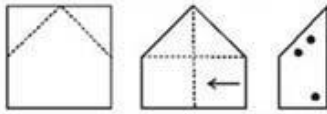


- Ans
- 1.
 - 2.
 - 3.
 - 4.

Question ID : 54592730333

Q.5 In the following question a piece of paper is folded in the manner shown in the question figure(s). Select the figure out of the answer choices showing the unfolded pattern after the punches (cut).

Question Figures



Ans

- 1.
- 2.
- 3.
- 4.

Question ID : 54592730337

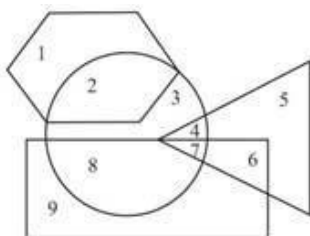
Q.6 Which of the following diagrams best represents a relationship among Tank, Lake and Sea?

Ans

- 1.
- 2.
- 3.
- 4.

Question ID : 54592730330

Q.7 In the given figure, the rectangle represents Arts, and Hexagon represents Commerce and triangle represents Science circle represents other group. Which number represents the group of person of Science and arts but not commerce or any other group?



- Ans
- 1. 7
 - 2. 4
 - 3. 8
 - 4. 6

Question ID : 54592730331


Q.8 Find the wrong term in the given series:

31, 63, 127, 250, 511

- Ans
- 1. 31
 - 2. 127
 - 3. 250
 - 4. 63

Question ID : 54592730321

Q.9 Count the number of cubes in the given figure:



- Ans
- 1. 15
 - 2. 9
 - 3. 12
 - 4. 8

Question ID : 54592730340

Q.10 Given interchanges: signs \div and \times , and numbers 7 and 21; then the value of $7 \times 21 \div 2$ is:

- Ans
- 1. 8
 - 2. 12
 - 3. 6
 - 4. 16

Question ID : 54592730327

Q.11 Choose the odd number pair from the given options:

- Ans
- 1. 342 : 252
 - 2. 624 : 534
 - 3. 442 : 362
 - 4. 241 : 151

Question ID : 54592730323

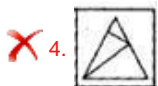
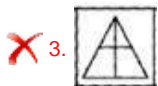
Q.12 Find out which of the figure (a), (b), (c), (d) can be formed from the pieces given in fig. (X).

Question

Figure

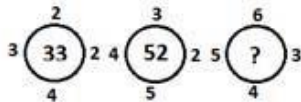


Ans



Question ID : 54592730338

Q.13 Insert the missing number:



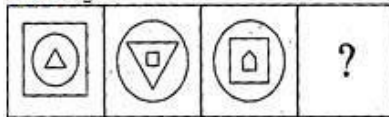
Ans




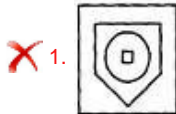
Question ID : 54592730326

Q.14 Choose an appropriate figure from the four numbered figures for the place of the questions mark (?).

Problem Figures



Ans



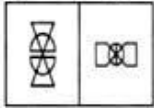
✗ 4.



Question ID : 54592730334

Q.15 Two figures forming the problem figure and four other answer figures are given. Select a answer figure which possess the same characteristic as Question figure.

Question figures



Ans

✗ 1.



✓ 2.



✗ 3.



✗ 4.



Question ID : 54592730332

Q.16 Choose the correct water image from the given alternatives.

C A T

Ans

✗ 1. J V O

✓ 2. C V L

✗ 3. C A L

✗ 4. C V T

Question ID : 54592730336

Q.17 Choose the odd number pair from the given options:

Ans

✗ 1. 16 : 47 : 49

✓ 2. 10 : 38 : 66

✗ 3. 25 : 56 : 36

✗ 4. 4 : 23 : 9

Question ID : 54592730324

Q.18 Choose the odd one from the given options:

Ans

✗ 1. 38

2. 76 3. 96 4. 64

Question ID : 54592730329

Q.19 In the question given below, there is a statement followed by two conclusions. You have to take the given statement to be true even if they seem to be at variance with commonly known facts and then decide which of the given conclusion logically follow(s) from the given statements.

Statements:

 $P = U < M < K \leq I > N$

Conclusions:

I. $N \geq K$ II. $I > P$ Ans 1. If only conclusion II is true 2. If either conclusion I or II is true 3. If only conclusion I is true 4. If neither conclusion I nor II is true

Question ID : 54592730328

Q.20 Choose the odd one from the given options:

Ans 1. 284 2. 1089 3. 861 4. 576

Question ID : 54592730322

Section : General Awareness1

Q.1 $v = u + at$, given is the equation of motion. Which of the following pairs given are not correctly matched in reference to the above equation.

Ans 1. v = distance travelled 2. u = initial velocity 3. a = acceleration 4. t = time

Question ID : 54592730348

Q.2 िन निलिखत म से कौन सी महासागर य जलधारा शांत महासागर म वा हत नह

होती है? Ans

 1. अला का जलधारा 2. कु रोशयो जलधारा 3. गाफ क्म 4. उ तर भूम यरेखीय जलधारा

Question ID : 54592730358

Q.3 Which of the following rivers is known as Tsang Po in Tibet and Jamuna in Bangladesh?

- Ans
- 1. Yamuna
 - 2. Brahmaputra
 - 3. Ganga
 - 4. Indus

Question ID : 54592730356

Q.4 Biopsy and histopathological studies of the tissue and blood and bone marrow tests, are the diagnostic tests for:

- Ans
- 1. Malaria
 - 2. Cancer
 - 3. Cholera
 - 4. AIDS

Question ID : 54592730355

Q.5 The Ganga-Satluj plains in the north-west and black soil region of the Deccan is important for production of which crop?

- Ans
- 1. Bajra
 - 2. Rice
 - 3. Wheat
 - 4. Ragi

Question ID : 54592730359

Q.6 The Phyang Tsedup is a festival in the Phyang Monastery of _____.

- Ans
- 1. Mawsynram
 - 2. Aizwal
 - 3. Ladakh
 - 4. Gangtok

Question ID : 54592730343

Q.7 Which of the following are tested to show the presence of carbohydrates in food?

- Ans
- 1. Protein
 - 2. Fats
 - 3. Vitamins
 - 4. Starch

Question ID : 54592730350

Q.8 If a person is infected with some deadly microbes to which quick immune response is required, we need to directly inject the preformed antibodies. This type of immunisation is known as:

- Ans
- 1. Active immunisation
 - 2. Passive immunisation

- 3. Allergic immunisation
- 4. No such type of immunisation exist

Question ID : 54592730354

Q.9 Gustatory receptors will detect (i)_____ while olfactory receptors will detect (ii)_____.

- Ans
- 1. (i) Taste, (ii) touch
 - 2. (i) touch, (ii) smell
 - 3. (i) Taste, (ii) smell
 - 4. (i) smell, (ii) taste

Question ID : 54592730353

Q.10 Burrakatha is a highly dramatic form of ballad of _____.

- Ans
- 1. Tamil Nadu
 - 2. Madhya Pradesh
 - 3. Andhra Pradesh
 - 4. Uttar Pradesh

Question ID : 54592730342

Q.11 In which of the following Union Budgets was the PM-KISAN or Pradhan Mantri Kisan Samman Nidhi launched?

- Ans
- 1. Interim Budget 2019
 - 2. Union Budget 2019
 - 3. Union Budget 2017
 - 4. Union Budget 2018

Question ID : 54592730345

Q.12 Where is the Golconda Fort situated?

- Ans
- 1. Nashik
 - 2. Hyderabad
 - 3. Bengaluru
 - 4. Nainital

Question ID : 54592730344

Q.13 Which of the following is not indicated by elevated Total Dissolved Salts (TDS)?

- Ans
- 1. Salty or brackish taste
 - 2. Causes water to be corrosive
 - 3. It is a serious health hazard
 - 4. elevated levels of ions

Question ID : 54592730351

Q.14 The annual population growth rate of India according to Census 2011 is:

- Ans
- 1. 2.54 percent
 - 2. 2 percent
 - 3. 1.64 percent
 - 4. 4 percent

Question ID : 54592730360

Q.15 Which of the following options has the correct sequence of mountain ranges from North to South in India?

- Ans
- 1. Zaskar, Karakoram, Ladakh, Shiwalik
 - 2. Ladakh, Karakoram, Shiwalik, Zaskar
 - 3. Karakoram, Zaskar, Ladakh, Shiwalik
 - 4. Karakoram, Ladakh, Zaskar, Shiwalik

Question ID : 54592730357

Q.16 Which of the following abiotic factor affects seeds as they grow into young plants?

- Ans
- 1. Air, water, heat and light
 - 2. Air, water and heat only
 - 3. Water and light only
 - 4. Air and water only

Question ID : 54592730352

Q.17 Which of the following is an economic condition in which there is a simultaneous inflation with high unemployment and stagnant demand?

- Ans
- 1. Stagflation
 - 2. Hyperinflation
 - 3. Deflation
 - 4. Recession

Question ID : 54592730347

Q.18 What is the thinking behind adapting the "sky blue" coloured theme in the Economic Survey 2018-19?

- Ans
- 1. Warding off the global risks
 - 2. Managing the financial adversities
 - 3. New ideas for policymaking
 - 4. Preparing to meet the needs of the young demography

Question ID : 54592730346

Q.19 भांड पाथेर क१मीर के का एक पारंप रक _____ है।

- Ans
- 1. फ्च कला
 - 2. संगीत
 - 3. खेल
 - 4. नृ य-नाटक

Question ID : 54592730341

Q.20 शट पर ह द का दाग साबुन से धोने पर लाल हो जाता है। य क:

- Ans
- 1. साबुन का घोल उदासीन होता है।
 - 2. हादक अ लक्य है।
 - 3. साबुन का घोल अ लक्य होता है।
 - 4. साबुन का घोल ारक्य होता है।

Question ID : 54592730349

Section : General Awareness2

Q.1 Which of the following is a book written by Nirad C. Chaudhari?

- Ans
- 1. The Autobiography of an Unknown Indian
 - 2. A Suitable Boy
 - 3. A Train to Pakistan
 - 4. Discovery of India

Question ID : 54592730371

Q.2 Which of the following aspects of the Indian Constitution was described by Dr. B. R. Ambedkar as a 'novel feature'?

- Ans
- 1. Directive Principles of State Policies
 - 2. Fundamental Duties
 - 3. Preamble
 - 4. Fundamental Rights

Question ID : 54592730374

Q.3 Who is the Head of the World Health Organisation (WHO) and where is its headquarters located?

- Ans
- 1. Tedros Adhanom, The Hague
 - 2. Pascal Lamy, Geneva
 - 3. Pascal Lamy, The Hague
 - 4. Tedros Adhanom, Geneva

Question ID : 54592730372

Q.4 Who out of the following is the present President of France?

- Ans
- 1. Francois Hollande
 - 2. Justin Trudeau
 - 3. Emmanuel Macron
 - 4. Angela Merkel

Question ID : 54592730369

Q.5 Which of the following sportsperson and his respective sport is incorrectly matched?

- Ans
- 1. Andy Murray - Tennis
 - 2. Manuel Neuer - Football
 - 3. Sebastian Vettel – Hockey
 - 4. Peter Handscomb - Cricket

Question ID : 54592730380

Q.6 Which of the following options have the correct sequence of the Mughal emperors chronologically?

- Ans
- 1. Jehangir, Akbar, Humayun, Shah Jahan
 - 2. Humayun, Akbar, Jehangir, Shah Jahan
 - 3. Shah Jahan, Akbar, Jehangir, Humayun
 - 4. Akbar, Shah Jahan, Humayun, Jehangir

Question ID : 54592730363

Q.7 Who out of the following is considered as the “father of modern chemistry”?

- Ans
- 1. Henry Moseley
 - 2. Antoine-Laurent de Lavoisier
 - 3. John Newlands
 - 4. Dmitri Mendeleev

Question ID : 54592730373

Q.8 िन निलिखत म से कसे जन हत यािचका (पीआईएल) का णेता

- माना जाता है? Ans
- 1. यायमूत पी.एन. भगवती और यायमूत हंस राज ख ना
 - 2. जि टस सोलक सोराबजी और जि टस नानाभाई पालखीवाला
 - 3. यायमूत वी. आर. कृ णा अ यर और यायमूत पी.एन. भगवती
 - 4. यायमूत वी. आर. कृ णा अ यर और यायमूत सोलक सोराबजी

Question ID : 54592730375

Q.9 (i) _____ became the first player to score (ii) _____ centuries in a single World Cup edition recently.

- Ans
- 1. (i) Virat Kohli (ii) 3
 - 2. (i) Rohit Sharma (ii) 5
 - 3. (i) Johnny Bairstow (ii) 4
 - 4. (i) Kane Williamson (ii) 5

Question ID : 54592730378

Q.10 What is the name of the book where the rules made by the Buddhist Sanghas were laid down?

- Ans 1. Stotra
 2. Vinaya Pitaka

3. Mahabhinishkramana

4. Panchatantra

Question ID : 54592730362

Q.11 India's latitudinal and longitudinal extent extends from _____ respectively.

Ans 1. 12°4'N and 40°6'N and 48°7'E and 77°25'E

2. 8°4'N and 37°6'N and 68°7'E and 97°25'E

3. 18°4'N and 47°6'N and 18°7'E and 37°25'E

4. 28°4'N and 57°6'N and 8°7'E and 29°25'E

Question ID : 54592730361

Q.12 In which of the following stadiums was the final match of the ODI World Cup 2019 held?

Ans 1. Emirates Old Trafford

2. Headingley

3. Lord's

4. Edgbaston

Question ID : 54592730379

Q.13 Lord Hastings became the first Governor General in India in _____.

Ans 1. 1772

2. 1778

3. 1775

4. 1773

Question ID : 54592730365

Q.14 Who out of the following was a businessman and publicist settled in London, and also a member of the British Parliament for some time?

Ans 1. Pherozeshah Mehta

2. Surendranath Banerji

3. Dadabhai Naoroji

4. Romesh Chandra Dutt

Question ID : 54592730367

Q.15 Which of the following films won the Best Film Award at the Oscars 2019?

Ans 1. Green Book

2. BlacKkKlansman

3. Roma

4. Bohemian Rhapsody

Question ID : 54592730370

Q.16

कसने एक सूचना जार क थी, िजसम कहा गया था क वष 1859 म नील बागान मािलक के गु से को शांत करने के िलए रैयत को नील अनुबंध वीकार करने के िलए मजबूर नहं कया जाएगा?

- Ans
- 1. अलेRजडर मैक जी
 - 2. ऑग टस रवस थॉमसन
 - 3. एशले ईडन
 - 4. रचड टे पल

Question ID : 54592730366

Q.17 Which of the following cabinet ministers and his portfolio is correctly matched?

- Ans
- 1. Amit Shah – Ministry of Defence
 - 2. Ravi Shankar Prasad – Ministry of Food Processing Industries
 - 3. Ram Vilas Paswan – Ministry of Rural Development
 - 4. Nitin Jairam Gadkari – Ministry of Micro, Small and Medium Enterprise

Question ID : 54592730368

Q.18 जवाहरलाल नेह ने कस तार ख को त्वधानसभा म ितहािसक 'उ5े9य संक प' को

- आगे बढ़ाया? Ans
- 1. 26 जनवरक, 1946
 - 2. 13 दसंबर, 1946
 - 3. 24 दसंबर, 1946
 - 4. 22 जनवरक, 1946

Question ID : 54592730377

Q.19 Which of the following Constitutional Amendment Acts is related to the transfer of the Berubari Union No. 12 from India to Pakistan?

- Ans
- 1. 9th Constitutional Amendment Act
 - 2. 7th Constitutional Amendment Act
 - 3. 4th Constitutional Amendment Act
 - 4. 2nd Constitutional Amendment Act

Question ID : 54592730376

Q.20 Who out of the following belongs to the Sayyid Dynasty of the Delhi Sultanate?

- Ans
- 1. Shamsuddin Iltutmish
 - 2. Ghiyasuddin Balban
 - 3. Raziyya Sultana
 - 4. Khizr Khan

Question ID : 54592730364

Section : Arithmetic Ability1

Q.1 What least value must be assigned to * so that the number 4567*234 is divisible by 9?

Ans

- 1. 5
- 2. 3
- 3. 4
- 4. 2

Question ID : 54592730389

Q.2 What approximate value should come in place of the questions mark (?) in the following questions?

$$\frac{5}{8} \text{ of } 4011.33 + \frac{7}{10} \text{ of } 3411.22 = ?$$

- Ans
- 1. 4930
 - 2. 4810
 - 3. 4890
 - 4. 4980

Question ID : 54592730383

Q.3 A shepherd has 945 brown sheeps and 2475 red sheeps. He wants to graze them in minimum number of groups in such a way that each group has same colour of animals and also contains equal no. of animals in each group. Find such minimum no. of groups.

- Ans
- 1. 56
 - 2. 84
 - 3. 70
 - 4. 76

Question ID : 54592730387

Q.4 What should come in place of the '?' in the following question?

$$\sqrt{\sqrt{1600} + \sqrt{576}} = (?)^2$$

- Ans
- 1. 81
 - 2. 3
 - 3. $2\sqrt{2}$
 - 4. 6561

Question ID : 54592730382

Q.5 The number of boys and girls in a class is in the ratio 5 : 3. 20% of the boys denied to go for a picnic while 30 girls are ready to go for the picnic. If total 94 students are ready to go for the picnic, then what is the total number of girls in the class?

- Ans
- 1. 48
 - 2. 33
 - 3. 51
 - 4. 39

Question ID : 54592730394

Q.6 There are three numbers a, b and c. 25% of a is equal to the 12% of b. 20% of b is equal to the 10% of c. By what percent c is more than a?

- Ans
- 1. 250 percent
 - 2. 24 percent
 - 3. 316.67 percent
 - 4. 125.33 percent

Question ID : 54592730395

Q.7 The average of six numbers is 75. The average of first five numbers is 64. The average of last five numbers is 80. Find the difference between first and last number.

- Ans
- 1. 65
 - 2. 50
 - 3. 94
 - 4. 80

Question ID : 54592730392

Q.8 The selling price of a product A and a product B are in the ratio 5 : 1. Product A was sold at Rs. 800 and 60% profit earned on it. Product B was sold at 25% profit. Find the total cost of product A and product B (in rupees).

- Ans
- 1. 628
 - 2. 580
 - 3. 548
 - 4. 712

Question ID : 54592730398

Q.9 What approximate value will come in place of the question mark?

$$(13.96)^2 - (15.03)^2 + (18.09)^2 - 32.65 = ?$$

- Ans
- 1. 264
 - 2. 223
 - 3. 334
 - 4. 354

Question ID : 54592730381

Q.10 $x^5 + 2x^4 - 3x^3 + x^2 + 2x + 8$ divisible by $x + 2$ what will be remainder ?

- Ans
- 1. 128
 - 2. 32
 - 3. 16
 - 4. 64

Question ID : 54592730388

Q.11 What should come in place of the question mark (?) in the following questions?

$$[12 \times 5 - \{200 - (501 + 247 - 386)\}] \div 2 = ?$$

- Ans
- 1. 82
 - 2. 111
 - 3. 62
 - 4. 61

Question ID : 54592730386

Q.12 How many numbers between 1 to 1000 which are multiples of 6 but not of 18?

- Ans
- 1. 111
 - 2. 110
 - 3. 112
 - 4. 100

Question ID : 54592730390

Q.13 The ratio of number of males to females in a colony is 3 : 2. The ratio of employed to unemployed persons among males is 5 : 4. Find the ratio of employed males to the total number of persons in the colony.

- Ans
- 1. 1 : 3
 - 2. 3 : 5
 - 3. 2 : 5
 - 4. 1 : 2

Question ID : 54592730400

Q.14 The average age of seven men, ten women and two boys is 35 years. The average age of all the seven men is 39 years. The average age of all the ten women is 36 years. Find the average age of two boys (in years).

- Ans
- 1. 17
 - 2. 14
 - 3. 15
 - 4. 16

Question ID : 54592730391

Q.15 What should come in place of the question mark (?) in the following questions?

$$\frac{6}{2} \times \frac{10}{2} \div \frac{6}{2} \times 6^2 = ?$$

- Ans
- 1. 175
 - 2. 170
 - 3. 190
 - 4. 180

Question ID : 54592730384

Q.16 Aditi spends 48% of her income for food, 25% of the remaining on traveling, one third of the remaining on entertainment which is equal to Rs. 2600. If she saves the rest, find her saving (in rupees).

- Ans
- 1. 5450
 - 2. 5200
 - 3. 6500
 - 4. 4800

Question ID : 54592730396

Q.17 The marked price of a product is 40% above its cost price. Two successive discounts of 10% and 5% are given on marked price. If the difference between two discounts is Rs. 154, then find the difference between cost price and marked price (in Rupees).

- Ans
- 1. 720
 - 2. 750
 - 3. 1000
 - 4. 800

Question ID : 54592730393

Q.18 Shrikant sold a microwave by offering a discount of 10% and earned 35% profit. The marked price of microwave is Rs. 18000. Find the profit earned by him (in Rupees).

- Ans
- 1. 4200
 - 2. 3600
 - 3. 4070
 - 4. 3950

Question ID : 54592730399

Q.19 What should come in place of the question mark (?) in the following questions?

$$\frac{24^2 - 13^2 + 7^2}{19} = ?$$

- Ans
- 1. 22
 - 2. 24
 - 3. 21
 - 4. 18

Question ID : 54592730385

Q.20 A milkman bought 60 litres of milk at Rs. 30 per litre. For every four litres of milk he added one litre of water and sold the entire mixture at Rs. 32 per litre. Find his profit percentage.

- Ans
- 1. 16.66 percent
 - 2. 33.33 percent
 - 3. 20 percent
 - 4. 25 percent

Question ID : 54592730397

Section : Arithmetic Ability2

Q.1 The ratio of volumes of two cubes is 343 : 729. What is the ratio of their total surface areas?

- Ans 1. 49 : 81
 2. 7 : 81
 3. 64 : 125
 4. 36 : 49

Question ID : 54592730413

Q.2 Rs. 7000 amounted to Rs. 8780.8 in 2 years at a certain rate of compound interest. In what time will Rs. 9000 amounted to Rs. 12240 at the same rate of simple interest (in years)?

- Ans 1. 2
 2. 3
 3. 2.5
 4. 1.5

Question ID : 54592730404

Q.3 If the diagonal and the area of a rectangle are 29 m and 420 square meter respectively, what is the length of the rectangle?

- Ans 1. 22 meter
 2. 21 meter
 3. 18 meter
 4. 25 meter

Question ID : 54592730412

Q.4 40 men can finish a piece of work in 40 days. They started the work together, but after every 10 days, 5 men leave the work, the whole work will finish in?

- Ans 1. 56 days
 2. $42\frac{2}{3}$ days
 3. $56\frac{2}{3}$ days
 4. 54 days

Question ID : 54592730409

Q.5 Four numbers $(k - 3)$, $(k - 1)$, $(k + 1)$ and $(k + 5)$ are in proportion. Find the value of $(k^2 + k)$.

- Ans 1. 110
 2. 56
 3. 30
 4. 72

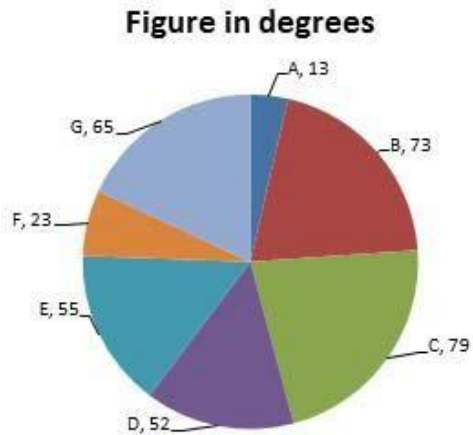
Question ID : 54592730402

Q.6 A Express train covers a distance of 3584 km in 2 days 8 hours. If it covers 1440 km on the first day and 1608 km on the second day, by how much does the average speed of the train or the remaining part of the journey differ from that for the entire journey?

- Ans
- 1. 3 km/hrs
 - 2. 2 km/hrs
 - 3. 4 km/hrs
 - 4. 10 km/hrs

Question ID : 54592730408

Q.7 The following pie-chart gives the break-up (in degrees) of land with various continents. Answer the questions on the basis of the pie-chart given.



If the total area is 180 million sq. miles, what will be the area under E and G?

- Ans
- 1. 60 million sq.miles
 - 2. 50 million sq. miles
 - 3. 56 million sq.miles
 - 4. 46 million sq.miles

Question ID : 54592730416

Q.8 At the rate of 9% per annum at simple interest a person obtained Rs. 864 as interest in four years. How much more interest could he get if the rate of interest was 13% per annum (in rupees)?

- Ans
- 1. 656
 - 2. 548
 - 3. 384
 - 4. 248

Question ID : 54592730403

Q.9 The length of a train and that of a platform are equal. If with a speed of 108 km/hr the train crosses the platform in one minute. Then the length of the train (in metres) is:

- Ans
- 1. 900
 - 2. 1800
 - 3. 2700

4. 450

Question ID : 54592730406

Q.10 Two persons earns in the ratio 4 : 7. If both earns Rs. 3000 more, the ratio of earning will be 2 : 3. Find the sum of their earning (in rupees).

- Ans 1. 13200
 2. 16500
 3. 15400
 4. 19800

Question ID : 54592730401

Q.11 By walking at $\frac{3}{4}$ of his usual speed Bholu reaches his office 20 minutes later than his usual time. The usual time taken by him to reach his office is:

- Ans 1. 75 min
 2. 60 min
 3. 30 min
 4. 40 min

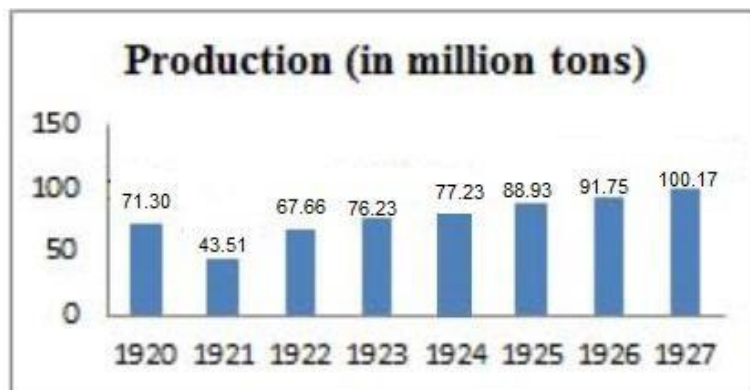
Question ID : 54592730407

Q.12 A is 20% more efficient than B.They both together complete the work in 20 days.In how many days B will alone complete the work?

- Ans 1. 12 days
 2. 48 days
 3. 44 days
 4. 24 days

Question ID : 54592730410

Q.13 The following table shows the world production of steel in 1920-1927. Study the table and answer the question.



The difference of the production of steel in the year 1923 and 1924 is x% of year 1927. Then the value of x approximately?

- Ans 1. 0.001
 2. 0.1
 3. 0.01

✓ 4.1

Question ID : 54592730420

Q.14 Sameer borrowed Rs.14000 at 15% per annum and Rs. 18000 at 11% per annum at simple interest. The total interest paid by him at the end of the two years will be (in rupees).

- Ans
- 1. 7240
 - 2. 8160
 - 3. 7920
 - 4. 7600

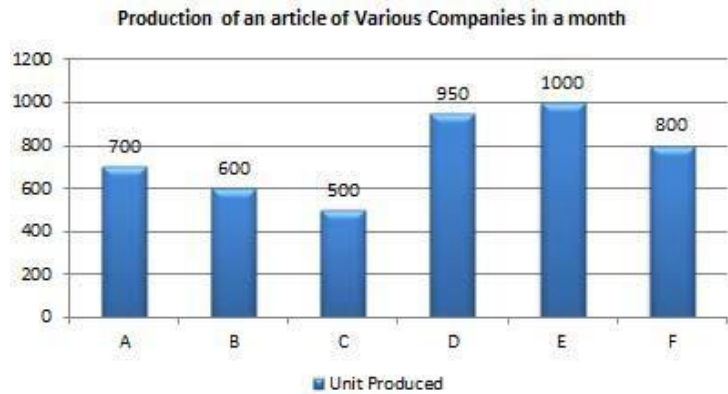
Question ID : 54592730405

Q.15 A can complete a work in 10 days. B can complete the same work in 15 days. If B starts the work and A joins him after 5 days, then in how many days will the work be completed?

- Ans
- 1. 8
 - 2. 6
 - 3. 7
 - 4. 9

Question ID : 54592730411

Q.16 Study the following graph carefully to answer these questions:



What is the approximate average number of article produced by all the Companies together?

- Ans
- 1. 720
 - 2. 758
 - 3. 725
 - 4. 900

Question ID : 54592730418

Q.17 Refer the below data table and answer the following question.

	Weight (kg)	Height (m)
Archita	67	1.63
Arpana	67	1.51
Arpita	57	1.56
Arundhati	73	1.59

Who has the least weight?

- Ans 1. Arpita
 2. Archita
 3. Arundhati
 4. Arpana

Question ID : 54592730415

Q.18 Study the following table carefully to answer these questions:

Populations (in thousands) of Six States over the years						
Years	STATE					
	A	B	C	D	E	F
1992	125	210	85	150	98	138
1995	135	225	89	170	110	152
1998	142	240	93	180	130	160
2001	148	250	99	215	140	175
2004	155	270	105	230	145	190
2007	160	290	110	240	160	198

Which state had the highest percent rise in population from 2001 to 2004?

- Ans 1. B
 2. C
 3. D
 4. F

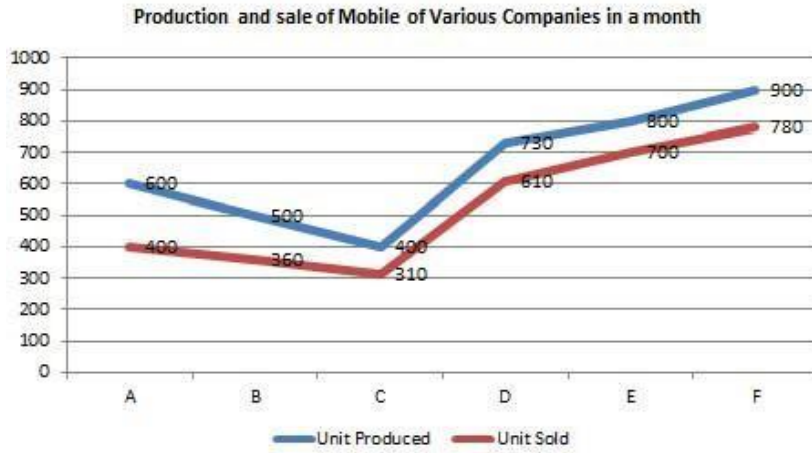
Question ID : 54592730417

Q.19 Four equal sized maximum circular pages are cut off from a square paper sheet of area 3136 square cm. The circumference of each plate is:

- Ans 1. 89 cm
 2. 86 cm
 3. 84 cm
 4. 88 cm

Question ID : 54592730414

Q.20 Study the following graph carefully to answer these questions:



The total mobiles sold by Companies D, E and F together are approximately what percent of the total mobiles produced by D, E and F together?

- Ans
- 1. 75 percent
 - 2. 86 percent
 - 3. 28 percent
 - 4. 72 percent

Question ID : 54592730419

Section : General English1

Q.1 Identify the segment in the sentence which contains the grammatical error from the given options.

One digger in illegal bore wells freely admitted to me that he had paid a bribe to get a permit for a deep well-after he had already dug it.

- Ans
- 1. One digger in illegal bore wells
 - 2. freely admitted to me that
 - 3. for a deep well
 - 4. he had paid a bribe to get a permit

Question ID : 54592730424

Q.2 Select the most appropriate word to fill in the blank.

The Indian Space Programme from its very inception _____ geared towards national development.

- Ans
- 1. has
 - 2. have
 - 3. has been
 - 4. have been

Question ID : 54592730432

Q.3 Select the most appropriate word to fill in the blank.

The Indian law prohibits the employment _____ children in factories but the law is violated several times.

- Ans
- 1. by
 - 2. from
 - 3. of
 - 4. at

Question ID : 54592730431

Q.4 Identify the segment in the sentence which contains the grammatical error from the given options.

A lunar eclipse occurs when the sun, Earth, and the moon align so that Earth's shadow falls above the lunar disk.

- Ans
- 1. A lunar eclipse occurs
 - 2. align so that Earth's shadow
 - 3. falls above the lunar disk.
 - 4. when the sun, Earth, and the moon

Question ID : 54592730423

Q.5 Select the most appropriate word to fill in the blank.

_____ the world moves away from capital intensive industrial base to knowledge intensive information base, the role of the service sector will increase substantially.

- Ans
- 1. With
 - 2. For
 - 3. By
 - 4. As

Question ID : 54592730437

Q.6 Select the most appropriate word to fill in the blank.

The nineteenth century saw the advent of the telegraph, the telephone, and the camera _____ the development of the automobile.

- Ans
- 1. along with
 - 2. together as
 - 3. in spite of
 - 4. but also

Question ID : 54592730434

Q.7 Select the most appropriate word to fill in the blank.

It is only _____ initiative that one can take appropriate action to implement ideas, programmes and projects.

- Ans
- 1. by
 - 2. in
 - 3. through
 - 4. beside

Question ID : 54592730436

Q.8 Select the most appropriate word to fill in the blank.

The practical gardener knows that both seed and the soil are necessary _____ the proper growth of a plant.

- Ans
- 1. of
 - 2. by
 - 3. for
 - 4. in

Question ID : 54592730433

Q.9 A sentence has four parts, rearrange the given parts so as to form a meaningful sentence.

A: oversees groundwater extraction has just six employees,

B: enforce the law in this sprawling city.

C: In Bangalore, the governmental department that

D: and thus no earthly way to monitor and

- Ans
- 1. CADB
 - 2. CDAB
 - 3. CBDA
 - 4. CDBA

Question ID : 54592730440

Q.10 Select the most appropriate option to substitute the underlined segment in the given sentence. If there is no need to substitute it, select option No substitution required.

To coping with the heats, many cities are planting trees and carving out open spaces.

- Ans
- 1. No substitution required
 - 2. Coped with the heat
 - 3. Cope with the heat
 - 4. To cope with the heat

Question ID : 54592730430

Q.11 Identify the segment in the sentence which contains the grammatical error from the given options.

President John F. Kennedy deliver a stirring speech to Congress praising the importance of sending an astronaut to the moon.

- Ans
- 1. President John F. Kennedy
 - 2. an astronaut to the moon.
 - 3. praising the importance of sending
 - 4. deliver a stirring speech

Question ID : 54592730421

Q.12 Rearrange the following sentences in their correct order to form a meaningful paragraph.

A: For exotic beauty, few flowers rival the ghost orchid.

B: It's long been thought that only one insect, the giant sphinx moth, had a long enough proboscis to pollinate these orchids—but new images and research prove that wrong.

C: As they feed, moths rub against a pollen source and pick up grains they'll transfer to other orchids they visit.

D: These rare orchids have long nectar tubes into which moths stick their tongue like proboscises to reach a sugary reward.

- Ans
- 1. ACDB
 - 2. ACBD
 - 3. ABDC
 - 4. ADCB

Question ID : 54592730439

Q.13 Identify the segment in the sentence which contains the grammatical error from the given options.

If you're not actually studying the affect of emotions on others, we're missing an important social aspect.

- Ans
- 1. important social aspect.
 - 2. we're missing an
 - 3. the affect of emotions on others
 - 4. If you're not actually studying

Question ID : 54592730425

Q.14 Select the most appropriate word to fill in the blank.

The major positive point of the communication revolution is that it has brought people together and _____ the feeling of a global village.

- Ans
- 1. fostered
 - 2. has foster
 - 3. fostering
 - 4. foster

Question ID : 54592730435

Q.15 Select the most appropriate word to fill in the blank.

_____ being one of the ten most industrialized nations in the world, Indian industry has lagged behind other countries in effective and proper use of inputs.

- Ans
- 1. Despite
 - 2. But
 - 3. In spite
 - 4. Because

Question ID : 54592730438

Q.16 Select the most appropriate option to substitute the underlined segment in the given sentence. If there is no need to substitute it, select option No substitution required.

In October 1997, tourists near San Francisco, witnessed two killer whales attacked a great white shark and consumed its liver.

- Ans
- 1. No substitution required
 - 2. attack a great white shark and consumed
 - 3. attacked a great white shark and consume
 - 4. attack a great white shark and consume

Question ID : 54592730426

Q.17 Select the most appropriate option to substitute the underlined segment in the given sentence. If there is no need to substitute it, select option No substitution required.

The orca population off South Africa is less well studied than the one off California, in part because humans rarely encounter them.

- Ans
- 1. No substitution required
 - 2. are less well studied than
 - 3. are lesser well studied then the one
 - 4. is less well study than the one

Question ID : 54592730429

Q.18 Select the most appropriate option to substitute the underlined segment in the given sentence. If there is no need to substitute it, select option No substitution required.

Its like that orcas targeted shark livers because they're high-fat and delicious.

- Ans
- 1. It's likely that orcas targeted
 - 2. Its like that orcas target
 - 3. No substitution required
 - 4. It's likely that orcas target

Question ID : 54592730427

Q.19 Identify the segment in the sentence which contains the grammatical error from the given options.

Visitors to the Kennedy Space Center can learned about the progress and failures of space exploration.

- Ans
- 1. can learned about the
 - 2. Visitors to the Kennedy Space Center
 - 3. progress and failures
 - 4. of space exploration.

Question ID : 54592730422

Q.20 Select the most appropriate option to substitute the underlined segment in the given sentence. If there is no need to substitute it, select option No substitution required.

We all experience the constant drama of the new and the constant sorrow of the losing of what we had left behind.

- Ans
- 1. the losing of what we had leaved behind
 - 2. the loss for what we've leave behind
 - 3. the loss of what we've left behind
 - 4. No substitution required

Question ID : 54592730428

Section : General English2

Q.1 Select the word which means the same as the group of words given.

The practice or art of choosing, cooking, and eating good food.

- Ans
- 1. Idolatry
 - 2. Horticulture
 - 3. Hydrophobia
 - 4. Gastronomy

Question ID : 54592730453

Q.2 Select the synonym of the given word.

Venerable

- Ans
- 1. Primitive
 - 2. Dependable
 - 3. Conventional
 - 4. Celebrated

Question ID : 54592730446

Q.3 Select the word which means the same as the group of words given.

Relating to or affecting cattle.

- Ans
- 1. Canine
 - 2. Bovine
 - 3. Feline
 - 4. Leonine

Question ID : 54592730454

Q.4 Select the synonym of the given word.

Erroneous

- Ans
- 1. Mistaken
 - 2. Accurate
 - 3. Misfortune
 - 4. Uncommon

Question ID : 54592730442

Q.5 Select the antonym of the given word.

Sophisticated

- Ans
- 1. Cultivated
 - 2. Lukewarm
 - 3. Unrefined

4. Cynical

Question ID : 54592730445

Q.6 Select the meaning of the given idiom.

Pull yourself together

- Ans 1. To loosen the hold
 2. To refuse to agree
 3. To calm oneself down
 4. To recollect past memories

Question ID : 54592730451

Q.7 Select the wrongly spelt word.

- Ans 1. Dileberate
 2. Pathology
 3. Callous
 4. Admonish

Question ID : 54592730448

Q.8 Select the meaning of the given idiom.

Miss the boat

- Ans 1. To arrive late
 2. Fail to board the train
 3. To lose something valuable
 4. To lose the opportunity

Question ID : 54592730450

Q.9 Select the wrongly spelt word.

- Ans 1. Chronicle
 2. Salutation
 3. Demean
 4. Jubilliant

Question ID : 54592730449

Q.10 Select the wrongly spelt word.

- Ans 1. Beginning
 2. Increment
 3. Zealous
 4. Imagination

Question ID : 54592730447

Q.11 Select the meaning of the given idiom.

Back to square one

- Ans
- 1. To restart a failing business
 - 2. To design something new
 - 3. Back to the very first stage
 - 4. To return favor

Question ID : 54592730452

Q.12 Select the antonym of the given word.

Extravagant

- Ans
- 1. Endearing
 - 2. Reasonable
 - 3. Reckless
 - 4. Credible

Question ID : 54592730443

Q.13 A sentence has four parts, rearrange the given parts so as to form a meaningful sentence.

- A: is full of sounds: birds chirping, wind rustling through trees,
B: the ears of both predator and prey are attuned to one another's presence.
C: and insects humming about their business.
D: Even on the quietest days, the world.

- Ans
- 1. DACB
 - 2. DBCA
 - 3. DABC
 - 4. DCBA

Question ID : 54592730441

Q.14 Select the word which means the same as the group of words given.

A passage between rows of seats in a building such as a church or theatre, an aircraft, or train.

- Ans
- 1. Acronym
 - 2. Antidote
 - 3. Alimony
 - 4. Aisle

Question ID : 54592730455

Q.15 Select the synonym of the given word.

Hideous

- Ans
- 1. Sorrowful
 - 2. Unpleasant

3. Improper

4. Articulate

Question ID : 54592730444

Comprehension:

Answer the questions based on the following passage:

Almost every one grows up in the world which is flooded with the mass media e.g. television, advertising, films, videos, billboards, magazines, movies, music, newspaper, and internet. Of all marketing weapons, advertising is renowned for its long lasting impact on viewer's mind, as its exposure is much broader. Advertising is a subset of promotion mix which is one of the 4P's in the marketing mix i.e. product, price, place and promotion. As a promotional strategy, advertising serves as a major tool in creating product awareness in the mind of a potential consumer to take eventual purchase decision. Advertising, sales promotion and public relations are mass-communication tools available to marketers. Advertising through all mediums influence audiences, but television is one of the strongest medium of advertising and due to its mass reach; it can influence not only the individual's attitude, behaviour, life style, exposure and in the long run, even the culture of the country.

The major aim of advertising is to impact on buying behaviour; however, this impact about brand is changed or strengthened frequently in people's memories. Memories about the brand consist of those associations that are related to brand name in consumer mind. These brand cognition influence consideration, evaluation, and finally purchases. The principal aim of consumer behaviour analysis is to explain why consumers act in particular ways under certain circumstances. It tries to determine the factors that influence consumer behaviour, especially the economic, social and psychological aspects. When young people choose advertising information and characters as their role models, they may not only identify with them but also intend to copy them in terms of how they dress and what they are going to buy.

In today's dynamic world, it is almost impossible for advertisers to deliver advertising message and information to buyers without use of advertising. Certainly, this may be because of the globalization and accessibility of hundreds of channels for the viewers of this modern era. Now a days, due to globalized economy, this made available a bulk of marketing stimuli to the modern consumers. More often consumerism describes the way of equating personal happiness, with purchasing material possessions and consumption in excess of one's need.

SubQuestion No : 16

Q.16 The mass communication tools available to the marketers doesn't include:

Ans 1. Public Relations

2. Television

3. Sales Promotion

4. Advertising

Question ID : 54592730458

Comprehension:

Answer the questions based on the following passage:

Almost every one grows up in the world which is flooded with the mass media e.g. television, advertising, films, videos, billboards, magazines, movies, music, newspaper, and internet. Of all marketing weapons, advertising is renowned for its long lasting impact on viewer's mind, as its exposure is much broader. Advertising is a subset of promotion mix which is one of the 4P's in the marketing mix i.e. product, price, place and promotion. As a promotional strategy, advertising serves as a major tool in creating product awareness in the mind of a potential consumer to take eventual purchase decision. Advertising, sales promotion and public relations are mass-communication tools available to marketers. Advertising through all mediums influence audiences, but television is one of the strongest medium of advertising and due to its mass reach; it can influence not only the individual's attitude, behaviour, life style, exposure and in the long run, even the culture of the country.

The major aim of advertising is to impact on buying behaviour; however, this impact about brand is changed or strengthened frequently in people's memories. Memories about the brand consist of those associations that are related to brand name in consumer mind. These brand cognition influence consideration, evaluation, and finally purchases. The principal aim of consumer behaviour analysis is to explain why consumers act in particular ways under certain circumstances. It tries to determine the factors that influence consumer behaviour, especially

the economic, social and psychological aspects. When young people choose advertising information and characters as their role models, they may not only identify with them but also intend to copy them in terms of how they dress and what they are going to buy.

In today's dynamic world, it is almost impossible for advertisers to deliver advertising message and information to buyers without use of advertising. Certainly, this may be because of the globalization and accessibility of hundreds of channels for the viewers of this modern era. Now a days, due to globalized economy, this made available a bulk of marketing stimuli to the modern consumers. More often consumerism describes the way of equating personal happiness, with purchasing material possessions and consumption in excess of one's need.

SubQuestion No : 17

Q.17 From among the given options, choose the one which is most nearly the same as the word 'Cognition' as used in the 2nd paragraph, 3rd line:

- Ans
- 1. Influence
 - 2. Interference
 - 3. Perception
 - 4. Distinction

Question ID : 54592730461

Comprehension:

Answer the questions based on the following passage:

Almost every one grows up in the world which is flooded with the mass media e.g. television, advertising, films, videos, billboards, magazines, movies, music, newspaper, and internet. Of all marketing weapons, advertising is renowned for its long lasting impact on viewer's mind, as its exposure is much broader. Advertising is a subset of promotion mix which is one of the 4P's in the marketing mix i.e. product, price, place and promotion. As a promotional strategy, advertising serves as a major tool in creating product awareness in the mind of a potential consumer to take eventual purchase decision. Advertising, sales promotion and public relations are mass-communication tools available to marketers. Advertising through all mediums influence audiences, but television is one of the strongest medium of advertising and due to its mass reach; it can influence not only the individual's attitude, behaviour, life style, exposure and in the long run, even the culture of the country.

The major aim of advertising is to impact on buying behaviour; however, this impact about brand is changed or strengthened frequently in people's memories. Memories about the brand consist of those associations that are related to brand name in consumer mind. These brand cognition influence consideration, evaluation, and finally purchases. The principal aim of consumer behaviour analysis is to explain why consumers act in particular ways under certain circumstances. It tries to determine the factors that influence consumer behaviour, especially the economic, social and psychological aspects. When young people choose advertising information and characters as their role models, they may not only identify with them but also intend to copy them in terms of how they dress and what they are going to buy.

In today's dynamic world, it is almost impossible for advertisers to deliver advertising message and information to buyers without use of advertising. Certainly, this may be because of the globalization and accessibility of hundreds of channels for the viewers of this modern era. Now a days, due to globalized economy, this made available a bulk of marketing stimuli to the modern consumers. More often consumerism describes the way of equating personal happiness, with purchasing material possessions and consumption in excess of one's need.

SubQuestion No : 18

Q.18 As a subset of marketing mix, advertising is associated with one of the following:

- Ans
- 1. Price
 - 2. Place
 - 3. Promotion
 - 4. Product

Question ID : 54592730457

Comprehension:

Answer the questions based on the following passage:

Almost every one grows up in the world which is flooded with the mass media e.g. television, advertising, films, videos, billboards, magazines, movies, music, newspaper, and internet. Of all marketing weapons, advertising is renowned for its long lasting impact on viewer's mind, as its exposure is much broader. Advertising is a subset of promotion mix which is one of the 4P's in the marketing mix i.e. product, price, place and promotion. As a promotional strategy, advertising serves as a major tool in creating product awareness in the mind of a potential consumer to take eventual purchase decision. Advertising, sales promotion and public relations are mass-communication tools available to marketers. Advertising through all mediums influence audiences, but television is one of the strongest medium of advertising and due to its mass reach; it can influence not only the individual's attitude, behaviour, life style, exposure and in the long run, even the culture of the country.

The major aim of advertising is to impact on buying behaviour; however, this impact about brand is changed or strengthened frequently in people's memories. Memories about the brand consist of those associations that are related to brand name in consumer mind. These brand cognition influence consideration, evaluation, and finally purchases. The principal aim of consumer behaviour analysis is to explain why consumers act in particular ways under certain circumstances. It tries to determine the factors that influence consumer behaviour, especially the economic, social and psychological aspects. When young people choose advertising information and characters as their role models, they may not only identify with them but also intend to copy them in terms of how they dress and what they are going to buy.

In today's dynamic world, it is almost impossible for advertisers to deliver advertising message and information to buyers without use of advertising. Certainly, this may be because of the globalization and accessibility of hundreds of channels for the viewers of this modern era. Now a days, due to globalized economy, this made available a bulk of marketing stimuli to the modern consumers. More often consumerism describes the way of equating personal happiness, with purchasing material possessions and consumption in excess of one's need.

SubQuestion No : 19

Q.19 Which of the following points has not been discussed in the passage?

- Ans
- 1. Factors influencing consumer behavior
 - 2. Competitive factors in the market
 - 3. Impact of advertising on buying behavior
 - 4. Marketing Mix

Question ID : 54592730459

Comprehension:

Answer the questions based on the following passage:

Almost every one grows up in the world which is flooded with the mass media e.g. television, advertising, films, videos, billboards, magazines, movies, music, newspaper, and internet. Of all marketing weapons, advertising is renowned for its long lasting impact on viewer's mind, as its exposure is much broader. Advertising is a subset of promotion mix which is one of the 4P's in the marketing mix i.e. product, price, place and promotion. As a promotional strategy, advertising serves as a major tool in creating product awareness in the mind of a potential consumer to take eventual purchase decision. Advertising, sales promotion and public relations are mass-communication tools available to marketers. Advertising through all mediums influence audiences, but television is one of the strongest medium of advertising and due to its mass reach; it can influence not only the individual's attitude, behaviour, life style, exposure and in the long run, even the culture of the country.

The major aim of advertising is to impact on buying behaviour; however, this impact about brand is changed or strengthened frequently in people's memories. Memories about the brand consist of those associations that are related to brand name in consumer mind. These brand cognition influence consideration, evaluation, and finally purchases. The principal aim of consumer behaviour analysis is to explain why consumers act in particular ways under certain circumstances. It tries to determine the factors that influence consumer behaviour, especially the economic, social and psychological aspects. When young people choose advertising information and characters as their role models, they may not only identify with them but also intend to copy them in terms of how they dress and what they are going to buy.

In today's dynamic world, it is almost impossible for advertisers to deliver advertising message and information to buyers without use of advertising. Certainly, this may be because of the globalization and accessibility of hundreds of channels for the viewers of this modern era. Now a days, due to globalized economy, this made available a bulk of marketing stimuli to the modern consumers. More often consumerism describes the way of equating personal happiness, with purchasing material possessions and consumption in excess of one's need.

SubQuestion No : 20

Q.20 Consumerism is defined in the passage as:

- Ans
- 1. It is one of the factors in marketing mix.
 - 2. Consumerism is a negative outcome of a globalized economy.
 - 3. Consumerism is an influence on consumer's attitude and behavior.
 - 4. Equating personal happiness with material possessions.

Question ID : 54592730460

Section : General Hindi1

Q.1 बेमेल (असंगत) श द का चयन क िजिए।

- Ans
- 1. चोट
 - 2. पीड़ा
 - 3. ज म
 - 4. खून

Question ID : 54592730472

Q.2 िन निलिखत म से देशज श द का चयन करे।

- Ans
- 1. हाथ
 - 2. खेत
 - 3. टिकटघर
 - 4. लोटा

Question ID : 54592730462

Q.3 जाितवाचक संेा श द है।

- Ans
- 1. डॉक्टर
 - 2. बचपन
 - 3. कामायनी
 - 4. सुशील

Question ID : 54592730463

Q.4 दए गए वा य के िलिए एक श द का चयन क िजिए।

‘जो कसी दूसरे क जगह पर आया

- हो।’ Ans
- 1. वयंभू
 - 2. थानांत रत
 - 3. वयंकरा
 - 4. थानाप न

Question ID : 54592730470

Q.5

‘शिव’ का पर्यायवाची शब्द है।

- Ans 1. सा
2. श
3. सारंग
4. नदी

Question ID : 54592730473

Q.6 दिए गए चार शब्दों में से, एक शब्द वतनी कवि से अशुद्ध है, अशुद्ध वतनी वाले शब्द का चयन कीजिए।

- Ans 1. अत ररत
2. वीण
3. अठ्युंतर
4. सि म ण

Question ID : 54592730474

Q.7 निम्नलिखित में से कौन-सा उपसर्ग रहत

- शब्द है? Ans 1. सुरेश
2. स्वदेश
3. अयाधक
4. संयोग

Question ID : 54592730466

Q.8 ‘ऐश्वर्य’ का विलोम शब्द है।

- Ans 1. वैभव
2. विलासता
3. अनेश्वर्य
4. सीधा

Question ID : 54592730468

Q.9 पुष्पाचक सवनाम कतने

- हैं? Ans 1. पाँच
2. सात
3. तीन
4. चार

Question ID : 54592730479

Q.10 ‘साधु’ का विलोम शब्द है।

- Ans 1. सायासन
2. अनुचत
3. साधुनी

✓ 4. असाधु

Question ID : 54592730475

Q.11 दए गए र त थान के िलए उपयु त श द का चयन क िजए।

सा दाियकता रा ? य एकता के िलए है।

- Ans
- ✗ 1. प रताप
 - ✗ 2. वरादान
 - ✗ 3. प9चाताप
 - ✓ 4. अँभशाप

Question ID : 54592730471

Q.12 दए गए श द के समानाथक श द का चयन क िजए।

‘धनंजय’

- Ans
- ✓ 1. अजुन
 - ✗ 2. धनद
 - ✗ 3. ध व त र
 - ✗ 4. धमराज

Question ID : 54592730476

Q.13 श द-यु म के सह अथ-भेद का चयन क िजए।

अभयु त-अभयु ि त

- Ans
- ✗ 1. वादक - त्वादक
 - ✗ 2. अ8यथ - त्नयोRता
 - ✗ 3. त्प पणी - अपराधी
 - ✓ 4. अपराधी - त्प पणी

Question ID : 54592730469

Q.14 कस वा य म या वतमान काल म

है? Ans ✗ 1. कल वे आने


वाले थे।

- ✗ 2. अचानक त्बजलक क ध उठ ।
- ✓ 3. म तु हारा प पढ़ रहा हूँ।
- ✗ 4. उसने फल खा त्पए थे।

Question ID : 54592730480

Q.15 िन निलिखत म से कौन-सा श द पुि लंग म योग

नहं होता? Ans  1. पानी

 2. हाथ

 3. नदक

4. दहक

Question ID : 54592730477

Q.16 तरंग कसका पया यवाची श द

है? Ans 1. ऊम

2. तकृत

3. काया

4. िण

Question ID : 54592730467

Q.17 संेा के थान पर यु त होने वाले श द को या

कहते है? Ans 1. वशेषण

2. कारक

3. f या

4. सवनाम

Question ID : 54592730464

Q.18 पताजी ने दो ल टर दूध खर दा। रेखां कत पद म वशेषण का कौन-सा

कार है? Ans 1. अनिचत सं यावाचक

2. अनिचत प रमाणवाचक

3. अथवाचक

4. निचत प रमाणवाचक

Question ID : 54592730465

Q.19 'राम पु तक पढ़ रहा है।' वा य का कमवाय प या

होगा? Ans 1. रया राम के दववरा पु तक

पढ़क जायेगी।

2. राम पु तक सुनाता है।

3. राम पु तक नहक पढ़ रहा है।

4. राम के दवारा पु तक पढ़क जा रहक है।

Question ID : 54592730481

Q.20 िन निलिखत म कौन-सा श द एकवचन

नहं है? Ans 1. हवा

2. समाचार

3. आग

4. वषा

Question ID : 54592730478

Section : General Hindi2

Q.1 रमा ने लता को अपनी कलम दे दी है- इस वाक्य में 'को' किस कारक का

चिह्न है? Ans

✓ 1. संदान

- ✗ 2. कम
- ✗ 3. करण
- ✗ 4. संबंध

Question ID : 54592730495

Q.2 कसी वषय वचर अथवा वभाग के मठय को सु प ट करने के िलए ___का योग कया जाता है।

Ans

✓ 1. निदेशक वच ह

- ✗ 2. ववरण वच ह
- ✗ 3. यून वराम वच ह
- ✗ 4. अपूण वराम वच ह

Question ID : 54592730494

Q.3 िन निलिखत म कस वाक्य का भाववाय

योग है? Ans

✗ 1. यह काम तुम से हक

संभव है।

- ✓ 2. लड़कय ने माँ को देखा।
- ✗ 3. उसके फल नहकं खाये जाते।
- ✗ 4. घोड़ा हनहनाता है।

Question ID : 54592730487

Q.4 “यदयप वह बीमार था: परंतु वह मेला गया।” इस वाक्य में यावेशेण - स बंधित ट के िलए उपयु त वक प का चयन करे।

Ans

- ✗ 1. यदयप के साथ वक तु का योग होता है।
- ✗ 2. पर तु के थान पर तथाप का योग होगा।
- ✓ 3. (A) और (B) दोनों सहक है।
- ✗ 4. यदयप के साथ तथाप का योग होता है।

Question ID : 54592730485

Q.5 दए गए चार वाक्यों में से सह वाक्य का चयन क िजए।

Ans

- ✗ 1. आज बड़े दिनों के बाद सुख का प्राप्ति हुई
- ✗ 2. रया आपने असनान कर लिया।
- ✗ 3. आज सकूल बंद रहेगा।
- ✓ 4. असी घाट पर संत का बहुलता है।

Question ID : 54592730486

Q.6

इनम से कस वा य म विशेषण उपवा य का योग हुआ है?

- Ans 1. मुझे विश्वास है कि आप जर आएँगे।
2. वह पु तक, जो आप चाहते ह, लाइ रेक म नहकं है।
3. जहाँ- जहाँ वह गया, उसका बड़ा स मान हुआ।
4. मै हल करने क कोशिश म हूँ।

Question ID : 54592730484

Q.7 'चमड़ी जाय तो जाय, दमड़ी न जाय' लोकोित के सह अथ का चयन कर।

- Ans 1. स त सजा मिले तो मिले, मगर दौलत हाथ से न जाए।
2. जिसको मालक चाहे वह बुरा भी अ छा।
3. जब तक आदमी के हाथ पाँव चलते है, तब तक काम होते रहते है।
4. आदत छोड़ देने पर भी कुछ-कुछ भाव शेष रह हक जाता है।

Question ID : 54592730496

Q.8 नीचे दये गये 9न को चार भागो मे बाँटा गया है (A), (B), (C) और (D) मांक दए गए है। आपको यह देखना है क वा य के कस भाग म ह्याकरण, भाषा, वतनी, श द के गलत योग या इसी तरह क कोई ुट तो नहं है। य द ुट होगी तो वा य के कसी एक भाग म ह होगी। उस भाग का मांक ह आपका उ तर है। य द वा य ुटर हत है तो कोई ुट नहं का चयन कर।

हमारे देश का विकास / (A) हिमालय से / (B) हठ महासागर तक है। / (C) कोई ुट

- नहं (D) Ans 1. B
2. A
3. C
4. D


Question ID : 54592730488

Q.9 'चोर के पैर नहं होते' लोकोित के सह अथ का चयन कर।

- Ans 1. अपराधी वयं भयभीत रहता है।
2. निधन कुछ नहकं कर सकता।
3. विपरकत काय होना।
4. झूठ शान जताना।

Question ID : 54592730489

Q.10 'केवल संकेत मा से काम नहं चलेगा' इस वाय का शुद प

या होगा? Ans  1. केवल संकेत मा के द्वारा काम नहकं चलेगा।

 2. केवल संकेत मा से काम नहकं चलता।

 3. केवल संकेत मा से हक काम हो जाता है।

 4. केवल संकेत से काम नहकं चलेगा।

Question ID : 54592730482

Q.11 जिस वक प म वराम-िचह का योग सह हुआ है, उसका चयन क िजए।

- Ans 1. राम क प नी दोन ब चे और नौकर घूमने गए ह।
 2. राम क प नी, दोन ब चे और नौकर घूमने गए ह।
 3. राम क प नी : दोन ब चे : और नौकर घूमने गए ह।
 4. राम, क प नी दोन , ब चे और नौकर, घूमने गए ह।

Question ID : 54592730490

Q.12 'यौवन ढलना' मुहावरे का सह अथ है।

- Ans 1. जवानी आना
 2. मृ यु पाना
 3. बुढ़ापा आना
 4. रौनक बढ़ना

Question ID : 54592730493

Q.13 "मोहन को हठ पढ़नी है, इसिलए शा िजी के यहाँ गया है" कौन-सा

- वा य है? Ans 1. संयुरत
 2. कठन
 3. फम
 4. सरल

Question ID : 54592730483

Q.14 कस वा य म वराम-िचह का गलत योग

- हुआ है? Ans 1. फता-पु म झगड़ा हो गया।
 2. उसके पास कपड़ा-ल ता कु छ है भी, या नहकं!
 3. बुद ने घर-घर जाकर उपदेश दए
 4. मेरे-तु हारे बीच कोई झगड़ा नहकं हुआ है

Question ID : 54592730492

Q.15 'सोने क कटार होना' मुहावरे के सह अथ का चयन करे।

- Ans 1. जो जैसा है उसे उससे बढ़कर फलना
 2. कोई उपाय न सूझना
 3. मालदार
 4. सु दर पर हानकारक

Question ID : 54592730491

Comprehension:

नीचे दये गये अफठत गदयांश को पढए और 9न के उ तर दक िजए।

वै ानक योग क सफलता ने मनु य क बुद का अपूव विकास कर दया है। दवतीय महायुद म एटम ब्मक शिरत ने कु छ ण म हक जापान क अजेय शिरत को परा िजत कर

दिया। इस शिर्त क युदकालकन

सफलता न अमरका, स, फटन, ास आद सभी दश को ऐस श ा क न्मा ण क रणा दक फक सभी भयंकर और सववनाशकारक श बनान लग। अब सना को पराजत करन तवा श , -द श पर पैदल सना दवारा आमण करन क लिए श -नमा ण क वान पर द श क वनाश करन क दशाम श ा बनन लग हा इन हवयार का योग होन पर श , -द श क अधकांश जनता और संपा त वो5 समय म हक न ट क जा सक गी। चूँक ऐस श ा ाय: सभी वत द श क संहालय म क, छन क, छ आ गय ह, अत: युद क सिवत म 7नका योग भी अनवाय हो जाय गा। अत: दुनिया का सवनाश या अधकांश नाश तो अवग्य हो हक जाय गा। इसीनए न: श िकरण क योजनाएँ बन रहक हा श ा क न्मा ण म जो दशा अपनाई गई, 7सी क अनुसार आज इतन 7 नत श ा बन गय ह, जिनक योग स त्यापक वनाश आस न दखाई प5ता है। अब भी परक ण क रोकवाम तवा बन श क योग क रोकन क माग खोज जा रह हा इन यास क मूलम एक भयंकर आतंक और वगव-वनाश का भय काय रह कर रहा है।

SubQuestion No : 16

Q.16 बड़े-बड़े देश आधुनिक वनाशकार श ा य

बना रहे ह? Ans 1. अपन संसाधन का योग करन

क 7दय 9य स

- 2. अपनी-अपनी सनाओं म कमी करन क 7दय 9य स
- 3. पार परक भय क कारण
- 4. अपना-अपना सामरक त्यापार बढ़ान क 7दय 9य स

Question ID : 54592730499

Comprehension:

नीच दय गय अपठत गदयांश को पढ़ए और 9न क 7 तर दकजए।

वै ानक योग क सफलता न मन, य क बुद का अपूव विकास कर दया है। दवतीय महायुद म एटम बम क शरत न क, छ ण म हक जापान क अजय शरत को पराजत कर दया। इस शरत क युदकालकन सफलता न अमरका, स, फटन, ास आद सभी दश को ऐस श ा क न्मा ण क रणा दक फक सभी भयंकर और सववनाशकारक श बनान लग। अब सना को पराजत करन तवा श , -द श पर पैदल सना दवारा आमण करन क लिए श -नमा ण क वान पर द श क वनाश करन क दशाम श ा बनन लग हा इन हवयार का योग होन पर श , -द श क अधकांश जनता और संपा त वो5 समय म हक न ट क जा सक गी। चूँक ऐस श ा ाय: सभी वत द श क संहालय म क, छन क, छ आ गय ह, अत: युद क सिवत म 7नका योग भी अनवाय हो जाय गा। अत: दुनिया का सवनाश या अधकांश नाश तो अवग्य हो हक जाय गा। इसीनए न: श िकरण क योजनाएँ बन रहक हा श ा क न्मा ण म जो दशा अपनाई गई, 7सी क अनुसार आज इतन 7 नत श ा बन गय ह, जिनक योग स त्यापक वनाश आस न दखाई प5ता है। अब भी परक ण क रोकवाम तवा बन श क योग क रोकन क माग खोज जा रह हा इन यास क मूलम एक भयंकर आतंक और वगव-वनाश का भय काय रह कर रहा है।

SubQuestion No : 17

Q.17 एटम बम क अपार शित का थम अनुभव कै से

हुआ? Ans 1. अमरका क वजय स

- 2. अमरका, स, फटन और ांस क त पथा स
- 3. जापान म हुई भयंकर वनाशलाकला स
- 4. जापान क अजय शरत क पराजय स

Question ID : 54592730498

Comprehension:

नीचे पढ़िए गए अपठित गद्यांश को पढ़िए और 9 न के 7 तर दकिए।

वैािनक योग क सफलता न मन, य क बुद का अपूव विकास कर दिया है। दवतीय महायुदम एटम बम क शाऱत न क, छ ण म हक जापान क अजय शाऱत को पराजत कर दिया। इस शाऱत क युदकालकन सफलता न अम रका, स, फ टन, ा स आद सभी दश को ऐस श ा क निमाण क रणा दकिए सभी

भयंकर और सववनाशकारक श बानन लग। अब सना को पराजित करने तवा श -दश पर पैदल सना दवारा आमण करने के लिए श -नमाण के वान पर दश के वनाश करने क दशाम श ा बनन लग है। इन हवयार का योग होने पर श -दश क अधकांश जनता और संपत्त वोड समय म हक न ट क जा सक गी। चूँकि ऐस श ा ायः सभी वत दश के संहालय म क, छन क, छ आ गय ह, अतः युद क सववत म 7नका योग भी अनवाय हो जाय गा। अतः दुनिया का सवनाश या अधकांश नाश तो अवग्य हो हक जाय गा। इसीलिए नः श िकरण क योजनाएँ बन रहक है। श ा के नमाण म जो दशा अपनाई गई, 7सी क अनुसार आज इतन 7 नत श ा बन गय ह, जिनके योग स त्यापक वनाश आसन दखाई पडता है। अब भी परकण क रोकवाम तवा बन श के योग क रोकन क माग खोज जा रह है। इन यास के मूल म एक भयंकर आतंक और वगव-वनाश का भय काय रह कर रहा है।

SubQuestion No : 18

Q.18 'हयापक वनाश आसठन दखाई पडता है।' इस वा य म 'आसठन' का अथ

या है? Ans

1. अवग्य घटत होने वाला।
2. कभी घटत नहकं होने वाला।
3. क, छ समय बाद घटत होने वाला।
4. किसी ं वशष म घटत होने वाला।

Question ID : 54592730501

Comprehension:

नीच दय गय अपठत गदयांश को पढए और 9न क 7 तर दकजए।

वै ानक योग क सफलता न मनु, य क बुद का अपूव विकास कर दया है। दवतीय महायुद म एटम बम क शरत न क, छ ण म हक जापान क अजय शरत को पराजित कर दया। इस शरत क युदकालकन सफलता न अम रका, स, फ टन, ा स आद सभी दश को ऐस श ा के नमाण के रणा दक तक सभी भयंकर और सववनाशकारक श बानन लग। अब सना को पराजित करने तवा श -दश पर पैदल सना दवारा आमण करने के लिए श -नमाण के वान पर दश के वनाश करने क दशाम श ा बनन लग है। इन हवयार का योग होने पर श -दश क अधकांश जनता और संपत्त वोड समय म हक न ट क जा सक गी। चूँकि ऐस श ा ायः सभी वत दश के संहालय म क, छन क, छ आ गय ह, अतः युद क सववत म 7नका योग भी अनवाय हो जाय गा। अतः दुनिया का सवनाश या अधकांश नाश तो अवग्य हो हक जाय गा। इसीलिए नः श िकरण क योजनाएँ बन रहक है। श ा के नमाण म जो दशा अपनाई गई, 7सी क अनुसार आज इतन 7 नत श ा बन गय ह, जिनके योग स त्यापक वनाश आसन दखाई पडता है। अब भी परकण क रोकवाम तवा बन श के योग क रोकन क माग खोज जा रह है। इन यास के मूल म एक भयंकर आतंक और वगव-वनाश का भय काय रह कर रहा है।

SubQuestion No : 19

Q.19 इस गदयांश का सवा िधक उपयु त शीषक है।

Ans

1. एटम बम क शरत
2. आतंक और वगव-वनाश का भय
3. नः श िकरण
4. आधुनक श ा का वनाशकारक भाव

Question ID : 54592730500

Comprehension:

नीचे पढ़ें और 9 नंबरों के 7 प्रश्नों का उत्तर दें।

वैज्ञानिक योग का सफलता न मन, बुद्धि का अपूर्व विकास कर दिया है। दशवीं महायुद्ध में एटम बम का शक्ति न कृष्ण मंह जापान का अजय शक्ति को पराजित कर दिया। इस शक्ति का युद्धकाल में सफलता न अमरिका, सोवियत, ताइवान आदि सभी देशों को ऐसा शांति का निर्माण कर देना कि सभी भयंकर और संहारकारी शांति बनाने लगें। अब शांति को पराजित करने का शांति-दश पर पैदल सैन्य द्वारा

आमरण करन क लिए श-नमाण क वान पर दश क वनाश करन क दशा मशा ा बनन लग हा इन हवयार का योग होन पर श-दश क अधकांश जनता और संपत्त वोड समय म हक न टक जा सक गी। चूँक ऐस श ा ायः सभी वत दश क सं हालय म क, छ न क, छ आ गय ह, अतः युद क सवत म 7नका योग भी अनवाय हो जाय गा। अतः दुनिया का सवनाश या अधकांश नाश तो अवश्य हो हक जाय गा। इसीलिए नः श िकरण क योजनाएँ बन रहक हा श ा क नमाण म जो दशा अपनाई गई, 7सी क अनुसार आज इतन 7 नत श ा बन गय ह, जिनक योग स व्यापक वनाश आस न दखाई पडता है। अब भी परक ण क रोकवाम तवा बन श क योग क रोकन क माग खोज जा रह हा इन यास क मूल म एक भयंकर आतंक और वव-वनाश का भय काय रह कर रहा है।

SubQuestion No : 20

Q.20 वव को सवनाश से बचाने के लिए कौन-सी योजना सवाधिक भावी

हो सकती है? Ans 1. एक दश को आधुनिक श ा स सृजत

करण क योजना

2. एटम शरत का नयोजन

3. स-अम रका क मता क योजना

4. नः श िकरण क योजना

Question ID : 54592730502