



**AFCAT Memory Based Paper 13 Feb 2022 Shift 1**

-  **Latest Govt Job updates**
-  **Private Job updates**
-  **Free Mock tests available**

**Visit - [teachingninja.in](https://teachingninja.in)**

## 100 Questions

---

**Que. 1** Choose the word MOST SIMILAR in meaning to the given word.

Aversion

1. Entice
2. Lure
3. Indifference
4. Antipathy

Correct Option - 4

---

**Que. 2** Select the most appropriate ANTONYM of the given word

Daunt

1. Discourage
2. Cheer
3. Dishearten
4. Disparity

Correct Option - 2

---

**Que. 3** Directions: Select the word that is closest in meaning (SYNONYM) to the word given below

Obliterate

1. Hansom
2. Establish
3. Extirpate
4. Epistle

Correct Option - 3

---

**Que. 4** Directions: Choose the correct antonym of the given word out of the four options.

Deplore

1. Dependable
2. Independent
3. Admire
4. Damn

Correct Option - 3

---

**Que. 5** In the following question, out of the four alternatives, select the alternative which is the best substitute of the phrase.

One who is honourably discharged from service

1. Belligerent
2. Emeritus
3. Truant

4. Mercenary

Correct Option - 2

---

**Que. 6** Choose the correct word for "not able to be forgotten."

1. Discrepancy
2. Indelible
3. Bizarre
4. Parity

Correct Option - 2

---

**Que. 7** Find the meaning of the given idiom:-

Throw a spanner

1. Get organized and do things effectively
2. To do something that prevents a plan or activity from succeeding
3. Stuck in a difficult circumstance with no escape
4. Being grumpy or angry about something

Correct Option - 2

---

**Que. 8** Find the meaning of the given idiom:-

set store by

1. Being very happy
2. Doing something in an easier and least expensive manner
3. To believe that something is very important
4. Staying informed and updated about everything

Correct Option - 3

---

**Que. 9** In the following question, out of the four alternatives, select the alternative which best expresses the meaning of the Idiom/Phrase.

Throw in the towel

1. To quit in defeat or never give up.
2. To continue in defeat and never give up.
3. To continue in defeat or give up.
4. To quit in defeat or give up.

Correct Option - 4

---

**Que. 10** Direction: In the following passage there are blanks, each of which has been numbered. These members are printed below the passage and against each, five words are suggested, one of which fits the blank appropriately. Find out the appropriate words.

Water is the single most important resource on the planet that we live \_\_\_\_\_ (1) \_\_\_\_\_, and that is why it is essential that we conserve it. Water is the basic necessity for all living beings, and it is incredibly important to \_\_\_\_\_ (2) \_\_\_\_\_ it. It is not only important for living and breathing things, \_\_\_\_\_ (3) \_\_\_\_\_ for many inanimate objects that humans create. For example, to build a house, we need concrete, and to make concrete, we

need to mix cement powder with water. Water constitutes more than 70 percent of the Earth's surface, and yet we do not have enough water for our needs. It is essential to conserve and save water \_\_\_\_\_ (4) \_\_\_\_\_ ourselves and the entire planet Earth.

Select the most appropriate option to fill in blank 1.

1. on
2. for
3. in
4. None of these

Correct Option - 1

---

**Que. 11** Select the most appropriate option to fill in blank 2.

1. Conserving
2. Conserved
3. has conserve
4. conserve

Correct Option - 4

---

**Que. 12** Select the most appropriate option to fill in blank 3.

1. or also
2. since also
3. but also
4. and also

Correct Option - 3

---

**Que. 13** Select the most appropriate option to fill in blank 4.

1. to
2. for
3. at
4. by

Correct Option - 2

---

**Que. 14** **Direction: Read the passage carefully and answer the following questions:**

Huge attention and resources have been placed on the youth mental health crisis in recent years. Yet, the crisis is getting worse, not better. Existing solutions have assumed that today's youth have a resilience deficit, thus creating programmes to 'build' or 'create' resilience. Knowing this would completely change the approach needed for today's youth – and this is exactly what iheart has achieved. Our innovative, evidence-based mental wellbeing educational programme challenges current practices and outlooks and has already improved the lives of over 15,000 young people in twenty countries. Our role is to educate young people that they do NOT have a **resilience** deficit. Rather, we empower them with the confidence that they CAN uncover their built-in mental health, wellbeing and resilience so that they can overcome their challenges and realise their extraordinary potential. When we focus on solving the right problem – educating our children about their innate resilience – the evidence speaks for itself. 98% of children noticed a positive change in themselves at the end of the iheart programme. 95% would recommend the programme to a friend. 90% saw increased emotional resilience for dealing with adversity.

How many saw percent of increased emotional resilience for dealing with adversity?

1. 89%
2. 90%
3. 98%
4. 76%

Correct Option - 2

---

**Que. 15** How many per cent of children noticed a positive change in themselves at the end of the iheart programme?

1. 85%
2. 98%
3. 90%
4. 75%

Correct Option - 2

---

**Que. 16** Select the word that could replace the word **resilience** as used in the passage:

1. rigidity
2. flexibility
3. fragility
4. weakness

Correct Option - 2

---

**Que. 17** **Direction: Find the correct sequence for the given fill-up**

The papa had told the story \_\_\_\_\_ or forgetting.

P. They all knew it as well as he knew it himself,

Q. and they could keep him

R. so often that the children knew just exactly what to expect the moment he began.

S. from making mistakes,

1. PQRS
2. RPQS
3. QRPS
4. QPRS

Correct Option - 2

---

**Que. 18** **Direction: Find the correct sequence for the given fill-up**

One day Gimme the Ax said to himself, \_\_\_\_\_ a wheelbarrow full of goldfish wearing new jewelry.

P. Maybe a policeman began laughing

Q. "Today I go to the post office and around, looking around.

R. Maybe I will hear about something happening last night when I was sleeping.

S. fell in a cistern and came out with

1. PRQS
2. QRPS

3. SPRQ
4. RQSP

Correct Option - 2

---

**Que. 19** Direction: Find the correct sequence for the given fill-up

A poor shoemaker \_\_\_\_\_ talented elves.

- P. to their last piece of leather
- Q. and his wife are down
- R. when their fortunes
- S. change thanks to help from

1. PQRS
2. QPRS
3. SPRQ
4. RQPS

Correct Option - 2

---

**Que. 20** Direction: Find the correct sequence for the given fill-up

In the reign of good Queen Bess, \_\_\_\_\_ called Tommy and Margery.

- P. who, living under a hard landlord,
- Q. there was an honest, industrious countryman named Meanwell,
- R. was cruelly turned out of his little farm,
- S. which had enabled him to support a wife and two children,

1. PQRS
2. QPRS
3. SPRQ
4. RQPS

Correct Option - 2

---

**Que. 21** Select the most appropriate word to fill in the blank in the given sentence.

His \_\_\_\_\_ of decency and fair play made him refuse the offer.

1. watch
2. sense
3. ignorance
4. lack

Correct Option - 2

---

**Que. 22** Select the most appropriate word to fill in the blank in the given sentence.

Maybe he was trying to protect her, therefore he was trying to \_\_\_\_\_ the problem.

1. endorse
2. raise
3. issue
4. conceal

Correct Option - 4

---

**Que. 23** Choose the most appropriate answer and fill in the blanks:

They can \_\_\_\_\_ precious medicines from ordinary substances.

1. abstract
2. add
3. insert
4. dilute

Correct Option - 1

---

**Que. 24** **Direction:** Given below is a sentence with a blank. Identify the correct word which can be used to fill the blank.

Conservation of energy is the principle of physics according to which the energy of interacting bodies or particles in a closed system remains \_\_\_\_\_.

1. chronicle
2. cardinal
3. correction
4. constant

Correct Option - 4

---

**Que. 25** In the sentence identify the segment which contains the grammatical error.

I am sure that neither Juhi nor Jaya are responsible for breaking the vase.

1. for breaking the vase
2. neither Juhi nor Jaya
3. I am sure that
4. are responsible

Correct Option - 4

---

**Que. 26** Select the segment in the sentence, which contains a grammatical error.

This furnitures has been taken on hire for the function in the college.

1. on hire for the function
2. This furnitures has
3. been taken
4. in the college

Correct Option - 2

---

**Que. 27** Identify the segment in the sentence that contains a grammatical error.

Not only they won / the test match / but they also / broke many previous records.

1. broke many previous records.
2. the test match
3. but they also
4. Not only they won

Correct Option - 4

---

**Que. 28** **Direction:** Choose the most appropriate phrasal verb and fill in the blank:

The top and bottom \_\_\_\_\_ if you pull hard enough.

1. come apart
2. come down with
3. come forward
4. come from

Correct Option - 1

---

**Que. 29** **Find the Synonym of-**

Doze

1. Awakening
2. Nap
3. Be awake
4. Wakefulness

Correct Option - 2

---

**Que. 30** **Directions:** In the sentence identify the segment which contains the grammatical error.

The invited guests preferred orange juice than hot coffee or chilled grapes.

1. or chilled grapes
2. than hot coffee
3. preferred orange juice
4. The invited guests

Correct Option - 2

---

**Que. 31** Who is the author of the book “The Battle of Belonging”?

1. Shashi Tharoor
2. Jai Ratan
3. Kapil Sibal
4. Jairam Ramesh

Correct Option - 1

---

**Que. 32** Which of the following was called the ‘Magna Carta of Indian Education’?

1. Macaulay’s Minutes
2. Hunter Commission
3. Charter Act of 1813
4. Wood’s Dispatch

Correct Option - 4

---

**Que. 33** Which of the following was the first newspaper of India ?



1. The Bengal Gazette
2. The Calcutta Gazette
3. The Indian Journal
4. The Bengal Newspaper

Correct Option - 1

---

**Que. 34** The 'Loor dance' is a traditional folk dance, performed only by women, in the state of:

1. Haryana
2. Madhya Pradesh
3. Punjab
4. Rajasthan

Correct Option - 1

---

**Que. 35** Which among of the following is the most elastic?

1. Rubber
2. Aluminum
3. Steel
4. Glass

Correct Option - 3

---

**Que. 36** Who among the following is the architect of the Central Vista Project?

1. Chandrakant Sompura
2. Bimal Patel
3. B. V. Doshi
4. Brinda Somaya

Correct Option - 2

---

**Que. 37** Who among the following is not associated with the sport of F1 racing?

1. Lewis Hamilton
2. Charles Leclerc
3. Romain Grosjean
4. Luis Suarez

Correct Option - 4

---

**Que. 38** Who was the first Indian Air Chief to command the Indian Air Force?

1. Arjan Singh
2. Subroto Mukerjee
3. Surinder Mehra
4. Swaroop Krishna Kaul

Correct Option - 2

---

**Que. 39** Which of the following is an aerobatics demonstration aircraft team of the Indian Air Force?

1. Sarang
2. Golden Eagles
3. Flying Bullets
4. Surya Kiran

Correct Option - 4

---

**Que. 40** India is the largest producer of \_\_\_\_\_.

1. Zinc
2. Lead
3. Mica
4. Bauxite

Correct Option - 3

---

**Que. 41** In January 2022, which of the following launched a special train to commemorate 'Azadi Ka Amrit Mahotsav'?

1. Jaipur Metro
2. Delhi Metro
3. Hyderabad Metro
4. Lucknow Metro

Correct Option - 2

---

**Que. 42** The International Date Line is

1. Equator
2. 0° longitude
3. 90° east longitude
4. 180° longitude

Correct Option - 4

---

**Que. 43** Which of the following process widespread the passport services in India?

1. FMPSK
2. POPSK
3. Jan Dhan Yozna
4. PMPSK

Correct Option - 2

---

**Que. 44** The Lucknow franchise, owned by RPSG Group, of the Indian Premier League will be called \_\_\_\_\_.

1. The Nawabs of Lucknow
2. Lucknow Legends
3. Lucknow Super Giants.
4. Lucknow Tuskers

Correct Option - 3

---

**Que. 45** In Jan 2022, Meta has introduced which of the following world's fastest artificial intelligence supercomputers?

1. Sunway TaihuLight
2. AI Research SuperCluster (RSC)
3. JUWELS Booster Module
4. HPC5

Correct Option - 2

---

**Que. 46** The 'Global - 500' Award is given for rare achievement in which of the following fields?

1. Gene preservation
2. Environment conservation
3. Population control
4. Pollution control

Correct Option - 2

---

**Que. 47** Internet-voting was first held in which of the following State?

1. Telangana
2. Kerala
3. Uttar Pradesh
4. Andhra Pradesh

Correct Option - 1

---

**Que. 48** Which of the following does **not** come under Ministry of Defence?

1. Department Of Border Management
2. Department Of Defence Production
3. Department Of Ex-servicemen welfare
4. Defence Research and Development Organisation (DRDO)

Correct Option - 1

---

**Que. 49** The scientific study of a cell is called:

1. histology
2. cytology
3. physiology
4. taxonomy

Correct Option - 2

---

**Que. 50** Which of the following countries is **not** a member of the 'Quad' group?

1. Japan
2. USA
3. Germany

4. Australia

Correct Option - 3

---

**Que. 51** Kieron Pollard hit six sixes in an over in a T20 match against which of the following team?

1. India
2. Australia
3. Pakistan
4. Sri Lanka

Correct Option - 4

---

**Que. 52** Which of the following groups of organic compounds are least likely to be used in making perfumes?

1. Alcohols
2. Carboxylic Acids
3. Esters
4. Aldehydes

Correct Option - 2

---

**Que. 53** CEO of which of the following companies was awarded Padma Bhushan in 2022?

1. Google
2. Apple
3. Facebook
4. Instagram

Correct Option - 1

---

**Que. 54** Who among the following has won the Australian Open Women's Singles title in January 2022?

1. Ashleigh Barty
2. Danielle Collins
3. Naomi Osaka
4. Serena Williams

Correct Option - 1

---

**Que. 55** First "Earth Summit" for "Convention on Biological Diversity" was held at -

1. Johannesburg (2002), S. Africa
2. Rio de Janeiro (1992), Brazil
3. Dehradun (1992), India
4. New York (2000), USA

Correct Option - 2

---

**Que. 56** In a  $\triangle ABC$  the  $\angle A - \angle B = 36^\circ$  and the average of measure of angle  $\angle A$  and  $\angle B$  is  $74^\circ$ . Find the measure of  $\angle C$ .

1.  $32^\circ$

2.  $36^\circ$
3.  $40^\circ$
4.  $42^\circ$

Correct Option - 1

---

**Que. 57** Ram buys a car but due to a sudden increase in the price of petrol by 25% his budget is hampered. How much should he reduce his consumption of petrol so that cost remains the same within his budget?

1. 10%
2. 15%
3. 20%
4. 25%

Correct Option - 3

---

**Que. 58** Ram and Shyam of ages 25 years and 35 years got a lottery of Rs. 3,00,000. They decided to divided the lottery money in the ratio of their age then find the difference between the money they got.

1. Rs. 35,000
2. Rs. 40,000
3. Rs. 45,000
4. Rs. 50,000

Correct Option - 4

---

**Que. 59** A can do a piece of work in 8 days, B can do the same work in 6 days while A, B and C together can do the same work in 3 days. In how many days C alone can complete the same work?

1. 18 days
2. 16 days
3. 30 days
4. 36 days

Correct Option - 2

---

**Que. 60** A can fill a tank in 7 hours but due to a leakage it takes 8 hours to fill the tank. In what time leakage can empty the full tank?

1. 48 hours
2. 50 hours
3. 52 hours
4. 56 hours

Correct Option - 4

---

**Que. 61** A woman bought some amount of paneer, She uses half of it on Monday, half of the remaining of Tuesday and the process going on till thursday. Find how much quantity she consumed in all from Monday to Thursday.

1. 93.75%
2. 87.25%

3. 82.75%
4. 75.25%

Correct Option - 1

---

**Que. 62** If the profit of a shopkeeper is increased by 15% but the sale is decreased by 5%. Find the net profit of the shopkeeper.

1. 10%
2. 9.25%
3. 8.75%
4. 11.25%

Correct Option - 2

---

**Que. 63** Aman lends a sum of money to Aman at the rate of 3% for the first 2 years, 5% for the next 3 years and 7% for next 1 year. If the total simple interest for the 6 years is Rs.840, then find the sum of money.

1. Rs. 2500
2. Rs. 2800
3. Rs. 3000
4. Rs. 3200

Correct Option - 3

---

**Que. 64** Find the sum if the compound interest for 3 years at the rate of 5% per annum is Rs. 1261

1. Rs. 8000
2. Rs. 7000
3. Rs. 6000
4. Rs. 5000

Correct Option - 1

---

**Que. 65** Ram and Shyam started travelling from points A and B which is 710 km apart. Ram is travelling by train towards point B at a speed of 50 km/hr and Shyam is travelling by bus towards point A at a speed of 30 km/hr. Shyam started travelling 3 hours after Ram and they met at a point P after certain time. Find the distance between point P and point A.

1. 400 km
2. 425 km
3. 450 km
4. 500 km

Correct Option - 4

---

**Que. 66** A person buys 50 kgs of apple at the rate of Rs. 55 per kg and he sells 25% of it in Rs. 59 per kg. Find in how much rupees per kg he sells the remaining apples to get a profit of 25% in overall process.

1. Rs. 68 per kg
2. Rs. 70 per kg
3. Rs. 72 per kg

4. Rs. 75 per kg

Correct Option - 3

---

**Que. 67** A goes from point P to Q with a certain speed. The speed in the onward journey was 20% less than the return journey. The total distance covered by him in to and fro journey was 2000 km and he takes 2 hours of halt for servicing before returning back from Q to P. Find the speed of onwards journey if the total time taken by him in his journey was 42 hours.

1. 40 km/hr
2. 45 km/hr
3. 50 km/hr
4. 55 km/hr

Correct Option - 2

---

**Que. 68** The cost price of 10 shirts and 5 trousers together is Rs. 10,000, A shopkeeper sells shirts at a profit of 15% and trousers at a loss of 10% and his overall gain is Rs. 275. Find the cost price of a shirt.

1. Rs. 370
2. Rs. 420
3. Rs. 470
4. Rs. 510

Correct Option - 4

---

**Que. 69** There were 120 students who went for summer camp. 20 students joined them after some time, Due to which the cost of consumption increased by Rs. 80 per day and the average cost of each students decrease by Rs. 5. Find the initial consumption of each student.

1. Rs. 37
2. Rs. 39
3. Rs. 41
4. Rs. 43

Correct Option - 2

---

**Que. 70** At present Vikash is on the 10<sup>th</sup> floor and Khushbu is on the 35<sup>th</sup> floor. If the speed of lift going upward is 24 floor/min and going downward speed is 26 floor/min and both of them start at the same time. Find at which floor they will meet each other.

1. 20<sup>th</sup> floor
2. 21<sup>th</sup> floor
3. 22<sup>th</sup> floor
4. 23<sup>th</sup> floor

Correct Option - 3

---

**Que. 71** There are three numbers  $N_1$ ,  $N_2$  and  $N_3$  and their sum of squares is 3325.  $N_1$  and  $N_2$  and  $N_2$  and  $N_3$  is in the ratio 3 : 2. Find the value of  $N_1$ .

1. 30

2. 35
3. 40
4. 45

Correct Option - 4

---

**Que. 72** A sum becomes double in 4 years at compound interest, in how many years the sum becomes 8 times of itself.

1. 8 years
2. 12 years
3. 16 years
4. 20 years

Correct Option - 2

---

**Que. 73** The value of  $18 \div [26 - \{25 - (15 - 5) \div 2\}]$  of  $12 + 2 - 2 \div 4 \times 16$  is:

1.  $\frac{9}{4}$
2.  $\frac{3}{2}$
3.  $-\frac{25}{2}$
4.  $-\frac{23}{4}$

Correct Option - 4

---

**Que. 74** The ratio of spirit and water in the two vessels is 5 : 1 and 3 : 7 respectively. In what ratio the liquid of both the vessels should be mixed such that a new mixture containing half spirit and half water is obtained?

1. 3 : 5
2. 5 : 7
3. 1 : 1
4. 4 : 7

Correct Option - 1

---

**Que. 75** In a college there are total 250 students. Average weight of boys is 50 and average weight of girls is 45. Also it is known that the overall average is 48. What is the number of boys in the college?

1. 150
2. 100
3. 125
4. 200

Correct Option - 1

---

**Que. 76** Four elements are given, three of which are alike in a certain way while one is not. Select the odd one out.

1. K1122
2. P1632
3. N148



4. D48

Correct Option - 3

---

**Que. 77** Four words are given, three of which are alike in a certain way while one is not. Select the odd one out.

1. Gidda
2. Garba
3. Kathak
4. Pongal

Correct Option - 4

---

**Que. 78** Select the option in which the words share the same relationship as that shared by the given pair of words.

Train : Yard :: \_\_\_\_\_ : Hanger

1. Car
2. Aeroplane
3. Ship
4. Boat

Correct Option - 2

---

**Que. 79** Select the option in which the words share the same relationship as that shared by the given pair of words.

Secunderabad : Hyderabad

1. Delhi : Gurgaon
2. Ahmedabad : Gandhinagar
3. Kolkata : Hoogly
4. Chandigarh : Kolkata

Correct Option - 2

---

**Que. 80** Select the option in which the words share the same relationship as that shared by the given pair of words.

Brood : Hen :: Litter : ?

1. Cat
2. Pen
3. Buildings
4. Vehicle

Correct Option - 1

---

**Que. 81** Four words are given, three of which are alike in a certain way while one is not. Select the odd one out.

1. Cheese
2. Yogurt
3. Curd
4. Tofu

Correct Option - 4

**Que. 82** Study the given pattern carefully and select the number that can replace the question mark (?) in it.





10	5	105
20	?	420
30	15	915

1. 10
2. 15
3. 20
4. 25

Correct Option - 3

**Que. 83** Select the Venn diagram that best represents the relationship between the following words.



Seed, Root, Leaf

1. 
2. 
3. 
4. 

Correct Option - 2

**Que. 84** Select the Venn diagram that best represents the relationship between the following words

India, Bihar, Ranchi

1. 
2. 



Correct Option - 4

---

**Que. 85** If in a certain language, MIRACLE is coded as NKUEHRL, then how is GAMBLE coded in that language?

1. JDOCMF
2. CLEMNK
3. HCPFQK
4. AELGMN

Correct Option - 3

---

**Que. 86** There are six persons A, B, C, D, E and F. C is the sister of F. B is the brother of E's husband. D is the father of A and grandfather of F. There are two fathers, three brothers and a mother in the group. Who is the mother?

1. B
2. E
3. A
4. D

Correct Option - 2

---

**Que. 87** Pointing to a photograph, Rohit said, "She is the daughter of the only son of my father." How is Rohit related to the girl in the photograph ?

1. Cousin
2. Uncle
3. Father
4. Brother

Correct Option - 3

---

**Que. 88** From her house, Puja went 15 km to the North. Then she turned west and covered 10 km. Then, she turned south and covered 5 km. Finally turning to east, she covered 10 km to reach Mathura railway station. In which direction is the railway station from her house?

1. North
2. East
3. North-East
4. West





Correct Option - 1

**Que. 89** Point R is 10 km to the south of point T. Point R is 13 km to the west of point W. Point W is 16 km to the north of point S. Point G is 25 km to the west of point S. If point M is 21 km to the south of point R, then point G is how far from point M and point W is in which direction from point M?

1. 18 km, South east
2. 19 km, North east
3. 13 km, South west
4. 13 km, North east

Correct Option - 4

**Que. 90** In the following question, select the odd figure from the given alternatives.



1. 
2. 
3. 
4. 

Correct Option - 2



**Que. 91** Select the option that can replace the question mark (?) in the given figure and complete the pattern (rotation is NOT allowed).



1. 
2. 



Correct Option - 2

**Que. 92** From amongst the figures (A), (B), (C), (D) and (E), select the figure which satisfies the same conditions of placement of the dots as in figure (X)

Problem Figure



(X)

Answer Figure



(A)

(B)

(C)

(D)

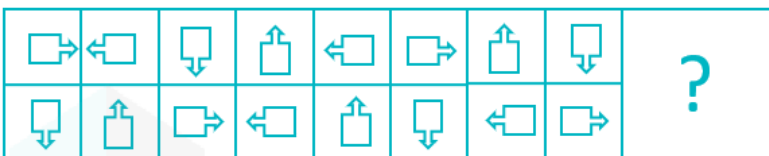
(E)

1. A
2. B
3. D
4. E

Correct Option - 4

**Que. 93** Select the option that can replace the question mark (?) in the following series.

Question Figure:



Answer Figures:



A

B

C

D

1. B
2. D
3. C
4. A

Correct Option - 1

---

**Que. 94** Rearrange the jumbled letters to make meaningful words and then select the one which is different.

1. NIDEKY
2. HIGHT
3. TEHAR
4. NGUSL

Correct Option - 2

---

**Que. 95** There are five students A, B, C, D and E. In an examination each one scored different marks. C has scored more marks than E and B and C got the second position among all five., A has scored more marks than D and B, D scored more marks than B. No one scored less than E. Who scored the highest mark among them?

1. A
2. C
3. D
4. E

Correct Option - 1

---

**Que. 96** Three of the following four letter-clusters are alike in a certain way and one is different. Pick the odd one out.

1. DFGI
2. SUVX
3. DFHJ
4. LNOQ

Correct Option - 3

---

**Que. 97** If '+' means '÷', '-' means '×', '×' means '+' and '÷' means '-', then the value of  $11 \times 15 - 81 + 27 \div 18$  will be ?

1. 83
2. -214
3. 38
4. 146

Correct Option - 3

---

**Que. 98** If 'A' means '+', 'B' means '×', 'C' means '÷' and 'D' means '-', then

$$16 C 7 B 49 C 28 A 63 D 21 A 11 = ?$$

1. 57
2. 49

3. 63

4. 47

Correct Option - 1

---

**Que. 99** Select the option that is related to the third letter-cluster in the same way as the second letter-cluster is related to the first letter-cluster.

ALONE : ZOLMV :: GROUP : ?

1. TIFLK

2. TIKFL

3. TILFK

4. TILKF

Correct Option - 3

---

**Que. 100** In the following question, select the odd word from the given alternatives.

1. Revoke

2. Cancel

3. Abrogate

4. Establish

Correct Option - 4

