



- ★ Latest Govt Job updates
- ★ Private Job updates
- ★ Free Mock tests available

Visit - teachingninja.in



RAILWAY RECRUITMENT BOARDS

रेलवे भर्ती बोर्ड

2nd Stage CBT for ALP & TECHNICIANS (CEN-01/2018)

Roll No:	301020000880029
Participants Name:	NEERAJ GOUR
Test Center Name:	iON Digital Zone iDZ AB Road Rajendra Nagar
Test Date:	23/01/2019
Test Time:	4:30 PM - 7:00 PM
Subject:	Part A and Exam Trade : Electronics Mechanic

- Options shown in green color with a tick icon are correct
- Chosen option on top right of the question indicates the option selected by the candidate
- The numbers indicated against the Question ID and Option ID are the numbers to be noted and used for raising objections

Section : Part A

Q.1 A 200 g block of iron was heated from 30°C to 60°C How much heat was transferred to the block (specific heat of iron is 450 Jkg⁻¹K⁻¹)?

- Ans
- 1. 6000 J
 - 2. 270 J
 - 3. 27 J
 - 4. 2700 J

Question ID : 96234011239
Option 1 ID : 96234044956
Option 2 ID : 96234044954
Option 3 ID : 96234044953
Option 4 ID : 96234044955

Status : Answered
Chosen Option : 4

Q.2 Greater the value of _____ of a material, the more rapidly it will conduct heat.

- Ans
- 1. latent heat
 - 2. regelation
 - 3. thermal conductivity
 - 4. melting point

Question ID : 96234011229
Option 1 ID : 96234044915
Option 2 ID : 96234044916
Option 3 ID : 96234044914
Option 4 ID : 96234044913

Status : Answered
Chosen Option : 3

Q.3 Substances that are broken down by biological processes are said to be _____.

- Ans
- 1. non-reusable
 - 2. reusable
 - 3. non-biodegradable
 - 4. biodegradable

Question ID : 96234011214

Option 1 ID : 96234044856

Option 2 ID : 96234044854

Option 3 ID : 96234044853

Option 4 ID : 96234044855

Status : Answered

Chosen Option : 4

Q.4 In a code language, 295 means 'water is liquid', 549 means 'oil is liquid' and 824 means 'oil on water'. Find the code for 'on'.

- Ans
- 1. 8
 - 2. 2
 - 3. 4
 - 4. 5

Question ID : 96234011280

Option 1 ID : 96234045120

Option 2 ID : 96234045118

Option 3 ID : 96234045117

Option 4 ID : 96234045119

Status : Answered

Chosen Option : 1

Q.5 A source of voltage V maintains a current i in a circuit. The energy supplied to the circuit by the source in time t is _____.

- Ans
- 1. V/it
 - 2. Vi/t
 - 3. $1/Vit$
 - 4. Vit

Question ID : 96234011246

Option 1 ID : 96234044982

Option 2 ID : 96234044983

Option 3 ID : 96234044984

Option 4 ID : 96234044981

Status : Not Answered

Chosen Option : --

Q.6 In angular measurements, one radian is equivalent to _____ degrees (approximately).

- Ans
- 1. 90
 - 2. 65.27
 - 3. 180
 - 4. 57.27

Question ID : 96234011212

Option 1 ID : 96234044846

Option 2 ID : 96234044848

Option 3 ID : 96234044845

Option 4 ID : 96234044847

Status : **Not Attempted and Marked For Review**

Chosen Option : --

Q.7 Where is the Headquarters of UNESCO located?

Ans 1. New York City

2. Geneva

3. Paris

4. Washington DC

Question ID : 96234011208

Option 1 ID : 96234044830

Option 2 ID : 96234044829

Option 3 ID : 96234044832

Option 4 ID : 96234044831

Status : **Answered**

Chosen Option : 3

Q.8 निम्नलिखित विकल्पों में से किस विकल्प की एस.आई. (SI) इकाई नहीं होती है?

Ans 1. आवृत्ति

2. विद्युत धारा

3. पदार्थ की मात्रा

4. प्रकाश की तीव्रता

Question ID : 96234011211

Option 1 ID : 96234044844

Option 2 ID : 96234044843

Option 3 ID : 96234044841

Option 4 ID : 96234044842

Status : **Answered**

Chosen Option : 4

Q.9 JPEG stands for _____.

Ans 1. Joint Program Experts Group

2. Joint Program Executing Group

3. Joint Program Experimental Group

4. Joint Photographic Experts Group

Question ID : 96234011233

Option 1 ID : 96234044929

Option 2 ID : 96234044932

Option 3 ID : 96234044931

Option 4 ID : 96234044930

Status : **Answered**

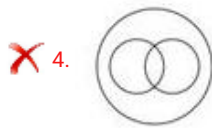
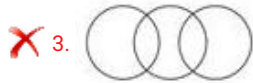
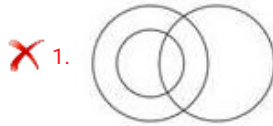


Teachingninja.in

Q.1 Which of the following Venn diagrams best represents the relationship between Indians, doctors and women?

0

Ans



Question ID : 96234011289

Option 1 ID : 96234045156

Option 2 ID : 96234045155

Option 3 ID : 96234045153

Option 4 ID : 96234045154

Status : Answered

Chosen Option : 2

Q.1 An object weighs X units on the earth. If we take the same object to the moon, its weight there will be _____.

1

Ans 1. less than X

2. more than X

3. zero

4. equal to X

Question ID : 96234011219

Option 1 ID : 96234044874

Option 2 ID : 96234044873

Option 3 ID : 96234044876

Option 4 ID : 96234044875

Status : Answered

Chosen Option : 1

Q.1 Molar specific heat capacity of a substance is _____.

2

Ans 1. $\left(\frac{1}{\mu}\right) \left(\frac{\Delta Q}{\Delta T}\right)$

2. $\mu \left(\frac{\Delta T}{\Delta Q}\right)$

3. $\mu \left(\frac{\Delta Q}{\Delta T}\right)$

✗ 4. $\left(\frac{1}{\mu}\right) \left(\frac{\Delta T}{\Delta Q}\right)$

Question ID : 96234011228

Option 1 ID : 96234044911

Option 2 ID : 96234044912

Option 3 ID : 96234044909

Option 4 ID : 96234044910

Status : Not Attempted and Marked For Review

Chosen Option : --

Q.1 A sum of ₹10,000 amounts to ₹11,449 in 2 years, when the interest is compounded annually. The interest rate percent per annum is:

3

Ans ✗ 1. 6%

✗ 2. 1%

✗ 3. 8%

✓ 4. 7%

Question ID : 96234011260

Option 1 ID : 96234045037

Option 2 ID : 96234045039

Option 3 ID : 96234045038

Option 4 ID : 96234045040

Status : Not Answered

Chosen Option : --

Q.1 Two planes E and F start flying from the same point. E flies 7 km west, then turns to its left and flies 15 km. Meanwhile F flies 11 km east and turns right and flies 15 km. Where is F with respect to E?

4

Ans ✗ 1. F is 18 km west of E

✓ 2. F is 18 km east of E

✗ 3. F is 4 km east of E

✗ 4. F is 4 km west of E

Question ID : 96234011298

Option 1 ID : 96234045189

Option 2 ID : 96234045192

Option 3 ID : 96234045190

Option 4 ID : 96234045191

Status : Answered

Chosen Option : 2

Q.1 86°F is equal to _____.

5

Ans ✓ 1. 30°C

✗ 2. 20°C

✗ 3. 10°C

✗ 4. 34°C

Question ID : 96234011227

Option 1 ID : 96234044907

Option 2 ID : 96234044906

Option 3 ID : 96234044905

Opti

Status : **Answered**
Chosen Option : 1

Q.1 In an examination, the highest score and the lowest score differed by 55 and the higher one was $\frac{9}{4}$ times the lower one.
6 What is the lowest score?

- Ans**
- 1. 36
 - 2. 44
 - 3. 40
 - 4. 48

Question ID : **96234011262**
Option 1 ID : **96234045045**
Option 2 ID : **96234045047**
Option 3 ID : **96234045046**
Option 4 ID : **96234045048**
Status : **Answered**
Chosen Option : 2

Q.1 Given below are some letters, that each of these letters has a corresponding number. Select the combination of numbers from the options so that the jumbled letters arranged accordingly will form a meaningful English word.
7

H T R U O A
1 2 3 4 5 6

- Ans**
- 1. 1,6,2,4,5,3
 - 2. 6,4,2,1,5,3
 - 3. 3,4,5,2,1,6
 - 4. 2,1,5,3,4,6

Question ID : **96234011286**
Option 1 ID : **96234045141**
Option 2 ID : **96234045144**
Option 3 ID : **96234045143**
Option 4 ID : **96234045142**
Status : **Answered**
Chosen Option : 2

Q.1 If straight lines are drawn from various points on the contour of an object to meet a plane, the figure obtained on the plane is called the _____ of the object.
8

- Ans**
- 1. projection
 - 2. dimensioning
 - 3. development
 - 4. animation

Question ID : **96234011221**
Option 1 ID : **96234044881**
Option 2 ID : **96234044884**
Option 3 ID : **96234044883**
Option 4 ID : **96234044882**
Status : **Answered**
Chosen Option : 1

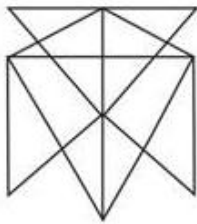
Q.1 A series is given, with one number missing. Choose the correct alternative from the given ones that will complete the series.
9

1.14, 1.28, 1.42, ?, 1.70, 1.84

- Ans 1. 1.56
 2. 1.54
 3. 1.68
 4. 1.62

Question ID : 96234011279
Option 1 ID : 96234045114
Option 2 ID : 96234045115
Option 3 ID : 96234045116
Option 4 ID : 96234045113
Status : Answered
Chosen Option : 1

Q.2
0 What is the minimum number of lines required to make the given image?



- Ans 1. 11
 2. 9
 3. 12
 4. 10

Question ID : 96234011293
Option 1 ID : 96234045171
Option 2 ID : 96234045169
Option 3 ID : 96234045172
Option 4 ID : 96234045170
Status : Answered
Chosen Option : 1

Q.2
1 Reflection of point $(-2, -6)$ on the Y-axis is:

- Ans 1. $(-2, 6)$
 2. $(2, 6)$
 3. $(-6, -2)$
 4. $(2, -6)$

Question ID : 96234011263
Option 1 ID : 96234045049
Option 2 ID : 96234045050
Option 3 ID : 96234045051
Option 4 ID : 96234045052
Status : Not Answered
Chosen Option : --

Q.2 A software program that has been developed to harm other computers is called a/an _____.

2

Ans 1. operating system

2. server

3. malware

4. LAN

Question ID : 96234011232

Option 1 ID : 96234044926

Option 2 ID : 96234044927

Option 3 ID : 96234044925

Option 4 ID : 96234044928

Status : Answered

Chosen Option : 3

Q.2 Name the scientist who discovered bacteria.

3

Ans 1. Eugen Goldstein

2. James Chadwick

3. AV Leeuwenhoek

4. Robert Koch

Question ID : 96234011203

Option 1 ID : 96234044811

Option 2 ID : 96234044810

Option 3 ID : 96234044812

Option 4 ID : 96234044809

Status : Answered

Chosen Option : 4

Q.2 A wire of length l and radius r has a resistance R . The resistance of another wire made of the same material but having half its length and half its radius will be ____.

4

Ans 1. $4R$

2. $R/2$

3. R

4. $2R$

Question ID : 96234011247

Option 1 ID : 96234044988

Option 2 ID : 96234044985

Option 3 ID : 96234044986

Option 4 ID : 96234044987

Status : Answered

Chosen Option : 2

Q.2 $\sec 45^\circ - \tan 60^\circ = ?$

5

Ans 1. $-\sqrt{3} - \sqrt{2}$

2. $\frac{\sqrt{3}}{2}$

✓ 3. $-\sqrt{3} + \sqrt{2}$

✗ 4. $\sqrt{3} + \sqrt{2}$

Question ID : 96234011265

Option 1 ID : 96234045060

Option 2 ID : 96234045059

Option 3 ID : 96234045058

Option 4 ID : 96234045057

Status : Not Answered

Chosen Option : --

Q.2 यदि किसी पिंड का विशिष्ट गुरुत्वाकर्षण 1 से कम है, तो यह _____ में/पर तैरने लगेगा।

Ans ✗ 1. पारा (मरकरी)

✗ 2. हवा

✓ 3. पानी

✗ 4. द्रव

Question ID : 96234011218

Option 1 ID : 96234044869

Option 2 ID : 96234044870

Option 3 ID : 96234044871

Option 4 ID : 96234044872

Status : Not Attempted and Marked For Review

Chosen Option : --

Q.2 The Ajanta Caves in Maharashtra feature paintings and sculptures that depict _____ tales?

Ans ✗ 1. Arabic

✓ 2. Buddhist

✗ 3. Maratha

✗ 4. Islamic

Question ID : 96234011205

Option 1 ID : 96234044820

Option 2 ID : 96234044818

Option 3 ID : 96234044817

Option 4 ID : 96234044819

Status : Answered

Chosen Option : 2

Q.2 The abbreviation AC in an engineering drawing stands for _____.

Ans ✗ 1. Air Conditioning

✗ 2. Aerial Cut

✓ 3. Across Corners

✗ 4. Attached Circle

Question ID : 96234011222

Option 1 ID : 96234044886

Option 2 ID : 96234044887



Teachingninja.in

Option 3 ID : 96234044885
Option 4 ID : 96234044888
Status : Not Answered
Chosen Option : --

Q.2
9 If $x = \sqrt{125} \times \sqrt{30} \times \sqrt{6}$, then x is equal to:

- Ans
- 1. 125
 - 2. 175
 - 3. 136
 - 4. 150

Question ID : 96234011272
Option 1 ID : 96234045085
Option 2 ID : 96234045087
Option 3 ID : 96234045088
Option 4 ID : 96234045086
Status : Not Answered
Chosen Option : --

Q.3
0 What is the curved surface area of a hemisphere whose radius is 7 cm? (take $\pi = 22/7$)

- Ans
- 1. 924 cm²
 - 2. 616 cm²
 - 3. 154 cm²
 - 4. 308 cm²

Question ID : 96234011258
Option 1 ID : 96234045031
Option 2 ID : 96234045029
Option 3 ID : 96234045032
Option 4 ID : 96234045030
Status : Answered
Chosen Option : 4

Q.3
1 A 4-digit number 1xy7 is divisible by 11. What is the value of x-y?

- Ans
- 1. - 6
 - 2. - 4
 - 3. - 2
 - 4. - 8

Question ID : 96234011251
Option 1 ID : 96234045001
Option 2 ID : 96234045002
Option 3 ID : 96234045003
Option 4 ID : 96234045004
Status : Answered
Chosen Option : 2

Q.3
2 गिरती हुई वस्तुओं से अपने _____ की सुरक्षा के लिए निर्दिष्ट क्षेत्रों में सेफ्टी बूट या जूते पहनने चाहिए।

- Ans
- 1. आंख
 - 2. कान
 - 3. पैर के पंजे
 - 4. सिर

Question ID : 96234011230
Option 1 ID : 96234044918
Option 2 ID : 96234044917
Option 3 ID : 96234044919
Option 4 ID : 96234044920
Status : Answered
Chosen Option : 3

Q.3 A salesperson starts from his office and drives 2 km east, then turns north and drives 7 km, then turns to his right and drives 6 km, then turns south and drives 7 km. Where is he now with respect to his starting position?

- Ans
- 1. 8 km east
 - 2. 8 km west
 - 3. 4 km east
 - 4. 4 km west

Question ID : 96234011297
Option 1 ID : 96234045185
Option 2 ID : 96234045186
Option 3 ID : 96234045187
Option 4 ID : 96234045188
Status : Answered
Chosen Option : 1

Q.3 Kuchipudi has its roots in which Indian State?

- Ans
- 1. Kerala
 - 2. Andhra Pradesh
 - 3. Arunachal Pradesh
 - 4. Himachal Pradesh

Question ID : 96234011210
Option 1 ID : 96234044839
Option 2 ID : 96234044838
Option 3 ID : 96234044837
Option 4 ID : 96234044840
Status : Answered
Chosen Option : 2

Q.3 What is the unit's digit in $3^{66} \times 6^{41} \times 7^{53}$

- Ans
- 1. 8
 - 2. 6
 - 3. 7
 - 4. 3

Question ID : 96234011230



Option 1 ID : 96234045005
Option 2 ID : 96234045007
Option 3 ID : 96234045006
Option 4 ID : 96234045008
Status : Answered
Chosen Option : 1

Q.3 Given below are two statements, followed by two conclusions, I and II. You have to consider the statements to be true even if they seem to be at variance from commonly known facts. You have to decide which of the given conclusions, if any, follow(s) from the given statements.

Statement 1: No quadrilaterals are polygons.
Statement 2: All polygons are rhombuses.

Conclusion I: Some rhombuses are quadrilaterals.
Conclusion II: Some rhombuses are polygons.

- Ans 1. Only conclusion II follows
 2. Both I and II follow
 3. Neither I nor II follows
 4. Only conclusion I follows

Question ID : 96234011285
Option 1 ID : 96234045138
Option 2 ID : 96234045139
Option 3 ID : 96234045140
Option 4 ID : 96234045137
Status : Answered
Chosen Option : 1

Q.3 A brass rod (thermal conductivity 109 J/s m K) has an area of cross section 0.04 m^2 and length 20 cm . If the two end of the rod are maintained at a temperature difference of 200°C , the rate of heat flow through the rod is _____.

- Ans 1. 5.80 kJ/s
 2. 3.42 kJ/s
 3. 2.32 kJ/s
 4. 4.36 kJ/s

Question ID : 96234011240
Option 1 ID : 96234044960
Option 2 ID : 96234044958
Option 3 ID : 96234044957
Option 4 ID : 96234044959
Status : Not Answered
Chosen Option : --

Q.3 Velocity ratio of simple machine is the ratio of distance travelled by the _____ to the distance travelled by the _____ in the machine.

- Ans 1. load; effort
 2. effort; load
 3. effort; effort
 4. load; load

Question ID : 96234011234
Option 1 ID : 96234044934
Option 2 ID : 96234044933

Option 3 ID : 96234044935
Option 4 ID : 96234044936
Status : Answered
Chosen Option : 1

Q.3 _____ protection must be worn whenever noise levels exceed the noise exposure standard.

- Ans
- 1. Foot
 - 2. Hearing
 - 3. Eye
 - 4. Head

Question ID : 96234011231
Option 1 ID : 96234044923
Option 2 ID : 96234044921
Option 3 ID : 96234044922
Option 4 ID : 96234044924
Status : Answered
Chosen Option : 2

Q.4 It is mainly due to the gravitational effect of the _____ on the rotating earth that the level of water in the sea rises and falls.

- Ans
- 1. Sun
 - 2. Moon
 - 3. Venus
 - 4. Mercury

Question ID : 96234011213
Option 1 ID : 96234044849
Option 2 ID : 96234044852
Option 3 ID : 96234044850
Option 4 ID : 96234044851
Status : Answered
Chosen Option : 2

Q.4 Tap M and N can together fill a cistern in $48/13$ minutes. N alone can fill it in 6 minutes. How much time will M alone take to fill the cistern?

- Ans
- 1. 8.6 minutes
 - 2. 9 minutes
 - 3. 9.6 minutes
 - 4. 9.4 minutes

Question ID : 96234011268
Option 1 ID : 96234045072
Option 2 ID : 96234045071
Option 3 ID : 96234045069
Option 4 ID : 96234045070
Status : Not Attempted and Marked For Review
Chosen Option : --

Q.4 What is the work that needs to be done to increase the speed of a 1 kg ball from 2 m/s to 4 m/s?

- Ans
- 1. 10 J
 - 2. 8 J
 - 3. 12 J
 - 4. 6 J

Question ID : 96234011215
Option 1 ID : 96234044859
Option 2 ID : 96234044858
Option 3 ID : 96234044860
Option 4 ID : 96234044857
Status : **Not Attempted and Marked For Review**
Chosen Option : --

Q.4 Select the option that is related to the third number in the same way as the second number is related to the first number.

3
-9/11 : 11/9 :: 13/2 : ?

- Ans
- 1. -2/13
 - 2. -7/3
 - 3. 2/13
 - 4. 3/7

Question ID : 96234011277
Option 1 ID : 96234045108
Option 2 ID : 96234045107
Option 3 ID : 96234045105
Option 4 ID : 96234045106
Status : **Not Answered**
Chosen Option : --

Q.4 X और Y की उम्र का अनुपात 4 : 7 है। तीन वर्ष पहले, उनकी उम्र का अनुपात 1 : 2 था। उनकी वर्तमान उम्र में कितना अंतर (Y - X) है?

- Ans
- 1. 3
 - 2. 6
 - 3. 9
 - 4. 7.5

Question ID : 96234011275
Option 1 ID : 96234045097
Option 2 ID : 96234045098
Option 3 ID : 96234045100
Option 4 ID : 96234045099
Status : **Answered**
Chosen Option : 3

Q.4 How many medals did India win in Rio Olympics, 2016?

- 5
Ans
- 1. 3
 - 2. 4
 - 3. 5
 - 4. 2

Question ID : 96234011201
Option 1 ID : 96234044803
Option 2 ID : 96234044801
Option 3 ID : 96234044802
Option 4 ID : 96234044804
Status : Not Answered
Chosen Option : --

Q.4
6 If $\sin \Theta = 15/17$, then $\cot \Theta = ?$

Ans

1. $\frac{8}{15}$
 2. $\frac{15}{8}$
 3. $\frac{17}{15}$
 4. $\frac{8}{17}$

Question ID : 96234011266
Option 1 ID : 96234045062
Option 2 ID : 96234045061
Option 3 ID : 96234045064
Option 4 ID : 96234045063
Status : Not Answered
Chosen Option : --

Q.4
7 If a machine overcomes a load 'L' and the distance travelled by the load is 'Ld', the work done by the load will be _____.

Ans

1. $\frac{Ld}{L}$
 2. $\frac{1}{L \times Ld}$
 3. $L \times Ld$
 4. $\frac{L}{Ld}$

Question ID : 96234011235
Option 1 ID : 96234044939
Option 2 ID : 96234044938
Option 3 ID : 96234044940
Option 4 ID : 96234044937
Status : Answered
Chosen Option : 3

Q.4
8 Who was the first governor of the Reserve Bank of India?

Ans

1. HVR Iyengar
 2. KR Puri
 3. Sir Osborne A Smith
 4. Sir James Braid Taylor

Question ID : 96234011209
Option 1 ID : 96234044836
Option 2 ID : 96234044833
Option 3 ID : 96234044834
Option 4 ID : 96234044835
Status : Answered
Chosen Option : 3

Q.4 Given below is a question, followed by two arguments, I and II. You have to decide which of the given arguments, if any, is a strong argument, with respect to the question.

Question: Should advertisements be banned on television?

Argument I : Yes, advertisements are immoral.

Argument II : No, advertisements bring in revenue which helps reduce cost for viewers.

- Ans
- 1. Only argument I is strong.
 - 2. Both I and II are strong.
 - 3. Only argument II is strong.
 - 4. Neither I nor II is strong.

Question ID : 96234011300
Option 1 ID : 96234045197
Option 2 ID : 96234045199
Option 3 ID : 96234045198
Option 4 ID : 96234045200
Status : Answered
Chosen Option : 4

Q.5 A and B can do a work in 15 days, B and C can do the work in 20 days and A and C can do the work in 10 days. In how many days will they together complete the work?

- Ans
- 1. 10.71 days
 - 2. 10.91 days
 - 3. 10.67 days
 - 4. 9.23 days

Question ID : 96234011273
Option 1 ID : 96234045090
Option 2 ID : 96234045092
Option 3 ID : 96234045089
Option 4 ID : 96234045091
Status : Answered
Chosen Option : 4

Q.5 Two resistors of $2\ \Omega$ and $6\ \Omega$ are connected in series and this combination is connected across a 12 V battery. Find the power supplied by the battery.

- Ans
- 1. 16 W
 - 2. 14 W
 - 3. 18 W
 - 4. 10 W

Question ID : 96234011250
Option 1 ID : 96234044999

Option 2 ID : 96234044998
Option 3 ID : 96234045000
Option 4 ID : 96234044997
Status : Answered
Chosen Option : 3

Q.5 If G + H means G is daughter of H, G - H means G is sister H and G * H means G is husband of H, which of the following shows that I is the daughter of H?

- Ans
- 1. $I + J - F * H$
 - 2. $I - J + F * H$
 - 3. $I * J - F + H$
 - 4. $I - J * F + H$

Question ID : 96234011284
Option 1 ID : 96234045135
Option 2 ID : 96234045134
Option 3 ID : 96234045133
Option 4 ID : 96234045136
Status : Answered
Chosen Option : 2

Q.5 Two resistors, one of $12\ \Omega$ and the other of $24\ \Omega$ are connected in parallel. This combination is connected in series with a $22\ \Omega$ resistor and a $12\ \text{V}$ battery. The current in the $12\ \Omega$ resistor is _____.

- Ans
- 1. $(4/15)\ \text{A}$
 - 2. $(8/15)\ \text{A}$
 - 3. $(2/15)\ \text{A}$
 - 4. $(6/15)\ \text{A}$

Question ID : 96234011241
Option 1 ID : 96234044962
Option 2 ID : 96234044964
Option 3 ID : 96234044961
Option 4 ID : 96234044963
Status : Answered
Chosen Option : 4

Q.5 If a body is NOT homogeneous, then its density is a function of its _____.

- Ans
- 1. velocity
 - 2. pressure
 - 3. acceleration
 - 4. position

Question ID : 96234011217
Option 1 ID : 96234044866
Option 2 ID : 96234044868
Option 3 ID : 96234044867
Option 4 ID : 96234044865
Status : Not Answered
Chosen Option : --

Q.5 A can do $\frac{2}{5}$ of a work in 10 days. B can do $\frac{1}{2}$ of the same work in 10 days. They worked together for 5 days and then A left. In how many days will B finish the remaining work?

- Ans
- 1. 8
 - 2. 11
 - 3. 10
 - 4. 9

Question ID : 96234011274

Option 1 ID : 96234045096

Option 2 ID : 96234045093

Option 3 ID : 96234045094

Option 4 ID : 96234045095

Status : Answered

Chosen Option : 2

Q.5 एक मशीन ₹1,500 में खरीदी गई और उसे ठीक करवाने में ₹100 और खर्च हुए। उसे कितने मूल्य पर बेचा जाए कि 25% का लाभ प्राप्त हो?

- Ans
- 1. ₹1,960
 - 2. ₹1,920
 - 3. ₹2,000
 - 4. ₹2,040

Question ID : 96234011255

Option 1 ID : 96234045018

Option 2 ID : 96234045017

Option 3 ID : 96234045019

Option 4 ID : 96234045020

Status : Answered

Chosen Option : 3

Q.5 Which two signs should be interchanged to make the given equation correct?

$$9 \div 3 + 8 \times 2 - 15 = 2$$

- Ans
- 1. \times and $-$
 - 2. \div and $-$
 - 3. $+$ and $-$
 - 4. $+$ and \times

Question ID : 96234011282

Option 1 ID : 96234045128

Option 2 ID : 96234045127

Option 3 ID : 96234045126

Option 4 ID : 96234045125

Status : Answered

Chosen Option : 3

Q.5 नीचे दिए गए शब्दों को सुलझाएं और असंगत को चुनें।

- Ans
- 1. ERTIG
 - 2. FLOW

3. ILNO

4. WCO

Question ID : 96234011287

Option 1 ID : 96234045146

Option 2 ID : 96234045148

Option 3 ID : 96234045145

Option 4 ID : 96234045147

Status : Not Attempted and Marked For Review

Chosen Option : --

Q.5
9 Name the painter of the famous painting, 'Mahishasura'.

Ans 1. Tyeb Mehta

2. MF Hussain

3. Raja Ravi Verma

4. Amrita Sher-Gil

Question ID : 96234011204

Option 1 ID : 96234044816

Option 2 ID : 96234044815

Option 3 ID : 96234044814

Option 4 ID : 96234044813

Status : Answered

Chosen Option : 2

Q.6
0 A series is given, with one term missing. Choose the correct alternative from the given ones that will complete the series.
OOOOX, OOOOXX, OOOXXX, OOXXXX, ?

Ans 1. OXXXXX

2. OOXXXX

3. OOXXXXXX

4. XXXXXXX

Question ID : 96234011278

Option 1 ID : 96234045109

Option 2 ID : 96234045112

Option 3 ID : 96234045110

Option 4 ID : 96234045111

Status : Answered

Chosen Option : 1

Q.6
1 If the width of a standard engineering drawing sheet is 841 mm, then its length would be _____ mm.

Ans 1. 1000

2. 1250

3. 1216

4. 1189

Question ID : 96234011223

Option 1 ID : 96234044889

Option 2 ID : 96234044891

Option 3 ID : 96234044890



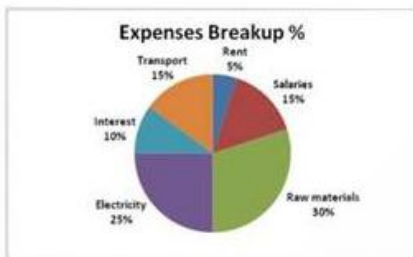
Option 4 ID : 96234044892
Status : Answered
Chosen Option : 4

Q.6
2 The effort in a class 1 lever is in _____ direction(s).

- Ans
- 1. three
 - 2. multiple
 - 3. one
 - 4. two

Question ID : 96234011237
Option 1 ID : 96234044947
Option 2 ID : 96234044945
Option 3 ID : 96234044948
Option 4 ID : 96234044946
Status : Answered
Chosen Option : 3

Q.6
3 The pie chart shows the breakup in percentages of the various expenses of a Company. Study the diagram and answer the following question.



What is the interest expense if total expenses are ₹25,000 approximately?

- Ans
- 1. ₹5,000
 - 2. ₹2,500
 - 3. ₹1,800
 - 4. ₹9,000

Question ID : 96234011291
Option 1 ID : 96234045162
Option 2 ID : 96234045161
Option 3 ID : 96234045164
Option 4 ID : 96234045163
Status : Answered
Chosen Option : 2

Q.6
4 You are given a question and two statements. Identify which of the statements is/are necessary/sufficient to answer the question.

Question: What was the discount percent offered on the soap by the store?

Statements:

- I) The store is giving 1 soap free on purchase of three.
- II) ₹10 discount is offered on purchase of soap worth ₹36.

Ans

1. I alone is sufficient while II alone is not sufficient
2. Either I or II is sufficient
3. II alone is sufficient while I alone is not sufficient
4. Neither I nor II is sufficient

Question ID : 96234011290

Option 1 ID : 96234045157

Option 2 ID : 96234045159

Option 3 ID : 96234045158

Option 4 ID : 96234045160

Status : Answered

Chosen Option : 3

Q.6 Given below is a statement followed by two assumptions numbered I and II. You have to decide which of the assumptions is/are implicit in the statement.

Statement: The human body produces Vitamin D when exposed to sunlight.

Assumption I: The human body will have Vitamin D even if it is not consumed via food.

Assumption II: A large portion of the global population suffers from Vitamin D deficiency.

- Ans 1. Only assumption I is implicit
2. Both I and II are implicit
3. Neither I nor II is implicit
4. Only assumption II is implicit

Question ID : 96234011299

Option 1 ID : 96234045193

Option 2 ID : 96234045195

Option 3 ID : 96234045196

Option 4 ID : 96234045194

Status : Marked For Review

Chosen Option : 3

Q.6 निम्नलिखित में कौन उस सैद्धांतिक निश्चित तल, अक्ष या बिंदु स्थान की व्याख्या करता है, जो जी.डी. (GD) और T या आयमी सहयता को भी संदर्भित करता है?

- Ans 1. तथ्य (डैटम)
2. अनुभाग (सेक्शन)
3. फ्लैज
4. फ्रेम

Question ID : 96234011220

Option 1 ID : 96234044877

Option 2 ID : 96234044878

Option 3 ID : 96234044879

Option 4 ID : 96234044880

Status : Not Attempted and Marked For Review

Chosen Option : --

Q.6 A body starts from rest. Its displacement is proportional to _____ when its acceleration is constant.

7

- Ans 1. velocity
2. work

3. time

4. time squared

Question ID : 96234011243

Option 1 ID : 96234044972

Option 2 ID : 96234044971

Option 3 ID : 96234044970

Option 4 ID : 96234044969

Status : Answered

Chosen Option : 3

Q.6 एक संख्या 50 से उतनी ही अधिक है जितनी 84 से कम है। वह संख्या क्या है?

Ans 1. 66

2. 67

3. 68

4. 65

Question ID : 96234011261

Option 1 ID : 96234045042

Option 2 ID : 96234045043

Option 3 ID : 96234045044

Option 4 ID : 96234045041

Status : Answered

Chosen Option : 2

Q.6 What is the distance between the points (4, 3) and (3, -2)?

Ans 1. 5

2. $\sqrt{26}$

3. 6

4. $\sqrt{24}$

Question ID : 96234011264

Option 1 ID : 96234045055

Option 2 ID : 96234045053

Option 3 ID : 96234045056

Option 4 ID : 96234045054

Status : Not Answered

Chosen Option : --

Q.7 दो प्रतिरोधकों, 10 Ω और 20 Ω को श्रृंखला (सीरीज) में जोड़ा जाता है और इस संयोजन में वोल्टेज आपूर्ति 30 V दी जाती है। 10 Ω वाले प्रतिरोधक का वोल्टेज ज्ञात करें।

Ans 1. 10 V

2. 20 V

3. 15 V

4. 5 V

Question ID : 96234011248

Option 1 ID : 96234044990

Option 2 ID : 96234044991

Option 3 ID : 96234044992

Option 4 ID : 96234044993

Status : Not Answered

Chosen Option : --



Option 3 ID : 96234044992
Option 4 ID : 96234044989
Status : Not Answered
Chosen Option : --

Q.7
1 Which Indian cricketer received the Padma Bhushan in 2018?

- Ans
- 1. Virat Kohli
 - 2. Saurav Ganguly
 - 3. MS Dhoni
 - 4. Sachin Tendulkar

Question ID : 96234011206
Option 1 ID : 96234044821
Option 2 ID : 96234044824
Option 3 ID : 96234044822
Option 4 ID : 96234044823
Status : Answered
Chosen Option : 1

Q.7
2 The effort applied to move a load is 15 units and the machine advantage is observed to be 3. Find the load.

- Ans
- 1. 3 units
 - 2. 5 units
 - 3. 15 units
 - 4. 45 units

Question ID : 96234011236
Option 1 ID : 96234044944
Option 2 ID : 96234044942
Option 3 ID : 96234044943
Option 4 ID : 96234044941
Status : Answered
Chosen Option : 4

Q.7
3 What is the least number which when doubled is perfectly divisible by 7, 12 and 15?

- Ans
- 1. 214
 - 2. 215
 - 3. 220
 - 4. 210

Question ID : 96234011257
Option 1 ID : 96234045028
Option 2 ID : 96234045027
Option 3 ID : 96234045026
Option 4 ID : 96234045025
Status : Answered
Chosen Option : 4

Q.7
4 A got ₹80 as his share of profit where the total profit was ₹240 and the ratio of profit distribution between A and B was x :

2. What is the value of x?
Ans

1. 4
 2. 5
 3. 1
 4. 2

Question ID : 96234011269
Option 1 ID : 96234045075
Option 2 ID : 96234045076
Option 3 ID : 96234045073
Option 4 ID : 96234045074
Status : Answered
Chosen Option : 3

Q.7 A motorcycle travelled 1000 m at 36 km/hr. Find the time (in seconds) taken by the motorcycle to cover this distance.

5

- Ans 1. 400
 2. 300
 3. 100
 4. 200

Question ID : 96234011245
Option 1 ID : 96234044980
Option 2 ID : 96234044979
Option 3 ID : 96234044977
Option 4 ID : 96234044978
Status : Answered
Chosen Option : 3

Q.7 वह विकल्प चुनिए जो तीसरे पद से उसी प्रकार संबंधित हो जिस प्रकार दूसरा पद पहले पद से है।
6

लंबा: छोटा :: खुश : ?

- Ans 1. मुस्कराहट
 2. भावना
 3. दुखी
 4. प्रसन्न

Question ID : 96234011276
Option 1 ID : 96234045103
Option 2 ID : 96234045104
Option 3 ID : 96234045101
Option 4 ID : 96234045102
Status : Answered
Chosen Option : 3

Q.7 I, J, K and L are sitting in a row. L and I are sitting next to each other and I and K are at the ends. Who is sitting next to J?
7

- Ans 1. L and I
 2. Only L
 3. K and L

4. Only K

Question ID : 96234011294
Option 1 ID : 96234045173
Option 2 ID : 96234045174
Option 3 ID : 96234045175
Option 4 ID : 96234045176
Status : Answered
Chosen Option : 4

Q.7
8 Identify the material having high coefficient of volume expansion.

- Ans 1. Alcohol
 2. Brass
 3. Glass
 4. Water

Question ID : 96234011225
Option 1 ID : 96234044897
Option 2 ID : 96234044900
Option 3 ID : 96234044899
Option 4 ID : 96234044898
Status : Answered
Chosen Option : 2

Q.7
9 Identify the material having low coefficient of volume expansion

- Ans 1. Brass
 2. Mercury
 3. Iron
 4. Aluminium

Question ID : 96234011226
Option 1 ID : 96234044902
Option 2 ID : 96234044901
Option 3 ID : 96234044903
Option 4 ID : 96234044904
Status : Answered
Chosen Option : 2

Q.8
0 Which one of these is a harvest festival?

- Ans 1. Onam
 2. Janmashtami
 3. Deepawali
 4. Teej

Question ID : 96234011202
Option 1 ID : 96234044806
Option 2 ID : 96234044805
Option 3 ID : 96234044807
Option 4 ID : 96234044808

Status : Answered
Chosen Option : 1

Q.8
1 What is 80% of 50% of 90?

- Ans
- 1. 34
 - 2. 30
 - 3. 32
 - 4. 36

Question ID : 96234011270
Option 1 ID : 96234045079
Option 2 ID : 96234045077
Option 3 ID : 96234045078
Option 4 ID : 96234045080
Status : Answered
Chosen Option : 4

Q.8
2 If C S D means C is daughter of D, C & D means C is mother of D and C % D means C is son of D, then what does W S X & Y % Z mean?

- Ans
- 1. Z is father of W
 - 2. Z is mother of W
 - 3. Z is wife of W
 - 4. Z is daughter of W

Question ID : 96234011283
Option 1 ID : 96234045130
Option 2 ID : 96234045131
Option 3 ID : 96234045129
Option 4 ID : 96234045132
Status : Answered
Chosen Option : 1

Q.8
3 What is the median of 8, 5, 7, 9, 11, 6, 10 ?

- Ans
- 1. 10
 - 2. 9
 - 3. 7
 - 4. 8

Question ID : 96234011271
Option 1 ID : 96234045084
Option 2 ID : 96234045083
Option 3 ID : 96234045081
Option 4 ID : 96234045082
Status : Answered
Chosen Option : 4

Q.8
4 If $5050 \times 0.5x = 25250$, then $2505 \div x^2 = ?$

- Ans
- 1. 25.05
 - 2. 2.505

3. 0.2505

4. 250.5

Question ID : 96234011253

Option 1 ID : 96234045010

Option 2 ID : 96234045009

Option 3 ID : 96234045011

Option 4 ID : 96234045012

Status : Not Answered

Chosen Option : --

Q.8
5 A car covers 400 m in 20 seconds. Find the average speed (in km/hr) of the car.

Ans 1. 108

2. 36

3. 72

4. 124

Question ID : 96234011244

Option 1 ID : 96234044975

Option 2 ID : 96234044973

Option 3 ID : 96234044974

Option 4 ID : 96234044976

Status : Answered

Chosen Option : 3

Q.8
6 In engineering drawing, the letters LH signifies _____.

Ans 1. Low Heat

2. Level Hide

3. Limit of Height

4. Left Hand

Question ID : 96234011224

Option 1 ID : 96234044893

Option 2 ID : 96234044894

Option 3 ID : 96234044895

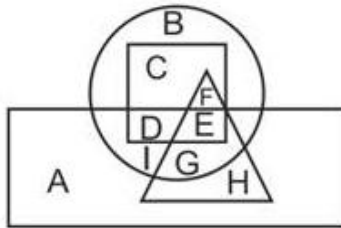
Option 4 ID : 96234044896

Status : Answered

Chosen Option : 3

Q.8
7

In the following figure, square represents Chinese, triangle represents dancers, circle represents male and rectangle represents architects. Which set of letters represents dancers who are male?



- Ans
- 1. DEIG
 - 2. GEF
 - 3. IGH
 - 4. DEF

Question ID : 96234011288

Option 1 ID : 96234045149

Option 2 ID : 96234045150

Option 3 ID : 96234045152

Option 4 ID : 96234045151

Status : Answered

Chosen Option : 2

Q.8 An airplane flies at the speed of 50 m/s. How much distance (in km) will it cover in a flight of 5 hours?

8

- Ans
- 1. 900
 - 2. 895
 - 3. 850
 - 4. 880

Question ID : 96234011259

Option 1 ID : 96234045036

Option 2 ID : 96234045035

Option 3 ID : 96234045033

Option 4 ID : 96234045034

Status : Answered

Chosen Option : 1

Q.8 एक पतलून खरीदने में ₹2,000 खर्च हुए। खर्च हुए पैसे शशि के पास के कुल पैसे का 2/5वां भाग थे। उसके पास कुल कितने पैसे थे?

9

- Ans
- 1. ₹5,000
 - 2. ₹4,250
 - 3. ₹4,750
 - 4. ₹4,000

Question ID : 96234011256

Option 1 ID : 96234045024

Option 2 ID : 96234045022



Teachingninja.in

Option 3 ID : 96234045023
Option 4 ID : 96234045021
Status : Answered
Chosen Option : 1

Q.9 Pipes A and B can fill a tank in 12 minutes and 16 minutes respectively. Both A and B are opened for 4 minutes and then A is closed. How much extra time will B take to fill the tank completely?

- Ans
- 1. 6 minutes
 - 2. $\frac{20}{3}$ minutes
 - 3. 7 minutes
 - 4. $\frac{21}{4}$ minutes

Question ID : 96234011267
Option 1 ID : 96234045067
Option 2 ID : 96234045066
Option 3 ID : 96234045065
Option 4 ID : 96234045068
Status : Answered
Chosen Option : 2

Q.9 If, '+' represents '×', '-' represents '+', '×' represents '-' and '÷' represents '+', then find the value of the following expression.

1 $9 \times 3 + 6 \div 2 = ?$

- Ans
- 1. 12
 - 2. 16
 - 3. 20
 - 4. 10

Question ID : 96234011281
Option 1 ID : 96234045122
Option 2 ID : 96234045123
Option 3 ID : 96234045124
Option 4 ID : 96234045121
Status : Answered
Chosen Option : 2

Q.9 An object starts from rest at $x = 0$ m and moves with a constant acceleration of 1.6 m/s^2 along the x-axis. During its journey from $x = 12.8$ m to $x = 20.0$ m, its average velocity will be _____.

- 2
- Ans
- 1. 2.4 m/s
 - 2. 7.2 m/s
 - 3. 3.6 m/s
 - 4. 8.8 m/s

Question ID : 96234011238
Option 1 ID : 96234044949
Option 2 ID : 96234044951
Option 3 ID : 96234044950
Option 4 ID : 96234044952
Status : Not Attempted and Marked For Review
Chosen Option : --

Q.9 एक वस्तु को ₹12,000 में बेचा गया। यदि 15% छूट दी जाए, तो 2% का लाभ होता है। वस्तु का क्रय मूल्य क्या था?

- Ans
- 1. ₹10,200
 - 2. ₹10,800
 - 3. ₹11,000
 - 4. ₹10,000

Question ID : 96234011254

Option 1 ID : 96234045016

Option 2 ID : 96234045015

Option 3 ID : 96234045013

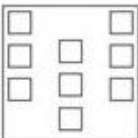

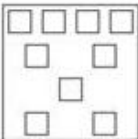
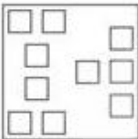
Option 4 ID : 96234045014

Status : Answered

Chosen Option : 4

Q.9 Choose the figure that is different from the rest.

Ans

- 1. 
- 2. 
- 3. 
- 4. 

Question ID : 96234011295

Option 1 ID : 96234045177

Option 2 ID : 96234045178

Option 3 ID : 96234045179

Option 4 ID : 96234045180

Status : Answered

Chosen Option : 4

Q.9 Two resistors of $2\ \Omega$ and $6\ \Omega$ are connected in series and this combination is connected across a 12 V battery. Find the current in the $6\ \Omega$ resistor.

- Ans
- 1. 3.5 A
 - 2. 2.5 A
 - 3. 1.5 A
 - 4. 0.5 A

Question ID : 96234011249

Option 1 ID : 96234044996

Option 2 ID : 96234044995

Option 3 ID : 96234044994

Option 4 ID : 96234044993

Status : Answered

Chosen Option : 3

Q.9
6 Find the odd group of letters from the given alternatives.

Ans 1. VWX

2. EFG

3. PQR

4. HJL

Question ID : 96234011292

Option 1 ID : 96234045167

Option 2 ID : 96234045168

Option 3 ID : 96234045165

Option 4 ID : 96234045166

Status : Answered

Chosen Option : 4

Q.9
7 The volume of a given amount of water _____ between 0°C to 4°C .

Ans 1. decreases

2. increases

3. remains constant

4. is zero

Question ID : 96234011216

Option 1 ID : 96234044861

Option 2 ID : 96234044864

Option 3 ID : 96234044862

Option 4 ID : 96234044863

Status : Answered

Chosen Option : 1

Q.9
8 A cylindrical wire of length L and radius r has a resistance of R . The resistance of another wire of the same material but thrice its length and one-third its radius will be _____.

Ans 1. R

2. $3R$

3. $9R$

4. $27R$

Question ID : 96234011242

Option 1 ID : 96234044968

Option 2 ID : 96234044967

Option 3 ID : 96234044966

Option 4 ID : 96234044965

Status : Answered

Chosen Option : 3





Q.9 RK Narayan is famous for his book _____.

- Ans
- 1. A Suitable Boy
 - 2. Two Lives
 - 3. The Toom on the Roof
 - 4. Malgudi Days

Question ID : 96234011207
Option 1 ID : 96234044828
Option 2 ID : 96234044826
Option 3 ID : 96234044825
Option 4 ID : 96234044827
Status : Answered
Chosen Option : 4

Q.1 Choose the figure that is different from the rest.

Ans

- 1. 
- 2. 
- 3. 
- 4. 

Question ID : 96234011296
Option 1 ID : 96234045184
Option 2 ID : 96234045183
Option 3 ID : 96234045182
Option 4 ID : 96234045181
Status : Answered
Chosen Option : 3

Section : Electronics Mechanic

Q.1 Which category of instruments does an ohmmeter fall under?

- Ans
- 1. Moving resistance instrument
 - 2. Dynamometer instrument

- 3. Moving coil instrument
- 4. Moving iron instrument

Question ID : 96234011354
Option 1 ID : 96234045415
Option 2 ID : 96234045416
Option 3 ID : 96234045413
Option 4 ID : 96234045414
Status : Answered
Chosen Option : 1

Q.2 A Zener diode is used in _____ for voltage regulation.

- Ans
- 1. Forward Bias
 - 2. Short circuit
 - 3. Open circuit
 - 4. Reverse Bias

Question ID : 96234011321
Option 1 ID : 96234045281
Option 2 ID : 96234045284
Option 3 ID : 96234045283
Option 4 ID : 96234045282
Status : Answered
Chosen Option : 1

Q.3 Generally _____ is used to construct shift registers.

- Ans
- 1. D flip flop
 - 2. Half Adder
 - 3. Full adder
 - 4. Full Subtractor

Question ID : 96234011315
Option 1 ID : 96234045258
Option 2 ID : 96234045257
Option 3 ID : 96234045259
Option 4 ID : 96234045260
Status : Not Answered
Chosen Option : --

Q.4 Batteries that cannot be recharged and are produced for single use are called?

- Ans
- 1. Super Charged Batteries
 - 2. Lead Acid Batteries
 - 3. Primary Batteries
 - 4. Secondary Batteries

Question ID : 96234011302
Option 1 ID : 96234045206
Option 2 ID : 96234045208

Option 3 ID : 96234045207
Option 4 ID : 96234045205
Status : Answered
Chosen Option : 3

Q.5 _____ has a single input and multiple outputs.

- Ans 1. De multiplexer
 2. Decoder
 3. Full Adder
 4. Multiplexer

Question ID : 96234011346
Option 1 ID : 96234045382
Option 2 ID : 96234045384
Option 3 ID : 96234045381
Option 4 ID : 96234045383
Status : Answered
Chosen Option : 1

Q.6 जब बैटरियों को श्रेणीक्रम में जोड़ा जाता है, तो क्या होता है?

- Ans 1. धारिता दोगुनी हो जाती है, वोल्टेज रेटिंग समान रहती है।
 2.
वोल्टेज दोगुना हो जाता है, धारिता रेटिंग दोगुनी हो जाती है।
 3. वोल्टेज समान रहता है, धारिता समान रहती है।
 4. वोल्टेज दोगुना हो जाता है, धारिता रेटिंग समान रहती है।

Question ID : 96234011307
Option 1 ID : 96234045226
Option 2 ID : 96234045227
Option 3 ID : 96234045228
Option 4 ID : 96234045225
Status : Answered
Chosen Option : 4

Q.7 Carry input is present in which of the following?

- Ans 1. Subtractor
 2. Comparator
 3. Half Adder circuit
 4. Full Adder circuit

Question ID : 96234011309
Option 1 ID : 96234045236
Option 2 ID : 96234045235
Option 3 ID : 96234045234
Option 4 ID : 96234045233
Status : Answered

Chosen

Q.8 In a mercury cell, zinc-mercury amalgam is used as an anode and carbon is used as a cathode. A paste of _____ is used as an electrolyte.

- Ans
- 1. HgO
 - 2. LiFe
 - 3. H₂O
 - 4. H₂SO₄

Question ID : 96234011304
Option 1 ID : 96234045214
Option 2 ID : 96234045216
Option 3 ID : 96234045213
Option 4 ID : 96234045215
Status : Not Attempted and Marked For Review
Chosen Option : --

Q.9 The two coil windings of a transformer are _____.

- Ans
- 1. electrically and magnetically linked
 - 2. electrically and magnetically isolated
 - 3. electrically connected but magnetically isolated
 - 4. electrically isolated but magnetically linked

Question ID : 96234011328
Option 1 ID : 96234045312
Option 2 ID : 96234045310
Option 3 ID : 96234045311
Option 4 ID : 96234045309
Status : Marked For Review
Chosen Option : 4

Q.10 To measure Voltage, Current is passed through _____.

- Ans
- 1. a voltmeter
 - 2. a galvanometer
 - 3. a resistor
 - 4. an ammeter

Question ID : 96234011348
Option 1 ID : 96234045391
Option 2 ID : 96234045392
Option 3 ID : 96234045389
Option 4 ID : 96234045390
Status : Answered
Chosen Option : 1

Q.11 When a diode is switching from conducting state to blocking state, it has stored charge which needs to be discharged before, it blocks reverse current, this time required is known as _____.

- Ans
- 1. Forward Recovery Time

- 2. Reverse Recovery Time
- 3. Forward Conduction time
- 4. Reverse Conduction Time

Question ID : 96234011333
Option 1 ID : 96234045329
Option 2 ID : 96234045331
Option 3 ID : 96234045332
Option 4 ID : 96234045330
Status : Not Answered
Chosen Option : --

Q.1
2 Ideal regulated power supplies have _____ % voltage regulation

- Ans
- 1. 2
 - 2. 7
 - 3. 0
 - 4. 5

Question ID : 96234011320
Option 1 ID : 96234045279
Option 2 ID : 96234045280
Option 3 ID : 96234045278
Option 4 ID : 96234045277
Status : Not Attempted and Marked For Review
Chosen Option : --

Q.1
3 The evolution of cell phone standards are from 1G to 5G, what this G indicates?

- Ans
- 1. Gross
 - 2. Generation
 - 3. General
 - 4. Gap

Question ID : 96234011363
Option 1 ID : 96234045450
Option 2 ID : 96234045451
Option 3 ID : 96234045452
Option 4 ID : 96234045449
Status : Answered
Chosen Option : 2

Q.1
4 A digital multimeter can measure _____.

- Ans
- 1. voltage
 - 2. permeance
 - 3. inductance
 - 4. flux

Question ID : 96234011349
Option 1 ID : 96234045393

Option 2 ID : 96234045396
Option 3 ID : 96234045395
Option 4 ID : 96234045394
Status : Answered
Chosen Option : 1

Q.1
5 The output waveform of an integrator in a function generator is _____.

- Ans
- 1. Triangular wave
 - 2. Impulse wave
 - 3. Square wave
 - 4. Sine wave

Question ID : 96234011352
Option 1 ID : 96234045405
Option 2 ID : 96234045406
Option 3 ID : 96234045407
Option 4 ID : 96234045408
Status : Not Answered
Chosen Option : --

Q.1
6 What is the rating used to rate a Transformer?

- Ans
- 1. KV
 - 2. KVAR
 - 3. KVA
 - 4. KW

Question ID : 96234011330
Option 1 ID : 96234045320
Option 2 ID : 96234045318
Option 3 ID : 96234045319
Option 4 ID : 96234045317
Status : Answered
Chosen Option : 3

Q.1
7 Adder Circuit can be used as a Subtractor circuit by using _____.

- Ans
- 1. 1's / 2's Complement
 - 2. Grey code
 - 3. Binary Coded Decimal
 - 4. Comparator

Question ID : 96234011310
Option 1 ID : 96234045239
Option 2 ID : 96234045238
Option 3 ID : 96234045237
Option 4 ID : 96234045240
Status : Answered
Chosen Option : 1

Q.1
8 Which of the following diodes can be used as Voltage Regulator if used in reverse bias?

- Ans
- 1. Laser Diode
 - 2. Schottky Diode
 - 3. Zener Diode
 - 4. Varactor Diode

Question ID : 96234011335
Option 1 ID : 96234045338
Option 2 ID : 96234045337
Option 3 ID : 96234045340
Option 4 ID : 96234045339
Status : Answered
Chosen Option : 3

Q.1
9 Which one of the following is not a basic MOSFET device type?

- Ans
- 1. Enhancement P-channel MOSFET
 - 2. Depletion N-channel MOSFET
 - 3. Narrow P-channel MOSFET
 - 4. Enhancement N-channel MOSFET

Question ID : 96234011373
Option 1 ID : 96234045491
Option 2 ID : 96234045490
Option 3 ID : 96234045492
Option 4 ID : 96234045489
Status : Not Answered
Chosen Option : --

Q.2
0 Which one of the following instrument is used to measure the specific gravity (or relative density) of liquids?

- Ans
- 1. Multi-meter
 - 2. Hydrometer
 - 3. Galvanometer
 - 4. Thermometer

Question ID : 96234011306
Option 1 ID : 96234045224
Option 2 ID : 96234045223
Option 3 ID : 96234045222
Option 4 ID : 96234045221
Status : Answered
Chosen Option : 2

Q.2
1 In LCD TV, what is the full form of LCD?

- Ans
- 1. Liquid Crystal Display
 - 2. Light Controlled Display
 - 3. Light Controlled Diode

X 4. Liquid Crystal Diode

Question ID : 96234011366
Option 1 ID : 96234045462
Option 2 ID : 96234045464
Option 3 ID : 96234045461
Option 4 ID : 96234045463
Status : Answered
Chosen Option : 1

Q.2 The _____ is a device that is able to sense light levels and alter the current flowing between emitter and collector according to the level of light it receives.

- Ans
- X** 1. Resistor
 - ✓** 2. Phototransistor
 - X** 3. Power transistor
 - X** 4. IR LED

Question ID : 96234011338
Option 1 ID : 96234045350
Option 2 ID : 96234045351
Option 3 ID : 96234045352
Option 4 ID : 96234045349
Status : Answered
Chosen Option : 3

Q.2 The capability of a power supply to maintain constant voltage or current at the output despite change in supply's load is known as _____.

- Ans
- X** 1. Input Regulation
 - X** 2. Line Regulation
 - ✓** 3. Load Regulation
 - X** 4. Source Regulation

Question ID : 96234011322
Option 1 ID : 96234045286
Option 2 ID : 96234045287
Option 3 ID : 96234045288
Option 4 ID : 96234045285
Status : Not Answered
Chosen Option : --

Q.2 The IR LED sends out light with wavelengths _____ visible light.

- Ans
- X** 1. Parallel to the
 - X** 2. Shorter than
 - ✓** 3. Longer than
 - X** 4. Similar to the

Question ID : 96234011337
Option 1 ID : 96234045348
Option 2 ID : 96234045346
Option 3 ID : 96234045345

Option 4 ID : 96234045347
Status : Not Answered
Chosen Option : --

Q.2
5 Which one of the below is not the application of shift register?

- Ans
- 1. Serial to parallel
 - 2. Analog to Digital
 - 3. Parallel to serial
 - 4. Data storage

Question ID : 96234011358
Option 1 ID : 96234045429
Option 2 ID : 96234045431
Option 3 ID : 96234045430
Option 4 ID : 96234045432
Status : Answered
Chosen Option : 4

Q.2
6 Solar panels convert sun light into electricity based on the principle of _____.

- Ans
- 1. Electromagnetic radiation
 - 2. Photovoltaic effect
 - 3. Radio emission
 - 4. Heat conduction

Question ID : 96234011369
Option 1 ID : 96234045474
Option 2 ID : 96234045475
Option 3 ID : 96234045473
Option 4 ID : 96234045476
Status : Answered
Chosen Option : 2

Q.2
7 What is the long form of LVDT?

- Ans
- 1. Linear Voltage Defined Transformer
 - 2. Linear Variable Differential Transformer
 - 3. Low Voltage Differential Transducer
 - 4. Low Variable Defined Transducer

Question ID : 96234011362
Option 1 ID : 96234045447
Option 2 ID : 96234045445
Option 3 ID : 96234045448
Option 4 ID : 96234045446
Status : Answered
Chosen Option : 2

Q.2
8 Lead acid batteries consist of flat lead plates immersed in a pool of _____.

- Ans
- 1. Ferrous Sulfate
 - 2. Water
 - 3. Electrolyte
 - 4. Polymer

Question ID : 96234011301
Option 1 ID : 96234045204
Option 2 ID : 96234045202
Option 3 ID : 96234045201
Option 4 ID : 96234045203
Status : Answered
Chosen Option : 3

Q.2 _____ is an application of electronic devices and systems that source, detect and control light,

- Ans
- 1. Microelectronics
 - 2. Thermodynamics
 - 3. Power devices
 - 4. Optoelectronics

Question ID : 96234011341
Option 1 ID : 96234045361
Option 2 ID : 96234045363
Option 3 ID : 96234045364
Option 4 ID : 96234045362
Status : Answered
Chosen Option : 4

Q.3 When capacitors are connected in parallel, the total capacitance is the _____ of the individual capacitances.

- Ans
- 1. multiplication
 - 2. division
 - 3. sum
 - 4. difference

Question ID : 96234011344
Option 1 ID : 96234045376
Option 2 ID : 96234045375
Option 3 ID : 96234045373
Option 4 ID : 96234045374
Status : Answered
Chosen Option : 3

Q.3 A _____ is a device that emits light through a process of optical amplification based on the stimulated emission of electromagnetic radiation.

- Ans
- 1. Diode
 - 2. Laser
 - 3. Resistor
 - 4. Transistor

Question ID : 96234011340
Option 1 ID : 96234045358
Option 2 ID : 96234045360
Option 3 ID : 96234045357
Option 4 ID : 96234045359
Status : Answered
Chosen Option : 2

Q.3 Which device can detect a physical quantity and convert it into an electrical signal?

2

- Ans
- 1. Transmitter
 - 2. Actuator
 - 3. Sensor
 - 4. Receiver

Question ID : 96234011372
Option 1 ID : 96234045485
Option 2 ID : 96234045486
Option 3 ID : 96234045487
Option 4 ID : 96234045488
Status : Answered
Chosen Option : 3

Q.3 Identify the temperature sensor which is not used in process industries.

3

- Ans
- 1. RTD
 - 2. thermistor
 - 3. Thermocouple
 - 4. piezoelectric

Question ID : 96234011361
Option 1 ID : 96234045441
Option 2 ID : 96234045443
Option 3 ID : 96234045442
Option 4 ID : 96234045444
Status : Not Answered
Chosen Option : --

Q.3 For a design of (16:1) multiplexer, how many select lines will be required?

4

- Ans
- 1. 1
 - 2. 3
 - 3. 4
 - 4. 2

Question ID : 96234011356
Option 1 ID : 96234045421
Option 2 ID : 96234045423
Option 3 ID : 96234045424
Option 4 ID : 96234045422
Status : Answered
Chosen Option : 3

Q.3
5 Which instrument is used to measure the insulation resistance of an electric circuit relative to earth?

- Ans
- 1. Megger
 - 2. Ammeter
 - 3. Potential Transformer
 - 4. Voltmeter

Question ID : 96234011353
Option 1 ID : 96234045412
Option 2 ID : 96234045409
Option 3 ID : 96234045411
Option 4 ID : 96234045410
Status : Answered
Chosen Option : 1

Q.3
6 Race Around condition can be avoided in Digital logic circuits using _____.

- Ans
- 1. Shift Register
 - 2. Full Adder
 - 3. Master Slave JK Flip Flop
 - 4. AND Gate

Question ID : 96234011314
Option 1 ID : 96234045255
Option 2 ID : 96234045253
Option 3 ID : 96234045254
Option 4 ID : 96234045256
Status : Not Answered
Chosen Option : --

Q.3
7 Toggle condition is present in which of the following?

- Ans
- 1. D Flip Flop
 - 2. Clocked SR Flip Flop
 - 3. SR Latch
 - 4. JK Flip Flop

Question ID : 96234011313
Option 1 ID : 96234045252
Option 2 ID : 96234045250
Option 3 ID : 96234045249
Option 4 ID : 96234045251
Status : Not Answered
Chosen Option : --

Q.3
8 For which of the following diodes when the voltage is increased the current flowing through it decreases?

- Ans
- 1. Tunnel Diode
 - 2. Schottky Diode
 - 3. Laser Diode

X 4. Gunn Diode

Question ID : 96234011334
Option 1 ID : 96234045336
Option 2 ID : 96234045335
Option 3 ID : 96234045334
Option 4 ID : 96234045333
Status : Not Answered
Chosen Option : --

Q.3
9 Generally, wiring a solar controller to a battery storage station is done using a _____.

- Ans
- X** 1. Coaxial cable
 - X** 2. Twisted cable
 - ✓** 3. AWG cable
 - X** 4. waveguide

Question ID : 96234011368
Option 1 ID : 96234045470
Option 2 ID : 96234045469
Option 3 ID : 96234045471
Option 4 ID : 96234045472
Status : Answered
Chosen Option : 3

Q.4
0 As the frequency increases, the impedance of the inductor _____.

- Ans
- X** 1. decreases
 - X** 2. remains same
 - ✓** 3. increases
 - X** 4. is zero

Question ID : 96234011343
Option 1 ID : 96234045370
Option 2 ID : 96234045371
Option 3 ID : 96234045369
Option 4 ID : 96234045372
Status : Answered
Chosen Option : 3

Q.4
1 What is the peak reverse voltage of a diode?

- Ans
- X** 1.
The maximum amount of voltage the diode can withstand in Forward-bias
 - ✓** 2.
The maximum amount of voltage the diode can withstand in reverse-bias
 - X** 3. The forward voltage drop of a diode
 - X** 4. The internal voltage drop of a diode

Question ID : 96234011332
Option 1 ID : 96234045327

Option 2 ID : 96234045326
Option 3 ID : 96234045328
Option 4 ID : 96234045325
Status : Answered
Chosen Option : 2

Q.4
2 Which is not related to the counter circuit design?

- Ans
- 1. Karnaugh maps
 - 2. Erlang's table
 - 3. Excitation table
 - 4. State table

Question ID : 96234011357
Option 1 ID : 96234045428
Option 2 ID : 96234045425
Option 3 ID : 96234045427
Option 4 ID : 96234045426
Status : Not Answered
Chosen Option : --

Q.4
3 The internal V_{ref} voltage of IC723 is

- Ans
- 1. 9 V
 - 2. 11 V
 - 3. 7 V
 - 4. 2 V

Question ID : 96234011325
Option 1 ID : 96234045300
Option 2 ID : 96234045299
Option 3 ID : 96234045297
Option 4 ID : 96234045298
Status : Not Answered
Chosen Option : --

Q.4
4 Generation of light in LED is based on which principle?

- Ans
- 1. Stimulated emission
 - 2. Spontaneous emission
 - 3. Spontaneous absorption
 - 4. Stimulated absorption

Question ID : 96234011365
Option 1 ID : 96234045457
Option 2 ID : 96234045460
Option 3 ID : 96234045459
Option 4 ID : 96234045458
Status : Answered
Chosen Option : 1

Q.4

5 A table which will help to understand behavior of logic gates is known as _____.

- Ans
- 1. Matrix
 - 2. Parameter
 - 3. Gates
 - 4. Truth table

Question ID : 96234011355
Option 1 ID : 96234045417
Option 2 ID : 96234045418
Option 3 ID : 96234045420
Option 4 ID : 96234045419
Status : Answered
Chosen Option : 4

Q.4 The lead storage battery consists of a lead anode and the cathode is a lead grid packed with lead dioxide. _____ is used as an electrolyte.

- Ans
- 1. Nitric acid
 - 2. Picric acid
 - 3. Boric acid
 - 4. Sulfuric acid

Question ID : 96234011305
Option 1 ID : 96234045219
Option 2 ID : 96234045217
Option 3 ID : 96234045218
Option 4 ID : 96234045220
Status : Answered
Chosen Option : 4

Q.4 _____ is defined as the number of cycles per second.

- Ans
- 1. RMS value
 - 2. Instantaneous Value
 - 3. Voltage
 - 4. Frequency

Question ID : 96234011319
Option 1 ID : 96234045275
Option 2 ID : 96234045276
Option 3 ID : 96234045274
Option 4 ID : 96234045273
Status : Answered
Chosen Option : 4

Q.4 What is “transformer turns ratio”?

- Ans
- 1. The ratio of primary current to secondary flux
 - 2. The ratio of primary voltage to secondary current
 - 3. The ratio of primary turns to secondary turns

4. The ratio of primary Flux to secondary voltage

Question ID : 96234011327

Option 1 ID : 96234045307

Option 2 ID : 96234045305

Option 3 ID : 96234045308

Option 4 ID : 96234045306

Status : Answered

Chosen Option : 3

Q.4
9 Electrons are _____ charged

Ans 1. Positively

2. Negatively

3. Neutrally

4. Dually

Question ID : 96234011318

Option 1 ID : 96234045269

Option 2 ID : 96234045270

Option 3 ID : 96234045271

Option 4 ID : 96234045272

Status : Answered

Chosen Option : 2

Q.5
0 Which of the following is not the type of inductor?

Ans 1. Carbon core

2. Iron core

3. Thin film

4. Air core

Question ID : 96234011367

Option 1 ID : 96234045467

Option 2 ID : 96234045465

Option 3 ID : 96234045468

Option 4 ID : 96234045466

Status : Answered

Chosen Option : 2

Q.5
1 Opto coupler provides _____ between electrical signals or elements of a circuit.

Ans 1. Conduction

2. Isolation

3. Vacuum

4. Thermal conduction

Question ID : 96234011339

Option 1 ID : 96234045354

Option 2 ID : 96234045353

Option 3 ID : 96234045356

Option 4 ID : 96234045355
Status : Not Attempted and Marked For Review
Chosen Option : --

Q.5
2 How many terminals does a 7805 IC have

- Ans
- 1. 4
 - 2. 3
 - 3. 2
 - 4. 5

Question ID : 96234011323
Option 1 ID : 96234045290
Option 2 ID : 96234045291
Option 3 ID : 96234045289
Option 4 ID : 96234045292
Status : Not Answered
Chosen Option : --

Q.5
3 What are Ohmic Losses in a Transformer?

Ans 1.

The losses generated due to variation in current passing through the windings

2.

The losses generated due to variation in flux passing through the windings

3. Iron Loss

4. The losses due to varying electric field

Question ID : 96234011329
Option 1 ID : 96234045314
Option 2 ID : 96234045313
Option 3 ID : 96234045315
Option 4 ID : 96234045316
Status : Not Attempted and Marked For Review
Chosen Option : --

Q.5
4 Which type of a combinational circuit is used to convert, multiple inputs to single output?

- Ans
- 1. Multiplexer
 - 2. Demultiplexer
 - 3. Decoder
 - 4. Counter

Question ID : 96234011350
Option 1 ID : 96234045399
Option 2 ID : 96234045400
Option 3 ID : 96234045398
Option 4 ID : 96234045397
Status : Answered
Chosen Option : 1

Q.5

5 Which of the following is a Basic 4 bit Adder IC?

- Ans
- 1. IC 741
 - 2. IC 7400
 - 3. IC 7483
 - 4. IC 7415

Question ID : 96234011311
Option 1 ID : 96234045244
Option 2 ID : 96234045243
Option 3 ID : 96234045241
Option 4 ID : 96234045242
Status : Not Answered
Chosen Option : --

Q.5
6 Which of the following is a 4 bit Comparator IC?

- Ans
- 1. IC 7485
 - 2. IC 7805
 - 3. IC 555
 - 4. IC 7400

Question ID : 96234011312
Option 1 ID : 96234045247
Option 2 ID : 96234045245
Option 3 ID : 96234045248
Option 4 ID : 96234045246
Status : Not Answered
Chosen Option : --

Q.5
7 _____ is defined as the property of the coil due to which it opposes the change of current flowing through it.

- Ans
- 1. Mutual - inductance
 - 2. Self - inductance
 - 3. Toroidal inductor
 - 4. Air Core inductor

Question ID : 96234011342
Option 1 ID : 96234045366
Option 2 ID : 96234045367
Option 3 ID : 96234045368
Option 4 ID : 96234045365
Status : Not Answered
Chosen Option : --

Q.5
8 What type of Flip Flop is used in Counters?

- Ans
- 1. Full Adder
 - 2. SR Flip Flop
 - 3. T Flip Flop
 - 4. Comparator

Question ID : 96234011316
Option 1 ID : 96234045264
Option 2 ID : 96234045262
Option 3 ID : 96234045263
Option 4 ID : 96234045261
Status : Not Answered
Chosen Option : --

Q.5
9 Which of the following IC is an BCD to Seven Segment Display decoder

- Ans
- 1. IC 74138
 - 2. IC 741
 - 3. IC 7447
 - 4. IC 7400

Question ID : 96234011317
Option 1 ID : 96234045268
Option 2 ID : 96234045266
Option 3 ID : 96234045265
Option 4 ID : 96234045267
Status : Not Answered
Chosen Option : --

Q.6
0 How many 16 bit registers are there in 8051?

- Ans
- 1. 8
 - 2. 1
 - 3. 4
 - 4. 2

Question ID : 96234011375
Option 1 ID : 96234045499
Option 2 ID : 96234045500
Option 3 ID : 96234045498
Option 4 ID : 96234045497
Status : Not Answered
Chosen Option : --

Q.6
1 Multi - vibrators can be used to produce which type of signals?

- Ans
- 1. Triangular wave
 - 2. Impulse
 - 3. Sine wave
 - 4. Square wave

Question ID : 96234011351
Option 1 ID : 96234045401
Option 2 ID : 96234045402
Option 3 ID : 96234045404
Option 4 ID : 96234045403
Status : Not Answered
Chosen Option : --

Q.6 Isolation Transformers Block transmission of which of the below mentioned component in a signal from one circuit to another

- Ans
- 1. DC Component
 - 2. Capacitive Component
 - 3. AC Component
 - 4. Inductive Component

Question ID : 96234011326
Option 1 ID : 96234045303
Option 2 ID : 96234045304
Option 3 ID : 96234045301
Option 4 ID : 96234045302
Status : Answered
Chosen Option : 1

Q.6 The Output is dependent only on present input?

- Ans
- 1. Combinational Circuits
 - 2. Analog Circuits
 - 3. Flip Flops
 - 4. Sequential Circuits

Question ID : 96234011308
Option 1 ID : 96234045230
Option 2 ID : 96234045229
Option 3 ID : 96234045232
Option 4 ID : 96234045231
Status : Not Answered
Chosen Option : --

Q.6 एक आदर्श अर्द्ध तरंग दिष्टकारी (हाफ वेव रेक्टिफायर) का नो-लोड आउटपुट वोल्टेज _____ होता है।

- Ans
- 1. $V_{\text{peak}} = V_{\text{rms}}/2$
 - 2. $V_{\text{peak}} = V_{\text{rms}}/4$
 - 3. $V_{\text{rms}} = V_{\text{peak}}/2$
 - 4. $V_{\text{rms}} = V_{\text{peak}}/4$

Question ID : 96234011331
Option 1 ID : 96234045323
Option 2 ID : 96234045324
Option 3 ID : 96234045321
Option 4 ID : 96234045322
Status : Not Answered
Chosen Option : --

Q.6 Define e - waste.

- Ans
- 1. Easy waste

- 2. Environmental waste
- 3. Electricity waste
- 4. Electronic waste

Question ID : 96234011364
Option 1 ID : 96234045455
Option 2 ID : 96234045456
Option 3 ID : 96234045453
Option 4 ID : 96234045454
Status : Answered
Chosen Option : 4

Q.6
6 SMD stands for

- Ans
- 1. Small material diameter
 - 2. Small medium design
 - 3. Small medium device
 - 4. Surface mount device

Question ID : 96234011359
Option 1 ID : 96234045436
Option 2 ID : 96234045435
Option 3 ID : 96234045434
Option 4 ID : 96234045433
Status : Not Answered
Chosen Option : --

Q.6
7 The size of internal RAM of 8051 Microcontroller is _____.

- Ans
- 1. 128 Bytes
 - 2. 16 Bytes
 - 3. 64 Bytes
 - 4. 256 Bytes

Question ID : 96234011374
Option 1 ID : 96234045496
Option 2 ID : 96234045493
Option 3 ID : 96234045494
Option 4 ID : 96234045495
Status : Not Answered
Chosen Option : --

Q.6
8 Dry cell is a _____.

- Ans
- 1. Lithium polymer battery
 - 2. Zinc-carbon battery
 - 3. Salt water battery
 - 4. Lead acid battery

Question ID : 96234011303

Option 1 ID : 96234045212

Option 2 ID : 96234045209

Option 3 ID : 96234045211

Option 4 ID : 96234045210

Status : **Not Attempted and Marked For Review**

Chosen Option : --

Q.6 In astable multivibrator using IC555 timer design, the duty cycle D is given by _____.

- Ans
- 1. $T_{\text{off}} / T_{\text{on}}$
 - 2. $T_{\text{on}} / (T_{\text{on}} + T_{\text{off}})$
 - 3. $(T_{\text{on}} + T_{\text{off}}) / T_{\text{on}}$
 - 4. $T_{\text{on}} / T_{\text{off}}$

Question ID : 96234011371

Option 1 ID : 96234045484

Option 2 ID : 96234045481

Option 3 ID : 96234045483

Option 4 ID : 96234045482

Status : **Not Answered**

Chosen Option : --

Q.7 The RC time constant is also called as _____.

- Ans
- 1. β
 - 2. α
 - 3. γ
 - 4. τ

Question ID : 96234011345

Option 1 ID : 96234045379

Option 2 ID : 96234045377

Option 3 ID : 96234045380

Option 4 ID : 96234045378

Status : **Marked For Review**

Chosen Option : 4

Q.7 Identify the circuit which is not the application of op-amp.

- Ans
- 1. Mixer
 - 2. Differentiator
 - 3. Integrator
 - 4. Comparator

Question ID : 96234011370

Option 1 ID : 96234045480

Option 2 ID : 96234045478

Option 3 ID : 96234045479

Option 4 ID : 96234045477

Status : **Not Answered**

Chosen

Q.7 The minimum voltage required across a linear voltage regulator to maintain regulation is known as _____.

2

- Ans
- 1. Output voltage
 - 2. Input voltage
 - 3. Load voltage
 - 4. Dropout voltage

Question ID : 96234011324

Option 1 ID : 96234045293

Option 2 ID : 96234045296

Option 3 ID : 96234045295

Option 4 ID : 96234045294

Status : Not Answered

Chosen Option : --

Q.7 Select the component which is not an example of passive SMD component.

3

- Ans
- 1. Thick film resistor
 - 2. Tantalum capacitor
 - 3. Diode
 - 4. Ceramic capacitor

Question ID : 96234011360

Option 1 ID : 96234045440

Option 2 ID : 96234045438

Option 3 ID : 96234045439

Option 4 ID : 96234045437

Status : Answered

Chosen Option : 3

Q.7 LED is a _____ junction diode that emits light when activated.

4

- Ans
- 1. n-p-n
 - 2. p-n
 - 3. n-p
 - 4. p-n-p

Question ID : 96234011336

Option 1 ID : 96234045343

Option 2 ID : 96234045342

Option 3 ID : 96234045341

Option 4 ID : 96234045344

Status : Not Answered

Chosen Option : --

Q.7 In 3:8 line decoder one of the eight output bits is activated, depending on which of the following parameters

5

- Ans
- 1. Input Values from 0 to 7
 - 2. Next State output

3. Previous output

4. Clock input

Question ID : 96234011347

Option 1 ID : 96234045385

Option 2 ID : 96234045388

Option 3 ID : 96234045386

Option 4 ID : 96234045387

Status : **Not Answered**

Chosen Option : --

