



RRB GROUP - D **SHIFT - 2 (29-08-2022)**

- ★ **Latest Govt Job updates**
- ★ **Private Job updates**
- ★ **Free Mock tests available**

Visit - teachingninja.in



रेल भर्ती बोर्ड / RAILWAY RECRUITMENT BOARDS
सी ई एन आर आर सी - ०१/२०१९ - CEN RRC - 01/2019



Test Date	29/08/2022
Test Time	12:45 PM - 2:15 PM
Subject	Level 1

* Note

Correct Answer will carry 1 mark per Question.
Incorrect Answer will carry 1/3 Negative mark per Question.

- Options shown in green color with a tick icon are correct.
- Chosen option on the right of the question indicates the option selected by the candidate.

Section : Level 1

Q.1 How many double bonds are there in a structure of benzene?

- Ans
- 1. 4
 - 2. 3
 - 3. 2
 - 4. 1

Question ID : 7518973402
Option 1 ID : 75189713608
Option 2 ID : 75189713607
Option 3 ID : 75189713606
Option 4 ID : 75189713605
Status : Answered
Chosen Option : 2

Q.2 Simplify:

$$9991 \times 10009 =$$

- Ans
- 1. 99,999,99
 - 2. 91,999,919
 - 3. 99,999,19
 - 4. 99,999,919

Question ID : 7518975699
Option 1 ID : 75189722794
Option 2 ID : 75189722795
Option 3 ID : 75189722793
Option 4 ID : 75189722796
Status : Answered
Chosen Option : 4

Q.3 C_3H_6 belongs to the homologous series of:

- Ans
- 1. alkane
 - 2. cycloalkane
 - 3. alkene
 - 4. alkyne

Question ID : 7518973557
Option 1 ID : 75189714225
Option 2 ID : 75189714228
Option 3 ID : 75189714226
Option 4 ID : 75189714227
Status : Answered
Chosen Option : 3

Q.4 Which of the following terms will replace the question mark (?) and complete the given alpha-numeric series?

15M, 17P, 20S, 25Y, ?

- Ans
- 1. 37Y
 - 2. 32Z
 - 3. 31Z
 - 4. 32Y

Question ID : 7518977648
Option 1 ID : 75189730590
Option 2 ID : 75189730592
Option 3 ID : 75189730589
Option 4 ID : 75189730591
Status : Answered
Chosen Option : 4

Q.5 What approximate value should come in place of the question mark (?) in the following equation?

$30.01\% \text{ of } 199.99 + 35.023\% \text{ of } 550.045 = ? - 540.078$

- Ans
- 1. 890
 - 2. 790
 - 3. 580
 - 4. 640

Question ID : 7518977404
Option 1 ID : 75189729613
Option 2 ID : 75189729614
Option 3 ID : 75189729616
Option 4 ID : 75189729615
Status : Answered
Chosen Option : 2

Q.6 Anu starts from his office and drives 5 km towards the east. He then takes a right turn, drives 4 km, turns right and drives 5 km. He then takes a right turn and drives 3 km and stops at a shop. Which direction should he drive now in order to reach his office from that shop? (All turns are 90° turns only.)

- Ans**
- 1. North-east
 - 2. South
 - 3. North-west
 - 4. North

Question ID : 7518977374
Option 1 ID : 75189729495
Option 2 ID : 75189729494
Option 3 ID : 75189729496
Option 4 ID : 75189729493
Status : Answered
Chosen Option : 4

Q.7 Find the positive difference between the roots of the equation $2x^2 - 7x + 5 = 0$.

- Ans**
- 1. $\frac{3}{2}$
 - 2. $-\frac{5}{2}$
 - 3. $-\frac{3}{2}$
 - 4. $\frac{5}{2}$

Question ID : 7518975960
Option 1 ID : 75189723837
Option 2 ID : 75189723840
Option 3 ID : 75189723838
Option 4 ID : 75189723839
Status : Answered
Chosen Option : 1

Q.8 Which of the given numbers is NOT divisible by 3?

- Ans**
- 1. 687
 - 2. 713
 - 3. 927
 - 4. 453

Question ID : 7518976028
Option 1 ID : 75189724110
Option 2 ID : 75189724111
Option 3 ID : 75189724112
Option 4 ID : 75189724109
Status : Answered
Chosen Option : 2

Q.9 Every year on 2nd October, the Prime Minister of India pays homage to Mahatma Gandhi at _____.

- Ans
- 1. India Gate
 - 2. Raj Ghat
 - 3. Amar Jawan Jyoti
 - 4. Vijay Ghat

Question ID : 7518977471
Option 1 ID : 75189729883
Option 2 ID : 75189729882
Option 3 ID : 75189729881
Option 4 ID : 75189729884
Status : Answered
Chosen Option : 2

Q.10 Which of the following interchanges of numbers would make the given equation correct?

$$2 \times 10 \div 8 + 6 - 4 = 9$$

- Ans
- 1. 2, 4
 - 2. 6, 8
 - 3. 9, 10
 - 4. 2, 8

Question ID : 7518977764
Option 1 ID : 75189731053
Option 2 ID : 75189731054
Option 3 ID : 75189731055
Option 4 ID : 75189731056
Status : Answered
Chosen Option : 1

Q.11 The median of 9, 11, 15, 17, x, 19, 21 is x, where x is an integer. Which of the following can be the value of x?

- Ans
- 1. 18
 - 2. 16
 - 3. 13
 - 4. 14

Question ID : 7518976118
Option 1 ID : 75189724472
Option 2 ID : 75189724471
Option 3 ID : 75189724469
Option 4 ID : 75189724470
Status : Answered
Chosen Option : 2

Q.12 Which of the following is NOT necessary for autotrophic nutrition?

- Ans
- 1. Oxygen
 - 2. Light
 - 3. Chlorophyll
 - 4. Carbon dioxide

Question ID : 7518974322
Option 1 ID : 75189717288
Option 2 ID : 75189717285
Option 3 ID : 75189717286
Option 4 ID : 75189717287
Status : Answered
Chosen Option : 1

Q.13 In which Indian state do 'Ahars', a type of water harvesting system, exist?

- Ans
- 1. Bihar
 - 2. Rajasthan
 - 3. Kerala
 - 4. Madhya Pradesh

Question ID : 7518974508
Option 1 ID : 75189718029
Option 2 ID : 75189718031
Option 3 ID : 75189718032
Option 4 ID : 75189718030
Status : Answered
Chosen Option : 1

Q.14 If the sum of two numbers is 54 and the LCM and HCF of these numbers are 84 and 6, respectively, then the sum of the reciprocal of the numbers is:

- Ans
- 1. $\frac{3}{28}$
 - 2. $\frac{5}{28}$
 - 3. $\frac{7}{28}$
 - 4. $\frac{9}{28}$

Question ID : 7518976257
Option 1 ID : 75189725026
Option 2 ID : 75189725025
Option 3 ID : 75189725027
Option 4 ID : 75189725028
Status : Answered
Chosen Option : 1

Q.15 An object is placed on the principal axis of a convex lens, at a point between F_1 and $2F_1$. Its image formed is _____.

- Ans
- 1. real and enlarged
 - 2. virtual and enlarged
 - 3. virtual and of the same size
 - 4. real and of the same size

Question ID : 7518976625
Option 1 ID : 75189726498
Option 2 ID : 75189726500
Option 3 ID : 75189726499
Option 4 ID : 75189726497
Status : Answered
Chosen Option : 1

Q.16 Which of the following has the maximum electrical resistivity?

Silver, Copper, Iron, Nichrome

- Ans
- 1. Nichrome
 - 2. Iron
 - 3. Silver
 - 4. Copper

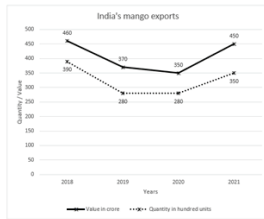
Question ID : 7518976675
Option 1 ID : 75189726698
Option 2 ID : 75189726699
Option 3 ID : 75189726700
Option 4 ID : 75189726697
Status : Answered
Chosen Option : 2

Q.17 Find the circumference of a circle that circumscribes a square of side 7 cm. (Use $\pi = \frac{22}{7}$.)

- Ans
- 1. 44 cm
 - 2. $22\sqrt{2}$ cm
 - 3. 22 cm
 - 4. $44\sqrt{2}$ cm

Question ID : 7518976182
Option 1 ID : 75189724727
Option 2 ID : 75189724725
Option 3 ID : 75189724726
Option 4 ID : 75189724728
Status : Answered
Chosen Option : 2

Q.18 The given line graph shows the data of Mango exports in India from year 2018 to 2021. Study the given line graph and answer the question.



In which year was the value per hundred units the minimum?

- Ans**
- 1. 2018
 - 2. 2020
 - 3. 2021
 - 4. 2019

Question ID : 751897769
 Option 1 ID : 75189731073
 Option 2 ID : 75189731075
 Option 3 ID : 75189731076
 Option 4 ID : 75189731074
 Status : Answered
 Chosen Option : 2

Q.19 In this question, a group of numbers/symbols is coded using letters as per the table given below and the conditions which follow. The correct combination of codes following the condition is your answer.

Number/Symbol	2	<	4	7	^	%	>	3	!	?	5	8	\$	6
Code	A	F	T	J	D	G	E	Z	V	W	K	U	P	L

Conditions:

- (i) If the first element is a symbol and the last a number, the codes for these two are to be interchanged.
- (ii) If the first element is an odd number and the last an even number, the first and the last elements are to be coded as Ø.
- (iii) If both the second and third elements are symbols, the third element is to be coded as the code for the second element.

How will '3 < 5 ! 2' be coded?

- Ans**
- 1. ZFKVA
 - 2. ØFKVØ
 - 3. ØFKWØ
 - 4. ØFKVA

Question ID : 751897679
 Option 1 ID : 75189730713
 Option 2 ID : 75189730716
 Option 3 ID : 75189730715
 Option 4 ID : 75189730714
 Status : Not Answered
 Chosen Option : --

Q.20 If 2 is added to each odd digit and 3 is subtracted from each even digit in the number 835647, what will be the sum of the digits that are second from the left and second from the right in the new number thus formed?

- Ans**
- 1. 10
 - 2. 8
 - 3. 14
 - 4. 6

Question ID : 7518977408
Option 1 ID : 75189729632
Option 2 ID : 75189729631
Option 3 ID : 75189729629
Option 4 ID : 75189729630
Status : Answered
Chosen Option : 4

Q.21 Three statements are followed by three conclusions numbered I, II and III. You have to consider these statements to be true, even if they seem to be at variance with commonly known facts. Decide which of the given conclusions logically follow(s) from the given statement.

Statements:

All lamps are lanterns.

All lanterns are torches.

All torches are candles.

Conclusions:

(I) Some candles are lamps

(II) All lanterns are lamps

(III) No lantern is a lamp

- Ans**
- 1. Only conclusion I and III follows
 - 2. Only conclusion II follows
 - 3. Only conclusion I follows
 - 4. None of the conclusions follow

Question ID : 7518977611
Option 1 ID : 75189730443
Option 2 ID : 75189730442
Option 3 ID : 75189730441
Option 4 ID : 75189730444
Status : Answered
Chosen Option : 3

Q.22 The value of $\frac{0.2 \times 0.2 \times 0.2 - 0.02 \times 0.02 \times 0.02}{2 \times 2 \times 2} =$

- Ans**
- 1. 0.00999
 - 2. 0.000999
 - 3. 0.0090
 - 4. 0.999

Question ID : 7518975571
Option 1 ID : 75189722281
Option 2 ID : 75189722283
Option 3 ID : 75189722284
Option 4 ID : 75189722282
Status : Not Answered
Chosen Option : --

Q.23 Consider the following statements about magnetic field due to a current-carrying straight conductor:

- (a) The magnetic field at a distance r from the wire is in the form of a concentric circle.
- (b) The radius of the concentric circle increases as the distance from the conductor increases.

Which of the above statements is/are correct?

- Ans**
- 1. Both (a) and (b)
 - 2. Only (a)
 - 3. Only (b)
 - 4. Neither (a) nor (b)

Question ID : 7518976735
Option 1 ID : 75189726938
Option 2 ID : 75189726940
Option 3 ID : 75189726939
Option 4 ID : 75189726937
Status : Answered
Chosen Option : 1

Q.24 Five students - 1, 2, 3, 4 and 5 - are sitting around a circular table facing away from the centre. 3 is sitting second to the right of 4 and to the immediate left of 5. 3 and 4 are immediate neighbours of 1. Which of the following statements is true?

- Ans**
- 1. 1 and 2 are the immediate neighbours of 4.
 - 2. 1 is sitting third to the left of 5.
 - 3. 2 is sitting second to the right of 1.
 - 4. 2 is sitting to the immediate left of 5.

Question ID : 7518977291
Option 1 ID : 75189729162
Option 2 ID : 75189729163
Option 3 ID : 75189729161
Option 4 ID : 75189729164
Status : Answered
Chosen Option : 1

Q.25 In this question, the statement is followed by two conclusions. Which of the two conclusion(s) is/are true based on the given statement?

Statement: $T = S \geq N = A \leq U > P < Q$

Conclusions:

I. $S > Q$

II. $A < T$

- Ans**
- 1. Only conclusion I is true
 - 2. Neither conclusion I nor II is true
 - 3. Both conclusions I and II are true
 - 4. Only conclusion II is true

Question ID : 7518977638
Option 1 ID : 75189730549
Option 2 ID : 75189730552
Option 3 ID : 75189730551
Option 4 ID : 75189730550
Status : Answered
Chosen Option : 2

Q.26 In May 2022, the Supreme Court has restrained the state and central governments from invoking which charges, under Section 124A of the Indian Penal Code, against anybody?

- Ans**
- 1. Inchoate
 - 2. Sedition
 - 3. Bankruptcy
 - 4. Homicide

Question ID : 7518976777
Option 1 ID : 75189727108
Option 2 ID : 75189727106
Option 3 ID : 75189727107
Option 4 ID : 75189727105
Status : Not Answered
Chosen Option : --

Q.27 Three successive discounts of 4%, 5% and 14% are equal to a single discount of _____ (rounded off to two decimal places).

- Ans**
- 1. 20.57%
 - 2. 22.57%
 - 3. 23.57%
 - 4. 21.57%

Question ID : 7518975867
Option 1 ID : 75189723465
Option 2 ID : 75189723466
Option 3 ID : 75189723468
Option 4 ID : 75189723467
Status : Answered
Chosen Option : 4

Q.28 Which of the following relations would calculate the cost x of m notebooks, if the cost of n notebooks is ₹1,680

- Ans**
- 1. $\frac{m}{x} = \frac{n}{1680}$
 - 2. $\frac{m}{x} = \frac{1680}{n}$
 - 3. $\frac{x}{m} = \frac{n}{m}$
 - 4. $x = \frac{1680}{m}$

Question ID : 7518975612
Option 1 ID : 75189722446
Option 2 ID : 75189722445
Option 3 ID : 75189722447
Option 4 ID : 75189722448
Status : Not Answered
Chosen Option : --

Q.29 All 30 students of a class are standing in a straight row facing the north. Ashok is 16th from the right end, while Aruna is 19th from the left end. How many students stand between Ashok and Aruna?

- Ans**
- 1. Four
 - 2. One
 - 3. Three
 - 4. Two

Question ID : 7518977303
Option 1 ID : 75189729212
Option 2 ID : 75189729209
Option 3 ID : 75189729211
Option 4 ID : 75189729210
Status : Answered
Chosen Option : 1

Q.30 Simplify: $x(2x - 5) + 6(x^2 - 4) + 18$

- Ans**
- 1. $8x^2 - 5x + 6$
 - 2. $8x^2 - 5x - 6$
 - 3. $8x^2 + 5x - 6$
 - 4. $8x^2 + 5x + 6$

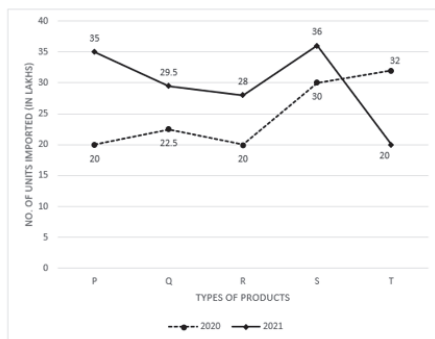
Question ID : 7518975906
Option 1 ID : 75189723621
Option 2 ID : 75189723622
Option 3 ID : 75189723623
Option 4 ID : 75189723624
Status : Answered
Chosen Option : 2

Q.31 An object is placed on the principal axis of a lens of power 4.0 D. at a distance of 30 cm. The image formed is _____.

- Ans**
- 1. virtual and erect
 - 2. virtual and inverted
 - 3. real and inverted
 - 4. real and erect

Question ID : 7518976640
Option 1 ID : 75189726558
Option 2 ID : 75189726560
Option 3 ID : 75189726559
Option 4 ID : 75189726557
Status : Answered
Chosen Option : 1

- Q.32** The given line graph shows the total number of different cosmetic products P, Q, R, S and T (in lakhs) imported by company 'XYZ' in the years 2020 and 2021. Study the line graph and answer the question.



The average import of Q type of products in both the years 2020 and 2021 was equal to the average import of which type of product in the same years?

- Ans**
- 1. S
 - 2. R
 - 3. T
 - 4. P

Question ID : 751897768
Option 1 ID : 75189731071
Option 2 ID : 75189731070
Option 3 ID : 75189731072
Option 4 ID : 75189731069
Status : Answered
Chosen Option : 3

- Q.33** When solutions of lead (II) nitrate and potassium iodide are mixed together, which of the following observations will be true?

- Ans**
- 1. A white precipitate of potassium nitrate will be formed.
 - 2. A yellow precipitate of lead iodide will be formed.
 - 3. No reaction will occur.
 - 4. A white precipitate of lead iodide will be formed.

Question ID : 7518973593
Option 1 ID : 75189714372
Option 2 ID : 75189714371
Option 3 ID : 75189714369
Option 4 ID : 75189714370
Status : Answered
Chosen Option : 1

Q.34 Refer to the following letter, number, symbol series and answer the question.

(Left) & X Y # F K & 3 T & * 8 W % ^ D U G S € o s s @ J (Right)

How many such numbers are there which are immediately preceded by a symbol and immediately followed by a consonant?

- Ans** 1. 3
 2. 1
 3. 4
 4. 2

Question ID : 7518977665
Option 1 ID : 75189730659
Option 2 ID : 75189730657
Option 3 ID : 75189730660
Option 4 ID : 75189730658
Status : Answered
Chosen Option : 1

Q.35 Consider the below statements and identify the correct answer.

Statement I: According to Newland's assumption, only 56 elements existed in the nature.

Statement II: Newland found that every eighth element had properties similar to that of the first.

- Ans** 1. Both statements are incorrect.
 2. Statement I is correct, Statement II is incorrect.
 3. Both statements are correct.
 4. Statement II is correct, Statement I is incorrect.

Question ID : 7518973707
Option 1 ID : 75189714828
Option 2 ID : 75189714825
Option 3 ID : 75189714827
Option 4 ID : 75189714826
Status : Answered
Chosen Option : 3

Q.36 Find the value of $\sqrt{9604}$.

- Ans** 1. 72
 2. 74
 3. 89
 4. 98

Question ID : 7518975800
Option 1 ID : 75189723198
Option 2 ID : 75189723197
Option 3 ID : 75189723200
Option 4 ID : 75189723199
Status : Answered
Chosen Option : 4

Q.37 Seven men can complete a work in 12 days. They start the work and after 5 days, 3 men leave. In how many days will the remaining work be completed by the remaining men?

- Ans**
- 1. 12
 - 2. 14
 - 3. $13\frac{1}{4}$
 - 4. $12\frac{1}{4}$

Question ID : 7518976100
Option 1 ID : 75189724400
Option 2 ID : 75189724397
Option 3 ID : 75189724398
Option 4 ID : 75189724399
Status : Answered
Chosen Option : 4

Q.38 What is the usual shape for an average fixed cost curve?

- Ans**
- 1. Inverted V-shaped
 - 2. Horizontal line
 - 3. Rectangular hyperbola
 - 4. U-shaped

Question ID : 7518976822
Option 1 ID : 75189727287
Option 2 ID : 75189727285
Option 3 ID : 75189727288
Option 4 ID : 75189727286
Status : Answered
Chosen Option : 2

Q.39 Express $\sin 58^\circ + \cos 82^\circ$ in terms of Trigonometric ratios of angles between 0° and 45° .

- Ans**
- 1. $\cos 32^\circ + \sin 8^\circ$
 - 2. $\sin 32^\circ + \cos 8^\circ$
 - 3. $\cos 32^\circ + \cos 8^\circ$
 - 4. $\sin 32^\circ + \sin 8^\circ$

Question ID : 7518976212
Option 1 ID : 75189724847
Option 2 ID : 75189724846
Option 3 ID : 75189724848
Option 4 ID : 75189724845
Status : Answered
Chosen Option : 1

Q.40 Select the set in which the numbers are related in the same way as are the numbers of the following sets.

(NOTE : Operations should be performed on the whole numbers, without breaking down the numbers into its constituent digits. E.g. 13 – Operations on 13 such as adding / subtracting /multiplying etc. to 13 can be performed. Breaking down 13 into 1 and 3 and then performing mathematical operations on 1 and 3 is not allowed)

(14, 60, 16)

(25, 80, 15)

- Ans**
- 1. (21, 120, 15)
 - 2. (20, 30, 40)
 - 3. (19, 80, 21)
 - 4. (15, 45, 30)

Question ID : 7518977736
Option 1 ID : 75189730941
Option 2 ID : 75189730943
Option 3 ID : 75189730944
Option 4 ID : 75189730942
Status : Answered
Chosen Option : 3

Q.41 India's first Artificial Intelligence and Robotics Technological Park was launched in _____ in March 2022.

- Ans**
- 1. Chandigarh
 - 2. Bhopal
 - 3. Chennai
 - 4. Bengaluru

Question ID : 7518977451
Option 1 ID : 75189729801
Option 2 ID : 75189729802
Option 3 ID : 75189729803
Option 4 ID : 75189729804
Status : Answered
Chosen Option : 3

Q.42 We, on an individual basis, can help to reduce the production of waste by following certain practices. Which of the following will however cause increase in waste?

- Ans**
- 1. Reusing empty containers and bottles
 - 2. Using cloth or jute bags for shopping
 - 3. Donating used goods
 - 4. Using tin foil, plastic wraps, paper towels and plastic zip bags

Question ID : 7518974673
Option 1 ID : 75189718692
Option 2 ID : 75189718689
Option 3 ID : 75189718690
Option 4 ID : 75189718691
Status : Answered
Chosen Option : 4

Q.43 Which of the following is an overhead expense in a production cost?

- Ans
- 1. Labour
 - 2. Raw materials
 - 3. Consumable manufacturing supplies
 - 4. Insurance

Question ID : 7518977511
Option 1 ID : 75189730042
Option 2 ID : 75189730041
Option 3 ID : 75189730043
Option 4 ID : 75189730044
Status : Answered
Chosen Option : 4

Q.44 Select the option that is related to the fifth number in the same way as the second number is related to the first number and the fourth number is related to the third number.

(NOTE : Operations should be performed on the whole numbers, without breaking down the numbers into its constituent digits. E.g. 13 – Operations on 13 such as adding /subtracting/multiplying etc. to 13 can be performed. Breaking down 13 into 1 and 3 and then performing mathematical operations on 1 and 3 is not allowed)
16 : 2 :: 36 : 3 :: 64 : ?

- Ans
- 1. 3
 - 2. 4
 - 3. 5
 - 4. 6

Question ID : 7518977730
Option 1 ID : 75189730918
Option 2 ID : 75189730920
Option 3 ID : 75189730919
Option 4 ID : 75189730917
Status : Answered
Chosen Option : 2

Q.45 _____ is the climate at the centre of large landmasses, typified by a large annual range in temperature, with precipitation most likely in the summer.

- Ans
- 1. Temperate Climate
 - 2. Extreme Climate
 - 3. Maritime Climate
 - 4. Continental climate

Question ID : 7518977253
Option 1 ID : 75189729011
Option 2 ID : 75189729009
Option 3 ID : 75189729010
Option 4 ID : 75189729012
Status : Not Answered
Chosen Option : --

Q.46 An object is placed at 40 cm in front of a converging mirror having focal length 20 cm. The magnification of the image is:

- Ans**
- 1. -0.5
 - 2. +1
 - 3. -1
 - 4. +0.5

Question ID : 7518975389
Option 1 ID : 75189721555
Option 2 ID : 75189721554
Option 3 ID : 75189721553
Option 4 ID : 75189721556
Status : Answered
Chosen Option : 3

Q.47 Find the compound interest on ₹12,500 at 3% per annum for 3 years when interest is compounded annually (correct to the nearest rupees).

- Ans**
- 1. ₹1,159
 - 2. ₹1,170
 - 3. ₹1,140
 - 4. ₹1,180

Question ID : 7518976070
Option 1 ID : 75189724277
Option 2 ID : 75189724279
Option 3 ID : 75189724278
Option 4 ID : 75189724280
Status : Answered
Chosen Option : 1

Q.48 Dev walks 23 m towards the west from his hostel gate. He takes a left turn and walks 14 m. Then he takes a right turn and walks 63 m. Then he takes a left turn and walks 32 m. He takes a left turn again and walks 86 m. Again, he takes a left turn and walks 16 m to reach a canteen. How far and in which direction is the canteen from Dev's hostel gate? (All turns are 90 degree turns only)

- Ans**
- 1. 30 m, South
 - 2. 16 m, North
 - 3. 16 m, South
 - 4. 30 m, North

Question ID : 7518977691
Option 1 ID : 75189730764
Option 2 ID : 75189730761
Option 3 ID : 75189730762
Option 4 ID : 75189730763
Status : Answered
Chosen Option : 1

Q.49

In which year was The Indian Toll Act passed?

Ans

1. 1864

2. 1861

3. 1853

4. 1851

Question ID : 7518973798

Option 1 ID : 75189715189

Option 2 ID : 75189715192

Option 3 ID : 75189715191

Option 4 ID : 75189715190

Status : Not Answered

Chosen Option : --

Q.50 From where do the roots of the plants take in oxygen?

Ans

1. The oxygen taken by stomata reaches the roots

2. From the water present in the soil

3. From the air spaces in between the soil particles

4. Roots do not need oxygen

Question ID : 7518974539

Option 1 ID : 75189718155

Option 2 ID : 75189718153

Option 3 ID : 75189718154

Option 4 ID : 75189718156

Status : Answered

Chosen Option : 4

Q.51 A 1.5 m tall boy is standing at a distance of 3 m from a 4 m high light post. The light from top of post casts his shadow.
What is the length of the boy's shadow?

Ans

1. 0.91 m

2. 1.8 m

3. 1.62 m

4. 4.4 m

Question ID : 7518976206

Option 1 ID : 75189724824

Option 2 ID : 75189724821

Option 3 ID : 75189724822

Option 4 ID : 75189724823

Status : Not Answered

Chosen Option : --

Q.52 Which of the following bills is NOT passed by both Houses, Parliament of India, during Winter Session: 29 November 2021 to 22 December 2021?

Ans ✓ 1.

The Prohibition of Child Marriage (Amendment) Bill, 2021

✗ 2. The Farm Laws Repeal Bill, 2021

✗ 3.

The Narcotic Drugs and Psychotropic Substances (Amendment) Bill, 2021

✗ 4. The Surrogacy (Regulation) Bill, 2021

Question ID : 7518974158
Option 1 ID : 75189716629
Option 2 ID : 75189716630
Option 3 ID : 75189716631
Option 4 ID : 75189716632
Status : Answered
Chosen Option : 2

Q.53 Nine people, 1 to 9, are sitting in a straight row, facing the south. 8 is sitting in the middle of the row and his immediate left and right neighbours are 5 and 1, respectively. 9 is sitting at one of the extreme ends and his immediate right neighbour is 2. Only five people are there between 2 and 3. 3 is sitting between 7 and 4. 1 and 7 are immediate neighbours. If 7 and 6 exchange their positions, then who among the following will be the immediate left neighbour of 7?

Ans ✗ 1. 1

✗ 2. 3

✗ 3. 5

✓ 4. 2

Question ID : 7518977301
Option 1 ID : 75189729204
Option 2 ID : 75189729203
Option 3 ID : 75189729201
Option 4 ID : 75189729202
Status : Answered
Chosen Option : 1

Q.54 Which of the following numbers will replace the question mark (?) in the given series?

40, 66, 100, 142, ?

Ans ✓ 1. 192

✗ 2. 194

✗ 3. 190

✗ 4. 198

Question ID : 7518977720
Option 1 ID : 75189730877
Option 2 ID : 75189730879
Option 3 ID : 75189730878
Option 4 ID : 75189730880
Status : Answered
Chosen Option : 1

Q.55 Consider the following statements about the force acting on a current-carrying straight conductor placed in a magnetic field:

- (a) The direction of the force does not depend on the direction of current in the conductor.
- (b) The direction of the force depends on the direction of the magnetic field in which the conductor is placed.

Which of the above statements is/are correct?

- Ans**
- 1. Only (a)
 - 2. Neither (a) nor (b)
 - 3. Only (b)
 - 4. Both (a) and (b)

Question ID : 7518976741
Option 1 ID : 75189726961
Option 2 ID : 75189726963
Option 3 ID : 75189726962
Option 4 ID : 75189726964
Status : Answered
Chosen Option : 3

Q.56 Refer to the following letter and symbol series and answer the question.

(Left) E # R & H & @ J & M N # B & V & & D # P @ W % & Q & A % & # E & (Right)

How many such letters are there in the series which are immediately preceded and immediately followed by the symbol '&'?

- Ans**
- 1. Five
 - 2. Two
 - 3. Four
 - 4. Three

Question ID : 7518975234
Option 1 ID : 75189720936
Option 2 ID : 75189720933
Option 3 ID : 75189720935
Option 4 ID : 75189720934
Status : Answered
Chosen Option : 4

Q.57 There are four elements P, Q, R and S and their atomic numbers are 2, 6, 13 and 18, respectively. Which of the following pairs has elements having similar valency?

- Ans**
- 1. Q and S
 - 2. R and S
 - 3. P and S
 - 4. P and Q

Question ID : 7518973524
Option 1 ID : 75189714096
Option 2 ID : 75189714094
Option 3 ID : 75189714095
Option 4 ID : 75189714093
Status : Answered
Chosen Option : 3

Q.58 Consider the below statements and identify the correct answer.

Statement-I: Plaster of Paris has a very remarkable property of setting into hard mass on wetting with water.

Statement-II: Plaster of Paris is used in chemistry laboratories for sealing air gaps in apparatus where air tight arrangement is required.

- Ans
- 1. Statement-I is true, and Statement-II is false.
 - 2. Both the statements are false.
 - 3. Both the statements are true.
 - 4. Statement-II is true, and Statement-I is false.

Question ID : 7518973675
Option 1 ID : 75189714699
Option 2 ID : 75189714698
Option 3 ID : 75189714697
Option 4 ID : 75189714700
Status : Answered
Chosen Option : 3

Q.59 Which of the following numbers will replace the question mark (?) in the given series?

4, 22, 43, 69, 102, 144, ?

- Ans
- 1. 199
 - 2. 197
 - 3. 179
 - 4. 177

Question ID : 7518977382
Option 1 ID : 75189729527
Option 2 ID : 75189729525
Option 3 ID : 75189729526
Option 4 ID : 75189729528
Status : Answered
Chosen Option : 2

Q.60 Which football player was the highest goal scorer in the 3rd edition of the SAFF U-18 Women's Football Championship held at Jamshedpur in March 2022?

- Ans
- 1. Lynda Kom
 - 2. Babina Devi
 - 3. Purnima Kumari
 - 4. Ritu Devi

Question ID : 7518977438
Option 1 ID : 75189729750
Option 2 ID : 75189729752
Option 3 ID : 75189729751
Option 4 ID : 75189729749
Status : Not Answered
Chosen Option : --

Q.61

Who has been appointed as a full-time member of the Economic Advisory Council to the Prime Minister of India in February 2022?

Ans

1. Anuradha Guru

2. Ravi Mittal

3. Sanjeev Sanyal

4. Shashank Saksena

Question ID : 7518973855
Option 1 ID : 75189715419
Option 2 ID : 75189715418
Option 3 ID : 75189715420
Option 4 ID : 75189715417
Status : **Answered**
Chosen Option : 2

Q.62 Cost price of a toy is ₹210. What should be its MRP so that after a discount of 5% shopkeeper gains 90%.

Ans

1. ₹450

2. ₹420

3. ₹400

4. ₹480



Teachingninja.in

Q.63 The value of

$$\frac{3}{7} + \frac{2}{7} + \frac{1}{14} + \frac{2}{7} - 3 =$$

Ans 1. $-\frac{27}{14}$

2. $\frac{27}{14}$

3. $-\frac{13}{14}$

4. $\frac{13}{14}$

Question ID : 7518975568

Option 1 ID : 75189722272

Option 2 ID : 75189722269

Option 3 ID : 75189722271

Option 4 ID : 75189722270

Status : Answered

Chosen Option : 1

Q.64 In India, which vegetation has dominating species i.e., teak, sal and shisham?

Ans 1. Tropical Thorn Forests and Scrubs

2. Tropical Deciduous Forests

3. Mangrove Forests

4. Tropical Evergreen Forests



Question ID : 7518977264

Option 1 ID : 75189729055

Option 2 ID : 75189729053

Option 3 ID : 75189729056

Option 4 ID : 75189729054

Status : Answered

Chosen Option : 2

Q.65 Which of the following is/are NOT use(s) of washing soda?

- (i) Manufacture of glass, soap and paper
- (ii) In soda-acid fire extinguisher
- (iii) For removing permanent hardness of water

- Ans
- 1. Only i
 - 2. Only ii
 - 3. i and iii
 - 4. Only iii

Question ID : 7518973663
Option 1 ID : 75189714649
Option 2 ID : 75189714650
Option 3 ID : 75189714652
Option 4 ID : 75189714651
Status : Answered
Chosen Option : 2

Q.66 The primary excretory product of _____ is uric acid.

- Ans
- 1. fish
 - 2. cows
 - 3. birds
 - 4. humans

Question ID : 7518974402
Option 1 ID : 75189717605
Option 2 ID : 75189717607
Option 3 ID : 75189717606
Option 4 ID : 75189717608
Status : Answered
Chosen Option : 3

Q.67 If $\cos^4\theta - \sin^4\theta = k$, then the value of $\frac{1+k}{1-k}$ is:

- Ans
- 1. $\cot^2\theta$
 - 2. $\sin^2\theta$
 - 3. $\tan^2\theta$
 - 4. $\operatorname{cosec}^2\theta$

Question ID : 7518976385
Option 1 ID : 75189725540
Option 2 ID : 75189725537
Option 3 ID : 75189725539
Option 4 ID : 75189725538
Status : Answered
Chosen Option : 1

Q.68 Two resistors, A ($10\ \Omega$) and B ($15\ \Omega$), are connected in parallel. The combination is connected to a 3 V battery. The current through the battery is:

- Ans**
- 1. 0.3 A
 - 2. 0.12 A
 - 3. 0.25 A
 - 4. 0.50 A

Question ID : 7518976697
Option 1 ID : 75189726787
Option 2 ID : 75189726785
Option 3 ID : 75189726786
Option 4 ID : 75189726788
Status : Answered
Chosen Option : 4

Q.69 As per the new format, IPL 2022 was played among how many teams in total?

- Ans**
- 1. 12
 - 2. 9
 - 3. 10
 - 4. 7

Question ID : 7518976522
Option 1 ID : 75189726088
Option 2 ID : 75189726086
Option 3 ID : 75189726087
Option 4 ID : 75189726085
Status : Answered
Chosen Option : 3

Q.70 A statement is given followed by two arguments I and II. Read the statement and the arguments carefully and select the appropriate answer from the given options.

Statement:

Floods caused widespread damage to crops in Odisha this year.

Arguments:

- I. There has been a bumper production of food grains in Odisha this year.
- II. The number of crop insurance claims has seen a significant increase in Odisha this year.

Ans 1.

Argument I weakens, while argument II strengthens the statement

2. Both arguments I and II weaken the statement

3.

Argument II weakens, while argument I strengthens the statement

4. Both arguments I and II strengthen the statement

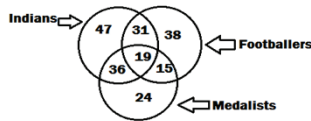
Question ID : 7518976395
Option 1 ID : 75189725577
Option 2 ID : 75189725579
Option 3 ID : 75189725578
Option 4 ID : 75189725580
Status : Answered
Chosen Option : 1

Q.71 H, I, J, K, L, M and N are seven boxes that are kept one over the other but not necessarily in the same order. K is kept on one of the positions above L. Only one box is kept between K and L. J is kept immediately above M. H is kept immediately below L. Only two boxes are kept between M and H. Only one box is kept between L and N. How many boxes are kept between N and K?

- Ans**
- 1. One
 - 2. Four
 - 3. Two
 - 4. Three

Question ID : 7518974919
 Option 1 ID : 75189719673
 Option 2 ID : 75189719676
 Option 3 ID : 75189719674
 Option 4 ID : 75189719675
 Status : Answered
 Chosen Option : 4

Q.72 Study the given diagram carefully and answer the question. The numbers in different sections indicate the number of persons.



How many such medallists are there who are also Indians?

- Ans**
- 1. 36
 - 2. 55
 - 3. 50
 - 4. 19



Question ID : 7518975178
 Option 1 ID : 75189720710
 Option 2 ID : 75189720712
 Option 3 ID : 75189720711
 Option 4 ID : 75189720709
 Status : Answered
 Chosen Option : 1

Q.73 Monohybrid cross is the combining of two plants with _____ different versions of a trait.

- Ans**
- 1. four
 - 2. six
 - 3. two
 - 4. eight

Question ID : 7518974443
 Option 1 ID : 75189717770
 Option 2 ID : 75189717771
 Option 3 ID : 75189717769
 Option 4 ID : 75189717772
 Status : Answered
 Chosen Option : 4

Q.74 FM 25 is related to IJ 125 in a certain way. In the same way, NO 36 is related to QL 216. To which of the following is MP16 related following the same logic?

- Ans**
- 1. ON 64
 - 2. PM 64
 - 3. PM 32
 - 4. PN 64

Question ID : 7518975051
Option 1 ID : 75189720204
Option 2 ID : 75189720203
Option 3 ID : 75189720201
Option 4 ID : 75189720202
Status : Answered
Chosen Option : 2

Q.75 Each of R, S, T, U, V, W and X has a duty as a cleaning agent on a different day of a week, starting from Monday to Sunday of the same week. X has duty on a day immediately before U. S and T have duties on one of the days before X. Only W has duty on the day between S and T. V has duty on Tuesday. Who has duty on Monday?

- Ans**
- 1. R
 - 2. U
 - 3. S
 - 4. X

Question ID : 7518977590
Option 1 ID : 75189730359
Option 2 ID : 75189730360
Option 3 ID : 75189730357
Option 4 ID : 75189730358
Status : Answered
Chosen Option : 1

Q.76 In which of the following cities is the Headquarters of the Ministry of Panchayati Raj located?

- Ans**
- 1. Jaipur
 - 2. New Delhi
 - 3. Chennai
 - 4. Pune

Question ID : 7518973937
Option 1 ID : 75189715748
Option 2 ID : 75189715745
Option 3 ID : 75189715747
Option 4 ID : 75189715746
Status : Answered
Chosen Option : 2

Q.77 The 'Urea Cycle' takes place in the human _____.

- Ans
- 1. pancreas
 - 2. lungs
 - 3. kidney
 - 4. liver

Question ID : 7518974410
Option 1 ID : 75189717640
Option 2 ID : 75189717639
Option 3 ID : 75189717638
Option 4 ID : 75189717637
Status : Answered
Chosen Option : 3

Q.78 In a class there are 40 students (only boys and girls). The number of girls is three-sevenths of the number of boys. Find the number of boys in the class.

- Ans
- 1. 28
 - 2. 24
 - 3. 12
 - 4. 32

Question ID : 7518976141
Option 1 ID : 75189724563
Option 2 ID : 75189724564
Option 3 ID : 75189724561
Option 4 ID : 75189724562
Status : Answered
Chosen Option : 1

Q.79 How many pillars are the core beliefs and practices of Islam?

- Ans
- 1. 5
 - 2. 9
 - 3. 7
 - 4. 3

Question ID : 7518974023
Option 1 ID : 75189716090
Option 2 ID : 75189716092
Option 3 ID : 75189716091
Option 4 ID : 75189716089
Status : Not Answered
Chosen Option : --

Q.80 Which of the following quadratic equations has one of its roots as $2 + \sqrt{5}$?

- Ans
- 1. $x^2 + 4x + 1 = 0$
 - 2. $x^2 - 4x - 1 = 0$
 - 3. $x^2 - 5x - 1 = 0$
 - 4. $x^2 + 5x + 1 = 0$

Question ID : 7518976157
Option 1 ID : 75189724628
Option 2 ID : 75189724627
Option 3 ID : 75189724626
Option 4 ID : 75189724625
Status : Not Answered
Chosen Option : --

Q.81 In October 2021, which country signed a five-year partnership agreement with India to implement a 'Green Strategic Partnership' for strengthening scientific and technology collaboration?

- Ans
- 1. Denmark
 - 2. America
 - 3. Russia
 - 4. Israel

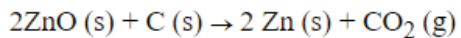
Question ID : 7518977163
Option 1 ID : 75189728649
Option 2 ID : 75189728650
Option 3 ID : 75189728651
Option 4 ID : 75189728652
Status : Answered
Chosen Option : 1

Q.82 How many such pairs of letters are there in the word 'DABSTER' (in both forward and backward directions) which have as many letters between them in the word as there are in the English alphabetical order?

- Ans
- 1. Three
 - 2. Two
 - 3. One
 - 4. More than three

Question ID : 7518977653
Option 1 ID : 75189730611
Option 2 ID : 75189730610
Option 3 ID : 75189730609
Option 4 ID : 75189730612
Status : Answered
Chosen Option : 4

Q.83 Which of the statements about the reaction below is/are correct?



- (i) Zinc is getting reduced
- (ii) Carbon is getting oxidised
- (iii) Zinc is getting oxidized.
- (iv) Carbon is getting reduced

Ans 1. only (ii)

2. Both (i) and (ii)

3. All (i), (iii), (iv)

4. only (i)

Question ID : 7518973611
Option 1 ID : 75189714442
Option 2 ID : 75189714443
Option 3 ID : 75189714444
Option 4 ID : 75189714441
Status : Answered
Chosen Option : 2

Q.84 In an election between two candidates, the winner received 1854 votes and the loser received 618 votes. What percentage of the total number of votes received by the two candidates went in favour of the winning candidate?

Ans 1. 60

2. 75

3. 80

4. 70

Question ID : 7518975830
Option 1 ID : 75189723317
Option 2 ID : 75189723320
Option 3 ID : 75189723318
Option 4 ID : 75189723319
Status : Answered
Chosen Option : 4

Q.85 A car travels 80 km at the speed of 20 km/h and the next 30 km at the speed of 30 km/h. What is its average speed?

Ans 1. 30 km/h

2. 22 km/h

3. 20 km/h

4. 40 km/h

Question ID : 7518975672
Option 1 ID : 75189722685
Option 2 ID : 75189722687
Option 3 ID : 75189722686
Option 4 ID : 75189722688
Status : Answered
Chosen Option : 2

Q.86 If the area of a circle is 196π m² then the perimeter of the circle is _____

- Ans
- 1. 88 m
 - 2. 76 m
 - 3. 44 m
 - 4. 58 m

Question ID : 7518975749
Option 1 ID : 75189722994
Option 2 ID : 75189722995
Option 3 ID : 75189722993
Option 4 ID : 75189722996
Status : Answered
Chosen Option : 1

Q.87 In the Rajya Sabha, how many members are nominated by the President of India?

- Ans
- 1. 15
 - 2. 12
 - 3. 2
 - 4. 5

Question ID : 7518977281
Option 1 ID : 75189729122
Option 2 ID : 75189729121
Option 3 ID : 75189729124
Option 4 ID : 75189729123
Status : Answered
Chosen Option : 2

Q.88 The section on Fundamental Duties in the Indian Constitution has been adopted from _____.

- Ans
- 1. Germany
 - 2. USSR
 - 3. USA
 - 4. England

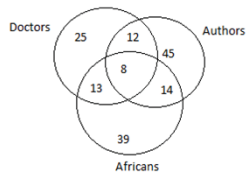
Question ID : 7518977551
Option 1 ID : 75189730202
Option 2 ID : 75189730204
Option 3 ID : 75189730201
Option 4 ID : 75189730203
Status : Answered
Chosen Option : 2

Q.89 The Nubra and the Shyok are the tributaries of River

- Ans
- 1. Sutlej
 - 2. Kaveri
 - 3. Narmada
 - 4. Indus

Question ID : 7518977542
Option 1 ID : 75189730168
Option 2 ID : 75189730166
Option 3 ID : 75189730165
Option 4 ID : 75189730167
Status : Answered
Chosen Option : 4

Q.90 Study the given diagram carefully and answer the question. The numbers in different sections indicate the number of persons.



How many Africans are there who are also authors?

- Ans
- 1. 8
 - 2. 22
 - 3. 45
 - 4. 14



Question ID : 7518977616
Option 1 ID : 75189730463
Option 2 ID : 75189730461
Option 3 ID : 75189730464
Option 4 ID : 75189730462
Status : Answered
Chosen Option : 4

Q.91 Which of the following language institutes is located in Maharashtra?

- Ans
- 1. Maulana Azad National Urdu University
 - 2. English and Foreign Languages University
 - 3. Mahatma Gandhi Antarrashtriya Hindi VishwaVidyalaya
 - 4. Rashtriya Sanskrit Vidyapeetha

Question ID : 7518977479
Option 1 ID : 75189729914
Option 2 ID : 75189729915
Option 3 ID : 75189729916
Option 4 ID : 75189729913
Status : Answered
Chosen Option : 1

Q.92 10 buckets of water fill a tank when the capacity of each bucket is 14 litres. How many buckets will be needed to fill the same tank, if the capacity of each bucket is 7 litres?

- Ans**
- 1. 20
 - 2. 23
 - 3. 18
 - 4. 15

Question ID : 7518976104
Option 1 ID : 75189724415
Option 2 ID : 75189724416
Option 3 ID : 75189724414
Option 4 ID : 75189724413
Status : Answered
Chosen Option : 1

Q.93 In this question, a statement is followed by two conclusions. Which of the two conclusions is/are true with respect to the statement?

Statement: $D < Y > E \geq A < O < C$

Conclusions:

I. $D < O$

II. $E > C$

- Ans**
- 1. Neither conclusion I nor II is true
 - 2. Only conclusion II is true
 - 3. Only conclusion I is true
 - 4. Both conclusions I and II are true

Question ID : 7518974950
Option 1 ID : 75189719800
Option 2 ID : 75189719798
Option 3 ID : 75189719797
Option 4 ID : 75189719799
Status : Answered
Chosen Option : 1

Q.94 The second five-year plan gave high priority to industrial development aimed at setting up a number of heavy industries such as steel plants, capital goods industries, etc., for which direct government participation and state involvement was needed and hence the _____ was launched.

- Ans**
- 1. Industrial Policy Resolution 1956
 - 2. Industrial Policy Resolution 1948
 - 3. Industrial Policy Statement 1980
 - 4. Industrial Policy Statement 1977

Question ID : 7518974252
Option 1 ID : 75189717006
Option 2 ID : 75189717005
Option 3 ID : 75189717008
Option 4 ID : 75189717007
Status : Answered
Chosen Option : 1

Q.95 In this question, a group of numbers/symbols is coded using letters as per the table given below and the conditions which follow. The correct combination of codes following the condition is your answer.

Number/Symbol	8	=	/	&	3	7	@	\$	2	<	%	6	+	4
Code	F	R	D	S	Z	B	P	K	U	H	Y	X	T	G

Conditions:

- (i) If the first element is a symbol and the last a number, the first element is to be coded as the code for the last element.
- (ii) If the first element is a number that is completely divisible by 3, it is to be coded as O.
- (iii) If both the second and third elements are perfect squares, the third element is to be coded as the code for the second element.

How will '6 @ & 4 =' be coded?

- Ans**
1. O P S G R
 2. T K Z G R
 3. X P S G R
 4. O P S T D

Question ID : 7518977684
 Option 1 ID : 75189730733
 Option 2 ID : 75189730735
 Option 3 ID : 75189730734
 Option 4 ID : 75189730736
 Status : Not Answered
 Chosen Option : --

Q.96 An object is placed in front of a concave mirror at a point between its focus F and pole P. The image is formed at a point _____ and is _____.

- Ans**
1. between F and C, enlarged
 2. behind the mirror, enlarged
 3. between F and C, diminished
 4. behind the mirror, diminished

Question ID : 7518976576
 Option 1 ID : 75189726304
 Option 2 ID : 75189726302
 Option 3 ID : 75189726303
 Option 4 ID : 75189726301
 Status : Answered
 Chosen Option : 2

Q.97 Three identical bulbs are connected in parallel to a battery of 6 V. If the current in the circuit is 0.6 A, the power dissipated by the battery is:

- Ans**
1. 10 W
 2. 3.6 W
 3. 5 W
 4. 0.1 W

Question ID : 7518976714
 Option 1 ID : 75189726854
 Option 2 ID : 75189726855
 Option 3 ID : 75189726853
 Option 4 ID : 75189726856

Q.98 If 5 January 2016 was a Tuesday, then what day of the week was 8 November 2015?

- Ans
- 1. Sunday
 - 2. Friday
 - 3. Saturday
 - 4. Thursday

Question ID : 7518976394
Option 1 ID : 75189725573
Option 2 ID : 75189725576
Option 3 ID : 75189725574
Option 4 ID : 75189725575
Status : Answered
Chosen Option : 1

Q.99 If the age of Ratan is one-third the age of Jatin and the sum of their ages is 84 years, then find the age of Jatin.

- Ans
- 1. 52 years
 - 2. 36 years
 - 3. 25 years
 - 4. 63 years

Question ID : 7518975933
Option 1 ID : 75189723731
Option 2 ID : 75189723730
Option 3 ID : 75189723732
Option 4 ID : 75189723729
Status : Answered
Chosen Option : 4

Q.100 During puberty, a woman's first menstrual flow is known as _____.

- Ans
- 1. menopause
 - 2. menarche
 - 3. menorrhagia
 - 4. amenorrhea

Question ID : 7518974434
Option 1 ID : 75189717733
Option 2 ID : 75189717734
Option 3 ID : 75189717736
Option 4 ID : 75189717735
Status : Not Answered
Chosen Option : --