



SSC CGL **SHIFT – 1 (13-08-2021)**

- ★ **Latest Govt Job updates**
- ★ **Private Job updates**
- ★ **Free Mock tests available**

**Visit - [teachingninja.in](https://teachingninja.in)**

## 100 Questions

---

**Que. 1** In the following question below some statements are given followed by some conclusions. Taking the given statements to be true even if they seem to be at variance from commonly known facts, read all the conclusions, and then decide which of the given conclusions logically follows the given statements.

**Statements**

All book are pencil.

All pencil are eraser.

All eraser are bottle.

All bottle are black.

**Conclusion**

I. Some eraser are black.

II. Some bottle are pencil.

III. All book are bottle.





1. Only I and III follow
2. Only I and II follow
3. All follow
4. None follow

**Testbook Solution** Correct Option - 3

---

**Que. 2** Find the best relationship among the three classes in the following diagrams:

Women, Mother, Psychologist

1. 
2. 
3. 
4. 

**Testbook Solution** Correct Option - 2

---

**Que. 3** In a certain code language, "MANAGE" is written as "VTZMZN", how can "GOOGLE" be written in that code language?

1. TLTLOV
2. TLLTOV
3. VOTTLL

4. VOTLLT

**Testbook Solution** Correct Option - 4

---

**Que. 4** In a certain code language, "SYSTEM" is written as "UAUVGO", how can "CHUNKS" be written in that code language?

1. UMPWJE
2. EJWUMP
3. EJWPMU
4. EJPWUM

**Testbook Solution** Correct Option - 3

---

**Que. 5** If in a certain coding language, 'DUSTBIN' is written as '28-18-4-40-38-42-8'. How will 'ANDROID' be written in that code language?

1. 8-18-30-36-8-28-2
2. 8-18-30-2-8-36-28
3. 8-18-30-36-8-2-28
4. 2-28-8-36-30-18-8

**Testbook Solution** Correct Option - 1

---

**Que. 6** How many triangles are there in the given figure?



1. 15
2. 13
3. 11
4. 18

**Testbook Solution** Correct Option - 3

---

**Que. 7** How many triangles are there in the given figure?



1. 20
2. 16
3. 17
4. 18

**Testbook Solution** Correct Option - 2

---

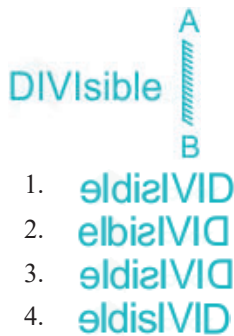
**Que. 8** Select the correct combination of mathematical signs to replace \* signs and to balance the following equation :

$$8*5*27*3*16$$

1. + - = ×
2. = - + ×
3. × - = +
4. × = - +

**Testbook Solution** Correct Option - 4

**Que. 9** Choose the correct mirror image of the given problem figure when the mirror is placed to the right of the figure.



**Testbook Solution** Correct Option - 3

**Que. 10** From the given responses, find the missing alphanumeric cluster in the series.  
R3F, P6J, N9N, L12R, ?

1. K15W
2. J15V
3. I15V
4. V15J

**Testbook Solution** Correct Option - 2

**Que. 11** **Directions:** Answer the questions based on the information given below.

There are five members in a family i.e. A, B, C, E and F. A has two children. E is daughter of F who is not a female. B is the only son of A. E is the granddaughter of A. How is B related to C?

1. Son
2. Sister
3. Father
4. Brother

**Testbook Solution** Correct Option - 4

**Que. 12** Select the pair from the options below that shares the same relation as the relation present between the word pair below.

Horse : Neigh

1. Goats : Croak
2. Duck : Quack
3. Donkey : Click
4. Mosquitoes : Chatter

**Testbook Solution** Correct Option - 2

**Que. 13**

\_\_\_\_\_ Which one set of letters when sequentially placed at the gaps in the given letter series shall complete it?

a \_ b a \_ b b \_ \_ b b a a \_ \_ a

1. bbaaab
2. ababab
3. baaabb
4. abaaab

**Testbook Solution** Correct Option - 3

---

**Que. 14** A series is given with one term missing. Select the correct alternative from the given ones that will complete the series.

RMA, PPE, NSI, ?, JYU

1. OPQ
2. LOV
3. LVN
4. LVO

**Testbook Solution** Correct Option - 4

---

**Que. 15** Find the missing number from the given alternatives.

8	9	7
3	4	5
4	5	3
96	?	36

1. 45
2. 180
3. 89
4. 150

**Testbook Solution** Correct Option - 2

---

**Que. 16** Find the odd one out :

1. KMOQ
2. SUWX
3. ACEG
4. IKMO

**Testbook Solution** Correct Option - 2

---

**Que. 17** Select the related number from the given alternatives.

20 : 30 :: ? : 72

1. 55
2. 56
3. 65
4. 54

**Testbook Solution** Correct Option - 2

**Que. 18** In the following question, select the related letter/letters from the given alternatives.  
 ADGJ : MPSV :: ? : NQTW

1. BEHK
2. BHEK
3. BEHJ
4. AEHK

**Testbook Solution** Correct Option - 1

**Que. 19** In each of the following questions, a series is given. Find the term that will replace the question mark.

23, 25, 29, ?, 53, 85

1. 34
2. 35
3. 33
4. 37

**Testbook Solution** Correct Option - 4

**Que. 20** A piece of paper is folded and cut as shown below in the question figure. From the given answer figure indicate how it would appear when unfolded.







- 1.
- 2.
- 3.
- 4.

**Testbook Solution** Correct Option - 3

**Que. 21** In which answer figure the given figure is embedded (**Rotation not allowed**)?







1. 
2. 
3. 
4. 

**Testbook Solution** Correct Option - 3

**Que. 22** What will be the next figure in the series?

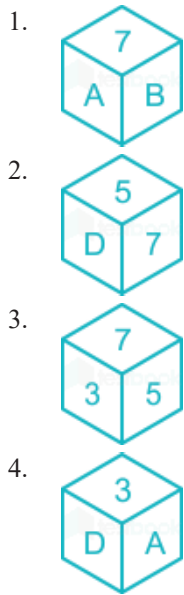


1. 
2. 
3. 
4. 

**Testbook Solution** Correct Option - 1

**Que. 23** By folding the given paper, which of the following cube can be made?





**Testbook Solution** Correct Option - 4

**Que. 24** Arrange the following words according to the dictionary order:

1. Programmer
2. Processor
3. Progress
4. Permanent
5. Persistent

1. 3, 5, 4, 2, 1
2. 4, 5, 2, 1, 3
3. 5, 3, 1, 2, 4
4. 2, 4, 5, 3, 1

**Testbook Solution** Correct Option - 2

**Que. 25** In this question, which one of the given responses would be a meaningful order of the following words.

1. Flower
2. Seed
3. Plant
4. Fruits
5. Tree

1. 2, 3, 5, 1, 4
2. 2, 1, 3, 5, 4
3. 2, 3, 1, 4, 5
4. 2, 1, 4, 5, 3

**Testbook Solution** Correct Option - 1

**Que. 26** Who is the author of the famous Arabic book “Kitab ul Hind”?

1. Birbal
2. Al-Biruni



3. Mahmood
4. Mohammed

**Testbook Solution** Correct Option - 2

---

**Que. 27** Which of the following festivals celebrated in Odisha?

1. Chandan Yatra
2. Hornbill Festival
3. Chapchar Kut
4. Yaosang

**Testbook Solution** Correct Option - 1

---

**Que. 28** The structural and functional units of kidney is called \_\_\_\_\_.

1. Nephrons
2. Neurons
3. Medulla
4. Cortex

**Testbook Solution** Correct Option - 1

---

**Que. 29** What was the main objective of the digital India scheme ?

1. Manufacture in India and sell the products worldwide
2. Development of poor people by providing skill training
3. To increase the internet and broadband connection in rural areas
4. Cleanliness across the country

**Testbook Solution** Correct Option - 3

---

**Que. 30** As of December 2020, who among the following is the Governor of Odisha?

1. Bandaru Dattatreya
2. Jagdish Mukhi
3. Acharya Devvrat
4. Ganeshi Lal

**Testbook Solution** Correct Option - 4

---

**Que. 31** Which player has recently won the title of Yonex Thailand Badminton Open 2021 in women's category ?

1. Carolina Marine
2. PV Sindhu
3. Mstugu Askawa
4. Tajju ying

**Testbook Solution** Correct Option - 1

---

**Que. 32** In IPL, AB De Villiers plays for which team?

1. Chennai Super King
2. Royal Challengers Bangalore
3. Mumbai Indians

4. Kings XXI Punjab

**Testbook Solution** Correct Option - 2

---

**Que. 33** What is the capital of New Zealand?

1. Port Vila
2. Palikir
3. Wellington
4. Majuro

**Testbook Solution** Correct Option - 3

---

**Que. 34** Electron volt is a unit of:

1. Energy
2. Momentum
3. Charge
4. Potential difference

**Testbook Solution** Correct Option - 1

---

**Que. 35** Which one of the given responses would be a meaningful order of the following?

1. Chaudhary Charan Singh
  2. Morarji Desai
  3. Indira Gandhi
  4. Jawaharlal Nehru
  5. Lal Bahadur Shastri
1. 4, 5, 3, 2, 1
  2. 4, 1, 3, 2, 5
  3. 4, 5, 2, 3, 1
  4. 4, 5, 3, 1, 2

**Testbook Solution** Correct Option - 1

---

**Que. 36** Eastern Ghats passes through which of the following states?

1. Odisha
2. Karnataka
3. Bihar
4. Punjab

**Testbook Solution** Correct Option - 1

---

**Que. 37** What is the national game of Thailand?

1. Volleyball
2. Boxing
3. Wrestling
4. Badminton

**Testbook Solution** Correct Option - 2

---

**Que. 38**

---

Recently the 2021 Padma Awards were announced by the Indian government. Which of the following people are **not** among the recipient of the Padma Vibhushan 2021?

1. Shinzo Abe
2. Dr. Belle Monappa Hegde
3. Sudarshan Sahoo
4. Tarun Gogoi

**Testbook Solution** Correct Option - 4

---

**Que. 39** \_\_\_\_\_ was one of the founders of the Hindustan Socialist Republican Association.

1. Lala Lajpat Rai
2. Feroz Shah Tuglaq
3. Veer Savarkar
4. Chandrashekhar Azad

**Testbook Solution** Correct Option - 4

---

**Que. 40** Siju bird sanctuary is located in which state?

1. Mizoram
2. Meghalaya
3. Jharkhand
4. Assam

**Testbook Solution** Correct Option - 2

---

**Que. 41** Who has won the Rabindranath Tagore Literary Prize 2020?

1. Fang Fang
2. Raj Kamal Jha
3. R C Bhargava
4. Dinyar Patel

**Testbook Solution** Correct Option - 2

---

**Que. 42** Kartarpur Sahib corridor connects Dera Baba Nanak Shrine in Gurdaspur, India to Kartarpur Gurudwara in Pakistan, which is located near the banks of the river \_\_\_\_\_.

1. Sutlej
2. Chenab
3. Ravi
4. Jhelum

**Testbook Solution** Correct Option - 3

---

**Que. 43** Dayanand Saraswati was the founder of which of the following missions?

1. Brahma Samaj
2. Chinmaya Mission
3. Arya Samaj
4. Prarthana Samaj

**Testbook Solution** Correct Option - 3

---

**Que. 44** Van Dhan Vikas Yojana programme is of which state?

1. Assam
2. Mizoram
3. Manipur
4. Meghalaya

**Testbook Solution** Correct Option - 3

---

**Que. 45** What is the total number of districts in Madhya Pradesh?

1. 48
2. 52
3. 60
4. 44

**Testbook Solution** Correct Option - 2

---

**Que. 46** The dimensional formula of linear momentum of a system is:

1.  $[M^1 L^1 T^{-1}]$
2.  $[M^0 L^0 T^{-2}]$
3.  $[M^0 L^1 T^{-1}]$
4.  $[M^3 L^0 T^{-2}]$

**Testbook Solution** Correct Option - 1

---

**Que. 47** Which river is also known as 'Dakshin Ganga'?

1. Kaveri river
2. Godavari river
3. Krishna river
4. Narmada river

**Testbook Solution** Correct Option - 2

---

**Que. 48** When did the second round table conference happened?

1. March, 1930
2. January, 1931
3. September, 1931
4. March, 1932

**Testbook Solution** Correct Option - 3

---

**Que. 49** When was the Planning Commission of India established?

1. 1951
2. 1950
3. 1949
4. 1952

**Testbook Solution** Correct Option - 2

---

**Que. 50** Which state government launched Arthika Spandana Yojana?

1. Rajasthan

2. Kerala
3. Karnataka
4. Assam

**Testbook Solution** Correct Option - 3

---

**Que. 51** A person sells an article at 21% discount and gets 21% profit on it, then find the ratio of cost price and marked price.

1. 121 : 79
2. 79 : 121
3. 121 : 89
4. 132 : 99

**Testbook Solution** Correct Option - 2

---

**Que. 52**  $\operatorname{cosec}\theta/(\operatorname{cosec}\theta + 1) + \operatorname{cosec}\theta/(\operatorname{cosec}\theta - 1) - 2\tan^2\theta$

1. 1/2
2. 0
3. -2
4. 2

**Testbook Solution** Correct Option - 4

---

**Que. 53** If  $8(x + y)^3 - 27(x - y)^3 = (5y - x)(Ax^2 + By^2 + Cxy)$  then find  $A + B - C$ .

1. 32
2. 18
3. 26
4. 36

**Testbook Solution** Correct Option - 4

---

**Que. 54** If the amount of A is 45% more than B, C is 60% less than A and B together and D is 20% less than C and the amount difference between B and D is Rs. 21,600 then find the amount of C.

1. Rs. 82,000
2. Rs. 98,000
3. Rs. 96,000
4. Rs. 84,000

**Testbook Solution** Correct Option - 2

---

**Que. 55** If  $x + 1/x = 4$  then find the value of  $x^5 + 1/x^5$ .

1. 724
2. 728
3. 720
4. 732

**Testbook Solution** Correct Option - 1

---

**Que. 56** **Direction:** Study the table and answer the following questions.

The table shows units of electricity consumed in four cities in the following years.

---

	Kolkata	Mumbai	Delhi	Lucknow
2013	3000	4200	1500	2000
2014	1250	2750	1850	1650
2015	1800	3050	1750	1680
2016	5000	3500	1560	1550
2017	4500	3250	3800	4500

Electricity consumption in Mumbai in 2018 is 12% less than electricity consumption in Kolkata in 2016. What is the electricity consumption in Mumbai in 2018?

- 4400 units
- 2200 units
- 2020 units
- 2000 units

**Testbook Solution** Correct Option - 1

**Que. 57**  $\cos^2\theta/(\cot^2\theta \times \cos^2\theta) = 3$ , Find  $\tan\theta + \operatorname{cosec}\theta$

- $3\sqrt{5}$
- $5/\sqrt{3}$
- $5\sqrt{3}$
- $\sqrt{3}/5$

**Testbook Solution** Correct Option - 2

**Que. 58** If a number  $676xy$  is divisible by 3, 7, and 11 then find the value of  $(3x - 5y)$ .

- 4
- 7
- 6
- 9

**Testbook Solution** Correct Option - 4

**Que. 59**  $\Delta ABC$  and  $\Delta PQR$  are two similar triangles and their respective areas are  $81 \text{ cm}^2$  and  $64 \text{ cm}^2$ . If the length of the median of  $\Delta ABC$  is  $10.8 \text{ cm}$  then find the length of the median of  $\Delta PQR$ .

- $10.6 \text{ cm}^2$
- $9.6 \text{ cm}^2$
- $8.53 \text{ cm}^2$
- $12.15 \text{ cm}^2$

**Testbook Solution** Correct Option - 2

**Que. 60** If  $x + y = 4$  and  $1/x + 1/y = 16/15$  find  $x^3 + y^3$ .

- 19
- 17
- 15
- 13

**Testbook Solution** Correct Option - 1

- Que. 61** Study the following table chart carefully and answer the questions below:  
The chart shows the number of employees in various departments in 5 companies.

	TCS	Accenture	Capgemini	Infosys	HSBC
Technical	200	350	270	70	120
Operation	175	200	150	340	180
H.R	50	30	25	35	20
Finance	300	50	120	100	75

Find the average number of employees from the technical department hired by all companies taken together.

1. 201
2. 205
3. 102
4. 202

**Testbook Solution** Correct Option - 4

- Que. 62** In a circle O is the center and the length of diameter and one chord is 25 cm and 21 cm respectively. Then find the perpendicular distance from center to the chord.

1.  $\sqrt{46}$  cm
2.  $\sqrt{23}$  cm
3.  $\sqrt{21}$  cm
4.  $\sqrt{34}$  cm

**Testbook Solution** Correct Option - 1

- Que. 63** The average of 28 numbers is 77 and the average of the first 14 numbers is 72 and the average of the last 15 numbers is 79. If we remove the 14th number. Then find the new average of remaining numbers at one decimal place.

1. 76.2
2. 78.4
3. 75.2
4. 79.6

**Testbook Solution** Correct Option - 2

- Que. 64** Two-person A and B can do a piece of work alternately when B starts the work in  $11\frac{2}{5}$  days and A can do the same work in 24 days, then find the time taken by B to complete the  $\frac{5}{6}$  unit of work.

1. 10 days
2. 16 days
3. 8 days
4. 12 days

**Testbook Solution** Correct Option - 4

- Que. 65** **Directions:** The following table presents the number of units of the product produced and sold by a company during six years

Years	No. of units (in thousands)	
	Produced	Sold
2012	320	220
2013	338	328

2014	432	380
2015	256	242
2016	504	470
2017	680	630

Find the ratio between total production and total sales

1. 227 : 253
2. 2530 : 2278
3. 253 : 227
4. 253 : 220

**Testbook Solution** Correct Option - 3

**Que. 66** ABCD is a cyclic quadrilateral having  $\angle ADC = 78^\circ$ , where DC and AB are extended so that they meet at E such that  $\angle CEB$  is  $52^\circ$  and AD and BC extended to meet at F. Find the value of  $\angle AFB$

1.  $38^\circ$
2.  $78^\circ$
3.  $28^\circ$
4.  $102^\circ$

**Testbook Solution** Correct Option - 3

**Que. 67** A person invests Rs. 8192 at 15% compounded every 5 months for  $1\frac{1}{4}$  years. Then find the compound interest.

1. Rs. 1544
2. Rs. 1764
3. Rs. 1634
4. Rs. 1884

**Testbook Solution** Correct Option - 3

**Que. 68** A merchant purchases 15 articles in Rs. 140 each and other 10 articles in Rs. 120 each and if he sells each article at Rs. 143, then find the profit percent of merchant.

1. 8.33%
2. 6.25%
3. 20%
4. 12.5%

**Testbook Solution** Correct Option - 1

**Que. 69** What must be subtracted from 19, 28, 55, 91 so that they are in the same proportion

1. 4
2. 9
3. 7
4. 6

**Testbook Solution** Correct Option - 3

**Que. 70** The area of  $\triangle ABC$  and  $\triangle PQR$  is  $144 \text{ cm}^2$  and  $49 \text{ cm}^2$  respectively, if the length of the side AC is 9 cm, then find PR.



1. 4.5 cm
2. 5.25 cm
3. 5.5 cm
4. 4.25 cm

**Testbook Solution** Correct Option - 2

---

**Que. 71** If the side of a rhombus is 13 cm and the length its one diagonal is 24 cm. Find area of the rhombus.

1.  $120 \text{ cm}^2$
2.  $105 \text{ cm}^2$
3.  $142 \text{ cm}^2$
4.  $144 \text{ cm}^2$

**Testbook Solution** Correct Option - 1

---

**Que. 72** Items sold in 2014 is how much percent more than items produced by company in 2017.

1. 50.88%
2. 42.8%
3. 55.88%
4. 65.88%

**Testbook Solution** Correct Option - 3

---

**Que. 73** Simplify the given expression:  
 $\{32 + (45\% \text{ of } 400 - 20 \times 6)\} \div \{25\% \text{ of } 72 + (11 \times 3 - 4 \times 7)\}$

1. 6
2. 2
3. 4
4. 8

**Testbook Solution** Correct Option - 3

---

**Que. 74** Find the value of  $\cot 25^\circ \times \cot 35^\circ \times \cot 45^\circ \times \cot 55^\circ \times \cot 65^\circ$

1.  $\sqrt{3}$
2. 2
3. 1
4. 0

**Testbook Solution** Correct Option - 3

---

**Que. 75** P and Q are two points that divide the total length of X and Y into 3 equal parts and the ratio of time taken by a boat from X to Y and Y to X is 4 : 5 then find the ratio of Downstream and speed of stream.

1. 5 : 1
2. 8 : 1
3. 9 : 1
4. 10 : 1

**Testbook Solution** Correct Option - 4

---

**Que. 76** Choose the correct synonym:

**GENERIC**

1. Universal
2. uncommon
3. special
4. none of the above

**Testbook Solution** Correct Option - 1

---

**Que. 77** Choose the correct synonym:

**REGIME**

1. pampered
2. uncontrollable
3. Rule
4. none of the above

**Testbook Solution** Correct Option - 3

---

**Que. 78** Choose the correct antonym:

**GRADUAL**

1. slow
2. abrupt
3. procrastinate
4. none of the above

**Testbook Solution** Correct Option - 2

---

**Que. 79** Choose the correct antonym:

**SEIZE**

1. waste
2. release
3. capture
4. snatch

**Testbook Solution** Correct Option - 2

---

**Que. 80** Choose the most appropriate meaning of the given idiom:

Raise the bar

1. Draw a line
2. raise the standards which need to be met in order to qualify for something.
3. Get rich
4. none of the above

**Testbook Solution** Correct Option - 2

---

**Que. 81** Choose the most appropriate meaning of the given idiom:

Bang for one's buck

1. to steal money
2. to win a lottery

3. Value for one's money
4. none of these

**Testbook Solution** Correct Option - 3

---

**Que. 82** Choose one word for the following meaning:

A group of cattle or sheep

1. grove
2. herd
3. torrent
4. Horde

**Testbook Solution** Correct Option - 2

---

**Que. 83** Choose the most appropriate word for the given meaning:

group of three novels

1. Singular
2. trilogy
3. solitary
4. dual

**Testbook Solution** Correct Option - 2

---

**Que. 84** Choose the correct spelling:

1. manageable
2. managable
3. manageble
4. none of these

**Testbook Solution** Correct Option - 1

---

**Que. 85** Choose the correct spelling:

1. wildarness
2. wilderness
3. wilnerness
4. none of these

**Testbook Solution** Correct Option - 2

---

**Que. 86** Given below are four jumbled sentences. Select the option that gives their correct order.

A. For example, Rani Lakshmbai of Jhansi wanted the Company to recognise her adopted son as the heir to the kingdom after the death of her husband.

B. Since the mid-eighteenth century, nawabs and rajas had seen their power erode.

C. Many ruling families tried to negotiate with the Company to protect their interests.

D. They had gradually lost their authority and honour.

1. BDCA
2. CDBA
3. ACDB
4. DABC

**Testbook Solution** Correct Option - 1

---

---

**Que. 87** Given below are four jumbled sentences. Select the option that gives their correct order.

- A. So desert animals have had to find different ways of coping with the harsh conditions.
  - B. For example, gerbils spend the hottest part of the day in cool underground burrows.
  - C. And strange insects called darkling beetles are experts at catching drops of moisture through their legs.
  - D. Deserts are the driest places on earth and sometimes go for months, or even years, without rain.
- 1. BCDA
  - 2. CDBA
  - 3. ADCB
  - 4. DABC

**Testbook Solution** Correct Option - 4

---

**Que. 88** In the question given below, there are five blanks. Choose the appropriate answers for the blank as per the question asked:

Among 20,000 bee species globally, honey bees \_\_\_\_ (1) \_\_\_\_ the well-known taxa because of their apicultural use and \_\_\_\_ (2) \_\_\_\_ pollinating agents. Ten extant species, the dwarf, the giant and the cavity nesting honey bees including the imported European honey bee, *Apis mellifera*, are found in Asia. Four species each in India and Thailand, five species each \_\_\_\_ (3) \_\_\_\_ China and Indonesia, are reported besides *mellifera*. Only recently, *Apis indica* (Fabricius, 1798), the Plains Honey Bee of south India, and *breviligula*, the Giant Philippine Honey Bee, are recognized as valid species. Many works had been done on the honey bees nevertheless, there is no report on the indigenous honey bee species of Bhutan \_\_\_\_ (4) \_\_\_\_ *Apis laboriosa*, *dorsata* and *florae* are regarded as native to Bhutan without \_\_\_\_ (5) \_\_\_\_ authentic study. This information reports five indigenous species and *mellifera*, which is imported from India in 1986.

What will come in blank 1?

- 1. are
- 2. is
- 3. nor
- 4. neither

**Testbook Solution** Correct Option - 1

---

**Que. 89** What will come in blank number 2?

- 1. destructive
- 2. aroma
- 3. effective
- 4. none of the above

**Testbook Solution** Correct Option - 3

---

**Que. 90** What will come in blank number 3?

- 1. at
- 2. in
- 3. from
- 4. for

**Testbook Solution** Correct Option - 2

---

**Que. 91** What will come in blank number 4?

1. although
2. from
3. neither
4. nor

**Testbook Solution** Correct Option - 1

---

**Que. 92** What will come in blank number 5?

1. many
2. any
3. none
4. one

**Testbook Solution** Correct Option - 2

---

**Que. 93** Find the part of the given sentence that has an error in it. If there is no error, choose 'No error'.

They expected that (1)/ Mr. Yadav would (2)/ joined them (3)/ No error (4)

1. 4
2. 2
3. 3
4. 1

**Testbook Solution** Correct Option - 3

---

**Que. 94** In the given question, a sentence is divided into four parts. Read the sentence given below to find out if it contains any error. The error, if any, will be in one part of the sentence. Ignore errors of punctuation if any.

Each of (A)/ the girls (B)/ has their (C)/ own kitchen set. (D)/

1. A
2. B
3. C
4. D

**Testbook Solution** Correct Option - 3

---

**Que. 95** **Direction:** Spot the erroneous parts, if any, in the following sentences:

(a) Unless I do not hear / (b) from you, I will not see you / (c) at two o'clock. / (d) No error

1. (a)
2. (b)
3. (c)
4. (d)

**Testbook Solution** Correct Option - 1

---

**Que. 96** **Direction:** Select the correct active form of the given sentence.

You are forbidden to go out until we come back from work.

1. We forbid you not to go out until we come back from work.
2. Let yourself not go out until we come back from work.
3. Do not go out until we come back from work.

4. Did not go out until we come back from work.

**Testbook Solution** Correct Option - 3

---

**Que. 97** **Direction:** Select the correct active form of the given sentence.

The queen, as well as her sons, was sent into exile by the king.

1. The queen sent her sons into exile by the king.
2. The king had sent the queen, as well as her sons, into exile.
3. The king sent the queen, as well as her sons, into exile.
4. The king sends the queen, as well as her sons, into exile.

**Testbook Solution** Correct Option - 3

---

**Que. 98** **Direction:** In these questions, a sentence has been given in Direct/Indirect speech. Out of the four alternatives suggested select the one which best expresses the same sentence in Indirect/Direct speech.

He told me that he had expected me to attend the function.

1. He said to me, "I expect you to attend the function."
2. He said to me, "I expected you to attend the function."
3. He said to me, "I was expecting you to attend the function."
4. He said to me, "I have expected you to attend the function."

**Testbook Solution** Correct Option - 2

---

**Que. 99** **Direction:** In these questions, a sentence has been given in Direct/Indirect speech. Out of the four alternatives suggested select the one which best expresses the same sentence in Indirect/Direct speech.

Tim said, "I went to Australia to visit my family".

1. Tim said that he went to Australia to visit his family.
2. Tim said that he had gone to Australia to visit his family.
3. Tim said that he is going to Australia to visit his family.
4. Tim said that he was going to Australia to visit his family.

**Testbook Solution** Correct Option - 2

---

**Que. 100** **Choose the correct spelling:**

1. piecefully
2. peicefully
3. peacefully
4. paecefully

**Testbook Solution** Correct Option - 3