



- ★ Latest Govt Job updates
- ★ Private Job updates
- ★ Free Mock tests available

Visit - teachingninja.in

Examination for Selection Posts Phase VII 2019

Roll No.	
Registration No.	
Name	
Test Venue	iON Digital Zone iDZ 2 Patliputra
Test Time	1:00 PM - 2:00 PM
Test Date	16/10/2019
Subject	Selection Post Higher Secondary Level

Section : General Intelligence

Q.1 किसी कूट भाषा में, यदि 'MOULD' को '1345124' के रूप में कूटबद्ध किया गया है, 'PASTRY' को '16119201825' के रूप में कूटबद्ध किया गया है, तो उसी भाषा में 'HONEY' को कैसे कूटबद्ध किया जाएगा?

- Ans
- 1. 7414525
 - 2. 81614225
 - 3. 81614525
 - 4. 8414225

Question ID : 368907324
Status : Answered
Chosen Option : 3

Q.2 उस अक्षरों के संयोजन का चयन करें जो निम्नलिखित अक्षर श्रृंखला के रिक्त स्थानों में क्रमिक रूप से रखे जाने पर श्रृंखला को पूरा करेगा।

H _ D P _ O H K _ _ M O _ K D P M _

- Ans
- 1. KMDOHO
 - 2. KMDPHO
 - 3. MHDKDO
 - 4. KHDPDO

Question ID : 368907326
Status : Answered
Chosen Option : 2

Q.3 किसी कूट भाषा में, 'LOGISTIC' को 'IGOLCITS' लिखा जाता है। उस भाषा में 'ATTITUDE' को कैसे लिखा जाएगा?

- Ans
- 1. ITTAEDUT
 - 2. TTIAUTDE
 - 3. TAITUTED
 - 4. ITTAUTDE

Question ID : 368907320
Status : Answered
Chosen Option : 1

Q.4 निम्नलिखित श्रृंखला को पूरा करने के लिए प्रश्न चिह्न (?) के स्थान पर कौन-सा अक्षर-समूह आएगा?

PLCR, MOZU, JRWX, GUTA, ?

- Ans
- 1. DXQD
 - 2. DYQE
 - 3. DYPE
 - 4. EXQD

Question ID : 368907313
Status : Answered
Chosen Option : 1

Q.5 उस विकल्प का चयन करें जो तीसरी संख्या से उसी तरह से संबंधित है जैसे दूसरी संख्या पहली संख्या से संबंधित है।

4 : 80 :: 5 : ?

- Ans
- 1. 140
 - 2. 160
 - 3. 130
 - 4. 150

Question ID : 368907332
Status : Answered
Chosen Option : 4

Q.6 A + B का अर्थ है 'A, B का पिता है'
A - B का अर्थ है 'A, B की बेटी है'
A × B का अर्थ है 'A, B की मां है'
A ÷ B का अर्थ है 'A, B की बहन है'
यदि $U + S ÷ M × R - L$ है, तो U, L से कैसे संबंधित है?

- Ans
- 1. दादा
 - 2. पिता
 - 3. पति
 - 4. ससुर

Question ID : 368907327
Status : Answered
Chosen Option : 4

Q.7 किसी कूट भाषा में, यदि 'TRANSIT' को '202' के रूप में कूटबद्ध किया जाता है, तो उसी भाषा में 'ROUTINE' को कैसे कूटबद्ध किया जाएगा?

- Ans
- 1. 202
 - 2. 204
 - 3. 200
 - 4. 198

Question ID : 368907322
Status : Answered
Chosen Option : 2

Q.8 नीचे दो कथन तथा चार निष्कर्ष I, II, III और IV दिए गए हैं। कथनों को सत्य मानते हुए, भले ही वे सामान्यतः ज्ञात तथ्यों से भिन्न प्रतीत होते हैं, यह निर्णय करें कि कौन-सा निष्कर्ष कथनों का तार्किक रूप से अनुसरण

करता/करते हैं।

कथन:

सभी ट्रेनें स्कूटर हैं।
सभी बसें स्कूटर हैं।

निष्कर्ष:

- I. कुछ स्कूटर ट्रेनें हैं।
- II. कोई भी ट्रेन बस नहीं है।
- III. कुछ ट्रेनें बसें हैं।
- IV . कोई भी स्कूटर ट्रेन नहीं है।

- Ans
- 1. निष्कर्ष I और या तो निष्कर्ष III या IV अनुसरण करते हैं।
 - 2. निष्कर्ष I और या तो निष्कर्ष II या III अनुसरण करते हैं।
 - 3. केवल निष्कर्ष I और III अनुसरण करते हैं।
 - 4. केवल निष्कर्ष I और IV अनुसरण करते हैं।

Question ID : 368907330

Status : Answered

Chosen Option : 2

Q.9 'दिलचस्प' उसी तरह से 'उबाऊ' से संबंधित है, जैसे 'विकर्षण' ' _____ ' से संबंधित है।

- Ans
- 1. डर
 - 2. आकर्षण
 - 3. भ्रम
 - 4. सनसनी

Question ID : 368907318

Status : Answered

Chosen Option : 2

Q.10 किसी कूट भाषा में, 'SERVICE' को 'THSWLDH' लिखा जाता है। उस भाषा में 'PERSONAL' को कैसे लिखा जाएगा?

- Ans
- 1. QHSURPDN
 - 2. QHSTRODM
 - 3. QHSTSODN
 - 4. QFSTQPEN

Question ID : 368907319

Status : Not Attempted and Marked For Review

Chosen Option : --

Q.11 निम्नलिखित श्रृंखला में प्रश्न चिह्न (?) के स्थान पर कौन-सी संख्या आएगी?

17, 35, 69, ?, 277, 555

- Ans
- 1. 136
 - 2. 138
 - 3. 139
 - 4. 137

Question ID : 368907331

Status : Answered

Chosen Option : 3

Q.12 यदि 'A' का अर्थ 'विभाजन' है, B का अर्थ 'गुणा' है, C का अर्थ 'घटाना' है और D का अर्थ 'जोड़ना' है, तो निम्नलिखित समीकरण का मान क्या है?

$$25 B 5 D 6 (5 B 2) C 18 A 3 = ?$$

- Ans
- 1. 179
 - 2. 175
 - 3. 155
 - 4. 159

Question ID : 368907333
Status : Answered
Chosen Option : 1

Q.13 नीचे दो कथन तथा तीन निष्कर्ष I, II और III दिए गए हैं। कथनों को सत्य मानते हुए, भले ही वे सामान्यतः ज्ञात तथ्यों से भिन्न प्रतीत होते हैं, यह निर्णय करें कि कौन-सा निष्कर्ष कथनों का तार्किक रूप से अनुसरण करता/करते हैं।

कथन:
कुछ उपहार आभूषण हैं।
सभी आभूषण डिजाइन हैं।

निष्कर्ष:
I. कुछ डिजाइन उपहार हैं।
II. कुछ आभूषण उपहार हैं।
III. कोई भी डिजाइन उपहार नहीं है।

- Ans
- 1. केवल निष्कर्ष II और III अनुसरण करते हैं।
 - 2. सभी निष्कर्ष अनुसरण करते हैं।
 - 3. या तो निष्कर्ष I या III अनुसरण करता है।
 - 4. केवल निष्कर्ष I और II अनुसरण करते हैं।

Question ID : 368907329
Status : Answered
Chosen Option : 4

Q.14 उस विकल्प का चयन करें जिसमें दी गई आकृति अंतर्निहित है। (आकृति को घुमाने की अनुमति नहीं है)



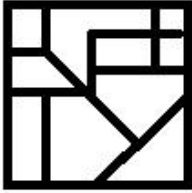
Ans

- 1.
- 2.

✗ 3.



✗ 4.



Question ID : 368907336

Status : Answered

Chosen Option : 1

Q.15 किसी कूट भाषा में 'TEMPER' को 'NFUSFQ' लिखा जाता है। उस भाषा में 'PRINCE' को कैसे लिखा जाएगा?

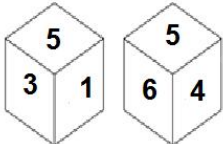
- Ans
- ✗ 1. KRPFEP
 - ✓ 2. JSQFDO
 - ✗ 3. IRPECN
 - ✗ 4. JSPGEP

Question ID : 368907321

Status : Answered

Chosen Option : 2

Q.16 एक ही पासे की दो भिन्न-भिन्न स्थितियां दिखाई गई हैं, जिनके छह फलकों पर संख्या 1 से 6 अंकित की गई है। संख्या '2' दर्शाने वाले फलक के विपरीत फलक पर कौन-सी संख्या है?



- Ans
- ✗ 1. 4
 - ✗ 2. 1
 - ✗ 3. 3
 - ✓ 4. 5

Question ID : 368907335

Status : Answered

Chosen Option : 4

Q.17 मुश्ताक और अब्दुल भाई हैं। फराह, मुश्ताक की मां हैं। लतीफ के इकलौते बेटे की शादी फराह से हुई है। हामिद, अब्दुल और गप्फार के पिता हैं। फराह का गप्फार से क्या संबंध है?

- Ans
- ✗ 1. नानी
 - ✗ 2. बेटी
 - ✗ 3. चाची
 - ✓ 4. माता

Question ID : 368907328

Status : Answered
Chosen Option : 4

Q.18 उस अक्षरों के संयोजन का चयन करें जो निम्नलिखित अक्षर श्रृंखला के रिक्त स्थानों में क्रमिक रूप से रखे जाने पर श्रृंखला को पूरा करेगा।

C _ _ Z _ T Q _ C T _ Z C _ Q Z

- Ans
- 1. TQCZCU
 - 2. TQCZQT
 - 3. TCCZCT
 - 4. TCCZTC

Question ID : 368907325
Status : Answered
Chosen Option : 2

Q.19 निम्नलिखित श्रृंखला को पूरा करने के लिए प्रश्न चिह्न (?) के स्थान पर कौन-सा अक्षर-समूह आएगा?

POC, VUI, BAO, ?

- Ans
- 1. GGU
 - 2. HGU
 - 3. HFU
 - 4. GHV

Question ID : 368907314
Status : Answered
Chosen Option : 2

Q.20 उस विकल्प का चयन करें जो तीसरे शब्द से उसी तरह संबंधित है जैसे दूसरा शब्द पहले शब्द से संबंधित है।

मध्य प्रदेश : भोपाल :: असम : ?

- Ans
- 1. उत्तर-पूर्व
 - 2. दिसपुर
 - 3. राज्य
 - 4. इम्फाल


Question ID : 368907317
Status : Answered
Chosen Option : 2

Q.21 किसी कूट भाषा में, यदि 'PROFITABLE' को '10' के रूप में कूटबद्ध किया जाता है, 'RESEARCH' को '8' के रूप में कूटबद्ध किया जाता है, तो उसी भाषा में 'DEVELOPMENT' को कैसे कूटबद्ध किया जाएगा?

- Ans
- 1. 13
 - 2. 10
 - 3. 11
 - 4. 12

Question ID : 368907323
Status : Answered
Chosen Option : 3

Q.22 उस आकृति का चयन करें जो निम्नलिखित आकृति श्रृंखला में अगले स्थान पर आएगी।



Ans

✗ 1.



✗ 2.



✗ 3.



✓ 4.



Question ID : 368907334

Status : Answered

Chosen Option : 4

Q.23 अंग्रेजी शब्दकोश के अनुसार कौन-सा विकल्प निम्नलिखित शब्दों के सही क्रम का प्रतिनिधित्व करता है?

1. Reaction
2. Reality
3. Remorse
4. Reading
5. Reactor

Ans ✗ 1. 3, 4, 2, 1, 5

✗ 2. 1, 5, 2, 4, 3

✗ 3. 1, 3, 5, 2, 4

✓ 4. 1, 5, 4, 2, 3

Question ID : 368907316

Status : Answered

Chosen Option : 4

Q.24 निम्नलिखित शब्दों को तार्किक और सार्थक क्रम में व्यवस्थित करते हुए सही विकल्प का चयन कीजिए।

1. प्रवेश परीक्षा
2. आवेदन करना
3. प्रवेश
4. परिणाम
5. कक्षाएं

Ans

- 1. 5, 2, 1, 3, 4
- 2. 2, 3, 5, 4, 1
- 3. 3, 1, 5, 4, 2
- 4. 2, 1, 4, 3, 5

Question ID : 368907315
 Status : Answered
 Chosen Option : 4

Q.25 यदि नीचे दी गई आकृति के दाएं ओर दर्पण रखा जाता है तो बनने वाली सही दर्पण छवि का चयन करें।



Ans

- 1.
- 2.
- 3.
- 4.

Question ID : 368907337
 Status : Answered
 Chosen Option : 2

Section : English Language Basic Knowledge

Q.1 Select the most appropriate antonym of the given word.

ACCUSE

- 1. defend
- 2. assault
- 3. apply
- 4. blame

Question ID : 368907347
 Status : Answered
 Chosen Option : 1

Q.2 Select the correct Passive Voice form of the sentence.

I have booked the tickets for our forthcoming trip to Mumbai.

- Ans
- 1. The tickets for our forthcoming trip to Mumbai are being booked by us.
 - 2. I had been booking the tickets for our forthcoming trip to Mumbai.
 - 3. Booking is done by me of tickets for our forthcoming trip to Mumbai.
 - 4. The tickets for our forthcoming trip to Mumbai have been booked by me.

Question ID : 368907339
Status : Answered
Chosen Option : 4

Comprehension:

Read the following passage and fill in each blank with a word chosen from the given options.

A group of youngsters joined a procession of devotees who had (1)_____ to immerse Ganesha idols in the Yamuna on the occasion of the Ganesha festival. When (2)_____ devotees were turned back by officials as immersion is banned, the youngsters stayed (3)_____, walked a kilometre away and jumped into the river. (4)_____ they were caught in the fast current . Two of them were able (5)_____ to safety whereas four of them died.

SubQuestion No : 3

Q.3 Choose the most appropriate word to fill in blank number 1

- Ans
- 1. prayed
 - 2. gathered
 - 3. stayed
 - 4. promised

Question ID : 368907354
Status : Answered
Chosen Option : 1

Comprehension:

Read the following passage and fill in each blank with a word chosen from the given options.

A group of youngsters joined a procession of devotees who had (1)_____ to immerse Ganesha idols in the Yamuna on the occasion of the Ganesha festival. When (2)_____ devotees were turned back by officials as immersion is banned, the youngsters stayed (3)_____, walked a kilometre away and jumped into the river. (4)_____ they were caught in the fast current . Two of them were able (5)_____ to safety whereas four of them died.

SubQuestion No : 4

Q.4 Choose the most appropriate word to fill in blank number 2

- Ans
- 1. the
 - 2. any
 - 3. a
 - 4. much

Question ID : 368907355
Status : Answered
Chosen Option : 3

Comprehension:

Read the following passage and fill in each blank with a word chosen from the given options.

A group of youngsters joined a procession of devotees who had (1)_____ to immerse Ganesha idols in the Yamuna on the occasion of the Ganesha festival. When (2)_____

devotees were turned back by officials as immersion is banned, the youngsters stayed (3)____, walked a kilometre away and jumped into the river. (4)____ they were caught in the fast current . Two of them were able (5)____ to safety whereas four of them died.

SubQuestion No : 5

Q.5 Choose the most appropriate word to fill in blank number 3

- Ans
- 1. in
 - 2. back
 - 3. up
 - 4. away

Question ID : 368907356
Status : Answered
Chosen Option : 4

Comprehension:

Read the following passage and fill in each blank with a word chosen from the given options.

A group of youngsters joined a procession of devotees who had (1)____ to immerse Ganesha idols in the Yamuna on the occasion of the Ganesha festival. When (2)____ devotees were turned back by officials as immersion is banned, the youngsters stayed (3)____, walked a kilometre away and jumped into the river. (4)____ they were caught in the fast current . Two of them were able (5)____ to safety whereas four of them died.

SubQuestion No : 6

Q.6 Choose the most appropriate word to fill in blank number 4

- Ans
- 1. After
 - 2. If
 - 3. When
 - 4. Soon

Question ID : 368907357
Status : Answered
Chosen Option : 1

Comprehension:

Read the following passage and fill in each blank with a word chosen from the given options.

A group of youngsters joined a procession of devotees who had (1)____ to immerse Ganesha idols in the Yamuna on the occasion of the Ganesha festival. When (2)____ devotees were turned back by officials as immersion is banned, the youngsters stayed (3)____, walked a kilometre away and jumped into the river. (4)____ they were caught in the fast current . Two of them were able (5)____ to safety whereas four of them died.

SubQuestion No : 7

Q.7 Choose the most appropriate word to fill in blank number 5

- Ans
- 1. to swim
 - 2. to run
 - 3. to play
 - 4. to drive

Question ID : 368907358
Status : Answered
Chosen Option : 1

Q.8 Identify the segment in the sentence which contains the grammatical error from the given options.

Sneha who is aspire to join the Indian army as a soldier, has cleared the physical fitness test.

- Ans
- 1. who is aspire
 - 2. as a soldier
 - 3. to join the Indian army
 - 4. has cleared

Question ID : 368907338
Status : Answered
Chosen Option : 3

Q.9 Select the word which means the same as the group of words given.

One who spends money recklessly

- Ans
- 1. spendthrift
 - 2. divine
 - 3. generous
 - 4. miserly

Question ID : 368907350
Status : Answered
Chosen Option : 1

Q.10 Identify the word that is misspelt.

- Ans
- 1. advisory
 - 2. secretry
 - 3. greenery
 - 4. truly

Question ID : 368907352
Status : Answered
Chosen Option : 3

Q.11 Select the most appropriate meaning of the underlined idiom in the given sentence.

The action taken to reduce pollution is just a drop in the ocean. The town administration is not serious.

- Ans
- 1. a tiny amount
 - 2. a huge success
 - 3. a difficult one
 - 4. full of challenges

Question ID : 368907349
Status : Answered
Chosen Option : 1

Comprehension:

Read the following passage and answer the questions that follow.

Renia's Diary: A Young Girl's Life in the Shadow of the Holocaust, is being published in the United States on September 17. After being lost for decades, the writings of Holocaust victim Renia Spiegel have been finding new admirers. The 18-year old Spiegel was murdered by the Nazis in 1942, but the rediscovery of her poetry-rich diary has some people referring to her as "Poland's Anne Frank." Spiegel's diary will soon be published in English for the first time, along

with the release of a documentary film based on her life. Although the diary was already published in Poland, something of a mystery still hovers over the Jewish teen, whose name does not appear on Holocaust victim lists in Poland or Israel.

Born in 1924, Spiegel grew up on her father's estate near Poland's border with Romania. Her younger sister, Ariana, was a child film star and the sisters lived with their grandparents in sleepy Przemysl, a border town along the San River.

When she began keeping her diary at the end of 1939, Spiegel explained, "I simply seek a friend." Her first entry resembles Anne Frank's initial essays, offering a candid account of her loneliness. Also quite similar to early entries in "The Diary of a Young Girl," Spiegel includes biting commentary on her classmates.

Alongside an active social life and her writing, Spiegel dabbled in illustrating. A few months before Nazi Germany's invasion of Poland, she fell in love with a student named Zygmunt Schwarzer, whose father was a well-known physician. Torture and degradation on the streets took place daily during those years and Spiegel wrote in the spring of 1942, "Oh God Almighty! Help us! Take care of us, give us your blessing."

On July 15, the Nazis established a ghetto in Przemysl. Before long, 24,000 Jews from the region were crammed into a small part of town. "Remember this day; remember it well, you will tell generations to come about it one day," wrote Spiegel after the ghetto was fenced off. A few days later, on July 30, Spiegel was captured along with Schwarzer's parents and shot. "Three shots! Three lives lost! It happened last night at 10:30pm. Fate has decided to take my dearest ones away from me," wrote her friend Schwarzer. He did not write these words in his own journal, but in Spiegel's yellow-paged diary, which had been entrusted to him a few days prior.

SubQuestion No : 12

Q.12 The name of Renia's book is

- Ans
- 1. Renia's Diary
 - 2. Poland's Anne Frank
 - 3. The Diary of a Young Girl
 - 4. Renia's Diary: A Young Girl's Life in the Shadow of the Holocaust

Question ID : 368907360

Status : Answered

Chosen Option : 4

Comprehension:

Read the following passage and answer the questions that follow.

Renia's Diary: A Young Girl's Life in the Shadow of the Holocaust, is being published in the United States on September 17. After being lost for decades, the writings of Holocaust victim Renia Spiegel have been finding new admirers. The 18-year old Spiegel was murdered by the Nazis in 1942, but the rediscovery of her poetry-rich diary has some people referring to her as "Poland's Anne Frank." Spiegel's diary will soon be published in English for the first time, along with the release of a documentary film based on her life. Although the diary was already published in Poland, something of a mystery still hovers over the Jewish teen, whose name does not appear on Holocaust victim lists in Poland or Israel.

Born in 1924, Spiegel grew up on her father's estate near Poland's border with Romania. Her younger sister, Ariana, was a child film star and the sisters lived with their grandparents in sleepy Przemysl, a border town along the San River.

When she began keeping her diary at the end of 1939, Spiegel explained, "I simply seek a friend." Her first entry resembles Anne Frank's initial essays, offering a candid account of her loneliness. Also quite similar to early entries in "The Diary of a Young Girl," Spiegel includes biting commentary on her classmates.

Alongside an active social life and her writing, Spiegel dabbled in illustrating. A few months before Nazi Germany's invasion of Poland, she fell in love with a student named Zygmunt Schwarzer, whose father was a well-known physician. Torture and degradation on the streets took place daily during those years and Spiegel wrote in the spring of 1942, "Oh God Almighty! Help us! Take care of us, give us your blessing."

On July 15, the Nazis established a ghetto in Przemysl. Before long, 24,000 Jews from the region were crammed into a small part of town. "Remember this day; remember it well, you will tell generations to come about it one day," wrote Spiegel after the ghetto was fenced off. A few days later, on July 30, Spiegel was captured along with Schwarzer's parents and shot. "Three shots! Three lives lost! It happened last night at 10:30pm. Fate has decided to take my dearest ones away from me," wrote her friend Schwarzer. He did not write these words in his own journal, but in Spiegel's yellow-paged diary, which had been entrusted to him a few days prior.

SubQuestion No : 13

Q.13 Which word in the passage means the same as

'a very large amount of destruction resulting in the killing of very large numbers of people'?

- Ans
- 1. degradation
 - 2. documentary
 - 3. ghetto
 - 4. holocaust

Question ID : 368907364

Status : Not Answered

Chosen Option : --

Comprehension:

Read the following passage and answer the questions that follow.

Renia's Diary: A Young Girl's Life in the Shadow of the Holocaust, is being published in the United States on September 17. After being lost for decades, the writings of Holocaust victim Renia Spiegel have been finding new admirers. The 18-year old Spiegel was murdered by the Nazis in 1942, but the rediscovery of her poetry-rich diary has some people referring to her as "Poland's Anne Frank." Spiegel's diary will soon be published in English for the first time, along with the release of a documentary film based on her life. Although the diary was already published in Poland, something of a mystery still hovers over the Jewish teen, whose name does not appear on Holocaust victim lists in Poland or Israel.

Born in 1924, Spiegel grew up on her father's estate near Poland's border with Romania. Her younger sister, Ariana, was a child film star and the sisters lived with their grandparents in sleepy Przemysl, a border town along the San River.

When she began keeping her diary at the end of 1939, Spiegel explained, "I simply seek a friend." Her first entry resembles Anne Frank's initial essays, offering a candid account of her loneliness. Also quite similar to early entries in "The Diary of a Young Girl," Spiegel includes biting commentary on her classmates.

Alongside an active social life and her writing, Spiegel dabbled in illustrating. A few months before Nazi Germany's invasion of Poland, she fell in love with a student named Zygmunt Schwarzer, whose father was a well-known physician. Torture and degradation on the streets took place daily during those years and Spiegel wrote in the spring of 1942, "Oh God Almighty! Help us! Take care of us, give us your blessing."

On July 15, the Nazis established a ghetto in Przemysl. Before long, 24,000 Jews from the region were crammed into a small part of town. "Remember this day; remember it well, you will tell generations to come about it one day," wrote Spiegel after the ghetto was fenced off. A few days later, on July 30, Spiegel was captured along with Schwarzer's parents and shot. "Three shots! Three lives lost! It happened last night at 10:30pm. Fate has decided to take my dearest ones away from me," wrote her friend Schwarzer. He did not write these words in his own journal, but in Spiegel's yellow-paged diary, which had been entrusted to him a few days prior.

SubQuestion No : 14

Q.14 Choose the correct option.

In her diary Renia writes about

- Ans
- 1. her loneliness
 - 2. life in Przemysl
 - 3. life on her father's estate
 - 4. her fun filled childhood days

Question ID : 368907361

Status : Not Attempted and Marked For Review

Chosen Option : --

Comprehension:

Read the following passage and answer the questions that follow.

Renia's Diary: A Young Girl's Life in the Shadow of the Holocaust, is being published in the United States on September 17. After being lost for decades, the writings of Holocaust victim Renia Spiegel have been finding new admirers. The 18-year old Spiegel was murdered by the Nazis in 1942, but the rediscovery of her poetry-rich diary has some people referring to her as "Poland's Anne Frank." Spiegel's diary will soon be published in English for the first time, along with the release of a documentary film based on her life. Although the diary was already published in Poland, something of a mystery still hovers over the Jewish teen, whose name does not appear on Holocaust victim lists in Poland or Israel.

Born in 1924, Spiegel grew up on her father's estate near Poland's border with Romania. Her younger sister, Ariana, was a child film star and the sisters lived with their grandparents in sleepy Przemysl, a border town along the San River.

When she began keeping her diary at the end of 1939, Spiegel explained, "I simply seek a friend." Her first entry resembles Anne Frank's initial essays, offering a candid account of her loneliness. Also quite similar to early entries in "The Diary of a Young Girl," Spiegel includes biting commentary on her classmates.

Alongside an active social life and her writing, Spiegel dabbled in illustrating. A few months before Nazi Germany's invasion of Poland, she fell in love with a student named Zygmunt Schwarzer, whose father was a well-known physician. Torture and degradation on the streets took place daily during those years and Spiegel wrote in the spring of 1942, "Oh God Almighty! Help us! Take care of us, give us your blessing."

On July 15, the Nazis established a ghetto in Przemysl. Before long, 24,000 Jews from the region were crammed into a small part of town. "Remember this day; remember it well, you will tell generations to come about it one day," wrote Spiegel after the ghetto was fenced off. A few days later, on July 30, Spiegel was captured along with Schwarzer's parents and shot. "Three shots! Three lives lost! It happened last night at 10:30pm. Fate has decided to take my dearest ones away from me," wrote her friend Schwarzer. He did not write these words in his own journal, but in Spiegel's yellow-paged diary, which had been entrusted to him a few days prior.

SubQuestion No : 15

Q.15 Which of the following is not true?

- Ans 1. Renia married Schwarzer whom she loved
2. Renia needed a friend to share her troubles
3. Renia's diary gives details about her sufferings during the war
4. Many Jews were captured and kept in camps by the Nazis

Question ID : 368907362

Status : Not Answered

Chosen Option : --

Comprehension:

Read the following passage and answer the questions that follow.

Renia's Diary: A Young Girl's Life in the Shadow of the Holocaust, is being published in the United States on September 17. After being lost for decades, the writings of Holocaust victim Renia Spiegel have been finding new admirers. The 18-year old Spiegel was murdered by the Nazis in 1942, but the rediscovery of her poetry-rich diary has some people referring to her as "Poland's Anne Frank." Spiegel's diary will soon be published in English for the first time, along with the release of a documentary film based on her life. Although the diary was already published in Poland, something of a mystery still hovers over the Jewish teen, whose name does not appear on Holocaust victim lists in Poland or Israel.

Born in 1924, Spiegel grew up on her father's estate near Poland's border with Romania. Her younger sister, Ariana, was a child film star and the sisters lived with their grandparents in sleepy Przemysl, a border town along the San River.

When she began keeping her diary at the end of 1939, Spiegel explained, "I simply seek a friend." Her first entry resembles Anne Frank's initial essays, offering a candid account of her loneliness. Also quite similar to early entries in "The Diary of a Young Girl," Spiegel includes biting commentary on her classmates.

Alongside an active social life and her writing, Spiegel dabbled in illustrating. A few months before Nazi Germany's invasion of Poland, she fell in love with a student named Zygmunt Schwarzer, whose father was a well-known physician. Torture and degradation on the streets took place daily during those years and Spiegel wrote in the spring of 1942, "Oh God Almighty! Help us! Take care of us, give us your blessing."

On July 15, the Nazis established a ghetto in Przemysl. Before long, 24,000 Jews from the region were crammed into a small part of town. "Remember this day; remember it well, you will tell generations to come about it one day," wrote Spiegel after the ghetto was fenced off. A few days later, on July 30, Spiegel was captured along with Schwarzer's parents and shot. "Three shots! Three lives lost! It happened last night at 10:30pm. Fate has decided to take my dearest ones away from me," wrote her friend Schwarzer. He did not write these words in his own journal, but in Spiegel's yellow-paged diary, which had been entrusted to him a few days prior.

SubQuestion No : 16

Q.16 Which fact about Renia remains unknown till today?

- Ans 1. Who wrote the diary of Renia
2. Her age when she died

- 3. How she died and the year of her death
- 4. Why she is not listed among the Holocaust victims

Question ID : 368907363
Status : Not Answered
Chosen Option : --

Q.17 Select the word which means the same as the group of words given.

A person who cannot read or write

- Ans
- 1. illogical
 - 2. illegitimate
 - 3. illiterate
 - 4. illegal

Question ID : 368907351
Status : Answered
Chosen Option : 3

Q.18 Rearrange the sentences given in a logical sequence.

- A. On Wednesday the gang was at its hideout in Jaitpur after stealing the phone.
- B. Snatching a phone from a brave woman proved dear to a gang of phone snatchers.
- C. Within minutes of receiving the complaint the police arrived, arrested the snatchers and put them behind bars.
- D. They had no inkling that the woman they had targeted a few minutes back had traced her phone to this hideout.

- Ans
- 1. CDBA
 - 2. ADBC
 - 3. BADC
 - 4. BCDA

Question ID : 368907345
Status : Not Answered
Chosen Option : --

Q.19 Select the correct Indirect form of the sentence.

The chef said, "You will like the potato chops I've cooked for you."

- Ans
- 1. The chef said that I would like the potato chops she had cooked for me.
 - 2. The chef said to me you will like the potato chops I've cooked for you.
 - 3. The chef says you will like the potato chops I've cooked for you.
 - 4. The chef said I will like the potato chops she had cooked for me.

Question ID : 368907341
Status : Answered
Chosen Option : 1

Q.20 Select the most appropriate meaning of the underlined idiom in the given sentence.

After its recent defeat in the university elections, the party has decided to go back to the drawing board.

- Ans
- 1. draw ideas on a board and share them
 - 2. start planning again as the earlier plan failed

- 3. defend the old plans by explaining them to the people
- 4. start drawing again and make the pictures perfect

Question ID : 368907348
Status : Answered
Chosen Option : 2

Q.21 Select the correct Passive Voice form of the sentence.

The young man was playing a guitar at the restaurant.

- Ans
- 1. A guitar at the restaurant is being played by a young man.
 - 2. A guitar was being played at the restaurant by the young man.
 - 3. A young man was being played by a guitar at the restaurant.
 - 4. A guitar had been played by the young man at the restaurant.

Question ID : 368907340
Status : Answered
Chosen Option : 2

Q.22 Select the most appropriate synonym of the given word.

CORRIDOR

- Ans
- 1. chamber
 - 2. passage
 - 3. code
 - 4. margin

Question ID : 368907346
Status : Answered
Chosen Option : 4

Q.23 Select the most appropriate word/s to substitute the underlined group of words.

The teacher returned Ravi's assignment saying that his handwriting was unclear and not understandable.

- Ans
- 1. ineligible
 - 2. illegible
 - 3. inflexible
 - 4. impossible

Question ID : 368907343
Status : Answered
Chosen Option : 2

Q.24 Fill in the blank with the correct option.

While I was in the mall I _____ a friend whom I hadn't met for five years.

- Ans
- 1. ran off
 - 2. run down
 - 3. ran up
 - 4. ran into

Question ID : 368907344
Status : Not Answered
Chosen Option : --

Q.25 Select the correct Indirect form of the sentence.

Anil said, "I want you to help me with my plants."

- Ans
- 1. Anil said that he wanted me to help him with his plants.
 - 2. Anil said that he wanted to help me with my plants.
 - 3. Anil says that he wants to help me with my plants.
 - 4. Anil said that I wanted you to help me with my plants.

Question ID : 368907342
Status : Answered
Chosen Option : 1

Section : Quantitative Aptitude Basic Arithmetic Skill

Q.1 ₹18000 की राशि को आंशिक रूप से 7% पर और शेष राशि को 9% प्रति वर्ष की दर से उधार दिया जाता है। यदि औसत वार्षिक ब्याज 8.5% है तो 9% पर दी गयी राशि (₹ में) है:

- Ans
- 1. ₹10500
 - 2. ₹4500
 - 3. ₹13500
 - 4. ₹7500

Question ID : 368907376
Status : Answered
Chosen Option : 3

Q.2 यदि $x^8 - 727x^4 + 1 = 0$ है, तो $x - \frac{1}{x}$ का संभावित मान है:

- Ans
- 1. 6
 - 2. 4
 - 3. 5
 - 4. 7

Question ID : 368907383
Status : Not Attempted and Marked For Review
Chosen Option : --

Q.3 यदि सात-अंकीय संख्या $35345xy$, 40 से विभाज्य है, तो $(4x + 5y)$ का न्यूनतम मान है:

- Ans
- 1. 9
 - 2. 7
 - 3. 8
 - 4. 10

Question ID : 368907365
Status : Answered

Chosen Option : 3

Q.4 एक व्यक्ति अपने कार्यालय से लौटने वाली गति के $\frac{1}{5}$ (one-fifth) गति से कार्यालय जाता है। यदि इस पूरी यात्रा के दौरान उसकी औसत गति 20 किमी/घंटा है, तो कार्यालय जाते समय व्यक्ति की गति (मी/ से. में) क्या है?

- Ans
- 1. $\frac{11}{3}$
 - 2. 8
 - 3. $\frac{10}{3}$
 - 4. 12

Question ID : 368907380
Status : Answered
Chosen Option : 3

Q.5 एक वर्गाकार क्षेत्र के तीन तरफ से बाड़ लगानी है। यदि खेत का क्षेत्रफल 4900 m^2 है, तो कितने मीटर बाड़ की आवश्यकता होगी?

- Ans
- 1. 160
 - 2. 280
 - 3. 225
 - 4. 210

Question ID : 368907381
Status : Answered
Chosen Option : 4

Q.6 500 से 750 (दोनों सहित) तक कितनी ऐसी संख्याएँ हैं जो न तो 3 से विभाज्य हैं और न ही 11 से?

- Ans
- 1. 114
 - 2. 93
 - 3. 158
 - 4. 151

Question ID : 368907366
Status : Not Answered
Chosen Option : --

Q.7 10 लड़कियों के समूह का औसत वजन 48 किलोग्राम है। यदि 2 लड़कियाँ R और S, P और Q की जगह लेती हैं, तो नया औसत वजन 46 किलोग्राम होता है। P का वजन Q के वजन के बराबर है और R का वजन S के वजन के बराबर है, एक अन्य लड़की T समूह में शामिल हो जाती है, और समूह का नया औसत वजन 46 किलोग्राम हो जाता है। T का वजन R के वजन के बराबर है। Q का वजन (किलोग्राम में) कितना है?

- Ans
- 1. 50
 - 2. 56
 - 3. 54
 - 4. 52

Question ID : 368907368
Status : Not Answered
Chosen Option : --

Q.8 A किसी कार्य को 33 दिनों में पूरा कर सकता है और B उसी कार्य को A द्वारा लिए गए समय के एक-तिहाई समय में पूरा कर सकता है। एक साथ काम करने पर वे दोनों उसी कार्य के कितने भाग को छह दिनों में समाप्त कर सकते हैं?

- Ans
- ✓ 1. $\frac{8}{11}$
- ✗ 2. $\frac{9}{11}$
- ✗ 3. $\frac{6}{11}$
- ✗ 4. $\frac{7}{11}$

Question ID : 368907378

Status : Answered

Chosen Option : 1

Q.9 एक दुकानदार हर सामग्री के उत्पादन के लिए ₹ 122 का खर्च वहन करता है। वह ₹ 27,000 का अतिरिक्त व्यय भी करता है जिसका उत्पादित सामग्री की संख्या से कोई संबंध नहीं है। सीजन के दौरान उसे सामग्री ₹225 में बेचनी होगी। यदि वह ऐसा करने में विफल रहता है तो उसे प्रत्येक सामग्री ₹75 में बेचनी पड़ेगी। यदि वह 1500 सामग्री का उत्पादन करता है और उत्पादित सभी सामग्री को बेचने में सक्षम हो जाता है, तो सीजन के दौरान वह कितनी सामग्री बेचे कि उसे कोई लाभ या हानि न हो?

- Ans
- ✓ 1. 650
- ✗ 2. 1000
- ✗ 3. 750
- ✗ 4. 850

Question ID : 368907378

Status : Not Answered

Chosen Option : --

Q.10 किसी संख्या में 35% की वृद्धि और फिर 25% की कमी और फिर से 15% की वृद्धि की जाती है। संख्या में कुल वृद्धि / कमी प्रतिशत (निकटतम पूर्णांक तक) है?

- Ans
- ✗ 1. 17% कमी
- ✗ 2. 14% वृद्धि
- ✗ 3. 15% कमी
- ✓ 4. 16% वृद्धि

Question ID : 368907371

Status : Not Attempted and Marked For Review

Chosen Option : --

Q.11 यह वृत्त आरेख किसी कंपनी के विभिन्न विभागों में कुल 800 कर्मचारियों के प्रतिशत वितरण को दर्शाता है। तालिका विभिन्न विभागों में पुरुष और महिला कर्मचारियों के अनुपात को दर्शाती है



Departments	Male : Female
HR	3:5
IT	2:3
Accounts	3:7
Marketing	7:4
Production	5:3

कंपनी में पुरुष कर्मचारियों की कुल संख्या कितनी है?

- Ans 1. 394
 2. 280
 3. 520
 4. 406

Question ID : 368907388

Status : Not Attempted and Marked For Review

Chosen Option : --

Q.12 20 क्रमागत पूर्णांकों के सेट का औसत 21.5 है। सेट में सबसे बड़ा पूर्णांक क्या है?

- Ans 1. 31
 2. 27
 3. 33
 4. 11

Question ID : 368907367

Status : Answered

Chosen Option : 1

Q.13 यदि $\sec 4x = \operatorname{cosec} (3x - 43^\circ)$ है, तो x का मान है :

- Ans 1. 19°
 2. 29°
 3. 17°
 4. 23°

Question ID : 368907386

Status : Answered

Chosen Option : 1

Q.14 $\frac{0.49+0.7 \times 0.8+0.64}{0.512-0.343}$ का मान है:

- Ans 1. $\frac{1}{100}$
 2. 10
 3. 1
 4. $\frac{1}{10}$

Question ID : 368907382

Status : Answered

Chosen Option : 2

Q.15 एक टायर में 3 पंचर हैं। पहले पंचर ने अकेले ही उस टायर की हवा को 7 मिनट में, दूसरा अकेले 14 मिनट में तथा तीसरा अकेले 28 मिनट में बाहर निकाल सकता था। यदि हवा एक स्थिर दर से बाहर निकलती है, तो सभी पंचरों को टायर से पूरी हवा बाहर निकालने में कितना समय (मिनटों में) लगेगा?

- Ans 1. 5

2. 7
 3. 4
 4. 6

Question ID : 368907377
Status : Answered
Chosen Option : 3

Q.16 A, B तथा C मिलकर एक कार्य करते हैं। A तथा B मिलकर द्वारा किये गए कार्य और C द्वारा किए गए कार्य का अनुपात 11:3 है, और B तथा C द्वारा मिलकर किये गए कार्य और A द्वारा किये गए कार्य का अनुपात 1:1 है। तीनों में से कौन-सा कार्यकर्ता सबसे अधिक कुशल है?

- Ans 1. सभी बराबर काम करते हैं।
 2. A
 3. C
 4. B

Question ID : 368907374
Status : Answered
Chosen Option : 2

Q.17 यदि एक गोले की त्रिज्या 27% बढ़ा दी जाए, तो उसके आयतन में कितने प्रतिशत वृद्धि (दो दशमलव स्थान तक) होगी?

- Ans 1. 126.12%
 2. 128.34%
 3. 104.84%
 4. 112.72%

Question ID : 368907370
Status : Answered
Chosen Option : 4

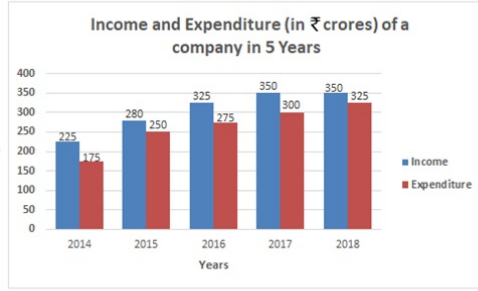
Q.18 कोई दुकानदार किसी वस्तु को उसके विक्रय मूल्य के 87% पर खरीदता है और उसके विक्रय मूल्य से 13 % अधिक पर बेचता है। उसका लाभ प्रतिशत (निकटतम पूर्णांक में) है:

- Ans 1. 26%
 2. 18%
 3. 30%
 4. 25%

Question ID : 368907372
Status : Answered
Chosen Option : 3

Q.19

यह दंड आरेख 2014 से 2018 के दौरान 5 वर्षों में किसी कंपनी की आय और व्यय (करोड़ रुपए में) को दर्शाता है।

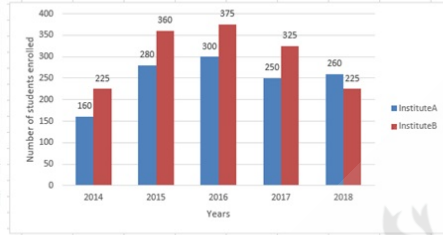


किस वर्ष में आय और व्यय का अनुपात सर्वाधिक है?

- Ans
- 1. 2018
 - 2. 2014
 - 3. 2017
 - 4. 2016

Question ID : 368907389
Status : Answered
Chosen Option : 2

Q.20 दिया गया दंड आरेख 5 वर्षों (2014 से 2018) के दौरान संस्थान A और B में नामांकित छात्रों की संख्या को दर्शाता है।



इन वर्षों के दौरान संस्थान B में नामांकित छात्रों की औसत संख्या का तथा संस्थान A में नामांकित छात्रों की औसत संख्या का अनुपात क्या है?

- Ans
- 1. 250 : 309
 - 2. 121 : 133
 - 3. 133 : 121
 - 4. 151 : 125

Question ID : 368907387
Status : Answered
Chosen Option : 4

Q.21 एक परीक्षा में उत्तीर्ण छात्रों की संख्या और अनुत्तीर्ण छात्रों की संख्या का अनुपात 25:4 था। यदि तीन और छात्र परीक्षा में शामिल हुए और विफल विद्यार्थियों की संख्या पहले की तुलना में 3 कम हो जाती है, तो वर्तमान में छात्रों की कुल संख्या और अनुत्तीर्ण छात्रों की संख्या का अनुपात 8:1 हो जाता है। परीक्षा में प्रारंभ में बैठने वाले छात्रों की कुल संख्या थी :

- Ans
- 1. 300
 - 2. 261
 - 3. 225
 - 4. 216

Question ID : 368907375

Status : Answered
Chosen Option : 2

Q.22 $\triangle ABC$ में, $\angle A = 48^\circ$ है। AB और AC को क्रमशः बिन्दु D और E तक बढ़ाया गया है, यदि कोण CBD और कोण BCE के समद्विभाजक बिन्दु O पर मिलते हैं, तो $\angle BOC$ किसके बराबर है:

- Ans
- 1. 132°
 - 2. 84°
 - 3. 42°
 - 4. 66°

Question ID : 368907384
Status : Answered
Chosen Option : 4

Q.23 एक व्यक्ति 3 किमी/घंटा, 4 किमी/घंटा, 7 किमी/घंटा और 12 किमी/घंटा की गति से समान दूरी तय करता है और उसे यह दूरी तय करने में कुल 340 मिनट लगते हैं। उसके द्वारा तय की गई कुल दूरी (किमी में) क्या है?

- Ans
- 1. 45 किमी
 - 2. 25 किमी
 - 3. 28 किमी
 - 4. 50 किमी

Question ID : 368907379
Status : Not Attempted and Marked For Review
Chosen Option : --

Q.24 माना $\triangle ABC \sim \triangle PQR$ and $\frac{ar(\triangle ABC)}{ar(\triangle PQR)} = \frac{9}{169}$ हैं। यदि AB = 12 सेमी, BC = 7 सेमी और AC = 8 सेमी है, तो PQ (सेमी में) किसके बराबर है:

- Ans
- 1. 52
 - 2. 21
 - 3. 26
 - 4. 39

Question ID : 368907385
Status : Answered
Chosen Option : 1

Q.25 एक व्यक्ति ने बिना कोई छूट मिले 28% पर एक सामग्री खरीदी, लेकिन उसे ₹1960 का और अधिक भुगतान करना पड़ा। उसने सामग्री के लिए कितना (₹ में) भुगतान किया?

- Ans
- 1. ₹6000
 - 2. ₹5160
 - 3. ₹5040
 - 4. ₹7000

Question ID : 368907369
Status : Answered
Chosen Option : 4

Section : General Awareness

Q.1 _____ ने कुआलालंपुर में 'एशिया के लिए पुरस्कार' समारोह में सर्वश्रेष्ठ एशियाई महिला एथलीट 2019 का खिताब अपने नाम किया।

- Ans
- 1. हिमा दास
 - 2. पी वी सिंधु
 - 3. मैरी कॉम
 - 4. साइना नेहवाल

Question ID : 368907409
Status : Answered
Chosen Option : 1

Q.2 'वेडिंगाओ नृत्य' भारत के किस स्थान की पारंपरिक नृत्यशैली है?

- Ans
- 1. पुडुचेरी
 - 2. गोवा
 - 3. दमन और दीव
 - 4. अंडमान

Question ID : 368907391
Status : Not Answered
Chosen Option : --

Q.3 भारत की सबसे छोटी नदी समझी जाने वाली, अरवरी नदी किस राज्य में स्थित है?

- Ans
- 1. मध्य प्रदेश
 - 2. पंजाब
 - 3. राजस्थान
 - 4. हरियाणा

Question ID : 368907401
Status : Not Answered
Chosen Option : --

Q.4 सितंबर 2019 में, संयुक्त राष्ट्र जलवायु परिवर्तन सम्मेलन 2019, _____ में आयोजित किया गया था।

- Ans
- 1. पेरिस
 - 2. न्यूयॉर्क
 - 3. मोस्को
 - 4. किंग्स्टन

Question ID : 368907395
Status : Answered
Chosen Option : 1

Q.5 लोकसभा की समितियाँ _____ के पूर्ण दिशानिर्देशन में कार्य करती है।

- Ans
- 1. अध्यक्ष
 - 2. राष्ट्रपति
 - 3. प्रधान मंत्री
 - 4. उपाध्यक्ष

Question ID : 368907412
Status : Answered
Chosen Option : 1

Q.6 राज्यसभा के लिए नाम-निर्देशित सदस्यों की नियुक्ति कौन करता है?

- Ans
- 1. राष्ट्रपति
 - 2. उपाध्यक्ष
 - 3. अध्यक्ष
 - 4. प्रधान मंत्री

Question ID : 368907413
Status : Answered
Chosen Option : 1

Q.7 किस आक्रमणकारी ने चोल वंश का अंत किया?

- Ans
- 1. चंगेज़ खान
 - 2. तैमूर
 - 3. मलिक काफूर
 - 4. महमूद गज़नवी

Question ID : 368907404
Status : Not Answered
Chosen Option : --

Q.8 2018 में विश्व मुक्केबाजी चैंपियनशिप का खिताब मैरी कॉम का _____ खिताब था।

- Ans
- 1. चौथा
 - 2. पांचवां
 - 3. छठा
 - 4. सातवां

Question ID : 368907414
Status : Not Attempted and Marked For Review
Chosen Option : --

Q.9 2019 तक की स्थिति के अनुसार, निम्नलिखित में से कौन भारतीय अंतरिक्ष अनुसंधान संगठन (इसरो) के चेयरमैन हैं?

- Ans
- 1. वी नारायणन
 - 2. कुन्हिक्रिश्न
 - 3. एस सोमनाथ
 - 4. कैलासवादिवु सिवान

Question ID : 368907410
Status : Answered
Chosen Option : 4

Q.10 1857 का सिपाही विद्रोह _____ में शुरू हुआ था।

- Ans
- 1. भोपाल

2. चम्पारन
 3. मेरठ
 4. ग्वालियर

Question ID : 368907405
Status : Not Answered
Chosen Option : --

Q.11 _____ ने 'गुरु ग्रंथ साहिब' को सिख धर्म के शीर्ष पर प्रतिष्ठापित किया।

- Ans 1. गुरु अंगद देव
 2. गुरु गोबिंद सिंह
 3. गुरु राम दास
 4. गुरु नानक देव

Question ID : 368907406
Status : Answered
Chosen Option : 2

Q.12 सामान्यतः वयस्क मनुष्यों के _____ दाढ़ के दांत होते हैं।

- Ans 1. 8
 2. 12
 3. 6
 4. 4

Question ID : 368907397
Status : Not Answered
Chosen Option : --

Q.13 'हिंदवी स्वराज' का साम्राज्य _____ द्वारा स्थापित किया गया था।

- Ans 1. छत्रपति शिवाजी महाराज
 2. टीपू सुल्तान
 3. सम्राट अकबर
 4. पेशवा बाजीराव

Question ID : 368907407
Status : Not Answered
Chosen Option : --

Q.14 2019 के किस महीने में 'फिट इंडिया मूवमेंट' की शुरुआत की गयी थी?

- Ans 1. सितंबर
 2. जून
 3. जुलाई
 4. अगस्त

Question ID : 368907393
Status : Not Answered
Chosen Option : --

Q.15

भारत में 'ओसूअरी पर्व' किस स्थान पर मनाया जाता है?

- Ans
- 1. सिक्किम
 - 2. गोवा
 - 3. निकोबार
 - 4. नागालैंड

Question ID : 368907390
Status : Not Answered
Chosen Option : --

Q.16 2019 तक की स्थिति के अनुसार, किस भारतीय राज्य में सबसे बड़ा वन आच्छादित क्षेत्र है?

- Ans
- 1. असम
 - 2. महाराष्ट्र
 - 3. मध्य प्रदेश
 - 4. केरल

Question ID : 368907403
Status : Answered
Chosen Option : 3

Q.17 लार में _____ नामक पाचक एंजाइम होता है, जो मुंह से नीचे जाने से पहले ही भोजन में मौजूद कुछ कार्बोहाइड्रेट को तोड़ना शुरू कर देता है।

- Ans
- 1. एमाइलेस
 - 2. लाइपेज
 - 3. पेप्सिन
 - 4. ट्रिप्सिन

Question ID : 368907398
Status : Answered
Chosen Option : 2

Q.18 राज्यसभा का गठन किस वर्ष किया गया था?

- Ans
- 1. 1952
 - 2. 1950
 - 3. 1947
 - 4. 1951

Question ID : 368907411
Status : Not Answered
Chosen Option : --

Q.19 संयुक्त राष्ट्र मरुस्थलीकरण प्रतिरोध सभा (UNCCD) की पार्टियों का 14 वां सम्मेलन (COP-14) किस देश में आयोजित किया गया था?

- Ans
- 1. भारत
 - 2. श्रीलंका
 - 3. भूटान
 - 4. नेपाल

Question ID : 368907394
Status : Not Answered
Chosen Option : --

Q.20 बल का मानक मात्रक (SI) _____ है।

- Ans
- 1. पास्कल
 - 2. न्यूटन
 - 3. जूल
 - 4. ग्रे

Question ID : 368907396
Status : Answered
Chosen Option : 2

Q.21 'महिलाओं द्वारा पहनी जाने वाली 'पानो भाजू' नामक पारंपरिक पोशाक भारत के किस राज्य से सम्बंधित है?

- Ans
- 1. केरल
 - 2. असम
 - 3. मिजोरम
 - 4. गोवा

Question ID : 368907392
Status : Not Answered
Chosen Option : --

Q.22 रासायनिक यौगिक नाइट्रस ऑक्साइड का सामान्य नाम क्या है?

- Ans
- 1. निद्रा गैस
 - 2. हंसाने वाली गैस
 - 3. डर पैदा करने वाली गैस
 - 4. आंसू गैस

Question ID : 368907399
Status : Answered
Chosen Option : 2

Q.23 भारत में सबसे लंबा एक्सप्रेस वे निम्नलिखित में से कौन-सा है?

- Ans
- 1. अहमदाबाद-वडोदरा एक्सप्रेसवे
 - 2. आगरा-लखनऊ एक्सप्रेसवे
 - 3. इलाहाबाद-बाईपास एक्सप्रेसवे
 - 4. दानकुनी-पालसित एक्सप्रेसवे

Question ID : 368907402
Status : Not Answered
Chosen Option : --

Q.24 अरावली और विंध्य पर्वत श्रृंखला के बीच कौन-सा पठारीय क्षेत्र स्थित है?

- Ans
- 1. दक्कन का पठार
 - 2. मेघालय का पठार
 - 3. मालवा का पठार

✘ 4. छोटानागपुर पठार

Question ID : 368907400
Status : Answered
Chosen Option : 4

Q.25 पुस्तक 'अ सूटेबल बॉय' _____ ने लिखी है।

- Ans
- ✘ 1. अमिष त्रिपाठी
 - ✘ 2. शशि थरूर
 - ✘ 3. चेतन भगत
 - ✔ 4. विक्रम सेठ

Question ID : 368907408
Status : Answered
Chosen Option : 2

