



SSC MTS **SHIFT – 3 (13-07-2022)**

- ★ **Latest Govt Job updates**
- ★ **Private Job updates**
- ★ **Free Mock tests available**

**Visit - [teachingninja.in](https://teachingninja.in)**

## Multi Tasking Non Technical Staff Havalдар CBIC and CBN Examination 2021

Roll Number	
Candidate Name	
Venue Name	Adhya Infotech
Exam Date	13/07/2022
Exam Time	5:00 PM - 6:30 PM
Subject	MTS Non technical and Havalдар Examination 2021

Section : General English

Q.1 Select the most appropriate option to fill in the blank.

The pirates will try to \_\_\_\_\_ the gold ornaments.

- Ans
- 1. cease
  - 2. seize
  - 3. slice
  - 4. steel

Question ID : 26433051051  
Status : Answered  
Chosen Option : 1

Q.2 Select the most appropriate word for the given group of words.

One who collects coins

- Ans
- 1. Bibliophile
  - 2. Enthusiast
  - 3. Philatelist
  - 4. Numismatist

Question ID : 26433050700  
Status : Answered  
Chosen Option : 4

Q.3 Select the most appropriate synonym of the underlined word in the given sentence.

I may sound crazy but I am not an imbecile.

- Ans
- 1. Credible
  - 2. Prudent
  - 3. Dunce
  - 4. Sage

Question ID : 26433050758  
Status : Answered  
Chosen Option : 1

Q.4 Select the most appropriate option to fill in the blank.

Rescuers used a special device for finding people \_\_\_\_\_ in collapsed buildings.

- Ans
- 1. conquered
  - 2. trapped
  - 3. exceeded
  - 4. blossomed

Question ID : 26433050974  
Status : Answered  
Chosen Option : 2

Q.5 Select the most appropriate option to fill in the blank.

If nature \_\_\_\_\_ to degrade, the world's economic output will suffer sooner or later.

- Ans
- 1. Continues
  - 2. Continue
  - 3. Continued
  - 4. continuing

Question ID : 26433051346  
Status : Answered  
Chosen Option : 1

Q.6 Select the option that will improve the underlined part of the given sentence. In case no improvement is needed, select 'No improvement required'.

He pays me six dollars the month of this house.

- Ans
- 1. No improvement required
  - 2. an month for these
  - 3. a month over this
  - 4. a month for this

Question ID : 26433050563  
Status : Answered  
Chosen Option : 4

Q.7 Select the most appropriate synonym of the given word.

Fatal

- Ans
- 1. Luminous
  - 2. Restorative
  - 3. Serene
  - 4. Deadly

Question ID : 26433050783  
Status : Answered  
Chosen Option : 1

**Q.8** Select the most appropriate synonym of the underlined word from the given sentence.

He leaned left, bringing the blunt side of his sword up flat against his palm.

- Ans
- 1. sharp
  - 2. dull
  - 3. timid
  - 4. keen

Question ID : 26433051616  
Status : Answered  
Chosen Option : 4

**Q.9** Select the INCORRECTLY spelt word.

- Ans
- 1. Accede
  - 2. Accost
  - 3. Abstruce
  - 4. Abnegation

Question ID : 26433051387  
Status : Answered  
Chosen Option : 1

**Q.10** Select the option that can be used as a one-word substitute for the given group of words.

A large bundle bound for storage or transport

- Ans
- 1. Antagonist
  - 2. Belligerent
  - 3. Bale
  - 4. Apiary

Question ID : 26433051709  
Status : Answered  
Chosen Option : 2

**Q.11** Select the option that will improve the underlined part of the given sentence. In case no improvement is needed, select 'No improvement required'.

She was stuck in his imagination for many a hour as a force to be reckoned with.

- Ans
- 1. his imagination for many hour as a force
  - 2. his imagination for many an hour as a force
  - 3. his imagination for many an hours as a force
  - 4. No improvement required

Question ID : 26433051570  
Status : Answered  
Chosen Option : 2

Q.12 Select the most appropriate meaning of the underlined idiom.

Does my name ring a bell for you?

- Ans
- 1. To sound familiar
  - 2. To be very frightened
  - 3. To take advantage
  - 4. To mock someone

Question ID : 26433050916  
Status : Answered  
Chosen Option : 2

Q.13 Select the most appropriate option to substitute the underlined segment in the given sentence. If there is no need to substitute it, select 'No substitution required.'

The laws of nature are unbiased, ensuring that each person benefits from its bounties.

- Ans
- 1. No substitution required
  - 2. were unbiased
  - 3. is unbiased
  - 4. was unbiased

Question ID : 26433051212  
Status : Answered  
Chosen Option : 3

Q.14 The following sentence has been divided into parts. One of them may contain an error. Select the part that contains the error from the given options. If you don't find any error, mark 'No error' as your answer.

How the students approach / education today has / altered significant.

- Ans
- 1. altered significant
  - 2. education today has
  - 3. No error
  - 4. How the students approach

Question ID : 26433051340  
Status : Answered  
Chosen Option : 2

Q.15 Select the most appropriate meaning of the given idiom.

Kick someone when they are down

- Ans
- 1. To create a disturbance deliberately
  - 2. To reject or disown friends
  - 3. To be angry with or disappointed in someone
  - 4. To cause further trouble to someone already in a difficult situation

Question ID : 26433051282  
Status : Answered  
Chosen Option : 2

Q.16 Select the correctly spelt word.

- Ans  1. Definitely  
 2. Definatly  
 3. Defenately  
 4. Difinately

Question ID : 26433051466  
Status : Answered  
Chosen Option : 1

Q.17 Select the most appropriate option to fill in the blank.

I am planning a get together \_\_\_\_\_ Monday.

- Ans  1. at  
 2. upon  
 3. along  
 4. on

Question ID : 26433050744  
Status : Answered  
Chosen Option : 4

Q.18 Select the most appropriate ANTONYM of the given word.

Vicious

- Ans  1. Influential  
 2. Gentle  
 3. Privileged  
 4. Poor

Question ID : 26433051384  
Status : Answered  
Chosen Option : 2

Q.19 The following sentence has been divided into parts. One of them may contain an error. Select the part that contains the error from the given options. If you don't find any error, mark 'No error' as your answer.

All the problems occurred / because she does not / hear my wordsfollow the instructions.

- Ans  1. because she does not  
 2. All the problems occurred  
 3. No error  
 4. follow the instructionshear my words

Question ID : 26433051445  
Status : Answered  
Chosen Option : 1

**Q.20** Parts of the given sentence have been given as options. One of them may contain an error. Select the part that contains the error from the given options. If you don't find any error, mark 'No error' as your answer.

I like reading fictional stories besides write poems.

- Ans
- 1. No error
  - 2. fictional stories besides
  - 3. write poems
  - 4. I like reading

Question ID : 26433050767  
Status : Answered  
Chosen Option : 2

**Comprehension:**

In the following passage, some words have been deleted. Read the passage carefully and select the most appropriate option to fill in each blank.

No matter how (1) \_\_\_\_\_ time you (2) \_\_\_\_\_ to improve your mental and emotional health, you will still need the company of (3) \_\_\_\_\_ to feel and function at your best. Humans are social (4) \_\_\_\_\_ with emotional needs for relationships and positive connections to others. We're not meant to survive, (5) \_\_\_\_\_ alone thrive, in isolation.

SubQuestion No : 21

**Q.21** Select the most appropriate option to fill in blank No. (1)

- Ans
- 1. many
  - 2. great
  - 3. more
  - 4. much

Question ID : 26433050747  
Status : Answered  
Chosen Option : 1

**Comprehension:**

In the following passage, some words have been deleted. Read the passage carefully and select the most appropriate option to fill in each blank.

No matter how (1) \_\_\_\_\_ time you (2) \_\_\_\_\_ to improve your mental and emotional health, you will still need the company of (3) \_\_\_\_\_ to feel and function at your best. Humans are social (4) \_\_\_\_\_ with emotional needs for relationships and positive connections to others. We're not meant to survive, (5) \_\_\_\_\_ alone thrive, in isolation.

SubQuestion No : 22

**Q.22** Select the most appropriate option to fill in blank No. (2)

- Ans
- 1. devote
  - 2. promote
  - 3. assess
  - 4. proceed

Question ID : 26433050748  
Status : Answered  
Chosen Option : 2

**Comprehension:**

In the following passage, some words have been deleted. Read the passage carefully and select the most appropriate option to fill in each blank.

No matter how (1) \_\_\_\_\_ time you (2) \_\_\_\_\_ to improve your mental and emotional health, you will still need the company of (3) \_\_\_\_\_ to feel and function at your best. Humans are social (4) \_\_\_\_\_ with emotional needs for relationships and positive connections to others. We're not meant to survive, (5) \_\_\_\_\_ alone thrive, in isolation.

**SubQuestion No : 23**

**Q.23 Select the most appropriate option to fill in blank No. (3)**

- Ans
- 1. some
  - 2. any
  - 3. others
  - 4. few

Question ID : 26433050749  
Status : Answered  
Chosen Option : 1

**Comprehension:**

In the following passage, some words have been deleted. Read the passage carefully and select the most appropriate option to fill in each blank.

No matter how (1) \_\_\_\_\_ time you (2) \_\_\_\_\_ to improve your mental and emotional health, you will still need the company of (3) \_\_\_\_\_ to feel and function at your best. Humans are social (4) \_\_\_\_\_ with emotional needs for relationships and positive connections to others. We're not meant to survive, (5) \_\_\_\_\_ alone thrive, in isolation.

**SubQuestion No : 24**

**Q.24 Select the most appropriate option to fill in blank No. (4)**

- Ans
- 1. kingdoms
  - 2. populations
  - 3. creatures
  - 4. lives

Question ID : 26433050750  
Status : Answered  
Chosen Option : 4



**Comprehension:**

In the following passage, some words have been deleted. Read the passage carefully and select the most appropriate option to fill in each blank.

No matter how (1) \_\_\_\_\_ time you (2) \_\_\_\_\_ to improve your mental and emotional health, you will still need the company of (3) \_\_\_\_\_ to feel and function at your best. Humans are social (4) \_\_\_\_\_ with emotional needs for relationships and positive connections to others. We're not meant to survive, (5) \_\_\_\_\_ alone thrive, in isolation.

**SubQuestion No : 25**

**Q.25 Select the most appropriate option to fill in blank No. (5)**

- Ans  1. have  
 2. lest  
 3. let  
 4. get

Question ID : 26433050751  
Status : Answered  
Chosen Option : 2

Section : General Intelligence and Reasoning

**Q.1 In a certain code language, 'GOAL' is coded as '917314', and 'PBKS' is coded as '1841321'. How will 'HAMD' be coded in that language?**

- Ans  1. 101356  
 2. 101365  
 3. 103165  
 4. 103156

Question ID : 26433048973  
Status : Answered  
Chosen Option : 4

**Q.2 After interchanging the given two signs  $\times$  and  $-$ , what will be the value of the given expression?**

$$10 + 5 - 6 \div 2 \times 5$$

- Ans  1. 30  
 2. 35  
 3. 20  
 4. 25

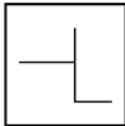
Question ID : 26433048714  
Status : Answered  
Chosen Option : 3

Q.3 In a certain code language, 'he is sick' is written as 'blue red pink', 'he wants apple' is written as 'green violet red', and 'apple is tasty' is written as 'blue green yellow'. How will 'tasty' be written in that language?

- Ans
- 1. Violet
  - 2. Blue
  - 3. Yellow
  - 4. Pink

Question ID : 26433048000  
Status : Answered  
Chosen Option : 3

Q.4 Select the option in which the given figure is embedded (rotation is NOT allowed).



Ans

- 1.
- 2.
- 3.
- 4.

Question ID : 26433048139  
Status : Answered  
Chosen Option : 3

Q.5 Which two numbers need to be interchanged to make the following equation correct?

$$22 - 9 \div 5 + 10 \times 1 = 29$$

- Ans
- 1. 22 and 10
  - 2. 5 and 1
  - 3. 10 and 9
  - 4. 5 and 10

Question ID : 26433048161

Status : Not Attempted and  
Marked For Review

Chosen Option : --

Q.6 Select the figure from the given options that can replace the question mark (?) in the following series.



Ans

- 1.
- 2.
- 3.
- 4.

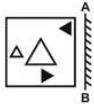


Question ID : 26433048834

Status : Answered

Chosen Option : 4

Q.7 Select the correct mirror image of the given figure when the mirror is placed to its right side.



Ans

✗ 1.



✓ 2.



✗ 3.



✗ 4.

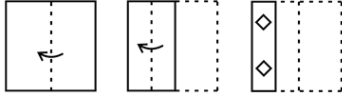


Question ID : 26433048836  
Status : Answered  
Chosen Option : 2

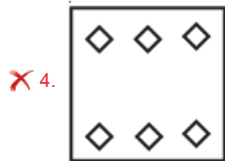
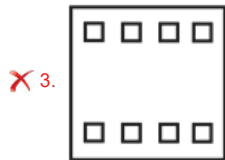
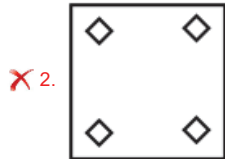
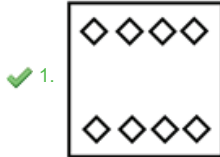


Teachingninja.in

**Q.8** The sequence of folding a piece of paper and the manner in which the folded paper has been cut is shown in the following figures. How would this paper look when unfolded?



**Ans**



Question ID : 26433048191  
 Status : Answered  
 Chosen Option : 1

**Q.9** Select the number from the given options that can replace the question mark (?) in the following series.

137, 125, 113, 101, ?

- Ans**
- ✗ 1. 87
  - ✗ 2. 84
  - ✗ 3. 86
  - ✓ 4. 89

Question ID : 26433048818  
 Status : Answered  
 Chosen Option : 4

Q.10 Select the option that is related to the fifth term in the same way as the second term is related to the first term and the fourth term is related to the third term.

ABC2 : ZYX7 :: PQR21 : KJI26 :: MNO11 : ?

- Ans  1. NML16  
 2. KLM14  
 3. NLM14  
 4. MKL16

Question ID : 26433047996  
Status : Answered  
Chosen Option : 1

Q.11 दिए गए कथनों और निष्कर्षों को ध्यानपूर्वक पढ़िए। कथनों में दी गई जानकारी को सही मानते हुए, चाहे वह सामान्यतः ज्ञात तथ्यों से असंगत प्रतीत होती हो, निर्धारित करें कि दिए गए निष्कर्षों में से कौन सा/से कथनों का तार्किक ढंग से अनुसरण करता/ते है/हैं।

कथन I: कुछ काले, नीले हैं।  
कथन II: कुछ नीले, लाल हैं।

निष्कर्ष I: कुछ काले, लाल हैं।  
निष्कर्ष II: सभी लाल के नीला होने की संभावना है।

- Ans  1. केवल निष्कर्ष II अनुसरण करता है।  
 2. केवल निष्कर्ष I अनुसरण करता है।  
 3. न तो निष्कर्ष I और न ही II अनुसरण करता है।  
 4. निष्कर्ष I और II दोनों अनुसरण करते हैं।

Question ID : 26433048129  
Status : Answered  
Chosen Option : 3

Q.12 Four girls A, B, C, and D are sitting in a row, facing towards the south (but not necessarily in the same order). Four boys P, Q, R and S are sitting in a row, facing towards the face of these girls (but not necessarily in the same order). P and C are diagonally opposite to each other. A is second to the right of C. S is the immediate neighbour of Q and R. C is facing R.  
Which of the following pairs of persons facing each other is definitely correct?

- Ans  1. DP  
 2. BS  
 3. AQ  
 4. DS

Question ID : 26433048731  
Status : Answered  
Chosen Option : 3

Q.13 Select the letter-cluster from among the given options that can replace the question mark (?) in the following series.

AY, BX, ?, DV, EU, FT

- Ans
- 1. CV
  - 2. CW
  - 3. CE
  - 4. CU

Question ID : 26433048143  
Status : Answered  
Chosen Option : 2

Q.14 Select the option that is related to the fifth number in the same way as the second number is related to the first number and the fourth number is related to the third number.

347 : 14 :: 122 : 5 :: 244 : ?

- Ans
- 1. 12
  - 2. 10
  - 3. 8
  - 4. 14

Question ID : 26433048741  
Status : Answered  
Chosen Option : 2

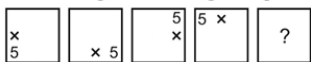
Q.15 Identify the number that does NOT belong to the following series.

414, 430, 462, 526, 664, 910

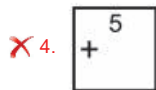

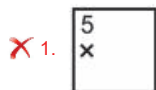
- Ans
- 1. 462
  - 2. 526
  - 3. 910
  - 4. 664

Question ID : 26433048719  
Status : Answered  
Chosen Option : 4

Q.16 Select the figure from the given options that can replace the question mark (?) in the following series.



Ans



Question ID : 26433048758

Status : Answered

Chosen Option : 2

Q.17 P1, P2, P3, P4, P5, P6 और P7 भिन्न भिन्न लाभ अर्जित करते हैं। P1, P5 से अधिक, किंतु P3 से कम लाभ अर्जित करता है। P6 केवल दो लोगों से कम लाभ अर्जित करता है। P4 सबसे कम लाभ अर्जित करता है। P2, P1 से कम लाभ अर्जित करता है। P7 सबसे अधिक लाभ अर्जित करता है। कौन तीसरा सबसे अधिक लाभ अर्जित करता है?

Ans  1. P4

2. P6

3. P3

4. P7

Question ID : 26433048732

Status : Answered

Chosen Option : 2

Q.18 In a certain code language, 'Heat is waves' is coded as '7 6 @', and 'waves are dramatic not' is coded as '3 4 % 7'. What can be the code for 'Heat' in that language?

Ans  1. %

2. 4

3. @

4. 3

Question ID : 26433048645

Status : Answered

Chosen Option : 3



Q.19 Select the option that is related to the third letter-cluster in the same way as the second letter-cluster is related to the first letter-cluster.

GP : KK :: MN : ?

- Ans  1. QI  
 2. QJ  
 3. RI  
 4. RJ

Question ID : 26433048649  
Status : Answered  
Chosen Option : 1

Q.20 Five professors A, B, C, D and E are sitting in a row facing the North (not necessarily in the same order). A is second to the left of D. Only two professors are sitting between C and E. No professor is sitting to the right of E. How many professors are sitting to the left of D?

- Ans  1. 3  
 2. 0  
 3. 2  
 4. 1

Question ID : 26433048830  
Status : Answered  
Chosen Option : 3

Q.21 Select the option in which the numbers are related in the same way as are the numbers of the following sets.

(8, 12, 48)  
(6, 18, 54)

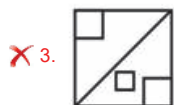
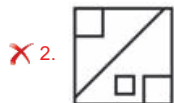
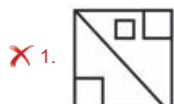
- Ans  1. (6, 12, 48)  
 2. (4, 8, 12)  
 3. (6, 8, 30)  
 4. (4, 8, 16)

Question ID : 26433048134  
Status : Answered  
Chosen Option : 1

**Q.22** Select the figure from the options that can replace the question mark (?) and complete the pattern (rotation is NOT allowed).



Ans



Question ID : 26433048588  
Status : Answered  
Chosen Option : 4

**Q.23** Read the given statements and conclusions carefully. Assuming that the information given in the statements is true, even if it appears to be at variance with commonly known facts, decide which of the given conclusions logically follow(s) from the statements.

Statements:

- I. No R is S.
- II. All X are R.

Conclusions:

- I. Some R are X.
- II. Some S are X.
- III. All X are S.

- Ans
- ✗ 1. Only conclusion III follows
  - ✓ 2. Only conclusion I follows
  - ✗ 3. None of the conclusions follow
  - ✗ 4. Only conclusion II follows

Question ID : 26433048754  
Status : Answered  
Chosen Option : 2

Q.24 In a certain code language, '321' means 'hot branded milk', '653' means 'nice hot day', '985' means 'day and night', then what is the code for 'nice' in the same code language?

- Ans
- 1. 9
  - 2. 3
  - 3. 5
  - 4. 6

Question ID : 26433048298  
Status : Answered  
Chosen Option : 4

Q.25 Select the option that is related to the third letter-cluster in the same way as the second letter-cluster is related to the first letter-cluster.

PRA : SUZ :: GOS : ?

- Ans
- 1. JRU
  - 2. JSU
  - 3. JRH
  - 4. JSH

Question ID : 26433048751  
Status : Answered  
Chosen Option : 3

Section : Numerical Aptitude

Q.1 The average of 20 numbers is 36. If each number is increased by 4, then what will be the new average?

- Ans
- 1. 44
  - 2. 46
  - 3. 40
  - 4. 36

Question ID : 26433049498  
Status : Answered  
Chosen Option : 3

Q.2 Ketan and Kunal can complete a job together in 7 days. Kunal is  $\frac{7}{4}$  times as efficient as Ketan. In how many days can Kunal alone complete the job?

- Ans
- 1. 12 days
  - 2. 14 days
  - 3. 10 days
  - 4. 11 days

Question ID : 26433049360  
Status : Not Attempted and Marked For Review  
Chosen Option : --

**Q.3** The marked price of a watch was ₹96,000. A man bought the same watch for ₹67,584 after getting two successive discounts. If the first discount was of 12%, what was the quantum of the second discount?

- Ans**
- ✓ 1. 20%
  - ✗ 2. 15%
  - ✗ 3. 10%
  - ✗ 4. 25%

Question ID : 26433049503  
Status : Answered  
Chosen Option : 1

**Q.4** If the length of one side of a rectangle is twice that of the other side, and its perimeter is 54 cm, then what is the length of the longer side of this rectangle?

- Ans**
- ✗ 1. 14 cm
  - ✗ 2. 9 cm
  - ✗ 3. 27 cm
  - ✓ 4. 18 cm

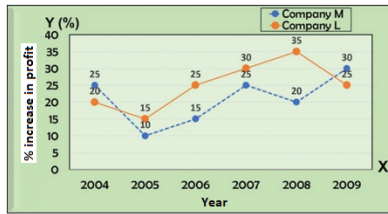
Question ID : 26433050090  
Status : Not Attempted and Marked For Review  
Chosen Option : --

**Q.5** A sum of money, invested at a certain rate of simple interest per annum, amounts to ₹720 in 4 years and to ₹800 in 5 years. The sum invested is:

- Ans**
- ✓ 1. ₹400
  - ✗ 2. ₹600
  - ✗ 3. ₹500
  - ✗ 4. ₹360

Question ID : 26433049506  
Status : Answered  
Chosen Option : 1

Q.6 The following graph shows the percentage rise in the profits of two companies over the years.



What is the average of the percentage increases in the year-to-year profit of Company M over all the given years, taken together? [Give your answer correct to the nearest integer value.]

- Ans
- 1. 24%
  - 2. 20%
  - 3. 25%
  - 4. 21%

Question ID : 26433050163  
Status : Answered  
Chosen Option : 2


Q.7 Find the amount payable on maturity if ₹20,00,000 is invested at 12% per annum for  $\frac{3}{2}$  years and interest is compounded half-yearly.

- Ans
- 1. ₹23,00,832
  - 2. ₹23,82,032
  - 3. ₹24,00,000
  - 4. ₹23,00,000



Question ID : 26433049482  
Status : Not Attempted and Marked For Review  
Chosen Option : --

**Q.8** The following pie chart shows the share of the marks scored by Rahul in an examination in each of 5 different subjects — English, Hindi, Mathematics, Science and Social Science — as percentages of the total marks scored by Rahul in all the 5 subjects taken together.



What is the central angle showing the shares of the marks in Hindi and Social Science, taken together?

- Ans**
- 1.  $186^\circ$
  - 2.  $196^\circ$
  - 3.  $144^\circ$
  - 4.  $172^\circ$

Question ID : 26433050089  
Status : Answered  
Chosen Option : 3

**Q.9** A man buys a watch for ₹250 and sells it for ₹300. Find his profit percentage.

- Ans**
- 1. 20%
  - 2. 25%
  - 3. 15%
  - 4. 10%

Question ID : 26433049476  
Status : Answered  
Chosen Option : 1

**Q.10** Two vessels of equal capacity, and both completely filled, contain mixtures of milk and water in the ratio of 5 : 1 and 6 : 5, respectively. Both the mixtures are now mixed thoroughly. What is the ratio of milk to water in the new mixture so obtained?

- Ans**
- 1. 105 : 67
  - 2. 57 : 41
  - 3. 91 : 41
  - 4. 28 : 43

Question ID : 26433050056  
Status : Not Attempted and Marked For Review  
Chosen Option : --

**Q.11** A certain sum is divided between four people A, B, C and D in the ratio 3 : 4 : 7 : 8, respectively. If the amount received by D is ₹408 more than the amount received by B, what is the total amount received by C and D?

- Ans**
- 1. ₹1,630
  - 2. ₹1,510
  - 3. ₹1,610
  - 4. ₹1,530

Question ID : 26433050154  
Status : Answered  
Chosen Option : 4

**Q.12** Akbar can complete a piece of work alone in 12 days, while Anthony can complete the same work alone in 20 days. If they work on alternate days with Anthony starting the work, then in how many days can they complete the whole work?

- Ans**
- 1. 15 days
  - 2. 16 days
  - 3.  $14\frac{4}{5}$  days
  - 4.  $15\frac{1}{5}$  days

Question ID : 26433050285  
Status : Answered  
Chosen Option : 3

**Q.13** A train can cross a 1200-metre-long bridge completely in 16 seconds. It can cross a 1600-metre-long bridge completely in 20 seconds. What is the speed of the train?

- Ans**
- 1. 360 km/h
  - 2. 450 km/h
  - 3. 540 km/h
  - 4. 270 km/h

Question ID : 26433050046  
Status : Not Attempted and Marked For Review  
Chosen Option : --

**Q.14** There are 45 students in a hostel. If the number of students increases by 5, the total expenses of the mess increase by ₹30 per day while the average daily expenditure per head diminishes by ₹2. Find the original total daily expenditure of the mess.

- Ans**
- 1. ₹1,170
  - 2. ₹1,710
  - 3. ₹1,200
  - 4. ₹1,250

Question ID : 26433050248  
Status : Not Attempted and Marked For Review  
Chosen Option : --

**Q.15** A person uses a rectangular metallic sheet of  $45\text{ m} \times 30\text{ m}$  for making an open box. From each corner of the sheet he cuts a square. If the length of one side of each of these squares is  $10\text{ m}$ , then what will be the volume of the box (in  $\text{m}^3$ )?

- Ans**
- 1. 5000
  - 2. 4500
  - 3. 7000
  - 4. 2500

Question ID : 26433050267

Status : **Not Attempted and Marked For Review**

Chosen Option : --

**Q.16** In a class, the average weight of 4 boys is  $50\text{ kg}$  and the average weight of 4 girls is  $40\text{ kg}$ . What is the average weight of all the 8 students taken together?

- Ans**
- 1. 44 kg
  - 2. 48 kg
  - 3. 45 kg
  - 4. 42 kg

Question ID : 26433049678

Status : **Answered**

Chosen Option : 3

**Q.17** The following table shows the number of songs sung by 6 different singers and uploaded on a streaming website.

Singer	Songs
S1	20
S2	25
S3	15
S4	10
S5	30
S6	20

The average number of views per song for S1, S2 and S3 is 100. The average number of views per song for S4, S5 and S6 is 50. What is the total number of views for all the songs sung by all of the 6 different singers taken together?

- Ans**
- 1. 8500
  - 2. 9000
  - 3. 9500
  - 4. 8000

Question ID : 26433050065

Status : **Answered**

Chosen Option : 2



**Q.18** A man walks at 6 m/sec and reaches his destination in 20 minutes. A woman covers the same distance in 1.2 hours.  
What is the speed of the woman (in km/h)?

- Ans
- 1. 6
  - 2. 2
  - 3. 5
  - 4. 1

Question ID : 26433050158  
Status : Answered  
Chosen Option : 1

**Q.19** Find the LCM of 63, 91 and 133.

- Ans
- 1. 16561
  - 2. 16651
  - 3. 11561
  - 4. 15561

Question ID : 26433049470  
Status : Not Attempted and Marked For Review  
Chosen Option : --

**Q.20** The price of onion increases by 12.5%. The consumption of onion also increases by 12.5%. What is the approximate percentage increase in the expenditure on account of the purchase of onions?

- Ans
- 1. 29.12%
  - 2. 24.82%
  - 3. 28.44%
  - 4. 26.56%

Question ID : 26433049976  
Status : Not Answered  
Chosen Option : --

**Q.21** The cost price of a saree to a person X was ₹100. Person X sells the saree to person Y at a profit of 10% and person Y then sells it to person Z at a loss of 10%. How much does person Z pay for the saree?

- Ans
- 1. ₹100
  - 2. ₹99
  - 3. ₹101
  - 4. ₹90

Question ID : 26433050077  
Status : Answered  
Chosen Option : 2

Q.22 The value of  $(82^2 + 18 \times 26) \div 16$  is:

- Ans
- 1. 451.8
  - 2. 444.3
  - 3. 449.5
  - 4. 447.1

Question ID : 26433050144  
Status : Answered  
Chosen Option : 4

Q.23 The length and the breadth of a rectangle are increased by 15% and 10%, respectively. What is the percentage increase in the area of the rectangle?

- Ans
- 1. 25%
  - 2. 26.5%
  - 3. 27.5%
  - 4. 26%

Question ID : 26433049626  
Status : Answered  
Chosen Option : 2

Q.24 Thrice the length of the diameter of a circle is 10 cm less than its circumference. What is the radius of the circle?  
[Use  $\pi = \frac{22}{7}$ ]

- Ans
- 1. 28 cm
  - 2. 14 cm
  - 3. 70 cm
  - 4. 35 cm

Question ID : 26433049686  
Status : Not Answered  
Chosen Option : --

Q.25 The value of  $14\frac{4}{9} + 16\frac{5}{27} + 2\frac{5}{54}$  is:

- Ans
- 1.  $32\frac{17}{18}$
  - 2.  $32\frac{13}{18}$
  - 3.  $31\frac{13}{18}$
  - 4.  $32\frac{11}{18}$

Question ID : 26433050068  
Status : Answered  
Chosen Option : 2

Section : General Awareness

Q.1 Small Industries Development Bank of India (SIDBI) is regulated by \_\_\_\_\_.

- Ans
- 1. Indian Bank
  - 2. Reserve Bank of India
  - 3. ICICI Bank
  - 4. State Bank of India

Question ID : 26433046917  
Status : Answered  
Chosen Option : 2

Q.2 पत्तदकल (Pattadakal) नृत्य उत्सव, भारत के किस राज्य में आयोजित किया जाता है?

- Ans
- 1. असम
  - 2. मणिपुर
  - 3. कर्नाटक
  - 4. झारखंड

Question ID : 26433047446  
Status : Answered  
Chosen Option : 4

Q.3 As per the Preamble of the Constitution of India, India is a/an \_\_\_\_\_.

- Ans
- 1. oligarchy
  - 2. monarchy
  - 3. republic
  - 4. aristocracy

Question ID : 26433046888  
Status : Answered  
Chosen Option : 3

Q.4 Which of the following universities was founded by Kumaragupta, the ruler of the Gupta dynasty?

- Ans
- 1. Delhi University
  - 2. Nalanda University
  - 3. Pune University
  - 4. Taxila University

Question ID : 26433046906  
Status : Answered  
Chosen Option : 2

Q.5 Manika Batra is associated with which sport?

- Ans
- 1. Wrestling
  - 2. Badminton
  - 3. Boxing
  - 4. Table Tennis

Question ID : 26433047391  
Status : Answered  
Chosen Option : 3

Q.6 According to the Constitution of India, there shall be a Comptroller and Auditor General of India who shall be appointed by the \_\_\_\_\_.

- Ans
- 1. Prime Minister of India
  - 2. Attorney General of India
  - 3. President of India
  - 4. Chief Justice of India

Question ID : 26433047489  
Status : Answered  
Chosen Option : 3

Q.7 Khajuraho temple in Madhya Pradesh is an example of \_\_\_\_\_ style of temple architecture.

- Ans
- 1. Dravida
  - 2. Vesara
  - 3. Nagara
  - 4. Hoysala

Question ID : 26433046872  
Status : Not Attempted and Marked For Review  
Chosen Option : --

Q.8 When a cell divides by meiosis it produces \_\_\_\_\_ new cells.

- Ans
- 1. 4
  - 2. 2
  - 3. 3
  - 4. 5

Question ID : 26433047474  
Status : Answered  
Chosen Option : 2

Q.9 \_\_\_\_\_ दुनिया का सबसे बड़ा उष्णकटिबंधीय वर्षावन है।

- Ans
- 1. सहारा
  - 2. अमेज़न
  - 3. कांगो
  - 4. प्रेयरीज

Question ID : 26433046876  
Status : Answered  
Chosen Option : 2

Q.10 The Inland Vessels Bill, 2021 is associated with the Ministry of \_\_\_\_\_.

- Ans
- 1. Jal Shakti
  - 2. Civil Aviation
  - 3. Home Affairs
  - 4. Ports, Shipping and Waterways

Question ID : 26433046868  
Status : Answered  
Chosen Option : 2

Q.11 What was the original name of Swami Vivekananda?

- Ans
- 1. Mula Sankara
  - 2. Narendranath Dutta
  - 3. Vardhamana
  - 4. Nrusimha Bhan

Question ID : 26433047483  
Status : Answered  
Chosen Option : 3

Q.12 Limestone, chalk and marble are different forms of \_\_\_\_\_.

- Ans
- 1. calcium carbonate
  - 2. sodium carbonate
  - 3. potassium carbonate
  - 4. magnesium carbonate

Question ID : 26433047448  
Status : Answered  
Chosen Option : 4

Q.13 Which TMC candidate won the Ballygunge (West Bengal) by-poll election in April 2022?

- Ans  1. Babul Supriyo  
 2. Amit Shah  
 3. Mamata Banerjee  
 4. Derek O'Brien

Question ID : 26433046894  
Status : Answered  
Chosen Option : 3

Q.14 Which of the following states has the highest reserves of haematite ore in India?

- Ans  1. Rajasthan  
 2. Tamil Nadu  
 3. Maharashtra  
 4. Odisha

Question ID : 26433046877  
Status : Not Attempted and Marked For Review  
Chosen Option : --

Q.15 Alarvel Valli is associated with which classical dance of India?

- Ans  1. Manipuri  
 2. Sattriya  
 3. Kathak  
 4. Bharatanatyam

Question ID : 26433047487  
Status : Not Attempted and Marked For Review  
Chosen Option : --

Q.16 'Wings of Fire' is a famous autobiography of which Indian scientist?

- Ans  1. Homi J Bhabha  
 2. CV Raman  
 3. APJ Abdul Kalam  
 4. Vikram Sarabhai

Question ID : 26433046910  
Status : Answered  
Chosen Option : 3

Q.17 In its longitudinal extent, the Himalaya consists of \_\_\_\_\_ parallel ranges.

Ans  1. three

2. five

3. four

4. two

Question ID : 26433047478  
Status : Answered  
Chosen Option : 3

Q.18 Pulakesin I was the founder of \_\_\_\_\_ dynasty of South India.

Ans  1. Chera

2. Pandya

3. Chalukya

4. Chola

Question ID : 26433046882  
Status : Answered  
Chosen Option : 3

Q.19 Which of the following cell organelles help to keep the cell clean by digesting any foreign material as well as worn-out cell organelles?

Ans  1. Mitochondria

2. Ribosome

3. Lysosome

4. Vacuole

Question ID : 26433047550  
Status : Answered  
Chosen Option : 4

Q.20 Who among the following is a famous tennis player?

Ans  1. Neeraj Chopra

2. Milkha Singh

3. Mahesh Bhupathi

4. TC Yohannan

Question ID : 26433047041  
Status : Answered  
Chosen Option : 4

Q.21 The number of live births per thousand persons in a year is called \_\_\_\_\_.

Ans  1. growth rate

2. fertility rate

3. death rate

4. birth rate

Question ID : 26433047655  
Status : Answered  
Chosen Option : 1

**Q.22** According to the Socio-Economic Census 2015, which state has the largest population of households with 'destitute / living on alms'?

- Ans
- 1. Chhattisgarh
  - 2. Bihar
  - 3. Tamil Nadu
  - 4. Odisha

Question ID : 26433047080  
Status : Answered  
Chosen Option : 2

**Q.23** MS Subbulakshmi was a famous \_\_\_\_\_ singer of India.

- Ans
- 1. Jazz
  - 2. Carnatic
  - 3. Hiphop
  - 4. Rock

Question ID : 26433046911  
Status : Not Attempted and Marked For Review  
Chosen Option : --

**Q.24** Mangal Pandey was hanged to death for attacking British officers in Barrackpore on \_\_\_\_\_.

- Ans
- 1. 21 March 1857
  - 2. 23 March 1857
  - 3. 31 March 1857
  - 4. 29 March 1857

Question ID : 26433047559  
Status : Answered  
Chosen Option : 1

**Q.25** Pandit Birju Maharaj who passed away in January 2022 was related with which classical dance of India?

- Ans
- 1. Bharatanatyam
  - 2. Kuchipudi
  - 3. Sattriya
  - 4. Kathak

Question ID : 26433047545  
Status : Answered  
Chosen Option : 1