



SSC MTS **SHIFT – 1 (14-07-2022)**

- ★ **Latest Govt Job updates**
- ★ **Private Job updates**
- ★ **Free Mock tests available**

Visit - teachingninja.in

Multi Tasking Non Technical Staff Havaladar CBIC and CBN Examination 2021

Roll Number	
Candidate Name	
Venue Name	iON Digital Zone iDZ 2 Moula Ali
Exam Date	14/07/2022
Exam Time	9:00 AM - 10:30 AM
Subject	MTS Non technical and Havaladar Examination 2021

Section : General English

Q.1 Select the most appropriate synonym of the given word.

Bulky

- Ans
- 1. Airy
 - 2. Soft
 - 3. Massive
 - 4. Scanty

Question ID : 26433050809
Status : Answered
Chosen Option : 3

Q.2 Select the option that will improve the underlined part of the given sentence. In case no improvement is needed, select 'No improvement required'.

Hardly had he disappeared that her mother clomped down the steps, looking for him.

- Ans
- 1. Hardly did he disappeared that her mother
 - 2. Hardly had he disappear that her mother
 - 3. No improvement required
 - 4. Hardly had he disappeared when her mother

Question ID : 26433051699
Status : Answered
Chosen Option : 4

Q.3 Select the most appropriate option to fill in the blank.

My friend is not _____ for this complicated assignment.

- Ans
- 1. worthy
 - 2. comfortable
 - 3. suitable
 - 4. entitled

Question ID : 26433051268
Status : Answered
Chosen Option : 1

Q.4 Select the most appropriate option to fill in the blank.

But if you _____ to spare before you do catch the bus, be sure to pop in.

- Ans
- 1. have a meeting
 - 2. have a moment
 - 3. have a nap
 - 4. have a ride

Question ID : 26433051589

Status : **Not Attempted and Marked For Review**

Chosen Option : --

Q.5 Select the option that will improve the underlined part of the given sentence. In case no improvement is needed, select 'No improvement required'.

Michael nodded and begun writing at his pad.

- Ans
- 1. begun to write in
 - 2. begin writing in
 - 3. began writing on
 - 4. No improvement required

Question ID : 26433050639

Status : **Answered**

Chosen Option : 3

Q.6 Select the most appropriate option to substitute the underlined segment in the given sentence. If there is no need to substitute it, select 'No substitution required'.

Just try and recall the poor people you saw on the streets, on local trains, and in slums on our way back.

- Ans
- 1. have been seen on the
 - 2. seen on the
 - 3. have seeing on the
 - 4. No substitution required

Question ID : 26433051110

Status : **Answered**

Chosen Option : 4

Q.7 Select the option that will improve the underlined part of the sentence. In case no improvement is needed, select 'No improvement required'.

An unidentified man on an bike dropped for the box outside the building.

- Ans
- 1. a bike dropped off
 - 2. a bike dropping for
 - 3. a bike drop of
 - 4. No improvement required

Question ID : 26433050832

Status : **Answered**

Chosen Option : 1

Q.8 Select the most appropriate synonym of the given word.

Maestro

- Ans** 1. Genius
 2. Senile
 3. Slender
 4. Novice

Question ID : 26433051582
Status : Answered
Chosen Option : 1

Q.9 The following sentence has been divided into parts. One of them may contain an error. Select the part that contains the error from the given options. If you don't find any error, mark 'No error' as your answer.

My mother exclaimed / at how fast / the days had pass.

- Ans** 1. at how fast
 2. No error
 3. My mother exclaimed
 4. the days had pass

Question ID : 26433051393
Status : Answered
Chosen Option : 1

Q.10 Select the most appropriate meaning of the given idiom.

To raise a dust

- Ans** 1. To meet one's defeat
 2. To be satisfied with what you have achieved
 3. To be secretly or inwardly amused
 4. To cause disruption or confusion

Question ID : 26433051307
Status : Answered
Chosen Option : 4

Q.11 Select the option that will improve the underlined part of the given sentence. In case no improvement is needed, select 'No improvement required'.

She had no sooner taken a few steps forward that she suddenly recoiled.

- Ans** 1. No sooner had she taken a few steps forward than
 2. She did no sooner taken a few steps forward than
 3. No improvement required
 4. She did no sooner took a few steps forward than

Question ID : 26433051571
Status : Answered
Chosen Option : 1

Q.12 Select the most appropriate option to fill in the blank.

One day, the queen was painting when a messenger entered _____ to convey the king's arrival.

- Ans
- 1. comparably
 - 2. relatively
 - 3. enjoyably
 - 4. breathlessly

Question ID : 26433051416

Status : Not Attempted and Marked For Review

Chosen Option : --

Q.13 Parts of the following sentence have been given as options. One of them may contain an error. Select the part that contains the error from the given options. If you don't find any error, mark 'No error' as your answer.

Hundreds of migrants work in private firms in Erode.

- Ans
- 1. firms in Erode
 - 2. No error
 - 3. Hundreds of migrants
 - 4. work in private

Question ID : 26433051029

Status : Answered

Chosen Option : 2

Q.14 Select the option that will improve the underlined part of the sentence. In case no improvement is needed, select 'No improvement required'.

Can all us sleep in the same room, Mother?

- Ans
- 1. May all we
 - 2. Can we all
 - 3. Should us all
 - 4. No improvement required

Question ID : 26433051039

Status : Answered

Chosen Option : 2

Q.15 Parts of the given sentence have been given as options. One of them may contain an error. Select the part that contains the error from the given options. If you don't find any error, mark 'No error' as your answer.

Neither she not I am going to take part in the debate competition.

- Ans
- 1. am going to take part
 - 2. No error
 - 3. Neither she not I
 - 4. in the debate competition

Question ID : 26433050793

Status : Answered

Chosen Option : 3

Q.16 Select the correctly spelt word.

- Ans
- 1. Hieght
 - 2. Beleive
 - 3. Fiery
 - 4. Foriegn

Question ID : 26433051414
Status : Answered
Chosen Option : 3

Q.17 Select the INCORRECTLY spelt word.

- Ans
- 1. Strangled
 - 2. Dominion
 - 3. Solitary
 - 4. Persecution

Question ID : 26433051127
Status : Answered
Chosen Option : 3

Q.18 Select the most appropriate option to fill in the blank.

You really need to exercise daily, if you want to live a long and _____ life.

- Ans
- 1. marginal
 - 2. shrieking
 - 3. wealthy
 - 4. healthy

Question ID : 26433050948
Status : Answered
Chosen Option : 4

Q.19 Select the most appropriate meaning of the underlined idiom in the given sentence.

That lady must have an axe to grind that's why she is not reporting your crime.

- Ans
- 1. To have a tedious job
 - 2. To have a crucial information
 - 3. To delay one's actions
 - 4. To have an ulterior motive

Question ID : 26433050760
Status : Answered
Chosen Option : 4

Q.20 Select the most appropriate ANTONYM of the given word.

Unfeigned

- Ans** 1. Sincere
 2. Genuine
 3. Pretended
 4. Expressive

Question ID : 26433051124
Status : Answered
Chosen Option : 3

Comprehension:

In the following passage, some words have been deleted. Read the passage carefully and select the most appropriate option to fill in each blank.

When he died on 27 November 1953, Gladstone O'Neill was (1) _____ recognised as one of the major dramatists of the modern world. Four times a Pulitzer Prize-winner, he had also been (2) _____ the 1936 Nobel Prize for Literature. His plays have been translated into most major languages and read by more people than those of (3) _____ other playwright except W Shakespeare and maybe G Bernard Shaw. O'Neill was a puzzle to his friends – a genuinely shy, brooding, complicated man in whom (4) _____ alternated with touching kindness. He was both, naive and worldly. One biographer found him "sentimental one instant, hard as nails the next." His widow, after 26 years with O'Neill, said, "To (5) _____ his work you must understand the man, for the work and the man are one."

SubQuestion No : 21

Q.21 Select the most appropriate option to fill in blank number 1.

- Ans** 1. manically
 2. universally
 3. specifically
 4. casually

Question ID : 26433051574
Status : Answered
Chosen Option : 2



Comprehension:

In the following passage, some words have been deleted. Read the passage carefully and select the most appropriate option to fill in each blank.

When he died on 27 November 1953, Gladstone O'Neill was (1) _____ recognised as one of the major dramatists of the modern world. Four times a Pulitzer Prize-winner, he had also been (2) _____ the 1936 Nobel Prize for Literature. His plays have been translated into most major languages and read by more people than those of (3) _____ other playwright except W Shakespeare and maybe G Bernard Shaw. O'Neill was a puzzle to his friends – a genuinely shy, brooding, complicated man in whom (4) _____ alternated with touching kindness. He was both, naive and worldly. One biographer found him "sentimental one instant, hard as nails the next." His widow, after 26 years with O'Neill, said, "To (5) _____ his work you must understand the man, for the work and the man are one."

SubQuestion No : 22

Q.22 Select the most appropriate option to fill in blank number 2.

- Ans 1. rewarded
 2. awarded
 3. unaided
 4. crowded

Question ID : 26433051575
Status : Answered
Chosen Option : 2

Comprehension:

In the following passage, some words have been deleted. Read the passage carefully and select the most appropriate option to fill in each blank.

When he died on 27 November 1953, Gladstone O'Neill was (1) _____ recognised as one of the major dramatists of the modern world. Four times a Pulitzer Prize-winner, he had also been (2) _____ the 1936 Nobel Prize for Literature. His plays have been translated into most major languages and read by more people than those of (3) _____ other playwright except W Shakespeare and maybe G Bernard Shaw. O'Neill was a puzzle to his friends – a genuinely shy, brooding, complicated man in whom (4) _____ alternated with touching kindness. He was both, naive and worldly. One biographer found him "sentimental one instant, hard as nails the next." His widow, after 26 years with O'Neill, said, "To (5) _____ his work you must understand the man, for the work and the man are one."

SubQuestion No : 23

Q.23 Select the most appropriate option to fill in blank number 3.

- Ans 1. none
 2. few
 3. any
 4. some

Question ID : 26433051576
Status : Answered
Chosen Option : 4

Comprehension:

In the following passage, some words have been deleted. Read the passage carefully and select the most appropriate option to fill in each blank.

When he died on 27 November 1953, Gladstone O'Neill was (1) _____ recognised as one of the major dramatists of the modern world. Four times a Pulitzer Prize-winner, he had also been (2) _____ the 1936 Nobel Prize for Literature. His plays have been translated into most major languages and read by more people than those of (3) _____ other playwright except W Shakespeare and maybe G Bernard Shaw. O'Neill was a puzzle to his friends – a genuinely shy, brooding, complicated man in whom (4) _____ alternated with touching kindness. He was both, naive and worldly. One biographer found him "sentimental one instant, hard as nails the next." His widow, after 26 years with O'Neill, said, "To (5) _____ his work you must understand the man, for the work and the man are one."

SubQuestion No : 24

Q.24 Select the most appropriate option to fill in blank number 4.

- Ans
- 1. failure
 - 2. success
 - 3. benefit
 - 4. cruelty

Question ID : 26433051577
Status : Answered
Chosen Option : 2

Comprehension:

In the following passage, some words have been deleted. Read the passage carefully and select the most appropriate option to fill in each blank.

When he died on 27 November 1953, Gladstone O'Neill was (1) _____ recognised as one of the major dramatists of the modern world. Four times a Pulitzer Prize-winner, he had also been (2) _____ the 1936 Nobel Prize for Literature. His plays have been translated into most major languages and read by more people than those of (3) _____ other playwright except W Shakespeare and maybe G Bernard Shaw. O'Neill was a puzzle to his friends – a genuinely shy, brooding, complicated man in whom (4) _____ alternated with touching kindness. He was both, naive and worldly. One biographer found him "sentimental one instant, hard as nails the next." His widow, after 26 years with O'Neill, said, "To (5) _____ his work you must understand the man, for the work and the man are one."

SubQuestion No : 25

Q.25 Select the most appropriate option to fill in blank number 5.

- Ans
- 1. prepare
 - 2. produce
 - 3. understand
 - 4. demonstrate

Question ID : 26433051578
Status : Not Attempted and Marked For Review
Chosen Option : --

Section : General Intelligence and Reasoning

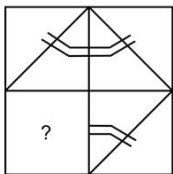
Q.1 What will be the value of the following expression, if '×' and '-' are interchanged and '+' and '÷' are interchanged?

$$200 \div 100 \times 300 \div 200 + 10 - 2 \times 40 = ?$$

- Ans
- 1. 200
 - 2. 2
 - 3. 40
 - 4. 0

Question ID : 26433048431
Status : Answered
Chosen Option : 4

Q.2 Select the figure from the options that can replace the question mark (?) and complete the given pattern. (Rotation is not allowed)



Ans

- 1.
- 2.
- 3.
- 4.

Question ID : 26433048488
Status : Answered
Chosen Option : 1

Q.3 Which two numbers need to be interchanged to make the following equation correct?

$$27 - 8 \times 4 - 3 \div 2 = 1$$

- Ans
- 1. 2 and 8
 - 2. 2 and 3
 - 3. 3 and 4
 - 4. 8 and 4

Question ID : 26433048186
Status : Answered
Chosen Option : 3

Q.4 In a certain code language, 'heart black blue' is written as '8 # ab', 'grey are blue' is written as '# pr kt'. How will 'blue' be written in that language?

- Ans
- 1. ab
 - 2. pr
 - 3. #
 - 4. 8

Question ID : 26433049020
Status : Answered
Chosen Option : 3

Q.5 Select the option that is related to the fifth term in the same way as the second term is related to the first term and the fourth term is related to the third term.

TACKLE : TCCMLG :: JACKET : JCCMEV :: NEPTUNE : ?

- Ans
- 1. PEPTVOE
 - 2. PERTWNG
 - 3. NFGPVUP
 - 4. NGPVUPE

Question ID : 26433048491
Status : Answered
Chosen Option : 4

Q.6 Select the option in which the numbers are related in the same way as are the numbers in the given set.

(7, 49, 343)

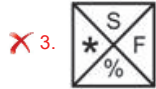
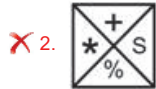
- Ans
- 1. (5, 25, 625)
 - 2. (11, 121, 1321)
 - 3. (13, 169, 2197)
 - 4. (3, 9, 29)

Question ID : 26433048892
Status : Answered
Chosen Option : 1

Q.7 Select the figure from among the given options that can replace the question mark (?) in the following series.



Ans



Question ID : 26433048784
Status : Answered
Chosen Option : 2

Q.8 Select the option that is related to the fifth word in the same way as the second word is related to the first word and the fourth word is related to the third word.

Virat Kohli : Cricket :: Saina Nehwal : Badminton :: Viswanathan Anand : ?

Ans ✗ 1. Basketball

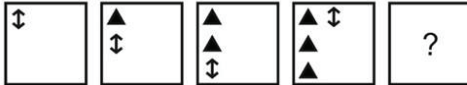
✓ 2. Chess

✗ 3. Tennis

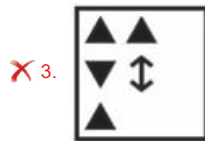
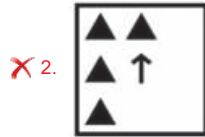
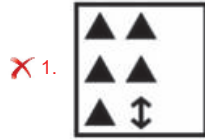
✗ 4. Football

Question ID : 26433048019
Status : Answered
Chosen Option : 2

Q.9 Select the figure from among the given options that can replace the question mark (?) in the following series.



Ans



Question ID : 26433048508
 Status : Answered
 Chosen Option : 4

Q.10 Select the option that is related to the third letter-cluster in the same way as the second letter-cluster is related to the first letter-cluster.

LOB : DQN :: HER : ?

- Ans
- ✗ 1. TGK
 - ✓ 2. TGJ
 - ✗ 3. JGU
 - ✗ 4. JGT

Question ID : 26433049024
 Status : Answered
 Chosen Option : 2

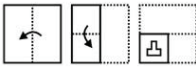
Q.11 Select the number from among the given options that can replace the question mark (?) in the following series.

524, 533, 544, 557, ?

- Ans
- 1. 574
 - 2. 568
 - 3. 572
 - 4. 564

Question ID : 26433048768
Status : Answered
Chosen Option : 3

Q.12 The sequence of folding a piece of paper and the manner in which the folded paper has been cut is shown in the following figures. How would this paper look when unfolded?



Ans

- 1.
- 2.
- 3.
- 4.

Question ID : 26433048837
Status : Answered
Chosen Option : 1

Q.13 The marks of seven students A, B, C, D, E, F and G in a test were given as follows:
A's score was exactly between E's and F's scores. B's score was more than only G's score. C's score was immediately more than B's score. F's score was more than E's score and F did not score the highest.
Who scored the highest marks in the test?

- Ans
- 1. A
 - 2. G
 - 3. E
 - 4. D

Question ID : 26433048424
Status : Answered
Chosen Option : 4

Q.14 In a certain code language, 'GRSTB' is written as 'GYXWL', and 'HANDS' is written as 'XISFM'. How will 'MNET' be written in that language?

- Ans
- 1. YJITS
 - 2. YJIRS
 - 3. JIISR
 - 4. YJISR

Question ID : 26433048948
Status : Answered
Chosen Option : 4



Teachingninja.in

Q.15 Select the option in which the given figure is embedded. (Rotation is not allowed)




Ans

✗ 1.




✗ 2.



✗ 3.



✓ 4.



Question ID : 26433048910
Status : Answered
Chosen Option : 4

Q.16 In a certain code language, 'GEFS' is written as 'HFER' and 'IBIS' is written as 'JCHR'.
How will 'STIR' be written in that language?

- Ans
- 1. RSHQ
 - 2. TUJS
 - 3. RUHS
 - 4. TUHQ

Question ID : 26433048022
Status : Answered
Chosen Option : 4

Q.17 Read the given statements and conclusions carefully. Assuming that the information given in the statements is true, even if it appears to be at variance with commonly known facts, decide which of the given conclusions logically follow(s) from the statements.

Statements:
I. Some M are Q.
II. All V are Q.

Conclusions:
I. Some Q are M.
II. No M is V.

- Ans
- 1. Both conclusions I and II follow
 - 2. Only conclusion I follows
 - 3. Neither conclusion I nor II follows
 - 4. Only conclusion II follows

Question ID : 26433048903
Status : Answered
Chosen Option : 2

Q.18 Read the given statements and conclusions carefully. Assuming that the information given in the statements is true, even if it appears to be at variance with commonly known facts, decide which of the given conclusions logically follow(s) from the statements.

Statements:
All hexagons are pentagons.
All pentagons are octagons.
All octagons are decagons.

Conclusions:
I. All decagons are hexagons.
II. All hexagons are octagons.

- Ans
- 1. Both conclusions I and II follow
 - 2. Neither conclusion I nor II follows
 - 3. Only conclusion II follows
 - 4. Only conclusion I follows

Question ID : 26433048501
Status : Answered
Chosen Option : 3

Q.19 Select the number from among the given options that can replace the question mark (?) in the following series.

28, 27, 31, 22, 38, 13, 49, ?

- Ans
- 1. 42
 - 2. 2
 - 3. 0
 - 4. 22

Question ID : 26433048427
Status : Answered
Chosen Option : 3

Q.20 In a certain code language, 'ACQUIRE' is written as 'QCAUERI', 'ADDRESS' is written as 'DDARSSE', and 'ABILITY' is written as 'IBALYTI'. How will 'ICEBERG' be written in that language?

- Ans
- 1. GREBECI
 - 2. GREBICE
 - 3. ECIBGRE
 - 4. ICEBGRE

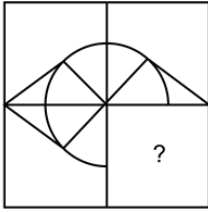
Question ID : 26433048173
Status : Answered
Chosen Option : 3

Q.21 Five friends N, M, O, P and Q are sitting in a column facing east (but not necessarily in the same order) . O is sitting to the leftmost side. N is the immediate neighbour of M and Q. P is not sitting on any of the end seats. Who is the immediate neighbour of O?

- Ans
- 1. M
 - 2. Q
 - 3. P
 - 4. N

Question ID : 26433048423
Status : Answered
Chosen Option : 3

Q.22 Select the figure from the options that can replace the question mark (?) and complete the pattern.



Ans

✓ 1.



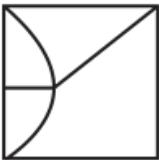
✗ 2.



✗ 3.



✗ 4.



Teachingninja.in

Question ID : 26433048167
Status : Answered
Chosen Option : 1

Q.23 Select the letter-cluster from among the given options that can replace the question mark (?) in the following series.

AEI, EIO, IOU, ?

Ans ✗ 1. UAE

✗ 2. AEI

✓ 3. OUA

✗ 4. AII

Question ID : 26433048168
Status : Answered
Chosen Option : 3

Q.24 Select the option that is related to the fifth number in the same way as the second number is related to the first number and the fourth number is related to the third number.

3 : 72 :: 21 : 504 :: 36 : ?

- Ans
- 1. 480
 - 2. 864
 - 3. 632
 - 4. 376

Question ID : 26433048504

Status : **Not Attempted and Marked For Review**

Chosen Option : --

Q.25 Seven boys B1, B2, B3, B4, B5, B6 and B7 are sitting around a circular table facing towards the centre (not necessarily in the same order). B1 is third to the left of B7. B4 is to immediate left of B1. B2 is second to the left of B6. B6 is not an immediate neighbour of B5. Who are the immediate neighbours of B3?

- Ans
- 1. B5 and B4
 - 2. B6 and B7
 - 3. B1 and B2
 - 4. B4 and B6

Question ID : 26433048780

Status : **Answered**

Chosen Option : 4

Section : Numerical Aptitude

Q.1 A shopkeeper sells an item at a loss of 8%. However, if he increases the selling price by ₹36, he could gain 12%. Find the cost price of the article (in ₹).

- Ans
- 1. 180
 - 2. 270
 - 3. 150
 - 4. 360

Question ID : 26433050226

Status : **Answered**

Chosen Option : 1

Q.2 What is the average of the squares of the first five natural numbers?

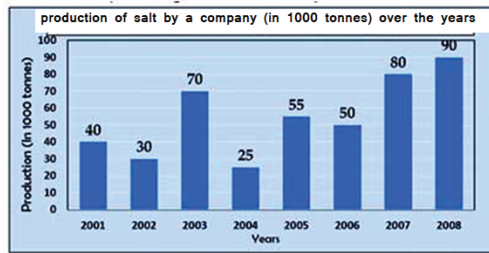
- Ans
- 1. 11.5
 - 2. 10
 - 3. 12.5
 - 4. 11

Question ID : 26433049653

Status : **Answered**

Chosen Option : 4

Q.3 The given bar graph given below provides information about the quantity of salt produced by a company in 8 consecutive years. Study the information provided in the bar graph and answer the question that follows.



The average production of salt in 2001 and 2003 was exactly equal to the average production of salt in which of the following pairs of years?

- Ans**
- 1. 2006 and 2007
 - 2. 2001 and 2005
 - 3. 2002 and 2007
 - 4. 2005 and 2006

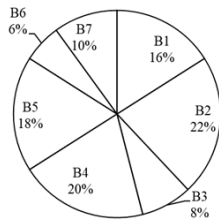
Question ID : 26433050113
Status : Answered
Chosen Option : 3

Q.4 The perimeter of a rectangle is 68 cm. If the area of the rectangle is 240 cm^2 , then what is the length of each of its diagonals?

- Ans**
- 1. 25 cm
 - 2. 27 cm
 - 3. 26 cm
 - 4. 28 cm

Question ID : 26433049661
Status : Answered
Chosen Option : 3

Q.5 The pie chart given below shows the number of laptops sold of each of 7 different brands in a year as percentages of the total number of laptops sold of all these 7 brands taken together in that year.



What is the difference between the measures of the central angles made by sector B2 and sector B5?

- Ans**
- 1. 16.66°
 - 2. 21.6°
 - 3. 14.4°
 - 4. 7.2°

Question ID : 26433049842
Status : Answered
Chosen Option : 1

Q.6 Find a single discount equivalent to two successive discounts of 12% and 8%.

- Ans**
- 1. 18.8%
 - 2. 19.04%
 - 3. 19.4%
 - 4. 19.8%

Question ID : 26433049528
Status : Answered
Chosen Option : 2

Q.7 The present ages of A and B are in the ratio 3 : 5. If A's present age is 33 years, then what will be B's age (in years) after 5 years?

- Ans**
- 1. 65
 - 2. 60
 - 3. 50
 - 4. 55

Question ID : 26433049756
Status : Answered
Chosen Option : 2

Q.8 If $A = 3 + 7 \times 2$, $B = 12 \div 4 - 6$, and $C = 6 \times 5 + 2$, then what is the value of $A \times B + C$?

- Ans**
- 1. -22
 - 2. -19
 - 3. -25
 - 4. -26

Question ID : 26433049838
Status : Answered
Chosen Option : 2

Q.9 Rohit scored an average of 58 runs in his last five innings. The runs scored by Rohit in the last four innings are 42, 56, 72, and 40. How many runs did Rohit score in the first of these five innings?

- Ans**
- 1. 80
 - 2. 60
 - 3. 90
 - 4. 40

Question ID : 26433050098
Status : Not Attempted and Marked For Review
Chosen Option : --

Q.10 Sashi took a loan of ₹700 on simple interest for as many years as the rate of interest per annum. If he paid ₹343 as interest at the end of the loan period, what was the rate of interest?

- Ans**
- 1. 6%
 - 2. 4%
 - 3. 10%
 - 4. 7%

Question ID : 26433049531
Status : Answered
Chosen Option : 4

Q.11 The cost prices of a pen and a notebook are ₹600 and ₹4,000, respectively. If the pen and the notebook are sold at losses of 20% and 32%, respectively, what will be the approximate percentage of total loss incurred through the two sales made?

- Ans**
- 1. 21.40%
 - 2. 26.08%
 - 3. 30.43%
 - 4. 28.42%

Question ID : 26433049823
Status : Answered
Chosen Option : 3

Q.12 Find the total cost of painting the outside of a closed cuboidal box, which is 7 m long, 5m wide and 2m high, at the rate of ₹2.4 per m².

- Ans**
- 1. ₹296.30
 - 2. ₹263.40
 - 3. ₹283.20
 - 4. ₹251.20

Question ID : 26433050117
Status : Answered
Chosen Option : 3

Q.13 Zee and Gee can complete a task together in 24 days. If the efficiencies of Zee and Gee are in the ratio 3 : 8, respectively, then in how many days can Gee complete the task alone?

- Ans**
- 1. 33 days
 - 2. 55 days
 - 3. 88 days
 - 4. 44 days

Question ID : 26433050160
Status : Answered
Chosen Option : 1

Q.14 Ravi's monthly salary is ₹16,000. He spends 30% of his salary on rent, 20% of his salary on education. 60% of the remaining amount is invested in mutual funds. Find the amount invested in mutual funds in a month.

- Ans**
- 1. ₹5,000
 - 2. ₹4,800
 - 3. ₹4,200
 - 4. ₹4,500

Question ID : 26433049475
Status : Answered
Chosen Option : 2

Q.15 The ratio of the LCM of two numbers to the sum of the same two numbers is 12 : 7. If their HCF is 4, what is the product of these two numbers?

- Ans**
- 1. 192
 - 2. 172
 - 3. 196
 - 4. 169

Question ID : 26433050220
Status : Not Attempted and Marked For Review
Chosen Option : --

Q.16 The price of a cap is increased by 15%. If this results in a ₹27 increase in the price of the cap, then what is the increased price of the cap?

- Ans
- 1. ₹170
 - 2. ₹197
 - 3. ₹207
 - 4. ₹180

Question ID : 26433050000
Status : Answered
Chosen Option : 3

Q.17 Study the given table and answer the question that follows.
The table shows the amount earned (in ₹ '000) by five different movies across all screens a movie was played.

Movies	Amount collected per movie (in ₹ '000)
M1	450
M2	370
M3	510
M4	640
M5	830

All the movies were displayed on 50 screens each. What is the average amount earned per movie, per screen, all movies and all screens are taken together?

- Ans
- 1. ₹14,200
 - 2. ₹11,200
 - 3. ₹12,600
 - 4. ₹13,400

Question ID : 26433049765
Status : Not Attempted and Marked For Review
Chosen Option : --

Q.18 X alone can complete a piece of work in 16 days, while Y alone can complete the same work in 24 days. They work on alternate days starting with Y. In how many days will 50% of the total work be completed?

- Ans
- 1. $\frac{24}{3}$ days
 - 2. $\frac{29}{3}$ days
 - 3. $\frac{32}{3}$ days
 - 4. 9 days

Question ID : 26433049718
Status : Answered
Chosen Option : 3

Q.19 The average of all the numbers between 14 and 61 which are divisible by 5 is:

- Ans
- ✓ 1. 37.5
 - ✗ 2. 38
 - ✗ 3. 40
 - ✗ 4. 44

Question ID : 26433049523
Status : Answered
Chosen Option : 1

Q.20 Five years from now, the ratio of the ages of A, B and C will be 3 : 5 : 2. The sum of the squares of their present ages is 525. What is the present age of B?

- Ans
- ✗ 1. 10 years
 - ✗ 2. 15 years
 - ✗ 3. 25 years
 - ✓ 4. 20 years

Question ID : 26433050104
Status : Not Attempted and Marked For Review
Chosen Option : --

Q.21 What should come in place of the question mark (?) in the following mathematical statement?

$$\sqrt{19 \times 650 \div 13 + 18.5 \times 4} \times 13 = ?$$

- Ans
- ✓ 1. 416
 - ✗ 2. 418
 - ✗ 3. 413
 - ✗ 4. 415

Question ID : 26433050094
Status : Answered
Chosen Option : 1

Q.22 A person goes from P to Q at a speed of 20 km/h. Then he goes from Q to R at a speed of q km/h. Finally the person goes from R to S at a speed of r km/h. The distances from P to Q, Q to R and R to S are equal. If the average speed from P to R is $\frac{280}{11}$ km/h, and the average speed from Q to S is $\frac{112}{3}$ km/h, then what is the value of r?

- Ans
- ✓ 1. 40
 - ✗ 2. 37.5
 - ✗ 3. 42.5
 - ✗ 4. 45

Question ID : 26433049746
Status : Not Attempted and Marked For Review
Chosen Option : --

Q.23 The length of each side of a cube is 4 cm. What is the volume of the cube?

- Ans
- 1. 128 cm^3
 - 2. 48 cm^3
 - 3. 64 cm^3
 - 4. 32 cm^3

Question ID : 26433049834
Status : Answered
Chosen Option : 3

Q.24 The amount received after 8 years on a certain sum of money invested at the rate of 18% simple interest per annum is ₹1,220. What was the initial sum invested?

- Ans
- 1. ₹500
 - 2. ₹480
 - 3. ₹420
 - 4. ₹450

Question ID : 26433050232
Status : Answered
Chosen Option : 1

Q.25 Piu and Titu start from the same place at the same time and walk in opposite directions. If Piu walks at 5 km/h and Titu walks at 2 km/h, after what time will they be 10.5 km apart?

- Ans
- 1. 3.5 hours
 - 2. 1.5 hours
 - 3. 2.5 hours
 - 4. 2 hours

Question ID : 26433050108
Status : Answered
Chosen Option : 2

Section : General Awareness

Q.1 Which part of the Constitution of India talks about the Directive Principles of State Policy?

- Ans
- 1. Part IV
 - 2. Part V
 - 3. Part III
 - 4. Part II

Question ID : 26433047638
Status : Answered
Chosen Option : 1

Q.2 Who among the following was a famous Indian playback singer and an actor too?

Ans 1. Kashinath Ghanekar

2. Kishore Kumar

3. Pranab Mukherjee

4. Sunil Chhetri

Question ID : 26433046936

Status : **Not Attempted and
Marked For Review**

Chosen Option : --

Q.3 The Purple Revolution, which was launched in Jammu and Kashmir, is also known as

Ans 1. Lavender Revolution

2. Indigo Revolution

3. Orchids Revolution

4. Lilac Revolution

Question ID : 26433047618

Status : **Answered**

Chosen Option : 2

Q.4 Who among the following founded Brahma Samaj in Calcutta (Kolkata)?

Ans 1. Swami Vivekanand

2. Swami Dayanand Saraswati

3. Ishwar Chandra Vidyasagar

4. Raja Ram Mohan Roy

Question ID : 26433047509

Status : **Answered**

Chosen Option : 2

Q.5 Which of the following is NOT a cause of rural poverty in India?

Ans 1. Migration from rural areas

2. Lack of alternate employment opportunities other than agriculture

3. Illiteracy

4. Lack of capital

Question ID : 26433047055

Status : **Answered**

Chosen Option : 1

Q.6 Who is the Chairman of Financial Stability and Development Council (FSDC) of India?

- Ans 1. Finance Minister
 2. Human Resource Development Minister
 3. Home Minister
 4. Skill Development Minister

Question ID : 26433046942
Status : Not Attempted and
Marked For Review
Chosen Option : --

Q.7 The Great Indian Novel is written by the famous politician _____.

- Ans 1. Varun Gandhi
 2. Derek O'Brien
 3. AK Antony
 4. Shashi Tharoor

Question ID : 26433046935
Status : Not Attempted and
Marked For Review
Chosen Option : --

Q.8 Which of the given statements related to the temples of India is correct?

- I.The Nagara style of architecture is also known as the North Indian style
II.The Dravidian style of architecture is also known as the South Indian style.

- Ans 1. Neither I nor II
 2. Both I and II
 3. Only II
 4. Only I

Question ID : 26433047622
Status : Answered
Chosen Option : 3

Q.9 The uplifted blocks of block mountains are called _____.

- Ans 1. horsts
 2. grabens
 3. slopes
 4. cones

Question ID : 26433047228
Status : Not Answered
Chosen Option : --

Q.10 Dantidurga belonged to which dynasty of India?

- Ans
- 1. Chalukya
 - 2. Chola
 - 3. Rashtrakuta
 - 4. Chera

Question ID : 26433047632
Status : Not Answered
Chosen Option : --

Q.11 Bagurumba is a folk dance of which Indian state?

- Ans
- 1. Haryana
 - 2. Karnataka
 - 3. Assam
 - 4. Goa

Question ID : 26433047495
Status : Answered
Chosen Option : 1

Q.12 The number of persons per unit area gives the measurement of _____.

- Ans
- 1. population density
 - 2. population sex ratio
 - 3. population movements
 - 4. population growth rate

Question ID : 26433047505
Status : Answered
Chosen Option : 1

Q.13 'Ambubachi' festival of Assam is celebrated in the month of _____ every year.

- Ans
- 1. March
 - 2. December
 - 3. January
 - 4. June

Question ID : 26433047146
Status : Answered
Chosen Option : 1

Q.14 Harshavardhana (r. 606-647 CE) was a ruler of _____ dynasty.

- Ans
- 1. Mughal
 - 2. Maurya
 - 3. Gupta
 - 4. Pushyabhuti

Question ID : 26433046931
Status : Answered
Chosen Option : 4

Q.15 All India Muslim League was formed in _____.

Ans 1. 1906

2. 1910

3. 1905

4. 1908

Question ID : 26433047233

Status : Answered

Chosen Option : 4

Q.16 All the changes in the weather are driven by the _____.

Ans 1. moon

2. sun

3. stars

4. Jovian planets

Question ID : 26433047626

Status : Not Attempted and
Marked For Review

Chosen Option : --

Q.17 The HVJ gas pipeline from Hazira in Gujarat to Jagdishpur in Uttar Pradesh passes through which state?

Ans 1. Jharkhand

2. Madhya Pradesh

3. Himachal Pradesh

4. Uttarakhand

Question ID : 26433047627

Status : Not Attempted and
Marked For Review

Chosen Option : --

Q.18 Tapeworm belongs to which group of the animal kingdom?

Ans 1. Annelida

2. Platyhelminthes

3. Porifera

4. Coelenterata

Question ID : 26433047224

Status : Not Attempted and
Marked For Review

Chosen Option : --

Q.19 Which of the following is an Indian game of snake boat race?

- Ans
- 1. Kho-Kho
 - 2. Vallam kali
 - 3. Mallakhamb
 - 4. Field hockey

Question ID : 26433046891

Status : Not Attempted and
Marked For Review

Chosen Option : --

Q.20 The judiciary has the power to strike down particular laws passed by the Parliament if it believes that these are a violation of the basic structure of the Constitution. This is called _____.

- Ans
- 1. judicial review
 - 2. dispute resolution
 - 3. judicial activism
 - 4. public interest litigation

Question ID : 26433047239

Status : Answered

Chosen Option : 1

Q.21 Who among the following won a silver medal in the Summer Olympics 2020 (played in 2021)?

- Ans
- 1. Ravi Kumar Dahiya
 - 2. Bajrang Punia
 - 3. Lovlina Borgohain
 - 4. PV Sindhu

Question ID : 26433047415

Status : Answered

Chosen Option : 2

Q.22 Who became the new Chief Minister of Punjab in March 2022?

- Ans
- 1. Navjot Singh Sidhu
 - 2. Amarinder Singh
 - 3. Bhagwant Mann
 - 4. Arvind Kejriwal

Question ID : 26433046919

Status : Answered

Chosen Option : 3

Q.23 Which of the following gases shields the surface of earth from ultraviolet (UV) radiation from the sun?

- Ans
- 1. Carbon monoxide
 - 2. Ozone
 - 3. Oxygen
 - 4. Carbon dioxide

Question ID : 26433047500
Status : Answered
Chosen Option : 2

Q.24 Which of the following is an example of contact force?

- Ans
- 1. Electrostatic force
 - 2. Muscular force
 - 3. Gravitational force
 - 4. Magnetic force

Question ID : 26433047148
Status : Answered
Chosen Option : 4

Q.25 Kalamandalam Kalyanikutty Amma is known for which classical dance form?

- Ans
- 1. Manipuri
 - 2. Kuchipudi
 - 3. Odissi
 - 4. Mohiniyattam

Question ID : 26433047237
Status : Not Answered
Chosen Option : --

