



SSC MTS **SHIFT – 1 (01-09-2023)**

- ★ **Latest Govt Job updates**
- ★ **Private Job updates**
- ★ **Free Mock tests available**

Visit - teachingninja.in

Multi Tasking Non Technical Staff and Havaladar CBIC and CBN Examination 2023

Roll Number	
Candidate Name	
Venue Name	
Exam Date	01/09/2023
Exam Time	9:00 AM - 11:00 AM
Subject	MTS Non Tech Havaladar CBIC and CBN Examination 2023

Section : Numerical and Mathematical Ability

Q.1 If the first number is 20% less than the third number and the ratio of the second to the third number is 7 : 10, then the average of the first and the third number is how much per cent more than the second number?

- Ans
- 1. $26\frac{4}{7}$
 - 2. $28\frac{2}{7}$
 - 3. $28\frac{4}{7}$
 - 4. $24\frac{2}{7}$

Question ID : 264330155958
Option 1 ID : 264330611234
Option 2 ID : 264330611232
Option 3 ID : 264330611231
Option 4 ID : 264330611233
Status : Answered
Chosen Option : 3

Q.2 Geeta deposited a certain sum of money in her bank account which amounted to ₹27,783 in 3 years at 5% per annum, the interest being compounded annually. What amount did she deposit?

- Ans
- 1. ₹25,500
 - 2. ₹25,000
 - 3. ₹26,000
 - 4. ₹24,000

Question ID : 264330154129
Option 1 ID : 264330603980
Option 2 ID : 264330603981
Option 3 ID : 264330603979
Option 4 ID : 264330603982
Status : Answered
Chosen Option : 4

Q.3 A truck driver drove 60 km/h for three hours. Then he stopped for one hour and did not go anywhere. Then, he drove four more hours at 60 km/h. What was the driver's average speed (in km/h)?

- Ans**
- ✓ 1. 52.5
 - ✗ 2. 62.4
 - ✗ 3. 50.5
 - ✗ 4. 42.8

Question ID : 264330156099
Option 1 ID : 264330611796
Option 2 ID : 264330611798
Option 3 ID : 264330611795
Option 4 ID : 264330611797
Status : Answered
Chosen Option : 1

Q.4 The following table indicates the number of candidates who appeared in an entrance examination from four different cities A, B, C, D and the ratio of passing and failing. Study the table carefully and answer the question.

City	No. of candidates appeared	Ratio of passing and failing
A	660	5 : 6
B	650	2 : 3
C	500	3 : 2
D	630	4 : 5

Which city has the highest number of candidates who failed in the entrance examination and find its rate of per cent in that city, respectively?

- Ans**
- ✗ 1. A, 50%
 - ✓ 2. B, 60%
 - ✗ 3. D, 60%
 - ✗ 4. C, 50%

Question ID : 264330156014
Option 1 ID : 264330611456
Option 2 ID : 264330611457
Option 3 ID : 264330611455
Option 4 ID : 264330611458
Status : Answered
Chosen Option : 2

Q.5 Disha invested an amount of ₹20,000 for 9 years at a simple interest per annum and obtain the total amount of ₹33,500. What is the rate of interest?

- Ans**
- ✗ 1. 8%
 - ✗ 2. 8.5%
 - ✓ 3. 7.5%
 - ✗ 4. 9%

Question ID : 264330156188
Option 1 ID : 264330612154
Option 2 ID : 264330612153
Option 3 ID : 264330612152
Option 4 ID : 264330612151
Status : Answered
Chosen Option : 3

Q.6 Simplify:

$$(13 \div 13 \text{ of } 13 + 13) / (13 \div 13 \times 13 + 13)$$

Ans

1. $\frac{1}{26}$

2. $\frac{15}{26}$

3. $\frac{13}{96}$

4. $\frac{85}{169}$

Question ID : 264330156088

Option 1 ID : 264330611751

Option 2 ID : 264330611752

Option 3 ID : 264330611754

Option 4 ID : 264330611753

Status : Answered

Chosen Option : 4

Q.7 The cost price of an item is ₹4,350. What is the profit percentage (rounded off to 1 decimal place) if it is sold at ₹5,680?

Ans

1. 28.5%

2. 40.7%

3. 36.8%

4. 30.6%

Question ID : 264330156475

Option 1 ID : 264330613290

Option 2 ID : 264330613287

Option 3 ID : 264330613288

Option 4 ID : 264330613289

Status : Answered

Chosen Option : 4

Q.8 In a class of 37 students, there are 22 girls. The average weight of these girls is 46 kg and the average weight of the whole class is 50 kg. What is the average weight (in kg) of the boys in that class? (Rounded off to 2 decimal places)

Ans

1. 60.74

2. 55.87

3. 61.35

4. 58.25

Question ID : 264330155728

Option 1 ID : 264330610317

Option 2 ID : 264330610315

Option 3 ID : 264330610318

Option 4 ID : 264330610316

Status : Answered

Chosen Option : 2

Q.9 A boat takes 20 hours for travelling downstream from point A to point B and comes back to a midpoint C between A and B. The speed of the stream is 5 km/h and the speed of the boat in still water is 10 km/h. Find the distance between A and B (in km).

- Ans**
- 1. 100
 - 2. 120
 - 3. 150
 - 4. 75

Question ID : 264330153854
Option 1 ID : 264330602880
Option 2 ID : 264330602879
Option 3 ID : 264330602881
Option 4 ID : 264330602882
Status : Answered
Chosen Option : 2

Q.10 Raju sold an article to Ravi at 10% gain. Ravi sold the article to Ramu at a loss of 10%. If Ramu paid ₹1,485 to Ravi, find the selling price of Raju to Ravi.

- Ans**
- 1. ₹1,200
 - 2. ₹1,500
 - 3. ₹1,650
 - 4. ₹1,600

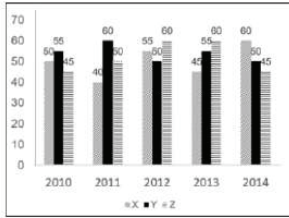
Question ID : 264330153840
Option 1 ID : 264330602825
Option 2 ID : 264330602823
Option 3 ID : 264330602826
Option 4 ID : 264330602824
Status : Answered
Chosen Option : 3

Q.11 A and B can do a piece of work in 4 days, B and C can do the same work in 5 days, A and C can do it in 10 days. If A, B, C work together, in how many days can they complete the work?

- Ans**
- 1. $3\frac{11}{7}$
 - 2. $11\frac{3}{7}$
 - 3. $3\frac{7}{11}$
 - 4. $11\frac{7}{3}$

Question ID : 264330156009
Option 1 ID : 264330611437
Option 2 ID : 264330611436
Option 3 ID : 264330611438
Option 4 ID : 264330611435
Status : Answered
Chosen Option : 3

Q.12 The graph shows the production of tyres (in Lakhs) by three different companies X, Y, and Z over the years.
 Directions: Study the following graph carefully to answer the question given below it.



What is the difference between the average production per year of the company with the highest average production and that of the company with the lowest average production in Lakhs?

- Ans
- 1. 2
 - 2. 6
 - 3. 8
 - 4. 4

Question ID : 264330153891
 Option 1 ID : 264330603027
 Option 2 ID : 264330603029
 Option 3 ID : 264330603030
 Option 4 ID : 264330603028
 Status : Answered
 Chosen Option : 4

Q.13 What is the mean proportional of 9.61 and 3.61?

- Ans
- 1. 3.17
 - 2. 5.89
 - 3. 4.87
 - 4. 6.78

Question ID : 264330154085
 Option 1 ID : 264330603803
 Option 2 ID : 264330603805
 Option 3 ID : 264330603804
 Option 4 ID : 264330603806
 Status : Answered
 Chosen Option : 2

Q.14 Two numbers A and B are such that the sum of 6% of A and 4% of B is two-fifth of the sum of 7% of A and 11% of B, then the ratio A : B is:

- Ans
- 1. 3 : 7
 - 2. 5 : 8
 - 3. 1 : 8
 - 4. 1 : 7

Question ID : 264330154088
 Option 1 ID : 264330603816
 Option 2 ID : 264330603818
 Option 3 ID : 264330603817
 Option 4 ID : 264330603815
 Status : Answered
 Chosen Option : 3

Q.15 Two trains of length 110 m and 85 m are moving in the same direction at 12 m/s and 7 m/s, respectively. Find the time (in seconds) taken by the faster train to cross the slower train.

- Ans** 1. 39
 2. 35
 3. 19
 4. 29

Question ID : 264330155753
Option 1 ID : 264330610418
Option 2 ID : 264330610417
Option 3 ID : 264330610415
Option 4 ID : 264330610416
Status : Answered
Chosen Option : 1

Q.16 In what ratio must a grocer mix two varieties of rice costing ₹128 and ₹143 per kg, respectively, to get a mixture of rice worth ₹137.75 per kg?

- Ans** 1. 12:5
 2. 7:13
 3. 5:4
 4. 6:7

Question ID : 264330153759
Option 1 ID : 264330602499
Option 2 ID : 264330602500
Option 3 ID : 264330602501
Option 4 ID : 264330602502
Status : Answered
Chosen Option : 2

Q.17 Two persons take steps of 77 cm and 88 cm, respectively. If they start in step, then what is the minimum distance (in cm) they should cover so that both of them can cover the distance in complete steps?

- Ans** 1. 968
 2. 828
 3. 616
 4. 560

Question ID : 264330156295
Option 1 ID : 264330612581
Option 2 ID : 264330612580
Option 3 ID : 264330612582
Option 4 ID : 264330612579
Status : Answered
Chosen Option : 3

Q.18 The surface area of a sphere is 616 cm^2 , find its diameter.

Take $\pi = \frac{22}{7}$

- Ans 1. 14 cm
 2. 2 cm
 3. 4 cm
 4. 3 cm

Question ID : 264330156369
Option 1 ID : 264330612875
Option 2 ID : 264330612876
Option 3 ID : 264330612878
Option 4 ID : 264330612877
Status : Answered
Chosen Option : 1

Q.19 The diameter of a metallic sphere is 6 cm. It is melted and drawn into a wire having a diameter of the cross section as 0.4 cm. Find the length of the wire (in metres).

- Ans 1. 18
 2. 9
 3. 12
 4. 10

Question ID : 264330153866
Option 1 ID : 264330602930
Option 2 ID : 264330602929
Option 3 ID : 264330602928
Option 4 ID : 264330602927
Status : Answered
Chosen Option : 2

Q.20 A, B and C can do a piece of work in 10, 15, 12 days, respectively. A and B worked alternately for 5 days each and left. Then C joined and completed the work. In how many days did C complete the remaining work?

- Ans 1. 3
 2. 1
 3. 4
 4. 2

Question ID : 264330153856
Option 1 ID : 264330602888
Option 2 ID : 264330602890
Option 3 ID : 264330602887
Option 4 ID : 264330602889
Status : Answered
Chosen Option : 4

Section : Reasoning Ability and Problem Solving

Q.1 287 is related to 398 following a certain logic. Following the same logic, 378 is related to 489. To which of the following is 852 related to, following the same logic?

- Ans**
- 1. 643
 - 2. 963
 - 3. 346
 - 4. 543

Question ID : 264330151602
Option 1 ID : 264330594036
Option 2 ID : 264330594035
Option 3 ID : 264330594038
Option 4 ID : 264330594037
Status : Answered
Chosen Option : 2

Q.2 If 'A' stands for '+', 'B' stands for '×', 'C' stands for '÷' and 'D' stands for '-', what will come in place of the question mark (?) in the following equation?
(87 A 29) B 14 D 24 C 14 C 6 B 5 = ?

- Ans**
- 1. 68
 - 2. 74
 - 3. 62
 - 4. 56

Question ID : 264330151805
Option 1 ID : 264330594848
Option 2 ID : 264330594850
Option 3 ID : 264330594849
Option 4 ID : 264330594847
Status : Answered
Chosen Option : 3

Q.3 What should come in place of '?' in the given series?

9 15 33 87 ? 735 2193

- Ans**
- 1. 241
 - 2. 249
 - 3. 237
 - 4. 225

Question ID : 264330151483
Option 1 ID : 264330593561
Option 2 ID : 264330593562
Option 3 ID : 264330593560
Option 4 ID : 264330593559
Status : Answered
Chosen Option : 2

Q.4 What should come in place of ? in the given series based on the English alphabetical order?

CNT, FQU, ITV, LWW, ?

Ans 1. OZX

2. NYY

3. MXZ

4. LYX

Question ID : 264330155786

Option 1 ID : 264330610550

Option 2 ID : 264330610549

Option 3 ID : 264330610548

Option 4 ID : 264330610547

Status : Answered

Chosen Option : 1

Q.5 38 is related to 49 following a certain logic. Following the same logic, 64 is related to 75. To which of the following is 83 related to, following the same logic?

Ans 1. 93

2. 95

3. 92

4. 94

Question ID : 264330151593

Option 1 ID : 264330594000

Option 2 ID : 264330594002

Option 3 ID : 264330593999

Option 4 ID : 264330594001

Status : Answered

Chosen Option : 4

Q.6 What should come in place of '?' in the given series?

3 9 45 261 1557 ?

Ans 1. 9555

2. 8572

3. 9433

4. 9333

Question ID : 264330151451

Option 1 ID : 264330593434

Option 2 ID : 264330593431

Option 3 ID : 264330593433

Option 4 ID : 264330593432

Status : Answered

Chosen Option : 4


Q.7 What will come in the place of '?' in the following equation, if '+' and '-' are interchanged and '×' and '÷' are interchanged?
 $32 - 512 \times 64 \div 8 + 64 = ?$

- Ans
- 1. 42
 - 2. 22
 - 3. 32
 - 4. 52

Question ID : 264330155677
Option 1 ID : 264330610113
Option 2 ID : 264330610111
Option 3 ID : 264330610112
Option 4 ID : 264330610114
Status : Answered
Chosen Option : 3

Q.8 Select the correct mirror image of the given figure when the mirror is placed at MN as shown below.

W p a 3 z 5



- Ans
- 1. 5 z 3 a p W
 - 2. z 5 E a p W
 - 3. 2 z 3 a b M
 - 4. 2 z E a p W

Question ID : 264330151510
Option 1 ID : 264330593667
Option 2 ID : 264330593670
Option 3 ID : 264330593668
Option 4 ID : 264330593669
Status : Answered
Chosen Option : 4

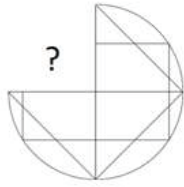
Q.9 What should come in place of '?' in the given series?

16 65 261 1045 4181 ?

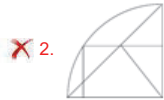
- Ans
- 1. 16945
 - 2. 16273
 - 3. 16725
 - 4. 16892

Question ID : 264330151475
Option 1 ID : 264330593530
Option 2 ID : 264330593527
Option 3 ID : 264330593528
Option 4 ID : 264330593529
Status : Answered
Chosen Option : 3

Q.10 Identify the figure that completes the pattern (rotation is NOT allowed).



Ans



Question ID : 264330154514
Option 1 ID : 264330605521
Option 2 ID : 264330605520
Option 3 ID : 264330605519
Option 4 ID : 264330605522
Status : Answered
Chosen Option : 4

Q.11 Select the word-pair that best represents a similar relationship to the one expressed in the pair of words given below.

(The words must be considered as meaningful English words and must not be related to each other based on the number of letters/number of consonants/vowels in the word)

Reflection : Light

- Ans
- 1. Sentiment : Feeling
 - 2. Echo : Sound
 - 3. Iris : Sight
 - 4. Movie : Scene

Question ID : 264330154638
Option 1 ID : 264330606017
Option 2 ID : 264330606016
Option 3 ID : 264330606018
Option 4 ID : 264330606015
Status : Answered
Chosen Option : 2

Q.12 Read the given statements and conclusions carefully. You have to take the given statements to be true even if they seem to be at variance from commonly known facts. You have to decide which conclusion/s logically follow/s from the given statements.

Statements: All rags are carpets. Some carpets are steel. Some steel are bottles.

Conclusion I: All carpets are rags.

Conclusion II: Some carpets are bottles.

- Ans**
- 1. Only conclusion (I) is follow.
 - 2. Both conclusions (I) and (II) are follow.
 - 3. Only conclusion (II) is follow.
 - 4. Neither conclusion (I) nor (II) is follow.

Question ID : 264330155925
Option 1 ID : 264330611103
Option 2 ID : 264330611106
Option 3 ID : 264330611104
Option 4 ID : 264330611105
Status : Answered
Chosen Option : 4

Q.13 Find out the correct alternative that when filled in the blanks in the same sequence will make the series logically complete.

X _AL ZH L _KAL DNA _ _QAL

- Ans**
- 1. FBPSB
 - 2. FABLE
 - 3. EABLF
 - 4. EBFLA

Question ID : 264330154726
Option 1 ID : 264330606370
Option 2 ID : 264330606368
Option 3 ID : 264330606369
Option 4 ID : 264330606367
Status : Answered
Chosen Option : 3

Q.14 The position of how many letters will remain unchanged if each of the letter in the word 'FINGER' is arranged in alphabetical order?

- Ans**
- 1. Two
 - 2. One
 - 3. Three
 - 4. Four

Question ID : 264330154326
Option 1 ID : 264330604769
Option 2 ID : 264330604770
Option 3 ID : 264330604768
Option 4 ID : 264330604767
Status : Answered
Chosen Option : 2

Q.15 In a certain code language, 'BLUE' is coded as '1542' and 'ABLE' is coded as '1745'. What is the code for 'A' in the given code language?

- Ans** 1. 7
 2. 1
 3. 4
 4. 5

Question ID : 264330151690
Option 1 ID : 264330594390
Option 2 ID : 264330594387
Option 3 ID : 264330594389
Option 4 ID : 264330594388
Status : Answered
Chosen Option : 1

Q.16 Read the given statement(s) and conclusions carefully. Assuming that the information given in the statements is true, even if it appears to be at variance with commonly known facts, decide which of the given conclusions logically follow(s) from the statement(s).

Statements: All chocolates are sweets. Some sweets are harmful.

Conclusions:

- (I) All Chocolates are harmful.
(II) Some harmful are chocolates.

- Ans** 1. Neither conclusion (I) nor (II) is follows.
 2. Both conclusions (I) and (II) are follows.
 3. Only conclusion (II) is follows.
 4. Only conclusion (I) is follows.

Question ID : 264330154433
Option 1 ID : 264330605197
Option 2 ID : 264330605198
Option 3 ID : 264330605196
Option 4 ID : 264330605195
Status : Answered
Chosen Option : 1



Q.19 Six people, P, Q, R, S, T and U are sitting in a straight line, facing north. U sits fourth to the right of R. R is not sitting at the extreme end of the line. T is the immediate neighbour of U and S. Q sits third to the left of S.

Who is sitting immediately to the right of R?

- Ans**
- 1. S
 - 2. T
 - 3. Q
 - 4. P

Question ID : 264330155549
Option 1 ID : 264330609601
Option 2 ID : 264330609602
Option 3 ID : 264330609599
Option 4 ID : 264330609600
Status : Answered
Chosen Option : 4

Q.20 Select the combination of letters that when sequentially placed in the blanks of the given series, will complete the series.

P _ _ P O _ P _ P _ O P

- Ans**
- 1. POPPO
 - 2. POOOP
 - 3. OOOPP
 - 4. OPPOP

Question ID : 264330151650
Option 1 ID : 264330594227
Option 2 ID : 264330594229
Option 3 ID : 264330594230
Option 4 ID : 264330594228
Status : Answered
Chosen Option : 4

Section : General Awareness

Q.1 FIFA U-17 Women's World Cup 2022 matches were NOT held in which state?

- Ans**
- 1. Maharashtra
 - 2. Odisha
 - 3. Goa
 - 4. Gujarat

Question ID : 264330158223
Option 1 ID : 264330620251
Option 2 ID : 264330620254
Option 3 ID : 264330620252
Option 4 ID : 264330620253
Status : Not Answered
Chosen Option : --

Q.2 Who among the following is one of the co-authors of the book, 'Cracking The Code:My Journey in Bollywood'?

- Ans**
- 1. Harshvardhan Kapoor
 - 2. Nawazuddin Siddique
 - 3. Ayushmann Khurrana
 - 4. Rajkumar Rao

Question ID : 264330161906
Option 1 ID : 264330634954
Option 2 ID : 264330634951
Option 3 ID : 264330634953
Option 4 ID : 264330634952
Status : Not Answered
Chosen Option : --

Q.3 In 1873, who published the first photograph of nerve tissue stained with the black reaction technique, describing a whole nerve cell?

- Ans**
- 1. Gunter Blobel
 - 2. Camillo Golgi
 - 3. William Harvey
 - 4. Paul Ehrlich

Question ID : 264330161088
Option 1 ID : 264330631686
Option 2 ID : 264330631685
Option 3 ID : 264330631683
Option 4 ID : 264330631684
Status : Not Answered
Chosen Option : --

Q.4 In October 2022, Virat Kohli became the first Indian to complete how many runs in T20 cricket history?

- Ans**
- 1. 11000
 - 2. 9000
 - 3. 5000
 - 4. 15000

Question ID : 264330158362
Option 1 ID : 264330620809
Option 2 ID : 264330620808
Option 3 ID : 264330620807
Option 4 ID : 264330620810
Status : Not Answered
Chosen Option : --

Q.5 According to Sikh literature, the birth anniversary of Guru Nanak Dev is celebrated on the full moon day of the Indian lunar month _____.

- Ans
- 1. Magh
 - 2. Paush
 - 3. Ashada
 - 4. Kartik

Question ID : 264330160833
Option 1 ID : 264330630666
Option 2 ID : 264330630664
Option 3 ID : 264330630663
Option 4 ID : 264330630665
Status : Not Answered
Chosen Option : --

Q.6 Yakshagana is a folk dance that belongs to the state of _____.

- Ans
- 1. Kerala
 - 2. Karnataka
 - 3. Haryana
 - 4. Rajasthan

Question ID : 264330159057
Option 1 ID : 264330623587
Option 2 ID : 264330623588
Option 3 ID : 264330623589
Option 4 ID : 264330623590
Status : Answered
Chosen Option : 2

Q.7 The brick temple of Bhitargaon is situated in which state?

- Ans
- 1. Odisha
 - 2. Jharkhand
 - 3. Uttar Pradesh
 - 4. Madhya Pradesh

Question ID : 264330160781
Option 1 ID : 264330630456
Option 2 ID : 264330630455
Option 3 ID : 264330630458
Option 4 ID : 264330630457
Status : Not Answered
Chosen Option : --

Q.8 Which of the following movements was founded in Bengal?

- Ans
- 1. Ramakrishna Mission
 - 2. Arya Samaj
 - 3. Satyashodhak Samaj
 - 4. Prarthana Samaj

Question ID : 264330160891
Option 1 ID : 264330630896
Option 2 ID : 264330630895
Option 3 ID : 264330630898
Option 4 ID : 264330630897
Status : Answered
Chosen Option : 1

Q.9 On 15 August 1947, the first prime minister of India, Jawaharlal Nehru, raised the Indian National Flag above the _____ of Red Fort in Delhi.

- Ans
- 1. Delhi Gate
 - 2. Kashmiri Gate
 - 3. Ajmeri Gate
 - 4. Lahori Gate

Question ID : 264330161347
Option 1 ID : 264330632717
Option 2 ID : 264330632715
Option 3 ID : 264330632718
Option 4 ID : 264330632716
Status : Answered
Chosen Option : 1

Q.10 'Mandarin' is the official language of which neighbouring country of India?

- Ans
- 1. Afghanistan
 - 2. Bhutan
 - 3. Sri Lanka
 - 4. China

Question ID : 264330161563
Option 1 ID : 264330633579
Option 2 ID : 264330633581
Option 3 ID : 264330633580
Option 4 ID : 264330633582
Status : Answered
Chosen Option : 4

Q.11 Which of the following is used to measure the total output of goods and services in an economy including depreciation during a specific period within country?

- Ans
- 1. Net Domestic Product (NDP)
 - 2. Gross National Product (GNP)
 - 3. Net National Product (NNP)
 - 4. Gross Domestic Product (GDP)

Question ID : 264330157311
Option 1 ID : 264330616610
Option 2 ID : 264330616608
Option 3 ID : 264330616609
Option 4 ID : 264330616607
Status : Answered
Chosen Option : 1

Q.12 Which of the following is NOT related to the sport of swimming?

- Ans
- 1. Breaststroke
 - 2. Back stroke
 - 3. Freestyle
 - 4. Penalty Corner

Question ID : 264330158244
Option 1 ID : 264330620337
Option 2 ID : 264330620336
Option 3 ID : 264330620335
Option 4 ID : 264330620338
Status : Answered
Chosen Option : 4

Q.13 The East-West corridor, which is a part of the Golden Quadrilateral super highways, links which two cities of India from the following?

- Ans
- 1. Ahmadnagar and Imphal
 - 2. Silchar and Porbander
 - 3. Jaipur and Gangtok
 - 4. Gandhi Nagar and Silchar

Question ID : 264330161490
Option 1 ID : 264330633290
Option 2 ID : 264330633289
Option 3 ID : 264330633288
Option 4 ID : 264330633287
Status : Answered
Chosen Option : 2

Q.14 What is the name of the seventh most abundant metal in the earth's crust, which is derived from the medieval Latin word 'Kalium'?

- Ans
- 1. Aluminium
 - 2. Magnesium
 - 3. Calcium
 - 4. Potassium

Question ID : 264330161060
Option 1 ID : 264330631574
Option 2 ID : 264330631571
Option 3 ID : 264330631573
Option 4 ID : 264330631572
Status : Answered
Chosen Option : 4

Q.15 What is the aim of Article 44 of the Indian Constitution?

- Ans
- 1. To protect every monument or place of artistic or historic interest
 - 2. To separate judiciary from the executive in the public services of the State
 - 3. To protect and improve the environment and safeguard the forests and wildlife of the country
 - 4. To secure for the citizen, a uniform civil code through the territory of India

Question ID : 264330162253
Option 1 ID : 264330636341
Option 2 ID : 264330636342
Option 3 ID : 264330636340
Option 4 ID : 264330636339
Status : Answered
Chosen Option : 4

Q.16 Which of the following novels of Kamleshwar was awarded the Sahitya Akademi Award in 2003?

- Ans
- 1. Jalti Hui Nadi
 - 2. Kaali Aandhi
 - 3. Kitne Pakistan
 - 4. Ek Sadak Sattavan Galiyan

Question ID : 264330161762
Option 1 ID : 264330634377
Option 2 ID : 264330634378
Option 3 ID : 264330634376
Option 4 ID : 264330634375
Status : Not Answered
Chosen Option : --

Q.17 Which of the following institutes was founded by MG Ranade and GV Joshi?

- Ans
- 1. Abhinav Bharat
 - 2. The Indian National Congress
 - 3. The Bombay Presidency Association
 - 4. Poona Sarvajanic Sabha

Question ID : 264330160883
Option 1 ID : 264330630866
Option 2 ID : 264330630865
Option 3 ID : 264330630863
Option 4 ID : 264330630864
Status : Answered
Chosen Option : 1

Q.18 Roshan Kumari, Shovana Narayan, Maya Rao and Kumudini Lakhia are eminent artists.

- Ans
- 1. Odissi
 - 2. Kuchipudi
 - 3. Kathak
 - 4. Manipuri

Question ID : 264330160812
Option 1 ID : 264330630580
Option 2 ID : 264330630581
Option 3 ID : 264330630579
Option 4 ID : 264330630582
Status : Answered
Chosen Option : 3

Q.19 Rani Machaiah is a _____ folk dancer who was awarded Padma Shri in 2023.

- Ans
- 1. Ummathat
 - 2. Lambadi
 - 3. Gussadi
 - 4. Dhimsa

Question ID : 264330155487
Option 1 ID : 264330609352
Option 2 ID : 264330609354
Option 3 ID : 264330609351
Option 4 ID : 264330609353
Status : Not Answered
Chosen Option : --

Q.20 What is the difference between a debit card and a credit card?

- Ans**
- 1. Debit cards are used for online transactions, while credit cards are used for in-person purchases.
 - 2. Credit cards require a PIN, while debit cards require a signature.
 - 3. Debit cards withdraw money directly from a bank account, while credit cards allow borrowing up to a certain limit.
 - 4. Debit cards have higher interest rates than credit cards.

Question ID : 264330157309
Option 1 ID : 264330616599
Option 2 ID : 264330616602
Option 3 ID : 264330616600
Option 4 ID : 264330616601
Status : Answered
Chosen Option : 3

Q.21 The Constitution (Scheduled Tribes) Order (Second Amendment) Bill, 2022 has included Narikoravan and Kurivikkaran communities in the list of Scheduled Tribes of which state?

- Ans**
- 1. Bihar
 - 2. Tamil Nadu
 - 3. Chhattisgarh
 - 4. Odisha

Question ID : 264330158333
Option 1 ID : 264330620691
Option 2 ID : 264330620694
Option 3 ID : 264330620693
Option 4 ID : 264330620692
Status : Answered
Chosen Option : 2

Q.22 Which group of musicians were awarded by 'Bharat Ratna' from the following? (As of May 2023.)

- Ans**
- 1. Anu Malik and Udit Narayan
 - 2. Pandit Ravi Shankar and Pandit Bhimsen Joshi
 - 3. Asha Bhosle and Kishore Kumar
 - 4. AR Rahman and Hariprasad Chaurasia

Question ID : 264330155511
Option 1 ID : 264330609449
Option 2 ID : 264330609447
Option 3 ID : 264330609450
Option 4 ID : 264330609448
Status : Answered
Chosen Option : 2

Q.23 Which river is also known as Tsangpo?

- Ans
- 1. Ganga river
 - 2. Gandak river
 - 3. Kaveri river
 - 4. Brahmaputra river

Question ID : 264330160151
Option 1 ID : 264330627943
Option 2 ID : 264330627946
Option 3 ID : 264330627945
Option 4 ID : 264330627944
Status : Answered
Chosen Option : 4

Q.24 What is the destination of the water drained off by the Nile river?

- Ans
- 1. Lake Victoria
 - 2. Indian Ocean
 - 3. Mediterranean Sea
 - 4. Lake Tanganyika

Question ID : 264330161329
Option 1 ID : 264330632646
Option 2 ID : 264330632643
Option 3 ID : 264330632644
Option 4 ID : 264330632645
Status : Answered
Chosen Option : 3

Q.25 Article 149 of the Constitution deals with _____.

- Ans
- 1. the qualifications required for the appointment of the Comptroller and Auditor-General of India
 - 2. the duties and powers of the Comptroller and Auditor-General of India
 - 3. the term of office of the Comptroller and Auditor-General of India
 - 4. the appointment of the Comptroller and Auditor-General of India

Question ID : 264330161287
Option 1 ID : 264330632477
Option 2 ID : 264330632475
Option 3 ID : 264330632478
Option 4 ID : 264330632476
Status : Answered
Chosen Option : 4

Section : English Language and Comprehension

Q.1 Select the most appropriate ANTONYM of the given word.
Feud

- Ans
- 1. Gross
 - 2. Peril
 - 3. Harmony
 - 4. Vigour

Question ID : 264330152677
Option 1 ID : 264330598312
Option 2 ID : 264330598314
Option 3 ID : 264330598313
Option 4 ID : 264330598311
Status : Answered
Chosen Option : 4

Q.2 Parts of the following sentence have been given as options. Select the option that contains an error.

All these things happen/ because she do not / pay heed to my words.

- Ans
- 1. pay heed to my words
 - 2. All these things happen
 - 3. No error
 - 4. because she do not

Question ID : 264330155379
Option 1 ID : 264330608933
Option 2 ID : 264330608931
Option 3 ID : 264330608934
Option 4 ID : 264330608932
Status : Not Answered
Chosen Option : --

Q.3 Select the most appropriate option that can substitute the underlined segment in the given sentence.
Professor said that I will be late for the lecture.

- Ans
- 1. he shall be late for the lecture
 - 2. he is late for the lecture
 - 3. he would be late for the lecture
 - 4. he may be late for the lecture

Question ID : 264330152712
Option 1 ID : 264330598448
Option 2 ID : 264330598449
Option 3 ID : 264330598447
Option 4 ID : 264330598450
Status : Answered
Chosen Option : 3

Q.4 Select the INCORRECTLY spelt word.

- Ans
- 1. Separate
 - 2. Accommodate
 - 3. Definitely
 - 4. Embarass

Question ID : 264330152644
Option 1 ID : 264330598182
Option 2 ID : 264330598179
Option 3 ID : 264330598180
Option 4 ID : 264330598181
Status : Answered
Chosen Option : 1

Q.5 Select the most appropriate meaning of the given idiom.
Sell like hot cakes

- Ans
- 1. Quick sell out
 - 2. Selling cakes
 - 3. Being ignored
 - 4. Eating hot cake

Question ID : 264330152725
Option 1 ID : 264330598500
Option 2 ID : 264330598501
Option 3 ID : 264330598499
Option 4 ID : 264330598502
Status : Answered
Chosen Option : 1

Q.6 Select the most appropriate option that can substitute the underlined segment in the given sentence.

Andrew will playing basketball at the college tournament.

- Ans
- 1. are play the
 - 2. are play
 - 3. is playing
 - 4. is played

Question ID : 264330153473
Option 1 ID : 264330601408
Option 2 ID : 264330601407
Option 3 ID : 264330601409
Option 4 ID : 264330601410
Status : Answered
Chosen Option : 3

Q.7 Select the most appropriate word to fill in the blank.
Hardik Pandya hit four _____ fours and scored 72 runs in the match.

- Ans 1. continuous
 2. consecutive
 3. ongoing
 4. constant

Question ID : 264330153507
Option 1 ID : 264330601540
Option 2 ID : 264330601539
Option 3 ID : 264330601542
Option 4 ID : 264330601541
Status : Answered
Chosen Option : 2

Q.8 Select the sentence that has NO spelling errors.

- Ans 1. The doctor prescribed some medicine to alleviate my parsistent cough, which has been boathering me for days.
 2. The doctor prescribed some medicine to aleviate my persistent cough, which has been bothering me for days.
 3. The doctor prescribed some medicine to aleviate my parsistent cough, which has been boathering me for days.
 4. The doctor prescribed some medicine to alleviate my persistent cough, which has been bothering me for days.

Question ID : 264330152649
Option 1 ID : 264330598201
Option 2 ID : 264330598200
Option 3 ID : 264330598202
Option 4 ID : 264330598199
Status : Answered
Chosen Option : 4

Q.9 Select the most appropriate synonym of the bracketed word in the following sentence to fill in the blank.
The athlete's perseverance and mental toughness _____ (facilitate) her to overcome adversity and achieve her goals.

- Ans 1. restricted
 2. enabled
 3. limited
 4. hindered

Question ID : 264330152653
Option 1 ID : 264330598216
Option 2 ID : 264330598218
Option 3 ID : 264330598215
Option 4 ID : 264330598217
Status : Answered
Chosen Option : 2

Q.10 The following sentence has been split into four segments. Identify the segment that contains a grammatical error.
Throughout my career as a journalist, / I covered many important stories and / interviewed numerous individuals, which allow me / to share important information and insights with my readers.

- Ans**
- 1. to share important information and insights with my readers
 - 2. I covered many important stories and
 - 3. Throughout my career as a journalist,
 - 4. interviewed numerous individuals, which allow me

Question ID : 264330144182
Option 1 ID : 264330564994
Option 2 ID : 264330564992
Option 3 ID : 264330564991
Option 4 ID : 264330564993
Status : Answered
Chosen Option : 4

Q.11 The following sentence has been split into four segments. Identify the segment that contains a grammatical error.
Harish says / that his sister / loves to play / harmonium.

- Ans**
- 1. harmonium
 - 2. loves to play
 - 3. Harish says
 - 4. that his sister

Question ID : 264330153165
Option 1 ID : 264330600222
Option 2 ID : 264330600221
Option 3 ID : 264330600219
Option 4 ID : 264330600220
Status : Answered
Chosen Option : 1

Q.12 Select the most appropriate option that can substitute the underlined segment in the following sentence.
Selling, purchasing, and using an illegally copied product is a criminal offence.

- Ans**
- 1. an obsolete
 - 2. a pirated
 - 3. an outlawed
 - 4. a crooked

Question ID : 264330152633
Option 1 ID : 264330598135
Option 2 ID : 264330598136
Option 3 ID : 264330598137
Option 4 ID : 264330598138
Status : Answered
Chosen Option : 2

Q.13 Select the most appropriate option to fill in the blank.
The hiring manager has already offered you the job; now, _____ to accept or decline the offer.

- Ans
- 1. a penny for your thoughts
 - 2. the ball is in your court
 - 3. pull your leg
 - 4. get your act together

Question ID : 264330151891
Option 1 ID : 264330595184
Option 2 ID : 264330595183
Option 3 ID : 264330595185
Option 4 ID : 264330595186
Status : Answered
Chosen Option : 2

Q.14 Select the most appropriate option to fill in the blank.
Oberon doesn't like the way Demetrius _____ to Helena. (Credit: A Midsummer Night's Dream)

- Ans
- 1. talked
 - 2. talks
 - 3. talking
 - 4. to talk

Question ID : 264330153511
Option 1 ID : 264330601555
Option 2 ID : 264330601556
Option 3 ID : 264330601557
Option 4 ID : 264330601558
Status : Answered
Chosen Option : 2

Q.15 Select the most appropriate meaning of the given idiom.
Let sleeping dogs lie

- Ans
- 1. To let somebody sleep
 - 2. To fall sick intentionally
 - 3. Leave an existing situation as it is
 - 4. To care for the pet

Question ID : 264330156172
Option 1 ID : 264330612088
Option 2 ID : 264330612089
Option 3 ID : 264330612090
Option 4 ID : 264330612087
Status : Answered
Chosen Option : 3

Q.16 Select the option that can be used as a one-word substitute for the given group of words.

A cage made for birds.

OR

A place for keeping the birds in a confined space.

Ans 1. Aquarium

2. Apiary

3. Aviary

4. Arena

Question ID : 264330153553

Option 1 ID : 264330601713

Option 2 ID : 264330601711

Option 3 ID : 264330601714

Option 4 ID : 264330601712

Status : Answered

Chosen Option : 3

Q.17 Select the most appropriate synonym of the given word.

Repulsive

Ans 1. Attractive

2. Reliable

3. Disgusting

4. Uniform

Question ID : 264330151922

Option 1 ID : 264330595303

Option 2 ID : 264330595305

Option 3 ID : 264330595304

Option 4 ID : 264330595306

Status : Answered

Chosen Option : 3

Q.18 Select the option that rectifies the spelling of the underlined word in the given sentence.

The sergent brought in a lot of changes as soon as he was given charge.

Ans 1. seargeant

2. sergeannt

3. sergant

4. sergeant

Question ID : 264330153156

Option 1 ID : 264330600185

Option 2 ID : 264330600184

Option 3 ID : 264330600183

Option 4 ID : 264330600186

Status : Answered

Chosen Option : 3

Q.19 The given sentence contains an error. Select the option that correctly rectifies the error.

The boy told his mother that he saw the most tall giraffe at the zoo.

- Ans
- 1. The boy told his mother that he saw the tallest giraffe at the zoo.
 - 2. The boy told his mother that he saw the most taller giraffe at the zoo.
 - 3. The boy told his mother that he saw the most tallest giraffe at the zoo.
 - 4. The boy told his mother that he saw the more taller giraffe at the zoo.

Question ID : 264330152606
Option 1 ID : 264330598030
Option 2 ID : 264330598028
Option 3 ID : 264330598029
Option 4 ID : 264330598027
Status : Answered
Chosen Option : 1

Q.20 Select the most appropriate meaning of the given idiom.

Call the shots

- Ans
- 1. To be a follower that makes less important decision
 - 2. To be in a position to make decisions that influences a situation
 - 3. To be in a powerless position that follows orders
 - 4. To be in a neutral position

Question ID : 264330153073
Option 1 ID : 264330599857
Option 2 ID : 264330599856
Option 3 ID : 264330599858
Option 4 ID : 264330599855
Status : Answered
Chosen Option : 2

Comprehension:

In the following passage, some words have been deleted. Fill in the blanks with the help of the alternatives given. Select the most appropriate option for each blank.
That evening we sat in the courtyard of the hotel once more, (1) _____ the sun sink below the western isles. I told Alexi what had happened that day. I (2) _____ I could glimpse the grey stone wall of Lismore House (3) _____ its island hilltop, the red light of the setting sun glinting from the windows, and from there the wasted frame of Jonathan Blake gazing out across the sea, on nothing, his boy waiting for him to die. But it was my (4) _____, simply the image on my mind, like the image burned on to your eyes when you have (5) _____ too long at the sun, the passing footprint of a creature long gone.

SubQuestion No : 21

Q.21 Select the most appropriate option to fill in blank no. 1.

- Ans
- 1. watching
 - 2. wallowing
 - 3. risking
 - 4. practising

Question ID : 264330153445
Option 1 ID : 264330601299
Option 2 ID : 264330601302
Option 3 ID : 264330601301
Option 4 ID : 264330601300
Status : Answered
Chosen Option : 1

Comprehension:

In the following passage, some words have been deleted. Fill in the blanks with the help of the alternatives given. Select the most appropriate option for each blank.
That evening we sat in the courtyard of the hotel once more, (1) _____ the sun sink below the western isles. I told Alexi what had happened that day. I (2) _____ I could glimpse the grey stone wall of Lismore House (3) _____ its island hilltop, the red light of the setting sun glinting from the windows, and from there the wasted frame of Jonathan Blake gazing out across the sea, on nothing, his boy waiting for him to die. But it was my (4) _____, simply the image on my mind, like the image burned on to your eyes when you have (5) _____ too long at the sun, the passing footprint of a creature long gone.

SubQuestion No : 22

Q.22 Select the most appropriate option to fill in blank no. 2.

- Ans 1. fancied
 2. groped
 3. imbibed
 4. translated

Question ID : 264330153446
Option 1 ID : 264330601305
Option 2 ID : 264330601306
Option 3 ID : 264330601303
Option 4 ID : 264330601304
Status : Answered
Chosen Option : 1

Comprehension:

In the following passage, some words have been deleted. Fill in the blanks with the help of the alternatives given. Select the most appropriate option for each blank.
That evening we sat in the courtyard of the hotel once more, (1) _____ the sun sink below the western isles. I told Alexi what had happened that day. I (2) _____ I could glimpse the grey stone wall of Lismore House (3) _____ its island hilltop, the red light of the setting sun glinting from the windows, and from there the wasted frame of Jonathan Blake gazing out across the sea, on nothing, his boy waiting for him to die. But it was my (4) _____, simply the image on my mind, like the image burned on to your eyes when you have (5) _____ too long at the sun, the passing footprint of a creature long gone.

SubQuestion No : 23

Q.23 Select the most appropriate option to fill in blank no. 3.

- Ans 1. off
 2. on
 3. aside
 4. for

Question ID : 264330153447
Option 1 ID : 264330601307
Option 2 ID : 264330601308
Option 3 ID : 264330601309
Option 4 ID : 264330601310
Status : Answered
Chosen Option : 2

Comprehension:

In the following passage, some words have been deleted. Fill in the blanks with the help of the alternatives given. Select the most appropriate option for each blank.
That evening we sat in the courtyard of the hotel once more, (1) _____ the sun sink below the western isles. I told Alexi what had happened that day. I (2) _____ I could glimpse the grey stone wall of Lismore House (3) _____ its island hilltop, the red light of the setting sun glinting from the windows, and from there the wasted frame of Jonathan Blake gazing out across the sea, on nothing, his boy waiting for him to die. But it was my (4) _____, simply the image on my mind, like the image burned on to your eyes when you have (5) _____ too long at the sun, the passing footprint of a creature long gone.

SubQuestion No : 24

Q.24 Select the most appropriate option to fill in blank no. 4.

- Ans 1. dribble
 2. straw
 3. fantasy
 4. habitat

Question ID : 264330153448
Option 1 ID : 264330601312
Option 2 ID : 264330601311
Option 3 ID : 264330601313
Option 4 ID : 264330601314
Status : Answered
Chosen Option : 3

Comprehension:

In the following passage, some words have been deleted. Fill in the blanks with the help of the alternatives given. Select the most appropriate option for each blank.
That evening we sat in the courtyard of the hotel once more, (1) _____ the sun sink below the western isles. I told Alexi what had happened that day. I (2) _____ I could glimpse the grey stone wall of Lismore House (3) _____ its island hilltop, the red light of the setting sun glinting from the windows, and from there the wasted frame of Jonathan Blake gazing out across the sea, on nothing, his boy waiting for him to die. But it was my (4) _____, simply the image on my mind, like the image burned on to your eyes when you have (5) _____ too long at the sun, the passing footprint of a creature long gone.

SubQuestion No : 25

Q.25 Select the most appropriate option to fill in blank no. 5.

- Ans 1. resumed
 2. rusted
 3. blocked
 4. stared

Question ID : 264330153449
Option 1 ID : 264330601317
Option 2 ID : 264330601315
Option 3 ID : 264330601316
Option 4 ID : 264330601318
Status : Answered
Chosen Option : 4