



SSC MTS **SHIFT – 2 (03-05-2023)**

- ★ **Latest Govt Job updates**
- ★ **Private Job updates**
- ★ **Free Mock tests available**

**Visit - [teachingninja.in](https://teachingninja.in)**

## Multi Tasking Non Technical Staff and Havaldar CBIC and CBN Examination 2022

Roll Number	
Candidate Name	
Venue Name	
Exam Date	03/05/2023
Exam Time	12:00 PM - 2:00 PM
Subject	MTS Non Tech Havaldar CBIC and CBN Examination 2022

### Section : Numerical and Mathematical Ability

**Q.1** C1, C2 and C3 can do a work alone in 10, 12 and 15 days respectively. All three of them began the work together but C2 left 2 days before the completion of the work. In how many days was the work completed?

- Ans**
- 1. (12/5) days
  - 2. (14/3) days
  - 3. (18/5) days
  - 4. (17/3) days

Question Type : MCQ

Question ID : 264330137604

Option 1 ID : 264330539025

Option 2 ID : 264330539026

Option 3 ID : 264330539023

Option 4 ID : 264330539024

Status : Answered

Chosen Option : 2

**Q.2** In A mixture of 180 litres, the ratio of milk and water is 5 : 1. If this ratio is to be 3 : 2, then find the quantity of water to be further added.

- Ans**
- 1. 88 litres
  - 2. 66 litres
  - 3. 70 litres
  - 4. 72 litres

Question Type : MCQ

Question ID : 264330135068

Option 1 ID : 264330529207

Option 2 ID : 264330529209

Option 3 ID : 264330529210

Option 4 ID : 264330529208

Status : Answered

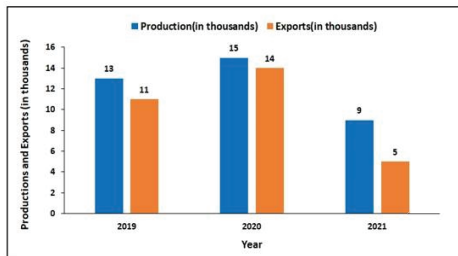
Chosen Option : 3

**Q.3** The marked price of an article is Rs. 400. It is sold for Rs. 300. If there is a loss of 15%, then by what percent above the cost is the article marked?

- Ans**
- 1. 35.25%
  - 2. 25.05%
  - 3. 28.24%
  - 4. 13.33%

Question Type : MCQ  
Question ID : 264330135377  
Option 1 ID : 264330530415  
Option 2 ID : 264330530417  
Option 3 ID : 264330530418  
Option 4 ID : 264330530416  
Status : Answered  
Chosen Option : 4

**Q.4** The bar graph shows the total production and export of computers (in thousands) by a company in three years. Find the average export by the company in the given years.



- Ans**
- 1. 12,000
  - 2. 16,000
  - 3. 10,000
  - 4. 15,000

Question Type : MCQ  
Question ID : 264330135386  
Option 1 ID : 264330530454  
Option 2 ID : 264330530452  
Option 3 ID : 264330530453  
Option 4 ID : 264330530451  
Status : Answered  
Chosen Option : 3

**Q.5** If Rs. 4200 is distributed among A, B, and C such that A: B = 2:3 and B: C = 6:5, then find the share of B.

- Ans**
- 1. Rs. 1680
  - 2. Rs. 1770
  - 3. Rs. 1800
  - 4. Rs. 1550

Question Type : MCQ  
Question ID : 264330135378  
Option 1 ID : 264330530420  
Option 2 ID : 264330530419  
Option 3 ID : 264330530422  
Option 4 ID : 264330530421  
Status : Answered  
Chosen Option : 1

**Q.6** Ajay can row his boat in still water, at a speed of 11 km/hr. If the speed of the stream is 7 km/hr, how long will it take to a distance of 54 km downstream?

- Ans**
- 1. 4 hours
  - 2. 3 hours
  - 3. 2.5 hours
  - 4. 2 hours

Question Type : MCQ  
Question ID : 264330135382  
Option 1 ID : 264330530438  
Option 2 ID : 264330530435  
Option 3 ID : 264330530437  
Option 4 ID : 264330530436  
Status : Answered  
Chosen Option : 2

**Q.7** A farmer's land is in the shape of a trapezium which has its parallel sides measuring 6.32 yards and 7.68 yards and the distance between the parallel sides is 5.50 yards. The cost of ploughing the land is Rs. 1200 per square yard. What amount have to be spent in order to plough the entire land?

- Ans**
- 1. Rs. 36600
  - 2. Rs. 32500
  - 3. Rs. 55400
  - 4. Rs. 46200

Question Type : MCQ  
Question ID : 264330137617  
Option 1 ID : 264330539078  
Option 2 ID : 264330539075  
Option 3 ID : 264330539077  
Option 4 ID : 264330539076  
Status : Answered  
Chosen Option : 4

Q.8 Find the value of  $\sqrt{[(13^2 - 8^2) \times 5 + 4]}$ :

- Ans
- 1. 23
  - 2. 26
  - 3. 24
  - 4. 22

Question Type : MCQ  
Question ID : 264330135369  
Option 1 ID : 264330530386  
Option 2 ID : 264330530384  
Option 3 ID : 264330530385  
Option 4 ID : 264330530383  
Status : Answered  
Chosen Option : 1

Q.9 Maya bought a TV for Rs. 7980 including GST of 14%. What is the original cost of the TV without GST?

- Ans
- 1. Rs. 7080
  - 2. Rs. 7900
  - 3. Rs. 8880
  - 4. Rs. 7000

Question Type : MCQ  
Question ID : 264330135376  
Option 1 ID : 264330530412  
Option 2 ID : 264330530413  
Option 3 ID : 264330530411  
Option 4 ID : 264330530414  
Status : Answered  
Chosen Option : 4

Q.10 The volume of a hemisphere is  $486\pi \text{ cm}^3$ . Find the radius.

- Ans
- 1. 4 cm
  - 2. 7 cm
  - 3. 9 cm
  - 4. 8 cm

Question Type : MCQ  
Question ID : 264330135388  
Option 1 ID : 264330530459  
Option 2 ID : 264330530460  
Option 3 ID : 264330530461  
Option 4 ID : 264330530462  
Status : Answered  
Chosen Option : 3

Q.11 A man buys 13 pens for a rupee. How many pens should he sell for a rupee to earn a profit of 30 percent?

- Ans
- 1. 5
  - 2. 15
  - 3. 10
  - 4. 8

Question Type : MCQ  
Question ID : 264330137671  
Option 1 ID : 264330539292  
Option 2 ID : 264330539294  
Option 3 ID : 264330539291  
Option 4 ID : 264330539293  
Status : Answered  
Chosen Option : 3

Q.12 What will be the compound interest accrued on a sum of Rs.64000 at the rate of 5% per annum in 2 years compounded annually?

- Ans
- 1. Rs. 6560
  - 2. Rs. 8550
  - 3. Rs. 3050
  - 4. Rs. 4580

Question Type : MCQ  
Question ID : 264330138447  
Option 1 ID : 264330542395  
Option 2 ID : 264330542397  
Option 3 ID : 264330542396  
Option 4 ID : 264330542398  
Status : Answered  
Chosen Option : 1

Q.13 If the third proportion of 3 and x is 27 and the third proportion of 2 and y is 8, then find x:y.

- Ans
- 1. 9:4
  - 2. 3:7
  - 3. 4:5
  - 4. 7:9

Question Type : MCQ  
Question ID : 264330135379  
Option 1 ID : 264330530423  
Option 2 ID : 264330530425  
Option 3 ID : 264330530424  
Option 4 ID : 264330530426  
Status : Answered  
Chosen Option : 1

Q.14 Average marks obtained by 19 boys of a college is 48. If the highest marks and lowest marks obtained are removed, then the average reduces by 4. What is the average of the highest and lowest marks obtained?

- Ans
- 1. 76
  - 2. 80
  - 3. 84
  - 4. 82

Question Type : MCQ  
Question ID : 264330137669  
Option 1 ID : 264330539284  
Option 2 ID : 264330539283  
Option 3 ID : 264330539285  
Option 4 ID : 264330539286  
Status : Answered  
Chosen Option : 4

Q.15 What is the value of  $\frac{14+7-12+15-17+2-3+17}{2+7-9+2-4+22}$  ?

- Ans
- 1. 17/20
  - 2. 23/20
  - 3. 33/20
  - 4. 19/20

Question Type : MCQ  
Question ID : 264330135060  
Option 1 ID : 264330529178  
Option 2 ID : 264330529175  
Option 3 ID : 264330529177  
Option 4 ID : 264330529176  
Status : Answered  
Chosen Option : 2

Q.16 Find the value of  $4 \times \{44 + (84 + 18 \div 3 \times 3 - 40)\}$ :

- Ans
- 1. 424
  - 2. 330
  - 3. 250
  - 4. 331

Question Type : MCQ  
Question ID : 264330135368  
Option 1 ID : 264330530379  
Option 2 ID : 264330530381  
Option 3 ID : 264330530382  
Option 4 ID : 264330530380  
Status : Answered  
Chosen Option : 1

**Q.17** The price of a mobile is Rs. 30,000. The value of the mobile depreciates by 12% at the end of the first year and at the end of next year, it depreciates by 15%. What will be the value of the mobile after 2 years?

- Ans**
- 1. Rs. 22,440
  - 2. Rs. 25,255
  - 3. Rs. 25,000
  - 4. Rs. 20,000

Question Type : **MCQ**  
Question ID : **264330133766**  
Option 1 ID : **264330524087**  
Option 2 ID : **264330524090**  
Option 3 ID : **264330524089**  
Option 4 ID : **264330524088**  
Status : **Answered**  
Chosen Option : **1**

**Q.18** Tripti can construct a divider alone in 4 days while Rajan can construct it alone in 3 days. If they construct it together and get a payment of Rs.14000, then what is Tripti's share?

- Ans**
- 1. Rs.8000
  - 2. Rs.7000
  - 3. Rs.5000
  - 4. Rs.6000

Question Type : **MCQ**  
Question ID : **264330133686**  
Option 1 ID : **264330523769**  
Option 2 ID : **264330523767**  
Option 3 ID : **264330523770**  
Option 4 ID : **264330523768**  
Status : **Answered**  
Chosen Option : **4**

**Q.19** The average weight of 9 boxes is 61 kg. If three boxes having an average weight of 70 kg are removed, then what will be the new average weight of the remaining boxes?

- Ans**
- 1. 54 kg
  - 2. 56.5 kg
  - 3. 55.5 kg
  - 4. 45.5 kg

Question Type : **MCQ**  
Question ID : **264330135371**  
Option 1 ID : **264330530394**  
Option 2 ID : **264330530393**  
Option 3 ID : **264330530392**  
Option 4 ID : **264330530391**  
Status : **Answered**  
Chosen Option : **2**



**Q.20** The table shows the number of candidates recruited by four companies A, B, C and D over the years. Find the ratio of number of candidates recruited by company B in 2019 to the number of candidates recruited by company D in 2020.

Years	A	B	C	D
2018	55	40	25	15
2019	60	75	50	25
2020	65	30	40	65
2021	45	35	70	35

- Ans**
- 1. 15:11
  - 2. 15:13
  - 3. 13:12
  - 4. 12:11

Question Type : MCQ  
Question ID : 264330135385  
Option 1 ID : 264330530448  
Option 2 ID : 264330530447  
Option 3 ID : 264330530449  
Option 4 ID : 264330530450  
Status : Answered  
Chosen Option : 2

Section : Reasoning Ability and Problem Solving

**Q.1** In the following question below are given some statements followed by some conclusions based on those statements. Taking the given statements to be true even if they seem to be at variance from commonly known facts. Read all the conclusions and then decide which of the given conclusion logically follows the given statements.

Statements:

- I. No rat is cow.
- II. Some animal are rat.

Conclusions:

- I. Some animal are cow.
- II. Some cow are not rat.
- III. All rat are animal.

- Ans**
- 1. Both conclusions I and II follows
  - 2. Neither conclusion follows
  - 3. Only conclusion II follows
  - 4. Both conclusions I and III follows

Question Type : MCQ  
Question ID : 264330135573  
Option 1 ID : 264330531193  
Option 2 ID : 264330531194  
Option 3 ID : 264330531192  
Option 4 ID : 264330531191  
Status : Answered  
Chosen Option : 3

**Q.2** Select the option that is related to the fifth term in the same way as the second term is related to the first term and fourth term is related to third term.

K4N : P9N :: ASZ : B11D :: P6R : ?

- Ans**
- 1. R13S
  - 2. R13T
  - 3. S13T
  - 4. T13S

Question Type : **MCQ**  
Question ID : **264330135564**  
Option 1 ID : **264330531157**  
Option 2 ID : **264330531158**  
Option 3 ID : **264330531155**  
Option 4 ID : **264330531156**  
Status : **Answered**  
Chosen Option : **3**

**Q.3** In a certain code language, 'CORRECT' is written as '3Q1818G320'. How will 'WRONG' be written in that language?

- Ans**
- 1. 2318Q147
  - 2. 2314Q147
  - 3. 2138Q741
  - 4. 2218P147

Question Type : **MCQ**  
Question ID : **264330133530**  
Option 1 ID : **264330523151**  
Option 2 ID : **264330523152**  
Option 3 ID : **264330523154**  
Option 4 ID : **264330523153**  
Status : **Answered**  
Chosen Option : **1**

**Q.4** Six girls Mansi, Shweta, Monika, Payal, Aarti and Kajal are sitting around a circular table facing towards the centre (not necessarily in the same order). Kajal is to immediate left of Mansi. Shweta is third to the left of Mansi. Payal is second to the right of Kajal. Monika is not second to the left of Mansi. Who is fourth to the right of Aarti?

- Ans**
- 1. Shweta
  - 2. Kajal
  - 3. Payal
  - 4. Monika

Question Type : **MCQ**  
Question ID : **264330135569**  
Option 1 ID : **264330531175**  
Option 2 ID : **264330531178**  
Option 3 ID : **264330531177**  
Option 4 ID : **264330531176**  
Status : **Answered**  
Chosen Option : **3**

Q.5 In the following question, select the missing number of the given series.

10, 9, 17, -10, 54, ?

- Ans
- 1. -67
  - 2. -71
  - 3. -82
  - 4. -103

Question Type : MCQ

Question ID : 264330135575

Option 1 ID : 264330531202

Option 2 ID : 264330531201

Option 3 ID : 264330531199

Option 4 ID : 264330531200

Status : Answered

Chosen Option : 2



Teachingninja.in

Q.6 If a mirror is placed on the line AB, then out of the option figures which figure will be the right image of the question figure?



Ans

✓ 1.



✗ 2.



✗ 3.



✗ 4.



Teachingninja.in

Question Type : MCQ

Question ID : 264330135581

Option 1 ID : 264330531224

Option 2 ID : 264330531226

Option 3 ID : 264330531225

Option 4 ID : 264330531223

Status : Answered

Chosen Option : 1

**Q.7** In a certain code language, 'DOGS' is written as '5279', 'DRAW' is written as '1032', 'DOWN' is written as '8205'.  
What is 'S' written in that code language?

- Ans**
- 1. 0
  - 2. 5
  - 3. 2
  - 4. 7

Question Type : **MCQ**  
Question ID : **264330138608**  
Option 1 ID : **264330543041**  
Option 2 ID : **264330543039**  
Option 3 ID : **264330543040**  
Option 4 ID : **264330543042**  
Status : **Answered**  
Chosen Option : **2**

**Q.8** In the following question, select the missing number of the given series.

44, 20, -4, ?, -52, -76

- Ans**
- 1. -10
  - 2. -28
  - 3. 0
  - 4. -20

Question Type : **MCQ**  
Question ID : **264330138552**  
Option 1 ID : **264330542817**  
Option 2 ID : **264330542816**  
Option 3 ID : **264330542818**  
Option 4 ID : **264330542815**  
Status : **Answered**  
Chosen Option : **2**



Q.9 Select the option figure in which the given figure is embedded. (rotation is NOT allowed)



Ans

✗ 1.



✗ 2.



✓ 3.



✗ 4.



Teachingninja.in

Question Type : MCQ

Question ID : 264330135580

Option 1 ID : 264330531220

Option 2 ID : 264330531221

Option 3 ID : 264330531219

Option 4 ID : 264330531222

Status : Answered

Chosen Option : 3

**Q.10** Select the option in which the numbers shares the same relationship in set as that shared by the numbers in the given set.  
(NOTE: Operations should be performed on the whole numbers, without breaking down the numbers into its constituent digits. E.g.13 – Operations on 13 such as adding /subtracting /multiplying etc. to 13 can be performed. Breaking down 13 into 1 and 3 and then performing mathematical operations on 1 and 3 is not allowed)

(100, 150, 125)

(500, 400, 450)

- Ans**
- 1. (120, 100, 130)
  - 2. (180, 140, 260)
  - 3. (14, 16, 28)
  - 4. (200, 400, 300)

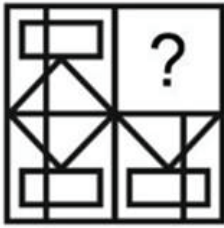
Question Type : **MCQ**  
Question ID : **264330135577**  
Option 1 ID : **264330531207**  
Option 2 ID : **264330531210**  
Option 3 ID : **264330531208**  
Option 4 ID : **264330531209**  
Status : **Answered**  
Chosen Option : **4**

**Q.11** Seven workers Rahul, Ram, Ramesh, Sohan, Sahil, Anil and Sonu are sitting around a circular table facing towards the centre (not necessarily in the same order). Anil is immediate neighbour of both Ram and Sonu. Ram is second to the right of Sahil. Rahul is immediate neighbour of both Sahil and Sohan. Who is second to the left of Rahul?

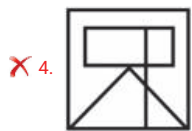
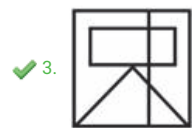
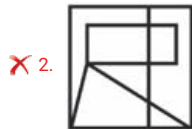
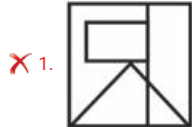
- Ans**
- 1. Sonu
  - 2. Ram
  - 3. Ramesh
  - 4. Anil

Question Type : **MCQ**  
Question ID : **264330135570**  
Option 1 ID : **264330531181**  
Option 2 ID : **264330531180**  
Option 3 ID : **264330531179**  
Option 4 ID : **264330531182**  
Status : **Not Answered**  
Chosen Option : **-**

Q.12 Which answer figure will complete the pattern in the question figure?



Ans



Teachingninja.in

Question Type : MCQ

Question ID : 264330135582

Option 1 ID : 264330531230

Option 2 ID : 264330531229

Option 3 ID : 264330531227

Option 4 ID : 264330531228

Status : Answered

Chosen Option : 4



**Q.13** In a certain code language, 'ZEBRA' is written as 'YDAQZ'. How will 'HORSE' be written in that language?

- Ans**
- 1. GNQRD
  - 2. GNRQA
  - 3. GNQRS
  - 4. GQDRE

Question Type : MCQ  
Question ID : 264330133325  
Option 1 ID : 264330522337  
Option 2 ID : 264330522335  
Option 3 ID : 264330522338  
Option 4 ID : 264330522336  
Status : Answered  
Chosen Option : 1

**Q.14** Select the option that is related to the fourth term in the same way as the first term is related to the second term and fifth term is related to sixth term.

FAR : HDT :: ? : ODD :: PQR : RTT

- Ans**
- 1. MAC
  - 2. MAB
  - 3. NAB
  - 4. NBB

Question Type : MCQ  
Question ID : 264330135563  
Option 1 ID : 264330531152  
Option 2 ID : 264330531154  
Option 3 ID : 264330531151  
Option 4 ID : 264330531153  
Status : Answered  
Chosen Option : 2

**Q.15** After interchanging which two numbers, the value of the given equation will be '5'?

$$7 - 3 \div 9 \times 2 + 4$$

- Ans**
- 1. 2 and 9
  - 2. 4 and 2
  - 3. 7 and 4
  - 4. 3 and 9

Question Type : MCQ  
Question ID : 264330135578  
Option 1 ID : 264330531212  
Option 2 ID : 264330531213  
Option 3 ID : 264330531211  
Option 4 ID : 264330531214  
Status : Not Answered  
Chosen Option : -

**Q.16** Select the option that is related to the third word in the same way as the second word is related to the first word.

Garage : Bike :: Aquarium : ?

- Ans**
- 1. Rabbit
  - 2. Fish
  - 3. Rat
  - 4. Sparrow

Question Type : **MCQ**

Question ID : **264330134955**

Option 1 ID : **264330528756**

Option 2 ID : **264330528757**

Option 3 ID : **264330528755**

Option 4 ID : **264330528758**

Status : **Answered**

Chosen Option : **2**

**Q.17** Number of trucks parked in five parking areas S1, S2, S3, S4 and S5 are compared. Number of trucks parked in S3 are more than only S2. Number of trucks parked in S5 are less than only S1. If the number of trucks parked in parking area S3 are 1200, then how many trucks can be parked in parking area S1?

- Ans**
- 1. 1154
  - 2. 1184
  - 3. 1197
  - 4. 1346

Question Type : **MCQ**

Question ID : **264330135571**

Option 1 ID : **264330531186**

Option 2 ID : **264330531185**

Option 3 ID : **264330531184**

Option 4 ID : **264330531183**

Status : **Not Answered**

Chosen Option : **-**



**Q.18** In the following question below are given some statements followed by some conclusions based on those statements. Taking the given statements to be true even if they seem to be at variance from commonly known facts. Read all the conclusions and then decide which of the given conclusion logically follows the given statements.

Statements:

I. All L are P.

II. All P are V.

Conclusion:

I. Some L are V.

II. No V is L.

- Ans**
- 1. Both conclusions I and II follows
  - 2. Only conclusion I follows
  - 3. Neither conclusion follows
  - 4. Only conclusion II follows

Question Type : MCQ

Question ID : 264330135572

Option 1 ID : 264330531189

Option 2 ID : 264330531187

Option 3 ID : 264330531190

Option 4 ID : 264330531188

Status : Answered

Chosen Option : 2

**Q.19** In a certain code language, 'JUNO' is written as '1356' and 'HATE' is written as '8125'. How will 'TOWER' be written in that language?

- Ans**
- 1. 25659
  - 2. 26659
  - 3. 26559
  - 4. 26569

Question Type : MCQ

Question ID : 264330134961

Option 1 ID : 264330528779

Option 2 ID : 264330528782

Option 3 ID : 264330528781

Option 4 ID : 264330528780

Status : Answered

Chosen Option : 2

**Q.20** A series is given with one term missing. Select the correct alternative from the given ones that will complete the series.

PV, RZ, TD, ?, XL

- Ans**
- 1. UH
  - 2. VH
  - 3. VG
  - 4. UG

Question Type : **MCQ**  
Question ID : **264330135561**  
Option 1 ID : **264330531145**  
Option 2 ID : **264330531146**  
Option 3 ID : **264330531143**  
Option 4 ID : **264330531144**  
Status : **Not Answered**  
Chosen Option : -

Section : General Awareness

**Q.1** During the Sultanate of Delhi, the term "Ulema" was associated with \_\_\_\_\_.

- Ans**
- 1. Commander-in-chief
  - 2. Village Revenue officer
  - 3. Learned theologians and Jurists
  - 4. Postal officer



Question Type : **MCQ**  
Question ID : **264330138343**  
Option 1 ID : **264330541981**  
Option 2 ID : **264330541979**  
Option 3 ID : **264330541982**  
Option 4 ID : **264330541980**  
Status : **Answered**  
Chosen Option : **3**

**Q.2** Which plant tissue is responsible for the transportation of water and minerals from the soil to the stems and leaves?

- Ans**
- 1. Parenchyma
  - 2. Xylem
  - 3. Collenchyma
  - 4. Phloem

Question Type : **MCQ**  
Question ID : **264330135440**  
Option 1 ID : **264330530668**  
Option 2 ID : **264330530667**  
Option 3 ID : **264330530670**  
Option 4 ID : **264330530669**  
Status : **Answered**  
Chosen Option : **2**

Q.3 Who was the court poet of Harshavardhana?

- Ans
- 1. Hema Saraswati
  - 2. Sri Ponna
  - 3. Banabhatta
  - 4. Parmanand

Question Type : MCQ  
Question ID : 264330135447  
Option 1 ID : 264330530697  
Option 2 ID : 264330530696  
Option 3 ID : 264330530698  
Option 4 ID : 264330530695  
Status : Answered  
Chosen Option : 3

Q.4 Which is the oldest tennis tournament in the world?

- Ans
- 1. Australian Open
  - 2. French Open
  - 3. US Open
  - 4. Wimbledon

Question Type : MCQ  
Question ID : 264330138325  
Option 1 ID : 264330541910  
Option 2 ID : 264330541907  
Option 3 ID : 264330541909  
Option 4 ID : 264330541908  
Status : Answered  
Chosen Option : 3

Q.5 Which union territory has a high court of its own?

- Ans
- 1. Chandigarh
  - 2. Dadra and Nagar Haveli
  - 3. Andaman and Nicobar Islands
  - 4. Delhi

Question Type : MCQ  
Question ID : 264330135455  
Option 1 ID : 264330530730  
Option 2 ID : 264330530727  
Option 3 ID : 264330530728  
Option 4 ID : 264330530729  
Status : Answered  
Chosen Option : 4

Q.6 Cells were first observed in cork by \_\_\_\_\_ in 1665.

- Ans
- 1. Theophrastus
  - 2. Edward Jenner
  - 3. Robert Hooke
  - 4. Anton van Leeuwenhoek

Question Type : MCQ  
Question ID : 264330138335  
Option 1 ID : 264330541950  
Option 2 ID : 264330541948  
Option 3 ID : 264330541947  
Option 4 ID : 264330541949  
Status : Answered  
Chosen Option : 3

Q.7 Which harvest festival is famously celebrated in Assam?

- Ans
- 1. Lohri
  - 2. Makar Sankranti
  - 3. Onam
  - 4. Bhogali Bihu

Question Type : MCQ  
Question ID : 264330135437  
Option 1 ID : 264330530656  
Option 2 ID : 264330530657  
Option 3 ID : 264330530658  
Option 4 ID : 264330530655  
Status : Answered  
Chosen Option : 4

Q.8 Ustad Shafaat Ahmed Khan was best known for which of the following instrument?

- Ans
- 1. Rudra Veena
  - 2. Tabla
  - 3. Harmonium
  - 4. Violin

Question Type : MCQ  
Question ID : 264330135452  
Option 1 ID : 264330530718  
Option 2 ID : 264330530715  
Option 3 ID : 264330530717  
Option 4 ID : 264330530716  
Status : Answered  
Chosen Option : 1

Q.9 Which state government launched the “Panchamrut Yojana”?

- Ans
- 1. West Bengal
  - 2. Odisha
  - 3. Karnataka
  - 4. Uttar Pradesh

Question Type : MCQ  
Question ID : 264330135434  
Option 1 ID : 264330530644  
Option 2 ID : 264330530645  
Option 3 ID : 264330530646  
Option 4 ID : 264330530643  
Status : Answered  
Chosen Option : 3

Q.10 How many field players are in a hockey team?

- Ans
- 1. 7
  - 2. 9
  - 3. 11
  - 4. 14

Question Type : MCQ  
Question ID : 264330135456  
Option 1 ID : 264330530733  
Option 2 ID : 264330530734  
Option 3 ID : 264330530732  
Option 4 ID : 264330530731  
Status : Answered  
Chosen Option : 3

Q.11 Gorakhpur is the headquarter of \_\_\_\_\_ Railway of India.

- Ans
- 1. Eastern
  - 2. North-Eastern
  - 3. Northern
  - 4. Western

Question Type : MCQ  
Question ID : 264330133657  
Option 1 ID : 264330523654  
Option 2 ID : 264330523652  
Option 3 ID : 264330523651  
Option 4 ID : 264330523653  
Status : Answered  
Chosen Option : 1

Q.12 When the British rule ended in India in the year 1947 the literacy rate was just \_\_\_\_\_ .

- Ans
- 1. 22 percent
  - 2. 12 percent
  - 3. 20 percent
  - 4. 18 percent

Question Type : MCQ  
Question ID : 264330137955  
Option 1 ID : 264330540430  
Option 2 ID : 264330540428  
Option 3 ID : 264330540427  
Option 4 ID : 264330540429  
Status : Answered  
Chosen Option : 3

Q.13 The reaction between an acid and a base is known as \_\_\_\_\_ .

- Ans
- 1. Sub-alteration reaction
  - 2. Condensation reaction
  - 3. Neutralisation reaction
  - 4. Oxidation reaction

Question Type : MCQ  
Question ID : 264330138337  
Option 1 ID : 264330541957  
Option 2 ID : 264330541958  
Option 3 ID : 264330541955  
Option 4 ID : 264330541956  
Status : Answered  
Chosen Option : 3

Q.14 Who was the founder of Prarthana Samaj?

- Ans
- 1. Ram Singh
  - 2. Tulsi Ram
  - 3. Swami Vivekananda
  - 4. Atmaram Pandurang

Question Type : MCQ  
Question ID : 264330135450  
Option 1 ID : 264330530709  
Option 2 ID : 264330530710  
Option 3 ID : 264330530708  
Option 4 ID : 264330530707  
Status : Answered  
Chosen Option : 4



Q.15 The Election Laws (Amendment) Bill, 2021 belongs to \_\_\_\_\_ Ministry of India.

- Ans
- 1. Law and Justice
  - 2. Earth Sciences
  - 3. Tribal Affairs
  - 4. Home Affairs

Question Type : MCQ  
Question ID : 264330133932  
Option 1 ID : 264330524754  
Option 2 ID : 264330524753  
Option 3 ID : 264330524752  
Option 4 ID : 264330524751  
Status : Answered  
Chosen Option : 4

Q.16 'A Life of the Genius: The Man Who Knew Infinity' is a biography of Indian mathematician \_\_\_\_\_.

- Ans
- 1. Srinivasa Ramanujan
  - 2. Aryabhata
  - 3. Neena Gupta
  - 4. Acharya Pingala

Question Type : MCQ  
Question ID : 264330133665  
Option 1 ID : 264330523683  
Option 2 ID : 264330523684  
Option 3 ID : 264330523685  
Option 4 ID : 264330523686  
Status : Answered  
Chosen Option : 1

Q.17 Out of the following, which one is a fundamental right in the constitution of India?

- Ans
- 1. Right to Freedom
  - 2. Right to Opportunities
  - 3. Right to Work
  - 4. Right to Vote

Question Type : MCQ  
Question ID : 264330135454  
Option 1 ID : 264330530723  
Option 2 ID : 264330530724  
Option 3 ID : 264330530725  
Option 4 ID : 264330530726  
Status : Answered  
Chosen Option : 1

Q.18 The intervention of the government whether to expand demand or reduce it constitutes the \_\_\_\_\_.

- Ans
- 1. redistribution function
  - 2. expenditure function
  - 3. stabilisation function
  - 4. transition function

Question Type : MCQ  
Question ID : 264330133672  
Option 1 ID : 264330523713  
Option 2 ID : 264330523712  
Option 3 ID : 264330523711  
Option 4 ID : 264330523714  
Status : Answered  
Chosen Option : 3

Q.19 Which river is also known as Dakshin Ganga?

- Ans
- 1. Tungabhadra
  - 2. Kaveri
  - 3. Krishna
  - 4. Godavari

Question Type : MCQ  
Question ID : 264330135444  
Option 1 ID : 264330530685  
Option 2 ID : 264330530684  
Option 3 ID : 264330530683  
Option 4 ID : 264330530686  
Status : Answered  
Chosen Option : 4

Q.20 Who won the prestigious Abhinandan Saroja National Award 2021 by the National Institute of Indian Classical Dance?

- Ans
- 1. Aparna Satheesan
  - 2. Saroj Khan
  - 3. Pandit Birju Maharaj
  - 4. Srimanta Sankardev

Question Type : MCQ  
Question ID : 264330133667  
Option 1 ID : 264330523692  
Option 2 ID : 264330523693  
Option 3 ID : 264330523694  
Option 4 ID : 264330523691  
Status : Answered  
Chosen Option : 3

Q.21 The forces which act in the interior of the earth are called as \_\_\_\_\_.

- Ans
- 1. endogenic forces
  - 2. frictional forces
  - 3. gravitational forces
  - 4. exogenic forces

Question Type : MCQ  
Question ID : 264330138936  
Option 1 ID : 264330541952  
Option 2 ID : 264330541954  
Option 3 ID : 264330541953  
Option 4 ID : 264330541951  
Status : Answered  
Chosen Option : 1

Q.22 Which among the following socio religious community was founded by Raja Ram Mohan Roy?

- Ans
- 1. Prarthana Samaj
  - 2. Brahma Samaj
  - 3. Akali Dal
  - 4. Arya Samaj

Question Type : MCQ  
Question ID : 264330133946  
Option 1 ID : 264330524810  
Option 2 ID : 264330524808  
Option 3 ID : 264330524809  
Option 4 ID : 264330524807  
Status : Answered  
Chosen Option : 2

Q.23 Bahmani Monuments at Gulbarga, Karnataka represent \_\_\_\_\_ style of architecture.

- Ans
- 1. Deccan
  - 2. Mameluke
  - 3. Sikh
  - 4. Nagara

Question Type : MCQ  
Question ID : 264330133935  
Option 1 ID : 264330524765  
Option 2 ID : 264330524763  
Option 3 ID : 264330524766  
Option 4 ID : 264330524764  
Status : Answered  
Chosen Option : 1

Q.24 Rukmini Devi Arundale was a famous exponent of which form of dance?

- Ans
- 1. Kuchipudi
  - 2. Bharatnatyam
  - 3. Kathakali
  - 4. Mohiniattam

Question Type : MCQ  
Question ID : 264330135436  
Option 1 ID : 264330530652  
Option 2 ID : 264330530654  
Option 3 ID : 264330530651  
Option 4 ID : 264330530653  
Status : Answered  
Chosen Option : 2

Q.25 Unemployment caused by the recession of 2008-2010 is an example of which of the following types of unemployment?

- Ans
- 1. Frictional
  - 2. Classical
  - 3. Structural
  - 4. Cyclical

Question Type : MCQ  
Question ID : 264330134018  
Option 1 ID : 264330525098  
Option 2 ID : 264330525097  
Option 3 ID : 264330525095  
Option 4 ID : 264330525096  
Status : Answered  
Chosen Option : 2

Section : English Language and Comprehension

Q.1 Find the part of the given sentence that has an error in it. If there is no error, choose 'No error'.

Some plants secrete oils during dry periods, and when it rains, these oils are released on the air.

- Ans
- 1. Some plants secrete oils during
  - 2. dry periods, and when it rains,
  - 3. these oils are released on the air.
  - 4. No error

Question Type : MCQ  
Question ID : 264330135180  
Option 1 ID : 264330529651  
Option 2 ID : 264330529652  
Option 3 ID : 264330529653  
Option 4 ID : 264330529654  
Status : Answered  
Chosen Option : 3

**Q.2** In the following question, out of the given four alternatives, select the alternative which best expresses the meaning of the Idiom/Phrase.

Out of the woods

- Ans**
- 1. To meet with disaster
  - 2. Out of danger
  - 3. Not adhering to rules
  - 4. To lose contact

Question Type : **MCQ**  
Question ID : **264330135199**  
Option 1 ID : **264330529725**  
Option 2 ID : **264330529724**  
Option 3 ID : **264330529726**  
Option 4 ID : **264330529723**  
Status : **Answered**  
Chosen Option : **2**

**Q.3** Select the most appropriate word for the given group of words.

One who makes an active effort to promote human welfare

- Ans**
- 1. Philanthropist
  - 2. Feminist
  - 3. Sexist
  - 4. Misogynist

Question Type : **MCQ**  
Question ID : **264330136705**  
Option 1 ID : **264330535533**  
Option 2 ID : **264330535531**  
Option 3 ID : **264330535534**  
Option 4 ID : **264330535532**  
Status : **Answered**  
Chosen Option : **1**

**Q.4** Choose the sentence with no spelling error.

- Ans**
- 1. Servise industries rely on a set of processes.
  - 2. Service industreis relie on a set of processes.
  - 3. Service industries rely on a set of procceses.
  - 4. Service industries rely on a set of processes.

Question Type : **MCQ**  
Question ID : **264330135201**  
Option 1 ID : **264330529734**  
Option 2 ID : **264330529733**  
Option 3 ID : **264330529731**  
Option 4 ID : **264330529732**  
Status : **Answered**  
Chosen Option : **4**

**Q.5** A sentence has been given with a blank to be filled with an appropriate option. Choose the correct alternative.

The home I \_\_\_\_\_ with my husband in 1986 still smelled like him.

**Ans**

- 1. sharing
- 2. had shared
- 3. shared
- 4. have shared

Question Type : **MCQ**  
Question ID : **264330135211**  
Option 1 ID : **264330529771**  
Option 2 ID : **264330529774**  
Option 3 ID : **264330529773**  
Option 4 ID : **264330529772**  
Status : **Answered**  
Chosen Option : **2**

**Q.6** Select the most appropriate option to fill in the blank.

We didn't mean to \_\_\_\_\_ all of you waiting.

**Ans**

- 1. keep
- 2. make
- 3. creep
- 4. seep

Question Type : **MCQ**  
Question ID : **264330135202**  
Option 1 ID : **264330529735**  
Option 2 ID : **264330529738**  
Option 3 ID : **264330529736**  
Option 4 ID : **264330529737**  
Status : **Answered**  
Chosen Option : **1**



Q.7 Improve the underlined part of the sentence. Choose 'No improvement' as an answer if the sentence is grammatically correct.

My parents used to encouraged me to devote more time to study.

- Ans
- 1. encourage me to devote
  - 2. encourages me to devote
  - 3. No improvement
  - 4. encouraging me devoting

Question Type : MCQ  
Question ID : 264330135209  
Option 1 ID : 264330529765  
Option 2 ID : 264330529763  
Option 3 ID : 264330529766  
Option 4 ID : 264330529764  
Status : Answered  
Chosen Option : 1

Q.8 Select the appropriate antonym for the underlined word.

A war has been unleashed on financial untouchability.

- Ans
- 1. confined
  - 2. regarded
  - 3. unchained
  - 4. free

Question Type : MCQ  
Question ID : 264330135197  
Option 1 ID : 264330529717  
Option 2 ID : 264330529718  
Option 3 ID : 264330529715  
Option 4 ID : 264330529716  
Status : Answered  
Chosen Option : 4

Q.9 Choose the incorrectly spelt word.

- Ans
- 1. Advance
  - 2. Start
  - 3. Discribe
  - 4. Melting

Question Type : MCQ  
Question ID : 264330135200  
Option 1 ID : 264330529729  
Option 2 ID : 264330529730  
Option 3 ID : 264330529727  
Option 4 ID : 264330529728  
Status : Answered  
Chosen Option : 3

Q.10 Select the most appropriate meaning of the given idiom.

Buy a lemon

- Ans
- 1. To not complain
  - 2. The ability to know what's happening
  - 3. To buy something that is worthless
  - 4. Wear fashionable clothing

Question Type : MCQ  
Question ID : 264330136711  
Option 1 ID : 264330535558  
Option 2 ID : 264330535555  
Option 3 ID : 264330535556  
Option 4 ID : 264330535557  
Status : Answered  
Chosen Option : 2

Q.11 Select the most appropriate option to fill in the blank.

Everyone who studies forests knows trees have been dying in large and \_\_\_\_\_ numbers.

- Ans
- 1. minority
  - 2. scanty
  - 3. peculiar
  - 4. massive

Question Type : MCQ  
Question ID : 264330135203  
Option 1 ID : 264330529740  
Option 2 ID : 264330529741  
Option 3 ID : 264330529739  
Option 4 ID : 264330529742  
Status : Answered  
Chosen Option : 4





**Q.12** Select the word segment that substitutes (replaces) the bracketed word segment correctly and completes the sentence meaningfully. Select the option 'no correction required' if the sentence is correct as given.

Now, (how much autograph) would you like? I can do joined-up writing now, you know!

- Ans**
- 1. how much many autographs
  - 2. how many autographs
  - 3. No correction required
  - 4. how most autographs

Question Type : MCQ  
Question ID : 264330136387  
Option 1 ID : 264330534317  
Option 2 ID : 264330534315  
Option 3 ID : 264330534318  
Option 4 ID : 264330534316  
Status : Answered  
Chosen Option : 2

**Q.13** Choose the word that can substitute the given group of words.

A diagram showing the path of planets

- Ans**
- 1. Platitude
  - 2. Horoscope
  - 3. Zodiac
  - 4. Planetarium

Question Type : MCQ  
Question ID : 264330135193  
Option 1 ID : 264330529701  
Option 2 ID : 264330529702  
Option 3 ID : 264330529700  
Option 4 ID : 264330529699  
Status : Answered  
Chosen Option : 4



Q.14 Select the appropriate synonym for the underlined word.

He wasn't entirely convinced.

- Ans
- 1. submerged
  - 2. accepting
  - 3. doubting
  - 4. trustless

Question Type : MCQ  
Question ID : 264330135194  
Option 1 ID : 264330529703  
Option 2 ID : 264330529705  
Option 3 ID : 264330529706  
Option 4 ID : 264330529704  
Status : Answered  
Chosen Option : 2

Q.15 Choose the word that is opposite in meaning to the given word.  
Proceed

- Ans
- 1. Accidental
  - 2. Local
  - 3. Withdraw
  - 4. Wide

Question Type : MCQ  
Question ID : 264330134416  
Option 1 ID : 264330526640  
Option 2 ID : 264330526642  
Option 3 ID : 264330526641  
Option 4 ID : 264330526639  
Status : Answered  
Chosen Option : 3

Q.16 Identify the segment that contains a grammatical error. If there is no error, select 'No error'.

Much of the art he / discusses is funny, playing / and mischievous.

- Ans
- 1. discusses is funny, playing
  - 2. No error
  - 3. and mischievous.
  - 4. Much of the art he

Question Type : MCQ  
Question ID : 264330136384  
Option 1 ID : 264330534304  
Option 2 ID : 264330534306  
Option 3 ID : 264330534305  
Option 4 ID : 264330534303  
Status : Answered  
Chosen Option : 4

Q.17 A sentence has been given with a blank to be filled with an appropriate option. Choose the correct alternative.

Air Travel is the \_\_\_\_\_ growing emitter of climate change gases.

- Ans
- 1. fastly
  - 2. fastest
  - 3. fast
  - 4. fasting

Question Type : MCQ  
Question ID : 264330135184  
Option 1 ID : 264330529669  
Option 2 ID : 264330529668  
Option 3 ID : 264330529670  
Option 4 ID : 264330529667  
Status : Answered  
Chosen Option : 2

Q.18 Choose the word that means the same as the given word.

Valiance

- Ans
- 1. Dastardliness
  - 2. Cravenness
  - 3. Gallantry
  - 4. Patience

Question Type : MCQ  
Question ID : 264330135221  
Option 1 ID : 264330529808  
Option 2 ID : 264330529809  
Option 3 ID : 264330529810  
Option 4 ID : 264330529807  
Status : Answered  
Chosen Option : 3

Q.19 Find the part of the given sentence that has an error in it. If there is no error, choose 'No error'.

Just because I am quiet doesn't mean I can't scold you.

- Ans
- 1. I can't scold you.
  - 2. quiet doesn't mean
  - 3. Just because I am
  - 4. No error

Question Type : MCQ  
Question ID : 264330134346  
Option 1 ID : 264330526373  
Option 2 ID : 264330526372  
Option 3 ID : 264330526371  
Option 4 ID : 264330526374  
Status : Answered  
Chosen Option : 2

Q.20 Improve the underlined part of the sentence. Choose 'No improvement' as an answer if the sentence is grammatically correct.  
The water leaked in with a hole in the roof.

- Ans
- 1. through a holes
  - 2. No improvement
  - 3. by a holed
  - 4. through a hole

Question Type : MCQ  
Question ID : 264330134480  
Option 1 ID : 264330526887  
Option 2 ID : 264330526890  
Option 3 ID : 264330526889  
Option 4 ID : 264330526888  
Status : Answered  
Chosen Option : 1

**Comprehension:**

In the following passage some of the words have been deleted. Read the passage carefully and select the correct answer for the given blank out of the four alternatives.  
When Jane died (1) \_\_\_\_\_ 1850, she was called "one of the most distinguished novelists (2) \_\_\_\_\_ England has produced" and "the first who (3) \_\_\_\_\_ that beautiful kind of fiction, the historical romance." The Porter sisters' careers ended (4) \_\_\_\_\_ as the Brontë sisters were getting started in the early Victorian (5) \_\_\_\_\_.

SubQuestion No : 21

Q.21 Select the most appropriate option to fill in blank number 1.

- Ans
- 1. on
  - 2. in
  - 3. into
  - 4. at

Question Type : MCQ  
Question ID : 264330134407  
Option 1 ID : 264330526604  
Option 2 ID : 264330526603  
Option 3 ID : 264330526606  
Option 4 ID : 264330526605  
Status : Answered  
Chosen Option : 1

**Comprehension:**

In the following passage some of the words have been deleted. Read the passage carefully and select the correct answer for the given blank out of the four alternatives.

When Jane died (1) \_\_\_\_\_ 1850, she was called "one of the most distinguished novelists (2) \_\_\_\_\_ England has produced" and "the first who (3) \_\_\_\_\_ that beautiful kind of fiction, the historical romance." The Porter sisters' careers ended (4) \_\_\_\_\_ as the Brontë sisters were getting started in the early Victorian (5) \_\_\_\_\_.

**SubQuestion No : 22**

**Q.22 Select the most appropriate option to fill in blank number 2.**

- Ans  1. who  
 2. which  
 3. what  
 4. whose

Question Type : MCQ

Question ID : 264330134408

Option 1 ID : 264330526608

Option 2 ID : 264330526607

Option 3 ID : 264330526610

Option 4 ID : 264330526609

Status : Answered

Chosen Option : 1

**Comprehension:**

In the following passage some of the words have been deleted. Read the passage carefully and select the correct answer for the given blank out of the four alternatives.

When Jane died (1) \_\_\_\_\_ 1850, she was called "one of the most distinguished novelists (2) \_\_\_\_\_ England has produced" and "the first who (3) \_\_\_\_\_ that beautiful kind of fiction, the historical romance." The Porter sisters' careers ended (4) \_\_\_\_\_ as the Brontë sisters were getting started in the early Victorian (5) \_\_\_\_\_.

**SubQuestion No : 23**

**Q.23 Select the most appropriate option to fill in blank number 3.**

- Ans  1. energized  
 2. casted  
 3. introduced  
 4. dismissed

Question Type : MCQ

Question ID : 264330134409

Option 1 ID : 264330526611

Option 2 ID : 264330526613

Option 3 ID : 264330526612

Option 4 ID : 264330526614

Status : Answered

Chosen Option : 3

**Comprehension:**

In the following passage some of the words have been deleted. Read the passage carefully and select the correct answer for the given blank out of the four alternatives.

When Jane died (1) \_\_\_\_\_ 1850, she was called "one of the most distinguished novelists (2) \_\_\_\_\_ England has produced" and "the first who (3) \_\_\_\_\_ that beautiful kind of fiction, the historical romance." The Porter sisters' careers ended (4) \_\_\_\_\_ as the Brontë sisters were getting started in the early Victorian (5) \_\_\_\_\_.

**SubQuestion No : 24**

**Q.24 Select the most appropriate option to fill in blank number 4.**

- Ans
- 1. lest
  - 2. that
  - 3. just
  - 4. must

Question Type : MCQ

Question ID : 264330134410

Option 1 ID : 264330526618

Option 2 ID : 264330526615

Option 3 ID : 264330526617

Option 4 ID : 264330526616

Status : Answered

Chosen Option : 3

**Comprehension:**

In the following passage some of the words have been deleted. Read the passage carefully and select the correct answer for the given blank out of the four alternatives.

When Jane died (1) \_\_\_\_\_ 1850, she was called "one of the most distinguished novelists (2) \_\_\_\_\_ England has produced" and "the first who (3) \_\_\_\_\_ that beautiful kind of fiction, the historical romance." The Porter sisters' careers ended (4) \_\_\_\_\_ as the Brontë sisters were getting started in the early Victorian (5) \_\_\_\_\_.

**SubQuestion No : 25**

**Q.25 Select the most appropriate option to fill in blank number 5.**

- Ans
- 1. period
  - 2. terms
  - 3. session
  - 4. spell

Question Type : MCQ

Question ID : 264330134411

Option 1 ID : 264330526622

Option 2 ID : 264330526620

Option 3 ID : 264330526621

Option 4 ID : 264330526619

Status : Answered

Chosen Option : 1