



SSC MTS **SHIFT – 3 (03-05-2023)**

- ★ **Latest Govt Job updates**
- ★ **Private Job updates**
- ★ **Free Mock tests available**

Visit - teachingninja.in

Multi Tasking Non Technical Staff and Havaladar CBIC and CBN Examination 2022

Roll Number	
Candidate Name	
Venue Name	
Exam Date	03/05/2023
Exam Time	3:30 PM - 5:00 PM
Subject	MTS Non Tech Havaladar CBIC and CBN Examination 2022

Section : Numerical and Mathematical Ability

Q.1 Akhil bought 13 kg of apples for Rs. 2,400. He sold them at a profit equal to the selling price of 7 kg of apples. Find the selling price of apples per kg.

- Ans**
- 1. Rs. 400
 - 2. Rs. 650
 - 3. Rs. 350
 - 4. Rs. 600

Question Type : MCQ

Question ID : 264330135138

Option 1 ID : 264330529488

Option 2 ID : 264330529489

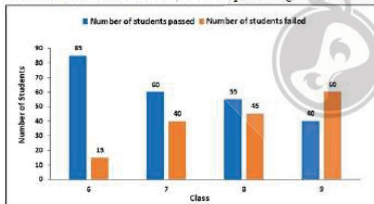
Option 3 ID : 264330529490

Option 4 ID : 264330529487

Status : Answered

Chosen Option : 3

Q.2 The bar graph shows the number of students who passed and failed in different classes in a school. If the total number of students in each class is 100, find the percentage of students who passed the exam.



- Ans**
- 1. 25%
 - 2. 65%
 - 3. 60%
 - 4. 55%

Question Type : MCQ

Question ID : 264330135148

Option 1 ID : 264330529527

Option 2 ID : 264330529530

Option 3 ID : 264330529528

Option 4 ID : 264330529529

Status : Answered

Chosen Option : 3

Q.3 D alone can do a work in 20 days and E alone can do the same work in 25 days. If they work on it together for 8 days, then the fraction of the work that left is:

- Ans**
- 1. $11/25$
 - 2. $7/25$
 - 3. $9/100$
 - 4. $51/100$

Question Type : **MCQ**
Question ID : **264330138362**
Option 1 ID : **264330542057**
Option 2 ID : **264330542055**
Option 3 ID : **264330542058**
Option 4 ID : **264330542056**
Status : **Answered**
Chosen Option : **2**

Q.4 Find the fourth proportion to 8, 14 and 24.

- Ans**
- 1. 42
 - 2. 26
 - 3. 40
 - 4. 36

Question Type : **MCQ**
Question ID : **264330135141**
Option 1 ID : **264330529501**
Option 2 ID : **264330529499**
Option 3 ID : **264330529500**
Option 4 ID : **264330529502**
Status : **Answered**
Chosen Option : **1**

Q.5 A alone can complete half of a work in 150 days. In 50 days, what percentage of the work will be completed by A?

- Ans**
- 1. 16.67 percent
 - 2. 15 percent
 - 3. 20 percent
 - 4. 22.5 percent

Question Type : **MCQ**
Question ID : **264330135042**
Option 1 ID : **264330529105**
Option 2 ID : **264330529106**
Option 3 ID : **264330529104**
Option 4 ID : **264330529103**
Status : **Answered**
Chosen Option : **1**

Q.6 Sajid drove for 6 hours at a rate of 60 km/hr and for 4 hours at 50 km/hr. What was his average speed for the whole journey?

- Ans
- 1. 52 kmph
 - 2. 56 kmph
 - 3. 54 kmph
 - 4. 58 kmph

Question Type : **MCQ**
Question ID : **264330141022**
Option 1 ID : **264330552436**
Option 2 ID : **264330552435**
Option 3 ID : **264330552437**
Option 4 ID : **264330552438**
Status : **Answered**
Chosen Option : 2

Q.7 The following table shows the number of buyers visiting in four different brand stores in a week. The number of buyers in Brand R is how much percent more than the number of buyers in Brand P during this week?

Brand	Number of buyers
P	400
Q	530
R	415
S	310

- Ans
- 1. 5.50%
 - 2. 2.25%
 - 3. 4.25%
 - 4. 3.75%

Question Type : **MCQ**
Question ID : **264330138741**
Option 1 ID : **264330543572**
Option 2 ID : **264330543574**
Option 3 ID : **264330543571**
Option 4 ID : **264330543573**
Status : **Answered**
Chosen Option : 4

Q.8 Two successive price decreases of 20% and 30% of an article are equivalent to a single price decrease of:

- Ans
- 1. 50%
 - 2. 44%
 - 3. 25%
 - 4. 40%

Question Type : **MCQ**
Question ID : **264330135114**
Option 1 ID : **264330529391**
Option 2 ID : **264330529393**
Option 3 ID : **264330529392**
Option 4 ID : **264330529394**
Status : **Answered**
Chosen Option : 2

Q.9 Find the value of $841 + 6 \times 15 + 45\%$ of 60 :

- Ans
- 1. 654
 - 2. 888
 - 3. 765
 - 4. 958

Question Type : MCQ
Question ID : 264330135130
Option 1 ID : 264330529455
Option 2 ID : 264330529457
Option 3 ID : 264330529458
Option 4 ID : 264330529456
Status : Answered
Chosen Option : 4

Q.10 What is the HCF of 1.05 and 6.23?

- Ans
- 1. 0.89
 - 2. 0.21
 - 3. 0.07
 - 4. 0.35

Question Type : MCQ
Question ID : 264330141021
Option 1 ID : 264330552432
Option 2 ID : 264330552433
Option 3 ID : 264330552431
Option 4 ID : 264330552434
Status : Answered
Chosen Option : 3

Q.11 $a:b = 5:8$ and $b:c = 2:6$. If $a = 25$, then find the value of c .

- Ans
- 1. 90
 - 2. 140
 - 3. 120
 - 4. 96

Question Type : MCQ
Question ID : 264330135140
Option 1 ID : 264330529496
Option 2 ID : 264330529498
Option 3 ID : 264330529495
Option 4 ID : 264330529497
Status : Answered
Chosen Option : 3

Q.12 The difference in simple interest and compound interest on a certain sum of money in 2 years at 3% per annum is 90 paisa. What is the sum?

- Ans
- 1. Rs. 9000
 - 2. Rs. 5000
 - 3. Rs. 3000
 - 4. Rs. 1000

Question Type : **MCQ**
Question ID : **264330135121**
Option 1 ID : **264330529420**
Option 2 ID : **264330529422**
Option 3 ID : **264330529421**
Option 4 ID : **264330529419**
Status : **Answered**
Chosen Option : **4**

Q.13 If interest is being compounded half yearly, then what sum will amount to Rs. 51840 in 2 years at the rate of 40 percent per annum on compound interest?

- Ans
- 1. Rs.25000
 - 2. Rs.15000
 - 3. Rs.20000
 - 4. Rs.30000

Question Type : **MCQ**
Question ID : **264330137186**
Option 1 ID : **264330537389**
Option 2 ID : **264330537387**
Option 3 ID : **264330537388**
Option 4 ID : **264330537390**
Status : **Not Attempted and Marked For Review**
Chosen Option : **--**

Q.14 A product, whose marked price is Rs. 840, is sold for Rs. 798 by a wholesale shop. What is the percentage discount given by him?

- Ans
- 1. 6%
 - 2. 5%
 - 3. 3%
 - 4. 4%

Question Type : **MCQ**
Question ID : **264330135139**
Option 1 ID : **264330529491**
Option 2 ID : **264330529494**
Option 3 ID : **264330529493**
Option 4 ID : **264330529492**
Status : **Answered**
Chosen Option : **2**

Q.15 The length of a cuboid is six times of its breadth and the height of cuboid is four times of its breadth. If the breadth of the cuboid is 3 cm, then what is the total surface area of cuboid?

- Ans
- 1. 484 cm^2
 - 2. 612 cm^2
 - 3. 576 cm^2
 - 4. 676 cm^2

Question Type : **MCQ**
Question ID : **264330135057**
Option 1 ID : **264330529163**
Option 2 ID : **264330529166**
Option 3 ID : **264330529164**
Option 4 ID : **264330529165**
Status : **Answered**
Chosen Option : **2**

Q.16 The speed of a boat in still water is 17 km/hr and the speed of a stream is 11 km/hr. Find the difference between the upstream speed and the downstream speed of the boat.

- Ans
- 1. 18 km/hr
 - 2. 22 km/hr
 - 3. 21 km/hr
 - 4. 28 km/hr

Question Type : **MCQ**
Question ID : **264330135144**
Option 1 ID : **264330529514**
Option 2 ID : **264330529512**
Option 3 ID : **264330529511**
Option 4 ID : **264330529513**
Status : **Answered**
Chosen Option : **2**

Q.17 The ratio of radii of a cylinder to a cone is 3:1. If their heights are equal, What is the ratio of their volumes?

- Ans
- 1. 1:3
 - 2. 27:1
 - 3. 9:1
 - 4. 1:9

Question Type : **MCQ**
Question ID : **264330138367**
Option 1 ID : **264330542076**
Option 2 ID : **264330542075**
Option 3 ID : **264330542077**
Option 4 ID : **264330542078**
Status : **Answered**
Chosen Option : **2**

Q.18 Rohit buys an old bat for Rs. 880 and spends Rs. 120 on its repairing. If he sells it for Rs. 800, then what is the loss percentage?

- Ans
- 1. 25 percent
 - 2. 30 percent
 - 3. 10 percent
 - 4. 20 percent

Question Type : **MCQ**
Question ID : **264330137651**
Option 1 ID : **264330539211**
Option 2 ID : **264330539212**
Option 3 ID : **264330539214**
Option 4 ID : **264330539213**
Status : **Answered**
Chosen Option : 4

Q.19 The average of numbers A and B is 16. The average of numbers B and C is 40. What is the difference between C and A?

- Ans
- 1. 48
 - 2. 12
 - 3. 80
 - 4. 66

Question Type : **MCQ**
Question ID : **264330135133**
Option 1 ID : **264330529470**
Option 2 ID : **264330529469**
Option 3 ID : **264330529468**
Option 4 ID : **264330529467**
Status : **Answered**
Chosen Option : 1

Q.20

The value of $\left[\frac{1}{4} \text{ of } 18 \div \frac{6}{5} - \left(\frac{1}{8} + \frac{7}{4} \right) \right] \times \frac{1}{15}$ is:

- Ans
- 1. $\frac{3}{8}$
 - 2. $\frac{6}{7}$
 - 3. $\frac{5}{8}$
 - 4. $\frac{4}{5}$

Question Type : **MCQ**
Question ID : **264330138725**
Option 1 ID : **264330543507**
Option 2 ID : **264330543509**
Option 3 ID : **264330543510**
Option 4 ID : **264330543508**
Status : **Answered**
Chosen Option : 1

Section : Reasoning Ability and Problem Solving

Q.1 Amar, Bidisha, Caramel, Deepa and Ellen are sitting on a bench facing south. Ellen is sitting at one end of the bench with nobody to her left. Caramel is sitting to the immediate left of Deepa, who is sitting at the end of the bench. Amar is sitting to the right of Bidisha. In which position is Amar sitting?

- Ans**
- 1. Exactly between Deepa and Bidisha
 - 2. Exactly between Deepa and Caramel
 - 3. Exactly between Caramel and Bidisha
 - 4. Exactly between Bidisha and Ellen

Question Type : **MCQ**
Question ID : **264330135029**
Option 1 ID : **264330529054**
Option 2 ID : **264330529051**
Option 3 ID : **264330529052**
Option 4 ID : **264330529053**
Status : **Answered**
Chosen Option : **3**

Q.2 Which of the following letters will replace the question mark (?) in the given series?
O, N, L, K, I, H, F, ?

- Ans**
- 1. A
 - 2. E
 - 3. F
 - 4. H

Question Type : **MCQ**
Question ID : **264330135020**
Option 1 ID : **264330529016**
Option 2 ID : **264330529017**
Option 3 ID : **264330529015**
Option 4 ID : **264330529018**
Status : **Answered**
Chosen Option : **2**

Q.3 In a certain code language, 'ALBUMS' is coded as 'UMWBNA'. What is the code for 'CLEVER' in that code language?

- Ans**
- 1. TXEENC
 - 2. XETENC
 - 3. TEXENC
 - 4. TEXNEC

Question Type : **MCQ**
Question ID : **264330138588**
Option 1 ID : **264330542959**
Option 2 ID : **264330542960**
Option 3 ID : **264330542962**
Option 4 ID : **264330542961**
Status : **Answered**
Chosen Option : **3**

Q.4 Study the given pattern carefully and select the number that can replace the question mark (?) in it.

First row - 14, 42, 84

Second row - 21, 63, 126

Third row - 8, 24, ?

Ans ✓ 1. 48

✗ 2. 82

✗ 3. 38

✗ 4. 65

Question Type : **MCQ**

Question ID : **264330135036**

Option 1 ID : **264330529082**

Option 2 ID : **264330529081**

Option 3 ID : **264330529080**

Option 4 ID : **264330529079**

Status : **Answered**

Chosen Option : 1

Q.5 Which of the following numbers will replace the question mark (?) in the given series?

1, 8, 9, 64, 25, 216, 49, ?

Ans ✗ 1. 612

✓ 2. 512

✗ 3. 552

✗ 4. 385

Question Type : **MCQ**

Question ID : **264330135011**

Option 1 ID : **264330528979**

Option 2 ID : **264330528981**

Option 3 ID : **264330528982**

Option 4 ID : **264330528980**

Status : **Answered**

Chosen Option : 2

Q.6 Select the option that is related to the third word in the same way as the second word is related to the first word.

Celsius : Temperature :: Pound : ?

Ans ✗ 1. Angle

✗ 2. Distance

✗ 3. Time

✓ 4. Weight

Question Type : **MCQ**

Question ID : **264330135022**

Option 1 ID : **264330529026**

Option 2 ID : **264330529023**

Option 3 ID : **264330529025**

Option 4 ID : **264330529024**

Status : **Answered**

Chosen Option : 4

Q.7 Select the option that is related to the third number in the same way as the second number is related to the first number.
17 : 272 :: 22 : ?

- Ans**
- 1. 462
 - 2. 596
 - 3. 394
 - 4. 448

Question Type : **MCQ**
Question ID : **264330135013**
Option 1 ID : **264330528990**
Option 2 ID : **264330528987**
Option 3 ID : **264330528988**
Option 4 ID : **264330528989**
Status : **Answered**
Chosen Option : 1

Q.8 Select the option that is related to the third word in the same way as the second word is related to the first word.
Fan : Blades :: Cycle : ?

- Ans**
- 1. Bike
 - 2. Hands
 - 3. Car
 - 4. Wheels

Question Type : **MCQ**
Question ID : **264330135023**
Option 1 ID : **264330529030**
Option 2 ID : **264330529029**
Option 3 ID : **264330529027**
Option 4 ID : **264330529028**
Status : **Answered**
Chosen Option : 4



Q.9 If a mirror is placed on the line AB, then out of the option figures which figure will be the right image of the question figure?



Ans

- ✓ 1.
- ✗ 2.
- ✗ 3.
- ✗ 4.

Question Type : **MCQ**
 Question ID : **264330138601**
 Option 1 ID : **264330543012**
 Option 2 ID : **264330543014**
 Option 3 ID : **264330543013**
 Option 4 ID : **264330543011**
 Status : **Answered**
 Chosen Option : **1**

Q.10 Umesh is older than Satish. Suresh is younger than Neeraj but older than Umesh. Tarun is older than Ritesh but younger than Satish. Manish is the youngest. Who is the eldest among them?

- Ans**
- ✗ 1. Satish
 - ✓ 2. Neeraj
 - ✗ 3. Ritesh
 - ✗ 4. Suresh

Question Type : **MCQ**
 Question ID : **264330135030**
 Option 1 ID : **264330529058**
 Option 2 ID : **264330529057**
 Option 3 ID : **264330529055**
 Option 4 ID : **264330529056**
 Status : **Answered**
 Chosen Option : **2**

Q.11 In a certain code language, 'STOCK' is written as '19V15E11'. How will 'CRYPTO' be written in that language?

- Ans**
- 1. 3T25S6VT5
 - 2. 2T2316V15
 - 3. 3T2F1AV15
 - 4. 3T25R20Q

Question Type : **MCQ**
Question ID : **264330133529**
Option 1 ID : **264330523148**
Option 2 ID : **264330523147**
Option 3 ID : **264330523149**
Option 4 ID : **264330523150**
Status : **Answered**
Chosen Option : **1**

Q.12 In a certain code language, 'CUT' is written as 'BD21SU'. How will 'DRY' be written in that language?

- Ans**
- 1. C18EXZ
 - 2. CE18XZ
 - 3. CZ18EX
 - 4. CE18ZX

Question Type : **MCQ**
Question ID : **264330137812**
Option 1 ID : **264330539856**
Option 2 ID : **264330539855**
Option 3 ID : **264330539857**
Option 4 ID : **264330539858**
Status : **Answered**
Chosen Option : **2**

Q.13 A, B, and C are sitting on a bench facing south. D, E, and F are sitting on a parallel bench facing north. D is at one of the ends and to the immediate left of F. B is facing D. C is to the right of A. Who is facing A?

- Ans**
- 1. E
 - 2. C
 - 3. D
 - 4. F

Question Type : **MCQ**
Question ID : **264330135028**
Option 1 ID : **264330529049**
Option 2 ID : **264330529047**
Option 3 ID : **264330529048**
Option 4 ID : **264330529050**
Status : **Answered**
Chosen Option : **4**

Q.14 Which two numbers should be interchanged to make the given equation correct?

$$120 \div 12 \times 6 + 24 - 15 = 27$$

- Ans
- 1. 12 and 6
 - 2. 12 and 15
 - 3. 12 and 24
 - 4. 6 and 24

Question Type : MCQ
Question ID : 264330137361
Option 1 ID : 264330538071
Option 2 ID : 264330538074
Option 3 ID : 264330538072
Option 4 ID : 264330538073
Status : Answered
Chosen Option : 3

Q.15 Two statements are given followed by two conclusions numbered I and II. Assuming the statements to be true, even if they seem to be at variance with commonly known facts, decide which of the conclusions logically follow(s) from the statements.

Statements:
Some songs are snow.
Some snow are shoes.

Conclusions:
I. Some shoes are snow.
II. Some snows are songs.

- Ans
- 1. Only conclusion I follows
 - 2. Neither conclusion I nor II follows
 - 3. Only conclusion II follows
 - 4. Both conclusions I and II follow

Question Type : MCQ
Question ID : 264330135031
Option 1 ID : 264330529059
Option 2 ID : 264330529062
Option 3 ID : 264330529060
Option 4 ID : 264330529061
Status : Answered
Chosen Option : 4

Q.16 Which two signs should be interchanged to make the given equation correct?

$$2 - 8 \div 4 = 6 \times 3 + 18$$

- Ans
- 1. \times and $-$
 - 2. $=$ and $+$
 - 3. \times and $+$
 - 4. $+$ and $-$

Question Type : MCQ
Question ID : 264330135037
Option 1 ID : 264330529083
Option 2 ID : 264330529086
Option 3 ID : 264330529085
Option 4 ID : 264330529084
Status : Answered
Chosen Option : 2

Q.17 Select the option figure in which the given figure is embedded. (rotation is NOT allowed)



Ans

✗ 1.



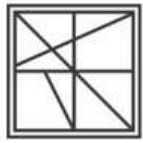
✗ 2.



✗ 3.



✓ 4.



Question Type : MCQ

Question ID : 264330138600

Option 1 ID : 264330543008

Option 2 ID : 264330543010

Option 3 ID : 264330543009

Option 4 ID : 264330543007

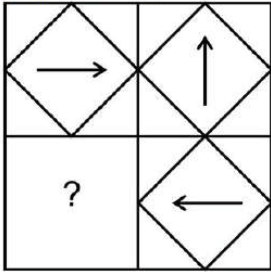
Status : Answered

Chosen Option : 4



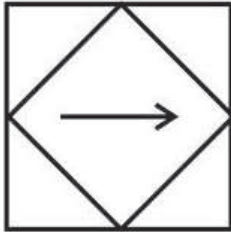
Teachingninja.in

Q.18 Select the option figure that will replace the question mark (?) in the figure given below to complete the pattern.
(rotation is not allowed)

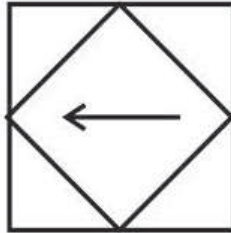


Ans

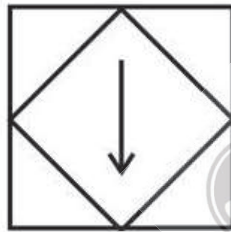
✗ 1.



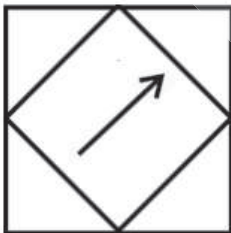
✗ 2.



✓ 3.



✗ 4.



Question Type : MCQ

Question ID : 264330135041

Option 1 ID : 264330529101

Option 2 ID : 264330529102

Option 3 ID : 264330529100

Option 4 ID : 264330529099

Status : Answered

Chosen Option : 3

Q.19 Three statements are given followed by two conclusions numbered I and II. Assuming the statements to be true, even if they seem to be at variance with commonly known facts, decide which of the conclusions logically follow(s) from the statements.

Statements:

All paper are chair.

Some chair are ground.

All cat are ground.

Conclusions:

I. Some cat are chair.

II. Some chair are not paper.

- Ans**
- 1. Only conclusion II follows
 - 2. Both conclusions I and II follow
 - 3. Only conclusion I follows
 - 4. Neither conclusion I nor II follows

Question Type : **MCQ**

Question ID : **264330135032**

Option 1 ID : **264330529064**

Option 2 ID : **264330529065**

Option 3 ID : **264330529063**

Option 4 ID : **264330529066**

Status : **Answered**

Chosen Option : 1

Q.20 Which of the following numbers will replace the question mark (?) in the given series?

-34, -31, -25, -16, -4, 11, 29, ?

- Ans**
- 1. 60
 - 2. 50
 - 3. 80
 - 4. 70

Question Type : **MCQ**

Question ID : **264330135034**

Option 1 ID : **264330529071**

Option 2 ID : **264330529072**

Option 3 ID : **264330529073**

Option 4 ID : **264330529074**

Status : **Answered**

Chosen Option : 2

Section : General Awareness

Q.1 Which acid destroys the bacteria that enter the stomach?

- Ans
- 1. Nitric acid
 - 2. Hydrochloric acid
 - 3. Boric acid
 - 4. Uric acid

Question Type : MCQ
Question ID : 264330134676
Option 1 ID : 264330527659
Option 2 ID : 264330527662
Option 3 ID : 264330527660
Option 4 ID : 264330527661
Status : Answered
Chosen Option : 2

Q.2 Which among the following wind is associated with extreme cold and dryness?

- Ans
- 1. Monsoon Winds
 - 2. Westerlies
 - 3. Trade Winds
 - 4. Polar Easterlies

Question Type : MCQ
Question ID : 264330134677
Option 1 ID : 264330527664
Option 2 ID : 264330527666
Option 3 ID : 264330527663
Option 4 ID : 264330527665
Status : Answered
Chosen Option : 4

Q.3 Baisakhi Festival is majorly celebrated in the states of _____ and _____.

- Ans
- 1. Nagaland, Tripura
 - 2. Rajasthan, Madhya Pradesh
 - 3. Punjab, Haryana
 - 4. Tamil Nadu, Kerala

Question Type : MCQ
Question ID : 264330138650
Option 1 ID : 264330543208
Option 2 ID : 264330543210
Option 3 ID : 264330543209
Option 4 ID : 264330543207
Status : Answered
Chosen Option : 3

Q.4 Cash reserve ratio is a _____ tool to control money supply.

- I. Qualitative
- II. Quantitative

- Ans
- 1. Only II
 - 2. Only I
 - 3. Neither I nor II
 - 4. Both I and II

Question Type : MCQ
Question ID : 264330138659
Option 1 ID : 264330543244
Option 2 ID : 264330543243
Option 3 ID : 264330543246
Option 4 ID : 264330543245
Status : Answered
Chosen Option : 1

Q.5 Which battle led to the destruction of the Vijayanagara empire?

- Ans
- 1. Battle of Raichur
 - 2. Battle of Haldighati
 - 3. Battle of Talikota
 - 4. Battle of Arcot

Question Type : MCQ
Question ID : 264330134683
Option 1 ID : 264330527689
Option 2 ID : 264330527688
Option 3 ID : 264330527690
Option 4 ID : 264330527687
Status : Answered
Chosen Option : 2

Q.6 Mahabalipuram Monuments were built in _____ dynasty architecture.

- Ans
- 1. Chandella
 - 2. Pallava
 - 3. Pali
 - 4. Gupta

Question Type : MCQ
Question ID : 264330137065
Option 1 ID : 264330536903
Option 2 ID : 264330536904
Option 3 ID : 264330536906
Option 4 ID : 264330536905
Status : Answered
Chosen Option : 2

Q.7 V. Satyanarayana Sarma was awarded with Padma Shri in 1970 for his contributions in the field of _____ dance.

- Ans**
- 1. Kuchipudi
 - 2. Odissi
 - 3. Manipuri
 - 4. Kathak

Question Type : **MCQ**
Question ID : **264330138656**
Option 1 ID : **264330543233**
Option 2 ID : **264330543234**
Option 3 ID : **264330543231**
Option 4 ID : **264330543232**
Status : **Answered**
Chosen Option : **2**

Q.8 In _____, at its Madras session, the Indian National Congress set up an All Parties Conference to draft a Constitution for India.

- Ans**
- 1. 1922
 - 2. 1932
 - 3. 1927
 - 4. 1915

Question Type : **MCQ**
Question ID : **264330137076**
Option 1 ID : **264330536948**
Option 2 ID : **264330536947**
Option 3 ID : **264330536949**
Option 4 ID : **264330536950**
Status : **Answered**
Chosen Option : **1**

Q.9 According to census 2011, which Union territory has highest decadal population growth rate between 2001 - 11?

- Ans**
- 1. NCT of Delhi
 - 2. Lakshadweep
 - 3. Dadra & Nagar Haveli
 - 4. Chandigarh

Question Type : **MCQ**
Question ID : **264330137030**
Option 1 ID : **264330536764**
Option 2 ID : **264330536766**
Option 3 ID : **264330536765**
Option 4 ID : **264330536763**
Status : **Answered**
Chosen Option : **1**

Q.10 Koneru Humpy is associated with which of the following sport?

- Ans
- 1. Chess
 - 2. Boxing
 - 3. Badminton
 - 4. Cricket

Question Type : MCQ
Question ID : 264330134692
Option 1 ID : 264330527726
Option 2 ID : 264330527725
Option 3 ID : 264330527723
Option 4 ID : 264330527724
Status : Answered
Chosen Option : 1

Q.11 Which among the following countries will host the 2024 South Asian Games?

- Ans
- 1. India
 - 2. Bhutan
 - 3. Nepal
 - 4. Pakistan

Question Type : MCQ
Question ID : 264330134716
Option 1 ID : 264330527822
Option 2 ID : 264330527820
Option 3 ID : 264330527819
Option 4 ID : 264330527821
Status : Not Attempted and Marked For Review
Chosen Option : --

Q.12 Union Agriculture Minister Narendra Singh Tomar announced in October 2022 that the central government will launch a _____ crore accelerator programme to support the productive ideas of agro businesses.

- Ans
- 1. Rs.450
 - 2. Rs. 500
 - 3. Rs.300
 - 4. Rs.350

Question Type : MCQ
Question ID : 264330134694
Option 1 ID : 264330527733
Option 2 ID : 264330527734
Option 3 ID : 264330527732
Option 4 ID : 264330527731
Status : Answered
Chosen Option : 4

Q.13 'India's Struggle for Independence' is one of the notable books written by _____.

- Ans
- 1. Sekhar Bandyopadhyay
 - 2. R.K. Narayana
 - 3. R.C. Majumdar
 - 4. Bipan Chandra

Question Type : MCQ
Question ID : 264330138654
Option 1 ID : 264330543226
Option 2 ID : 264330543223
Option 3 ID : 264330543224
Option 4 ID : 264330543225
Status : Answered
Chosen Option : 4

Q.14 The Inter-State Council consists of _____ ministers of Cabinet rank in the Union Council of Ministers nominated by the Prime Minister of India.

- Ans
- 1. six
 - 2. two
 - 3. ten
 - 4. four

Question Type : MCQ
Question ID : 264330134715
Option 1 ID : 264330527816
Option 2 ID : 264330527818
Option 3 ID : 264330527815
Option 4 ID : 264330527817
Status : Answered
Chosen Option : 4

Q.15 Fundamental Duties were incorporated in Part IV-A of the Constitution by the _____ Constitutional Amendment Act, 1976 on the recommendations of the Swaran Singh Committee.

- Ans
- 1. 42nd
 - 2. 47th
 - 3. 35th
 - 4. 51st

Question Type : MCQ
Question ID : 264330134714
Option 1 ID : 264330527814
Option 2 ID : 264330527812
Option 3 ID : 264330527813
Option 4 ID : 264330527811
Status : Answered
Chosen Option : 1

Q.16 Nepal does NOT share its boundary with which of the following states in India?

- Ans
- 1. Sikkim
 - 2. Bihar
 - 3. West Bengal
 - 4. Manipur

Question Type : MCQ
Question ID : 264330137931
Option 1 ID : 264330540333
Option 2 ID : 264330540331
Option 3 ID : 264330540332
Option 4 ID : 264330540334
Status : Answered
Chosen Option : 1

Q.17 "Mission Karmayogi" programme is for _____.

- Ans
- 1. Doctors
 - 2. Women Entrepreneur
 - 3. Civil servants
 - 4. Construction workers

Question Type : MCQ
Question ID : 264330137062
Option 1 ID : 264330536893
Option 2 ID : 264330536894
Option 3 ID : 264330536892
Option 4 ID : 264330536891
Status : Answered
Chosen Option : 1

Q.18 Who among the following was awarded the Bharat Ratna in 2001 and has been credited with taking the shehnai from the marriage mandap to the concert hall?

- Ans
- 1. Ravi Shankar
 - 2. Ali Akbar Khan
 - 3. Hariprasad Chaurasia
 - 4. Bismillah Khan

Question Type : MCQ
Question ID : 264330134712
Option 1 ID : 264330527806
Option 2 ID : 264330527804
Option 3 ID : 264330527803
Option 4 ID : 264330527805
Status : Answered
Chosen Option : 4

Q.19 In 1895, Mahatma Gandhi, along with other Indians has established _____ to fight against racial discrimination.

- Ans
- 1. Dev Samaj
 - 2. Brahmo Samaj
 - 3. Natal Congress
 - 4. Sabarmati Ashram

Question Type : MCQ
Question ID : 264330138673
Option 1 ID : 264330543302
Option 2 ID : 264330543301
Option 3 ID : 264330543299
Option 4 ID : 264330543300
Status : Answered
Chosen Option : 1

Q.20 Padma Subrahmanyam is a well-known dancer of which of the following dance forms?

- Ans
- 1. Bharatnatyam
 - 2. Manipuri
 - 3. Odissi
 - 4. Kuchipudi

Question Type : MCQ
Question ID : 264330134696
Option 1 ID : 264330527739
Option 2 ID : 264330527741
Option 3 ID : 264330527742
Option 4 ID : 264330527740
Status : Answered
Chosen Option : 1

Q.21 Fern is an example of which plant group?

- Ans
- 1. Phanerogams
 - 2. Bryophyta
 - 3. Pteridophyta
 - 4. Thallophyta

Question Type : MCQ
Question ID : 264330134700
Option 1 ID : 264330527758
Option 2 ID : 264330527757
Option 3 ID : 264330527755
Option 4 ID : 264330527756
Status : Answered
Chosen Option : 4

Q.22 The ambassador who was sent to the court of Chandragupta Maurya by the Greek ruler Seleucus Nicator is _____.

- Ans
- 1. Homer
 - 2. Strabo
 - 3. Herodotus
 - 4. Megasthenes

Question Type : MCQ
Question ID : 264330138670
Option 1 ID : 264330543288
Option 2 ID : 264330543287
Option 3 ID : 264330543290
Option 4 ID : 264330543289
Status : Answered
Chosen Option : 4

Q.23 Hindustan Aeronautics limited comes under which sector?

- Ans
- 1. Co-operative sector
 - 2. Private sector
 - 3. Foreign sector
 - 4. Public sector

Question Type : MCQ
Question ID : 264330138666
Option 1 ID : 264330543274
Option 2 ID : 264330543271
Option 3 ID : 264330543273
Option 4 ID : 264330543272
Status : Answered
Chosen Option : 4

Q.24 Newton's first law of motion is also known as _____.

- Ans
- 1. Law of magnitude
 - 2. Law of reaction
 - 3. Law of Inertia
 - 4. Law of masses

Question Type : MCQ
Question ID : 264330134674
Option 1 ID : 264330527653
Option 2 ID : 264330527654
Option 3 ID : 264330527651
Option 4 ID : 264330527652
Status : Answered
Chosen Option : 3

Q.25 Which river is the third largest in the peninsula of India and the largest river of Odisha state?

- Ans
- 1. Godavari
 - 2. Mahanadi
 - 3. Krishna
 - 4. Narmada

Question Type : MCQ
Question ID : 264330134704
Option 1 ID : 264330527771
Option 2 ID : 264330527773
Option 3 ID : 264330527774
Option 4 ID : 264330527772
Status : Answered
Chosen Option : 2

Section : English Language and Comprehension

Q.1 Select the most appropriate option to fill in the blank.

His father was killed in a _____, when the boy was nine years old.

- Ans
- 1. dwell
 - 2. drool
 - 3. dual
 - 4. duel

Question Type : MCQ
Question ID : 264330136793
Option 1 ID : 264330535873
Option 2 ID : 264330535874
Option 3 ID : 264330535871
Option 4 ID : 264330535872
Status : Answered
Chosen Option : 4

Q.2 Choose the word that can substitute the given group of words.

Something that is necessary or crucial

- Ans
- 1. Pedantic
 - 2. Trivial
 - 3. Indispensable
 - 4. Auxiliary

Question Type : MCQ
Question ID : 264330134838
Option 1 ID : 264330528289
Option 2 ID : 264330528287
Option 3 ID : 264330528290
Option 4 ID : 264330528288
Status : Answered
Chosen Option : 3

Q.3 Select the most appropriate option to fill in the blank.

Each band is known across a wide area because all residents of a given region are typically tied to one another through a large _____ of kinship and reciprocity

- Ans
- 1. variation
 - 2. mesh
 - 3. network
 - 4. clash

Question Type : **MCQ**
Question ID : **264330134848**
Option 1 ID : **264330528329**
Option 2 ID : **264330528328**
Option 3 ID : **264330528330**
Option 4 ID : **264330528327**
Status : **Answered**
Chosen Option : **3**

Q.4 Identify the segment that contains a grammatical error. If there is no error, select 'No error'

The police released a statement saying/, "This was one of the most vicious/ attack we have ever seen."

- Ans
- 1. No error
 - 2. The police released a statement saying,
 - 3. "This was one of the most vicious
 - 4. attack we have ever seen."

Question Type : **MCQ**
Question ID : **264330136292**
Option 1 ID : **264330533950**
Option 2 ID : **264330533947**
Option 3 ID : **264330533948**
Option 4 ID : **264330533949**
Status : **Answered**
Chosen Option : **3**

Q.5 Select the appropriate antonym for the underlined word.

Social justice has been one of the cherished goals of the makers of our Constitution.

- Ans
- 1. relished
 - 2. valued
 - 3. treasured
 - 4. despised

Question Type : **MCQ**
Question ID : **264330134842**
Option 1 ID : **264330528304**
Option 2 ID : **264330528305**
Option 3 ID : **264330528306**
Option 4 ID : **264330528303**
Status : **Answered**
Chosen Option : **4**

Q.6 Select the most appropriate option to substitute the bracketed segment in the given sentence. If there is no need to substitute it, select 'no substitution required'.

This looks (like one of those unwelcome social summons which call upon a man) either to be bored or to lie.

Ans ✓ 1.

like one of those unwelcome social summonses which call upon a man

✗ 2.

like one of these unwelcome social summons that call upon a man

✗ 3.

like one of those unwelcome social summon that call upon a man

✗ 4. No substitution required

Question Type : **MCQ**
Question ID : **264330136295**
Option 1 ID : **264330533960**
Option 2 ID : **264330533959**
Option 3 ID : **264330533961**
Option 4 ID : **264330533962**
Status : **Answered**
Chosen Option : **1**

Q.7 Improve the underlined part of the sentence. Choose 'No improvement' as an answer if the sentence is grammatically correct.

When I was eight years old, I used to played with toys.

Ans ✗ 1. No improvement

✗ 2. use to played

✗ 3. used to playing

✓ 4. used to play

Question Type : **MCQ**
Question ID : **264330135183**
Option 1 ID : **264330529666**
Option 2 ID : **264330529665**
Option 3 ID : **264330529663**
Option 4 ID : **264330529664**
Status : **Answered**
Chosen Option : **4**

Q.8 Choose the word that means the same as the given word.

Wage

Ans ✗ 1. Sycophant

✗ 2. Jocular

✓ 3. Emolument

✗ 4. Jackpot

Question Type : **MCQ**
Question ID : **264330136812**
Option 1 ID : **264330535945**
Option 2 ID : **264330535943**
Option 3 ID : **264330535946**
Option 4 ID : **264330535944**
Status : **Answered**
Chosen Option : **3**

Q.9 Select the appropriate synonym for the underlined word.

There is no need to panic, not yet.

- Ans
- 1. mock
 - 2. cheer
 - 3. fright
 - 4. block

Question Type : MCQ
Question ID : 264330134839
Option 1 ID : 264330528292
Option 2 ID : 264330528294
Option 3 ID : 264330528293
Option 4 ID : 264330528291
Status : Answered
Chosen Option : 3

Q.10 Choose the incorrectly spelt word.

- Ans
- 1. Monitour
 - 2. Slope
 - 3. Constant
 - 4. Chemical

Question Type : MCQ
Question ID : 264330134845
Option 1 ID : 264330528317
Option 2 ID : 264330528316
Option 3 ID : 264330528318
Option 4 ID : 264330528315
Status : Answered
Chosen Option : 1

Q.11 A sentence has been given with a blank to be filled with an appropriate option. Choose the correct alternative.
Potato milk is _____ another option for those wanting an alternative to cow's milk.

- Ans
- 1. though
 - 2. yet
 - 3. so
 - 4. but

Question Type : MCQ
Question ID : 264330136828
Option 1 ID : 264330536010
Option 2 ID : 264330536007
Option 3 ID : 264330536009
Option 4 ID : 264330536008
Status : Answered
Chosen Option : 2

Q.12 In the following question, out of the given four alternatives, select the alternative which best expresses the meaning of the Idiom/Phrase.

To make one's mouth water

- Ans**
- 1. To make faces
 - 2. To tremble with fear
 - 3. To feel no pain
 - 4. Feel hungry

Question Type : **MCQ**
Question ID : **264330134817**
Option 1 ID : **264330528207**
Option 2 ID : **264330528208**
Option 3 ID : **264330528209**
Option 4 ID : **264330528210**
Status : **Answered**
Chosen Option : **4**

Q.13 Select the most appropriate antonym of the given word.

Misunderstand

- Ans**
- 1. Impossible
 - 2. Comprehend
 - 3. Delayed
 - 4. Sluggish

Question Type : **MCQ**
Question ID : **264330135785**
Option 1 ID : **264330532018**
Option 2 ID : **264330532017**
Option 3 ID : **264330532016**
Option 4 ID : **264330532015**
Status : **Answered**
Chosen Option : **2**

Q.14 Choose the word that can substitute the given group of words.

A sound that cannot be heard

- Ans**
- 1. Inaudible
 - 2. Audacious
 - 3. Autonomous
 - 4. Delible

Question Type : **MCQ**
Question ID : **264330134811**
Option 1 ID : **264330528186**
Option 2 ID : **264330528183**
Option 3 ID : **264330528184**
Option 4 ID : **264330528185**
Status : **Answered**
Chosen Option : **1**

Q.15 Choose the sentence with no spelling error.

- Ans
- 1. And he wanted to sea him sufer.
 - 2. And he wanted to see him sufer.
 - 3. And he wanted to see him suffer.
 - 4. And he wanted to see him suffer.

Question Type : MCQ
Question ID : 264330136792
Option 1 ID : 264330535868
Option 2 ID : 264330535870
Option 3 ID : 264330535869
Option 4 ID : 264330535867
Status : Answered
Chosen Option : 3

Q.16 Improve the underlined part of the sentence. Choose 'No improvement' as an answer if the sentence is grammatically correct.

After the concert, his voice has hoarse from cheering.

- Ans
- 1. No improvement
 - 2. voice was
 - 3. voiced was
 - 4. voice were

Question Type : MCQ
Question ID : 264330134479
Option 1 ID : 264330526886
Option 2 ID : 264330526884
Option 3 ID : 264330526883
Option 4 ID : 264330526885
Status : Answered
Chosen Option : 2

Q.17 Find the part of the given sentence that has an error in it. If there is no error, choose 'No error'.

Why is your friend giving me weird looks?

- Ans
- 1. weird looks?
 - 2. giving me
 - 3. Why is your friend
 - 4. No error

Question Type : MCQ
Question ID : 264330134719
Option 1 ID : 264330527833
Option 2 ID : 264330527832
Option 3 ID : 264330527831
Option 4 ID : 264330527834
Status : Answered
Chosen Option : 1

Q.18 A sentence has been given with a blank to be filled with an appropriate option. Choose the correct alternative.

She had no _____ of telling him the truth.

- Ans**
- 1. intending
 - 2. intended
 - 3. intents
 - 4. intention

Question Type : **MCQ**
Question ID : **264330134829**
Option 1 ID : **264330528258**
Option 2 ID : **264330528255**
Option 3 ID : **264330528257**
Option 4 ID : **264330528256**
Status : **Answered**
Chosen Option : **4**

Q.19 Find the part of the given sentence that has an error in it. If there is no error, choose 'No error'.

Soap removes traces of pesticides and heavy metals that hand sanitizers can left behind.

- Ans**
- 1. Soap removes traces of pesticides
 - 2. and heavy metals that hand
 - 3. sanitizers can left behind.
 - 4. No error

Question Type : **MCQ**
Question ID : **264330134825**
Option 1 ID : **264330528239**
Option 2 ID : **264330528240**
Option 3 ID : **264330528241**
Option 4 ID : **264330528242**
Status : **Answered**
Chosen Option : **3**

Q.20 In the following question, out of the given four alternatives, select the alternative which best expresses the meaning of the Idiom/Phrase.

To turn over a new leaf

- Ans**
- 1. To have an inclination towards gardening
 - 2. To make a fresh start
 - 3. To turn your back on someone
 - 4. To reply brazenly

Question Type : **MCQ**
Question ID : **264330134844**
Option 1 ID : **264330528312**
Option 2 ID : **264330528311**
Option 3 ID : **264330528313**
Option 4 ID : **264330528314**
Status : **Answered**
Chosen Option : **2**

Comprehension:

In the following passage some words have been deleted. Fill in the blanks with the help of the alternatives given. Select the most appropriate option for each number.

To mark the 25th anniversary of the run, (1) _____ Royal Canadian Mint unveiled a one-dollar commemorative circulation coin (2) _____ Monday on the campus of Simon Fraser University. Fox was (3) _____ undergraduate student and basketball player at SFU when a malignant tumour was discovered in his right leg in 1977. It resulted in (4) _____. A bronze statue of Fox, one of many such tributes across Canada, looks over the academic quadrangle of the university, just a short stroll from the theatre where Monday's (5) _____ was held.

SubQuestion No : 21

Q.21 Select the most appropriate option to fill in the blank No. 1

- Ans
- 1. a
 - 2. in
 - 3. of
 - 4. the

Question Type : MCQ
Question ID : 264330135776
Option 1 ID : 264330531979
Option 2 ID : 264330531982
Option 3 ID : 264330531981
Option 4 ID : 264330531980
Status : Answered
Chosen Option : 4

Comprehension:

In the following passage some words have been deleted. Fill in the blanks with the help of the alternatives given. Select the most appropriate option for each number.

To mark the 25th anniversary of the run, (1) _____ Royal Canadian Mint unveiled a one-dollar commemorative circulation coin (2) _____ Monday on the campus of Simon Fraser University. Fox was (3) _____ undergraduate student and basketball player at SFU when a malignant tumour was discovered in his right leg in 1977. It resulted in (4) _____. A bronze statue of Fox, one of many such tributes across Canada, looks over the academic quadrangle of the university, just a short stroll from the theatre where Monday's (5) _____ was held.

SubQuestion No : 22

Q.22 Select the most appropriate option to fill in the blank No. 2 .

- Ans
- 1. at
 - 2. through
 - 3. on
 - 4. over

Question Type : MCQ
Question ID : 264330135777
Option 1 ID : 264330531986
Option 2 ID : 264330531983
Option 3 ID : 264330531985
Option 4 ID : 264330531984
Status : Answered
Chosen Option : 3

Comprehension:

In the following passage some words have been deleted. Fill in the blanks with the help of the alternatives given. Select the most appropriate option for each number.

To mark the 25th anniversary of the run, (1) _____ Royal Canadian Mint unveiled a one-dollar commemorative circulation coin (2) _____ Monday on the campus of Simon Fraser University. Fox was (3) _____ undergraduate student and basketball player at SFU when a malignant tumour was discovered in his right leg in 1977. It resulted in (4) _____. A bronze statue of Fox, one of many such tributes across Canada, looks over the academic quadrangle of the university, just a short stroll from the theatre where Monday's (5) _____ was held.

SubQuestion No : 23

Q.23 Select the most appropriate option to fill in the blank No. 3.

- Ans
- 1. their
 - 2. a
 - 3. an
 - 4. the

Question Type : MCQ
Question ID : 264330135778
Option 1 ID : 264330531987
Option 2 ID : 264330531988
Option 3 ID : 264330531989
Option 4 ID : 264330531990
Status : Answered
Chosen Option : 2

Comprehension:

In the following passage some words have been deleted. Fill in the blanks with the help of the alternatives given. Select the most appropriate option for each number.

To mark the 25th anniversary of the run, (1) _____ Royal Canadian Mint unveiled a one-dollar commemorative circulation coin (2) _____ Monday on the campus of Simon Fraser University. Fox was (3) _____ undergraduate student and basketball player at SFU when a malignant tumour was discovered in his right leg in 1977. It resulted in (4) _____. A bronze statue of Fox, one of many such tributes across Canada, looks over the academic quadrangle of the university, just a short stroll from the theatre where Monday's (5) _____ was held.

SubQuestion No : 24

Q.24 Select the most appropriate option to fill in the blank No. 4.

- Ans
- 1. fragmentation
 - 2. amputation
 - 3. vasodilation
 - 4. implantation

Question Type : MCQ
Question ID : 264330135779
Option 1 ID : 264330531992
Option 2 ID : 264330531994
Option 3 ID : 264330531993
Option 4 ID : 264330531991
Status : Answered
Chosen Option : 2

Comprehension:

In the following passage some words have been deleted. Fill in the blanks with the help of the alternatives given. Select the most appropriate option for each number.

To mark the 25th anniversary of the run, (1) _____ Royal Canadian Mint unveiled a one-dollar commemorative circulation coin (2) _____ Monday on the campus of Simon Fraser University. Fox was (3) _____ undergraduate student and basketball player at SFU when a malignant tumour was discovered in his right leg in 1977. It resulted in (4) _____. A bronze statue of Fox, one of many such tributes across Canada, looks over the academic quadrangle of the university, just a short stroll from the theatre where Monday's (5) _____ was held.

SubQuestion No : 25

Q.25 Select the most appropriate option to fill in the blank No. 5.

- Ans**
- 1. unveiling
 - 2. countervailing
 - 3. reconciling
 - 4. veiling

Question Type : MCQ
Question ID : 264330135780
Option 1 ID : 264330531996
Option 2 ID : 264330531997
Option 3 ID : 264330531998
Option 4 ID : 264330531995
Status : Answered
Chosen Option : 1

