



SSC MTS **SHIFT – 1 (08-05-2023)**

- ★ **Latest Govt Job updates**
- ★ **Private Job updates**
- ★ **Free Mock tests available**

Visit - teachingninja.in

Multi Tasking Non Technical Staff and Havalдар CBIC and CBN Examination 2022

Roll Number	
Candidate Name	
Venue Name	
Exam Date	08/05/2023
Exam Time	9:00 AM - 10:30 AM
Subject	MTS Non Tech Havalдар CBIC and CBN Examination 2022

Section : Numerical and Mathematical Ability

Q.1 A person can walk at a speed of 0.5 meters/second. How far will he walk in 8 minutes?

- Ans
- 1. 250 m
 - 2. 200 m
 - 3. 120 m
 - 4. 240 m

Question Type : MCQ
Question ID : 264330138750
Option 1 ID : 264330543607
Option 2 ID : 264330543610
Option 3 ID : 264330543609
Option 4 ID : 264330543608
Status : Answered
Chosen Option : 4

Q.2 The third proportional to 4 and 6 is:

- Ans
- 1. 36
 - 2. 9
 - 3. 16
 - 4. 6

Question Type : MCQ
Question ID : 264330138045
Option 1 ID : 264330540789
Option 2 ID : 264330540788
Option 3 ID : 264330540790
Option 4 ID : 264330540787
Status : Answered
Chosen Option : 2

Q.3 The average runs of a cricket player of 10 innings were 40. How many runs must she make in her next inning so as to increase her average of runs by 3?

- Ans**
- 1. 53
 - 2. 43
 - 3. 63
 - 4. 73

Question Type : MCQ
Question ID : 264330138038
Option 1 ID : 264330540762
Option 2 ID : 264330540760
Option 3 ID : 264330540761
Option 4 ID : 264330540759
Status : Answered
Chosen Option : 4

Q.4 Anil is 12.5 percent more efficient than Sachin. If Sachin alone can finish a work in 10 days, then in how many days will Anil alone finish the same work?

- Ans**
- 1. (80/9) days
 - 2. (70/9) days
 - 3. (80/7) days
 - 4. (70/11) days

Question Type : MCQ
Question ID : 264330139057
Option 1 ID : 264330544837
Option 2 ID : 264330544836
Option 3 ID : 264330544835
Option 4 ID : 264330544838
Status : Answered
Chosen Option : 2

Q.5 A wire is in the form of square with side 44 cm. It is bent to form a circle. What is the radius of the circle?

- Ans**
- 1. 16 cm
 - 2. 28 cm
 - 3. 21 cm
 - 4. 32 cm

Question Type : MCQ
Question ID : 264330139070
Option 1 ID : 264330544887
Option 2 ID : 264330544890
Option 3 ID : 264330544888
Option 4 ID : 264330544889
Status : Answered
Chosen Option : 2

Q.6 A mixture contains milk and water in the ratio 5:2. If 4 liters of water is added to the mixture, the ratio becomes 5:4.
What is the quantity of milk in the given mixture?

- Ans**
- 1. 10 liters
 - 2. 2 litres
 - 3. 5 litres
 - 4. 8 litres

Question Type : **MCQ**
Question ID : **264330138046**
Option 1 ID : **264330540794**
Option 2 ID : **264330540793**
Option 3 ID : **264330540792**
Option 4 ID : **264330540791**
Status : **Answered**
Chosen Option : **3**

Q.7 What is the single equivalent price increase for two successive price increase of 5% and 8% on an item?

- Ans**
- 1. 15.5%
 - 2. 14.2%
 - 3. 12.5%
 - 4. 13.4%

Question Type : **MCQ**
Question ID : **264330133677**
Option 1 ID : **264330523733**
Option 2 ID : **264330523734**
Option 3 ID : **264330523731**
Option 4 ID : **264330523732**
Status : **Answered**
Chosen Option : **3**

Q.8 A person walks 10 km at a speed of 2.5 km per hour, then runs 10 km at a speed of 5 km per hour and then goes 30 km by bus at the speed of 30 km per hour. What is the average speed of the man?

- Ans**
- 1. 9 kmph
 - 2. 7.14 kmph
 - 3. 7 kmph
 - 4. 8.25 kmph

Question Type : **MCQ**
Question ID : **264330138049**
Option 1 ID : **264330540803**
Option 2 ID : **264330540804**
Option 3 ID : **264330540806**
Option 4 ID : **264330540805**
Status : **Answered**
Chosen Option : **3**

Q.9 A cuboid whose sides are 8 cm, 27 cm and 64 cm is melted to form a new cube. What is the respective ratio of the total surface area of the cuboid and cube?

- Ans
- 1. 329 : 237
 - 2. 291 : 203
 - 3. 349 : 248
 - 4. 307 : 216

Question Type : MCQ

Question ID : 264330137167

Option 1 ID : 264330537311

Option 2 ID : 264330537312

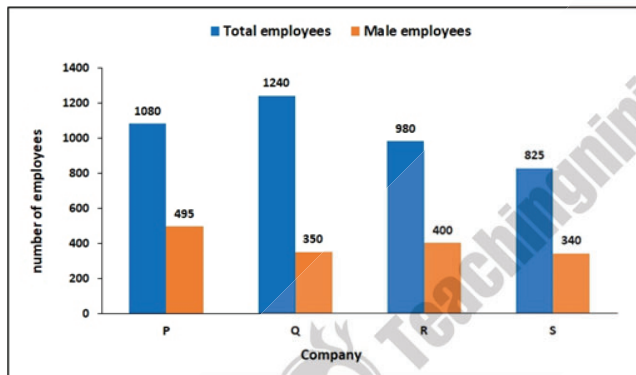
Option 3 ID : 264330537313

Option 4 ID : 264330537314

Status : Answered

Chosen Option : 3

Q.10 The following bar graph shows the total number of employees in 4 different companies. What is the sum of female employees of company Q and company S?



- Ans
- 1. 1240
 - 2. 485
 - 3. 1375
 - 4. 890

Question Type : MCQ

Question ID : 264330138053

Option 1 ID : 264330540822

Option 2 ID : 264330540820

Option 3 ID : 264330540821

Option 4 ID : 264330540819

Status : Answered

Chosen Option : 3

Q.11 The difference between the compound interest (compounding annually) and simple interest on a sum at the rate of 30 percent per annum for 2 years is Rs. 3600. What is the sum?

- Ans
- 1. Rs. 50000
 - 2. Rs. 60000
 - 3. Rs. 75000
 - 4. Rs. 40000

Question Type : MCQ
Question ID : 264330139007
Option 1 ID : 264330544638
Option 2 ID : 264330544636
Option 3 ID : 264330544637
Option 4 ID : 264330544635
Status : Answered
Chosen Option : 3

Q.12 The value of $8000 \div 10 \times \{(8 - 4) + (36 - 24)\}$ is:

- Ans
- 1. 6400
 - 2. 50
 - 3. 12800
 - 4. 800

Question Type : MCQ
Question ID : 264330138035
Option 1 ID : 264330540749
Option 2 ID : 264330540747
Option 3 ID : 264330540750
Option 4 ID : 264330540748
Status : Answered
Chosen Option : 3

Q.13 What is the value of $0.8 \times 0.8 \times 0.8 + 0.7 \times 0.7 \times 0.7 + 2.52$?

- Ans
- 1. 3.375
 - 2. 5.165
 - 3. 4.275
 - 4. 2.125

Question Type : MCQ
Question ID : 264330138032
Option 1 ID : 264330540738
Option 2 ID : 264330540735
Option 3 ID : 264330540736
Option 4 ID : 264330540737
Status : Answered
Chosen Option : 1

Q.14 Rohan alone can do a work in 10 days and Mohan alone can do the same work in 15 days. In how many days will they together complete the same work?

- Ans**
- 1. 7 days
 - 2. 4 days
 - 3. 6 days
 - 4. 5 days

Question Type : MCQ
Question ID : 264330137152
Option 1 ID : 264330537254
Option 2 ID : 264330537253
Option 3 ID : 264330537252
Option 4 ID : 264330537251
Status : Answered
Chosen Option : 3

Q.15 What is the effective annual rate of interest corresponding to a nominal rate of 10% per annum payable half-yearly?

- Ans**
- 1. 12.75%
 - 2. 9.25%
 - 3. 10.25%
 - 4. 11.50%

Question Type : MCQ
Question ID : 264330133684
Option 1 ID : 264330523760
Option 2 ID : 264330523762
Option 3 ID : 264330523761
Option 4 ID : 264330523759
Status : Answered
Chosen Option : 3

Q.16 A person bought some pens at the rate of 30 for a rupee and sold them at the rate of 20 for a rupee. What is the profit percentage?

- Ans**
- 1. 50 percent
 - 2. 75 percent
 - 3. 66.66 percent
 - 4. 33.33 percent

Question Type : MCQ
Question ID : 264330139002
Option 1 ID : 264330544615
Option 2 ID : 264330544618
Option 3 ID : 264330544616
Option 4 ID : 264330544617
Status : Answered
Chosen Option : 4

Q.17 X, Y and Z enter into a partnership. X invests some money at the beginning, Y invests thrice the amount of X after 4 months and Z invests double the amount of Y after 9 months from the beginning. If the annual gain be Rs. 450000, then what is the share of Y?

- Ans**
- 1. Rs. 150000
 - 2. Rs. 100000
 - 3. Rs. 300000
 - 4. Rs. 200000

Question Type : MCQ
Question ID : 264330138043
Option 1 ID : 264330540781
Option 2 ID : 264330540779
Option 3 ID : 264330540782
Option 4 ID : 264330540780
Status : Answered
Chosen Option : 1

Q.18 A water purifier is on sale for 10% discount on the original price. A store-wide sale results in an additional discount of 15%. What is the total discount on the original price?

- Ans**
- 1. 22.50%
 - 2. 23.50%
 - 3. 18.50%
 - 4. 19.50%

Question Type : MCQ
Question ID : 264330138044
Option 1 ID : 264330540784
Option 2 ID : 264330540783
Option 3 ID : 264330540786
Option 4 ID : 264330540785
Status : Answered
Chosen Option : 1

Q.19 What is the value of $\frac{66 - 55 + 44 - 33 + 22}{13 \times 3 + 2 \times 3 - 1}$?

- Ans**
- 1. 1
 - 2. 4
 - 3. 44
 - 4. 11

Question Type : MCQ
Question ID : 264330137339
Option 1 ID : 264330537983
Option 2 ID : 264330537984
Option 3 ID : 264330537985
Option 4 ID : 264330537986
Status : Answered
Chosen Option : 1

Q.20 The table given below shows the expenditure on six articles by two families A and B.

Articles	A	B
P	40	120
Q	60	70
R	80	90
S	100	50
T	110	40
U	90	80

Which of the following statement is NOT correct?

I. The expenditure on article R by A is 28.56 percent more than the expenditure on Q by B.

II. The difference between average expenditure on article P and Q by A and the average expenditure on R and S by B is 20.

- Ans**
- 1. Both I and II
 - 2. Only I
 - 3. Only II
 - 4. Neither I nor II

Question Type : **MCQ**

Question ID : **264330138033**

Option 1 ID : **264330540741**

Option 2 ID : **264330540739**

Option 3 ID : **264330540740**

Option 4 ID : **264330540742**

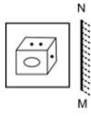
Status : **Answered**

Chosen Option : **1**

Section : Reasoning Ability and Problem Solving

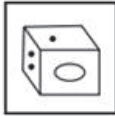


Q.1 Select the correct mirror image of the given figure when the mirror MN is placed to the right side of the figure.



Ans

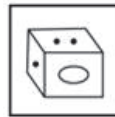
✗ 1.



✗ 2.



✓ 3.



✗ 4.



Question Type : MCQ

Question ID : 264330137828

Option 1 ID : 264330539919

Option 2 ID : 264330539922

Option 3 ID : 264330539921

Option 4 ID : 264330539920

Status : Answered

Chosen Option : 3

Q.2 Five brothers Drake, David, Dany, Derk, and Dim are sitting on a bench facing north. Derk is sitting to the immediate right of Dany. Dim is sitting exactly in between Drake and David. No one sits to the left of Drake. Who sits to the immediate left of Dany?

Ans ✗ 1. Dim

✗ 2. Drake

✓ 3. David

✗ 4. Derk

Question Type : MCQ

Question ID : 264330137838

Option 1 ID : 264330539961

Option 2 ID : 264330539962

Option 3 ID : 264330539960

Option 4 ID : 264330539959

Status : Answered

Chosen Option : 3

Q.3 Select the option that is related to the third word in the same way as the second word is related to the first word.
Butterfly : Caterpillar :: Sheep : ?

- Ans**
- 1. Pigeon
 - 2. Cat
 - 3. Kitty
 - 4. Lamb

Question Type : MCQ
Question ID : 264330137832
Option 1 ID : 264330539938
Option 2 ID : 264330539935
Option 3 ID : 264330539936
Option 4 ID : 264330539937
Status : Answered
Chosen Option : 4

Q.4 In a certain code language, 'WORLD' is coded as '5', 'UPDATE' is coded as '6'. What is the code for 'GLOBALLY' in that code language?

- Ans**
- 1. 19
 - 2. 9
 - 3. 7
 - 4. 8

Question Type : MCQ
Question ID : 264330137370
Option 1 ID : 264330538110
Option 2 ID : 264330538108
Option 3 ID : 264330538109
Option 4 ID : 264330538107
Status : Answered
Chosen Option : 4

Q.5 Which of the following letter will replace the question mark (?) in the given series?
D, H, L, P, T, ?

- Ans**
- 1. X
 - 2. R
 - 3. M
 - 4. P

Question Type : MCQ
Question ID : 264330137830
Option 1 ID : 264330539928
Option 2 ID : 264330539929
Option 3 ID : 264330539930
Option 4 ID : 264330539927
Status : Answered
Chosen Option : 1

Q.6 Six sisters Anu, Ankita, Asha, Amy, Anveshi and Aisha are sitting around a circular table facing each other. Anu sits to the immediate left of Ankita. Amy sits exactly between Asha and Aisha. Aisha does not sit adjacent to Anveshi who sits second to the right of Anu. Who sits to the immediate right of Ankita?

- Ans**
- 1. Asha
 - 2. Anveshi
 - 3. Aisha
 - 4. Amy

Question Type : MCQ
Question ID : 264330137839
Option 1 ID : 264330539963
Option 2 ID : 264330539964
Option 3 ID : 264330539966
Option 4 ID : 264330539965
Status : Answered
Chosen Option : 3

Q.7 Select the option that is related to the third number in the same way as the second number is related to the first number.
13 : 182 :: 17 : ?

- Ans**
- 1. 280
 - 2. 306
 - 3. 360
 - 4. 440

Question Type : MCQ
Question ID : 264330133399
Option 1 ID : 264330522630
Option 2 ID : 264330522627
Option 3 ID : 264330522628
Option 4 ID : 264330522629
Status : Answered
Chosen Option : 2

Q.8 If A denotes 'addition', B denotes 'multiplication', C denotes 'subtraction', and D denotes 'division', then what will be the value of the following equation?
 $6A(9D3)C4=?$

- Ans**
- 1. 5
 - 2. 12
 - 3. 8
 - 4. 7

Question Type : MCQ
Question ID : 264330138825
Option 1 ID : 264330543907
Option 2 ID : 264330543909
Option 3 ID : 264330543910
Option 4 ID : 264330543908
Status : Answered
Chosen Option : 1

Q.9 Select the option that is related to the third letter cluster in the same way as the second letter cluster is related to the first letter cluster.

DMK : ENJ :: QOC : ?

- Ans**
- 1. PRM
 - 2. BRP
 - 3. RBP
 - 4. RPB

Question Type : MCQ
Question ID : 264330137833
Option 1 ID : 264330539942
Option 2 ID : 264330539940
Option 3 ID : 264330539941
Option 4 ID : 264330539939
Status : Answered
Chosen Option : 4

Q.10 Which two numbers should be interchanged to make the given equation correct?

$$4 \times 8 - 12 + 5 = 16$$

- Ans**
- 1. 8 and 5
 - 2. 12 and 16
 - 3. 16 and 8
 - 4. 4 and 5

Question Type : MCQ
Question ID : 264330137847
Option 1 ID : 264330539998
Option 2 ID : 264330539996
Option 3 ID : 264330539995
Option 4 ID : 264330539997
Status : Answered
Chosen Option : 1

Q.11 Which of the following numbers will replace the question mark (?) in the given series?

75, 76, 78, 79, 81, 82, 84, 85, 87, ?

- Ans**
- 1. 96
 - 2. 88
 - 3. 80
 - 4. 90

Question Type : MCQ
Question ID : 264330133397
Option 1 ID : 264330522620
Option 2 ID : 264330522621
Option 3 ID : 264330522622
Option 4 ID : 264330522619
Status : Answered
Chosen Option : 2

Q.12 Seven friends M, N, O, P, Q, R, and S having different heights are standing in ascending order of their heights. The tallest person stands on the right and the shortest on the left. Only three friends are taller than O. R is shorter than only Q. N is taller than both P and M but shorter than S. Who is the third tallest?

- Ans**
- 1. O
 - 2. P
 - 3. N
 - 4. S

Question Type : **MCQ**
Question ID : **264330137840**
Option 1 ID : **264330539969**
Option 2 ID : **264330539967**
Option 3 ID : **264330539968**
Option 4 ID : **264330539970**
Status : **Answered**
Chosen Option : **4**

Q.13 Three statements are given followed by two conclusions numbered I and II. Assuming the statements to be true, even if they seem to be at variance with commonly known facts, decide which of the conclusions logically follow(s) from the statements.

Statements:

- All birds are crows.
- Some crows are parrots.
- No crow is a pigeon.

Conclusions:

- I. No parrot is a pigeon.
- II. Some birds are parrots.

- Ans**
- 1. Only conclusion I follows
 - 2. Only conclusion II follows
 - 3. Neither conclusion I nor II follows
 - 4. Both conclusions I and II follow

Question Type : **MCQ**
Question ID : **264330137842**
Option 1 ID : **264330539975**
Option 2 ID : **264330539976**
Option 3 ID : **264330539978**
Option 4 ID : **264330539977**
Status : **Answered**
Chosen Option : **1**

Q.14 Select the option figure in which the given figure is embedded. (rotation is NOT allowed)



Ans

✗ 1.



✗ 2.



✗ 3.



✓ 4.



Question Type : MCQ

Question ID : 264330137827

Option 1 ID : 264330539918

Option 2 ID : 264330539916

Option 3 ID : 264330539915

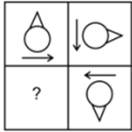
Option 4 ID : 264330539917

Status : Answered

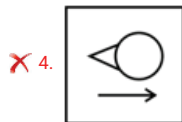
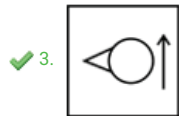
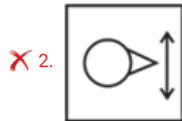
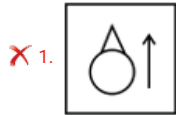
Chosen Option : 4



Q.15 Select the option figure that will replace the question mark (?) in the figure given below to complete the pattern.
(rotation is not allowed)



Ans



Question Type : MCQ

Question ID : 264330137851

Option 1 ID : 264330540012

Option 2 ID : 264330540014

Option 3 ID : 264330540011

Option 4 ID : 264330540013

Status : Answered

Chosen Option : 3

Q.16 In a certain code language, 'BONE' is written as 'F15R5'. How will 'NOSE' be written in that language?

✗ 1. R51W5

✗ 2. R61W5

✓ 3. R15W5

✗ 4. R5W51

Question Type : MCQ

Question ID : 264330135024

Option 1 ID : 264330529031

Option 2 ID : 264330529034

Option 3 ID : 264330529032

Option 4 ID : 264330529033

Status : Answered

Chosen Option : 2

Q.17 Which of the following numbers will replace the question mark (?) in the given series?

13, 9, 5, 1, -3, -7, -11, ?

- Ans**
- 1. -14
 - 2. -16
 - 3. -15
 - 4. -13

Question Type : MCQ

Question ID : 264330137844

Option 1 ID : 264330539985

Option 2 ID : 264330539983

Option 3 ID : 264330539986

Option 4 ID : 264330539984

Status : Answered

Chosen Option : 3

Q.18 In a certain code language, 'WODMF' is written as 'ZRDKD'. How will 'EIDMC' be written in that language?

- Ans**
- 1. HDLAK
 - 2. HDLKA
 - 3. HLDKA
 - 4. HALDA

Question Type : MCQ

Question ID : 264330134960

Option 1 ID : 264330528778

Option 2 ID : 264330528775

Option 3 ID : 264330528776

Option 4 ID : 264330528777

Status : Answered

Chosen Option : 3



Teachingninja.in

Q.19 Two statements are given followed by two conclusions numbered I and II. Assuming the statements to be true, even if they seem to be at variance with commonly known facts, decide which of the conclusions logically follow(s) from the statements.

Statements:

Some milk are curd.

Some curd are butter.

Conclusions:

I. Some milk are butter.

II. Some butter are curd.

- Ans**
- 1. Both conclusions I and II follow
 - 2. Neither conclusion I nor II follows
 - 3. Only conclusion I follows
 - 4. Only conclusion II follows

Question Type : MCQ

Question ID : 264330137841

Option 1 ID : 264330539973

Option 2 ID : 264330539974

Option 3 ID : 264330539971

Option 4 ID : 264330539972

Status : Answered

Chosen Option : 4

Q.20 Study the given pattern carefully and select the number that can replace the question mark (?) in it.

First row- 64, 69, 74

Second row- 26, 31, 36

Third row- 49, 54, ?

- Ans**
- 1. 65
 - 2. 37
 - 3. 53
 - 4. 59

Question Type : MCQ

Question ID : 264330137846

Option 1 ID : 264330539992

Option 2 ID : 264330539993

Option 3 ID : 264330539994

Option 4 ID : 264330539991

Status : Answered

Chosen Option : 4

Section : General Awareness

Q.1 Raut Nacha is a famous folk dance form of _____ state of India.

- Ans
- 1. Sikkim
 - 2. Karnataka
 - 3. Chhattisgarh
 - 4. Punjab

Question Type : MCQ
Question ID : 264330137946
Option 1 ID : 264330540394
Option 2 ID : 264330540393
Option 3 ID : 264330540392
Option 4 ID : 264330540391
Status : Not Answered
Chosen Option : --

Q.2 As per Schedule 8 of the Indian Constitution, how many official languages are there in India?

- Ans
- 1. 42
 - 2. 12
 - 3. 32
 - 4. 22

Question Type : MCQ
Question ID : 264330137964
Option 1 ID : 264330540466
Option 2 ID : 264330540463
Option 3 ID : 264330540465
Option 4 ID : 264330540464
Status : Answered
Chosen Option : 2

Q.3 The Board of Control for Cricket in India (BCCI) was established in _____.

- Ans
- 1. 1928
 - 2. 1926
 - 3. 1924
 - 4. 1922

Question Type : MCQ
Question ID : 264330133885
Option 1 ID : 264330524566
Option 2 ID : 264330524565
Option 3 ID : 264330524564
Option 4 ID : 264330524563
Status : Answered
Chosen Option : 1

Q.4 Which device is used to either break electric circuit or to complete it?

- Ans
- 1. Switch
 - 2. Insulators
 - 3. Bulb
 - 4. Wires

Question Type : MCQ
Question ID : 264330133897
Option 1 ID : 264330524612
Option 2 ID : 264330524614
Option 3 ID : 264330524611
Option 4 ID : 264330524613
Status : Answered
Chosen Option : 1

Q.5 Which article of the Indian constitution talks about Oath or affirmation by the President?

- Ans
- 1. Article 45
 - 2. Article 72
 - 3. Article 56
 - 4. Article 60

Question Type : MCQ
Question ID : 264330137965
Option 1 ID : 264330540467
Option 2 ID : 264330540470
Option 3 ID : 264330540469
Option 4 ID : 264330540468
Status : Answered
Chosen Option : 4

Q.6 Rani – Ki – Vav (the Queen's stepwell) is situated on the banks of which river?

- Ans
- 1. Yamuna
 - 2. Saraswati
 - 3. Krishna
 - 4. Ganga

Question Type : MCQ
Question ID : 264330138873
Option 1 ID : 264330544100
Option 2 ID : 264330544101
Option 3 ID : 264330544102
Option 4 ID : 264330544099
Status : Not Answered
Chosen Option : --

Q.7 What is the official reason given by Britishers after partition of Bengal in 1905?

- Ans
- 1. To check on Extremist activities
 - 2. Easy Movement of army
 - 3. Economic Progress
 - 4. Administrative Convenience

Question Type : MCQ
Question ID : 264330134643
Option 1 ID : 264330527530
Option 2 ID : 264330527529
Option 3 ID : 264330527528
Option 4 ID : 264330527527
Status : Answered
Chosen Option : 1

Q.8 Generally, in India population census is conducted after how many years?

- Ans
- 1. 10
 - 2. 20
 - 3. 15
 - 4. 5

Question Type : MCQ
Question ID : 264330138341
Option 1 ID : 264330541972
Option 2 ID : 264330541974
Option 3 ID : 264330541973
Option 4 ID : 264330541971
Status : Answered
Chosen Option : 1

Q.9 Ustaaad Allauddin Khan, a famous Indian musician is associated with _____ musical instrument.

- Ans
- 1. Surbahar
 - 2. Sarod
 - 3. Santoor
 - 4. Sitar

Question Type : MCQ
Question ID : 264330137962
Option 1 ID : 264330540456
Option 2 ID : 264330540457
Option 3 ID : 264330540458
Option 4 ID : 264330540455
Status : Answered
Chosen Option : 2

Q.10 The main minerals constituents of the continental mass are _____ and _____.

- Ans
- 1. oxygen, carbon
 - 2. silica, magnesium
 - 3. silica, alumina
 - 4. alumina, magnesium

Question Type : MCQ
Question ID : 264330133896
Option 1 ID : 264330524607
Option 2 ID : 264330524608
Option 3 ID : 264330524610
Option 4 ID : 264330524609
Status : Answered
Chosen Option : 1

Q.11 Roger Federer is a famous player of _____ sport.

- Ans
- 1. Lawn Tennis
 - 2. Football
 - 3. Rugby
 - 4. Lawn Bowls

Question Type : MCQ
Question ID : 264330137966
Option 1 ID : 264330540472
Option 2 ID : 264330540474
Option 3 ID : 264330540473
Option 4 ID : 264330540471
Status : Answered
Chosen Option : 1

Q.12 According to census 2011, which is the second largest religious minority of India?

- Ans
- 1. Christians
 - 2. Buddhist
 - 3. Sikhs
 - 4. Muslim

Question Type : MCQ
Question ID : 264330134638
Option 1 ID : 264330527509
Option 2 ID : 264330527510
Option 3 ID : 264330527508
Option 4 ID : 264330527507
Status : Answered
Chosen Option : 4

Q.13 'I2U2' initiative is also referred as _____.

- Ans
- 1. East Asian Quad
 - 2. West European Quad
 - 3. East European Quad
 - 4. West Asian Quad

Question Type : MCQ
Question ID : 264330134628
Option 1 ID : 264330527468
Option 2 ID : 264330527469
Option 3 ID : 264330527470
Option 4 ID : 264330527467
Status : Not Answered
Chosen Option : --

Q.14 During the reign of which of the following Pallavas, Hiuen Tsang visited the Pallava capital Kanchi?

- Ans
- 1. Mahendravarman I
 - 2. Mahendravarman II
 - 3. Narasimhavarman II
 - 4. Narasimhavarman I

Question Type : MCQ
Question ID : 264330137932
Option 1 ID : 264330540335
Option 2 ID : 264330540338
Option 3 ID : 264330540337
Option 4 ID : 264330540336
Status : Not Answered
Chosen Option : --

Q.15 Cultivation of wheat thrives best in which type of soil?

- Ans
- 1. Red soil
 - 2. Black soil
 - 3. Well drained loamy soil
 - 4. Yellow soil

Question Type : MCQ
Question ID : 264330134636
Option 1 ID : 264330527499
Option 2 ID : 264330527500
Option 3 ID : 264330527501
Option 4 ID : 264330527502
Status : Answered
Chosen Option : 2

Q.16 Which component of the cell organelles principally performs the function of packaging materials, to be delivered either to the intra-cellular targets or secreted outside the cell?

- Ans**
- 1. Mitochondria
 - 2. Chloroplast
 - 3. Golgi Apparatus
 - 4. Chromosomes

Question Type : MCQ
Question ID : 264330137950
Option 1 ID : 264330540409
Option 2 ID : 264330540407
Option 3 ID : 264330540410
Option 4 ID : 264330540408
Status : Not Answered
Chosen Option : --

Q.17 Which of the following will NOT participate in the election of president?

- Ans**
- 1. Elected members of state legislative assemblies
 - 2. Elected Rajya Sabha Members
 - 3. Elected members of state legislative council
 - 4. Elected Lok Sabha Members

Question Type : MCQ
Question ID : 264330138882
Option 1 ID : 264330544137
Option 2 ID : 264330544136
Option 3 ID : 264330544138
Option 4 ID : 264330544135
Status : Answered
Chosen Option : 3

Q.18 The result of English Education Act of 1835 was to make _____ as a medium of instruction for _____ education.

- Ans**
- 1. vernacular, primary
 - 2. English, primary
 - 3. English, higher
 - 4. vernacular, higher

Question Type : MCQ
Question ID : 264330138894
Option 1 ID : 264330544185
Option 2 ID : 264330544183
Option 3 ID : 264330544184
Option 4 ID : 264330544186
Status : Answered
Chosen Option : 3

Q.19 What is the jelly like substance between the nucleus and the cell membrane called?

- Ans
- 1. cytoplasm
 - 2. cell wall
 - 3. plasma membrane
 - 4. plasma

Question Type : MCQ
Question ID : 264330133895
Option 1 ID : 264330524604
Option 2 ID : 264330524603
Option 3 ID : 264330524606
Option 4 ID : 264330524605
Status : Not Answered
Chosen Option : --

Q.20 Which organisation is associated with the estimation of poverty line in India?

- Ans
- 1. Reserve Bank of India
 - 2. NITI Aayog
 - 3. Indian Council of Agricultural Research
 - 4. National Sample Survey Organisation

Question Type : MCQ
Question ID : 264330134681
Option 1 ID : 264330527682
Option 2 ID : 264330527681
Option 3 ID : 264330527680
Option 4 ID : 264330527679
Status : Answered
Chosen Option : 2

Q.21 When was the Tattvabodhini Sabha founded by Debendra Nath Tagore?

- Ans
- 1. 1839
 - 2. 1845
 - 3. 1832
 - 4. 1854

Question Type : MCQ
Question ID : 264330137935
Option 1 ID : 264330540350
Option 2 ID : 264330540348
Option 3 ID : 264330540349
Option 4 ID : 264330540347
Status : Not Answered
Chosen Option : --

Q.22 Andaman Islands and Nicobar islands are separated by a water body which is called the _____ .

- Ans
- 1. Palk Strait
 - 2. Conolly Canal
 - 3. Ten Degree Channel
 - 4. Gulf of Mannar

Question Type : MCQ
Question ID : 264330137954
Option 1 ID : 264330540423
Option 2 ID : 264330540426
Option 3 ID : 264330540425
Option 4 ID : 264330540424
Status : Not Answered
Chosen Option : --

Q.23 In November 2022, Pradhan Mantri National Apprenticeship Mela held in _____ .

- Ans
- 1. 199 districts
 - 2. 120 districts
 - 3. 152 districts
 - 4. 182 districts

Question Type : MCQ
Question ID : 264330137944
Option 1 ID : 264330540385
Option 2 ID : 264330540384
Option 3 ID : 264330540383
Option 4 ID : 264330540386
Status : Not Answered
Chosen Option : --

Q.24 In the early 18th century, Rajput Ruler Sawai Raja Jai Singh founded his new capital at _____ .

- Ans
- 1. Jodhpur
 - 2. Udaipur
 - 3. Ajmer
 - 4. Jaipur

Question Type : MCQ
Question ID : 264330133903
Option 1 ID : 264330524636
Option 2 ID : 264330524638
Option 3 ID : 264330524635
Option 4 ID : 264330524637
Status : Not Answered
Chosen Option : --

Q.25 Navreh is the lunar new year that is celebrated in which of the following states/union territories?

- Ans
- 1. Assam
 - 2. Manipur
 - 3. Sikkim
 - 4. Jammu and Kashmir

Question Type : MCQ
Question ID : 264330137922
Option 1 ID : 264330540295
Option 2 ID : 264330540298
Option 3 ID : 264330540296
Option 4 ID : 264330540297
Status : Not Answered
Chosen Option : --

Section : English Language and Comprehension

Q.1 Choose the word that is opposite in meaning to the given word.

Absence

- Ans
- 1. Vanity
 - 2. Privation
 - 3. Dearth
 - 4. Surfeit

Question Type : MCQ
Question ID : 264330136839
Option 1 ID : 264330536047
Option 2 ID : 264330536049
Option 3 ID : 264330536050
Option 4 ID : 264330536048
Status : Answered
Chosen Option : 4



Q.2 Find the part of the given sentence that has an error in it. If there is no error, choose 'No error'.

The political economy of reforms teaches us one major lesson loud and clearer.

- Ans**
- 1. teaches us one major
 - 2. lesson loud and clearer.
 - 3. The political economy of reforms
 - 4. No error

Question Type : MCQ
Question ID : 264330135308
Option 1 ID : 264330530144
Option 2 ID : 264330530145
Option 3 ID : 264330530143
Option 4 ID : 264330530146
Status : Answered
Chosen Option : 2

Q.3 Select the word from the options which is similar in meaning to the bracketed word given in the sentence below.

The sky was alight from (top) to horizon.

- Ans**
- 1. base
 - 2. zenith
 - 3. start
 - 4. summit

Question Type : MCQ
Question ID : 264330136401
Option 1 ID : 264330534369
Option 2 ID : 264330534368
Option 3 ID : 264330534367
Option 4 ID : 264330534370
Status : Answered
Chosen Option : 2

Q.4 Choose the word that can substitute the given group of words.
A person who leaves his native country to settle in another

- Ans**
- 1. Emigrant
 - 2. Itinerant
 - 3. Domicile
 - 4. Nomad

Question Type : MCQ
Question ID : 264330134360
Option 1 ID : 264330526426
Option 2 ID : 264330526423
Option 3 ID : 264330526424
Option 4 ID : 264330526425
Status : Answered
Chosen Option : 3

Q.5 Select the most appropriate synonym of the given word.

Withdraw

- Ans
- 1. Engage
 - 2. Persevere
 - 3. Retreat
 - 4. Combine

Question Type : MCQ
Question ID : 264330136400
Option 1 ID : 264330534364
Option 2 ID : 264330534363
Option 3 ID : 264330534366
Option 4 ID : 264330534365
Status : Answered
Chosen Option : 3

Q.6 Select the word from the options which is exactly opposite in meaning to the bracketed word given in the sentence below.

She must have an (affinity) for women with dark hair.

- Ans
- 1. Tendency
 - 2. Dislike
 - 3. Dodge
 - 4. Stand

Question Type : MCQ
Question ID : 264330136403
Option 1 ID : 264330534377
Option 2 ID : 264330534378
Option 3 ID : 264330534375
Option 4 ID : 264330534376
Status : Not Answered
Chosen Option : --



Q.7 Identify the segment that contains a grammatical error. If there is no error, select 'No error'.
Your ears are itching / because you are having an / allergic reaction.

- Ans
- 1. allergic reaction.
 - 2. No error
 - 3. because you are having an
 - 4. Your ears are itching

Question Type : MCQ
Question ID : 264330136692
Option 1 ID : 264330535485
Option 2 ID : 264330535486
Option 3 ID : 264330535484
Option 4 ID : 264330535483
Status : Answered
Chosen Option : 3

Q.8 Fill in the blank with the most appropriate option.

Every story in this collection is unique, inspirational, and _____.

- Ans
- 1. sustainable
 - 2. apprehensive
 - 3. relatable
 - 4. culpable

Question Type : MCQ
Question ID : 264330136409
Option 1 ID : 264330534401
Option 2 ID : 264330534399
Option 3 ID : 264330534400
Option 4 ID : 264330534402
Status : Answered
Chosen Option : 2

Q.9 The statement below has been given with bracketed text. Select the option with correct idiom for the bracketed text.

His mother and I (share the same opinion) about his decision to drop out of college.

- Ans
- 1. leave no stone unturned
 - 2. paint the town red
 - 3. see eye to eye
 - 4. feel blue

Question Type : MCQ
Question ID : 264330136405
Option 1 ID : 264330534384
Option 2 ID : 264330534386
Option 3 ID : 264330534383
Option 4 ID : 264330534385
Status : Answered
Chosen Option : 4

Q.10 In the following question, out of the given four alternatives, select the alternative which best expresses the meaning of the Idiom/Phrase.
Born with silver spoon in one's mouth

- Ans**
- 1. To accomplish two tasks in one attempt
 - 2. Useful for one's purpose
 - 3. A work which needs tremendous energy
 - 4. Born in a very rich family

Question Type : MCQ
Question ID : 264330134366
Option 1 ID : 264330526449
Option 2 ID : 264330526450
Option 3 ID : 264330526447
Option 4 ID : 264330526448
Status : Answered
Chosen Option : 4

Q.11 Select the word segment that substitutes (replaces) the bracketed word segment correctly and completes the sentence meaningfully. Select the option 'no correction required' if the sentence is correct as given.
There were creatures (stood between) the carriage shafts.

- Ans**
- 1. stood among
 - 2. No correction required
 - 3. standing between
 - 4. stands among

Question Type : MCQ
Question ID : 264330136695
Option 1 ID : 264330535497
Option 2 ID : 264330535498
Option 3 ID : 264330535495
Option 4 ID : 264330535496
Status : Answered
Chosen Option : 1

Q.12 Four words are given, out of which only one word is spelt correctly. Choose the correctly spelt word.

- Ans**
- 1. SIEZE
 - 2. RECOMEND
 - 3. FLOWWER
 - 4. RHYTHM

Question Type : MCQ
Question ID : 264330136406
Option 1 ID : 264330534387
Option 2 ID : 264330534389
Option 3 ID : 264330534390
Option 4 ID : 264330534388
Status : Answered
Chosen Option : 4

Q.13 Identify the segment that contains a grammatical error. If there is no error, select 'No error'.

'Don't you get / involve!' Sandhya / whispered urgently to him.

- Ans
- 1. No error
 - 2. Don't you get
 - 3. whispered urgently to him.
 - 4. involve!' Sandhya

Question Type : MCQ
Question ID : 264330136386
Option 1 ID : 264330534314
Option 2 ID : 264330534311
Option 3 ID : 264330534313
Option 4 ID : 264330534312
Status : Answered
Chosen Option : 2

Q.14 Select the most appropriate word for the given group of words.

Abundant garbage kept at one place.

- Ans
- 1. Heap of garbage
 - 2. Hill of garbage
 - 3. Lot of garbage
 - 4. Mound of garbage

Question Type : MCQ
Question ID : 264330136399
Option 1 ID : 264330534360
Option 2 ID : 264330534359
Option 3 ID : 264330534362
Option 4 ID : 264330534361
Status : Answered
Chosen Option : 2



Q.15 Select the most appropriate option to fill in the blank.

And his _____ manner should not be mistaken for a lack of energy.

- Ans
- 1. deem
 - 2. diffident
 - 3. daunt
 - 4. debase

Question Type : MCQ
Question ID : 264330136516
Option 1 ID : 264330534810
Option 2 ID : 264330534807
Option 3 ID : 264330534809
Option 4 ID : 264330534808
Status : Not Answered
Chosen Option : --

Q.16 Select the wrongly spelt word.

- Ans
- 1. Adulation
 - 2. Anonymus
 - 3. Perfidious
 - 4. Circuitous

Question Type : MCQ
Question ID : 264330136314
Option 1 ID : 264330534033
Option 2 ID : 264330534034
Option 3 ID : 264330534032
Option 4 ID : 264330534031
Status : Answered
Chosen Option : 2

Q.17 Improve the underlined part of the sentence. Choose 'No improvement' as an answer if the sentence is grammatically correct.

Watch your step—the third stair have a broken tread.

- Ans
- 1. No improvement
 - 2. has a break
 - 3. has a broke
 - 4. has a broken

Question Type : MCQ
Question ID : 264330134826
Option 1 ID : 264330528246
Option 2 ID : 264330528244
Option 3 ID : 264330528243
Option 4 ID : 264330528245
Status : Answered
Chosen Option : 4

Q.18 Fill in the blank with the most appropriate option.

Towel off and _____ your moisturizer immediately.

- Ans
- 1. touch
 - 2. surrender
 - 3. refer
 - 4. apply

Question Type : MCQ
Question ID : 264330136390
Option 1 ID : 264330534329
Option 2 ID : 264330534327
Option 3 ID : 264330534330
Option 4 ID : 264330534328
Status : Answered
Chosen Option : 4

Q.19 Select the most appropriate option to fill in the blank.

Very special care should be taken to proportion the sand so as to make a perfectly _____ mixture.

- Ans
- 1. devious
 - 2. impervious
 - 3. obvious
 - 4. envious

Question Type : MCQ
Question ID : 264330136315
Option 1 ID : 264330534037
Option 2 ID : 264330534035
Option 3 ID : 264330534036
Option 4 ID : 264330534038
Status : Not Answered
Chosen Option : --



Q.20 Select the most appropriate option to substitute the bracketed segment in the given sentence. If there is no need to substitute it, select 'no substitution required'.

When it comes to face masks, the (market are flooded with choices).

- Ans**
- 1. market is flooded with choices
 - 2. markets is flooded with choices
 - 3. No substitution required
 - 4. market are flooded off choices

Question Type : MCQ
Question ID : 264330136514
Option 1 ID : 264330534799
Option 2 ID : 264330534800
Option 3 ID : 264330534802
Option 4 ID : 264330534801
Status : Answered
Chosen Option : 1

Comprehension:

In the following passage some of the words have been deleted. Read the passage carefully and select the correct answer for the given blank out of the four alternatives.

The study, published today in a magazine, finds that kids (1) _____ played only individual sports, like tennis or gymnastics, tended to (2) _____ more mental health difficulties. As a researcher, Hoffmann has long been interested in how sports (3) _____ the psychological health of young people, partly because studies have (4) _____ both positive and negative associations between mental health and sports (5) _____ in children and adolescents.

SubQuestion No : 21

Q.21 Select the most appropriate option to fill in the blank No. 1.

- Ans**
- 1. that
 - 2. who
 - 3. which
 - 4. whose

Question Type : MCQ
Question ID : 264330136830
Option 1 ID : 264330536014
Option 2 ID : 264330536012
Option 3 ID : 264330536013
Option 4 ID : 264330536011
Status : Answered
Chosen Option : 2

Comprehension:

In the following passage some of the words have been deleted. Read the passage carefully and select the correct answer for the given blank out of the four alternatives.

The study, published today in a magazine, finds that kids (1) _____ played only individual sports, like tennis or gymnastics, tended to (2) _____ more mental health difficulties. As a researcher, Hoffmann has long been interested in how sports (3) _____ the psychological health of young people, partly because studies have (4) _____ both positive and negative associations between mental health and sports (5) _____ in children and adolescents.

SubQuestion No : 22

Q.22 Select the most appropriate option to fill in the blank No. 2.

- Ans
- 1. absorb
 - 2. breathe
 - 3. claim
 - 4. face

Question Type : MCQ
Question ID : 264330136831
Option 1 ID : 264330536015
Option 2 ID : 264330536018
Option 3 ID : 264330536016
Option 4 ID : 264330536017
Status : Answered
Chosen Option : 4

Comprehension:

In the following passage some of the words have been deleted. Read the passage carefully and select the correct answer for the given blank out of the four alternatives.

The study, published today in a magazine, finds that kids (1) _____ played only individual sports, like tennis or gymnastics, tended to (2) _____ more mental health difficulties. As a researcher, Hoffmann has long been interested in how sports (3) _____ the psychological health of young people, partly because studies have (4) _____ both positive and negative associations between mental health and sports (5) _____ in children and adolescents.

SubQuestion No : 23

Q.23 Select the most appropriate option to fill in the blank No. 3.

- Ans
- 1. impact
 - 2. torment
 - 3. request
 - 4. thrash

Question Type : MCQ
Question ID : 264330136832
Option 1 ID : 264330536022
Option 2 ID : 264330536019
Option 3 ID : 264330536021
Option 4 ID : 264330536020
Status : Answered
Chosen Option : 1

Comprehension:

In the following passage some of the words have been deleted. Read the passage carefully and select the correct answer for the given blank out of the four alternatives.

The study, published today in a magazine, finds that kids (1) _____ played only individual sports, like tennis or gymnastics, tended to (2) _____ more mental health difficulties. As a researcher, Hoffmann has long been interested in how sports (3) _____ the psychological health of young people, partly because studies have (4) _____ both positive and negative associations between mental health and sports (5) _____ in children and adolescents.

SubQuestion No : 24

Q.24 Select the most appropriate option to fill in the blank No. 4.

- Ans
- 1. founded
 - 2. finds
 - 3. find
 - 4. found

Question Type : MCQ
Question ID : 264330136833
Option 1 ID : 264330536024
Option 2 ID : 264330536023
Option 3 ID : 264330536025
Option 4 ID : 264330536026
Status : Answered
Chosen Option : 4

Comprehension:

In the following passage some of the words have been deleted. Read the passage carefully and select the correct answer for the given blank out of the four alternatives.

The study, published today in a magazine, finds that kids (1) _____ played only individual sports, like tennis or gymnastics, tended to (2) _____ more mental health difficulties. As a researcher, Hoffmann has long been interested in how sports (3) _____ the psychological health of young people, partly because studies have (4) _____ both positive and negative associations between mental health and sports (5) _____ in children and adolescents.

SubQuestion No : 25

Q.25 Select the most appropriate option to fill in the blank No. 5.

- Ans
- 1. establishment
 - 2. remuneration
 - 3. participation
 - 4. celebration

Question Type : MCQ
Question ID : 264330136834
Option 1 ID : 264330536029
Option 2 ID : 264330536030
Option 3 ID : 264330536027
Option 4 ID : 264330536028
Status : Answered
Chosen Option : 1