



SSC MTS **SHIFT – 2 (08-05-2023)**

- ★ Latest Govt Job updates
- ★ Private Job updates
- ★ Free Mock tests available

Visit - teachingninja.in

Multi Tasking Non Technical Staff and Havaladar CBIC and CBN Examination 2022

Roll Number	
Candidate Name	
Venue Name	
Exam Date	08/05/2023
Exam Time	12:00 PM - 2:00 PM
Subject	MTS Non Tech Havaladar CBIC and CBN Examination 2022

Section : Numerical and Mathematical Ability

Q.1 Cost price of an article is Rs.350. If the profit percentage is 35 percent, then what is the value of profit?

- Ans
- 1. Rs.112.8
 - 2. Rs.122.5
 - 3. Rs.145.6
 - 4. Rs.135.6

Question Type : MCQ
Question ID : 264330135049
Option 1 ID : 264330529133
Option 2 ID : 264330529131
Option 3 ID : 264330529132
Option 4 ID : 264330529134
Status : Answered
Chosen Option : 2

Q.2 What will be the simple interest on a principal of Rs. 2400 for 6 years at the rate of 8 percent per annum?

- Ans
- 1. Rs. 1082
 - 2. Rs. 972
 - 3. Rs. 1152
 - 4. Rs. 1232

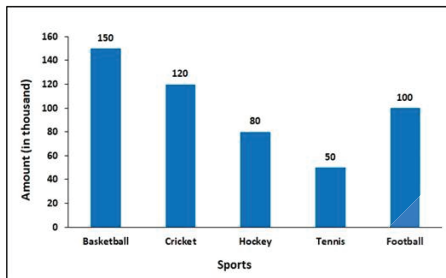
Question Type : MCQ
Question ID : 264330137884
Option 1 ID : 264330540144
Option 2 ID : 264330540146
Option 3 ID : 264330540143
Option 4 ID : 264330540145
Status : Answered
Chosen Option : 3

Q.3 What is the compounded ratio of (2 : 5), (5 : 11) and (33 : 8)?

- Ans
- 1. 33 : 5
 - 2. 2 : 11
 - 3. 2 : 5
 - 4. 3 : 4

Question Type : MCQ
Question ID : 264330133589
Option 1 ID : 264330523382
Option 2 ID : 264330523381
Option 3 ID : 264330523380
Option 4 ID : 264330523379
Status : Answered
Chosen Option : 1

Q.4 The following bar graph shows the amount of money spent on various sports by a school administration in a particular year. The amount spent on Hockey and Football is what percent of the amount spent on Basketball and Tennis?



- Ans
- 1. 90%
 - 2. 20%
 - 3. 50%
 - 4. 70%

Question Type : MCQ
Question ID : 264330133597
Option 1 ID : 264330523414
Option 2 ID : 264330523411
Option 3 ID : 264330523412
Option 4 ID : 264330523413
Status : Answered
Chosen Option : 1

Q.5 A car travels with the speed of 40 km/hr for first hour and 60 km/hr for next hour. What will be the average speed of the car?

- Ans**
- 1. 60 km/hr
 - 2. 45 km/hr
 - 3. 50 km/hr
 - 4. 40 km/hr

Question Type : **MCQ**
Question ID : **264330141042**
Option 1 ID : **264330552517**
Option 2 ID : **264330552518**
Option 3 ID : **264330552516**
Option 4 ID : **264330552515**
Status : **Answered**
Chosen Option : **3**

Q.6 What is the value of $1.65 \times 1.65 \times 1.65 + 0.35 \times 0.35 \times 0.35 + 3.465$?

- Ans**
- 1. 7.5
 - 2. 4
 - 3. 5.5
 - 4. 8

Question Type : **MCQ**
Question ID : **264330139093**
Option 1 ID : **264330544981**
Option 2 ID : **264330544979**
Option 3 ID : **264330544982**
Option 4 ID : **264330544980**
Status : **Answered**
Chosen Option : **4**

Q.7 Suresh alone can do a work in 10 days working 1 hour a day. Shalu alone can do the same work in 2 days working 5 hours a day. How many hours do they need to work together in a day to complete the same work in 10 days?

- Ans**
- 1. 0.5 hours
 - 2. 1.5 hours
 - 3. 1 hour
 - 4. 2 hours

Question Type : **MCQ**
Question ID : **264330139077**
Option 1 ID : **264330544917**
Option 2 ID : **264330544915**
Option 3 ID : **264330544918**
Option 4 ID : **264330544916**
Status : **Answered**
Chosen Option : **2**

Q.8 Rani can do a work alone in 10 days, Priya can do the same work alone in 12 days and Guddu can do the same work alone in 15 days. If they do that work together and they are paid Rs. 6000, then what is the share of Priya?

- Ans**
- 1. Rs.1800
 - 2. Rs.1600
 - 3. Rs.2000
 - 4. Rs.2500

Question Type : **MCQ**
Question ID : 264330137174
Option 1 ID : 264330537341
Option 2 ID : 264330537342
Option 3 ID : 264330537340
Option 4 ID : 264330537339
Status : **Answered**
Chosen Option : 1

Q.9 If 540 kg of grass would feed 100 cows for 9 days, then for how many days would 900 kg of grass feed 50 cows?

- Ans**
- 1. 30 days
 - 2. 10 days
 - 3. 50 days
 - 4. 20 days

Question Type : **MCQ**
Question ID : 264330133590
Option 1 ID : 264330523384
Option 2 ID : 264330523385
Option 3 ID : 264330523383
Option 4 ID : 264330523386
Status : **Answered**
Chosen Option : 3

Q.10 The average of five consecutive numbers is 53. What is the biggest of these numbers?

- Ans**
- 1. 53
 - 2. 54
 - 3. 52
 - 4. 55

Question Type : **MCQ**
Question ID : 264330133583
Option 1 ID : 264330523356
Option 2 ID : 264330523357
Option 3 ID : 264330523355
Option 4 ID : 264330523358
Status : **Answered**
Chosen Option : 4

Q.11 840 is what percentage of 1500?

- Ans
- 1. 64 percent
 - 2. 56 percent
 - 3. 62 percent
 - 4. 57 percent

Question Type : MCQ
Question ID : 264330137879
Option 1 ID : 264330540124
Option 2 ID : 264330540126
Option 3 ID : 264330540125
Option 4 ID : 264330540123
Status : Answered
Chosen Option : 2

Q.12 The value of $\frac{1}{5}$ of 30 – $(\frac{1}{4})$ of 20 + 1 is:

- Ans
- 1. 6
 - 2. 2
 - 3. 12
 - 4. 0

Question Type : MCQ
Question ID : 264330133581
Option 1 ID : 264330523348
Option 2 ID : 264330523350
Option 3 ID : 264330523347
Option 4 ID : 264330523349
Status : Answered
Chosen Option : 4

Q.13 Find $\frac{1}{21}$ th of the volume of a hemisphere whose radius is 4.2 m.

- Ans
- 1. 6.6 m^3
 - 2. 7.3 m^3
 - 3. 8.2 m^3
 - 4. 7.1 m^3

Question Type : MCQ
Question ID : 264330135410
Option 1 ID : 264330530547
Option 2 ID : 264330530548
Option 3 ID : 264330530549
Option 4 ID : 264330530550
Status : Answered
Chosen Option : 4

Q.14 The product of two co-prime numbers is 483. Find the Least Common Multiple of both numbers.

- Ans
- 1. 1
 - 2. 483
 - 3. 23
 - 4. 21

Question Type : MCQ
Question ID : 264330138370
Option 1 ID : 264330542088
Option 2 ID : 264330542087
Option 3 ID : 264330542090
Option 4 ID : 264330542089
Status : Answered
Chosen Option : 1

Q.15 A dishonest shopkeeper sells sugar at a rate of Rs.45 per kg. The cost price of the sugar is Rs.40 per kg. Even after doing this, he tries to increase his profit by removing 100 gm from each packet of 1 kg. What is the gain percent of the shopkeeper?

- Ans
- 1. 35%
 - 2. 25%
 - 3. 20%
 - 4. 30%

Question Type : MCQ
Question ID : 264330133587
Option 1 ID : 264330523374
Option 2 ID : 264330523372
Option 3 ID : 264330523371
Option 4 ID : 264330523373
Status : Answered
Chosen Option : 2



Q.16 The table given below shows the number of students in 6 different schools.

Schools	Students
A	120
B	60
C	70
D	80
E	30
F	50

The number of students in school A is what percentage of number of students in school F?

- Ans**
- 1. 120 percent
 - 2. 41.66 percent
 - 3. 200 percent
 - 4. 240 percent

Question Type : MCQ
Question ID : 264330139094
Option 1 ID : 264330544985
Option 2 ID : 264330544986
Option 3 ID : 264330544983
Option 4 ID : 264330544984
Status : Answered
Chosen Option : 4

Q.17 A single discount equivalent to the series of discounts 15%, 10% and 5% is equal to:

- Ans**
- 1. 31.5%
 - 2. 26.5%
 - 3. 32%
 - 4. 27.325%

Question Type : MCQ
Question ID : 264330133588
Option 1 ID : 264330523375
Option 2 ID : 264330523378
Option 3 ID : 264330523376
Option 4 ID : 264330523377
Status : Answered
Chosen Option : 4

Q.18 Kabir climb up a hill at a speed of 3 miles per hour and comes down at 5 miles per hour. If total time taken for the total journey is 10 hours, then what was the distance between hill top and foothills?

- Ans**
- 1. 3.75 miles
 - 2. 18.75 miles
 - 3. 37.5 miles
 - 4. 20.5 miles

Question Type : **MCQ**
Question ID : **264330133593**
Option 1 ID : **264330523397**
Option 2 ID : **264330523396**
Option 3 ID : **264330523395**
Option 4 ID : **264330523398**
Status : **Answered**
Chosen Option : **2**

Q.19 Sohan makes four trips of equal distances. His speed on first trip was 240 km/hr and in each subsequent trip his speed was half of the previous trip. What is the average speed of Sohan in these four trips?

- Ans**
- 1. 64 km/hr
 - 2. 60 km/hr
 - 3. 50 km/hr
 - 4. 52 km/hr

Question Type : **MCQ**
Question ID : **264330137134**
Option 1 ID : **264330537180**
Option 2 ID : **264330537179**
Option 3 ID : **264330537182**
Option 4 ID : **264330537181**
Status : **Answered**
Chosen Option : **1**

Q.20 Two cubes each of edge 9 cm are joined to form a single cuboid. What is the total surface area of the cuboid formed?

- Ans**
- 1. 810 cm^2
 - 2. 775 cm^2
 - 3. 990 cm^2
 - 4. 1024 cm^2

Question Type : **MCQ**
Question ID : **264330137189**
Option 1 ID : **264330537401**
Option 2 ID : **264330537399**
Option 3 ID : **264330537402**
Option 4 ID : **264330537400**
Status : **Answered**
Chosen Option : **1**

Section : Reasoning Ability and Problem Solving

Q.1 Words given on the left side of (::) are related with each other by some Logic/Rule/Relation. Select the missing word/word pair on the right side of (::) from the given alternatives based on the same Logic/Rule/Relation.

Watt : Power :: Ohm : ?

- Ans**
- 1. Force
 - 2. Volume
 - 3. Current
 - 4. Electrical Resistance

Question Type : **MCQ**
Question ID : **264330137087**
Option 1 ID : **264330536994**
Option 2 ID : **264330536993**
Option 3 ID : **264330536992**
Option 4 ID : **264330536991**
Status : **Answered**
Chosen Option : **4**

Q.2 Five men M, N, O, P, and Q are sitting in a row facing north. M is sitting at one end and O is on the other end. Q sits to the immediate left of M and to the immediate right of P. Who sits third to the right of O?

- Ans**
- 1. P
 - 2. Q
 - 3. M
 - 4. N

Question Type : **MCQ**
Question ID : **264330133326**
Option 1 ID : **264330522341**
Option 2 ID : **264330522342**
Option 3 ID : **264330522339**
Option 4 ID : **264330522340**
Status : **Answered**
Chosen Option : **2**



Q.3 Select the option figure in which the given figure is embedded. (rotation is NOT allowed)



Ans

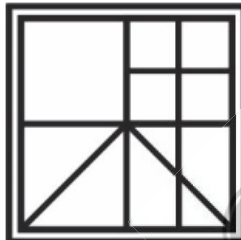
✗ 1.



✗ 2.



✓ 3.



✗ 4.



Question Type : MCQ

Question ID : 264330138868

Option 1 ID : 264330544081

Option 2 ID : 264330544082

Option 3 ID : 264330544080

Option 4 ID : 264330544079

Status : Answered

Chosen Option : 2

Q.4 Two Statements are given followed by two conclusions numbered I and II. Assuming the statements to be true, even if they seem to be at variance with commonly known facts, decide which of the conclusions logically follow(s) from the statements.

Statements:

All tables are strong.

No strong is weak.

Conclusions:

I. No tables are weak.

II. Some weak are tables.

- Ans**
- 1. Only conclusion II follows
 - 2. Both conclusions I and II follow
 - 3. Neither conclusion I nor II follows
 - 4. Only conclusion I follows

Question Type : MCQ

Question ID : 264330133330

Option 1 ID : 264330522356

Option 2 ID : 264330522357

Option 3 ID : 264330522358

Option 4 ID : 264330522355

Status : Answered

Chosen Option : 4

Q.5 In a certain code language, 'HEG' is coded as '840', 'JFD' is coded as '720'. What is the code for 'JDK' in that code language?

- Ans**
- 1. 1380
 - 2. 1320
 - 3. 1400
 - 4. 1280

Question Type : MCQ

Question ID : 264330137093

Option 1 ID : 264330537016

Option 2 ID : 264330537018

Option 3 ID : 264330537015

Option 4 ID : 264330537017

Status : Answered

Chosen Option : 2



Q.6 Which of the following numbers will replace the question mark (?) in the given series?
68, 62, 50, 32, 8, -22, ?

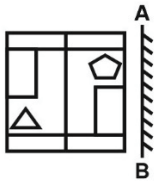
- Ans**
- ✓ 1. -58
 - ✗ 2. -53
 - ✗ 3. -75
 - ✗ 4. 58

Question Type : **MCQ**
Question ID : **264330137799**
Option 1 ID : **264330539803**
Option 2 ID : **264330539806**
Option 3 ID : **264330539804**
Option 4 ID : **264330539805**
Status : **Answered**
Chosen Option : **1**



Teachingninja.in

Q.7 If a mirror is placed on the line AB, then out of the option figures which figure will be the right image of the question figure?



Ans

✗ 1.



✓ 2.



✗ 3.



✗ 4.



Question Type : MCQ

Question ID : 264330138869

Option 1 ID : 264330544086

Option 2 ID : 264330544085

Option 3 ID : 264330544084

Option 4 ID : 264330544083

Status : Answered

Chosen Option : 2

Q.8 Two Statements are given followed by two conclusions numbered I and II. Assuming the statements to be true, even if they seem to be at variance with commonly known facts, decide which of the conclusions logically follow(s) from the statements.

Statements:

All bottles are black.

Some black are white.

Conclusions:

I. All blacks are bottles.

II. Some blacks are not white.

- Ans**
- 1. Both conclusions I and II follow
 - 2. Only conclusion II follows
 - 3. Neither conclusion I nor II follows
 - 4. Only conclusion I follows

Question Type : MCQ

Question ID : 264330133329

Option 1 ID : 264330522353

Option 2 ID : 264330522352

Option 3 ID : 264330522354

Option 4 ID : 264330522351

Status : Answered

Chosen Option : 3

Q.9 Select the option that is related to the third letter cluster in the same way as the second letter cluster is related to the first letter cluster.

MNO : RST :: GHI : ?

- Ans**
- 1. LNO
 - 2. LMN
 - 3. LOM
 - 4. MNL

Question Type : MCQ

Question ID : 264330133321

Option 1 ID : 264330522322

Option 2 ID : 264330522319

Option 3 ID : 264330522321

Option 4 ID : 264330522320

Status : Answered

Chosen Option : 2



Q.10 Which of the following numbers will replace the question mark (?) in the given series?

55, 42, 31, 22, 15, 10,?

- Ans
- 1. 6
 - 2. 3
 - 3. 5
 - 4. 7

Question Type : MCQ
Question ID : 264330133332
Option 1 ID : 264330522363
Option 2 ID : 264330522365
Option 3 ID : 264330522366
Option 4 ID : 264330522364
Status : Answered
Chosen Option : 4

Q.11 In a certain code language, 'SNOW' is coded as '21, 16, 17, 25', 'RIDE' is coded as '20, 11, 6, 7'. What is the code for 'TAPE' in that code language?

- Ans
- 1. 22, 3, 17, 7
 - 2. 22, 3, 18, 7
 - 3. 22, 3, 18, 6
 - 4. 20, 3, 18, 7

Question Type : MCQ
Question ID : 264330138524
Option 1 ID : 264330542703
Option 2 ID : 264330542704
Option 3 ID : 264330542706
Option 4 ID : 264330542705
Status : Answered
Chosen Option : 2

Q.12 Study the given pattern carefully and select the number that can replace the question mark (?) in it.

First row- 80, 40, 160

Second row- 30, 15, 60

Third row- 24, 12, ?

- Ans
- 1. 38
 - 2. 65
 - 3. 54
 - 4. 48

Question Type : MCQ
Question ID : 264330133334
Option 1 ID : 264330522371
Option 2 ID : 264330522373
Option 3 ID : 264330522374
Option 4 ID : 264330522372
Status : Answered
Chosen Option : 4

Q.13 Which of the following letter will replace the question mark (?) in the given series?

d, f, h, j, l, n, p, r, ?

- Ans
- 1. s
 - 2. u
 - 3. t
 - 4. v

Question Type : MCQ
Question ID : 264330133320
Option 1 ID : 264330522315
Option 2 ID : 264330522317
Option 3 ID : 264330522316
Option 4 ID : 264330522318
Status : Answered
Chosen Option : 3

Q.14 Select the option that is related to the third word in the same way as the second word is related to the first word.

Oology : Eggs :: Mycology : ?

- Ans
- 1. Virus
 - 2. Protozoa
 - 3. Bacteria
 - 4. Fungi

Question Type : MCQ
Question ID : 264330133322
Option 1 ID : 264330522325
Option 2 ID : 264330522324
Option 3 ID : 264330522323
Option 4 ID : 264330522326
Status : Answered
Chosen Option : 4

Q.15 In a certain code language, 'READER' is coded as 'UHGDHU'. What is the code for 'SENIOR' in that code language?

- Ans
- 1. URLQIV
 - 2. URLQHV
 - 3. URLQHW
 - 4. URMQHV

Question Type : MCQ
Question ID : 264330137371
Option 1 ID : 264330538113
Option 2 ID : 264330538114
Option 3 ID : 264330538111
Option 4 ID : 264330538112
Status : Answered
Chosen Option : 3

Q.16 Select the option that is related to the third number in the same way as the second number is related to the first number.

435 : 87 :: 285 : ?

Ans 1. 58

2. 57

3. 59

4. 56

Question Type : **MCQ**

Question ID : **264330137801**

Option 1 ID : **264330539811**

Option 2 ID : **264330539812**

Option 3 ID : **264330539814**

Option 4 ID : **264330539813**

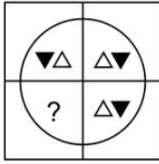
Status : **Answered**

Chosen Option : **2**



Teachingninja.in

Q.17 Select the option figure that will replace the question mark (?) in the figure given below to complete the pattern.
(rotation is not allowed)



Ans

✗ 1.



✗ 2.



✗ 3.



✓ 4.



Teachingninja.in

Question Type : MCQ

Question ID : 264330133339

Option 1 ID : 264330522392

Option 2 ID : 264330522393

Option 3 ID : 264330522391

Option 4 ID : 264330522394

Status : Answered

Chosen Option : 4

Q.18 Seven friends Haroon, Iman, Jason, Kirti, Lisa, Mohan, and Niti having different heights, are standing in descending order of their heights. The tallest person stands at the front and the shortest person stands at the last of the column. Haroon stands immediately behind Lisa, who stands immediately behind Kirti. There are exactly two people standing in between Mohan and Niti. Iman is standing in the second position from the front. Mohan is not the tallest. Who is standing at the front of the column?

- Ans**
- 1. Mohan
 - 2. Kirti
 - 3. Niti
 - 4. Jason

Question Type : MCQ
Question ID : 264330133328
Option 1 ID : 264330522347
Option 2 ID : 264330522348
Option 3 ID : 264330522349
Option 4 ID : 264330522350
Status : Answered
Chosen Option : 3

Q.19 Words given on the left side of (::) are related with each other by some Logic/Rule/Relation. Select the missing word/word pair on the right side of (::) from the given alternatives based on the same Logic/Rule/Relation.

Gujarat : Gandhinagar :: Rajasthan : ?

- Ans**
- 1. Jaipur
 - 2. Jodhpur
 - 3. Chandigarh
 - 4. Udaipur

Question Type : MCQ
Question ID : 264330138478
Option 1 ID : 264330542519
Option 2 ID : 264330542521
Option 3 ID : 264330542522
Option 4 ID : 264330542520
Status : Answered
Chosen Option : 1

Q.20 Six friends Pawan, Kanta, Rishab, Subham, Mayank and Vikram are sitting in a circle facing the centre. Pawan is to the immediate left of Vikram. Rishab is 4th to the right of Pawan. Only Mayank sits between Pawan and Rishab. Subham does not sit adjacent to Vikram. Who sits to the immediate right of Subham?

- Ans**
- 1. Mayank
 - 2. Kanta
 - 3. Rishab
 - 4. Pawan

Question Type : **MCQ**
Question ID : **264330133327**
Option 1 ID : **264330522346**
Option 2 ID : **264330522344**
Option 3 ID : **264330522343**
Option 4 ID : **264330522345**
Status : **Answered**
Chosen Option : **3**

Section : General Awareness

Q.1 The product method which is used to calculate the aggregate annual value of goods and services produced is also called _____.

- Ans**
- 1. income method
 - 2. depreciation method
 - 3. expenditure method
 - 4. value added method

Question Type : **MCQ**
Question ID : **264330137397**
Option 1 ID : **264330538218**
Option 2 ID : **264330538215**
Option 3 ID : **264330538216**
Option 4 ID : **264330538217**
Status : **Answered**
Chosen Option : **4**

Q.2 “Ambubachi Mela” is held in which place?

- Ans**
- 1. Pune
 - 2. Patna
 - 3. Lucknow
 - 4. Guwahati

Question Type : **MCQ**
Question ID : **264330138922**
Option 1 ID : **264330544298**
Option 2 ID : **264330544296**
Option 3 ID : **264330544297**
Option 4 ID : **264330544295**
Status : **Answered**
Chosen Option : **4**

Q.3 Stand Up India scheme aims at supporting entrepreneurship to _____ community of India.

- Ans
- 1. Business person
 - 2. Scheduled caste
 - 3. Construction workers
 - 4. Below Poverty Line

Question Type : MCQ
Question ID : 264330133648
Option 1 ID : 264330523618
Option 2 ID : 264330523615
Option 3 ID : 264330523617
Option 4 ID : 264330523616
Status : Not Answered
Chosen Option :-

Q.4 How many field players are in a football team?

- Ans
- 1. 12
 - 2. 13
 - 3. 11
 - 4. 14

Question Type : MCQ
Question ID : 264330137917
Option 1 ID : 264330540276
Option 2 ID : 264330540277
Option 3 ID : 264330540275
Option 4 ID : 264330540278
Status : Answered
Chosen Option : 2

Q.5 The Guru Kelucharan Mohapatra Award has been instituted in the year 1995. Guru Kelucharan Mohapatra was recognized for which dance form?

- Ans
- 1. Manipuri
 - 2. Kathak
 - 3. Odissi
 - 4. Chhau

Question Type : MCQ
Question ID : 264330137394
Option 1 ID : 264330538204
Option 2 ID : 264330538205
Option 3 ID : 264330538203
Option 4 ID : 264330538206
Status : Answered
Chosen Option : 3

Q.6 As of 2022, which Indian musician has the most number of Oscar awards?

- Ans
- 1. Lata Mangeshkar
 - 2. Gulzar
 - 3. A R Rahman
 - 4. Asha Bhosle

Question Type : MCQ
Question ID : 264330133666
Option 1 ID : 264330523689
Option 2 ID : 264330523687
Option 3 ID : 264330523690
Option 4 ID : 264330523688
Status : Answered
Chosen Option : 3

Q.7 Which is the largest continent in the world?

- Ans
- 1. Asia
 - 2. Africa
 - 3. South America
 - 4. North America

Question Type : MCQ
Question ID : 264330137902
Option 1 ID : 264330540218
Option 2 ID : 264330540217
Option 3 ID : 264330540216
Option 4 ID : 264330540215
Status : Answered
Chosen Option : 1

Q.8 Practice of "sati" was banned in India in _____.

- Ans
- 1. 1847
 - 2. 1819
 - 3. 1857
 - 4. 1829

Question Type : MCQ
Question ID : 264330138944
Option 1 ID : 264330544385
Option 2 ID : 264330544383
Option 3 ID : 264330544386
Option 4 ID : 264330544384
Status : Answered
Chosen Option : 4

Q.9 'Freedom in Exile' is the autobiographical book of _____.

- Ans
- 1. Dalai Lama
 - 2. Mahatma Gandhi
 - 3. Jawaharlal Nehru
 - 4. J.B. Kriplani

Question Type : MCQ
Question ID : 264330137392
Option 1 ID : 264330538195
Option 2 ID : 264330538198
Option 3 ID : 264330538196
Option 4 ID : 264330538197
Status : Answered
Chosen Option : 1

Q.10 Bhagat singh and B.K. Dutt threw bomb in the central Legislative Assembly on _____.

- Ans
- 1. 8 April 1930
 - 2. 10 April 1930
 - 3. 10 April 1929
 - 4. 8 April 1929

Question Type : MCQ
Question ID : 264330138945
Option 1 ID : 264330544388
Option 2 ID : 264330544390
Option 3 ID : 264330544389
Option 4 ID : 264330544387
Status : Answered
Chosen Option : 4

Q.11 Which of the following is an artificial sweetener?

- Ans
- 1. Glucose
 - 2. Lactamase
 - 3. Sodium benzoate
 - 4. Saccharin

Question Type : MCQ
Question ID : 264330137901
Option 1 ID : 264330540211
Option 2 ID : 264330540212
Option 3 ID : 264330540213
Option 4 ID : 264330540214
Status : Answered
Chosen Option : 4

Q.12 Udaipur was founded by _____ after the fall of Chittor to Akbar in 1568.

- Ans
- 1. Man singh
 - 2. Raja Bharmal
 - 3. Rana Udai Singh
 - 4. Sawai Jai Singh

Question Type : MCQ
Question ID : 264330138923
Option 1 ID : 264330544301
Option 2 ID : 264330544302
Option 3 ID : 264330544300
Option 4 ID : 264330544299
Status : Answered
Chosen Option : 3

Q.13 Which of the following material is a conductor of electricity?

- Ans
- 1. Glass
 - 2. Mica
 - 3. Silver
 - 4. Ebonite

Question Type : MCQ
Question ID : 264330137899
Option 1 ID : 264330540203
Option 2 ID : 264330540206
Option 3 ID : 264330540205
Option 4 ID : 264330540204
Status : Answered
Chosen Option : 3

Q.14 Which among the following dance forms of India is associated with Rajasthan?

- Ans
- 1. Odissi
 - 2. Bharatanatyam
 - 3. Kalbelia
 - 4. Kathakali

Question Type : MCQ
Question ID : 264330133650
Option 1 ID : 264330523624
Option 2 ID : 264330523625
Option 3 ID : 264330523626
Option 4 ID : 264330523623
Status : Answered
Chosen Option : 3

Q.15 The Mongols under Genghis Khan invaded Transoxiana in north-east Iran in _____.

- Ans
- 1. 1219
 - 2. 1212
 - 3. 1230
 - 4. 1227

Question Type : MCQ
Question ID : 264330137908
Option 1 ID : 264330540239
Option 2 ID : 264330540242
Option 3 ID : 264330540241
Option 4 ID : 264330540240
Status : Not Answered
Chosen Option : -

Q.16 According to 2011 Census, among the following which state has the lowest sex ratio?

- Ans
- 1. Haryana
 - 2. Jharkhand
 - 3. Bihar
 - 4. Sikkim

Question Type : MCQ
Question ID : 264330137072
Option 1 ID : 264330536932
Option 2 ID : 264330536934
Option 3 ID : 264330536933
Option 4 ID : 264330536931
Status : Answered
Chosen Option : 1

Q.17 Which among the following rivers originates in Maharashtra?

- Ans
- 1. Yamuna
 - 2. Narmada
 - 3. Tapi
 - 4. Godavari

Question Type : MCQ
Question ID : 264330133658
Option 1 ID : 264330523655
Option 2 ID : 264330523657
Option 3 ID : 264330523656
Option 4 ID : 264330523658
Status : Answered
Chosen Option : 3

Q.18 Which among the following straits divide Sri Lanka from India?

- Ans
- 1. Yucatan Strait
 - 2. Sunda Strait
 - 3. Malacca Strait
 - 4. Palk Strait

Question Type : MCQ
Question ID : 264330137073
Option 1 ID : 264330536937
Option 2 ID : 264330536938
Option 3 ID : 264330536938
Option 4 ID : 264330536935
Status : Answered
Chosen Option : 4

Q.19 Which among the following organs in human body, is most affected by Pneumonia disease?

- Ans
- 1. Urinary bladder
 - 2. Heart
 - 3. Kidneys
 - 4. Lungs

Question Type : MCQ
Question ID : 264330133654
Option 1 ID : 264330523641
Option 2 ID : 264330523639
Option 3 ID : 264330523642
Option 4 ID : 264330523640
Status : Answered
Chosen Option : 4

Q.20 Which article of the Indian Constitution provides freedom to manage its own affairs in matters of religion?

- Ans
- 1. Article 26
 - 2. Article 210
 - 3. Article 5
 - 4. Article 30

Question Type : MCQ
Question ID : 264330133668
Option 1 ID : 264330523696
Option 2 ID : 264330523698
Option 3 ID : 264330523695
Option 4 ID : 264330523697
Status : Answered
Chosen Option : 1

Q.21 The most important ruler of the Satavahanas was _____.

- Ans
- 1. Simuka
 - 2. Gautamiputra Shri Satakarni
 - 3. Vasisthiputra Pulamavi
 - 4. Pulumavi IV

Question Type : MCQ
Question ID : 264330138942
Option 1 ID : 264330544377
Option 2 ID : 264330544375
Option 3 ID : 264330544376
Option 4 ID : 264330544378
Status : Answered
Chosen Option : 2

Q.22 At least how old must be an Indian citizen to be a member of Rajya Sabha?

- Ans
- 1. 30 years
 - 2. 20 years
 - 3. 35 years
 - 4. 25 years

Question Type : MCQ
Question ID : 264330133669
Option 1 ID : 264330523701
Option 2 ID : 264330523699
Option 3 ID : 264330523702
Option 4 ID : 264330523700
Status : Answered
Chosen Option : 3

Q.23 Which famous Indian sportsman is nicknamed as 'Captain Cool'?

- Ans
- 1. Milkha Singh
 - 2. Major Dhyan Chand
 - 3. Rohit Sharma
 - 4. Mahendra Singh Dhoni

Question Type : MCQ
Question ID : 264330133670
Option 1 ID : 264330523705
Option 2 ID : 264330523706
Option 3 ID : 264330523704
Option 4 ID : 264330523703
Status : Answered
Chosen Option : 4

Q.24 Which of the following is termed as “sericulture”?

- Ans
- 1. Breeding of fish
 - 2. Commercial rearing of silk worms
 - 3. Growing of fruits
 - 4. Cultivation of grapes

Question Type : MCQ
Question ID : 264330137404
Option 1 ID : 264330538245
Option 2 ID : 264330538244
Option 3 ID : 264330538246
Option 4 ID : 264330538243
Status : Answered
Chosen Option : 2

Q.25 Who has the power to interpret the constitution of India?

- Ans
- 1. Both Supreme court and High courts
 - 2. Supreme court only
 - 3. High courts only
 - 4. President of India

Question Type : MCQ
Question ID : 264330138932
Option 1 ID : 264330544337
Option 2 ID : 264330544335
Option 3 ID : 264330544336
Option 4 ID : 264330544338
Status : Answered
Chosen Option : 1

Section : English Language and Comprehension

Q.1 Fill in the blank with the most appropriate option.

That remark _____ a stir.

- Ans
- 1. built
 - 2. created
 - 3. constructed
 - 4. produced

Question Type : MCQ
Question ID : 264330141198
Option 1 ID : 264330553129
Option 2 ID : 264330553127
Option 3 ID : 264330553128
Option 4 ID : 264330553130
Status : Not Answered
Chosen Option : -

Q.2 Choose the word that is opposite in meaning to the given word.

Abstract

- Ans
- 1. Transcend
 - 2. Romantic
 - 3. Concrete
 - 4. Utopian

Question Type : MCQ
Question ID : 264330136891
Option 1 ID : 264330536247
Option 2 ID : 264330536248
Option 3 ID : 264330536249
Option 4 ID : 264330536250
Status : Answered
Chosen Option : 3

Q.3 Select the most appropriate word for the given group of words.

Fear of heights

- Ans
- 1. Hydrophobia
 - 2. Acrophobia
 - 3. Vaccinophobia
 - 4. Bathophobia

Question Type : MCQ
Question ID : 264330136253
Option 1 ID : 264330533796
Option 2 ID : 264330533797
Option 3 ID : 264330533798
Option 4 ID : 264330533795
Status : Answered
Chosen Option : 2

Q.4 Improve the underlined part of the sentence. Choose 'No improvement' as an answer if the sentence is grammatically correct.
When my calculations are wrong, I have to pore over the spreadsheet to find the error.

- Ans
- 1. to poring over
 - 2. to pore by
 - 3. to pored over
 - 4. No improvement

Question Type : MCQ
Question ID : 264330134299
Option 1 ID : 264330526191
Option 2 ID : 264330526193
Option 3 ID : 264330526192
Option 4 ID : 264330526194
Status : Answered
Chosen Option : 4

Q.5 Identify the segment that contains a grammatical error. If there is no error, select 'No error'
We talked about writing a will, but it / was one of the best thing you never get / around to doing.

- Ans
- 1. We talked about writing a will, but it
 - 2. was one of the best thing you never get
 - 3. No Error
 - 4. around to doing.

Question Type : MCQ
Question ID : 264330135768
Option 1 ID : 264330531951
Option 2 ID : 264330531952
Option 3 ID : 264330531954
Option 4 ID : 264330531953
Status : Answered
Chosen Option : 4

Q.6 A sentence has been given with a blank to be filled with an appropriate option. Choose the correct alternative.
Ram is _____ like the kings before him.

- Ans
- 1. no
 - 2. not
 - 3. nor
 - 4. none

Question Type : MCQ
Question ID : 264330134300
Option 1 ID : 264330526198
Option 2 ID : 264330526195
Option 3 ID : 264330526197
Option 4 ID : 264330526196
Status : Answered
Chosen Option : 2

Q.7 Identify the segment that contains a grammatical error. If there is no error, select 'No error'
If Tom was here, / he could have / solved the issue.

- Ans
- 1. he could have
 - 2. If Tom was here,
 - 3. solved the issue.
 - 4. No Error

Question Type : MCQ
Question ID : 264330135767
Option 1 ID : 264330531948
Option 2 ID : 264330531947
Option 3 ID : 264330531949
Option 4 ID : 264330531950
Status : Answered
Chosen Option : 1

Q.8 Choose the word that can substitute the given group of words.
A person who easily believes without demanding proof

- Ans
- 1. Cosmopolitan
 - 2. Wary
 - 3. Credulous
 - 4. Streetwise

Question Type : MCQ
Question ID : 264330134309
Option 1 ID : 264330526228
Option 2 ID : 264330526229
Option 3 ID : 264330526227
Option 4 ID : 264330526230
Status : Answered
Chosen Option : 3

Q.9 Choose the sentence with no spelling error.

- Ans
- 1. A few exmples can illustrate this.
 - 2. A few examples can illustrrate this.
 - 3. A few examples can illustrate this.
 - 4. A few examples can ilustrate this.

Question Type : MCQ
Question ID : 264330136896
Option 1 ID : 264330536267
Option 2 ID : 264330536270
Option 3 ID : 264330536268
Option 4 ID : 264330536269
Status : Answered
Chosen Option : 3

Q.10 Select the most appropriate option to fill in the blank.
To _____ your self-worth, write down some things that are positive about yourself.

- Ans
- 1. overlook
 - 2. repudiate
 - 3. sanctify
 - 4. affirm

Question Type : MCQ
Question ID : 264330134319
Option 1 ID : 264330526270
Option 2 ID : 264330526267
Option 3 ID : 264330526268
Option 4 ID : 264330526269
Status : Answered
Chosen Option : 4

Q.11 Find the part of the given sentence that has an error in it. If there is no error, choose 'No error'.

Shivam is more cleverer than any other boy in the office.

Ans ✓ 1. Shivam is more cleverer

✗ 2. than any other boy

✗ 3. in the office.

✗ 4. No error

Question Type : MCQ

Question ID : 264330134296

Option 1 ID : 264330526179

Option 2 ID : 264330526180

Option 3 ID : 264330526181

Option 4 ID : 264330526182

Status : Answered

Chosen Option : 1

Q.12 Select the most appropriate option to substitute the bracketed segment in the given sentence. If there is no need to substitute it, select 'no substitution required'.

(Democrats control neither Congress and neither the White House, but) they are doing their best to control the judicial processes.

Ans ✗ 1.

Democrats control neither Congress or the White House, but

✗ 2.

Democrat controls neither Congress and nor the White House, though

✗ 3. No substitution required

✓ 4.

Democrats control neither Congress nor the White House, but

Question Type : MCQ

Question ID : 264330135771

Option 1 ID : 264330531963

Option 2 ID : 264330531965

Option 3 ID : 264330531966

Option 4 ID : 264330531964

Status : Answered

Chosen Option : 4



Q.13 Select the most appropriate option to fill in the blank.

A national holiday _____ on the same day as my birthday.

- Ans
- 1. flows
 - 2. false
 - 3. fouls
 - 4. falls

Question Type : MCQ
Question ID : 264330136897
Option 1 ID : 264330536272
Option 2 ID : 264330536273
Option 3 ID : 264330536274
Option 4 ID : 264330536271
Status : Answered
Chosen Option : 4

Q.14 Select the appropriate antonym for the underlined word.
The pillar of light has faded.

- Ans
- 1. painted
 - 2. grown
 - 3. vanished
 - 4. melted

Question Type : MCQ
Question ID : 264330134313
Option 1 ID : 264330526245
Option 2 ID : 264330526243
Option 3 ID : 264330526244
Option 4 ID : 264330526246
Status : Answered
Chosen Option : 1

Q.15 Choose the word that means the same as the given word.

Jaded

- Ans
- 1. Beguiled
 - 2. Fatigued
 - 3. Unwearied
 - 4. Weariless

Question Type : MCQ
Question ID : 264330141164
Option 1 ID : 264330553000
Option 2 ID : 264330553002
Option 3 ID : 264330553001
Option 4 ID : 264330552999
Status : Not Answered
Chosen Option : -

Q.16 Choose the incorrectly spelt word.

- Ans
- 1. Blast
 - 2. Toast
 - 3. Caste
 - 4. Jutsice

Question Type : MCQ
Question ID : 264330134316
Option 1 ID : 264330526258
Option 2 ID : 264330526257
Option 3 ID : 264330526255
Option 4 ID : 264330526256
Status : Answered
Chosen Option : 4

Q.17 Improve the underlined part of the sentence. Choose 'No improvement' as an answer if the sentence is grammatically correct.
The sun was shining through the window.

- Ans
- 1. were shining
 - 2. was shines
 - 3. were shined
 - 4. No improvement

Question Type : MCQ
Question ID : 264330134297
Option 1 ID : 264330526183
Option 2 ID : 264330526185
Option 3 ID : 264330526184
Option 4 ID : 264330526186
Status : Answered
Chosen Option : 4

Q.18 Select the appropriate synonym for the underlined word.
Are you kidding?

- Ans
- 1. pleading
 - 2. rocking
 - 3. mixing
 - 4. joking

Question Type : MCQ
Question ID : 264330134310
Option 1 ID : 264330526232
Option 2 ID : 264330526233
Option 3 ID : 264330526231
Option 4 ID : 264330526234
Status : Answered
Chosen Option : 4

Q.19 Select the most appropriate meaning of the given idiom.

Walk on air

- Ans
- 1. To be extremely happy
 - 2. To describe an unusual situation
 - 3. Feeling weakened or tired
 - 4. To work hard

Question Type : MCQ

Question ID : 264330136259

Option 1 ID : 264330533822

Option 2 ID : 264330533821

Option 3 ID : 264330533819

Option 4 ID : 264330533820

Status : Answered

Chosen Option : 1

Q.20 In the following question, out of the given four alternatives, select the alternative which best expresses the meaning of the Idiom/Phrase.

Wet behind the ears

- Ans
- 1. To win a bet
 - 2. A sudden change in fortune due to a windfall
 - 3. To be young and without experience
 - 4. To place a bad bet

Question Type : MCQ

Question ID : 264330134315

Option 1 ID : 264330526253

Option 2 ID : 264330526254

Option 3 ID : 264330526251

Option 4 ID : 264330526252

Status : Answered

Chosen Option : 3



Comprehension:

In the following passage some of the words have been deleted. Read the passage carefully and select the correct answer for the given blank out of the four alternatives.

One afternoon, a dozen Arizona State University students (1) _____ to spend the morning cutting cardboard, taping fans and assembling filters in an effort to (2) _____ 125 portable air purifiers for local schools. That (3) _____ morning, staff members at a homeless shelter in Los Angeles were setting (4) _____ 20 homemade purifiers of their own, while in Brookline, Massachusetts, another DIY air purifier was whirring quietly in the back of a day care (5) _____ as children played.

SubQuestion No : 21

Q.21 Select the most appropriate option to fill in the blank No. 1.

- Ans**
- 1. plated
 - 2. triggered
 - 3. dismissed
 - 4. gathered

Question Type : MCQ
Question ID : 264330136882
Option 1 ID : 264330536213
Option 2 ID : 264330536214
Option 3 ID : 264330536212
Option 4 ID : 264330536211
Status : Answered
Chosen Option : 4

Comprehension:

In the following passage some of the words have been deleted. Read the passage carefully and select the correct answer for the given blank out of the four alternatives.

One afternoon, a dozen Arizona State University students (1) _____ to spend the morning cutting cardboard, taping fans and assembling filters in an effort to (2) _____ 125 portable air purifiers for local schools. That (3) _____ morning, staff members at a homeless shelter in Los Angeles were setting (4) _____ 20 homemade purifiers of their own, while in Brookline, Massachusetts, another DIY air purifier was whirring quietly in the back of a day care (5) _____ as children played.

SubQuestion No : 22

Q.22 Select the most appropriate option to fill in the blank No. 2.

- Ans**
- 1. beat
 - 2. build
 - 3. weld
 - 4. sieve

Question Type : MCQ
Question ID : 264330136883
Option 1 ID : 264330536218
Option 2 ID : 264330536217
Option 3 ID : 264330536216
Option 4 ID : 264330536215
Status : Answered
Chosen Option : 2

Comprehension:

In the following passage some of the words have been deleted. Read the passage carefully and select the correct answer for the given blank out of the four alternatives.

One afternoon, a dozen Arizona State University students (1) _____ to spend the morning cutting cardboard, taping fans and assembling filters in an effort to (2) _____ 125 portable air purifiers for local schools. That (3) _____ morning, staff members at a homeless shelter in Los Angeles were setting (4) _____ 20 homemade purifiers of their own, while in Brookline, Massachusetts, another DIY air purifier was whirring quietly in the back of a day care (5) _____ as children played.

SubQuestion No : 23

Q.23 Select the most appropriate option to fill in the blank No. 3.

- Ans
- 1. copy
 - 2. cruel
 - 3. resembling
 - 4. same

Question Type : MCQ
Question ID : 264330136884
Option 1 ID : 264330536221
Option 2 ID : 264330536219
Option 3 ID : 264330536220
Option 4 ID : 264330536222
Status : Answered
Chosen Option : 4

Comprehension:

In the following passage some of the words have been deleted. Read the passage carefully and select the correct answer for the given blank out of the four alternatives.

One afternoon, a dozen Arizona State University students (1) _____ to spend the morning cutting cardboard, taping fans and assembling filters in an effort to (2) _____ 125 portable air purifiers for local schools. That (3) _____ morning, staff members at a homeless shelter in Los Angeles were setting (4) _____ 20 homemade purifiers of their own, while in Brookline, Massachusetts, another DIY air purifier was whirring quietly in the back of a day care (5) _____ as children played.

SubQuestion No : 24

Q.24 Select the most appropriate option to fill in the blank No. 4.

- Ans
- 1. on
 - 2. up
 - 3. in
 - 4. off

Question Type : MCQ
Question ID : 264330136885
Option 1 ID : 264330536223
Option 2 ID : 264330536226
Option 3 ID : 264330536225
Option 4 ID : 264330536224
Status : Answered
Chosen Option : 2

Comprehension:

In the following passage some of the words have been deleted. Read the passage carefully and select the correct answer for the given blank out of the four alternatives.

One afternoon, a dozen Arizona State University students (1) _____ to spend the morning cutting cardboard, taping fans and assembling filters in an effort to (2) _____ 125 portable air purifiers for local schools. That (3) _____ morning, staff members at a homeless shelter in Los Angeles were setting (4) _____ 20 homemade purifiers of their own, while in Brookline, Massachusetts, another DIY air purifier was whirring quietly in the back of a day care (5) _____ as children played.

SubQuestion No : 25

Q.25 Select the most appropriate option to fill in the blank No. 5.

- Ans**
- 1. auditorium
 - 2. classroom
 - 3. hangar
 - 4. podium

Question Type : **MCQ**

Question ID : **264330136886**

Option 1 ID : **264330536230**

Option 2 ID : **264330536229**

Option 3 ID : **264330536227**

Option 4 ID : **264330536228**

Status : **Answered**

Chosen Option : **4**

