



SSC MTS **SHIFT – 1 (09-05-2023)**

- ★ **Latest Govt Job updates**
- ★ **Private Job updates**
- ★ **Free Mock tests available**

**Visit - [teachingninja.in](https://teachingninja.in)**

## Multi Tasking Non Technical Staff and Havaldar CBIC and CBN Examination 2022

Roll Number	
Candidate Name	
Venue Name	
Exam Date	09/05/2023
Exam Time	9:00 AM - 10:30 AM
Subject	MTS Non Tech Havaldar CBIC and CBN Examination 2022

### Section : Numerical and Mathematical Ability

**Q.1** The marked price of an article is 160 percent of the cost price. If 20 percent discount is given, then what will be the profit percentage?

- Ans**
- 1. 28 percent
  - 2. 25 percent
  - 3. 22 percent
  - 4. 32 percent

Question Type : **MCQ**

Question ID : **264330137886**

Option 1 ID : **264330540152**

Option 2 ID : **264330540153**

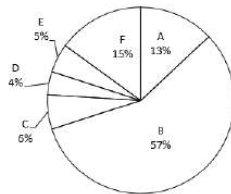
Option 3 ID : **264330540151**

Option 4 ID : **264330540154**

Status : **Answered**

Chosen Option : **2**

**Q.2** The pie chart given below shows the number of mobile phones sold by six companies in a year. The total mobile phones sold by six companies are 500. Number of mobile phones sold by a particular company is shown as a percentage of total number of mobile phones sold by all these six companies.



What is the ratio of number of mobile phones sold by C to number of mobile phones sold by F?

- Ans**
- 1. 2 : 7
  - 2. 5 : 2
  - 3. 3 : 2
  - 4. 2 : 5

Question Type : **MCQ**

Question ID : **264330137893**

Option 1 ID : **264330540182**

Option 2 ID : **264330540180**

Option 3 ID : **264330540181**

Option 4 ID : **264330540179**

Status : **Answered**

Chosen Option : **4**

**Q.3** Working 15 hours a day, Vaibhav can complete a piece of work in 35 days. How many hours a day should he work so as finish the work in 25 days?

- Ans**
- ✓ 1. 21 hours
  - ✗ 2. 20 hours
  - ✗ 3. 18 hours
  - ✗ 4. 17 hours

Question Type : **MCQ**  
Question ID : **264330135080**  
Option 1 ID : **264330529256**  
Option 2 ID : **264330529255**  
Option 3 ID : **264330529257**  
Option 4 ID : **264330529258**  
Status : **Answered**  
Chosen Option : 1

**Q.4** The Largest possible sphere is carved out of a cube of side 6 cm. What is the volume of the sphere?

- Ans**
- ✓ 1.  $792/7 \text{ cm}^3$
  - ✗ 2.  $144/7 \text{ cm}^3$
  - ✗ 3.  $133/3 \text{ cm}^3$
  - ✗ 4.  $444/7 \text{ cm}^3$

Question Type : **MCQ**  
Question ID : **264330135085**  
Option 1 ID : **264330529277**  
Option 2 ID : **264330529276**  
Option 3 ID : **264330529275**  
Option 4 ID : **264330529278**  
Status : **Answered**  
Chosen Option : 1

**Q.5** Find the value of  $62.5 \times 2 + 1100 - (16)^2 + (30)^2$  :

- Ans**
- ✗ 1. 1445
  - ✓ 2. 1869
  - ✗ 3. 1666
  - ✗ 4. 1900

Question Type : **MCQ**  
Question ID : **264330135131**  
Option 1 ID : **264330529460**  
Option 2 ID : **264330529461**  
Option 3 ID : **264330529459**  
Option 4 ID : **264330529462**  
Status : **Answered**  
Chosen Option : 2

**Q.6** The following table shows the number of units of a product manufactured and sold by a company in 5 years. Calculate the total number of unsold products.

Years	Number of units manufactured (in hundred)	Sold (in hundred)
2018	440	350
2019	500	450
2020	320	300
2021	450	400
2022	290	200

- Ans
- 1. 30,000
  - 2. 40,000
  - 3. 50,000
  - 4. 20,000

Question Type : **MCQ**  
Question ID : **264330135147**  
Option 1 ID : **264330529524**  
Option 2 ID : **264330529525**  
Option 3 ID : **264330529526**  
Option 4 ID : **264330529523**  
Status : **Answered**  
Chosen Option : 1

**Q.7** The average age of 15 members of a committee is increased by 4 years when two members whose ages are 60 years and 70 years are replaced by the two new members. What is the average age of the new members?

- Ans
- 1. 105 years
  - 2. 80 years
  - 3. 85 years
  - 4. 95 years

Question Type : **MCQ**  
Question ID : **264330137649**  
Option 1 ID : **264330539204**  
Option 2 ID : **264330539205**  
Option 3 ID : **264330539203**  
Option 4 ID : **264330539206**  
Status : **Marked For Review**  
Chosen Option : 4

**Q.8** The ratio of ages of two students is 5 : 4. The difference between their ages is 8 years. What is the age of the younger student?

- Ans
- 1. 24 years
  - 2. 32 years
  - 3. 40 years
  - 4. 48 years

Question Type : **MCQ**  
Question ID : **264330137883**  
Option 1 ID : **264330540142**  
Option 2 ID : **264330540141**  
Option 3 ID : **264330540139**  
Option 4 ID : **264330540140**  
Status : **Answered**  
Chosen Option : 2

**Q.9** What is the compound interest on Rs. 10000 in 1 year 6 month at 10% per annum, the interest being compounded half-yearly?

- Ans**
- 1. Rs. 1625.50
  - 2. Rs. 1576.25
  - 3. Rs. 1826.50
  - 4. Rs. 1422.25

Question Type : **MCQ**  
Question ID : **264330133807**  
Option 1 ID : **264330524254**  
Option 2 ID : **264330524251**  
Option 3 ID : **264330524252**  
Option 4 ID : **264330524253**  
Status : **Answered**  
Chosen Option : **2**

**Q.10** If A can do a work in 21 days and B can do the same work in 28 days. In how many days will they complete the work if they work on alternate days?

- Ans**
- 1. 22 days
  - 2. 28 days
  - 3. 20 days
  - 4. 24 days

Question Type : **MCQ**  
Question ID : **264330138405**  
Option 1 ID : **264330542228**  
Option 2 ID : **264330542230**  
Option 3 ID : **264330542229**  
Option 4 ID : **264330542227**  
Status : **Answered**  
Chosen Option : **4**

**Q.11** On a certain sum, the simple interest for 2 years is Rs. 12000. If the sum is Rs. 12000, then what will be the compound interest (compounding annually) on the same sum at the same rate of interest for first 3 years?

- Ans**
- 1. Rs. 29250
  - 2. Rs. 29300
  - 3. Rs. 28500
  - 4. Rs. 22750

Question Type : **MCQ**  
Question ID : **264330137635**  
Option 1 ID : **264330539150**  
Option 2 ID : **264330539149**  
Option 3 ID : **264330539148**  
Option 4 ID : **264330539147**  
Status : **Answered**  
Chosen Option : **3**

Q.12 The average of five consecutive odd numbers is 15. What is the smallest of these five numbers?

- Ans
- 1. 11
  - 2. 13
  - 3. 15
  - 4. 9

Question Type : MCQ  
Question ID : 264330137877  
Option 1 ID : 264330540117  
Option 2 ID : 264330540116  
Option 3 ID : 264330540115  
Option 4 ID : 264330540118  
Status : Answered  
Chosen Option : 1

Q.13 What is that greatest four-digit number which when divided by 3 and 4 leaves remainder 2 in each case?

- Ans
- 1. 9994
  - 2. 9996
  - 3. 9998
  - 4. 9995

Question Type : MCQ  
Question ID : 264330137889  
Option 1 ID : 264330540166  
Option 2 ID : 264330540164  
Option 3 ID : 264330540163  
Option 4 ID : 264330540165  
Status : Answered  
Chosen Option : 3

Q.14 A number is first increased by 12% and then decreased by 12%. The change in number is:

- Ans
- 1. 1.44% increase
  - 2. 12% increase
  - 3. 12% decrease
  - 4. 1.44% decrease

Question Type : MCQ  
Question ID : 264330133800  
Option 1 ID : 264330524224  
Option 2 ID : 264330524226  
Option 3 ID : 264330524225  
Option 4 ID : 264330524223  
Status : Answered  
Chosen Option : 4

**Q.15** A person bought an article and sold it at a loss of 10 percent. If he had bought it for 30 percent less price and sold it for Rs. 90 more, then he would earn a profit of 35 percent. What is the cost price of the article?

- Ans
- 1. Rs. 2400
  - 2. Rs. 2000
  - 3. Rs. 2100
  - 4. Rs. 2200

Question Type : MCQ  
Question ID : 264330137881  
Option 1 ID : 264330540131  
Option 2 ID : 264330540132  
Option 3 ID : 264330540133  
Option 4 ID : 264330540134  
Status : Answered  
Chosen Option : 2

**Q.16** If  $p : q : r = 2 : 5 : 3$  and  $r : s = 6 : 5$ , then what is the value of  $p : q : r : s$ ?

- Ans
- 1. 4 : 12 : 7 : 3
  - 2. 4 : 10 : 6 : 5
  - 3. 6 : 5 : 8 : 10
  - 4. 8 : 12 : 7 : 8

Question Type : MCQ  
Question ID : 264330137882  
Option 1 ID : 264330540138  
Option 2 ID : 264330540135  
Option 3 ID : 264330540136  
Option 4 ID : 264330540137  
Status : Answered  
Chosen Option : 2

**Q.17** What is the smallest integer that is divisible by 12, 22 and 32?

- Ans
- 1. 1056
  - 2. 1080
  - 3. 1144
  - 4. 444

Question Type : MCQ  
Question ID : 264330141036  
Option 1 ID : 264330552491  
Option 2 ID : 264330552493  
Option 3 ID : 264330552494  
Option 4 ID : 264330552492  
Status : Answered  
Chosen Option : 1

Q.18 Find the area of the rhombus whose diagonals are 16 cm and 20 cm.

- Ans
- 1.  $110 \text{ cm}^2$
  - 2.  $150 \text{ cm}^2$
  - 3.  $160 \text{ cm}^2$
  - 4.  $120 \text{ cm}^2$

Question Type : MCQ  
Question ID : 264330138409  
Option 1 ID : 264330542243  
Option 2 ID : 264330542244  
Option 3 ID : 264330542245  
Option 4 ID : 264330542246  
Status : Answered  
Chosen Option : 3

Q.19 A train moves at a speed of 30 m/s and crosses a bridge of length 650 metres in 50 seconds. What is the length of the train?

- Ans
- 1. 1000 metres
  - 2. 900 metres
  - 3. 850 metres
  - 4. 750 metres

Question Type : MCQ  
Question ID : 264330137876  
Option 1 ID : 264330540114  
Option 2 ID : 264330540111  
Option 3 ID : 264330540113  
Option 4 ID : 264330540112  
Status : Answered  
Chosen Option : 3

Q.20 Asha bought a saree for Rs. 4000 and sold it for Rs. 4400. Her profit percent is:

- Ans
- 1. 5%
  - 2. 80%
  - 3. 10%
  - 4. 40%

Question Type : MCQ  
Question ID : 264330138731  
Option 1 ID : 264330543531  
Option 2 ID : 264330543534  
Option 3 ID : 264330543532  
Option 4 ID : 264330543533  
Status : Answered  
Chosen Option : 3

Section : Reasoning Ability and Problem Solving



**Q.1** Reena, Meena, Tina, Leena, and Neena are sitting in a straight line facing south. Tina is sitting to the immediate right of Reena. Only Neena is sitting between Reena and Leena. Tina is not sitting in the end. Who is sitting to the immediate left of Neena?

- Ans**
- 1. Tina
  - 2. Reena
  - 3. Meena
  - 4. Leena

Question Type : **MCQ**  
Question ID : **264330137795**  
Option 1 ID : **264330539788**  
Option 2 ID : **264330539789**  
Option 3 ID : **264330539787**  
Option 4 ID : **264330539790**  
Status : **Answered**  
Chosen Option : **4**

**Q.2** Select the option that is related to the third letter cluster in the same way as the second letter cluster is related to the first letter cluster.  
DAK : FCM :: PVH : ?

- Ans**
- 1. RJZ
  - 2. SXJ
  - 3. RXJ
  - 4. RXI

Question Type : **MCQ**  
Question ID : **264330137789**  
Option 1 ID : **264330539763**  
Option 2 ID : **264330539766**  
Option 3 ID : **264330539764**  
Option 4 ID : **264330539765**  
Status : **Answered**  
Chosen Option : **3**

**Q.3** Which of the following letter cluster will replace the question mark (?) in the given series?  
AGM, CEO, ECQ, GAS, ?

- Ans**
- 1. IYU
  - 2. IUY
  - 3. JZS
  - 4. YUI

Question Type : **MCQ**  
Question ID : **264330137786**  
Option 1 ID : **264330539751**  
Option 2 ID : **264330539752**  
Option 3 ID : **264330539754**  
Option 4 ID : **264330539753**  
Status : **Answered**  
Chosen Option : **1**

**Q.4** Three statements are given followed by two conclusions numbered I and II. Assuming the statements to be true, even if they seem to be at variance with commonly known facts, decide which of the conclusions logically follow(s) from the statements.

Statements:

All students are good.

Rachel is a student.

Some good are honest.

Conclusions:

I. Rachel is honest.

II. Some honest are good.

**Ans**  1. Only conclusion II follows

2. Only conclusion I follows

3. Neither conclusion I nor II follows

4. Both conclusions I and II follow

Question Type : **MCQ**

Question ID : **264330137798**

Option 1 ID : **264330539800**

Option 2 ID : **264330539799**

Option 3 ID : **264330539802**

Option 4 ID : **264330539801**

Status : **Answered**

Chosen Option : 1

**Q.5** Five people P, Q, T, V and R are sitting in a circle facing away from the centre. P is to the immediate right of V. T is in between V and R. Who is sitting to the immediate left of R?

**Ans**  1. P

2. V

3. T

4. Q

Question Type : **MCQ**

Question ID : **264330137794**

Option 1 ID : **264330539783**

Option 2 ID : **264330539786**

Option 3 ID : **264330539785**

Option 4 ID : **264330539784**

Status : **Answered**

Chosen Option : 4

**Q.6** Which two signs should be interchanged to make the given equation correct?

$$12 + 4 + 2 - 6 = 16$$

**Ans**  1. - and =

2. + and -

3. ÷ and =

4. ÷ and +

Question Type : **MCQ**

Question ID : **264330137803**

Option 1 ID : **264330539820**

Option 2 ID : **264330539822**

Option 3 ID : **264330539819**

Option 4 ID : **264330539821**

Status : **Answered**

Chosen Option : 2

**Q.7** Select the option that is related to the third word in the same way as the second word is related to the first word.  
Haughty : Arrogant :: Ominous : ?

- Ans**
- 1. Soothing
  - 2. Peaceful
  - 3. Threatening
  - 4. Calm

Question Type : **MCQ**  
Question ID : **264330137788**  
Option 1 ID : **264330539761**  
Option 2 ID : **264330539759**  
Option 3 ID : **264330539762**  
Option 4 ID : **264330539760**  
Status : **Answered**  
Chosen Option : **3**

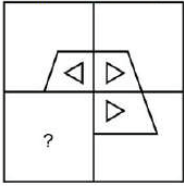
**Q.8** In a certain code language, 'ABSENCE' is written as 'ASBECNE'. How will 'EXACTLY' be written in that language?

- Ans**
- 1. EAXCLYT
  - 2. EXACTLY
  - 3. EAXTCLY
  - 4. EAXCLTY

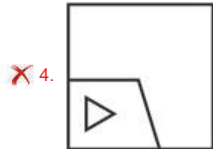
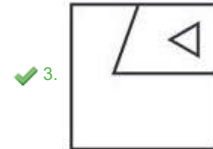
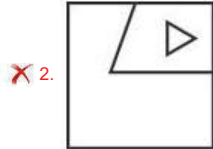
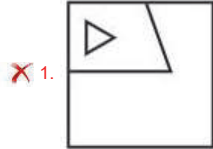
Question Type : **MCQ**  
Question ID : **264330137542**  
Option 1 ID : **264330538778**  
Option 2 ID : **264330538775**  
Option 3 ID : **264330538777**  
Option 4 ID : **264330538776**  
Status : **Answered**  
Chosen Option : **4**



**Q.9** Select the option figure that will replace the question mark (?) in the figure given below to complete the pattern.  
(rotation is not allowed)



Ans



Teachingninja.in

Question Type : MCQ

Question ID : 264330137807

Option 1 ID : 264330539836

Option 2 ID : 264330539838

Option 3 ID : 264330539835

Option 4 ID : 264330539837

Status : Answered

Chosen Option : 3

**Q.10** Two statements are given followed by two conclusions numbered I and II. Assuming the statements to be true, even if they seem to be at variance with commonly known facts, decide which of the conclusions logically follow (s) from the statements.

Statements:

Some gold are silver.

All gold are platinum.

Conclusions:

I. Some silver are platinum.

II. All platinum are gold.

- Ans**
- 1. Both conclusions I and II follow
  - 2. Only conclusion II follows
  - 3. Neither conclusion I nor II follows
  - 4. Only conclusion I follows

Question Type : **MCQ**  
Question ID : **264330137797**  
Option 1 ID : **264330539797**  
Option 2 ID : **264330539796**  
Option 3 ID : **264330539798**  
Option 4 ID : **264330539795**  
Status : **Answered**  
Chosen Option : **4**

**Q.11** In a certain code language, 'FELLOW' is coded as 'FDNLNY'. What is the code for 'GOLDEN' in that code language?

- Ans**
- 1. GNNEDQ
  - 2. DNNDDQ
  - 3. GNNDDP
  - 4. GNMDEP

Question Type : **MCQ**  
Question ID : **264330138835**  
Option 1 ID : **264330543950**  
Option 2 ID : **264330543949**  
Option 3 ID : **264330543948**  
Option 4 ID : **264330543947**  
Status : **Answered**  
Chosen Option : **3**

**Q.12** Seven brothers P, Q, R, S, T, U, and V were born in different years. S is younger than only 2 other brothers and neither of them is U. P is older than R but younger than U and S. R is not the youngest. U is younger than Q who is younger than T. Who is the youngest?

- Ans**
- 1. T
  - 2. P
  - 3. Q
  - 4. V

Question Type : **MCQ**  
Question ID : **264330137796**  
Option 1 ID : **264330539792**  
Option 2 ID : **264330539793**  
Option 3 ID : **264330539791**  
Option 4 ID : **264330539794**  
Status : **Answered**  
Chosen Option : **4**

**Q.13** Study the given pattern carefully and select the number that can replace the question mark (?) in it.

First row- 6, 36, 72

Second row- 8, 48, 96

Third row- 9, 54, ?

- Ans**
- 1. 105
  - 2. 108
  - 3. 231
  - 4. 130

Question Type : MCQ

Question ID : 264330137802

Option 1 ID : 264330539815

Option 2 ID : 264330539818

Option 3 ID : 264330539816

Option 4 ID : 264330539817

Status : Answered

Chosen Option : 2

**Q.14** Which of the following numbers will replace the question mark (?) in the given series?

69, 80, 89, 96, 101, ?

- Ans**
- 1. 104
  - 2. 102
  - 3. 105
  - 4. 106

Question Type : MCQ

Question ID : 264330133517

Option 1 ID : 264330523100

Option 2 ID : 264330523099

Option 3 ID : 264330523101

Option 4 ID : 264330523102

Status : Answered

Chosen Option : 1

**Q.15** Select the option that is related to the third number in the same way as the second number is related to the first number.

289 : 325 :: 361 : ?

- Ans**
- 1. 400
  - 2. 401
  - 3. 399
  - 4. 411

Question Type : MCQ

Question ID : 264330133519

Option 1 ID : 264330523108

Option 2 ID : 264330523107

Option 3 ID : 264330523109

Option 4 ID : 264330523110

Status : Answered

Chosen Option : 2

**Q.16** If A denotes 'addition', B denotes 'multiplication', C denotes 'subtraction', and D denotes 'division', then what will be the value of the following equation?

$$7 A 5 C (6 D 3) = ?$$

- Ans**
- 1. 32
  - 2. 16
  - 3. 10
  - 4. 19

Question Type : **MCQ**

Question ID : **264330137555**

Option 1 ID : **264330538830**

Option 2 ID : **264330538828**

Option 3 ID : **264330538827**

Option 4 ID : **264330538829**

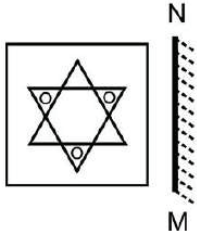
Status : **Answered**

Chosen Option : **3**



Teachingninja.in

Q.17 Select the correct mirror image of the given figure when the mirror is placed to the right side of the figure.



Ans

✓ 1.




✗ 2.



✗ 3.



✗ 4.



Question Type : MCQ

Question ID : 264330135040

Option 1 ID : 264330529097

Option 2 ID : 264330529095

Option 3 ID : 264330529098

Option 4 ID : 264330529096

Status : Answered

Chosen Option : 1



Q.18 In a certain code language, 'AJDM' is written as 'JDMA'. How will 'SKWM' be written in that language?

- Ans
- 1. KMMS
  - 2. KSMW
  - 3. KWMS
  - 4. KMWS

Question Type : MCQ

Question ID : 264330135002

Option 1 ID : 264330528946

Option 2 ID : 264330528945

Option 3 ID : 264330528944

Option 4 ID : 264330528943

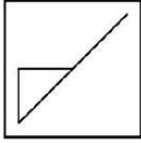
Status : Answered

Chosen Option : 3



Teachingninja.in

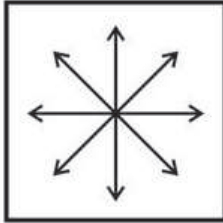
Q.19 Select the option figure in which the given figure (X) is embedded as its part (rotation is NOT allowed).



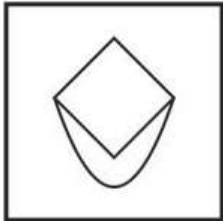
X

Ans

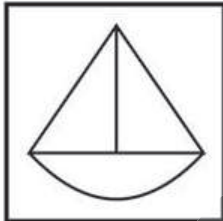
✗ 1.



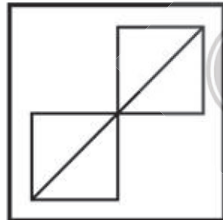
✗ 2.



✗ 3.



✓ 4.



Question Type : MCQ

Question ID : 264330135039

Option 1 ID : 264330529094

Option 2 ID : 264330529091

Option 3 ID : 264330529092

Option 4 ID : 264330529093

Status : Answered

Chosen Option : 4

Q.20 Which of the following numbers will replace the question mark (?) in the given series?

57, 54, 52, 49, 47, 44, 42, ?

Ans  1. 40

2. 27

3. 39

4. 47

Question Type : MCQ

Question ID : 264330137800

Option 1 ID : 264330539807

Option 2 ID : 264330539808

Option 3 ID : 264330539810

Option 4 ID : 264330539809

Status : Answered

Chosen Option : 3

Section : General Awareness

Q.1 Pradhan Mantri Jan-Dhan Yojana (PMJDY) now has in excess of 472 million accounts. Which state has topped this list (as on October 12, 2022)?

Ans  1. Haryana

2. West Bengal

3. Maharashtra

4. Uttar Pradesh

Question Type : MCQ

Question ID : 264330137894

Option 1 ID : 264330540185

Option 2 ID : 264330540186

Option 3 ID : 264330540183

Option 4 ID : 264330540184

Status : Not Answered

Chosen Option : --

Q.2 According to census 2011, which of the following is NOT included in top ten most populous countries?

Ans  1. Pakistan

2. Japan

3. Nigeria

4. Canada

Question Type : MCQ

Question ID : 264330138316

Option 1 ID : 264330541874

Option 2 ID : 264330541871

Option 3 ID : 264330541872

Option 4 ID : 264330541873

Status : Not Answered

Chosen Option : --

Q.3 One of the major hubs of information technology is the Silicon valley which is situated in \_\_\_\_\_.

- Ans
- 1. Tokyo
  - 2. London
  - 3. New york
  - 4. California

Question Type : MCQ  
Question ID : 264330138913  
Option 1 ID : 264330544260  
Option 2 ID : 264330544259  
Option 3 ID : 264330544262  
Option 4 ID : 264330544261  
Status : Answered  
Chosen Option : 3

Q.4 The presiding officer of the Lok Sabha is called \_\_\_\_\_.

- Ans
- 1. The Chairman
  - 2. The Speaker
  - 3. The Deputy Chairman
  - 4. The Deputy Speaker

Question Type : MCQ  
Question ID : 264330137915  
Option 1 ID : 264330540268  
Option 2 ID : 264330540267  
Option 3 ID : 264330540270  
Option 4 ID : 264330540269  
Status : Answered  
Chosen Option : 2

Q.5 Which among the following is the coldest of the atmospheric layers?

- Ans
- 1. Mesosphere
  - 2. Stratosphere
  - 3. Thermosphere
  - 4. Troposphere

Question Type : MCQ  
Question ID : 264330133989  
Option 1 ID : 264330524981  
Option 2 ID : 264330524980  
Option 3 ID : 264330524982  
Option 4 ID : 264330524979  
Status : Answered  
Chosen Option : 1

**Q.6** Which among the following Acts discarded the 'dyarchy' system at the provincial level and allowed for the emergence of popularly elected provincial legislatures?

**Ans**  1. Charter Act, 1793

2.

Montague-Chelmsford Reform (Government of India Act), 1919

3. Government of India Act, 1935

4. Pitt's India Act, 1784

Question Type : **MCQ**

Question ID : **264330137726**

Option 1 ID : **264330539512**

Option 2 ID : **264330539513**

Option 3 ID : **264330539514**

Option 4 ID : **264330539511**

Status : **Answered**

Chosen Option : **2**

**Q.7** According to 2011 Census, which among the following state has the highest population?

**Ans**  1. Bihar

2. Tamil Nadu

3. Uttar Pradesh

4. Maharashtra

Question Type : **MCQ**

Question ID : **264330134017**

Option 1 ID : **264330525091**

Option 2 ID : **264330525093**

Option 3 ID : **264330525094**

Option 4 ID : **264330525092**

Status : **Answered**

Chosen Option : **3**

**Q.8** Lovlina Borgohain is associated with which sports?

**Ans**  1. Chess

2. Table Tennis

3. Boxing

4. Swimming

Question Type : **MCQ**

Question ID : **264330137916**

Option 1 ID : **264330540274**

Option 2 ID : **264330540272**

Option 3 ID : **264330540273**

Option 4 ID : **264330540271**

Status : **Answered**

Chosen Option : **3**

Q.9 Who among the following wrote the biography of Jahangir known as Iqbalnama-i Jahangiri?

Ans  1. Mutamid Khan

2. Inayat Khan

3. Abdul Rahim Khan

4. Abul Fazl

Question Type : MCQ  
Question ID : 264330133995  
Option 1 ID : 264330525005  
Option 2 ID : 264330525006  
Option 3 ID : 264330525003  
Option 4 ID : 264330525004  
Status : Answered  
Chosen Option : 3

Q.10 Which of the following dances is a popular folk dance of Maharashtra?

Ans  1. Lavani

2. Bihu

3. Jhumar

4. Giddha

Question Type : MCQ  
Question ID : 264330137896  
Option 1 ID : 264330540193  
Option 2 ID : 264330540191  
Option 3 ID : 264330540194  
Option 4 ID : 264330540192  
Status : Answered  
Chosen Option : 1

Q.11 \_\_\_\_\_ was founded by Dadoba Pandurang and his brother Atmaram Pandurang in 1867.

Ans  1. Tattvabodhini Sabha

2. Brahma Samaj

3. Arya Samaj

4. Prarthana Samaj

Question Type : MCQ  
Question ID : 264330134710  
Option 1 ID : 264330527797  
Option 2 ID : 264330527796  
Option 3 ID : 264330527798  
Option 4 ID : 264330527795  
Status : Answered  
Chosen Option : 4

Q.12 What is the major function of a cell wall?

- Ans
- 1. It works as a storage for material
  - 2. It provides shape and rigidity to the cell
  - 3. It is responsible for cell division
  - 4. It helps in synthesis of carbohydrate

Question Type : MCQ  
Question ID : 264330137900  
Option 1 ID : 264330540207  
Option 2 ID : 264330540210  
Option 3 ID : 264330540209  
Option 4 ID : 264330540208  
Status : Not Answered  
Chosen Option : --

Q.13 Which article of the constitution of India lays down the uniform civil code?

- Ans
- 1. Article 377
  - 2. Article 370
  - 3. Article 44
  - 4. Article 12

Question Type : MCQ  
Question ID : 264330137914  
Option 1 ID : 264330540263  
Option 2 ID : 264330540264  
Option 3 ID : 264330540265  
Option 4 ID : 264330540266  
Status : Answered  
Chosen Option : 3

Q.14 'In The Afternoon of Time' is an autobiographical book by \_\_\_\_\_.

- Ans
- 1. Satyajit Ray
  - 2. Sam Pitroda
  - 3. Harivansh Rai Bachchan
  - 4. P.T. Usha

Question Type : MCQ  
Question ID : 264330138901  
Option 1 ID : 264330544213  
Option 2 ID : 264330544212  
Option 3 ID : 264330544214  
Option 4 ID : 264330544211  
Status : Not Answered  
Chosen Option : --

Q.15 Which among the following instruments is used for measuring the humidity of the air or a gas?

- Ans
- 1. Bolometer
  - 2. Hygrometer
  - 3. Hydrometer
  - 4. Altimeter

Question Type : MCQ  
Question ID : 264330133986  
Option 1 ID : 264330524968  
Option 2 ID : 264330524970  
Option 3 ID : 264330524969  
Option 4 ID : 264330524967  
Status : Answered  
Chosen Option : 2

Q.16 The Family Courts (Amendment) Bill seeks to extend the application of the Family Courts Act to which of the following states?

- Ans
- 1. Nagaland and Sikkim
  - 2. Sikkim and Manipur
  - 3. Himachal Pradesh and Nagaland
  - 4. Himachal Pradesh and Sikkim

Question Type : MCQ  
Question ID : 264330137712  
Option 1 ID : 264330539456  
Option 2 ID : 264330539458  
Option 3 ID : 264330539455  
Option 4 ID : 264330539457  
Status : Not Answered  
Chosen Option : --

Q.17 Saswati Sen is the proud recipient of the Sangeet Natak Akademi Award for 2004-2005. She is recognized for which dance form?

- Ans
- 1. Kathak
  - 2. Kuchipudi
  - 3. Manipuri
  - 4. Mohiniyattam

Question Type : MCQ  
Question ID : 264330138903  
Option 1 ID : 264330544222  
Option 2 ID : 264330544221  
Option 3 ID : 264330544219  
Option 4 ID : 264330544220  
Status : Not Attempted and Marked For Review  
Chosen Option : --



Q.18 Jim Corbett National Park is in which state of India?

- Ans
- 1. Punjab
  - 2. Himachal Pradesh
  - 3. Uttarakhand
  - 4. Uttar Pradesh

Question Type : MCQ  
Question ID : 264330137904  
Option 1 ID : 264330540226  
Option 2 ID : 264330540224  
Option 3 ID : 264330540223  
Option 4 ID : 264330540225  
Status : Answered  
Chosen Option : 3

Q.19 \_\_\_\_\_ is used for the separation of components of a mixture containing two miscible liquids that boil without decomposition and have sufficient difference in their boiling points.

- Ans
- 1. Carbonation
  - 2. Distillation
  - 3. Sublimation
  - 4. Emulsification

Question Type : MCQ  
Question ID : 264330133988  
Option 1 ID : 264330524975  
Option 2 ID : 264330524978  
Option 3 ID : 264330524977  
Option 4 ID : 264330524976  
Status : Answered  
Chosen Option : 2

Q.20 Late Jagjit Singh was a popular composer and a \_\_\_\_\_ singer.

- Ans
- 1. Opera
  - 2. Ghazal
  - 3. Rock
  - 4. Pop

Question Type : MCQ  
Question ID : 264330137912  
Option 1 ID : 264330540256  
Option 2 ID : 264330540258  
Option 3 ID : 264330540255  
Option 4 ID : 264330540257  
Status : Not Attempted and Marked For Review  
Chosen Option : --

Q.21 Magha Saaji is celebrated as Makar Sankranti in which of the following states?

- Ans
- 1. Madhya Pradesh
  - 2. Gujarat
  - 3. Himachal Pradesh
  - 4. Goa

Question Type : MCQ  
Question ID : 264330134697  
Option 1 ID : 264330527743  
Option 2 ID : 264330527744  
Option 3 ID : 264330527746  
Option 4 ID : 264330527745  
Status : Not Answered  
Chosen Option : --

Q.22 Myanmar doesn't share its boundary with which of the following states?

- Ans
- 1. Nagaland
  - 2. Manipur
  - 3. Sikkim
  - 4. Mizoram

Question Type : MCQ  
Question ID : 264330134707  
Option 1 ID : 264330527783  
Option 2 ID : 264330527785  
Option 3 ID : 264330527786  
Option 4 ID : 264330527784  
Status : Answered  
Chosen Option : 3

Q.23 The number of times a unit of money changes hands during the unit period is called the \_\_\_\_\_.

- Ans
- 1. velocity of circulation of money
  - 2. base money
  - 3. remittances
  - 4. zero economic profit

Question Type : MCQ  
Question ID : 264330138906  
Option 1 ID : 264330544231  
Option 2 ID : 264330544232  
Option 3 ID : 264330544233  
Option 4 ID : 264330544234  
Status : Answered  
Chosen Option : 1

Q.24 Who among the following won the Meltwater Champions Chess Tour 2022?

- Ans
- 1. Magnus Carlsen
  - 2. Arjun Erigaisi
  - 3. Jan-Krzysztof Duda
  - 4. Vidit Santosh Gujrathi

Question Type : **MCQ**  
Question ID : **264330134004**  
Option 1 ID : **264330525040**  
Option 2 ID : **264330525039**  
Option 3 ID : **264330525041**  
Option 4 ID : **264330525042**  
Status : **Answered**  
Chosen Option : 1

Q.25 Who among the following Mughal emperors built Sheesh Mahal in Agra?

- Ans
- 1. Shah Jahan
  - 2. Humayun
  - 3. Babur
  - 4. Akbar

Question Type : **MCQ**  
Question ID : **264330137715**  
Option 1 ID : **264330539467**  
Option 2 ID : **264330539470**  
Option 3 ID : **264330539469**  
Option 4 ID : **264330539468**  
Status : **Not Attempted and Marked For Review**  
Chosen Option : --

Section : English Language and Comprehension

Q.1 Choose the sentence with no spelling error.

- Ans
- 1. How is your currant brand strategy workinng?
  - 2. How is your current brand strategy working?
  - 3. How is your current brand stretagy working?
  - 4. How is your current brand strategy working?

Question Type : **MCQ**  
Question ID : **264330134846**  
Option 1 ID : **264330528319**  
Option 2 ID : **264330528322**  
Option 3 ID : **264330528321**  
Option 4 ID : **264330528320**  
Status : **Answered**  
Chosen Option : 4

Q.2 Select the most appropriate option to fill in the blank.

After suffering so many losses, the company is about to go \_\_\_\_\_.

- Ans
- 1. bankrupt
  - 2. silent
  - 3. cynical
  - 4. awry

Question Type : MCQ  
Question ID : 264330134847  
Option 1 ID : 264330528325  
Option 2 ID : 264330528324  
Option 3 ID : 264330528323  
Option 4 ID : 264330528326  
Status : Answered  
Chosen Option : 1

Q.3 In the following question, out of the given four alternatives, select the alternative which best expresses the meaning of the Idiom/Phrase.  
Fit as a fiddle

- Ans
- 1. In a very good physical condition
  - 2. To be in love
  - 3. To drink alcohol regularly
  - 4. To be firm

Question Type : MCQ  
Question ID : 264330134470  
Option 1 ID : 264330526849  
Option 2 ID : 264330526850  
Option 3 ID : 264330526847  
Option 4 ID : 264330526848  
Status : Answered  
Chosen Option : 1

Q.4 Find the part of the given sentence that has an error in it. If there is no error, choose 'No error'.

Shapes that are impossible to make of machining can be printed.

- Ans
- 1. Shapes that are impossible
  - 2. No error
  - 3. can be printed.
  - 4. to make of machining

Question Type : MCQ  
Question ID : 264330134746  
Option 1 ID : 264330527935  
Option 2 ID : 264330527938  
Option 3 ID : 264330527937  
Option 4 ID : 264330527936  
Status : Answered  
Chosen Option : 4

**Q.5** Select the most appropriate option to substitute the bracketed segment in the given sentence. If there is no need to substitute it, select 'no substitution required'.

The government appears (to be at war with it's own people.)

- Ans**
- 1. to be on war with it's own people
  - 2. to be at war against it's own people
  - 3. No substitution required
  - 4. to be at war with its own people

Question Type : **MCQ**  
Question ID : **264330136669**  
Option 1 ID : **264330535395**  
Option 2 ID : **264330535397**  
Option 3 ID : **264330535398**  
Option 4 ID : **264330535396**  
Status : **Answered**  
Chosen Option : **4**

**Q.6** Select the most appropriate antonym of the given word.

Mad

- Ans**
- 1. Sound
  - 2. Indisposition
  - 3. Distemper
  - 4. Dense

Question Type : **MCQ**  
Question ID : **264330136075**  
Option 1 ID : **264330533114**  
Option 2 ID : **264330533111**  
Option 3 ID : **264330533112**  
Option 4 ID : **264330533113**  
Status : **Not Attempted and Marked For Review**  
Chosen Option : **--**

**Q.7** Fill in the blank with the most appropriate option.

Today is cloudy, but yesterday the sun \_\_\_\_\_.

- Ans**
- 1. flamed
  - 2. shown
  - 3. shone
  - 4. burned

Question Type : **MCQ**  
Question ID : **264330136264**  
Option 1 ID : **264330533840**  
Option 2 ID : **264330533839**  
Option 3 ID : **264330533842**  
Option 4 ID : **264330533841**  
Status : **Answered**  
Chosen Option : **3**

**Q.8** Identify the segment that contains a grammatical error. If there is no error, select 'No error'.

The Gryffindors trooped back up / to the castle, none of them talking; / it have been another long day.

**Ans**  1. No error

2. The Gryffindors trooped back up

3. it have been another long day.

4. to the castle, none of them talking;

Question Type : MCQ

Question ID : 264330136241

Option 1 ID : 264330533754

Option 2 ID : 264330533751

Option 3 ID : 264330533753

Option 4 ID : 264330533752

Status : Answered

Chosen Option : 3

**Q.9** Choose the word that means the same as the given word.

Valet

**Ans**  1. Carrier

2. Carrousel

3. Kingpin

4. Butler

Question Type : MCQ

Question ID : 264330135195

Option 1 ID : 264330529708

Option 2 ID : 264330529710

Option 3 ID : 264330529707

Option 4 ID : 264330529709

Status : Not Attempted and  
Marked For Review

Chosen Option : --

**Q.10** Select the word from the options which is exactly opposite in meaning to the bracketed word given in the sentence below.

I was (disappointed) to see the lack of coverage afforded to this event.

**Ans**  1. Dizzy

2. Humiliated

3. Encouraged

4. Gloomy

Question Type : MCQ

Question ID : 264330136258

Option 1 ID : 264330533818

Option 2 ID : 264330533817

Option 3 ID : 264330533815

Option 4 ID : 264330533816

Status : Answered

Chosen Option : 3

Q.11 Select the most appropriate synonym of the given word.

Paradise

- Ans
- 1. Bliss
  - 2. Trivial
  - 3. Display
  - 4. Ghost

Question Type : MCQ  
Question ID : 264330136255  
Option 1 ID : 264330533804  
Option 2 ID : 264330533803  
Option 3 ID : 264330533805  
Option 4 ID : 264330533806  
Status : Answered  
Chosen Option : 1

Q.12 Select the most appropriate option to substitute the bracketed segment in the given sentence. If there is no need to substitute it, select 'no substitution required'.

He suggested (there was collusion through objectors, due to similarities) in some letters sent to the council.

- Ans
- 1. there was collusions from the objector, due to similarities
  - 2. there was collusion between objectors, due to similarities
  - 3. No substitution required
  - 4. their was collusion by the objectors, due to similarities

Question Type : MCQ  
Question ID : 264330136296  
Option 1 ID : 264330533964  
Option 2 ID : 264330533963  
Option 3 ID : 264330533966  
Option 4 ID : 264330533965  
Status : Answered  
Chosen Option : 2

Q.13 Choose the word that can substitute the given group of words.  
A woman with brown hair

- Ans
- 1. Blunt
  - 2. Brunette
  - 3. Blonde
  - 4. Bumble

Question Type : MCQ  
Question ID : 264330134464  
Option 1 ID : 264330526825  
Option 2 ID : 264330526823  
Option 3 ID : 264330526826  
Option 4 ID : 264330526824  
Status : Answered  
Chosen Option : 2

**Q.14** A sentence has been given with a blank to be filled with an appropriate option. Choose the correct alternative.

The story of human evolution \_\_\_\_\_ a moving target in recent years.

- Ans
- 1. had being
  - 2. has been
  - 3. have been
  - 4. did has

Question Type : **MCQ**  
Question ID : **264330135185**  
Option 1 ID : **264330529673**  
Option 2 ID : **264330529672**  
Option 3 ID : **264330529674**  
Option 4 ID : **264330529671**  
Status : **Answered**  
Chosen Option : **2**

**Q.15** The statement below has been given with bracketed text. Select the option with correct idiom for the bracketed text.

That new budget bill was (totally useless) before it hit the Senate.

- Ans
- 1. a cry wolf
  - 2. a dead duck
  - 3. cold feet
  - 4. a fuel to the fire

Question Type : **MCQ**  
Question ID : **264330136260**  
Option 1 ID : **264330533825**  
Option 2 ID : **264330533826**  
Option 3 ID : **264330533823**  
Option 4 ID : **264330533824**  
Status : **Answered**  
Chosen Option : **2**

**Q.16** Four words are given, out of which only one word is spelt correctly. Choose the correctly spelt word.

- Ans
- 1. CALANDER
  - 2. SPLATER
  - 3. ASSASINATION
  - 4. ARGUMENT

Question Type : **MCQ**  
Question ID : **264330136261**  
Option 1 ID : **264330533830**  
Option 2 ID : **264330533827**  
Option 3 ID : **264330533828**  
Option 4 ID : **264330533829**  
Status : **Answered**  
Chosen Option : **4**



Q.17 Improve the underlined part of the sentence. Choose 'No improvement' as an answer if the sentence is grammatically correct.

My grandmother taught me how to sew my own clothes.

- Ans
- 1. teach mine
  - 2. taught myself
  - 3. No improvement
  - 4. taught I

Question Type : MCQ  
Question ID : 264330134800  
Option 1 ID : 264330528144  
Option 2 ID : 264330528145  
Option 3 ID : 264330528146  
Option 4 ID : 264330528143  
Status : Answered  
Chosen Option : 3

Q.18 Select the most appropriate word for the given group of words.

The act of destroying or damaging something

- Ans
- 1. Vengeance
  - 2. Avenge
  - 3. Sabotage
  - 4. Revenge

Question Type : MCQ  
Question ID : 264330136254  
Option 1 ID : 264330533799  
Option 2 ID : 264330533802  
Option 3 ID : 264330533800  
Option 4 ID : 264330533801  
Status : Answered  
Chosen Option : 3

Q.19 Fill in the blank with the most appropriate option.

I am sorry that I was unable to see \_\_\_\_\_ of you over the summer.

- Ans
- 1. more
  - 2. many
  - 3. much
  - 4. many more

Question Type : MCQ  
Question ID : 264330136245  
Option 1 ID : 264330533768  
Option 2 ID : 264330533767  
Option 3 ID : 264330533769  
Option 4 ID : 264330533770  
Status : Answered  
Chosen Option : 2

**Q.20** Identify the segment that contains a grammatical error. If there is no error, select 'No error'.

Our passage across the Arabian Sea/ was smooth as the most timid of/ navigators could desire.

- Ans**
- 1. No error
  - 2. Our passage across the Arabian Sea
  - 3. was smooth as the most timid of
  - 4. navigators could desire.

Question Type : MCQ  
Question ID : 264330136666  
Option 1 ID : 264330535386  
Option 2 ID : 264330535383  
Option 3 ID : 264330535384  
Option 4 ID : 264330535385  
Status : Answered  
Chosen Option : 3

**Comprehension:**

In the following passage some words have been deleted. Fill in the blanks with the help of the alternatives given. Select the most appropriate option for each number.

In 700 BCE Greek poet Hesiod (1) \_\_\_\_\_ "Theogony" and "Work and Days". In these mythologies, Atlas was a Titan (2) \_\_\_\_\_ enormous strength. He along with other titans (3) \_\_\_\_\_ the gods of Mount Olympus. While the other Titans were banished to Tartarus after being defeated by the god Zeus as retribution, Atlas (4) \_\_\_\_\_ was forced to carry the earth and the sky for an eternity. In depictions of Atlas, obviously carved by human based on myths, he is shown as a stooped figure carrying the (5) \_\_\_\_\_ on his shoulders. Because of his association with the globe, maps began to be decorated with this image of Atlas.

**SubQuestion No : 21**

**Q.21** Select the most appropriate option to fill in the blank No. 1.

- Ans**
- 1. had written
  - 2. will write
  - 3. wrote
  - 4. writes

Question Type : MCQ  
Question ID : 264330136066  
Option 1 ID : 264330533077  
Option 2 ID : 264330533078  
Option 3 ID : 264330533076  
Option 4 ID : 264330533075  
Status : Answered  
Chosen Option : 3

**Comprehension:**

In the following passage some words have been deleted. Fill in the blanks with the help of the alternatives given. Select the most appropriate option for each number.

In 700 BCE Greek poet Hesiod (1) \_\_\_\_\_ "Theogony" and "Work and Days". In these mythologies, Atlas was a Titan (2) \_\_\_\_\_ enormous strength. He along with other titans (3) \_\_\_\_\_ the gods of Mount Olympus. While the other Titans were banished to Tartarus after being defeated by the god Zeus as retribution, Atlas (4) \_\_\_\_\_ was forced to carry the earth and the sky for an eternity. In depictions of Atlas, obviously carved by human based on myths, he is shown as a stooped figure carrying the (5) \_\_\_\_\_ on his shoulders. Because of his association with the globe, maps began to be decorated with this image of Atlas.

**SubQuestion No : 22**

**Q.22** Select the most appropriate option to fill in the blank No. 2.

- Ans  1. from  
 2. in  
 3. of  
 4. at

Question Type : MCQ  
Question ID : 264330136067  
Option 1 ID : 264330533082  
Option 2 ID : 264330533080  
Option 3 ID : 264330533079  
Option 4 ID : 264330533081  
Status : Answered  
Chosen Option : 3

**Comprehension:**

In the following passage some words have been deleted. Fill in the blanks with the help of the alternatives given. Select the most appropriate option for each number.

In 700 BCE Greek poet Hesiod (1) \_\_\_\_\_ "Theogony" and "Work and Days". In these mythologies, Atlas was a Titan (2) \_\_\_\_\_ enormous strength. He along with other titans (3) \_\_\_\_\_ the gods of Mount Olympus. While the other Titans were banished to Tartarus after being defeated by the god Zeus as retribution, Atlas (4) \_\_\_\_\_ was forced to carry the earth and the sky for an eternity. In depictions of Atlas, obviously carved by human based on myths, he is shown as a stooped figure carrying the (5) \_\_\_\_\_ on his shoulders. Because of his association with the globe, maps began to be decorated with this image of Atlas.

**SubQuestion No : 23**

**Q.23** Select the most appropriate option to fill in the blank No. 3.

- Ans  1. collaborated  
 2. claimed  
 3. challenged  
 4. corroborated

Question Type : MCQ  
Question ID : 264330136068  
Option 1 ID : 264330533086  
Option 2 ID : 264330533083  
Option 3 ID : 264330533085  
Option 4 ID : 264330533084  
Status : Answered  
Chosen Option : 3

**Comprehension:**

In the following passage some words have been deleted. Fill in the blanks with the help of the alternatives given. Select the most appropriate option for each number.

In 700 BCE Greek poet Hesiod (1) \_\_\_\_\_ "Theogony" and "Work and Days". In these mythologies, Atlas was a Titan (2) \_\_\_\_\_ enormous strength. He along with other titans (3) \_\_\_\_\_ the gods of Mount Olympus. While the other Titans were banished to Tartarus after being defeated by the god Zeus as retribution, Atlas (4) \_\_\_\_\_ was forced to carry the earth and the sky for an eternity. In depictions of Atlas, obviously carved by human based on myths, he is shown as a stooped figure carrying the (5) \_\_\_\_\_ on his shoulders. Because of his association with the globe, maps began to be decorated with this image of Atlas.

**SubQuestion No : 24**

Q.24 Select the most appropriate option to fill in the blank No. 4.

- Ans
- 1. however
  - 2. despite
  - 3. in fact
  - 4. unlike

Question Type : MCQ

Question ID : 264330136069

Option 1 ID : 264330533090

Option 2 ID : 264330533087

Option 3 ID : 264330533088

Option 4 ID : 264330533089

Status : Answered

Chosen Option : 1

**Comprehension:**

In the following passage some words have been deleted. Fill in the blanks with the help of the alternatives given. Select the most appropriate option for each number.

In 700 BCE Greek poet Hesiod (1) \_\_\_\_\_ "Theogony" and "Work and Days". In these mythologies, Atlas was a Titan (2) \_\_\_\_\_ enormous strength. He along with other titans (3) \_\_\_\_\_ the gods of Mount Olympus. While the other Titans were banished to Tartarus after being defeated by the god Zeus as retribution, Atlas (4) \_\_\_\_\_ was forced to carry the earth and the sky for an eternity. In depictions of Atlas, obviously carved by human based on myths, he is shown as a stooped figure carrying the (5) \_\_\_\_\_ on his shoulders. Because of his association with the globe, maps began to be decorated with this image of Atlas.

**SubQuestion No : 25**

Q.25 Select the most appropriate option to fill in the blank No. 5.

- Ans
- 1. universe
  - 2. globe
  - 3. seas
  - 4. heavens

Question Type : MCQ

Question ID : 264330136070

Option 1 ID : 264330533094

Option 2 ID : 264330533091

Option 3 ID : 264330533093

Option 4 ID : 264330533092

Status : Answered

Chosen Option : 2