



SSC MTS **SHIFT – 3 (09-05-2023)**

- ★ **Latest Govt Job updates**
- ★ **Private Job updates**
- ★ **Free Mock tests available**

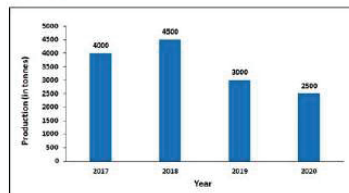
**Visit - [teachingninja.in](https://teachingninja.in)**

## Multi Tasking Non Technical Staff and Havaladar CBIC and CBN Examination 2022

Roll Number	
Candidate Name	
Venue Name	
Exam Date	09/05/2023
Exam Time	3:30 PM - 5:00 PM
Subject	MTS Non Tech Havaladar CBIC and CBN Examination 2022

### Section : Numerical and Mathematical Ability

**Q.1** In the following graph the production of raggi in 4 consecutive years are plotted. In which year the production of raggi is minimum?



- Ans
- 1. 2020
  - 2. 2017
  - 3. 2019
  - 4. 2018

Question Type : MCQ

Question ID : 264330138763

Option 1 ID : 264330543662

Option 2 ID : 264330543659

Option 3 ID : 264330543661

Option 4 ID : 264330543660

Status : Answered

Chosen Option : 1

**Q.2** Length of a rectangle is 58 meters, while its breadth is 30 meters. What is the total cost of covering it with grass bed if cost is Rs. 20 per  $m^2$  ?

- Ans
- 1. Rs. 34800
  - 2. Rs. 32400
  - 3. Rs. 28500
  - 4. Rs. 17400

Question Type : MCQ

Question ID : 264330138453

Option 1 ID : 264330542419

Option 2 ID : 264330542422

Option 3 ID : 264330542420

Option 4 ID : 264330542421

Status : Answered

Chosen Option : 1

Q.3 What is the product of the two number whose HCF is 7 and LCM is 280.

- Ans
- 1. 1980
  - 2. 980
  - 3. 3920
  - 4. 1960

Question Type : MCQ  
Question ID : 264330141041  
Option 1 ID : 264330552514  
Option 2 ID : 264330552513  
Option 3 ID : 264330552512  
Option 4 ID : 264330552511  
Status : Answered  
Chosen Option : 2

Q.4 The average price of two items is Rs. 2440. If their prices are in the ratio 9:11, then find the price of the costlier item.

- Ans
- 1. Rs. 2684
  - 2. Rs. 2552
  - 3. Rs. 2442
  - 4. Rs. 2992

Question Type : MCQ  
Question ID : 264330135393  
Option 1 ID : 264330530479  
Option 2 ID : 264330530482  
Option 3 ID : 264330530480  
Option 4 ID : 264330530481  
Status : Answered  
Chosen Option : 1

Q.5 Find the value of  $0.5 + 0.55 + 0.555 + 0.5555$ :

- Ans
- 1. 1.4405
  - 2. 1.0555
  - 3. 1.5555
  - 4. 2.1605

Question Type : MCQ  
Question ID : 264330135390  
Option 1 ID : 264330530468  
Option 2 ID : 264330530470  
Option 3 ID : 264330530469  
Option 4 ID : 264330530467  
Status : Answered  
Chosen Option : 4

**Q.6** After selling the article for Rs. 430, a person had a loss of 14%. For earning a gain of 14% how much amount an article will be sold?

- Ans**
- 1. Rs. 480
  - 2. Rs. 490
  - 3. Rs. 570
  - 4. Rs. 600

Question Type : **MCQ**  
Question ID : **264330135398**  
Option 1 ID : **264330530499**  
Option 2 ID : **264330530500**  
Option 3 ID : **264330530501**  
Option 4 ID : **264330530502**  
Status : **Answered**  
Chosen Option : **3**

**Q.7** A man can swim at a speed of 14 km/hr in still water. If he takes twice the time as long to swim opposite the flow of the river than with the flow of the river, find the rate of the stream.

- Ans**
- 1.  $14/5$  km/hr
  - 2.  $11/5$  km/hr
  - 3.  $11/4$  km/hr
  - 4.  $14/3$  km/hr

Question Type : **MCQ**  
Question ID : **264330135404**  
Option 1 ID : **264330530524**  
Option 2 ID : **264330530526**  
Option 3 ID : **264330530525**  
Option 4 ID : **264330530523**  
Status : **Not Answered**  
Chosen Option : **--**

**Q.8** A man buys 15 pens for a rupee. How many pens should he sell for a rupee to earn a profit of 50 percent?\*

- Ans**
- 1. 6
  - 2. 8
  - 3. 10
  - 4. 12

Question Type : **MCQ**  
Question ID : **264330137880**  
Option 1 ID : **264330540130**  
Option 2 ID : **264330540127**  
Option 3 ID : **264330540129**  
Option 4 ID : **264330540128**  
Status : **Not Answered**  
Chosen Option : **--**

**Q.9** If the volume of a cube is  $5832 \text{ cm}^3$ , then what is the lateral surface area of this cube?

- Ans
- 1.  $1024 \text{ cm}^2$
  - 2.  $384 \text{ cm}^2$
  - 3.  $576 \text{ cm}^2$
  - 4.  $1296 \text{ cm}^2$

Question Type : **MCQ**  
Question ID : **264330135129**  
Option 1 ID : **264330529453**  
Option 2 ID : **264330529454**  
Option 3 ID : **264330529452**  
Option 4 ID : **264330529451**  
Status : **Answered**  
Chosen Option : **4**

**Q.10** P alone can do a piece of work in 24 days. Q alone can do it in 30 days and R alone can do it in 20 days. In how many days they can complete it together?

- Ans
- 1. 15 days
  - 2. 18 days
  - 3. 8 days
  - 4. 10 days

Question Type : **MCQ**  
Question ID : **264330135124**  
Option 1 ID : **264330529434**  
Option 2 ID : **264330529433**  
Option 3 ID : **264330529432**  
Option 4 ID : **264330529431**  
Status : **Answered**  
Chosen Option : **3**

**Q.11** Manisha has Rs. 8000 in her wallet. Then she increased it by 10%. Now she spent 5% of it. The final value of money in her wallet will be how much percent greater than the initial amount?

- Ans
- 1. 5%
  - 2. 6%
  - 3. 4.5%
  - 4. 5.5%

Question Type : **MCQ**  
Question ID : **264330134085**  
Option 1 ID : **264330525363**  
Option 2 ID : **264330525366**  
Option 3 ID : **264330525364**  
Option 4 ID : **264330525365**  
Status : **Answered**  
Chosen Option : **3**

Q.12 What is the compound interest on Rs. 20000 at 10% per annum for 1 year 6 months, compounded half yearly?

- Ans
- 1. Rs. 3215.5
  - 2. Rs. 3200
  - 3. Rs. 3152.5
  - 4. Rs. 3300

Question Type : MCQ  
Question ID : 264330134092  
Option 1 ID : 264330525394  
Option 2 ID : 264330525391  
Option 3 ID : 264330525393  
Option 4 ID : 264330525392  
Status : Answered  
Chosen Option : 3

Q.13 If interest is being compound annually, then what sum will amount to Rs. 4036.8 in 2 years at the rate of 16 percent per annum at compound interest?

- Ans
- 1. Rs. 3000
  - 2. Rs. 1500
  - 3. Rs. 4000
  - 4. Rs. 2500

Question Type : MCQ  
Question ID : 264330138026  
Option 1 ID : 264330540712  
Option 2 ID : 264330540711  
Option 3 ID : 264330540714  
Option 4 ID : 264330540713  
Status : Not Answered  
Chosen Option : --

Q.14 A man gets a discount of 15% and then 35% on his food bill of Rs. 400. How much discount, in rupees, did he get?

- Ans
- 1. Rs. 255
  - 2. Rs. 300
  - 3. Rs. 250
  - 4. Rs. 179

Question Type : MCQ  
Question ID : 264330135399  
Option 1 ID : 264330530503  
Option 2 ID : 264330530504  
Option 3 ID : 264330530506  
Option 4 ID : 264330530505  
Status : Answered  
Chosen Option : 4

**Q.15** Monika took a non-stop flight to visit her grandparents. The 650 km trip took 1 hour and 30 minutes. Because of the bad weather, the return trip took 2 hour 30 minutes. What was her average speed for the round trip?

- Ans**
- 1. 1300 kmph
  - 2. 550 kmph
  - 3. 325 kmph
  - 4. 690 kmph

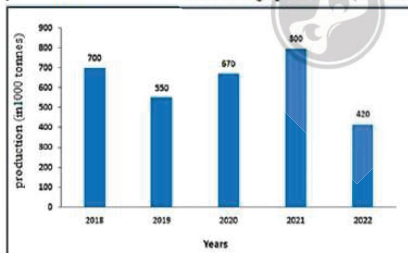
Question Type : MCQ  
Question ID : 264330141027  
Option 1 ID : 264330552455  
Option 2 ID : 264330552458  
Option 3 ID : 264330552457  
Option 4 ID : 264330552456  
Status : Not Answered  
Chosen Option : --

**Q.16** Three positive numbers are in the proportion of 2:3:5. If the sum of their squares is 342, then find the largest number.

- Ans**
- 1. 35
  - 2. 55
  - 3. 15
  - 4. 25

Question Type : MCQ  
Question ID : 264330135401  
Option 1 ID : 264330530512  
Option 2 ID : 264330530514  
Option 3 ID : 264330530511  
Option 4 ID : 264330530513  
Status : Not Answered  
Chosen Option : --

**Q.17** The bar chart given below shows the annual production (in 1000 tonnes) of coffee of a country for the years 2018 to 2022. What is the average production (in 1000 tonnes) of coffee for years 2018, 2019 and 2020?



- Ans**
- 1. 530
  - 2. 810
  - 3. 720
  - 4. 640

Question Type : MCQ  
Question ID : 264330135408  
Option 1 ID : 264330530539  
Option 2 ID : 264330530542  
Option 3 ID : 264330530541  
Option 4 ID : 264330530540  
Status : Answered  
Chosen Option : 4

**Q.18** If A is the mean proportion of 24 and 6. B is the mean proportion of 81 and 9. Find the value of  $3A + B$ .

- Ans**
- 1. 33
  - 2. 32
  - 3. 63
  - 4. 55

Question Type : **MCQ**  
Question ID : **264330135400**  
Option 1 ID : **264330530510**  
Option 2 ID : **264330530509**  
Option 3 ID : **264330530508**  
Option 4 ID : **264330530507**  
Status : **Not Answered**  
Chosen Option : --

**Q.19** Find the total surface area of cuboid having length 23 cm, breadth 18 cm and height 35 cm.

- Ans**
- 1.  $6541 \text{ cm}^2$
  - 2.  $2341 \text{ cm}^2$
  - 3.  $3698 \text{ cm}^2$
  - 4.  $5436 \text{ cm}^2$

Question Type : **MCQ**  
Question ID : **264330138764**  
Option 1 ID : **264330543666**  
Option 2 ID : **264330543663**  
Option 3 ID : **264330543664**  
Option 4 ID : **264330543665**  
Status : **Answered**  
Chosen Option : 3

**Q.20** 35 men can complete a work in 15 days. 15 women can complete the same work in 35 days. In how many days 9 men and 16 women can complete the work?

- Ans**
- 1. 15 days
  - 2. 18 days
  - 3. 10 days
  - 4. 21 days

Question Type : **MCQ**  
Question ID : **264330138449**  
Option 1 ID : **264330542405**  
Option 2 ID : **264330542406**  
Option 3 ID : **264330542404**  
Option 4 ID : **264330542403**  
Status : **Not Answered**  
Chosen Option : --

Section : Reasoning Ability and Problem Solving



Q.1 In the following question, select the missing number of the given series.

13, 14, 27, 41, 68, ?

- Ans
- 1. 109
  - 2. 118
  - 3. 110
  - 4. 113

Question Type : MCQ  
Question ID : 264330135607  
Option 1 ID : 264330531330  
Option 2 ID : 264330531329  
Option 3 ID : 264330531327  
Option 4 ID : 264330531328  
Status : Not Answered  
Chosen Option : --

Q.2 Select the option that is related to the sixth term in the same way as the first term is related to the second term and third term is related to fourth term.

KTM : GOG :: PAB : VVL :: ? : VJN

- Ans
- 1. ROC
  - 2. ROB
  - 3. QOB
  - 4. QOD

Question Type : MCQ  
Question ID : 264330135596  
Option 1 ID : 264330531284  
Option 2 ID : 264330531283  
Option 3 ID : 264330531285  
Option 4 ID : 264330531286  
Status : Not Answered  
Chosen Option : --

Q.3 Select the option that is related to the third number in the same way as the second number is related to the first number.

104 : 13 :: 152 : ?

- Ans
- 1. 21
  - 2. 17
  - 3. 19
  - 4. 23

Question Type : MCQ  
Question ID : 264330133709  
Option 1 ID : 264330523861  
Option 2 ID : 264330523859  
Option 3 ID : 264330523862  
Option 4 ID : 264330523860  
Status : Answered  
Chosen Option : 3

Q.4 Which of the following numbers will replace the question mark (?) in the given series?

12, 12, 14, 42, 46, 230, 236, 1652, ?

Ans  1. 1860

2. 1660

3. 1720

4. 1820

Question Type : MCQ

Question ID : 264330133707

Option 1 ID : 264330523854

Option 2 ID : 264330523852

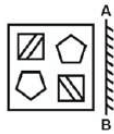
Option 3 ID : 264330523851

Option 4 ID : 264330523853

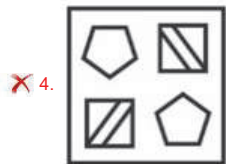
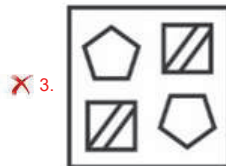
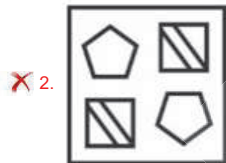
Status : Not Answered

Chosen Option : --

Q.5 If a mirror is placed on the line AB, then out of the option figures which figure will be the right image of the question figure?



Ans



Question Type : MCQ

Question ID : 264330138622

Option 1 ID : 264330543096

Option 2 ID : 264330543097

Option 3 ID : 264330543095

Option 4 ID : 264330543098

Status : Answered

Chosen Option : 1

**Q.6** Select the option in which the numbers shares the same relationship in set as that shared by the numbers in the given set.  
(NOTE: Operations should be performed on the whole numbers, without breaking down the numbers into its constituent digits. E.g.13 – Operations on 13 such as adding /subtracting /multiplying etc. to 13 can be performed. Breaking down 13 into 1 and 3 and then performing mathematical operations on 1 and 3 is not allowed)

(2, 6, 8)

(117, 351, 468)

- Ans**
- 1. (6, 19, 25)
  - 2. (4, 12, 16)
  - 3. (5, 12, 25)
  - 4. (7, 14, 23)

Question Type : **MCQ**  
Question ID : **264330135609**  
Option 1 ID : **264330531337**  
Option 2 ID : **264330531335**  
Option 3 ID : **264330531336**  
Option 4 ID : **264330531338**  
Status : **Answered**  
Chosen Option : **2**

**Q.7** If A denotes 'addition', B denotes 'multiplication', C denotes 'subtraction', and D denotes 'division', then what will be the value of the following equation?  
4 B 12 A 18 C (72 D 6) = ?

- Ans**
- 1. 60
  - 2. 54
  - 3. 48
  - 4. 63

Question Type : **MCQ**  
Question ID : **264330137826**  
Option 1 ID : **264330539914**  
Option 2 ID : **264330539912**  
Option 3 ID : **264330539913**  
Option 4 ID : **264330539911**  
Status : **Answered**  
Chosen Option : **2**

**Q.8** Price of five cars B, M, J, N and U are compared. Price of J is less than U, M and N. Price of B is the least. No two cars have the same price. Price of U is less than M. Price of neither U nor M is the highest. Price of how many cars is less than the price of U?

- Ans**
- 1. 1
  - 2. 3
  - 3. 2
  - 4. 0

Question Type : **MCQ**  
Question ID : **264330135603**  
Option 1 ID : **264330531314**  
Option 2 ID : **264330531312**  
Option 3 ID : **264330531313**  
Option 4 ID : **264330531311**  
Status : **Answered**  
Chosen Option : **2**

**Q.9** In a certain code language, 'BELOW' is coded as 'ASPIF'. What is the code for 'BLOOD' in that code language?

- Ans**
- ✓ 1. HSSPF
  - ✗ 2. HSSQG
  - ✗ 3. HSSPG
  - ✗ 4. HSSQF

Question Type : **MCQ**  
Question ID : **264330138856**  
Option 1 ID : **264330544031**  
Option 2 ID : **264330544034**  
Option 3 ID : **264330544033**  
Option 4 ID : **264330544032**  
Status : **Not Answered**  
Chosen Option : --

**Q.10** In the following question below are given some statements followed by some conclusions based on those statements. Taking the given statements to be true even if they seem to be at variance from commonly known facts. Read all the conclusions and then decide which of the given conclusion logically follows the given statements.

Statements:

I. No watch is pen.

II. All pen are green.

Conclusion:

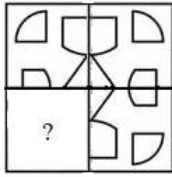
I. Some green are pen.

II. All green are watch.

- Ans**
- ✗ 1. Both conclusions I and II follows
  - ✓ 2. Only conclusion I follows
  - ✗ 3. Neither conclusion follows
  - ✗ 4. Only conclusion II follows

Question Type : **MCQ**  
Question ID : **264330135604**  
Option 1 ID : **264330531317**  
Option 2 ID : **264330531315**  
Option 3 ID : **264330531318**  
Option 4 ID : **264330531316**  
Status : **Answered**  
Chosen Option : **2**

Q.11 Which answer figure will complete the pattern in the question figure?



Ans

✗ 1.



✗ 2.



✓ 3.



✗ 4.



Question Type : MCQ

Question ID : 264330135614

Option 1 ID : 264330531357

Option 2 ID : 264330531356

Option 3 ID : 264330531355

Option 4 ID : 264330531358

Status : Answered

Chosen Option : 3



Teachingninja.in

**Q.12** In the following question below are given some statements followed by some conclusions based on those statements. Taking the given statements to be true even if they seem to be at variance from commonly known facts. Read all the conclusions and then decide which of the given conclusion logically follows the given statements.

Statements:

I. All S are R.

II. No Z is S.

Conclusions:

I. Some S are not Z.

II. Some R are not Z.

III. No R is S.

- Ans**
- 1. Both conclusions I and II follows
  - 2. Both conclusions I and III follows
  - 3. Neither conclusion follows
  - 4. Only conclusion I follows

Question Type : **MCQ**  
Question ID : **264330135605**  
Option 1 ID : **264330531321**  
Option 2 ID : **264330531319**  
Option 3 ID : **264330531322**  
Option 4 ID : **264330531320**  
Status : **Answered**  
Chosen Option : **1**

**Q.13** In a certain code language, 'DEEPAK' is written as '3' and 'MEME' is written as '2'. How will 'PLAIN' be written in that language?

- Ans**
- 1. 11
  - 2. 2
  - 3. 5
  - 4. 4

Question Type : **MCQ**  
Question ID : **264330133564**  
Option 1 ID : **264330523280**  
Option 2 ID : **264330523279**  
Option 3 ID : **264330523282**  
Option 4 ID : **264330523281**  
Status : **Not Answered**  
Chosen Option : **--**

**Q.14** Six boys Ram, Sumit, Sunil, Rahul, Raj and Aman are sitting around a circular table facing towards the centre (not necessarily in the same order). Sunil is not the immediate neighbour of Aman. Aman is second to right of Ram. Rahul is second to the right of Sumit. Raj is to immediate left of Ram. Who is the immediate neighbour of Raj and Rahul both?

- Ans**
- 1. Aman
  - 2. Ram
  - 3. Sumit
  - 4. Sunil

Question Type : **MCQ**  
Question ID : **264330135601**  
Option 1 ID : **264330531305**  
Option 2 ID : **264330531304**  
Option 3 ID : **264330531306**  
Option 4 ID : **264330531303**  
Status : **Answered**  
Chosen Option : **4**

**Q.15** Select the option that is related to the third term in the same way as the second term is related to the first term and sixth term is related to fifth term.

AMC : YJA :: PFD : ? :: JCB : HZZ

- Ans**
- 1. NDB
  - 2. MDB
  - 3. MCB
  - 4. NCB

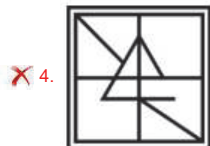
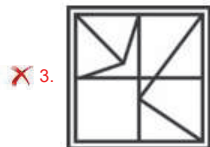
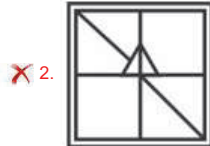
Question Type : **MCQ**  
Question ID : **264330135595**  
Option 1 ID : **264330531281**  
Option 2 ID : **264330531282**  
Option 3 ID : **264330531279**  
Option 4 ID : **264330531280**  
Status : **Answered**  
Chosen Option : **4**



Q.16 Select the option figure in which the given figure is embedded. (rotation is NOT allowed)



Ans



Teachingninja.in

Question Type : MCQ

Question ID : 264330138621

Option 1 ID : 264330543091

Option 2 ID : 264330543094

Option 3 ID : 264330543092

Option 4 ID : 264330543093

Status : Answered

Chosen Option : 1

Q.17 A series is given with one term missing. Select the correct alternative from the given ones that will complete the series.

AGMR, FLRW, KQWB, PVBG, ?

Ans ✗ 1. UBGL

✗ 2. UBHL

✓ 3. UAGL

✗ 4. UCHL

Question Type : MCQ

Question ID : 264330135593

Option 1 ID : 264330531272

Option 2 ID : 264330531274

Option 3 ID : 264330531271

Option 4 ID : 264330531273

Status : Answered

Chosen Option : 3



Q.18 After interchanging the which two numbers, the value of the given equation will be '20'?

$$8 \times 2 + 6 \div 3 - 7$$

- Ans
- 1. 6 and 7
  - 2. 8 and 7
  - 3. 2 and 6
  - 4. 2 and 3

Question Type : MCQ

Question ID : 264330135610

Option 1 ID : 264330531341

Option 2 ID : 264330531339

Option 3 ID : 264330531340

Option 4 ID : 264330531342

Status : Answered

Chosen Option : 4

Q.19 In a certain code language, 'MANAGER' is written as 'GANARME'. How will 'OFFICER' be written in that language?

- Ans
- 1. CIFFREO
  - 2. CFIFROE
  - 3. CFIRFOE
  - 4. CIFFROE

Question Type : MCQ

Question ID : 264330137585

Option 1 ID : 264330538950

Option 2 ID : 264330538947

Option 3 ID : 264330538949

Option 4 ID : 264330538948

Status : Answered

Chosen Option : 4

Q.20 Eight friends Mansi, Shweta, Monika, Payal, Aarti, Kajal, Laxmi and Rani are sitting around a circular table facing towards the centre (not necessarily in the same order), Mansi is third to the left of Monika. Aarti is second to the right of Monika. Shweta is fourth to the left of Payal. Payal is second to the left of Mansi. Rani is third to the right of Kajal. Kajal is not the immediate neighbour of Mansi. Who is second to the left of Monika?

- Ans
- 1. Laxmi
  - 2. Mansi
  - 3. Aarti
  - 4. Rani

Question Type : MCQ

Question ID : 264330135602

Option 1 ID : 264330531307

Option 2 ID : 264330531310

Option 3 ID : 264330531308

Option 4 ID : 264330531309

Status : Answered

Chosen Option : 4

Section : General Awareness

Q.1 The constitution of India was adopted by the Constituent Assembly in the year \_\_\_\_\_.

- Ans
- 1. 1947
  - 2. 1949
  - 3. 1950
  - 4. 1948

Question Type : MCQ  
Question ID : 264330135479  
Option 1 ID : 264330530823  
Option 2 ID : 264330530825  
Option 3 ID : 264330530826  
Option 4 ID : 264330530824  
Status : Answered  
Chosen Option : 2

Q.2 'Ace against Odds' is an autobiographical book by \_\_\_\_\_.

- Ans
- 1. V.V. Giri
  - 2. Mary Kom
  - 3. Sania Mirza
  - 4. Sachin Tendulkar

Question Type : MCQ  
Question ID : 264330138926  
Option 1 ID : 264330544314  
Option 2 ID : 264330544311  
Option 3 ID : 264330544312  
Option 4 ID : 264330544313  
Status : Answered  
Chosen Option : 1

Q.3 Who among the following was the first Indian musician to receive the Grammy Life Time Achievement Award?

- Ans
- 1. Nucleya
  - 2. Pandit Ravi Shankar
  - 3. Hariprasad Chaurasia
  - 4. Ustad Zakir Hussain

Question Type : MCQ  
Question ID : 264330135477  
Option 1 ID : 264330530818  
Option 2 ID : 264330530815  
Option 3 ID : 264330530816  
Option 4 ID : 264330530817  
Status : Answered  
Chosen Option : 2

Q.4 The first battle of Tarain was fought between \_\_\_\_\_ .

- Ans
- 1. Prithviraj Chauhan and Mohammad Bin Qasim
  - 2. Prithviraj Chauhan and Mahmud Ghazanvi
  - 3. Prithviraj Chauhan and Qutubuddin Aibak
  - 4. Prithviraj Chauhan and Muhammad Ghori

Question Type : MCQ  
Question ID : 264330134070  
Option 1 ID : 264330525303  
Option 2 ID : 264330525304  
Option 3 ID : 264330525306  
Option 4 ID : 264330525305  
Status : Answered  
Chosen Option : 4

Q.5 The process in which metals are extracted from their ores by heating beyond the melting point is called \_\_\_\_\_.

- Ans
- 1. Spinning
  - 2. Smelting
  - 3. Heaving
  - 4. Extracting

Question Type : MCQ  
Question ID : 264330138938  
Option 1 ID : 264330544359  
Option 2 ID : 264330544362  
Option 3 ID : 264330544360  
Option 4 ID : 264330544361  
Status : Answered  
Chosen Option : 2

Q.6 Which among the following vitamins influences iron absorption?

- Ans
- 1. Vitamin B
  - 2. Vitamin D
  - 3. Vitamin C
  - 4. Vitamin K

Question Type : MCQ  
Question ID : 264330135465  
Option 1 ID : 264330530767  
Option 2 ID : 264330530769  
Option 3 ID : 264330530768  
Option 4 ID : 264330530770  
Status : Answered  
Chosen Option : 4

**Q.7** The Medical Termination of Pregnancy (MTP) Amendment Act, 2021 increases the upper limit for termination from 20 to \_\_\_\_\_ weeks for certain categories of women.

- Ans**
- 1. 22
  - 2. 28
  - 3. 26
  - 4. 24

Question Type : **MCQ**  
Question ID : **264330137920**  
Option 1 ID : **264330540288**  
Option 2 ID : **264330540290**  
Option 3 ID : **264330540289**  
Option 4 ID : **264330540287**  
Status : **Answered**  
Chosen Option : **3**

**Q.8** As of 2022, what is the capital of Maldives, a neighbouring country of India?

- Ans**
- 1. Kavaratti
  - 2. Male
  - 3. Colombo
  - 4. Abu Dhabi

Question Type : **MCQ**  
Question ID : **264330137956**  
Option 1 ID : **264330540432**  
Option 2 ID : **264330540431**  
Option 3 ID : **264330540433**  
Option 4 ID : **264330540434**  
Status : **Answered**  
Chosen Option : **2**

**Q.9** Renowned Rajasthani folk dancer Gulabo Sopera is recognized for \_\_\_\_\_ dance.

- Ans**
- 1. Bihu
  - 2. Garba
  - 3. Jhumar
  - 4. Kalbeliya

Question Type : **MCQ**  
Question ID : **264330138928**  
Option 1 ID : **264330544320**  
Option 2 ID : **264330544322**  
Option 3 ID : **264330544319**  
Option 4 ID : **264330544321**  
Status : **Answered**  
Chosen Option : **3**

Q.10 Which God is worshipped during the festival of Chhath Puja?

- Ans
- 1. Surya
  - 2. Agni
  - 3. Indra
  - 4. Vishnu

Question Type : MCQ  
Question ID : 264330138675  
Option 1 ID : 264330543309  
Option 2 ID : 264330543308  
Option 3 ID : 264330543307  
Option 4 ID : 264330543310  
Status : Answered  
Chosen Option : 1

Q.11 Which acid is predominantly present in tomatoes?

- Ans
- 1. Carbonic acid
  - 2. Acetic acid
  - 3. Oxalic acid
  - 4. Tartaric acid

Question Type : MCQ  
Question ID : 264330134063  
Option 1 ID : 264330525275  
Option 2 ID : 264330525278  
Option 3 ID : 264330525277  
Option 4 ID : 264330525276  
Status : Answered  
Chosen Option : 3

Q.12 \_\_\_\_\_ is the father of the modern periodic table.

- Ans
- 1. J. J. Thomson
  - 2. Ernest Rutherford
  - 3. John Newland
  - 4. Dmitri Mendeleev

Question Type : MCQ  
Question ID : 264330134061  
Option 1 ID : 264330525268  
Option 2 ID : 264330525267  
Option 3 ID : 264330525270  
Option 4 ID : 264330525269  
Status : Answered  
Chosen Option : 4

Q.13 Where is the deepest point on earth, the Mariana Trench, located?

- Ans
- 1. Atlantic Ocean
  - 2. Pacific Ocean
  - 3. Indian Ocean
  - 4. Arctic ocean

Question Type : MCQ  
Question ID : 264330134064  
Option 1 ID : 264330525280  
Option 2 ID : 264330525279  
Option 3 ID : 264330525281  
Option 4 ID : 264330525282  
Status : Answered  
Chosen Option : 2

Q.14 The Standard Meridian of India (82°30' E) passes through \_\_\_\_\_ state of India.

- Ans
- 1. Karnataka
  - 2. Madhya Pradesh
  - 3. West Bengal
  - 4. Punjab

Question Type : MCQ  
Question ID : 264330135469  
Option 1 ID : 264330530784  
Option 2 ID : 264330530786  
Option 3 ID : 264330530785  
Option 4 ID : 264330530783  
Status : Answered  
Chosen Option : 2

Q.15 Which famous Indian dancer is associated with Pandavani dance form?

- Ans
- 1. Vyjayanthimala
  - 2. Pandit Birju Maharaj
  - 3. Vempati Chinna Satyam
  - 4. Teejan Bai

Question Type : MCQ  
Question ID : 264330135461  
Option 1 ID : 264330530754  
Option 2 ID : 264330530753  
Option 3 ID : 264330530751  
Option 4 ID : 264330530752  
Status : Not Answered  
Chosen Option : --

Q.16 Bhagat Singh, Sukhdev and Rajguru were executed on \_\_\_\_\_.

- Ans
- 1. March 25, 1932
  - 2. May 23, 1931
  - 3. April 21, 1930
  - 4. March 23, 1931

Question Type : MCQ  
Question ID : 264330137934  
Option 1 ID : 264330540346  
Option 2 ID : 264330540343  
Option 3 ID : 264330540345  
Option 4 ID : 264330540344  
Status : Answered  
Chosen Option : 4

Q.17 Rangarajan Committee is associated with \_\_\_\_\_.

- Ans
- 1. Election reforms
  - 2. Educational reform
  - 3. Environmental protection
  - 4. Estimation of poverty

Question Type : MCQ  
Question ID : 264330137031  
Option 1 ID : 264330536770  
Option 2 ID : 264330536767  
Option 3 ID : 264330536769  
Option 4 ID : 264330536768  
Status : Answered  
Chosen Option : 3

Q.18 In 1918, Mahatma Gandhi successfully led a strike of \_\_\_\_\_.

- Ans
- 1. Army Soldiers
  - 2. Dalits
  - 3. Mill workers
  - 4. Traders

Question Type : MCQ  
Question ID : 264330138698  
Option 1 ID : 264330543399  
Option 2 ID : 264330543402  
Option 3 ID : 264330543400  
Option 4 ID : 264330543401  
Status : Answered  
Chosen Option : 3

Q.19 The famous Dhamek Stupa is located in which of the following states?

- Ans
- 1. Andhra Pradesh
  - 2. Uttar Pradesh
  - 3. Madhya Pradesh
  - 4. Himachal Pradesh

Question Type : MCQ  
Question ID : 264330137923  
Option 1 ID : 264330540301  
Option 2 ID : 264330540299  
Option 3 ID : 264330540300  
Option 4 ID : 264330540302  
Status : Answered  
Chosen Option : 2

Q.20 The Legislative Council of a State comprises not more than \_\_\_\_\_ of the total number of members in the Legislative Assembly of the State.

- Ans
- 1. two-third
  - 2. three-fourth
  - 3. one-third
  - 4. one-fifth

Question Type : MCQ  
Question ID : 264330135480  
Option 1 ID : 264330530829  
Option 2 ID : 264330530830  
Option 3 ID : 264330530827  
Option 4 ID : 264330530828  
Status : Answered  
Chosen Option : 3

Q.21 Meri Policy Mere Hath scheme was launched by \_\_\_\_\_ Ministry of India in 2022.

- Ans
- 1. Human Resource Development
  - 2. Social Justice & Empowerment
  - 3. Housing and Urban Affairs
  - 4. Agriculture and Farmers Welfare

Question Type : MCQ  
Question ID : 264330135459  
Option 1 ID : 264330530743  
Option 2 ID : 264330530744  
Option 3 ID : 264330530745  
Option 4 ID : 264330530746  
Status : Not Answered  
Chosen Option : --



Q.22 In the situation of liquidity trap, the speculative money demand function becomes \_\_\_\_\_.

- Ans
- 1. unitary elastic
  - 2. infinitely elastic
  - 3. Inelastic
  - 4. Zero

Question Type : MCQ  
Question ID : 264330138931  
Option 1 ID : 264330544331  
Option 2 ID : 264330544332  
Option 3 ID : 264330544333  
Option 4 ID : 264330544334  
Status : Not Answered  
Chosen Option : --

Q.23 The Rampurva bull that was part of a Mauryan pillar found in Rampurva, Bihar is now been placed at \_\_\_\_\_.

- Ans
- 1. Pradhan Mantri bhavan
  - 2. Sansad
  - 3. Rajpath
  - 4. Rashtrapati Bhavan

Question Type : MCQ  
Question ID : 264330138695  
Option 1 ID : 264330543388  
Option 2 ID : 264330543390  
Option 3 ID : 264330543389  
Option 4 ID : 264330543387  
Status : Answered  
Chosen Option : 2

Q.24 Which country will host the Men's Cricket World Cup in 2023?

- Ans
- 1. India
  - 2. United Kingdom
  - 3. Australia
  - 4. Pakistan

Question Type : MCQ  
Question ID : 264330134079  
Option 1 ID : 264330525340  
Option 2 ID : 264330525339  
Option 3 ID : 264330525341  
Option 4 ID : 264330525342  
Status : Answered  
Chosen Option : 1

Q.25 In which country was the ICC Cricket World Cup (Women's) 2022, held?

- Ans
- 1. England
  - 2. Australia
  - 3. New Zealand
  - 4. India

Question Type : MCQ  
Question ID : 264330135481  
Option 1 ID : 264330530831  
Option 2 ID : 264330530832  
Option 3 ID : 264330530833  
Option 4 ID : 264330530834  
Status : Not Answered  
Chosen Option : --

Section : English Language and Comprehension

Q.1 Choose the word that means the same as the given word.

Abide

- Ans
- 1. Repudiate
  - 2. Decamp
  - 3. Dwell
  - 4. Vamoose

Question Type : MCQ  
Question ID : 264330136838  
Option 1 ID : 264330536043  
Option 2 ID : 264330536044  
Option 3 ID : 264330536045  
Option 4 ID : 264330536046  
Status : Answered  
Chosen Option : 4

Q.2 In the following question, out of the given four alternatives, select the alternative which best expresses the meaning of the Idiom/Phrase.

To pull the trigger

- Ans
- 1. To make an exaggerated statement
  - 2. To do unnecessary things
  - 3. To insult and disgrace the people
  - 4. To commit a course of action

Question Type : MCQ  
Question ID : 264330135225  
Option 1 ID : 264330529825  
Option 2 ID : 264330529826  
Option 3 ID : 264330529823  
Option 4 ID : 264330529824  
Status : Answered  
Chosen Option : 4

Q.3 Choose the incorrectly spelt word.

- Ans
- 1. Famous
  - 2. Ornage
  - 3. Leader
  - 4. Flowing

Question Type : MCQ  
Question ID : 264330135226  
Option 1 ID : 264330529828  
Option 2 ID : 264330529827  
Option 3 ID : 264330529830  
Option 4 ID : 264330529829  
Status : Answered  
Chosen Option : 2

Q.4 Improve the underlined part of the sentence. Choose 'No improvement' as an answer if the sentence is grammatically correct.  
Raccoons have being more active at night.

- Ans
- 1. are more
  - 2. are few
  - 3. No improvement
  - 4. are much

Question Type : MCQ  
Question ID : 264330134505  
Option 1 ID : 264330526983  
Option 2 ID : 264330526985  
Option 3 ID : 264330526986  
Option 4 ID : 264330526984  
Status : Answered  
Chosen Option : 1

Q.5 Identify the segment that contains a grammatical error. If there is no error, select 'No error'.

Professor Murli's eyebrows / rose a little higher and his / gaze became distinctly coldest.

- Ans
- 1. gaze became distinctly coldest.
  - 2. No error
  - 3. Professor Murli's eyebrows
  - 4. rose a little higher and his

Question Type : MCQ  
Question ID : 264330136385  
Option 1 ID : 264330534309  
Option 2 ID : 264330534310  
Option 3 ID : 264330534307  
Option 4 ID : 264330534308  
Status : Answered  
Chosen Option : 1

Q.6 Select the most appropriate antonym of the given word.

Reverence

- Ans
- 1. Venerate
  - 2. Honour
  - 3. Scorn
  - 4. Deference

Question Type : MCQ  
Question ID : 264330136309  
Option 1 ID : 264330534014  
Option 2 ID : 264330534013  
Option 3 ID : 264330534011  
Option 4 ID : 264330534012  
Status : Answered  
Chosen Option : 3

Q.7 In the following question, out of the given four alternatives, select the alternative which best expresses the meaning of the Idiom/Phrase.  
On the job

- Ans
- 1. In the war
  - 2. Avoiding the work
  - 3. Working at a particular job
  - 4. On the contrary

Question Type : MCQ  
Question ID : 264330134548  
Option 1 ID : 264330527147  
Option 2 ID : 264330527149  
Option 3 ID : 264330527148  
Option 4 ID : 264330527150  
Status : Answered  
Chosen Option : 1

Q.8 Find the part of the given sentence that has an error in it. If there is no error, choose 'No error'.

Without the greenhouse effect, Earths temperature would be below freezing.

- Ans
- 1. Earths temperature would
  - 2. be below freezing.
  - 3. Without the greenhouse effect,
  - 4. No error

Question Type : MCQ  
Question ID : 264330135206  
Option 1 ID : 264330529752  
Option 2 ID : 264330529753  
Option 3 ID : 264330529751  
Option 4 ID : 264330529754  
Status : Answered  
Chosen Option : 1

**Q.9** Select the word segment that substitutes (replaces) the bracketed word segment correctly and completes the sentence meaningfully. Select the option 'no correction required' if the sentence is correct as given.

With a (sudden push off understanding), Harry realised who the people in the end beds must be.

- Ans**
- 1. sudden rush of understanding
  - 2. suddenly rushed understanding
  - 3. No correction required
  - 4. all of sudden understand

Question Type : MCQ  
Question ID : 264330136388  
Option 1 ID : 264330534320  
Option 2 ID : 264330534319  
Option 3 ID : 264330534322  
Option 4 ID : 264330534321  
Status : Answered  
Chosen Option : 1

**Q.10** Select the most appropriate option to fill in the blank.

The most common sports injury is a \_\_\_\_\_.

- Ans**
- 1. brush
  - 2. bruise
  - 3. brews
  - 4. breve

Question Type : MCQ  
Question ID : 264330136819  
Option 1 ID : 264330535974  
Option 2 ID : 264330535972  
Option 3 ID : 264330535973  
Option 4 ID : 264330535971  
Status : Answered  
Chosen Option : 2

**Q.11** Select the appropriate synonym for the underlined word.

You should never judge a person without knowing the truth.

- Ans**
- 1. decide
  - 2. wink
  - 3. pacify
  - 4. care

Question Type : MCQ  
Question ID : 264330135220  
Option 1 ID : 264330529806  
Option 2 ID : 264330529803  
Option 3 ID : 264330529804  
Option 4 ID : 264330529805  
Status : Answered  
Chosen Option : 1

Q.12 Choose the word that can substitute the given group of words.

A residence for nuns

- Ans
- 1. Convent
  - 2. Refugee
  - 3. Monastery
  - 4. Mint

Question Type : MCQ  
Question ID : 264330135219  
Option 1 ID : 264330529799  
Option 2 ID : 264330529800  
Option 3 ID : 264330529802  
Option 4 ID : 264330529801  
Status : Answered  
Chosen Option : 1

Q.13 Improve the underlined part of the sentence. Choose 'No improvement' as an answer if the sentence is grammatically correct.

All work and none play makes Jack a dull boy.

- Ans
- 1. no play
  - 2. No improvement
  - 3. none plays
  - 4. no played

Question Type : MCQ  
Question ID : 264330135261  
Option 1 ID : 264330529965  
Option 2 ID : 264330529966  
Option 3 ID : 264330529964  
Option 4 ID : 264330529963  
Status : Answered  
Chosen Option : 1

Q.14 Select the most appropriate option to fill in the blank.

Since the temperatures can soar in summer, choose clothing that is lightweight and \_\_\_\_\_.

- Ans
- 1. breathable
  - 2. airtight
  - 3. bulky
  - 4. hefty

Question Type : MCQ  
Question ID : 264330135229  
Option 1 ID : 264330529839  
Option 2 ID : 264330529842  
Option 3 ID : 264330529840  
Option 4 ID : 264330529841  
Status : Answered  
Chosen Option : 1

**Q.15** A sentence has been given with a blank to be filled with an appropriate option. Choose the correct alternative.  
\_\_\_\_\_ every nation in the world is now administering vaccines.

- Ans**
- 1. Nearly
  - 2. Near
  - 3. Nearest
  - 4. Nearer

Question Type : **MCQ**  
Question ID : **264330136854**  
Option 1 ID : **264330536108**  
Option 2 ID : **264330536110**  
Option 3 ID : **264330536107**  
Option 4 ID : **264330536109**  
Status : **Answered**  
Chosen Option : 1

**Q.16** Find the part of the given sentence that has an error in it. If there is no error, choose 'No error'.

My research focus on marine mammal behaviour, ecology and conservation.

- Ans**
- 1. ecology and conservation.
  - 2. marine mammal behaviour,
  - 3. No error
  - 4. My research focus on

Question Type : **MCQ**  
Question ID : **264330134798**  
Option 1 ID : **264330528137**  
Option 2 ID : **264330528136**  
Option 3 ID : **264330528138**  
Option 4 ID : **264330528135**  
Status : **Answered**  
Chosen Option : 4

**Q.17** Select the appropriate antonym for the underlined word.

It was a very generous and jolly voice.

- Ans**
- 1. morose
  - 2. tabular
  - 3. festive
  - 4. witty

Question Type : **MCQ**  
Question ID : **264330135223**  
Option 1 ID : **264330529818**  
Option 2 ID : **264330529816**  
Option 3 ID : **264330529815**  
Option 4 ID : **264330529817**  
Status : **Answered**  
Chosen Option : 1

**Q.18** Choose the word that can substitute the given group of words.  
One who has lost one's parents

- Ans
- 1. Recluse
  - 2. Martyr
  - 3. Orphan
  - 4. Snob

Question Type : **MCQ**  
Question ID : **264330134542**  
Option 1 ID : **264330527125**  
Option 2 ID : **264330527123**  
Option 3 ID : **264330527126**  
Option 4 ID : **264330527124**  
Status : **Answered**  
Chosen Option : **3**

**Q.19** Choose the sentence with no spelling error.

- Ans
- 1. It is not even a consciuos process.
  - 2. It is not even a concious process.
  - 3. It is not even a conscios process.
  - 4. It is not even a conscious process.

Question Type : **MCQ**  
Question ID : **264330136818**  
Option 1 ID : **264330535967**  
Option 2 ID : **264330535969**  
Option 3 ID : **264330535968**  
Option 4 ID : **264330535970**  
Status : **Answered**  
Chosen Option : **4**

**Q.20** A sentence has been given with a blank to be filled with an appropriate option. Choose the correct alternative.

I am not sure \_\_\_\_\_ wearing this black dress.

- Ans
- 1. with
  - 2. in
  - 3. about
  - 4. off

Question Type : **MCQ**  
Question ID : **264330135210**  
Option 1 ID : **264330529770**  
Option 2 ID : **264330529769**  
Option 3 ID : **264330529767**  
Option 4 ID : **264330529768**  
Status : **Answered**  
Chosen Option : **3**



**Comprehension:**

In the following passage some words have been deleted. Fill in the blanks with the help of the alternatives given. Select the most appropriate option for each number.

(1) \_\_\_\_\_ people think that we can learn a lot about the culture of a foreign country (2) \_\_\_\_\_ by living in that country. However, this is not necessarily true. Often, the longer we stay in a (3) \_\_\_\_\_ country, the more we realize how little we actually know about the culture of that country. Books and talks about other people's (4) \_\_\_\_\_ can even be dangerous because they concentrate on cultural differences and (5) \_\_\_\_\_ national character, and sometimes a lot of information they contain is untrue.

**SubQuestion No : 21**

**Q.21** Select the most appropriate option to fill in blank number 1.

- Ans
- 1. Many
  - 2. Few
  - 3. Every
  - 4. Each

Question Type : MCQ  
Question ID : 264330136300  
Option 1 ID : 264330533975  
Option 2 ID : 264330533976  
Option 3 ID : 264330533978  
Option 4 ID : 264330533977  
Status : Answered  
Chosen Option : 1

**Comprehension:**

In the following passage some words have been deleted. Fill in the blanks with the help of the alternatives given. Select the most appropriate option for each number.

(1) \_\_\_\_\_ people think that we can learn a lot about the culture of a foreign country (2) \_\_\_\_\_ by living in that country. However, this is not necessarily true. Often, the longer we stay in a (3) \_\_\_\_\_ country, the more we realize how little we actually know about the culture of that country. Books and talks about other people's (4) \_\_\_\_\_ can even be dangerous because they concentrate on cultural differences and (5) \_\_\_\_\_ national character, and sometimes a lot of information they contain is untrue.

**SubQuestion No : 22**

**Q.22** Select the most appropriate option to fill in blank number 2.

- Ans
- 1. precisely
  - 2. directly
  - 3. formally
  - 4. simply

Question Type : MCQ  
Question ID : 264330136301  
Option 1 ID : 264330533980  
Option 2 ID : 264330533979  
Option 3 ID : 264330533982  
Option 4 ID : 264330533981  
Status : Answered  
Chosen Option : 4

**Comprehension:**

In the following passage some words have been deleted. Fill in the blanks with the help of the alternatives given. Select the most appropriate option for each number.

(1) \_\_\_\_\_ people think that we can learn a lot about the culture of a foreign country (2) \_\_\_\_\_ by living in that country. However, this is not necessarily true. Often, the longer we stay in a (3) \_\_\_\_\_ country, the more we realize how little we actually know about the culture of that country. Books and talks about other people's (4) \_\_\_\_\_ can even be dangerous because they concentrate on cultural differences and (5) \_\_\_\_\_ national character, and sometimes a lot of information they contain is untrue.

**SubQuestion No : 23**

**Q.23** Select the most appropriate option to fill in blank number 3.

- Ans
- 1. benign
  - 2. foreign
  - 3. sovereign
  - 4. reign

Question Type : MCQ  
Question ID : 264330136302  
Option 1 ID : 264330533986  
Option 2 ID : 264330533984  
Option 3 ID : 264330533983  
Option 4 ID : 264330533985  
Status : Answered  
Chosen Option : 2

**Comprehension:**

In the following passage some words have been deleted. Fill in the blanks with the help of the alternatives given. Select the most appropriate option for each number.

(1) \_\_\_\_\_ people think that we can learn a lot about the culture of a foreign country (2) \_\_\_\_\_ by living in that country. However, this is not necessarily true. Often, the longer we stay in a (3) \_\_\_\_\_ country, the more we realize how little we actually know about the culture of that country. Books and talks about other people's (4) \_\_\_\_\_ can even be dangerous because they concentrate on cultural differences and (5) \_\_\_\_\_ national character, and sometimes a lot of information they contain is untrue.

**SubQuestion No : 24**

**Q.24** Select the most appropriate option to fill in blank number 4.

- Ans
- 1. conjecture
  - 2. caricature
  - 3. stature
  - 4. culture

Question Type : MCQ  
Question ID : 264330136303  
Option 1 ID : 264330533987  
Option 2 ID : 264330533990  
Option 3 ID : 264330533988  
Option 4 ID : 264330533989  
Status : Answered  
Chosen Option : 4

**Comprehension:**

In the following passage some words have been deleted. Fill in the blanks with the help of the alternatives given. Select the most appropriate option for each number.

(1) \_\_\_\_\_ people think that we can learn a lot about the culture of a foreign country (2) \_\_\_\_\_ by living in that country. However, this is not necessarily true. Often, the longer we stay in a (3) \_\_\_\_\_ country, the more we realize how little we actually know about the culture of that country. Books and talks about other people's (4) \_\_\_\_\_ can even be dangerous because they concentrate on cultural differences and (5) \_\_\_\_\_ national character, and sometimes a lot of information they contain is untrue.

**SubQuestion No : 25**

**Q.25** Select the most appropriate option to fill in blank number 5.

- Ans**
- 1. considerate
  - 2. exaggerate
  - 3. proliferate
  - 4. concentrate

Question Type : MCQ

Question ID : 264330136304

Option 1 ID : 264330533992

Option 2 ID : 264330533991

Option 3 ID : 264330533994

Option 4 ID : 264330533993

Status : Answered

Chosen Option : 2

