



SSC MTS **SHIFT – 1 (10-05-2023)**

- ★ Latest Govt Job updates
- ★ Private Job updates
- ★ Free Mock tests available

Visit - [teachingninja.in](https://teachingninja.in)

## Multi Tasking Non Technical Staff and Havaldar CBIC and CBN Examination 2022

Roll Number	
Candidate Name	
Venue Name	
Exam Date	10/05/2023
Exam Time	9:00 AM - 10:30 AM
Subject	MTS Non Tech Havaldar CBIC and CBN Examination 2022

### Section : Numerical and Mathematical Ability

**Q.1** Sonam bought an old motor bike for Rs. 4675 and spent Rs. 225 on its repair. Then she sold it in Rs. 5390. What is her profit percent?

- Ans**
- 1. 20%
  - 2. 15%
  - 3. 10%
  - 4. 8%

Question Type : MCQ

Question ID : 264330138353

Option 1 ID : 264330542022

Option 2 ID : 264330542019

Option 3 ID : 264330542021

Option 4 ID : 264330542020

Status : Answered

Chosen Option : 3

**Q.2** Average price of 20 pens is Rs. 18. If 12 new pens are added, then the average price rise by Rs. 4. What is the total price of the new pens?

- Ans**
- 1. Rs.384
  - 2. Rs.368
  - 3. Rs.328
  - 4. Rs.344

Question Type : MCQ

Question ID : 264330139080

Option 1 ID : 264330544927

Option 2 ID : 264330544929

Option 3 ID : 264330544930

Option 4 ID : 264330544928

Status : Answered

Chosen Option : 4

**Q.3** A can do a piece of work in 16 days. B can do the same work in 24 days. A started the work alone. After how many days should B join him, so that the work is finished in 10 days?

- Ans**
- 1. 6 days
  - 2. 2 days
  - 3. 5 days
  - 4. 1 day

Question Type : **MCQ**  
Question ID : **264330133849**  
Option 1 ID : **264330524420**  
Option 2 ID : **264330524421**  
Option 3 ID : **264330524419**  
Option 4 ID : **264330524422**  
Status : **Answered**  
Chosen Option : **4**

**Q.4** A alone can do a piece of work in 30 days. He worked at it for 5 days and then B alone finished the remaining work in 10 days. In how many days B alone can finish the entire work?

- Ans**
- 1. 12 days
  - 2. 15 days
  - 3. 10 days
  - 4. 18 days

Question Type : **MCQ**  
Question ID : **264330138051**  
Option 1 ID : **264330540812**  
Option 2 ID : **264330540813**  
Option 3 ID : **264330540811**  
Option 4 ID : **264330540814**  
Status : **Answered**  
Chosen Option : **1**

**Q.5** What is the Least Common Multiple of lengths 80 cm, 90 cm and 112 cm?

- Ans**
- 1. 4250 cm
  - 2. 5040 cm
  - 3. 5680 cm
  - 4. 4840 cm

Question Type : **MCQ**  
Question ID : **264330137191**  
Option 1 ID : **264330537407**  
Option 2 ID : **264330537409**  
Option 3 ID : **264330537410**  
Option 4 ID : **264330537408**  
Status : **Answered**  
Chosen Option : **2**

**Q.6** The average expenditure of Raman for 5 days is Rs. 160. If his expenditure for the first 4 days is Rs. 90, Rs. 135, Rs. 75 and Rs. 180 respectively, then what is his expenditure on the 5th day?

- Ans
- 1. Rs.360
  - 2. Rs.320
  - 3. Rs.280
  - 4. Rs.250

Question Type : MCQ  
Question ID : 264330137177  
Option 1 ID : 264330537353  
Option 2 ID : 264330537352  
Option 3 ID : 264330537354  
Option 4 ID : 264330537351  
Status : Answered  
Chosen Option : 2

**Q.7** In an isosceles triangle, if the ratio of equal side and unequal side is 5:7 and its perimeter is 34 cm, then what is the length of equal side?

- Ans
- 1. 14 cm
  - 2. 18 cm
  - 3. 10 cm
  - 4. 34 cm

Question Type : MCQ  
Question ID : 264330133854  
Option 1 ID : 264330524439  
Option 2 ID : 264330524441  
Option 3 ID : 264330524440  
Option 4 ID : 264330524442  
Status : Answered  
Chosen Option : 3

**Q.8** The following table shows the marks obtained by five students in six different subjects.  
How much percent marks are scored by Isha in aggregate?

Students/ Subject	Hindi (Out of 100)	English (Out of 100)	Maths (Out of 150)	S.St (Out of 150)	Science (Out 150)	Computer (Out of 50)
Anchal	84	62	100	140	112	40
Bhavana	92	80	132	148	145	42
Isha	80	60	104	132	105	45
Anuradha	81	71	110	140	125	48
Manjari	78	70	108	135	130	40

- Ans
- 1. 84.66%
  - 2. 72.56%
  - 3. 75.14%
  - 4. 80.42%

Question Type : MCQ  
Question ID : 264330138363  
Option 1 ID : 264330542062  
Option 2 ID : 264330542059  
Option 3 ID : 264330542061  
Option 4 ID : 264330542060  
Status : Answered  
Chosen Option : 3

**Q.9** The ratio of the expenditure and savings of a person is 4 : 3. His expenditure increases by  $\frac{1}{4}$  of his initial savings and his income increases by Rs. 300. If his savings remains the same, then what is his initial expenditure?

- Ans**
- 1. Rs.1600
  - 2. Rs.20000
  - 3. Rs.10000
  - 4. Rs.12000

Question Type : **MCQ**  
Question ID : 264330137184  
Option 1 ID : 264330537382  
Option 2 ID : 264330537381  
Option 3 ID : 264330537380  
Option 4 ID : 264330537379  
Status : **Answered**  
Chosen Option : 1

**Q.10** After 55 years, a sum invested at simple interest at the rate of  $r$  percent becomes twice of itself. What is the value of ' $r$ '?

- Ans**
- 1.  $\frac{17}{20}\%$
  - 2.  $\frac{11}{30}\%$
  - 3.  $\frac{13}{15}\%$
  - 4.  $\frac{20}{11}\%$

Question Type : **MCQ**  
Question ID : 264330135402  
Option 1 ID : 264330530517  
Option 2 ID : 264330530518  
Option 3 ID : 264330530516  
Option 4 ID : 264330530515  
Status : **Answered**  
Chosen Option : 4

**Q.11** What is the value of  $\frac{49 - 7 \times 5 + 3 \times 21}{98 + 49 \times 2 - 195}$ ?

- Ans**
- 1. 77
  - 2. 22
  - 3. 11
  - 4. 7

Question Type : **MCQ**  
Question ID : 264330137192  
Option 1 ID : 264330537412  
Option 2 ID : 264330537414  
Option 3 ID : 264330537413  
Option 4 ID : 264330537411  
Status : **Answered**  
Chosen Option : 1

**Q.12** A shopkeeper sells an article at 10 percent loss after giving a discount of 20 percent. What is the ratio of cost price and marked price of the article?

- Ans
- 1. 5 : 8
  - 2. 8 : 9
  - 3. 7 : 9
  - 4. 4 : 9

Question Type : MCQ  
Question ID : 264330137187  
Option 1 ID : 264330537391  
Option 2 ID : 264330537392  
Option 3 ID : 264330537393  
Option 4 ID : 264330537394  
Status : Answered  
Chosen Option : 2

**Q.13** The speed of a boat in still water is 9 km/hr and the speed of the stream is 6 km/hr. If a man goes a distance of 45 km against the stream and comes back to the starting point, then what is the total time taken by him?

- Ans
- 1. 20 hours
  - 2. 30 hours
  - 3. 24 hours
  - 4. 18 hours

Question Type : MCQ  
Question ID : 264330137176  
Option 1 ID : 264330537347  
Option 2 ID : 264330537350  
Option 3 ID : 264330537348  
Option 4 ID : 264330537349  
Status : Answered  
Chosen Option : 4

**Q.14** A and B enter into a partnership such that 5 times of A's investment is equal to 7 times of B's investment. If the total profit is Rs. 12000, then what is the share of A?

- Ans
- 1. Rs.6300
  - 2. Rs.7000
  - 3. Rs.8000
  - 4. Rs.7500

Question Type : MCQ  
Question ID : 264330137183  
Option 1 ID : 264330537375  
Option 2 ID : 264330537377  
Option 3 ID : 264330537378  
Option 4 ID : 264330537376  
Status : Answered  
Chosen Option : 2

Q.15

Evaluate:  $6 + 6 \text{ of } 6 \div 6 - \frac{6}{5}$

- Ans
- 1.  $12/5$
  - 2.  $54/5$
  - 3.  $44/5$
  - 4.  $6/5$

Question Type : MCQ  
Question ID : 264330138347  
Option 1 ID : 264330541997  
Option 2 ID : 264330541995  
Option 3 ID : 264330541998  
Option 4 ID : 264330541996  
Status : Answered  
Chosen Option : 2

Q.16 When a number is increased by 112, it becomes 170% of itself. Find the number.

- Ans
- 1. 160
  - 2. 150
  - 3. 200
  - 4. 180

Question Type : MCQ  
Question ID : 264330135070  
Option 1 ID : 264330529216  
Option 2 ID : 264330529215  
Option 3 ID : 264330529218  
Option 4 ID : 264330529217  
Status : Answered  
Chosen Option : 1

Q.17 The difference between compound interest and simple interest on an amount of Rs. 14,400 for 2 years is Rs. 3600. Find the rate of interest.

- Ans
- 1. 30%
  - 2. 35%
  - 3. 10%
  - 4. 50%

Question Type : MCQ  
Question ID : 264330135077  
Option 1 ID : 264330529244  
Option 2 ID : 264330529245  
Option 3 ID : 264330529243  
Option 4 ID : 264330529246  
Status : Answered  
Chosen Option : 4

**Q.18** By selling a glass for Rs. 1378 a man earns a profit of 6 percent. If he sells it for Rs. 1079, then what will be the loss percent?

- Ans**
- 1. 11 percent
  - 2. 18 percent
  - 3. 17 percent
  - 4. 15 percent

Question Type : **MCQ**  
Question ID : **264330137182**  
Option 1 ID : **264330537372**  
Option 2 ID : **264330537371**  
Option 3 ID : **264330537374**  
Option 4 ID : **264330537373**  
Status : **Answered**  
Chosen Option : **3**

**Q.19** Find the weight of a cylindrical iron container with base radius 12.6 cm and height is 4 m, where the weight of 1 cm<sup>3</sup> of iron is 2 grams?

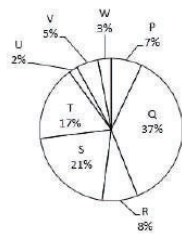
- Ans**
- 1. 299.284 kg
  - 2. 199.584 kg
  - 3. 399.168 kg
  - 4. 499.482 kg

Question Type : **MCQ**  
Question ID : **264330138056**  
Option 1 ID : **264330540834**  
Option 2 ID : **264330540832**  
Option 3 ID : **264330540831**  
Option 4 ID : **264330540833**  
Status : **Answered**  
Chosen Option : **3**





**Q.20** The pie chart given below shows the number of boys in 8 schools. The total number of boys in all these 8 schools is 8000. Number of boys in a particular school is shown as a percent of total number of boys in all these 8 schools.



What is the sum of average number of boys in P, R, T and W and the average number of boys in Q and V?

- Ans
- 1. 2580
  - 2. 2180
  - 3. 2380
  - 4. 1980

Question Type : MCQ

Question ID : 264330137195

Option 1 ID : 264330537423

Option 2 ID : 264330537426

Option 3 ID : 264330537425

Option 4 ID : 264330537424

Status : Answered

Chosen Option : 3

Section : Reasoning Ability and Problem Solving



Q.1 Select the option figure in which the given figure is embedded. (rotation is NOT allowed)

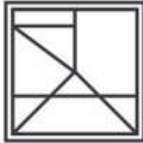


Ans

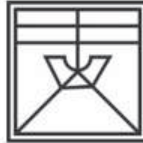
✗ 1.



✗ 2.



✓ 3.



✗ 4.



Question Type : MCQ

Question ID : 264330138474

Option 1 ID : 264330542506

Option 2 ID : 264330542503

Option 3 ID : 264330542504

Option 4 ID : 264330542505

Status : Answered

Chosen Option : 3

Q.2 Which of the following numbers will replace the question mark (?) in the given series?  
19, 27, 54, 118, 243, ?

Ans ✗ 1. 469

✗ 2. 449

✓ 3. 459

✗ 4. 457

Question Type : MCQ

Question ID : 264330137357

Option 1 ID : 264330538058

Option 2 ID : 264330538057

Option 3 ID : 264330538056

Option 4 ID : 264330538055

Status : Answered

Chosen Option : 3

**Q.3** Select the option that is related to the third word in the same way as the second word is related to the first word.  
Night blindness : Vitamin A :: Scurvy : ?

- Ans**
- 1. Vitamin D
  - 2. Vitamin C
  - 3. Vitamin K
  - 4. Vitamin E

Question Type : MCQ  
Question ID : 264330137346  
Option 1 ID : 264330538012  
Option 2 ID : 264330538014  
Option 3 ID : 264330538013  
Option 4 ID : 264330538011  
Status : Answered  
Chosen Option : 1

**Q.4** P, Q, R, S and T are sitting on a bench facing towards north but not necessarily in the same order. P is immediate neighbour of Q, S is immediate neighbour of T, P is not sitting with R who sits on the right end of the bench. P sits to the right of S and T. S sits to the right of T. In which position P is sitting?

- Ans**
- 1. Second from right
  - 2. Fourth from left
  - 3. Second from left
  - 4. Third from left

Question Type : MCQ  
Question ID : 264330137351  
Option 1 ID : 264330538033  
Option 2 ID : 264330538034  
Option 3 ID : 264330538031  
Option 4 ID : 264330538032  
Status : Answered  
Chosen Option : 4

**Q.5** Select the option that is related to the third number in the same way as the second number is related to the first number.  
441 : 9261 :: 169 : ?

- Ans**
- 1. 2197
  - 2. 2019
  - 3. 2917
  - 4. 2719

Question Type : MCQ  
Question ID : 264330134969  
Option 1 ID : 264330528813  
Option 2 ID : 264330528814  
Option 3 ID : 264330528811  
Option 4 ID : 264330528812  
Status : Answered  
Chosen Option : 1

**Q.6** Select the set in which the numbers are related in the same way as are the numbers of the following sets.(NOTE : Operations should be performed on the whole numbers, without breaking down the numbers into its constituent digits. E.g 13 – Operations on 13 such as adding / subtracting /multiplying etc. to 13 can be performed. Breaking down 13 into 1 and 3 and then performing mathematical operations on 1 and 3 is not allowed)  
(6, 4, 48)  
(8, 5, 80)

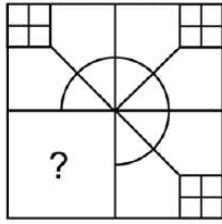
- Ans**
- ✔ 1. (3, 7, 42)
  - ✘ 2. (2, 7, 14)
  - ✘ 3. (5, 7, 42)
  - ✘ 4. (4, 6, 36)

Question Type : **MCQ**  
Question ID : **264330137359**  
Option 1 ID : **264330538063**  
Option 2 ID : **264330538064**  
Option 3 ID : **264330538066**  
Option 4 ID : **264330538065**  
Status : **Answered**  
Chosen Option : 1



Teachingninja.in

**Q.7** Select the option figure that will replace the question mark (?) in the figure given below to complete the pattern.  
(rotation is not allowed)

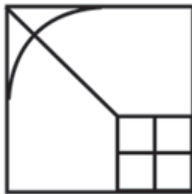


**Ans**

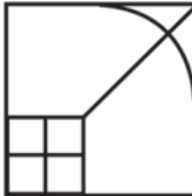
✓ 1.



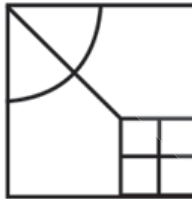
✗ 2.



✗ 3.



✗ 4.



Question Type : **MCQ**

Question ID : **264330137364**

Option 1 ID : **264330538084**

Option 2 ID : **264330538083**

Option 3 ID : **264330538086**

Option 4 ID : **264330538085**

Status : **Answered**

Chosen Option : **1**

**Q.8** Two Statements are given followed by two conclusions numbered I and II. Assuming the statements to be true, even if they seem to be at variance with commonly known facts, decide which of the conclusions logically follow(s) from the statements.

Statements:

No plate is Mug.

Some Mugs are Tables.

Conclusions:

I. All plates being tables is a possibility.

II. Some tables are not mugs.

- Ans**
- 1. Both conclusions I and II follow.
  - 2. Neither conclusion I nor II follow.
  - 3. Only conclusion I follows.
  - 4. Only conclusion II follows.

Question Type : **MCQ**

Question ID : **264330137355**

Option 1 ID : **264330538049**

Option 2 ID : **264330538050**

Option 3 ID : **264330538047**

Option 4 ID : **264330538048**

Status : **Answered**

Chosen Option : **4**

**Q.9** Five boys Aman, Baman, Chaman, Daman and Farhan have different ages. Farhan is elder than only Aman and Baman. Daman is younger than only Chaman. Aman is not the youngest. How many boys are elder than Aman?

- Ans**
- 1. 1
  - 2. 2
  - 3. 3
  - 4. 4

Question Type : **MCQ**

Question ID : **264330137353**

Option 1 ID : **264330538039**

Option 2 ID : **264330538040**

Option 3 ID : **264330538041**

Option 4 ID : **264330538042**

Status : **Answered**

Chosen Option : **3**

**Q.10** In a certain code language, 'DJ' is written as '410'. How will 'NS' be written in that language?

- Ans**
- 1. 1419
  - 2. 1320
  - 3. 1420
  - 4. 1319

Question Type : **MCQ**

Question ID : **264330137790**

Option 1 ID : **264330539770**

Option 2 ID : **264330539767**

Option 3 ID : **264330539769**

Option 4 ID : **264330539768**

Status : **Answered**

Chosen Option : **1**

Q.11 Which of the following letter cluster will replace the question mark (?) in the given series?

XF, UI, RL, OO, ?

- Ans
- 1. KS
  - 2. KR
  - 3. LS
  - 4. LR

Question Type : MCQ

Question ID : 264330137343

Option 1 ID : 264330538001

Option 2 ID : 264330538002

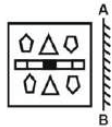
Option 3 ID : 264330537999

Option 4 ID : 264330538000

Status : Answered

Chosen Option : 4

Q.12 If a mirror is placed on the line AB, then out of the option figures which figure will be the right image of the question figure?



Ans

- 1.
- 2.
- 3.
- 4.

Question Type : MCQ

Question ID : 264330138475

Option 1 ID : 264330542509

Option 2 ID : 264330542507

Option 3 ID : 264330542508

Option 4 ID : 264330542510

Status : Answered

Chosen Option : 1

**Q.13** A, B, C, D, E, F, G, and H are sitting around a square table facing the centre of the table. Four of them are sitting at each of the corners, while the other four are sitting at the exact centre of each of the sides.  
E who sits at the centre of a side, sits to the fourth left of the G. Only one person sits between G and F. B is immediate neighbour of E. Only three people sit between B and A. A is not a neighbour of D. H sits to the immediate left of C. C sits to the third right of E.  
Who sits third to the right of D?

- Ans**
- 1. H
  - 2. C
  - 3. G
  - 4. B

Question Type : **MCQ**  
Question ID : **264330137352**  
Option 1 ID : **264330538037**  
Option 2 ID : **264330538035**  
Option 3 ID : **264330538038**  
Option 4 ID : **264330538036**  
Status : **Answered**  
Chosen Option : **3**

**Q.14** Which of the following numbers will replace the question mark (?) in the given series?  
14, 15, 30, 33, 132, 137, 822, ?

- Ans**
- 1. 899
  - 2. 829
  - 3. 819
  - 4. 982

Question Type : **MCQ**  
Question ID : **264330134967**  
Option 1 ID : **264330528804**  
Option 2 ID : **264330528805**  
Option 3 ID : **264330528806**  
Option 4 ID : **264330528803**  
Status : **Answered**  
Chosen Option : **2**

**Q.15** Two Statements are given followed by two conclusions numbered I and II. Assuming the statements to be true, even if they seem to be at variance with commonly known facts, decide which of the conclusions logically follow(s) from the statements.  
Statements:  
All carrots are vegetables.  
Some vegetables are snacks.  
Conclusions:  
I. All vegetables are carrots.  
II. All carrots are snacks.

- Ans**
- 1. Only conclusion I follows.
  - 2. Only conclusion II follows.
  - 3. Neither conclusion I nor II follow.
  - 4. Both conclusions I and II follow.

Question Type : **MCQ**  
Question ID : **264330137354**  
Option 1 ID : **264330538043**  
Option 2 ID : **264330538044**  
Option 3 ID : **264330538046**  
Option 4 ID : **264330538045**  
Status : **Answered**  
Chosen Option : **3**



**Q.16** Select the option that is related to the third word in the same way as the second word is related to the first word.  
Newton : Force :: Joule : ?

- Ans**
- 1. Momentum
  - 2. Work
  - 3. Time
  - 4. Pressure

Question Type : **MCQ**  
Question ID : **264330137345**  
Option 1 ID : **264330538010**  
Option 2 ID : **264330538008**  
Option 3 ID : **264330538007**  
Option 4 ID : **264330538009**  
Status : **Answered**  
Chosen Option : **2**

**Q.17** In a certain code language, 'SHOE' is written as '47'. How will 'HELMET' be written in that language?

- Ans**
- 1. 63
  - 2. 83
  - 3. 68
  - 4. 72

Question Type : **MCQ**  
Question ID : **264330134938**  
Option 1 ID : **264330528689**  
Option 2 ID : **264330528690**  
Option 3 ID : **264330528688**  
Option 4 ID : **264330528687**  
Status : **Answered**  
Chosen Option : **1**

**Q.18** By interchanging the given two signs which of the following equation will be not correct?

+ and -

I.  $4 \times 6 + 7 - 3 + 1 = 21$

II.  $6 \times 9 + 7 - 8 + 2 = 51$

- Ans**
- 1. Only I
  - 2. Both I and II
  - 3. Neither I nor II
  - 4. Only II

Question Type : **MCQ**  
Question ID : **264330135611**  
Option 1 ID : **264330531343**  
Option 2 ID : **264330531345**  
Option 3 ID : **264330531346**  
Option 4 ID : **264330531344**  
Status : **Answered**  
Chosen Option : **1**

Q.19 Which of the mathematical signs should be interchanged in the below equation to make it mathematically correct?

$$24 \div 15 \times 16 + 4 - 18 = 66$$

- Ans
- 1.  $\div$  and  $\times$
  - 2.  $-$  and  $+$
  - 3.  $-$  and  $\times$
  - 4.  $+$  and  $+$

Question Type : MCQ

Question ID : 264330137360

Option 1 ID : 264330538067

Option 2 ID : 264330538069

Option 3 ID : 264330538070

Option 4 ID : 264330538068

Status : Answered

Chosen Option : 4

Q.20 In a certain code language, 'TYPING' is written as 'VAPING'. How will 'WIPING' be written in that language?

- Ans
- 1. YKPING
  - 2. VKPJNG
  - 3. VIPING
  - 4. VKPGNG

Question Type : MCQ

Question ID : 264330134936

Option 1 ID : 264330528681

Option 2 ID : 264330528682

Option 3 ID : 264330528679

Option 4 ID : 264330528680

Status : Answered

Chosen Option : 1

Section : General Awareness

Q.1 Which of these is the title of the first novel of Anand Neelakantan?

- Ans
- 1. Asura: Tale of the Vanquished
  - 2. Satya Ke Prayog
  - 3. The Immortals of Meluha
  - 4. Kadambari

Question Type : MCQ

Question ID : 264330134624

Option 1 ID : 264330527451

Option 2 ID : 264330527454

Option 3 ID : 264330527452

Option 4 ID : 264330527453

Status : Answered

Chosen Option : 1

Q.2 Article \_\_\_\_\_ of the Indian Constitution deals with "Right to Constitutional Remedies".

- Ans
- 1. 28 – 33
  - 2. 32 – 35
  - 3. 25 – 30
  - 4. 22 – 25

Question Type : MCQ  
Question ID : 264330137081  
Option 1 ID : 264330536967  
Option 2 ID : 264330536970  
Option 3 ID : 264330536969  
Option 4 ID : 264330536968  
Status : Answered  
Chosen Option : 2

Q.3 As per the Census 2011, what is the sex ratio in India?

- Ans
- 1. 843 females per thousand males
  - 2. 943 females per thousand males
  - 3. 743 females per thousand males
  - 4. 643 females per thousand males

Question Type : MCQ  
Question ID : 264330135445  
Option 1 ID : 264330530690  
Option 2 ID : 264330530689  
Option 3 ID : 264330530688  
Option 4 ID : 264330530687  
Status : Answered  
Chosen Option : 2

Q.4 Which bill passed in the Lok Sabha in 2022 seeks to convert the National Rail and Transportation Institute, Vadodara (a deemed university) to the Gati Shakti Vishwavidyalaya?

- Ans
- 1. The Appropriation Bill
  - 2. The Competition (Amendment) Bill
  - 3. Central Universities (Amendment) Bill
  - 4. University Laws (Amendment) Bill

Question Type : MCQ  
Question ID : 264330135460  
Option 1 ID : 264330530747  
Option 2 ID : 264330530749  
Option 3 ID : 264330530748  
Option 4 ID : 264330530750  
Status : Answered  
Chosen Option : 3

Q.5 Steapsin, the enzyme which converts fats into fatty acids and glycerol, is secreted by \_\_\_\_\_.

- Ans
- 1. stomach
  - 2. pancreas
  - 3. small intestine
  - 4. large intestine

Question Type : MCQ  
Question ID : 264330137067  
Option 1 ID : 264330536911  
Option 2 ID : 264330536912  
Option 3 ID : 264330536913  
Option 4 ID : 264330536914  
Status : Not Answered  
Chosen Option : --

Q.6 English East India Company acquired Diwani of Bengal in \_\_\_\_\_.

- Ans
- 1. 1765
  - 2. 1755
  - 3. 1760
  - 4. 1770

Question Type : MCQ  
Question ID : 264330134642  
Option 1 ID : 264330527525  
Option 2 ID : 264330527523  
Option 3 ID : 264330527524  
Option 4 ID : 264330527526  
Status : Answered  
Chosen Option : 1

Q.7 President Draupadi Murmu launched the 'Pradhan Mantri TB Mukti Bharat Abhiyan' and the Nikshay 2.0 portal to eliminate Tuberculosis by \_\_\_\_\_ through a virtual event.

- Ans
- 1. 2035
  - 2. 2028
  - 3. 2025
  - 4. 2030

Question Type : MCQ  
Question ID : 264330137061  
Option 1 ID : 264330536887  
Option 2 ID : 264330536888  
Option 3 ID : 264330536890  
Option 4 ID : 264330536889  
Status : Answered  
Chosen Option : 4

Q.8 Which among the following Buddhist Universities is located in Bihar, India?

- Ans
- 1. Vallabhi University
  - 2. Somapuri University
  - 3. Nalanda University
  - 4. Nabadwip University

Question Type : MCQ  
Question ID : 264330135463  
Option 1 ID : 264330530762  
Option 2 ID : 264330530761  
Option 3 ID : 264330530760  
Option 4 ID : 264330530759  
Status : Answered  
Chosen Option : 3

Q.9 Who has been the chairman of Union Public Service Commission (UPSC) since 5 April, 2022?

- Ans
- 1. Dr. T.C.A. Anant
  - 2. Shri Bharat Bhushan Vyas
  - 3. Dr. Manoj Soni
  - 4. Ms. Smita Nagaraj

Question Type : MCQ  
Question ID : 264330134627  
Option 1 ID : 264330527466  
Option 2 ID : 264330527465  
Option 3 ID : 264330527463  
Option 4 ID : 264330527464  
Status : Answered  
Chosen Option : 3

Q.10 When was the first battle of Tarain fought?

- Ans
- 1. 1208
  - 2. 1182
  - 3. 1191
  - 4. 1215

Question Type : MCQ  
Question ID : 264330138234  
Option 1 ID : 264330541546  
Option 2 ID : 264330541545  
Option 3 ID : 264330541544  
Option 4 ID : 264330541543  
Status : Answered  
Chosen Option : 3

**Q.11** Raja Parba festival of Odisha is the living cultural heritage and agricultural way of life. It is held for three days in the month of \_\_\_\_\_.

- Ans**
- 1. July
  - 2. June
  - 3. September
  - 4. August

Question Type : **MCQ**  
Question ID : **264330138224**  
Option 1 ID : **264330541503**  
Option 2 ID : **264330541504**  
Option 3 ID : **264330541506**  
Option 4 ID : **264330541505**  
Status : **Not Answered**  
Chosen Option : --

**Q.12** According to census 2011, which state has highest decadal population growth rate between 2001 – 11?

- Ans**
- 1. Bihar
  - 2. Arunachal Pradesh
  - 3. Mizoram
  - 4. Meghalaya

Question Type : **MCQ**  
Question ID : **264330134613**  
Option 1 ID : **264330527408**  
Option 2 ID : **264330527409**  
Option 3 ID : **264330527410**  
Option 4 ID : **264330527407**  
Status : **Answered**  
Chosen Option : 4

**Q.13** Who gave the slogan, "Freedom is my birth right and I shall have it!"?

- Ans**
- 1. Badruddin Tyabji
  - 2. Lala Lajpat Rai
  - 3. Bal Gangadhar Tilak
  - 4. Bipin Chandra Pal

Question Type : **MCQ**  
Question ID : **264330134618**  
Option 1 ID : **264330527430**  
Option 2 ID : **264330527427**  
Option 3 ID : **264330527428**  
Option 4 ID : **264330527429**  
Status : **Answered**  
Chosen Option : 3

Q.14 \_\_\_\_\_ is scheduled to host the International Cricket Council (ICC) Men's Cricket World Cup 2023.

- Ans
- 1. England
  - 2. New Zealand
  - 3. India
  - 4. Pakistan

Question Type : MCQ  
Question ID : 264330137083  
Option 1 ID : 264330536975  
Option 2 ID : 264330536976  
Option 3 ID : 264330536978  
Option 4 ID : 264330536977  
Status : Answered  
Chosen Option : 3

Q.15 Who among the following is famous for playing the musical instrument 'Sarod'?

- Ans
- 1. Amjad Ali Khan
  - 2. Bismillah Khan
  - 3. Zakir Hussain
  - 4. Ravi Shankar

Question Type : MCQ  
Question ID : 264330137079  
Option 1 ID : 264330536959  
Option 2 ID : 264330536961  
Option 3 ID : 264330536962  
Option 4 ID : 264330536960  
Status : Answered  
Chosen Option : 1

Q.16 Identify the famous Indian classical dancer.

She is a Guru of both Bharatanatyam and Odissi dancing style. She received Sangeet Natak Akademi Award in 1987.

- Ans
- 1. Shovana Narayana
  - 2. Sonal Mansingh
  - 3. Padma Subrahmanyam
  - 4. Mrinalini Sarabhai

Question Type : MCQ  
Question ID : 264330134626  
Option 1 ID : 264330527462  
Option 2 ID : 264330527461  
Option 3 ID : 264330527459  
Option 4 ID : 264330527460  
Status : Answered  
Chosen Option : 2

Q.17 In 1867, Keshab Chandra Sen helped Atmaram Pandurang found the Prarthana Samaj in \_\_\_\_\_.

- Ans
- 1. Calcutta
  - 2. Bombay
  - 3. Poona
  - 4. Chennai

Question Type : MCQ  
Question ID : 264330138237  
Option 1 ID : 264330541557  
Option 2 ID : 264330541555  
Option 3 ID : 264330541556  
Option 4 ID : 264330541558  
Status : Answered  
Chosen Option : 2

Q.18 The famous Hirakud Captive Thermal Power plant is located in which of the following states?

- Ans
- 1. Odisha
  - 2. Gujarat
  - 3. Tamil Nadu
  - 4. Andhra Pradesh

Question Type : MCQ  
Question ID : 264330137071  
Option 1 ID : 264330536927  
Option 2 ID : 264330536928  
Option 3 ID : 264330536930  
Option 4 ID : 264330536929  
Status : Answered  
Chosen Option : 1

Q.19 As a result of which act did Queen Victoria, who was the monarch of Britain, also become the sovereign of British territories in India, with the title "Empress of India" in 1858?

- Ans
- 1. Indian Councils Act
  - 2. Government Of India Act
  - 3. Charter Act
  - 4. Regulating Act

Question Type : MCQ  
Question ID : 264330135474  
Option 1 ID : 264330530804  
Option 2 ID : 264330530805  
Option 3 ID : 264330530803  
Option 4 ID : 264330530806  
Status : Answered  
Chosen Option : 2



Q.20 When was the Pradhan Mantri Ujjwala Yojana launched by the Government of India?

- Ans
- 1. 2018
  - 2. 2014
  - 3. 2016
  - 4. 2012

Question Type : MCQ  
Question ID : 264330138233  
Option 1 ID : 264330541542  
Option 2 ID : 264330541541  
Option 3 ID : 264330541540  
Option 4 ID : 264330541539  
Status : Answered  
Chosen Option : 3

Q.21 PM Street Vendor's AtmaNirbhar Nidhi (PM SVANidhi) Scheme was launched by which ministry?

- Ans
- 1. Ministry of Consumer Affairs
  - 2. Ministry of Finance
  - 3. Ministry of Commerce
  - 4. Ministry of Housing and Urban Affairs

Question Type : MCQ  
Question ID : 264330134603  
Option 1 ID : 264330527369  
Option 2 ID : 264330527367  
Option 3 ID : 264330527368  
Option 4 ID : 264330527370  
Status : Answered  
Chosen Option : 4

Q.22 \_\_\_\_\_ species are those species of plants and animals which are found exclusively in a particular area.

- Ans
- 1. Endemic
  - 2. Endangered
  - 3. Threatened
  - 4. Critically Endangered

Question Type : MCQ  
Question ID : 264330134633  
Option 1 ID : 264330527488  
Option 2 ID : 264330527489  
Option 3 ID : 264330527487  
Option 4 ID : 264330527490  
Status : Answered  
Chosen Option : 1

Q.23 Which among the following is a subject of State List in Constitution of India?

- Ans
- 1. Banking
  - 2. Ports
  - 3. Agriculture
  - 4. Railways

Question Type : MCQ  
Question ID : 264330137082  
Option 1 ID : 264330536972  
Option 2 ID : 264330536974  
Option 3 ID : 264330536971  
Option 4 ID : 264330536973  
Status : Answered  
Chosen Option : 2

Q.24 Pung Cholom is performed usually on religious occasions to the accompaniment of songs and dhol. It is famously performed in which of the following states?

- Ans
- 1. Uttar Pradesh
  - 2. Maharashtra
  - 3. Manipur
  - 4. Kerala

Question Type : MCQ  
Question ID : 264330137063  
Option 1 ID : 264330536897  
Option 2 ID : 264330536895  
Option 3 ID : 264330536896  
Option 4 ID : 264330536898  
Status : Answered  
Chosen Option : 3

Q.25 Major plantations are found in the \_\_\_\_\_ region of the world.

- Ans
- 1. Tropical
  - 2. Grassland
  - 3. Temperate
  - 4. Desert

Question Type : MCQ  
Question ID : 264330134611  
Option 1 ID : 264330527402  
Option 2 ID : 264330527399  
Option 3 ID : 264330527400  
Option 4 ID : 264330527401  
Status : Answered  
Chosen Option : 3

Section : English Language and Comprehension

**Q.1** Select the most appropriate option to substitute the bracketed segment in the given sentence. If there is no need to substitute it, select 'no substitution required'.

(In fact, climbing fern is spreading so rapidly that its) now the state's worst invasive weed.

- Ans**
- 1. In fact, climbing fern is spreading so rapid that it's
  - 2. In fact, climbing fern is spread so rapidly that its
  - 3. In fact, climbing fern is spreading so rapidly that it's
  - 4. No substitution required

Question Type : **MCQ**  
Question ID : **264330135798**  
Option 1 ID : **264330532067**  
Option 2 ID : **264330532069**  
Option 3 ID : **264330532068**  
Option 4 ID : **264330532070**  
Status : **Answered**  
Chosen Option : **3**

**Q.2** Select the correctly spelt word.

- Ans**
- 1. Concensus
  - 2. Concencus
  - 3. Consensus
  - 4. Consencus

Question Type : **MCQ**  
Question ID : **264330135789**  
Option 1 ID : **264330532034**  
Option 2 ID : **264330532032**  
Option 3 ID : **264330532031**  
Option 4 ID : **264330532033**  
Status : **Answered**  
Chosen Option : **3**

**Q.3** Select the most appropriate antonym to substitute the (bracketed) word in the given sentence.  
It would effectively rouse people's ardour to invest, and help to (discourage) the transfer of capital abroad.

- Ans**
- 1. Industrious
  - 2. Construe
  - 3. Persuade
  - 4. Intolerable

Question Type : **MCQ**  
Question ID : **264330135786**  
Option 1 ID : **264330532022**  
Option 2 ID : **264330532021**  
Option 3 ID : **264330532019**  
Option 4 ID : **264330532020**  
Status : **Answered**  
Chosen Option : **3**

Q.4 Fill in the blank with the most appropriate choice

This \_\_\_\_\_ piece of mischief by his brother brought a quiet laugh from David.

- Ans
- 1. nonsensical
  - 2. classical
  - 3. whimsical
  - 4. vesical

Question Type : MCQ  
Question ID : 264330135792  
Option 1 ID : 264330532043  
Option 2 ID : 264330532045  
Option 3 ID : 264330532044  
Option 4 ID : 264330532046  
Status : Answered  
Chosen Option : 3

Q.5 In the following question, out of the given four alternatives, select the alternative which best expresses the meaning of the Idiom/Phrase.

The life and soul of the party

- Ans
- 1. The only person who dances in the party
  - 2. Chief guest of the party
  - 3. A person who brings lots of gifts
  - 4. Person who brings lots of energy to the party

Question Type : MCQ  
Question ID : 264330134765  
Option 1 ID : 264330528009  
Option 2 ID : 264330528008  
Option 3 ID : 264330528010  
Option 4 ID : 264330528007  
Status : Answered  
Chosen Option : 4

Q.6 Four sentences are given, out of which three have spelling errors. Choose the sentence with all correct spelt words.

- Ans
- 1. The main problem, I beleive, lies elsewhere.
  - 2. He said the goverment remained commited to peace.
  - 3. You could have seen in them a cemetery or a war memorial.
  - 4. Jerry is an amatuer who dances because he feels like it.

Question Type : MCQ  
Question ID : 264330136610  
Option 1 ID : 264330535168  
Option 2 ID : 264330535170  
Option 3 ID : 264330535169  
Option 4 ID : 264330535167  
Status : Answered  
Chosen Option : 3

Q.7 Identify the segment that contains a grammatical error. If there is no error, select 'No error'.

Early, during December 2021, / Lal was appointed as / the Secretary to the Lokpal.

- Ans
- 1. the Secretary to the Lokpal.
  - 2. Early, during December 2021,
  - 3. Lal was appointed as
  - 4. No error

Question Type : MCQ  
Question ID : 264330136588  
Option 1 ID : 264330535085  
Option 2 ID : 264330535083  
Option 3 ID : 264330535084  
Option 4 ID : 264330535086  
Status : Answered  
Chosen Option : 2

Q.8 Find the part of the given sentence that has an error in it. If there is no error, choose 'No error'.

Neither I nor my friends are going too walk down that street.

- Ans
- 1. down that street.
  - 2. friends are going too walk
  - 3. No error
  - 4. Neither I nor my

Question Type : MCQ  
Question ID : 264330134502  
Option 1 ID : 264330526973  
Option 2 ID : 264330526972  
Option 3 ID : 264330526974  
Option 4 ID : 264330526971  
Status : Answered  
Chosen Option : 2

Q.9 Identify the segment that contains a grammatical error. If there is no error, select 'No error'

In 79 A.D., the Mount Vesuvius blew / its top, burying the ancient / cities of Pompeii and Herculaneum.

- Ans
- 1. In 79 A.D., the Mount Vesuvius blew
  - 2. its top, burying the ancient
  - 3. cities of Pompeii and Herculaneum.
  - 4. No Error

Question Type : MCQ  
Question ID : 264330135769  
Option 1 ID : 264330531955  
Option 2 ID : 264330531956  
Option 3 ID : 264330531957  
Option 4 ID : 264330531958  
Status : Answered  
Chosen Option : 1

Q.10 Fill in the blank with the most appropriate option.

This change is responsible for a recent \_\_\_\_\_ the number of cases of cancer in this age group.

- Ans
- 1. rise to
  - 2. rise at
  - 3. rise in
  - 4. rise of

Question Type : MCQ  
Question ID : 264330136611  
Option 1 ID : 264330535174  
Option 2 ID : 264330535173  
Option 3 ID : 264330535172  
Option 4 ID : 264330535171  
Status : Answered  
Chosen Option : 3

Q.11 Fill in the blank with the most appropriate option.

For months, Drupad could not taste anything he ate as regret layered \_\_\_\_\_ mud.

- Ans
- 1. his mouth like
  - 2. his mouth as though
  - 3. his mouth comparable to
  - 4. his mouth allied to

Question Type : MCQ  
Question ID : 264330136646  
Option 1 ID : 264330535308  
Option 2 ID : 264330535307  
Option 3 ID : 264330535309  
Option 4 ID : 264330535310  
Status : Answered  
Chosen Option : 1

Q.12 Select the most appropriate word for the given group of words.

A local meeting of party members to select candidates, elect convention delegates, etc

- Ans
- 1. Claque
  - 2. Clique
  - 3. Caravan
  - 4. Caucus

Question Type : MCQ  
Question ID : 264330135782  
Option 1 ID : 264330532005  
Option 2 ID : 264330532006  
Option 3 ID : 264330532004  
Option 4 ID : 264330532003  
Status : Answered  
Chosen Option : 2

Q.13 Choose the word that can substitute the given group of words.

The flowers of a particular region

- Ans
- 1. Flora
  - 2. Fauna
  - 3. Bovine
  - 4. Bryophyte

Question Type : MCQ  
Question ID : 264330134759  
Option 1 ID : 264330527984  
Option 2 ID : 264330527986  
Option 3 ID : 264330527983  
Option 4 ID : 264330527985  
Status : Answered  
Chosen Option : 1

Q.14 Select the most appropriate synonym of the given word.

Console

- Ans
- 1. Fret
  - 2. Arteriole
  - 3. Solace
  - 4. Torment

Question Type : MCQ  
Question ID : 264330135783  
Option 1 ID : 264330532009  
Option 2 ID : 264330532007  
Option 3 ID : 264330532008  
Option 4 ID : 264330532010  
Status : Answered  
Chosen Option : 3

Q.15 Improve the underlined part of the sentence. Choose 'No improvement' as an answer if the sentence is grammatically correct.

Each passenger is allows one piece of carry-on luggage.

- Ans
- 1. is allowed
  - 2. No improvement
  - 3. is allowing
  - 4. is allow

Question Type : MCQ  
Question ID : 264330134722  
Option 1 ID : 264330527843  
Option 2 ID : 264330527846  
Option 3 ID : 264330527844  
Option 4 ID : 264330527845  
Status : Answered  
Chosen Option : 1

Q.16 Choose the word that is opposite in meaning to the given word.

Malign

- Ans
- 1. Praise
  - 2. Align
  - 3. Cheerful
  - 4. Harangue

Question Type : MCQ  
Question ID : 264330135222  
Option 1 ID : 264330529813  
Option 2 ID : 264330529811  
Option 3 ID : 264330529812  
Option 4 ID : 264330529814  
Status : Answered  
Chosen Option : 1

Q.17 Fill in the blank with the most appropriate choice.

During treatment, patients lay \_\_\_\_\_ on the treatment couch for around 3 hrs.

- Ans
- 1. arsine
  - 2. alpine
  - 3. repine
  - 4. supine

Question Type : MCQ  
Question ID : 264330135773  
Option 1 ID : 264330531974  
Option 2 ID : 264330531973  
Option 3 ID : 264330531971  
Option 4 ID : 264330531972  
Status : Not Answered  
Chosen Option : --

Q.18 Select the most appropriate meaning of the bracketed idiom in the given sentence.

Later, Brooks' brother alleged that racism helped put the (pedal to the metal).

- Ans
- 1. Very excessive
  - 2. To go full speed, especially while driving a vehicle
  - 3. To enjoy yourself by going out
  - 4. Avoid responsibility by giving it to someone else

Question Type : MCQ  
Question ID : 264330135788  
Option 1 ID : 264330532028  
Option 2 ID : 264330532030  
Option 3 ID : 264330532029  
Option 4 ID : 264330532027  
Status : Answered  
Chosen Option : 1



**Q.19** Select the word segment that substitutes (replaces) the bracketed word segment correctly and completes the sentence meaningfully. Select the option 'no correction required' if the sentence is correct as given.

He (returned back) Cambridge shortly before three o'clock.

- Ans**
- 1. showed
  - 2. No correction required
  - 3. appeared
  - 4. reached

Question Type : **MCQ**  
Question ID : **264330136591**  
Option 1 ID : **264330535096**  
Option 2 ID : **264330535098**  
Option 3 ID : **264330535095**  
Option 4 ID : **264330535097**  
Status : **Answered**  
Chosen Option : 4

**Q.20** Select the word from the options which is similar in meaning to the bracketed part given in the sentence below.

I suppose I was looking for (a work that would give me income) and that was going to be an adventure.

- Ans**
- 1. Activity
  - 2. Calling
  - 3. Pursuit
  - 4. Occupation

Question Type : **MCQ**  
Question ID : **264330136630**  
Option 1 ID : **264330535243**  
Option 2 ID : **264330535244**  
Option 3 ID : **264330535246**  
Option 4 ID : **264330535245**  
Status : **Answered**  
Chosen Option : 4



**Comprehension:**

In the following passage some of the words have been deleted. Read the passage carefully and select the correct answer for the given blank out of the four alternatives.

Intriguingly, those who (1) \_\_\_\_\_ the psychobiotic diet reported they felt less stressed compared (2) \_\_\_\_\_ those who followed the control diet. There was also a direct correlation between how strictly (3) \_\_\_\_\_ followed the diet and their perceived stress levels, with those who (4) \_\_\_\_\_ more psychobiotic foods during the four-week period reporting the (5) \_\_\_\_\_ reduction in perceived stress levels.

**SubQuestion No : 21**

**Q.21** Select the most appropriate option to fill in blank number 1.

- Ans
- 1. casted
  - 2. followed
  - 3. believed
  - 4. bellowed

Question Type : MCQ  
Question ID : 264330135213  
Option 1 ID : 264330529778  
Option 2 ID : 264330529775  
Option 3 ID : 264330529776  
Option 4 ID : 264330529777  
Status : Answered  
Chosen Option : 2

**Comprehension:**

In the following passage some of the words have been deleted. Read the passage carefully and select the correct answer for the given blank out of the four alternatives.

Intriguingly, those who (1) \_\_\_\_\_ the psychobiotic diet reported they felt less stressed compared (2) \_\_\_\_\_ those who followed the control diet. There was also a direct correlation between how strictly (3) \_\_\_\_\_ followed the diet and their perceived stress levels, with those who (4) \_\_\_\_\_ more psychobiotic foods during the four-week period reporting the (5) \_\_\_\_\_ reduction in perceived stress levels.

**SubQuestion No : 22**

**Q.22** Select the most appropriate option to fill in blank number 2.

- Ans
- 1. of
  - 2. with
  - 3. by
  - 4. on

Question Type : MCQ  
Question ID : 264330135214  
Option 1 ID : 264330529781  
Option 2 ID : 264330529780  
Option 3 ID : 264330529782  
Option 4 ID : 264330529779  
Status : Answered  
Chosen Option : 2

**Comprehension:**

In the following passage some of the words have been deleted. Read the passage carefully and select the correct answer for the given blank out of the four alternatives.

Intriguingly, those who (1) \_\_\_\_\_ the psychobiotic diet reported they felt less stressed compared (2) \_\_\_\_\_ those who followed the control diet. There was also a direct correlation between how strictly (3) \_\_\_\_\_ followed the diet and their perceived stress levels, with those who (4) \_\_\_\_\_ more psychobiotic foods during the four-week period reporting the (5) \_\_\_\_\_ reduction in perceived stress levels.

**SubQuestion No : 23**

**Q.23** Select the most appropriate option to fill in blank number 3.

- Ans**
- 1. participants
  - 2. nomads
  - 3. animals
  - 4. spectators

Question Type : **MCQ**  
Question ID : **264330135215**  
Option 1 ID : **264330529786**  
Option 2 ID : **264330529783**  
Option 3 ID : **264330529784**  
Option 4 ID : **264330529785**  
Status : **Answered**  
Chosen Option : 1

**Comprehension:**

In the following passage some of the words have been deleted. Read the passage carefully and select the correct answer for the given blank out of the four alternatives.

Intriguingly, those who (1) \_\_\_\_\_ the psychobiotic diet reported they felt less stressed compared (2) \_\_\_\_\_ those who followed the control diet. There was also a direct correlation between how strictly (3) \_\_\_\_\_ followed the diet and their perceived stress levels, with those who (4) \_\_\_\_\_ more psychobiotic foods during the four-week period reporting the (5) \_\_\_\_\_ reduction in perceived stress levels.

**SubQuestion No : 24**

**Q.24** Select the most appropriate option to fill in blank number 4.

- Ans**
- 1. staked
  - 2. ate
  - 3. eroded
  - 4. raked

Question Type : **MCQ**  
Question ID : **264330135216**  
Option 1 ID : **264330529789**  
Option 2 ID : **264330529790**  
Option 3 ID : **264330529787**  
Option 4 ID : **264330529788**  
Status : **Answered**  
Chosen Option : 2

**Comprehension:**

In the following passage some of the words have been deleted. Read the passage carefully and select the correct answer for the given blank out of the four alternatives.

Intriguingly, those who (1) \_\_\_\_\_ the psychobiotic diet reported they felt less stressed compared (2) \_\_\_\_\_ those who followed the control diet. There was also a direct correlation between how strictly (3) \_\_\_\_\_ followed the diet and their perceived stress levels, with those who (4) \_\_\_\_\_ more psychobiotic foods during the four-week period reporting the (5) \_\_\_\_\_ reduction in perceived stress levels.

**SubQuestion No : 25**

**Q.25** Select the most appropriate option to fill in blank number 5.

**Ans** ✓ 1. greatest

✗ 2. greater

✗ 3. greatly

✗ 4. great

Question Type : **MCQ**

Question ID : **264330135217**

Option 1 ID : **264330529793**

Option 2 ID : **264330529792**

Option 3 ID : **264330529794**

Option 4 ID : **264330529791**

Status : **Answered**

Chosen Option : **1**



Teachingninja.in