



SSC MTS **SHIFT – 2 (10-05-2023)**

- ★ Latest Govt Job updates
- ★ Private Job updates
- ★ Free Mock tests available

Visit - teachingninja.in

Multi Tasking Non Technical Staff and Havaldar CBIC and CBN Examination 2022

Roll Number	
Candidate Name	
Venue Name	
Exam Date	10/05/2023
Exam Time	12:00 PM - 2:00 PM
Subject	MTS Non Tech Havaldar CBIC and CBN Examination 2022

Section : Numerical and Mathematical Ability

Q.1 A defective dining set costing Rs. 10000 is being sold at 10% loss. If the price is further reduced successively by 5%, then the selling price is:

- Ans**
- ✓ 1. Rs. 8550
 - ✗ 2. Rs. 7850
 - ✗ 3. Rs. 9000
 - ✗ 4. Rs. 9150

Question Type : MCQ

Question ID : 264330138706

Option 1 ID : 264330543431

Option 2 ID : 264330543433

Option 3 ID : 264330543432

Option 4 ID : 264330543434

Status : Answered

Chosen Option : 1

Q.2 The following tables show the product sold by a shopping app in 3 years. Find the average number of clothes sold by the app in all three years.

Products	2019	2020	2021
Cloth	824	476	500
Electronics	750	820	450
Makeup	600	810	510
Footwear	470	390	790

- Ans**
- ✗ 1. 450
 - ✗ 2. 740
 - ✗ 3. 530
 - ✓ 4. 600

Question Type : MCQ

Question ID : 264330135407

Option 1 ID : 264330530538

Option 2 ID : 264330530535

Option 3 ID : 264330530536

Option 4 ID : 264330530537

Status : Answered

Chosen Option : 4

Q.3 9 boys and 12 men can complete a work in 24 days. Each boy takes thrice the time taken by a man to complete the work. In how many days will 15 men complete the same work?

- Ans
- 1. 26 days
 - 2. 30 days
 - 3. 24 days
 - 4. 22 days

Question Type : MCQ
Question ID : 264330137646
Option 1 ID : 264330539192
Option 2 ID : 264330539194
Option 3 ID : 264330539193
Option 4 ID : 264330539191
Status : Answered
Chosen Option : 3

Q.4 The marked price of an article is 150 percent of the cost price. If 30 percent discount is given, then what will be the profit percentage?

- Ans
- 1. 3 percent
 - 2. 5 percent
 - 3. 6 percent
 - 4. 4 percent

Question Type : MCQ
Question ID : 264330137677
Option 1 ID : 264330539318
Option 2 ID : 264330539315
Option 3 ID : 264330539317
Option 4 ID : 264330539316
Status : Answered
Chosen Option : 2

Q.5 If $p : q = 4 : 7$ and $q : r = 3 : 5$, then what is the value of $2p : 3q : 5r$?

- Ans
- 1. 36 : 60 : 181
 - 2. 25 : 72 : 180
 - 3. 24 : 63 : 175
 - 4. 28 : 79 : 188

Question Type : MCQ
Question ID : 264330137673
Option 1 ID : 264330539301
Option 2 ID : 264330539302
Option 3 ID : 264330539300
Option 4 ID : 264330539299
Status : Answered
Chosen Option : 3

Q.6 A jar contains a mixture of milk and water, having 50% water. A part of this mixture is replaced by another mixture having 29% water. The percentage of water in the jar after replacement is 36%. What fraction of the original mixture was replaced?

Ans

1. $\frac{3}{2}$

2. $\frac{4}{5}$

3. $\frac{1}{3}$

4. $\frac{2}{3}$

Question Type : MCQ

Question ID : 264330135090

Option 1 ID : 264330529296

Option 2 ID : 264330529298

Option 3 ID : 264330529297

Option 4 ID : 264330529295

Status : Answered

Chosen Option : 4

Q.7 Find the value of $(22)^2 - (14)^2 - 207$:

Ans

1. 97

2. 99

3. 81

4. 77

Question Type : MCQ

Question ID : 264330135391

Option 1 ID : 264330530474

Option 2 ID : 264330530473

Option 3 ID : 264330530472

Option 4 ID : 264330530471

Status : Answered

Chosen Option : 3

Q.8 Sides of a triangle are 20 cm, 48 cm and 52 cm. What is the area of the triangle?

Ans

1. 320 cm^2

2. 480 cm^2

3. 560 cm^2

4. 245 cm^2

Question Type : MCQ

Question ID : 264330137659

Option 1 ID : 264330539246

Option 2 ID : 264330539245

Option 3 ID : 264330539244

Option 4 ID : 264330539243

Status : Answered

Chosen Option : 2

Q.9 Average of 4 numbers is 45. Average of first two numbers is thrice the average of other two numbers. What is the sum of first two numbers?

- Ans**
- 1. 122
 - 2. 105
 - 3. 125
 - 4. 135

Question Type : **MCQ**
Question ID : **264330137668**
Option 1 ID : **264330539281**
Option 2 ID : **264330539280**
Option 3 ID : **264330539279**
Option 4 ID : **264330539282**
Status : **Answered**
Chosen Option : 4

Q.10 A sum of money at simple interest amounts to Rs. 212 in 2 years and to Rs. 224 in 4 years. The sum is:

- Ans**
- 1. Rs. 400
 - 2. Rs. 200
 - 3. Rs. 100
 - 4. Rs. 500

Question Type : **MCQ**
Question ID : **264330133846**
Option 1 ID : **264330524407**
Option 2 ID : **264330524408**
Option 3 ID : **264330524409**
Option 4 ID : **264330524410**
Status : **Answered**
Chosen Option : 2

Q.11 What is that least perfect square which is exactly divisible by each of 14, 84 and 28?

- Ans**
- 1. 7056
 - 2. 3528
 - 3. 1764
 - 4. 441

Question Type : **MCQ**
Question ID : **264330137680**
Option 1 ID : **264330539328**
Option 2 ID : **264330539329**
Option 3 ID : **264330539330**
Option 4 ID : **264330539327**
Status : **Answered**
Chosen Option : 1

Q.12 Ramesh sells an article at a loss of 20 percent. If he buys it for 30 percent less price and sells it for Rs. 36 less price, then his profit will be 10 percent. What is the cost price of the article?

- Ans**
- 1. 1000
 - 2. 1200
 - 3. 900
 - 4. 1500

Question Type : **MCQ**
Question ID : **264330137672**
Option 1 ID : **264330539297**
Option 2 ID : **264330539296**
Option 3 ID : **264330539298**
Option 4 ID : **264330539295**
Status : **Answered**
Chosen Option : **2**

Q.13 12 workers can earn Rs. 2400 in 10 days. Find the earnings of 6 workers in 6 days.

- Ans**
- 1. Rs. 630
 - 2. Rs. 720
 - 3. Rs. 510
 - 4. Rs. 840

Question Type : **MCQ**
Question ID : **264330133769**
Option 1 ID : **264330524101**
Option 2 ID : **264330524100**
Option 3 ID : **264330524102**
Option 4 ID : **264330524099**
Status : **Answered**
Chosen Option : **2**

Q.14 The difference between compound interest and simple interest on Rs. x at 25% per annum for 2 years is Rs. 325. Find the value of x .

- Ans**
- 1. Rs. 5200
 - 2. Rs. 4000
 - 3. Rs. 5300
 - 4. Rs. 2400

Question Type : **MCQ**
Question ID : **264330138381**
Option 1 ID : **264330542132**
Option 2 ID : **264330542134**
Option 3 ID : **264330542131**
Option 4 ID : **264330542133**
Status : **Answered**
Chosen Option : **1**

Q.15 There are three cups of mixture of milk and water in ratio 4 : 5, 5 : 6, 9 : 7. 36 liters of first and 44 liters of second cup are taken. How much quantity from third cup is to be taken so that final mixture from the three cups will have milk and water in ratio 1 : 1?

- Ans
- 1. 32 litres
 - 2. 64 litres
 - 3. 54 litres
 - 4. 60 litres

Question Type : MCQ
Question ID : 264330137674
Option 1 ID : 264330539306
Option 2 ID : 264330539304
Option 3 ID : 264330539305
Option 4 ID : 264330539303
Status : Answered
Chosen Option : 2

Q.16 What is the value of $\frac{56}{7} \times \left(\frac{24}{81} \times \frac{729}{72} \right) + \frac{42}{6}$?

- Ans
- 1. 30
 - 2. 32
 - 3. 31
 - 4. 33

Question Type : MCQ
Question ID : 264330139072
Option 1 ID : 264330544896
Option 2 ID : 264330544898
Option 3 ID : 264330544897
Option 4 ID : 264330544895
Status : Answered
Chosen Option : 3

Q.17 Find the area of the Kite whose diagonals are 22 cm and 6 cm.

- Ans
- 1. 66 cm²
 - 2. 100 cm²
 - 3. 88 cm²
 - 4. 50 cm²

Question Type : MCQ
Question ID : 264330133774
Option 1 ID : 264330524119
Option 2 ID : 264330524121
Option 3 ID : 264330524120
Option 4 ID : 264330524122
Status : Answered
Chosen Option : 1

Q.18 A 1000 metres long train is running at the speed of 72 km/hr. If it crosses a bridge in 85 seconds, then what is the length of the bridge?

- Ans**
- 1. 800 metres
 - 2. 700 metres
 - 3. 950 metres
 - 4. 750 metres

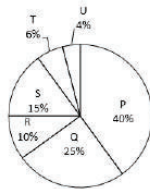
Question Type : **MCQ**
Question ID : **264330137667**
Option 1 ID : **264330539276**
Option 2 ID : **264330539275**
Option 3 ID : **264330539278**
Option 4 ID : **264330539277**
Status : **Answered**
Chosen Option : **2**

Q.19 The average height of 40 sticks is 156 cm. Some sticks of average height 162 cm are taken out. If the new average height is 150 cm, then how many sticks are remaining?

- Ans**
- 1. 25
 - 2. 20
 - 3. 16
 - 4. 32

Question Type : **MCQ**
Question ID : **264330137878**
Option 1 ID : **264330540119**
Option 2 ID : **264330540120**
Option 3 ID : **264330540122**
Option 4 ID : **264330540121**
Status : **Answered**
Chosen Option : **2**

Q.20 The pie chart given below shows the number of mobile phones sold by six companies in a year. The total mobile phones sold by six companies are 300. Number of mobile phones sold by a particular company is shown as a percentage of total number of mobile phones sold by all these six companies.



What is the average number of mobile phones sold by Q and S?

- Ans**
- 1. 45
 - 2. 60
 - 3. 75
 - 4. 80

Question Type : **MCQ**
Question ID : **264330137684**
Option 1 ID : **264330539346**
Option 2 ID : **264330539344**
Option 3 ID : **264330539345**
Option 4 ID : **264330539343**
Status : **Answered**
Chosen Option : **2**

Section : Reasoning Ability and Problem Solving

Q.1 Select the option that is related to the third word in the same way as the second word is related to the first word.
Malaysia : Kuala Lumpur :: Bhutan : ?

- Ans
- 1. Dhaka
 - 2. Islamabad
 - 3. Kathmandu
 - 4. Thimphu

Question Type : MCQ
Question ID : 264330137583
Option 1 ID : 264330538940
Option 2 ID : 264330538939
Option 3 ID : 264330538942
Option 4 ID : 264330538941
Status : Answered
Chosen Option : 4

Q.2 Two Statements are given followed by two conclusions numbered I and II. Assuming the statements to be true, even if they seem to be at variance with commonly known facts, decide which of the conclusions logically follow(s) from the statements.

Statements:
All subjects are tough.
No tough is easy.

Conclusions:
I. Some subjects are easy.
II. Some easy are tough.

- Ans
- 1. Only conclusion I follows
 - 2. Neither conclusion I nor II follows
 - 3. Only conclusion II follows
 - 4. Both conclusions I and II follow

Question Type : MCQ
Question ID : 264330137592
Option 1 ID : 264330538975
Option 2 ID : 264330538978
Option 3 ID : 264330538976
Option 4 ID : 264330538977
Status : Answered
Chosen Option : 2

Q.3 Select the option figure in which the given figure is embedded. (rotation is NOT allowed)




Ans

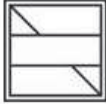
✗ 1.



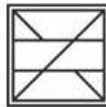
✗ 2.



✗ 3.



✓ 4.



Question Type : MCQ

Question ID : 264330135612

Option 1 ID : 264330531348

Option 2 ID : 264330531350

Option 3 ID : 264330531349

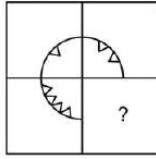
Option 4 ID : 264330531347

Status : Answered

Chosen Option : 4

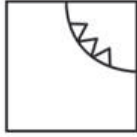


Q.4 Select the option figure that will replace the question mark (?) in the figure given below to complete the pattern.
(rotation is not allowed)



Ans

1.



2.



3.



4.



Teachingninja.in

Question Type : MCQ

Question ID : 264330137602

Option 1 ID : 264330539015

Option 2 ID : 264330539017

Option 3 ID : 264330539018

Option 4 ID : 264330539016

Status : Answered

Chosen Option : 3

Q.5 If a mirror is placed on the line AB, then out of the option figures which figure will be the right image of the question figure?



Ans



Question Type : **MCQ**
 Question ID : **264330135613**
 Option 1 ID : **264330531352**
 Option 2 ID : **264330531353**
 Option 3 ID : **264330531354**
 Option 4 ID : **264330531351**
 Status : **Answered**
 Chosen Option : **4**

Q.6 In a certain code language, 'RATIO' is written as 'ITARO'. How will 'UNTIL' be written in that language?

- Ans**
- ✗ 1. INTUL
 - ✗ 2. ITLUN
 - ✗ 3. ITUNL
 - ✓ 4. ITNUL

Question Type : **MCQ**
 Question ID : **264330137858**
 Option 1 ID : **264330540039**
 Option 2 ID : **264330540041**
 Option 3 ID : **264330540042**
 Option 4 ID : **264330540040**
 Status : **Answered**
 Chosen Option : **4**

Q.7 Which of the following numbers will replace the question mark (?) in the given series?

92, 99, 106, 113, 120, ?

- Ans
- 1. 117
 - 2. 127
 - 3. 213
 - 4. 217

Question Type : MCQ
Question ID : 264330137595
Option 1 ID : 264330538987
Option 2 ID : 264330538990
Option 3 ID : 264330538989
Option 4 ID : 264330538988
Status : Answered
Chosen Option : 2

Q.8 Which two numbers should be interchanged to make the given equation correct?

$$11 \times 2 + 15 \div 13 - 3 = 14$$

- Ans
- 1. 14 and 15
 - 2. 3 and 2
 - 3. 13 and 3
 - 4. 11 and 15

Question Type : MCQ
Question ID : 264330137598
Option 1 ID : 264330539002
Option 2 ID : 264330539001
Option 3 ID : 264330538999
Option 4 ID : 264330539000
Status : Answered
Chosen Option : 3

Q.9 Seven people A, B, C, D, E, F, and G are comparing their heights. No two people are of the same height. F is taller than A, who is taller than D and C. Only two people are shorter than E but neither of them is C. D is not the shortest person. G is shorter than just one person, F. Who is the shortest person?

- Ans
- 1. E
 - 2. A
 - 3. B
 - 4. C

Question Type : MCQ
Question ID : 264330137591
Option 1 ID : 264330538971
Option 2 ID : 264330538974
Option 3 ID : 264330538973
Option 4 ID : 264330538972
Status : Answered
Chosen Option : 3

Q.10 Select the option that is related to the third word in the same way as the second word is related to the first word.
Judge : Court :: Gambler : ?

- Ans**
- 1. Casino
 - 2. Hangar
 - 3. Sea
 - 4. Station

Question Type : **MCQ**
Question ID : **264330134977**
Option 1 ID : **264330528845**
Option 2 ID : **264330528843**
Option 3 ID : **264330528846**
Option 4 ID : **264330528844**
Status : **Answered**
Chosen Option : 1

Q.11 Select the option that is related to the third letter in the same way as the second letter is related to the first letter.
A : Z :: I : ?

- Ans**
- 1. V
 - 2. S
 - 3. R
 - 4. T

Question Type : **MCQ**
Question ID : **264330137584**
Option 1 ID : **264330538946**
Option 2 ID : **264330538943**
Option 3 ID : **264330538944**
Option 4 ID : **264330538945**
Status : **Answered**
Chosen Option : 3

Q.12 In the following question, select the missing number of the given series.

1, 22, 43, 64, 85, ?

- Ans**
- 1. 114
 - 2. 110
 - 3. 108
 - 4. 106

Question Type : **MCQ**
Question ID : **264330138489**
Option 1 ID : **264330542566**
Option 2 ID : **264330542565**
Option 3 ID : **264330542564**
Option 4 ID : **264330542563**
Status : **Answered**
Chosen Option : 4

Q.13 Q, R, and S are sitting in a straight line facing south. U, W, and X are sitting in a parallel line facing north. Q is sitting to the immediate left of S and opposite to W. R, who is opposite to U, is to the immediate right of S. Who sits to the immediate right of U?

- Ans**
- 1. Q
 - 2. W
 - 3. S
 - 4. X

Question Type : **MCQ**
Question ID : **264330137589**
Option 1 ID : **264330538964**
Option 2 ID : **264330538966**
Option 3 ID : **264330538963**
Option 4 ID : **264330538965**
Status : **Answered**
Chosen Option : **4**

Q.14 In a certain code language, 'IMAGE' is written as 'RN1TV'. How will 'KNIFE' be written in that language?

- Ans**
- 1. PIMVU
 - 2. P9MUV
 - 3. PM9UV
 - 4. PM9VU

Question Type : **MCQ**
Question ID : **264330134981**
Option 1 ID : **264330528860**
Option 2 ID : **264330528861**
Option 3 ID : **264330528859**
Option 4 ID : **264330528862**
Status : **Answered**
Chosen Option : **3**

Q.15 In a certain code language, 'EMPIRE' is written as '5P16L18H'. How will 'EXPAND' be written in that language?

- Ans**
- 1. 5A61D14G
 - 2. 5A16D18G
 - 3. 5A16D14G
 - 4. 5G16D14G

Question Type : **MCQ**
Question ID : **264330134983**
Option 1 ID : **264330528867**
Option 2 ID : **264330528868**
Option 3 ID : **264330528869**
Option 4 ID : **264330528870**
Status : **Answered**
Chosen Option : **3**

Q.16 A, B, C, D, and E are sitting in a straight line facing north. C is exactly in between B and D. E is to the immediate left of B. D is not sitting at the end of the bench. Who is sitting to the immediate right of D?

- Ans
- 1. C
 - 2. E
 - 3. A
 - 4. B

Question Type : MCQ
Question ID : 264330137590
Option 1 ID : 264330538969
Option 2 ID : 264330538970
Option 3 ID : 264330538967
Option 4 ID : 264330538968
Status : Answered
Chosen Option : 3

Q.17 Three statements are given followed by two conclusions numbered I and II. Assuming the statements to be true, even if they seem to be at variance with commonly known facts, decide which of the conclusions logically follow(s) from the statements.

Statements:
Some towns are cities.
Some cities are villages.
All villages are states.

Conclusions:
I. Some towns are not villages.
II. Some states are cities.

- Ans
- 1. Only conclusion II follows
 - 2. Only conclusion I follows
 - 3. Both conclusions I and II follow
 - 4. Neither conclusion I nor II follows

Question Type : MCQ
Question ID : 264330137593
Option 1 ID : 264330538980
Option 2 ID : 264330538979
Option 3 ID : 264330538981
Option 4 ID : 264330538982
Status : Answered
Chosen Option : 1

Q.18 Which two numbers should be interchanged to make the given equation correct?

$$9 + 30 \times 15 - 18 \div 6 = 274$$

- Ans
- 1. 18 and 9
 - 2. 30 and 18
 - 3. 15 and 18
 - 4. 9 and 30

Question Type : MCQ
Question ID : 264330133577
Option 1 ID : 264330523334
Option 2 ID : 264330523333
Option 3 ID : 264330523332
Option 4 ID : 264330523331
Status : Answered
Chosen Option : 2

Q.19 Which of the following letter will replace the question mark (?) in the given series?

L, K, I, F, B, W, ?

- Ans
- 1. U
 - 2. Q
 - 3. R
 - 4. M

Question Type : MCQ
Question ID : 264330137581
Option 1 ID : 264330538934
Option 2 ID : 264330538933
Option 3 ID : 264330538932
Option 4 ID : 264330538931
Status : Answered
Chosen Option : 2

Q.20 Study the given pattern carefully and select the number that can replace the question mark (?) in it.

First row- 25, 40, 10

Second row- 55, 70, 40

Third row- 33, 48, ?

- Ans
- 1. 19
 - 2. 15
 - 3. 18
 - 4. 17

Question Type : MCQ
Question ID : 264330137597
Option 1 ID : 264330538998
Option 2 ID : 264330538996
Option 3 ID : 264330538997
Option 4 ID : 264330538995
Status : Answered
Chosen Option : 3

Section : General Awareness

Q.1 Srimanta Sankardev is generally acknowledged with pioneering new musical, dramatic, and linguistic forms. He is associated with which of the following dance forms?

- Ans
- 1. Manipuri
 - 2. Kathakali
 - 3. Odissi
 - 4. Sattriya

Question Type : MCQ
Question ID : 264330137988
Option 1 ID : 264330540559
Option 2 ID : 264330540561
Option 3 ID : 264330540560
Option 4 ID : 264330540562
Status : Answered
Chosen Option : 4

Q.2 Which of the following singer is the recipient of the Dadasaheb Phalke Award?

- Ans
- 1. Sonu Nigam
 - 2. Asha Bhosle
 - 3. Neha Kakkar
 - 4. Arijit Singh

Question Type : MCQ
Question ID : 264330137779
Option 1 ID : 264330539726
Option 2 ID : 264330539724
Option 3 ID : 264330539725
Option 4 ID : 264330539723
Status : Answered
Chosen Option : 2

Q.3 According to the Union Home Ministry, the census 2021 (which got postponed due to COVID 19) was supposed to collect data for _____ for the first time.

- Ans
- 1. Schedule Tribes
 - 2. Schedule Castes
 - 3. Economically weaker sections
 - 4. Other Backward Castes

Question Type : MCQ
Question ID : 264330134042
Option 1 ID : 264330525194
Option 2 ID : 264330525193
Option 3 ID : 264330525191
Option 4 ID : 264330525192
Status : Answered
Chosen Option : 3

Q.4 The total number of Ministers, including the Prime Minister, in the Council of Ministers shall not exceed _____ percent of the total number of members of the House of the People.

- Ans
- 1. fifteen
 - 2. twelve
 - 3. twenty
 - 4. ten

Question Type : MCQ
Question ID : 264330137782
Option 1 ID : 264330539736
Option 2 ID : 264330539738
Option 3 ID : 264330539735
Option 4 ID : 264330539737
Status : Answered
Chosen Option : 1

Q.5 "Brahmadeya" a type of land during Chola Period was the _____.

- Ans
- 1. land gifted to Brahmans
 - 2. land of non - Brahmana peasant proprietors
 - 3. land gifted to temples
 - 4. land of royal person

Question Type : MCQ
Question ID : 264330138268
Option 1 ID : 264330541682
Option 2 ID : 264330541679
Option 3 ID : 264330541680
Option 4 ID : 264330541681
Status : Answered
Chosen Option : 1

Q.6 Which of the following structure is associated with Buddhism?

- Ans
- 1. Pallava
 - 2. Mandapa
 - 3. Shikhara
 - 4. Stupa

Question Type : MCQ
Question ID : 264330134035
Option 1 ID : 264330525166
Option 2 ID : 264330525163
Option 3 ID : 264330525164
Option 4 ID : 264330525165
Status : Answered
Chosen Option : 4

Q.7 Which of the famous personalities belonged to the extremist phase of modern history?

- Ans
- 1. P.M. Mehta
 - 2. A.O. Hume
 - 3. Gopal Krishna Gokhale
 - 4. Bal Gangadhar Tilak

Question Type : MCQ
Question ID : 264330134046
Option 1 ID : 264330525209
Option 2 ID : 264330525208
Option 3 ID : 264330525207
Option 4 ID : 264330525210
Status : Answered
Chosen Option : 4

Q.8 Santhal community is an ethnic group of _____ India.

- Ans
- 1. eastern
 - 2. northern
 - 3. southern
 - 4. western

Question Type : MCQ
Question ID : 264330135472
Option 1 ID : 264330530795
Option 2 ID : 264330530797
Option 3 ID : 264330530798
Option 4 ID : 264330530796
Status : Answered
Chosen Option : 1

Q.9 Chapchar kut festival, is a famous festival of _____ state of India.

- Ans
- 1. Tamil Nadu
 - 2. Mizoram
 - 3. Punjab
 - 4. Uttar Pradesh

Question Type : MCQ
Question ID : 264330135462
Option 1 ID : 264330530757
Option 2 ID : 264330530755
Option 3 ID : 264330530756
Option 4 ID : 264330530758
Status : Answered
Chosen Option : 2

Q.10 Neeraj Chopra, Clinched the historic gold at Tokyo Olympics 2020 with a throw of _____.

- Ans
- 1. 86.58 m
 - 2. 87.58 m
 - 3. 85.58 m
 - 4. 88.58 m

Question Type : MCQ
Question ID : 264330138250
Option 1 ID : 264330541608
Option 2 ID : 264330541609
Option 3 ID : 264330541607
Option 4 ID : 264330541610
Status : Answered
Chosen Option : 4

Q.11 Which articles of the Indian constitution address fundamental rights?

- Ans
- 1. Article 12 to 35
 - 2. Article 5 to 35
 - 3. Article 12 to 40
 - 4. Article 5 to 11

Question Type : MCQ
Question ID : 264330137781
Option 1 ID : 264330539734
Option 2 ID : 264330539732
Option 3 ID : 264330539733
Option 4 ID : 264330539731
Status : Answered
Chosen Option : 1

Q.12 The SI unit of power of lens is _____.

- Ans
- 1. candela
 - 2. mole
 - 3. watt
 - 4. dioptre

Question Type : MCQ
Question ID : 264330138262
Option 1 ID : 264330541656
Option 2 ID : 264330541657
Option 3 ID : 264330541655
Option 4 ID : 264330541658
Status : Answered
Chosen Option : 4

Q.13 Shifting Agriculture is also known as Jhum in _____.

- Ans
- 1. Maharashtra
 - 2. Assam
 - 3. Rajasthan
 - 4. Karnataka

Question Type : MCQ
Question ID : 264330137978
Option 1 ID : 264330540522
Option 2 ID : 264330540521
Option 3 ID : 264330540519
Option 4 ID : 264330540520
Status : Answered
Chosen Option : 2

Q.14 Who among the following freedom fighters was one of the founders of the Fergusson College in Pune in 1885?

- Ans
- 1. Subhash Chandra Bose
 - 2. Bal Gangadhar Tilak
 - 3. Sardar Vallabh Bhai Patel
 - 4. Lala Lajpat Rai

Question Type : MCQ
Question ID : 264330135475
Option 1 ID : 264330530807
Option 2 ID : 264330530809
Option 3 ID : 264330530808
Option 4 ID : 264330530810
Status : Answered
Chosen Option : 2

Q.15 In which sport did Mirabai Chanu win India's first Gold Medal at the Commonwealth Games 2022?

- Ans
- 1. Boxing
 - 2. Archery
 - 3. Weightlifting
 - 4. Shooting

Question Type : MCQ
Question ID : 264330137783
Option 1 ID : 264330539740
Option 2 ID : 264330539739
Option 3 ID : 264330539742
Option 4 ID : 264330539741
Status : Answered
Chosen Option : 3

Q.16 The government launched the Stand-Up India scheme to promote entrepreneurship among _____.

- Ans
- 1. Disabled Individuals
 - 2. Transgender community
 - 3. Elderly Individuals
 - 4. Women and SC/ST communities

Question Type : MCQ
Question ID : 264330137761
Option 1 ID : 264330539652
Option 2 ID : 264330539654
Option 3 ID : 264330539651
Option 4 ID : 264330539653
Status : Answered
Chosen Option : 2

Q.17 The National Anti-Doping Bill was passed in the Lok Sabha on July 27, 2022. Which of the following organisation manage and administer doping control programs in India?

- Ans
- 1. National Anti-Doping Agency (NADA)
 - 2. National Adverse Doping Agency (NADA)
 - 3. National Dope Testing Laboratory (NDTL)
 - 4. National Doping Control Agency (NDCA)

Question Type : MCQ
Question ID : 264330134032
Option 1 ID : 264330525151
Option 2 ID : 264330525154
Option 3 ID : 264330525152
Option 4 ID : 264330525153
Status : Answered
Chosen Option : 4

Q.18 The head office of National Bank for Agricultural and Rural Development is located in _____.

- Ans
- 1. Pune
 - 2. Mumbai
 - 3. Chennai
 - 4. Kolkata

Question Type : MCQ
Question ID : 264330137993
Option 1 ID : 264330540580
Option 2 ID : 264330540581
Option 3 ID : 264330540582
Option 4 ID : 264330540579
Status : Not Answered
Chosen Option : --

Q.19 What is added to toothpaste to reduce tooth decay?

- Ans
- 1. Iron
 - 2. Cobalt
 - 3. Fluoride
 - 4. Molybdenum

Question Type : MCQ
Question ID : 264330137767
Option 1 ID : 264330539677
Option 2 ID : 264330539678
Option 3 ID : 264330539675
Option 4 ID : 264330539676
Status : Answered
Chosen Option : 3

Q.20 "The Inheritance of Loss" is written by which of the following authors?

- Ans
- 1. Jhumpa Lahiri
 - 2. Amitav Ghosh
 - 3. Kiran Desai
 - 4. Anita Desai

Question Type : MCQ
Question ID : 264330137986
Option 1 ID : 264330540551
Option 2 ID : 264330540554
Option 3 ID : 264330540552
Option 4 ID : 264330540553
Status : Answered
Chosen Option : 1

Q.21 In which of the following regions days and nights are almost equal in length throughout the year?

- Ans
- 1. Tundra region
 - 2. Equatorial region
 - 3. Desert region
 - 4. Mountain forest region

Question Type : MCQ
Question ID : 264330138261
Option 1 ID : 264330541651
Option 2 ID : 264330541652
Option 3 ID : 264330541653
Option 4 ID : 264330541654
Status : Answered
Chosen Option : 2

Q.22 Kathakali is a classical dance of which state?

- Ans
- 1. Andhra Pradesh
 - 2. Tamil Nadu
 - 3. Karnataka
 - 4. Kerala

Question Type : MCQ
Question ID : 264330137763
Option 1 ID : 264330539662
Option 2 ID : 264330539661
Option 3 ID : 264330539659
Option 4 ID : 264330539660
Status : Answered
Chosen Option : 4

Q.23 Which of the following statement is 'NOT' correct about "Manures"?

- Ans
- 1. They can be prepared in the fields
 - 2. They do not provide humus to soil
 - 3. They are relatively less rich in plant nutrients
 - 4. They are natural substance

Question Type : MCQ
Question ID : 264330138260
Option 1 ID : 264330541649
Option 2 ID : 264330541648
Option 3 ID : 264330541650
Option 4 ID : 264330541647
Status : Answered
Chosen Option : 2

Q.24 In migration the factors which cause people to leave their place of residence or origin are called _____.

- Ans
- 1. Pull factors
 - 2. Regular factors
 - 3. Push factors
 - 4. Irregular factors

Question Type : MCQ
Question ID : 264330138315
Option 1 ID : 264330541867
Option 2 ID : 264330541870
Option 3 ID : 264330541868
Option 4 ID : 264330541869
Status : Answered
Chosen Option : 3

Q.25 Which place in the world receives the highest rainfall?

- Ans
- 1. Agartala
 - 2. Guwahati
 - 3. Itanagar
 - 4. Mawsynram

Question Type : MCQ
Question ID : 264330137771
Option 1 ID : 264330539693
Option 2 ID : 264330539691
Option 3 ID : 264330539694
Option 4 ID : 264330539692
Status : Answered
Chosen Option : 4

Section : English Language and Comprehension

Q.1 Choose the word that means the same as the given word.

Backfire

- Ans
- 1. Florid
 - 2. Collapse
 - 3. Flood
 - 4. Flourish

Question Type : MCQ
Question ID : 264330135273
Option 1 ID : 264330530007
Option 2 ID : 264330530010
Option 3 ID : 264330530008
Option 4 ID : 264330530009
Status : Answered
Chosen Option : 2

Q.2 Choose the sentence with no spelling error.

- Ans
- 1. We need to give priority to customer satisfaction.
 - 2. We need to give priority to customar satisfaction.
 - 3. We need to give priorrity to customer satisfaction.
 - 4. We need to give priority to customer satisfraction.

Question Type : MCQ
Question ID : 264330135227
Option 1 ID : 264330529833
Option 2 ID : 264330529832
Option 3 ID : 264330529834
Option 4 ID : 264330529831
Status : Answered
Chosen Option : 1

Q.3 Identify the segment that contains a grammatical error. If there is no error, select 'No error'.

He behaves so aggressive in his new/ home that he is rehoused with an old/ couple who could give him everything he lacks.

- Ans
- 1. couple who could give him everything he lacks.
 - 2. home that he is rehoused with an old
 - 3. No error
 - 4. He behaves so aggressive in his new

Question Type : MCQ
Question ID : 264330136665
Option 1 ID : 264330535381
Option 2 ID : 264330535380
Option 3 ID : 264330535382
Option 4 ID : 264330535379
Status : Answered
Chosen Option : 4

Q.4 Select the most appropriate option to substitute the bracketed segment in the given sentence. If there is no need to substitute it, select 'no substitution required'.

Jane was asked by her (aunt, "Where were you least night?")

- Ans**
- 1. No substitution required
 - 2. aunt that, "Where were you last night?"
 - 3. aunt, "Where were you last night?"
 - 4. aunt, "Where last night you was?"

Question Type : **MCQ**
Question ID : **264330136668**
Option 1 ID : **264330535394**
Option 2 ID : **264330535391**
Option 3 ID : **264330535393**
Option 4 ID : **264330535392**
Status : **Answered**
Chosen Option : **3**

Q.5 Select the most appropriate word for the given group of words.

Scientific tests or techniques used in connection with the detection of crime

- Ans**
- 1. Post-mortem
 - 2. Autopsy
 - 3. Forensics
 - 4. Etymology

Question Type : **MCQ**
Question ID : **264330136627**
Option 1 ID : **264330535232**
Option 2 ID : **264330535233**
Option 3 ID : **264330535234**
Option 4 ID : **264330535231**
Status : **Answered**
Chosen Option : **3**

Q.6 Identify the segment that contains a grammatical error. If there is no error, select 'No error'

In doing so, he have acquainted/ himself with the geological features/ and colours of the stone of the site.

- Ans**
- 1. No error
 - 2. and colours of the stone of the site.
 - 3. himself with the geological features
 - 4. In doing so, he have acquainted

Question Type : **MCQ**
Question ID : **264330136215**
Option 1 ID : **264330533654**
Option 2 ID : **264330533653**
Option 3 ID : **264330533652**
Option 4 ID : **264330533651**
Status : **Answered**
Chosen Option : **4**

Q.7 Improve the underlined part of the sentence. Choose 'No improvement' as an answer if the sentence is grammatically correct.

The film's director decide to reshoot the scene.

- Ans**
- 1. deciding to reshoot
 - 2. decide to reshot
 - 3. decided to reshoot
 - 4. No improvement

Question Type : **MCQ**
Question ID : **264330134775**
Option 1 ID : **264330528049**
Option 2 ID : **264330528048**
Option 3 ID : **264330528047**
Option 4 ID : **264330528050**
Status : **Answered**
Chosen Option : **3**

Q.8 Select the most appropriate meaning of the given idiom.

High horse

- Ans**
- 1. To be very lucky
 - 2. To have a low self-esteem
 - 3. An attitude of moral superiority
 - 4. To be the person in charge

Question Type : **MCQ**
Question ID : **264330136633**
Option 1 ID : **264330535257**
Option 2 ID : **264330535256**
Option 3 ID : **264330535255**
Option 4 ID : **264330535258**
Status : **Answered**
Chosen Option : **1**

Q.9 Select the most appropriate option to fill in the blank.

As a preliminary to negotiation, the government was required to _____ all the obnoxious measures.

- Ans**
- 1. rescind
 - 2. requisite
 - 3. quaint
 - 4. repeat

Question Type : **MCQ**
Question ID : **264330136219**
Option 1 ID : **264330533670**
Option 2 ID : **264330533669**
Option 3 ID : **264330533667**
Option 4 ID : **264330533668**
Status : **Answered**
Chosen Option : **1**

Q.10 Choose the word that is opposite in meaning to the given word.
Apprentice

- Ans
- 1. Crude
 - 2. Neophyte
 - 3. Veteran
 - 4. Essential

Question Type : MCQ
Question ID : 264330134520
Option 1 ID : 264330527042
Option 2 ID : 264330527039
Option 3 ID : 264330527040
Option 4 ID : 264330527041
Status : Answered
Chosen Option : 3

Q.11 Select the most appropriate synonym of the given word.

Unfamiliar

- Ans
- 1. Unsparing
 - 2. Prodigal
 - 3. Strange
 - 4. Parallel

Question Type : MCQ
Question ID : 264330136229
Option 1 ID : 264330533706
Option 2 ID : 264330533705
Option 3 ID : 264330533703
Option 4 ID : 264330533704
Status : Answered
Chosen Option : 3

Q.12 Select the most appropriate antonym to substitute the bracketed word in the given sentence.

The lens in this collection is focused very carefully upon the (quotidian), with all of its utterly familiar vexations.

- Ans
- 1. Mandatory
 - 2. Normal
 - 3. Sporadic
 - 4. Obligatory

Question Type : MCQ
Question ID : 264330136232
Option 1 ID : 264330533715
Option 2 ID : 264330533716
Option 3 ID : 264330533717
Option 4 ID : 264330533718
Status : Answered
Chosen Option : 2

Q.13 Select the most appropriate word for the given group of words.

Impossible to deny or disapprove

- Ans
- 1. Incontrovertible
 - 2. Dubitable
 - 3. Frangible
 - 4. Assailable

Question Type : MCQ
Question ID : 264330136228
Option 1 ID : 264330533700
Option 2 ID : 264330533701
Option 3 ID : 264330533702
Option 4 ID : 264330533699
Status : Answered
Chosen Option : 2

Q.14 Select the most appropriate option to fill in the blank.

If the anesthesia is not _____ properly, he might wake up in the _____ of the surgery.

- Ans
- 1. perpetuated/ start
 - 2. administer/during
 - 3. perpetuated/ middle
 - 4. administered/ middle

Question Type : MCQ
Question ID : 264330136238
Option 1 ID : 264330533741
Option 2 ID : 264330533739
Option 3 ID : 264330533742
Option 4 ID : 264330533740
Status : Answered
Chosen Option : 4

Q.15 A sentence has been given with a blank to be filled with an appropriate option. Choose the correct alternative.

The need to take theatre online _____ in global collaborations.

- Ans
- 1. has resulted
 - 2. result
 - 3. have resulted
 - 4. resulting

Question Type : MCQ
Question ID : 264330135263
Option 1 ID : 264330529973
Option 2 ID : 264330529974
Option 3 ID : 264330529972
Option 4 ID : 264330529971
Status : Answered
Chosen Option : 1

Q.16 Select the most appropriate meaning of the bracketed idiom in the given sentence.

After repeated failures and disappointments he was tempted (to throw up the sponge), but continued perseverance finally brought success.

- Ans
- 1. To catch somebody of guard
 - 2. To surrender or give up the contest
 - 3. To reveal secret information
 - 4. To be afraid

Question Type : **MCQ**
Question ID : **264330136234**
Option 1 ID : **264330533726**
Option 2 ID : **264330533724**
Option 3 ID : **264330533725**
Option 4 ID : **264330533723**
Status : **Answered**
Chosen Option : **2**

Q.17 Find the part of the given sentence that has an error in it. If there is no error, choose 'No error'.

He didn't went to the school as he was down with fever.

- Ans
- 1. No error
 - 2. He didn't went
 - 3. was down with fever.
 - 4. to the school as he

Question Type : **MCQ**
Question ID : **264330134398**
Option 1 ID : **264330526574**
Option 2 ID : **264330526571**
Option 3 ID : **264330526573**
Option 4 ID : **264330526572**
Status : **Answered**
Chosen Option : **2**

Q.18 Select the word segment that substitutes (replaces) the bracketed word segment correctly and completes the sentence meaningfully. Select the option 'no correction required' if the sentence is correct as given.

(Much times), I have felt that conversations like these must take place in person.

- Ans
- 1. Many a times
 - 2. Many time
 - 3. No correction required
 - 4. Many a time

Question Type : **MCQ**
Question ID : **264330136244**
Option 1 ID : **264330533763**
Option 2 ID : **264330533765**
Option 3 ID : **264330533766**
Option 4 ID : **264330533764**
Status : **Answered**
Chosen Option : **1**

Q.19 Select the correctly spelt word.

- Ans
- 1. Domining
 - 2. Domoneering
 - 3. Dominiering
 - 4. Domineering

Question Type : MCQ
Question ID : 264330136235
Option 1 ID : 264330533729
Option 2 ID : 264330533728
Option 3 ID : 264330533730
Option 4 ID : 264330533727
Status : Answered
Chosen Option : 4

Q.20 Select the most appropriate option to fill in the blank.

He wanted me to _____ your necklace.

- Ans
- 1. stern
 - 2. steal
 - 3. steel
 - 4. steam

Question Type : MCQ
Question ID : 264330135228
Option 1 ID : 264330529835
Option 2 ID : 264330529837
Option 3 ID : 264330529838
Option 4 ID : 264330529836
Status : Answered
Chosen Option : 2

Comprehension:

In the following passage some of the words have been deleted. Read the passage carefully and select the correct answer for the given blank out of the four alternatives.
Gaming in the banking sector seems virtually (1) _____ to eliminate. The only effective measure to end it would be to (2) _____ bankers personally liable for losses, to remove the sense that their actions – their games – have (3) _____ personal financial or legal consequences.
It is this, rather (4) _____ removing the cap on bankers' bonuses, that has the best chance of preventing the financial system blowing (5) _____ again.

SubQuestion No : 21

Q.21 Select the most appropriate option to fill in blank number 1.

- Ans
- 1. feasible
 - 2. impossible
 - 3. penetrable
 - 4. liable

Question Type : MCQ
Question ID : 264330134511
Option 1 ID : 264330527006
Option 2 ID : 264330527003
Option 3 ID : 264330527005
Option 4 ID : 264330527004
Status : Answered
Chosen Option : 2

Comprehension:

In the following passage some of the words have been deleted. Read the passage carefully and select the correct answer for the given blank out of the four alternatives.

Gaming in the banking sector seems virtually (1) _____ to eliminate. The only effective measure to end it would be to (2) _____ bankers personally liable for losses, to remove the sense that their actions – their games – have (3) _____ personal financial or legal consequences.

It is this, rather (4) _____ removing the cap on bankers' bonuses, that has the best chance of preventing the financial system blowing (5) _____ again.

SubQuestion No : 22

Q.22 Select the most appropriate option to fill in blank number 2.

- Ans 1. gave
 2. bake
 3. take
 4. make

Question Type : **MCQ**

Question ID : **264330134512**

Option 1 ID : **264330527007**

Option 2 ID : **264330527009**

Option 3 ID : **264330527010**

Option 4 ID : **264330527008**

Status : **Answered**

Chosen Option : **4**

Comprehension:

In the following passage some of the words have been deleted. Read the passage carefully and select the correct answer for the given blank out of the four alternatives.

Gaming in the banking sector seems virtually (1) _____ to eliminate. The only effective measure to end it would be to (2) _____ bankers personally liable for losses, to remove the sense that their actions – their games – have (3) _____ personal financial or legal consequences.

It is this, rather (4) _____ removing the cap on bankers' bonuses, that has the best chance of preventing the financial system blowing (5) _____ again.

SubQuestion No : 23

Q.23 Select the most appropriate option to fill in blank number 3.

- Ans 1. never
 2. none
 3. not
 4. no

Question Type : **MCQ**

Question ID : **264330134513**

Option 1 ID : **264330527011**

Option 2 ID : **264330527014**

Option 3 ID : **264330527012**

Option 4 ID : **264330527013**

Status : **Answered**

Chosen Option : **4**

Comprehension:

In the following passage some of the words have been deleted. Read the passage carefully and select the correct answer for the given blank out of the four alternatives.
Gaming in the banking sector seems virtually (1) _____ to eliminate. The only effective measure to end it would be to (2) _____ bankers personally liable for losses, to remove the sense that their actions – their games – have (3) _____ personal financial or legal consequences.
It is this, rather (4) _____ removing the cap on bankers' bonuses, that has the best chance of preventing the financial system blowing (5) _____ again.

SubQuestion No : 24

Q.24 Select the most appropriate option to fill in blank number 4.

- Ans 1. then
 2. but
 3. so
 4. than

Question Type : **MCQ**
Question ID : **264330134514**
Option 1 ID : **264330527015**
Option 2 ID : **264330527016**
Option 3 ID : **264330527017**
Option 4 ID : **264330527018**
Status : **Answered**
Chosen Option : **4**

Comprehension:

In the following passage some of the words have been deleted. Read the passage carefully and select the correct answer for the given blank out of the four alternatives.
Gaming in the banking sector seems virtually (1) _____ to eliminate. The only effective measure to end it would be to (2) _____ bankers personally liable for losses, to remove the sense that their actions – their games – have (3) _____ personal financial or legal consequences.
It is this, rather (4) _____ removing the cap on bankers' bonuses, that has the best chance of preventing the financial system blowing (5) _____ again.

SubQuestion No : 25

Q.25 Select the most appropriate option to fill in blank number 5.

- Ans 1. on
 2. into
 3. up
 4. off

Question Type : **MCQ**
Question ID : **264330134515**
Option 1 ID : **264330527020**
Option 2 ID : **264330527019**
Option 3 ID : **264330527022**
Option 4 ID : **264330527021**
Status : **Answered**
Chosen Option : **3**