



SSC MTS **SHIFT – 1 (11-05-2023)**

- ★ Latest Govt Job updates
- ★ Private Job updates
- ★ Free Mock tests available

Visit - teachingninja.in

Multi Tasking Non Technical Staff and Havaladar CBIC and CBN Examination 2022

Roll Number	
Candidate Name	
Venue Name	
Exam Date	11/05/2023
Exam Time	9:00 AM - 10:30 AM
Subject	MTS Non Tech Havaladar CBIC and CBN Examination 2022

Section : Numerical and Mathematical Ability

Q.1 What is the value of $42 \div [18 - \{6 + (3 \text{ of } 4 - 4 - 2 \text{ of } 5)\}]?$

- Ans
- 1. 5
 - 2. 6
 - 3. 2
 - 4. 3

Question Type : MCQ

Question ID : 264330138090

Option 1 ID : 264330540970

Option 2 ID : 264330540968

Option 3 ID : 264330540969

Option 4 ID : 264330540967

Status : Answered

Chosen Option : 4

Q.2 A man sells his bike for Rs. 132000 earning a profit of 10%. If he had sold it for Rs. 126000, then what is his profit or loss percent?

- Ans
- 1. 10% profit
 - 2. 5% loss
 - 3. 10% loss
 - 4. 5% profit

Question Type : MCQ

Question ID : 264330141033

Option 1 ID : 264330552480

Option 2 ID : 264330552481

Option 3 ID : 264330552479

Option 4 ID : 264330552482

Status : Answered

Chosen Option : 4

Q.3 The marked price of an article is 20 percent more than its cost price. If 10 percent discount is given on the marked price, then what will be the profit percentage?

- Ans**
- 1. 8 percent
 - 2. 15 percent
 - 3. 12 percent
 - 4. 10 percent

Question Type : **MCQ**
Question ID : **264330139008**
Option 1 ID : **264330544639**
Option 2 ID : **264330544642**
Option 3 ID : **264330544641**
Option 4 ID : **264330544640**
Status : **Answered**
Chosen Option : 1

Q.4 The difference in simple interest on a certain sum at 6% per annum for 5 years and 5% per annum for 4 years is Rs. 422. Find the sum

- Ans**
- 1. Rs. 2570
 - 2. Rs. 4220
 - 3. Rs. 6500
 - 4. Rs. 1990

Question Type : **MCQ**
Question ID : **264330135380**
Option 1 ID : **264330530427**
Option 2 ID : **264330530429**
Option 3 ID : **264330530430**
Option 4 ID : **264330530428**
Status : **Answered**
Chosen Option : 2

Q.5 What is the average of first 57 natural numbers?

- Ans**
- 1. 35
 - 2. 29
 - 3. 42
 - 4. 40.5

Question Type : **MCQ**
Question ID : **264330138999**
Option 1 ID : **264330544606**
Option 2 ID : **264330544605**
Option 3 ID : **264330544604**
Option 4 ID : **264330544603**
Status : **Answered**
Chosen Option : 2

Q.6 The outer radius of a spherical shell is 13 cm and the thickness of the shell is 3 cm. What is the volume of the metal used for the shell? ($\pi = \frac{22}{7}$)

- Ans**
- 1. 1197 cm³
 - 2. 2197 cm³
 - 3. 3024 cm³
 - 4. 5016 cm³

Question Type : MCQ
Question ID : 264330133835
Option 1 ID : 264330524366
Option 2 ID : 264330524363
Option 3 ID : 264330524365
Option 4 ID : 264330524364
Status : Answered
Chosen Option : 4

Q.7 If price is decreased by 25 percent, then by how much percentage consumption should be increased, so that the expenditure remains the same?

- Ans**
- 1. 20 percent
 - 2. 40 percent
 - 3. 37.5 percent
 - 4. 33.33 percent

Question Type : MCQ
Question ID : 264330139061
Option 1 ID : 264330544852
Option 2 ID : 264330544851
Option 3 ID : 264330544853
Option 4 ID : 264330544854
Status : Answered
Chosen Option : 4

Q.8 Seema alone can do a piece of work in 8 days and her sister Reema alone can do the same work in 24 days. If they worked together, then in how many days they will complete the work?

- Ans**
- 1. 8 days
 - 2. 6 days
 - 3. 10 days
 - 4. 4 days

Question Type : MCQ
Question ID : 264330138050
Option 1 ID : 264330540808
Option 2 ID : 264330540809
Option 3 ID : 264330540810
Option 4 ID : 264330540807
Status : Answered
Chosen Option : 2

Q.9 There are three measuring Tapes which measure 56 cm, 64 cm and 80 cm in length. Find the least length that could be measured by using any of the three tapes. (Only one type of tape should be used at a time and only complete tape should be used to measure.)

- Ans**
- ✓ 1. 2240 cm
 - ✗ 2. 1982 cm
 - ✗ 3. 1706 cm
 - ✗ 4. 1876 cm

Question Type : **MCQ**
Question ID : **264330139011**
Option 1 ID : **264330544652**
Option 2 ID : **264330544654**
Option 3 ID : **264330544653**
Option 4 ID : **264330544651**
Status : **Answered**
Chosen Option : 1

Q.10 A and B together finish a work in 6 days. If A alone can finish the work in 10 days, then in how many days B alone can complete the work?

- Ans**
- ✓ 1. 15 days
 - ✗ 2. 10 days
 - ✗ 3. 12 days
 - ✗ 4. 14 days

Question Type : **MCQ**
Question ID : **264330133830**
Option 1 ID : **264330524344**
Option 2 ID : **264330524343**
Option 3 ID : **264330524345**
Option 4 ID : **264330524346**
Status : **Answered**
Chosen Option : 1

Q.11 A sum becomes Rs. 27720 in 7 years at the rate of 14 percent per annum on simple interest. What is the sum?

- Ans**
- ✗ 1. Rs. 13000
 - ✗ 2. Rs. 14700
 - ✗ 3. Rs. 15000
 - ✓ 4. Rs. 14000

Question Type : **MCQ**
Question ID : **264330139066**
Option 1 ID : **264330544871**
Option 2 ID : **264330544873**
Option 3 ID : **264330544874**
Option 4 ID : **264330544872**
Status : **Answered**
Chosen Option : 4

Q.12 Ram walks at the speed of 12 km/hr and reaches his school 12 minutes late. If he walks at 16 km/hr, then he reaches 8 minutes before the scheduled time. What is the distance of his school from his house?

- Ans
- 1. 16 km
 - 2. 30 km
 - 3. 20 km
 - 4. 24 km

Question Type : MCQ
Question ID : 264330138998
Option 1 ID : 264330544600
Option 2 ID : 264330544602
Option 3 ID : 264330544599
Option 4 ID : 264330544601
Status : Answered
Chosen Option : 1

Q.13 What is the area of a square whose diagonal is $5\sqrt{2}$ cm?

- Ans
- 1. 64 cm²
 - 2. 25 cm²
 - 3. 100 cm²
 - 4. 36 cm²

Question Type : MCQ
Question ID : 264330138054
Option 1 ID : 264330540826
Option 2 ID : 264330540823
Option 3 ID : 264330540824
Option 4 ID : 264330540825
Status : Answered
Chosen Option : 2

Q.14 If $2P = 3Q$ and $5Q = 4R$, then what is the value of P : Q : R?

- Ans
- 1. 8 : 5 : 4
 - 2. 2 : 3 : 5
 - 3. 6 : 4 : 5
 - 4. 7 : 5 : 6

Question Type : MCQ
Question ID : 264330139004
Option 1 ID : 264330544623
Option 2 ID : 264330544626
Option 3 ID : 264330544625
Option 4 ID : 264330544624
Status : Answered
Chosen Option : 3

Q.15 The following table shows the unemployed people in 5 states of India from 2019 to 2022.
What is the average number of unemployed people in Karnataka, Maharashtra and Punjab in 2021?

State/Year	Number of unemployed people (in thousand)			
	2019	2020	2021	2022
Bihar	25	40	50	42
UP	84	70	60	58
Karnataka	12	10	9	10
Maharashtra	40	48	30	32
Punjab	20	25	18	15

- Ans
- 1. 9 thousand
 - 2. 18 thousand
 - 3. 30 thousand
 - 4. 19 thousand

Question Type : MCQ
Question ID : 264330138105
Option 1 ID : 264330541029
Option 2 ID : 264330541028
Option 3 ID : 264330541030
Option 4 ID : 264330541027
Status : Answered
Chosen Option : 4

Q.16 In three positive numbers, the ratio of first and second is 3 : 4 and the ratio of second and third is 3 : 5. The product of first and third is 4500. What is the sum of the three numbers?

- Ans
- 1. 282
 - 2. 235
 - 3. 198
 - 4. 205

Question Type : MCQ
Question ID : 264330139005
Option 1 ID : 264330544630
Option 2 ID : 264330544628
Option 3 ID : 264330544629
Option 4 ID : 264330544627
Status : Answered
Chosen Option : 4

Q.17 Average weight of 25 members of a group is 39 kg. Average weight of 27 members of another group is 21 kg. What will be the total weight of the members of both the groups?

- Ans
- 1. 1426 kg
 - 2. 1542 kg
 - 3. 1507 kg
 - 4. 1714 kg

Question Type : MCQ
Question ID : 264330139060
Option 1 ID : 264330544850
Option 2 ID : 264330544849
Option 3 ID : 264330544847
Option 4 ID : 264330544848
Status : Answered
Chosen Option : 2

Q.18 While selling an article for Rs. 8442, a person suffered a loss of 30 percent. At what price he should have sold the article to earn a profit of 20 percent?

- Ans**
- 1. Rs. 15686
 - 2. Rs. 14472
 - 3. Rs. 12806
 - 4. Rs. 13885

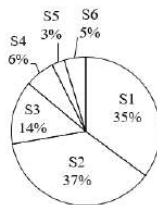
Question Type : **MCQ**
Question ID : **264330139003**
Option 1 ID : **264330544620**
Option 2 ID : **264330544619**
Option 3 ID : **264330544621**
Option 4 ID : **264330544622**
Status : **Answered**
Chosen Option : **2**

Q.19 Which is the greatest number of four digit divisible by 12, 25 and 45?

- Ans**
- 1. 9890
 - 2. 9999
 - 3. 9800
 - 4. 9900

Question Type : **MCQ**
Question ID : **264330141006**
Option 1 ID : **264330552373**
Option 2 ID : **264330552371**
Option 3 ID : **264330552372**
Option 4 ID : **264330552374**
Status : **Answered**
Chosen Option : **4**

Q.20 The pie chart given below shows the number of students studying in six schools. Total number of students studying in all these six schools are 8000. Number of students studying in a particular school is shown as a percentage of total number of students studying in all these six schools.



Total number of students studying in school S2 and S4 are what percent of the total number of students studying in school S3 and S6?

- Ans**
- 1. 226.31 percent
 - 2. 190.46 percent
 - 3. 171.22 percent
 - 4. 265.22 percent

Question Type : **MCQ**
Question ID : **264330139015**
Option 1 ID : **264330544670**
Option 2 ID : **264330544668**
Option 3 ID : **264330544669**
Option 4 ID : **264330544667**
Status : **Answered**
Chosen Option : **1**

Section : Reasoning Ability and Problem Solving

Q.1 Which of the following numbers will replace the question mark (?) in the given series?

27, 30, 35, 38, 43, 46, 51, ?

Ans 1. 30

2. 54

3. 56

4. 48

Question Type : MCQ

Question ID : 264330138821

Option 1 ID : 264330543892

Option 2 ID : 264330543893

Option 3 ID : 264330543894

Option 4 ID : 264330543891

Status : Answered

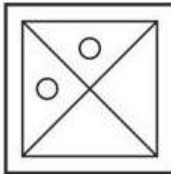
Chosen Option : 2

Q.2 Select the option figure in which the given figure is embedded as its part (rotation is NOT allowed).

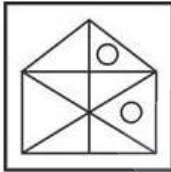


Ans

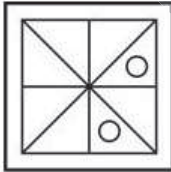
1.



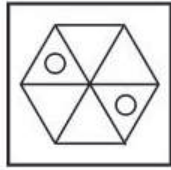
2.



3.



4.



Question Type : MCQ

Question ID : 264330137871

Option 1 ID : 264330540091

Option 2 ID : 264330540093

Option 3 ID : 264330540092

Option 4 ID : 264330540094

Status : Answered

Chosen Option : 4

Q.3 Six students Snbham, Sneha, Surbhi, Muskan, Harsh and Vishal are standing in an assembly line facing north (one behind the other). Only one person stands behind Harsh in the line. Sneha stands exactly between Vishal and Muskan. Surbhi stands between Muskan and Harsh. Who stands immediately behind Surbhi?

- Ans**
- 1. Vishal
 - 2. Harsh
 - 3. Subham
 - 4. Sneha

Question Type : **MCQ**
Question ID : **264330138815**
Option 1 ID : **264330543868**
Option 2 ID : **264330543870**
Option 3 ID : **264330543867**
Option 4 ID : **264330543869**
Status : **Answered**
Chosen Option : **2**

Q.4 Rashmi is shorter than Monika who is shorter than Prema. Sana is shorter than Rashmi. Harshita is taller than Prema. Uma is shorter than Nikita and taller than Harshita. Who among them is the shortest?

- Ans**
- 1. Uma
 - 2. Sana
 - 3. Rashmi
 - 4. Prerna

Question Type : **MCQ**
Question ID : **264330138817**
Option 1 ID : **264330543876**
Option 2 ID : **264330543877**
Option 3 ID : **264330543878**
Option 4 ID : **264330543875**
Status : **Answered**
Chosen Option : **2**

Q.5 Select the option that is related to the third letter cluster in the same way as the second letter cluster is related to the first letter cluster.

SOC : TND :: UDN : ?

- Ans**
- 1. VCP
 - 2. UCO
 - 3. VCO
 - 4. OCV

Question Type : **MCQ**
Question ID : **264330138811**
Option 1 ID : **264330543854**
Option 2 ID : **264330543853**
Option 3 ID : **264330543851**
Option 4 ID : **264330543852**
Status : **Answered**
Chosen Option : **3**

Q.6 Study the given pattern carefully and select the number that can replace the question mark (?) in it.

First row- 18, 36, 6

Second row- 24, 48, 8

Third row- 33, 66, ?

Ans 1. 13

2. 11

3. 14

4. 12

Question Type : MCQ

Question ID : 264330138823

Option 1 ID : 264330543902

Option 2 ID : 264330543899

Option 3 ID : 264330543901

Option 4 ID : 264330543900

Status : Answered

Chosen Option : 2

Q.7 Select the option that is related to the fifth number in the same way as the second number is related to the first number and fourth number is related to third number.

10 : 512 :: 12 : 1000 :: 8 : ?

Ans 1. 315

2. 216

3. 512

4. 256

Question Type : MCQ

Question ID : 264330138843

Option 1 ID : 264330543980

Option 2 ID : 264330543982

Option 3 ID : 264330543981

Option 4 ID : 264330543979

Status : Answered

Chosen Option : 2

Q.8 In a certain code language, 'PARK' is coded as 'FMVK'. What is the code for 'RICE' in that code language?

Ans 1. ZXEM

2. ZXDN

3. ZXDM

4. ZXDL

Question Type : MCQ

Question ID : 264330138525

Option 1 ID : 264330542709

Option 2 ID : 264330542708

Option 3 ID : 264330542710

Option 4 ID : 264330542707

Status : Answered

Chosen Option : 3

Q.9 P, Q, R, and S are sitting on a bench facing south. A, B, C, and D are sitting on a parallel bench facing north. S and B are sitting opposite to each other. A sits exactly in between D and C. P sits opposite to C. Q sits immediately to the left of S. Which of the following is correct about the position of R?

- Ans**
- 1. R sits opposite to A
 - 2. R sits opposite to D
 - 3. R sits to the immediate right of Q
 - 4. R sits to immediate left of P

Question Type : **MCQ**
Question ID : **264330138816**
Option 1 ID : **264330543874**
Option 2 ID : **264330543871**
Option 3 ID : **264330543873**
Option 4 ID : **264330543872**
Status : **Answered**
Chosen Option : 1

Q.10 Three statements are given followed by two conclusions numbered I and II. Assuming the statements to be true, even if they seem to be at variance with commonly known facts, decide which of the conclusions logically follow(s) from the statements.

Statements:

- Some rabbits are white.
- Some rabbits are brown.
- All white are yellow.

Conclusions:

- I. Some brown are yellow.
- II. Some rabbits are yellow.

- Ans**
- 1. Neither conclusion I nor II follows
 - 2. Only conclusion I follows
 - 3. Only conclusion II follows
 - 4. Both conclusions I and II follow

Question Type : **MCQ**
Question ID : **264330138819**
Option 1 ID : **264330543886**
Option 2 ID : **264330543883**
Option 3 ID : **264330543884**
Option 4 ID : **264330543885**
Status : **Answered**
Chosen Option : 3

Q.11 In the following question, select the missing number of the given series.

500, 477, 454, 431, 408, ?

- Ans**
- 1. 390
 - 2. 385
 - 3. 384
 - 4. 391

Question Type : **MCQ**
Question ID : **264330138841**
Option 1 ID : **264330543973**
Option 2 ID : **264330543971**
Option 3 ID : **264330543972**
Option 4 ID : **264330543974**
Status : **Answered**
Chosen Option : 2

Q.12 Which of the following letter will replace the question mark (?) in the given series?

Y, T, O, J, E, ?

- Ans
- 1. C
 - 2. D
 - 3. B
 - 4. Z

Question Type : MCQ

Question ID : 264330138808

Option 1 ID : 264330543839

Option 2 ID : 264330543841

Option 3 ID : 264330543840

Option 4 ID : 264330543842

Status : Answered

Chosen Option : 4

Q.13 Select the option that is related to the third word in the same way as the second word is related to the first word.

Soldier : Gun :: Surgeon : ?

- Ans
- 1. Pen
 - 2. Axe
 - 3. Scalpel
 - 4. Sword

Question Type : MCQ

Question ID : 264330138810

Option 1 ID : 264330543847

Option 2 ID : 264330543850

Option 3 ID : 264330543849

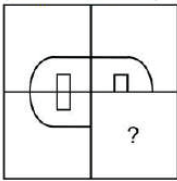
Option 4 ID : 264330543848

Status : Answered

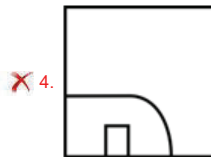
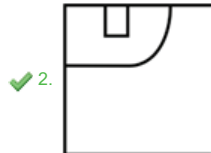
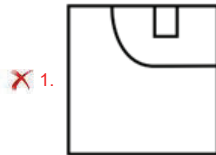
Chosen Option : 3



Q.14 Select the option figure that will replace the question mark (?) in the figure given below to complete the pattern.
(rotation is not allowed)



Ans



Teachingninja.in

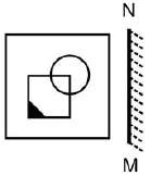
Question Type : MCQ
 Question ID : 264330138828
 Option 1 ID : 264330543921
 Option 2 ID : 264330543920
 Option 3 ID : 264330543922
 Option 4 ID : 264330543919
 Status : Answered
 Chosen Option : 2

Q.15 In a certain code language, 'PROVED' is coded as 'VEDPRO'. What is the code for 'ROBUST' in that code language?

- Ans
- ✓ 1. USTROB
 - ✗ 2. USTROC
 - ✗ 3. VSTRBO
 - ✗ 4. VSTROB

Question Type : MCQ
 Question ID : 264330138854
 Option 1 ID : 264330544024
 Option 2 ID : 264330544026
 Option 3 ID : 264330544023
 Option 4 ID : 264330544025
 Status : Answered
 Chosen Option : 1

Q.16 Select the correct mirror image of the given figure when the mirror MN is placed to the right side of the figure.

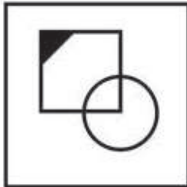


Ans

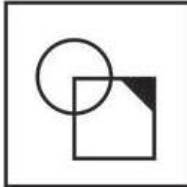
✗ 1.



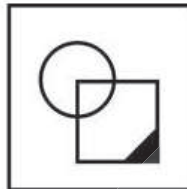
✗ 2.



✗ 3.



✓ 4.



Teachingninja.in

Question Type : MCQ

Question ID : 264330137872

Option 1 ID : 264330540096

Option 2 ID : 264330540098

Option 3 ID : 264330540095

Option 4 ID : 264330540097

Status : Answered

Chosen Option : 4

Q.17 Two statements are given followed by two conclusions numbered I and II. Assuming the statements to be true, even if they seem to be at variance with commonly known facts, decide which of the conclusions logically follow(s) from the statements.

Statements:

All chairs are desks.

All desks are table.

Conclusions:

I. Some table are chairs.

II. All tables are desk.

- Ans**
- 1. Only conclusion I follows
 - 2. Neither conclusion I nor II follows
 - 3. Both conclusions I and II follow
 - 4. Only conclusion II follows

Question Type : **MCQ**

Question ID : **264330138818**

Option 1 ID : **264330543879**

Option 2 ID : **264330543882**

Option 3 ID : **264330543881**

Option 4 ID : **264330543880**

Status : **Answered**

Chosen Option : **1**

Q.18 In a certain code language, 'KOVID' is coded as 'DIVOK'. What is the code for 'DAVID' in that code language?

- Ans**
- 1. DIWAD
 - 2. DIVDA
 - 3. DIVAD
 - 4. DIVBD

Question Type : **MCQ**

Question ID : **264330137112**

Option 1 ID : **264330537091**

Option 2 ID : **264330537093**

Option 3 ID : **264330537092**

Option 4 ID : **264330537094**

Status : **Answered**

Chosen Option : **3**

Q.19 Which two numbers should be interchanged to make the given equation correct?

$$4 \times 2 - 3 + 5 = 7$$

- Ans**
- 1. 3 and 4
 - 2. 4 and 5
 - 3. 7 and 5
 - 4. 2 and 7

Question Type : **MCQ**

Question ID : **264330138824**

Option 1 ID : **264330543903**

Option 2 ID : **264330543905**

Option 3 ID : **264330543904**

Option 4 ID : **264330543906**

Status : **Answered**

Chosen Option : **1**

Q.20 By interchanging the given two signs which of the following equation will NOT be correct?

× and –

I. $4 + 2 + 1 \times 6 - 3 = 13$

II. $5 + 7 - 8 \times 2 + 1 = 58$

Ans 1. Only II

2. Only I

3. Neither I nor II

4. Both I and II

Question Type : MCQ

Question ID : 264330135579

Option 1 ID : 264330531216

Option 2 ID : 264330531215

Option 3 ID : 264330531218

Option 4 ID : 264330531217

Status : Answered

Chosen Option : 4

Section : General Awareness

Q.1 GDP calculated at some constant set of prices is called _____.

Ans 1. real GDP

2. domestic GDP

3. current GDP

4. nominal GDP

Question Type : MCQ

Question ID : 264330138306

Option 1 ID : 264330541834

Option 2 ID : 264330541831

Option 3 ID : 264330541833

Option 4 ID : 264330541832

Status : Not Attempted and
Marked For Review

Chosen Option : --

Q.2 Who was the last Governor General of British India?

Ans 1. Lord Hastings

2. Lord Auckland

3. Lord Wellesley

4. Lord Mountbatten

Question Type : MCQ

Question ID : 264330135449

Option 1 ID : 264330530704

Option 2 ID : 264330530706

Option 3 ID : 264330530703

Option 4 ID : 264330530705

Status : Answered

Chosen Option : 4

Q.3 Which of the following crop is also known as “Golden fibre”?

- Ans
- 1. Jute
 - 2. Sugarcane
 - 3. Wheat
 - 4. Rice

Question Type : MCQ
Question ID : 264330138313
Option 1 ID : 264330541860
Option 2 ID : 264330541862
Option 3 ID : 264330541861
Option 4 ID : 264330541859
Status : Answered
Chosen Option : 1

Q.4 Jama Masjid in Delhi was built by _____.

- Ans
- 1. Shah Jahan
 - 2. Alauddin Khilji
 - 3. Akbar
 - 4. Sikandar Lodi

Question Type : MCQ
Question ID : 264330135438
Option 1 ID : 264330530662
Option 2 ID : 264330530661
Option 3 ID : 264330530660
Option 4 ID : 264330530659
Status : Answered
Chosen Option : 3

Q.5 In June 2022, Google Doodle honoured Satyendra Nath Bose, he was an/a _____ .

- Ans
- 1. Indian Classical dancer
 - 2. Indian Physicist
 - 3. Indian Singer
 - 4. Supreme Court Judge

Question Type : MCQ
Question ID : 264330138879
Option 1 ID : 264330544124
Option 2 ID : 264330544125
Option 3 ID : 264330544126
Option 4 ID : 264330544123
Status : Answered
Chosen Option : 2

Q.6 Which of the following article of Indian constitution is related with "Separation of Judiciary from Executive"?

- Ans
- 1. Article 50
 - 2. Article 40
 - 3. Article 44
 - 4. Article 46

Question Type : MCQ
Question ID : 264330138883
Option 1 ID : 264330544142
Option 2 ID : 264330544139
Option 3 ID : 264330544140
Option 4 ID : 264330544141
Status : Answered
Chosen Option : 1

Q.7 Lata Mangeshkar recorded her first playback song for a _____ film.

- Ans
- 1. Bengali
 - 2. Punjabi
 - 3. Marathi
 - 4. Tamil

Question Type : MCQ
Question ID : 264330138877
Option 1 ID : 264330544115
Option 2 ID : 264330544117
Option 3 ID : 264330544118
Option 4 ID : 264330544116
Status : Not Attempted and Marked For Review
Chosen Option : --

Q.8 Jhijhiya is a famous folk dance of which of the following states?

- Ans
- 1. Haryana
 - 2. Bihar
 - 3. Rajasthan
 - 4. Uttar Pradesh

Question Type : MCQ
Question ID : 264330138871
Option 1 ID : 264330544092
Option 2 ID : 264330544094
Option 3 ID : 264330544091
Option 4 ID : 264330544093
Status : Not Answered
Chosen Option : --

Q.9 "Thomas Cup" is related to which of the following sports?

- Ans
- 1. Football
 - 2. Cricket
 - 3. Tennis
 - 4. Badminton

Question Type : MCQ
Question ID : 264330138900
Option 1 ID : 264330544207
Option 2 ID : 264330544210
Option 3 ID : 264330544209
Option 4 ID : 264330544208
Status : Answered
Chosen Option : 2

Q.10 The lowest temperature at which a substance catches fire is called its _____.

- Ans
- 1. melting point
 - 2. explosion point
 - 3. ignition temperature
 - 4. combustion temperature

Question Type : MCQ
Question ID : 264330138912
Option 1 ID : 264330544255
Option 2 ID : 264330544258
Option 3 ID : 264330544256
Option 4 ID : 264330544257
Status : Answered
Chosen Option : 4

Q.11 The reproduction process in which only a single parent is involved is called _____.

- Ans
- 1. In vitro fertilization
 - 2. external fertilization
 - 3. sexual reproduction
 - 4. asexual reproduction

Question Type : MCQ
Question ID : 264330138910
Option 1 ID : 264330544249
Option 2 ID : 264330544250
Option 3 ID : 264330544247
Option 4 ID : 264330544248
Status : Answered
Chosen Option : 4

Q.12 'The Inheritance of Loss' book is written by _____.

- Ans
- 1. Kiran Desai
 - 2. VS Naipaul
 - 3. Ruskin Bond
 - 4. Salman Rushdie

Question Type : MCQ
Question ID : 264330138301
Option 1 ID : 264330541812
Option 2 ID : 264330541814
Option 3 ID : 264330541813
Option 4 ID : 264330541811
Status : Answered
Chosen Option : 1

Q.13 Which of the following is the ultimate source of energy for all living organisms?

- Ans
- 1. Soil
 - 2. Sun
 - 3. Water
 - 4. Air

Question Type : MCQ
Question ID : 264330138884
Option 1 ID : 264330544143
Option 2 ID : 264330544144
Option 3 ID : 264330544145
Option 4 ID : 264330544146
Status : Answered
Chosen Option : 2

Q.14 Which bill led to people staging a widespread protest in Delhi, Haryana, and Punjab in September 2020?

- Ans
- 1. Farmers Bill
 - 2. Central University Bill
 - 3. Energy Conservation Bill
 - 4. Transgender Bill

Question Type : MCQ
Question ID : 264330135435
Option 1 ID : 264330530649
Option 2 ID : 264330530647
Option 3 ID : 264330530648
Option 4 ID : 264330530650
Status : Answered
Chosen Option : 1

Q.15 The Ahmadiyya forms a sect of Islam which originated from India. It was founded by _____ in 1889.

- Ans
- 1. Mir Nisar Ali
 - 2. Haji Shariatullah
 - 3. Shah Waliullah
 - 4. Mirza Ghulam Ahmad

Question Type : MCQ
Question ID : 264330137985
Option 1 ID : 264330540549
Option 2 ID : 264330540548
Option 3 ID : 264330540550
Option 4 ID : 264330540547
Status : Not Answered
Chosen Option : --

Q.16 Kalamandalam Kalyanikutty Amma was honoured with Kalidasa Samman in 1997-1998. She was famous for which Indian classical dance form?

- Ans
- 1. Mohiniyattam
 - 2. Kuchipudi
 - 3. Odissi
 - 4. Kathak

Question Type : MCQ
Question ID : 264330138303
Option 1 ID : 264330541822
Option 2 ID : 264330541821
Option 3 ID : 264330541820
Option 4 ID : 264330541819
Status : Answered
Chosen Option : 2

Q.17 Who among the following Gupta rulers launched the Nalanda University?

- Ans
- 1. Kumaragupta
 - 2. Chandragupta II
 - 3. Skandagupta
 - 4. Vishnugupta

Question Type : MCQ
Question ID : 264330137982
Option 1 ID : 264330540537
Option 2 ID : 264330540538
Option 3 ID : 264330540536
Option 4 ID : 264330540535
Status : Answered
Chosen Option : 1

Q.18 How many silver medals were won by India in London Olympics 2012?

- Ans 1. Two
 2. One
 3. Three
 4. Four

Question Type : MCQ
Question ID : 264330138874
Option 1 ID : 264330544104
Option 2 ID : 264330544103
Option 3 ID : 264330544105
Option 4 ID : 264330544106
Status : Not Answered
Chosen Option : --

Q.19 Who was the first ruler of the Sayyid Dynasty?

- Ans 1. Khizr Khan
 2. Alauddin Alam Shah
 3. Muhammad Shah
 4. Mubarak Khan

Question Type : MCQ
Question ID : 264330134706
Option 1 ID : 264330527780
Option 2 ID : 264330527779
Option 3 ID : 264330527782
Option 4 ID : 264330527781
Status : Answered
Chosen Option : 1

Q.20 The Mughals were descendants of _____ from their father's side.

- Ans 1. Muhammad Ghori
 2. Timur
 3. Genghis khan
 4. Mahmud of Ghazni

Question Type : MCQ
Question ID : 264330138918
Option 1 ID : 264330544282
Option 2 ID : 264330544281
Option 3 ID : 264330544279
Option 4 ID : 264330544280
Status : Answered
Chosen Option : 2

Q.21 The streams of water flowing constantly on the ocean surface in definite directions are called _____.

- Ans
- 1. waves
 - 2. cyclones
 - 3. tides
 - 4. ocean currents

Question Type : MCQ
Question ID : 264330138911
Option 1 ID : 264330544251
Option 2 ID : 264330544252
Option 3 ID : 264330544253
Option 4 ID : 264330544254
Status : Answered
Chosen Option : 4

Q.22 The Yaoshang festival of Manipur is celebrated for _____ days.

- Ans
- 1. two
 - 2. five
 - 3. seven
 - 4. nine

Question Type : MCQ
Question ID : 264330137972
Option 1 ID : 264330540498
Option 2 ID : 264330540495
Option 3 ID : 264330540496
Option 4 ID : 264330540497
Status : Not Answered
Chosen Option : --

Q.23 Thorny trees and bushes are found in which part of India?

- Ans
- 1. Eastern
 - 2. Southern
 - 3. North – western
 - 4. North – Eastern

Question Type : MCQ
Question ID : 264330138889
Option 1 ID : 264330544164
Option 2 ID : 264330544165
Option 3 ID : 264330544163
Option 4 ID : 264330544166
Status : Not Answered
Chosen Option : --

Q.24 In November 2022, Indian Coast Guard Advanced Light Helicopter Mi-III squadron, 840 Sqn (CG), commissioned in

- Ans
- 1. Chennai
 - 2. Kanpur
 - 3. Puri
 - 4. Mysore

Question Type : MCQ
Question ID : 264330138880
Option 1 ID : 264330544128
Option 2 ID : 264330544127
Option 3 ID : 264330544130
Option 4 ID : 264330544129
Status : Answered
Chosen Option : 4

Q.25 In countries like Japan, _____ birth rates make the population pyramid _____ at the base.

- Ans
- 1. Low, Broad
 - 2. High, Broad
 - 3. Low, Narrow
 - 4. High, Narrow

Question Type : MCQ
Question ID : 264330138916
Option 1 ID : 264330544274
Option 2 ID : 264330544272
Option 3 ID : 264330544273
Option 4 ID : 264330544271
Status : Not Answered
Chosen Option : --

Section : English Language and Comprehension

Q.1 Select the appropriate synonym for the underlined word.

Go back to your image description.

- Ans
- 1. Definition
 - 2. Deception
 - 3. Plan
 - 4. Function

Question Type : MCQ
Question ID : 264330136837
Option 1 ID : 264330536040
Option 2 ID : 264330536041
Option 3 ID : 264330536039
Option 4 ID : 264330536042
Status : Answered
Chosen Option : 1

Q.2 Choose the word that can substitute the given group of words.

Disease that spreads over a whole country or the whole world

- Ans
- 1. Pandemic
 - 2. Rustic
 - 3. Panacea
 - 4. Epidermis

Question Type : MCQ
Question ID : 264330136861
Option 1 ID : 264330536133
Option 2 ID : 264330536131
Option 3 ID : 264330536134
Option 4 ID : 264330536132
Status : Answered
Chosen Option : 1

Q.3 Find the part of the given sentence that has an error in it. If there is no error, choose 'No error'.

The radio data shows neither evidence for ongoing jet activity.

- Ans
- 1. The radio data shows
 - 2. neither evidence for
 - 3. No error
 - 4. ongoing jet activity.

Question Type : MCQ
Question ID : 264330136848
Option 1 ID : 264330536083
Option 2 ID : 264330536084
Option 3 ID : 264330536086
Option 4 ID : 264330536085
Status : Answered
Chosen Option : 2

Q.4 Find the part of the given sentence that has an error in it. If there is no error, choose 'No error'.

If I was a clown, I would have made everyone smile.

- Ans
- 1. everyone smile.
 - 2. I would have made
 - 3. If I was a clown,
 - 4. No error

Question Type : MCQ
Question ID : 264330136823
Option 1 ID : 264330535989
Option 2 ID : 264330535988
Option 3 ID : 264330535987
Option 4 ID : 264330535990
Status : Answered
Chosen Option : 2

Q.5 Select the most appropriate option to fill in the blank.
According to the politician, using vulgar language to _____ votes is not something he will endorse.

- Ans
- 1. segregate
 - 2. divulge
 - 3. lump
 - 4. garner

Question Type : MCQ
Question ID : 264330136846
Option 1 ID : 264330536078
Option 2 ID : 264330536075
Option 3 ID : 264330536077
Option 4 ID : 264330536076
Status : Not Answered
Chosen Option : --

Q.6 Improve the underlined part of the sentence. Choose 'No improvement' as an answer if the sentence is grammatically correct.

The teacher had reading the instructions aloud to the students.

- Ans
- 1. had been read the
 - 2. reading the
 - 3. No improvement
 - 4. had read the

Question Type : MCQ
Question ID : 264330136851
Option 1 ID : 264330536097
Option 2 ID : 264330536095
Option 3 ID : 264330536098
Option 4 ID : 264330536096
Status : Answered
Chosen Option : 4

Q.7 Find the part of the given sentence that has an error in it. If there is no error, choose 'No error'.

Peoples might confess just to get out of the interrogation room.

- Ans
- 1. No error
 - 2. Peoples might confess
 - 3. just to get out of
 - 4. the interrogation room.

Question Type : MCQ
Question ID : 264330134477
Option 1 ID : 264330526878
Option 2 ID : 264330526875
Option 3 ID : 264330526876
Option 4 ID : 264330526877
Status : Answered
Chosen Option : 2

Q.8 Select the appropriate antonym for the underlined word.

The new government's domestic policies could easily undermine the main foreign policy.

- Ans
- 1. Cripple
 - 2. Weaken
 - 3. Spoil
 - 4. Enhance

Question Type : MCQ
Question ID : 264330136840
Option 1 ID : 264330536052
Option 2 ID : 264330536051
Option 3 ID : 264330536053
Option 4 ID : 264330536054
Status : Answered
Chosen Option : 4

Q.9 Select the most appropriate option to fill in the blank.

I was really hoping to _____ a decent movie this time, and I came up with an undisputed classic.

- Ans
- 1. tirade
 - 2. subside
 - 3. unearth
 - 4. strut

Question Type : MCQ
Question ID : 264330136533
Option 1 ID : 264330534874
Option 2 ID : 264330534873
Option 3 ID : 264330534872
Option 4 ID : 264330534871
Status : Not Answered
Chosen Option : --

Q.10 Choose the incorrectly spelt word.

- Ans
- 1. Wider
 - 2. Glovve
 - 3. Hide
 - 4. Fold

Question Type : MCQ
Question ID : 264330136843
Option 1 ID : 264330536065
Option 2 ID : 264330536063
Option 3 ID : 264330536064
Option 4 ID : 264330536066
Status : Answered
Chosen Option : 2

Q.11 In the following question, out of the given four alternatives, select the alternative which best expresses the meaning of the Idiom/Phrase.
The black sheep

- Ans**
- 1. A day of importance
 - 2. A stupid or foolish person
 - 3. A friend who betrays
 - 4. The least reputable member of a group

Question Type : MCQ
Question ID : 264330136842
Option 1 ID : 264330536061
Option 2 ID : 264330536059
Option 3 ID : 264330536062
Option 4 ID : 264330536060
Status : Answered
Chosen Option : 2

Q.12 Improve the underlined part of the sentence. Choose 'No improvement' as an answer if the sentence is grammatically correct.

The comedian's jokes are so bad that audiences usually groaning instead of laugh.

- Ans**
- 1. usually groan instead of
 - 2. usual groan instead off
 - 3. usual groaned despite of
 - 4. No improvement

Question Type : MCQ
Question ID : 264330136852
Option 1 ID : 264330536099
Option 2 ID : 264330536100
Option 3 ID : 264330536101
Option 4 ID : 264330536102
Status : Answered
Chosen Option : 1

Q.13 Select the wrongly spelt word.

- Ans**
- 1. pernicious
 - 2. prefunctory
 - 3. pariah
 - 4. peripheral

Question Type : MCQ
Question ID : 264330136532
Option 1 ID : 264330534870
Option 2 ID : 264330534868
Option 3 ID : 264330534867
Option 4 ID : 264330534869
Status : Answered
Chosen Option : 2

Q.14 Fill in the blank with the most appropriate option.

The pudding fell _____ floor with a heart-stopping crash.

- Ans
- 1. upon the
 - 2. up to the
 - 3. in to the
 - 4. to the

Question Type : MCQ
Question ID : 264330136620
Option 1 ID : 264330535207
Option 2 ID : 264330535209
Option 3 ID : 264330535208
Option 4 ID : 264330535210
Status : Answered
Chosen Option : 1

Q.15 A sentence has been given with a blank to be filled with an appropriate option. Choose the correct alternative.
Apple's success attracted the _____ of the computer giant IBM.

- Ans
- 1. attending
 - 2. attend
 - 3. attention
 - 4. attentive

Question Type : MCQ
Question ID : 264330136827
Option 1 ID : 264330536005
Option 2 ID : 264330536004
Option 3 ID : 264330536003
Option 4 ID : 264330536006
Status : Answered
Chosen Option : 3

Q.16 Choose the word that can substitute the given group of words.

A place of refuge

- Ans
- 1. Home
 - 2. Asylum
 - 3. Shelter
 - 4. Hospice

Question Type : MCQ
Question ID : 264330136836
Option 1 ID : 264330536036
Option 2 ID : 264330536037
Option 3 ID : 264330536035
Option 4 ID : 264330536038
Status : Answered
Chosen Option : 2

Q.17 Select the word from the options which is similar in meaning to the bracketed word given in the sentence below.

I had a (toddler) at home and two other children at school.

- Ans
- 1. ancient
 - 2. adult
 - 3. newborn
 - 4. senior

Question Type : MCQ
Question ID : 264330136604
Option 1 ID : 264330535146
Option 2 ID : 264330535144
Option 3 ID : 264330535143
Option 4 ID : 264330535145
Status : Answered
Chosen Option : 3

Q.18 Improve the underlined part of the sentence. Choose 'No improvement' as an answer if the sentence is grammatically correct.

In the logo, the blue contrast wells with its complementary colour, yellow.

- Ans
- 1. No improvement
 - 2. contrast well
 - 3. contrast we'll
 - 4. contrasts well

Question Type : MCQ
Question ID : 264330135311
Option 1 ID : 264330530158
Option 2 ID : 264330530156
Option 3 ID : 264330530157
Option 4 ID : 264330530155
Status : Answered
Chosen Option : 4

Q.19 In the following question, out of the given four alternatives, select the alternative which best expresses the meaning of the Idiom/Phrase.

Draw a blank

- Ans
- 1. Give lame excuses
 - 2. A very complex question
 - 3. Ragging of a fresher
 - 4. To fail to get an answer or result

Question Type : MCQ
Question ID : 264330136867
Option 1 ID : 264330536156
Option 2 ID : 264330536158
Option 3 ID : 264330536155
Option 4 ID : 264330536157
Status : Answered
Chosen Option : 4

Q.20 Choose the word that is opposite in meaning to the given word.

Impossible

- Ans
- 1. Shaky
 - 2. Applicable
 - 3. Unsure
 - 4. Unlikely

Question Type : MCQ
Question ID : 264330135196
Option 1 ID : 264330529713
Option 2 ID : 264330529714
Option 3 ID : 264330529711
Option 4 ID : 264330529712
Status : Answered
Chosen Option : 2

Comprehension:

In the following passage some of the words have been deleted. Read the passage carefully and select the correct answer for the given blank out of the four alternatives.

These people remind me of a harmony that exists with the natural world. They know their environment in a (1) _____ that can only be acquired (2) _____ living on equal footing with the natural world, not in (3) _____ through a recognition that humans are dependent (4) _____ our surroundings, something those of us who live in towns and cities too (5) _____ forget.

SubQuestion No : 21

Q.21 Select the most appropriate option to fill in blank number 1.

- Ans
- 1. line
 - 2. way
 - 3. time
 - 4. style

Question Type : MCQ
Question ID : 264330135187
Option 1 ID : 264330529677
Option 2 ID : 264330529675
Option 3 ID : 264330529676
Option 4 ID : 264330529678
Status : Answered
Chosen Option : 2

Comprehension:

In the following passage some of the words have been deleted. Read the passage carefully and select the correct answer for the given blank out of the four alternatives.

These people remind me of a harmony that exists with the natural world. They know their environment in a (1) _____ that can only be acquired (2) _____ living on equal footing with the natural world, not in (3) _____ through a recognition that humans are dependent (4) _____ our surroundings, something those of us who live in towns and cities too (5) _____ forget.

SubQuestion No : 22

Q.22 Select the most appropriate option to fill in blank number 2.

- Ans
- 1. for
 - 2. through
 - 3. to
 - 4. with

Question Type : **MCQ**

Question ID : **264330135188**

Option 1 ID : **264330529680**

Option 2 ID : **264330529682**

Option 3 ID : **264330529681**

Option 4 ID : **264330529679**

Status : **Answered**

Chosen Option : **3**

Comprehension:

In the following passage some of the words have been deleted. Read the passage carefully and select the correct answer for the given blank out of the four alternatives.

These people remind me of a harmony that exists with the natural world. They know their environment in a (1) _____ that can only be acquired (2) _____ living on equal footing with the natural world, not in (3) _____ through a recognition that humans are dependent (4) _____ our surroundings, something those of us who live in towns and cities too (5) _____ forget.

SubQuestion No : 23

Q.23 Select the most appropriate option to fill in blank number 3.

- Ans
- 1. domination
 - 2. opposition
 - 3. corporation
 - 4. collection

Question Type : **MCQ**

Question ID : **264330135189**

Option 1 ID : **264330529684**

Option 2 ID : **264330529685**

Option 3 ID : **264330529686**

Option 4 ID : **264330529683**

Status : **Not Answered**

Chosen Option : **--**

Comprehension:

In the following passage some of the words have been deleted. Read the passage carefully and select the correct answer for the given blank out of the four alternatives.

These people remind me of a harmony that exists with the natural world. They know their environment in a (1) _____ that can only be acquired (2) _____ living on equal footing with the natural world, not in (3) _____ through a recognition that humans are dependent (4) _____ our surroundings, something those of us who live in towns and cities too (5) _____ forget.

SubQuestion No : 24

Q.24 Select the most appropriate option to fill in blank number 4.

- Ans
- 1. on
 - 2. to
 - 3. in
 - 4. of

Question Type : **MCQ**
Question ID : **264330135190**
Option 1 ID : **264330529688**
Option 2 ID : **264330529690**
Option 3 ID : **264330529689**
Option 4 ID : **264330529687**
Status : **Answered**
Chosen Option : **1**

Comprehension:

In the following passage some of the words have been deleted. Read the passage carefully and select the correct answer for the given blank out of the four alternatives.

These people remind me of a harmony that exists with the natural world. They know their environment in a (1) _____ that can only be acquired (2) _____ living on equal footing with the natural world, not in (3) _____ through a recognition that humans are dependent (4) _____ our surroundings, something those of us who live in towns and cities too (5) _____ forget.

SubQuestion No : 25

Q.25 Select the most appropriate option to fill in blank number 5.

- Ans
- 1. highly
 - 2. marginally
 - 3. easily
 - 4. equally

Question Type : **MCQ**
Question ID : **264330135191**
Option 1 ID : **264330529692**
Option 2 ID : **264330529693**
Option 3 ID : **264330529694**
Option 4 ID : **264330529691**
Status : **Answered**
Chosen Option : **3**