



SSC MTS **SHIFT – 3 (12-05-2023)**

- ★ **Latest Govt Job updates**
- ★ **Private Job updates**
- ★ **Free Mock tests available**

**Visit - [teachingninja.in](https://teachingninja.in)**

## Multi Tasking Non Technical Staff and Havaldar CBIC and CBN Examination 2022

Roll Number	
Candidate Name	
Venue Name	
Exam Date	12/05/2023
Exam Time	3:30 PM - 5:00 PM
Subject	MTS Non Tech Havaldar CBIC and CBN Examination 2022

Section : Numerical and Mathematical Ability

Q.1 Evaluate:  $5 \times 4 + (3 + 4)^2 \div 7 \times 4$

- Ans
- 1. 47
  - 2. 46
  - 3. 48
  - 4. 49

Question Type : MCQ  
Question ID : 264330138089  
Option 1 ID : 264330540965  
Option 2 ID : 264330540966  
Option 3 ID : 264330540963  
Option 4 ID : 264330540964  
Status : Answered  
Chosen Option : 3

Q.2 Selling price of an article is Rs. 616. If loss percentage is 30 percent. then what is the cost price of article?

- Ans
- 1. Rs. 850
  - 2. Rs. 800
  - 3. Rs. 880
  - 4. Rs. 900

Question Type : MCQ  
Question ID : 264330139062  
Option 1 ID : 264330544856  
Option 2 ID : 264330544855  
Option 3 ID : 264330544857  
Option 4 ID : 264330544858  
Status : Answered  
Chosen Option : 3

Q.3 The average of 5 consecutive natural numbers is 43. The largest of these numbers is:

- Ans
- 1. 41
  - 2. 43
  - 3. 45
  - 4. 46

Question Type : MCQ  
Question ID : 264330138092  
Option 1 ID : 264330540975  
Option 2 ID : 264330540976  
Option 3 ID : 264330540977  
Option 4 ID : 264330540978  
Status : Answered  
Chosen Option : 3

Q.4 X boys can do a work in 80 days. In how much time, 2X boys will do half of the same work?

- Ans
- 1. 16 days
  - 2. 30 days
  - 3. 12 days
  - 4. 20 days

Question Type : MCQ  
Question ID : 264330137623  
Option 1 ID : 264330539102  
Option 2 ID : 264330539100  
Option 3 ID : 264330539101  
Option 4 ID : 264330539099  
Status : Answered  
Chosen Option : 4

Q.5 Find the value of  $144 \div 12 + 4^2 - 44 + 54 \div 3 \times 2$ .

- Ans
- 1. 5
  - 2. 15
  - 3. 20
  - 4. 30

Question Type : MCQ  
Question ID : 264330138413  
Option 1 ID : 264330542262  
Option 2 ID : 264330542260  
Option 3 ID : 264330542261  
Option 4 ID : 264330542259  
Status : Answered  
Chosen Option : 3

**Q.6** The population of a village decreases at the rate of 40% per annum. If its population 2 years ago was 15,000, then find the present population?

- Ans**
- ✓ 1. 5400
  - ✗ 2. 3500
  - ✗ 3. 4450
  - ✗ 4. 4400

Question Type : **MCQ**  
Question ID : **264330133786**  
Option 1 ID : **264330524168**  
Option 2 ID : **264330524169**  
Option 3 ID : **264330524167**  
Option 4 ID : **264330524170**  
Status : **Answered**  
Chosen Option : 1

**Q.7** If the ratio of the volumes of two cylinders is 6 : 5 and the ratio of their heights is 5 : 24, then what is the ratio of their radii?

- Ans**
- ✗ 1. 12 : 7
  - ✗ 2. 5 : 6
  - ✗ 3. 1 : 2
  - ✓ 4. 12 : 5

Question Type : **MCQ**  
Question ID : **264330137638**  
Option 1 ID : **264330539159**  
Option 2 ID : **264330539161**  
Option 3 ID : **264330539162**  
Option 4 ID : **264330539160**  
Status : **Answered**  
Chosen Option : 4

**Q.8** The following table shows the sales of comic and fiction books in different shops. Find the ratio of total books sold from shop C to that of shop A.

Shops	Comic Books	Fiction Books
A	200	150
B	250	200
C	350	300
D	400	200
E	450	500

- Ans**
- ✗ 1. 13:5
  - ✓ 2. 13:7
  - ✗ 3. 11:7
  - ✗ 4. 11:13

Question Type : **MCQ**  
Question ID : **264330138429**  
Option 1 ID : **264330542324**  
Option 2 ID : **264330542325**  
Option 3 ID : **264330542326**  
Option 4 ID : **264330542323**  
Status : **Answered**  
Chosen Option : 2

**Q.9** A bus travels first 100 km at a speed of 100 km/hr. It covers next 150 km at a speed of 90 km/hr. What is the average speed?

- Ans**
- 1. 120.50 km/hr
  - 2. 93.75 km/hr
  - 3. 100.25 km/hr
  - 4. 156.25 km/hr

Question Type : **MCQ**  
Question ID : **264330141007**  
Option 1 ID : **264330552378**  
Option 2 ID : **264330552377**  
Option 3 ID : **264330552375**  
Option 4 ID : **264330552376**  
Status : **Answered**  
Chosen Option : **2**

**Q.10** What is the area of the lateral surface of a right circular cylinder, If the circumference of the base is 22 cm and its height is four times of its radius?

- Ans**
- 1. 388 cm<sup>2</sup>
  - 2. 308 cm<sup>2</sup>
  - 3. 408 cm<sup>2</sup>
  - 4. 288 cm<sup>2</sup>

Question Type : **MCQ**  
Question ID : **264330133692**  
Option 1 ID : **264330523794**  
Option 2 ID : **264330523791**  
Option 3 ID : **264330523792**  
Option 4 ID : **264330523793**  
Status : **Answered**  
Chosen Option : **2**

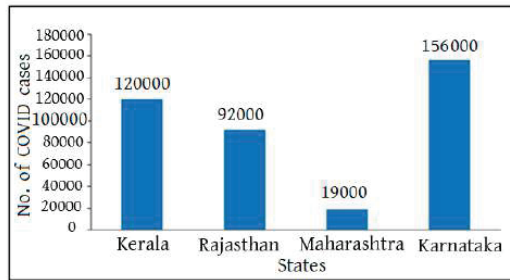
**Q.11** The greatest number which when divides 456 and 553 leaves the remainder as 6 and 3 respectively is:

- Ans**
- 1. 5
  - 2. 50
  - 3. 10
  - 4. 30

Question Type : **MCQ**  
Question ID : **264330141031**  
Option 1 ID : **264330552472**  
Option 2 ID : **264330552473**  
Option 3 ID : **264330552471**  
Option 4 ID : **264330552474**  
Status : **Answered**  
Chosen Option : **2**

**Q.12** The following bar graph presents the number of cases of COVID in four states of India in the year 2022.

How much percent cases are more in Karnataka than Kerala?



- Ans**
- 1. 20%
  - 2. 40%
  - 3. 30%
  - 4. 50%

Question Type : **MCQ**  
Question ID : **264330138106**  
Option 1 ID : **264330541031**  
Option 2 ID : **264330541032**  
Option 3 ID : **264330541033**  
Option 4 ID : **264330541034**  
Status : **Answered**  
Chosen Option : **3**

**Q.13** Harshita went to a clothing store. A dress with a tag price Rs.2999 is sold at a discount of 20%. How much will Harshita pay for the dress, if she will buy it?

- Ans**
- 1. Rs.2899.40
  - 2. Rs.2699.50
  - 3. Rs.2199.80
  - 4. Rs.2399.20

Question Type : **MCQ**  
Question ID : **264330138097**  
Option 1 ID : **264330540996**  
Option 2 ID : **264330540995**  
Option 3 ID : **264330540998**  
Option 4 ID : **264330540997**  
Status : **Answered**  
Chosen Option : **4**

**Q.14** Find compound interest on Rs. 60000 at 10% per annum for 5 years, compounded annually.

- Ans**
- 1. Rs.3456.87
  - 2. Rs.34563.12
  - 3. Rs.36630.60
  - 4. Rs.3254.98

Question Type : **MCQ**  
Question ID : **264330133747**  
Option 1 ID : **264330524014**  
Option 2 ID : **264330524012**  
Option 3 ID : **264330524011**  
Option 4 ID : **264330524013**  
Status : **Answered**  
Chosen Option : **3**

**Q.15** The price of bike is Rs. 7000 last year. The price increased by 10% this year. What is the price of bike this year?

- Ans
- 1. Rs. 7400
  - 2. Rs. 7700
  - 3. Rs. 7600
  - 4. Rs. 7500

Question Type : MCQ  
Question ID : 264330133740  
Option 1 ID : 264330523983  
Option 2 ID : 264330523985  
Option 3 ID : 264330523986  
Option 4 ID : 264330523984  
Status : Answered  
Chosen Option : 2

**Q.16** X can do a piece of work alone in 15 days while Y alone can do it in 10 days. They worked together for 3 days and remaining work is finished by Z in 1 day. If they get paid Rs 4000 for the entire work, then what is the share of Z?

- Ans
- 1. Rs.2000
  - 2. Rs.1000
  - 3. Rs.1200
  - 4. Rs.800

Question Type : MCQ  
Question ID : 264330133687  
Option 1 ID : 264330523772  
Option 2 ID : 264330523771  
Option 3 ID : 264330523773  
Option 4 ID : 264330523774  
Status : Answered  
Chosen Option : 1

**Q.17** Rs.1200 are divided among X, Y and Z such that Y's share is Rs.200 more than X's share. Y's share is also Rs.200 less than Z's share. The share of Y is:

- Ans
- 1. Rs.200
  - 2. Rs.600
  - 3. Rs.800
  - 4. Rs.400

Question Type : MCQ  
Question ID : 264330138099  
Option 1 ID : 264330541005  
Option 2 ID : 264330541003  
Option 3 ID : 264330541006  
Option 4 ID : 264330541004  
Status : Answered  
Chosen Option : 4

**Q.18** A shopkeeper sells a box and earn a profit of 5%. For the next box he decides to charge double the selling price. What is the profit percent on second box?

- Ans**
- 1. 100%
  - 2. 110%
  - 3. 200%
  - 4. 80%

Question Type : **MCQ**  
Question ID : **264330138096**  
Option 1 ID : **264330540993**  
Option 2 ID : **264330540991**  
Option 3 ID : **264330540992**  
Option 4 ID : **264330540994**  
Status : **Answered**  
Chosen Option : **2**

**Q.19** In a room, there are 36 women and 20 men. What is the ratio of men to the total number of people in that room?

- Ans**
- 1. 14:11
  - 2. 5:14
  - 3. 5:11
  - 4. 5:13

Question Type : **MCQ**  
Question ID : **264330138098**  
Option 1 ID : **264330541000**  
Option 2 ID : **264330541002**  
Option 3 ID : **264330540999**  
Option 4 ID : **264330541001**  
Status : **Answered**  
Chosen Option : **2**

**Q.20** A boy can row upstream at 12 km/hr and downstream at 23 km/hr. What is the speed of the stream?

- Ans**
- 1. 3.5 km/hr
  - 2. 4.5 km/hr
  - 3. 6.5 km/hr
  - 4. 5.5 km/hr

Question Type : **MCQ**  
Question ID : **264330138102**  
Option 1 ID : **264330541018**  
Option 2 ID : **264330541015**  
Option 3 ID : **264330541017**  
Option 4 ID : **264330541016**  
Status : **Answered**  
Chosen Option : **4**

Section : Reasoning Ability and Problem Solving



**Q.1** Seven brothers Sribham, Sourav, Sehwag, Sachin, Sam, Shoab, and Surya's have different ages. Subham is the eldest brother. Surya is older than only two brothers. Sourav is elder than Sam but younger than Shoab. Sehwag is older than Sachin only. How many brothers are younger than Sourav?

- Ans**
- 1. 2
  - 2. 3
  - 3. 5
  - 4. 4

Question Type : **MCQ**  
Question ID : **264330137862**  
Option 1 ID : **264330540058**  
Option 2 ID : **264330540055**  
Option 3 ID : **264330540057**  
Option 4 ID : **264330540056**  
Status : **Answered**  
Chosen Option : 1

**Q.2** In a certain code language, 'NOTIFY' is coded as 'TONYFI'. What is the code for 'PATENT' in that code language?

- Ans**
- 1. TAPTEN
  - 2. TAPENT
  - 3. PATTNE
  - 4. TAPTNE

Question Type : **MCQ**  
Question ID : **264330137519**  
Option 1 ID : **264330538686**  
Option 2 ID : **264330538683**  
Option 3 ID : **264330538684**  
Option 4 ID : **264330538685**  
Status : **Answered**  
Chosen Option : 4

**Q.3** Three statements are given followed by two conclusions numbered I and II. Assuming the statements to be true, even if they seem to be at variance with commonly known facts, decide which of the conclusions logically follow(s) from the statements.

Statements:

- All cats are tigers.
- All tigers are lions.
- Some tigers are dogs.

Conclusions:

- I. All cats are lions.
- II. Some dogs are lions.

- Ans**
- 1. Neither conclusion I nor II follows
  - 2. Both conclusions I and II follow
  - 3. Only conclusion I follows
  - 4. Only conclusion II follows

Question Type : **MCQ**  
Question ID : **264330137864**  
Option 1 ID : **264330540066**  
Option 2 ID : **264330540065**  
Option 3 ID : **264330540063**  
Option 4 ID : **264330540064**  
Status : **Answered**  
Chosen Option : 2

**Q.4** Select the option that is related to the third number in the same way as the second number is related to the first number.

7 : 343 :: 4 : ?

- Ans**
- 1. 58
  - 2. 72
  - 3. 84
  - 4. 64

Question Type : **MCQ**  
Question ID : **264330133459**  
Option 1 ID : **264330522867**  
Option 2 ID : **264330522870**  
Option 3 ID : **264330522869**  
Option 4 ID : **264330522868**  
Status : **Answered**  
Chosen Option : 4

**Q.5** Select the option that is related to the third word in the same way as the second word is related to the first word.

Rabbit : Leap :: Parrot : ?

- Ans**
- 1. Prowls
  - 2. Fly
  - 3. Bird
  - 4. Crawl

Question Type : **MCQ**  
Question ID : **264330137854**  
Option 1 ID : **264330540025**  
Option 2 ID : **264330540023**  
Option 3 ID : **264330540024**  
Option 4 ID : **264330540026**  
Status : **Answered**  
Chosen Option : 2

**Q.6** In a certain code language, 'DISPUTE' is written as 'SID16ETU'. How will 'FEATURE' be written in that language?

- Ans**
- 1. AEF20ERU
  - 2. AEF20UER
  - 3. AEF02ERU
  - 4. AEF20REU

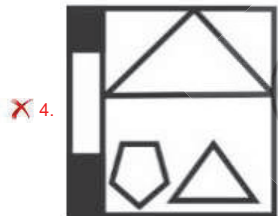
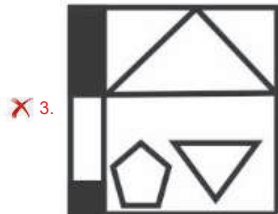
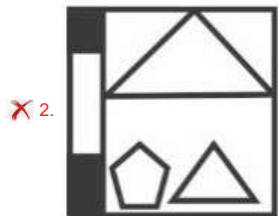
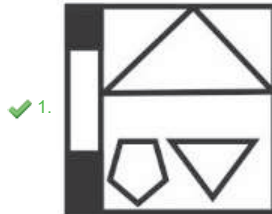
Question Type : **MCQ**  
Question ID : **264330135025**  
Option 1 ID : **264330529035**  
Option 2 ID : **264330529038**  
Option 3 ID : **264330529037**  
Option 4 ID : **264330529036**  
Status : **Answered**  
Chosen Option : 1

Q.7 If a mirror is placed on the line AB, then out of the option figures which figure will be the right image of the question figure?



A B

Ans



Question Type : MCQ

Question ID : 264330138538

Option 1 ID : 264330542759

Option 2 ID : 264330542760

Option 3 ID : 264330542762

Option 4 ID : 264330542761

Status : Answered

Chosen Option : 1

**Q.8** Study the given pattern carefully and select the number that can replace the question mark (?) in it.

First row- 80, 64, 48

Second row- 112, 96, 80

Third row- 232, 216, ?

- Ans**
- 1. 230
  - 2. 225
  - 3. 219
  - 4. 200

Question Type : **MCQ**

Question ID : **264330137868**

Option 1 ID : **264330540081**

Option 2 ID : **264330540080**

Option 3 ID : **264330540082**

Option 4 ID : **264330540079**

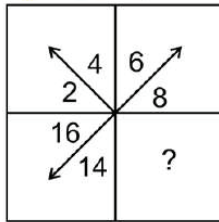
Status : **Answered**

Chosen Option : **4**

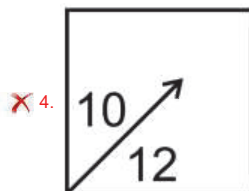
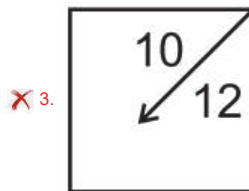
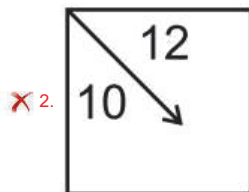
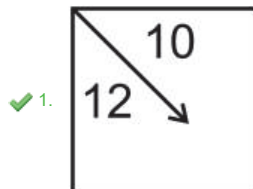


Teachingninja.in

**Q.9** Select the option figure that will replace the question mark (?) in the figure given below to complete the pattern.  
(rotation is not allowed)



Ans



Question Type : MCQ  
 Question ID : 264330137873  
 Option 1 ID : 264330540099  
 Option 2 ID : 264330540101  
 Option 3 ID : 264330540102  
 Option 4 ID : 264330540100  
 Status : Answered  
 Chosen Option : 1

Q.10 Which of the following letter cluster will replace the question mark (?) in the given series?

KS, MU, OW, QY, SA, UC,?

- Ans
- 1. WD
  - 2. EW
  - 3. WE
  - 4. WS

Question Type : MCQ

Question ID : 264330137852

Option 1 ID : 264330540018

Option 2 ID : 264330540015

Option 3 ID : 264330540017

Option 4 ID : 264330540016

Status : Answered

Chosen Option : 3

Q.11 Six colleagues X, Y, Z, A, B, and C sit around a circular table facing away from the centre. B sits to the immediate left of Y. A sits to the immediate right of Z. X sits adjacent to B. C does not sit adjacent to Y. Who sits to the immediate right of A?

- Ans
- 1. Y
  - 2. X
  - 3. C
  - 4. B

Question Type : MCQ

Question ID : 264330137861

Option 1 ID : 264330540053

Option 2 ID : 264330540051

Option 3 ID : 264330540054

Option 4 ID : 264330540052

Status : Answered

Chosen Option : 3

Q.12 Which two signs should be interchanged to make the given equation correct?

$$8 \div 2 \times 7 - 5 + 2 = 1$$

- Ans
- 1.  $\times$  and  $+$
  - 2.  $+$  and  $-$
  - 3.  $\times$  and  $-$
  - 4.  $+$  and  $=$

Question Type : MCQ

Question ID : 264330137869

Option 1 ID : 264330540085

Option 2 ID : 264330540084

Option 3 ID : 264330540083

Option 4 ID : 264330540086

Status : Answered

Chosen Option : 1

**Q.13** In a certain code language, 'COAT' is written as 'XLZG'. How will 'PLAY' be written in that language?

- Ans**
- 1. KZOB
  - 2. KOZB
  - 3. JOZB
  - 4. KPZB

Question Type : **MCQ**  
Question ID : **264330138814**  
Option 1 ID : **264330543863**  
Option 2 ID : **264330543866**  
Option 3 ID : **264330543865**  
Option 4 ID : **264330543864**  
Status : **Answered**  
Chosen Option : **2**

**Q.14** Select the option that is related to the third letter cluster in the same way as the second letter cluster is related to the first letter cluster.

RS : TU :: TM : ?

- Ans**
- 1. UP
  - 2. OV
  - 3. VP
  - 4. VO

Question Type : **MCQ**  
Question ID : **264330137855**  
Option 1 ID : **264330540030**  
Option 2 ID : **264330540027**  
Option 3 ID : **264330540028**  
Option 4 ID : **264330540029**  
Status : **Answered**  
Chosen Option : **4**

**Q.15** Six friends S, T, U, V, W, and X sit in a row facing south. U sits exactly in between S and V. X sits exactly in between W and T. Five friends sit to the left of S. Who sits second to the left of V?

- Ans**
- 1. W
  - 2. T
  - 3. X
  - 4. U

Question Type : **MCQ**  
Question ID : **264330137860**  
Option 1 ID : **264330540047**  
Option 2 ID : **264330540048**  
Option 3 ID : **264330540049**  
Option 4 ID : **264330540050**  
Status : **Answered**  
Chosen Option : **3**

Q.16 Which of the following numbers will replace the question mark (?) in the given series?

43, 45, 48, 53, 60, 71, ?

Ans  1. 83

2. 81

3. 82

4. 84

Question Type : MCQ

Question ID : 264330133457

Option 1 ID : 264330522862

Option 2 ID : 264330522859

Option 3 ID : 264330522860

Option 4 ID : 264330522861

Status : Answered

Chosen Option : 4



Teachingninja.in

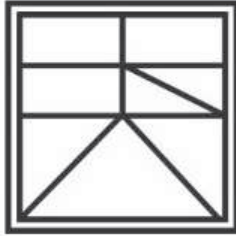


Q.17 Select the option figure in which the given figure is embedded. (rotation is NOT allowed)

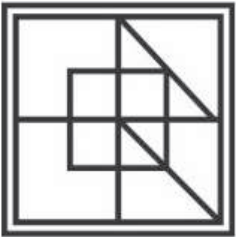


Ans

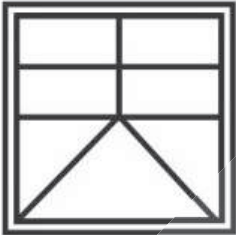
✓ 1.



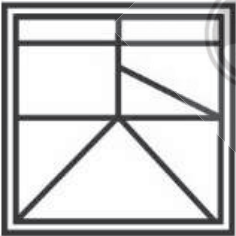
✗ 2.



✗ 3.



✗ 4.



Question Type : MCQ

Question ID : 264330138537

Option 1 ID : 264330542756

Option 2 ID : 264330542755

Option 3 ID : 264330542757

Option 4 ID : 264330542758

Status : Answered

Chosen Option : 1

Q.18 Which of the following numbers will replace the question mark (?) in the given series?

55, 61, 67, 73, 79, ?

- Ans
- 1. 82
  - 2. 85
  - 3. 93
  - 4. 94

Question Type : MCQ  
Question ID : 264330137866  
Option 1 ID : 264330540073  
Option 2 ID : 264330540071  
Option 3 ID : 264330540072  
Option 4 ID : 264330540074  
Status : Answered  
Chosen Option : 2

Q.19 Two Statements are given followed by two conclusions numbered I and II. Assuming the statements to be true, even if they seem to be at variance with commonly known facts, decide which of the conclusions logically follow(s) from the statements.

Statements:

Some apples are fruits.

All fruits are mangoes.

Conclusions:

I. Some apples are mangoes.

II. All mangoes are fruits.

- Ans
- 1. Neither conclusion I nor II follows
  - 2. Only conclusion II follows
  - 3. Only conclusion I follows
  - 4. Both conclusions I and II follow

Question Type : MCQ  
Question ID : 264330137863  
Option 1 ID : 264330540062  
Option 2 ID : 264330540060  
Option 3 ID : 264330540059  
Option 4 ID : 264330540061  
Status : Answered  
Chosen Option : 3

Q.20 Which two numbers should be interchanged to make the given equation correct?

$16 + 24 \times 12 - 25 \div 6 = 312$

- Ans
- 1. 25 and 24
  - 2. 25 and 12
  - 3. 25 and 16
  - 4. 24 and 16

Question Type : MCQ  
Question ID : 264330133502  
Option 1 ID : 264330523041  
Option 2 ID : 264330523040  
Option 3 ID : 264330523042  
Option 4 ID : 264330523039  
Status : Answered  
Chosen Option : 1

Section : General Awareness

Q.1 The Competition (Amendment) Bill, 2022 belongs to \_\_\_\_\_ Ministry of India.

- Ans
- 1. Tribal Affairs
  - 2. Corporate Affairs
  - 3. Finance
  - 4. Law and Justice

Question Type : MCQ  
Question ID : 264330133957  
Option 1 ID : 264330524854  
Option 2 ID : 264330524852  
Option 3 ID : 264330524851  
Option 4 ID : 264330524853  
Status : Answered  
Chosen Option : 2

Q.2 The rules made for the Buddhist "Sangha" were written down in a book called \_\_\_\_\_.

- Ans
- 1. Abhidhammapitaka
  - 2. Sutta pitaka
  - 3. Vinaya pitaka
  - 4. Milinda Panha

Question Type : MCQ  
Question ID : 264330138317  
Option 1 ID : 264330541878  
Option 2 ID : 264330541875  
Option 3 ID : 264330541877  
Option 4 ID : 264330541876  
Status : Answered  
Chosen Option : 4

Q.3 Which among the following is NOT a bacterial disease?

- Ans
- 1. Cholera
  - 2. Typhoid
  - 3. Rabies
  - 4. Plague

Question Type : MCQ  
Question ID : 264330137975  
Option 1 ID : 264330540507  
Option 2 ID : 264330540510  
Option 3 ID : 264330540508  
Option 4 ID : 264330540509  
Status : Answered  
Chosen Option : 3

Q.4 The bank rate in the Indian economy is determined by the \_\_\_\_\_ .

- Ans
- 1. State bank of India
  - 2. Reserve Bank of India
  - 3. Finance ministry of India
  - 4. Securities and Exchange Board of India

Question Type : MCQ  
Question ID : 264330138881  
Option 1 ID : 264330544133  
Option 2 ID : 264330544132  
Option 3 ID : 264330544134  
Option 4 ID : 264330544131  
Status : Answered  
Chosen Option : 2

Q.5 Preet writes about an ocean that separates North America from Europe. Which ocean is it?

- Ans
- 1. Atlantic Ocean
  - 2. Indian Ocean
  - 3. Arctic Ocean
  - 4. Pacific Ocean

Question Type : MCQ  
Question ID : 264330133914  
Option 1 ID : 264330524682  
Option 2 ID : 264330524680  
Option 3 ID : 264330524679  
Option 4 ID : 264330524681  
Status : Answered  
Chosen Option : 1

Q.6 Which among the following is the highest peak of West Bengal?

- Ans
- 1. Sandakphu
  - 2. Saramati
  - 3. Doddabetta
  - 4. Deomali

Question Type : MCQ  
Question ID : 264330137979  
Option 1 ID : 264330540526  
Option 2 ID : 264330540523  
Option 3 ID : 264330540525  
Option 4 ID : 264330540524  
Status : Answered  
Chosen Option : 3

Q.7 All Indian Muslim league was formed at Dacca in \_\_\_\_\_.

- Ans
- 1. 1904
  - 2. 1906
  - 3. 1902
  - 4. 1908

Question Type : MCQ  
Question ID : 264330138320  
Option 1 ID : 264330541888  
Option 2 ID : 264330541889  
Option 3 ID : 264330541887  
Option 4 ID : 264330541890  
Status : Answered  
Chosen Option : 2

Q.8 Dilwara Temples at Mount Abu, Rajasthan is an example of \_\_\_\_\_ temple architecture.

- Ans
- 1. Buddhist
  - 2. Jain
  - 3. Mughal
  - 4. Dravida

Question Type : MCQ  
Question ID : 264330133960  
Option 1 ID : 264330524866  
Option 2 ID : 264330524865  
Option 3 ID : 264330524864  
Option 4 ID : 264330524863  
Status : Answered  
Chosen Option : 2

Q.9 Who among the following won the French Open 2022 Badminton Tournament Men's Doubles Title in Paris?

- Ans
- 1. Chirag Shetty and Satwiksairaj Ranki Reddy
  - 2. Lu Ching Yao and Yang Po Han
  - 3. Takuro Hoki and Yugo Kobayashi
  - 4. Ko Sung Hyun and Shin Baek Cheol

Question Type : MCQ  
Question ID : 264330137991  
Option 1 ID : 264330540571  
Option 2 ID : 264330540573  
Option 3 ID : 264330540572  
Option 4 ID : 264330540574  
Status : Answered  
Chosen Option : 1

Q.10 Which among the following Articles of the Indian Constitution deals with the "Fundamental Duties"?

- Ans
- 1. 55-A
  - 2. 51-A
  - 3. 61-A
  - 4. 54-A

Question Type : MCQ  
Question ID : 264330137989  
Option 1 ID : 264330540563  
Option 2 ID : 264330540566  
Option 3 ID : 264330540564  
Option 4 ID : 264330540565  
Status : Answered  
Chosen Option : 2

Q.11 "Losar" is celebrated as New year festival in Sikkim. It is celebrated on the first day of the first month of the \_\_\_\_\_ lunar calendar.

- Ans
- 1. Tibetan
  - 2. Islamic
  - 3. Gregorian
  - 4. Persian

Question Type : MCQ  
Question ID : 264330138297  
Option 1 ID : 264330541795  
Option 2 ID : 264330541797  
Option 3 ID : 264330541796  
Option 4 ID : 264330541798  
Status : Answered  
Chosen Option : 1

Q.12 In 2022, the Union Ministry of Electronics and IT approved the greenfield Electronic Manufacturing Cluster (EMC) in \_\_\_\_\_.

- Ans
- 1. Rajasthan
  - 2. Maharashtra
  - 3. West Bengal
  - 4. Kerala

Question Type : MCQ  
Question ID : 264330137969  
Option 1 ID : 264330540484  
Option 2 ID : 264330540486  
Option 3 ID : 264330540485  
Option 4 ID : 264330540483  
Status : Answered  
Chosen Option : 3

Q.13 Dribbling is associated with \_\_\_\_\_ sport.

- Ans
- 1. Basketball
  - 2. Cricket
  - 3. Badminton
  - 4. Swimming

Question Type : MCQ  
Question ID : 264330133929  
Option 1 ID : 264330524739  
Option 2 ID : 264330524740  
Option 3 ID : 264330524741  
Option 4 ID : 264330524742  
Status : Answered  
Chosen Option : 4

Q.14 Bhopal gas disaster occurred in which of the following factory?

- Ans
- 1. Meghnagar Pharmachem Pvt Ltd
  - 2. Standard Surfactants Limited
  - 3. Union Carbide Pesticide plant
  - 4. Bhopal Incinerator Ltd.

Question Type : MCQ  
Question ID : 264330138888  
Option 1 ID : 264330544159  
Option 2 ID : 264330544161  
Option 3 ID : 264330544160  
Option 4 ID : 264330544162  
Status : Answered  
Chosen Option : 3

Q.15 Which among the following is not associated with Tabla?

- Ans
- 1. Shakoor Khan
  - 2. Jnan Prakash Ghosh
  - 3. Sabir Khan
  - 4. Sandeep Das

Question Type : MCQ  
Question ID : 264330137987  
Option 1 ID : 264330540558  
Option 2 ID : 264330540556  
Option 3 ID : 264330540557  
Option 4 ID : 264330540555  
Status : Not Answered  
Chosen Option : --

Q.16 Yakshagana is a famous folk dance associated with which of the following states?

- Ans
- 1. Karnataka
  - 2. Odisha
  - 3. Kerala
  - 4. Tamil Nadu

Question Type : MCQ  
Question ID : 264330137971  
Option 1 ID : 264330540492  
Option 2 ID : 264330540494  
Option 3 ID : 264330540491  
Option 4 ID : 264330540493  
Status : Answered  
Chosen Option : 1

Q.17 Who occupied Badaun (A.D. 1197-98) and appointed Iltutmish as its first Muslim Governor?

- Ans
- 1. Prithviraj Chauhan
  - 2. Maharana Pratap
  - 3. Muhammad Ghori
  - 4. Qutbuddin Aibak

Question Type : MCQ  
Question ID : 264330133920  
Option 1 ID : 264330524703  
Option 2 ID : 264330524704  
Option 3 ID : 264330524706  
Option 4 ID : 264330524705  
Status : Answered  
Chosen Option : 4

Q.18 What is another name for frozen carbon dioxide?

- Ans
- 1. Refrigerant
  - 2. Coal
  - 3. Dry Ice
  - 4. Coke

Question Type : MCQ  
Question ID : 264330133913  
Option 1 ID : 264330524678  
Option 2 ID : 264330524677  
Option 3 ID : 264330524675  
Option 4 ID : 264330524676  
Status : Answered  
Chosen Option : 3



Q.19 What is the official language of Bangladesh, a neighbouring country of India?

- Ans
- 1. Bengali
  - 2. Urdu
  - 3. Dzongkha
  - 4. Hindi

Question Type : MCQ  
Question ID : 264330135471  
Option 1 ID : 264330530793  
Option 2 ID : 264330530792  
Option 3 ID : 264330530794  
Option 4 ID : 264330530791  
Status : Answered  
Chosen Option : 1

Q.20 Which among the following Articles of the Indian Constitution provides for the Attorney General of India?

- Ans
- 1. 79
  - 2. 76
  - 3. 72
  - 4. 81

Question Type : MCQ  
Question ID : 264330137990  
Option 1 ID : 264330540569  
Option 2 ID : 264330540568  
Option 3 ID : 264330540567  
Option 4 ID : 264330540570  
Status : Answered  
Chosen Option : 2

Q.21 Which of the following reforms led to the enactment of the Government of India Act of 1919?

- Ans
- 1. Montagu- Chelmsford reforms
  - 2. Antislavery reforms
  - 3. Morley-Minto reforms
  - 4. Young Bengal movement

Question Type : MCQ  
Question ID : 264330133971  
Option 1 ID : 264330524910  
Option 2 ID : 264330524907  
Option 3 ID : 264330524909  
Option 4 ID : 264330524908  
Status : Answered  
Chosen Option : 1

Q.22 Which is the second largest family in modern Indian languages?

- Ans
- 1. Sino – Tibetan (Kirata)
  - 2. Indo – European (Aryan)
  - 3. Austric (Nishada)
  - 4. Dravidian (Dravida)

Question Type : MCQ  
Question ID : 264330138643  
Option 1 ID : 264330543180  
Option 2 ID : 264330543181  
Option 3 ID : 264330543182  
Option 4 ID : 264330543179  
Status : Answered  
Chosen Option : 2

Q.23 Lacchu Maharaj was a noted Indian classical dancer and choreographer of \_\_\_\_\_ .

- Ans
- 1. Kathak
  - 2. Odissi
  - 3. Chhau
  - 4. Kuchipudi

Question Type : MCQ  
Question ID : 264330138878  
Option 1 ID : 264330544120  
Option 2 ID : 264330544122  
Option 3 ID : 264330544119  
Option 4 ID : 264330544121  
Status : Answered  
Chosen Option : 1

Q.24 What chemical element does "H" stand for in the periodic table of science?

- Ans
- 1. Helium
  - 2. Mercury
  - 3. Holmium
  - 4. Hydrogen

Question Type : MCQ  
Question ID : 264330133911  
Option 1 ID : 264330524667  
Option 2 ID : 264330524669  
Option 3 ID : 264330524670  
Option 4 ID : 264330524668  
Status : Answered  
Chosen Option : 4

Q.25 'I Too Had a Love Story' novel is written by \_\_\_\_\_ .

- Ans
- 1. Aravind Adiga
  - 2. Ruskin Bond
  - 3. Durjoy Dutta
  - 4. Ravinder Singh

Question Type : **MCQ**  
Question ID : **264330138876**  
Option 1 ID : **264330544112**  
Option 2 ID : **264330544111**  
Option 3 ID : **264330544114**  
Option 4 ID : **264330544113**  
Status : **Answered**  
Chosen Option : **4**

Section : English Language and Comprehension

Q.1 Select the most appropriate word for the given group of words.

Open to more than one interpretation, not having one obvious meaning

- Ans
- 1. Alchemy
  - 2. Amateur
  - 3. Ambiguous
  - 4. Altercation

Question Type : **MCQ**  
Question ID : **264330136524**  
Option 1 ID : **264330534838**  
Option 2 ID : **264330534837**  
Option 3 ID : **264330534835**  
Option 4 ID : **264330534836**  
Status : **Answered**  
Chosen Option : **3**

Q.2 Choose the word that is opposite in meaning to the given word.  
Doze

- Ans
- 1. Cold
  - 2. Neglect
  - 3. Snooze
  - 4. Wake

Question Type : **MCQ**  
Question ID : **264330134442**  
Option 1 ID : **264330526741**  
Option 2 ID : **264330526742**  
Option 3 ID : **264330526739**  
Option 4 ID : **264330526740**  
Status : **Answered**  
Chosen Option : **4**

**Q.3** Select the most appropriate antonym to substitute the bracketed word in the given sentence.

They are virtually unimpeachable in the (unbiased), invariably correct reading of a race.

- Ans**
- 1. captivity
  - 2. stranger
  - 3. prejudiced
  - 4. ceasing

Question Type : **MCQ**  
Question ID : **264330136528**  
Option 1 ID : **264330534851**  
Option 2 ID : **264330534854**  
Option 3 ID : **264330534853**  
Option 4 ID : **264330534852**  
Status : **Answered**  
Chosen Option : **3**

**Q.4** Select the correctly spelt word.

- Ans**
- 1. recind
  - 2. rescind
  - 3. recsind
  - 4. resind

Question Type : **MCQ**  
Question ID : **264330136531**  
Option 1 ID : **264330534865**  
Option 2 ID : **264330534863**  
Option 3 ID : **264330534866**  
Option 4 ID : **264330534864**  
Status : **Answered**  
Chosen Option : **2**

**Q.5** Select the word from the options which is similar in meaning to the bracketed word given in the sentence below.

Well, you want an (argument)," he added, "come on then."

- Ans**
- 1. agreement
  - 2. enhancement
  - 3. capability
  - 4. explanation

Question Type : **MCQ**  
Question ID : **264330136708**  
Option 1 ID : **264330535543**  
Option 2 ID : **264330535546**  
Option 3 ID : **264330535545**  
Option 4 ID : **264330535544**  
Status : **Answered**  
Chosen Option : **4**

**Q.6** Identify the segment that contains a grammatical error. If there is no error, select 'No error'.

The Federalists wished to/ make the central government/ as strong possible.

- Ans**
- 1. as strong possible.
  - 2. The Federalists wished to
  - 3. No error
  - 4. make the central government

Question Type : **MCQ**  
Question ID : **264330136511**  
Option 1 ID : **264330534789**  
Option 2 ID : **264330534787**  
Option 3 ID : **264330534790**  
Option 4 ID : **264330534788**  
Status : **Answered**  
Chosen Option : 1

**Q.7** Select the most appropriate option to substitute the bracketed segment in the given sentence. If there is no need to substitute it, select 'no substitution required'.

The query isn't (whether he will admit it, but when).

- Ans**
- 1. No substitution required
  - 2. whether he will be admitting it or not, but when?
  - 3. whether or nor he will admit it, but when?
  - 4. whether he will admit it or not, but when?

Question Type : **MCQ**  
Question ID : **264330136720**  
Option 1 ID : **264330535594**  
Option 2 ID : **264330535591**  
Option 3 ID : **264330535593**  
Option 4 ID : **264330535592**  
Status : **Answered**  
Chosen Option : 4

**Q.8** Choose the word that can substitute the given group of words.  
A person who believes in the equality of all people

- Ans**
- 1. Philologist
  - 2. Egalitarian
  - 3. Philodendron
  - 4. Philander

Question Type : **MCQ**  
Question ID : **264330134386**  
Option 1 ID : **264330526523**  
Option 2 ID : **264330526525**  
Option 3 ID : **264330526524**  
Option 4 ID : **264330526526**  
Status : **Answered**  
Chosen Option : 2

Q.9 Select the most appropriate option to fill in the blank.

This initiative has been sharply criticised as grossly inefficient and \_\_\_\_\_.

Ans  1. Capricious

2. Counterproductive

3. Calumny

4. Canonical

Question Type : MCQ

Question ID : 264330136515

Option 1 ID : 264330534803

Option 2 ID : 264330534806

Option 3 ID : 264330534805

Option 4 ID : 264330534804

Status : Answered

Chosen Option : 2

Q.10 Select the wrongly spelt word.

Ans  1. Unsavoury

2. Ethical

3. Unconventional

4. Alturiste

Question Type : MCQ

Question ID : 264330136688

Option 1 ID : 264330535468

Option 2 ID : 264330535467

Option 3 ID : 264330535469

Option 4 ID : 264330535470

Status : Answered

Chosen Option : 4

Q.11 Select the most appropriate synonym of the given word.

Debased

Ans  1. Amenable

2. Unamenable

3. Corrupted

4. Aggrandize

Question Type : MCQ

Question ID : 264330136525

Option 1 ID : 264330534842

Option 2 ID : 264330534841

Option 3 ID : 264330534840

Option 4 ID : 264330534839

Status : Answered

Chosen Option : 2

Q.12 Select the most appropriate option to fill in the blank.

We cannot \_\_\_\_\_ a religion or a political party that ignores the rights of half the human race.

- Ans
- 1. disseminate
  - 2. desiccate
  - 3. condemn
  - 4. forgive

Question Type : MCQ  
Question ID : 264330136689  
Option 1 ID : 264330535473  
Option 2 ID : 264330535474  
Option 3 ID : 264330535471  
Option 4 ID : 264330535472  
Status : Answered  
Chosen Option : 4

Q.13 Select the most appropriate option to fill in the blank.

They probably subsisted on insects and other small \_\_\_\_\_ invertebrates and perhaps even on aquatic vertebrates.

- Ans
- 1. skittish
  - 2. recluse
  - 3. reverent
  - 4. terrestrial

Question Type : MCQ  
Question ID : 264330136534  
Option 1 ID : 264330534877  
Option 2 ID : 264330534875  
Option 3 ID : 264330534876  
Option 4 ID : 264330534878  
Status : Answered  
Chosen Option : 4

Q.14 Select the word segment that substitutes (replaces) the bracketed word segment correctly and completes the sentence meaningfully. Select the option 'no correction required' if the sentence is correct as given.

The (roof collapsing) in a roar of rock and rubble.

- Ans
- 1. roof have collapsed
  - 2. No correction required
  - 3. roof was collapse
  - 4. roof collapsed

Question Type : MCQ  
Question ID : 264330136592  
Option 1 ID : 264330535100  
Option 2 ID : 264330535102  
Option 3 ID : 264330535099  
Option 4 ID : 264330535101  
Status : Answered  
Chosen Option : 4

Q.15 Find the part of the given sentence that has an error in it. If there is no error, choose 'No error'.  
Can you please help me to this project?

- Ans
- 1. this project?
  - 2. Can you please
  - 3. No error
  - 4. help me to

Question Type : MCQ  
Question ID : 264330134347  
Option 1 ID : 264330526377  
Option 2 ID : 264330526375  
Option 3 ID : 264330526378  
Option 4 ID : 264330526376  
Status : Answered  
Chosen Option : 4

Q.16 In the following question, out of the given four alternatives, select the alternative which best expresses the meaning of the Idiom/Phrase.  
To kill two birds with one stone

- Ans
- 1. A work which needs tremendous efforts
  - 2. To achieve two things with a single effort
  - 3. The weak point in a person
  - 4. To accidentally hurt someone's feelings

Question Type : MCQ  
Question ID : 264330134392  
Option 1 ID : 264330526549  
Option 2 ID : 264330526547  
Option 3 ID : 264330526548  
Option 4 ID : 264330526550  
Status : Answered  
Chosen Option : 2

Q.17 Select the most appropriate option to fill in the blank.  
The duke had capacity, but his life was so \_\_\_\_\_ that what influence he had upon the king was for evil.

- Ans
- 1. seditious
  - 2. scrumptious
  - 3. lewd
  - 4. ambitious

Question Type : MCQ  
Question ID : 264330136724  
Option 1 ID : 264330535608  
Option 2 ID : 264330535607  
Option 3 ID : 264330535609  
Option 4 ID : 264330535610  
Status : Answered  
Chosen Option : 1



**Q.18** Identify the segment that contains a grammatical error. If there is no error, select 'No error'.  
He belted two huge sixers, but / eleven to get of the last two / deliveries was a big ask.

- Ans**
- 1. eleven to get of the last two
  - 2. deliveries was a big ask.
  - 3. No error
  - 4. He belted two huge sixers, but

Question Type : **MCQ**  
Question ID : **264330136717**  
Option 1 ID : **264330535580**  
Option 2 ID : **264330535581**  
Option 3 ID : **264330535582**  
Option 4 ID : **264330535579**  
Status : **Answered**  
Chosen Option : **4**

**Q.19** Select the most appropriate meaning of the bracketed idiom in the given sentence.

Sure, fixing a flubbed decision isn't always (a piece of cake), but it's rarely impossible.

- Ans**
- 1. The family bond is closer than anything else
  - 2. A task that can be accomplished very easily
  - 3. A rare event or occurrence
  - 4. Having no stand, shows favour at one time and unfavour at another

Question Type : **MCQ**  
Question ID : **264330136530**  
Option 1 ID : **264330534861**  
Option 2 ID : **264330534860**  
Option 3 ID : **264330534859**  
Option 4 ID : **264330534862**  
Status : **Answered**  
Chosen Option : **2**

**Q.20** Improve the underlined part of the sentence. Choose 'No improvement' as an answer if the sentence is grammatically correct.

The dessert was many sweet for my tastes.

- Ans**
- 1. too sweetly
  - 2. more sweeter
  - 3. too sweet
  - 4. No improvement

Question Type : **MCQ**  
Question ID : **264330134827**  
Option 1 ID : **264330528249**  
Option 2 ID : **264330528247**  
Option 3 ID : **264330528248**  
Option 4 ID : **264330528250**  
Status : **Answered**  
Chosen Option : **3**

**Comprehension:**

In the following passage some of the words have been deleted. Read the passage carefully and select the correct answer for the given blank out of the four alternatives.

Network security (1) \_\_\_\_\_ securing a network and protecting the user's information about (2) \_\_\_\_\_ is connected through that network. Over the network (3) \_\_\_\_\_ steal, the packets of data through sniffing and spoofing (4) \_\_\_\_\_, man in the middle attack, war driving, etc, and misuse the data for their (5) \_\_\_\_\_.

**SubQuestion No : 21**

**Q.21** Select the most appropriate option to fill in blank number 1.

- Ans  1. calls  
 2. names  
 3. means  
 4. declares

Question Type : **MCQ**  
Question ID : **264330134433**  
Option 1 ID : **264330526706**  
Option 2 ID : **264330526704**  
Option 3 ID : **264330526705**  
Option 4 ID : **264330526703**  
Status : **Answered**  
Chosen Option : **3**

**Comprehension:**

In the following passage some of the words have been deleted. Read the passage carefully and select the correct answer for the given blank out of the four alternatives.

Network security (1) \_\_\_\_\_ securing a network and protecting the user's information about (2) \_\_\_\_\_ is connected through that network. Over the network (3) \_\_\_\_\_ steal, the packets of data through sniffing and spoofing (4) \_\_\_\_\_, man in the middle attack, war driving, etc, and misuse the data for their (5) \_\_\_\_\_.

**SubQuestion No : 22**

**Q.22** Select the most appropriate option to fill in blank number 2.

- Ans  1. which  
 2. who  
 3. whose  
 4. that

Question Type : **MCQ**  
Question ID : **264330134434**  
Option 1 ID : **264330526709**  
Option 2 ID : **264330526710**  
Option 3 ID : **264330526708**  
Option 4 ID : **264330526707**  
Status : **Answered**  
Chosen Option : **2**

**Comprehension:**

In the following passage some of the words have been deleted. Read the passage carefully and select the correct answer for the given blank out of the four alternatives.

Network security (1) \_\_\_\_\_ securing a network and protecting the user's information about (2) \_\_\_\_\_ is connected through that network. Over the network (3) \_\_\_\_\_ steal, the packets of data through sniffing and spoofing (4) \_\_\_\_\_, man in the middle attack, war driving, etc, and misuse the data for their (5) \_\_\_\_\_.

**SubQuestion No : 23**

**Q.23** Select the most appropriate option to fill in blank number 3.

- Ans**  1. hackers  
 2. labourers  
 3. engineers  
 4. smugglers

Question Type : **MCQ**  
Question ID : **264330134435**  
Option 1 ID : **264330526713**  
Option 2 ID : **264330526714**  
Option 3 ID : **264330526711**  
Option 4 ID : **264330526712**  
Status : **Answered**  
Chosen Option : 1

**Comprehension:**

In the following passage some of the words have been deleted. Read the passage carefully and select the correct answer for the given blank out of the four alternatives.

Network security (1) \_\_\_\_\_ securing a network and protecting the user's information about (2) \_\_\_\_\_ is connected through that network. Over the network (3) \_\_\_\_\_ steal, the packets of data through sniffing and spoofing (4) \_\_\_\_\_, man in the middle attack, war driving, etc, and misuse the data for their (5) \_\_\_\_\_.

**SubQuestion No : 24**

**Q.24** Select the most appropriate option to fill in blank number 4.

- Ans**  1. raids  
 2. attacks  
 3. charges  
 4. guards

Question Type : **MCQ**  
Question ID : **264330134436**  
Option 1 ID : **264330526717**  
Option 2 ID : **264330526718**  
Option 3 ID : **264330526716**  
Option 4 ID : **264330526715**  
Status : **Answered**  
Chosen Option : 3

**Comprehension:**

In the following passage some of the words have been deleted. Read the passage carefully and select the correct answer for the given blank out of the four alternatives.

Network security (1) \_\_\_\_\_ securing a network and protecting the user's information about (2) \_\_\_\_\_ is connected through that network. Over the network (3) \_\_\_\_\_ steal, the packets of data through sniffing and spoofing (4) \_\_\_\_\_, man in the middle attack, war driving, etc, and misuse the data for their (5) \_\_\_\_\_.

**SubQuestion No : 25**

**Q.25** Select the most appropriate option to fill in blank number 5.

- Ans**  1. benefits  
 2. banes  
 3. pleasure  
 4. hindrances

Question Type : **MCQ**

Question ID : **264330134437**

Option 1 ID : **264330526721**

Option 2 ID : **264330526719**

Option 3 ID : **264330526722**

Option 4 ID : **264330526720**

Status : **Answered**

Chosen Option : **1**



Teachingninja.in