



SSC MTS **SHIFT – 3 (13-06-2023)**

- ★ **Latest Govt Job updates**
- ★ **Private Job updates**
- ★ **Free Mock tests available**

**Visit - [teachingninja.in](https://teachingninja.in)**

### Multi Tasking Non Technical Staff and Havaladar CBIC and CBN Examination 2022

Roll Number	
Candidate Name	
Venue Name	
Exam Date	13/06/2023
Exam Time	3:30 PM - 5:00 PM
Subject	MTS Non Tech Havaladar CBIC and CBN Examination 2022

Section : **Numerical and Mathematical Ability**

**Q.1** If interest is being compounded half yearly and rate of interest is 20 percent per annum, then in how much time Rs. 15000 will become Rs. 19965 at compound interest?

- Ans
- 1. 30 months
  - 2. 18 months
  - 3. 12 months
  - 4. 24 months

Question Type : **MCQ**  
 Question ID : **264330140250**  
 Option 1 ID : **264330549382**  
 Option 2 ID : **264330549379**  
 Option 3 ID : **264330549380**  
 Option 4 ID : **264330549381**  
 Status : **Answered**  
 Chosen Option : **4**

**Q.2** What is the value of  $\frac{99 \div 33 + 44 \div 11 \text{ of } 4}{24 \div 12 - 4 + 3}$  ?

- Ans
- 1. 6
  - 2. 1
  - 3. 8
  - 4. 4

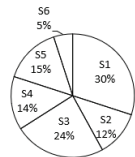
Question Type : **MCQ**  
 Question ID : **264330139907**  
 Option 1 ID : **264330548009**  
 Option 2 ID : **264330548007**  
 Option 3 ID : **264330548010**  
 Option 4 ID : **264330548008**  
 Status : **Answered**  
 Chosen Option : **3**

**Q.3** What is the value of  $\sqrt{0.33 \times 0.33 + 0.6 \times 0.6 + 1.2 \times 0.33}$  ?

- Ans**
- 1. 0.73
  - 2. 0.69
  - 3. 0.93
  - 4. 0.39

Question Type : **MCQ**  
 Question ID : **264330140230**  
 Option 1 ID : **264330549300**  
 Option 2 ID : **264330549301**  
 Option 3 ID : **264330549302**  
 Option 4 ID : **264330549299**  
 Status : **Answered**  
 Chosen Option : **3**

**Q.4** The pie chart given below shows the marks obtained by a student in 6 different subjects. The total marks obtained by the student is 500. Marks in a particular subject are shown as a percent of total marks obtained in all these 6 subjects.



What is the ratio of marks obtained in S3 to the marks obtained in S4?

- Ans**
- 1. 2 : 1
  - 2. 5 : 6
  - 3. 12 : 5
  - 4. 12 : 7

Question Type : **MCQ**  
 Question ID : **264330140602**  
 Option 1 ID : **264330550759**  
 Option 2 ID : **264330550760**  
 Option 3 ID : **264330550761**  
 Option 4 ID : **264330550762**  
 Status : **Answered**  
 Chosen Option : **4**

**Q.5** How many spherical balls of radius 6 cm can be made by melting a hemisphere of radius 24 cm?

- Ans**
- 1. 32
  - 2. 96
  - 3. 64
  - 4. 24

Question Type : **MCQ**  
 Question ID : **264330140166**  
 Option 1 ID : **264330549045**  
 Option 2 ID : **264330549043**  
 Option 3 ID : **264330549046**  
 Option 4 ID : **264330549044**  
 Status : **Answered**  
 Chosen Option : **2**

**Q.6** Cost of two types of rice is Rs. 60 per kg and Rs. 84 per kg. If both the rice is mixed together in the ratio 1:1, then what should be the price of mixed variety of rice per kg?

- Ans**
- 1. Rs. 72 per kg
  - 2. Rs. 76 per kg
  - 3. Rs. 80 per kg
  - 4. Rs. 68 per kg

Question Type : **MCQ**  
 Question ID : **264330134084**  
 Option 1 ID : **264330525360**  
 Option 2 ID : **264330525361**  
 Option 3 ID : **264330525362**  
 Option 4 ID : **264330525359**  
 Status : **Answered**  
 Chosen Option : **2**

**Q.7** A merchant sold an article at 20% loss. If he had sold it for Rs. 390 more, 6% would have been gained on the cost price. What is the cost price of the article?

- Ans**
- 1. Rs.1800
  - 2. Rs.1500
  - 3. Rs.1200
  - 4. Rs.2600

Question Type : **MCQ**  
 Question ID : **264330139042**  
 Option 1 ID : **264330544776**  
 Option 2 ID : **264330544777**  
 Option 3 ID : **264330544778**  
 Option 4 ID : **264330544775**  
 Status : **Answered**  
 Chosen Option : **1**

**Q.8** A man covers half part of a certain distance at 15 km/hr. He covers 40 percent of remaining distance at the speed of 12 km/hr and covers rest of the distance at the speed of 21 km/hr. What is his average speed for the entire journey?

- Ans**
- 1. 15 km/hr
  - 2.  $164/9$  km/hr
  - 3.  $140/9$  km/hr
  - 4.  $139/9$  km/hr

Question Type : **MCQ**  
 Question ID : **264330140217**  
 Option 1 ID : **264330549250**  
 Option 2 ID : **264330549249**  
 Option 3 ID : **264330549248**  
 Option 4 ID : **264330549247**  
 Status : **Answered**  
 Chosen Option : **3**

**Q.9** If 60 is subtracted from 30 percent of a number, then the result is 120. What is the value of the number?

- Ans**
- 1. 550
  - 2. 630
  - 3. 600
  - 4. 700

Question Type : **MCQ**  
 Question ID : **264330140588**  
 Option 1 ID : **264330550704**  
 Option 2 ID : **264330550705**  
 Option 3 ID : **264330550703**  
 Option 4 ID : **264330550706**  
 Status : **Answered**  
 Chosen Option : **3**

**Q.10** Some girls can do a work in 10 days. In how much time twice of such girls will complete four times of the same work?

- Ans**
- 1. 10 days
  - 2. 25 days
  - 3. 20 days
  - 4. 30 days

Question Type : **MCQ**  
 Question ID : **264330140611**  
 Option 1 ID : **264330550791**  
 Option 2 ID : **264330550792**  
 Option 3 ID : **264330550793**  
 Option 4 ID : **264330550794**  
 Status : **Answered**  
 Chosen Option : **1**

**Q.11** The marked price of one pen is Rs. 20. What will be the total selling price of 5 such pens after the discount of 5%?

- Ans**
- 1. Rs. 105
  - 2. Rs. 100
  - 3. Rs. 90
  - 4. Rs. 95

Question Type : **MCQ**  
 Question ID : **264330140806**  
 Option 1 ID : **264330551574**  
 Option 2 ID : **264330551573**  
 Option 3 ID : **264330551572**  
 Option 4 ID : **264330551571**  
 Status : **Answered**  
 Chosen Option : **4**

**Q.12** If 80 percent of total articles are sold at a loss of 25 percent and remaining articles are sold at a profit of 20 percent, then what will be the overall loss percentage?

- Ans**
- 1. 16 percent
  - 2. 18 percent
  - 3. 20 percent
  - 4. 22 percent

Question Type : **MCQ**  
 Question ID : **264330139918**  
 Option 1 ID : **264330548054**  
 Option 2 ID : **264330548053**  
 Option 3 ID : **264330548052**  
 Option 4 ID : **264330548051**  
 Status : **Answered**  
 Chosen Option : **1**

**Q.13** Shivam is 20 percent less efficient than Vivek. If Vivek can make a helmet in 12 days, then in how many days can Shivam make the same helmet?

- Ans**
- 1. 18 days
  - 2. 15 days
  - 3. 12 days
  - 4. 14 days

Question Type : **MCQ**  
 Question ID : **264330139891**  
 Option 1 ID : **264330547943**  
 Option 2 ID : **264330547944**  
 Option 3 ID : **264330547945**  
 Option 4 ID : **264330547946**  
 Status : **Answered**  
 Chosen Option : **1**

**Q.14** The length of two parallel sides of a trapezium are 25 metre and 30 metre. If its height is 20 metre, then what is the area of the trapezium?

- Ans**
- 1. 350 metre<sup>2</sup>
  - 2. 550 metre<sup>2</sup>
  - 3. 590 metre<sup>2</sup>
  - 4. 420 metre<sup>2</sup>

Question Type : **MCQ**  
 Question ID : **264330140207**  
 Option 1 ID : **264330549207**  
 Option 2 ID : **264330549210**  
 Option 3 ID : **264330549209**  
 Option 4 ID : **264330549208**  
 Status : **Answered**  
 Chosen Option : **4**

**Q.15** Three partners P, Q and R invested a total of Rs. 52,000 in a business. At the end of the year, P got Rs. 1430, Q got Rs. 1870 and R got Rs. 2420 as the share of profit. How much amount did Q invest in the business?

- Ans**
- 1. Rs. 15300
  - 2. Rs. 18700
  - 3. Rs. 17000
  - 4. Rs. 20400

Question Type : **MCQ**  
 Question ID : **264330139900**  
 Option 1 ID : **264330547979**  
 Option 2 ID : **264330547982**  
 Option 3 ID : **264330547980**  
 Option 4 ID : **264330547981**  
 Status : **Answered**  
 Chosen Option : **3**

**Q.16** What is the Highest Common Factor of  $\frac{3}{8}$  and  $\frac{4}{9}$ ?

- Ans**
- 1.  $\frac{1}{36}$
  - 2.  $\frac{1}{108}$
  - 3.  $\frac{1}{72}$
  - 4.  $\frac{1}{18}$

Question Type : **MCQ**  
 Question ID : **264330140188**  
 Option 1 ID : **264330549132**  
 Option 2 ID : **264330549134**  
 Option 3 ID : **264330549131**  
 Option 4 ID : **264330549133**  
 Status : **Answered**  
 Chosen Option : **3**

**Q.17** The speed of a boat in upstream is 8 km/hr and the speed of stream is 4 km/hr. The boat covers a distance of x km in upstream and x km in downstream. If the total time taken by the boat is 9 hours, then what is the value of x?

- Ans**
- 1. 48 km
  - 2. 60 km
  - 3. 72 km
  - 4. 36 km

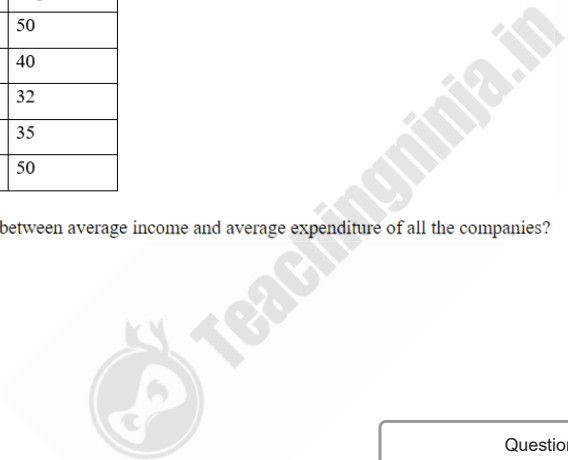
Question Type : **MCQ**  
 Question ID : **264330139933**  
 Option 1 ID : **264330548113**  
 Option 2 ID : **264330548114**  
 Option 3 ID : **264330548111**  
 Option 4 ID : **264330548112**  
 Status : **Answered**  
 Chosen Option : **3**

**Q.18** The table given below shows the income and expenditure of five companies.

Companies	Income	Expenditure
A	55	50
B	50	40
C	35	32
D	40	35
E	60	50

What is the difference between average income and average expenditure of all the companies?

- Ans**
- 1. 4.2
  - 2. 2.6
  - 3. 6.6
  - 4. 8.4



Question Type : **MCQ**  
 Question ID : **264330139949**  
 Option 1 ID : **264330548175**  
 Option 2 ID : **264330548178**  
 Option 3 ID : **264330548176**  
 Option 4 ID : **264330548177**  
 Status : **Answered**  
 Chosen Option : **3**



**Q.19** The ratio of present ages of Neelam and Rajni is 6 : 5. After six years, their ages will be in the ratio of 13 : 11. What is the present age of Rajni?

- Ans**
- 1. 30 years
  - 2. 45 years
  - 3. 60 years
  - 4. 75 years

Question Type : **MCQ**  
 Question ID : **264330140201**  
 Option 1 ID : **264330549183**  
 Option 2 ID : **264330549185**  
 Option 3 ID : **264330549184**  
 Option 4 ID : **264330549186**  
 Status : **Answered**  
 Chosen Option : **3**

**Q.20** A person lent certain sum of money at the annual rate of 5 percent on simple interest. In 4 years, the interest amounted to Rs. 800 . What is the sum lent?

- Ans**
- 1. Rs. 3200
  - 2. Rs. 2000
  - 3. Rs. 4000
  - 4. Rs. 1600

Question Type : **MCQ**  
 Question ID : **264330140249**  
 Option 1 ID : **264330549378**  
 Option 2 ID : **264330549375**  
 Option 3 ID : **264330549377**  
 Option 4 ID : **264330549376**  
 Status : **Answered**  
 Chosen Option : **3**

Section : Reasoning Ability and Problem Solving

**Q.1** In the following question below are given some statements followed by some conclusions based on those statements. Taking the given statements to be true even if they seem to be at variance from commonly known facts. Read all the conclusions and then decide which of the given conclusion logically follows the given statements.

Statements:

I. All J are Y.

II. No X is Y.

Conclusions:

I. Some X are not Y.

II. Some J are not X.

- Ans**
- 1. Neither conclusion follows
  - 2. Only conclusion I follows
  - 3. Both conclusions I and II follows
  - 4. Only conclusion II follows

Question Type : **MCQ**  
 Question ID : **264330140062**  
 Option 1 ID : **264330548630**  
 Option 2 ID : **264330548627**  
 Option 3 ID : **264330548629**  
 Option 4 ID : **264330548628**  
 Status : **Answered**  
 Chosen Option : **1**

**Q.2** Select the option in which the numbers shares the same relationship in set as that shared by the numbers in the given set. (NOTE: Operations should be performed on the whole numbers, without breaking down the numbers into its constituent digits. E.g.13 – Operations on 13 such as adding /subtracting /multiplying etc. to 13 can be performed. Breaking down 13 into 1 and 3 and then performing mathematical operations on 1 and 3 is not allowed)

(12, 22, 34)

(14, 15, 29)

- Ans**
- 1. (14, 15, 19)
  - 2. (16, 17, 33)
  - 3. (8, 9, 15)
  - 4. (10, 20, 24)

Question Type : **MCQ**  
 Question ID : **264330139562**  
 Option 1 ID : **264330546663**  
 Option 2 ID : **264330546664**  
 Option 3 ID : **264330546665**  
 Option 4 ID : **264330546666**  
 Status : **Answered**  
 Chosen Option : **2**

**Q.3** In a certain code language, '231' means 'Flower is Green', '307' means 'A Green Tree' and '781' means 'Tree and flower'. Find the code for 'is'.

- Ans**
- 1. 2
  - 2. 8
  - 3. 0
  - 4. 1

Question Type : **MCQ**  
Question ID : **264330140098**  
Option 1 ID : **264330548771**  
Option 2 ID : **264330548774**  
Option 3 ID : **264330548772**  
Option 4 ID : **264330548773**  
Status : **Answered**  
Chosen Option : **1**

**Q.4** In a certain code language, 'BURN' is written as 'CVS14'. How will 'GOLD' be written in that language?

- Ans**
- 1. HP4M
  - 2. PHM4
  - 3. HMP4
  - 4. HPM4

Question Type : **MCQ**  
Question ID : **264330138770**  
Option 1 ID : **264330543688**  
Option 2 ID : **264330543690**  
Option 3 ID : **264330543687**  
Option 4 ID : **264330543689**  
Status : **Answered**  
Chosen Option : **4**

**Q.5** Weight of five bags C1, C2, C3, C4 and C5 is compared. Weight of C4 is more than C1 and less than C2. Weight of C5 is more than C3. Weight of C2 is less than C3. Weight of how many bags is less than C2?

- Ans**
- 1. 3
  - 2. 1
  - 3. 4
  - 4. 2

Question Type : **MCQ**  
Question ID : **264330140984**  
Option 1 ID : **264330552285**  
Option 2 ID : **264330552284**  
Option 3 ID : **264330552286**  
Option 4 ID : **264330552283**  
Status : **Answered**  
Chosen Option : **4**

**Q.6** Select the option figure in which the given figure is embedded. (rotation is NOT allowed)



**Ans**

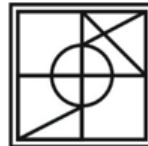
✗ 1.




✗ 2.



✓ 3.



✗ 4.



Question Type : **MCQ**  
Question ID : **264330140993**  
Option 1 ID : **264330552322**  
Option 2 ID : **264330552321**  
Option 3 ID : **264330552319**  
Option 4 ID : **264330552320**  
Status : **Answered**  
Chosen Option : **3**

**Q.7** Select the option that is related to the third word in the same way as the second word is related to the first word.  
Afghanistan : Kabul :: Australia : ?

**Ans**

✗ 1. Sydney

✗ 2. Wellington

✗ 3. Melbourne

✓ 4. Canberra

Question Type : **MCQ**  
Question ID : **264330140115**  
Option 1 ID : **264330548840**  
Option 2 ID : **264330548839**  
Option 3 ID : **264330548841**  
Option 4 ID : **264330548842**  
Status : **Answered**  
Chosen Option : **1**

**Q.8** Two Statements are given followed by two conclusions numbered I and II. Assuming the statements to be true, even if they seem to be at variance with commonly known facts, decide which of the conclusions logically follow(s) from the statements.

Statements:

Some popcorns are Chinese.

All pasta are Chinese.

Conclusions:

I. All Chinese are pasta.

II. Some popcorns are pasta.

- Ans**
- 1. Neither conclusion I nor II follow.
  - 2. Only conclusion II follows.
  - 3. Both conclusions I and II follow.
  - 4. Only conclusion I follows.

Question Type : **MCQ**  
Question ID : **264330140462**  
Option 1 ID : **264330550230**  
Option 2 ID : **264330550228**  
Option 3 ID : **264330550229**  
Option 4 ID : **264330550227**  
Status : **Answered**  
Chosen Option : **1**

**Q.9** Select the option that is related to the third word in the same way as the second word is related to the first word.  
Arthritis : Joints :: Asthma : ?

- Ans**
- 1. Heart
  - 2. Lungs
  - 3. Liver
  - 4. Brain

Question Type : **MCQ**  
Question ID : **264330140094**  
Option 1 ID : **264330548755**  
Option 2 ID : **264330548757**  
Option 3 ID : **264330548758**  
Option 4 ID : **264330548756**  
Status : **Answered**  
Chosen Option : **2**

**Q.10** Which two numbers should be interchanged to make the given equation correct?

$$4 + 40 \times 5 - 16 \div 8 = 79$$

- Ans**
- 1. 5 and 16
  - 2. 16 and 4
  - 3. 40 and 16
  - 4. 4 and 40

Question Type : **MCQ**  
Question ID : **264330140049**  
Option 1 ID : **264330548576**  
Option 2 ID : **264330548578**  
Option 3 ID : **264330548577**  
Option 4 ID : **264330548575**  
Status : **Answered**  
Chosen Option : **3**

**Q.11** Select the option that is related to the third number in the same way as the second number is related to the first number.

$$236 : 33 :: 325 : ?$$

- Ans**
- 1. 27
  - 2. 33
  - 3. 30
  - 4. 63

Question Type : **MCQ**  
Question ID : **264330140106**  
Option 1 ID : **264330548805**  
Option 2 ID : **264330548806**  
Option 3 ID : **264330548804**  
Option 4 ID : **264330548803**  
Status : **Answered**  
Chosen Option : **2**

Q.12 Which answer figure will complete the pattern in the question figure?



Ans

✗ 1.



✓ 2.



✗ 3.



✗ 4.



Teachingninja.in

Question Type : MCQ  
Question ID : 264330140975  
Option 1 ID : 264330552247  
Option 2 ID : 264330552249  
Option 3 ID : 264330552250  
Option 4 ID : 264330552248  
Status : Answered  
Chosen Option : 2

**Q.13** Eight boys Anil, Kamal, Ram, Sanjay, Aakash, Vivek, Rahul and Ramu are sitting around a circular table facing towards the centre (not necessarily in the same order). Vivek is third to the right of Kamal. Kamal is second to the right of Sanjay. Ram is second to the right of Anil. Anil is second to the right of Vivek. Rahul is third to the right of Aakash. Who is third to the left of Anil?

- Ans**
- 1. Kamal
  - 2. Vivek
  - 3. Ramu
  - 4. Aakash

Question Type : **MCQ**  
 Question ID : **264330139978**  
 Option 1 ID : **264330548291**  
 Option 2 ID : **264330548294**  
 Option 3 ID : **264330548292**  
 Option 4 ID : **264330548293**  
 Status : **Answered**  
 Chosen Option : **3**

**Q.14** Which of the following letter cluster will replace the question mark (?) in the given series?  
 DMF, FKG, HIH, JGI, LEJ, ?

- Ans**
- 1. KDN
  - 2. MDK
  - 3. NCK
  - 4. NDJ

Question Type : **MCQ**  
 Question ID : **264330135346**  
 Option 1 ID : **264330530291**  
 Option 2 ID : **264330530293**  
 Option 3 ID : **264330530292**  
 Option 4 ID : **264330530294**  
 Status : **Answered**  
 Chosen Option : **3**

**Q.15** U, V, W, X and Y are sitting around a circular table facing away from the centre. U is sitting to the immediate left of W. X sits exactly in between V and Y. W and V are sitting next to each other. Who is sitting to the immediate left of U?

- Ans**
- 1. X
  - 2. Y
  - 3. V
  - 4. W

Question Type : **MCQ**  
 Question ID : **264330135354**  
 Option 1 ID : **264330530325**  
 Option 2 ID : **264330530326**  
 Option 3 ID : **264330530323**  
 Option 4 ID : **264330530324**  
 Status : **Answered**  
 Chosen Option : **4**



**Q.16** In a certain code language, 'RAUGHT' is written as 'TYWEJR' and 'DOMINE' is written as 'FMOGPC'. How will 'BACKER' be written in that language?

- Ans**
- 1. DYKGP
  - 2. DYEJIP
  - 3. DYEIHP
  - 4. DYEIGP

Question Type : **MCQ**  
 Question ID : **264330140476**  
 Option 1 ID : **264330550283**  
 Option 2 ID : **264330550286**  
 Option 3 ID : **264330550285**  
 Option 4 ID : **264330550284**  
 Status : **Answered**  
 Chosen Option : **4**

**Q.17** Which of the following numbers will replace the question mark (?) in the given series?  
 89, 170, 219, 244, 253, ?

- Ans**
- 1. 256
  - 2. 257
  - 3. 254
  - 4. 255

Question Type : **MCQ**  
 Question ID : **264330140125**  
 Option 1 ID : **264330548881**  
 Option 2 ID : **264330548882**  
 Option 3 ID : **264330548879**  
 Option 4 ID : **264330548880**  
 Status : **Answered**  
 Chosen Option : **3**

**Q.18** Which two signs should be interchanged to make the given equation correct?  
 $2 \div 9 \times 18 + 7 - 4 = 1$

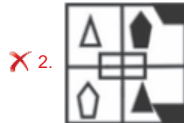
- Ans**
- 1.  $\times$  and  $+$
  - 2.  $-$  and  $+$
  - 3.  $=$  and  $\times$
  - 4.  $=$  and  $-$

Question Type : **MCQ**  
 Question ID : **264330140427**  
 Option 1 ID : **264330550090**  
 Option 2 ID : **264330550087**  
 Option 3 ID : **264330550089**  
 Option 4 ID : **264330550088**  
 Status : **Answered**  
 Chosen Option : **2**

**Q.19** If a mirror is placed on the line AB, then out of the option figures which figure will be the right image of the question figure?



**Ans**



Question Type : **MCQ**  
 Question ID : **264330140071**  
 Option 1 ID : **264330548663**  
 Option 2 ID : **264330548665**  
 Option 3 ID : **264330548666**  
 Option 4 ID : **264330548664**  
 Status : **Answered**  
 Chosen Option : **1**

**Q.20** Which of the following numbers will replace the question mark (?) in the given series?

81, 92, 101, 108, 113, ?

**Ans** ✓ 1. 116

✗ 2. 117

✗ 3. 114

✗ 4. 118

Question Type : **MCQ**  
 Question ID : **264330140463**  
 Option 1 ID : **264330550231**  
 Option 2 ID : **264330550232**  
 Option 3 ID : **264330550233**  
 Option 4 ID : **264330550234**  
 Status : **Answered**  
 Chosen Option : **1**

Section : **General Awareness**

Q.1 Which among the following states does NOT produce coal in India?

- Ans
- 1. Odisha
  - 2. Gujarat
  - 3. Chhattisgarh
  - 4. Jharkhand

Question Type : MCQ  
Question ID : 264330140735  
Option 1 ID : 264330551288  
Option 2 ID : 264330551289  
Option 3 ID : 264330551290  
Option 4 ID : 264330551287  
Status : Not Answered  
Chosen Option : --

Q.2 The World Games 2022 was held in \_\_\_\_\_ city of the country, United States of America.

- Ans
- 1. New Orleans
  - 2. Birmingham
  - 3. Austin
  - 4. Washington

Question Type : MCQ  
Question ID : 264330140773  
Option 1 ID : 264330551442  
Option 2 ID : 264330551439  
Option 3 ID : 264330551440  
Option 4 ID : 264330551441  
Status : Not Answered  
Chosen Option : --

Q.3 The statement- "We shall die to awaken the nation" was made by \_\_\_\_\_.

- Ans
- 1. Bagha Jatin
  - 2. Pingali Venkayya
  - 3. Bir Tikendrajit Singh
  - 4. Surya Sen

Question Type : MCQ  
Question ID : 264330140947  
Option 1 ID : 264330552137  
Option 2 ID : 264330552138  
Option 3 ID : 264330552136  
Option 4 ID : 264330552135  
Status : Not Answered  
Chosen Option : --

**Q.4** The famous movie "3 idiots" is based on the novel "Five Point Someone" which is written by Indian author \_\_\_\_\_.

- Ans**
- 1. Khushwant Singh
  - 2. Durjoy Datta
  - 3. Chetan Bhagat
  - 4. Novoneel Chakraborty

Question Type : **MCQ**  
 Question ID : **264330140334**  
 Option 1 ID : **264330549718**  
 Option 2 ID : **264330549715**  
 Option 3 ID : **264330549717**  
 Option 4 ID : **264330549716**  
 Status : **Not Answered**  
 Chosen Option : --

**Q.5** Providea style of architecture belongs to which empire?

- Ans**
- 1. Bahmani Empire
  - 2. Mauryan Empire
  - 3. Vijayanagar Empire
  - 4. Gupta Empire

Question Type : **MCQ**  
 Question ID : **264330140296**  
 Option 1 ID : **264330549566**  
 Option 2 ID : **264330549564**  
 Option 3 ID : **264330549563**  
 Option 4 ID : **264330549565**  
 Status : **Not Answered**  
 Chosen Option : --

**Q.6** Which among the following planets rotates in a direction opposite to that of the others?

- Ans**
- 1. Jupiter
  - 2. Mercury
  - 3. Venus
  - 4. Saturn

Question Type : **MCQ**  
 Question ID : **264330140939**  
 Option 1 ID : **264330552103**  
 Option 2 ID : **264330552104**  
 Option 3 ID : **264330552105**  
 Option 4 ID : **264330552106**  
 Status : **Answered**  
 Chosen Option : **3**

**Q.7** By which process, water soluble inorganic nutrients go down into the soil horizon and get precipitated as unavailable salts?

- Ans**
- 1. Fragmentation
  - 2. Humification
  - 3. Leaching
  - 4. Decomposition

Question Type : **MCQ**  
 Question ID : **264330140913**  
 Option 1 ID : **264330552001**  
 Option 2 ID : **264330552000**  
 Option 3 ID : **264330551999**  
 Option 4 ID : **264330552002**  
 Status : **Not Answered**  
 Chosen Option : --

**Q.8** Who wrote book named "Gulamgiri" in 1873?

- Ans**
- 1. Ishwarchandra Vidyasagar
  - 2. Dayanand Saraswati
  - 3. Debendranath Tagore
  - 4. Jyotiba Phule

Question Type : **MCQ**  
 Question ID : **264330139746**  
 Option 1 ID : **264330547401**  
 Option 2 ID : **264330547400**  
 Option 3 ID : **264330547402**  
 Option 4 ID : **264330547399**  
 Status : **Not Answered**  
 Chosen Option : --

**Q.9** The minimum rate below which banks are not allowed to lend money except in cases specified by the Reserve Bank of India is called \_\_\_\_\_.

- Ans**
- 1. base rate
  - 2. reverse repo rate
  - 3. repo rate
  - 4. cash rate

Question Type : **MCQ**  
 Question ID : **264330140366**  
 Option 1 ID : **264330549843**  
 Option 2 ID : **264330549845**  
 Option 3 ID : **264330549844**  
 Option 4 ID : **264330549846**  
 Status : **Not Answered**  
 Chosen Option : --

Q.10 Which among the following dance forms of India is associated with Rajasthan?

- Ans
- 1. Bharatanatyam
  - 2. Ghoomar
  - 3. Charkula
  - 4. Odissi

Question Type : MCQ  
Question ID : 264330140753  
Option 1 ID : 264330551361  
Option 2 ID : 264330551362  
Option 3 ID : 264330551360  
Option 4 ID : 264330551359  
Status : Answered  
Chosen Option : 2

Q.11 How many laws were repealed under the Farm Laws Repeal Bill, 2021?

- Ans
- 1. Three
  - 2. Two
  - 3. Four
  - 4. One

Question Type : MCQ  
Question ID : 264330140727  
Option 1 ID : 264330551257  
Option 2 ID : 264330551256  
Option 3 ID : 264330551258  
Option 4 ID : 264330551255  
Status : Not Answered  
Chosen Option : --

Q.12 The Great Rann of Kutch falls into \_\_\_\_ region of India.

- Ans
- 1. Coastal Plains
  - 2. Thar Desert
  - 3. Northern Plain
  - 4. Eastern Ghats

Question Type : MCQ  
Question ID : 264330140916  
Option 1 ID : 264330552014  
Option 2 ID : 264330552013  
Option 3 ID : 264330552011  
Option 4 ID : 264330552012  
Status : Not Answered  
Chosen Option : --

Q.13 Formula to find unemployment rate is \_\_\_\_\_.

- Ans
- 1.  $(\text{Employed workers} / \text{Total labour force}) \times 100$
  - 2.  $(\text{Unemployed workers} / \text{Total labour force}) \times 100$
  - 3.  $(\text{Unemployed male workers} / \text{Total labour force}) \times 1000$
  - 4.  $(\text{Employed workers} / \text{Male labour force}) \times 100$

Question Type : MCQ  
Question ID : 264330140287  
Option 1 ID : 264330549528  
Option 2 ID : 264330549527  
Option 3 ID : 264330549529  
Option 4 ID : 264330549530  
Status : Answered  
Chosen Option : 2

Q.14 Mohenjodaro belongs to which of the following civilization?

- Ans
- 1. Maya civilization
  - 2. Egyptian civilization
  - 3. Indus Valley civilization
  - 4. Mesopotamian civilization

Question Type : MCQ  
Question ID : 264330140305  
Option 1 ID : 264330549602  
Option 2 ID : 264330549601  
Option 3 ID : 264330549599  
Option 4 ID : 264330549600  
Status : Answered  
Chosen Option : 4

Q.15 Ananga Pala was a ruler of which dynasty?

- Ans
- 1. Pallava Dynasty
  - 2. Rajput Dynasty
  - 3. Gurjara-Pratihara Dynasty
  - 4. Khalji Dynasty

Question Type : MCQ  
Question ID : 264330139720  
Option 1 ID : 264330547298  
Option 2 ID : 264330547297  
Option 3 ID : 264330547296  
Option 4 ID : 264330547295  
Status : Answered  
Chosen Option : 1

Q.16 Which among the following festivals mark the start of Telugu New year?

- Ans
- 1. Pongal
  - 2. Onam
  - 3. Ugadi
  - 4. Gudi Padwa

Question Type : MCQ  
Question ID : 264330140704  
Option 1 ID : 264330551165  
Option 2 ID : 264330551164  
Option 3 ID : 264330551163  
Option 4 ID : 264330551166  
Status : Answered  
Chosen Option : 3

Q.17 As of November 2022, what is the official language of India's neighbouring country China?

- Ans
- 1. Burmese
  - 2. Sinhala
  - 3. Mandarin
  - 4. Bengali

Question Type : MCQ  
Question ID : 264330140763  
Option 1 ID : 264330551400  
Option 2 ID : 264330551399  
Option 3 ID : 264330551401  
Option 4 ID : 264330551402  
Status : Answered  
Chosen Option : 3

Q.18 Which of the following government official is the ex officio chairman of Rajya Sabha?

- Ans
- 1. Prime Minister of India
  - 2. Chief Justice of India
  - 3. Vice President of India
  - 4. President of India

Question Type : MCQ  
Question ID : 264330140388  
Option 1 ID : 264330549933  
Option 2 ID : 264330549934  
Option 3 ID : 264330549932  
Option 4 ID : 264330549931  
Status : Not Answered  
Chosen Option : --



Q.19 Ustad Amjad Ali Khan is best known for which of the following instrument?

- Ans
- 1. Shehnai
  - 2. Guitar
  - 3. Santoor
  - 4. Sarod

Question Type : MCQ  
Question ID : 264330140310  
Option 1 ID : 264330549622  
Option 2 ID : 264330549619  
Option 3 ID : 264330549620  
Option 4 ID : 264330549621  
Status : Answered  
Chosen Option : 4

Q.20 The force exerted by a charged body on another charged or uncharged body is known as \_\_\_\_\_.

- Ans
- 1. electrostatic force
  - 2. pressure force
  - 3. gravitational force
  - 4. frictional force

Question Type : MCQ  
Question ID : 264330139882  
Option 1 ID : 264330547907  
Option 2 ID : 264330547910  
Option 3 ID : 264330547908  
Option 4 ID : 264330547909  
Status : Not Answered  
Chosen Option : --

Q.21 Liver gland secretes \_\_\_\_\_ that is stored in a sac called the gall bladder.

- Ans
- 1. mucous
  - 2. bile juice
  - 3. hydrochloric acid
  - 4. estrogen

Question Type : MCQ  
Question ID : 264330138984  
Option 1 ID : 264330544546  
Option 2 ID : 264330544544  
Option 3 ID : 264330544545  
Option 4 ID : 264330544543  
Status : Answered  
Chosen Option : 2

**Q.22** In 2019, the Government of India honoured Milena Salvini, an Italian-born Kathakali dancer, with which of the following award?

- Ans**
- 1. Bharat Ratna
  - 2. Padma Shri
  - 3. Padma Vibhushan
  - 4. Padma Bhushan

Question Type : **MCQ**  
 Question ID : **264330140386**  
 Option 1 ID : **264330549923**  
 Option 2 ID : **264330549924**  
 Option 3 ID : **264330549926**  
 Option 4 ID : **264330549925**  
 Status : **Not Answered**  
 Chosen Option : --

**Q.23** Super Bowl, an annual championship game of Football is held in \_\_\_\_\_ country.

- Ans**
- 1. United States of America
  - 2. Peru
  - 3. Canada
  - 4. Mexico

Question Type : **MCQ**  
 Question ID : **264330140724**  
 Option 1 ID : **264330551243**  
 Option 2 ID : **264330551246**  
 Option 3 ID : **264330551244**  
 Option 4 ID : **264330551245**  
 Status : **Not Answered**  
 Chosen Option : --

**Q.24** In January 2022, former RBI Governor, Urjit Patel has been appointed as vice-president for investment operations in \_\_\_\_\_.

- Ans**
- 1. New Development Bank
  - 2. Asian Infrastructure Investment Bank
  - 3. International Monetary Fund
  - 4. World Bank

Question Type : **MCQ**  
 Question ID : **264330139756**  
 Option 1 ID : **264330547440**  
 Option 2 ID : **264330547442**  
 Option 3 ID : **264330547441**  
 Option 4 ID : **264330547439**  
 Status : **Not Answered**  
 Chosen Option : --

**Q.25** The UMEED Scheme of \_\_\_\_\_ Rural Livelihoods Mission is providing help to the aspirations of rural women in the Union Territory, who aspire to become economically independent.

- Ans**
- 1. Jammu and Kashmir
  - 2. Andaman and Nicobar Islands
  - 3. Lakshadweep
  - 4. Daman and Diu

Question Type : **MCQ**  
Question ID : **264330140931**  
Option 1 ID : **264330552071**  
Option 2 ID : **264330552074**  
Option 3 ID : **264330552072**  
Option 4 ID : **264330552073**  
Status : **Not Answered**  
Chosen Option : --

Section : **English Language and Comprehension**

**Q.1** Select the most appropriate meaning of the given idiom.  
**In fits and starts**

- Ans**
- 1. Everywhere
  - 2. Be in difficulty
  - 3. Irregularly
  - 4. Summary

Question Type : **MCQ**  
Question ID : **264330136763**  
Option 1 ID : **264330535758**  
Option 2 ID : **264330535756**  
Option 3 ID : **264330535757**  
Option 4 ID : **264330535755**  
Status : **Answered**  
Chosen Option : **3**

**Q.2** Select the most appropriate word for the given group of words.

A calculated move to gain an advantage

- Ans
- 1. Grunt
  - 2. Gambit
  - 3. Profit
  - 4. Bonsai

Question Type : **MCQ**  
 Question ID : **264330136280**  
 Option 1 ID : **264330533899**  
 Option 2 ID : **264330533902**  
 Option 3 ID : **264330533900**  
 Option 4 ID : **264330533901**  
 Status : **Answered**  
 Chosen Option : **3**

**Q.3** Select the word segment that substitutes (replaces) the bracketed word segment correctly and completes the sentence meaningfully. Select the option 'no correction required' if the sentence is correct as given.

How (can a book such as) be written before I'd lived the incidents it described?

- Ans
- 1. may such a book
  - 2. No correction required
  - 3. could such a book
  - 4. must so a book

Question Type : **MCQ**  
 Question ID : **264330136414**  
 Option 1 ID : **264330534420**  
 Option 2 ID : **264330534422**  
 Option 3 ID : **264330534419**  
 Option 4 ID : **264330534421**  
 Status : **Answered**  
 Chosen Option : **3**

**Q.4** Select the word from the options which is similar in meaning to the bracketed word given in the sentence below.  
 There is widespread (prejudice) against workers over 45.

- Ans
- 1. Misfortune
  - 2. Concern
  - 3. Temperament
  - 4. Intolerance

Question Type : **MCQ**  
 Question ID : **264330135758**  
 Option 1 ID : **264330531913**  
 Option 2 ID : **264330531911**  
 Option 3 ID : **264330531914**  
 Option 4 ID : **264330531912**  
 Status : **Not Answered**  
 Chosen Option : **--**

**Q.5** Identify the segment that contains a grammatical error. If there is no error, select 'No error'.

It would be neat and / cleanest, a home worthy of / spending our lives together.

- Ans**
- 1. No error
  - 2. cleanest, a home worthy of
  - 3. spending our lives together.
  - 4. It would be neat and

Question Type : **MCQ**  
 Question ID : **264330136266**  
 Option 1 ID : **264330533850**  
 Option 2 ID : **264330533848**  
 Option 3 ID : **264330533849**  
 Option 4 ID : **264330533847**  
 Status : **Answered**  
 Chosen Option : **2**

**Q.6** Select the most appropriate meaning of the bracketed idiom in the given sentence.

He is (a wolf in sheep's clothing), outwardly kind but inwardly vicious!

- Ans**
- 1. Angry today about something that occurred in the past
  - 2. A situation involving a narrow escape from danger
  - 3. A dangerous person pretending harmless
  - 4. Verbally scold someone

Question Type : **MCQ**  
 Question ID : **264330136556**  
 Option 1 ID : **264330534961**  
 Option 2 ID : **264330534962**  
 Option 3 ID : **264330534959**  
 Option 4 ID : **264330534960**  
 Status : **Answered**  
 Chosen Option : **3**

**Q.7** Select the most appropriate word for the given group of words.

Urging or requesting (someone) solemnly or earnestly to do something

- Ans**
- 1. Arena
  - 2. Arrears
  - 3. Armada
  - 4. Adjure

Question Type : **MCQ**  
 Question ID : **264330136497**  
 Option 1 ID : **264330534734**  
 Option 2 ID : **264330534731**  
 Option 3 ID : **264330534733**  
 Option 4 ID : **264330534732**  
 Status : **Not Answered**  
 Chosen Option : --

**Q.8** Select the most appropriate option to fill in the blank.

Slightly \_\_\_\_\_ bitter oranges to remove the red color which covers their skins.

- Ans**
- 1. grace
  - 2. grate
  - 3. great
  - 4. grade

Question Type : **MCQ**  
 Question ID : **264330141216**  
 Option 1 ID : **264330553202**  
 Option 2 ID : **264330553200**  
 Option 3 ID : **264330553201**  
 Option 4 ID : **264330553199**  
 Status : **Answered**  
 Chosen Option : **2**

**Q.9** Identify the segment that contains a grammatical error. If there is no error, select 'No error'.  
It's good to travel and / work, most beautiful than going / to the same office each day.

- Ans**
- 1. No error
  - 2. to the same office each day.
  - 3. work, most beautiful than going
  - 4. It's good to travel and

Question Type : **MCQ**  
 Question ID : **264330135742**  
 Option 1 ID : **264330531854**  
 Option 2 ID : **264330531853**  
 Option 3 ID : **264330531852**  
 Option 4 ID : **264330531851**  
 Status : **Answered**  
 Chosen Option : **2**

**Q.10** A sentence has been given with a blank to be filled with an appropriate option. Choose the correct alternative.  
Social media is \_\_\_\_\_ to market products.

- Ans**
- 1. using
  - 2. use
  - 3. uses
  - 4. used

Question Type : **MCQ**  
 Question ID : **264330135236**  
 Option 1 ID : **264330529868**  
 Option 2 ID : **264330529870**  
 Option 3 ID : **264330529867**  
 Option 4 ID : **264330529869**  
 Status : **Answered**  
 Chosen Option : **1**

**Q.11** Choose the word that is opposite in meaning to the given word.

Plain

- Ans**
- 1. Fancy
  - 2. Crazy
  - 3. Mean
  - 4. Stupid

Question Type : **MCQ**  
 Question ID : **264330135527**  
 Option 1 ID : **264330531012**  
 Option 2 ID : **264330531011**  
 Option 3 ID : **264330531013**  
 Option 4 ID : **264330531014**  
 Status : **Not Answered**  
 Chosen Option : **--**

**Q.12** Select the most appropriate synonym of the given word.

Wealthy

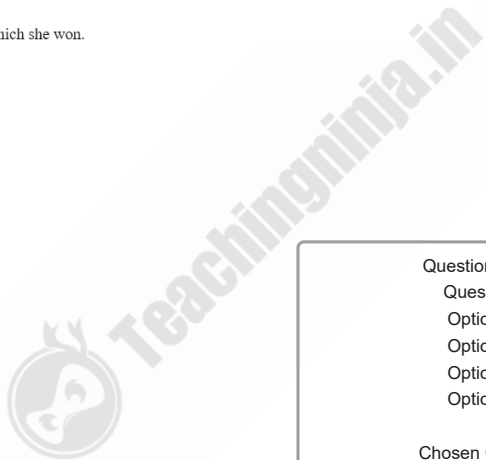
- Ans**
- 1. Affluent
  - 2. Depressed
  - 3. Poor
  - 4. Lacking

Question Type : **MCQ**  
 Question ID : **264330136151**  
 Option 1 ID : **264330533404**  
 Option 2 ID : **264330533406**  
 Option 3 ID : **264330533403**  
 Option 4 ID : **264330533405**  
 Status : **Answered**  
 Chosen Option : **1**

**Q.13** Select the word from the options which is exactly opposite in meaning to the bracketed word given in the sentence below.

She relished our (arguments), most of which she won.

- Ans**
- 1. altercation
  - 2. negotiations
  - 3. feud
  - 4. agreements



Question Type : **MCQ**  
 Question ID : **264330135734**  
 Option 1 ID : **264330531820**  
 Option 2 ID : **264330531822**  
 Option 3 ID : **264330531819**  
 Option 4 ID : **264330531821**  
 Status : **Not Answered**  
 Chosen Option : **--**

**Q.14** Fill in the blank with the most appropriate option.

Can we reschedule the meeting? I \_\_\_\_\_.

- Ans**
- 1. have a headache
  - 2. get a headache
  - 3. give a headache
  - 4. take a headache

Question Type : **MCQ**  
 Question ID : **264330135739**  
 Option 1 ID : **264330531842**  
 Option 2 ID : **264330531840**  
 Option 3 ID : **264330531839**  
 Option 4 ID : **264330531841**  
 Status : **Answered**  
 Chosen Option : **1**



**Q.15** Select the most appropriate option to fill in the blank.

What customs officials are asking for are not things that \_\_\_\_\_ their own personal titles.

- Ans**
- 1. advocate
  - 2. accede
  - 3. acerbic
  - 4. aggrandize

Question Type : **MCQ**  
 Question ID : **264330135670**  
 Option 1 ID : **264330531575**  
 Option 2 ID : **264330531577**  
 Option 3 ID : **264330531578**  
 Option 4 ID : **264330531576**  
 Status : **Not Answered**  
 Chosen Option : --

**Q.16** Select the most appropriate option to substitute the bracketed segment in the given sentence. If there is no need to substitute it, select 'no substitution required'.

If the dog (is allow complete freedom), it can assume that any toy is acceptable for play.

- Ans**
- 1. No substitution required
  - 2. is allowed complete freedom
  - 3. allowed completely freedom
  - 4. are allowed complete free

Question Type : **MCQ**  
 Question ID : **264330136748**  
 Option 1 ID : **264330535702**  
 Option 2 ID : **264330535699**  
 Option 3 ID : **264330535700**  
 Option 4 ID : **264330535701**  
 Status : **Answered**  
 Chosen Option : **2**

**Q.17** Identify the segment that contains a grammatical error. If there is no error, select 'No error'.

I had been angry the whole / evening, so she rubs brahmi / oil into my scalp to cool my brain.

- Ans**
- 1. evening, so she rubs brahmi
  - 2. oil into my scalp to cool my brain.
  - 3. I had been angry the whole
  - 4. No error

Question Type : **MCQ**  
 Question ID : **264330135743**  
 Option 1 ID : **264330531856**  
 Option 2 ID : **264330531857**  
 Option 3 ID : **264330531855**  
 Option 4 ID : **264330531858**  
 Status : **Answered**  
 Chosen Option : **3**

**Q.18** Select the wrongly spelt word.

- Ans**
- 1. Philanthropy
  - 2. Philistine
  - 3. Phlegmatic
  - 4. Pausity

Question Type : **MCQ**  
 Question ID : **264330136558**  
 Option 1 ID : **264330534967**  
 Option 2 ID : **264330534968**  
 Option 3 ID : **264330534969**  
 Option 4 ID : **264330534970**  
 Status : **Not Answered**  
 Chosen Option : --

**Q.19** Improve the underlined part of the sentence. Choose 'No improvement' as an answer if the sentence is grammatically correct.

We was installing wood flooring throughout our house.

- Ans**
- 1. No improvement
  - 2. installs wooden
  - 3. installed wood
  - 4. installs wood

Question Type : **MCQ**  
 Question ID : **264330135233**  
 Option 1 ID : **264330529858**  
 Option 2 ID : **264330529856**  
 Option 3 ID : **264330529855**  
 Option 4 ID : **264330529857**  
 Status : **Answered**  
 Chosen Option : 3

**Q.20** Choose the incorrectly spelt word.

- Ans**
- 1. Shopping
  - 2. Trust
  - 3. Wave
  - 4. Forciing

Question Type : **MCQ**  
 Question ID : **264330135557**  
 Option 1 ID : **264330531129**  
 Option 2 ID : **264330531130**  
 Option 3 ID : **264330531128**  
 Option 4 ID : **264330531127**  
 Status : **Answered**  
 Chosen Option : 4

**Comprehension:**

In the following passage some words have been deleted. Fill in the blanks with the help of the alternatives given. Select the most appropriate option for each number.

At the core of the (1) \_\_\_\_\_ lies the fierce (2) \_\_\_\_\_ between two branches of the Kuru dynasty, the Pandavas and the Kauravas. The lifelong struggle (3) \_\_\_\_\_ the cousins for the throne of Hastinapur culminates (4) \_\_\_\_\_ bloody battle of Kurukshetra, in which (5) \_\_\_\_\_ kings of that period participated and perished.

**SubQuestion No : 21**

**Q.21** Select the most appropriate option to fill in the blank No. 1.

- Ans**
- 1. bright
  - 2. exercise
  - 3. dull
  - 4. epic

Question Type : **MCQ**  
 Question ID : **264330135724**  
 Option 1 ID : **264330531779**  
 Option 2 ID : **264330531780**  
 Option 3 ID : **264330531781**  
 Option 4 ID : **264330531782**  
 Status : **Answered**  
 Chosen Option : **4**

**Comprehension:**

In the following passage some words have been deleted. Fill in the blanks with the help of the alternatives given. Select the most appropriate option for each number.

At the core of the (1) \_\_\_\_\_ lies the fierce (2) \_\_\_\_\_ between two branches of the Kuru dynasty, the Pandavas and the Kauravas. The lifelong struggle (3) \_\_\_\_\_ the cousins for the throne of Hastinapur culminates (4) \_\_\_\_\_ bloody battle of Kurukshetra, in which (5) \_\_\_\_\_ kings of that period participated and perished.

**SubQuestion No : 22**

**Q.22** Select the most appropriate option to fill in the blank No. 2.

- Ans**
- 1. commute
  - 2. hostile
  - 3. friendship
  - 4. rivalry

Question Type : **MCQ**  
 Question ID : **264330135725**  
 Option 1 ID : **264330531784**  
 Option 2 ID : **264330531786**  
 Option 3 ID : **264330531783**  
 Option 4 ID : **264330531785**  
 Status : **Answered**  
 Chosen Option : **4**

**Comprehension:**

In the following passage some words have been deleted. Fill in the blanks with the help of the alternatives given. Select the most appropriate option for each number.

At the core of the (1) \_\_\_\_\_ lies the fierce (2) \_\_\_\_\_ between two branches of the Kuru dynasty, the Pandavas and the Kauravas. The lifelong struggle (3) \_\_\_\_\_ the cousins for the throne of Hastinapur culminates (4) \_\_\_\_\_ bloody battle of Kurukshetra, in which (5) \_\_\_\_\_ kings of that period participated and perished.

**SubQuestion No : 23**

**Q.23** Select the most appropriate option to fill in the blank No. 3.

- Ans**
- 1. inside
  - 2. amongst
  - 3. along
  - 4. between

Question Type : **MCQ**  
 Question ID : **264330135726**  
 Option 1 ID : **264330531789**  
 Option 2 ID : **264330531787**  
 Option 3 ID : **264330531790**  
 Option 4 ID : **264330531788**  
 Status : **Answered**  
 Chosen Option : **2**

**Comprehension:**

In the following passage some words have been deleted. Fill in the blanks with the help of the alternatives given. Select the most appropriate option for each number.

At the core of the (1) \_\_\_\_\_ lies the fierce (2) \_\_\_\_\_ between two branches of the Kuru dynasty, the Pandavas and the Kauravas. The lifelong struggle (3) \_\_\_\_\_ the cousins for the throne of Hastinapur culminates (4) \_\_\_\_\_ bloody battle of Kurukshetra, in which (5) \_\_\_\_\_ kings of that period participated and perished.

**SubQuestion No : 24**

**Q.24** Select the most appropriate option to fill in the blank No. 4.

- Ans**
- 1. inside
  - 2. in that
  - 3. in to
  - 4. in the

Question Type : **MCQ**  
 Question ID : **264330135727**  
 Option 1 ID : **264330531794**  
 Option 2 ID : **264330531792**  
 Option 3 ID : **264330531793**  
 Option 4 ID : **264330531791**  
 Status : **Answered**  
 Chosen Option : **4**

**Comprehension:**

In the following passage some words have been deleted. Fill in the blanks with the help of the alternatives given. Select the most appropriate option for each number.

At the core of the (1) \_\_\_\_\_ lies the fierce (2) \_\_\_\_\_ between two branches of the Kuru dynasty, the Pandavas and the Kauravas. The lifelong struggle (3) \_\_\_\_\_ the cousins for the throne of Hastinapur culminates (4) \_\_\_\_\_ bloody battle of Kurukshetra, in which (5) \_\_\_\_\_ kings of that period participated and perished.

**SubQuestion No : 25**

**Q.25** Select the most appropriate option to fill in the blank No. 5.

- Ans**
- 1. most
  - 2. each
  - 3. total
  - 4. almost

Question Type : **MCQ**  
Question ID : **264330135728**  
Option 1 ID : **264330531796**  
Option 2 ID : **264330531797**  
Option 3 ID : **264330531798**  
Option 4 ID : **264330531795**  
Status : **Answered**  
Chosen Option : **1**