



SSC MTS **SHIFT – 2 (14-06-2023)**

- ★ **Latest Govt Job updates**
- ★ **Private Job updates**
- ★ **Free Mock tests available**

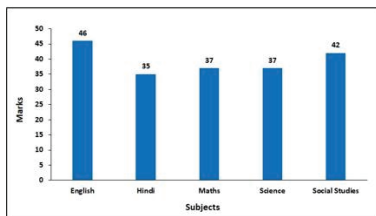
Visit - teachingninja.in

Multi Tasking Non Technical Staff and Havalдар CBIC and CBN Examination 2022

| | |
|----------------|---|
| Roll Number | |
| Candidate Name | |
| Venue Name | |
| Exam Date | 14/06/2023 |
| Exam Time | 12:00 PM - 2:00 PM |
| Subject | MTS Non Tech Havalдар CBIC and CBN Examination 2022 |

Section : Numerical and Mathematical Ability

Q.1 Marks scored by Reena are plotted on the graph. Calculate how much more marks she scored in science, than hindi?



- Ans
- 1. 3
 - 2. 4
 - 3. 2
 - 4. 5

Question Type : MCQ

Question ID : 264330133752

Option 1 ID : 264330524032

Option 2 ID : 264330524033

Option 3 ID : 264330524031

Option 4 ID : 264330524034

Status : Answered

Chosen Option : 3

Q.2 The sum of 11 numbers is 660. Find their average.

- Ans
- 1. 10
 - 2. 80
 - 3. 60
 - 4. 66

Question Type : MCQ
Question ID : 264330133738
Option 1 ID : 264330523978
Option 2 ID : 264330523977
Option 3 ID : 264330523975
Option 4 ID : 264330523976
Status : Answered
Chosen Option : 3

Q.3 Rs. 30000 is lent at compound interest (compounded annually) for 3 years. If the rate of interest is 10 percent for the first year, 20 percent for the second year and 30 percent for the third year, then what will be the total compound interest?

- Ans
- 1. Rs. 21480
 - 2. Rs. 20560
 - 3. Rs. 22580
 - 4. Rs. 19270

Question Type : MCQ
Question ID : 264330137656
Option 1 ID : 264330539232
Option 2 ID : 264330539233
Option 3 ID : 264330539234
Option 4 ID : 264330539231
Status : Answered
Chosen Option : 1



Q.4 The table given below shows the production of bike by two companies in 6 years.

| Years | A | B |
|-------|-----|-----|
| P | 300 | 550 |
| Q | 150 | 400 |
| R | 250 | 300 |
| S | 500 | 100 |
| T | 350 | 50 |
| U | 200 | 150 |

J1 = The value of average production of bike by A in year P, Q, R and S.

J2 = The value of average production of bike by B in year T and U.

What is the value of $(J1/J2)$?

- Ans
- 1. 4
 - 2. 1
 - 3. 2
 - 4. 3

Question Type : MCQ

Question ID : 264330137341

Option 1 ID : 264330537993

Option 2 ID : 264330537992

Option 3 ID : 264330537991

Option 4 ID : 264330537994

Status : Answered

Chosen Option : 4

Q.5 Find the average speed of a boy if he walks $\frac{1}{6}$ th distance with a speed of 5 km/hr and rides a bike to cover the remaining distance at a speed of 25 km/hr. The total distance is 60 km.

- Ans
- 1. 12 km/hr
 - 2. 15 km/hr
 - 3. 20 km/hr
 - 4. 13 km/hr

Question Type : MCQ

Question ID : 264330138373

Option 1 ID : 264330542102

Option 2 ID : 264330542099

Option 3 ID : 264330542100

Option 4 ID : 264330542101

Status : Answered

Chosen Option : 2

Q.6 If at compound interest a certain sum becomes 2 times of itself in 5 years, then in how many years it will become 8 times of itself?

- Ans
- 1. 20 years
 - 2. 12 years
 - 3. 18 years
 - 4. 15 years

Question Type : MCQ
Question ID : 264330137332
Option 1 ID : 264330537957
Option 2 ID : 264330537955
Option 3 ID : 264330537956
Option 4 ID : 264330537958
Status : Answered
Chosen Option : 4

Q.7 What is the value of $\frac{(55 + 88) \div [(3 \times 5 + 4) - 64 \div 8]}{28 \times 7 \div 56 \times 4 \text{ of } (91 - 78)}$?

- Ans
- 1. 1/14
 - 2. 1/13
 - 3. 1/12
 - 4. 1/11

Question Type : MCQ
Question ID : 264330137340
Option 1 ID : 264330537987
Option 2 ID : 264330537988
Option 3 ID : 264330537989
Option 4 ID : 264330537990
Status : Answered
Chosen Option : 1

Q.8 The radius of a right circular cylinder is 7 cm. Its height is thrice its radius. What is the curved surface area of the cylinder?

- Ans
- 1. 924 cm²
 - 2. 666 cm²
 - 3. 724 cm²
 - 4. 264 cm²

Question Type : MCQ
Question ID : 264330138411
Option 1 ID : 264330542252
Option 2 ID : 264330542253
Option 3 ID : 264330542254
Option 4 ID : 264330542251
Status : Answered
Chosen Option : 1

Q.9 In a company of 6400 employees the ratio of male and female employees is 5:3. What will be the number of male employees in the company?

- Ans**
- 1. 4500
 - 2. 3500
 - 3. 3000
 - 4. 4000

Question Type : **MCQ**
Question ID : 264330133744
Option 1 ID : 264330524000
Option 2 ID : 264330524002
Option 3 ID : 264330524001
Option 4 ID : 264330523999
Status : **Answered**
Chosen Option : 4

Q.10 Rahul can complete his work in 7 days and Raj can complete the work in 4 days. How many total days will they take to complete the work together?

- Ans**
- 1. $\frac{28}{11}$ days
 - 2. $\frac{14}{11}$ days
 - 3. $\frac{28}{13}$ days
 - 4. $\frac{15}{11}$ days



Question Type : **MCQ**
Question ID : 264330135101
Option 1 ID : 264330529339
Option 2 ID : 264330529341
Option 3 ID : 264330529340
Option 4 ID : 264330529342
Status : **Answered**
Chosen Option : 1

Q.11 If Ashish can complete $\frac{2}{3}$ rd the work in 22 days. In how many days will he complete the whole work?

- Ans
- 1. 22 days
 - 2. 33 days
 - 3. 30 days
 - 4. 15 days

Question Type : MCQ
Question ID : 264330138406
Option 1 ID : 264330542232
Option 2 ID : 264330542231
Option 3 ID : 264330542234
Option 4 ID : 264330542233
Status : Answered
Chosen Option : 2

Q.12 Find the third proportional of two numbers 6 and 24.

- Ans
- 1. 84
 - 2. 94
 - 3. 96
 - 4. 86

Question Type : MCQ
Question ID : 264330133745
Option 1 ID : 264330524005
Option 2 ID : 264330524006
Option 3 ID : 264330524004
Option 4 ID : 264330524003
Status : Answered
Chosen Option : 3

Q.13 The time in which a train 1800 m long, travelling at the speed of 30 kmph, will pass a signal pole is:

- Ans
- 1. 220 seconds
 - 2. 200 seconds
 - 3. 250 seconds
 - 4. 216 seconds

Question Type : MCQ
Question ID : 264330133748
Option 1 ID : 264330524016
Option 2 ID : 264330524018
Option 3 ID : 264330524017
Option 4 ID : 264330524015
Status : Answered
Chosen Option : 4

Q.14 By selling 50 items, a shopkeeper gains the selling price of 10 items. What is his gain percent?

- Ans
- 1. 25%
 - 2. 15%
 - 3. 10%
 - 4. 40%

Question Type : MCQ
Question ID : 264330135115
Option 1 ID : 264330529395
Option 2 ID : 264330529398
Option 3 ID : 264330529396
Option 4 ID : 264330529397
Status : Answered
Chosen Option : 1

Q.15 An article is bought for Rs. 1600 and sold for Rs. 3200. Find the gain percent.

- Ans
- 1. 75%
 - 2. 100%
 - 3. 50%
 - 4. 90%

Question Type : MCQ
Question ID : 264330133742
Option 1 ID : 264330523992
Option 2 ID : 264330523994
Option 3 ID : 264330523993
Option 4 ID : 264330523991
Status : Answered
Chosen Option : 2

Q.16 Calculate the total surface area of the cube of side 45 m.

- Ans
- 1. 12150 m^2
 - 2. 1213 m^2
 - 3. 2341 m^2
 - 4. 1342 m^2

Question Type : MCQ
Question ID : 264330135105
Option 1 ID : 264330529355
Option 2 ID : 264330529358
Option 3 ID : 264330529357
Option 4 ID : 264330529356
Status : Answered
Chosen Option : 1

Q.17 What will be the LCM of 54 and 48?

- Ans
- 1. 423
 - 2. 412
 - 3. 456
 - 4. 432

Question Type : MCQ
Question ID : 264330138762
Option 1 ID : 264330543656
Option 2 ID : 264330543655
Option 3 ID : 264330543658
Option 4 ID : 264330543657
Status : Answered
Chosen Option : 4

Q.18 Shopkeeper gave 30% discount on the article having marked price Rs.3500. What will be the selling price of the article?

- Ans
- 1. Rs.2400
 - 2. Rs.2450
 - 3. Rs.3000
 - 4. Rs.1500

Question Type : MCQ
Question ID : 264330133743
Option 1 ID : 264330523995
Option 2 ID : 264330523996
Option 3 ID : 264330523997
Option 4 ID : 264330523998
Status : Answered
Chosen Option : 2

Q.19 What is the value of A if $2 + 4 + (A + 6) \times 2 = 16/7$

- Ans
- 1. 22
 - 2. 21
 - 3. 20
 - 4. 23

Question Type : MCQ
Question ID : 264330133736
Option 1 ID : 264330523968
Option 2 ID : 264330523969
Option 3 ID : 264330523970
Option 4 ID : 264330523967
Status : Answered
Chosen Option : 1

Q.20 In an exam, out of total number of appeared student's 87 percent students passed, and 3250 students failed. What is the total number of students appeared in the exam?

- Ans**
- 1. 26800
 - 2. 25000
 - 3. 22500
 - 4. 28000

Question Type : **MCQ**
Question ID : 264330137327
Option 1 ID : 264330537935
Option 2 ID : 264330537938
Option 3 ID : 264330537936
Option 4 ID : 264330537937
Status : **Answered**
Chosen Option : 2

Section : Reasoning Ability and Problem Solving

Q.1 In a certain code language, 'SPEEDS' is coded as 'URGGFU'. What is the code for 'SPOKEN' in that code language?

- Ans**
- 1. URQMGP
 - 2. URPNGP
 - 3. URQNGP
 - 4. URQNGQ

Question Type : **MCQ**
Question ID : 264330138481
Option 1 ID : 264330542531
Option 2 ID : 264330542533
Option 3 ID : 264330542534
Option 4 ID : 264330542532
Status : **Answered**
Chosen Option : 1

Q.2 Seven people P, R, S, T, U, V, and W are standing in a straight row facing North. R is standing second to the left of T. T is standing third to the left of W. R and S are not standing at either of the corners. U is the immediate neighbour of V. V is standing in the second position from the right corner. Who is standing to the immediate left of R?

- Ans**
- 1. V
 - 2. U
 - 3. P
 - 4. S

Question Type : **MCQ**
Question ID : 264330133453
Option 1 ID : 264330522846
Option 2 ID : 264330522844
Option 3 ID : 264330522845
Option 4 ID : 264330522843
Status : **Answered**
Chosen Option : 3

Q.3 Two Statements are given followed by two conclusions numbered I and II. Assuming the statements to be true, even if they seem to be at variance with commonly known facts, decide which of the conclusions logically follow(s) from the statements.

Statements:

Most red are yellow.
Some yellow are green.

Conclusions:

I. Some green are yellow.
II. Some green are red.

- Ans**
- 1. Only conclusion II follows
 - 2. Only conclusion I follows
 - 3. Neither conclusion I nor II follows
 - 4. Both conclusions I and II follow

Question Type : MCQ
Question ID : 264330133456
Option 1 ID : 264330522856
Option 2 ID : 264330522855
Option 3 ID : 264330522858
Option 4 ID : 264330522857
Status : Answered
Chosen Option : 2



Q.4 Select the option figure in which the given figure is embedded. (rotation is NOT allowed)



Ans

✓ 1.



✗ 2.



✗ 3.



✗ 4.



Teachingninja.in

Question Type : MCQ

Question ID : 264330137384

Option 1 ID : 264330538164

Option 2 ID : 264330538165

Option 3 ID : 264330538166

Option 4 ID : 264330538163

Status : Answered

Chosen Option : 1

Q.5 Select the option that is related to the sixth term in the same way as the first term is related to the second term and third term is related to fourth term.

FGH : GJM :: AKC : BNH :: ? : UUV

- Ans**
- ✓ 1. TRQ
 - ✗ 2. TTQ
 - ✗ 3. TSQ
 - ✗ 4. TRR

Question Type : MCQ

Question ID : 264330137516

Option 1 ID : 264330538671

Option 2 ID : 264330538674

Option 3 ID : 264330538672

Option 4 ID : 264330538673

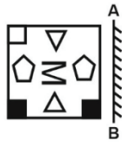
Status : Answered

Chosen Option : 1



Teachingninja.in

Q.6 If a mirror is placed on the line AB, then out of the option figures which figure will be the right image of the question figure?



Ans

X 1.




X 2.



✓ 3.



X 4.



Teachingninja.in

Question Type : MCQ

Question ID : 264330137385

Option 1 ID : 264330538169

Option 2 ID : 264330538168

Option 3 ID : 264330538170

Option 4 ID : 264330538167

Status : Answered

Chosen Option : 3

Q.7 Select the option that is related to the third letter cluster in the same way as the second letter cluster is related to the first letter cluster.

HSFM : KPIJ :: QDRC : ?

- Ans
- 1. TZAU
 - 2. TAZU
 - 3. TAUZ
 - 4. TUAZ

Question Type : MCQ
Question ID : 264330133447
Option 1 ID : 264330522820
Option 2 ID : 264330522822
Option 3 ID : 264330522821
Option 4 ID : 264330522819
Status : Answered
Chosen Option : 3

Q.8 In the following question, select the missing number of the given series.

2, 20, 38, 56, 74, ?

- Ans
- 1. 91
 - 2. 92
 - 3. 88
 - 4. 90

Question Type : MCQ
Question ID : 264330137378
Option 1 ID : 264330538142
Option 2 ID : 264330538139
Option 3 ID : 264330538141
Option 4 ID : 264330538140
Status : Answered
Chosen Option : 2

Q.9 In a certain code language, 'RUE' is written as 'IFV'. How will 'WRY' be written in that language?

- Ans
- 1. BID
 - 2. DJB
 - 3. DIC
 - 4. DIB

Question Type : MCQ
Question ID : 264330137814
Option 1 ID : 264330539863
Option 2 ID : 264330539866
Option 3 ID : 264330539865
Option 4 ID : 264330539864
Status : Answered
Chosen Option : 4

Q.10 Select the option that is related to the sixth number in the same way as the first number is related to the second number and third number is related to fourth number.

4 : 63 :: 7 : 342 :: ? : 728

Ans ✓ 1. 9

✗ 2. 11

✗ 3. 13

✗ 4. 8

Question Type : MCQ

Question ID : 264330137380

Option 1 ID : 264330538148

Option 2 ID : 264330538149

Option 3 ID : 264330538150

Option 4 ID : 264330538147


Status : Answered

Chosen Option : 1

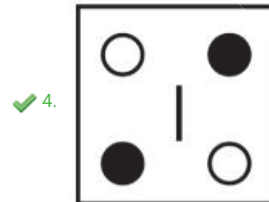
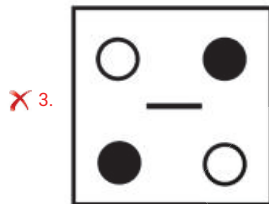
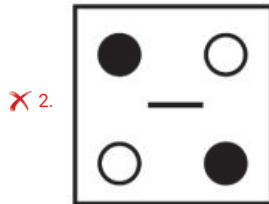
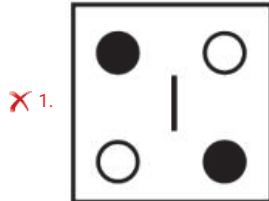


Teachingninja.in

Q.11 Select the option figure that will replace the question mark (?) in the figure given below to complete the pattern.
(rotation is not allowed)



Ans



Question Type : MCQ
 Question ID : 264330133465
 Option 1 ID : 264330522894
 Option 2 ID : 264330522891
 Option 3 ID : 264330522892
 Option 4 ID : 264330522893
 Status : Answered
 Chosen Option : 4

Q.12 Which of the following numbers will replace the question mark (?) in the given series?

85, 84, 82, 79, 75, 70, 64, ?

- Ans
- 1. 76
 - 2. 59
 - 3. 57
 - 4. 82

Question Type : MCQ

Question ID : 264330133458

Option 1 ID : 264330522865

Option 2 ID : 264330522863

Option 3 ID : 264330522864

Option 4 ID : 264330522866

Status : Answered

Chosen Option : 3

Q.13 Which two numbers should be interchanged to make the given equation correct?

$$8 \times 3 - 12 \div 6 + 18 = 33$$

- Ans
- 1. 12 and 33
 - 2. 12 and 18
 - 3. 18 and 33
 - 4. 8 and 3

Question Type : MCQ

Question ID : 264330133461

Option 1 ID : 264330522878

Option 2 ID : 264330522875

Option 3 ID : 264330522876

Option 4 ID : 264330522877

Status : Answered

Chosen Option : 2



Q.14 Two Statements are given followed by two conclusions numbered I and II. Assuming the statements to be true, even if they seem to be at variance with commonly known facts, decide which of the conclusions logically follow(s) from the statements.

Statements:

- Some shows are good.
- Some movies are good.

Conclusions:

- I. Some good are movies.
- II. Some good are shows.

- Ans
- 1. Only conclusion I follows
 - 2. Neither conclusion I nor II follows
 - 3. Both conclusions I and II follow
 - 4. Only conclusion II follows

Question Type : MCQ
Question ID : 264330133455
Option 1 ID : 264330522851
Option 2 ID : 264330522854
Option 3 ID : 264330522853
Option 4 ID : 264330522852
Status : Answered
Chosen Option : 3

Q.15 In a certain code language, 'DMQPD' is written as 'ENQQE'. How will 'XAGIV' be written in that language?

- Ans
- 1. YBWJG
 - 2. YBGJW
 - 3. YBGIW
 - 4. YJBGW

Question Type : MCQ
Question ID : 264330133370
Option 1 ID : 264330522514
Option 2 ID : 264330522513
Option 3 ID : 264330522512
Option 4 ID : 264330522511
Status : Answered
Chosen Option : 2

Q.16 Six people are sitting around a circular table facing the centre. Only D is between P and S. Only X is between M and L. S is sitting to the immediate right of M. Who is sitting immediate right to P?

- Ans**
- 1. S
 - 2. L
 - 3. M
 - 4. D

Question Type : MCQ
Question ID : 264330133452
Option 1 ID : 264330522842
Option 2 ID : 264330522841
Option 3 ID : 264330522840
Option 4 ID : 264330522839
Status : Answered
Chosen Option : 2

Q.17 If A denotes 'addition', B denotes 'multiplication', C denotes 'subtraction', and D denotes 'division', then what will be the value of the following equation?
(16 D 4) A 7 C 5 = ?

- Ans**
- 1. 6
 - 2. 8
 - 3. 5
 - 4. 3

Question Type : MCQ
Question ID : 264330137577
Option 1 ID : 264330538917
Option 2 ID : 264330538918
Option 3 ID : 264330538915
Option 4 ID : 264330538916
Status : Answered
Chosen Option : 1

Q.18 Which of the following letters will replace the question mark (?) in the given series?

F, G, I, L, P, U, A, ?

- Ans**
- 1. J
 - 2. G
 - 3. H
 - 4. I

Question Type : MCQ
Question ID : 264330133446
Option 1 ID : 264330522817
Option 2 ID : 264330522818
Option 3 ID : 264330522816
Option 4 ID : 264330522815
Status : Answered
Chosen Option : 3

Q.19 Study the given pattern carefully and select the number that can replace the question mark (?) in it.

First row- 74, 85, 96

Second row- 67, 78, 89

Third row- 84, 95, ?

Ans 1. 246

2. 106

3. 124

4. 112

Question Type : MCQ

Question ID : 264330133460

Option 1 ID : 264330522873

Option 2 ID : 264330522872

Option 3 ID : 264330522871

Option 4 ID : 264330522874

Status : Answered

Chosen Option : 2

Q.20 Seven friends Pradeep, Ashu, Rishi, Sam, Tina, Uma and Vicky's score in an exam are given. No two students get the same marks. Pradeep scored less than Vicky but more than Ashu. Rishi and Tina scored the highest and least marks but not necessarily in the same order. Uma's score was less than only Rishi's score. Sam's score was higher than only one person. Whose marks were in between the marks of Ashu and Tina?

Ans 1. Vicky

2. Sam

3. Uma

4. Pradeep

Question Type : MCQ

Question ID : 264330133454

Option 1 ID : 264330522850

Option 2 ID : 264330522849

Option 3 ID : 264330522847

Option 4 ID : 264330522848

Status : Answered

Chosen Option : 2

Section : General Awareness

Q.1 When was the Gandhi-Irwin pact signed?

- Ans
- 1. 1928
 - 2. 1935
 - 3. 1931
 - 4. 1929

Question Type : MCQ
Question ID : 264330137751
Option 1 ID : 264330539614
Option 2 ID : 264330539612
Option 3 ID : 264330539613
Option 4 ID : 264330539611
Status : Answered
Chosen Option : 3

Q.2 The Weapons of Mass Destruction and their Delivery Systems (Prohibition of Unlawful Activities) Amendment Bill, 2022 belongs to _____ Ministry of Indian Government.

- Ans
- 1. Finance
 - 2. Civil Aviation
 - 3. External Affairs
 - 4. Defence

Question Type : MCQ
Question ID : 264330133906
Option 1 ID : 264330524647
Option 2 ID : 264330524649
Option 3 ID : 264330524650
Option 4 ID : 264330524648
Status : Answered
Chosen Option : 3

Q.3 Which is the first month in Islamic lunar calendar?

- Ans
- 1. Shawwal
 - 2. Safar
 - 3. Ramadan
 - 4. Muharram

Question Type : MCQ
Question ID : 264330137388
Option 1 ID : 264330538182
Option 2 ID : 264330538180
Option 3 ID : 264330538181
Option 4 ID : 264330538179
Status : Answered
Chosen Option : 3

Q.4 Krishna River flows through _____ state of India.

- Ans
- 1. Odisha
 - 2. Karnataka
 - 3. Kerala
 - 4. Tamil Nadu

Question Type : MCQ
Question ID : 264330133916
Option 1 ID : 264330524690
Option 2 ID : 264330524688
Option 3 ID : 264330524687
Option 4 ID : 264330524689
Status : Answered
Chosen Option : 2

Q.5 Kitab ul-Hind, an Arabic text was written by _____.

- Ans
- 1. Ibn Battuta
 - 2. Ziauddin Barani
 - 3. Al- Biruni
 - 4. Sultan Mahmud

Question Type : MCQ
Question ID : 264330137409
Option 1 ID : 264330538265
Option 2 ID : 264330538266
Option 3 ID : 264330538264
Option 4 ID : 264330538263
Status : Answered
Chosen Option : 3

Q.6 As per the Preamble of Indian constitution, India is a _____ country.

- Ans
- 1. Republic
 - 2. Aristocratic
 - 3. Religious
 - 4. Liberal

Question Type : MCQ
Question ID : 264330133926
Option 1 ID : 264330524729
Option 2 ID : 264330524728
Option 3 ID : 264330524727
Option 4 ID : 264330524730
Status : Answered
Chosen Option : 1

Q.7 What is the term of State legislative assembly in India as per Indian constitution?

- Ans
- 1. 3 years
 - 2. 4 years
 - 3. 7 years
 - 4. 5 years

Question Type : MCQ
Question ID : 264330133927
Option 1 ID : 264330524731
Option 2 ID : 264330524732
Option 3 ID : 264330524734
Option 4 ID : 264330524733
Status : Answered
Chosen Option : 4

Q.8 Which among the following acids makes the pH of vinegar acidic?

- Ans
- 1. Acetic acid
 - 2. Linoleic acid
 - 3. Tartaric acid
 - 4. Citric acid

Question Type : MCQ
Question ID : 264330133912
Option 1 ID : 264330524673
Option 2 ID : 264330524674
Option 3 ID : 264330524672
Option 4 ID : 264330524671
Status : Answered
Chosen Option : 1

Q.9 The average weather pattern taken over a long time, say 25 years is called _____ of the place.

- Ans
- 1. ecology
 - 2. environment
 - 3. landform
 - 4. climate

Question Type : MCQ
Question ID : 264330137402
Option 1 ID : 264330538237
Option 2 ID : 264330538236
Option 3 ID : 264330538235
Option 4 ID : 264330538238
Status : Answered
Chosen Option : 4

Q.10 Which among the following was NOT written by Aravind Adiga?

- Ans
- 1. The Cost of Living
 - 2. The White Tiger
 - 3. Last Man in Tower
 - 4. Amnesty

Question Type : MCQ
Question ID : 264330137936
Option 1 ID : 264330540354
Option 2 ID : 264330540351
Option 3 ID : 264330540352
Option 4 ID : 264330540353
Status : Not Answered
Chosen Option : --

Q.11 According to the 2011 census, what is the approximate female literacy rate?

- Ans
- 1. 85%
 - 2. 65%
 - 3. 55%
 - 4. 95%

Question Type : MCQ
Question ID : 264330137697
Option 1 ID : 264330539396
Option 2 ID : 264330539398
Option 3 ID : 264330539397
Option 4 ID : 264330539395
Status : Answered
Chosen Option : 2

Q.12 The materials, through which things cannot be seen, are called _____.

- Ans
- 1. translucent materials
 - 2. transparent materials
 - 3. pale materials
 - 4. opaque materials

Question Type : MCQ
Question ID : 264330137403
Option 1 ID : 264330538240
Option 2 ID : 264330538239
Option 3 ID : 264330538242
Option 4 ID : 264330538241
Status : Answered
Chosen Option : 4

Q.13 In cricket, hitting the ball over the boundary on the full equals _____ runs.

- Ans
- 1. 4
 - 2. 2
 - 3. 6
 - 4. 3

Question Type : MCQ
Question ID : 264330133928
Option 1 ID : 264330524737
Option 2 ID : 264330524735
Option 3 ID : 264330524738
Option 4 ID : 264330524736
Status : Answered
Chosen Option : 3

Q.14 In which of the following articles, "Protection against arrest and detention" is mentioned?

- Ans
- 1. Article 20
 - 2. Article 22
 - 3. Article 24
 - 4. Article 18

Question Type : MCQ
Question ID : 264330134606
Option 1 ID : 264330527381
Option 2 ID : 264330527380
Option 3 ID : 264330527382
Option 4 ID : 264330527379
Status : Answered
Chosen Option : 2

Q.15 The British Parliament passed the Regulating Act in _____.

- Ans
- 1. 1775
 - 2. 1876
 - 3. 1877
 - 4. 1773

Question Type : MCQ
Question ID : 264330137411
Option 1 ID : 264330538271
Option 2 ID : 264330538272
Option 3 ID : 264330538273
Option 4 ID : 264330538274
Status : Not Answered
Chosen Option : --

Q.16 How many Bronze medals were won by India at Tokyo Olympics 2020 (played in 2021)?

- Ans
- 1. Three
 - 2. Five
 - 3. Six
 - 4. Four

Question Type : MCQ
Question ID : 264330137391
Option 1 ID : 264330538191
Option 2 ID : 264330538193
Option 3 ID : 264330538194
Option 4 ID : 264330538192
Status : Not Answered
Chosen Option : --

Q.17 Who among the following sang the famous Bollywood song "Ae Dil Hai Mushkil"?

- Ans
- 1. Sukhbir
 - 2. Arijit Singh
 - 3. Shreya Ghoshal
 - 4. Neeti Mohan

Question Type : MCQ
Question ID : 264330133924
Option 1 ID : 264330524719
Option 2 ID : 264330524720
Option 3 ID : 264330524721
Option 4 ID : 264330524722
Status : Answered
Chosen Option : 2

Q.18 Which of the following statement is NOT correct regarding fertilizers?

- Ans
- 1. They are prepared in factories
 - 2. They are man-made inorganic salt
 - 3. They are very rich in plant nutrients
 - 4. They provide humus to the soil

Question Type : MCQ
Question ID : 264330137401
Option 1 ID : 264330538232
Option 2 ID : 264330538231
Option 3 ID : 264330538234
Option 4 ID : 264330538233
Status : Answered
Chosen Option : 2

Q.19 Gulabo Sapera is associated with which of the following dance forms?

- Ans
- 1. Kalbelia
 - 2. Kathakali
 - 3. Odissi
 - 4. Bharatnatyam

Question Type : MCQ
Question ID : 264330137938
Option 1 ID : 264330540359
Option 2 ID : 264330540362
Option 3 ID : 264330540360
Option 4 ID : 264330540361
Status : Answered
Chosen Option : 1

Q.20 The time allowed to the central government to remove any difficulty in implementing the New Delhi International Arbitration Centre Act, 2019 has been extended to _____ years from the date of commencement by The New Delhi International Arbitration Centre (Amendment) Bill, 2022.

- Ans
- 1. 3
 - 2. 4
 - 3. 6
 - 4. 5

Question Type : MCQ
Question ID : 264330137737
Option 1 ID : 264330539555
Option 2 ID : 264330539556
Option 3 ID : 264330539558
Option 4 ID : 264330539557
Status : Not Answered
Chosen Option : --

Q.21 On 8th September 2022, NITI Aayog, in collaboration with _____, launched the country's first national electric freight platform – Electric Freight Accelerator for Sustainable Transport – India (e-FAST India).

- Ans
- 1. World Resources Institute
 - 2. World Health Organisation
 - 3. World Bank
 - 4. International Monetary Fund

Question Type : MCQ
Question ID : 264330137928
Option 1 ID : 264330540319
Option 2 ID : 264330540322
Option 3 ID : 264330540320
Option 4 ID : 264330540321
Status : Not Answered
Chosen Option : --

Q.22 There were several cities in the Maurya empire. Which of the following cities was located on the southernmost side?

- Ans
- 1. Brahmagiri
 - 2. Rupnath
 - 3. Girnar
 - 4. Topra

Question Type : MCQ
Question ID : 264330137408
Option 1 ID : 264330538262
Option 2 ID : 264330538260
Option 3 ID : 264330538261
Option 4 ID : 264330538259
Status : Not Answered
Chosen Option : --

Q.23 The Airavatesvara Temple in Tamil Nadu was built by _____.

- Ans
- 1. Rajaraja Chola I
 - 2. Maharaja Pratap Singh
 - 3. Maharaja Sawai Jai Singh II
 - 4. Rajaraja Chola II

Question Type : MCQ
Question ID : 264330137740
Option 1 ID : 264330539568
Option 2 ID : 264330539570
Option 3 ID : 264330539569
Option 4 ID : 264330539567
Status : Not Answered
Chosen Option : --

Q.24 Savings deposits with Post Office savings banks are included in which measure of money supply?

- Ans
- 1. M1
 - 2. M4
 - 3. M3
 - 4. M2

Question Type : MCQ
Question ID : 264330137943
Option 1 ID : 264330540379
Option 2 ID : 264330540382
Option 3 ID : 264330540381
Option 4 ID : 264330540380
Status : Not Answered
Chosen Option : --

Q.25 Kajari is a folk song and dance genre of India. It has its roots in _____.

- Ans
- 1. Kerala
 - 2. West Bengal
 - 3. Punjab
 - 4. Uttar Pradesh

Question Type : MCQ
Question ID : 264330133908
Option 1 ID : 264330524658
Option 2 ID : 264330524655
Option 3 ID : 264330524657
Option 4 ID : 264330524656
Status : Answered
Chosen Option : 2

Section : English Language and Comprehension

Q.1 In the following question, out of the given four alternatives, select the alternative which best expresses the meaning of the Idiom/Phrase.
Cold fish

- Ans
- 1. To retract one's statements
 - 2. To make a lot of money
 - 3. A person lacking in sympathy
 - 4. A dead body

Question Type : MCQ
Question ID : 264330134393
Option 1 ID : 264330526553
Option 2 ID : 264330526554
Option 3 ID : 264330526551
Option 4 ID : 264330526552
Status : Answered
Chosen Option : 4

Q.2 Improve the underlined part of the sentence. Choose 'No improvement' as an answer if the sentence is grammatically correct.
The final cost depends on whether you chooses the small or the large size.

- Ans
- 1. chose the small
 - 2. choose the small
 - 3. choose the smaller
 - 4. No improvement

Question Type : MCQ
Question ID : 264330134324
Option 1 ID : 264330526287
Option 2 ID : 264330526288
Option 3 ID : 264330526289
Option 4 ID : 264330526290
Status : Answered
Chosen Option : 2

Q.3 Select the appropriate synonym for the underlined word.
She goes to her room and locks herself in.

- Ans
- 1. Shuts
 - 2. hurts
 - 3. sinks
 - 4. taunts

Question Type : MCQ
Question ID : 264330134388
Option 1 ID : 264330526531
Option 2 ID : 264330526532
Option 3 ID : 264330526533
Option 4 ID : 264330526534
Status : Answered
Chosen Option : 1

Q.4 Select the most appropriate option to fill in the blank.
Our breathing rate can change almost instantaneously in response to stress or _____.

- Ans
- 1. difference
 - 2. arousal
 - 3. fund
 - 4. attention

Question Type : MCQ
Question ID : 264330134397
Option 1 ID : 264330526570
Option 2 ID : 264330526568
Option 3 ID : 264330526567
Option 4 ID : 264330526569
Status : Answered
Chosen Option : 2

Q.5 Improve the underlined part of the sentence. Choose 'No improvement' as an answer if the sentence is grammatically correct.
The camel uses fat as a source of energy during its longer journey in the desert.

- Ans
- 1. it's longer journey
 - 2. its long journey
 - 3. its longest journeyed
 - 4. No improvement

Question Type : MCQ
Question ID : 264330134377
Option 1 ID : 264330526491
Option 2 ID : 264330526492
Option 3 ID : 264330526493
Option 4 ID : 264330526494
Status : Answered
Chosen Option : 2

Q.6 Choose the incorrectly spelt word.

Ans 1. Potential

2. Mimic

3. Grease

4. Surge

Question Type : MCQ

Question ID : 264330134394

Option 1 ID : 264330526555

Option 2 ID : 264330526556

Option 3 ID : 264330526558

Option 4 ID : 264330526557

Status : Answered

Chosen Option : 1

Q.7 Choose the word that can substitute the given group of words.
Famous or well-known for a negative reason

Ans 1. Unpopular

2. Reputable

3. Notorious

4. Formidable

Question Type : MCQ

Question ID : 264330134387

Option 1 ID : 264330526530

Option 2 ID : 264330526527

Option 3 ID : 264330526529

Option 4 ID : 264330526528

Status : Answered

Chosen Option : 3

Q.8 Select the most appropriate antonym of the given word.

Mound

Ans 1. Prominence

2. Victory

3. Bell

4. Valley

Question Type : MCQ

Question ID : 264330136101

Option 1 ID : 264330533212

Option 2 ID : 264330533214

Option 3 ID : 264330533213

Option 4 ID : 264330533211

Status : Not Answered

Chosen Option : --

Q.9 Select the most appropriate synonym to substitute the bracketed word in the given sentence.

In the midst of the tumult of charges against him, a (welter) of conflicting poll numbers are being bandied about.

- Ans
- 1. Static
 - 2. Peace
 - 3. Dynamic
 - 4. Turmoil

Question Type : MCQ
Question ID : 264330136048
Option 1 ID : 264330533010
Option 2 ID : 264330533009
Option 3 ID : 264330533007
Option 4 ID : 264330533008
Status : Not Answered
Chosen Option : --

Q.10 Select the most appropriate word for the given group of words.

A thing that is kept as a reminder of a person, place, or event

- Ans
- 1. Panacea
 - 2. Sinecure
 - 3. Souvenir
 - 4. Regalia

Question Type : MCQ
Question ID : 264330135807
Option 1 ID : 264330532102
Option 2 ID : 264330532100
Option 3 ID : 264330532099
Option 4 ID : 264330532101
Status : Answered
Chosen Option : 2

Q.11 Select the appropriate antonym for the underlined word.

Sunny turned to find his daughter's sweet, bright eyes close to his.

- Ans
- 1. gleaming
 - 2. anxious
 - 3. dusky
 - 4. merry

Question Type : MCQ
Question ID : 264330134391
Option 1 ID : 264330526544
Option 2 ID : 264330526543
Option 3 ID : 264330526545
Option 4 ID : 264330526546
Status : Answered
Chosen Option : 3

Q.12 Find the part of the given sentence that has an error in it. If there is no error, choose 'No error'.

Why are you making excuses too avoid this work?

- Ans
- 1. making excuses too
 - 2. No error
 - 3. avoid this work?
 - 4. Why are you

Question Type : MCQ
Question ID : 264330134771
Option 1 ID : 264330528032
Option 2 ID : 264330528034
Option 3 ID : 264330528033
Option 4 ID : 264330528031
Status : Answered
Chosen Option : 1

Q.13 Select the most appropriate option to substitute the bracketed segment in the given sentence. If there is no need to substitute it, select 'no substitution required'.

(This bridge neither crossed the Thames, and neither gave) access to a now-lost island in the river.

- Ans
- 1. No substitution required
 - 2. This bridge neither crossed the Thames, nor gave
 - 3. This bridge either crossed the Thames, and or gave
 - 4. This bridge either crossed the Thames, nor gave

Question Type : MCQ
Question ID : 264330136034
Option 1 ID : 264330532958
Option 2 ID : 264330532956
Option 3 ID : 264330532957
Option 4 ID : 264330532955
Status : Answered
Chosen Option : 2

Q.14 Identify the segment that contains a grammatical error. If there is no error, select 'No error'.

I have never seen a man / get off his horse quick as / did that stranger Englishman.

- Ans
- 1. I have never seen a man
 - 2. No error
 - 3. did that stranger Englishman.
 - 4. get off his horse quick as

Question Type : MCQ
Question ID : 264330136031
Option 1 ID : 264330532943
Option 2 ID : 264330532946
Option 3 ID : 264330532945
Option 4 ID : 264330532944
Status : Answered
Chosen Option : 4

Q.15 Find the part of the given sentence that has an error in it. If there is no error, choose 'No error'.

His absence from my party is too much painful for me.

- Ans
- 1. party is too much
 - 2. His absence from my
 - 3. painful for me.
 - 4. No error

Question Type : MCQ
Question ID : 264330134374
Option 1 ID : 264330526480
Option 2 ID : 264330526479
Option 3 ID : 264330526481
Option 4 ID : 264330526482
Status : Answered
Chosen Option : 2

Q.16 Select the wrongly spelt word.

- Ans
- 1. quarantine
 - 2. eminent
 - 3. supersede
 - 4. develop

Question Type : MCQ
Question ID : 264330135816
Option 1 ID : 264330532136
Option 2 ID : 264330532138
Option 3 ID : 264330532135
Option 4 ID : 264330532137
Status : Answered
Chosen Option : 2

Q.17 Select the most appropriate meaning of the given idiom.

Fixed in one's ways

- Ans
- 1. An aggressive attack on someone by a group
 - 2. To establish one's rule
 - 3. Not willing or wanting to change from your normal way of doing something
 - 4. Something that shows potential or looks promising in the beginning but fails to deliver anything in the end

Question Type : MCQ
Question ID : 264330135813
Option 1 ID : 264330532123
Option 2 ID : 264330532124
Option 3 ID : 264330532125
Option 4 ID : 264330532126
Status : Answered
Chosen Option : 3

Q.18 A sentence has been given with a blank to be filled with an appropriate option. Choose the correct alternative.

Neither she _____ I have expected Reema's arrival.

- Ans
- 1. and
 - 2. along
 - 3. nor
 - 4. or

Question Type : MCQ
Question ID : 264330134378
Option 1 ID : 264330526498
Option 2 ID : 264330526495
Option 3 ID : 264330526496
Option 4 ID : 264330526497
Status : Answered
Chosen Option : 3

Q.19 Select the most appropriate option to fill in the blank.

Those unfamiliar with the saga are bound to be mystified by the more _____ plot twists.

- Ans
- 1. anoint
 - 2. arcane
 - 3. arbitrary
 - 4. aesthetic

Question Type : MCQ
Question ID : 264330136038
Option 1 ID : 264330532973
Option 2 ID : 264330532972
Option 3 ID : 264330532971
Option 4 ID : 264330532974
Status : Answered
Chosen Option : 3

Q.20 Fill in the blank with the most appropriate choice.

The issue of fairness, which remained, was for consideration at the hearing to _____ the scheme.

- Ans
- 1. stratification
 - 2. acclamation
 - 3. sanction
 - 4. altercation

Question Type : MCQ
Question ID : 264330135817
Option 1 ID : 264330532142
Option 2 ID : 264330532140
Option 3 ID : 264330532141
Option 4 ID : 264330532139
Status : Answered
Chosen Option : 3

Comprehension:

In the following passage some words have been deleted. Fill in the blanks with the help of the alternatives given. Select the most appropriate option for each number.

Archaeologists believe that counting large quantities (1) _____ about 10,000 years ago. Early farmers had to (2) _____ for communally stored crops. Early counting systems involved small tokens which represented farmers' stores.

In the area which is now southern Iraq, little figures shaped like discs, balls, and pyramids (3) _____ used in about 7500 B.C. to represent various holdings. Later, marks which represented the figures were (4) _____ on clay tablets by use of a blunt reed to cut into the wet clay. Still, the symbols were (5) _____ connected with specific merchandise.

SubQuestion No : 21

Q.21 Select the most appropriate option to fill in the blank No. 1.

- Ans
- 1. began
 - 2. allured
 - 3. ended
 - 4. blessed

Question Type : MCQ
Question ID : 264330136092
Option 1 ID : 264330533177
Option 2 ID : 264330533175
Option 3 ID : 264330533176
Option 4 ID : 264330533178
Status : Answered
Chosen Option : 1

Comprehension:

In the following passage some words have been deleted. Fill in the blanks with the help of the alternatives given. Select the most appropriate option for each number.

Archaeologists believe that counting large quantities (1) _____ about 10,000 years ago. Early farmers had to (2) _____ for communally stored crops. Early counting systems involved small tokens which represented farmers' stores.

In the area which is now southern Iraq, little figures shaped like discs, balls, and pyramids (3) _____ used in about 7500 B.C. to represent various holdings. Later, marks which represented the figures were (4) _____ on clay tablets by use of a blunt reed to cut into the wet clay. Still, the symbols were (5) _____ connected with specific merchandise.

SubQuestion No : 22

Q.22 Select the most appropriate option to fill in the blank No. 2.

- Ans
- 1. undercount
 - 2. discount
 - 3. account
 - 4. count

Question Type : MCQ
Question ID : 264330136093
Option 1 ID : 264330533182
Option 2 ID : 264330533181
Option 3 ID : 264330533179
Option 4 ID : 264330533180
Status : Answered
Chosen Option : 4

Comprehension:

In the following passage some words have been deleted. Fill in the blanks with the help of the alternatives given. Select the most appropriate option for each number.

Archaeologists believe that counting large quantities (1) _____ about 10,000 years ago. Early farmers had to (2) _____ for communally stored crops. Early counting systems involved small tokens which represented farmers' stores.

In the area which is now southern Iraq, little figures shaped like discs, balls, and pyramids (3) _____ used in about 7500 B.C. to represent various holdings. Later, marks which represented the figures were (4) _____ on clay tablets by use of a blunt reed to cut into the wet clay. Still, the symbols were (5) _____ connected with specific merchandise.

SubQuestion No : 23

Q.23 Select the most appropriate option to fill in the blank No. 3.

- Ans
- 1. were
 - 2. are
 - 3. will be
 - 4. was

Question Type : MCQ
Question ID : 264330136094
Option 1 ID : 264330533185
Option 2 ID : 264330533186
Option 3 ID : 264330533184
Option 4 ID : 264330533183
Status : Answered
Chosen Option : 1

Comprehension:

In the following passage some words have been deleted. Fill in the blanks with the help of the alternatives given. Select the most appropriate option for each number.

Archaeologists believe that counting large quantities (1) _____ about 10,000 years ago. Early farmers had to (2) _____ for communally stored crops. Early counting systems involved small tokens which represented farmers' stores.

In the area which is now southern Iraq, little figures shaped like discs, balls, and pyramids (3) _____ used in about 7500 B.C. to represent various holdings. Later, marks which represented the figures were (4) _____ on clay tablets by use of a blunt reed to cut into the wet clay. Still, the symbols were (5) _____ connected with specific merchandise.

SubQuestion No : 24

Q.24 Select the most appropriate option to fill in the blank No. 4.

- Ans
- 1. inscribed
 - 2. transcribed
 - 3. prescribed
 - 4. subscribed

Question Type : MCQ
Question ID : 264330136095
Option 1 ID : 264330533187
Option 2 ID : 264330533188
Option 3 ID : 264330533189
Option 4 ID : 264330533190
Status : Answered
Chosen Option : 1

Comprehension:

In the following passage some words have been deleted. Fill in the blanks with the help of the alternatives given. Select the most appropriate option for each number.

Archaeologists believe that counting large quantities (1) _____ about 10,000 years ago. Early farmers had to (2) _____ for communally stored crops. Early counting systems involved small tokens which represented farmers' stores.

In the area which is now southern Iraq, little figures shaped like discs, balls, and pyramids (3) _____ used in about 7500 B.C. to represent various holdings. Later, marks which represented the figures were (4) _____ on clay tablets by use of a blunt reed to cut into the wet clay. Still, the symbols were (5) _____ connected with specific merchandise.

SubQuestion No : 25

Q.25 Select the most appropriate option to fill in the blank No. 5.

- Ans
- 1. just
 - 2. always
 - 3. like
 - 4. some

Question Type : MCQ
Question ID : 264330136096
Option 1 ID : 264330533193
Option 2 ID : 264330533194
Option 3 ID : 264330533192
Option 4 ID : 264330533191
Status : Answered
Chosen Option : 2

