



SSC MTS **SHIFT – 1 (15-06-2023)**

- ★ **Latest Govt Job updates**
- ★ **Private Job updates**
- ★ **Free Mock tests available**

**Visit - [teachingninja.in](https://teachingninja.in)**

## Multi Tasking Non Technical Staff and Havaldar CBIC and CBN Examination 2022

Roll Number	
Candidate Name	
Venue Name	
Exam Date	15/06/2023
Exam Time	9:00 AM - 10:30 AM
Subject	MTS Non Tech Havaldar CBIC and CBN Examination 2022

Section : Numerical and Mathematical Ability

Q.1 Find out the area of triangle of base 7 cm and corresponding height 12 cm.

- Ans
- ✓ 1. 42 cm<sup>2</sup>
  - ✗ 2. 54 cm<sup>2</sup>
  - ✗ 3. 43 cm<sup>2</sup>
  - ✗ 4. 44 cm<sup>2</sup>

Question Type : MCQ

Question ID : 264330140818

Option 1 ID : 264330551620

Option 2 ID : 264330551621

Option 3 ID : 264330551619

Option 4 ID : 264330551622

Status : Answered

Chosen Option : 1

Q.2 If  $\frac{3}{5}$  of 80 percent of a number is 450, then what is the number?

- Ans
- ✗ 1. 810.8
  - ✗ 2. 925.5
  - ✓ 3. 937.5
  - ✗ 4. 945.8

Question Type : MCQ

Question ID : 264330140178

Option 1 ID : 264330549094

Option 2 ID : 264330549091

Option 3 ID : 264330549092

Option 4 ID : 264330549093

Status : Answered

Chosen Option : 3

**Q.3** 25 percent of marked price is equal to 40 percent of cost price. If no discount is given, then what will be the profit percentage?

- Ans**
- 1. 66.66 percent
  - 2. 40 percent
  - 3. 60 percent
  - 4. 50 percent

Question Type : **MCQ**  
Question ID : **264330139600**  
Option 1 ID : **264330546818**  
Option 2 ID : **264330546817**  
Option 3 ID : **264330546816**  
Option 4 ID : **264330546815**  
Status : **Answered**  
Chosen Option : **3**

**Q.4** A sum of Rs.1500 amounts to Rs.2175 in 3 years at simple interest. If rate of interest is increased by 3 percent, then what will be the new amount?

- Ans**
- 1. Rs.2310
  - 2. Rs.2050
  - 3. Rs.2460
  - 4. Rs.2250

Question Type : **MCQ**  
Question ID : **264330139599**  
Option 1 ID : **264330546812**  
Option 2 ID : **264330546814**  
Option 3 ID : **264330546813**  
Option 4 ID : **264330546811**  
Status : **Answered**  
Chosen Option : **1**

**Q.5** The ratio of salary of P, Q and R is 5 : 6 : 8. If R gets Rs.2200 more than Q, then what is the salary of P?

- Ans**
- 1. Rs.6500
  - 2. Rs.7000
  - 3. Rs.7700
  - 4. Rs.5500

Question Type : **MCQ**  
Question ID : **264330139919**  
Option 1 ID : **264330548055**  
Option 2 ID : **264330548057**  
Option 3 ID : **264330548058**  
Option 4 ID : **264330548056**  
Status : **Answered**  
Chosen Option : **4**

**Q.6** Pipe P alone can fill a tank in 18 hours and Pipe Q alone can fill the same tank in 24 hours. If both the pipes are opened on alternate hours one at a time and pipe Q is opened for first hour, then in how much time the tank will be completely full?

- Ans**
- 1.  $(64/5)$  hours
  - 2.  $(78/5)$  hours
  - 3. 20 hours
  - 4.  $(62/3)$  hours

Question Type : MCQ  
Question ID : 264330140214  
Option 1 ID : 264330549237  
Option 2 ID : 264330549238  
Option 3 ID : 264330549236  
Option 4 ID : 264330549235  
Status : Answered  
Chosen Option : 4

**Q.7** The simple interest received on a sum for 20 years is  $3/5$  of the sum. What is the annual rate of interest?'

- Ans**
- 1. 3 percent
  - 2. 4 percent
  - 3. 5 percent
  - 4. 6 percent

Question Type : MCQ  
Question ID : 264330140223  
Option 1 ID : 264330549271  
Option 2 ID : 264330549272  
Option 3 ID : 264330549274  
Option 4 ID : 264330549273  
Status : Answered  
Chosen Option : 1

**Q.8** One liquid contains 20% of acid the other liquid contain 30% of acid. A can is filled with 7 parts of the first liquid and 3 parts of the second liquid. The percentage of the acid in the new mixture is:

- Ans**
- 1. 13%
  - 2. 30%
  - 3. 14%
  - 4. 23%

Question Type : MCQ  
Question ID : 264330138703  
Option 1 ID : 264330543421  
Option 2 ID : 264330543422  
Option 3 ID : 264330543419  
Option 4 ID : 264330543420  
Status : Not Answered  
Chosen Option : --

**Q.9** Selling price of an article is Rs. 817. If loss percentage is 14 percent, then what is the cost price of the article?

- Ans**
- 1. Rs. 850
  - 2. Rs. 950
  - 3. Rs. 880
  - 4. Rs. 900

Question Type : **MCQ**  
Question ID : **264330139614**  
Option 1 ID : **264330546874**  
Option 2 ID : **264330546872**  
Option 3 ID : **264330546873**  
Option 4 ID : **264330546871**  
Status : **Answered**  
Chosen Option : **2**

**Q.10** Mixture of milk and water in three bottles of equal capacity is in the ratio 4 : 1, 4 : 3 and 1 : 2 respectively. These three bottles are emptied into a large bottle. What will be the ratio of milk and water respectively in the large bottle?

- Ans**
- 1. 179 : 136
  - 2. 152 : 165
  - 3. 198 : 175
  - 4. 133 : 145

Question Type : **MCQ**  
Question ID : **264330140572**  
Option 1 ID : **264330550640**  
Option 2 ID : **264330550639**  
Option 3 ID : **264330550641**  
Option 4 ID : **264330550642**  
Status : **Not Answered**  
Chosen Option : **--**



Q.11 The table given below shows the demand and production of five articles.

Articles	Demand	Production
A	175	225
B	200	300
C	100	250
D	50	400
E	400	500

$J_1$  = The difference between total demand and total production of A, B and C.

$J_2$  = The value of average of demand and production of E.

What is the value of  $(J_1 - J_2)$ ?

- Ans
- 1. 100
  - 2. -150
  - 3. 150
  - 4. -100

Question Type : MCQ

Question ID : 264330140649

Option 1 ID : 264330550945

Option 2 ID : 264330550946

Option 3 ID : 264330550944

Option 4 ID : 264330550943

Status : Answered

Chosen Option : 2

Q.12 A metallic solid sphere has radius 35 cm. If it is melted to form small spheres of radius 5 cm, then how many small spheres will be obtained?

- Ans
- 1. 343
  - 2. 289
  - 3. 429
  - 4. 369

Question Type : MCQ

Question ID : 264330140226

Option 1 ID : 264330549284

Option 2 ID : 264330549283

Option 3 ID : 264330549286

Option 4 ID : 264330549285

Status : Answered

Chosen Option : 1

**Q.13** What is the least number of students in a class such that they can make rows of 10, 15 and 20 and also the total number of students is a perfect square?

- Ans
- 1. 6400
  - 2. 1600
  - 3. 900
  - 4. 1800

Question Type : MCQ  
Question ID : 264330139926  
Option 1 ID : 264330548086  
Option 2 ID : 264330548084  
Option 3 ID : 264330548085  
Option 4 ID : 264330548083  
Status : Answered  
Chosen Option : 3

**Q.14** What is the value of  $\frac{1.2 \times 1.2 + 0.2 \times 0.2 + 1.2 \times 0.4}{1.8 \times 1.8 + 0.4 \times 0.4 - 1.8 \times 0.8}$ ?

- Ans
- 1. 0.1
  - 2. 0.25
  - 3. 0.2
  - 4. 1

Question Type : MCQ  
Question ID : 264330140648  
Option 1 ID : 264330550939  
Option 2 ID : 264330550942  
Option 3 ID : 264330550941  
Option 4 ID : 264330550940  
Status : Answered  
Chosen Option : 4

**Q.15** Walking at the speed of 8 km/hr, a man covers certain distance in 2 hour 30 minutes. Running at a speed of 10 km/hr, the man will cover the same distance in:

- Ans
- 1. 2 hours 10 minutes
  - 2. 1 hour
  - 3. 1 hour 45 minutes
  - 4. 2 hours

Question Type : MCQ  
Question ID : 264330139049  
Option 1 ID : 264330544803  
Option 2 ID : 264330544805  
Option 3 ID : 264330544806  
Option 4 ID : 264330544804  
Status : Answered  
Chosen Option : 4

Q.16 Profit after selling a commodity for Rs. 400 is same as loss after selling it for Rs.300. The cost of the commodity is:

- Ans
- 1. Rs.450
  - 2. Rs.400
  - 3. Rs.350
  - 4. Rs.250

Question Type : MCQ  
Question ID : 264330140783  
Option 1 ID : 264330551482  
Option 2 ID : 264330551481  
Option 3 ID : 264330551480  
Option 4 ID : 264330551479  
Status : Answered  
Chosen Option : 3

Q.17 What is the value of  $\frac{25 \times 25 - 12 \times 12 + 13 \times 13}{12 \times 5 + 10 + 2}$  ?

- Ans
- 1. 10
  - 2. 5
  - 3. 65
  - 4. 13

Question Type : MCQ  
Question ID : 264330140169  
Option 1 ID : 264330549056  
Option 2 ID : 264330549055  
Option 3 ID : 264330549058  
Option 4 ID : 264330549057  
Status : Answered  
Chosen Option : 1

Q.18 A person covers first 26 km in 60 minutes and next 34 km in 30 minutes. What is his average speed for the whole journey?

- Ans
- 1. 40 km/hr
  - 2. 46 km/hr
  - 3. 32 km/hr
  - 4. 38 km/hr

Question Type : MCQ  
Question ID : 264330140537  
Option 1 ID : 264330550504  
Option 2 ID : 264330550505  
Option 3 ID : 264330550506  
Option 4 ID : 264330550503  
Status : Answered  
Chosen Option : 1

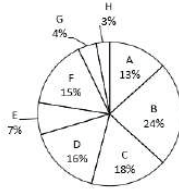


**Q.19** After working alone for 12 days, Reena finds that only 10 percent of the work is completed. She employs Priya who is 40 percent more efficient than Reena. How many more days will they together take to complete the remaining work?

- Ans**
- 1. 30 days
  - 2. 50 days
  - 3. 45 days
  - 4. 40 days

Question Type : **MCQ**  
Question ID : **264330139932**  
Option 1 ID : **264330548107**  
Option 2 ID : **264330548108**  
Option 3 ID : **264330548109**  
Option 4 ID : **264330548110**  
Status : **Not Answered**  
Chosen Option : --

**Q.20** The pie chart given below shows the number of cars sold by 8 different companies. The total number of cars sold by all these 8 companies are 1000. Number of cars sold by a particular company is shown as a percent of total number of cars sold by all these 8 companies.



What is the difference between the central angle formed by sectors A, B and C together and the central angle formed by sectors E, F and G together?

- Ans**
- 1.  $72.8^\circ$
  - 2.  $88.4^\circ$
  - 3.  $104.4^\circ$
  - 4.  $102.6^\circ$

Question Type : **MCQ**  
Question ID : **264330139970**  
Option 1 ID : **264330548262**  
Option 2 ID : **264330548259**  
Option 3 ID : **264330548261**  
Option 4 ID : **264330548260**  
Status : **Answered**  
Chosen Option : **3**

Section : Reasoning Ability and Problem Solving

**Q.1** In the following question below are given some statements followed by some conclusions based on those statements. Taking the given statements to be true even if they seem to be at variance from commonly known facts. Read all the conclusions and then decide which of the given conclusion logically follows the given statements.

Statements:

I. Some boy are human.

II. All human are hard.

Conclusion:

I. Some hard are not boy.

II. Some human are not boy.

III. No hard is human.

- Ans
- 1. Both conclusions I and III follows
  - 2. Both conclusions II and III follows
  - 3. Only conclusion I follows
  - 4. Neither conclusion follows

Question Type : MCQ

Question ID : 264330140063

Option 1 ID : 264330548633

Option 2 ID : 264330548632

Option 3 ID : 264330548631

Option 4 ID : 264330548634

Status : Answered

Chosen Option : 4

**Q.2** Select the option that is related to the third number in the same way as the second number is related to the first number.  
57 : 286 :: 43 : ?

- Ans
- 1. 215
  - 2. 206
  - 3. 216
  - 4. 217

Question Type : MCQ

Question ID : 264330140485

Option 1 ID : 264330550322

Option 2 ID : 264330550320

Option 3 ID : 264330550319

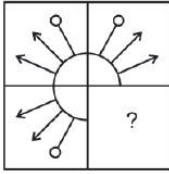
Option 4 ID : 264330550321

Status : Not Answered

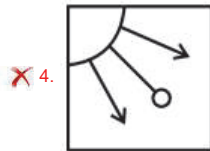
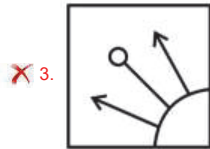
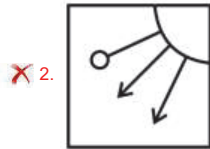
Chosen Option : --



**Q.3** Select the option figure that will replace the question mark (?) in the figure given below to complete the pattern.  
(Rotation is not allowed)



**Ans**



Teachingninja.in

Question Type : **MCQ**  
 Question ID : **264330135367**  
 Option 1 ID : **264330530377**  
 Option 2 ID : **264330530378**  
 Option 3 ID : **264330530375**  
 Option 4 ID : **264330530376**  
 Status : **Answered**  
 Chosen Option : 1

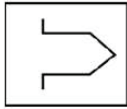
**Q.4** After interchanging the given two signs and two numbers, what will be the value of the given equation?

$\div$  and  $\times$ , 7 and 4 ;  $7 \div 6 + 4 - 3 \times 1$

- Ans**
- ✗ 1. 50
  - ✓ 2. 28
  - ✗ 3. 35
  - ✗ 4. 20

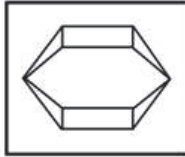
Question Type : **MCQ**  
 Question ID : **264330140991**  
 Option 1 ID : **264330552314**  
 Option 2 ID : **264330552311**  
 Option 3 ID : **264330552313**  
 Option 4 ID : **264330552312**  
 Status : **Answered**  
 Chosen Option : 2

Q.5 Select the option figure in which the given figure is embedded as its part (rotation is NOT allowed).



Ans

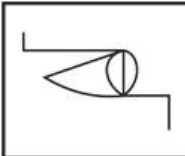
✓ 1.



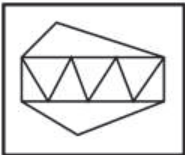
✗ 2.



✗ 3.



✗ 4.



Question Type : MCQ

Question ID : 264330140090

Option 1 ID : 264330548741

Option 2 ID : 264330548742

Option 3 ID : 264330548739

Option 4 ID : 264330548740

Status : Answered

Chosen Option : 1

Q.6 Eight friends Anil, Kamal, Ram, Sanjay, Aakash, Vivek, Rahul and Ramu are sitting around a circular table facing towards the centre (not necessarily in the same order). Vivek is second to the right of Anil. Kamal is third to the left of Anil. Ramu is second to the right of Vivek. Ram is second to the right of Ramu. Aakash is second to the right of Rahul. Rahul is not the immediate neighbour of Vivek. Who is third to the right of Aakash?

Ans ✗ 1. Kamal

✗ 2. Ram

✗ 3. Vivek

✓ 4. Ramu

Question Type : MCQ

Question ID : 264330139574

Option 1 ID : 264330546713

Option 2 ID : 264330546711

Option 3 ID : 264330546714

Option 4 ID : 264330546712

Status : Answered

Chosen Option : 4

**Q.7** Among five friends Parineeta, Naira, Rinky, Shristi and Tina, Tina is taller than only three other friends. Rinky is tallest among all friends. Naira is taller than only one person. Only two persons are taller than Parineeta. Who is the shortest among all the friends?

- Ans**
- 1. Tina
  - 2. Naira
  - 3. Parineeta
  - 4. Shristi

Question Type : **MCQ**  
Question ID : **264330140440**  
Option 1 ID : **264330550141**  
Option 2 ID : **264330550140**  
Option 3 ID : **264330550139**  
Option 4 ID : **264330550142**  
Status : **Answered**  
Chosen Option : **4**

**Q.8** Which of the following numbers will replace the question mark (?) in the given series?

63, 64, 60, 69, 53, ?

- Ans**
- 1. 77
  - 2. 76
  - 3. 88
  - 4. 78

Question Type : **MCQ**  
Question ID : **264330140045**  
Option 1 ID : **264330548559**  
Option 2 ID : **264330548560**  
Option 3 ID : **264330548562**  
Option 4 ID : **264330548561**  
Status : **Answered**  
Chosen Option : **4**

**Q.9** Which of the following numbers will replace the question mark (?) in the given series?

8, 24, 40, 56, 72, 88, 104, ?

- Ans**
- 1. 220
  - 2. 320
  - 3. 420
  - 4. 120

Question Type : **MCQ**  
Question ID : **264330140002**  
Option 1 ID : **264330548389**  
Option 2 ID : **264330548387**  
Option 3 ID : **264330548388**  
Option 4 ID : **264330548390**  
Status : **Answered**  
Chosen Option : **4**

**Q.10** Select the option that is related to the third word in the same way as the second word is related to the first word.  
Admit : Deny :: Hate : ?

- Ans
- 1. Loathe
  - 2. Abhor
  - 3. Adore
  - 4. Despise

Question Type : MCQ  
Question ID : 264330140394  
Option 1 ID : 264330549955  
Option 2 ID : 264330549957  
Option 3 ID : 264330549956  
Option 4 ID : 264330549958  
Status : Answered  
Chosen Option : 3

**Q.11** Which two numbers should be interchanged to make the given equation correct?  
 $108 \div 6 - 18 + 8 \times 9 = 42$

- Ans
- 1. 108 and 18
  - 2. 9 and 6
  - 3. 18 and 9
  - 4. 6 and 8

Question Type : MCQ  
Question ID : 264330140129  
Option 1 ID : 264330548895  
Option 2 ID : 264330548898  
Option 3 ID : 264330548897  
Option 4 ID : 264330548896  
Status : Answered  
Chosen Option : 2

**Q.12** Words given on the left side of (::) are related with each other by some Logic/Rule/Relation. Select the missing word/word pair on the right side of (::) from the given alternatives based on the same Logic/Rule/Relation.

Crop : Farmer :: Book : ?

- Ans
- 1. Author
  - 2. Paper
  - 3. Dramatist
  - 4. Read

Question Type : MCQ  
Question ID : 264330140957  
Option 1 ID : 264330552175  
Option 2 ID : 264330552178  
Option 3 ID : 264330552176  
Option 4 ID : 264330552177  
Status : Answered  
Chosen Option : 1

**Q.13** Two Statements are given followed by two conclusions numbered I and II. Assuming the statements to be true, even if they seem to be at variance with commonly known facts, decide which of the conclusions logically follow(s) from the statements.

Statements:

Some blues are yellows.

All yellows are red.

Conclusions:

I. Some blues are red.

II. All red are yellow.

- Ans**
- 1. Both conclusions I and II follow
  - 2. Neither conclusion I nor II follows
  - 3. Only conclusion I follows
  - 4. Only conclusion II follows

Question Type : MCQ

Question ID : 264330138776

Option 1 ID : 264330543713

Option 2 ID : 264330543714

Option 3 ID : 264330543711

Option 4 ID : 264330543712

Status : Answered

Chosen Option : 3

**Q.14** Select the option in which the numbers shares the same relationship in set as that shared by the numbers in the given set.  
(NOTE: Operations should be performed on the whole numbers, without breaking down the numbers into its constituent digits. E.g.13 – Operations on 13 such as adding /subtracting /multiplying etc. to 13 can be performed. Breaking down 13 into 1 and 3 and then performing mathematical operations on 1 and 3 is not allowed)

(4, 1, 25)

(8, 5, 169)

- Ans**
- 1. (10, 8, 361)
  - 2. (4, 9, 144)
  - 3. (5, 9, 196)
  - 4. (2, 7, 100)

Question Type : MCQ

Question ID : 264330140990

Option 1 ID : 264330552310

Option 2 ID : 264330552308

Option 3 ID : 264330552309

Option 4 ID : 264330552307

Status : Answered

Chosen Option : 3

**Q.15** A series is given with one term missing. Select the correct alternative from the given ones that will complete the series.

CAB, DDG, EGL, FIQ, ?

- Ans**
- 1. GNV
  - 2. GMV
  - 3. GMU
  - 4. GNU

Question Type : MCQ  
Question ID : 264330140053  
Option 1 ID : 264330548591  
Option 2 ID : 264330548593  
Option 3 ID : 264330548594  
Option 4 ID : 264330548592  
Status : Answered  
Chosen Option : 2

**Q.16** In a certain code language, 'LUCK' is coded as 'HQYG'. What is the code for 'MATH' in that code language?

- Ans**
- 1. IWPC
  - 2. IWQD
  - 3. IWPE
  - 4. IWPD

Question Type : MCQ  
Question ID : 264330139974  
Option 1 ID : 264330548276  
Option 2 ID : 264330548277  
Option 3 ID : 264330548278  
Option 4 ID : 264330548275  
Status : Answered  
Chosen Option : 4

**Q.17** In a certain code language, 'APPALL' is coded as 'JLYPNA'. What is the code for 'APPEND' in that code language?

- Ans**
- 1. BNC PNA
  - 2. BCNPNA
  - 3. BNC PAN
  - 4. BCNNPA

Question Type : MCQ  
Question ID : 264330140961  
Option 1 ID : 264330552193  
Option 2 ID : 264330552192  
Option 3 ID : 264330552194  
Option 4 ID : 264330552191  
Status : Answered  
Chosen Option : 1



**Q.18** Seven girls A, B, C, D, E, F and G are sitting around a circular table facing opposite to the centre (not necessarily in the same order). D is second to the right of G. G is third to the right of C. F is third to the right of B. A is not the immediate neighbour of C. E is the immediate neighbour of C. Who is second to the right of A?

- Ans**
- 1. G
  - 2. C
  - 3. E
  - 4. F

Question Type : **MCQ**

Question ID : **264330139555**

Option 1 ID : **264330546636**

Option 2 ID : **264330546635**

Option 3 ID : **264330546638**

Option 4 ID : **264330546637**

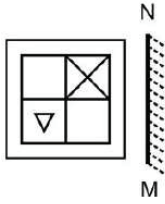
Status : **Answered**

Chosen Option : **4**



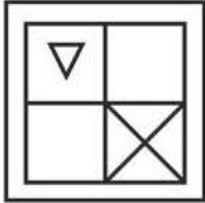
Teachingninja.in

Q.19 Select the correct mirror image of the given figure when the mirror is placed to the right side of the figure.

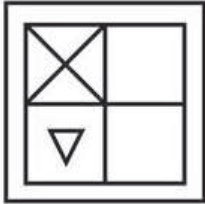


Ans

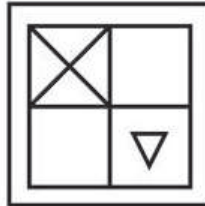
✗ 1.



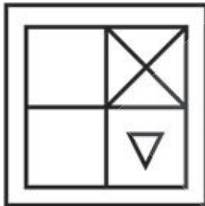
✗ 2.



✓ 3.



✗ 4.



Question Type : MCQ

Question ID : 264330140151

Option 1 ID : 264330548983

Option 2 ID : 264330548985

Option 3 ID : 264330548984

Option 4 ID : 264330548986

Status : Answered

Chosen Option : 3

**Q.20** In a certain code language, 'FUNNY' is written as 'LATTE' and 'DRIVE' is written as 'JXOBK'. How will 'CLASS' be written in that language?

- Ans**
- 1. IRGZZ
  - 2. IRGXX
  - 3. IRGY Y
  - 4. IRHYY

Question Type : **MCQ**  
Question ID : **264330140456**  
Option 1 ID : **264330550205**  
Option 2 ID : **264330550203**  
Option 3 ID : **264330550204**  
Option 4 ID : **264330550206**  
Status : **Answered**  
Chosen Option : **3**

Section : General Awareness

**Q.1** Who was the founder of a non-violent movement named as "Khudai Khidmatgars"?

- Ans**
- 1. C. Rajagopalachari
  - 2. Khan Abdul Ghaffar Khan
  - 3. Mohammad Ali Jinnah
  - 4. Mahatma Gandhi

Question Type : **MCQ**  
Question ID : **264330139890**  
Option 1 ID : **264330547940**  
Option 2 ID : **264330547939**  
Option 3 ID : **264330547942**  
Option 4 ID : **264330547941**  
Status : **Answered**  
Chosen Option : **2**

**Q.2** Which of the following metal is always a component in an amalgam?

- Ans**
- 1. Strontium
  - 2. Mercury
  - 3. Zinc
  - 4. Aluminium

Question Type : **MCQ**  
Question ID : **264330140681**  
Option 1 ID : **264330551073**  
Option 2 ID : **264330551074**  
Option 3 ID : **264330551071**  
Option 4 ID : **264330551072**  
Status : **Answered**  
Chosen Option : **3**

Q.3 Bhimbetka caves are situated in which of the following states?

- Ans
- 1. Madhya Pradesh
  - 2. Rajasthan
  - 3. Haryana
  - 4. Gujarat

Question Type : MCQ  
Question ID : 264330139669  
Option 1 ID : 264330547092  
Option 2 ID : 264330547091  
Option 3 ID : 264330547094  
Option 4 ID : 264330547093  
Status : Answered  
Chosen Option : 1

Q.4 Treasury bills are issued by the \_\_\_\_\_.

- Ans
- 1. Securities and Exchange Board of India
  - 2. Government of India
  - 3. Reserve Bank of India
  - 4. Insurance Regulatory Authority of India

Question Type : MCQ  
Question ID : 264330138956  
Option 1 ID : 264330544434  
Option 2 ID : 264330544432  
Option 3 ID : 264330544431  
Option 4 ID : 264330544433  
Status : Answered  
Chosen Option : 2

Q.5 National Tribal Dance Festival 2022 was held in which place?

- Ans
- 1. Jaipur
  - 2. Raipur
  - 3. Pune
  - 4. Puri

Question Type : MCQ  
Question ID : 264330138947  
Option 1 ID : 264330544396  
Option 2 ID : 264330544395  
Option 3 ID : 264330544397  
Option 4 ID : 264330544398  
Status : Not Answered  
Chosen Option : --

**Q.6** According to the Competition Amendment Bill, 2022, the penalty for gun-jumping is proposed to be \_\_\_\_\_ of the deal value.

- Ans**
- 1. 0.5%
  - 2. 1.5%
  - 3. 1%
  - 4. 2%

Question Type : **MCQ**  
Question ID : **264330141047**  
Option 1 ID : **264330552535**  
Option 2 ID : **264330552537**  
Option 3 ID : **264330552536**  
Option 4 ID : **264330552538**  
Status : **Not Answered**  
Chosen Option : --

**Q.7** The Chief Minister of which of the following states launched the second phase of Ladli Laxmi Scheme 2.0 in November 2022?

- Ans**
- 1. Uttar Pradesh
  - 2. Andhra Pradesh
  - 3. Bihar
  - 4. Madhya Pradesh

Question Type : **MCQ**  
Question ID : **264330141046**  
Option 1 ID : **264330552533**  
Option 2 ID : **264330552532**  
Option 3 ID : **264330552534**  
Option 4 ID : **264330552531**  
Status : **Answered**  
Chosen Option : 4

**Q.8** 'Golden Girl' is the autobiography of \_\_\_\_\_.

- Ans**
- 1. P.T. Usha
  - 2. Divya Dutta
  - 3. Saina Nehwal
  - 4. Neena Gupta

Question Type : **MCQ**  
Question ID : **264330140272**  
Option 1 ID : **264330549468**  
Option 2 ID : **264330549467**  
Option 3 ID : **264330549470**  
Option 4 ID : **264330549469**  
Status : **Answered**  
Chosen Option : 1

**Q.9** In the Indian subcontinent, how many country/countries share its land frontiers with every member country of the subcontinent?

- Ans**
- 1. Two
  - 2. Three
  - 3. Four
  - 4. One

Question Type : **MCQ**  
Question ID : **264330139716**  
Option 1 ID : **264330547280**  
Option 2 ID : **264330547281**  
Option 3 ID : **264330547282**  
Option 4 ID : **264330547279**  
Status : **Not Answered**  
Chosen Option : --

**Q.10** How many Fundamental Duties were added in the Constitution of India by the 42nd Amendment?

- Ans**
- 1. 12
  - 2. 11
  - 3. 9
  - 4. 10

Question Type : **MCQ**  
Question ID : **264330140951**  
Option 1 ID : **264330552154**  
Option 2 ID : **264330552151**  
Option 3 ID : **264330552153**  
Option 4 ID : **264330552152**  
Status : **Answered**  
Chosen Option : 1

**Q.11** Which among the following books was written by Dr. Raghuram Rajan?

- Ans**
- 1. The Third Pillar
  - 2. We are Displaced
  - 3. The India Story
  - 4. My Life in Full

Question Type : **MCQ**  
Question ID : **264330141063**  
Option 1 ID : **264330552600**  
Option 2 ID : **264330552599**  
Option 3 ID : **264330552601**  
Option 4 ID : **264330552602**  
Status : **Answered**  
Chosen Option : 2

Q.12 Dilwara Temple is one of the finest and architecturally renowned \_\_\_\_\_ temples in India.

- Ans
- 1. Buddhist
  - 2. Hindu
  - 3. Jain
  - 4. Sikh

Question Type : MCQ  
Question ID : 264330140371  
Option 1 ID : 264330549865  
Option 2 ID : 264330549864  
Option 3 ID : 264330549866  
Option 4 ID : 264330549863  
Status : Answered  
Chosen Option : 3

Q.13 Which Indian music composer received his second Grammy award in 2022 for the album 'Divine Tides'?

- Ans
- 1. P. A. Deepak
  - 2. Ricky Kej
  - 3. Manoj George
  - 4. Tanvi Shah

Question Type : MCQ  
Question ID : 264330140385  
Option 1 ID : 264330549919  
Option 2 ID : 264330549920  
Option 3 ID : 264330549922  
Option 4 ID : 264330549921  
Status : Answered  
Chosen Option : 2

Q.14 Which freedom fighter was involved in the Kakori Train Action in 1925, for which the British government condemned him to death?

- Ans
- 1. Ram Prasad Bismil
  - 2. Lala Hardayal
  - 3. Vinayak Damodar Savarkar
  - 4. Mahatma Gandhi

Question Type : MCQ  
Question ID : 264330140921  
Option 1 ID : 264330552034  
Option 2 ID : 264330552031  
Option 3 ID : 264330552032  
Option 4 ID : 264330552033  
Status : Answered  
Chosen Option : 1

Q.15 As of 2022, which among the following countries is the largest importer of Indian iron ore?

- Ans
- 1. Russia
  - 2. China
  - 3. France
  - 4. United States of America

Question Type : MCQ  
Question ID : 264330140760  
Option 1 ID : 264330551390  
Option 2 ID : 264330551388  
Option 3 ID : 264330551389  
Option 4 ID : 264330551387  
Status : Answered  
Chosen Option : 1

Q.16 When was the first non-synchronous census conducted in India?

- Ans
- 1. 1872
  - 2. 1772
  - 3. 1792
  - 4. 1972

Question Type : MCQ  
Question ID : 264330140378  
Option 1 ID : 264330549892  
Option 2 ID : 264330549891  
Option 3 ID : 264330549894  
Option 4 ID : 264330549893  
Status : Answered  
Chosen Option : 1

Q.17 Yamini Krishnamurthy is a famous exponent of which form of dance?

- Ans
- 1. Bharatnatyam
  - 2. Odissi
  - 3. Bihu
  - 4. Mohiniattam

Question Type : MCQ  
Question ID : 264330140294  
Option 1 ID : 264330549555  
Option 2 ID : 264330549558  
Option 3 ID : 264330549557  
Option 4 ID : 264330549556  
Status : Answered  
Chosen Option : 1



Q.18 Akbar's revenue system "Zabt" was developed by \_\_\_\_\_.

- Ans
- 1. Todar Mal
  - 2. Bairam Khan
  - 3. Raja Bharmal
  - 4. Raja Man Singh

Question Type : MCQ  
Question ID : 264330138993  
Option 1 ID : 264330544582  
Option 2 ID : 264330544580  
Option 3 ID : 264330544581  
Option 4 ID : 264330544579  
Status : Not Answered  
Chosen Option : --

Q.19 The number of live births per thousand persons in a year is called \_\_\_\_\_.

- Ans
- 1. Death rate
  - 2. Fertility rate
  - 3. Crude rate
  - 4. Birth rate

Question Type : MCQ  
Question ID : 264330141057  
Option 1 ID : 264330552577  
Option 2 ID : 264330552575  
Option 3 ID : 264330552576  
Option 4 ID : 264330552578  
Status : Answered  
Chosen Option : 2

Q.20 In June 2022, the "Cabinet Committee on Economic Affairs" has approved deregulation of \_\_\_\_\_.

- Ans
- 1. Sale of Defence Equipment
  - 2. Sale of Nuclear Weapons
  - 3. Sale of Domestically Produced Crude Oil
  - 4. Sale of Chemical Weapons

Question Type : MCQ  
Question ID : 264330139757  
Option 1 ID : 264330547444  
Option 2 ID : 264330547445  
Option 3 ID : 264330547443  
Option 4 ID : 264330547446  
Status : Not Answered  
Chosen Option : --

Q.21 Which among the following is the structural and fundamental unit of life?

- Ans
- 1. Tissue
  - 2. Enzyme
  - 3. Cell
  - 4. Hormone

Question Type : MCQ  
Question ID : 264330140323  
Option 1 ID : 264330549672  
Option 2 ID : 264330549671  
Option 3 ID : 264330549673  
Option 4 ID : 264330549674  
Status : Answered  
Chosen Option : 3

Q.22 \_\_\_\_\_ are the vessels which carry blood away from the heart to various organs of the body.

- Ans
- 1. Veins
  - 2. Tracheas
  - 3. Arteries
  - 4. Plasma

Question Type : MCQ  
Question ID : 264330138960  
Option 1 ID : 264330544449  
Option 2 ID : 264330544450  
Option 3 ID : 264330544447  
Option 4 ID : 264330544448  
Status : Answered  
Chosen Option : 3

Q.23 The satellites orbit the earth in which of the following layers of the atmosphere?

- Ans
- 1. Stratosphere
  - 2. Exosphere
  - 3. Troposphere
  - 4. Mesosphere

Question Type : MCQ  
Question ID : 264330141054  
Option 1 ID : 264330552566  
Option 2 ID : 264330552563  
Option 3 ID : 264330552564  
Option 4 ID : 264330552565  
Status : Not Answered  
Chosen Option : --

Q.24 Ryder Cup is associated with \_\_\_\_\_ sport.

- Ans
- 1. Cycling
  - 2. Cricket
  - 3. Swimming
  - 4. Golf

Question Type : MCQ  
Question ID : 264330140723  
Option 1 ID : 264330551240  
Option 2 ID : 264330551239  
Option 3 ID : 264330551242  
Option 4 ID : 264330551241  
Status : Answered  
Chosen Option : 4

Q.25 Who become Wisden's Leading Cricketer in the world 2018?

- Ans
- 1. Rohit Sharma
  - 2. Kane Williamson
  - 3. Virat Kohli
  - 4. Ben Stokes

Question Type : MCQ  
Question ID : 264330140271  
Option 1 ID : 264330549465  
Option 2 ID : 264330549463  
Option 3 ID : 264330549466  
Option 4 ID : 264330549464  
Status : Not Answered  
Chosen Option : --

Section : English Language and Comprehension

Q.1 Select the word segment that substitutes (replaces) the bracketed word segment correctly and completes the sentence meaningfully. Select the option 'no correction required' if the sentence is correct as given.

He gritted his teeth and tried to act as though he (either noticed nor cared).

- Ans
- 1. neither noticed nor cared
  - 2. No correction required
  - 3. either noticed or cared
  - 4. neither noticed cared

Question Type : MCQ  
Question ID : 264330136269  
Option 1 ID : 264330533861  
Option 2 ID : 264330533862  
Option 3 ID : 264330533859  
Option 4 ID : 264330533860  
Status : Answered  
Chosen Option : 1

Q.2 Select the most appropriate option to fill in the blank.

Her ribs were \_\_\_\_\_ but no longer painful.

- Ans
- 1. soar
  - 2. sore
  - 3. sour
  - 4. sure

Question Type : MCQ  
Question ID : 264330135254  
Option 1 ID : 264330529937  
Option 2 ID : 264330529936  
Option 3 ID : 264330529935  
Option 4 ID : 264330529938  
Status : Answered  
Chosen Option : 1

Q.3 Identify the segment that contains a grammatical error. If there is no error, select 'No error'.

Harry's eyes watered in / the chill as they soar upwards; he / could see nothing below now.

- Ans
- 1. could see nothing below now.
  - 2. the chill as they soar upwards; he
  - 3. Harry's eyes watered in
  - 4. No error

Question Type : MCQ  
Question ID : 264330136111  
Option 1 ID : 264330533253  
Option 2 ID : 264330533252  
Option 3 ID : 264330533251  
Option 4 ID : 264330533254  
Status : Answered  
Chosen Option : 3

Q.4 Improve the underlined part of the sentence. Choose 'No improvement' as an answer if the sentence is grammatically correct.

A health person may carry germs of typhoid, cholera, dysentery, etc. in his body.

- Ans
- 1. health persons might
  - 2. healthy person may
  - 3. No improvement
  - 4. healthy persons would

Question Type : MCQ  
Question ID : 264330135540  
Option 1 ID : 264330531063  
Option 2 ID : 264330531064  
Option 3 ID : 264330531066  
Option 4 ID : 264330531065  
Status : Answered  
Chosen Option : 2

Q.5 Choose the word that is opposite in meaning to the given word.

Similar

- Ans
- 1. Bizarre
  - 2. Resemblant
  - 3. Unlike
  - 4. Secretive

Question Type : MCQ  
Question ID : 264330135170  
Option 1 ID : 264330529614  
Option 2 ID : 264330529612  
Option 3 ID : 264330529613  
Option 4 ID : 264330529611  
Status : Answered  
Chosen Option : 3

Q.6 Identify the segment that contains a grammatical error. If there is no error, select 'No error'.  
Hearing those words / from his mouth, was / hard than I thought.

- Ans
- 1. hard than I thought.
  - 2. No error
  - 3. Hearing those words
  - 4. from his mouth, was

Question Type : MCQ  
Question ID : 264330135690  
Option 1 ID : 264330531653  
Option 2 ID : 264330531654  
Option 3 ID : 264330531651  
Option 4 ID : 264330531652  
Status : Answered  
Chosen Option : 1

Q.7 Select the most appropriate meaning of the given idiom

To pull your weight

- Ans
- 1. To do your full share of work
  - 2. To help one's relatives
  - 3. To buy something
  - 4. To give something

Question Type : MCQ  
Question ID : 264330136207  
Option 1 ID : 264330533620  
Option 2 ID : 264330533621  
Option 3 ID : 264330533622  
Option 4 ID : 264330533619  
Status : Answered  
Chosen Option : 1

**Q.8** Identify the segment that contains a grammatical error. If there is no error, select 'No error'.  
At night, lying sleepless, he considered / sending messengers besides the country, / secretly, in search of his friend.

- Ans**
- 1. secretly, in search of his friend.
  - 2. At night, lying sleepless, he considered
  - 3. sending messengers besides the country,
  - 4. No error

Question Type : **MCQ**  
Question ID : **264330135845**  
Option 1 ID : **264330532249**  
Option 2 ID : **264330532247**  
Option 3 ID : **264330532248**  
Option 4 ID : **264330532250**  
Status : **Answered**  
Chosen Option : **3**

**Q.9** Four words are given, out of which three words are spelt correctly. Choose the incorrectly spelt word.

- Ans**
- 1. Referred
  - 2. Recommend
  - 3. Separate
  - 4. Publically

Question Type : **MCQ**  
Question ID : **264330135867**  
Option 1 ID : **264330532333**  
Option 2 ID : **264330532332**  
Option 3 ID : **264330532334**  
Option 4 ID : **264330532331**  
Status : **Answered**  
Chosen Option : **4**

**Q.10** Select the most appropriate word for the given group of words.

The art of careful public speaking, using clear pronunciation

- Ans**
- 1. Elocution
  - 2. Incubation
  - 3. Abdication
  - 4. Obrution

Question Type : **MCQ**  
Question ID : **264330135730**  
Option 1 ID : **264330531805**  
Option 2 ID : **264330531806**  
Option 3 ID : **264330531804**  
Option 4 ID : **264330531803**  
Status : **Answered**  
Chosen Option : **1**

**Q.11** Select the word from the options which is similar in meaning to the bracketed word given in the sentence below.  
They are institutions built to hold and (continue) power for a political group.

- Ans**
- 1. abandon
  - 2. waste
  - 3. maintain
  - 4. release

Question Type : **MCQ**  
Question ID : **264330141197**  
Option 1 ID : **264330553123**  
Option 2 ID : **264330553126**  
Option 3 ID : **264330553124**  
Option 4 ID : **264330553125**  
Status : **Answered**  
Chosen Option : **3**

**Q.12** Select the most appropriate option to fill in the blank.

The \_\_\_\_\_ term "wasteland" is proposed to be replaced by the term "urban commons."

- Ans**
- 1. derogatory
  - 2. lucrative
  - 3. imperative
  - 4. indicative

Question Type : **MCQ**  
Question ID : **264330136193**  
Option 1 ID : **264330533569**  
Option 2 ID : **264330533570**  
Option 3 ID : **264330533567**  
Option 4 ID : **264330533568**  
Status : **Answered**  
Chosen Option : **1**

**Q.13** Select the word from the options which is exactly opposite in meaning to the bracketed word given in the sentence below.

The Prime Minister is making no (rash) promises.

- Ans**
- 1. Considerate
  - 2. Immature
  - 3. Audacious
  - 4. Bold

Question Type : **MCQ**  
Question ID : **264330135864**  
Option 1 ID : **264330532322**  
Option 2 ID : **264330532319**  
Option 3 ID : **264330532321**  
Option 4 ID : **264330532320**  
Status : **Answered**  
Chosen Option : **3**

Q.14 Select the most appropriate synonym of the given word.

Liberty

- Ans
- 1. Statue
  - 2. Freedom
  - 3. Dependence
  - 4. Acclamation

Question Type : MCQ  
Question ID : 264330136426  
Option 1 ID : 264330534465  
Option 2 ID : 264330534463  
Option 3 ID : 264330534464  
Option 4 ID : 264330534466  
Status : Answered  
Chosen Option : 2

Q.15 Four sentences are given, out of which three have spelling errors. Choose the sentence with all correctly spelled words.

- Ans
- 1. Thousands protested the election fraud.
  - 2. The teacher told him to watch his grammer.
  - 3. My friend happend by around dinnertime.
  - 4. That was an impressive and an irresistable necklace.

Question Type : MCQ  
Question ID : 264330136288  
Option 1 ID : 264330533933  
Option 2 ID : 264330533931  
Option 3 ID : 264330533932  
Option 4 ID : 264330533934  
Status : Answered  
Chosen Option : 1

Q.16 Select the most appropriate option to substitute the bracketed segment in the given sentence. If there is no need to substitute it, select 'no substitution required'.

The ban has landed the circus managements in a tricky (situation as they can neither use them for the shows or) abandon them.

- Ans
- 1. situation as they can neither use them for the shows nor
  - 2. situation as they cannot either use them for the shows nor
  - 3. No substitution required
  - 4. situation as them can either use them for the shows or

Question Type : MCQ  
Question ID : 264330136347  
Option 1 ID : 264330534160  
Option 2 ID : 264330534159  
Option 3 ID : 264330534162  
Option 4 ID : 264330534161  
Status : Answered  
Chosen Option : 1



Q.17 Select the most appropriate option to fill in the blank.

Some were very shaky and unstable, others were \_\_\_\_\_, and a few were both!

- Ans
- 1. voluted
  - 2. diluted
  - 3. convoluted
  - 4. involuted

Question Type : MCQ  
Question ID : 264330136351  
Option 1 ID : 264330534176  
Option 2 ID : 264330534175  
Option 3 ID : 264330534178  
Option 4 ID : 264330534177  
Status : Answered  
Chosen Option : 2

Q.18 The statement below has been given with bracketed text. Select the option with correct idiom for the bracketed text.

They were really (selecting from the last or worst of the resources left) when they picked you.

- Ans
- 1. scraping the bottom of the barrel
  - 2. rolling the stones
  - 3. pulling up snakes
  - 4. going haywire

Question Type : MCQ  
Question ID : 264330136286  
Option 1 ID : 264330533923  
Option 2 ID : 264330533924  
Option 3 ID : 264330533925  
Option 4 ID : 264330533926  
Status : Answered  
Chosen Option : 1

Q.19 Select the most appropriate word for the given group of words.

License granted to an individual or group to market a company's goods or services in a particular territory

- Ans
- 1. Branding
  - 2. Marketing
  - 3. Monopoly
  - 4. Franchise

Question Type : MCQ  
Question ID : 264330136175  
Option 1 ID : 264330533495  
Option 2 ID : 264330533496  
Option 3 ID : 264330533497  
Option 4 ID : 264330533498  
Status : Answered  
Chosen Option : 4

Q.20 Select the most appropriate option to fill in the blank.

A loud thud woke up everybody and nobody knew what all the \_\_\_\_\_ was about.

- Ans
- 1. exoneration
  - 2. commotion
  - 3. abomination
  - 4. culmination

Question Type : MCQ  
Question ID : 264330136212  
Option 1 ID : 264330533639  
Option 2 ID : 264330533640  
Option 3 ID : 264330533641  
Option 4 ID : 264330533642  
Status : Answered  
Chosen Option : 4

**Comprehension:**

In the following passage some words have been deleted. Fill in the blanks with the help of the alternatives given. Select the most appropriate option for each number.

The term Democracy (1) \_\_\_\_\_ from the Greek (2) \_\_\_\_\_ dêmos (people) and Kratos (power). In its (3) \_\_\_\_\_ meaning, democracy means the "rule of the people". In fact it is a form of government in which all eligible people have an (4) \_\_\_\_\_ say in the decisions that affect their lives. Democracy (5) \_\_\_\_\_ a political systems existed in some Greek city-states, notably Athens following a popular uprising in 508 BC.

SubQuestion No : 21

Q.21 Select the most appropriate option to fill in blank number 1.

- Ans
- 1. came
  - 2. will come
  - 3. is coming
  - 4. comes

Question Type : MCQ  
Question ID : 264330135672  
Option 1 ID : 264330531579  
Option 2 ID : 264330531581  
Option 3 ID : 264330531582  
Option 4 ID : 264330531580  
Status : Answered  
Chosen Option : 4

**Comprehension:**

In the following passage some words have been deleted. Fill in the blanks with the help of the alternatives given. Select the most appropriate option for each number.

The term Democracy (1) \_\_\_\_\_ from the Greek (2) \_\_\_\_\_ dêmos (people) and Kratos (power). In its (3) \_\_\_\_\_ meaning, democracy means the "rule of the people". In fact it is a form of government in which all eligible people have an (4) \_\_\_\_\_ say in the decisions that affect their lives. Democracy (5) \_\_\_\_\_ a political systems existed in some Greek city-states, notably Athens following a popular uprising in 508 BC.

**SubQuestion No : 22**

**Q.22** Select the most appropriate option to fill in blank number 2.

- Ans
- 1. letters
  - 2. symbols
  - 3. numbers
  - 4. words

Question Type : MCQ  
Question ID : 264330135673  
Option 1 ID : 264330531586  
Option 2 ID : 264330531583  
Option 3 ID : 264330531584  
Option 4 ID : 264330531585  
Status : Answered  
Chosen Option : 4

**Comprehension:**

In the following passage some words have been deleted. Fill in the blanks with the help of the alternatives given. Select the most appropriate option for each number.

The term Democracy (1) \_\_\_\_\_ from the Greek (2) \_\_\_\_\_ dêmos (people) and Kratos (power). In its (3) \_\_\_\_\_ meaning, democracy means the "rule of the people". In fact it is a form of government in which all eligible people have an (4) \_\_\_\_\_ say in the decisions that affect their lives. Democracy (5) \_\_\_\_\_ a political systems existed in some Greek city-states, notably Athens following a popular uprising in 508 BC.

**SubQuestion No : 23**

**Q.23** Select the most appropriate option to fill in blank number 3.

- Ans
- 1. metaphorical
  - 2. hyperbole
  - 3. figurative
  - 4. literal

Question Type : MCQ  
Question ID : 264330135674  
Option 1 ID : 264330531588  
Option 2 ID : 264330531589  
Option 3 ID : 264330531587  
Option 4 ID : 264330531590  
Status : Answered  
Chosen Option : 4

**Comprehension:**

In the following passage some words have been deleted. Fill in the blanks with the help of the alternatives given. Select the most appropriate option for each number.

The term Democracy (1) \_\_\_\_\_ from the Greek (2) \_\_\_\_\_ dêmos (people) and Kratos (power). In its (3) \_\_\_\_\_ meaning, democracy means the "rule of the people". In fact it is a form of government in which all eligible people have an (4) \_\_\_\_\_ say in the decisions that affect their lives. Democracy (5) \_\_\_\_\_ a political systems existed in some Greek city-states, notably Athens following a popular uprising in 508 BC.

**SubQuestion No : 24**

Q.24 Select the most appropriate option to fill in blank number 4.

- Ans
- 1. irregular
  - 2. unequal
  - 3. equal
  - 4. unfair

Question Type : MCQ  
Question ID : 264330135675  
Option 1 ID : 264330531594  
Option 2 ID : 264330531592  
Option 3 ID : 264330531593  
Option 4 ID : 264330531591  
Status : Answered  
Chosen Option : 3

**Comprehension:**

In the following passage some words have been deleted. Fill in the blanks with the help of the alternatives given. Select the most appropriate option for each number.

The term Democracy (1) \_\_\_\_\_ from the Greek (2) \_\_\_\_\_ dêmos (people) and Kratos (power). In its (3) \_\_\_\_\_ meaning, democracy means the "rule of the people". In fact it is a form of government in which all eligible people have an (4) \_\_\_\_\_ say in the decisions that affect their lives. Democracy (5) \_\_\_\_\_ a political systems existed in some Greek city-states, notably Athens following a popular uprising in 508 BC.

**SubQuestion No : 25**

Q.25 Select the most appropriate option to fill in blank number 5.

- Ans
- 1. as
  - 2. of
  - 3. over
  - 4. in

Question Type : MCQ  
Question ID : 264330135676  
Option 1 ID : 264330531595  
Option 2 ID : 264330531597  
Option 3 ID : 264330531598  
Option 4 ID : 264330531596  
Status : Answered  
Chosen Option : 4