

**SSC
MTS**

**Previous Year Paper
15 Jun, 2023 Shift 3**



testbook

Multi Tasking Non Technical Staff and Havaladar CBIC and CBN Examination 2022

Roll Number	
Candidate Name	
Venue Name	
Exam Date	15/06/2023
Exam Time	3:30 PM - 5:00 PM
Subject	MTS Non Tech Havaladar CBIC and CBN Examination 2022

Section : Numerical and Mathematical Ability

Q.1 What is that least perfect square, which is exactly divisible by each of 12, 84 and 24?

- Ans
- 1. 2304
 - 2. 7056
 - 3. 11664
 - 4. 1764

Question Type : MCQ

Question ID : 264330140548

Option 1 ID : 264330550548

Option 2 ID : 264330550549

Option 3 ID : 264330550547

Option 4 ID : 264330550550

Status : **Not Attempted and Marked For Review**

Chosen Option : --

Q.2 The given table shows the data regarding the number of medals won by four different countries in Asian games in the year 2016. The ratio of number of silver medals won by China to the number of gold medals won by India is:

Country	Gold Medals	Silver Medals	Bronze Medals
China	31	36	36
India	18	22	28
Russia	26	16	25
Japan	10	18	15

- Ans
- 1. 3:2
 - 2. 2:1
 - 3. 5:9
 - 4. 4:9

Question Type : MCQ

Question ID : 264330139052

Option 1 ID : 264330544815

Option 2 ID : 264330544816

Option 3 ID : 264330544818

Option 4 ID : 264330544817

Status : **Answered**

Chosen Option : 2

Q.3 A shopkeeper sells an article at 20 percent profit. If he had bought it at 10 percent less price and sold it for Rs. 48 less, then he would have earned a profit of 20 percent. What is the cost price of the article?

- Ans**
- 1. Rs. 400
 - 2. Rs. 460
 - 3. Rs. 340
 - 4. Rs. 520

Question Type : MCQ
Question ID : 264330140220
Option 1 ID : 264330549260
Option 2 ID : 264330549259
Option 3 ID : 264330549261
Option 4 ID : 264330549262
Status : **Not Attempted and Marked For Review**
Chosen Option : --

Q.4 Average of 40 results is 15. If 5 is subtracted from each result, then what will be the new average of the results?

- Ans**
- 1. 15
 - 2. 12
 - 3. 10
 - 4. 11

Question Type : MCQ
Question ID : 264330139914
Option 1 ID : 264330548036
Option 2 ID : 264330548037
Option 3 ID : 264330548038
Option 4 ID : 264330548035
Status : **Answered**
Chosen Option : 4

Q.5 After working for 20 days, Shikha finds that only 20 percent of the work is done. She employs Tina who is 100 percent more efficient than Shikha. In how many days Tina alone can complete the whole work?

- Ans**
- 1. 60 days
 - 2. 30 days
 - 3. 40 days
 - 4. 50 days

Question Type : MCQ
Question ID : 264330139952
Option 1 ID : 264330548189
Option 2 ID : 264330548190
Option 3 ID : 264330548188
Option 4 ID : 264330548187
Status : **Not Attempted and Marked For Review**
Chosen Option : --

Q.6 A bus travels 60 km in first hour, 40 km in second hour and 50 km in third hour. What is the average speed of the bus?

- Ans**
- 1. 50 km/hr
 - 2. 60 km/hr
 - 3. 55 km/hr
 - 4. 45 km/hr

Question Type : **MCQ**
 Question ID : **264330140825**
 Option 1 ID : **264330551648**
 Option 2 ID : **264330551650**
 Option 3 ID : **264330551649**
 Option 4 ID : **264330551647**
 Status : **Not Attempted and Marked For Review**
 Chosen Option : --

Q.7 A runner starts running from a point at 5 : 00 am at the speed of 10 km/hr. Second runner starts from the same point at 8 : 00 am in the same direction with a speed of 15 km/hr. At what time of the day will the second runner will overtake the first runner?

- Ans**
- 1. 12 : 30 pm
 - 2. 2 : 00 pm
 - 3. 12 : 00 pm
 - 4. 1 : 00 pm

Question Type : **MCQ**
 Question ID : **264330140155**
 Option 1 ID : **264330549001**
 Option 2 ID : **264330549000**
 Option 3 ID : **264330548999**
 Option 4 ID : **264330549002**
 Status : **Not Answered**
 Chosen Option : --

Q.8 40 percent of selling price of a fan is equal to $\frac{4}{5}$ of the cost price of the fan. What is the profit percent?

- Ans**
- 1. 125 percent
 - 2. 100 percent
 - 3. 150 percent
 - 4. 120 percent

Question Type : **MCQ**
 Question ID : **264330140539**
 Option 1 ID : **264330550512**
 Option 2 ID : **264330550514**
 Option 3 ID : **264330550513**
 Option 4 ID : **264330550511**
 Status : **Not Answered**
 Chosen Option : --

Q.9 B and C can complete a work alone in 10 days and 30 days respectively. They began the work together but B left the work after some days and C completed the remaining work in 10 days. After how many days from the beginning B left the work?

- Ans**
- 1. 4 days
 - 2. 5 days
 - 3. 6 days
 - 4. 8 days

Question Type : MCQ
 Question ID : 264330140194
 Option 1 ID : 264330549156
 Option 2 ID : 264330549155
 Option 3 ID : 264330549157
 Option 4 ID : 264330549158
 Status : Not Answered
 Chosen Option : --

Q.10 Population of a town increases at the rate of 20 percent per annum. If the population of town will be 69,120 after 2 years, then what is the present population of the town?

- Ans**
- 1. 48000
 - 2. 36000
 - 3. 40000
 - 4. 42000

Question Type : MCQ
 Question ID : 264330139639
 Option 1 ID : 264330546973
 Option 2 ID : 264330546971
 Option 3 ID : 264330546972
 Option 4 ID : 264330546974
 Status : Not Answered
 Chosen Option : --

Q.11 A number is increased by 20% and then the increased number is decreased by 20%. The net increase or decrease is :

- Ans**
- 1. Decrease 2%
 - 2. Increase 2%
 - 3. Decrease 4%
 - 4. increase 4%

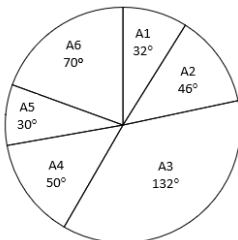
Question Type : MCQ
 Question ID : 264330140802
 Option 1 ID : 264330551558
 Option 2 ID : 264330551557
 Option 3 ID : 264330551556
 Option 4 ID : 264330551555
 Status : Not Answered
 Chosen Option : --

Q.12 If a sum is invested at simple interest, then it becomes $\frac{3}{2}$ of itself in 4 years. What is the annual rate of interest?

- Ans**
- 1. 6.5 percent
 - 2. 12.5 percent
 - 3. 17.5 percent
 - 4. 10 percent

Question Type : MCQ
 Question ID : 264330140203
 Option 1 ID : 264330549191
 Option 2 ID : 264330549193
 Option 3 ID : 264330549194
 Option 4 ID : 264330549192
 Status : Not Answered
 Chosen Option : --

Q.13 The pie chart given below shows the price of 6 different articles. The total price of all these 6 articles is 5040. The price of a particular article is shown in terms of degree with respect to the total price of all these 6 articles.



Which of the following statement is NOT correct?

- I. The total price of A1, A2, A4 and A6 is 2772.
- II. The difference between the total price of A3 and A5 together and the total price of A4 and A6 together is 488.

- Ans**
- 1. Only II
 - 2. Both I and II
 - 3. Only I
 - 4. Neither I nor II

Question Type : MCQ
 Question ID : 264330140552
 Option 1 ID : 264330550564
 Option 2 ID : 264330550565
 Option 3 ID : 264330550563
 Option 4 ID : 264330550566
 Status : Not Answered
 Chosen Option : --

Q.14 What is the value of $\frac{91 + 13 \text{ of } (45 \div 21 \times 14 \div 5) - 22 \times 4}{(42 \times 21 \div 168 \times 2) - (66 \text{ of } 15 \div 90)}$?

- Ans
- 1. -162
 - 2. -81
 - 3. -172
 - 4. -144

Question Type : MCQ
 Question ID : 264330140190
 Option 1 ID : 264330549141
 Option 2 ID : 264330549140
 Option 3 ID : 264330549139
 Option 4 ID : 264330549142
 Status : Not Answered
 Chosen Option : --


Q.15 Marked price of a car is Rs. 600000. Rahul buys that car at two successive discounts of 30 percent and 20 percent. If after using the car, he sells the car for Rs. 478000, then what is the profit percentage?

- Ans
- 1. 36.85 percent
 - 2. 33.33 percent
 - 3. 39.87 percent
 - 4. 42.26 percent

Question Type : MCQ
 Question ID : 264330140595
 Option 1 ID : 264330550732
 Option 2 ID : 264330550733
 Option 3 ID : 264330550731
 Option 4 ID : 264330550734
 Status : Not Answered
 Chosen Option : --

Q.16 What will be the HCF of 0.25 and 1.25?

- Ans
- 1. 1.25
 - 2. 2.5
 - 3. 0.5
 - 4. 0.25



Question Type : MCQ
 Question ID : 264330140798
 Option 1 ID : 264330551539
 Option 2 ID : 264330551542
 Option 3 ID : 264330551540
 Option 4 ID : 264330551541
 Status : Not Answered
 Chosen Option : --

Q.17 If the radius of a cylinder is decreased by 16 percent, then by how much percent its height must be increased, so that the volume of the cylinder remains same?

- Ans**
- 1. 32.96 percent
 - 2. 45.28 percent
 - 3. 36.43 percent
 - 4. 41.72 percent

Question Type : **MCQ**
 Question ID : **264330140576**
 Option 1 ID : **264330550655**
 Option 2 ID : **264330550656**
 Option 3 ID : **264330550657**
 Option 4 ID : **264330550658**
 Status : **Not Answered**
 Chosen Option : --


Q.18 One of the diagonals of a rhombus is 70 percent of the other diagonal. What is the ratio of the area of rhombus to the square of the length of the larger diagonal?

- Ans**
- 1. 20 : 7
 - 2. 5 : 17
 - 3. 6 : 19
 - 4. 7 : 20

Question Type : **MCQ**
 Question ID : **264330140577**
 Option 1 ID : **264330550659**
 Option 2 ID : **264330550661**
 Option 3 ID : **264330550660**
 Option 4 ID : **264330550662**
 Status : **Not Answered**
 Chosen Option : --

Q.19 A certain amount of money is divided among A, B and C in the ratio of 3 : 2 : 5. How much money will C get out of Rs 126?

- Ans**
- 1. Rs.63
 - 2. Rs.66
 - 3. Rs.62
 - 4. Rs.43



Question Type : **MCQ**
 Question ID : **264330140808**
 Option 1 ID : **264330551579**
 Option 2 ID : **264330551581**
 Option 3 ID : **264330551582**
 Option 4 ID : **264330551580**
 Status : **Not Answered**
 Chosen Option : --

Q.20 In what ratio sugar of Rs. 30 per kg should be mixed with sugar of Rs. 40 per kg so that the mixture is worth Rs. 37 per kg?

- Ans**
- 1. 8 : 9
 - 2. 3 : 7
 - 3. 9 : 5
 - 4. 4 : 3

Question Type : MCQ
 Question ID : 264330140541
 Option 1 ID : 264330550521
 Option 2 ID : 264330550522
 Option 3 ID : 264330550520
 Option 4 ID : 264330550519
 Status : Not Answered
 Chosen Option : --

Section : Reasoning Ability and Problem Solving

Q.1 In a certain code language, 'ARMY' is written as 'CPOW'. How will 'HALF' be written in that language?

- Ans**
- 1. JYMD
 - 2. JNYD
 - 3. JDYN
 - 4. JYND

Question Type : MCQ
 Question ID : 264330140017
 Option 1 ID : 264330548448
 Option 2 ID : 264330548447
 Option 3 ID : 264330548450
 Option 4 ID : 264330548449
 Status : Answered
 Chosen Option : 4

Q.2 Which of the following numbers will replace the question mark (?) in the given series?
 71, 73, 76, 81, 88, 99, 112, ?

- Ans**
- 1. 130
 - 2. 129
 - 3. 140
 - 4. 139



Question Type : MCQ
 Question ID : 264330140023
 Option 1 ID : 264330548473
 Option 2 ID : 264330548472
 Option 3 ID : 264330548474
 Option 4 ID : 264330548471
 Status : Answered
 Chosen Option : 1

Q.3 Select the option figure in which the given figure is embedded. (rotation is NOT allowed)

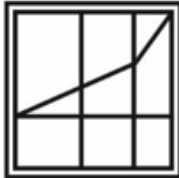


Ans

✗ 1.



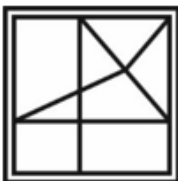
✓ 2.



✗ 3.



✗ 4.



Question Type : MCQ
 Question ID : 264330139988
 Option 1 ID : 264330548334
 Option 2 ID : 264330548331
 Option 3 ID : 264330548333
 Option 4 ID : 264330548332
 Status : Answered
 Chosen Option : 2

Q.4 Select the option in which the numbers shares the same relationship in set as that shared by the numbers in the given set.
 (NOTE: Operations should be performed on the whole numbers, without breaking down the numbers into its constituent digits. E.g. 13 – Operations on 13 such as adding /subtracting /multiplying etc. to 13 can be performed. Breaking down 13 into 1 and 3 and then performing mathematical operations on 1 and 3 is not allowed)

(20, 70, 120)

(120, 170, 220)

Ans

✗ 1. (220, 270, 330)

✗ 2. (420, 470, 530)

✗ 3. (320, 380, 420)

✓ 4. (420, 470, 520)

Question Type : MCQ
 Question ID : 264330140970
 Option 1 ID : 264330552227
 Option 2 ID : 264330552228
 Option 3 ID : 264330552229
 Option 4 ID : 264330552230
 Status : Answered
 Chosen Option : 4

Q.5 Three statements are given followed by two conclusions numbered I and II. Assuming the statements to be true, even if they seem to be at variance with commonly known facts, decide which of the conclusions logically follow(s) from the statements.

Statements:

Some books are pens.

Some books are copies.

All copies are pencils.

Conclusions:

I. Some pencils are pens.

II. Some pencils are books.

- Ans**
- 1. Neither conclusion I nor II follows
 - 2. Both conclusions I and II follow
 - 3. Only conclusion I follows
 - 4. Only conclusion II follows

Question Type : MCQ

Question ID : 264330135358

Option 1 ID : 264330530342

Option 2 ID : 264330530341

Option 3 ID : 264330530339

Option 4 ID : 264330530340

Status : Answered

Chosen Option : 4

Q.6 Which of the mathematical signs should be interchanged in the below equation to make it mathematically correct?

$$45 - 5 + 96 + 8 \times 24 = 9$$

- Ans**
- 1. \div and $-$
 - 2. $+$ and \times
 - 3. $+$ and $-$
 - 4. \times and $-$

Question Type : MCQ

Question ID : 264330140108

Option 1 ID : 264330548812

Option 2 ID : 264330548811

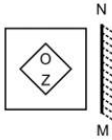
Option 3 ID : 264330548814

Option 4 ID : 264330548813

Status : Answered

Chosen Option : 1

Q.7 Select the correct mirror image of the given figure when the mirror MN is placed to the right side of the figure.



Ans

✗ 1.



✗ 2.



✓ 3.



✗ 4.



Question Type : MCQ
 Question ID : 264330140030
 Option 1 ID : 264330548502
 Option 2 ID : 264330548500
 Option 3 ID : 264330548499
 Option 4 ID : 264330548501
 Status : Answered
 Chosen Option : 3

Q.8 Which of the following numbers will replace the question mark (?) in the given series?

43, 51, 78, 142, 267, ?

Ans

✗ 1. 463

✗ 2. 493

✓ 3. 483

✗ 4. 473



Question Type : MCQ
 Question ID : 264330140484
 Option 1 ID : 264330550315
 Option 2 ID : 264330550318
 Option 3 ID : 264330550317
 Option 4 ID : 264330550316
 Status : Answered
 Chosen Option : 3

Q.9 Select the option that is related to the third word in the same way as the second word is related to the first word.
Taj Mahal : Agra :: Qutub Minar : ?

- Ans**
- 1. Ranchi
 - 2. Delhi
 - 3. Mumbai
 - 4. Chennai

Question Type : MCQ
 Question ID : 264330140135
 Option 1 ID : 264330548921
 Option 2 ID : 264330548920
 Option 3 ID : 264330548922
 Option 4 ID : 264330548919
 Status : Answered
 Chosen Option : 2

Q.10 Two statements are given followed by two conclusions numbered I and II. Assuming the statements to be true, even if they seem to be at variance with commonly known facts, decide which of the conclusions logically follow(s) from the statements.

Statements:

No duck is a doll.

All eggs are doll.

Conclusions:

I. No duck is an egg.

II. Some dolls are eggs.

- Ans**
- 1. Neither conclusion I nor II follows
 - 2. Only conclusion II follows
 - 3. Only conclusion I follows
 - 4. Both conclusions I and II follow

Question Type : MCQ
 Question ID : 264330135357
 Option 1 ID : 264330530338
 Option 2 ID : 264330530336
 Option 3 ID : 264330530335
 Option 4 ID : 264330530337
 Status : Answered
 Chosen Option : 4

Q.11 Select the option that is related to the third number in the same way as the second number is related to the first number.
289 : 306 :: 196 : ?

- Ans**
- 1. 210
 - 2. 512
 - 3. 225
 - 4. 320

Question Type : MCQ
 Question ID : 264330140004
 Option 1 ID : 264330548395
 Option 2 ID : 264330548398
 Option 3 ID : 264330548397
 Option 4 ID : 264330548396
 Status : Answered
 Chosen Option : 1

Q.12 Which of the following letter cluster will replace the question mark (?) in the given series?
VY, ZC, DG, HK, ?

- Ans**
- 1. LM
 - 2. LN
 - 3. MO
 - 4. LO

Question Type : MCQ
 Question ID : 264330140432
 Option 1 ID : 264330550108
 Option 2 ID : 264330550109
 Option 3 ID : 264330550110
 Option 4 ID : 264330550107
 Status : Answered
 Chosen Option : 4

Q.13 Five men namely Bob, Bran, Bot, Batista and Brian are sitting in a circle facing the centre. Brian is sitting to the immediate left of Bot and the immediate right of Bob. Batista sits second to the left of Brian. Who sits to the immediate right of Bran?

- Ans**
- 1. Batista
 - 2. Bot
 - 3. Bob
 - 4. Brian

Question Type : MCQ
 Question ID : 264330139998
 Option 1 ID : 264330548371
 Option 2 ID : 264330548373
 Option 3 ID : 264330548372
 Option 4 ID : 264330548374
 Status : Answered
 Chosen Option : 1

Q.14 Among five girls Anju, Bittu, Charul, Drishti and Sara, who are of different ages. Anju is younger than only Drishti and Sara. Sara is younger than Drishti and older than Bittu. Charul is youngest. Who is the fourth oldest?

- Ans**
- 1. Sara
 - 2. Drishti
 - 3. Bittu
 - 4. Charul

Question Type : MCQ
 Question ID : 264330140041
 Option 1 ID : 264330548544
 Option 2 ID : 264330548546
 Option 3 ID : 264330548543
 Option 4 ID : 264330548545
 Status : Answered
 Chosen Option : 1

Q.15 If A denotes 'addition', B denotes 'multiplication', C denotes 'subtraction', and D denotes 'division', then what will be the value of the following equation?
 $8 B 4 A 7 C 21 = ?$

- Ans**
- 1. 18
 - 2. 21
 - 3. 26
 - 4. 16

Question Type : **MCQ**
 Question ID : **264330135364**
 Option 1 ID : **264330530366**
 Option 2 ID : **264330530363**
 Option 3 ID : **264330530365**
 Option 4 ID : **264330530364**
 Status : **Answered**
 Chosen Option : 1

Q.16 In a certain code language, 'CASHEW' is written as 'WEHSAC'. How will 'FLORAL' be written in that language?

- Ans**
- 1. LAROFL
 - 2. LAROLF
 - 3. ALROLF
 - 4. LAORLF

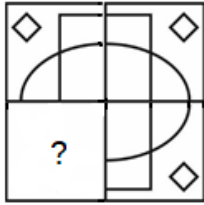
Question Type : **MCQ**
 Question ID : **264330138792**
 Option 1 ID : **264330543777**
 Option 2 ID : **264330543778**
 Option 3 ID : **264330543776**
 Option 4 ID : **264330543775**
 Status : **Answered**
 Chosen Option : 2

Q.17 In a certain code language, 'SPEAKER' is coded as '2613517', 'TACKLE' is coded as '934501'. What is the code for 'PEACE' in that code language?

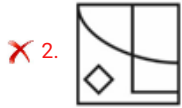
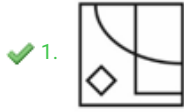
- Ans**
- 1. 51341
 - 2. 61241
 - 3. 62342
 - 4. 61341

Question Type : **MCQ**
 Question ID : **264330139532**
 Option 1 ID : **264330546546**
 Option 2 ID : **264330546543**
 Option 3 ID : **264330546545**
 Option 4 ID : **264330546544**
 Status : **Answered**
 Chosen Option : 4

Q.18 Which answer figure will complete the pattern in the question figure?



Ans



Question Type : MCQ
 Question ID : 264330139587
 Option 1 ID : 264330546765
 Option 2 ID : 264330546764
 Option 3 ID : 264330546766
 Option 4 ID : 264330546763
 Status : Answered
 Chosen Option : 2

Q.19 Eight players Anil, Kamal, Ram, Sanjay, Aakash, Vivek, Rahul and Ramu are sitting around a circular table facing towards the centre (not necessarily in the same order). Sanjay is second to the left of Anil. Rahul is fourth to the right of Anil. Ram is not the immediate neighbour of Rahul or Sanjay. Aakash is second to the right of Ram. Kamal is second to the right of Vivek. Who is the second to the right of Ramu?

- Ans
- ✗ 1. Kamal
 - ✗ 2. Vivek
 - ✗ 3. Sanjay
 - ✓ 4. Rahul

Question Type : MCQ
 Question ID : 264330140982
 Option 1 ID : 264330552275
 Option 2 ID : 264330552276
 Option 3 ID : 264330552277
 Option 4 ID : 264330552278
 Status : Answered
 Chosen Option : 4

Q.20 Select the option that is related to the third word in the same way as the second word is related to the first word.
Jaundice : Liver :: Tuberculosis : ?

- Ans**
- 1. Leg
 - 2. Lungs
 - 3. Heart
 - 4. Stomach

Question Type : MCQ
 Question ID : 264330140034
 Option 1 ID : 264330548516
 Option 2 ID : 264330548517
 Option 3 ID : 264330548515
 Option 4 ID : 264330548518
 Status : Answered
 Chosen Option : 2

Section : General Awareness

Q.1 Prayer halls in Buddhist architectural monuments were also known as _____.

- Ans**
- 1. pishtaq
 - 2. chaitya grihas
 - 3. viharas
 - 4. stupas

Question Type : MCQ
 Question ID : 264330140321
 Option 1 ID : 264330549666
 Option 2 ID : 264330549663
 Option 3 ID : 264330549665
 Option 4 ID : 264330549664
 Status : Not Attempted and Marked For Review
 Chosen Option : --

Q.2 Which among the following words were added to the Preamble in the 42nd amendment of the Indian constitution?

- Ans**
- 1. Socialist
 - 2. Democratic
 - 3. Republic
 - 4. Sovereign

Question Type : MCQ
 Question ID : 264330140337
 Option 1 ID : 264330549728
 Option 2 ID : 264330549729
 Option 3 ID : 264330549730
 Option 4 ID : 264330549727
 Status : Answered
 Chosen Option : 4

Q.3 _____ are the vessels which carry carbon dioxide-rich blood back to the heart.

- Ans
- 1. arteries
 - 2. capillaries
 - 3. veins
 - 4. neurons

Question Type : MCQ
 Question ID : 264330140280
 Option 1 ID : 264330549499
 Option 2 ID : 264330549502
 Option 3 ID : 264330549501
 Option 4 ID : 264330549500
 Status : Answered
 Chosen Option : 1

Q.4 Which Indian ministry introduced the Jammu and Kashmir Reorganisation Bill, 2019?

- Ans
- 1. Ministry of Defence
 - 2. Ministry of Home Affairs
 - 3. Ministry of External Affairs
 - 4. Ministry of Parliamentary Affairs

Question Type : MCQ
 Question ID : 264330140368
 Option 1 ID : 264330549851
 Option 2 ID : 264330549852
 Option 3 ID : 264330549853
 Option 4 ID : 264330549854
 Status : Not Answered
 Chosen Option : --

Q.5 The first urban settlement to reach a population of one million was _____.

- Ans
- 1. Tokyo
 - 2. London
 - 3. Berlin
 - 4. New York

Question Type : MCQ
 Question ID : 264330138991
 Option 1 ID : 264330544574
 Option 2 ID : 264330544571
 Option 3 ID : 264330544573
 Option 4 ID : 264330544572
 Status : Not Attempted and Marked For Review
 Chosen Option : --

Q.6 The Narmada river rises in the Amarkantak hills situated in which state?

- Ans
- 1. Gujarat
 - 2. Rajasthan
 - 3. Maharashtra
 - 4. Madhya Pradesh

Question Type : MCQ
Question ID : 264330139691
Option 1 ID : 264330547179
Option 2 ID : 264330547181
Option 3 ID : 264330547180
Option 4 ID : 264330547182
Status : Answered
Chosen Option : 4

Q.7 Which of the following Indian state is biggest in terms of area?

- Ans
- 1. Madhya Pradesh
 - 2. Uttar Pradesh
 - 3. Maharashtra
 - 4. Rajasthan

Question Type : MCQ
Question ID : 264330139717
Option 1 ID : 264330547286
Option 2 ID : 264330547284
Option 3 ID : 264330547283
Option 4 ID : 264330547285
Status : Answered
Chosen Option : 4

Q.8 Pankaj Advani is associated with which sports?

- Ans
- 1. Golf
 - 2. Billiards
 - 3. Table Tennis
 - 4. Chess

Question Type : MCQ
Question ID : 264330139677
Option 1 ID : 264330547126
Option 2 ID : 264330547125
Option 3 ID : 264330547124
Option 4 ID : 264330547123
Status : Not Attempted and Marked For Review
Chosen Option : --

Q.9 Which among the following was set up in 1956 by Indian government by nationalising all the existing private sector life insurance companies?

- Ans**
- 1. United India Insurance Company Limited
 - 2. New India Assurance Company Limited
 - 3. Life Insurance Corporation of India
 - 4. General Insurance Corporation of India

Question Type : MCQ
 Question ID : 264330140725
 Option 1 ID : 264330551248
 Option 2 ID : 264330551250
 Option 3 ID : 264330551249
 Option 4 ID : 264330551247
 Status : Answered
 Chosen Option : 3

Q.10 The kingdoms of Chola, Chera and Pandyas belong to which period in the ancient India?

- Ans**
- 1. Mahajanapada period
 - 2. Mauryan Period
 - 3. Sangam Period
 - 4. Gupta Period

Question Type : MCQ
 Question ID : 264330140689
 Option 1 ID : 264330551104
 Option 2 ID : 264330551103
 Option 3 ID : 264330551105
 Option 4 ID : 264330551106
 Status : Answered
 Chosen Option : 3

Q.11 Fishes have _____ chambers of the heart.

- Ans**
- 1. one
 - 2. four
 - 3. three
 - 4. two



Question Type : MCQ
 Question ID : 264330140281
 Option 1 ID : 264330549503
 Option 2 ID : 264330549506
 Option 3 ID : 264330549505
 Option 4 ID : 264330549504
 Status : Answered
 Chosen Option : 4

Q.12 Who among the following is not associated with Kuchipudi dance form?

- Ans
- 1. Ghanakanta Bora Borbayan
 - 2. Vyjayanti Kashi
 - 3. Vempati Chinna Satyam
 - 4. Radha Reddy

Question Type : MCQ
 Question ID : 264330141065
 Option 1 ID : 264330552610
 Option 2 ID : 264330552609
 Option 3 ID : 264330552608
 Option 4 ID : 264330552607
 Status : Answered
 Chosen Option : 1

Q.13 Which among the following bills passed in Parliament in 2022 replaced the Identification of Prisoners Act, 1920?

- Ans
- 1. The Central Vigilance Commission (Amendment) Bill
 - 2. The Criminal Procedure (Identification) Bill
 - 3. The Election Laws (Amendment) Bill
 - 4. The Farm Laws Repeal Bill

Question Type : MCQ
 Question ID : 264330140701
 Option 1 ID : 264330551153
 Option 2 ID : 264330551151
 Option 3 ID : 264330551152
 Option 4 ID : 264330551154
 Status : Answered
 Chosen Option : 2

Q.14 Who among the following is a sitar maestro of global acclaim?

- Ans
- 1. Girija Devi
 - 2. Vishwa Mohan Bhatt
 - 3. Bismillah Khan
 - 4. Shahid Parvez Khan

Question Type : MCQ
 Question ID : 264330138977
 Option 1 ID : 264330544518
 Option 2 ID : 264330544516
 Option 3 ID : 264330544517
 Option 4 ID : 264330544515
 Status : Answered
 Chosen Option : 4

Q.15 The summer months experience _____ in the northern part of India.

- Ans
- 1. heavy rain
 - 2. rising air pressure
 - 3. falling air pressure
 - 4. decreasing temperature

Question Type : MCQ
Question ID : 264330140684
Option 1 ID : 264330551086
Option 2 ID : 264330551083
Option 3 ID : 264330551085
Option 4 ID : 264330551084
Status : Answered
Chosen Option : 2

Q.16 The 'Golden quadrilateral' does not connect which of the following cities?

- Ans
- 1. Delhi
 - 2. Chennai
 - 3. Bhopal
 - 4. Mumbai

Question Type : MCQ
Question ID : 264330139765
Option 1 ID : 264330547475
Option 2 ID : 264330547478
Option 3 ID : 264330547477
Option 4 ID : 264330547476
Status : Marked For Review
Chosen Option : 3

Q.17 Kathakali dance form originated from which of the following states?

- Ans
- 1. Odisha
 - 2. Tamil Nadu
 - 3. Karnataka
 - 4. Kerala

Question Type : MCQ
Question ID : 264330140344
Option 1 ID : 264330549758
Option 2 ID : 264330549756
Option 3 ID : 264330549755
Option 4 ID : 264330549757
Status : Answered
Chosen Option : 4

Q.18 What did the medieval term “Raqs” mean?

- Ans
- 1. Dancing
 - 2. Singing
 - 3. Chanting
 - 4. Ritual

Question Type : MCQ
Question ID : 264330139888
Option 1 ID : 264330547933
Option 2 ID : 264330547932
Option 3 ID : 264330547931
Option 4 ID : 264330547934
Status : Not Answered
Chosen Option : --

Q.19 In which Indian movement, were the issues faced by indigo planters, first brought to light in 1917?

- Ans
- 1. Champaran Satyagraha
 - 2. Non-Cooperation Movement
 - 3. Kheda Satyagraha
 - 4. Ahmedabad Mill Strike

Question Type : MCQ
Question ID : 264330140741
Option 1 ID : 264330551311
Option 2 ID : 264330551314
Option 3 ID : 264330551313
Option 4 ID : 264330551312
Status : Answered
Chosen Option : 1

Q.20 Azhar (2016), a sports-related movie, is based on which of the following sports?

- Ans
- 1. Mixed Martial arts
 - 2. Boxing
 - 3. Hockey
 - 4. Cricket

Question Type : MCQ
Question ID : 264330138949
Option 1 ID : 264330544406
Option 2 ID : 264330544403
Option 3 ID : 264330544404
Option 4 ID : 264330544405
Status : Answered
Chosen Option : 4

Q.21 Who established the Ramakrishna Mission?

- Ans
- 1. Tarun Sagar
 - 2. Gaur Gopal Das
 - 3. Jambuvijaya
 - 4. Swami Vivekananda

Question Type : MCQ
Question ID : 264330140742
Option 1 ID : 264330551315
Option 2 ID : 264330551316
Option 3 ID : 264330551318
Option 4 ID : 264330551317
Status : Answered
Chosen Option : 4

Q.22 Which among the following books is an autobiography of Mithali Raj?

- Ans
- 1. One More Over
 - 2. All Round View
 - 3. No Holding Back
 - 4. Unguarded

Question Type : MCQ
Question ID : 264330140359
Option 1 ID : 264330549815
Option 2 ID : 264330549816
Option 3 ID : 264330549818
Option 4 ID : 264330549817
Status : Not Attempted and Marked For Review
Chosen Option : --

Q.23 What is the tenure of a Rajya Sabha member?

- Ans
- 1. Three years
 - 2. Five years
 - 3. Two years
 - 4. Six years

Question Type : MCQ
Question ID : 264330140672
Option 1 ID : 264330551037
Option 2 ID : 264330551036
Option 3 ID : 264330551035
Option 4 ID : 264330551038
Status : Answered
Chosen Option : 2

Q.24 Which among the following is a famous festival of Maharashtra, India?

- Ans
- 1. Chhath Puja
 - 2. Onam
 - 3. Ugadi
 - 4. Gudi Padva

Question Type : MCQ
 Question ID : 264330140320
 Option 1 ID : 264330549660
 Option 2 ID : 264330549662
 Option 3 ID : 264330549659
 Option 4 ID : 264330549661
 Status : Answered
 Chosen Option : 4

Q.25 The objects which repeats its motion after some time is called _____ .

- Ans
- 1. Rectilinear motion
 - 2. semi – circular motion
 - 3. periodic motion
 - 4. Circular motion

Question Type : MCQ
 Question ID : 264330139689
 Option 1 ID : 264330547173
 Option 2 ID : 264330547174
 Option 3 ID : 264330547171
 Option 4 ID : 264330547172
 Status : Not Answered
 Chosen Option : --

Section : English Language and Comprehension

Q.1 In the following question, out of the given four alternatives, select the alternative which best expresses the meaning of the Idiom/Phrase.

To strain every nerve

- Ans
- 1. To make a great effort
 - 2. To claim something
 - 3. To go for physiotherapy
 - 4. To manipulate someone in the best way

Question Type : MCQ
 Question ID : 264330135173
 Option 1 ID : 264330529624
 Option 2 ID : 264330529623
 Option 3 ID : 264330529626
 Option 4 ID : 264330529625
 Status : Answered
 Chosen Option : 4

Q.2 Improve the underlined part of the sentence. Choose 'No improvement' as an answer if the sentence is grammatically correct.

He had thrown the wrapper into the garbage.

- Ans**
- 1. No improvement
 - 2. throw the
 - 3. has throwing the
 - 4. thrown the

Question Type : MCQ
 Question ID : 264330135156
 Option 1 ID : 264330529562
 Option 2 ID : 264330529559
 Option 3 ID : 264330529561
 Option 4 ID : 264330529560
 Status : Not Answered
 Chosen Option : --

Q.3 Choose the word that can substitute the given group of words.

A place for housing aeroplanes

- Ans**
- 1. Hangar
 - 2. Burrow
 - 3. Hutch
 - 4. Brewery

Question Type : MCQ
 Question ID : 264330135245
 Option 1 ID : 264330529900
 Option 2 ID : 264330529899
 Option 3 ID : 264330529901
 Option 4 ID : 264330529902
 Status : Answered
 Chosen Option : 1

Q.4 Select the appropriate antonym for the underlined word.

What youthful philosophers and experimentalists we are!

- Ans**
- 1. unformed
 - 2. childlike
 - 3. raw
 - 4. ripened

Question Type : MCQ
 Question ID : 264330135171
 Option 1 ID : 264330529617
 Option 2 ID : 264330529615
 Option 3 ID : 264330529618
 Option 4 ID : 264330529616
 Status : Answered
 Chosen Option : 4

Q.5 Select the word segment that substitutes (replaces) the bracketed word segment correctly and completes the sentence meaningfully. Select the option 'no correction required' if the sentence is correct as given.

(Most time) they didn't have enough to eat and went to bed hungry

- Ans**
- 1. Many a times
 - 2. Many a time
 - 3. No correction required
 - 4. More times

Question Type : **MCQ**
 Question ID : **264330135692**
 Option 1 ID : **264330531660**
 Option 2 ID : **264330531661**
 Option 3 ID : **264330531662**
 Option 4 ID : **264330531659**
 Status : **Not Answered**
 Chosen Option : --

Q.6 Find the part of the given sentence that has an error in it. If there is no error, choose 'No error'.

Diseases passed from animals to humans are called zoonoses.

- Ans**
- 1. No error
 - 2. Diseases passed from
 - 3. animals to humans
 - 4. are called zoonoses.

Question Type : **MCQ**
 Question ID : **264330135153**
 Option 1 ID : **264330529550**
 Option 2 ID : **264330529547**
 Option 3 ID : **264330529548**
 Option 4 ID : **264330529549**
 Status : **Not Answered**
 Chosen Option : --

Q.7 Choose the sentence with no spelling error.

- Ans**
- 1. Such bloms typically don't lead to deaths.
 - 2. Such blooms typically don't leade to deaths.
 - 3. Such blooms typicly don't lead to deaths.
 - 4. Such blooms typically don't lead to deaths.

Question Type : **MCQ**
 Question ID : **264330135532**
 Option 1 ID : **264330531033**
 Option 2 ID : **264330531034**
 Option 3 ID : **264330531032**
 Option 4 ID : **264330531031**
 Status : **Answered**
 Chosen Option : **4**

Q.8 A sentence has been given with a blank to be filled with an appropriate option. Choose the correct alternative.

I smiled at my son and _____ thankful.

- Ans**
- ✓ 1. felt
 - ✗ 2. fallen
 - ✗ 3. feel
 - ✗ 4. feeling

Question Type : MCQ
 Question ID : 264330135643
 Option 1 ID : 264330531471
 Option 2 ID : 264330531473
 Option 3 ID : 264330531472
 Option 4 ID : 264330531474
 Status : Answered
 Chosen Option : 1

Q.9 Select the most appropriate meaning of the given idiom.

Be at a crossroads

- Ans**
- ✓ 1. To make a very important decision
 - ✗ 2. To have taken the wrong road
 - ✗ 3. To have forgotten the way
 - ✗ 4. To be confused

Question Type : MCQ
 Question ID : 264330135761
 Option 1 ID : 264330531924
 Option 2 ID : 264330531926
 Option 3 ID : 264330531923
 Option 4 ID : 264330531925
 Status : Answered
 Chosen Option : 4

Q.10 Select the most appropriate antonym of the given word.

Reservation

- Ans**
- ✗ 1. Catch
 - ✓ 2. Openness
 - ✗ 3. Doubt
 - ✗ 4. Conserve

Question Type : MCQ
 Question ID : 264330136179
 Option 1 ID : 264330533511
 Option 2 ID : 264330533513
 Option 3 ID : 264330533512
 Option 4 ID : 264330533514
 Status : Answered
 Chosen Option : 2

Q.11 Identify the segment that contains a grammatical error. If there is no error, select 'No error'.

Do you have the faint / idea of what would happen / if Maa sees this?

- Ans
- 1. idea of what would happen
 - 2. No error
 - 3. if Maa sees this?
 - 4. Do you have the faint

Question Type : MCQ
 Question ID : 264330136562
 Option 1 ID : 264330534984
 Option 2 ID : 264330534986
 Option 3 ID : 264330534985
 Option 4 ID : 264330534983
 Status : Not Attempted and Marked For Review
 Chosen Option : --

Q.12 Select the most appropriate synonym of the given word.

Converge

- Ans
- 1. Coincide
 - 2. Homicide
 - 3. Fratricide
 - 4. Verbicide

Question Type : MCQ
 Question ID : 264330135835
 Option 1 ID : 264330532208
 Option 2 ID : 264330532210
 Option 3 ID : 264330532209
 Option 4 ID : 264330532207
 Status : Answered
 Chosen Option : 1

Q.13 Fill in the blank with the most appropriate option.

As he walked past the chambers, Samir asked everyone to quiet _____.

- Ans
- 1. up
 - 2. down
 - 3. rise
 - 4. please

Question Type : MCQ
 Question ID : 264330136185
 Option 1 ID : 264330533535
 Option 2 ID : 264330533537
 Option 3 ID : 264330533538
 Option 4 ID : 264330533536
 Status : Answered
 Chosen Option : 4

Q.14 Select the word segment that substitutes (replaces) the bracketed word segment correctly and completes the sentence meaningfully. Select the option 'no correction required' if the sentence is correct as given.

(Many man) have tried to find the caves but none have succeeded.

- Ans**
- 1. Many a men
 - 2. No correction required
 - 3. Many a man
 - 4. Much man

Question Type : MCQ
 Question ID : 264330136270
 Option 1 ID : 264330533863
 Option 2 ID : 264330533866
 Option 3 ID : 264330533865
 Option 4 ID : 264330533864
 Status : Answered
 Chosen Option : 1

Q.15 Identify the segment that contains a grammatical error. If there is no error, select 'No error'.
 Leaders are self-direct, / but learning and understanding / are the keys to self-direction.

- Ans**
- 1. No error
 - 2. Leaders are self-direct,
 - 3. but learning and understanding
 - 4. are the keys to self-direction.

Question Type : MCQ
 Question ID : 264330135847
 Option 1 ID : 264330532258
 Option 2 ID : 264330532255
 Option 3 ID : 264330532256
 Option 4 ID : 264330532257
 Status : Answered
 Chosen Option : 2

Q.16 Select the most appropriate option to fill in the blank.

The life of the church seems, indeed, to have been in a more stagnant and _____ condition in this age than at any other period of English history.

- Ans**
- 1. tangential
 - 2. truculent
 - 3. torpid
 - 4. expedite

Question Type : MCQ
 Question ID : 264330136194
 Option 1 ID : 264330533571
 Option 2 ID : 264330533574
 Option 3 ID : 264330533572
 Option 4 ID : 264330533573
 Status : Not Attempted and Marked For Review
 Chosen Option : --

Q.17 Fill in the blank with the most appropriate option.

I think she's right to warn you not to _____ your temper.

- Ans
- ✓ 1. lose
 - ✗ 2. drop
 - ✗ 3. forget
 - ✗ 4. last

Question Type : MCQ
 Question ID : 264330136160
 Option 1 ID : 264330533441
 Option 2 ID : 264330533442
 Option 3 ID : 264330533440
 Option 4 ID : 264330533439
 Status : Answered
 Chosen Option : 1

Q.18 Choose the incorrectly spelt word.

- Ans
- ✓ 1. Contaxte
 - ✗ 2. Station
 - ✗ 3. Magic
 - ✗ 4. Charity

Question Type : MCQ
 Question ID : 264330135252
 Option 1 ID : 264330529930
 Option 2 ID : 264330529928
 Option 3 ID : 264330529927
 Option 4 ID : 264330529929
 Status : Answered
 Chosen Option : 1

Q.19 Select the most appropriate word for the given group of words.

To reveal a secret

- Ans
- ✓ 1. Divulge
 - ✗ 2. Vilify
 - ✗ 3. Conceal
 - ✗ 4. Discern

Question Type : MCQ
 Question ID : 264330136201
 Option 1 ID : 264330533596
 Option 2 ID : 264330533597
 Option 3 ID : 264330533598
 Option 4 ID : 264330533595
 Status : Answered
 Chosen Option : 3

Q.20 Select the most appropriate synonym to substitute the bracketed word in the given sentence.
I do not object to this (accolade) on the grounds that Edinburgh has little literary tradition.

- Ans**
- 1. Criticism
 - 2. Indictment
 - 3. Stubborn
 - 4. Praise

Question Type : MCQ
 Question ID : 264330136760
 Option 1 ID : 264330535746
 Option 2 ID : 264330535743
 Option 3 ID : 264330535745
 Option 4 ID : 264330535744
 Status : Answered
 Chosen Option : 4

Comprehension:

In the following passage some words have been deleted. Fill in the blanks with the help of the alternatives given. Select the most appropriate option for each number.

Professor Sprout was standing (1) _____ a trestle bench in the centre of the greenhouse. (2) _____ twenty (3) _____ of different-coloured ear muffs (4) _____ lying on the bench. Harry (5) _____ his place between Ron and Hermione.

SubQuestion No : 21

Q.21 Select the most appropriate option to fill in blank number 1.

- Ans**
- 1. behind
 - 2. afterwards
 - 3. back off
 - 4. after back

Question Type : MCQ
 Question ID : 264330136570
 Option 1 ID : 264330535013
 Option 2 ID : 264330535014
 Option 3 ID : 264330535011
 Option 4 ID : 264330535012
 Status : Answered
 Chosen Option : 1

Comprehension:

In the following passage some words have been deleted. Fill in the blanks with the help of the alternatives given. Select the most appropriate option for each number.

Professor Sprout was standing (1) _____ a trestle bench in the centre of the greenhouse. (2) _____ twenty (3) _____ of different-coloured ear muffs (4) _____ lying on the bench. Harry (5) _____ his place between Ron and Hermione.

SubQuestion No : 22

Q.22 Select the most appropriate option to fill in blank number 2.

- Ans
- 1. Utmost
 - 2. Round
 - 3. Near by
 - 4. About

Question Type : MCQ
 Question ID : 264330136571
 Option 1 ID : 264330535015
 Option 2 ID : 264330535016
 Option 3 ID : 264330535018
 Option 4 ID : 264330535017
 Status : Answered
 Chosen Option : 4

Comprehension:

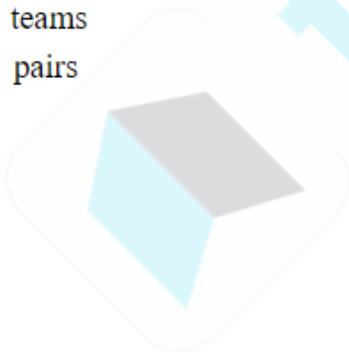
In the following passage some words have been deleted. Fill in the blanks with the help of the alternatives given. Select the most appropriate option for each number.

Professor Sprout was standing (1) _____ a trestle bench in the centre of the greenhouse. (2) _____ twenty (3) _____ of different-coloured ear muffs (4) _____ lying on the bench. Harry (5) _____ his place between Ron and Hermione.

SubQuestion No : 23

Q.23 Select the most appropriate option to fill in blank number 3.

- Ans
- 1. couples
 - 2. duality
 - 3. teams
 - 4. pairs



Question Type : MCQ
 Question ID : 264330136572
 Option 1 ID : 264330535019
 Option 2 ID : 264330535021
 Option 3 ID : 264330535020
 Option 4 ID : 264330535022
 Status : Answered
 Chosen Option : 4

Comprehension:

In the following passage some words have been deleted. Fill in the blanks with the help of the alternatives given. Select the most appropriate option for each number.

Professor Sprout was standing (1) _____ a trestle bench in the centre of the greenhouse. (2) _____ twenty (3) _____ of different-coloured ear muffs (4) _____ lying on the bench. Harry (5) _____ his place between Ron and Hermione.

SubQuestion No : 24

Q.24 Select the most appropriate option to fill in blank number 4.

- Ans
- 1. lay
 - 2. continue
 - 3. was
 - 4. were

Question Type : MCQ
 Question ID : 264330136573
 Option 1 ID : 264330535026
 Option 2 ID : 264330535025
 Option 3 ID : 264330535024
 Option 4 ID : 264330535023
 Status : Answered
 Chosen Option : 4

Comprehension:

In the following passage some words have been deleted. Fill in the blanks with the help of the alternatives given. Select the most appropriate option for each number.

Professor Sprout was standing (1) _____ a trestle bench in the centre of the greenhouse. (2) _____ twenty (3) _____ of different-coloured ear muffs (4) _____ lying on the bench. Harry (5) _____ his place between Ron and Hermione.

SubQuestion No : 25

Q.25 Select the most appropriate option to fill in blank number 5.

- Ans
- 1. have taken
 - 2. have to take
 - 3. has took
 - 4. had taken



Question Type : MCQ
 Question ID : 264330136574
 Option 1 ID : 264330535029
 Option 2 ID : 264330535027
 Option 3 ID : 264330535030
 Option 4 ID : 264330535028
 Status : Marked For Review
 Chosen Option : 4