



SSC MTS **SHIFT – 1 (15-05-2023)**

- ★ **Latest Govt Job updates**
- ★ **Private Job updates**
- ★ **Free Mock tests available**

**Visit - [teachingninja.in](https://teachingninja.in)**

## Multi Tasking Non Technical Staff and Havaldar CBIC and CBN Examination 2022

Roll Number	
Candidate Name	
Venue Name	
Exam Date	15/05/2023
Exam Time	9:00 AM - 10:30 AM
Subject	MTS Non Tech Havaldar CBIC and CBN Examination 2022

### Section : Numerical and Mathematical Ability

**Q.1** A dining-set listed at Rs. 5000 is sold to a man at successive discounts of 20% and 10% by the shopkeeper. What is the selling price of the dining set?

- Ans**
- 1. Rs. 3600
  - 2. Rs. 4800
  - 3. Rs. 1000
  - 4. Rs. 4000

Question Type : MCQ

Question ID : 264330133843

Option 1 ID : 264330524396

Option 2 ID : 264330524398

Option 3 ID : 264330524397

Option 4 ID : 264330524395

Status : Answered

Chosen Option : 1

**Q.2** 40 percent of the cost price of an article is equal to the 25 percent of its selling price. What is the profit percentage?

- Ans**
- 1. 150 percent
  - 2. 120 percent
  - 3. 50 percent
  - 4. 60 percent

Question Type : MCQ

Question ID : 264330137137

Option 1 ID : 264330537194

Option 2 ID : 264330537192

Option 3 ID : 264330537191

Option 4 ID : 264330537193

Status : Answered

Chosen Option : 2

**Q.3** Ram travels at the speed of 15 km/hr, 10 km/hr and 12 km/hr for three equal distances. What is his average speed if the total distance travelled by him is 180 km?

- Ans**
- 1. 15 km/hr
  - 2. 18 km/hr
  - 3. 20 km/hr
  - 4. 12 km/hr

Question Type : **MCQ**  
Question ID : **264330135135**  
Option 1 ID : **264330529475**  
Option 2 ID : **264330529477**  
Option 3 ID : **264330529478**  
Option 4 ID : **264330529476**  
Status : **Answered**  
Chosen Option : 1

**Q.4** When a sum of money was equally distributed among 50 children, each child received Rs. 80. If the same amount is equally distributed among another group of children such that each child get Rs. 50, then what is the number of children in the second group?

- Ans**
- 1. 50
  - 2. 80
  - 3. 60
  - 4. 40

Question Type : **MCQ**  
Question ID : **264330133845**  
Option 1 ID : **264330524404**  
Option 2 ID : **264330524406**  
Option 3 ID : **264330524405**  
Option 4 ID : **264330524403**  
Status : **Answered**  
Chosen Option : 2

**Q.5** Mahesh and Suresh can complete a work alone in 20 days and 30 days respectively. They received Rs. 3300 for completing the work together. What is the share of Mahesh?

- Ans**
- 1. Rs. 1720
  - 2. Rs. 2080
  - 3. Rs. 1800
  - 4. Rs. 1980

Question Type : **MCQ**  
Question ID : **264330137603**  
Option 1 ID : **264330539019**  
Option 2 ID : **264330539022**  
Option 3 ID : **264330539020**  
Option 4 ID : **264330539021**  
Status : **Answered**  
Chosen Option : 3

Q.6 The sum of 10 numbers is 686. What is their average?

- Ans
- 1. 67.5
  - 2. 65.5
  - 3. 68.6
  - 4. 66.6

Question Type : MCQ  
Question ID : 264330133838  
Option 1 ID : 264330524375  
Option 2 ID : 264330524376  
Option 3 ID : 264330524377  
Option 4 ID : 264330524378  
Status : Answered  
Chosen Option : 3

Q.7 The compound interest on Rs. 60000 at 4% per annum is Rs. 4896. What is the time period in years?

- Ans
- 1. 3 years
  - 2. 1 year
  - 3. 4 years
  - 4. 2 years

Question Type : MCQ  
Question ID : 264330133847  
Option 1 ID : 264330524413  
Option 2 ID : 264330524411  
Option 3 ID : 264330524414  
Option 4 ID : 264330524412  
Status : Answered  
Chosen Option : 4

Q.8 Pinki and Rinki together can do a piece of work in 20 days. Rinki and Minki together can do it in 12 days while Pinki and Minki together can do it in 15 days. In how long can Rinki alone do it?

- Ans
- 1. 20 days
  - 2. 25 days
  - 3. 30 days
  - 4. 10 days

Question Type : MCQ  
Question ID : 264330133641  
Option 1 ID : 264330523588  
Option 2 ID : 264330523590  
Option 3 ID : 264330523589  
Option 4 ID : 264330523587  
Status : Answered  
Chosen Option : 1

**Q.9** The following table shows the export of products by a company (in hundreds) in different countries for two years. Find the total export of products in Russia and India for both the years together.

Countries	Export in 2018	Export in 2019
China	440	400
India	320	280
Japan	340	330
Australia	480	460
Korea	210	260
Russia	180	190

- Ans
- 1. 97,000
  - 2. 99,000
  - 3. 88,000
  - 4. 96,000

Question Type : **MCQ**  
Question ID : **264330133771**  
Option 1 ID : **264330524109**  
Option 2 ID : **264330524108**  
Option 3 ID : **264330524107**  
Option 4 ID : **264330524110**  
Status : **Answered**

Chosen Option : 1

**Q.10** A sphere of radius 18 cm is melted and then a solid cylinder of base radius 4 cm is made from it. What is the height of the solid cylinder?

- Ans
- 1. 196 cm
  - 2. 486 cm
  - 3. 224 cm
  - 4. 384 cm

Question Type : **MCQ**  
Question ID : **264330133646**  
Option 1 ID : **264330523608**  
Option 2 ID : **264330523609**  
Option 3 ID : **264330523610**  
Option 4 ID : **264330523607**  
Status : **Answered**

Chosen Option : 1

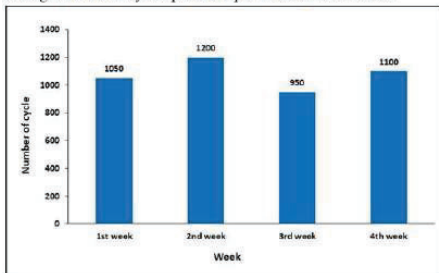
**Q.11** The difference between cost price and selling price is Rs. 143. If profit percentage is 26 percent, then what is the selling price?

- Ans
- 1. Rs. 603
  - 2. Rs. 676
  - 3. Rs. 693
  - 4. Rs. 713

Question Type : **MCQ**  
Question ID : **264330133842**  
Option 1 ID : **264330524392**  
Option 2 ID : **264330524394**  
Option 3 ID : **264330524393**  
Option 4 ID : **264330524391**  
Status : **Marked For Review**

Chosen Option : 3

**Q.12** The following bar graph shows the number of cycles produced in a factory during 4 consecutive weeks. What is the average number of cycles produced per week in these weeks?



- Ans
- 1. 1120
  - 2. 1015
  - 3. 1075
  - 4. 1085

Question Type : **MCQ**  
Question ID : 264330133852  
Option 1 ID : 264330524433  
Option 2 ID : 264330524434  
Option 3 ID : 264330524431  
Option 4 ID : 264330524432  
Status : **Answered**  
Chosen Option : 3

**Q.13** A metallic solid sphere has radius 28 cm. If it is melted to form small spheres of radius 3.5 cm, then how many small spheres will be obtained?

- Ans
- 1. 512
  - 2. 624
  - 3. 496
  - 4. 424

Question Type : **MCQ**  
Question ID : 264330137616  
Option 1 ID : 264330539071  
Option 2 ID : 264330539072  
Option 3 ID : 264330539073  
Option 4 ID : 264330539074  
Status : **Answered**  
Chosen Option : 1

**Q.14** The population of a city decreased from 156940 to 141246 due to breakout of pandemic. What is the percentage decrease in population?

- Ans
- 1. 8%
  - 2. 10%
  - 3. 12%
  - 4. 15%

Question Type : **MCQ**  
Question ID : 264330133840  
Option 1 ID : 264330524383  
Option 2 ID : 264330524384  
Option 3 ID : 264330524385  
Option 4 ID : 264330524386  
Status : **Answered**  
Chosen Option : 2

**Q.15** The total number of color blocks is 1260. If the ratio of red block to blue block is 2:5 and the ratio of blue block to yellow block is 15:7, then how many yellow blocks are there?

- Ans
- 1. 315
  - 2. 675
  - 3. 270
  - 4. 745

Question Type : **MCQ**  
Question ID : **264330133844**  
Option 1 ID : **264330524399**  
Option 2 ID : **264330524401**  
Option 3 ID : **264330524400**  
Option 4 ID : **264330524402**  
Status : **Answered**  
Chosen Option : 1

**Q.16** Krish takes as much time in running 24 meters as a bus takes in covering 72 meters. What will be the distance covered by Krish during the time the bus covers 4.8 km?

- Ans
- 1. 2.4 km
  - 2. 3.6 km
  - 3. 2.1 km
  - 4. 1.6 km

Question Type : **MCQ**  
Question ID : **264330133848**  
Option 1 ID : **264330524416**  
Option 2 ID : **264330524417**  
Option 3 ID : **264330524418**  
Option 4 ID : **264330524415**  
Status : **Answered**  
Chosen Option : 4

**Q.17** LCM of  $\frac{5}{33}$ ,  $\frac{25}{11}$ ,  $\frac{20}{55}$  and  $\frac{15}{77}$  is:

- Ans
- 1.  $\frac{300}{11}$
  - 2.  $\frac{300}{77}$
  - 3.  $\frac{25}{33}$
  - 4.  $\frac{500}{11}$

Question Type : **MCQ**  
Question ID : **264330135110**  
Option 1 ID : **264330529375**  
Option 2 ID : **264330529378**  
Option 3 ID : **264330529376**  
Option 4 ID : **264330529377**  
Status : **Answered**  
Chosen Option : 3

Q.18 Find the value of  $\{20 \text{ of } 4 + (40 - 14 + 30) - 84\}$ .

- Ans
- 1. 55
  - 2. 50
  - 3. 52
  - 4. 44

Question Type : MCQ  
Question ID : 264330133757  
Option 1 ID : 264330524051  
Option 2 ID : 264330524052  
Option 3 ID : 264330524054  
Option 4 ID : 264330524053  
Status : Answered  
Chosen Option : 2

Q.19 The value of  $[-11 + 2 - 12 \div 4] \times 5$  is:

- Ans
- 1. 84
  - 2. 17
  - 3. -12
  - 4. -60

Question Type : MCQ  
Question ID : 264330133836  
Option 1 ID : 264330524370  
Option 2 ID : 264330524368  
Option 3 ID : 264330524367  
Option 4 ID : 264330524369  
Status : Answered  
Chosen Option : 1

Q.20 A sum of money at simple interest amounts to Rs. 800 in 3 years and to Rs. 900 in 4 years. The sum is:

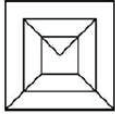
- Ans
- 1. Rs.800
  - 2. Rs.600
  - 3. Rs.500
  - 4. Rs.700

Question Type : MCQ  
Question ID : 264330133746  
Option 1 ID : 264330524010  
Option 2 ID : 264330524008  
Option 3 ID : 264330524007  
Option 4 ID : 264330524009  
Status : Not Answered  
Chosen Option : --

Section : Reasoning Ability and Problem Solving



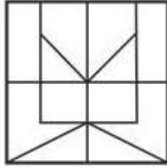
Q.1 Select the option figure in which the given figure (X) is embedded as its part (rotation is NOT allowed).



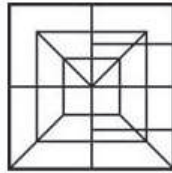
(X)

Ans

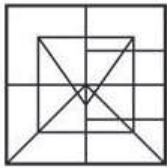
✗ 1.



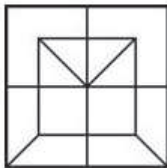
✓ 2.



✗ 3.



✗ 4.



Teachingninja.in

Question Type : MCQ

Question ID : 264330133483

Option 1 ID : 264330522964

Option 2 ID : 264330522966

Option 3 ID : 264330522965

Option 4 ID : 264330522963

Status : Answered

Chosen Option : 2

Q.2 Which of the mathematical signs should be interchanged in the below equation to make it mathematically correct?

$$6 \div 48 + 12 \times 9 - 7 = 35$$

Ans

✓ 1.  $\div$  and  $+$

✗ 2.  $\div$  and  $\times$

✗ 3.  $\times$  and  $-$

✗ 4.  $\times$  and  $+$

Question Type : MCQ

Question ID : 264330133576

Option 1 ID : 264330523328

Option 2 ID : 264330523327

Option 3 ID : 264330523330

Option 4 ID : 264330523329

Status : Answered

Chosen Option : 2

**Q.3** Five girls Anjali, Beena, Chintu, Diksha and Shruti, are of different ages. Anjali is younger than only Diksha and Shruti. Shruti is younger to Diksha. Chintu is youngest. Who is the fourth oldest?

- Ans**
- 1. Beena
  - 2. Chintu
  - 3. Diksha
  - 4. Shruti

Question Type : **MCQ**  
Question ID : **264330133569**  
Option 1 ID : **264330523299**  
Option 2 ID : **264330523301**  
Option 3 ID : **264330523302**  
Option 4 ID : **264330523300**  
Status : **Answered**  
Chosen Option : **3**

**Q.4** Which two signs should be interchanged to make the given equation correct?

$$7 \times 2 + 4 - 6 \div 3 = 12$$

- Ans**
- 1.  $\times$  and  $-$
  - 2.  $=$  and  $\times$
  - 3.  $-$  and  $+$
  - 4.  $-$  and  $=$

Question Type : **MCQ**  
Question ID : **264330133462**  
Option 1 ID : **264330522880**  
Option 2 ID : **264330522879**  
Option 3 ID : **264330522882**  
Option 4 ID : **264330522881**  
Status : **Answered**  
Chosen Option : **2**

**Q.5** Select the set in which the numbers are related in the same way as are the numbers of the following sets.(NOTE : Operations should be performed on the whole numbers, without breaking down the numbers into its constituent digits. E.g 13 – Operations on 13 such as adding /subtracting /multiplying etc. to 13 can be performed. Breaking down 13 into 1 and 3 and then performing mathematical operations on 1 and 3 is not allowed)  
(17, 35, 72)  
(13, 27, 56)

- Ans**
- 1. (11, 24, 50)
  - 2. (15, 31, 64)
  - 3. (18, 36, 110)
  - 4. (12, 25, 50)

Question Type : **MCQ**  
Question ID : **264330133575**  
Option 1 ID : **264330523325**  
Option 2 ID : **264330523323**  
Option 3 ID : **264330523324**  
Option 4 ID : **264330523326**  
Status : **Answered**  
Chosen Option : **1**

**Q.6** In a certain code language, 'MARS' is written as '51' and 'COLD' is written as '34'. How will 'ACID' be written in that language?

- Ans**
- 1. 18
  - 2. 16
  - 3. 19
  - 4. 17

Question Type : **MCQ**  
Question ID : **264330133469**  
Option 1 ID : **264330522907**  
Option 2 ID : **264330522908**  
Option 3 ID : **264330522910**  
Option 4 ID : **264330522909**  
Status : **Answered**  
Chosen Option : **4**

**Q.7** Five friends A, B, G, R and T are arranged in a row facing north but not necessarily in the same order. B sits at left end of the row. Only two people are sitting between A and G. A sits immediate next to the B and R sits second to the right of B. Who sits between R and G?

- Ans**
- 1. No one
  - 2. B
  - 3. T
  - 4. A

Question Type : **MCQ**  
Question ID : **264330133567**  
Option 1 ID : **264330523292**  
Option 2 ID : **264330523291**  
Option 3 ID : **264330523293**  
Option 4 ID : **264330523294**  
Status : **Answered**  
Chosen Option : **3**

**Q.8** In an examination hall seven students Ayaan, Chandan, Jatin, Kanika, Naina, Pinky, and Sweety are sitting in a row facing North but not necessarily in the same order. Chandan sits third to the right of Sweety. Ayaan and Pinky are immediate neighbours of Chandan. More than two persons sit between Pinky and Sweety. Jatin is the only neighbour of Naina. Jatin sits to the right of Ayaan. What is the position of Naina with respect to Kanika?

- Ans**
- 1. Fifth to the left
  - 2. Third to the right
  - 3. Fifth to the right
  - 4. Third to the left

Question Type : **MCQ**  
Question ID : **264330133568**  
Option 1 ID : **264330523298**  
Option 2 ID : **264330523295**  
Option 3 ID : **264330523296**  
Option 4 ID : **264330523297**  
Status : **Answered**  
Chosen Option : **4**

Q.9 Select the correct mirror image of the given figure when the mirror is placed at MN as shown below.

9 2 3 t K U



Ans

- 1.
- 2.
- 3.
- 4.

Question Type : MCQ  
 Question ID : 264330133484  
 Option 1 ID : 264330522969  
 Option 2 ID : 264330522967  
 Option 3 ID : 264330522968  
 Option 4 ID : 264330522970  
 Status : Answered  
 Chosen Option : 4

Q.10 Select the option that is related to the third word in the same way as the second word is related to the first word.  
 Latin : Language :: Fencing : ?

- 1. Vehicle
- 2. Place
- 3. Sport
- 4. Disease

Question Type : MCQ  
 Question ID : 264330133563  
 Option 1 ID : 264330523276  
 Option 2 ID : 264330523278  
 Option 3 ID : 264330523275  
 Option 4 ID : 264330523277  
 Status : Answered  
 Chosen Option : 2

Q.11 Which of the following numbers will replace the question mark (?) in the given series?  
 53, 54, 50, 59, 43, ?

- 1. 68
- 2. 61
- 3. 18
- 4. 58

Question Type : MCQ  
 Question ID : 264330133573  
 Option 1 ID : 264330523316  
 Option 2 ID : 264330523317  
 Option 3 ID : 264330523318  
 Option 4 ID : 264330523315  
 Status : Answered  
 Chosen Option : 4

Q.12 Which of the following numbers will replace the question mark (?) in the given series?

47, 37, 29, 23, 19, ?

- Ans
- 1. 15
  - 2. 16
  - 3. 14
  - 4. 17

Question Type : MCQ  
Question ID : 264330133572  
Option 1 ID : 264330523314  
Option 2 ID : 264330523312  
Option 3 ID : 264330523313  
Option 4 ID : 264330523311  
Status : Answered  
Chosen Option : 4

Q.13 Which of the following letter clusters will replace the question mark (?) in the given series?

OD, LA, IX, FU, ?

- Ans
- 1. BR
  - 2. CS
  - 3. CR
  - 4. CT

Question Type : MCQ  
Question ID : 264330133561  
Option 1 ID : 264330523269  
Option 2 ID : 264330523267  
Option 3 ID : 264330523268  
Option 4 ID : 264330523270  
Status : Answered  
Chosen Option : 2

Q.14 Select the option that is related to the third number in the same way as the second number is related to the first number.

12 : 1730 :: 9 : ?

- Ans
- 1. 730
  - 2. 731
  - 3. 733
  - 4. 741

Question Type : MCQ  
Question ID : 264330133574  
Option 1 ID : 264330523319  
Option 2 ID : 264330523320  
Option 3 ID : 264330523321  
Option 4 ID : 264330523322  
Status : Answered  
Chosen Option : 2

**Q.15** Two Statements are given followed by two conclusions numbered I and II. Assuming the statements to be true, even if they seem to be at variance with commonly known facts, decide which of the conclusions logically follow(s) from the statements.

Statements:

No astronomer is tall.

Some tall are handsome.

Conclusions:

I. Some astronomers are handsome.

II. No tall is an astronomer.

- Ans**
- 1. Only conclusion II follows.
  - 2. Neither conclusion I nor II follow.
  - 3. Only conclusion I follows.
  - 4. Both conclusions I and II follow.

Question Type : **MCQ**

Question ID : 264330133570

Option 1 ID : 264330523304

Option 2 ID : 264330523306

Option 3 ID : 264330523303

Option 4 ID : 264330523305

Status : **Answered**

Chosen Option : 1

**Q.16** In a certain code language, 'CROWNED' is written as 'OWRCEND'. How will 'SERGENT' be written in that language?

- Ans**
- 1. REGSNET
  - 2. RGESNET
  - 3. RGESENT
  - 4. REGSENT

Question Type : **MCQ**

Question ID : 264330137564

Option 1 ID : 264330538865

Option 2 ID : 264330538863

Option 3 ID : 264330538866

Option 4 ID : 264330538864

Status : **Answered**

Chosen Option : 2

**Q.17** In a certain code language, 'SLEEP' is written as 'TLEEQ'. How will 'DROWSY' be written in that language?

- Ans**
- 1. ERWOSZ
  - 2. EROWSZ
  - 3. ERWOZS
  - 4. ROWSZQ

Question Type : **MCQ**

Question ID : 264330133451

Option 1 ID : 264330522836

Option 2 ID : 264330522837

Option 3 ID : 264330522838

Option 4 ID : 264330522835

Status : **Answered**

Chosen Option : 1

**Q.18** Two Statements are given followed by two conclusions numbered I and II. Assuming the statements to be true, even if they seem to be at variance with commonly known facts, decide which of the conclusions logically follow(s) from the statements.

Statements:

All crows are birds.

Some parrots are birds.

Conclusions:

I. No crow is a parrot.

II. Some crows are parrots.

**Ans**  1. Only conclusion I follows.

2. Either conclusion I or II follows.

3. Both conclusions I and II follow.

4. Only conclusion II follows.

Question Type : MCQ

Question ID : 264330133571

Option 1 ID : 264330523307

Option 2 ID : 264330523310

Option 3 ID : 264330523309

Option 4 ID : 264330523308

Status : Answered

Chosen Option : 4

**Q.19** Select the option that is related to the third word in the same way as the second word is related to the first word.

Cat : Meow :: Birds : ?

**Ans**  1. Hiss

2. Chirp

3. Neigh

4. Growl

Question Type : MCQ

Question ID : 264330133562

Option 1 ID : 264330523271

Option 2 ID : 264330523272

Option 3 ID : 264330523274


Option 4 ID : 264330523273

Status : Answered

Chosen Option : 2

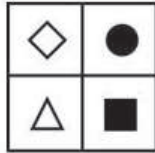


Q.20 Select the option figure that will replace the question mark (?) in the figure given below to complete the pattern.

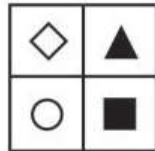


Ans

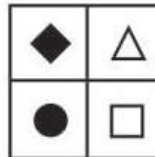
✗ 1.



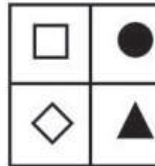
✓ 2.



✗ 3.



✗ 4.



Teachingninja.in

Question Type : MCQ

Question ID : 264330133580

Option 1 ID : 264330523344

Option 2 ID : 264330523343

Option 3 ID : 264330523345

Option 4 ID : 264330523346

Status : Answered

Chosen Option : 2

Section : General Awareness



Q.1 For how many years does the Indian Vice-President hold office?

- Ans
- 1. Five
  - 2. Six
  - 3. Three
  - 4. Four

Question Type : MCQ  
Question ID : 264330134052  
Option 1 ID : 264330525234  
Option 2 ID : 264330525233  
Option 3 ID : 264330525231  
Option 4 ID : 264330525232  
Status : Answered  
Chosen Option : 4

Q.2 Which among the following was the son of the Mughal emperor Shahjahan?

- Ans
- 1. Humayun
  - 2. Jahangir
  - 3. Aurangzeb
  - 4. Sikander Lodhi

Question Type : MCQ  
Question ID : 264330134045  
Option 1 ID : 264330525203  
Option 2 ID : 264330525206  
Option 3 ID : 264330525204  
Option 4 ID : 264330525205  
Status : Answered  
Chosen Option : 1

Q.3 Who popularised the 'Pandanallur Style' in Bharatanatyam and received Padma Bhushan in 2004?

- Ans
- 1. Kumari Kamala
  - 2. Madhuri Dixit
  - 3. Mallika Sarabhai
  - 4. Alarmel Valli

Question Type : MCQ  
Question ID : 264330133925  
Option 1 ID : 264330524723  
Option 2 ID : 264330524724  
Option 3 ID : 264330524725  
Option 4 ID : 264330524726  
Status : Not Answered  
Chosen Option : --

Q.4 Which type of friction is considered as a self-adjusting force?

- Ans
- 1. Kinetic Friction
  - 2. Centripetal Friction
  - 3. Rolling Friction
  - 4. Static Friction

Question Type : MCQ  
Question ID : 264330134036  
Option 1 ID : 264330525168  
Option 2 ID : 264330525169  
Option 3 ID : 264330525167  
Option 4 ID : 264330525170  
Status : Answered  
Chosen Option : 1

Q.5 Alluri Sitaram Raju was a tribal freedom fighter from state \_\_\_\_\_ of India.

- Ans
- 1. Maharashtra
  - 2. Gujarat
  - 3. Andhra Pradesh
  - 4. Bihar

Question Type : MCQ  
Question ID : 264330133947  
Option 1 ID : 264330524812  
Option 2 ID : 264330524814  
Option 3 ID : 264330524811  
Option 4 ID : 264330524813  
Status : Answered  
Chosen Option : 3

Q.6 SAI is the apex national sports body of India. What is the full form of SAI?

- Ans
- 1. Sports Association of India
  - 2. Sports Agency of India
  - 3. Sports Authority of India
  - 4. Sports Academy of India

Question Type : MCQ  
Question ID : 264330134053  
Option 1 ID : 264330525238  
Option 2 ID : 264330525235  
Option 3 ID : 264330525237  
Option 4 ID : 264330525236  
Status : Answered  
Chosen Option : 1

Q.7 Who among the following was a Shaka ruler in India (AD 130-150)?

- Ans
- 1. Bindusara
  - 2. Panduka
  - 3. Rudradaman
  - 4. Chashtana

Question Type : MCQ  
Question ID : 264330133944  
Option 1 ID : 264330524799  
Option 2 ID : 264330524800  
Option 3 ID : 264330524801  
Option 4 ID : 264330524802  
Status : Not Answered  
Chosen Option : --

Q.8 Sam has an income of 9 lakh rupees yearly. Which tax slab (new regime) of India is applicable for him as per the new regime Income Tax Slab Rates FY 2021-22?

- Ans
- 1. 15%
  - 2. 20%
  - 3. 5%
  - 4. 10%

Question Type : MCQ  
Question ID : 264330133930  
Option 1 ID : 264330524745  
Option 2 ID : 264330524744  
Option 3 ID : 264330524746  
Option 4 ID : 264330524743  
Status : Answered  
Chosen Option : 1

Q.9 Which article of the Indian constitution talks about a uniform civil code?

- Ans
- 1. Article 352
  - 2. Article 44
  - 3. Article 14
  - 4. Article 370

Question Type : MCQ  
Question ID : 264330134051  
Option 1 ID : 264330525230  
Option 2 ID : 264330525228  
Option 3 ID : 264330525227  
Option 4 ID : 264330525229  
Status : Answered  
Chosen Option : 1

Q.10 Ustad Bismillah Khan was one of the greatest exponents of the \_\_\_\_\_ .

- Ans
- 1. Flute
  - 2. Tabla
  - 3. Sitar
  - 4. Shehnai

Question Type : MCQ  
Question ID : 264330134049  
Option 1 ID : 264330525219  
Option 2 ID : 264330525220  
Option 3 ID : 264330525222  
Option 4 ID : 264330525221  
Status : Answered  
Chosen Option : 4

Q.11 According to census 2011, percentage of Urban population in India is \_\_\_\_\_ .

- Ans
- 1. 25.6
  - 2. 21.6
  - 3. 31.16
  - 4. 35.6

Question Type : MCQ  
Question ID : 264330133900  
Option 1 ID : 264330524624  
Option 2 ID : 264330524623  
Option 3 ID : 264330524625  
Option 4 ID : 264330524626  
Status : Not Answered  
Chosen Option : --

Q.12 The Bhagirathi river originates from Gaumukh Glacier. It meets the Alaknanda at Devprayag to form river \_\_\_\_\_ .

- Ans
- 1. Ganga
  - 2. Ravi
  - 3. Saraswati
  - 4. Yamuna

Question Type : MCQ  
Question ID : 264330134041  
Option 1 ID : 264330525190  
Option 2 ID : 264330525188  
Option 3 ID : 264330525189  
Option 4 ID : 264330525187  
Status : Answered  
Chosen Option : 1

Q.13 Name the brand under which all the fertilizers will be sold under the "One Nation One Fertilizer" scheme launched by the Prime Minister Narendra Modi in October 2022?

- Ans
- 1. Bharti
  - 2. Bhartiya
  - 3. Bharatwasi
  - 4. Bharat

Question Type : MCQ  
Question ID : 264330134031  
Option 1 ID : 264330525150  
Option 2 ID : 264330525148  
Option 3 ID : 264330525149  
Option 4 ID : 264330525147  
Status : Not Answered  
Chosen Option : --

Q.14 Gangaur is an Indian festival majorly celebrated in \_\_\_\_\_.

- Ans
- 1. Himachal Pradesh
  - 2. Rajasthan
  - 3. Arunachal Pradesh
  - 4. Tripura

Question Type : MCQ  
Question ID : 264330133934  
Option 1 ID : 264330524761  
Option 2 ID : 264330524760  
Option 3 ID : 264330524762  
Option 4 ID : 264330524759  
Status : Answered  
Chosen Option : 2

Q.15 \_\_\_\_\_ is the division of the cytoplasm of one eukaryotic cell into two daughter cells.

- Ans
- 1. Cytokinesis
  - 2. Sepsis
  - 3. Karyokinesis
  - 4. Genesis

Question Type : MCQ  
Question ID : 264330134037  
Option 1 ID : 264330525172  
Option 2 ID : 264330525174  
Option 3 ID : 264330525171  
Option 4 ID : 264330525173  
Status : Answered  
Chosen Option : 1

Q.16 The Indian Antarctic Bill, 2022 belongs to \_\_\_\_\_ Ministry of India.

- Ans
- 1. Earth Sciences
  - 2. Law and Justice
  - 3. External Affairs
  - 4. Tribal Affairs

Question Type : MCQ  
Question ID : 264330133907  
Option 1 ID : 264330524653  
Option 2 ID : 264330524654  
Option 3 ID : 264330524651  
Option 4 ID : 264330524652  
Status : Answered  
Chosen Option : 1

Q.17 Which city hosted the 2022 Winter Olympics?

- Ans
- 1. Milan
  - 2. Tokyo
  - 3. Beijing
  - 4. Melbourne

Question Type : MCQ  
Question ID : 264330134054  
Option 1 ID : 264330525239  
Option 2 ID : 264330525242  
Option 3 ID : 264330525241  
Option 4 ID : 264330525240  
Status : Answered  
Chosen Option : 2

Q.18 Which Indian state is home to the Buddhist cave temples known as Barabar Caves?

- Ans
- 1. Bihar
  - 2. West Bengal
  - 3. Sikkim
  - 4. Uttar Pradesh

Question Type : MCQ  
Question ID : 264330133910  
Option 1 ID : 264330524663  
Option 2 ID : 264330524665  
Option 3 ID : 264330524666  
Option 4 ID : 264330524664  
Status : Not Answered  
Chosen Option : --

Q.19 Which state is the leading producer of sugar in India, as of May 2022?

- Ans
- 1. Maharashtra
  - 2. Uttar Pradesh
  - 3. Telangana
  - 4. Tamil Nadu

Question Type : MCQ  
Question ID : 264330133915  
Option 1 ID : 264330524684  
Option 2 ID : 264330524683  
Option 3 ID : 264330524686  
Option 4 ID : 264330524685  
Status : Not Answered  
Chosen Option : --

Q.20 Which freedom fighter of India led the famous revolt of 1857 (sepoy mutiny) at Lucknow?

- Ans
- 1. Kasturba Gandhi
  - 2. Alluri Sitarama Raju
  - 3. Begum Hazrat Mahal
  - 4. Rani Lakshmi Bai

Question Type : MCQ  
Question ID : 264330133921  
Option 1 ID : 264330524710  
Option 2 ID : 264330524708  
Option 3 ID : 264330524709  
Option 4 ID : 264330524707  
Status : Answered  
Chosen Option : 4

Q.21 Pandit Lachhu Maharaj was primarily associated to which of the following dances?

- Ans
- 1. Odissi
  - 2. Manipuri
  - 3. Bharatnatyam
  - 4. Kathak

Question Type : MCQ  
Question ID : 264330134033  
Option 1 ID : 264330525156  
Option 2 ID : 264330525158  
Option 3 ID : 264330525157  
Option 4 ID : 264330525155  
Status : Not Answered  
Chosen Option : --

Q.22 The Windvane instrument measures the \_\_\_\_\_ .

- Ans
- 1. relative humidity
  - 2. temperature
  - 3. wind velocity
  - 4. wind-direction

Question Type : MCQ  
Question ID : 264330134039  
Option 1 ID : 264330525181  
Option 2 ID : 264330525182  
Option 3 ID : 264330525180  
Option 4 ID : 264330525179  
Status : Answered  
Chosen Option : 4

Q.23 National Family Benefit Scheme was started in August \_\_\_\_\_ by Government of India.

- Ans
- 1. 1995
  - 2. 2000
  - 3. 2002
  - 4. 2005

Question Type : MCQ  
Question ID : 264330137748  
Option 1 ID : 264330539601  
Option 2 ID : 264330539602  
Option 3 ID : 264330539599  
Option 4 ID : 264330539600  
Status : Not Answered  
Chosen Option : --

Q.24 Vertical distribution of different species occupying different levels in an ecosystem is called \_\_\_\_\_ .

- Ans
- 1. stratification
  - 2. biomagnification
  - 3. coevolution
  - 4. decomposition

Question Type : MCQ  
Question ID : 264330134038  
Option 1 ID : 264330525175  
Option 2 ID : 264330525176  
Option 3 ID : 264330525178  
Option 4 ID : 264330525177  
Status : Answered  
Chosen Option : 2



Q.25 Which famous Indian author of 21st century wrote the novel 'The Immortals of Meluha (Shiva Trilogy)'?

- Ans
- 1. Durjoy Datta
  - 2. Ravinder Singh
  - 3. Amish Tripathi
  - 4. Shashi Tharoor

Question Type : MCQ  
Question ID : 264330133923  
Option 1 ID : 264330524717  
Option 2 ID : 264330524715  
Option 3 ID : 264330524718  
Option 4 ID : 264330524716  
Status : Not Answered  
Chosen Option : --

Section : English Language and Comprehension

Q.1 Identify the segment that contains a grammatical error. If there is no error, select 'No error'.  
Her evaluation will give / me a best indication of / where I stand in the class.

- Ans
- 1. where I stand in the class.
  - 2. Her evaluation will give
  - 3. No error
  - 4. me a best indication of

Question Type : MCQ  
Question ID : 264330136084  
Option 1 ID : 264330533149  
Option 2 ID : 264330533147  
Option 3 ID : 264330533150  
Option 4 ID : 264330533148  
Status : Answered  
Chosen Option : 4

Q.2 In the following question, out of the given four alternatives, select the alternative which best expresses the meaning of the Idiom/Phrase.  
Know the ropes

- Ans
- 1. To break the rules
  - 2. To reveal a secret
  - 3. To understand the details
  - 4. To fight without any reason

Question Type : MCQ  
Question ID : 264330134523  
Option 1 ID : 264330527052  
Option 2 ID : 264330527054  
Option 3 ID : 264330527051  
Option 4 ID : 264330527053  
Status : Answered  
Chosen Option : 3

**Q.3** Select the appropriate synonym for the underlined word.  
The story shows the importance of self-esteem.

- Ans
- 1. pride
  - 2. humility
  - 3. disgrace
  - 4. shyness

Question Type : **MCQ**  
Question ID : 264330134518  
Option 1 ID : 264330527031  
Option 2 ID : 264330527034  
Option 3 ID : 264330527033  
Option 4 ID : 264330527032  
Status : **Answered**  
Chosen Option : 1

**Q.4** Select the appropriate antonym for the underlined word.  
I stare out into the really amazingly dark night.

- Ans
- 1. shockingly
  - 2. unusually
  - 3. astonishingly
  - 4. obviously

Question Type : **MCQ**  
Question ID : 264330134521  
Option 1 ID : 264330527045  
Option 2 ID : 264330527046  
Option 3 ID : 264330527043  
Option 4 ID : 264330527044  
Status : **Answered**  
Chosen Option : 4

**Q.5** Choose the word that can substitute the given group of words.  
Someone who knows a lot about the arts, food, drink, or some other subject

- Ans
- 1. Pacifist
  - 2. Gourmand
  - 3. Cynic
  - 4. Connoisseur

Question Type : **MCQ**  
Question ID : 264330134517  
Option 1 ID : 264330527030  
Option 2 ID : 264330527029  
Option 3 ID : 264330527028  
Option 4 ID : 264330527027  
Status : **Not Answered**  
Chosen Option : --

**Q.6** Choose the word that is opposite in meaning to the given word.  
**Surrender**

- Ans**
- 1. Waive
  - 2. Stay
  - 3. Calm
  - 4. Withstand

Question Type : **MCQ**  
Question ID : **264330134390**  
Option 1 ID : **264330526542**  
Option 2 ID : **264330526539**  
Option 3 ID : **264330526540**  
Option 4 ID : **264330526541**  
Status : **Answered**  
Chosen Option : **2**

**Q.7** Choose the sentence with no spelling error.

- Ans**
- 1. You are going to figure out everything.
  - 2. You are going to figre out everything.
  - 3. You are going to figrue out everything.
  - 4. You are going to figure out everrything.

Question Type : **MCQ**  
Question ID : **264330134421**  
Option 1 ID : **264330526660**  
Option 2 ID : **264330526659**  
Option 3 ID : **264330526662**  
Option 4 ID : **264330526661**  
Status : **Answered**  
Chosen Option : **1**

**Q.8** Choose the word that means the same as the given word.  
**Consecutive**

- Ans**
- 1. Successive
  - 2. Organized
  - 3. Important
  - 4. Executive

Question Type : **MCQ**  
Question ID : **264330134441**  
Option 1 ID : **264330526737**  
Option 2 ID : **264330526738**  
Option 3 ID : **264330526736**  
Option 4 ID : **264330526735**  
Status : **Answered**  
Chosen Option : **1**

Q.9 Choose the incorrectly spelt word.

- Ans  1. Molest  
 2. Reflect  
 3. Called  
 4. Temparory

Question Type : MCQ  
Question ID : 264330134524  
Option 1 ID : 264330527058  
Option 2 ID : 264330527056  
Option 3 ID : 264330527057  
Option 4 ID : 264330527055  
Status : Answered  
Chosen Option : 4

Q.10 Find the part of the given sentence that has an error in it. If there is no error, choose 'No error'.

Can you please pass me that glittery pen black?

- Ans  1. pass me that  
 2. glittery pen black?  
 3. Can you please  
 4. No error

Question Type : MCQ  
Question ID : 264330134321  
Option 1 ID : 264330526276  
Option 2 ID : 264330526277  
Option 3 ID : 264330526275  
Option 4 ID : 264330526278  
Status : Not Answered  
Chosen Option : --

Q.11 A sentence has been given with a blank to be filled with an appropriate option. Choose the correct alternative.

Meteorologists are still \_\_\_\_\_ to understand sting jets.

- Ans  1. on work  
 2. working  
 3. worked  
 4. works

Question Type : MCQ  
Question ID : 264330134431  
Option 1 ID : 264330526701  
Option 2 ID : 264330526700  
Option 3 ID : 264330526702  
Option 4 ID : 264330526699  
Status : Answered  
Chosen Option : 2

Q.12 In the following question, out of the given four alternatives, select the alternative which best expresses the meaning of the Idiom/Phrase.  
To scratch one's head

- Ans  1. To think hard in a puzzled way  
 2. To think about good days  
 3. To come up with an idea  
 4. To lose all the wealth

Question Type : MCQ  
Question ID : 264330134522  
Option 1 ID : 264330527047  
Option 2 ID : 264330527049  
Option 3 ID : 264330527050  
Option 4 ID : 264330527048  
Status : Answered  
Chosen Option : 1

Q.13 Improve the underlined part of the sentence. Choose 'No improvement' as an answer if the sentence is grammatically correct.  
The teacher let the students choose there essay topics.

- Ans  1. No improvement  
 2. has choose their  
 3. chosen there  
 4. choose their

Question Type : MCQ  
Question ID : 264330134401  
Option 1 ID : 264330526586  
Option 2 ID : 264330526584  
Option 3 ID : 264330526585  
Option 4 ID : 264330526583  
Status : Answered  
Chosen Option : 4

Q.14 Select the most appropriate option to fill in the blank.  
Disturbing emotions begin to build into fear, and then \_\_\_\_\_.

- Ans  1. boldness  
 2. terror  
 3. server  
 4. assurance

Question Type : MCQ  
Question ID : 264330134422  
Option 1 ID : 264330526665  
Option 2 ID : 264330526664  
Option 3 ID : 264330526666  
Option 4 ID : 264330526663  
Status : Answered  
Chosen Option : 2

Q.15 Improve the underlined part of the sentence. Choose 'No improvement' as an answer if the sentence is grammatically correct.  
The Tagore House is rehearsing a skit for the school's Annual Day Function.

- Ans
- 1. has been rehearsing a skits
  - 2. was rehearse a skit
  - 3. is rehearsed an skit
  - 4. No improvement

Question Type : MCQ  
Question ID : 264330134507  
Option 1 ID : 264330526993  
Option 2 ID : 264330526992  
Option 3 ID : 264330526991  
Option 4 ID : 264330526994  
Status : Answered  
Chosen Option : 4

Q.16 A sentence has been given with a blank to be filled with an appropriate option. Choose the correct alternative.  
I bowed to him, but he \_\_\_\_\_ not to see me.

- Ans
- 1. seems
  - 2. seeming
  - 3. seemingly
  - 4. seemed

Question Type : MCQ  
Question ID : 264330134508  
Option 1 ID : 264330526996  
Option 2 ID : 264330526998  
Option 3 ID : 264330526997  
Option 4 ID : 264330526995  
Status : Answered  
Chosen Option : 4

Q.17 Choose the word that can substitute the given group of words.  
A person who does not believe in God

- Ans
- 1. Atheist
  - 2. Iconoclast
  - 3. Lecher
  - 4. Highbrow

Question Type : MCQ  
Question ID : 264330134516  
Option 1 ID : 264330527023  
Option 2 ID : 264330527024  
Option 3 ID : 264330527025  
Option 4 ID : 264330527026  
Status : Answered  
Chosen Option : 1

**Q.18** Find the part of the given sentence that has an error in it. If there is no error, choose 'No error'.

Their should be Lokpal to check corruption by the bureaucrats and politicians.

**Ans** ✓ 1. Their should be Lokpal to

✗ 2. No error

✗ 3. the bureaucrats and politicians.

✗ 4. check corruption by

Question Type : MCQ

Question ID : 264330134504

Option 1 ID : 264330526979

Option 2 ID : 264330526982

Option 3 ID : 264330526981

Option 4 ID : 264330526980

Status : Answered

Chosen Option : 1

**Q.19** Select the most appropriate option to substitute the bracketed segment in the given sentence. If there is no need to substitute it, select 'no substitution required'.

The Yoruba was (one of the west African city-state culture).

**Ans** ✗ 1. No substitution required

✓ 2. one of the west African city-state cultures

✗ 3. one of a west African city-state cultures

✗ 4. one of the west's African city-state culture

Question Type : MCQ

Question ID : 264330136087

Option 1 ID : 264330533162

Option 2 ID : 264330533159

Option 3 ID : 264330533160

Option 4 ID : 264330533161

Status : Answered

Chosen Option : 1

**Q.20** Select the most appropriate option to fill in the blank.

The researcher team took air \_\_\_\_\_ from the room every five minutes to rule out the possibility of a virus.

**Ans** ✗ 1. instances

✗ 2. slices

✓ 3. samples

✗ 4. droops

Question Type : MCQ

Question ID : 264330134527

Option 1 ID : 264330527068

Option 2 ID : 264330527069

Option 3 ID : 264330527067

Option 4 ID : 264330527070

Status : Answered

Chosen Option : 4

**Comprehension:**

In the following passage some of the words have been deleted. Read the passage carefully and select the correct answer for the given blank out of the four alternatives.

With Halloween only (1) \_\_\_\_\_ days away, I thought this was a perfect time to talk (2) \_\_\_\_\_ Zombies. For years, zombies have dominated science (3) \_\_\_\_\_. These creatures, the walking dead, don't (4) \_\_\_\_\_ exist, right? Wrong! There are in fact several very real life diseases that could and can make you (5) \_\_\_\_\_ like a zombie.

**SubQuestion No : 21**

**Q.21** Select the most appropriate option to fill in blank number 1.

- Ans  1. a little  
 2. a few  
 3. much  
 4. little

Question Type : MCQ

Question ID : 264330134381

Option 1 ID : 264330526506

Option 2 ID : 264330526503

Option 3 ID : 264330526505

Option 4 ID : 264330526504

Status : Answered

Chosen Option : 2

**Comprehension:**

In the following passage some of the words have been deleted. Read the passage carefully and select the correct answer for the given blank out of the four alternatives.

With Halloween only (1) \_\_\_\_\_ days away, I thought this was a perfect time to talk (2) \_\_\_\_\_ Zombies. For years, zombies have dominated science (3) \_\_\_\_\_. These creatures, the walking dead, don't (4) \_\_\_\_\_ exist, right? Wrong! There are in fact several very real life diseases that could and can make you (5) \_\_\_\_\_ like a zombie.

**SubQuestion No : 22**

**Q.22** Select the most appropriate option to fill in blank number 2.

- Ans  1. about  
 2. of  
 3. for  
 4. by

Question Type : MCQ

Question ID : 264330134382

Option 1 ID : 264330526509

Option 2 ID : 264330526510

Option 3 ID : 264330526508

Option 4 ID : 264330526507

Status : Answered

Chosen Option : 1



**Comprehension:**

In the following passage some of the words have been deleted. Read the passage carefully and select the correct answer for the given blank out of the four alternatives.

With Halloween only (1) \_\_\_\_\_ days away, I thought this was a perfect time to talk (2) \_\_\_\_\_ Zombies. For years, zombies have dominated science (3) \_\_\_\_\_. These creatures, the walking dead, don't (4) \_\_\_\_\_ exist, right? Wrong! There are in fact several very real life diseases that could and can make you (5) \_\_\_\_\_ like a zombie.

**SubQuestion No : 23**

**Q.23 Select the most appropriate option to fill in blank number 3.**

- Ans  1. friction  
 2. freelance  
 3. fictions  
 4. fickle

Question Type : MCQ  
Question ID : 264330134383  
Option 1 ID : 264330526514  
Option 2 ID : 264330526511  
Option 3 ID : 264330526513  
Option 4 ID : 264330526512  
Status : Answered  
Chosen Option : 3

**Comprehension:**

In the following passage some of the words have been deleted. Read the passage carefully and select the correct answer for the given blank out of the four alternatives.

With Halloween only (1) \_\_\_\_\_ days away, I thought this was a perfect time to talk (2) \_\_\_\_\_ Zombies. For years, zombies have dominated science (3) \_\_\_\_\_. These creatures, the walking dead, don't (4) \_\_\_\_\_ exist, right? Wrong! There are in fact several very real life diseases that could and can make you (5) \_\_\_\_\_ like a zombie.

**SubQuestion No : 24**

**Q.24 Select the most appropriate option to fill in blank number 4.**

- Ans  1. manually  
 2. gladly  
 3. actually  
 4. suddenly

Question Type : MCQ  
Question ID : 264330134384  
Option 1 ID : 264330526517  
Option 2 ID : 264330526518  
Option 3 ID : 264330526516  
Option 4 ID : 264330526515  
Status : Answered  
Chosen Option : 3

**Comprehension:**

In the following passage some of the words have been deleted. Read the passage carefully and select the correct answer for the given blank out of the four alternatives.

With Halloween only (1) \_\_\_\_\_ days away, I thought this was a perfect time to talk (2) \_\_\_\_\_ Zombies. For years, zombies have dominated science (3) \_\_\_\_\_. These creatures, the walking dead, don't (4) \_\_\_\_\_ exist, right? Wrong! There are in fact several very real life diseases that could and can make you (5) \_\_\_\_\_ like a zombie.

**SubQuestion No : 25**

**Q.25** Select the most appropriate option to fill in blank number 5.

- Ans
- 1. state
  - 2. slake
  - 3. run
  - 4. act

Question Type : **MCQ**

Question ID : **264330134385**

Option 1 ID : **264330526522**

Option 2 ID : **264330526519**

Option 3 ID : **264330526521**

Option 4 ID : **264330526520**

Status : **Answered**

Chosen Option : **4**



Teachingninja.in