



SSC MTS **SHIFT – 2 (15-05-2023)**

- ★ Latest Govt Job updates
- ★ Private Job updates
- ★ Free Mock tests available

Visit - teachingninja.in

Multi Tasking Non Technical Staff and Havaladar CBIC and CBN Examination 2022

Roll Number	
Candidate Name	
Venue Name	
Exam Date	15/05/2023
Exam Time	12:00 PM - 2:00 PM
Subject	MTS Non Tech Havaladar CBIC and CBN Examination 2022

Section : Numerical and Mathematical Ability

Q.1 A sum of money doubles itself in 12 years. Find the rate percent per annum of simple interest.

- Ans
- ✓ 1. 8.33%
 - ✗ 2. 6.25%
 - ✗ 3. 9.09%
 - ✗ 4. 11.11%

Question Type : MCQ

Question ID : 264330135076

Option 1 ID : 264330529239

Option 2 ID : 264330529240

Option 3 ID : 264330529242

Option 4 ID : 264330529241

Status : Answered

Chosen Option : 1

Q.2 The radius of a hemisphere is 5 cm. Find the volume.

- Ans
- ✗ 1. 330.4 cm³
 - ✗ 2. 117.9 cm³
 - ✗ 3. 150.6 cm³
 - ✓ 4. 261.9 cm³

Question Type : MCQ

Question ID : 264330135432

Option 1 ID : 264330530637

Option 2 ID : 264330530636

Option 3 ID : 264330530638

Option 4 ID : 264330530635

Status : Answered

Chosen Option : 4

Q.3 Among four students sitting in a row, average age of last three students is 48 years and the average age of first three students is 50 years. If the age of first student is 56 years, then what is the age of the last student?

- Ans**
- 1. 30 years
 - 2. 40 years
 - 3. 50 years
 - 4. 60 years

Question Type : **MCQ**
Question ID : **264330137325**
Option 1 ID : **264330537927**
Option 2 ID : **264330537929**
Option 3 ID : **264330537930**
Option 4 ID : **264330537928**
Status : **Answered**
Chosen Option : **3**

Q.4 12 men can complete a work in 6 days working 4 hours per days. If 4 men work 8 hours per day, then in how many days the same work will be completed?

- Ans**
- 1. 8 days
 - 2. 6 days
 - 3. 9 days
 - 4. 10 days

Question Type : **MCQ**
Question ID : **264330137874**
Option 1 ID : **264330540106**
Option 2 ID : **264330540105**
Option 3 ID : **264330540103**
Option 4 ID : **264330540104**
Status : **Answered**
Chosen Option : **3**

Q.5 Solve: $[(144/12) + (43 \times 3)] + 45 - 20 \times 3$

- Ans**
- 1. 127
 - 2. 111
 - 3. 126
 - 4. 156

Question Type : **MCQ**
Question ID : **264330135086**
Option 1 ID : **264330529280**
Option 2 ID : **264330529279**
Option 3 ID : **264330529281**
Option 4 ID : **264330529282**
Status : **Answered**
Chosen Option : **3**

Q.6 A can do a work alone in 60 days and B can do the same work alone in 33.33% less time taken by A. Find the time taken by B to complete the work alone.

- Ans**
- 1. 30 days
 - 2. 17 days
 - 3. 22 days
 - 4. 40 days

Question Type : **MCQ**
Question ID : **264330133790**
Option 1 ID : **264330524183**
Option 2 ID : **264330524186**
Option 3 ID : **264330524185**
Option 4 ID : **264330524184**
Status : **Answered**
Chosen Option : 4

Q.7 A sum of money at simple interest amounts to Rs. 610 in 3 years and to Rs. 650 in 4 years. The sum is:

- Ans**
- 1. Rs. 610
 - 2. Rs. 570
 - 3. Rs. 550
 - 4. Rs. 490

Question Type : **MCQ**
Question ID : **264330135097**
Option 1 ID : **264330529325**
Option 2 ID : **264330529323**
Option 3 ID : **264330529324**
Option 4 ID : **264330529326**
Status : **Answered**
Chosen Option : 4

Q.8 If the heights of two cylinders are in the ratio of 7 : 9 and their diameters are in the ratio of 6 : 7, then what is the ratio of the volumes of the cylinders?

- Ans**
- 1. 6 : 7
 - 2. 7 : 9
 - 3. 5 : 9
 - 4. 4 : 7

Question Type : **MCQ**
Question ID : **264330137887**
Option 1 ID : **264330540157**
Option 2 ID : **264330540155**
Option 3 ID : **264330540158**
Option 4 ID : **264330540156**
Status : **Answered**
Chosen Option : 4

Q.9 A person covers first 15 km in 60 minutes and next 24 km in 30 minutes. What is his average speed for the whole journey?

- Ans**
- 1. 33 km/hr
 - 2. 26 km/hr
 - 3. 29 km/hr
 - 4. 23 km/hr

Question Type : **MCQ**
Question ID : **264330137179**
Option 1 ID : **264330537359**
Option 2 ID : **264330537362**
Option 3 ID : **264330537361**
Option 4 ID : **264330537360**
Status : **Answered**
Chosen Option : 2

Q.10 A sum becomes Rs.5400 in 4 years at the rate of 20 percent per annum on simple interest. What is the sum?

- Ans**
- 1. Rs.3000
 - 2. Rs.2500
 - 3. Rs.4000
 - 4. Rs.2000

Question Type : **MCQ**
Question ID : **264330135053**
Option 1 ID : **264330529148**
Option 2 ID : **264330529150**
Option 3 ID : **264330529147**
Option 4 ID : **264330529149**
Status : **Answered**
Chosen Option : 1

Q.11 A man goes from A to B at a speed of 200 kmph and comes back to A at a speed of 300 kmph. Find his average speed for the entire journey?

- Ans**
- 1. 264 kmph
 - 2. 345 kmph
 - 3. 340 kmph
 - 4. 240 kmph

Question Type : **MCQ**
Question ID : **264330135100**
Option 1 ID : **264330529338**
Option 2 ID : **264330529337**
Option 3 ID : **264330529335**
Option 4 ID : **264330529336**
Status : **Answered**
Chosen Option : 4

Q.12 If A is 20 percent less than B, then B is how much percentage more than A?

Ans 1. 33.33 percent

2. 50 percent

3. 20 percent

4. 25 percent

Question Type : MCQ

Question ID : 264330135048

Option 1 ID : 264330529128

Option 2 ID : 264330529127

Option 3 ID : 264330529130

Option 4 ID : 264330529129

Status : Answered

Chosen Option : 4

Q.13 What is the value of $9 \times 121 + 11 \times 84 \div 4$?

Ans 1. 1240

2. 1320

3. 1230

4. 1340

Question Type : MCQ

Question ID : 264330139012

Option 1 ID : 264330544657

Option 2 ID : 264330544656

Option 3 ID : 264330544655

Option 4 ID : 264330544658

Status : Answered

Chosen Option : 2

Q.14 Marked price of a toy is 100 rupees and the selling price is 80 rupees. Calculate the discount percentage.

Ans 1. 20%

2. 40%

3. 10%

4. 30%

Question Type : MCQ

Question ID : 264330135095

Option 1 ID : 264330529316

Option 2 ID : 264330529318

Option 3 ID : 264330529315

Option 4 ID : 264330529317

Status : Answered

Chosen Option : 1

Q.15 The table given below shows the number of students of five classes playing different games.

Class	Games		
	A	B	C
6th	30	50	70
7th	60	20	35
8th	40	10	90
9th	38	26	50
10th	25	32	20

Which of the following statement is correct?

- I. The average number of students playing A and B in 9th class are 32.
- II. The average number of students playing A and C in 8th class are 75.
- III. The total number of students playing all the three games in 10th class are 77.

- Ans
- 1. II and III
 - 2. I, II and III
 - 3. I and III
 - 4. I and II

Question Type : MCQ
Question ID : 264330135062
Option 1 ID : 264330529184
Option 2 ID : 264330529186
Option 3 ID : 264330529185
Option 4 ID : 264330529183
Status : Answered
Chosen Option : 3

Q.16 What is the average of first 10 natural numbers?

- Ans
- 1. 5.5
 - 2. 10
 - 3. 5
 - 4. 10.5

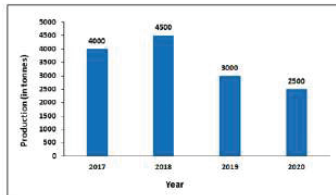
Question Type : MCQ
Question ID : 264330135089
Option 1 ID : 264330529293
Option 2 ID : 264330529291
Option 3 ID : 264330529292
Option 4 ID : 264330529294
Status : Answered
Chosen Option : 1

Q.17 In a bucket there are 40 red balls and 120 blue balls. The ratio of red to blue is :

- Ans
- 1. 1:3
 - 2. 3:4
 - 3. 1:4
 - 4. 2:3

Question Type : MCQ
Question ID : 264330135096
Option 1 ID : 264330529320
Option 2 ID : 264330529322
Option 3 ID : 264330529319
Option 4 ID : 264330529321
Status : Answered
Chosen Option : 1

Q.18 In the following graph the production of Raggi in 4 consecutive years are plotted. In which year the production of Raggi is maximum?



- Ans
- 1. 2020
 - 2. 2017
 - 3. 2019
 - 4. 2018

Question Type : MCQ
Question ID : 264330135104
Option 1 ID : 264330529354
Option 2 ID : 264330529351
Option 3 ID : 264330529353
Option 4 ID : 264330529352
Status : Answered
Chosen Option : 4

Q.19 Find the profit if a shopkeeper sells the item for Rs 4673 whose cost price was Rs 3456.

- Ans
- 1. Rs 1345
 - 2. Rs 1456
 - 3. Rs 1237
 - 4. Rs 1217

Question Type : MCQ
Question ID : 264330135094
Option 1 ID : 264330529313
Option 2 ID : 264330529314
Option 3 ID : 264330529312
Option 4 ID : 264330529311
Status : Answered
Chosen Option : 4

Q.20 Pankaj sells an article and earns a profit of 55 percent. What will be the ratio of cost price and selling price?

- Ans
- 1. 20 : 37
 - 2. 17 : 25
 - 3. 18 : 25
 - 4. 20 : 31

Question Type : MCQ
Question ID : 264330137609
Option 1 ID : 264330539045
Option 2 ID : 264330539043
Option 3 ID : 264330539046
Option 4 ID : 264330539044
Status : Answered
Chosen Option : 4

Section : Reasoning Ability and Problem Solving

Q.1 Study the given pattern carefully and select the number that can replace the question mark (?) in it.

First row- 7, 343, 49
Second row- 6, 216, 36
Third row- 5, 125, ?

- Ans
- 1. 30
 - 2. 45
 - 3. 25
 - 4. 85

Question Type : MCQ
Question ID : 264330134992
Option 1 ID : 264330528903
Option 2 ID : 264330528904
Option 3 ID : 264330528905
Option 4 ID : 264330528906
Status : Answered
Chosen Option : 3

Q.2 Select the option that is related to the third letter in the same way as the second number is related to the first letter.

R : 324 :: I : ?

- Ans
- 1. 100
 - 2. 81
 - 3. 99
 - 4. 64

Question Type : MCQ
Question ID : 264330134978
Option 1 ID : 264330528850
Option 2 ID : 264330528847
Option 3 ID : 264330528848
Option 4 ID : 264330528849
Status : Answered
Chosen Option : 2

Q.3 Six ladies Anu, Preeti, Arti, Kirti, Poonam and Suman are seated at a circular table facing the centre. Preeti is sitting opposite to Poonam. Poonam is sitting exactly between Kirti and Anu. Arti sits to the immediate right of Anu. Who sits to the immediate right of Preeti?

- Ans**
- 1. Suman
 - 2. Kirti
 - 3. Arti
 - 4. Anu

Question Type : **MCQ**
Question ID : **264330134984**
Option 1 ID : **264330528874**
Option 2 ID : **264330528873**
Option 3 ID : **264330528872**
Option 4 ID : **264330528871**
Status : **Answered**
Chosen Option : 1

Q.4 In a certain code language, 'VOTED' is coded as '76218', 'WIDER' is coded as '08759', 'ADORE' is coded as '79382'. What is the code for 'ART' in that code language?

- Ans**
- 1. 395
 - 2. 397
 - 3. 387
 - 4. 396

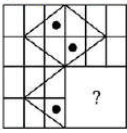
Question Type : **MCQ**
Question ID : **264330137372**
Option 1 ID : **264330538116**
Option 2 ID : **264330538118**
Option 3 ID : **264330538115**
Option 4 ID : **264330538117**
Status : **Answered**
Chosen Option : 4

Q.5 Select the option that is related to the third word in the same way as the second word is related to the first word.
Fruit : Pomegranate :: Mammal : ?

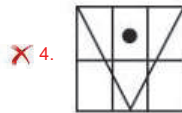
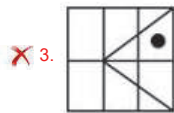
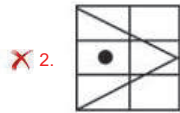
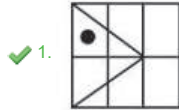
- Ans**
- 1. Dog
 - 2. Pigeon
 - 3. Lizard
 - 4. Snake

Question Type : **MCQ**
Question ID : **264330134979**
Option 1 ID : **264330528851**
Option 2 ID : **264330528854**
Option 3 ID : **264330528853**
Option 4 ID : **264330528852**
Status : **Answered**
Chosen Option : 1

Q.6 Select the option figure that will replace the question mark (?) in the figure given below to complete the pattern.
(rotation is not allowed)



Ans



Question Type : MCQ
 Question ID : 264330134997
 Option 1 ID : 264330528926
 Option 2 ID : 264330528925
 Option 3 ID : 264330528924
 Option 4 ID : 264330528923
 Status : Answered
 Chosen Option : 1

Q.7 Which of the following numbers will replace the question mark (?) in the given series?

88, 92, 97, 103, 110, 118, ?

Ans ✗ 1. 117

✓ 2. 127

✗ 3. 219

✗ 4. 217

Question Type : MCQ
 Question ID : 264330134945
 Option 1 ID : 264330528716
 Option 2 ID : 264330528717
 Option 3 ID : 264330528718
 Option 4 ID : 264330528715
 Status : Answered
 Chosen Option : 2

Q.8 In a certain code language, 'DARK' is written as 'ECSM' and 'TREE' is written as 'UTFG'. How will 'GAME' be written in that language?

- Ans**
- 1. HCNG
 - 2. HCMG
 - 3. HCNH
 - 4. HCNF

Question Type : **MCQ**

Question ID : **264330133509**

Option 1 ID : **264330523069**

Option 2 ID : **264330523068**

Option 3 ID : **264330523070**

Option 4 ID : **264330523067**

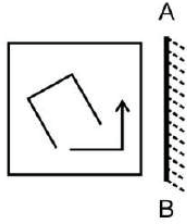
Status : **Answered**

Chosen Option : **1**



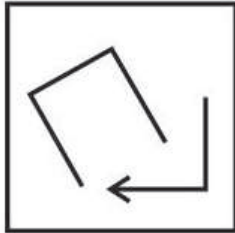
Teachingninja.in

Q.9 Select the correct mirror image of the given figure when the mirror AB is placed to the right side of the figure.

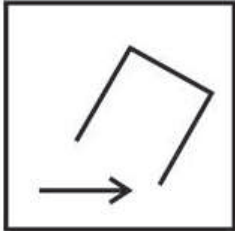


Ans


✗ 1.




✗ 2.



✓ 3.



✗ 4.



Question Type : MCQ

Question ID : 264330134952

Option 1 ID : 264330528744

Option 2 ID : 264330528743

Option 3 ID : 264330528745

Option 4 ID : 264330528746

Status : Answered

Chosen Option : 3

Q.10 In a certain code language, "WIFE" is written as '172' and "CAT" is written as '72'. How will "SON" be written in that language?

- Ans
- 1. 244
 - 2. 144
 - 3. 241
 - 4. 141

Question Type : **MCQ**
Question ID : **264330137586**
Option 1 ID : **264330538953**
Option 2 ID : **264330538951**
Option 3 ID : **264330538954**
Option 4 ID : **264330538952**
Status : **Answered**
Chosen Option : **2**

Q.11 Five friends Tam, Tan, Tap, Tab and Tat are standing in a column facing north. Tam stands behind Tan. Tap stands immediately behind Tat. Only one person stands in between Tat and Tam. Tab stands immediately behind Tam. Tab stands at the end of the column. Who stands at the front of the column?

- Ans
- 1. Tam
 - 2. Tan
 - 3. Tap
 - 4. Tat

Question Type : **MCQ**
Question ID : **264330134985**
Option 1 ID : **264330528876**
Option 2 ID : **264330528878**
Option 3 ID : **264330528877**
Option 4 ID : **264330528875**
Status : **Answered**
Chosen Option : **2**

Q.12 Three statements are given followed by two conclusions numbered I and II. Assuming the statements to be true, even if they seem to be at variance with commonly known facts, decide which of the conclusions logically follow(s) from the statements.

Statements:
No sticks are buses.
All schools are buses.
All buses are brave.
Conclusions:
I. No stick is brave.
II. All schools are brave.

- Ans
- 1. Only conclusion I follows
 - 2. Only conclusion II follows
 - 3. Neither conclusion I nor II follows
 - 4. Both conclusions I and II follow

Question Type : **MCQ**
Question ID : **264330134988**
Option 1 ID : **264330528887**
Option 2 ID : **264330528888**
Option 3 ID : **264330528890**
Option 4 ID : **264330528889**
Status : **Answered**
Chosen Option : **2**

Q.13 सात लड़कों I, II, III, IV, V, VI और VII में प्रत्येक की उम्र अलग-अलग है। V केवल II से बड़ा है। I, केवल VI से छोटा है। III चार अन्य लड़कों से बड़ा है। VII, IV से छोटा है। लड़कों में चौथा सबसे बड़ा कौन है?

- Ans
- 1. IV
 - 2. I
 - 3. III
 - 4. II

Question Type : MCQ
Question ID : 264330134986
Option 1 ID : 264330528881
Option 2 ID : 264330528882
Option 3 ID : 264330528880
Option 4 ID : 264330528879
Status : Answered
Chosen Option : 1

Q.14 Which of the following letter cluster will replace the question mark (?) in the given series?
CX, EV, GT, IR, KP, ?

- Ans
- 1. QR
 - 2. MK
 - 3. LN
 - 4. MN

Question Type : MCQ
Question ID : 264330134976
Option 1 ID : 264330528839
Option 2 ID : 264330528841
Option 3 ID : 264330528842
Option 4 ID : 264330528840
Status : Answered
Chosen Option : 4

Q.15 Which two signs should be interchanged to make the given equation correct?

$$13 - 25 = 5 + 4 \div 12$$

- Ans
- 1. + and =
 - 2. - and =
 - 3. + and -
 - 4. ÷ and =

Question Type : MCQ
Question ID : 264330134993
Option 1 ID : 264330528907
Option 2 ID : 264330528908
Option 3 ID : 264330528910
Option 4 ID : 264330528909
Status : Answered
Chosen Option : 4

Q.16 In a certain code language, 'JOCKEY' is written as 'KCFYOE'. How will 'EXCISE' be written in that language?

- Ans
- 1. ICEXES
 - 2. ICEEXS
 - 3. CLEXDE
 - 4. EEICSX

Question Type : MCQ
Question ID : 264330137836
Option 1 ID : 264330539954
Option 2 ID : 264330539953
Option 3 ID : 264330539951
Option 4 ID : 264330539952
Status : Answered
Chosen Option : 2

Q.17 Which two signs should be interchanged to make the given equation correct?

$$9 \times 4 + 6 \div 3 - 5 = 39$$

- Ans
- 1. \div and $-$
 - 2. \times and $+$
 - 3. $-$ and $+$
 - 4. $-$ and $=$

Question Type : MCQ
Question ID : 264330134972
Option 1 ID : 264330528825
Option 2 ID : 264330528826
Option 3 ID : 264330528823
Option 4 ID : 264330528824
Status : Answered
Chosen Option : 3

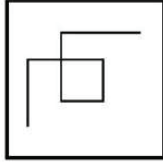
Q.18 Which of the following numbers will replace the question mark (?) in the given series?

27, 32, 42, 57, 77, 102, 132, ?

- Ans
- 1. 172
 - 2. 167
 - 3. 149
 - 4. 158

Question Type : MCQ
Question ID : 264330134990
Option 1 ID : 264330528897
Option 2 ID : 264330528895
Option 3 ID : 264330528898
Option 4 ID : 264330528896
Status : Answered
Chosen Option : 2

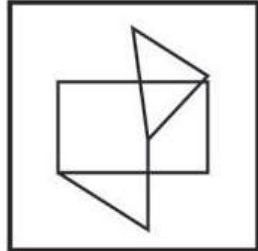
Q.19 Select the option figure in which the given figure (X) is embedded as its part (rotation is NOT allowed).



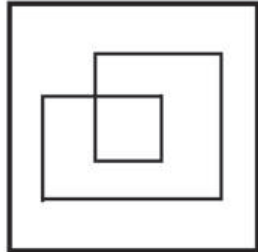
(X)

Ans

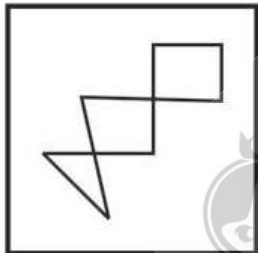
✗ 1.



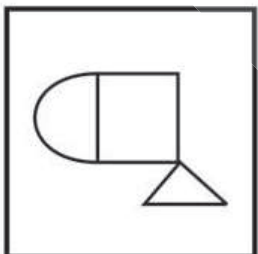
✓ 2.



✗ 3.



✗ 4.



Question Type : MCQ

Question ID : 264330134951

Option 1 ID : 264330528739

Option 2 ID : 264330528741

Option 3 ID : 264330528742

Option 4 ID : 264330528740

Status : Answered

Chosen Option : 2

Q.20 Two statements are given followed by two conclusions numbered I and II. Assuming the statements to be true, even if they seem to be at variance with commonly known facts, decide which of the conclusions logically follow(s) from the statements.

Statements:

No pen is a paper.

All papers are pencils.

Conclusions:

I. Some pens are pencils.

II. All pencils are pen.

- Ans**
- 1. Neither conclusion I nor II follows
 - 2. Both conclusions I and II follow
 - 3. Only conclusion I follows
 - 4. Only conclusion II follows

Question Type : **MCQ**

Question ID : 264330134987

Option 1 ID : 264330528886

Option 2 ID : 264330528885

Option 3 ID : 264330528883

Option 4 ID : 264330528884

Status : **Answered**

Chosen Option : 1

Section : General Awareness

Q.1 Who is the author of the novel 'The God of Small Things'?

- Ans**
- 1. Khushwant Singh
 - 2. Arundhati Roy
 - 3. Aravind Adiga
 - 4. Kiran Desai

Question Type : **MCQ**

Question ID : 264330134599

Option 1 ID : 264330527352

Option 2 ID : 264330527354

Option 3 ID : 264330527353

Option 4 ID : 264330527351

Status : **Answered**

Chosen Option : 2

Q.2 The Governor of a State shall, after every _____ years, constitute a finance commission under Article 243-I of the Indian Constitution.

- Ans**
- 1. ten
 - 2. three
 - 3. five
 - 4. six

Question Type : **MCQ**

Question ID : 264330134665

Option 1 ID : 264330527618

Option 2 ID : 264330527616

Option 3 ID : 264330527615

Option 4 ID : 264330527617

Status : **Answered**

Chosen Option : 3

Q.3 Festival of "Hola Mohalla" is celebrated by which community?

- Ans
- 1. Jains
 - 2. Parsi
 - 3. Sikh
 - 4. Buddhist

Question Type : MCQ
Question ID : 264330134620
Option 1 ID : 264330527435
Option 2 ID : 264330527438
Option 3 ID : 264330527437
Option 4 ID : 264330527436
Status : Not Answered
Chosen Option : --

Q.4 As of 2022, India is the _____ largest producer of wheat in the world.

- Ans
- 1. third
 - 2. second
 - 3. fourth
 - 4. fifth

Question Type : MCQ
Question ID : 264330137953
Option 1 ID : 264330540420
Option 2 ID : 264330540419
Option 3 ID : 264330540421
Option 4 ID : 264330540422
Status : Answered
Chosen Option : 2

Q.5 Who among the following won a gold medal in weightlifting in commonwealth Games 2022?

- Ans
- 1. Sanket Sagar
 - 2. Bindyarani Devi
 - 3. Vikas Thakur
 - 4. Saikhom Mirabai Chanu

Question Type : MCQ
Question ID : 264330134623
Option 1 ID : 264330527448
Option 2 ID : 264330527449
Option 3 ID : 264330527450
Option 4 ID : 264330527447
Status : Answered
Chosen Option : 4

Q.6 Which is the second highest mountain in the Garhwal region of Uttarakhand?

- Ans
- 1. Nanda Devi
 - 2. Kamet
 - 3. Nilkantha
 - 4. Meru

Question Type : MCQ
Question ID : 264330134654
Option 1 ID : 264330527572
Option 2 ID : 264330527571
Option 3 ID : 264330527574
Option 4 ID : 264330527573
Status : Answered
Chosen Option : 1

Q.7 The British parliament transferred the powers of east India company to the British crown in _____.

- Ans
- 1. 1858
 - 2. 1909
 - 3. 1919
 - 4. 1773

Question Type : MCQ
Question ID : 264330134617
Option 1 ID : 264330527424
Option 2 ID : 264330527425
Option 3 ID : 264330527426
Option 4 ID : 264330527423
Status : Answered
Chosen Option : 4

Q.8 Which among the following features of the Indian Constitution was borrowed from the Constitution of Britain?

- Ans
- 1. Directive Principles of State Policy
 - 2. Cabinet System
 - 3. Fundamental Duties
 - 4. Concurrent list

Question Type : MCQ
Question ID : 264330134664
Option 1 ID : 264330527612
Option 2 ID : 264330527611
Option 3 ID : 264330527614
Option 4 ID : 264330527613
Status : Answered
Chosen Option : 2

Q.9 Who among the following won the Mexican Formula 1 Grand Prix 2022?

- Ans
- 1. Carlos Sainz Jr.
 - 2. Lando Norris
 - 3. Max Verstappen
 - 4. Charles Leclerc

Question Type : MCQ
Question ID : 264330134666
Option 1 ID : 264330527620
Option 2 ID : 264330527622
Option 3 ID : 264330527619
Option 4 ID : 264330527621
Status : Answered
Chosen Option : 3

Q.10 Plants require nutrients for their growth which can be supplied through _____.

- Ans
- 1. Soil and air only
 - 2. Soil, water and air
 - 3. Soil and water only
 - 4. soil only

Question Type : MCQ
Question ID : 264330134607
Option 1 ID : 264330527385
Option 2 ID : 264330527386
Option 3 ID : 264330527384
Option 4 ID : 264330527383
Status : Answered
Chosen Option : 2

Q.11 Which of the following is 'NOT' an example of communicable diseases?

- Ans
- 1. Chicken Pox
 - 2. Common cold
 - 3. Diabetes
 - 4. Tuberculosis

Question Type : MCQ
Question ID : 264330134608
Option 1 ID : 264330527387
Option 2 ID : 264330527389
Option 3 ID : 264330527390
Option 4 ID : 264330527388
Status : Answered
Chosen Option : 3

Q.12 Which famous Indian Odissi dancer received the Padma Vibhushan, India's second highest civilian award, in 2000?

- Ans
- 1. Darshana Jhaveri
 - 2. Sunanda Nair
 - 3. Rukmini Devi Arundale
 - 4. Kelucharan Mohapatra

Question Type : MCQ
Question ID : 264330137963
Option 1 ID : 264330540459
Option 2 ID : 264330540461
Option 3 ID : 264330540460
Option 4 ID : 264330540462
Status : Answered
Chosen Option : 4

Q.13 Which among the following statements is incorrect?

- Ans
- 1. Cell wall is present in animals.
 - 2. Cell membrane is also called the plasma membrane.
 - 3. Chromosomes are composed of DNA and Protein.
 - 4. Mitochondria are known as the powerhouse of the cell.

Question Type : MCQ
Question ID : 264330134650
Option 1 ID : 264330527555
Option 2 ID : 264330527556
Option 3 ID : 264330527558
Option 4 ID : 264330527557
Status : Answered
Chosen Option : 2

Q.14 Which among the following is the sole note issuing authority in India?

- Ans
- 1. Industrial Finance Corporation of India
 - 2. National Payments Corporation of India
 - 3. Reserve Bank of India
 - 4. State Bank of India

Question Type : MCQ
Question ID : 264330137968
Option 1 ID : 264330540482
Option 2 ID : 264330540481
Option 3 ID : 264330540479
Option 4 ID : 264330540480
Status : Answered
Chosen Option : 3

Q.15 Charkula is a famous dance form associated with which of the following states?

- Ans
- 1. Tamil Nadu
 - 2. Tripura
 - 3. Uttar Pradesh
 - 4. Andhra Pradesh

Question Type : MCQ
Question ID : 264330134646
Option 1 ID : 264330527541
Option 2 ID : 264330527540
Option 3 ID : 264330527542
Option 4 ID : 264330527539
Status : Not Answered
Chosen Option : --

Q.16 Guru Vempati Chinna Satyam received which of the following awards in the year 1998?

- Ans
- 1. Padma Shri
 - 2. Bharat Ratna
 - 3. Padma Vibhushan
 - 4. Padma Bhushan

Question Type : MCQ
Question ID : 264330134601
Option 1 ID : 264330527361
Option 2 ID : 264330527360
Option 3 ID : 264330527362
Option 4 ID : 264330527359
Status : Answered
Chosen Option : 4

Q.17 Cricket World Cup, 1983 was held in which of the following places?

- Ans
- 1. England
 - 2. Australia
 - 3. West Indies
 - 4. India

Question Type : MCQ
Question ID : 264330134597
Option 1 ID : 264330527344
Option 2 ID : 264330527343
Option 3 ID : 264330527345
Option 4 ID : 264330527346
Status : Answered
Chosen Option : 1

Q.18 With which neighbouring country does India share the Sunderbans forest?

- Ans
- 1. China
 - 2. Pakistan
 - 3. Bangladesh
 - 4. Nepal

Question Type : MCQ
Question ID : 264330137906
Option 1 ID : 264330540233
Option 2 ID : 264330540231
Option 3 ID : 264330540234
Option 4 ID : 264330540232
Status : Answered
Chosen Option : 3

Q.19 As per census 2011, what is the Total Fertility Rate in India? (provide an approximate range)

- Ans
- 1. 3.1-3.9
 - 2. 2.1-2.9
 - 3. 4.1-4.9
 - 4. 5.1-5.9

Question Type : MCQ
Question ID : 264330133967
Option 1 ID : 264330524892
Option 2 ID : 264330524891
Option 3 ID : 264330524893
Option 4 ID : 264330524894
Status : Answered
Chosen Option : 4

Q.20 "The blue umbrella" is a novel written by famous Indian author _____.

- Ans
- 1. Khushwant Singh
 - 2. Sarat Chandra Chattopadhyay
 - 3. Ruskin Bond
 - 4. Arundhati Roy

Question Type : MCQ
Question ID : 264330137961
Option 1 ID : 264330540451
Option 2 ID : 264330540453
Option 3 ID : 264330540454
Option 4 ID : 264330540452
Status : Answered
Chosen Option : 1

Q.21 _____ are formed when an opaque objects comes in the path of light.

- Ans
- 1. Mirror reflections
 - 2. Shadows
 - 3. Translucent rays
 - 4. Transparent rays

Question Type : MCQ
Question ID : 264330134610
Option 1 ID : 264330527396
Option 2 ID : 264330527395
Option 3 ID : 264330527398
Option 4 ID : 264330527397
Status : Answered
Chosen Option : 2

Q.22 Which ministry organised a month-long programme called the 'Kashi Tamil Sangamam' in 2022?

- Ans
- 1. Ministry of Tribal Affairs
 - 2. Ministry of Culture
 - 3. Ministry of External Affairs
 - 4. Ministry of Education

Question Type : MCQ
Question ID : 264330134644
Option 1 ID : 264330527532
Option 2 ID : 264330527534
Option 3 ID : 264330527533
Option 4 ID : 264330527531
Status : Answered
Chosen Option : 2

Q.23 Who received the Nobel Prize in Literature 2022?

- Ans
- 1. Peter Handke
 - 2. Olga Tokarczuk
 - 3. Abdulrazak Gurnah
 - 4. Annie Ernaux

Question Type : MCQ
Question ID : 264330134602
Option 1 ID : 264330527366
Option 2 ID : 264330527363
Option 3 ID : 264330527365
Option 4 ID : 264330527364
Status : Answered
Chosen Option : 4

Q.24 Who among the following is famous for playing the musical instrument 'Sitar'?

- Ans
- 1. Vilayat Khan
 - 2. Zakir Hussian
 - 3. Surojeet Chatterji
 - 4. Ali Akbar Khan

Question Type : MCQ
Question ID : 264330134662
Option 1 ID : 264330527603
Option 2 ID : 264330527606
Option 3 ID : 264330527605
Option 4 ID : 264330527604
Status : Answered
Chosen Option : 1

Q.25 International year of freshwater was observed in which year?

- Ans
- 1. 2000
 - 2. 2002
 - 3. 2003
 - 4. 2001

Question Type : MCQ
Question ID : 264330134634
Option 1 ID : 264330527491
Option 2 ID : 264330527493
Option 3 ID : 264330527494
Option 4 ID : 264330527492
Status : Not Answered
Chosen Option : --

Section : English Language and Comprehension

Q.1 A sentence has been given with a blank to be filled with an appropriate option. Choose the correct alternative.

The storm passed _____, but the night remained warm.

- Ans
- 1. quickest
 - 2. quicker
 - 3. quickly
 - 4. quick

Question Type : MCQ
Question ID : 264330134777
Option 1 ID : 264330528055
Option 2 ID : 264330528056
Option 3 ID : 264330528058
Option 4 ID : 264330528057
Status : Answered
Chosen Option : 4

Q.2 Select the word segment that substitutes (replaces) the bracketed word segment correctly and completes the sentence meaningfully. Select the option 'no correction required' if the sentence is correct as given.

The tourists (rendered to the) museum on time.

- Ans**
- 1. appeared at the
 - 2. occurred to the
 - 3. No correction required
 - 4. arrived at the

Question Type : **MCQ**
Question ID : **264330136243**
Option 1 ID : **264330533759**
Option 2 ID : **264330533760**
Option 3 ID : **264330533762**
Option 4 ID : **264330533761**
Status : **Answered**
Chosen Option : **4**

Q.3 Improve the underlined part of the sentence. Choose 'No improvement' as an answer if the sentence is grammatically correct.

The number of homes with running watered has been rising sharply since 1985.

- Ans**
- 1. with run water
 - 2. with running water
 - 3. of ran watered
 - 4. No improvement

Question Type : **MCQ**
Question ID : **264330134802**
Option 1 ID : **264330528151**
Option 2 ID : **264330528152**
Option 3 ID : **264330528153**
Option 4 ID : **264330528154**
Status : **Answered**
Chosen Option : **2**

Q.4 Select the most appropriate option to fill in the blank.

Unless you complete your school education, you cannot get yourself _____ into a college.

- Ans**
- 1. advanced
 - 2. enrolled
 - 3. mopped
 - 4. accommodated

Question Type : **MCQ**
Question ID : **264330134796**
Option 1 ID : **264330528129**
Option 2 ID : **264330528127**
Option 3 ID : **264330528130**
Option 4 ID : **264330528128**
Status : **Answered**
Chosen Option : **2**

Q.5 Find the part of the given sentence that has an error in it. If there is no error, choose 'No error'.

No matter how mountains are formed, they eventually becomes too heavy and succumb to gravity.

- Ans**
- 1. formed, they eventually becomes
 - 2. No matter how mountains are
 - 3. too heavy and succumb to gravity.
 - 4. No error

Question Type : **MCQ**
Question ID : **264330134773**
Option 1 ID : **264330528040**
Option 2 ID : **264330528039**
Option 3 ID : **264330528041**
Option 4 ID : **264330528042**
Status : **Answered**
Chosen Option : **1**

Q.6 In the following question, out of the given four alternatives, select the alternative which best expresses the meaning of the Idiom/Phrase.

Dead men's shoes

- Ans**
- 1. Making oneself available for all the tasks being assigned
 - 2. A career where a lot of cheques are signed
 - 3. Job that one takes over from somebody who has left unexpectedly or died
 - 4. Acquiring the wealth of a dead man through malpractices

Question Type : **MCQ**
Question ID : **264330134792**
Option 1 ID : **264330528111**
Option 2 ID : **264330528112**
Option 3 ID : **264330528113**
Option 4 ID : **264330528114**
Status : **Answered**
Chosen Option : **4**

Q.7 Choose the word that means the same as the given word.

Arrogance

- Ans**
- 1. Inhibition
 - 2. Bashful
 - 3. Dominance
 - 4. Diffidence

Question Type : **MCQ**
Question ID : **264330134762**
Option 1 ID : **264330527997**
Option 2 ID : **264330527998**
Option 3 ID : **264330527995**
Option 4 ID : **264330527996**
Status : **Answered**
Chosen Option : **2**

Q.8 Improve the underlined part of the sentence. Choose 'No improvement' as an answer if the sentence is grammatically correct.
Richard Dawkins written the foreword to the second edition of the book.

- Ans
- 1. wrote the foreword
 - 2. will wrote the foreword
 - 3. write the foreword
 - 4. No improvement

Question Type : MCQ
Question ID : 264330134453
Option 1 ID : 264330526784
Option 2 ID : 264330526785
Option 3 ID : 264330526783
Option 4 ID : 264330526786
Status : Answered
Chosen Option : 2

Q.9 Identify the segment that contains a grammatical error. If there is no error, select 'No error'.
Before he could devote many more / thought to the matter, Pranav / had stepped up to him.

- Ans
- 1. Before he could devote many more
 - 2. thought to the matter, Pranav
 - 3. had stepped up to him.
 - 4. No error

Question Type : MCQ
Question ID : 264330136240
Option 1 ID : 264330533747
Option 2 ID : 264330533748
Option 3 ID : 264330533749
Option 4 ID : 264330533750
Status : Answered
Chosen Option : 3

Q.10 Select the appropriate synonym for the underlined word.

There is no need to attack our guest.

- Ans
- 1. generate
 - 2. assault
 - 3. mark
 - 4. adore

Question Type : MCQ
Question ID : 264330134787
Option 1 ID : 264330528094
Option 2 ID : 264330528093
Option 3 ID : 264330528091
Option 4 ID : 264330528092
Status : Answered
Chosen Option : 2

Q.11 A sentence has been given with a blank to be filled with an appropriate option. Choose the correct alternative.

Oak trees do not use leaves to make food _____ the winter.

- Ans
- 1. while
 - 2. within
 - 3. during
 - 4. by

Question Type : MCQ
Question ID : 264330134752
Option 1 ID : 264330527961
Option 2 ID : 264330527962
Option 3 ID : 264330527960
Option 4 ID : 264330527959
Status : Answered
Chosen Option : 3

Q.12 Choose the incorrectly spelt word.

- Ans
- 1. Maintaen
 - 2. Boring
 - 3. Stupid
 - 4. Gang

Question Type : MCQ
Question ID : 264330134793
Option 1 ID : 264330528118
Option 2 ID : 264330528115
Option 3 ID : 264330528117
Option 4 ID : 264330528116
Status : Answered
Chosen Option : 1

Q.13 Choose the sentence with no spelling error.

- Ans
- 1. He stuod outside the bathroom door.
 - 2. He stood outside the bathroom door.
 - 3. He stood outside the bathroom door.
 - 4. He stood outside the bathrum door.

Question Type : MCQ
Question ID : 264330134742
Option 1 ID : 264330527919
Option 2 ID : 264330527921
Option 3 ID : 264330527922
Option 4 ID : 264330527920
Status : Answered
Chosen Option : 3

Q.14 Choose the word that can substitute the given group of words.

One who hates war, loves peace

- Ans
- 1. Pacifist
 - 2. Desecrater
 - 3. Fatalist
 - 4. Conformist

Question Type : MCQ
Question ID : 264330134733
Option 1 ID : 264330527886
Option 2 ID : 264330527883
Option 3 ID : 264330527884
Option 4 ID : 264330527885
Status : Answered
Chosen Option : 1

Q.15 Choose the word that is opposite in meaning to the given word.

Lordly

- Ans
- 1. Despair
 - 2. Arrogant
 - 3. Ignoble
 - 4. Saucy

Question Type : MCQ
Question ID : 264330134763
Option 1 ID : 264330528002
Option 2 ID : 264330527999
Option 3 ID : 264330528000
Option 4 ID : 264330528001
Status : Answered
Chosen Option : 4

Q.16 In the following question, out of the given four alternatives, select the alternative which best expresses the meaning of the Idiom/Phrase.

The lion's share

- Ans
- 1. Life with no regrets
 - 2. To lose a big amount of money
 - 3. Big success
 - 4. The largest portion

Question Type : MCQ
Question ID : 264330134739
Option 1 ID : 264330527908
Option 2 ID : 264330527910
Option 3 ID : 264330527909
Option 4 ID : 264330527907
Status : Answered
Chosen Option : 4

Q.17 Find the part of the given sentence that has an error in it. If there is no error, choose 'No error'.

Black holes can has powerful effects on their surroundings.

Ans 1. has powerful effects

2. No error

3. on their surroundings.

4. Black holes can

Question Type : MCQ

Question ID : 264330134425

Option 1 ID : 264330526676

Option 2 ID : 264330526678

Option 3 ID : 264330526677

Option 4 ID : 264330526675

Status : Answered

Chosen Option : 1

Q.18 Select the most appropriate option to fill in the blank.

The priest puts some _____ water on the child's head.

Ans 1. hairy

2. holy

3. haughty

4. wholly

Question Type : MCQ

Question ID : 264330134743

Option 1 ID : 264330527923

Option 2 ID : 264330527924

Option 3 ID : 264330527926

Option 4 ID : 264330527925

Status : Answered

Chosen Option : 2

Q.19 Select the appropriate antonym for the underlined word.

The freedom to browse a secure and accountable online space will be compromised.

Ans 1. indebted

2. amicable

3. irresponsible

4. liable

Question Type : MCQ

Question ID : 264330134790

Option 1 ID : 264330528104

Option 2 ID : 264330528106

Option 3 ID : 264330528105

Option 4 ID : 264330528103

Status : Answered

Chosen Option : 3

Q.20 Choose the word that can substitute the given group of words.

An exact copy of handwriting, printing

- Ans
- 1. Platitude
 - 2. Maiden
 - 3. Potable
 - 4. Facsimile

Question Type : MCQ
Question ID : 264330134786
Option 1 ID : 264330528087
Option 2 ID : 264330528090
Option 3 ID : 264330528088
Option 4 ID : 264330528089
Status : Answered
Chosen Option : 4

Comprehension:

In the following passage some of the words have been deleted. Read the passage carefully and select the correct answer for the given blank out of the four alternatives.

In a gallery at the Metropolitan Museum of Art (1) _____ New York, paintings of a father and daughter (2) _____ face to face. Larger than life, the monumental portraits (3) _____ competing conceptions of royal power. The father, Henry VIII, (4) _____ directly at the viewer, conveying aggression through his wide stance, bulging leg muscles and (5) _____ padded clothing.

SubQuestion No : 21

Q.21 Select the most appropriate option to fill in blank number 1.

- Ans
- 1. to
 - 2. in
 - 3. on
 - 4. at

Question Type : MCQ
Question ID : 264330134754
Option 1 ID : 264330527963
Option 2 ID : 264330527965
Option 3 ID : 264330527964
Option 4 ID : 264330527966
Status : Answered
Chosen Option : 2

Comprehension:

In the following passage some of the words have been deleted. Read the passage carefully and select the correct answer for the given blank out of the four alternatives.

In a gallery at the Metropolitan Museum of Art (1) _____ New York, paintings of a father and daughter (2) _____ face to face. Larger than life, the monumental portraits (3) _____ competing conceptions of royal power. The father, Henry VIII, (4) _____ directly at the viewer, conveying aggression through his wide stance, bulging leg muscles and (5) _____ padded clothing.

SubQuestion No : 22

Q.22 Select the most appropriate option to fill in blank number 2.

- Ans
- 1. rest
 - 2. hang
 - 3. poised
 - 4. hanged

Question Type : MCQ
Question ID : 264330134755
Option 1 ID : 264330527967
Option 2 ID : 264330527968
Option 3 ID : 264330527970
Option 4 ID : 264330527969
Status : Answered
Chosen Option : 4

Comprehension:

In the following passage some of the words have been deleted. Read the passage carefully and select the correct answer for the given blank out of the four alternatives.

In a gallery at the Metropolitan Museum of Art (1) _____ New York, paintings of a father and daughter (2) _____ face to face. Larger than life, the monumental portraits (3) _____ competing conceptions of royal power. The father, Henry VIII, (4) _____ directly at the viewer, conveying aggression through his wide stance, bulging leg muscles and (5) _____ padded clothing.

SubQuestion No : 23

Q.23 Select the most appropriate option to fill in blank number 3.

- Ans
- 1. believe
 - 2. sell
 - 3. present
 - 4. settle

Question Type : MCQ
Question ID : 264330134756
Option 1 ID : 264330527974
Option 2 ID : 264330527972
Option 3 ID : 264330527973
Option 4 ID : 264330527971
Status : Answered
Chosen Option : 3

Comprehension:

In the following passage some of the words have been deleted. Read the passage carefully and select the correct answer for the given blank out of the four alternatives.

In a gallery at the Metropolitan Museum of Art (1) _____ New York, paintings of a father and daughter (2) _____ face to face. Larger than life, the monumental portraits (3) _____ competing conceptions of royal power. The father, Henry VIII, (4) _____ directly at the viewer, conveying aggression through his wide stance, bulging leg muscles and (5) _____ padded clothing.

SubQuestion No : 24

Q.24 Select the most appropriate option to fill in blank number 4.

- Ans
- 1. books
 - 2. shocks
 - 3. looks
 - 4. hooks

Question Type : MCQ
Question ID : 264330134757
Option 1 ID : 264330527976
Option 2 ID : 264330527975
Option 3 ID : 264330527977
Option 4 ID : 264330527978
Status : Answered
Chosen Option : 3

Comprehension:

In the following passage some of the words have been deleted. Read the passage carefully and select the correct answer for the given blank out of the four alternatives.

In a gallery at the Metropolitan Museum of Art (1) _____ New York, paintings of a father and daughter (2) _____ face to face. Larger than life, the monumental portraits (3) _____ competing conceptions of royal power. The father, Henry VIII, (4) _____ directly at the viewer, conveying aggression through his wide stance, bulging leg muscles and (5) _____ padded clothing.

SubQuestion No : 25

Q.25 Select the most appropriate option to fill in blank number 5.

- Ans
- 1. totally
 - 2. excessively
 - 3. commonly
 - 4. acutely

Question Type : MCQ
Question ID : 264330134758
Option 1 ID : 264330527979
Option 2 ID : 264330527982
Option 3 ID : 264330527980
Option 4 ID : 264330527981
Status : Answered
Chosen Option : 2