



SSC MTS **SHIFT – 3 (15-05-2023)**

- ★ **Latest Govt Job updates**
- ★ **Private Job updates**
- ★ **Free Mock tests available**

**Visit - [teachingninja.in](https://teachingninja.in)**

## Multi Tasking Non Technical Staff and Havaladar CBIC and CBN Examination 2022

Roll Number	
Candidate Name	
Venue Name	
Exam Date	15/05/2023
Exam Time	3:30 PM - 5:00 PM
Subject	MTS Non Tech Havaladar CBIC and CBN Examination 2022

### Section : Numerical and Mathematical Ability

**Q.1** In a match, average of runs scored by 7 players is 63. If the runs scored by 6 players are 130, 42, 24, 53, 45 and 54, then how many runs did the 7th player scored?

- Ans**
- 1. 93
  - 2. 90
  - 3. 85
  - 4. 87

Question Type : MCQ

Question ID : 264330137157

Option 1 ID : 264330537274

Option 2 ID : 264330537272

Option 3 ID : 264330537271

Option 4 ID : 264330537273

Status : Answered

Chosen Option : 1

**Q.2** A dealer purchased a washing machine for Rs. 6400. After allowing a discount of 20% on its marked price, he still gains 30%. Find the marked price of the washing machine.

- Ans**
- 1. Rs. 12,000
  - 2. Rs. 10,400
  - 3. Rs. 11,000
  - 4. Rs. 13,000

Question Type : MCQ

Question ID : 264330135072

Option 1 ID : 264330529224

Option 2 ID : 264330529225

Option 3 ID : 264330529223

Option 4 ID : 264330529226

Status : Answered

Chosen Option : 2

**Q.3** Two boats go downstream in a river at a speed of 35 km/hr and 25 km/hr. The speed of the stream is 4 km/hr. The distance between both boats initially is 60 km. In how much time will they meet if the boats are going downstream?

- Ans**
- 1. 10 hours
  - 2. 13 hours
  - 3. 6 hours
  - 4. 8 hours

Question Type : **MCQ**  
Question ID : **264330135078**  
Option 1 ID : **264330529247**  
Option 2 ID : **264330529250**  
Option 3 ID : **264330529248**  
Option 4 ID : **264330529249**  
Status : **Answered**  
Chosen Option : **3**

**Q.4** A train is moving at a uniform speed of 360 km/h. How far it will travel in 18 minutes?

- Ans**
- 1. 108 km
  - 2. 160 km
  - 3. 180 km
  - 4. 200 km

Question Type : **MCQ**  
Question ID : **264330135075**  
Option 1 ID : **264330529238**  
Option 2 ID : **264330529235**  
Option 3 ID : **264330529236**  
Option 4 ID : **264330529237**  
Status : **Answered**  
Chosen Option : **1**

**Q.5** A sum was lent for one year at the rate of 16 percent per annum on compound interest (compounding annually). If the compounding had been done half yearly, then the interest would have increased by Rs. 64. What was the sum lent?

- Ans**
- 1. Rs. 10000
  - 2. Rs. 6000
  - 3. Rs. 14000
  - 4. Rs. 20000

Question Type : **MCQ**  
Question ID : **264330137614**  
Option 1 ID : **264330539065**  
Option 2 ID : **264330539064**  
Option 3 ID : **264330539066**  
Option 4 ID : **264330539063**  
Status : **Answered**  
Chosen Option : **1**

Q.6 What is the value of  $\frac{126}{39} \times \left( \frac{78}{14} \div \frac{13}{91} \right) - \frac{45}{9}$  ?

- Ans
- 1. 121
  - 2. 123
  - 3. 143
  - 4. 141

Question Type : MCQ  
Question ID : 264330139092  
Option 1 ID : 264330544975  
Option 2 ID : 264330544976  
Option 3 ID : 264330544978  
Option 4 ID : 264330544977  
Status : Answered  
Chosen Option : 1

Q.7 The average of 4 consecutive numbers is 35.5. Find the highest number among these numbers.

- Ans
- 1. 37
  - 2. 36
  - 3. 40
  - 4. 39

Question Type : MCQ  
Question ID : 264330135067  
Option 1 ID : 264330529203  
Option 2 ID : 264330529205  
Option 3 ID : 264330529206  
Option 4 ID : 264330529204  
Status : Answered  
Chosen Option : 1

Q.8 A sum of Rs. 600 becomes Rs. 840 at simple interest in 4 years. In how many years will the sum of Rs. 1500 amounts to Rs. 2100 at the same rate of simple interest?

- Ans
- 1. 5 years
  - 2. 4 years
  - 3. 2 years
  - 4. 3 years

Question Type : MCQ  
Question ID : 264330137634  
Option 1 ID : 264330539145  
Option 2 ID : 264330539146  
Option 3 ID : 264330539143  
Option 4 ID : 264330539144  
Status : Answered  
Chosen Option : 2

Q.9 Successive discounts of 15% and 30% are equivalent to how much percent of a single discount?

- Ans
- 1. 52.8%
  - 2. 20.5%
  - 3. 33.33%
  - 4. 40.5%

Question Type : MCQ  
Question ID : 264330135073  
Option 1 ID : 264330529228  
Option 2 ID : 264330529227  
Option 3 ID : 264330529229  
Option 4 ID : 264330529230  
Status : Answered  
Chosen Option : 4

Q.10 25 employees can finish work in 20 days. After how many days should 10 employees leave the job so that the work is finished in 30 days?

- Ans
- 1. 7 days
  - 2. 6 days
  - 3. 3 days
  - 4. 5 days

Question Type : MCQ  
Question ID : 264330135079  
Option 1 ID : 264330529253  
Option 2 ID : 264330529252  
Option 3 ID : 264330529251  
Option 4 ID : 264330529254  
Status : Answered  
Chosen Option : 4

Q.11 What is the value of 25 percent of 40 percent of  $(\frac{2}{7})$  of 2100?

- Ans
- 1. 40
  - 2. 60
  - 3. 50
  - 4. 45

Question Type : MCQ  
Question ID : 264330137629  
Option 1 ID : 264330539124  
Option 2 ID : 264330539126  
Option 3 ID : 264330539125  
Option 4 ID : 264330539123  
Status : Answered  
Chosen Option : 2

Q.12 If the curved surface area of a solid cylinder is two-fifth of its total surface area, then what is the ratio of its diameter to its height?

- Ans
- 1. 2:5
  - 2. 1:2
  - 3. 2:3
  - 4. 3:1

Question Type : MCQ

Question ID : 264330138389

Option 1 ID : 264330542164

Option 2 ID : 264330542166

Option 3 ID : 264330542165

Option 4 ID : 264330542163

Status : Answered

Chosen Option : 4

Q.13 The value of  $\frac{1}{8} \times \left[ \frac{1}{5} \text{ of } \frac{11}{2} \div \left\{ \left( \frac{15}{3} - \frac{18}{6} \right) \right\} \right]$  is:

- Ans
- 1.  $\frac{11}{160}$
  - 2.  $\frac{11}{20}$
  - 3.  $\frac{8}{11}$
  - 4.  $\frac{11}{8}$

Question Type : MCQ

Question ID : 264330134082

Option 1 ID : 264330525354

Option 2 ID : 264330525351

Option 3 ID : 264330525352

Option 4 ID : 264330525353

Status : Answered

Chosen Option : 1

Q.14 The value of  $12 \div (1/2) + \{(35 \div 7) \text{ of } 40\} + 20 - 15 \text{ of } 10$  is :

- Ans
- 1. 88
  - 2. 94
  - 3. 99
  - 4. 80

Question Type : MCQ

Question ID : 264330135064

Option 1 ID : 264330529193

Option 2 ID : 264330529192

Option 3 ID : 264330529191

Option 4 ID : 264330529194

Status : Answered

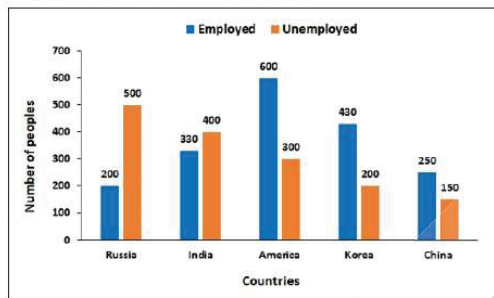
Chosen Option : 2

Q.15 If the cost price of an article is 80 percent of its selling price, then what is the profit percentage?

- Ans
- 1. 50 percent
  - 2. 33.33 percent
  - 3. 25 percent
  - 4. 30 percent

Question Type : MCQ  
Question ID : 264330137328  
Option 1 ID : 264330537940  
Option 2 ID : 264330537939  
Option 3 ID : 264330537942  
Option 4 ID : 264330537941  
Status : Answered  
Chosen Option : 3

Q.16 The bar graph shows the number of employed and unemployed people in 5 different countries. Find the ratio of unemployed people in India to employed people in Russia.



- Ans
- 1. 2 : 3
  - 2. 3 : 4
  - 3. 1 : 4
  - 4. 2 : 1

Question Type : MCQ  
Question ID : 264330135082  
Option 1 ID : 264330529264  
Option 2 ID : 264330529265  
Option 3 ID : 264330529266  
Option 4 ID : 264330529263  
Status : Answered  
Chosen Option : 4

Q.17 The following table shows the number of students from 4 different schools playing different games. What is the ratio of the total students who played Basketball in School A and C together to the total students who played Football in school B and D together?

Schools	Games				
	Basketball	Football	Tennis	Cricket	Hockey
A	125	75	28	100	22
B	90	50	12	50	13
C	145	80	45	70	40
D	100	40	20	45	55

- Ans
- 1. 4:5
  - 2. 2:5
  - 3. 3:1
  - 4. 2:3

Question Type : MCQ  
Question ID : 264330134096  
Option 1 ID : 264330525408  
Option 2 ID : 264330525407  
Option 3 ID : 264330525409  
Option 4 ID : 264330525410  
Status : Answered  
Chosen Option : 3

Q.18 A alone can paint a house in 35 days and B alone can do it in 70 days. Along with C, they did the job in 10 days only. In how many days C alone can do the job?

- Ans
- 1. 40 days
  - 2. 70/3 days
  - 3. 70/4 days
  - 4. 20 days

Question Type : MCQ  
Question ID : 264330138384  
Option 1 ID : 264330542146  
Option 2 ID : 264330542143  
Option 3 ID : 264330542145  
Option 4 ID : 264330542144  
Status : Answered  
Chosen Option : 3

Q.19 If the circumference of a circle is 13.2 cm, then what is its radius?

- Ans
- 1. 1.7 cm
  - 2. 6 cm
  - 3. 21 cm
  - 4. 2.1 cm

Question Type : MCQ  
Question ID : 264330135083  
Option 1 ID : 264330529268  
Option 2 ID : 264330529267  
Option 3 ID : 264330529269  
Option 4 ID : 264330529270  
Status : Answered  
Chosen Option : 4



**Q.20** A earns in march twice as much as in each of the other months. What is the ratio of his earnings in march to the annual earnings?

- Ans** ✓ 1. 2 : 13  
✗ 2. 3 : 8  
✗ 3. 4 : 9  
✗ 4. 2 : 7

Question Type : **MCQ**  
Question ID : **264330135074**  
Option 1 ID : **264330529231**  
Option 2 ID : **264330529233**  
Option 3 ID : **264330529234**  
Option 4 ID : **264330529232**  
Status : **Answered**  
Chosen Option : 1

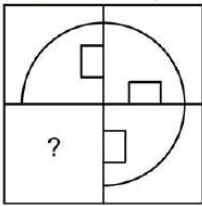
Section : Reasoning Ability and Problem Solving

**Q.1** Select the option that is related to the third word in the same way as the second word is related to the first word.  
Refute : Approve :: Admire : ?

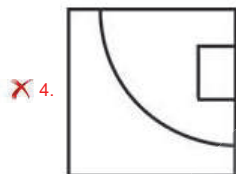
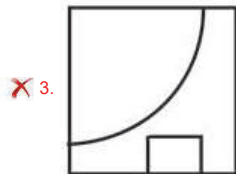
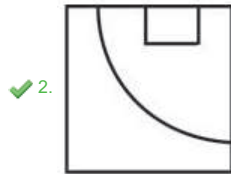
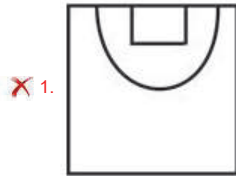
- Ans** ✗ 1. Applaud  
✗ 2. Proud  
✗ 3. Appreciate  
✓ 4. Criticize

Question Type : **MCQ**  
Question ID : **264330134957**  
Option 1 ID : **264330528764**  
Option 2 ID : **264330528766**  
Option 3 ID : **264330528763**  
Option 4 ID : **264330528765**  
Status : **Answered**  
Chosen Option : 4

**Q.2** Select the option figure that will replace the question mark (?) in the figure given below to complete the pattern.  
(rotation is not allowed)



**Ans**



Teachingninja.in

Question Type : MCQ

Question ID : 264330134975

Option 1 ID : 264330528835

Option 2 ID : 264330528836

Option 3 ID : 264330528837

Option 4 ID : 264330528838

Status : Answered

Chosen Option : 2

**Q.3** Three statements are given followed by two conclusions numbered I and II. Assuming the statements to be true, even if they seem to be at variance with commonly known facts, decide which of the conclusions logically follow(s) from the statements.

Statements:

Some words are short.

Some shorts are long.

All long are tree.

Conclusions:

I. Some tree are short.

II. Some tree are words.

- Ans
- 1. Neither conclusion I nor II follows
  - 2. Both conclusions I and II follow
  - 3. Only conclusion II follows
  - 4. Only conclusion I follows

Question Type : MCQ  
Question ID : 264330134966  
Option 1 ID : 264330528802  
Option 2 ID : 264330528801  
Option 3 ID : 264330528800  
Option 4 ID : 264330528799  
Status : Answered  
Chosen Option : 4

**Q.4** In a certain code language, 'JUMP' is written as 'ITLO' and 'GIRL' is written as 'FHQK'. How will 'LOVE' be written in that language?

- Ans
- 1. KNWF
  - 2. KNWD
  - 3. KPUD
  - 4. KNUD

Question Type : MCQ  
Question ID : 264330133490  
Option 1 ID : 264330522994  
Option 2 ID : 264330522993  
Option 3 ID : 264330522991  
Option 4 ID : 264330522992  
Status : Answered  
Chosen Option : 4

**Q.5** Which of the following letter cluster will replace the question mark (?) in the given series?  
CAM, DYL, EWK, FUJ, GSI, HQH, ?

- Ans
- 1. FOG
  - 2. IOF
  - 3. IJG
  - 4. IOG

Question Type : MCQ  
Question ID : 264330134954  
Option 1 ID : 264330528752  
Option 2 ID : 264330528751  
Option 3 ID : 264330528753  
Option 4 ID : 264330528754  
Status : Answered  
Chosen Option : 4

**Q.6** Study the given pattern carefully and select the number that can replace the question mark (?) in it.

First row- 8, 96, 104

Second row- 11, 132, 143

Third row- 7, 84, ?

- Ans**
- 1. 88
  - 2. 95
  - 3. 91
  - 4. 92

Question Type : **MCQ**

Question ID : **264330134970**

Option 1 ID : **264330528817**

Option 2 ID : **264330528818**

Option 3 ID : **264330528815**

Option 4 ID : **264330528816**

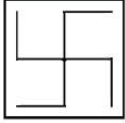
Status : **Answered**

Chosen Option : **3**



Teachingninja.in

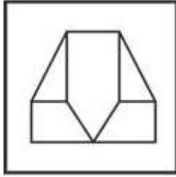
Q.7 Select the option figure in which the given figure (X) is embedded as its part (rotation is NOT allowed).



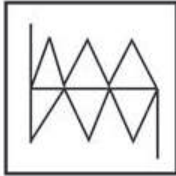
(X)

Ans

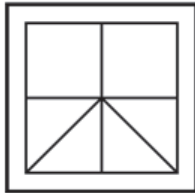
✗ 1.



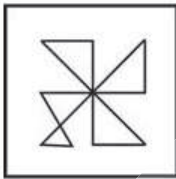
✗ 2.



✓ 3.



✗ 4.



Teachingninja.in

Question Type : MCQ

Question ID : 264330133713

Option 1 ID : 264330523876

Option 2 ID : 264330523878

Option 3 ID : 264330523875

Option 4 ID : 264330523877

Status : Answered

Chosen Option : 3

**Q.8** Select the option that is related to the third letter cluster in the same way as the second number is related to the first letter cluster.  
CL : 36 : : FP : ?

- Ans**
- ✓ 1. 96
  - ✗ 2. 88
  - ✗ 3. 92
  - ✗ 4. 49

Question Type : **MCQ**  
Question ID : **264330134956**  
Option 1 ID : **264330528762**  
Option 2 ID : **264330528760**  
Option 3 ID : **264330528761**  
Option 4 ID : **264330528759**  
Status : **Answered**  
Chosen Option : **1**

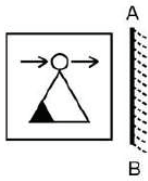
**Q.9** In a certain code language, 'FULLY' is coded as 'PPYJ'. What is the code for 'GIVEN' in that code language?

- Ans**
- ✓ 1. RIZMK
  - ✗ 2. RIZOK
  - ✗ 3. RIZML
  - ✗ 4. RIYMK

Question Type : **MCQ**  
Question ID : **264330138462**  
Option 1 ID : **264330542458**  
Option 2 ID : **264330542457**  
Option 3 ID : **264330542456**  
Option 4 ID : **264330542455**  
Status : **Answered**  
Chosen Option : **1**



Q.10 Select the correct mirror image of the given figure when the mirror is placed at AB as shown below.



Ans

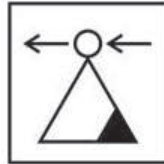
✗ 1.



✗ 2.



✓ 3.



✗ 4.



Teachingninja.in

Question Type : MCQ

Question ID : 264330133714

Option 1 ID : 264330523880

Option 2 ID : 264330523882

Option 3 ID : 264330523881

Option 4 ID : 264330523879

Status : Answered

Chosen Option : 3

Q.11 Seven students H, I, J, K, L, M and N have all scored unique number of marks. H scored only more than N. Marks of three students were between the marks of J and I. I did not score the highest marks. How many students scored less than J?

Ans

✓ 1. 6

✗ 2. 3

✗ 3. 5

✗ 4. 4

Question Type : MCQ

Question ID : 264330134964

Option 1 ID : 264330528793

Option 2 ID : 264330528794

Option 3 ID : 264330528792

Option 4 ID : 264330528791

Status : Answered

Chosen Option : 1

**Q.12** In a certain code language, 'ABOVE' is coded as 'DERYH'. What is the code for 'BELOW' in that code language?

- Ans
- 1. EHORZ
  - 2. FHOSY
  - 3. EHPRY
  - 4. EHORY

Question Type : MCQ  
Question ID : 264330138502  
Option 1 ID : 264330542618  
Option 2 ID : 264330542616  
Option 3 ID : 264330542615  
Option 4 ID : 264330542617  
Status : Answered  
Chosen Option : 1

**Q.13** Which two numbers should be interchanged to make the given equation correct?

$$12 \times 4 - 8 + 9 \div 3 = 32$$

- Ans
- 1. 4 and 9
  - 2. 12 and 3
  - 3. 12 and 9
  - 4. 32 and 12

Question Type : MCQ  
Question ID : 264330134971  
Option 1 ID : 264330528820  
Option 2 ID : 264330528822  
Option 3 ID : 264330528821  
Option 4 ID : 264330528819  
Status : Answered  
Chosen Option : 3

**Q.14** Two statements are given followed by two conclusions numbered I and II. Assuming the statements to be true, even if they seem to be at variance with commonly known facts, decide which of the conclusions logically follow(s) from the statements.

Statements:

Some horses are not trucks.

All horses are white.

Conclusions:

I. Some white are trucks.

II. Some horses being truck is a possibility.

- Ans
- 1. Only conclusion I follows
  - 2. Neither conclusion I nor II follows
  - 3. Only conclusion II follows
  - 4. Both conclusions I and II follow

Question Type : MCQ  
Question ID : 264330134965  
Option 1 ID : 264330528795  
Option 2 ID : 264330528798  
Option 3 ID : 264330528796  
Option 4 ID : 264330528797  
Status : Answered  
Chosen Option : 3



**Q.15** Select the option that is related to the third number in the same way as the second number is related to the first number.  
483 : 331 :: 715 : ?

- Ans**
- 1. 653
  - 2. 570
  - 3. 563
  - 4. 356

Question Type : **MCQ**  
Question ID : **264330137552**  
Option 1 ID : **264330538815**  
Option 2 ID : **264330538817**  
Option 3 ID : **264330538818**  
Option 4 ID : **264330538816**  
Status : **Answered**  
Chosen Option : **3**

**Q.16** Five girls namely B, H, O, M and S are seating in a circle facing the centre. S is sitting to the immediate left of O and the immediate right of B. M sits second to the left of S. Who sits to the immediate right of H?

- Ans**
- 1. S
  - 2. M
  - 3. B
  - 4. O

Question Type : **MCQ**  
Question ID : **264330134962**  
Option 1 ID : **264330528786**  
Option 2 ID : **264330528783**  
Option 3 ID : **264330528784**  
Option 4 ID : **264330528785**  
Status : **Answered**  
Chosen Option : **2**

**Q.17** After interchanging the given two numbers what will be the values of equation (I) and (II) respectively?

S and 4

I.  $8 - 4 \times 6 + 3 + 7$

II.  $8 \times 3 - 6 + 2 + 4$

- Ans**
- 1. -5 and 20
  - 2. -4 and 18
  - 3. -5 and 17
  - 4. 20 and 18

Question Type : **MCQ**  
Question ID : **264330137533**  
Option 1 ID : **264330538742**  
Option 2 ID : **264330538740**  
Option 3 ID : **264330538741**  
Option 4 ID : **264330538739**  
Status : **Answered**  
Chosen Option : **3**

Q.18 Which of the following numbers will replace the question mark (?) in the given series?

47, 49, 53, 55, 59, 61, 65, ?

Ans  1. 56

2. 76

3. 67

4. 69

Question Type : MCQ

Question ID : 264330134968

Option 1 ID : 264330528810

Option 2 ID : 264330528809

Option 3 ID : 264330528808

Option 4 ID : 264330528807

Status : Answered

Chosen Option : 3

Q.19 Six brothers K, L, M, N, O and S are standing in a column facing north. K is standing just behind N. O stands exactly between M and S. Only three brothers stand behind L. Who is standing just behind K?

Ans  1. L

2. S

3. M

4. N

Question Type : MCQ

Question ID : 264330134963

Option 1 ID : 264330528787

Option 2 ID : 264330528790

Option 3 ID : 264330528789

Option 4 ID : 264330528788

Status : Answered

Chosen Option : 1

Q.20 Which of the following numbers will replace the question mark (?) in the given series?

81, 243, 40.5, 121.5, 20.25, 60.75, ?

Ans  1. 10.120

2. 10.115

3. 10.125

4. 10.215

Question Type : MCQ

Question ID : 264330137550

Option 1 ID : 264330538809

Option 2 ID : 264330538808

Option 3 ID : 264330538810

Option 4 ID : 264330538807

Status : Answered

Chosen Option : 3

Section : General Awareness

Q.1 Which of the following personality is associated with Aligarh movement?

Ans  1. Syed Ahmed Khan

2. Muhammad Ali Jinnah

3. Abul Kalam Azad

4. Syed Amir Ali

Question Type : MCQ

Question ID : 264330134072

Option 1 ID : 264330525314

Option 2 ID : 264330525313

Option 3 ID : 264330525311

Option 4 ID : 264330525312

Status : Answered

Chosen Option : 1

Q.2 Pradhan Mantri Kaushal Vikas Yojana (PMKVY) was started in which year?

Ans  1. 2017

2. 2015

3. 2014

4. 2016

Question Type : MCQ

Question ID : 264330134639

Option 1 ID : 264330527514

Option 2 ID : 264330527512

Option 3 ID : 264330527511

Option 4 ID : 264330527513

Status : Answered

Chosen Option : 1

Q.3 Gautama Buddha attained enlightenment under a peepal tree at \_\_\_\_\_.

Ans  1. Varanasi

2. Bodh gaya

3. Ujjain

4. Patliputra

Question Type : MCQ

Question ID : 264330134640

Option 1 ID : 264330527518

Option 2 ID : 264330527515

Option 3 ID : 264330527517

Option 4 ID : 264330527516

Status : Answered

Chosen Option : 2

Q.4 The Kandariya Mahadeva Temple was constructed in 999 A.D. by the king Dhangadeva of \_\_\_\_\_ dynasty.

- Ans
- 1. Chandela
  - 2. Pala
  - 3. Pallava
  - 4. Chola

Question Type : MCQ  
Question ID : 264330134641  
Option 1 ID : 264330527521  
Option 2 ID : 264330527519  
Option 3 ID : 264330527522  
Option 4 ID : 264330527520  
Status : Answered  
Chosen Option : 1

Q.5 As on 1st March 2023, which of the following is NOT a member country of ASEAN?

- Ans
- 1. Thailand
  - 2. Indonesia
  - 3. Sri Lanka
  - 4. Malaysia

Question Type : MCQ  
Question ID : 264330133943  
Option 1 ID : 264330524795  
Option 2 ID : 264330524798  
Option 3 ID : 264330524796  
Option 4 ID : 264330524797  
Status : Marked For Review  
Chosen Option : 3

Q.6 The Chhatrapati Shivaji Maharaj Terminus, was formerly known as \_\_\_\_\_.

- Ans
- 1. Elizabeth Terminus Station
  - 2. James Terminus Station
  - 3. George Terminus Station
  - 4. Victoria Terminus Station

Question Type : MCQ  
Question ID : 264330134621  
Option 1 ID : 264330527441  
Option 2 ID : 264330527439  
Option 3 ID : 264330527442  
Option 4 ID : 264330527440  
Status : Answered  
Chosen Option : 4

Q.7 Chhau dance is a blend of martial traditions, temple rituals etc. It is performed in which region of India?

- Ans
- 1. Eastern
  - 2. Northern
  - 3. Western
  - 4. Southern

Question Type : MCQ  
Question ID : 264330134619  
Option 1 ID : 264330527434  
Option 2 ID : 264330527433  
Option 3 ID : 264330527431  
Option 4 ID : 264330527432  
Status : Answered  
Chosen Option : 1

Q.8 The Indian Census 2011 can be referred to as the \_\_\_\_\_ census operation after Indian independence.

- Ans
- 1. eleventh
  - 2. seventh
  - 3. tenth
  - 4. ninth

Question Type : MCQ  
Question ID : 264330137905  
Option 1 ID : 264330540227  
Option 2 ID : 264330540230  
Option 3 ID : 264330540229  
Option 4 ID : 264330540228  
Status : Answered  
Chosen Option : 2

Q.9 Which was the first ancient Indian civilization that had systematic town planning and underground drainage systems?

- Ans
- 1. Early Nubian civilization
  - 2. Later Vedic civilization
  - 3. Aegean civilization
  - 4. Indus valley civilization

Question Type : MCQ  
Question ID : 264330137690  
Option 1 ID : 264330539368  
Option 2 ID : 264330539369  
Option 3 ID : 264330539370  
Option 4 ID : 264330539367  
Status : Answered  
Chosen Option : 4

Q.10 What does Section 377 of the Indian Penal Code signifies?

- Ans
- 1. Triple talaq
  - 2. Surrogacy
  - 3. Criminalize unnatural offences
  - 4. Women temple entry

Question Type : MCQ  
Question ID : 264330137687  
Option 1 ID : 264330539358  
Option 2 ID : 264330539356  
Option 3 ID : 264330539355  
Option 4 ID : 264330539357  
Status : Marked For Review  
Chosen Option : 1

Q.11 वायुमंडल की निम्नलिखित परतों में से किसका अर्थ "मिश्रण का क्षेत्र (region of mixing)" है?

- Ans
- 1. समताप मंडल (Stratosphere)
  - 2. क्षोभमंडल (Troposphere)
  - 3. बाह्य वायुमंडल (Thermosphere)
  - 4. मध्यमंडल (Mesosphere)

Question Type : MCQ  
Question ID : 264330137719  
Option 1 ID : 264330539486  
Option 2 ID : 264330539485  
Option 3 ID : 264330539483  
Option 4 ID : 264330539484  
Status : Answered  
Chosen Option : 2

Q.12 Shovana Narayan is a renowned \_\_\_\_\_ dancer.

- Ans
- 1. Manipuri
  - 2. Kuchipudi
  - 3. Odissi
  - 4. Kathak

Question Type : MCQ  
Question ID : 264330138240  
Option 1 ID : 264330541569  
Option 2 ID : 264330541568  
Option 3 ID : 264330541567  
Option 4 ID : 264330541570  
Status : Marked For Review  
Chosen Option : 3

Q.13 The Mahanadi river rises in the highlands of \_\_\_\_\_.

- Ans
- 1. Odisha
  - 2. Andhra Pradesh
  - 3. Chhattisgarh
  - 4. Bihar

Question Type : MCQ  
Question ID : 264330134637  
Option 1 ID : 264330527503  
Option 2 ID : 264330527504  
Option 3 ID : 264330527505  
Option 4 ID : 264330527506  
Status : Answered  
Chosen Option : 1

Q.14 When was the Battle of Tukaroi fought where Akbar defeated Sultanate of Bengal and Bihar?

- Ans
- 1. 1564
  - 2. 1582
  - 3. 1575
  - 4. 1591

Question Type : MCQ  
Question ID : 264330137725  
Option 1 ID : 264330539508  
Option 2 ID : 264330539510  
Option 3 ID : 264330539509  
Option 4 ID : 264330539507  
Status : Answered  
Chosen Option : 4

Q.15 Who were the prime accused in the Assembly bomb case that took place in 1929, Delhi?

- Ans
- 1. Udham Singh and Mangal Pandey
  - 2. Surya Sen and Ram Prasad
  - 3. Bhagat Singh and Batukeshwar Dutt
  - 4. Ram Prasad and Ashafaqulla

Question Type : MCQ  
Question ID : 264330137701  
Option 1 ID : 264330539412  
Option 2 ID : 264330539411  
Option 3 ID : 264330539413  
Option 4 ID : 264330539414  
Status : Answered  
Chosen Option : 3

Q.16 \_\_\_\_\_ is the deepest landlocked and well-protected port.

- Ans
- 1. Kandla
  - 2. Mumbai
  - 3. Vishakhapatnam
  - 4. Paradwip

Question Type : MCQ  
Question ID : 264330138230  
Option 1 ID : 264330541528  
Option 2 ID : 264330541529  
Option 3 ID : 264330541527  
Option 4 ID : 264330541530  
Status : Answered  
Chosen Option : 1

Q.17 The famous Nelapattu Bird Sanctuary is located in which of the following states?

- Ans
- 1. Tamil Nadu
  - 2. Andhra Pradesh
  - 3. Karnataka
  - 4. Madhya Pradesh

Question Type : MCQ  
Question ID : 264330137718  
Option 1 ID : 264330539480  
Option 2 ID : 264330539481  
Option 3 ID : 264330539479  
Option 4 ID : 264330539482  
Status : Answered  
Chosen Option : 1

Q.18 Who among the following is a celebrated sarod maestro?

- Ans
- 1. Niladri Kumar
  - 2. Vilayat Khan
  - 3. N. Ramani
  - 4. Zarin Sharma

Question Type : MCQ  
Question ID : 264330134625  
Option 1 ID : 264330527456  
Option 2 ID : 264330527457  
Option 3 ID : 264330527455  
Option 4 ID : 264330527458  
Status : Answered  
Chosen Option : 4



Q.19 The GDP estimation method measuring the aggregate value of factor payments is called \_\_\_\_\_.

- Ans
- 1. product method
  - 2. value added method
  - 3. expenditure method
  - 4. income method

Question Type : MCQ  
Question ID : 264330134629  
Option 1 ID : 264330527471  
Option 2 ID : 264330527474  
Option 3 ID : 264330527472  
Option 4 ID : 264330527473  
Status : Answered  
Chosen Option : 2

Q.20 In India, the practice of erecting megaliths began about \_\_\_\_\_ ago.

- Ans
- 1. 3000 years
  - 2. 2000 years
  - 3. 500 years
  - 4. 1000 years

Question Type : MCQ  
Question ID : 264330134069  
Option 1 ID : 264330525301  
Option 2 ID : 264330525299  
Option 3 ID : 264330525302  
Option 4 ID : 264330525300  
Status : Not Answered  
Chosen Option : --

Q.21 Which among the following elements does not belongs to the Halogens group?

- Ans
- 1. Astatine
  - 2. Helium
  - 3. Bromine
  - 4. Chlorine

Question Type : MCQ  
Question ID : 264330137716  
Option 1 ID : 264330539474  
Option 2 ID : 264330539473  
Option 3 ID : 264330539472  
Option 4 ID : 264330539471  
Status : Marked For Review  
Chosen Option : 1

Q.22 As announced in the Budget 2022, \_\_\_\_\_ Anganwadis will be upgraded for improving child health.

- Ans
- 1. 4 lakh
  - 2. 1 lakh
  - 3. 2 lakh
  - 4. 3 lakh

Question Type : MCQ  
Question ID : 264330138245  
Option 1 ID : 264330541590  
Option 2 ID : 264330541587  
Option 3 ID : 264330541588  
Option 4 ID : 264330541589  
Status : Answered  
Chosen Option : 3

Q.23 Which among the following team won the International Cricket Council (ICC) Men's T20 World Cup 2021?

- Ans
- 1. Australia
  - 2. England
  - 3. West Indies
  - 4. India

Question Type : MCQ  
Question ID : 264330137734  
Option 1 ID : 264330539546  
Option 2 ID : 264330539543  
Option 3 ID : 264330539545  
Option 4 ID : 264330539544  
Status : Answered  
Chosen Option : 1

Q.24 "Wide Angle" is an autobiography of which of the following sportsperson?

- Ans
- 1. Wasim Akram
  - 2. Yuvraj Singh
  - 3. Imran Khan
  - 4. Anil Kumble

Question Type : MCQ  
Question ID : 264330138238  
Option 1 ID : 264330541562  
Option 2 ID : 264330541560  
Option 3 ID : 264330541561  
Option 4 ID : 264330541559  
Status : Answered  
Chosen Option : 1

Q.25 Which religious group of people celebrates the Nowruz festival in India?

- Ans
- 1. Jews
  - 2. Buddhists
  - 3. Parsis
  - 4. Jains

Question Type : MCQ  
Question ID : 264330134059  
Option 1 ID : 264330525261  
Option 2 ID : 264330525260  
Option 3 ID : 264330525262  
Option 4 ID : 264330525259  
Status : Answered  
Chosen Option : 3

Section : English Language and Comprehension

Q.1 Select the most appropriate word for the given group of words.

The sound of elephants

- Ans
- 1. Trumpet
  - 2. Quack
  - 3. Laurel
  - 4. Screech

Question Type : MCQ  
Question ID : 264330136071  
Option 1 ID : 264330533097  
Option 2 ID : 264330533098  
Option 3 ID : 264330533095  
Option 4 ID : 264330533096  
Status : Answered  
Chosen Option : 1

Q.2 Choose the incorrectly spelt word.

- Ans
- 1. Shout
  - 2. Salute
  - 3. Belieif
  - 4. Crops

Question Type : MCQ  
Question ID : 264330134767  
Option 1 ID : 264330528018  
Option 2 ID : 264330528015  
Option 3 ID : 264330528017  
Option 4 ID : 264330528016  
Status : Answered  
Chosen Option : 3

Q.3 Improve the underlined part of the sentence. Choose 'No improvement' as an answer if the sentence is grammatically correct.  
She was fined of driving over the speed limit.

- Ans
- 1. fine of driving
  - 2. fined for drive
  - 3. fined for driving
  - 4. No improvement

Question Type : MCQ  
Question ID : 264330134428  
Option 1 ID : 264330526687  
Option 2 ID : 264330526688  
Option 3 ID : 264330526689  
Option 4 ID : 264330526690  
Status : Answered  
Chosen Option : 3

Q.4 Choose the word that means the same as the given word.

Aptitude

- Ans
- 1. Attitude
  - 2. Talent
  - 3. Stress
  - 4. Faith

Question Type : MCQ  
Question ID : 264330134736  
Option 1 ID : 264330527895  
Option 2 ID : 264330527897  
Option 3 ID : 264330527898  
Option 4 ID : 264330527896  
Status : Answered  
Chosen Option : 2

Q.5 Select the word segment that substitutes (replaces) the bracketed word segment correctly and completes the sentence meaningfully. Select the option 'no correction required' if the sentence is correct as given.

Apple has also introduced a (rule that seemed tie) to its recent dispute with Basecamp.

- Ans
- 1. rule that seems tied
  - 2. rule that seemingly tied
  - 3. No correction required
  - 4. rule which seemed tie

Question Type : MCQ  
Question ID : 264330136242  
Option 1 ID : 264330533757  
Option 2 ID : 264330533756  
Option 3 ID : 264330533758  
Option 4 ID : 264330533755  
Status : Answered  
Chosen Option : 2

**Q.6** Choose the sentence with no spelling error.

- Ans  1. The two are in most cases mutualy exclusive.  
 2. The two are in most cases mutuallly exclusive.  
 3. The two are in most cases mutually exclusive.  
 4. The two are in most casies mutually exclusive.

Question Type : MCQ  
Question ID : 264330134551  
Option 1 ID : 264330527162  
Option 2 ID : 264330527160  
Option 3 ID : 264330527159  
Option 4 ID : 264330527161  
Status : Answered  
Chosen Option : 3

**Q.7** Find the part of the given sentence that has an error in it. If there is no error, choose 'No error'.

In humans, consumption of alcohol, stimulate brain cells to release mood-altering dopamine.

- Ans  1. release mood-altering dopamine.  
 2. In humans, consumption of alcohol,  
 3. stimulate brain cells to  
 4. No error

Question Type : MCQ  
Question ID : 264330134747  
Option 1 ID : 264330527941  
Option 2 ID : 264330527939  
Option 3 ID : 264330527940  
Option 4 ID : 264330527942  
Status : Answered  
Chosen Option : 3

**Q.8** In the following question, out of the given four alternatives, select the alternative which best expresses the meaning of the Idiom/Phrase.

To stretch one's legs

- Ans  1. To leave a place without permission  
 2. To go for a party  
 3. To go for a walk after you have been sitting for a long time  
 4. To measure one's worth

Question Type : MCQ  
Question ID : 264330134766  
Option 1 ID : 264330528013  
Option 2 ID : 264330528014  
Option 3 ID : 264330528012  
Option 4 ID : 264330528011  
Status : Answered  
Chosen Option : 3

**Q.9** A sentence has been given with a blank to be filled with an appropriate option. Choose the correct alternative.

I am looking forward to \_\_\_\_\_ you at our favourite restaurant.

- Ans**
- 1. meets
  - 2. meet
  - 3. met
  - 4. meeting

Question Type : **MCQ**  
Question ID : **264330134726**  
Option 1 ID : **264330527859**  
Option 2 ID : **264330527862**  
Option 3 ID : **264330527860**  
Option 4 ID : **264330527861**  
Status : **Answered**  
Chosen Option : **4**

**Q.10** Identify the segment that contains a grammatical error. If there is no error, select 'No error'.

What evil magic does / it possess to draw the human / heart so powerful to it?

- Ans**
- 1. heart so powerful to it?
  - 2. What evil magic does
  - 3. No error
  - 4. it possess to draw the human

Question Type : **MCQ**  
Question ID : **264330136239**  
Option 1 ID : **264330533745**  
Option 2 ID : **264330533743**  
Option 3 ID : **264330533746**  
Option 4 ID : **264330533744**  
Status : **Answered**  
Chosen Option : **4**

**Q.11** Select the most appropriate meaning of the given idiom.

Drastic times call for drastic measures

- Ans**
- 1. When you are extremely desperate you need to take extremely desperate actions
  - 2. Don't rely on it until you sure of it
  - 3. Something that ends at the last minute or last few seconds
  - 4. Do not pull all your resources in one possibility

Question Type : **MCQ**  
Question ID : **264330136077**  
Option 1 ID : **264330533121**  
Option 2 ID : **264330533120**  
Option 3 ID : **264330533122**  
Option 4 ID : **264330533119**  
Status : **Answered**  
Chosen Option : **1**

Q.12 A sentence has been given with a blank to be filled with an appropriate option. Choose the correct alternative.

There is definitely \_\_\_\_\_ he is not telling me.

- Ans
- 1. everything
  - 2. something
  - 3. somebody
  - 4. anything

Question Type : MCQ  
Question ID : 264330134751  
Option 1 ID : 264330527958  
Option 2 ID : 264330527955  
Option 3 ID : 264330527956  
Option 4 ID : 264330527957  
Status : Answered  
Chosen Option : 2

Q.13 Select the appropriate antonym for the underlined word.

Megan, my precious darling, where is the kettle?

- Ans
- 1. detested
  - 2. expensive
  - 3. beloved
  - 4. steep

Question Type : MCQ  
Question ID : 264330134764  
Option 1 ID : 264330528006  
Option 2 ID : 264330528004  
Option 3 ID : 264330528003  
Option 4 ID : 264330528005  
Status : Answered  
Chosen Option : 1

Q.14 Select the appropriate synonym for the underlined word.

Immediate relocation is your best course of action.

- Ans
- 1. emergence
  - 2. ending
  - 3. expiration
  - 4. migration

Question Type : MCQ  
Question ID : 264330134761  
Option 1 ID : 264330527993  
Option 2 ID : 264330527994  
Option 3 ID : 264330527992  
Option 4 ID : 264330527991  
Status : Answered  
Chosen Option : 4

Q.15 Select the most appropriate antonym of the given word.

Wicked

- Ans
- 1. Admirable
  - 2. Sarcastic
  - 3. Infernal
  - 4. Dissent

Question Type : MCQ  
Question ID : 264330136049  
Option 1 ID : 264330533012  
Option 2 ID : 264330533011  
Option 3 ID : 264330533014  
Option 4 ID : 264330533013  
Status : Answered  
Chosen Option : 1

Q.16 Select the most appropriate option to fill in the blank.  
All the companies make an \_\_\_\_\_ to be seen and heard within communities.

- Ans
- 1. establishment
  - 2. effort
  - 3. excuse
  - 4. aisle

Question Type : MCQ  
Question ID : 264330134552  
Option 1 ID : 264330527164  
Option 2 ID : 264330527165  
Option 3 ID : 264330527166  
Option 4 ID : 264330527163  
Status : Answered  
Chosen Option : 2

Q.17 Improve the underlined part of the sentence. Choose 'No improvement' as an answer if the sentence is grammatically correct.

Since 1950 the number of children in secondary schools has been increasing noticeably.

- Ans
- 1. No improvement
  - 2. have increasingly noticeably
  - 3. has been increasing noticeably
  - 4. increasingly noticeable

Question Type : MCQ  
Question ID : 264330134776  
Option 1 ID : 264330528054  
Option 2 ID : 264330528052  
Option 3 ID : 264330528051  
Option 4 ID : 264330528053  
Status : Answered  
Chosen Option : 3



Q.18 Select the most appropriate option to fill in the blank.

Jacqueline represents retirement as the final result of a long course of dissatisfaction with \_\_\_\_\_ life.

- Ans
- 1. joyful
  - 2. mundane
  - 3. barbaric
  - 4. divine

Question Type : MCQ  
Question ID : 264330134770  
Option 1 ID : 264330528027  
Option 2 ID : 264330528028  
Option 3 ID : 264330528030  
Option 4 ID : 264330528029  
Status : Answered  
Chosen Option : 2

Q.19 Find the part of the given sentence that has an error in it. If there is no error, choose 'No error'.

I spend a lot of my time at work helping my customers find an best outfit.

- Ans
- 1. No error
  - 2. I spend a lot of
  - 3. my time at work helping my
  - 4. customers find an best outfit.

Question Type : MCQ  
Question ID : 264330134745  
Option 1 ID : 264330527934  
Option 2 ID : 264330527931  
Option 3 ID : 264330527932  
Option 4 ID : 264330527933  
Status : Answered  
Chosen Option : 4

Q.20 Choose the word that can substitute the given group of words.

Departure from common rule

- Ans
- 1. Anomaly
  - 2. Quixotic
  - 3. Pragmatic
  - 4. Stupor

Question Type : MCQ  
Question ID : 264330134760  
Option 1 ID : 264330527990  
Option 2 ID : 264330527988  
Option 3 ID : 264330527987  
Option 4 ID : 264330527989  
Status : Answered  
Chosen Option : 1

**Comprehension:**

In the following passage some words have been deleted. Fill in the blanks with the help of the alternatives given. Select the most appropriate option for each number.

In the early 1920's, settlers came to Alaska looking for (1) \_\_\_\_\_. They travelled by boat to the coastal towns of Seward and Knik, and from there by land into the gold fields. The trail they used to (2) \_\_\_\_\_ inland is known today as the Iditarod Trail, one of the National Historic Trails designated (3) \_\_\_\_\_ the Congress of the United States. The Iditarod Trail quickly became a major thoroughfare in Alaska, as the mail and supplies were (4) \_\_\_\_\_ across this trail. People also used it to get from place to place, including the priests, ministers, and judges who had to travel between villages. In the winter, the settlers' only means of travel down this trail was via dog (5) \_\_\_\_\_.

**SubQuestion No : 21**

Q.21 Select the most appropriate option to fill in the blank No. 1.

- Ans
- 1. copper
  - 2. gold
  - 3. iron
  - 4. silver

Question Type : MCQ

Question ID : 264330136040

Option 1 ID : 264330532975

Option 2 ID : 264330532978

Option 3 ID : 264330532976

Option 4 ID : 264330532977

Status : Answered

Chosen Option : 2

**Comprehension:**

In the following passage some words have been deleted. Fill in the blanks with the help of the alternatives given. Select the most appropriate option for each number.

In the early 1920's, settlers came to Alaska looking for (1) \_\_\_\_\_. They travelled by boat to the coastal towns of Seward and Knik, and from there by land into the gold fields. The trail they used to (2) \_\_\_\_\_ inland is known today as the Iditarod Trail, one of the National Historic Trails designated (3) \_\_\_\_\_ the Congress of the United States. The Iditarod Trail quickly became a major thoroughfare in Alaska, as the mail and supplies were (4) \_\_\_\_\_ across this trail. People also used it to get from place to place, including the priests, ministers, and judges who had to travel between villages. In the winter, the settlers' only means of travel down this trail was via dog (5) \_\_\_\_\_.

**SubQuestion No : 22**

Q.22 Select the most appropriate option to fill in the blank No. 2.

- Ans
- 1. submerge
  - 2. travel
  - 3. locate
  - 4. navigate

Question Type : MCQ

Question ID : 264330136041

Option 1 ID : 264330532981

Option 2 ID : 264330532979

Option 3 ID : 264330532982

Option 4 ID : 264330532980

Status : Answered

Chosen Option : 2

**Comprehension:**

In the following passage some words have been deleted. Fill in the blanks with the help of the alternatives given. Select the most appropriate option for each number.

In the early 1920's, settlers came to Alaska looking for (1) \_\_\_\_\_. They travelled by boat to the coastal towns of Seward and Knik, and from there by land into the gold fields. The trail they used to (2) \_\_\_\_\_ inland is known today as the Iditarod Trail, one of the National Historic Trails designated (3) \_\_\_\_\_ the Congress of the United States. The Iditarod Trail quickly became a major thoroughfare in Alaska, as the mail and supplies were (4) \_\_\_\_\_ across this trail. People also used it to get from place to place, including the priests, ministers, and judges who had to travel between villages. In the winter, the settlers' only means of travel down this trail was via dog (5) \_\_\_\_\_.

**SubQuestion No : 23**

Q.23 Select the most appropriate option to fill in the blank No. 3.

- Ans
- ✓ 1. by
  - ✗ 2. in
  - ✗ 3. of
  - ✗ 4. at

Question Type : MCQ  
Question ID : 264330136042  
Option 1 ID : 264330532986  
Option 2 ID : 264330532984  
Option 3 ID : 264330532985  
Option 4 ID : 264330532983  
Status : Answered  
Chosen Option : 4

**Comprehension:**

In the following passage some words have been deleted. Fill in the blanks with the help of the alternatives given. Select the most appropriate option for each number.

In the early 1920's, settlers came to Alaska looking for (1) \_\_\_\_\_. They travelled by boat to the coastal towns of Seward and Knik, and from there by land into the gold fields. The trail they used to (2) \_\_\_\_\_ inland is known today as the Iditarod Trail, one of the National Historic Trails designated (3) \_\_\_\_\_ the Congress of the United States. The Iditarod Trail quickly became a major thoroughfare in Alaska, as the mail and supplies were (4) \_\_\_\_\_ across this trail. People also used it to get from place to place, including the priests, ministers, and judges who had to travel between villages. In the winter, the settlers' only means of travel down this trail was via dog (5) \_\_\_\_\_.

**SubQuestion No : 24**

Q.24 Select the most appropriate option to fill in the blank No. 4.

- Ans
- ✓ 1. carried
  - ✗ 2. deported
  - ✗ 3. imported
  - ✗ 4. transported

Question Type : MCQ  
Question ID : 264330136043  
Option 1 ID : 264330532987  
Option 2 ID : 264330532989  
Option 3 ID : 264330532988  
Option 4 ID : 264330532990  
Status : Answered  
Chosen Option : 4

**Comprehension:**

In the following passage some words have been deleted. Fill in the blanks with the help of the alternatives given. Select the most appropriate option for each number.

In the early 1920's, settlers came to Alaska looking for (1) \_\_\_\_\_. They travelled by boat to the coastal towns of Seward and Knik, and from there by land into the gold fields. The trail they used to (2) \_\_\_\_\_ inland is known today as the Iditarod Trail, one of the National Historic Trails designated (3) \_\_\_\_\_ the Congress of the United States. The Iditarod Trail quickly became a major thoroughfare in Alaska, as the mail and supplies were (4) \_\_\_\_\_ across this trail. People also used it to get from place to place, including the priests, ministers, and judges who had to travel between villages. In the winter, the settlers' only means of travel down this trail was via dog (5) \_\_\_\_\_.

**SubQuestion No : 25**

**Q.25** Select the most appropriate option to fill in the blank No. 5.

- Ans**
- 1. smell
  - 2. sled
  - 3. bark
  - 4. boat

Question Type : **MCQ**

Question ID : **264330136044**

Option 1 ID : **264330532994**

Option 2 ID : **264330532991**

Option 3 ID : **264330532993**

Option 4 ID : **264330532992**

Status : **Answered**

Chosen Option : **1**

