



SSC MTS **SHIFT – 1 (16-06-2023)**

- ★ **Latest Govt Job updates**
- ★ **Private Job updates**
- ★ **Free Mock tests available**

**Visit - [teachingninja.in](https://teachingninja.in)**

## Multi Tasking Non Technical Staff and Havaladar CBIC and CBN Examination 2022

Roll Number	
Candidate Name	
Venue Name	
Exam Date	16/06/2023
Exam Time	9:00 AM - 10:30 AM
Subject	MTS Non Tech Havaladar CBIC and CBN Examination 2022

Section : Numerical and Mathematical Ability

Q.1 Find the compound interest on Rs. 8000 at 15% per annum for 2 years (compounded annually.)

- Ans
- 1. Rs. 2450
  - 2. Rs. 2580
  - 3. Rs. 2400
  - 4. Rs. 2550

Question Type : MCQ  
Question ID : 264330140810  
Option 1 ID : 264330551589  
Option 2 ID : 264330551587  
Option 3 ID : 264330551588  
Option 4 ID : 264330551590  
Status : Answered  
Chosen Option : 2

Q.2 If x percent of x is 256, then what is the value of x?

- Ans
- 1. 200
  - 2. 180
  - 3. 160
  - 4. 150

Question Type : MCQ  
Question ID : 264330139633  
Option 1 ID : 264330546948  
Option 2 ID : 264330546950  
Option 3 ID : 264330546949  
Option 4 ID : 264330546947  
Status : Answered  
Chosen Option : 3

Q.3 The value of  $11 \times 2 + (45 \div 9) + (72 \div 8) - 5 + 4$  is :

- Ans
- 1. 40
  - 2. 35
  - 3. 41
  - 4. 32

Question Type : MCQ  
Question ID : 264330140796  
Option 1 ID : 264330551534  
Option 2 ID : 264330551531  
Option 3 ID : 264330551533  
Option 4 ID : 264330551532  
Status : Answered  
Chosen Option : 2

Q.4 What is the value of  $\frac{11 \times 11 - 24 \times 6 \div 2 + 12 \times 12}{4 \times 5 + 6 \times 2 \div 4}$  ?

- Ans
- 1. -2
  - 2. 1
  - 3. 2
  - 4. -1

Question Type : MCQ  
Question ID : 264330140229  
Option 1 ID : 264330549295  
Option 2 ID : 264330549297  
Option 3 ID : 264330549298  
Option 4 ID : 264330549296  
Status : Answered  
Chosen Option : 4

Q.5 A man rows to a place situated 100 km away and comes back in 10 hours. He can row 12 km downstream or 8 km upstream in same time. What is the speed of the stream?

- Ans
- 1. (23/8) km/hr
  - 2. (29/5) km/hr
  - 3. (25/6) km/hr
  - 4. (20/9) km/hr

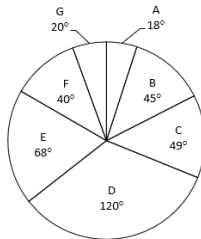
Question Type : MCQ  
Question ID : 264330140241  
Option 1 ID : 264330549345  
Option 2 ID : 264330549346  
Option 3 ID : 264330549343  
Option 4 ID : 264330549344  
Status : Not Answered  
Chosen Option : --

**Q.6** The difference between simple interest and compound interest (compounding of interest is done annually) on a certain sum of money for 3 years at the rate of 20 percent per annum is Rs. 192. What is the sum?

- Ans**
- 1. Rs. 1200
  - 2. Rs. 1400
  - 3. Rs. 1500
  - 4. Rs. 1000

Question Type : **MCQ**  
Question ID : **264330140224**  
Option 1 ID : **264330549278**  
Option 2 ID : **264330549276**  
Option 3 ID : **264330549277**  
Option 4 ID : **264330549275**  
Status : **Answered**  
Chosen Option : **3**

**Q.7** The pie chart given below shows the sales of 7 different companies. The total sales of all these 7 companies are 1440. The sale of a particular company is shown in terms of degree with respect to the total sales of all these 7 companies.



What is the ratio of average sale of A and B to the average sale of D and E?

- Ans**
- 1. 51 : 186
  - 2. 169 : 49
  - 3. 63 : 188
  - 4. 59 : 177

Question Type : **MCQ**  
Question ID : **264330140192**  
Option 1 ID : **264330549150**  
Option 2 ID : **264330549148**  
Option 3 ID : **264330549149**  
Option 4 ID : **264330549147**  
Status : **Answered**  
Chosen Option : **3**

**Q.8** In what ratio must a grocer mix two varieties of sweets costing Rs. 30 and Rs. 20 per kg respectively so as to get a mixture worth Rs. 25 per kg?

- Ans**
- ✓ 1. 1:1
  - ✗ 2. 5:4
  - ✗ 3. 4:5
  - ✗ 4. 2:3

Question Type : MCQ  
Question ID : 264330133739  
Option 1 ID : 264330523979  
Option 2 ID : 264330523982  
Option 3 ID : 264330523981  
Option 4 ID : 264330523980  
Status : Answered  
Chosen Option : 1

**Q.9** If  $x : y : z = 2 : 3 : 4$ , then what is the value of  $7x : 3y : 2z$ ?

- Ans**
- ✗ 1. 18 : 7 : 12
  - ✗ 2. 16 : 9 : 8
  - ✗ 3. 12 : 6 : 11
  - ✓ 4. 14 : 9 : 8

Question Type : MCQ  
Question ID : 264330140221  
Option 1 ID : 264330549263  
Option 2 ID : 264330549264  
Option 3 ID : 264330549265  
Option 4 ID : 264330549266  
Status : Not Answered  
Chosen Option : --

**Q.10** A person bought some pens at the rate of 25 for a rupee and sold them at the rate of 20 for a rupee. What is the profit percentage?

- Ans**
- ✗ 1. 30 percent
  - ✗ 2. 15 percent
  - ✗ 3. 10 percent
  - ✓ 4. 25 percent

Question Type : MCQ  
Question ID : 264330140589  
Option 1 ID : 264330550709  
Option 2 ID : 264330550708  
Option 3 ID : 264330550710  
Option 4 ID : 264330550707  
Status : Answered  
Chosen Option : 4

Q.11 Two taps P and Q can fill a tank alone in 10 hours and 12 hours respectively. If the two taps are opened at 9 a.m., then at what time should the tap P be closed to completely fill the tank at exactly 3 p.m.?

- Ans
- 1. 1 p.m
  - 2. 3 p.m
  - 3. 12 p.m
  - 4. 2 p.m

Question Type : MCQ  
Question ID : 264330140534  
Option 1 ID : 264330550492  
Option 2 ID : 264330550494  
Option 3 ID : 264330550493  
Option 4 ID : 264330550491  
Status : Answered  
Chosen Option : 4

Q.12 The alcohol and water in a mixture are in the ratio of 4 : 5 respectively. 20 litre water is added to it. If the ratio of alcohol and water in the new mixture is 1 : 3 respectively, then what is the total quantity of the alcohol in the new mixture?

- Ans
- 1. 15 litres
  - 2. 60/7 litres
  - 3. 90/11 litres
  - 4. 80/7 litres

Question Type : MCQ  
Question ID : 264330140542  
Option 1 ID : 264330550525  
Option 2 ID : 264330550523  
Option 3 ID : 264330550524  
Option 4 ID : 264330550526  
Status : Answered  
Chosen Option : 4

Q.13 What is the value of  $\left(\frac{21}{46} \div \frac{1}{6}\right)$  of  $\frac{23}{42} + \frac{96}{576} \times \frac{24}{3} - \left(\frac{88}{56} \times \frac{7}{9} \div \frac{5}{36}\right)$ ?

- Ans
- 1. -179/30
  - 2. -163/28
  - 3. 5/2
  - 4. 11/2

Question Type : MCQ  
Question ID : 264330139948  
Option 1 ID : 264330548172  
Option 2 ID : 264330548173  
Option 3 ID : 264330548174  
Option 4 ID : 264330548171  
Status : Answered  
Chosen Option : 1

Q.14 The average of 7 consecutive odd numbers is A. If next 3 and previous 2 odd numbers to these 7 odd numbers are also included, then what is the new average of these 12 consecutive odd numbers?

- Ans
- 1.  $A + 1$
  - 2.  $A + 2$
  - 3.  $A + 3$
  - 4.  $A - 2$

Question Type : MCQ  
Question ID : 264330139895  
Option 1 ID : 264330547961  
Option 2 ID : 264330547960  
Option 3 ID : 264330547962  
Option 4 ID : 264330547959  
Status : Answered  
Chosen Option : 1

Q.15 The perimeter of the top of a rectangular table is 42 metre and its area is 108 metre<sup>2</sup>. What is the length of its diagonal?

- Ans
- 1. 11 metre
  - 2. 15 metre
  - 3. 12 metre
  - 4. 9 metre

Question Type : MCQ  
Question ID : 264330139925  
Option 1 ID : 264330548081  
Option 2 ID : 264330548079  
Option 3 ID : 264330548080  
Option 4 ID : 264330548082  
Status : Answered  
Chosen Option : 2

Q.16 A can do a work in 48 days. What part of the total work can be done by A in 18 days?

- Ans
- 1.  $\frac{5}{6}$
  - 2.  $\frac{4}{9}$
  - 3.  $\frac{3}{5}$
  - 4.  $\frac{3}{8}$

Question Type : MCQ  
Question ID : 264330139588  
Option 1 ID : 264330546770  
Option 2 ID : 264330546769  
Option 3 ID : 264330546768  
Option 4 ID : 264330546767  
Status : Answered  
Chosen Option : 4

Q.17 Study the following table and answer. In which year did the company spent maximum on fuel and transport?

Year	Item of Expenditure				
	Salary	Fuel and Transport	Bonus	Interest on Loans	Taxes
2001	288	198	3	23.4	83
2002	342	112	2.52	32.5	108
2003	324	91	3.84	41.6	74
2004	336	98	3.68	36.4	88
2005	420	142	3.96	49.4	98

- Ans
- 1. 2003
  - 2. 2001
  - 3. 2004
  - 4. 2002

Question Type : MCQ

Question ID : 264330140815

Option 1 ID : 264330551610

Option 2 ID : 264330551608

Option 3 ID : 264330551607

Option 4 ID : 264330551609

Status : Answered

Chosen Option : 2

Q.18 The marked price of a calculator is Rs.1600. It is sold at a discount of 28 percent. If the cost price of the calculator is Rs.700, then what is the value of profit?

- Ans
- 1. Rs.405
  - 2. Rs.438
  - 3. Rs.498
  - 4. Rs.452

Question Type : MCQ

Question ID : 264330139963

Option 1 ID : 264330548232

Option 2 ID : 264330548233

Option 3 ID : 264330548231

Option 4 ID : 264330548234

Status : Answered

Chosen Option : 4



**Q.19** An article is sold at 5 percent loss. If its cost price is decreased by Rs. 20 and selling price is increased by Rs. 13, then profit of 10 percent is earned on it. What is the original selling price of the article?

- Ans**
- 1. Rs. 250
  - 2. Rs. 266.66
  - 3. Rs. 283.33
  - 4. Rs. 221.66

Question Type : MCQ  
Question ID : 264330140160  
Option 1 ID : 264330549019  
Option 2 ID : 264330549021  
Option 3 ID : 264330549022  
Option 4 ID : 264330549020  
Status : Not Answered  
Chosen Option : --

**Q.20** The ratio of the volume of two cylinders is 27 : 25 and the ratio of their heights is 3 : 4. If the area of the base of the second cylinder is 3850 cm<sup>2</sup>, then what will be the radius of the first cylinder?

- Ans**
- 1. 42 cm
  - 2. 34 cm
  - 3. 56 cm
  - 4. 63 cm

Question Type : MCQ  
Question ID : 264330140596  
Option 1 ID : 264330550737  
Option 2 ID : 264330550738  
Option 3 ID : 264330550735  
Option 4 ID : 264330550736  
Status : Not Answered  
Chosen Option : --

Section : Reasoning Ability and Problem Solving

**Q.1** Select the option that is related to the third word in the same way as the second word is related to the first word.  
Mizoram : Aizawl :: Telangana : ?

- Ans**
- 1. Bangalore
  - 2. Hyderabad
  - 3. Jaipur
  - 4. Chennai

Question Type : MCQ  
Question ID : 264330137582  
Option 1 ID : 264330538938  
Option 2 ID : 264330538935  
Option 3 ID : 264330538937  
Option 4 ID : 264330538936  
Status : Answered  
Chosen Option : 2

**Q.2** By interchanging the given two signs which of the following equation will be correct?

+ and ÷

I.  $4 \div 2 + 1 - 8 \times 3 = -10$

II.  $18 \div 2 - 8 + 4 \times 3 = 14$

**Ans**

✓ 1. Only II

✗ 2. Only I

✗ 3. Both I and II

✗ 4. Neither I nor II

Question Type : MCQ

Question ID : 264330139584

Option 1 ID : 264330546752

Option 2 ID : 264330546751

Option 3 ID : 264330546753

Option 4 ID : 264330546754

Status : Answered

Chosen Option : 1

**Q.3** In the following question below are given some statements followed by some conclusions based on those statements. Taking the given statements to be true even if they seem to be at variance from commonly known facts. Read all the conclusions and then decide which of the given conclusion logically follows the given statements.

Statements:

I. All A are Y.

II. No Z is A.

Conclusion:

I. All Y are A.

II. Some Y are A.

III. Some A are Z.

**Ans**

✗ 1. Neither conclusion follows

✗ 2. All conclusion follows

✓ 3. Only conclusion II follows

✗ 4. Both conclusions I and III follows

Question Type : MCQ

Question ID : 264330140986

Option 1 ID : 264330552294

Option 2 ID : 264330552293

Option 3 ID : 264330552291

Option 4 ID : 264330552292

Status : Answered

Chosen Option : 3

**Q.4** Two statements are given followed by two conclusions numbered I and II. Assuming the statements to be true, even if they seem to be at variance with commonly known facts, decide which of the conclusions logically follow(s) from the statements.

Statements:

Some watch are corn.

All corn are wood.

Conclusions:

I. Some watch are wood.

II. Some wood are corn.

- Ans**
- 1. Only conclusion II follows
  - 2. Neither conclusion I nor II follows
  - 3. Only conclusion I follows
  - 4. Both conclusions I and II follow

Question Type : MCQ

Question ID : 264330140142

Option 1 ID : 264330548948

Option 2 ID : 264330548950

Option 3 ID : 264330548947

Option 4 ID : 264330548949

Status : Answered

Chosen Option : 4

**Q.5** In a certain code language, 'LABOR' is written as 'RALOB'. How will 'EARLY' be written in that language?

- Ans**
- 1. YALER
  - 2. ZAELR
  - 3. YAELR
  - 4. YAERL

Question Type : MCQ

Question ID : 264330138771

Option 1 ID : 264330543691

Option 2 ID : 264330543694

Option 3 ID : 264330543692

Option 4 ID : 264330543693

Status : Answered

Chosen Option : 3



**Q.6** Study the given pattern carefully and select the number that can replace the question mark (?) in it.

First row- 12, 19, 26

Second row- 28, 35, 42

Third row- 39, 46, ?

**Ans**  1. 75

2. 63

3. 53

4. 49

Question Type : MCQ

Question ID : 264330140026

Option 1 ID : 264330548485

Option 2 ID : 264330548484

Option 3 ID : 264330548483

Option 4 ID : 264330548486

Status : Answered

Chosen Option : 3

**Q.7** After interchanging which two numbers, the value of the given equation will be '30'?

$$8 \times 1 - 9 + 3 + 4$$

**Ans**  1. 3 and 9

2. 8 and 4

3. 4 and 3

4. 1 and 4

Question Type : MCQ

Question ID : 264330140971

Option 1 ID : 264330552231

Option 2 ID : 264330552234

Option 3 ID : 264330552232

Option 4 ID : 264330552233

Status : Answered

Chosen Option : 4

**Q.8** Which of the following numbers will replace the question mark (?) in the given series?

61, 65, 73, 85, 101, ?

**Ans**  1. 123

2. 119

3. 121

4. 120

Question Type : MCQ

Question ID : 264330140104

Option 1 ID : 264330548797

Option 2 ID : 264330548795

Option 3 ID : 264330548796

Option 4 ID : 264330548798

Status : Answered

Chosen Option : 3

Q.9 Select the correct mirror image of the given figure when the mirror is placed at AB as shown below.



Ans

✓ 1.



✗ 2.



✗ 3.



✗ 4.



Teachingninja.in

Question Type : MCQ

Question ID : 264330140091

Option 1 ID : 264330548746

Option 2 ID : 264330548744

Option 3 ID : 264330548745

Option 4 ID : 264330548743

Status : Answered

Chosen Option : 1

**Q.10** Select the option that is related to the third number in the same way as the second number is related to the first number.

441 : 485 :: 676 : ?

- Ans**
- 1. 1030
  - 2. 730
  - 3. 729
  - 4. 740

Question Type : MCQ

Question ID : 264330140126

Option 1 ID : 264330548883

Option 2 ID : 264330548884

Option 3 ID : 264330548885

Option 4 ID : 264330548886

Status : Not Answered

Chosen Option : --

**Q.11** D, N, U, L and O are standing in a straight line facing north. N is standing to the immediate right of D, who is at the end. O is standing to the immediate left of L, who is not at the end. Who is standing to the immediate left of O?

- Ans**
- 1. U
  - 2. N
  - 3. L
  - 4. D

Question Type : MCQ

Question ID : 264330135355

Option 1 ID : 264330530330

Option 2 ID : 264330530328

Option 3 ID : 264330530329

Option 4 ID : 264330530327

Status : Answered

Chosen Option : 2

**Q.12** In a certain code language, 'SETTLE' is coded as 'DLSTDS'. What is the code for 'STRUCK' in that code language?

- Ans**
- 1. JTCRSS
  - 2. JCTRSS
  - 3. JCTRST
  - 4. JCTSRS

Question Type : MCQ

Question ID : 264330139976

Option 1 ID : 264330548283

Option 2 ID : 264330548285

Option 3 ID : 264330548286

Option 4 ID : 264330548284

Status : Answered

Chosen Option : 2

**Q.13** Select the option that is related to the third word in the same way as the second word is related to the first word.

Paradise : Heaven :: Faith : ?

- Ans**
- 1. Treasure
  - 2. Belief
  - 3. Disbelief
  - 4. Betrayal

Question Type : **MCQ**  
Question ID : **264330138790**  
Option 1 ID : **264330543770**  
Option 2 ID : **264330543769**  
Option 3 ID : **264330543767**  
Option 4 ID : **264330543768**  
Status : **Answered**  
Chosen Option : **2**

**Q.14** Marks of five students Virat, Kamal, Anil, Sanjay and Rahul are compared. Marks of no two students are same. Marks of Anil are less than only two students. Marks of Kamal are not less than anyone. Marks of Sanjay are more than Anil and less than Kamal. If marks of Rahul are more than the marks of Virat, then marks of how many students are less than the marks of Virat?

- Ans**
- 1. 0
  - 2. 3
  - 3. 1
  - 4. 2

Question Type : **MCQ**  
Question ID : **264330139536**  
Option 1 ID : **264330546562**  
Option 2 ID : **264330546561**  
Option 3 ID : **264330546559**  
Option 4 ID : **264330546560**  
Status : **Answered**  
Chosen Option : **1**

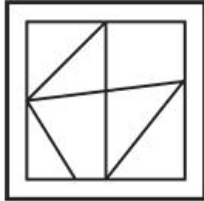


Q.15 Select the option figure in which the given figure is embedded as its part (rotation is NOT allowed).

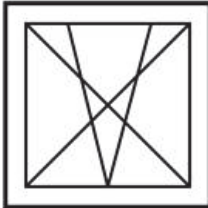


Ans

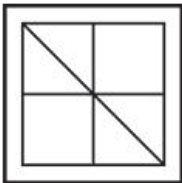
✓ 1.



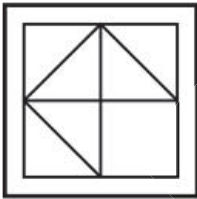
✗ 2.



✗ 3.



✗ 4.



Teachingninja.in

Question Type : MCQ

Question ID : 264330138805

Option 1 ID : 264330543829

Option 2 ID : 264330543830

Option 3 ID : 264330543827

Option 4 ID : 264330543828

Status : Answered

Chosen Option : 1



Q.16 In the following question, select the missing number of the given series.

40, 43, 52, 79, 160, ?

- Ans
- 1. 413
  - 2. 415
  - 3. 403
  - 4. 410

Question Type : MCQ  
Question ID : 264330140065  
Option 1 ID : 264330548642  
Option 2 ID : 264330548641  
Option 3 ID : 264330548639  
Option 4 ID : 264330548640  
Status : Answered  
Chosen Option : 3

Q.17 Which of the following letter cluster will replace the question mark (?) in the given series?


FT, IR, LP, ON, RL, UJ, ?

- Ans
- 1. HW
  - 2. XH
  - 3. FN
  - 4. MK

Question Type : MCQ  
Question ID : 264330140133  
Option 1 ID : 264330548912  
Option 2 ID : 264330548914  
Option 3 ID : 264330548911  
Option 4 ID : 264330548913  
Status : Answered  
Chosen Option : 2



Q.18 Which answer figure will complete the pattern in the question figure?



Ans

✓ 1.



✗ 2.



✗ 3.



✗ 4.



Question Type : MCQ

Question ID : 264330139547

Option 1 ID : 264330546605

Option 2 ID : 264330546606

Option 3 ID : 264330546604

Option 4 ID : 264330546603

Status : Answered

Chosen Option : 1

**Q.19** In a certain code language, 'MAPS' is written as '49' and 'SOLD' is written as '50'. How will 'KIDS' be written in that language?

- Ans**
- 1. 44
  - 2. 42
  - 3. 43
  - 4. 45

Question Type : MCQ  
Question ID : 264330140096  
Option 1 ID : 264330548764  
Option 2 ID : 264330548763  
Option 3 ID : 264330548765  
Option 4 ID : 264330548766  
Status : Answered  
Chosen Option : 4

**Q.20** G, H, I, J and K are sitting around a circular table facing the centre. G is sitting to the immediate right of H. J is sitting between K and H. Who is sitting to the immediate left of K?

- Ans**
- 1. G
  - 2. I
  - 3. J
  - 4. H

Question Type : MCQ  
Question ID : 264330140139  
Option 1 ID : 264330548935  
Option 2 ID : 264330548937  
Option 3 ID : 264330548938  
Option 4 ID : 264330548936  
Status : Answered  
Chosen Option : 2

Section : General Awareness

**Q.1** Which famous Indian musician played shehnai and received Bharat Ratna in the year 2001?

- Ans**
- 1. Pandit Ravi Shankar
  - 2. Pandit Shivkumar Sharma
  - 3. Ustad Zakir Hussain
  - 4. Ustad Bismillah Khan

Question Type : MCQ  
Question ID : 264330140719  
Option 1 ID : 264330551224  
Option 2 ID : 264330551225  
Option 3 ID : 264330551226  
Option 4 ID : 264330551223  
Status : Answered  
Chosen Option : 4

Q.2 Who among the following classical dancers was the first person from Odisha to be conferred the Padma Vibhushan?

- Ans
- 1. Deba Prasad Das
  - 2. Pankaj Charan Das
  - 3. Raghunath Dutta
  - 4. Kelucharan Mohapatra

Question Type : MCQ  
Question ID : 264330139730  
Option 1 ID : 264330547337  
Option 2 ID : 264330547338  
Option 3 ID : 264330547336  
Option 4 ID : 264330547335  
Status : Answered  
Chosen Option : 4

Q.3 Sri-Lanka is separated from India by \_\_\_\_\_.

- Ans
- 1. Palk strait
  - 2. Bering strait
  - 3. Malacca strait
  - 4. Strait of Gibraltar

Question Type : MCQ  
Question ID : 264330139742  
Option 1 ID : 264330547386  
Option 2 ID : 264330547383  
Option 3 ID : 264330547384  
Option 4 ID : 264330547385  
Status : Answered  
Chosen Option : 1

Q.4 The outer-most range of the Himalayas is called the \_\_\_\_\_.

- Ans
- 1. Himavan
  - 2. Himadri
  - 3. Konkan
  - 4. Shiwaliks

Question Type : MCQ  
Question ID : 264330140914  
Option 1 ID : 264330552003  
Option 2 ID : 264330552004  
Option 3 ID : 264330552006  
Option 4 ID : 264330552005  
Status : Answered  
Chosen Option : 2

Q.5 \_\_\_\_\_ is the interest rate at which the Reserve Bank of India (RBI) lends money to commercial banks of the country.

- Ans
- 1. Base Rate
  - 2. Marginal Rate
  - 3. Repo Rate
  - 4. Reverse Repo Rate

Question Type : MCQ  
Question ID : 264330140955  
Option 1 ID : 264330552170  
Option 2 ID : 264330552167  
Option 3 ID : 264330552168  
Option 4 ID : 264330552169  
Status : Answered  
Chosen Option : 3

Q.6 Which festival is celebrated when the annual harvest takes place in Assam?

- Ans
- 1. Magh Bihu
  - 2. Makaravilakku
  - 3. Lohri
  - 4. Pongal

Question Type : MCQ  
Question ID : 264330140754  
Option 1 ID : 264330551366  
Option 2 ID : 264330551365  
Option 3 ID : 264330551363  
Option 4 ID : 264330551364  
Status : Answered  
Chosen Option : 1

Q.7 Power of High Courts to issue certain writs is included under which article of the Indian constitution?

- Ans
- 1. Article 224
  - 2. Article 226
  - 3. Article 220
  - 4. Article 222

Question Type : MCQ  
Question ID : 264330138982  
Option 1 ID : 264330544537  
Option 2 ID : 264330544538  
Option 3 ID : 264330544535  
Option 4 ID : 264330544536  
Status : Answered  
Chosen Option : 2

Q.8 The music of Bharatanatyam belongs to \_\_\_\_\_ of southern India.

- Ans
- 1. Folk system
  - 2. Carnatic system
  - 3. Fusion system
  - 4. Hindustani system

Question Type : MCQ  
Question ID : 264330139648  
Option 1 ID : 264330547010  
Option 2 ID : 264330547007  
Option 3 ID : 264330547009  
Option 4 ID : 264330547008  
Status : Answered  
Chosen Option : 2

Q.9 Which disease is caused by the deficiency of protein in the diet?

- Ans
- 1. Scurvy
  - 2. Jaundice
  - 3. Rickets
  - 4. Kwashiorkor

Question Type : MCQ  
Question ID : 264330140374  
Option 1 ID : 264330549876  
Option 2 ID : 264330549877  
Option 3 ID : 264330549878  
Option 4 ID : 264330549875  
Status : Answered  
Chosen Option : 4

Q.10 Which state was ranked first in the Pradhan Mantri Awas Yojana-Urban (PMAY-U) Awards 2021?

- Ans
- 1. Uttar Pradesh
  - 2. Kerala
  - 3. Tamil Nadu
  - 4. Haryana

Question Type : MCQ  
Question ID : 264330139657  
Option 1 ID : 264330547045  
Option 2 ID : 264330547043  
Option 3 ID : 264330547044  
Option 4 ID : 264330547046  
Status : Answered  
Chosen Option : 1

Q.11 Which Lodi ruler's (1489 AD -1517 AD) real name was Nizam Khan?

- Ans
- 1. Qutbuddin Mubarak Shah
  - 2. Ibrahim Lodi
  - 3. Bahlul Lodi
  - 4. Sikandar Lodi

Question Type : MCQ  
Question ID : 264330140920  
Option 1 ID : 264330552028  
Option 2 ID : 264330552027  
Option 3 ID : 264330552029  
Option 4 ID : 264330552030  
Status : Answered  
Chosen Option : 3

Q.12 Which of the following articles of the Indian Constitution mentions the fundamental duty "sovereignty, unity and integrity of India" is mentioned?

- Ans
- 1. Article 51A (b)
  - 2. Article 51A (d)
  - 3. Article 51A (e)
  - 4. Article 51A (c)

Question Type : MCQ  
Question ID : 264330139735  
Option 1 ID : 264330547355  
Option 2 ID : 264330547357  
Option 3 ID : 264330547358  
Option 4 ID : 264330547356  
Status : Not Answered  
Chosen Option : --

Q.13 Highest population density in India according to census 2011 is in \_\_\_\_\_ .

- Ans
- 1. Madhya Pradesh
  - 2. Union Territory of Chandigarh
  - 3. National Capital Territory of Delhi
  - 4. Bihar

Question Type : MCQ  
Question ID : 264330139692  
Option 1 ID : 264330547183  
Option 2 ID : 264330547185  
Option 3 ID : 264330547186  
Option 4 ID : 264330547184  
Status : Answered  
Chosen Option : 3

Q.14 The rock shelters of Bhimbetka are in the foothills of which mountains?

- Ans
- 1. Vindhyan
  - 2. Zaskar
  - 3. Satpura
  - 4. Pir Panjal

Question Type : MCQ  
Question ID : 264330139675  
Option 1 ID : 264330547115  
Option 2 ID : 264330547118  
Option 3 ID : 264330547116  
Option 4 ID : 264330547117  
Status : Answered  
Chosen Option : 3

Q.15 Wightman Cup is associated with which of the following sports?

- Ans
- 1. Golf
  - 2. Hockey
  - 3. Tennis
  - 4. Cricket

Question Type : MCQ  
Question ID : 264330140365  
Option 1 ID : 264330549842  
Option 2 ID : 264330549839  
Option 3 ID : 264330549840  
Option 4 ID : 264330549841  
Status : Not Answered  
Chosen Option : --





Q.16 Which of the following factors can affect distribution of population?

I. Geographical factors

II. Social factors

III. Cultural factors

IV. Economic factors

Ans  1. I, II, III and IV

2. I and II only

3. I, II, III only

4. II and III only

Question Type : MCQ

Question ID : 264330140901

Option 1 ID : 264330551954

Option 2 ID : 264330551951

Option 3 ID : 264330551952

Option 4 ID : 264330551953

Status : Answered

Chosen Option : 1

Q.17 Dr. B.R.Ambedkar was associated with which of the following communities?

Ans  1. Berar

2. Santal

3. Sangoi

4. Mahar

Question Type : MCQ

Question ID : 264330139771

Option 1 ID : 264330547500

Option 2 ID : 264330547501

Option 3 ID : 264330547502

Option 4 ID : 264330547499

Status : Answered

Chosen Option : 1

Q.18 As of November 2022, what is the capital of India's neighbouring country Bhutan?

- Ans
- 1. Thimphu
  - 2. Dhaka
  - 3. Paro
  - 4. Beijing

Question Type : MCQ  
Question ID : 264330140739  
Option 1 ID : 264330551304  
Option 2 ID : 264330551305  
Option 3 ID : 264330551306  
Option 4 ID : 264330551303  
Status : Answered  
Chosen Option : 1

Q.19 In 1900, India participated in Olympics games which was held in \_\_\_\_\_.

- Ans
- 1. Paris
  - 2. Athens
  - 3. Berlin
  - 4. Tokyo

Question Type : MCQ  
Question ID : 264330139869  
Option 1 ID : 264330547855  
Option 2 ID : 264330547858  
Option 3 ID : 264330547857  
Option 4 ID : 264330547856  
Status : Not Answered  
Chosen Option : --

Q.20 How many Indian states celebrate their formation on November 1<sup>st</sup>?

- Ans
- 1. Six
  - 2. Eight
  - 3. Five
  - 4. Seven

Question Type : MCQ  
Question ID : 264330140890  
Option 1 ID : 264330551908  
Option 2 ID : 264330551910  
Option 3 ID : 264330551907  
Option 4 ID : 264330551909  
Status : Not Answered  
Chosen Option : --

Q.21 Bhagat Singh was executed on March 23, 1931 along with \_\_\_\_\_.

- Ans
- 1. Sukhdev and Chandra Shekhar Azad
  - 2. B.K. Dutt and Rajguru
  - 3. Sukhdev and Rajguru
  - 4. Sukhdev and B.K. Dutt

Question Type : MCQ  
Question ID : 264330138970  
Option 1 ID : 264330544490  
Option 2 ID : 264330544488  
Option 3 ID : 264330544489  
Option 4 ID : 264330544487  
Status : Answered  
Chosen Option : 3

Q.22 Which among the following gases is used in the artificial ripening of fruits?

- Ans
- 1. Argon
  - 2. Freon
  - 3. Helium
  - 4. Acetylene

Question Type : MCQ  
Question ID : 264330141051  
Option 1 ID : 264330552554  
Option 2 ID : 264330552552  
Option 3 ID : 264330552551  
Option 4 ID : 264330552553  
Status : Answered  
Chosen Option : 4

Q.23 Which of the following mountain range is the oldest in India?

- Ans
- 1. Purvanchal Range
  - 2. Western Ghats
  - 3. Aravalli Range
  - 4. Satpura and Vindhaya Range

Question Type : MCQ  
Question ID : 264330140377  
Option 1 ID : 264330549890  
Option 2 ID : 264330549889  
Option 3 ID : 264330549888  
Option 4 ID : 264330549887  
Status : Answered  
Chosen Option : 3

Q.24 The blood platelets are also known as \_\_\_\_\_ .

- Ans
- 1. thrombocytes
  - 2. leucocytes
  - 3. erythrocytes
  - 4. thrombin

Question Type : MCQ  
Question ID : 264330140682  
Option 1 ID : 264330551076  
Option 2 ID : 264330551075  
Option 3 ID : 264330551078  
Option 4 ID : 264330551077  
Status : Answered  
Chosen Option : 1

Q.25 Who among the following is the author of 'River of Smoke' novel?

- Ans
- 1. Jeet Thayil
  - 2. Amitav Ghosh
  - 3. Manohar Malgonkar
  - 4. B.B. Lal

Question Type : MCQ  
Question ID : 264330138951  
Option 1 ID : 264330544413  
Option 2 ID : 264330544414  
Option 3 ID : 264330544411  
Option 4 ID : 264330544412  
Status : Not Answered  
Chosen Option : --

Section : English Language and Comprehension

Q.1 Select the most appropriate synonym to substitute the bracketed word in the given sentence.

Spreading from the ports, Formosan termites began a (subterranean) colonization of the country.

- Ans
- 1. Overt
  - 2. Underground
  - 3. Subcutaneous
  - 4. Terrestrial

Question Type : MCQ  
Question ID : 264330136361  
Option 1 ID : 264330534211  
Option 2 ID : 264330534212  
Option 3 ID : 264330534214  
Option 4 ID : 264330534213  
Status : Not Answered  
Chosen Option : --

**Q.2** Select the word segment that substitutes (replaces) the bracketed word segment correctly and completes the sentence meaningfully. Select the option 'no correction required' if the sentence is correct as given.  
(Then got of on) a station in the very heart of London.

- Ans**
- ✓ 1. They got off at
  - ✗ 2. They got off on
  - ✗ 3. They got of by
  - ✗ 4. No correction required

Question Type : MCQ  
Question ID : 264330136113  
Option 1 ID : 264330533259  
Option 2 ID : 264330533261  
Option 3 ID : 264330533260  
Option 4 ID : 264330533262  
Status : Answered  
Chosen Option : 1

**Q.3** Find the part of the given sentence that has an error in it. If there is no error, choose 'No error'.

Land management choices also affect the amount of carbon stored on trees.

- Ans**
- ✓ 1. carbon stored on trees.
  - ✗ 2. No error
  - ✗ 3. also affect the amount of
  - ✗ 4. Land management choices

Question Type : MCQ  
Question ID : 264330135152  
Option 1 ID : 264330529545  
Option 2 ID : 264330529546  
Option 3 ID : 264330529544  
Option 4 ID : 264330529543  
Status : Not Answered  
Chosen Option : --

**Q.4** Identify the segment that contains a grammatical error. If there is no error, select 'No error'.

For example, the parent mountain/ of Mont Blanc, the/ high peak in the Alps, is the Mount Everest.

- Ans**
- ✗ 1. of Mont Blanc, the
  - ✓ 2. high peak in the Alps, is the Mount Everest.
  - ✗ 3. No error
  - ✗ 4. For example, the parent mountain

Question Type : MCQ  
Question ID : 264330136484  
Option 1 ID : 264330534684  
Option 2 ID : 264330534685  
Option 3 ID : 264330534686  
Option 4 ID : 264330534683  
Status : Answered  
Chosen Option : 2

**Q.5** Select the most appropriate antonym to substitute the bracketed word in the given sentence.

For high-moisture areas, like kitchens and baths or where (frequent) cleaning is required, use only oil-based.

- Ans**
- 1. constant
  - 2. confirmed
  - 3. dawdle
  - 4. seldom

Question Type : **MCQ**  
Question ID : **264330135682**  
Option 1 ID : **264330531620**  
Option 2 ID : **264330531619**  
Option 3 ID : **264330531622**  
Option 4 ID : **264330531621**  
Status : **Answered**  
Chosen Option : **4**

**Q.6** Fill in the blank with the most appropriate option.

They bought \_\_\_\_\_ tickets instead from a sleepy-looking guard.

- Ans**
- 1. there
  - 2. dire
  - 3. their
  - 4. dare

Question Type : **MCQ**  
Question ID : **264330136186**  
Option 1 ID : **264330533540**  
Option 2 ID : **264330533542**  
Option 3 ID : **264330533539**  
Option 4 ID : **264330533541**  
Status : **Answered**  
Chosen Option : **3**



Q.7 Select the most appropriate antonym of the given word.

Glamour

- Ans
- 1. Appeal
  - 2. Charm
  - 3. Dullness
  - 4. Magnanimous

Question Type : MCQ  
Question ID : 264330136579  
Option 1 ID : 264330535048  
Option 2 ID : 264330535049  
Option 3 ID : 264330535047  
Option 4 ID : 264330535050  
Status : Answered  
Chosen Option : 3

Q.8 Choose the incorrectly spelt word.

- Ans
- 1. Decrease
  - 2. Rocking
  - 3. Frame
  - 4. Graetar

Question Type : MCQ  
Question ID : 264330135659  
Option 1 ID : 264330531531  
Option 2 ID : 264330531533  
Option 3 ID : 264330531532  
Option 4 ID : 264330531534  
Status : Answered  
Chosen Option : 4

Q.9 Four sentences are given, out of which three have spelling errors. Choose the sentence with all correctly spelt words.

- Ans
- 1.  
The Secretary requested to be informed only as necessary to perform his job.
  - 2.  
Moving between floors, their journey seems both improbable and inevitable.
  - 3.  
The extended phenotype is noticeable when we look at parasites.
  - 4. They predicted a similarly miniscule drop for September.

Question Type : MCQ  
Question ID : 264330136184  
Option 1 ID : 264330533532  
Option 2 ID : 264330533533  
Option 3 ID : 264330533531  
Option 4 ID : 264330533534  
Status : Answered  
Chosen Option : 3

**Q.10** Improve the underlined part of the sentence. Choose 'No improvement' as an answer if the sentence is grammatically correct.

He teaches me algebraic and geometry twice a week.

- Ans**
- 1. taught I algebra
  - 2. No improvement
  - 3. taught me algebra
  - 4. teach me algebraic

Question Type : MCQ  
Question ID : 264330135514  
Option 1 ID : 264330530965  
Option 2 ID : 264330530966  
Option 3 ID : 264330530963  
Option 4 ID : 264330530964  
Status : Answered  
Chosen Option : 3

**Q.11** Choose the word that can substitute the given group of words.

Fit to drink

- Ans**
- 1. Liable
  - 2. Deplorable
  - 3. Potable
  - 4. Ostensible

Question Type : MCQ  
Question ID : 264330135166  
Option 1 ID : 264330529596  
Option 2 ID : 264330529595  
Option 3 ID : 264330529597  
Option 4 ID : 264330529598  
Status : Answered  
Chosen Option : 4





**Q.12** Identify the segment that contains a grammatical error. If there is no error, select 'No error'.  
Do you think I'd rather / be stuck in a room with that old / toad or be played Quidditch?

- Ans**
- 1. Do you think I'd rather
  - 2. toad or be played Quidditch?
  - 3. be stuck in a room with that old
  - 4. No error

Question Type : MCQ  
Question ID : 264330136137  
Option 1 ID : 264330533351  
Option 2 ID : 264330533353  
Option 3 ID : 264330533352  
Option 4 ID : 264330533354  
Status : Answered  
Chosen Option : 3

**Q.13** Select the word segment that substitutes (replaces) the bracketed word segment correctly and completes the sentence meaningfully. Select the option 'no correction required' if the sentence is correct as given.  
We saw him (the more) during Hogsmeade weekend.

- Ans**
- 1. the bigger
  - 2. the most
  - 3. the many
  - 4. No correction required

Question Type : MCQ  
Question ID : 264330136165  
Option 1 ID : 264330533461  
Option 2 ID : 264330533460  
Option 3 ID : 264330533459  
Option 4 ID : 264330533462  
Status : Answered  
Chosen Option : 2

**Q.14** In the following question, out of the given four alternatives, select the alternative which best expresses the meaning of the Idiom/Phrase.

To pick holes in someone's coat

- Ans**
- 1. To aspire for something difficult
  - 2. To deceive someone for personal gain
  - 3. To find fault with someone
  - 4. To discharge one's duty well

Question Type : MCQ  
Question ID : 264330135251  
Option 1 ID : 264330529924  
Option 2 ID : 264330529926  
Option 3 ID : 264330529925  
Option 4 ID : 264330529923  
Status : Answered  
Chosen Option : 3

Q.15 Select the most appropriate option to fill in the blank.

Nickel or brass can cause an allergic reaction when in \_\_\_\_\_ with human skin .

Ans

- 1. surface
- 2. accordance
- 3. parallel
- 4. contact

Question Type : MCQ

Question ID : 264330136750

Option 1 ID : 264330535709

Option 2 ID : 264330535707

Option 3 ID : 264330535710

Option 4 ID : 264330535708

Status : Answered

Chosen Option : 4

Q.16 Select the most appropriate word for the given group of words.

A person who likes or admires women

Ans

- 1. Misogynist
- 2. Philogynist
- 3. Conversationalist
- 4. Polyglot

Question Type : MCQ

Question ID : 264330135834

Option 1 ID : 264330532206

Option 2 ID : 264330532205

Option 3 ID : 264330532203

Option 4 ID : 264330532204

Status : Answered

Chosen Option : 2



Teachingninja.in

Q.17 Select the most appropriate meaning of the given idiom.

Add fuel to the fire

- Ans
- 1. Having to start all over again
  - 2. To make an argument or bad situation worse
  - 3. A mistake made in something you are trying to achieve
  - 4. When an attempt fails and it's time to start all over

Question Type : MCQ  
Question ID : 264330136503  
Option 1 ID : 264330534756  
Option 2 ID : 264330534755  
Option 3 ID : 264330534758  
Option 4 ID : 264330534757  
Status : Answered  
Chosen Option : 2

Q.18 Select the most appropriate option to fill in the blank.

Indonesian police fired warning shots, tear gas and water cannon to try and \_\_\_\_\_ the crowd.

- Ans
- 1. Disperse
  - 2. Deleterious
  - 3. Delimit
  - 4. Discrete

Question Type : MCQ  
Question ID : 264330136541  
Option 1 ID : 264330534904  
Option 2 ID : 264330534903  
Option 3 ID : 264330534905  
Option 4 ID : 264330534906  
Status : Answered  
Chosen Option : 1



Q.19 Select the appropriate synonym for the underlined word.

I mean that is a remarkable finding.

- Ans
- 1. subtle
  - 2. standard
  - 3. noticeable
  - 4. Dim

Question Type : MCQ  
Question ID : 264330135551  
Option 1 ID : 264330531104  
Option 2 ID : 264330531103  
Option 3 ID : 264330531105  
Option 4 ID : 264330531106  
Status : Answered  
Chosen Option : 3

Q.20 Select the most appropriate option to fill in the blank.

My friends, being incredibly nerdy linguists, \_\_\_\_\_ to make fun of the syntax.

- Ans
- 1. traded
  - 2. braided
  - 3. decided
  - 4. stalked

Question Type : MCQ  
Question ID : 264330136559  
Option 1 ID : 264330534973  
Option 2 ID : 264330534971  
Option 3 ID : 264330534974  
Option 4 ID : 264330534972  
Status : Answered  
Chosen Option : 3



**Comprehension:**

In the following passage some words have been deleted. Fill in the blanks with the help of the alternatives given. Select the most appropriate option for each number.

A loud, echoing crack broke the sleepy (1) \_\_\_\_\_ like a gunshot; a cat streaked out (2) \_\_\_\_\_ a parked car and flew out of sight; a shriek, a bellowed oath and the (3) \_\_\_\_\_ of breaking (4) \_\_\_\_\_ came from the Paula's living room, and as (5) \_\_\_\_\_ this was the signal Mansi had been waiting for.

**SubQuestion No : 21**

**Q.21** Select the most appropriate option to fill in the blank No. 1.

- Ans
- 1. blast
  - 2. lull
  - 3. blackout
  - 4. silence

Question Type : MCQ  
Question ID : 264330136118  
Option 1 ID : 264330533278  
Option 2 ID : 264330533277  
Option 3 ID : 264330533275  
Option 4 ID : 264330533276  
Status : Answered  
Chosen Option : 4

**Comprehension:**

In the following passage some words have been deleted. Fill in the blanks with the help of the alternatives given. Select the most appropriate option for each number.

A loud, echoing crack broke the sleepy (1) \_\_\_\_\_ like a gunshot; a cat streaked out (2) \_\_\_\_\_ a parked car and flew out of sight; a shriek, a bellowed oath and the (3) \_\_\_\_\_ of breaking (4) \_\_\_\_\_ came from the Paula's living room, and as (5) \_\_\_\_\_ this was the signal Mansi had been waiting for.

**SubQuestion No : 22**

**Q.22** Select the most appropriate option to fill in the blank No. 2.

- Ans
- 1. by under
  - 2. from over
  - 3. from under
  - 4. side under

Question Type : MCQ  
Question ID : 264330136119  
Option 1 ID : 264330533280  
Option 2 ID : 264330533279  
Option 3 ID : 264330533281  
Option 4 ID : 264330533282  
Status : Answered  
Chosen Option : 3

**Comprehension:**

In the following passage some words have been deleted. Fill in the blanks with the help of the alternatives given. Select the most appropriate option for each number.

A loud, echoing crack broke the sleepy (1) \_\_\_\_\_ like a gunshot; a cat streaked out (2) \_\_\_\_\_ a parked car and flew out of sight; a shriek, a bellowed oath and the (3) \_\_\_\_\_ of breaking (4) \_\_\_\_\_ came from the Paula's living room, and as (5) \_\_\_\_\_ this was the signal Mansi had been waiting for.

**SubQuestion No : 23**

**Q.23** Select the most appropriate option to fill in the blank No. 3.

- Ans
- 1. sound
  - 2. intact
  - 3. flawless
  - 4. vibrant

Question Type : MCQ  
Question ID : 264330136120  
Option 1 ID : 264330533286  
Option 2 ID : 264330533284  
Option 3 ID : 264330533283  
Option 4 ID : 264330533285  
Status : Answered  
Chosen Option : 1

**Comprehension:**

In the following passage some words have been deleted. Fill in the blanks with the help of the alternatives given. Select the most appropriate option for each number.

A loud, echoing crack broke the sleepy (1) \_\_\_\_\_ like a gunshot; a cat streaked out (2) \_\_\_\_\_ a parked car and flew out of sight; a shriek, a bellowed oath and the (3) \_\_\_\_\_ of breaking (4) \_\_\_\_\_ came from the Paula's living room, and as (5) \_\_\_\_\_ this was the signal Mansi had been waiting for.

**SubQuestion No : 24**

**Q.24** Select the most appropriate option to fill in the blank No. 4.

- Ans
- 1. china
  - 2. heart
  - 3. tyre
  - 4. atrocity

Question Type : MCQ  
Question ID : 264330136121  
Option 1 ID : 264330533288  
Option 2 ID : 264330533289  
Option 3 ID : 264330533287  
Option 4 ID : 264330533290  
Status : Answered  
Chosen Option : 3

**Comprehension:**

In the following passage some words have been deleted. Fill in the blanks with the help of the alternatives given. Select the most appropriate option for each number.

A loud, echoing crack broke the sleepy (1) \_\_\_\_\_ like a gunshot; a cat streaked out (2) \_\_\_\_\_ a parked car and flew out of sight; a shriek, a bellowed oath and the (3) \_\_\_\_\_ of breaking (4) \_\_\_\_\_ came from the Paula's living room, and as (5) \_\_\_\_\_ this was the signal Mansi had been waiting for.

**SubQuestion No : 25**

**Q.25** Select the most appropriate option to fill in the blank No. 5.

- Ans
- 1. like
  - 2. throughout
  - 3. though
  - 4. through

Question Type : MCQ  
Question ID : 264330136122  
Option 1 ID : 264330533292  
Option 2 ID : 264330533294  
Option 3 ID : 264330533291  
Option 4 ID : 264330533293  
Status : Answered  
Chosen Option : 4

