



SSC MTS **SHIFT – 3 (16-06-2023)**

- ★ **Latest Govt Job updates**
- ★ **Private Job updates**
- ★ **Free Mock tests available**

**Visit - [teachingninja.in](https://teachingninja.in)**

## Multi Tasking Non Technical Staff and Havaladar CBIC and CBN Examination 2022

Roll Number	
Candidate Name	
Venue Name	
Exam Date	16/06/2023
Exam Time	3:30 PM - 5:00 PM
Subject	MTS Non Tech Havaladar CBIC and CBN Examination 2022

### Section : Numerical and Mathematical Ability

**Q.1** The length of a cuboid is 10 cm. If the breadth of the cuboid is half of its length and height of the cuboid is twice of its length, then what is the lateral surface area of the cuboid?

- Ans**
- 1.  $600 \text{ cm}^2$
  - 2.  $500 \text{ cm}^2$
  - 3.  $720 \text{ cm}^2$
  - 4.  $560 \text{ cm}^2$

Question Type : MCQ

Question ID : 264330139601

Option 1 ID : 264330546822

Option 2 ID : 264330546819

Option 3 ID : 264330546821

Option 4 ID : 264330546820

Status : Not Answered

Chosen Option : --

**Q.2** What will be the HCF of 54 and 48?

- Ans**
- 1. 4
  - 2. 7
  - 3. 6
  - 4. 8

Question Type : MCQ

Question ID : 264330140778

Option 1 ID : 264330551462

Option 2 ID : 264330551461

Option 3 ID : 264330551459

Option 4 ID : 264330551460

Status : Answered

Chosen Option : 3

**Q.3** Sachin is 12.5 percent less efficient than Rohit. If Sachin alone can finish a work in 24 days, then in how many days will Rohit alone finish the same work?

- Ans
- 1. 16 days
  - 2. 21 days
  - 3. 18 days
  - 4. 20 days

Question Type : **MCQ**  
Question ID : **264330139911**  
Option 1 ID : **264330548023**  
Option 2 ID : **264330548025**  
Option 3 ID : **264330548024**  
Option 4 ID : **264330548026**  
Status : **Not Answered**  
Chosen Option : --

**Q.4** The angles of a triangle are in the ratio 2 : 3 : 4. What is the largest angle of the triangle?

- Ans
- 1. 80 degree
  - 2. 100 degree
  - 3. 90 degree
  - 4. 120 degree

Question Type : **MCQ**  
Question ID : **264330139899**  
Option 1 ID : **264330547976**  
Option 2 ID : **264330547977**  
Option 3 ID : **264330547975**  
Option 4 ID : **264330547978**  
Status : **Answered**  
Chosen Option : 1

**Q.5** A person covers first 30 km in 60 minutes and next 40 km in 30 minutes. What is his average speed for the whole journey?

- Ans
- 1.  $(140/3)$  km/hr
  - 2. 30 km/hr
  - 3.  $(160/3)$  km/hr
  - 4. 60 km/hr

Question Type : **MCQ**  
Question ID : **264330139630**  
Option 1 ID : **264330546936**  
Option 2 ID : **264330546935**  
Option 3 ID : **264330546937**  
Option 4 ID : **264330546938**  
Status : **Not Answered**  
Chosen Option : --

Q.6

What is the value of  $\frac{6}{13} \left[ \frac{29}{12} + \frac{4}{18} \left( \frac{16}{12} + \frac{18}{9} \right) - \frac{46}{15} \div \frac{23}{45} \right]$  ?

- Ans
- 1.  $-312/137$
  - 2.  $-307/234$
  - 3.  $-294/117$
  - 4.  $-207/119$

Question Type : MCQ

Question ID : 264330139968

Option 1 ID : 264330548252

Option 2 ID : 264330548251

Option 3 ID : 264330548254

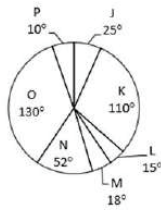
Option 4 ID : 264330548253

Status : Answered

Chosen Option : 2

Q.7

The pie chart given below shows the expenditure incurred by a person on 7 articles. The total expenditure of all these 7 articles is 1800. Expenditure incurred on a particular article is shown in terms of degree with respect to the total expenditure incurred in all these 7 articles.



Expenditure incurred on article L is what percent of expenditure incurred on article P?

- Ans
- 1. 125 percent
  - 2. 100 percent
  - 3. 75 percent
  - 4. 150 percent

Question Type : MCQ

Question ID : 264330140582

Option 1 ID : 264330550681

Option 2 ID : 264330550682

Option 3 ID : 264330550679

Option 4 ID : 264330550680

Status : Answered

Chosen Option : 4

**Q.8** The ratio of spirit and water in two mixtures of 46 litres and 50 litres is 11:12 and 2:3 respectively. Both the mixtures are mixed. Find the ratio of the spirit and water in the new mixture.

- Ans
- 1. 8:9
  - 2. 7:9
  - 3. 5:6
  - 4. 3:7

Question Type : MCQ  
Question ID : 264330138416  
Option 1 ID : 264330542274  
Option 2 ID : 264330542272  
Option 3 ID : 264330542273  
Option 4 ID : 264330542271  
Status : Answered  
Chosen Option : 2

**Q.9** 35 percent of marked price is equal to 40 percent of cost price. If no discount is given, then what will be the profit percentage?

- Ans
- 1. 12.5 percent
  - 2. 25 percent
  - 3. 14.28 percent
  - 4. 16.66 percent

Question Type : MCQ  
Question ID : 264330140623  
Option 1 ID : 264330550842  
Option 2 ID : 264330550841  
Option 3 ID : 264330550840  
Option 4 ID : 264330550839  
Status : Answered  
Chosen Option : 3

**Q.10** The simple interest on a sum for 5 years is Rs. 7590. The rate of interest for the first 3 years is 6 percent per annum and for the next 2 years is 14 percent per annum. What is the sum?

- Ans
- 1. Rs. 17000
  - 2. Rs. 15000
  - 3. Rs. 14000
  - 4. Rs. 16500

Question Type : MCQ  
Question ID : 264330139942  
Option 1 ID : 264330548148  
Option 2 ID : 264330548150  
Option 3 ID : 264330548149  
Option 4 ID : 264330548147  
Status : Answered  
Chosen Option : 4

Q.11 The difference between cost price and selling price is Rs.341. If profit percentage is 22 percent, then what is the selling price?

- Ans
- 1. Rs.1972
  - 2. Rs.1752
  - 3. Rs.1891
  - 4. Rs.1858

Question Type : MCQ  
Question ID : 264330139595  
Option 1 ID : 264330546796  
Option 2 ID : 264330546797  
Option 3 ID : 264330546795  
Option 4 ID : 264330546798  
Status : Answered  
Chosen Option : 3

Q.12 A man bought 30 mangoes for a rupee. How many mangoes had he sold for a rupee so that there is a loss of 40 percent?

- Ans
- 1. 50
  - 2. 40
  - 3. 45
  - 4. 60

Question Type : MCQ  
Question ID : 264330139594  
Option 1 ID : 264330546793  
Option 2 ID : 264330546792  
Option 3 ID : 264330546791  
Option 4 ID : 264330546794  
Status : Not Answered  
Chosen Option : --

Q.13 If  $A = 8X$  and  $B = 6X$ , then A is how much percentage more than B?

- Ans
- 1. 50 percent
  - 2. 66.6 percent
  - 3. 100 percent
  - 4. 33.33 percent

Question Type : MCQ  
Question ID : 264330139613  
Option 1 ID : 264330546869  
Option 2 ID : 264330546868  
Option 3 ID : 264330546870  
Option 4 ID : 264330546867  
Status : Answered  
Chosen Option : 4

Q.14 What will the curved surface area of cylinder with radius 10 cm and height 20 cm? (use  $\pi = 3.14$ )

- Ans
- 1. 1345 cm<sup>2</sup>
  - 2. 1453 cm<sup>2</sup>
  - 3. 1256 cm<sup>2</sup>
  - 4. 1234 cm<sup>2</sup>

Question Type : MCQ  
Question ID : 264330140820  
Option 1 ID : 264330551630  
Option 2 ID : 264330551629  
Option 3 ID : 264330551628  
Option 4 ID : 264330551627  
Status : Not Answered  
Chosen Option : --

Q.15 A man takes 20 hours to go to a place and come back by walking both the ways. He could have saved 4 hours by riding both the ways. The distance covered in the whole journey is 36 miles. Find the average speed for the whole journey if he goes by walking and comes back by riding.

- Ans
- 1. 2 miles/hr
  - 2. 1 miles/hr
  - 3. 4 miles/hr
  - 4. 3 miles/hr

Question Type : MCQ  
Question ID : 264330140780  
Option 1 ID : 264330551467  
Option 2 ID : 264330551470  
Option 3 ID : 264330551469  
Option 4 ID : 264330551468  
Status : Not Answered  
Chosen Option : --

Q.16 A principal of Rs. 16000 is invested at simple interest for 4 years. If the per annum rate of interest is 20 percent, then what will be the amount after 4 years?

- Ans
- 1. Rs. 23480
  - 2. Rs. 28800
  - 3. Rs. 26480
  - 4. Rs. 30420

Question Type : MCQ  
Question ID : 264330139941  
Option 1 ID : 264330548143  
Option 2 ID : 264330548146  
Option 3 ID : 264330548144  
Option 4 ID : 264330548145  
Status : Answered  
Chosen Option : 2

Q.17 Find the fourth proportion to the numbers 49, 51 and 98.

- Ans
- 1. 96
  - 2. 102
  - 3. 112
  - 4. 90

Question Type : MCQ  
Question ID : 264330140182  
Option 1 ID : 264330549110  
Option 2 ID : 264330549107  
Option 3 ID : 264330549108  
Option 4 ID : 264330549109  
Status : Answered  
Chosen Option : 2

Q.18 The table given below shows the marks obtained by boys and girls in different subjects.

Subjects	Boys	Girls
A	60	120
B	80	100
C	140	40
D	120	60
E	100	40

L1 = The difference between marks obtained by boys and girls in all subjects.

L2 = The value of average of marks obtained by boys in C, D and E.

What is the value of  $(L1 - L2)$ ?

- Ans
- 1. 40
  - 2. 20
  - 3. 10
  - 4. 50

Question Type : MCQ  
Question ID : 264330140551  
Option 1 ID : 264330550560  
Option 2 ID : 264330550562  
Option 3 ID : 264330550561  
Option 4 ID : 264330550559  
Status : Answered  
Chosen Option : 2



Q.19 What is the HCF of 513 and 1017?

- Ans
- 1. 15
  - 2. 8
  - 3. 9
  - 4. 13

Question Type : MCQ  
Question ID : 264330140228  
Option 1 ID : 264330549294  
Option 2 ID : 264330549292  
Option 3 ID : 264330549291  
Option 4 ID : 264330549293  
Status : Answered  
Chosen Option : 3

Q.20 Z1 and Z2 together complete a work in 15 days. Z2 alone can complete the same work in 30 days. They took Rs. 2000 to complete the work together. What will be the share of Z1?

- Ans
- 1. Rs. 1500
  - 2. Rs. 2000
  - 3. Rs. 1000
  - 4. Rs. 500

Question Type : MCQ  
Question ID : 264330140533  
Option 1 ID : 264330550488  
Option 2 ID : 264330550489  
Option 3 ID : 264330550487  
Option 4 ID : 264330550490  
Status : Answered  
Chosen Option : 3

Section : Reasoning Ability and Problem Solving

Q.1 Study the given pattern carefully and select the number that can replace the question mark (?) in it.

First row- 15, 12, 180  
Second row- 18,13, 234  
Third row- 7, 32, ?

- Ans
- 1. 215
  - 2. 179
  - 3. 308
  - 4. 224

Question Type : MCQ  
Question ID : 264330140087  
Option 1 ID : 264330548728  
Option 2 ID : 264330548730  
Option 3 ID : 264330548729  
Option 4 ID : 264330548727  
Status : Answered  
Chosen Option : 4

**Q.2** Three Statements are given followed by two conclusions numbered I and II. Assuming the statements to be true, even if they seem to be at variance with commonly known facts, decide which of the conclusions logically follow(s) from the statements.

Statements:

Some if's are but's.

All but's are so's.

No so is a then.

Conclusions:

I. All if's being then is a possibility.

II. All then's being if is a possibility.

- Ans**
- 1. Only conclusion II follows
  - 2. Neither conclusion I nor II follows
  - 3. Both conclusions I and II follow
  - 4. Only conclusion I follows

Question Type : **MCQ**

Question ID : **264330140001**

Option 1 ID : **264330548384**

Option 2 ID : **264330548386**

Option 3 ID : **264330548385**

Option 4 ID : **264330548383**

Status : **Answered**

Chosen Option : **1**

**Q.3** Two Statements are given followed by two conclusions numbered I and II. Assuming the statements to be true, even if they seem to be at variance with commonly known facts, decide which of the conclusions logically follow(s) from the statements.

Statements:

All rings are round.

No round is a square.

Conclusions:

I. No ring is square.

II. No square is round.

- Ans**
- 1. Neither conclusion I nor II follows
  - 2. Both conclusions I and II follow
  - 3. Only conclusion II follows
  - 4. Only conclusion I follows

Question Type : **MCQ**

Question ID : **264330140000**

Option 1 ID : **264330548382**

Option 2 ID : **264330548381**

Option 3 ID : **264330548380**

Option 4 ID : **264330548379**

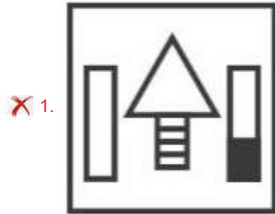
Status : **Answered**

Chosen Option : **2**

Q.4 If a mirror is placed on the line AB, then out of the option figures which figure will be the right image of the question figure?



Ans



Question Type : MCQ

Question ID : 264330139546

Option 1 ID : 264330546599

Option 2 ID : 264330546601

Option 3 ID : 264330546602

Option 4 ID : 264330546600

Status : Answered

Chosen Option : 4

Q.5 After interchanging the given two signs, what will be the value of the given equation?

$$+ \text{ and } - ; 12 + 8 \times 6 + 3 - 11$$

- Ans
- 1. 7
  - 2. 5
  - 3. 9
  - 4. 8

Question Type : MCQ  
Question ID : 264330139543  
Option 1 ID : 264330546588  
Option 2 ID : 264330546590  
Option 3 ID : 264330546589  
Option 4 ID : 264330546587  
Status : Answered  
Chosen Option : 1

Q.6 Four students M, N, O, and P are standing in a queue in a restaurant to give their orders. M is not behind O but behind P. O does not give the last order. Who is standing in front of the queue?

- Ans
- 1. P
  - 2. M
  - 3. N
  - 4. O

Question Type : MCQ  
Question ID : 264330140079  
Option 1 ID : 264330548698  
Option 2 ID : 264330548695  
Option 3 ID : 264330548696  
Option 4 ID : 264330548697  
Status : Not Answered  
Chosen Option : --

Q.7 In the following question, select the missing number of the given series.

283, 295, 281, 297, 279, ?

- Ans
- 1. 294
  - 2. 298
  - 3. 299
  - 4. 291

Question Type : MCQ  
Question ID : 264330139560  
Option 1 ID : 264330546656  
Option 2 ID : 264330546655  
Option 3 ID : 264330546657  
Option 4 ID : 264330546658  
Status : Answered  
Chosen Option : 3

**Q.8** Select the option that is related to the sixth number in the same way as the first number is related to the second number and third number is related to fourth number.

13 : 168 :: 16 : 255 :: 2 : 143

- Ans**
- 1. 14
  - 2. 15
  - 3. 11
  - 4. 12

Question Type : MCQ

Question ID : 264330139541

Option 1 ID : 264330546581

Option 2 ID : 264330546582

Option 3 ID : 264330546579

Option 4 ID : 264330546580

Status : Answered

Chosen Option : 4

**Q.9** Select the option that is related to the fifth term in the same way as the second term is related to the first term and fourth term is related to third term.

GT16 : KW32 :: MQ29 : QT45 :: VA16 : ?

- Ans**
- 1. ZB32
  - 2. YC32
  - 3. ZD32
  - 4. YD32

Question Type : MCQ

Question ID : 264330138583

Option 1 ID : 264330542941

Option 2 ID : 264330542942

Option 3 ID : 264330542939

Option 4 ID : 264330542940

Status : Answered

Chosen Option : 3

**Q.10** Words given on the left side of (::) are related with each other by some Logic/Rule/Relation. Select the missing word/word pair on the right side of (::) from the given alternatives based on the same Logic/Rule/Relation.

Kohima : Nagaland :: ?

- Ans**
- 1. Shillong : Meghalaya
  - 2. Uttar Pradesh : Lucknow
  - 3. Sikkim : Gangtok
  - 4. Bihar : Patna

Question Type : MCQ

Question ID : 264330139530

Option 1 ID : 264330546537

Option 2 ID : 264330546538

Option 3 ID : 264330546535

Option 4 ID : 264330546536

Status : Answered

Chosen Option : 1

Q.11 Usha is older than Savitri. Surchi is younger than Nisha but older than Usha. Taniya is older to Ritu, but younger than Savitri. Manisha is the youngest. Who is the eldest among them?

- Ans
- 1. Taniya
  - 2. Usha
  - 3. Manisha
  - 4. Nisha

Question Type : MCQ  
Question ID : 264330138775  
Option 1 ID : 264330543709  
Option 2 ID : 264330543708  
Option 3 ID : 264330543710  
Option 4 ID : 264330543707  
Status : Answered  
Chosen Option : 4

Q.12 Which two numbers should be interchanged to make the given equation correct?

$$96 \div 3 - 24 + 16 \times 8 = 36$$

- Ans
- 1. 8 and 3
  - 2. 24 and 3
  - 3. 96 and 24
  - 4. 8 and 16

Question Type : MCQ  
Question ID : 264330140468  
Option 1 ID : 264330550254  
Option 2 ID : 264330550253  
Option 3 ID : 264330550251  
Option 4 ID : 264330550252  
Status : Answered  
Chosen Option : 1

Q.13 Which of the following letter will replace the question mark (?) in the given series?

T, Q, N, K, H, ?

- Ans
- 1. R
  - 2. E
  - 3. O
  - 4. P

Question Type : MCQ  
Question ID : 264330140011  
Option 1 ID : 264330548423  
Option 2 ID : 264330548425  
Option 3 ID : 264330548426  
Option 4 ID : 264330548424  
Status : Answered  
Chosen Option : 2

Q.14 Which answer figure will complete the pattern in the question figure?



Ans



Question Type : MCQ

Question ID : 264330139567

Option 1 ID : 264330546683

Option 2 ID : 264330546684

Option 3 ID : 264330546685

Option 4 ID : 264330546686

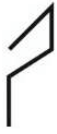
Status : Answered

Chosen Option : 2



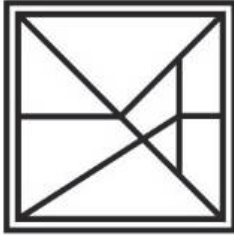
Teachingninja.in

Q.15 Select the option figure in which the given figure is embedded. (rotation is NOT allowed)

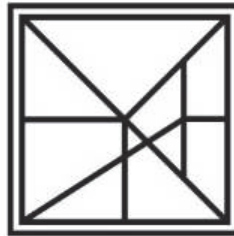


Ans

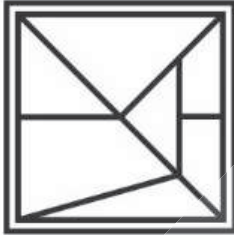
✗ 1.



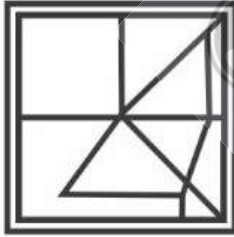
✓ 2.



✗ 3.



✗ 4.



Question Type : MCQ

Question ID : 264330139565

Option 1 ID : 264330546675

Option 2 ID : 264330546677

Option 3 ID : 264330546678

Option 4 ID : 264330546676

Status : Answered

Chosen Option : 2



Q.16 In a certain code language, 'RUDE' is written as 'EDUR48'. How will 'SOUP' be written in that language?

- Ans
- 1. PUPSS1
  - 2. PUOS71
  - 3. PUPS71
  - 4. PUOS81

Question Type : MCQ  
Question ID : 264330139995  
Option 1 ID : 264330548362  
Option 2 ID : 264330548359  
Option 3 ID : 264330548361  
Option 4 ID : 264330548360  
Status : Answered  
Chosen Option : 2

Q.17 Which of the following numbers will replace the question mark (?) in the given series?

14, 9, 4, -1, -6, ?

- Ans
- 1. -8
  - 2. -14
  - 3. -23
  - 4. -11

Question Type : MCQ  
Question ID : 264330140423  
Option 1 ID : 264330550074  
Option 2 ID : 264330550071  
Option 3 ID : 264330550072  
Option 4 ID : 264330550073  
Status : Answered  
Chosen Option : 4

Q.18 In a certain code language, 'DUKE' is coded as 'ZQGA'. What is the code for 'EXIT' in that code language?

- Ans
- 1. ATEQ
  - 2. ATEP
  - 3. AUFQ
  - 4. AUPE

Question Type : MCQ  
Question ID : 264330140056  
Option 1 ID : 264330548606  
Option 2 ID : 264330548605  
Option 3 ID : 264330548604  
Option 4 ID : 264330548603  
Status : Answered  
Chosen Option : 2

**Q.19** Eight boys B1, B2, B3, B4, B5, B6, B7 and B8 are sitting around a circular table facing opposite to the centre (not necessarily in the same order). B1 is third to the right of B3. B5 is second to the left of B3. B2 is fourth to the right of B4. B4 is second to the right of B1. B8 is third to the left of B6. B6 is not the immediate neighbour of B1. Who is third to right of B7?

- Ans**
- 1. B3
  - 2. B5
  - 3. B7
  - 4. B4

Question Type : **MCQ**  
Question ID : **264330140983**  
Option 1 ID : **264330552282**  
Option 2 ID : **264330552279**  
Option 3 ID : **264330552281**  
Option 4 ID : **264330552280**  
Status : **Answered**  
Chosen Option : 4

**Q.20** In a certain code language, 'VRH' is written as 'TPJ'. How will 'LYS' be written in that language?

- Ans**
- 1. JUW
  - 2. JUT
  - 3. JWU
  - 4. WUJ

Question Type : **MCQ**  
Question ID : **264330137588**  
Option 1 ID : **264330538959**  
Option 2 ID : **264330538962**  
Option 3 ID : **264330538960**  
Option 4 ID : **264330538961**  
Status : **Answered**  
Chosen Option : 3

Section : General Awareness

**Q.1** Article 40 of the Indian constitution, "Organisation of village panchayats", is a \_\_\_\_\_.

- Ans**
- 1. Directive Principles of State Policy
  - 2. Fundamental Duty
  - 3. Legal Right
  - 4. Fundamental Right

Question Type : **MCQ**  
Question ID : **264330140671**  
Option 1 ID : **264330551034**  
Option 2 ID : **264330551031**  
Option 3 ID : **264330551033**  
Option 4 ID : **264330551032**  
Status : **Answered**  
Chosen Option : 1

**Q.2** The day to day condition of the atmosphere at a place with respect to the temperature humidity, rainfall, wind speed etc. is called \_\_\_\_\_ at that place.

- Ans**
- 1. climate
  - 2. weather
  - 3. environment
  - 4. ecology

Question Type : **MCQ**  
Question ID : **264330139663**  
Option 1 ID : **264330547067**  
Option 2 ID : **264330547069**  
Option 3 ID : **264330547068**  
Option 4 ID : **264330547070**  
Status : **Answered**  
Chosen Option : **2**

**Q.3** The disease-causing microbes are called \_\_\_\_\_ .

- Ans**
- 1. toxins
  - 2. pathogens
  - 3. decomposers
  - 4. antibodies

Question Type : **MCQ**  
Question ID : **264330139687**  
Option 1 ID : **264330547163**  
Option 2 ID : **264330547165**  
Option 3 ID : **264330547164**  
Option 4 ID : **264330547166**  
Status : **Answered**  
Chosen Option : **2**

**Q.4** The substances which reduce friction are called \_\_\_\_\_ .

- Ans**
- 1. fluids
  - 2. magnets
  - 3. springs
  - 4. lubricants

Question Type : **MCQ**  
Question ID : **264330140283**  
Option 1 ID : **264330549512**  
Option 2 ID : **264330549513**  
Option 3 ID : **264330549514**  
Option 4 ID : **264330549511**  
Status : **Answered**  
Chosen Option : **4**

Q.5 In 1927, B.R Ambedkar started which movement with Dalits?

- Ans
- 1. Self-respect movement
  - 2. Equal Pay movement
  - 3. Independence Movement
  - 4. Temple entry movement

Question Type : MCQ  
Question ID : 264330139889  
Option 1 ID : 264330547938  
Option 2 ID : 264330547937  
Option 3 ID : 264330547935  
Option 4 ID : 264330547936  
Status : Answered  
Chosen Option : 1

Q.6 "Solung" is a festival celebrated by the Adi Tribe of which state?

- Ans
- 1. Himachal Pradesh
  - 2. Madhya Pradesh
  - 3. Arunachal Pradesh
  - 4. Andhra Pradesh

Question Type : MCQ  
Question ID : 264330139699  
Option 1 ID : 264330547214  
Option 2 ID : 264330547213  
Option 3 ID : 264330547212  
Option 4 ID : 264330547211  
Status : Answered  
Chosen Option : 3

Q.7 Which river flows between the Vindhya and Satpura ranges?

- Ans
- 1. Narmada
  - 2. Godavari
  - 3. Son
  - 4. Mahanadi

Question Type : MCQ  
Question ID : 264330140686  
Option 1 ID : 264330551093  
Option 2 ID : 264330551092  
Option 3 ID : 264330551091  
Option 4 ID : 264330551094  
Status : Answered  
Chosen Option : 1

Q.8 The Virupaksha Temple is situated at \_\_\_\_\_.

- Ans
- 1. Surat
  - 2. Sanchi
  - 3. Hampi
  - 4. Jaipur

Question Type : MCQ  
Question ID : 264330139725  
Option 1 ID : 264330547317  
Option 2 ID : 264330547315  
Option 3 ID : 264330547316  
Option 4 ID : 264330547318  
Status : Answered  
Chosen Option : 3

Q.9 Which country is the second largest producer of crude steel in the world for FY 2020-21?

- Ans
- 1. China
  - 2. India
  - 3. Australia
  - 4. Japan

Question Type : MCQ  
Question ID : 264330140660  
Option 1 ID : 264330550990  
Option 2 ID : 264330550988  
Option 3 ID : 264330550989  
Option 4 ID : 264330550987  
Status : Answered  
Chosen Option : 2

Q.10 Which famous Indian musician is associated with musical instrument Santoor?

- Ans
- 1. Ustad Amjad Ali Khan
  - 2. Ustad Zakir Hussain
  - 3. Pandit Shiv Kumar Sharma
  - 4. Hariprasad Chaurasia

Question Type : MCQ  
Question ID : 264330140744  
Option 1 ID : 264330551326  
Option 2 ID : 264330551325  
Option 3 ID : 264330551324  
Option 4 ID : 264330551323  
Status : Answered  
Chosen Option : 3

Q.11 Under the Delhi Sultanate, a religious tax \_\_\_\_\_ was imposed on the wealthy and rich Muslims in India.

- Ans
- 1. Firuz
  - 2. Mamluk
  - 3. Zakat
  - 4. Kismat

Question Type : MCQ  
Question ID : 264330140715  
Option 1 ID : 264330551208  
Option 2 ID : 264330551210  
Option 3 ID : 264330551209  
Option 4 ID : 264330551207  
Status : Answered  
Chosen Option : 2

Q.12 How many silver medals won by India in Commonwealth Games 2022?

- Ans
- 1. 20
  - 2. 16
  - 3. 18
  - 4. 14

Question Type : MCQ  
Question ID : 264330140270  
Option 1 ID : 264330549462  
Option 2 ID : 264330549460  
Option 3 ID : 264330549461  
Option 4 ID : 264330549459  
Status : Not Answered  
Chosen Option : --

Q.13 The term 'Kammakaras' in ancient times is related to \_\_\_\_\_ .

- Ans
- 1. Landless agricultural labourers
  - 2. Craftsmen
  - 3. Tax collecting officer
  - 4. Goldsmith

Question Type : MCQ  
Question ID : 264330139694  
Option 1 ID : 264330547192  
Option 2 ID : 264330547193  
Option 3 ID : 264330547191  
Option 4 ID : 264330547194  
Status : Answered  
Chosen Option : 3

Q.14 Which among the following parts of the Indian Constitution deals with 'The Panchayats'?

- Ans
- 1. X
  - 2. IX
  - 3. III
  - 4. VI

Question Type : MCQ  
Question ID : 264330140363  
Option 1 ID : 264330549833  
Option 2 ID : 264330549831  
Option 3 ID : 264330549834  
Option 4 ID : 264330549832  
Status : Answered  
Chosen Option : 2

Q.15 The Biological Diversity (Amendment) Bill, 2021 is related to \_\_\_\_ Ministry of India.

- Ans
- 1. Agriculture & Farmers Welfare
  - 2. Earth Sciences
  - 3. Corporate Affairs
  - 4. Environment, Forests & Climate Change

Question Type : MCQ  
Question ID : 264330140906  
Option 1 ID : 264330551972  
Option 2 ID : 264330551974  
Option 3 ID : 264330551973  
Option 4 ID : 264330551971  
Status : Answered  
Chosen Option : 4

Q.16 Which of the following is an important steel producing centres in India?

- I. Bhilai
- II. Jamshedpur
- III. Rourkela

- Ans
- 1. I and II only
  - 2. I and III only
  - 3. II and III only
  - 4. I, II and III

Question Type : MCQ  
Question ID : 264330140898  
Option 1 ID : 264330551940  
Option 2 ID : 264330551939  
Option 3 ID : 264330551941  
Option 4 ID : 264330551942  
Status : Answered  
Chosen Option : 4

Q.17 Which freedom fighter is known as the mother of the Indian revolution?

- Ans
- 1. Sarojini Naidu
  - 2. Annie Besant
  - 3. Madam Bhikaji Cama
  - 4. Aruna Asaf Ali

Question Type : MCQ  
Question ID : 264330140667  
Option 1 ID : 264330551015  
Option 2 ID : 264330551016  
Option 3 ID : 264330551017  
Option 4 ID : 264330551018  
Status : Answered  
Chosen Option : 3

Q.18 Small Industries Development Bank of India (SIDBI) is regulated by \_\_\_\_\_.

- Ans
- 1. State Bank of India
  - 2. Indian Bank
  - 3. Reserve Bank of India
  - 4. ICICI Bank

Question Type : MCQ  
Question ID : 264330140750  
Option 1 ID : 264330551349  
Option 2 ID : 264330551348  
Option 3 ID : 264330551350  
Option 4 ID : 264330551347  
Status : Answered  
Chosen Option : 3

Q.19 Which of the following states does NOT share border with Nepal?

- Ans
- 1. Uttarakhand
  - 2. Uttar Pradesh
  - 3. Bihar
  - 4. Himachal Pradesh

Question Type : MCQ  
Question ID : 264330140286  
Option 1 ID : 264330549525  
Option 2 ID : 264330549523  
Option 3 ID : 264330549524  
Option 4 ID : 264330549526  
Status : Answered  
Chosen Option : 4



Q.20 Provisions related to the Municipalities are mentioned under which part of the Indian constitution?

- Ans
- 1. Part IXA
  - 2. Part VII
  - 3. Part V
  - 4. Part XII

Question Type : MCQ  
Question ID : 264330139759  
Option 1 ID : 264330547453  
Option 2 ID : 264330547452  
Option 3 ID : 264330547451  
Option 4 ID : 264330547454  
Status : Answered  
Chosen Option : 1

Q.21 Which among the following plant kingdoms are divided into dicotyledons and monocotyledons?

- Ans
- 1. Angiosperms
  - 2. Pteridophytes
  - 3. Bryophytes
  - 4. Gymnosperms

Question Type : MCQ  
Question ID : 264330140348  
Option 1 ID : 264330549774  
Option 2 ID : 264330549772  
Option 3 ID : 264330549771  
Option 4 ID : 264330549773  
Status : Answered  
Chosen Option : 3

Q.22 Which among the following type of unemployment is also known as the real wage unemployment?

- Ans
- 1. classical
  - 2. seasonal
  - 3. structural
  - 4. frictional

Question Type : MCQ  
Question ID : 264330140354  
Option 1 ID : 264330549797  
Option 2 ID : 264330549798  
Option 3 ID : 264330549795  
Option 4 ID : 264330549796  
Status : Answered  
Chosen Option : 2

Q.23 Nalanda University, an important learning centre in ancient period is situated in which state?

- Ans
- 1. Bihar
  - 2. Haryana
  - 3. Uttar Pradesh
  - 4. West Bengal

Question Type : MCQ  
Question ID : 264330140883  
Option 1 ID : 264330551881  
Option 2 ID : 264330551880  
Option 3 ID : 264330551879  
Option 4 ID : 264330551882  
Status : Answered  
Chosen Option : 1

Q.24 Who among the following won the Men's Singles Paris Masters Title in 2022?

- Ans
- 1. Holger Rune
  - 2. Carlos Alcaraz
  - 3. Novak Djokovic
  - 4. Casper Ruud

Question Type : MCQ  
Question ID : 264330141069  
Option 1 ID : 264330552625  
Option 2 ID : 264330552623  
Option 3 ID : 264330552626  
Option 4 ID : 264330552624  
Status : Answered  
Chosen Option : 3

Q.25 Which former Miss India, also the recipient of the Sangeet Natak Akademi Award, popularised Indian classical dance in the west?

- Ans
- 1. Leela Naidu
  - 2. Lona Pinto
  - 3. Indrani Rahman
  - 4. Peace Kanwal

Question Type : MCQ  
Question ID : 264330140670  
Option 1 ID : 264330551027  
Option 2 ID : 264330551028  
Option 3 ID : 264330551029  
Option 4 ID : 264330551030  
Status : Answered  
Chosen Option : 3

Section : English Language and Comprehension

Q.1 Select the appropriate antonym for the underlined word.

Educators play a key role as nation builders.

- Ans
- 1. negligible
  - 2. principal
  - 3. primitive
  - 4. predominant

Question Type : MCQ  
Question ID : 264330135249  
Option 1 ID : 264330529915  
Option 2 ID : 264330529916  
Option 3 ID : 264330529918  
Option 4 ID : 264330529917  
Status : Answered  
Chosen Option : 1

Q.2 Improve the underlined part of the sentence. Choose 'No improvement' as an answer if the sentence is grammatically correct.

He would prefer to speak with you in persona.

- Ans
- 1. you in person
  - 2. you on person
  - 3. No improvement
  - 4. you in personal

Question Type : MCQ  
Question ID : 264330135234  
Option 1 ID : 264330529859  
Option 2 ID : 264330529861  
Option 3 ID : 264330529862  
Option 4 ID : 264330529860  
Status : Answered  
Chosen Option : 4

Q.3 Select the correctly spelt word.

- Ans
- 1. simultenaous
  - 2. simulteneous
  - 3. simultaneous
  - 4. simultanous

Question Type : MCQ  
Question ID : 264330135685  
Option 1 ID : 264330531634  
Option 2 ID : 264330531631  
Option 3 ID : 264330531632  
Option 4 ID : 264330531633  
Status : Answered  
Chosen Option : 3

Q.4 Fill in the blank with the most appropriate option.

Pranav, Shagun and Munshi took a bus to the same \_\_\_\_\_.

Ans

- 1. slot
- 2. end
- 3. destination
- 4. target

Question Type : MCQ  
Question ID : 264330135766  
Option 1 ID : 264330531943  
Option 2 ID : 264330531946  
Option 3 ID : 264330531945  
Option 4 ID : 264330531944  
Status : Answered  
Chosen Option : 3

Q.5 Select the most appropriate synonym of the given word.

Small

Ans

- 1. Rich
- 2. Adequate
- 3. Liberal
- 4. Slight

Question Type : MCQ  
Question ID : 264330136125  
Option 1 ID : 264330533306  
Option 2 ID : 264330533304  
Option 3 ID : 264330533305  
Option 4 ID : 264330533303  
Status : Answered  
Chosen Option : 4

Q.6 Choose the word that can substitute the given group of words.

One who gives shape to stone

Ans

- 1. Curator
- 2. Sculptor
- 3. Apostate
- 4. Auditor

Question Type : MCQ  
Question ID : 264330135524  
Option 1 ID : 264330531001  
Option 2 ID : 264330531002  
Option 3 ID : 264330530999  
Option 4 ID : 264330531000  
Status : Answered  
Chosen Option : 2

Q.7 Identify the segment that contains a grammatical error. If there is no error, select 'No error'.

The differences were/ imperceptible to all but/ the most trained eye.

- Ans
- 1. imperceptible to all but
  - 2. No error
  - 3. the most trained eye.
  - 4. The differences were

Question Type : MCQ  
Question ID : 264330136345  
Option 1 ID : 264330534152  
Option 2 ID : 264330534154  
Option 3 ID : 264330534153  
Option 4 ID : 264330534151  
Status : Answered  
Chosen Option : 1

Q.8 Select the word segment that substitutes (replaces) the bracketed word segment correctly and completes the sentence meaningfully. Select the option 'no correction required' if the sentence is correct as given.  
We've made extraordinary (flowering as a) society in that regard.

- Ans
- 1. progress as a
  - 2. advance as a
  - 3. improvement by a
  - 4. No correction required

Question Type : MCQ  
Question ID : 264330135720  
Option 1 ID : 264330531768  
Option 2 ID : 264330531769  
Option 3 ID : 264330531767  
Option 4 ID : 264330531770  
Status : Answered  
Chosen Option : 1

Q.9 Select the most appropriate option to fill in the blank.

She was trying to help that little boy in the grocery \_\_\_\_\_.

- Ans
- 1. road
  - 2. asylum
  - 3. store
  - 4. park

Question Type : MCQ  
Question ID : 264330135661  
Option 1 ID : 264330531539  
Option 2 ID : 264330531542  
Option 3 ID : 264330531541  
Option 4 ID : 264330531540  
Status : Answered  
Chosen Option : 3

Q.10 Identify the segment that contains a grammatical error. If there is no error, select 'No error'.

Even the most wise don't / know what's hidden in / the depths of their being.

- Ans
- 1. No error
  - 2. know what's hidden in
  - 3. the depths of their being.
  - 4. Even the most wise don't

Question Type : MCQ  
Question ID : 264330136411  
Option 1 ID : 264330534410  
Option 2 ID : 264330534408  
Option 3 ID : 264330534409  
Option 4 ID : 264330534407  
Status : Answered  
Chosen Option : 4

Q.11 Select the most appropriate meaning of the bracketed idiom in the given sentence.

She invited (all and sundry) to her party.

- Ans
- 1. To take reckless risks
  - 2. To remove a misapprehension
  - 3. To suffer humiliation
  - 4. Everyone without distinction

Question Type : MCQ  
Question ID : 264330136208  
Option 1 ID : 264330533624  
Option 2 ID : 264330533625  
Option 3 ID : 264330533623  
Option 4 ID : 264330533626  
Status : Answered  
Chosen Option : 4

Q.12 Select the wrongly spelt word.

- Ans
- 1. enormous
  - 2. mordern
  - 3. indolent
  - 4. courteous

Question Type : MCQ  
Question ID : 264330136766  
Option 1 ID : 264330535767  
Option 2 ID : 264330535768  
Option 3 ID : 264330535769  
Option 4 ID : 264330535770  
Status : Answered  
Chosen Option : 2

Q.13 Fill in the blank with the most appropriate option.

Many Americans appear to be \_\_\_\_\_ those warnings seriously.

- Ans
- 1. understanding
  - 2. sacking
  - 3. making
  - 4. taking

Question Type : MCQ  
Question ID : 264330136168  
Option 1 ID : 264330533473  
Option 2 ID : 264330533474  
Option 3 ID : 264330533472  
Option 4 ID : 264330533471  
Status : Answered  
Chosen Option : 4

Q.14 Select the most appropriate meaning of the given idiom.

Rust bucket

- Ans
- 1. To be absent minded
  - 2. An old man
  - 3. A vehicle that is old or almost broken
  - 4. To be late for everything

Question Type : MCQ  
Question ID : 264330135865  
Option 1 ID : 264330532323  
Option 2 ID : 264330532325  
Option 3 ID : 264330532324  
Option 4 ID : 264330532326  
Status : Answered  
Chosen Option : 1

Q.15 Select the most appropriate option to substitute the bracketed segment in the given sentence. If there is no need to substitute it, select 'no substitution required'.

It is expected that this police power will only apply to air and (sea routes between the Great Britain and the Northern Ireland).

- Ans
- 1. sea routes across the Great Britain and Northern Ireland
  - 2. sea routes across the Great Britain and the Northern Ireland
  - 3. sea routes between Great Britain and Northern Ireland
  - 4. No substitution required

Question Type : MCQ  
Question ID : 264330136348  
Option 1 ID : 264330534163  
Option 2 ID : 264330534164  
Option 3 ID : 264330534165  
Option 4 ID : 264330534166  
Status : Answered  
Chosen Option : 3

Q.16 Choose the word that is opposite in meaning to the given word.

Pardon

- Ans
- 1. Condemn
  - 2. Spite
  - 3. Boast
  - 4. Release

Question Type : MCQ  
Question ID : 264330135248  
Option 1 ID : 264330529911  
Option 2 ID : 264330529913  
Option 3 ID : 264330529914  
Option 4 ID : 264330529912  
Status : Answered  
Chosen Option : 1

Q.17 Select the word from the options which is similar in meaning to the bracketed word given in the sentence below.

The (departure) of people from the city isn't necessarily good news.

- Ans
- 1. abidance
  - 2. continuation
  - 3. exodus
  - 4. excavation

Question Type : MCQ  
Question ID : 264330136282  
Option 1 ID : 264330533910  
Option 2 ID : 264330533909  
Option 3 ID : 264330533907  
Option 4 ID : 264330533908  
Status : Answered  
Chosen Option : 1

Q.18 Identify the segment that contains a grammatical error. If there is no error, select 'No error'.

'He wants something done, / and it has not happen / fast enough,' he said.

- Ans
- 1. No error
  - 2. He wants something done
  - 3. fast enough,' he said.
  - 4. and it has not happen

Question Type : MCQ  
Question ID : 264330136412  
Option 1 ID : 264330534414  
Option 2 ID : 264330534411  
Option 3 ID : 264330534413  
Option 4 ID : 264330534412  
Status : Answered  
Chosen Option : 2



Q.19 Select the most appropriate option to fill in the blank.

The event acts as a trigger or \_\_\_\_\_, which catapults them into an awareness of this phenomena.

- Ans
- 1. dogma
  - 2. catalyst
  - 3. elegy
  - 4. harangue

Question Type : MCQ  
Question ID : 264330136350  
Option 1 ID : 264330534172  
Option 2 ID : 264330534173  
Option 3 ID : 264330534174  
Option 4 ID : 264330534171  
Status : Answered  
Chosen Option : 2

Q.20 Select the most appropriate word for the given group of words.

People who belong to the same country.

- Ans
- 1. Natives
  - 2. Soldiers
  - 3. Folks
  - 4. Communists

Question Type : MCQ  
Question ID : 264330135703  
Option 1 ID : 264330531699  
Option 2 ID : 264330531700  
Option 3 ID : 264330531701  
Option 4 ID : 264330531702  
Status : Answered  
Chosen Option : 1



**Comprehension:**

In the following passage some of the words have been deleted. Read the passage carefully and select the correct answer for the given blank out of the four alternatives.

One headteacher asked what she should say to parents who request guidance \_\_\_\_\_ (1) getting their child "school-ready", because she was concerned that too \_\_\_\_\_ (2) parents have become convinced that an expert (the teacher) knows more than they do about their own child's \_\_\_\_\_ (3). Her intention was not to bash parents, \_\_\_\_\_ (4) she wanted to know how to encourage parents to see "school" as a distinct domain from "home", where their own \_\_\_\_\_ (5) ought to hold sway.

**SubQuestion No : 21**

**Q.21** Select the most appropriate option to fill in the blank 1

- Ans
- 1. at
  - 2. to
  - 3. of
  - 4. on

Question Type : **MCQ**  
Question ID : **264330141191**  
Option 1 ID : **264330553101**  
Option 2 ID : **264330553102**  
Option 3 ID : **264330553100**  
Option 4 ID : **264330553099**  
Status : **Answered**  
Chosen Option : **4**

**Comprehension:**

In the following passage some of the words have been deleted. Read the passage carefully and select the correct answer for the given blank out of the four alternatives.

One headteacher asked what she should say to parents who request guidance \_\_\_\_\_ (1) getting their child "school-ready", because she was concerned that too \_\_\_\_\_ (2) parents have become convinced that an expert (the teacher) knows more than they do about their own child's \_\_\_\_\_ (3). Her intention was not to bash parents, \_\_\_\_\_ (4) she wanted to know how to encourage parents to see "school" as a distinct domain from "home", where their own \_\_\_\_\_ (5) ought to hold sway.

**SubQuestion No : 22**

**Q.22** Select the most appropriate option to fill in the blank 2

- Ans
- 1. many
  - 2. much
  - 3. most
  - 4. more

Question Type : **MCQ**  
Question ID : **264330141192**  
Option 1 ID : **264330553104**  
Option 2 ID : **264330553105**  
Option 3 ID : **264330553106**  
Option 4 ID : **264330553103**  
Status : **Answered**  
Chosen Option : **1**

**Comprehension:**

In the following passage some of the words have been deleted. Read the passage carefully and select the correct answer for the given blank out of the four alternatives.

One headteacher asked what she should say to parents who request guidance \_\_\_\_\_ (1) getting their child "school-ready", because she was concerned that too \_\_\_\_\_ (2) parents have become convinced that an expert (the teacher) knows more than they do about their own child's \_\_\_\_\_ (3). Her intention was not to bash parents, \_\_\_\_\_ (4) she wanted to know how to encourage parents to see "school" as a distinct domain from "home", where their own \_\_\_\_\_ (5) ought to hold sway.

**SubQuestion No : 23**

**Q.23** Select the most appropriate option to fill in the blank 3

- Ans**
- 1. development
  - 2. consistence
  - 3. submission
  - 4. maniacs

Question Type : MCQ  
Question ID : 264330141193  
Option 1 ID : 264330553109  
Option 2 ID : 264330553108  
Option 3 ID : 264330553110  
Option 4 ID : 264330553107  
Status : Answered  
Chosen Option : 1

**Comprehension:**

In the following passage some of the words have been deleted. Read the passage carefully and select the correct answer for the given blank out of the four alternatives.

One headteacher asked what she should say to parents who request guidance \_\_\_\_\_ (1) getting their child "school-ready", because she was concerned that too \_\_\_\_\_ (2) parents have become convinced that an expert (the teacher) knows more than they do about their own child's \_\_\_\_\_ (3). Her intention was not to bash parents, \_\_\_\_\_ (4) she wanted to know how to encourage parents to see "school" as a distinct domain from "home", where their own \_\_\_\_\_ (5) ought to hold sway.

**SubQuestion No : 24**

**Q.24** Select the most appropriate option to fill in the blank 4

- Ans**
- 1. or
  - 2. rather
  - 3. so
  - 4. yet

Question Type : MCQ  
Question ID : 264330141194  
Option 1 ID : 264330553111  
Option 2 ID : 264330553114  
Option 3 ID : 264330553113  
Option 4 ID : 264330553112  
Status : Answered  
Chosen Option : 4

**Comprehension:**

In the following passage some of the words have been deleted. Read the passage carefully and select the correct answer for the given blank out of the four alternatives.

One headteacher asked what she should say to parents who request guidance \_\_\_\_\_ (1) getting their child "school-ready", because she was concerned that too \_\_\_\_\_ (2) parents have become convinced that an expert (the teacher) knows more than they do about their own child's \_\_\_\_\_ (3). Her intention was not to bash parents, \_\_\_\_\_ (4) she wanted to know how to encourage parents to see "school" as a distinct domain from "home", where their own \_\_\_\_\_ (5) ought to hold sway.

**SubQuestion No : 25**

**Q.25** Select the most appropriate option to fill in the blank 5

- Ans**
- 1. commotion
  - 2. games
  - 3. judgement
  - 4. turbulence

Question Type : **MCQ**

Question ID : **264330141195**

Option 1 ID : **264330553115**

Option 2 ID : **264330553117**

Option 3 ID : **264330553116**

Option 4 ID : **264330553118**

Status : **Answered**

Chosen Option : **3**

