



SSC MTS **SHIFT – 1 (16-05-2023)**

- ★ **Latest Govt Job updates**
- ★ **Private Job updates**
- ★ **Free Mock tests available**

Visit - teachingninja.in

Multi Tasking Non Technical Staff and Havaladar CBIC and CBN Examination 2022

Roll Number	
Candidate Name	
Venue Name	
Exam Date	16/05/2023
Exam Time	9:00 AM - 10:30 AM
Subject	MTS Non Tech Havaladar CBIC and CBN Examination 2022

Section : Numerical and Mathematical Ability

Q.1 What is the compound interest on Rs. 8400 for 2 years at 10% per annum compounded annually?

- Ans
- 1. Rs. 10164
 - 2. Rs. 840
 - 3. Rs. 5064
 - 4. Rs. 1764

Question Type : MCQ
Question ID : 264330138048
Option 1 ID : 264330540799
Option 2 ID : 264330540800
Option 3 ID : 264330540801
Option 4 ID : 264330540802
Status : Answered
Chosen Option : 4

Q.2 14 workers working 16 hours per day can demolish a building in 81 days. In how many days 18 workers working 24 hours per day can demolish the same building?

- Ans
- 1. 54 days
 - 2. 42 days
 - 3. 70 days
 - 4. 30 days

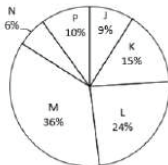
Question Type : MCQ
Question ID : 264330135146
Option 1 ID : 264330529519
Option 2 ID : 264330529522
Option 3 ID : 264330529520
Option 4 ID : 264330529521
Status : Answered
Chosen Option : 2

Q.3 Rs. 15000 is divided among E, F and G. E's share and F's share are in the ratio of 3 : 2. F's share and G's share are in the ratio of 6 : 5. How much amount will F receive?

- Ans**
- 1. Rs. 3750
 - 2. Rs. 6750
 - 3. Rs. 4500
 - 4. Rs. 6000

Question Type : MCQ
Question ID : 264330137162
Option 1 ID : 264330537294
Option 2 ID : 264330537293
Option 3 ID : 264330537292
Option 4 ID : 264330537291
Status : Answered
Chosen Option : 3

Q.4 The pie chart given below shows the number of students studying in six schools. Total number of students studying in all these six schools are 7000. Number of students studying in a particular school is shown as a percentage of total number of students studying in all these six schools.



What is the difference between the average number of students studying in school K and L and average number of students studying in school M and N?

- Ans**
- 1. 85
 - 2. 90
 - 3. 105
 - 4. 115

Question Type : MCQ
Question ID : 264330137173
Option 1 ID : 264330537338
Option 2 ID : 264330537336
Option 3 ID : 264330537337
Option 4 ID : 264330537335
Status : Answered
Chosen Option : 3

Q.5 A car left 4 hours later than the scheduled time but in order to reach its destination 480 km away in time, it had to increase its usual speed by 10 km/hr. What is the usual speed of the car?

- Ans**
- 1. 40 km/hr
 - 2. 60 km/hr
 - 3. 30 km/hr
 - 4. 50 km/hr

Question Type : MCQ
Question ID : 264330137154
Option 1 ID : 264330537262
Option 2 ID : 264330537260
Option 3 ID : 264330537261
Option 4 ID : 264330537259
Status : Answered
Chosen Option : 3

Q.6 By selling an article at Rs.425, a shopkeeper had a loss of 15%. At what price should he sell the article so as to make a profit of 20%?

- Ans**
- 1. Rs.800
 - 2. Rs.1000
 - 3. Rs.400
 - 4. Rs.600

Question Type : **MCQ**
Question ID : **264330138095**
Option 1 ID : **264330540989**
Option 2 ID : **264330540990**
Option 3 ID : **264330540987**
Option 4 ID : **264330540988**
Status : **Answered**
Chosen Option : **4**

Q.7 A sum of money at simple interest amounts to Rs.5704 in 3 years and to Rs.6072 in 4 years.The sum is:

- Ans**
- 1. Rs.5020
 - 2. Rs.4800
 - 3. Rs.4600
 - 4. Rs.4980

Question Type : **MCQ**
Question ID : **264330138100**
Option 1 ID : **264330541008**
Option 2 ID : **264330541009**
Option 3 ID : **264330541007**
Option 4 ID : **264330541010**
Status : **Answered**
Chosen Option : **3**

Q.8 Reshma alone can do a work in 14 days. Bhavana is 40% more efficient than Reshma. The number of days, Bhavana alone will take to do the same piece of work is:

- Ans**
- 1. 10 days
 - 2. 40 days
 - 3. 28 days
 - 4. 14 days

Question Type : **MCQ**
Question ID : **264330138714**
Option 1 ID : **264330543463**
Option 2 ID : **264330543466**
Option 3 ID : **264330543465**
Option 4 ID : **264330543464**
Status : **Answered**
Chosen Option : **1**

Q.9 The least number which when divided by 14, 18 and 36 and leaves 1 as remainder in each case is:

- Ans**
- 1. 250
 - 2. 252
 - 3. 253
 - 4. 251

Question Type : MCQ
Question ID : 264330138037
Option 1 ID : 264330540757
Option 2 ID : 264330540755
Option 3 ID : 264330540756
Option 4 ID : 264330540758
Status : Answered
Chosen Option : 3

Q.10 A trader allowed a discount of 25 percent on a trolley bag having list price of Rs. 1488 and earns a profit of 20 percent.
What is the cost price of the trolley bag?

- Ans**
- 1. Rs. 908
 - 2. Rs. 880
 - 3. Rs. 930
 - 4. Rs. 960

Question Type : MCQ
Question ID : 264330137165
Option 1 ID : 264330537304
Option 2 ID : 264330537306
Option 3 ID : 264330537303
Option 4 ID : 264330537305
Status : Answered
Chosen Option : 3

Q.11 Average of 9 numbers is 47. If a number is removed, then the average becomes 48. Which number was removed?

- Ans**
- 1. 39
 - 2. 42
 - 3. 45
 - 4. 40

Question Type : MCQ
Question ID : 264330137155
Option 1 ID : 264330537263
Option 2 ID : 264330537264
Option 3 ID : 264330537266
Option 4 ID : 264330537265
Status : Answered
Chosen Option : 1

Q.12 What is the Highest Common Factor of 25, 15 and 75?

- Ans
- 1. 7
 - 2. 15
 - 3. 25
 - 4. 5

Question Type : MCQ
Question ID : 264330137169
Option 1 ID : 264330537319
Option 2 ID : 264330537322
Option 3 ID : 264330537320
Option 4 ID : 264330537321
Status : Answered
Chosen Option : 4

Q.13 The given data shows the number of mobiles (in thousands) manufactured by companies C1, C2, C3 and C4 in 2018, 2019 and 2020. Which company manufactured the least number of mobiles in total across all the years?

Company	2018	2019	2020
C1	44	33	70
C2	32	54	50
C3	72	63	82
C4	84	71	49

- Ans
- 1. C3
 - 2. C2
 - 3. C4
 - 4. C1

Question Type : MCQ
Question ID : 264330135429
Option 1 ID : 264330530625
Option 2 ID : 264330530626
Option 3 ID : 264330530623
Option 4 ID : 264330530624
Status : Answered
Chosen Option : 2

Q.14 A number is increased by 20% and then decreased by 20%. What is the net percent change in the number?

- Ans
- 1. 4% increase
 - 2. 4% decrease
 - 3. 5% increase
 - 4. 5% decrease

Question Type : MCQ
Question ID : 264330138041
Option 1 ID : 264330540773
Option 2 ID : 264330540771
Option 3 ID : 264330540774
Option 4 ID : 264330540772
Status : Answered
Chosen Option : 2

Q.15 Find the value of $\sqrt{[(7^2 + 6^3 + 9^2) \div 2 + 52]}$

- Ans
- 1. 14
 - 2. 15
 - 3. 16
 - 4. 13

Question Type : MCQ
Question ID : 264330135413
Option 1 ID : 264330530559
Option 2 ID : 264330530561
Option 3 ID : 264330530562
Option 4 ID : 264330530560
Status : Answered
Chosen Option : 2

Q.16 If $X : Y = 3 : 2$, then what is the value of $(X - Y) : (X + Y)$?

- Ans
- 1. 4 : 5
 - 2. 1 : 5
 - 3. 8 : 9
 - 4. 3 : 7

Question Type : MCQ
Question ID : 264330137161
Option 1 ID : 264330537288
Option 2 ID : 264330537287
Option 3 ID : 264330537289
Option 4 ID : 264330537290
Status : Answered
Chosen Option : 2

Q.17 Difference between the circumferences of two circles is 4.4 cm and radius of smaller circle is 1.4 cm. The radius of the larger circle is:

- Ans
- 1. 4.1 cm
 - 2. 0.7 cm
 - 3. 2.1 cm
 - 4. 3.5 cm

Question Type : MCQ
Question ID : 264330138718
Option 1 ID : 264330543482
Option 2 ID : 264330543479
Option 3 ID : 264330543481
Option 4 ID : 264330543480
Status : Answered
Chosen Option : 3

Q.18 Average of 8 numbers is 44. The average of first three numbers is 50 and the average of next two numbers is 52. If the sixth number is 6 and 8 less than seventh and eighth number respectively, then what is the value of eighth number?

- Ans**
- 1. 36
 - 2. 32
 - 3. 40
 - 4. 56

Question Type : **MCQ**
Question ID : **264330138019**
Option 1 ID : **264330540683**
Option 2 ID : **264330540685**
Option 3 ID : **264330540684**
Option 4 ID : **264330540686**
Status : **Answered**
Chosen Option : 1

Q.19 The height of a right circular cone is 24 cm. If the diameter of its base is 36 cm, then what will be the curved surface area of the cone?

- Ans**
- 1. 1444.6 cm²
 - 2. 2400.9 cm²
 - 3. 1697.14 cm²
 - 4. 2144.2 cm²

Question Type : **MCQ**
Question ID : **264330135151**
Option 1 ID : **264330529542**
Option 2 ID : **264330529540**
Option 3 ID : **264330529539**
Option 4 ID : **264330529541**
Status : **Answered**
Chosen Option : 3

Q.20 The cost price of 50 articles is same as the selling price of x articles. If there is a profit of 25 percent, then what is the value of x? (Selling price of all articles is same. Cost price of all articles is same)

- Ans**
- 1. 20
 - 2. 40
 - 3. 30
 - 4. 25

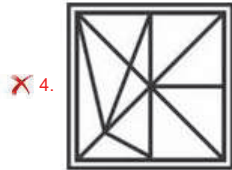
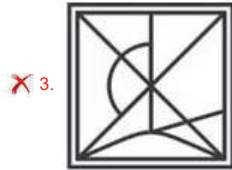
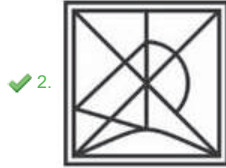
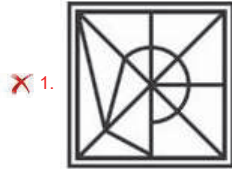
Question Type : **MCQ**
Question ID : **264330137160**
Option 1 ID : **264330537286**
Option 2 ID : **264330537283**
Option 3 ID : **264330537284**
Option 4 ID : **264330537285**
Status : **Answered**
Chosen Option : 2

Section : Reasoning Ability and Problem Solving

Q.1 Select the option figure in which the given figure is embedded. (rotation is NOT allowed)



Ans



Teachingninja.in

Question Type : MCQ

Question ID : 264330135634

Option 1 ID : 264330531437

Option 2 ID : 264330531435

Option 3 ID : 264330531436

Option 4 ID : 264330531438

Status : Answered

Chosen Option : 2

Q.2 In the following question below are given some statements followed by some conclusions based on those statements. Taking the given statements to be true even if they seem to be at variance from commonly known facts. Read all the conclusions and then decide which of the given conclusion logically follows the given statements.

Statements:

I. Some S are P.

II. No P is L.

Conclusion:

I. All S are P.

II. All I are S.

- Ans
- 1. Both conclusions I and II follows
 - 2. Neither conclusion follows
 - 3. Only conclusion I follows
 - 4. Only conclusion II follows

Question Type : MCQ

Question ID : 264330137119

Option 1 ID : 264330537121

Option 2 ID : 264330537122

Option 3 ID : 264330537119

Option 4 ID : 264330537120

Status : Answered

Chosen Option : 2

Q.3 Select the option that is related to the third number in the same way as the second number is related to the first number.
64 : 15 :: 88 : ?

- Ans
- 1. 21
 - 2. 7
 - 3. 12
 - 4. 31

Question Type : MCQ

Question ID : 264330137845

Option 1 ID : 264330539988

Option 2 ID : 264330539990

Option 3 ID : 264330539989

Option 4 ID : 264330539987

Status : Answered

Chosen Option : 1

Q.4 In a certain code language, 'CENTRE' is coded as '982748', 'DEVICE' is coded as '583098'. What is the code for 'DIRECT' in that code language?

- Ans
- 1. 506897
 - 2. 694879
 - 3. 504897
 - 4. 564897

Question Type : MCQ

Question ID : 264330138545

Option 1 ID : 264330542787

Option 2 ID : 264330542789


Option 3 ID : 264330542788

Option 4 ID : 264330542790

Status : Answered

Chosen Option : 3

Q.5 Which answer figure will complete the pattern in the question figure (rotation is not allowed)?

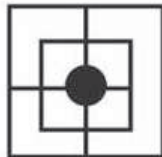


Ans

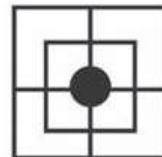
✗ 1.



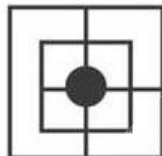
✗ 2.



✓ 3.



✗ 4.



Teachingninja.in

Question Type : MCQ

Question ID : 264330137129

Option 1 ID : 264330537162

Option 2 ID : 264330537160

Option 3 ID : 264330537161

Option 4 ID : 264330537159

Status : Answered

Chosen Option : 3

Q.6 After interchanging the given two signs, what will be the value of the given equation?

$$\times \text{ and } + ; 25 + 5 \times 35 \div 7 - 26$$

- Ans
- 1. 0
 - 2. 10
 - 3. 50
 - 4. 51

Question Type : MCQ
Question ID : 264330137125
Option 1 ID : 264330537144
Option 2 ID : 264330537146
Option 3 ID : 264330537143
Option 4 ID : 264330537145
Status : Answered
Chosen Option : 1

Q.7 Eight friends Anil, Kamal, Ram, Sanjay, Aakash, Vivek, Rahul and Ramu are sitting around a circular table facing towards the centre (not necessarily in the same order). Ram is to the immediate right of Anil. Anil is fourth to the right of Sanjay. Rahul is fourth to the left of Aakash. Aakash is second to the left of Anil. Ramu is second to the left of Kamal. Vivek is second to the right of Kamal. Who is second to the right of Vivek?

- Ans
- 1. Aakash
 - 2. Ram
 - 3. Ramu
 - 4. Vivek

Question Type : MCQ
Question ID : 264330137117
Option 1 ID : 264330537113
Option 2 ID : 264330537112
Option 3 ID : 264330537111
Option 4 ID : 264330537114
Status : Answered
Chosen Option : 2

Q.8 Number of letters in six words B1, B2, B3, B4, B5 and B6 are compared. Number of letters in B1 are least. Number of letters in B4 are more than B1 but less than B2. Number of letters in B6 are more than B3 and B5. Number of letters in B3 are more than B2. If number of letters in B5 are more than B3, then the number of letters in B4 are less than the number of letters of how many words?

- Ans
- 1. 4
 - 2. 2
 - 3. 1
 - 4. 3

Question Type : MCQ
Question ID : 264330137118
Option 1 ID : 264330537118
Option 2 ID : 264330537116
Option 3 ID : 264330537115
Option 4 ID : 264330537117
Status : Answered
Chosen Option : 1

Q.9 In a certain code language, 'HAND' is written as 'SZMW'. How will 'BODY' be written in that language?

- Ans**
- 1. YWLB
 - 2. YLWB
 - 3. BLWY
 - 4. YLWE

Question Type : MCQ
Question ID : 264330133700
Option 1 ID : 264330523824
Option 2 ID : 264330523823
Option 3 ID : 264330523825
Option 4 ID : 264330523826
Status : Answered
Chosen Option : 2

Q.10 A series is given with one term missing. Select the correct alternative from the given ones that will complete the series.

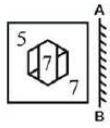
RAIR, UBLI, XCOT, ADRU, ?

- Ans**
- 1. DEVV
 - 2. DEUV
 - 3. DFUV
 - 4. DFFV

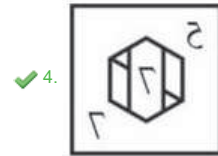
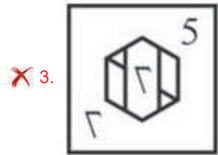
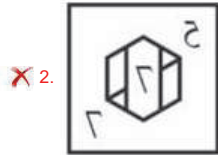
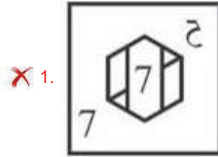
Question Type : MCQ
Question ID : 264330137108
Option 1 ID : 264330537078
Option 2 ID : 264330537077
Option 3 ID : 264330537076
Option 4 ID : 264330537075
Status : Answered
Chosen Option : 2



Q.11 If a mirror is placed on the line AB, then out of the option figures which figure will be the right image of the question figure?



Ans



Teachingninja.in

Question Type : MCQ

Question ID : 264330135635

Option 1 ID : 264330531440

Option 2 ID : 264330531441

Option 3 ID : 264330531442

Option 4 ID : 264330531439

Status : Answered

Chosen Option : 4

Q.12 Select the option in which the numbers shares the same relationship in set as that shared by the numbers in the given set.
(NOTE: Operations should be performed on the whole numbers, without breaking down the numbers into its constituent digits. E.g.13 – Operations on 13 such as adding /subtracting /multiplying etc. to 13 can be performed. Breaking down 13 into 1 and 3 and then performing mathematical operations on 1 and 3 is not allowed)

(10, 30, 90)

(20, 60, 180)

Ans 1. (30, 45, 60)

2. (30, 90, 270)

3. (30, 60, 90)

4. (30, 90, 310)

Question Type : **MCQ**

Question ID : **264330137124**

Option 1 ID : **264330537141**

Option 2 ID : **264330537140**

Option 3 ID : **264330537139**

Option 4 ID : **264330537142**

Status : **Answered**

Chosen Option : **2**

Q.13 In the following question below are given some statements followed by some conclusions based on those statements.
Taking the given statements to be true even if they seem to be at variance from commonly known facts. Read all the conclusions and then decide which of the given conclusion logically follows the given statements.

Statements:

I. Some B are T.

II. No K is B.

Conclusion:

I. No B is K.

II. Some T are B.

III. Some T are K.

Ans 1. Both conclusions I and II follows

2. All conclusion follows

3. Both conclusions I and III follows

4. Neither conclusion follows

Question Type : **MCQ**

Question ID : **264330137120**

Option 1 ID : **264330537123**

Option 2 ID : **264330537125**

Option 3 ID : **264330537124**

Option 4 ID : **264330537126**

Status : **Answered**

Chosen Option : **1**

Q.14 In a certain code language, 'SLDDER' is coded as 'PEBDJS'. What is the code for 'TALLER' in that code language?

- Ans
- 1. PDJLYT
 - 2. PEJLYT
 - 3. PEJLTY
 - 4. PEJMYT

Question Type : MCQ
Question ID : 264330137092
Option 1 ID : 264330537013
Option 2 ID : 264330537011
Option 3 ID : 264330537012
Option 4 ID : 264330537014
Status : Answered
Chosen Option : 2

Q.15 Which of the following numbers will replace the question mark (?) in the given series?

16, 21, 31, 46, 66, 91, ?

- Ans
- 1. 243
 - 2. 121
 - 3. 211
 - 4. 112

Question Type : MCQ
Question ID : 264330137843
Option 1 ID : 264330539980
Option 2 ID : 264330539979
Option 3 ID : 264330539982
Option 4 ID : 264330539981
Status : Answered
Chosen Option : 2

Q.16 Select the option that is related to the fifth term in the same way as the second term is related to the first term and fourth term is related to third term.

T3G : V16L :: R29A : T42F :: M43P : ?

- Ans
- 1. O56V
 - 2. P56V
 - 3. P56U
 - 4. O56U

Question Type : MCQ
Question ID : 264330137110
Option 1 ID : 264330537085
Option 2 ID : 264330537086
Option 3 ID : 264330537084
Option 4 ID : 264330537083
Status : Answered
Chosen Option : 4

Q.17 If A denotes 'addition', B denotes 'multiplication', C denotes 'subtraction', and D denotes 'division', then what will be the value of the following equation?
 $7 A (18 D 3) C 5 = ?$

- Ans**
- 1. 5
 - 2. 13
 - 3. 18
 - 4. 8

Question Type : **MCQ**
Question ID : **264330137870**
Option 1 ID : **264330540087**
Option 2 ID : **264330540088**
Option 3 ID : **264330540089**
Option 4 ID : **264330540090**
Status : **Answered**
Chosen Option : 4

Q.18 Words given on the left side of (:) are related with each other by some Logic/Rule/Relation. Select the missing word/word pair on the right side of (:) from the given alternatives based on the same Logic/Rule/Relation.

Cow : Herbivorous :: ?

- Ans**
- 1. Elephant : Herbivorous
 - 2. Goat : Carnivorous
 - 3. Sheep : Carnivorous
 - 4. Carnivorous : Lion

Question Type : **MCQ**
Question ID : **264330137111**
Option 1 ID : **264330537089**
Option 2 ID : **264330537088**
Option 3 ID : **264330537087**
Option 4 ID : **264330537090**
Status : **Answered**
Chosen Option : 1

Q.19 Eight friends Rahul, Ram, Ramesh, Sohan, Sahil, Anil, Sonu and Montu are sitting around a circular table facing towards the centre (not necessarily in the same order). Sahil is third to the left of Sonu. Sonu is to the immediate right of Ram. Ram is third to the left of Rahul. Montu is second to the right of Anil. Anil is not the immediate neighbour of Sahil. Sohan is not the immediate neighbour of Ram.

Who is third to the left of Ram?

- Ans**
- 1. Sohan
 - 2. Sahil
 - 3. Rahul
 - 4. Sonu

Question Type : **MCQ**
Question ID : **264330137116**
Option 1 ID : **264330537107**
Option 2 ID : **264330537109**
Option 3 ID : **264330537110**
Option 4 ID : **264330537108**
Status : **Answered**
Chosen Option : 1

Q.20 In the following question, select the missing number of the given series.

3, 9, 54, 648, 15552, ?

- Ans
- ✓ 1. 746496
 - ✗ 2. 124583
 - ✗ 3. 746946
 - ✗ 4. 78342

Question Type : MCQ
Question ID : 264330137122
Option 1 ID : 264330537134
Option 2 ID : 264330537132
Option 3 ID : 264330537133
Option 4 ID : 264330537131
Status : Answered
Chosen Option : 1

Section : General Awareness

Q.1 The feature of single citizenship in the Indian Constitution was borrowed from the Constitution of _____.

- Ans
- ✓ 1. Britain
 - ✗ 2. Canada
 - ✗ 3. United States of America
 - ✗ 4. Australia

Question Type : MCQ
Question ID : 264330137056
Option 1 ID : 264330536867
Option 2 ID : 264330536869
Option 3 ID : 264330536868
Option 4 ID : 264330536870
Status : Answered
Chosen Option : 3

Q.2 Which among the following is Phanerogams, flowering and seed-bearing plants?

- Ans
- ✓ 1. Gymnosperms
 - ✗ 2. Pteridophyta
 - ✗ 3. Bryophyta
 - ✗ 4. Thallophyta

Question Type : MCQ
Question ID : 264330137951
Option 1 ID : 264330540413
Option 2 ID : 264330540414
Option 3 ID : 264330540412
Option 4 ID : 264330540411
Status : Answered
Chosen Option : 3

Q.3 Cosmic snowballs of frozen gases, rock and dust that orbit the Sun are known as _____ .

- Ans
- 1. Meteors
 - 2. Star
 - 3. Meteorites
 - 4. Comets

Question Type : MCQ
Question ID : 264330137952
Option 1 ID : 264330540417
Option 2 ID : 264330540416
Option 3 ID : 264330540415
Option 4 ID : 264330540418
Status : Answered
Chosen Option : 4

Q.4 By October 2022, Prime Minister Narendra Modi has inaugurated _____ Pradhan Mantri Kisan Samruddhi Kendras.

- Ans
- 1. 600
 - 2. 300
 - 3. 400
 - 4. 500

Question Type : MCQ
Question ID : 264330137036
Option 1 ID : 264330536787
Option 2 ID : 264330536790
Option 3 ID : 264330536789
Option 4 ID : 264330536788
Status : Answered
Chosen Option : 1

Q.5 Which among the following is a ritual of cleaning the earth as well as worshipping the fourteen gods in Tripura, India?

- Ans
- 1. Kharchi Puja
 - 2. Tusu
 - 3. Durga Puja
 - 4. Bani

Question Type : MCQ
Question ID : 264330135487
Option 1 ID : 264330530858
Option 2 ID : 264330530857
Option 3 ID : 264330530855
Option 4 ID : 264330530856
Status : Answered
Chosen Option : 4

Q.6 Who is the author of the book titled 'The White Tiger'?

- Ans
- 1. Aravind Adiga
 - 2. Mulk Raj Anand
 - 3. Ravinder Singh
 - 4. Khushwant Singh

Question Type : MCQ
Question ID : 264330137016
Option 1 ID : 264330536708
Option 2 ID : 264330536710
Option 3 ID : 264330536707
Option 4 ID : 264330536709
Status : Answered
Chosen Option : 1

Q.7 Which Mughal ruler was overthrown by British and sent to exile in Burma, after the revolt of 1857?

- Ans
- 1. Bahadur Shah I
 - 2. Shah Jahan
 - 3. Alamgir II
 - 4. Bahadur Shah II

Question Type : MCQ
Question ID : 264330137958
Option 1 ID : 264330540440
Option 2 ID : 264330540439
Option 3 ID : 264330540441
Option 4 ID : 264330540442
Status : Answered
Chosen Option : 3

Q.8 Who among the following continues to be hailed as the empress of Bharatanatyam across the world?

- Ans
- 1. Shovana Narayan
 - 2. Mallika Sarabhai
 - 3. Tanjore Balasaraswati
 - 4. Kalamandalam Kalyanikutty Amma

Question Type : MCQ
Question ID : 264330137018
Option 1 ID : 264330536715
Option 2 ID : 264330536718
Option 3 ID : 264330536716
Option 4 ID : 264330536717
Status : Answered
Chosen Option : 2

Q.9 With which country does India share the longest border?

Ans 1. Bangladesh

2. China

3. Nepal

4. Pakistan

Question Type : MCQ

Question ID : 264330134043

Option 1 ID : 264330525197

Option 2 ID : 264330525198

Option 3 ID : 264330525196

Option 4 ID : 264330525195

Status : Answered

Chosen Option : 4

Q.10 Which among the following is a dance performed by the devotees during the ceremonial worship of Murugan the Hindu God of war?

Ans 1. Mayilattom

2. Yaksha

3. Kavadi attam

4. Kummi

Question Type : MCQ

Question ID : 264330137038

Option 1 ID : 264330536796

Option 2 ID : 264330536798

Option 3 ID : 264330536795

Option 4 ID : 264330536797

Status : Answered

Chosen Option : 2

Q.11 Cultivation of cotton requires how many frost-free days?

Ans 1. 140

2. 160

3. 210

4. 250

Question Type : MCQ

Question ID : 264330137028

Option 1 ID : 264330536755

Option 2 ID : 264330536758

Option 3 ID : 264330536756

Option 4 ID : 264330536757

Status : Not Answered

Chosen Option : --

Q.12 Which country hosted the World Championships in Athletics (18th) in 2022?

- Ans
- 1. Japan
 - 2. Qatar
 - 3. United States of America
 - 4. Colombia

Question Type : MCQ
Question ID : 264330137967
Option 1 ID : 264330540476
Option 2 ID : 264330540475
Option 3 ID : 264330540477
Option 4 ID : 264330540478
Status : Answered
Chosen Option : 1

Q.13 Which among the following Vitamins plays an essential role in vision?

- Ans
- 1. C
 - 2. B1
 - 3. D
 - 4. A

Question Type : MCQ
Question ID : 264330137042
Option 1 ID : 264330536813
Option 2 ID : 264330536812
Option 3 ID : 264330536814
Option 4 ID : 264330536811
Status : Answered
Chosen Option : 4

Q.14 Pandit Ravi Shankar was awarded India's highest civilian honour, the Bharat Ratna, in 1999. He played which of the following instruments?

- Ans
- 1. Bansuri
 - 2. Tabla
 - 3. Sitar
 - 4. Shehnai

Question Type : MCQ
Question ID : 264330137054
Option 1 ID : 264330536862
Option 2 ID : 264330536860
Option 3 ID : 264330536859
Option 4 ID : 264330536861
Status : Answered
Chosen Option : 4

Q.15 National income received by the households is called _____.

- Ans
- 1. domestic income
 - 2. professional income
 - 3. personal income
 - 4. disposable income

Question Type : MCQ
Question ID : 264330137021
Option 1 ID : 264330536730
Option 2 ID : 264330536729
Option 3 ID : 264330536728
Option 4 ID : 264330536727
Status : Answered
Chosen Option : 1

Q.16 Which among the following rivers does not flow into the Bay of Bengal?

- Ans
- 1. Krishna
 - 2. Yamuna
 - 3. Tapti
 - 4. Mahanadi

Question Type : MCQ
Question ID : 264330137046
Option 1 ID : 264330536827
Option 2 ID : 264330536829
Option 3 ID : 264330536830
Option 4 ID : 264330536828
Status : Answered
Chosen Option : 2

Q.17 As per the contents mentioned in Asokan inscriptions, how many major political centres were there in the Mauryan empire?

- Ans
- 1. five
 - 2. six
 - 3. four
 - 4. three

Question Type : MCQ
Question ID : 264330135497
Option 1 ID : 264330530896
Option 2 ID : 264330530897
Option 3 ID : 264330530895
Option 4 ID : 264330530898
Status : Answered
Chosen Option : 1

Q.18 Who among the following freedom fighters gave the famous quote "Give me blood, and I shall give you freedom!"?

- Ans
- 1. Sardar Vallabh Bhai Patel
 - 2. Bal Gangadhar Tilak
 - 3. Subhash Chandra Bose
 - 4. Lala Lajpat Rai

Question Type : MCQ
Question ID : 264330135500
Option 1 ID : 264330530908
Option 2 ID : 264330530909
Option 3 ID : 264330530907
Option 4 ID : 264330530910
Status : Answered
Chosen Option : 3

Q.19 The Fifth Khelo India Youth Games 2022 was organised in _____ in 2023.

- Ans
- 1. Uttar Pradesh
 - 2. Madhya Pradesh
 - 3. West Bengal
 - 4. Kerala

Question Type : MCQ
Question ID : 264330137058
Option 1 ID : 264330536876
Option 2 ID : 264330536875
Option 3 ID : 264330536877
Option 4 ID : 264330536878
Status : Answered
Chosen Option : 1

Q.20 Which among the following famous temples is located in Assam?

- Ans
- 1. Somnath Temple
 - 2. Shore Temple
 - 3. Mundeshwari Temple
 - 4. Kamakhya Temple

Question Type : MCQ
Question ID : 264330137973
Option 1 ID : 264330540501
Option 2 ID : 264330540499
Option 3 ID : 264330540500
Option 4 ID : 264330540502
Status : Answered
Chosen Option : 4

Q.21 When did the Chauri Chaura incident take place?

- Ans
- 1. 1901
 - 2. 1915
 - 3. 1922
 - 4. 1908

Question Type : MCQ
Question ID : 264330137984
Option 1 ID : 264330540546
Option 2 ID : 264330540544
Option 3 ID : 264330540543
Option 4 ID : 264330540545
Status : Answered
Chosen Option : 3

Q.22 Polyatomic positive ions often have common names ending with the suffix _____.

- Ans
- 1. -ic
 - 2. -ide
 - 3. -onium
 - 4. -ous

Question Type : MCQ
Question ID : 264330137949
Option 1 ID : 264330540406
Option 2 ID : 264330540405
Option 3 ID : 264330540403
Option 4 ID : 264330540404
Status : Not Answered
Chosen Option : --

Q.23 In India, census is conducted under the provisions of the Census Act _____.

- Ans
- 1. 1950
 - 2. 1952
 - 3. 1955
 - 4. 1948

Question Type : MCQ
Question ID : 264330138232
Option 1 ID : 264330541535
Option 2 ID : 264330541537
Option 3 ID : 264330541538
Option 4 ID : 264330541536
Status : Answered
Chosen Option : 3

Q.24 A maximum of _____ members can be nominated by the President of India to become the member of the Rajya Sabha.

- Ans**
- 1. 12
 - 2. 25
 - 3. 18
 - 4. 10

Question Type : **MCQ**
Question ID : **264330137057**
Option 1 ID : **264330536872**
Option 2 ID : **264330536874**
Option 3 ID : **264330536873**
Option 4 ID : **264330536871**
Status : **Answered**
Chosen Option : 1

Q.25 The Juvenile Justice (Care and Protection of Children) Amendment Bill, 2021 seeks to amend Juvenile Justice (Care and Protection of Children) Act, _____.

- Ans**
- 1. 2016
 - 2. 2013
 - 3. 2014
 - 4. 2015

Question Type : **MCQ**
Question ID : **264330137970**
Option 1 ID : **264330540490**
Option 2 ID : **264330540487**
Option 3 ID : **264330540488**
Option 4 ID : **264330540489**
Status : **Answered**
Chosen Option : 2

Section : English Language and Comprehension

Q.1 Choose the sentence with no spelling error.

- Ans**
- 1. Near death expereinces are stil near death.
 - 2. Near death expriences are still near death.
 - 3. Near death experiences are stil near deaath.
 - 4. Near death experiences are still near death.

Question Type : **MCQ**
Question ID : **264330135279**
Option 1 ID : **264330530031**
Option 2 ID : **264330530033**
Option 3 ID : **264330530034**
Option 4 ID : **264330530032**
Status : **Answered**
Chosen Option : 4

Q.2 Find the part of the given sentence that has an error in it. If there is no error, choose 'No error'.

Producing a different component was as simple such launching a new computer program.

- Ans
- 1. No error
 - 2. Producing a different component was
 - 3. as simple such launching
 - 4. a new computer program.

Question Type : MCQ
Question ID : 264330135310
Option 1 ID : 264330530154
Option 2 ID : 264330530151
Option 3 ID : 264330530152
Option 4 ID : 264330530153
Status : Answered
Chosen Option : 3

Q.3 Select the appropriate antonym for the underlined word.

The beauty of our landscape is important.

- Ans
- 1. glamour
 - 2. aesthetics
 - 3. nobility
 - 4. blemish

Question Type : MCQ
Question ID : 264330135327
Option 1 ID : 264330530216
Option 2 ID : 264330530215
Option 3 ID : 264330530217
Option 4 ID : 264330530218
Status : Answered
Chosen Option : 4

Q.4 Select the most appropriate option to substitute the bracketed segment in the given sentence. If there is no need to substitute it, select 'no substitution required'.

This commodity in clay-coloured material (can't be used neither as a table mat nor as a table napkin).

- Ans
- 1. can't be used either as a table mat or as a table napkin
 - 2. No substitution required
 - 3. can't be used neither as a table mat but as a table napkin
 - 4. can't be used neither as a table mat or as a table napkin

Question Type : MCQ
Question ID : 264330135772
Option 1 ID : 264330531969
Option 2 ID : 264330531970
Option 3 ID : 264330531967
Option 4 ID : 264330531968
Status : Answered
Chosen Option : 1

Q.5 Find the part of the given sentence that has an error in it. If there is no error, choose 'No error'.

People need to made changes in agriculture and land use.

- Ans
- 1. People need to
 - 2. agriculture and land use.
 - 3. No error
 - 4. made changes in

Question Type : MCQ
Question ID : 264330134824
Option 1 ID : 264330528235
Option 2 ID : 264330528237
Option 3 ID : 264330528238
Option 4 ID : 264330528236
Status : Answered
Chosen Option : 4

Q.6 Choose the word that means the same as the given word.

Easiness

- Ans
- 1. Gullibility
 - 2. Immunity
 - 3. Fraternity
 - 4. Indomitability

Question Type : MCQ
Question ID : 264330135299
Option 1 ID : 264330530110
Option 2 ID : 264330530109
Option 3 ID : 264330530108
Option 4 ID : 264330530107
Status : Answered
Chosen Option : 1

Q.7 Choose the incorrectly spelt word.

- Ans
- 1. Busy
 - 2. Plane
 - 3. Sponge
 - 4. Condision

Question Type : MCQ
Question ID : 264330135330
Option 1 ID : 264330530228
Option 2 ID : 264330530229
Option 3 ID : 264330530227
Option 4 ID : 264330530230
Status : Answered
Chosen Option : 4

Q.8 Select the most appropriate word for the given group of words.

Government by two rulers or authorities

- Ans
- 1. Monarchy
 - 2. Bureaucracy
 - 3. Diarchy
 - 4. Anarchy

Question Type : MCQ
Question ID : 264330136398
Option 1 ID : 264330534356
Option 2 ID : 264330534358
Option 3 ID : 264330534357
Option 4 ID : 264330534355
Status : Answered
Chosen Option : 3

Q.9 Choose the word that can substitute the given group of words.

A case in which the blade of a sword is kept

- Ans
- 1. Sheath
 - 2. Pantry
 - 3. Dyke
 - 4. Infirmary

Question Type : MCQ
Question ID : 264330135323
Option 1 ID : 264330530200
Option 2 ID : 264330530202
Option 3 ID : 264330530201
Option 4 ID : 264330530199
Status : Answered
Chosen Option : 1

Q.10 Identify the segment that contains a grammatical error. If there is no error, select 'No error'.

In another words, most of us / are made by our elders or by our / peers, but leaders are self-directed.

- Ans
- 1. peers, but leaders are self-directed.
 - 2. In another words, most of us
 - 3. are made by our elders or by our
 - 4. No error

Question Type : MCQ
Question ID : 264330136587
Option 1 ID : 264330535081
Option 2 ID : 264330535079
Option 3 ID : 264330535080
Option 4 ID : 264330535082
Status : Answered
Chosen Option : 4

Q.11 Improve the underlined part of the sentence. Choose 'No improvement' as an answer if the sentence is grammatically correct.
At age 25, she taken her vows and became a nun.

- Ans
- 1. take her vows
 - 2. No improvement
 - 3. took her vows
 - 4. take her vowed

Question Type : MCQ
Question ID : 264330134532
Option 1 ID : 264330527088
Option 2 ID : 264330527090
Option 3 ID : 264330527087
Option 4 ID : 264330527089
Status : Answered
Chosen Option : 3

Q.12 Select the word segment that substitutes (replaces) the bracketed word segment correctly and completes the sentence meaningfully. Select the option 'no correction required' if the sentence is correct as given.

They said that they (were understandings) his theory very well.

- Ans
- 1. understanding
 - 2. No correction required
 - 3. have understand
 - 4. understood

Question Type : MCQ
Question ID : 264330136590
Option 1 ID : 264330535092
Option 2 ID : 264330535094
Option 3 ID : 264330535093
Option 4 ID : 264330535091
Status : Answered
Chosen Option : 4

Q.13 Select the most appropriate meaning of the given idiom.

To sing a different tune

- Ans
- 1. To change the way one talks about something
 - 2. To brag about something
 - 3. To be able to handle a jolt
 - 4. To buy or sell something

Question Type : MCQ
Question ID : 264330136404
Option 1 ID : 264330534379
Option 2 ID : 264330534381
Option 3 ID : 264330534382
Option 4 ID : 264330534380
Status : Answered
Chosen Option : 1

Q.14 A sentence has been given with a blank to be filled with an appropriate option. Choose the correct alternative.

He was _____ in a pool of blood near a neighbour's house.

- Ans**
- 1. lain
 - 2. laying
 - 3. lying
 - 4. lied

Question Type : **MCQ**
Question ID : **264330135289**
Option 1 ID : **264330530072**
Option 2 ID : **264330530074**
Option 3 ID : **264330530073**
Option 4 ID : **264330530071**
Status : **Answered**
Chosen Option : **2**

Q.15 A sentence has been given with a blank to be filled with an appropriate option. Choose the correct alternative.

You have the power _____ the perspective of this nation.

- Ans**
- 1. changing
 - 2. to change
 - 3. change
 - 4. changed

Question Type : **MCQ**
Question ID : **264330135314**
Option 1 ID : **264330530169**
Option 2 ID : **264330530170**
Option 3 ID : **264330530168**
Option 4 ID : **264330530167**
Status : **Answered**
Chosen Option : **2**

Q.16 Select the most appropriate option to fill in the blank.

Strength training is useful as it avoids large increases in breathing rate and _____ muscle strength.

- Ans**
- 1. regresses
 - 2. distributes
 - 3. improves
 - 4. degrades

Question Type : **MCQ**
Question ID : **264330135333**
Option 1 ID : **264330530242**
Option 2 ID : **264330530241**
Option 3 ID : **264330530239**
Option 4 ID : **264330530240**
Status : **Answered**
Chosen Option : **3**

Q.17 Select the appropriate synonym for the underlined word.

A sudden gust of wind hits the window.

- Ans
- 1. blow
 - 2. cramp
 - 3. feel
 - 4. pump

Question Type : MCQ
Question ID : 264330135324
Option 1 ID : 264330530203
Option 2 ID : 264330530206
Option 3 ID : 264330530204
Option 4 ID : 264330530205
Status : Answered
Chosen Option : 1

Q.18 In the following question, out of the given four alternatives, select the alternative which best expresses the meaning of the Idiom/Phrase.

With a pinch of salt

- Ans
- 1. With due respect
 - 2. Nefariously
 - 3. Taken forcefully
 - 4. Doubt the truth or value of something

Question Type : MCQ
Question ID : 264330135329
Option 1 ID : 264330530224
Option 2 ID : 264330530225
Option 3 ID : 264330530226
Option 4 ID : 264330530223
Status : Answered
Chosen Option : 4

Q.19 Select the most appropriate option to fill in the blank.

He gave the horse enough room to _____ away from the wagon.

- Ans
- 1. woke
 - 2. stalk
 - 3. walk
 - 4. watch

Question Type : MCQ
Question ID : 264330135280
Option 1 ID : 264330530036
Option 2 ID : 264330530037
Option 3 ID : 264330530038
Option 4 ID : 264330530035
Status : Answered
Chosen Option : 3

Q.20 Select the most appropriate antonym of the given word.

Lethargy

- Ans
- 1. Refusal
 - 2. Attention
 - 3. Shield
 - 4. Existence

Question Type : MCQ
Question ID : 264330136527
Option 1 ID : 264330534849
Option 2 ID : 264330534848
Option 3 ID : 264330534850
Option 4 ID : 264330534847
Status : Answered
Chosen Option : 2

Comprehension:

In the following passage some words have been deleted. Fill in the blanks with the help of the alternatives given. Select the most appropriate option for each number.

By contrast, depression is a (1) _____, long-term downturn in economic activity in one or more (2) _____. A depression is a more (3) _____ downturn than a recession, which is seen by some economists as part of the modern business cycle. The latter refers to (4) _____ that occur around a long-term growth trend, and typically involve shifts over time between (5) _____ of relatively rapid economic growth (an expansion or boom), and periods of relative stagnation or decline (a contraction or recession).

SubQuestion No : 21

Q.21 Select the most appropriate option to fill in blank number 1.

- Ans
- 1. curtained
 - 2. abstained
 - 3. stained
 - 4. sustained

Question Type : MCQ
Question ID : 264330136518
Option 1 ID : 264330534813
Option 2 ID : 264330534812
Option 3 ID : 264330534811
Option 4 ID : 264330534814
Status : Answered
Chosen Option : 3

Comprehension:

In the following passage some words have been deleted. Fill in the blanks with the help of the alternatives given. Select the most appropriate option for each number.

By contrast, depression is a (1) _____, long-term downturn in economic activity in one or more (2) _____. A depression is a more (3) _____ downturn than a recession, which is seen by some economists as part of the modern business cycle. The latter refers to (4) _____ that occur around a long-term growth trend, and typically involve shifts over time between (5) _____ of relatively rapid economic growth (an expansion or boom), and periods of relative stagnation or decline (a contraction or recession).

SubQuestion No : 22

Q.22 Select the most appropriate option to fill in blank number 2.

- Ans
- 1. services
 - 2. autonomies
 - 3. economies
 - 4. astronomies

Question Type : **MCQ**
Question ID : **264330136519**
Option 1 ID : **264330534815**
Option 2 ID : **264330534818**
Option 3 ID : **264330534816**
Option 4 ID : **264330534817**
Status : **Answered**
Chosen Option : **3**

Comprehension:

In the following passage some words have been deleted. Fill in the blanks with the help of the alternatives given. Select the most appropriate option for each number.

By contrast, depression is a (1) _____, long-term downturn in economic activity in one or more (2) _____. A depression is a more (3) _____ downturn than a recession, which is seen by some economists as part of the modern business cycle. The latter refers to (4) _____ that occur around a long-term growth trend, and typically involve shifts over time between (5) _____ of relatively rapid economic growth (an expansion or boom), and periods of relative stagnation or decline (a contraction or recession).

SubQuestion No : 23

Q.23 Select the most appropriate option to fill in blank number 3.

- Ans
- 1. severe
 - 2. tamed
 - 3. feral
 - 4. simple

Question Type : **MCQ**
Question ID : **264330136520**
Option 1 ID : **264330534822**
Option 2 ID : **264330534819**
Option 3 ID : **264330534820**
Option 4 ID : **264330534821**
Status : **Answered**
Chosen Option : **1**

Comprehension:

In the following passage some words have been deleted. Fill in the blanks with the help of the alternatives given. Select the most appropriate option for each number.

By contrast, depression is a (1) _____, long-term downturn in economic activity in one or more (2) _____. A depression is a more (3) _____ downturn than a recession, which is seen by some economists as part of the modern business cycle. The latter refers to (4) _____ that occur around a long-term growth trend, and typically involve shifts over time between (5) _____ of relatively rapid economic growth (an expansion or boom), and periods of relative stagnation or decline (a contraction or recession).

SubQuestion No : 24

Q.24 Select the most appropriate option to fill in blank number 4.

- Ans
- 1. firmness
 - 2. stability
 - 3. fluctuations
 - 4. sustainability

Question Type : **MCQ**
Question ID : **264330136521**
Option 1 ID : **264330534823**
Option 2 ID : **264330534825**
Option 3 ID : **264330534826**
Option 4 ID : **264330534824**
Status : **Not Answered**
Chosen Option : --

Comprehension:

In the following passage some words have been deleted. Fill in the blanks with the help of the alternatives given. Select the most appropriate option for each number.

By contrast, depression is a (1) _____, long-term downturn in economic activity in one or more (2) _____. A depression is a more (3) _____ downturn than a recession, which is seen by some economists as part of the modern business cycle. The latter refers to (4) _____ that occur around a long-term growth trend, and typically involve shifts over time between (5) _____ of relatively rapid economic growth (an expansion or boom), and periods of relative stagnation or decline (a contraction or recession).

SubQuestion No : 25

Q.25 Select the most appropriate option to fill in blank number 5.

- Ans
- 1. perpetually
 - 2. periods
 - 3. perpetuity
 - 4. prods

Question Type : **MCQ**
Question ID : **264330136522**
Option 1 ID : **264330534829**
Option 2 ID : **264330534827**
Option 3 ID : **264330534828**
Option 4 ID : **264330534830**
Status : **Answered**
Chosen Option : **2**