



SSC MTS **SHIFT – 2 (16-05-2023)**

- ★ **Latest Govt Job updates**
- ★ **Private Job updates**
- ★ **Free Mock tests available**

Visit - teachingninja.in

Multi Tasking Non Technical Staff and Havaldar CBIC and CBN Examination 2022

Roll Number	
Candidate Name	
Venue Name	
Exam Date	16/05/2023
Exam Time	12:00 PM - 2:00 PM
Subject	MTS Non Tech Havaldar CBIC and CBN Examination 2022

Section : Numerical and Mathematical Ability

Q.1 Find the fourth proportion to 55, 60 and 33.

- Ans
- 1. 36
 - 2. 24
 - 3. 28
 - 4. 30

Question Type : MCQ
Question ID : 264330133765
Option 1 ID : 264330524083
Option 2 ID : 264330524084
Option 3 ID : 264330524085
Option 4 ID : 264330524086
Status : Answered
Chosen Option : 1

Q.2 The annual salary of Aniket increased from Rs. 1000000 to Rs. 1400000. What is the percent increase?

- Ans
- 1. 14%
 - 2. 40%
 - 3. 20%
 - 4. 4%

Question Type : MCQ
Question ID : 264330133585
Option 1 ID : 264330523366
Option 2 ID : 264330523364
Option 3 ID : 264330523365
Option 4 ID : 264330523363
Status : Answered
Chosen Option : 2

Q.3 If both length and breadth of a cuboid is increased by 12 percent, then by how much percent its height should be reduced so that the volume of the cuboid remains same?

- Ans
- 1. 14.56 percent
 - 2. 24.72 percent
 - 3. 20.28 percent
 - 4. 28.44 percent

Question Type : MCQ
Question ID : 264330137145
Option 1 ID : 264330537225
Option 2 ID : 264330537224
Option 3 ID : 264330537226
Option 4 ID : 264330537223
Status : Not Answered
Chosen Option : --

Q.4 Find the mean proportion of 64 and 144.

- Ans
- 1. 8
 - 2. 108
 - 3. 12
 - 4. 96

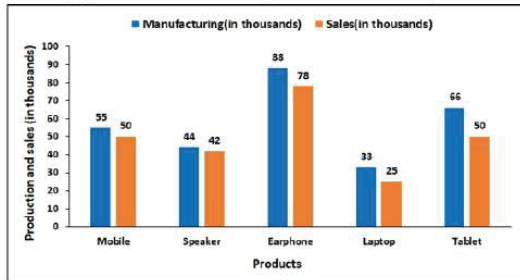
Question Type : MCQ
Question ID : 264330133764
Option 1 ID : 264330524080
Option 2 ID : 264330524082
Option 3 ID : 264330524079
Option 4 ID : 264330524081
Status : Answered
Chosen Option : 4

Q.5 Successive discounts of 33% and 30% are equivalent to what single discount?

- Ans
- 1. 60.4%
 - 2. 50.5%
 - 3. 45.9%
 - 4. 53.1%

Question Type : MCQ
Question ID : 264330133763
Option 1 ID : 264330524078
Option 2 ID : 264330524075
Option 3 ID : 264330524076
Option 4 ID : 264330524077
Status : Answered
Chosen Option : 3

Q.6 The bar graph shows the manufacturing and sales of different products. Find the number of unsold laptops.



- Ans
- 1. 9000
 - 2. 4000
 - 3. 8000
 - 4. 5000

Question Type : MCQ

Question ID : 264330133772

Option 1 ID : 264330524114

Option 2 ID : 264330524113

Option 3 ID : 264330524111

Option 4 ID : 264330524112

Status : Answered

Chosen Option : 3

Q.7 The table given below shows the marked price and discount percentage of five different articles.

Article	Marked price	Discount percent
P	300	20 percent
Q	600	25 percent
R	400	16 percent
S	700	22 percent
T	800	30 percent

$$\text{Selling Price} = \text{Marked Price} - \left(\frac{\text{Marked Price} \times \text{Discount}}{100} \right)$$

J1 = Total selling price of article P and R.

J2 = Total selling price of Q and T.

What is the value of (J2 - J1)?

- Ans
- 1. 530
 - 2. 434
 - 3. 448
 - 4. 532

Question Type : MCQ

Question ID : 264330137150

Option 1 ID : 264330537243

Option 2 ID : 264330537245

Option 3 ID : 264330537244

Option 4 ID : 264330537246

Status : Answered

Chosen Option : 2

Q.8 Nine times the area of a circle is same as the three times the area of a square. What is the ratio of the diameter of the circle and diagonal of the square?

- Ans
- 1. $\sqrt{2}:\sqrt{3\pi}$
 - 2. $2:\sqrt{3\pi}$
 - 3. $2:3\pi$
 - 4. $\sqrt{5}:\sqrt{7\pi}$

Question Type : MCQ
Question ID : 264330139010
Option 1 ID : 264330544647
Option 2 ID : 264330544650
Option 3 ID : 264330544648
Option 4 ID : 264330544649
Status : Answered
Chosen Option : 2

Q.9 A man drives his car at a speed of 50 km/hr for 2 hours and then decides to slow down to 40 km/hr till the end of the journey. If his average speed for the journey was 44 km/hr, then for how much time he drives his car at speed 40 km/hr?

- Ans
- 1. 2 hours
 - 2. 1 hour
 - 3. 3 hours
 - 4. 4 hours

Question Type : MCQ
Question ID : 264330138040
Option 1 ID : 264330540768
Option 2 ID : 264330540767
Option 3 ID : 264330540769
Option 4 ID : 264330540770
Status : Not Answered
Chosen Option : --

Q.10 The average of 21 numbers is 60. If each number is increased by 20, then find the number by which the average is increased.

- Ans
- 1. 12
 - 2. 18
 - 3. 15
 - 4. 20

Question Type : MCQ
Question ID : 264330133758
Option 1 ID : 264330524056
Option 2 ID : 264330524057
Option 3 ID : 264330524055
Option 4 ID : 264330524058
Status : Answered
Chosen Option : 4

Q.11 By Selling 35 articles, a shopkeeper gains the selling price of 15 articles. Find his gain percentage.

- Ans
- 1. 88%
 - 2. 40%
 - 3. 75%
 - 4. 60%

Question Type : MCQ
Question ID : 264330135137
Option 1 ID : 264330529485
Option 2 ID : 264330529486
Option 3 ID : 264330529483
Option 4 ID : 264330529484
Status : Answered
Chosen Option : 3

Q.12 A sum of Rs. 21850 amounts to Rs. 28623.50 in 5 years at the rate of simple interest. The rate percent is:

- Ans
- 1. 7.2% p.a.
 - 2. 4.8% p.a.
 - 3. 6.2% p.a.
 - 4. 6.8% p.a.

Question Type : MCQ
Question ID : 264330138736
Option 1 ID : 264330543554
Option 2 ID : 264330543551
Option 3 ID : 264330543553
Option 4 ID : 264330543552
Status : Answered
Chosen Option : 3

Q.13 Find the value of $6^2 + 4^2 - 20$ of $2 + 40$.

- Ans
- 1. 50
 - 2. 54
 - 3. 56
 - 4. 52

Question Type : MCQ
Question ID : 264330133756
Option 1 ID : 264330524049
Option 2 ID : 264330524048
Option 3 ID : 264330524050
Option 4 ID : 264330524047
Status : Answered
Chosen Option : 4

Q.14 A, B and C together can complete a work in 5 days. A and B together can complete the same work in 6 days. C alone can finish the same work in how many days?

- Ans
- 1. 60 days
 - 2. 30 days
 - 3. 15 days
 - 4. 20 days

Question Type : **MCQ**
Question ID : **264330137130**
Option 1 ID : **264330537166**
Option 2 ID : **264330537165**
Option 3 ID : **264330537164**
Option 4 ID : **264330537163**
Status : **Answered**
Chosen Option : 2

Q.15 The ratio of time taken by A and B to cover a certain distance is 17:19. Find the ratio of their respective speed.

- Ans
- 1. 11:15
 - 2. 15:19
 - 3. 17:15
 - 4. 19:17

Question Type : **MCQ**
Question ID : **264330133768**
Option 1 ID : **264330524098**
Option 2 ID : **264330524096**
Option 3 ID : **264330524095**
Option 4 ID : **264330524097**
Status : **Answered**
Chosen Option : 4

Q.16 How many litre of water can a hemispherical bowl of diameter 21 m hold? ($1\text{m}^3 = 1000$ litre)

- Ans
- 1. 2100000 litre
 - 2. 2425500 litre
 - 3. 2322500 litre
 - 4. 2250500 litre

Question Type : **MCQ**
Question ID : **264330135128**
Option 1 ID : **264330529447**
Option 2 ID : **264330529449**
Option 3 ID : **264330529450**
Option 4 ID : **264330529448**
Status : **Not Answered**
Chosen Option : --

Q.17 In what ratio must tea at Rs. 58 per kg be mixed with tea at Rs. 64 per kg so that the mixture must be worth Rs. 60 per kg?

- Ans
- 1. 2:3
 - 2. 2:1
 - 3. 1:2
 - 4. 3:2

Question Type : MCQ
Question ID : 264330138039
Option 1 ID : 264330540766
Option 2 ID : 264330540763
Option 3 ID : 264330540765
Option 4 ID : 264330540764
Status : Answered
Chosen Option : 2

Q.18 What is the value of $49 \times 64 \div 56 + 45 \div 5 + 25 \times 5 + 75 \div 3 + 8 \times 3$?

- Ans
- 1. 225
 - 2. 214
 - 3. 239
 - 4. 250

Question Type : MCQ
Question ID : 264330137149
Option 1 ID : 264330537240
Option 2 ID : 264330537239
Option 3 ID : 264330537241
Option 4 ID : 264330537242
Status : Answered
Chosen Option : 3

Q.19 What is the value of $\frac{39}{25} \div \frac{13}{5} + \frac{33}{5} \times \frac{4}{11}$?

- Ans
- 1. 3
 - 2. 12
 - 3. 5
 - 4. 15

Question Type : MCQ
Question ID : 264330137641
Option 1 ID : 264330539171
Option 2 ID : 264330539174
Option 3 ID : 264330539172
Option 4 ID : 264330539173
Status : Answered
Chosen Option : 1

Q.20 After selling 4% of a quantity of sugar, 6 kg of sugar remains. Find the total quantity of sugar.

- Ans**
- 1. 7 kg
 - 2. 6.25 kg
 - 3. 11.11 kg
 - 4. 5.25 kg

Question Type : **MCQ**
Question ID : **264330133762**
Option 1 ID : **264330524074**
Option 2 ID : **264330524072**
Option 3 ID : **264330524073**
Option 4 ID : **264330524071**
Status : **Answered**
Chosen Option : **2**

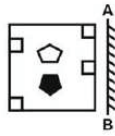
Section : Reasoning Ability and Problem Solving

Q.1 Which of the following letter cluster will replace the question mark (?) in the given series?
UX, YB, CF, GI, ?

- Ans**
- 1. KN
 - 2. LN
 - 3. LO
 - 4. KM

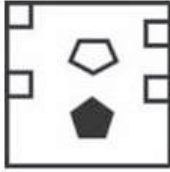
Question Type : **MCQ**
Question ID : **264330133466**
Option 1 ID : **264330522895**
Option 2 ID : **264330522897**
Option 3 ID : **264330522898**
Option 4 ID : **264330522896**
Status : **Answered**
Chosen Option : **1**

Q.2 If a mirror is placed on the line AB, then out of the option figures which figure will be the right image of the question figure?

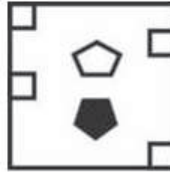


Ans

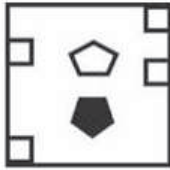
✗ 1.



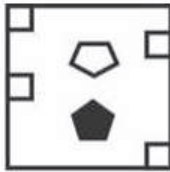
✓ 2.



✗ 3.



✗ 4.



Teachingninja.in

Question Type : **MCQ**
 Question ID : **264330137106**
 Option 1 ID : **264330537068**
 Option 2 ID : **264330537069**
 Option 3 ID : **264330537067**
 Option 4 ID : **264330537070**
 Status : **Answered**
 Chosen Option : **2**

Q.3 In a certain code language, 'CAUGHT' is written as 'EYWEJR' and 'ENGINE' is written as 'GLIGPC'. How will 'WORKER' be written in that language?

Ans

✓ 1. **YMTIGP**

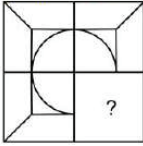
✗ 2. **YMTJIP**

✗ 3. **YMTKGP**

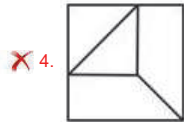
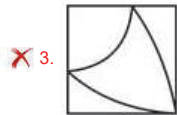
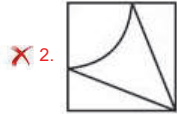
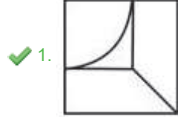
✗ 4. **YMTIHP**

Question Type : **MCQ**
 Question ID : **264330137348**
 Option 1 ID : **264330538020**
 Option 2 ID : **264330538022**
 Option 3 ID : **264330538019**
 Option 4 ID : **264330538021**
 Status : **Answered**
 Chosen Option : **1**

Q.4 Select the option figure that will replace the question mark (?) in the figure given below to complete the pattern.
(rotation is not allowed)



Ans



Question Type : **MCQ**

Question ID : **264330133485**

Option 1 ID : **264330522973**

Option 2 ID : **264330522972**

Option 3 ID : **264330522971**

Option 4 ID : **264330522974**

Status : **Answered**

Chosen Option : **1**

Q.5 Select the set in which the numbers are related in the same way as are the numbers of the following sets.(NOTE :
Operations should be performed on the whole numbers, without breaking down the numbers into its constituent digits.
E.g 13 – Operations on 13 such as adding /subtracting /multiplying etc. to 13 can be performed. Breaking down 13 into
1 and 3 and then performing mathematical operations on 1 and 3 is not allowed)
(7, 49, 343)
(8, 64, 512)

Ans ✗ 1. (6, 36, 206)

✗ 2. (5, 25, 225)

✗ 3. (11, 121, 1221)

✓ 4. (9, 81, 729)

Question Type : **MCQ**

Question ID : **264330133480**

Option 1 ID : **264330522951**

Option 2 ID : **264330522952**

Option 3 ID : **264330522954**

Option 4 ID : **264330522953**

Status : **Answered**

Chosen Option : **4**

Q.6 Select the option that is related to the third number in the same way as the second number is related to the first number.
346 : 175 :: 250 : ?

- Ans**
- 1. 213
 - 2. 127
 - 3. 174
 - 4. 271

Question Type : **MCQ**
Question ID : **264330133333**
Option 1 ID : **264330522370**
Option 2 ID : **264330522368**
Option 3 ID : **264330522369**
Option 4 ID : **264330522367**
Status : **Not Answered**
Chosen Option : --

Q.7 Two Statements are given followed by two conclusions numbered I and II. Assuming the statements to be true, even if they seem to be at variance with commonly known facts, decide which of the conclusions logically follow(s) from the statements.

Statements:

All trolleys are baskets.

Some briefcase are trolleys.

Conclusions:

I. All briefcase are baskets.

II. Some basket are briefcases.

- Ans**
- 1. Only conclusion I follows.
 - 2. Only conclusion II follows.
 - 3. Neither conclusion I nor II follow.
 - 4. Both conclusions I and II follow.

Question Type : **MCQ**
Question ID : **264330133475**
Option 1 ID : **264330522931**
Option 2 ID : **264330522932**
Option 3 ID : **264330522934**
Option 4 ID : **264330522933**
Status : **Answered**
Chosen Option : **2**



Q.8 By Interchanging the given two numbers which of the following equation will be correct?

7 and 4

I. $7 \times 8 + 4 - 9 + 3 = 30$

II. $9 + 4 \times 8 + 2 - 7 = 33$

Ans 1. Neither I nor II

2. Only II

3. Both I and II

4. Only I

Question Type : MCQ

Question ID : 264330138599

Option 1 ID : 264330543006

Option 2 ID : 264330543004

Option 3 ID : 264330543005

Option 4 ID : 264330543003

Status : Answered

Chosen Option : 2

Q.9 Which of the following numbers will replace the question mark (?) in the given series?

5, 7, 11, 13, 17, 19, 23, 25, ?

Ans 1. 39

2. 56

3. 42

4. 29

Question Type : MCQ

Question ID : 264330133331

Option 1 ID : 264330522360

Option 2 ID : 264330522361

Option 3 ID : 264330522359

Option 4 ID : 264330522362

Status : Answered

Chosen Option : 4

Q.10 Five students A, M, C, Y and G are sitting around a circular table facing outside the center not necessarily in the same order. M sits to the immediate left of A and to the immediate right of G. Y is not an immediate neighbour of A. Who sits second left of G?

Ans 1. Y

2. M

3. A

4. C

Question Type : MCQ

Question ID : 264330133472

Option 1 ID : 264330522922

Option 2 ID : 264330522921

Option 3 ID : 264330522919

Option 4 ID : 264330522920

Status : Answered

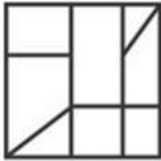
Chosen Option : 4

Q.11 Select the option figure in which the given figure is embedded. (rotation is NOT allowed)

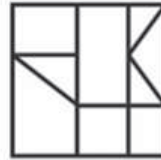


Ans

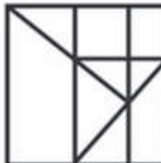
✗ 1.



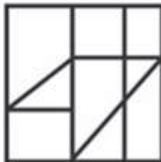
✓ 2.



✗ 3.



✗ 4.



Teachingninja.in

Question Type : MCQ

Question ID : 264330137105

Option 1 ID : 264330537064

Option 2 ID : 264330537063

Option 3 ID : 264330537066

Option 4 ID : 264330537065

Status : Answered

Chosen Option : 2

Q.12 In a certain code language, 'JACK' is written as 'LCET'. How will 'FURO' be written in that language?

Ans ✗ 1. HMTW

✓ 2. HWTM

✗ 3. HTWM

✗ 4. HTMW

Question Type : MCQ

Question ID : 264330135004

Option 1 ID : 264330528953

Option 2 ID : 264330528951

Option 3 ID : 264330528952

Option 4 ID : 264330528954

Status : Answered

Chosen Option : 2

Q.13 उस विकल्प को चुनिए जो तीसरे शब्द से ठीक उसी तरह संबंधित है जिस तरह दूसरा शब्द पहले शब्द से संबंधित है।
कसाई : माँस :: विमान-यात्रक : ?

- Ans
- 1. रूपरेखा
 - 2. विमान
 - 3. बेचना
 - 4. उपचार

Question Type : MCQ
Question ID : 264330133468
Option 1 ID : 264330522904
Option 2 ID : 264330522903
Option 3 ID : 264330522906
Option 4 ID : 264330522905
Status : Answered
Chosen Option : 2

Q.14 Five friends Piyush, Nikhil, Rahul, Saksham and Tarun have different heights. Tarun is taller than only three other friends. Rahul is tallest among all friends. Nikhil is taller than only one person. Only two persons are taller than Piyush. Who is the shortest among all the friends?

- Ans
- 1. Saksham
 - 2. Nikhil
 - 3. Piyush
 - 4. Tarun

Question Type : MCQ
Question ID : 264330133474
Option 1 ID : 264330522930
Option 2 ID : 264330522928
Option 3 ID : 264330522927
Option 4 ID : 264330522929
Status : Answered
Chosen Option : 1

Q.15 Two Statements are given followed by two conclusions numbered I and II. Assuming the statements to be true, even if they seem to be at variance with commonly known facts, decide which of the conclusions logically follow(s) from the statements.

Statements:

Only a few Adults are Plumbers.

Only a few Plumbers are Taxi drivers.

Conclusions:

I. Some Adults are Taxi drivers.

II. All Plumbers can never be Taxi drivers.

- Ans
- 1. Neither conclusion I nor II follow.
 - 2. Only conclusion I follows.
 - 3. Only conclusion II follows.
 - 4. Both conclusions I and II follow.

Question Type : MCQ
Question ID : 264330133476
Option 1 ID : 264330522938
Option 2 ID : 264330522935
Option 3 ID : 264330522936
Option 4 ID : 264330522937
Status : Answered
Chosen Option : 3

Q.16 Which of the following numbers will replace the question mark (?) in the given series?

58, 62, 71, 87, 112, ?

- Ans
- 1. 158
 - 2. 148
 - 3. 138
 - 4. 140

Question Type : MCQ
Question ID : 264330133478
Option 1 ID : 264330522945
Option 2 ID : 264330522944
Option 3 ID : 264330522943
Option 4 ID : 264330522946
Status : Answered
Chosen Option : 2

Q.17 Which of the mathematical signs should be interchanged in the below equation to make it mathematically correct?

$45 - 6 + 108 \div 12 \times 14 = 5$

- Ans
- 1. \div and $-$
 - 2. \times and $-$
 - 3. $+$ and \times
 - 4. $+$ and $-$

Question Type : MCQ
Question ID : 264330133481
Option 1 ID : 264330522956
Option 2 ID : 264330522957
Option 3 ID : 264330522955
Option 4 ID : 264330522958
Status : Answered
Chosen Option : 3

Q.18 In a certain code language, '3152' is written as 'FBJD' and '5476' is written as 'JHNL'. How will '2231' be written in that language?

- Ans
- 1. BDDF
 - 2. EFDB
 - 3. DDFB
 - 4. FBED

Question Type : MCQ
Question ID : 264330133389
Option 1 ID : 264330522589
Option 2 ID : 264330522587
Option 3 ID : 264330522588
Option 4 ID : 264330522590
Status : Answered
Chosen Option : 3

Q.19 In a certain code language, 'CAGE' is written as '92' and 'BURN' is written as '53'. How will 'TORCH' be written in that language?

- Ans**
- 1. 98
 - 2. 65
 - 3. 82
 - 4. 71

Question Type : **MCQ**
Question ID : **264330137544**
Option 1 ID : **264330538783**
Option 2 ID : **264330538786**
Option 3 ID : **264330538784**
Option 4 ID : **264330538785**
Status : **Not Answered**
Chosen Option : --

Q.20 Select the option that is related to the third word in the same way as the second word is related to the first word.
Cataract : Eyes :: Psoriasis : ?

- Ans**
- 1. Leg
 - 2. Hair
 - 3. Ear
 - 4. Skin

Question Type : **MCQ**
Question ID : **264330133467**
Option 1 ID : **264330522900**
Option 2 ID : **264330522901**
Option 3 ID : **264330522899**
Option 4 ID : **264330522902**
Status : **Answered**
Chosen Option : 3

Section : General Awareness

Q.1 In the mid-eighth century, Dantidurga, a Rashtrakuta chief, overthrew his Chalukya overlord and performed a ritual literally called a _____ .

- Ans**
- 1. Prayer meet
 - 2. Golden womb
 - 3. Horse ride
 - 4. Subsidiary alliance

Question Type : **MCQ**
Question ID : **264330137698**
Option 1 ID : **264330539402**
Option 2 ID : **264330539400**
Option 3 ID : **264330539401**
Option 4 ID : **264330539399**
Status : **Answered**
Chosen Option : 2

Q.2 Who was the first Indian actress to receive the Padma Shri Award?

- Ans
- 1. Nargis Dutt
 - 2. Asha Parekh
 - 3. Madhubala
 - 4. Devika Rani

Question Type : MCQ
Question ID : 264330133949
Option 1 ID : 264330524821
Option 2 ID : 264330524820
Option 3 ID : 264330524822
Option 4 ID : 264330524819
Status : Not Answered
Chosen Option : --

Q.3 The percentage of eligible voters who cast their votes in an election is termed as _____.

- Ans
- 1. Quorum
 - 2. Turnout
 - 3. Veto
 - 4. Constituency

Question Type : MCQ
Question ID : 264330138660
Option 1 ID : 264330543250
Option 2 ID : 264330543247
Option 3 ID : 264330543248
Option 4 ID : 264330543249
Status : Answered
Chosen Option : 2

Q.4 Who was the last tirthankara of the Jainas?

- Ans
- 1. Vardhamana Mahavira
 - 2. Chandraprabha
 - 3. Rishabhanatha
 - 4. Padmaprabha

Question Type : MCQ
Question ID : 264330137032
Option 1 ID : 264330536772
Option 2 ID : 264330536773
Option 3 ID : 264330536771
Option 4 ID : 264330536774
Status : Answered
Chosen Option : 1

Q.5 As of 11 August 2022, who is the Chairman of Rajya Sabha?

Ans 1. Adhir Ranjan Chowdhury

2. Jagdeep Dhankhar

3. Narendra Modi

4. Amit Shah

Question Type : MCQ
Question ID : 264330133952
Option 1 ID : 264330524833
Option 2 ID : 264330524832
Option 3 ID : 264330524834
Option 4 ID : 264330524831
Status : Answered
Chosen Option : 2

Q.6 Which among the following is an example of Phylum Mammalia of Animal Kingdom?

Ans 1. Crocodile

2. Hen

3. Rat

4. Pigeon

Question Type : MCQ
Question ID : 264330133937
Option 1 ID : 264330524773
Option 2 ID : 264330524772
Option 3 ID : 264330524771
Option 4 ID : 264330524774
Status : Answered
Chosen Option : 3

Q.7 Which Department of Government of India launched 'One Health' pilot project in April 2022?

Ans 1. Department of Animal Husbandry and Dairying

2. Department of Consumer Affairs

3. Department of Information Technology

4. Department of Commerce

Question Type : MCQ
Question ID : 264330133931
Option 1 ID : 264330524748
Option 2 ID : 264330524747
Option 3 ID : 264330524749
Option 4 ID : 264330524750
Status : Answered
Chosen Option : 2

Q.8 Indian constitution borrowed cabinet form of governance from _____.

Ans 1. United Kingdom

2. France

3. South Africa

4. Australia

Question Type : MCQ

Question ID : 264330133951

Option 1 ID : 264330524828

Option 2 ID : 264330524827

Option 3 ID : 264330524830

Option 4 ID : 264330524829

Status : Answered

Chosen Option : 1

Q.9 Which of the following is not an environment function?

Ans 1. Accumulates waste

2. Sustains life

3. Provides the supply of resources

4. Enhances the quality of life

Question Type : MCQ

Question ID : 264330133655

Option 1 ID : 264330523645

Option 2 ID : 264330523644

Option 3 ID : 264330523643

Option 4 ID : 264330523646

Status : Answered

Chosen Option : 1

Q.10 Which of the following crop is known as "Golden Fibre" of Bengal?

Ans 1. Soyabean

2. Corn

3. Jute

4. Rice

Question Type : MCQ

Question ID : 264330134678

Option 1 ID : 264330527668

Option 2 ID : 264330527669

Option 3 ID : 264330527670

Option 4 ID : 264330527667

Status : Answered

Chosen Option : 3

Q.11 Meena talks about an example of sedimentary rock. Which one of the following can it be?

- Ans
- 1. Granite
 - 2. Marble
 - 3. Sandstone
 - 4. Basalt

Question Type : MCQ
Question ID : 264330133656
Option 1 ID : 264330523650
Option 2 ID : 264330523649
Option 3 ID : 264330523648
Option 4 ID : 264330523647
Status : Answered
Chosen Option : 3

Q.12 Pongal, the four day Harvest festival is generally celebrated in _____.

- Ans
- 1. North – East India
 - 2. North India
 - 3. Eastern India
 - 4. South India

Question Type : MCQ
Question ID : 264330137012
Option 1 ID : 264330536693
Option 2 ID : 264330536691
Option 3 ID : 264330536694
Option 4 ID : 264330536692
Status : Answered
Chosen Option : 4

Q.13 Who wrote the Panchatantra, a collection of fables?

- Ans
- 1. Rumi
 - 2. Amar Singh
 - 3. Jaya Dev
 - 4. Vishnu Sharma

Question Type : MCQ
Question ID : 264330134686
Option 1 ID : 264330527699
Option 2 ID : 264330527701
Option 3 ID : 264330527700
Option 4 ID : 264330527702
Status : Not Answered
Chosen Option : --

Q.14 Who defeated Prithviraj Chauhan in the second battle of Tarain in 1192 AD?

- Ans
- 1. Iltutmish
 - 2. Babur
 - 3. Alauddin Khilji
 - 4. Muhammad Ghori

Question Type : MCQ
Question ID : 264330133662
Option 1 ID : 264330523673
Option 2 ID : 264330523671
Option 3 ID : 264330523674
Option 4 ID : 264330523672
Status : Answered
Chosen Option : 4

Q.15 Tata Iron and steel company (TISCO) began producing steel in _____.

- Ans
- 1. 1912
 - 2. 1914
 - 3. 1916
 - 4. 1910

Question Type : MCQ
Question ID : 264330138672
Option 1 ID : 264330543296
Option 2 ID : 264330543297
Option 3 ID : 264330543298
Option 4 ID : 264330543295
Status : Not Answered
Chosen Option : --

Q.16 Which among the following is a folk dance of Jammu and Kashmir, India?

- Ans
- 1. Kathak
 - 2. Bihu
 - 3. Bhangra
 - 4. Rouf

Question Type : MCQ
Question ID : 264330133933
Option 1 ID : 264330524755
Option 2 ID : 264330524758
Option 3 ID : 264330524757
Option 4 ID : 264330524756
Status : Answered
Chosen Option : 4

Q.17 Which sport is played between two teams each made up of eleven players?

- Ans
- 1. Swimming
 - 2. Basketball
 - 3. Cricket
 - 4. Table tennis

Question Type : MCQ
Question ID : 264330133671
Option 1 ID : 264330523707
Option 2 ID : 264330523709
Option 3 ID : 264330523708
Option 4 ID : 264330523710
Status : Answered
Chosen Option : 3

Q.18 The Indian classical dancer Sonal Mansingh was honoured with which of the following awards?

- Ans
- 1. Padma Bhushan and Padma Shri
 - 2. Padma Bhushan and Bharat Ratna
 - 3. Padma Bhushan and Padma Vibhushan
 - 4. Padma Vibhushan and Padma Shri

Question Type : MCQ
Question ID : 264330134688
Option 1 ID : 264330527707
Option 2 ID : 264330527710
Option 3 ID : 264330527708
Option 4 ID : 264330527709
Status : Answered
Chosen Option : 1

Q.19 Which river of India drains into Bay of Bengal?

- Ans
- 1. Tapi
 - 2. Godavari
 - 3. Narmada
 - 4. Mahi

Question Type : MCQ
Question ID : 264330133941
Option 1 ID : 264330524787
Option 2 ID : 264330524790
Option 3 ID : 264330524789
Option 4 ID : 264330524788
Status : Not Answered
Chosen Option : --

Q.20 GDP is an indicator of a country's economy. What does 'D' in GDP stand for?

- Ans
- 1. Development
 - 2. Domestic
 - 3. Dividend
 - 4. Deficit

Question Type : MCQ
Question ID : 264330134693
Option 1 ID : 264330527727
Option 2 ID : 264330527730
Option 3 ID : 264330527728
Option 4 ID : 264330527729
Status : Answered
Chosen Option : 2

Q.21 In cricket, hitting the ball to the boundary along the ground is _____ runs.

- Ans
- 1. 2
 - 2. 1
 - 3. 4
 - 4. 6

Question Type : MCQ
Question ID : 264330133953
Option 1 ID : 264330524836
Option 2 ID : 264330524835
Option 3 ID : 264330524837
Option 4 ID : 264330524838
Status : Answered
Chosen Option : 3

Q.22 The census of India is conducted at an interval of _____ .

- Ans
- 1. 2 years
 - 2. 7 years
 - 3. 10 years
 - 4. 5 years

Question Type : MCQ
Question ID : 264330134067
Option 1 ID : 264330525294
Option 2 ID : 264330525292
Option 3 ID : 264330525291
Option 4 ID : 264330525293
Status : Answered
Chosen Option : 3

Q.23 The rock – cave temple of _____ is the largest monolithic structure in the world.

- Ans
- 1. Udaygiri
 - 2. Ajanta
 - 3. Ellora
 - 4. Badami

Question Type : MCQ
Question ID : 264330138651
Option 1 ID : 264330543213
Option 2 ID : 264330543214
Option 3 ID : 264330543211
Option 4 ID : 264330543212
Status : Answered
Chosen Option : 3

Q.24 Lala Lajpat Rai was an active member of which organisation?

- Ans
- 1. Arya Samaj
 - 2. Brahmo Samaj
 - 3. Brahmo Sabha
 - 4. Prathana Sabha

Question Type : MCQ
Question ID : 264330137035
Option 1 ID : 264330536785
Option 2 ID : 264330536783
Option 3 ID : 264330536786
Option 4 ID : 264330536784
Status : Not Answered
Chosen Option : --

Q.25 What is the chemical name for ionic compound $MgCl_2$?

- Ans
- 1. Sodium iodide
 - 2. Manganese chloride
 - 3. Cesium fluoride
 - 4. Magnesium chloride

Question Type : MCQ
Question ID : 264330133653
Option 1 ID : 264330523637
Option 2 ID : 264330523635
Option 3 ID : 264330523636
Option 4 ID : 264330523638
Status : Answered
Chosen Option : 4

Section : English Language and Comprehension

Q.1 A sentence has been given with a blank to be filled with an appropriate option. Choose the correct alternative.

The school was _____ than a mile from their home.

- Ans
- 1. most
 - 2. much
 - 3. more
 - 4. many

Question Type : MCQ
Question ID : 264330134404
Option 1 ID : 264330526597
Option 2 ID : 264330526596
Option 3 ID : 264330526595
Option 4 ID : 264330526598
Status : Answered
Chosen Option : 3

Q.2 A sentence has been given with a blank to be filled with an appropriate option. Choose the correct alternative.

_____ from humans, lions are the key natural predators of elephants.

- Ans
- 1. Rather
 - 2. Along
 - 3. Aside
 - 4. Beside

Question Type : MCQ
Question ID : 264330135315
Option 1 ID : 264330530174
Option 2 ID : 264330530171
Option 3 ID : 264330530172
Option 4 ID : 264330530173
Status : Answered
Chosen Option : 4

Q.3 Find the part of the given sentence that has an error in it. If there is no error, choose 'No error'.

India's claim to be a world leader in pharmaceuticals are heavily compromised.

- Ans
- 1. are heavily compromised.
 - 2. India's claim to be a
 - 3. No error
 - 4. world leader in pharmaceuticals

Question Type : MCQ
Question ID : 264330134400
Option 1 ID : 264330526581
Option 2 ID : 264330526579
Option 3 ID : 264330526582
Option 4 ID : 264330526580
Status : Answered
Chosen Option : 1

Q.4 Select the appropriate antonym for the underlined word.
He says we are poor now.

- Ans
- 1. indigent
 - 2. ruined
 - 3. barren
 - 4. opulent

Question Type : MCQ
Question ID : 264330134417
Option 1 ID : 264330526643
Option 2 ID : 264330526644
Option 3 ID : 264330526646
Option 4 ID : 264330526645
Status : Answered
Chosen Option : 1

Q.5 Choose the word that means the same as the given word.

Fabulously

- Ans
- 1. Scarcely
 - 2. Scantily
 - 3. Fantastically
 - 4. Nominally

Question Type : MCQ
Question ID : 264330135325
Option 1 ID : 264330530208
Option 2 ID : 264330530207
Option 3 ID : 264330530209
Option 4 ID : 264330530210
Status : Answered
Chosen Option : 3

Q.6 In the following question, out of the given four alternatives, select the alternative which best expresses the meaning of the Idiom/Phrase.
To work against the clocks

- Ans
- 1. To fill one with terror
 - 2. To work fast
 - 3. To die while still working
 - 4. To move anti-clockwise

Question Type : MCQ
Question ID : 264330134419
Option 1 ID : 264330526652
Option 2 ID : 264330526653
Option 3 ID : 264330526654
Option 4 ID : 264330526651
Status : Answered
Chosen Option : 2

Q.7 In the following question, out of the given four alternatives, select the alternative which best expresses the meaning of the Idiom/Phrase.
On account of

- Ans
- 1. To settle dues
 - 2. To make excuses
 - 3. Because of
 - 4. To mark one's territory

Question Type : MCQ
Question ID : 264330134314
Option 1 ID : 264330526248
Option 2 ID : 264330526250
Option 3 ID : 264330526247
Option 4 ID : 264330526249
Status : Answered
Chosen Option : 3

Q.8 Choose the word that is opposite in meaning to the given word.

Abort

- Ans
- 1. Commode
 - 2. Commence
 - 3. Command
 - 4. Collision

Question Type : MCQ
Question ID : 264330136787
Option 1 ID : 264330535847
Option 2 ID : 264330535849
Option 3 ID : 264330535848
Option 4 ID : 264330535850
Status : Answered
Chosen Option : 2

Q.9 Select the most appropriate option to fill in the blank.

If she hadn't _____ her cell phone on the bed, she could have called him.

- Ans
- 1. through
 - 2. throne
 - 3. throng
 - 4. thrown

Question Type : MCQ
Question ID : 264330135306
Option 1 ID : 264330530135
Option 2 ID : 264330530138
Option 3 ID : 264330530136
Option 4 ID : 264330530137
Status : Answered
Chosen Option : 4

Q.10 Select the most appropriate option to fill in the blank.
Sometimes we wish for things, but we do not think about their _____.

Ans 1. consequences

2. fractions

3. copiousness

4. hazards

Question Type : MCQ

Question ID : 264330134423

Option 1 ID : 264330526670

Option 2 ID : 264330526669

Option 3 ID : 264330526667

Option 4 ID : 264330526668

Status : Answered

Chosen Option : 1

Q.11 Improve the underlined part of the sentence. Choose 'No improvement' as an answer if the sentence is grammatically correct.

Though a foreigner, Mother Teresa settle in Calcutta and made it her home.

Ans 1. settle over Calcutta as

2. settling in Calcutta or

3. No improvement

4. settled in Calcutta and

Question Type : MCQ

Question ID : 264330134403

Option 1 ID : 264330526593

Option 2 ID : 264330526592

Option 3 ID : 264330526594

Option 4 ID : 264330526591

Status : Answered

Chosen Option : 4

Q.12 Identify the segment that contains a grammatical error. If there is no error, select 'No error'.

When he buckled down to his / work he became the slyer / and cleverest of diplomats.

Ans 1. When he buckled down to his

2. work he became the slyer

3. and cleverest of diplomats.

4. No error

Question Type : MCQ

Question ID : 264330136032

Option 1 ID : 264330532947

Option 2 ID : 264330532948

Option 3 ID : 264330532949

Option 4 ID : 264330532950

Status : Answered

Chosen Option : 3

Q.13 Choose the word that can substitute the given group of words.
A government run by a single person

- Ans
- 1. Anocracy
 - 2. Bureaucracy
 - 3. Gerontocracy
 - 4. Autocracy

Question Type : MCQ
Question ID : 264330134413
Option 1 ID : 264330526628
Option 2 ID : 264330526630
Option 3 ID : 264330526627
Option 4 ID : 264330526629
Status : Answered
Chosen Option : 4

Q.14 Choose the incorrectly spelt word.

- Ans
- 1. Recently
 - 2. Brush
 - 3. Structure
 - 4. Havoc

Question Type : MCQ
Question ID : 264330134420
Option 1 ID : 264330526655
Option 2 ID : 264330526658
Option 3 ID : 264330526657
Option 4 ID : 264330526656
Status : Answered
Chosen Option : 3

Q.15 Choose the sentence with no spelling error.

- Ans
- 1. Alice turned away, and shrugged her shoulders.
 - 2. Alice turned away, and shruged her sholders.
 - 3. Alice turned away, and shugged her sholders.
 - 4. Alice truned away, and shrugged her shoulders.

Question Type : MCQ
Question ID : 264330135305
Option 1 ID : 264330530132
Option 2 ID : 264330530133
Option 3 ID : 264330530134
Option 4 ID : 264330530131
Status : Answered
Chosen Option : 1

Q.16 Select the most appropriate option to substitute the bracketed segment in the given sentence. If there is no need to substitute it, select 'no substitution required'.

He has 33 years of professional experience (on the field of) Public Administration.

- Ans**
- 1. over field of
 - 2. in the field of
 - 3. No substitution required
 - 4. in the field off

Question Type : MCQ
Question ID : 264330136035
Option 1 ID : 264330532959
Option 2 ID : 264330532960
Option 3 ID : 264330532962
Option 4 ID : 264330532961
Status : Answered
Chosen Option : 2

Q.17 Choose the word that can substitute the given group of words.
A living organism that steals nourishment from other living beings

- Ans**
- 1. Vector
 - 2. Parasite
 - 3. Insect
 - 4. Co – Dependent

Question Type : MCQ
Question ID : 264330134308
Option 1 ID : 264330526223
Option 2 ID : 264330526226
Option 3 ID : 264330526225
Option 4 ID : 264330526224
Status : Answered
Chosen Option : 2

Q.18 Improve the underlined part of the sentence. Choose 'No improvement' as an answer if the sentence is grammatically correct.
She works for eight hours every weekday.

- Ans**
- 1. for eight hourly
 - 2. for eighth hours
 - 3. of eighth hour
 - 4. No improvement

Question Type : MCQ
Question ID : 264330134349
Option 1 ID : 264330526384
Option 2 ID : 264330526383
Option 3 ID : 264330526385
Option 4 ID : 264330526386
Status : Answered
Chosen Option : 4

Q.19 Select the appropriate synonym for the underlined word.
"Little Red Riding Hood" is a fairy tale.

- Ans
- 1. document
 - 2. fact
 - 3. tail
 - 4. story

Question Type : MCQ
Question ID : 264330134414
Option 1 ID : 264330526632
Option 2 ID : 264330526634
Option 3 ID : 264330526631
Option 4 ID : 264330526633
Status : Answered
Chosen Option : 4

Q.20 Find the part of the given sentence that has an error in it. If there is no error, choose 'No error'.

Neither teachers or the principal revolted against the new education policy.

- Ans
- 1. the new education policy.
 - 2. the principal revolted against
 - 3. No error
 - 4. Neither teachers or

Question Type : MCQ
Question ID : 264330135282
Option 1 ID : 264330530045
Option 2 ID : 264330530044
Option 3 ID : 264330530046
Option 4 ID : 264330530043
Status : Answered
Chosen Option : 4

Comprehension:

In the following passage some of the words have been deleted. Read the passage carefully and select the correct answer for the given blank out of the four alternatives.

After a rejection, we tend to beat ourselves up over the things that might have (1) _____ us to be rejected — and might even end up dwelling on these negative (2) _____, a process called rumination. This habit, however, inevitably causes us to (3) _____ worse. "The first thing a lot of people do when they get rejected is to be unkind to (4) _____, and they start coming up with all kinds of ideas about what's (5) _____ with them," Gottlieb notes.

SubQuestion No : 21

Q.21 Select the most appropriate option to fill in the blank No. 1.

- Ans
- 1. lead
 - 2. led
 - 3. leading
 - 4. let

Question Type : MCQ
Question ID : 264330136778
Option 1 ID : 264330535812
Option 2 ID : 264330535811
Option 3 ID : 264330535813
Option 4 ID : 264330535814
Status : Answered
Chosen Option : 2

Comprehension:

In the following passage some of the words have been deleted. Read the passage carefully and select the correct answer for the given blank out of the four alternatives.

After a rejection, we tend to beat ourselves up over the things that might have (1) _____ us to be rejected — and might even end up dwelling on these negative (2) _____, a process called rumination. This habit, however, inevitably causes us to (3) _____ worse. "The first thing a lot of people do when they get rejected is to be unkind to (4) _____, and they start coming up with all kinds of ideas about what's (5) _____ with them," Gottlieb notes.

SubQuestion No : 22

Q.22 Select the most appropriate option to fill in the blank No. 2.

- Ans
- 1. endurance
 - 2. formalities
 - 3. emotions
 - 4. stoppages

Question Type : MCQ
Question ID : 264330136779
Option 1 ID : 264330535815
Option 2 ID : 264330535818
Option 3 ID : 264330535816
Option 4 ID : 264330535817
Status : Answered
Chosen Option : 3

Comprehension:

In the following passage some of the words have been deleted. Read the passage carefully and select the correct answer for the given blank out of the four alternatives.

After a rejection, we tend to beat ourselves up over the things that might have (1) _____ us to be rejected — and might even end up dwelling on these negative (2) _____, a process called rumination. This habit, however, inevitably causes us to (3) _____ worse. "The first thing a lot of people do when they get rejected is to be unkind to (4) _____, and they start coming up with all kinds of ideas about what's (5) _____ with them," Gottlieb notes.

SubQuestion No : 23

Q.23 Select the most appropriate option to fill in the blank No. 3.

- Ans
- 1. feel
 - 2. swirl
 - 3. share
 - 4. recognize

Question Type : MCQ
Question ID : 264330136780
Option 1 ID : 264330535822
Option 2 ID : 264330535821
Option 3 ID : 264330535819
Option 4 ID : 264330535820
Status : Answered
Chosen Option : 1

Comprehension:

In the following passage some of the words have been deleted. Read the passage carefully and select the correct answer for the given blank out of the four alternatives.

After a rejection, we tend to beat ourselves up over the things that might have (1) _____ us to be rejected — and might even end up dwelling on these negative (2) _____, a process called rumination. This habit, however, inevitably causes us to (3) _____ worse. "The first thing a lot of people do when they get rejected is to be unkind to (4) _____, and they start coming up with all kinds of ideas about what's (5) _____ with them," Gottlieb notes.

SubQuestion No : 24

Q.24 Select the most appropriate option to fill in the blank No. 4.

- Ans
- 1. himself
 - 2. yourself
 - 3. themselves
 - 4. itself

Question Type : MCQ
Question ID : 264330136781
Option 1 ID : 264330535826
Option 2 ID : 264330535823
Option 3 ID : 264330535824
Option 4 ID : 264330535825
Status : Answered
Chosen Option : 3

Comprehension:

In the following passage some of the words have been deleted. Read the passage carefully and select the correct answer for the given blank out of the four alternatives.

After a rejection, we tend to beat ourselves up over the things that might have (1) _____ us to be rejected — and might even end up dwelling on these negative (2) _____, a process called rumination. This habit, however, inevitably causes us to (3) _____ worse. "The first thing a lot of people do when they get rejected is to be unkind to (4) _____, and they start coming up with all kinds of ideas about what's (5) _____ with them," Gottlieb notes.

SubQuestion No : 25

Q.25 Select the most appropriate option to fill in the blank No. 5.

- Ans
- 1. strong
 - 2. taming
 - 3. syncing
 - 4. wrong

Question Type : MCQ
Question ID : 264330136782
Option 1 ID : 264330535828
Option 2 ID : 264330535830
Option 3 ID : 264330535829
Option 4 ID : 264330535827
Status : Answered
Chosen Option : 4