



SSC MTS **SHIFT – 3 (16-05-2023)**

- ★ **Latest Govt Job updates**
- ★ **Private Job updates**
- ★ **Free Mock tests available**

Visit - teachingninja.in

Multi Tasking Non Technical Staff and Havaladar CBIC and CBN Examination 2022

Roll Number	
Candidate Name	
Venue Name	
Exam Date	16/05/2023
Exam Time	3:30 PM - 5:00 PM
Subject	MTS Non Tech Havaladar CBIC and CBN Examination 2022

Section : Numerical and Mathematical Ability

Q.1 A boatman rows 15 km in 15 minutes, along the stream and 10 km in 1 hour against the stream. Find the speed of the boat in still water.

- Ans
- 1. 33 km/hr
 - 2. 35 km/hr
 - 3. 26 km/hr
 - 4. 40 km/hr

Question Type : MCQ
Question ID : 264330138404
Option 1 ID : 264330542224
Option 2 ID : 264330542226
Option 3 ID : 264330542223
Option 4 ID : 264330542225
Status : Answered
Chosen Option : 2

Q.2 If $(x + y) : (y + z) : (z + x) = 3 : 5 : 7$ and $(x + y + z) = 45$, then what is the value of z ?

- Ans
- 1. 18
 - 2. 30
 - 3. 27
 - 4. 20

Question Type : MCQ
Question ID : 264330138400
Option 1 ID : 264330542209
Option 2 ID : 264330542207
Option 3 ID : 264330542208
Option 4 ID : 264330542210
Status : Not Answered
Chosen Option : --

Q.3 A and B together can complete a given work in 10 days. C can complete the same work alone in 15 days. In how many days can they complete the work, if all three work together?

- Ans**
- 1. 8 days
 - 2. 5 days
 - 3. 6 days
 - 4. 10 days

Question Type : **MCQ**
Question ID : **264330135427**
Option 1 ID : **264330530615**
Option 2 ID : **264330530618**
Option 3 ID : **264330530616**
Option 4 ID : **264330530617**
Status : **Answered**
Chosen Option : **3**

Q.4 Rima buys a chair for Rs. 1000 and sells it at a loss of 8%. What is the selling price of the chair?

- Ans**
- 1. Rs. 920
 - 2. Rs. 900
 - 3. Rs. 980
 - 4. Rs. 1000

Question Type : **MCQ**
Question ID : **264330141003**
Option 1 ID : **264330552359**
Option 2 ID : **264330552362**
Option 3 ID : **264330552360**
Option 4 ID : **264330552361**
Status : **Answered**
Chosen Option : **1**

Q.5 The following table shows the number of girls and boys in different classes. Find the sum of total number of students in all class.

Class	Number of girls	Number of boys
5	88	76
6	100	92
7	54	80
8	84	68
9	90	70

- Ans**
- 1. 840
 - 2. 842
 - 3. 800
 - 4. 760

Question Type : **MCQ**
Question ID : **264330133791**
Option 1 ID : **264330524189**
Option 2 ID : **264330524188**
Option 3 ID : **264330524187**
Option 4 ID : **264330524190**
Status : **Answered**
Chosen Option : **2**

Q.6 225 percent of 80 percent of 80 = _____.

- Ans
- 1. 156
 - 2. 132
 - 3. 144
 - 4. 138

Question Type : MCQ
Question ID : 264330137180
Option 1 ID : 264330537365
Option 2 ID : 264330537364
Option 3 ID : 264330537366
Option 4 ID : 264330537363
Status : Answered
Chosen Option : 3

Q.7 Find the value of $[7 + \{4 \times (2 + 5 \times 4)\}]$.

- Ans
- 1. 95
 - 2. 45
 - 3. 55
 - 4. 85

Question Type : MCQ
Question ID : 264330138390
Option 1 ID : 264330542167
Option 2 ID : 264330542168
Option 3 ID : 264330542169
Option 4 ID : 264330542170
Status : Answered
Chosen Option : 1

Q.8 Evaluate for the value of A.

$$(64 \div 8) - A + 4 \times 23 + 45 - 87 = 53$$

- Ans
- 1. 4
 - 2. 6
 - 3. 3
 - 4. 5

Question Type : MCQ
Question ID : 264330138747
Option 1 ID : 264330543596
Option 2 ID : 264330543598
Option 3 ID : 264330543597
Option 4 ID : 264330543595
Status : Answered
Chosen Option : 4

Q.9 What will be the ratio of simple interest earned by certain amount at the same rate of interest for 8 years and 20 years?

- Ans**
- 1. 5:7
 - 2. 2:5
 - 3. 3:5
 - 4. 4:3

Question Type : **MCQ**
Question ID : **264330138446**
Option 1 ID : **264330542394**
Option 2 ID : **264330542391**
Option 3 ID : **264330542393**
Option 4 ID : **264330542392**
Status : **Answered**
Chosen Option : **2**

Q.10 A trader marks his goods at 55% above the cost price and allows a discount of 20%. What is his gain percentage?

- Ans**
- 1. 24%
 - 2. 18%
 - 3. 22%
 - 4. 16%

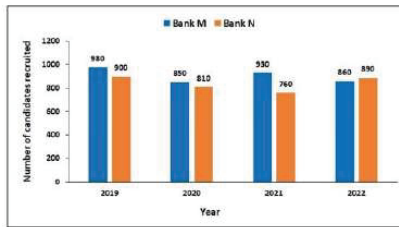
Question Type : **MCQ**
Question ID : **264330138399**
Option 1 ID : **264330542204**
Option 2 ID : **264330542205**
Option 3 ID : **264330542203**
Option 4 ID : **264330542206**
Status : **Answered**
Chosen Option : **1**

Q.11 If a certain sum of money becomes double of itself in 3 years 6 months at simple interest, then what will be the annual rate of interest?

- Ans**
- 1. 22.5 percent
 - 2. 28.57 percent
 - 3. 30.53 percent
 - 4. 26.57 percent

Question Type : **MCQ**
Question ID : **264330137185**
Option 1 ID : **264330537384**
Option 2 ID : **264330537383**
Option 3 ID : **264330537385**
Option 4 ID : **264330537386**
Status : **Answered**
Chosen Option : **3**

Q.12 The bar graph shows the candidates recruited in the 2 different banks M and N in different years. What is the average number of candidates in bank N in all the years together?



Ans 1. 720

2. 700

3. 850

4. 840

Question Type : MCQ

Question ID : 264330138408

Option 1 ID : 264330542239

Option 2 ID : 264330542240

Option 3 ID : 264330542241

Option 4 ID : 264330542242

Status : Answered

Chosen Option : 4

Q.13 By selling 55 meters of cloth, one gains the selling price of 11 meters. Find the gain percent.

Ans 1. 33%

2. 15%

3. 25%

4. 23%

Question Type : MCQ

Question ID : 264330138398

Option 1 ID : 264330542202

Option 2 ID : 264330542199

Option 3 ID : 264330542201

Option 4 ID : 264330542200

Status : Not Answered

Chosen Option : --

Q.14 The average age of four brothers is 24 years. If their father is included, the average is increased by 6 years. Find the age of the father (in years)

Ans 1. 50 years

2. 52 years

3. 54 years

4. 55 years

Question Type : MCQ

Question ID : 264330138393

Option 1 ID : 264330542179

Option 2 ID : 264330542181

Option 3 ID : 264330542182

Option 4 ID : 264330542180

Status : Answered

Chosen Option : 3

Q.15 The value of $74 + 88 \div 8 \times 10$ of $5 - 90 \div 15 + \{44 - (108 \div 12)\}$ is :

- Ans
- 1. 700
 - 2. 653
 - 3. 770
 - 4. 605

Question Type : MCQ
Question ID : 264330133777
Option 1 ID : 264330524134
Option 2 ID : 264330524131
Option 3 ID : 264330524132
Option 4 ID : 264330524133
Status : Not Answered
Chosen Option : --

Q.16 Find the fourth proportion to 21, 49 and 18.

- Ans
- 1. 42
 - 2. 56
 - 3. 49
 - 4. 44

Question Type : MCQ
Question ID : 264330138401
Option 1 ID : 264330542213
Option 2 ID : 264330542212
Option 3 ID : 264330542214
Option 4 ID : 264330542211
Status : Not Answered
Chosen Option : --

Q.17 Dev completed the school project alone in 40 days. How many days will Arun alone take to complete the same work if he is 25% more efficient than Dev?

- Ans
- 1. 35 days
 - 2. 14 days
 - 3. 32 days
 - 4. 16 days

Question Type : MCQ
Question ID : 264330138760
Option 1 ID : 264330543650
Option 2 ID : 264330543649
Option 3 ID : 264330543647
Option 4 ID : 264330543648
Status : Answered
Chosen Option : 3

Q.18 Three numbers are in the ratio 2 : 3 : 5 and their LCM is 60. What is the HCF of the numbers?

- Ans
- 1. 2
 - 2. 4
 - 3. 10
 - 4. 6

Question Type : MCQ
Question ID : 264330141011
Option 1 ID : 264330552391
Option 2 ID : 264330552392
Option 3 ID : 264330552394
Option 4 ID : 264330552393
Status : Not Answered
Chosen Option : --

Q.19 A man goes to a place on the car at a speed of 144 km/hr and comes back at a lower speed. If the average speed is 60 km/hr in total, then find his returning speed (in km/hr).

- Ans
- 1. 40.05 km/hr
 - 2. 37.89 km/hr
 - 3. 33.33 km/hr
 - 4. 22.25 km/hr

Question Type : MCQ
Question ID : 264330135373
Option 1 ID : 264330530401
Option 2 ID : 264330530402
Option 3 ID : 264330530400
Option 4 ID : 264330530399
Status : Not Answered
Chosen Option : --

Q.20 If the length of a rectangle is decreased by 13% and the breadth is increased by 13%, Find the change of percentage in its area.

- Ans
- 1. 1.69% decrease
 - 2. 1.69% increase
 - 3. No change
 - 4. 13% decrease

Question Type : MCQ
Question ID : 264330135431
Option 1 ID : 264330530633
Option 2 ID : 264330530632
Option 3 ID : 264330530631
Option 4 ID : 264330530634
Status : Answered
Chosen Option : 1

Section : Reasoning Ability and Problem Solving

Q.1 In the following question, select the missing number of the given series.

30, 60, 180, 720, 3600,?

- Ans
- 1. 25000
 - 2. 21600
 - 3. 12000
 - 4. 14400

Question Type : MCQ
Question ID : 264330138511
Option 1 ID : 264330542653
Option 2 ID : 264330542651
Option 3 ID : 264330542654
Option 4 ID : 264330542652
Status : Answered
Chosen Option : 2

Q.2 Seven workers Rahul, Ram, Ramesh, Sohan, Sahil, Anil and Sonu are sitting around a circular table facing towards the centre (not necessarily in the same order). Anil is immediate neighbour of both Ram and Sonu. Ram is second to the right of Sahil. Rahul is immediate neighbour of both Sahil and Sohan. Who is second to the left of Sahil?

- Ans
- 1. Sonu
 - 2. Ramesh
 - 3. Sohan
 - 4. Anil

Question Type : MCQ
Question ID : 264330138506
Option 1 ID : 264330542633
Option 2 ID : 264330542631
Option 3 ID : 264330542632
Option 4 ID : 264330542634
Status : Answered
Chosen Option : 4

Q.3 By Interchanging the given two numbers which of the following equation will be correct?

5 and 4

I. $4 + 8 \times 5 - 7 + 1 = 30$

II. $5 \times 3 - 4 + 6 + 2 = 11$

- Ans
- 1. Both I and II
 - 2. Neither I nor II
 - 3. Only II
 - 4. Only I

Question Type : MCQ
Question ID : 264330138557
Option 1 ID : 264330542837
Option 2 ID : 264330542838
Option 3 ID : 264330542836
Option 4 ID : 264330542835
Status : Answered
Chosen Option : 4

Q.4 In a certain code language, 'PIECES' is coded as 'PKBCGP'. What is the code for 'OBTAIN' in that code language?

- Ans**
- 1. ODQALL
 - 2. ODQBKK
 - 3. ODQAKK
 - 4. ODQAJK

Question Type : **MCQ**

Question ID : **264330138546**

Option 1 ID : **264330542791**

Option 2 ID : **264330542793**

Option 3 ID : **264330542794**

Option 4 ID : **264330542792**

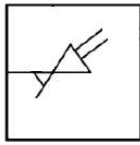
Status : **Answered**

Chosen Option : **3**



Teachingninja.in

Q.5 Select the option figure in which the given figure (X) is embedded as its part (rotation is NOT allowed).



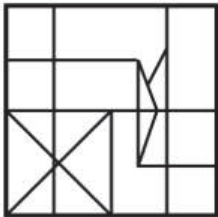
(X)

Ans

✗ 1.



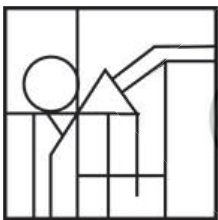
✗ 2.



✗ 3.



✓ 4.



Teachingninja.in

Question Type : MCQ

Question ID : 264330133503

Option 1 ID : 264330523044

Option 2 ID : 264330523043

Option 3 ID : 264330523045

Option 4 ID : 264330523046

Status : Answered

Chosen Option : 4

Q.6 In the following question below are given some statements followed by some conclusions based on those statements. Taking the given statements to be true even if they seem to be at variance from commonly known facts. Read all the conclusions and then decide which of the given conclusion logically follows the given statements.

Statements:

- I. All bike are cycle.
- II. Some cycle are tub.

Conclusion:

- I. All tub are bike.
- II. All cycle are tub.
- III. All cycle are bike.

- Ans
- 1. All conclusion follows
 - 2. Only conclusion II follows
 - 3. Neither conclusion follows
 - 4. Both conclusions I and II follows

Question Type : **MCQ**
Question ID : **264330138509**
Option 1 ID : **264330542645**
Option 2 ID : **264330542644**
Option 3 ID : **264330542646**
Option 4 ID : **264330542643**
Status : **Answered**
Chosen Option : **3**

Q.7 In a certain code language, 'HEAVY' is coded as 'EBXSV'. What is the code for 'LABEL' in that code language?

- Ans
- 1. IXYBJ
 - 2. IXZBI
 - 3. IXYBI
 - 4. JXYBJ

Question Type : **MCQ**
Question ID : **264330135597**
Option 1 ID : **264330531290**
Option 2 ID : **264330531287**
Option 3 ID : **264330531289**
Option 4 ID : **264330531288**
Status : **Answered**
Chosen Option : **3**

Q.8 Select the option in which the numbers shares the same relationship in set as that shared by the numbers in the given set.
(NOTE: Operations should be performed on the whole numbers, without breaking down the numbers into its constituent digits. E.g.13 – Operations on 13 such as adding /subtracting /multiplying etc. to 13 can be performed. Breaking down 13 into 1 and 3 and then performing mathematical operations on 1 and 3 is not allowed)

(64, 8, 16)

(40, 20, 4)

Ans

✓ 1. (56, 14, 8)

✗ 2. (100, 50, 8)

✗ 3. (120, 100, 5)

✗ 4. (54, 9, 14)

Question Type : **MCQ**

Question ID : **264330138513**

Option 1 ID : **264330542660**

Option 2 ID : **264330542659**

Option 3 ID : **264330542661**

Option 4 ID : **264330542662**

Status : **Not Answered**

Chosen Option : --

Q.9 Weight of five pens P1, P2, P3, P4 and P5 is compared. Weight of P3 is less than P1 but more than P2. Weight of P2 is more than only two pens. Weight of P5 is not the least. If the weight of P5 is 100 grams, then what can be the weight of P1?

Ans

✓ 1. 108 grams

✗ 2. 96 grams

✗ 3. 95 grams

✗ 4. 90 grams

Question Type : **MCQ**

Question ID : **264330138507**

Option 1 ID : **264330542638**

Option 2 ID : **264330542637**

Option 3 ID : **264330542635**

Option 4 ID : **264330542636**

Status : **Answered**

Chosen Option : 1



Teachingninja.in

Q.10 Select the correct mirror image of the given figure when the mirror is placed at MN as shown below.

R A M B O W A J K 

- Ans
- 1. K J A W O B M A R
 - 2. K L A W O B M A R
 - 3. K L A W O B M A R
 - 4. K L A W O B M A R

Question Type : MCQ
Question ID : 264330133504
Option 1 ID : 264330523050
Option 2 ID : 264330523047
Option 3 ID : 264330523049
Option 4 ID : 264330523048
Status : Answered
Chosen Option : 4

Q.11 Which of the following numbers will replace the question mark (?) in the given series?

17, 24, 32, 41, 51, ?

- Ans
- 1. 63
 - 2. 61
 - 3. 64
 - 4. 62

Question Type : MCQ
Question ID : 264330137356
Option 1 ID : 264330538053
Option 2 ID : 264330538051
Option 3 ID : 264330538054
Option 4 ID : 264330538052
Status : Answered
Chosen Option : 4

Q.12 A series is given with one term missing. Select the correct alternative from the given ones that will complete the series.

FOC, IMF, LKI, OIL, ?

- Ans
- 1. SHO
 - 2. RGO
 - 3. SGO
 - 4. RHO

Question Type : MCQ
Question ID : 264330138498
Option 1 ID : 264330542599
Option 2 ID : 264330542600
Option 3 ID : 264330542602
Option 4 ID : 264330542601
Status : Answered
Chosen Option : 2

Q.13 In the following question below are given some statements followed by some conclusions based on those statements. Taking the given statements to be true even if they seem to be at variance from commonly known facts. Read all the conclusions and then decide which of the given conclusion logically follows the given statements.

Statements:

- I. Some men are girls.
- II. Some strong are girls.

Conclusion:

- I. Some strong are not men.
- II. Some girls are men.

- Ans**
- 1. Only conclusion I follows
 - 2. Neither conclusion follows
 - 3. Both conclusions I and II follows
 - 4. Only conclusion II follows

Question Type : MCQ
Question ID : 264330138508
Option 1 ID : 264330542639
Option 2 ID : 264330542642
Option 3 ID : 264330542641
Option 4 ID : 264330542640
Status : Answered
Chosen Option : 4

Q.14 Words given on the left side of (::) are related with each other by some Logic/Rule/Relation. Select the missing word/word pair on the right side of (::) from the given alternatives based on the same Logic/Rule/Relation.

Rink : Skating :: Pitch : ?

- Ans**
- 1. Cricket
 - 2. Hockey
 - 3. Wrestling
 - 4. Football

Question Type : MCQ
Question ID : 264330138500
Option 1 ID : 264330542609
Option 2 ID : 264330542610
Option 3 ID : 264330542607
Option 4 ID : 264330542608
Status : Answered
Chosen Option : 1

Q.15 By Interchanging which two signs the equation will be correct?

$$27 \div 3 - 18 + 3 \times 2 = 18$$

- Ans
- 1. + and -
 - 2. \times and +
 - 3. + and \div
 - 4. \div and \times

Question Type : MCQ
Question ID : 264330138514
Option 1 ID : 264330542663
Option 2 ID : 264330542664
Option 3 ID : 264330542665
Option 4 ID : 264330542666
Status : Answered
Chosen Option : 3

Q.16 In a certain code language, 'REPORT' is coded as '18, 5, 16, 15, 18, 20', 'BEYOND' is coded as '2, 5, 25, 15, 14, 4'.
What is the code for 'MONEY' in that code language?

- Ans
- 1. 13, 15, 12, 6, 25
 - 2. 13, 15, 14, 5, 25
 - 3. 13, 15, 14, 6, 25
 - 4. 15, 13, 12, 6, 25

Question Type : MCQ
Question ID : 264330138461
Option 1 ID : 264330542452
Option 2 ID : 264330542451
Option 3 ID : 264330542454
Option 4 ID : 264330542453
Status : Answered
Chosen Option : 2

Q.17 Eight friends Anil, Kamal, Ram, Sanjay, Aakash, Vivek, Rahul and Ramu are sitting around a circular table facing towards the centre (not necessarily in the same order). Vivek is second to the right of Anil. Kamal is third to the left of Anil. Ramu is second to the right of Vivek. Ram is second to the right of Ramu. Aakash is second to the right of Rahul. Rahul is not the immediate neighbour of Vivek. Who is second to the left of Anil?

- Ans
- 1. Vivek
 - 2. Ramu
 - 3. Kamal
 - 4. Ram

Question Type : MCQ
Question ID : 264330138505
Option 1 ID : 264330542630
Option 2 ID : 264330542628
Option 3 ID : 264330542629
Option 4 ID : 264330542627
Status : Not Answered
Chosen Option : --

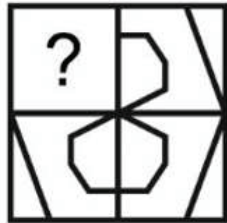
Q.18 Words given on the left side of (::) are related with each other by some Logic/Rule/Relation. Select the missing word/word pair on the right side of (::) from the given alternatives based on the same Logic/Rule/Relation.

Omelette : Egg :: ?

- Ans**
- 1. Asphalt : Road
 - 2. Ore : Metal
 - 3. Furniture : Wood
 - 4. Seed : Oil

Question Type : **MCQ**
 Question ID : **264330138501**
 Option 1 ID : **264330542612**
 Option 2 ID : **264330542614**
 Option 3 ID : **264330542613**
 Option 4 ID : **264330542611**
 Status : **Answered**
 Chosen Option : **2**

Q.19 Which answer figure will complete the pattern in the question figure?



Ans

- 1.
- 2.
- 3.
- 4.

Question Type : **MCQ**
 Question ID : **264330138518**
 Option 1 ID : **264330542679**
 Option 2 ID : **264330542682**
 Option 3 ID : **264330542680**
 Option 4 ID : **264330542681**
 Status : **Answered**
 Chosen Option : **1**

Q.20 Select the option that is related to the third number in the same way as the second number is related to the first number.
67 : 336 :: 43 : ?

- Ans**
- 1. 216
 - 2. 226
 - 3. 214
 - 4. 236

Question Type : **MCQ**
Question ID : **264330137358**
Option 1 ID : **264330538059**
Option 2 ID : **264330538062**
Option 3 ID : **264330538060**
Option 4 ID : **264330538061**
Status : **Not Answered**
Chosen Option : --

Section : General Awareness

Q.1 Which among the following is a traditional Hindu festival centered on the Goddess Mahakali from Telangana, India?

- Ans**
- 1. Dehing Patkai
 - 2. Bonalu
 - 3. Ugadi
 - 4. Lohri

Question Type : **MCQ**
Question ID : **264330133959**
Option 1 ID : **264330524862**
Option 2 ID : **264330524860**
Option 3 ID : **264330524861**
Option 4 ID : **264330524859**
Status : **Answered**
Chosen Option : 1

Q.2 Kumari Kamala was awarded with Padma Bhushan in 1970. She was recognized for which classical dance form?

- Ans**
- 1. Mohiniyattam
 - 2. Manipuri
 - 3. Kathak
 - 4. Bharatanatyam

Question Type : **MCQ**
Question ID : **264330138328**
Option 1 ID : **264330541921**
Option 2 ID : **264330541920**
Option 3 ID : **264330541919**
Option 4 ID : **264330541922**
Status : **Answered**
Chosen Option : 4

Q.3 The sepoys of Meerut arrived at the Gates of Red Fort to meet the Mughal emperor, Bahadur Shah on _____.

- Ans
- 1. 11 March, 1857
 - 2. 10 March, 1857
 - 3. 10 May, 1857
 - 4. 11 May, 1857

Question Type : MCQ
Question ID : 264330138344
Option 1 ID : 264330541986
Option 2 ID : 264330541985
Option 3 ID : 264330541983
Option 4 ID : 264330541984
Status : Answered
Chosen Option : 4

Q.4 Which of the following countries is a part of 'I2U2' Summit?

- Ans
- 1. India, Iran, UAE and US
 - 2. India, Israel, UAE and Uganda
 - 3. Iraq, Iran, UAE and US
 - 4. India, Israel, UAE and US

Question Type : MCQ
Question ID : 264330138280
Option 1 ID : 264330541730
Option 2 ID : 264330541728
Option 3 ID : 264330541727
Option 4 ID : 264330541729
Status : Answered
Chosen Option : 1

Q.5 Vidushi Sharan Rani is famous for playing which musical instrument?

- Ans
- 1. Flute
 - 2. Sitar
 - 3. Tabla
 - 4. Sarod

Question Type : MCQ
Question ID : 264330138277
Option 1 ID : 264330541718
Option 2 ID : 264330541717
Option 3 ID : 264330541715
Option 4 ID : 264330541716
Status : Answered
Chosen Option : 2

Q.6 Which among the following is the coldest planet in the solar system?

- Ans
- 1. Mars
 - 2. Neptune
 - 3. Saturn
 - 4. Uranus

Question Type : MCQ
Question ID : 264330137069
Option 1 ID : 264330536922
Option 2 ID : 264330536921
Option 3 ID : 264330536919
Option 4 ID : 264330536920
Status : Answered
Chosen Option : 2

Q.7 The settlements in which large number of houses are built very close to each other are _____.

- Ans
- 1. Compact settlements
 - 2. Star settlements
 - 3. Linear settlements
 - 4. Dispersed settlements

Question Type : MCQ
Question ID : 264330138669
Option 1 ID : 264330543283
Option 2 ID : 264330543286
Option 3 ID : 264330543284
Option 4 ID : 264330543285
Status : Answered
Chosen Option : 1

Q.8 Which of the following Indian Players has scored maximum runs in Cricket World Cup 1983?

- Ans
- 1. SM Gavaskar
 - 2. K. Srikkanth
 - 3. Kapil Dev
 - 4. SM Patil

Question Type : MCQ
Question ID : 264330138274
Option 1 ID : 264330541703
Option 2 ID : 264330541704
Option 3 ID : 264330541705
Option 4 ID : 264330541706
Status : Answered
Chosen Option : 3

Q.9 Which among the following is not an alkali metals and does not belong to the Group I of Periodic Table?

- Ans
- 1. Calcium
 - 2. Lithium
 - 3. Sodium
 - 4. Potassium

Question Type : MCQ
Question ID : 264330137066
Option 1 ID : 264330536908
Option 2 ID : 264330536910
Option 3 ID : 264330536907
Option 4 ID : 264330536909
Status : Answered
Chosen Option : 1

Q.10 Who among the following is the first Indian to win the under 10 World Chess Championship in Menorca, Spain in the year 1996?

- Ans
- 1. Koneru Humpy
 - 2. Vishwanathan Anand
 - 3. Vidit Santosh Gujrathi
 - 4. P Harikrishna

Question Type : MCQ
Question ID : 264330137084
Option 1 ID : 264330536982
Option 2 ID : 264330536979
Option 3 ID : 264330536981
Option 4 ID : 264330536980
Status : Answered
Chosen Option : 2

Q.11 Which of the following has founded the city of Jaipur?

- Ans
- 1. Prithvi Raj Chauhan
 - 2. Raja Bharmal
 - 3. Sawai Jai Singh II
 - 4. Raja Man Singh

Question Type : MCQ
Question ID : 264330138323
Option 1 ID : 264330541902
Option 2 ID : 264330541900
Option 3 ID : 264330541901
Option 4 ID : 264330541899
Status : Answered
Chosen Option : 4

Q.12 In which of the following articles, "Freedom of conscience and free profession, practice and propagation of religion" is mentioned?

- Ans**
- 1. Article 26
 - 2. Article 27
 - 3. Article 25
 - 4. Article 28

Question Type : **MCQ**
Question ID : **264330138283**
Option 1 ID : **264330541740**
Option 2 ID : **264330541742**
Option 3 ID : **264330541739**
Option 4 ID : **264330541741**
Status : **Answered**
Chosen Option : **3**

Q.13 Which of the following is 'NOT' a feature of organic farming?

- Ans**
- 1. No use of mixed cropping
 - 2. Minimal or no use of chemicals
 - 3. Use of recycled farm wastes
 - 4. Use of biofertilizers

Question Type : **MCQ**
Question ID : **264330138284**
Option 1 ID : **264330541746**
Option 2 ID : **264330541745**
Option 3 ID : **264330541743**
Option 4 ID : **264330541744**
Status : **Answered**
Chosen Option : **1**

Q.14 The emblem of the Chera Dynasty that controlled the central and northern parts of Kerala and the Kongu region of Tamil Nadu was _____.

- Ans**
- 1. birds
 - 2. fish
 - 3. bow and arrow
 - 4. tiger

Question Type : **MCQ**
Question ID : **264330137075**
Option 1 ID : **264330536945**
Option 2 ID : **264330536946**
Option 3 ID : **264330536944**
Option 4 ID : **264330536943**
Status : **Not Answered**
Chosen Option : **--**

Q.15 Banks are required to keep some reserves in liquid form with themselves. This is called _____.

- Ans
- 1. Marginal stability scheme
 - 2. Statutory liquidity ratio
 - 3. Open market operations
 - 4. Legal deposit ratio

Question Type : MCQ
Question ID : 264330138331
Option 1 ID : 264330541931
Option 2 ID : 264330541932
Option 3 ID : 264330541934
Option 4 ID : 264330541933
Status : Answered
Chosen Option : 2

Q.16 Sodium Hydroxide is the chemical name of which of the following common substances?

- Ans
- 1. Bleaching Powder
 - 2. Borax
 - 3. Caustic Soda
 - 4. Chalk

Question Type : MCQ
Question ID : 264330137068
Option 1 ID : 264330536916
Option 2 ID : 264330536918
Option 3 ID : 264330536915
Option 4 ID : 264330536917
Status : Answered
Chosen Option : 3

Q.17 Which country is the leading producer of coffee in the world?

- Ans
- 1. USA
 - 2. Brazil
 - 3. China
 - 4. India

Question Type : MCQ
Question ID : 264330138338
Option 1 ID : 264330541961
Option 2 ID : 264330541962
Option 3 ID : 264330541959
Option 4 ID : 264330541960
Status : Answered
Chosen Option : 2

Q.18 Which of the following books is written by Mulk Raj Anand?

- Ans
- 1. The English Teacher
 - 2. The Blue Umbrella
 - 3. Untouchable
 - 4. A Suitable Boy

Question Type : MCQ
Question ID : 264330138326
Option 1 ID : 264330541913
Option 2 ID : 264330541914
Option 3 ID : 264330541912
Option 4 ID : 264330541911
Status : Not Answered
Chosen Option : --

Q.19 Confluence of Bhagirathi and Alaknanda occur at _____.

- Ans
- 1. Vishnuprayag
 - 2. Nandaprayag
 - 3. Devaprayag
 - 4. Rudraprayag

Question Type : MCQ
Question ID : 264330138289
Option 1 ID : 264330541763
Option 2 ID : 264330541766
Option 3 ID : 264330541764
Option 4 ID : 264330541765
Status : Answered
Chosen Option : 4

Q.20 In the Indian Judicial system, PIL stands for _____.

- Ans
- 1. Public Interest Litigation
 - 2. Periodic Individual Litigation
 - 3. Private Interest License
 - 4. Periodic Interest Litigation

Question Type : MCQ
Question ID : 264330138332
Option 1 ID : 264330541936
Option 2 ID : 264330541937
Option 3 ID : 264330541938
Option 4 ID : 264330541935
Status : Answered
Chosen Option : 1

Q.21 Which of the following is one of the Trustees of the PM CARES Fund?

- Ans
- 1. Shri Azim Premji
 - 2. Shri Gautam Adani
 - 3. Shri Mukesh Ambani
 - 4. Shri Ratan N. Tata

Question Type : MCQ
Question ID : 264330138279
Option 1 ID : 264330541725
Option 2 ID : 264330541724
Option 3 ID : 264330541723
Option 4 ID : 264330541726
Status : Answered
Chosen Option : 4

Q.22 Which Mauryan ruler was called Amitrochates by the Greeks?

- Ans
- 1. Samudragupta
 - 2. Kanishka
 - 3. Bindusara
 - 4. Chandragupta I

Question Type : MCQ
Question ID : 264330133969
Option 1 ID : 264330524900
Option 2 ID : 264330524901
Option 3 ID : 264330524899
Option 4 ID : 264330524902
Status : Answered
Chosen Option : 3

Q.23 With respect to social groups in India, PVTGs stands for _____.

- Ans
- 1. Periodic Vulnerable Tribal Groups
 - 2. Periodic Various Tribal Groups
 - 3. Particularly Vulnerable Tribal Groups
 - 4. Particularly Various Tribal Groups

Question Type : MCQ
Question ID : 264330133901
Option 1 ID : 264330524628
Option 2 ID : 264330524630
Option 3 ID : 264330524627
Option 4 ID : 264330524629
Status : Answered
Chosen Option : 3

Q.24 Kathak classical dance had its origin in _____.

- Ans
- 1. Uttar Pradesh
 - 2. Rajasthan
 - 3. Odisha
 - 4. Assam

Question Type : MCQ
Question ID : 264330138271
Option 1 ID : 264330541694
Option 2 ID : 264330541691
Option 3 ID : 264330541693
Option 4 ID : 264330541692
Status : Answered
Chosen Option : 1

Q.25 In a drama, Hema spoke "Swaraj is my birth right and I shall have it". Which Indian freedom fighter gave this slogan?

- Ans
- 1. Mahatma Gandhi
 - 2. Lokmanya Bal Gangadhar Tilak
 - 3. Ambika Charan Majumdar
 - 4. Bhagat Singh

Question Type : MCQ
Question ID : 264330133972
Option 1 ID : 264330524911
Option 2 ID : 264330524912
Option 3 ID : 264330524914
Option 4 ID : 264330524913
Status : Answered
Chosen Option : 2

Section : English Language and Comprehension

Q.1 A sentence has been given with a blank to be filled with an appropriate option. Choose the correct alternative.

I went to the lake and _____ some of its water in my metallic cup.

- Ans
- 1. drank
 - 2. drinking
 - 3. drunk
 - 4. drunken

Question Type : MCQ
Question ID : 264330134457
Option 1 ID : 264330526800
Option 2 ID : 264330526799
Option 3 ID : 264330526801
Option 4 ID : 264330526802
Status : Answered
Chosen Option : 1

Q.2 Choose the word that is correctly spelt.

- Ans
- 1. Indispensible
 - 2. Liasion
 - 3. Privilige
 - 4. Occurred

Question Type : MCQ
Question ID : 264330136661
Option 1 ID : 264330535366
Option 2 ID : 264330535365
Option 3 ID : 264330535364
Option 4 ID : 264330535363
Status : Not Answered
Chosen Option : --

Q.3 Select the most appropriate meaning of the given idiom.

Gut Feeling

Ans 1. To have a dispute with someone

2.

A personal intuition you get, especially when feel something may not be right

3. Very excited and/or joyful, especially when in love

4. Doing things recklessly

Question Type : MCQ
Question ID : 264330135787
Option 1 ID : 264330532025
Option 2 ID : 264330532023
Option 3 ID : 264330532026
Option 4 ID : 264330532024
Status : Answered
Chosen Option : 2

Q.4 Identify the segment that contains a grammatical error. If there is no error, select 'No error'.

George handing the / hairpin to Ron, / a moment later.

Ans 1. George handing the

2. hairpin to Ron,

3. a moment later.

4. No error

Question Type : MCQ
Question ID : 264330136641
Option 1 ID : 264330535287
Option 2 ID : 264330535288
Option 3 ID : 264330535289
Option 4 ID : 264330535290
Status : Answered
Chosen Option : 1

Q.5 Choose the sentence with no spelling error.

- Ans 1. He supposed he shuld be thankful.
 2. He supposed he should be thankful.
 3. He supposed he should be thankfull.
 4. He suposed he should be thankful.

Question Type : MCQ
Question ID : 264330134447
Option 1 ID : 264330526761
Option 2 ID : 264330526762
Option 3 ID : 264330526759
Option 4 ID : 264330526760
Status : Answered
Chosen Option : 2

Q.6 Select the word from the options which is exactly opposite in meaning to the bracketed word given in the sentence below.

Our financial situation had become (precarious).

- Ans 1. Insecure
 2. Stable
 3. Delicate
 4. Noisy

Question Type : MCQ
Question ID : 264330136658
Option 1 ID : 264330535353
Option 2 ID : 264330535352
Option 3 ID : 264330535351
Option 4 ID : 264330535354
Status : Answered
Chosen Option : 2

Q.7 Select the most appropriate word for the given group of words.

The medieval forerunner of chemistry

- Ans 1. Anthropologist
 2. Curator
 3. Alchemy
 4. Anchor

Question Type : MCQ
Question ID : 264330135781
Option 1 ID : 264330532002
Option 2 ID : 264330531999
Option 3 ID : 264330532001
Option 4 ID : 264330532000
Status : Answered
Chosen Option : 3

Q.8 Improve the underlined part of the sentence. Choose 'No improvement' as an answer if the sentence is grammatically correct.

I'm recovering from the flu, and I still is feeling weak.

- Ans**
- 1. No improvement
 - 2. feels weakened
 - 3. felt weakest
 - 4. feel weak

Question Type : **MCQ**
Question ID : **264330135207**
Option 1 ID : **264330529758**
Option 2 ID : **264330529757**
Option 3 ID : **264330529755**
Option 4 ID : **264330529756**
Status : **Answered**
Chosen Option : **4**

Q.9 Select the most appropriate synonym of the given word.

Subtle

- Ans**
- 1. Corrupt
 - 2. Homely
 - 3. Exquisite
 - 4. Wrong

Question Type : **MCQ**
Question ID : **264330136655**
Option 1 ID : **264330535340**
Option 2 ID : **264330535339**
Option 3 ID : **264330535341**
Option 4 ID : **264330535342**
Status : **Answered**
Chosen Option : **3**

Q.10 Improve the underlined part of the sentence. Choose 'No improvement' as an answer if the sentence is grammatically correct.

The cat sits in the window and staring at the squirrel.

- Ans**
- 1. No improvement
 - 2. stares at
 - 3. stare on
 - 4. stared at

Question Type : **MCQ**
Question ID : **264330136773**
Option 1 ID : **264330535798**
Option 2 ID : **264330535796**
Option 3 ID : **264330535795**
Option 4 ID : **264330535797**
Status : **Answered**
Chosen Option : **2**

Q.11 Select the most appropriate word for the given group of words.

A long wandering or voyage usually marked by many changes of fortune

- Ans
- 1. Odyssey
 - 2. Ode
 - 3. Pilgrimage
 - 4. Trip

Question Type : MCQ
Question ID : 264330136654
Option 1 ID : 264330535335
Option 2 ID : 264330535337
Option 3 ID : 264330535338
Option 4 ID : 264330535336
Status : Answered
Chosen Option : 1

Q.12 Select the most appropriate option to fill in the blank.
Fear evolved over millions of years to protect us from _____.

- Ans
- 1. birth
 - 2. danger
 - 3. confidence
 - 4. courage

Question Type : MCQ
Question ID : 264330134448
Option 1 ID : 264330526765
Option 2 ID : 264330526763
Option 3 ID : 264330526766
Option 4 ID : 264330526764
Status : Answered
Chosen Option : 2

Q.13 Fill in the blank with the most appropriate option.

The plan began to _____ once we all met to discuss it.

- Ans
- 1. jail
 - 2. gel
 - 3. jell
 - 4. gale

Question Type : MCQ
Question ID : 264330136664
Option 1 ID : 264330535376
Option 2 ID : 264330535375
Option 3 ID : 264330535377
Option 4 ID : 264330535378
Status : Not Answered
Chosen Option : --

Q.14 Select the most appropriate antonym of the given word.

Calm

- Ans
- 1. Harmonious
 - 2. Frenzy
 - 3. Placid
 - 4. Low-key

Question Type : MCQ
Question ID : 264330136709
Option 1 ID : 264330535547
Option 2 ID : 264330535550
Option 3 ID : 264330535549
Option 4 ID : 264330535548
Status : Answered
Chosen Option : 2

Q.15 The statement below has been given with bracketed text. Select the option with correct idiom for the bracketed text.

Although Shagun was competently doing the project on her own, Pranav couldn't stop himself from (giving her unnecessary advice).

- Ans
- 1. being a backseat driver
 - 2. devil's advocate
 - 3. a bitter pill to swallow
 - 4. cutting the mustard

Question Type : MCQ
Question ID : 264330136660
Option 1 ID : 264330535360
Option 2 ID : 264330535362
Option 3 ID : 264330535359
Option 4 ID : 264330535361
Status : Not Answered
Chosen Option : --

Q.16 Select the most appropriate option to substitute the bracketed segment in the given sentence. If there is no need to substitute it, select 'no substitution required'.

(The transit of the Planet of Love happen in pairs), eight years apart every century.

- Ans
- 1. The transits of the Planet of Love happen in pairs
 - 2. No substitution required
 - 3. The transits of the Planet of Love happens at pairs
 - 4. The transit of Planet of Love happen in pairs

Question Type : MCQ
Question ID : 264330136670
Option 1 ID : 264330535401
Option 2 ID : 264330535402
Option 3 ID : 264330535399
Option 4 ID : 264330535400
Status : Answered
Chosen Option : 2

Q.17 Find the part of the given sentence that has an error in it. If there is no error, choose 'No error'.

I am not going to help you of this science project.

- Ans
- 1. help you of
 - 2. I am not going to
 - 3. this science project.
 - 4. No error

Question Type : MCQ
Question ID : 264330135256
Option 1 ID : 264330529944
Option 2 ID : 264330529943
Option 3 ID : 264330529945
Option 4 ID : 264330529946
Status : Answered
Chosen Option : 1

Q.18 Choose the word that means the same as the given word.
Consensus

- Ans
- 1. Census
 - 2. Censure
 - 3. Puck
 - 4. Agreement

Question Type : MCQ
Question ID : 264330134467
Option 1 ID : 264330526837
Option 2 ID : 264330526838
Option 3 ID : 264330526836
Option 4 ID : 264330526835
Status : Answered
Chosen Option : 4

Q.19 Fill in the blank with the most appropriate option.

I watched him with the excitement of _____ him to do anything at any time.

- Ans
- 1. lacking
 - 2. excepting
 - 3. expecting
 - 4. accepting

Question Type : MCQ
Question ID : 264330136645
Option 1 ID : 264330535306
Option 2 ID : 264330535305
Option 3 ID : 264330535303
Option 4 ID : 264330535304
Status : Answered
Chosen Option : 3

Q.20 Find the part of the given sentence that has an error in it. If there is no error, choose 'No error'.
Humans have rapidly changing the balance of gases in the atmosphere.

- Ans**
- 1. Humans have rapidly
 - 2. changing the balance of
 - 3. gases in the atmosphere.
 - 4. No error

Question Type : **MCQ**
Question ID : **264330136770**
Option 1 ID : **264330535783**
Option 2 ID : **264330535784**
Option 3 ID : **264330535785**
Option 4 ID : **264330535786**
Status : **Answered**
Chosen Option : 1

Comprehension:

In the following passage some words have been deleted. Fill in the blanks with the help of the alternatives given. Select the most appropriate option for each number.

I was surprised— (1) _____ at the news that my father spared me any thought, and second at my brother's compliment. (2) _____ it was backhanded. Dhri (3) _____ commented on my looks; nor did he encourage me to comment on his. Such useless (4) _____, he believed, made people vain. Was this another (5) _____ of change?

SubQuestion No : 21

Q.21 Select the most appropriate option to fill in the blank No. 1.

- Ans**
- 1. earlier
 - 2. first
 - 3. in the beginning
 - 4. second

Question Type : **MCQ**
Question ID : **264330136700**
Option 1 ID : **264330535513**
Option 2 ID : **264330535512**
Option 3 ID : **264330535514**
Option 4 ID : **264330535511**
Status : **Answered**
Chosen Option : 2

Comprehension:

In the following passage some words have been deleted. Fill in the blanks with the help of the alternatives given. Select the most appropriate option for each number.

I was surprised— (1) _____ at the news that my father spared me any thought, and second at my brother's compliment. (2) _____ it was backhanded. Dhri (3) _____ commented on my looks; nor did he encourage me to comment on his. Such useless (4) _____, he believed, made people vain. Was this another (5) _____ of change?

SubQuestion No : 22

Q.22 Select the most appropriate option to fill in the blank No. 2.

- Ans
- 1. afterwards
 - 2. all
 - 3. through
 - 4. though

Question Type : MCQ
Question ID : 264330136701
Option 1 ID : 264330535515
Option 2 ID : 264330535517
Option 3 ID : 264330535516
Option 4 ID : 264330535518
Status : Answered
Chosen Option : 4

Comprehension:

In the following passage some words have been deleted. Fill in the blanks with the help of the alternatives given. Select the most appropriate option for each number.

I was surprised— (1) _____ at the news that my father spared me any thought, and second at my brother's compliment. (2) _____ it was backhanded. Dhri (3) _____ commented on my looks; nor did he encourage me to comment on his. Such useless (4) _____, he believed, made people vain. Was this another (5) _____ of change?

SubQuestion No : 23

Q.23 Select the most appropriate option to fill in the blank No. 3.

- Ans
- 1. always
 - 2. never
 - 3. forever
 - 4. ever

Question Type : MCQ
Question ID : 264330136702
Option 1 ID : 264330535521
Option 2 ID : 264330535519
Option 3 ID : 264330535522
Option 4 ID : 264330535520
Status : Answered
Chosen Option : 2

Comprehension:

In the following passage some words have been deleted. Fill in the blanks with the help of the alternatives given. Select the most appropriate option for each number.

I was surprised— (1) _____ at the news that my father spared me any thought, and second at my brother's compliment. (2) _____ it was backhanded. Dhri (3) _____ commented on my looks; nor did he encourage me to comment on his. Such useless (4) _____, he believed, made people vain. Was this another (5) _____ of change?

SubQuestion No : 24

Q.24 Select the most appropriate option to fill in the blank No. 4.

- Ans**
- 1. ode
 - 2. disclosure
 - 3. babble
 - 4. talk

Question Type : **MCQ**
Question ID : **264330136703**
Option 1 ID : **264330535524**
Option 2 ID : **264330535523**
Option 3 ID : **264330535526**
Option 4 ID : **264330535525**
Status : **Answered**
Chosen Option : 4

Comprehension:

In the following passage some words have been deleted. Fill in the blanks with the help of the alternatives given. Select the most appropriate option for each number.

I was surprised— (1) _____ at the news that my father spared me any thought, and second at my brother's compliment. (2) _____ it was backhanded. Dhri (3) _____ commented on my looks; nor did he encourage me to comment on his. Such useless (4) _____, he believed, made people vain. Was this another (5) _____ of change?

SubQuestion No : 25

Q.25 Select the most appropriate option to fill in the blank No. 5.

- Ans**
- 1. sign
 - 2. signature
 - 3. light
 - 4. symbolic

Question Type : **MCQ**
Question ID : **264330136704**
Option 1 ID : **264330535528**
Option 2 ID : **264330535527**
Option 3 ID : **264330535530**
Option 4 ID : **264330535529**
Status : **Answered**
Chosen Option : 1