



SSC MTS **SHIFT – 1 (17-05-2023)**

- ★ **Latest Govt Job updates**
- ★ **Private Job updates**
- ★ **Free Mock tests available**

Visit - teachingninja.in

Multi Tasking Non Technical Staff and Havaladar CBIC and CBN Examination 2022

Roll Number	
Candidate Name	
Venue Name	
Exam Date	17/05/2023
Exam Time	9:00 AM - 10:30 AM
Subject	MTS Non Tech Havaladar CBIC and CBN Examination 2022

Section : Numerical and Mathematical Ability

Q.1 A sum of Rs. 120 is divided among p, q and r in such a way that p gets Rs. 9 more than q and q gets Rs. 6 more than r. What is the ratio of shares of p, q and r respectively?

- Ans
- 1. 18 : 15 : 13
 - 2. 15 : 12 : 10
 - 3. 16 : 13 : 11
 - 4. 11 : 8 : 10

Question Type : MCQ

Question ID : 264330137140

Option 1 ID : 264330537204

Option 2 ID : 264330537203

Option 3 ID : 264330537206

Option 4 ID : 264330537205

Status : Answered

Chosen Option : 3

Q.2 If $2A = 3B = 7C$, then what is the value of A : B : C?

- Ans
- 1. 3 : 2 : 1
 - 2. 21 : 14 : 6
 - 3. 21 : 7 : 6
 - 4. 14 : 18 : 5

Question Type : MCQ

Question ID : 264330137139

Option 1 ID : 264330537199

Option 2 ID : 264330537200

Option 3 ID : 264330537201

Option 4 ID : 264330537202

Status : Answered

Chosen Option : 2

Q.3 A solid cylinder having radius of base as 28 cm and height as 24 cm is bisected from its height to get two identical cylinders. What will be the percentage increase in the total surface area?

- Ans
- 1. 61.72 percent
 - 2. 41.92 percent
 - 3. 53.85 percent
 - 4. 48.64 percent

Question Type : **MCQ**
Question ID : **264330137678**
Option 1 ID : **264330539321**
Option 2 ID : **264330539319**
Option 3 ID : **264330539322**
Option 4 ID : **264330539320**
Status : **Answered**
Chosen Option : **3**

Q.4 56 persons can repair a bridge in 20 days. If 14 more people join them, then how many days bridge can be repaired?

- Ans
- 1. 18 days
 - 2. 12 days
 - 3. 16 days
 - 4. 14 days

Question Type : **MCQ**
Question ID : **264330133770**
Option 1 ID : **264330524106**
Option 2 ID : **264330524104**
Option 3 ID : **264330524105**
Option 4 ID : **264330524103**
Status : **Answered**
Chosen Option : **3**

Q.5 A shopkeeper allows 20 percent discount on the marked price of an article and he suffers a loss of 12 percent. If the article is sold at marked price, then what will be the profit percentage?

- Ans
- 1. 10 percent
 - 2. 12.5 percent
 - 3. 9.69 percent
 - 4. 8.33 percent

Question Type : **MCQ**
Question ID : **264330137143**
Option 1 ID : **264330537216**
Option 2 ID : **264330537218**
Option 3 ID : **264330537215**
Option 4 ID : **264330537217**
Status : **Answered**
Chosen Option : **1**

Q.6 A sum of Rs. 14500 will become Rs. 16675 in 36 months at some rate of simple interest. What is the rate of interest per annum?

- Ans**
- 1. 6% per annum
 - 2. 5% per annum
 - 3. 4% per annum
 - 4. 7% per annum

Question Type : **MCQ**
Question ID : **264330134091**
Option 1 ID : **264330525389**
Option 2 ID : **264330525388**
Option 3 ID : **264330525387**
Option 4 ID : **264330525390**
Status : **Answered**
Chosen Option : **2**

Q.7 At what rate of compound interest (compounding annually) per annum will a sum of Rs.250000 becomes Rs.275625 in 2 years?

- Ans**
- 1. 8% per annum
 - 2. 3% per annum
 - 3. 10% per annum
 - 4. 5% per annum

Question Type : **MCQ**
Question ID : **264330133638**
Option 1 ID : **264330523576**
Option 2 ID : **264330523578**
Option 3 ID : **264330523575**
Option 4 ID : **264330523577**
Status : **Answered**
Chosen Option : **4**

Q.8 A man starts from a place A and reaches the place B in 50 hours. He travels $\frac{1}{4}$ distance at the speed of 5 km/hr and the remaining distance at the speed of 15 km/hr. What is the distance between A and B?

- Ans**
- 1. 525 km
 - 2. 500 km
 - 3. 375 km
 - 4. 425 km

Question Type : **MCQ**
Question ID : **264330137132**
Option 1 ID : **264330537171**
Option 2 ID : **264330537173**
Option 3 ID : **264330537174**
Option 4 ID : **264330537172**
Status : **Answered**
Chosen Option : **2**

Q.9 18 men can complete a work in 50 days. If 25 men are employed, then in how many days the work will be completed?

- Ans**
- 1. 25 days
 - 2. 48 days
 - 3. 36 days
 - 4. 32 days

Question Type : **MCQ**
Question ID : **264330137665**
Option 1 ID : **264330539268**
Option 2 ID : **264330539270**
Option 3 ID : **264330539267**
Option 4 ID : **264330539269**
Status : **Answered**
Chosen Option : **3**

Q.10 If the LCM of two numbers 260 and 390 is 780, then find the HCF.

- Ans**
- 1. 140
 - 2. 133
 - 3. 130
 - 4. 120

Question Type : **MCQ**
Question ID : **264330138414**
Option 1 ID : **264330542266**
Option 2 ID : **264330542265**
Option 3 ID : **264330542264**
Option 4 ID : **264330542263**
Status : **Answered**
Chosen Option : **3**

Q.11 The height and curved surface area of the cylinder are 15 cm and 330 cm^2 . Find the diameter of the cylinder.

- Ans**
- 1. 2 cm
 - 2. 5 cm
 - 3. 7 cm
 - 4. 6 cm

Question Type : **MCQ**
Question ID : **264330133775**
Option 1 ID : **264330524126**
Option 2 ID : **264330524124**
Option 3 ID : **264330524125**
Option 4 ID : **264330524123**
Status : **Answered**
Chosen Option : **3**

Q.12 A shopkeeper sells 105 m of cloth for Rs. 12600 at the profit of Rs. 20 per meter of cloth. What is the cost price of 20 m cloth?

- Ans
- 1. Rs.4000
 - 2. Rs. 2000
 - 3. Rs. 1000
 - 4. Rs. 3000

Question Type : MCQ
Question ID : 264330138042
Option 1 ID : 264330540775
Option 2 ID : 264330540777
Option 3 ID : 264330540778
Option 4 ID : 264330540776
Status : Answered
Chosen Option : 2

Q.13 What is the value of $44 \div 11 \times 4 + 5 \times 8 \div 4 - 7 \times 36 \div 14 + 7 \times 4$?

- Ans
- 1. 33
 - 2. 24
 - 3. 28
 - 4. 36

Question Type : MCQ
Question ID : 264330139013
Option 1 ID : 264330544660
Option 2 ID : 264330544659
Option 3 ID : 264330544661
Option 4 ID : 264330544662
Status : Answered
Chosen Option : 4

Q.14 The length, breadth, height of a room are 6 m 40 cm, 4 m 80 cm and 3 m 20 cm respectively. Find the longest tape which can measure the dimensions of the room exactly.

- Ans
- 1. 1 m 80 cm
 - 2. 1 m 20 cm
 - 3. 1 m 60 cm
 - 4. 1 m 40 cm

Question Type : MCQ
Question ID : 264330137147
Option 1 ID : 264330537232
Option 2 ID : 264330537234
Option 3 ID : 264330537231
Option 4 ID : 264330537233
Status : Answered
Chosen Option : 3

Q.15 Average of 11 numbers is 8. If every number is tripled, then what will be the new average of the numbers?

- Ans
- 1. 8
 - 2. 24
 - 3. 16
 - 4. 32

Question Type : **MCQ**
Question ID : **264330137133**
Option 1 ID : **264330537176**
Option 2 ID : **264330537177**
Option 3 ID : **264330537175**
Option 4 ID : **264330537178**
Status : **Answered**
Chosen Option : 2

Q.16 Kartik takes 4 hours to travel from place X to place Y at the speed of 80 km/hr. He takes 1 hour to travel from place Y to place Z with 80% increased speed. What is the average speed from Place X to Z for the complete Journey?

- Ans
- 1. 82.6 km/hr
 - 2. 90.8 km/hr
 - 3. 92.8 km/hr
 - 4. 88.6 km/hr

Question Type : **MCQ**
Question ID : **264330141032**
Option 1 ID : **264330552478**
Option 2 ID : **264330552475**
Option 3 ID : **264330552476**
Option 4 ID : **264330552477**
Status : **Answered**
Chosen Option : 3



Q.17 The table given below shows the number of bikes of 5 different types sold by two companies.

Bikes	Company	
	C1	C2
A	50	80
B	30	40
C	70	90
D	80	110
E	100	140

Which of the following statement is correct?

I. Ratio of number of bike A sold by C1 to the number of bike D sold by C2 is 5 : 11.

II. The average number of bikes A, B, D and E sold by C1 are 75.

Ans 1. Neither I nor II

2. Only I

3. Only II

4. Both I and II

Question Type : MCQ

Question ID : 264330139014

Option 1 ID : 264330544666

Option 2 ID : 264330544663

Option 3 ID : 264330544664

Option 4 ID : 264330544665

Status : Answered

Chosen Option : 2

Q.18 A person loses 20 percent on selling 80 pens for Rs. 40. What should be the selling price of 80 pens to earn a profit of 10 percent?

Ans 1. Rs. 80

2. Rs. 60

3. Rs. 55

4. Rs. 65

Question Type : MCQ

Question ID : 264330137138

Option 1 ID : 264330537197

Option 2 ID : 264330537195

Option 3 ID : 264330537196

Option 4 ID : 264330537198

Status : Answered

Chosen Option : 3

Q.19 A number is increased by 5% and then the increased number is decreased by 5%. What is net increase or decrease percent?

- Ans**
- 1. 0.25% decrease
 - 2. 0.75% increase
 - 3. 1% increase
 - 4. 0.50% decrease

Question Type : **MCQ**

Question ID : **264330133631**

Option 1 ID : **264330523549**

Option 2 ID : **264330523550**

Option 3 ID : **264330523547**

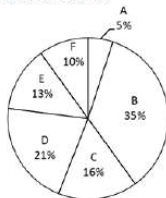
Option 4 ID : **264330523548**

Status : **Answered**

Chosen Option : 1

Q.20 The pie chart given below shows the number of students studying in six schools. Total number of students studying in all these six schools are 9000.

Number of students studying in a particular school is shown as a percentage of total number of student studying in all these six schools.



What is the difference between the number of students studying in school A and B together and school D and F together?

- Ans**
- 1. 790
 - 2. 810
 - 3. 770
 - 4. 840

Question Type : **MCQ**

Question ID : **264330137151**

Option 1 ID : **264330537247**

Option 2 ID : **264330537248**

Option 3 ID : **264330537250**

Option 4 ID : **264330537249**

Status : **Answered**

Chosen Option : 2

Section : Reasoning Ability and Problem Solving

Q.1 Seven persons Anil, Kamal, Ram, Sanjay, Aakash, Vivek and Rahul are sitting around a circular table facing opposite to the centre (not necessarily in the same order). Vivek is the immediate neighbour of both Kamal and Rahul. Kamal is second to the left of Aakash. Anil is the immediate neighbour of both Aakash and Sanjay. Who is second to the right of Sanjay?

- Ans**
- 1. Vivek
 - 2. Anil
 - 3. Aakash
 - 4. Kamal

Question Type : **MCQ**
Question ID : **264330137095**
Option 1 ID : **264330537026**
Option 2 ID : **264330537024**
Option 3 ID : **264330537025**
Option 4 ID : **264330537023**
Status : **Answered**
Chosen Option : **1**

Q.2 In a certain code language, 'WALL' is written as '24'. How will 'FLOOR' be written in that language?

- Ans**
- 1. 43
 - 2. 33
 - 3. 66
 - 4. 23

Question Type : **MCQ**
Question ID : **264330133699**
Option 1 ID : **264330523819**
Option 2 ID : **264330523821**
Option 3 ID : **264330523822**
Option 4 ID : **264330523820**
Status : **Answered**
Chosen Option : **2**



Q.3 In the following question below are given some statements followed by some conclusions based on those statements. Taking the given statements to be true even if they seem to be at variance from commonly known facts. Read all the conclusions and then decide which of the given conclusion logically follows the given statements.

Statements:

I. No N is A.

II. All A are T.

Conclusions:

I. Some T are A.

II. Some N are T.

III. No A is N.

- Ans
- 1. Both conclusions I and II follows
 - 2. All conclusion follows
 - 3. Both conclusions I and III follows
 - 4. Both conclusions II and III follows

Question Type : MCQ
Question ID : 264330137098
Option 1 ID : 264330537035
Option 2 ID : 264330537038
Option 3 ID : 264330537037
Option 4 ID : 264330537036
Status : Answered
Chosen Option : 3

Q.4 In the following question below are given some statements followed by some conclusions based on those statements. Taking the given statements to be true even if they seem to be at variance from commonly known facts. Read all the conclusions and then decide which of the given conclusion logically follows the given statements.

Statements:

I. No chair is solid.

II. No table is solid.

Conclusion:

I. Some table are chair.

II. No solid is chair.

- Ans
- 1. Only conclusion II follows
 - 2. Neither conclusion follows
 - 3. Both conclusions I and II follows
 - 4. Only conclusion I follows

Question Type : MCQ
Question ID : 264330137097
Option 1 ID : 264330537032
Option 2 ID : 264330537034
Option 3 ID : 264330537033
Option 4 ID : 264330537031
Status : Answered
Chosen Option : 1

Q.5 A series is given with one term missing. Select the correct alternative from the given ones that will complete the series.

APCE, DSYA, GVUW, JYQS, ?

- Ans
- 1. BMMO
 - 2. NBMO
 - 3. MBMO
 - 4. NBNO

Question Type : MCQ

Question ID : 264330137086

Option 1 ID : 264330536988

Option 2 ID : 264330536989

Option 3 ID : 264330536987

Option 4 ID : 264330536990

Status : Answered

Chosen Option : 3

Q.6 After interchanging the given two signs and two numbers, what will be the value of the given equation?

+ and -, 7 and 9 ; $8 \times 7 + 9 + 1 - 5$

- Ans
- 1. 70
 - 2. 60
 - 3. 40
 - 4. 10

Question Type : MCQ

Question ID : 264330137103

Option 1 ID : 264330537056

Option 2 ID : 264330537058

Option 3 ID : 264330537057

Option 4 ID : 264330537055

Status : Answered

Chosen Option : 3

Q.7 In the following question, select the missing number of the given series.

10, 4, 3, 3.5, 6, ?

- Ans
- 1. 9
 - 2. 14
 - 3. 10
 - 4. 12

Question Type : MCQ

Question ID : 264330137100

Option 1 ID : 264330537046

Option 2 ID : 264330537044

Option 3 ID : 264330537043

Option 4 ID : 264330537045

Status : Answered

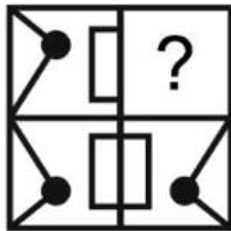
Chosen Option : 3

Q.8 Marks of five girls Mansi, Kajal, Reetu, Tina and Riya are compared. Marks of Riya are less than Mansi but more than Tina. Marks of Reetu are less than Tina, Riya and Mansi. Marks of Kajal are less than Reetu. Marks of how many girls are less than the marks of Riya?

- Ans
- 1. 2
 - 2. 1
 - 3. 0
 - 4. 3

Question Type : **MCQ**
Question ID : **264330137096**
Option 1 ID : **264330537028**
Option 2 ID : **264330537027**
Option 3 ID : **264330537030**
Option 4 ID : **264330537029**
Status : **Answered**
Chosen Option : 4

Q.9 Which answer figure will complete the pattern in the question figure?



Ans

- 1.
- 2.
- 3.
- 4.

Question Type : **MCQ**
Question ID : **264330137107**
Option 1 ID : **264330537073**
Option 2 ID : **264330537072**
Option 3 ID : **264330537074**
Option 4 ID : **264330537071**
Status : **Answered**
Chosen Option : 3

Q.10 Which two signs should be interchanged to make the given equation correct?

$$44 \div 11 + 7 \times 3 - 19 = 2$$

- Ans
- 1. + and ÷
 - 2. - and +
 - 3. = and ÷
 - 4. - and =

Question Type : MCQ
Question ID : 264330133712
Option 1 ID : 264330523874
Option 2 ID : 264330523872
Option 3 ID : 264330523873
Option 4 ID : 264330523871
Status : Answered
Chosen Option : 2

Q.11 Words given on the left side of (::) are related with each other by some Logic/Rule/Relation. Select the missing word/word pair on the right side of (::) from the given alternatives based on the same Logic/Rule/Relation.

Vienna : Austria :: ?

- Ans
- 1. Thimphu : Bhutan
 - 2. Kenya : Nairobi
 - 3. Pakistan : Islamabad
 - 4. Russia : Moscow

Question Type : MCQ
Question ID : 264330137089
Option 1 ID : 264330537001
Option 2 ID : 264330537002
Option 3 ID : 264330537000
Option 4 ID : 264330536999
Status : Answered
Chosen Option : 1

Q.12 In a certain code language, 'ASKING' is coded as 'SAIKGN'. What is the code for 'DECIDE' in that code language?

- Ans
- 1. EDICED
 - 2. EDICDE
 - 3. EDCIDE
 - 4. EDIBED

Question Type : MCQ
Question ID : 264330137369
Option 1 ID : 264330538105
Option 2 ID : 264330538103
Option 3 ID : 264330538104
Option 4 ID : 264330538106
Status : Answered
Chosen Option : 1

Q.13 In a certain code language, 'FOREIGN' is written as 'EFGINOR'. How will 'NUCLEAR' be written in that language?

- Ans** 1. ACELNUR
 2. ACELRUN
 3. ACELNUR
 4. AECLNRU

Question Type : **MCQ**

Question ID : **264330137543**

Option 1 ID : **264330538779**

Option 2 ID : **264330538781**

Option 3 ID : **264330538782**

Option 4 ID : **264330538780**

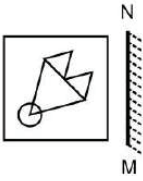
Status : **Answered**

Chosen Option : **1**



Teachingninja.in

Q.14 Select the correct mirror image of the given figure when the mirror MN is placed to the right side of the figure.



Ans

✓ 1.



✗ 2.



✗ 3.



✗ 4.



Teachingninja.in

Question Type : MCQ

Question ID : 264330138827

Option 1 ID : 264330543915

Option 2 ID : 264330543916

Option 3 ID : 264330543917

Option 4 ID : 264330543918

Status : Answered

Chosen Option : 1

Q.15 Words given on the left side of (::) are related with each other by some Logic/Rule/Relation. Select the missing word/word pair on the right side of (::) from the given alternatives based on the same Logic/Rule/Relation.

Hygrometer : Humidity :: Anemometer : ?

- Ans**
- 1. Wind
 - 2. Temperature
 - 3. Length
 - 4. Current

Question Type : **MCQ**
Question ID : **264330137088**
Option 1 ID : **264330536998**
Option 2 ID : **264330536996**
Option 3 ID : **264330536997**
Option 4 ID : **264330536995**
Status : **Answered**
Chosen Option : 1

Q.16 Select the option that is related to the third number in the same way as the second number is related to the first number.
7 : 56 :: 12 : ?

- Ans**
- 1. 165
 - 2. 156
 - 3. 256
 - 4. 110

Question Type : **MCQ**
Question ID : **264330133379**
Option 1 ID : **264330522547**
Option 2 ID : **264330522550**
Option 3 ID : **264330522549**
Option 4 ID : **264330522548**
Status : **Answered**
Chosen Option : 2

Q.17 Which of the following numbers will replace the question mark (?) in the given series?
25, 36, 49, 64, 81, 100, 121, 144, 169, ?

- Ans**
- 1. 342
 - 2. 204
 - 3. 256
 - 4. 196

Question Type : **MCQ**
Question ID : **264330133377**
Option 1 ID : **264330522542**
Option 2 ID : **264330522540**
Option 3 ID : **264330522541**
Option 4 ID : **264330522539**
Status : **Answered**
Chosen Option : 4

Q.18 Six teachers Anil, Kamal, Ram, Sanjay, Aakash and Vivek are sitting around a circular table facing towards the centre (not necessarily in the same order). Ram is third to the right of Vivek. Vivek is second to the right of Anil. Aakash is to the immediate right of Anil. Kamal is not the immediate neighbour of Vivek. Who is the immediate neighbor of Kamal and Vivek both?

- Ans**
- 1. Anil
 - 2. Ram
 - 3. Sanjay
 - 4. Aakash

Question Type : **MCQ**
Question ID : **264330137094**
Option 1 ID : **264330537020**
Option 2 ID : **264330537022**
Option 3 ID : **264330537021**
Option 4 ID : **264330537019**
Status : **Answered**
Chosen Option : **3**



Teachingninja.in

Q.19 Select the option figure in which the given figure (X) is embedded as its part (rotation is NOT allowed).



X

Ans

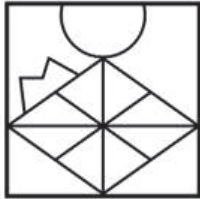
✓ 1.



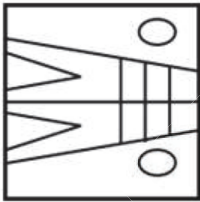
✗ 2.



✗ 3.



✗ 4.



Teachingninja.in

Question Type : MCQ

Question ID : 264330138826

Option 1 ID : 264330543911

Option 2 ID : 264330543914

Option 3 ID : 264330543912

Option 4 ID : 264330543913

Status : Answered

Chosen Option : 1

Q.20 Select the option in which the numbers shares the same relationship in set as that shared by the numbers in the given set.
(NOTE: Operations should be performed on the whole numbers, without breaking down the numbers into its constituent digits. E.g.13 – Operations on 13 such as adding /subtracting /multiplying etc. to 13 can be performed. Breaking down 13 into 1 and 3 and then performing mathematical operations on 1 and 3 is not allowed)

(5, 50, 500)

(3, 30, 300)

- Ans**
- 1. (11, 110, 2200)
 - 2. (7, 70, 700)
 - 3. (14, 140, 1500)
 - 4. (12, 220, 440)

Question Type : **MCQ**
Question ID : **264330137102**
Option 1 ID : **264330537052**
Option 2 ID : **264330537051**
Option 3 ID : **264330537054**
Option 4 ID : **264330537053**
Status : **Answered**
Chosen Option : **2**

Section : General Awareness

Q.1 _____ is known as the cultivation of trees and shrubs.

- Ans**
- 1. Viticulture
 - 2. Aviculture
 - 3. Arboriculture
 - 4. Apiculture

Question Type : **MCQ**
Question ID : **264330137720**
Option 1 ID : **264330539489**
Option 2 ID : **264330539487**
Option 3 ID : **264330539488**
Option 4 ID : **264330539490**
Status : **Answered**
Chosen Option : **3**

Q.2 How many total medals were won by India at Tokyo Olympics 2020 (played in 2021)?

- Ans**
- 1. Five
 - 2. Seven
 - 3. Six
 - 4. Eight

Question Type : **MCQ**
Question ID : **264330133860**
Option 1 ID : **264330524463**
Option 2 ID : **264330524465**
Option 3 ID : **264330524464**
Option 4 ID : **264330524466**
Status : **Answered**
Chosen Option : **2**

Q.3 Festival of "Ugadi" is celebrated every year on the first day of the Hindu month _____ .

- Ans
- 1. Chaitra
 - 2. Asadha
 - 3. Jyaistha
 - 4. Kartika

Question Type : MCQ
Question ID : 264330138872
Option 1 ID : 264330544096
Option 2 ID : 264330544097
Option 3 ID : 264330544098
Option 4 ID : 264330544095
Status : Answered
Chosen Option : 1

Q.4 Union Government's "PAHAL Scheme" is related to _____.

- Ans
- 1. Girl Scholarship
 - 2. Medical Subsidy
 - 3. LPG Subsidy
 - 4. Bathroom Construction

Question Type : MCQ
Question ID : 264330137020
Option 1 ID : 264330536726
Option 2 ID : 264330536724
Option 3 ID : 264330536725
Option 4 ID : 264330536723
Status : Answered
Chosen Option : 3

Q.5 The technique of watering plants by making use of narrow tubes which deliver water directly at the base of the plant is called _____.

- Ans
- 1. sprinkler irrigation
 - 2. canal irrigation
 - 3. drip irrigation
 - 4. surface irrigation

Question Type : MCQ
Question ID : 264330133870
Option 1 ID : 264330524506
Option 2 ID : 264330524504
Option 3 ID : 264330524503
Option 4 ID : 264330524505
Status : Answered
Chosen Option : 2

Q.6 Water comes out of the leaves in the form of vapour by a process called _____.

- Ans
- 1. creepers
 - 2. transportation
 - 3. venation
 - 4. transpiration

Question Type : MCQ
Question ID : 264330137024
Option 1 ID : 264330536740
Option 2 ID : 264330536742
Option 3 ID : 264330536739
Option 4 ID : 264330536741
Status : Answered
Chosen Option : 4

Q.7 Motilal Nehru, C.R. Das gave up their legal practices during which Movement?

- Ans
- 1. Self-respect Movement
 - 2. Quit India Movement
 - 3. Non-Cooperation Movement
 - 4. Civil Disobedience Movement

Question Type : MCQ
Question ID : 264330138895
Option 1 ID : 264330544190
Option 2 ID : 264330544187
Option 3 ID : 264330544189
Option 4 ID : 264330544188
Status : Answered
Chosen Option : 3

Q.8 India shares its border with Afghanistan and Pakistan to the _____.

- Ans
- 1. north-east
 - 2. north-west
 - 3. south
 - 4. south-west

Question Type : MCQ
Question ID : 264330137981
Option 1 ID : 264330540532
Option 2 ID : 264330540531
Option 3 ID : 264330540534
Option 4 ID : 264330540533
Status : Answered
Chosen Option : 2

Q.9 V. Satyanarayana Sarma known as 'Satyam' is associated with which of the following dance forms?

- Ans
- 1. Bharatnatyam
 - 2. Kathakali
 - 3. Kuchipudi
 - 4. Mohiniyattam

Question Type : MCQ
Question ID : 264330137730
Option 1 ID : 264330539529
Option 2 ID : 264330539530
Option 3 ID : 264330539527
Option 4 ID : 264330539528
Status : Answered
Chosen Option : 2

Q.10 Rainfall is measured by an instrument called the _____.

- Ans
- 1. rain gauge
 - 2. rain catcher
 - 3. rain calculator
 - 4. precipitator

Question Type : MCQ
Question ID : 264330133871
Option 1 ID : 264330524508
Option 2 ID : 264330524507
Option 3 ID : 264330524509
Option 4 ID : 264330524510
Status : Answered
Chosen Option : 1

Q.11 Who was popularly known as the Melody Queen in India?

- Ans
- 1. Zarin S Sharma
 - 2. Lata Mangeshkar
 - 3. Shubha Mudgal
 - 4. Anuradha Paudwal

Question Type : MCQ
Question ID : 264330137017
Option 1 ID : 264330536714
Option 2 ID : 264330536713
Option 3 ID : 264330536712
Option 4 ID : 264330536711
Status : Answered
Chosen Option : 2

Q.12 Which force is responsible for deflecting winds towards the right and left in northern and southern Hemisphere respectively?

- Ans
- 1. Magnetic force
 - 2. Coriolis force
 - 3. Gravitational force
 - 4. Frictional force

Question Type : MCQ
Question ID : 264330137029
Option 1 ID : 264330536761
Option 2 ID : 264330536760
Option 3 ID : 264330536759
Option 4 ID : 264330536762
Status : Answered
Chosen Option : 2

Q.13 Durand Cup was founded in the year _____ in Shimla.

- Ans
- 1. 1858
 - 2. 1888
 - 3. 1878
 - 4. 1868

Question Type : MCQ
Question ID : 264330137014
Option 1 ID : 264330536699
Option 2 ID : 264330536702
Option 3 ID : 264330536701
Option 4 ID : 264330536700
Status : Answered
Chosen Option : 3

Q.14 Which act has been amended by the Supreme Court of India to provide equal rights to daughters in their ancestral property?

- Ans
- 1. The Contempt of Courts Act
 - 2. Hindu Succession Act
 - 3. Hindu Marriage Act
 - 4. Sarda Act

Question Type : MCQ
Question ID : 264330134057
Option 1 ID : 264330525252
Option 2 ID : 264330525253
Option 3 ID : 264330525254
Option 4 ID : 264330525251
Status : Answered
Chosen Option : 2

Q.15 Engineer's Day in India is celebrated in the memory of _____.

- Ans
- 1. Kalpana Chawla
 - 2. Dr. M. Visvesvaraya
 - 3. Satish Dhawan
 - 4. A.P.J Abdul Kalam

Question Type : MCQ
Question ID : 264330137019
Option 1 ID : 264330536721
Option 2 ID : 264330536722
Option 3 ID : 264330536719
Option 4 ID : 264330536720
Status : Answered
Chosen Option : 2

Q.16 According to 2011 Census, among the following states which has the highest population density?

- Ans
- 1. Maharashtra
 - 2. Bihar
 - 3. Uttar Pradesh
 - 4. Tamil Nadu

Question Type : MCQ
Question ID : 264330137047
Option 1 ID : 264330536832
Option 2 ID : 264330536831
Option 3 ID : 264330536834
Option 4 ID : 264330536833
Status : Answered
Chosen Option : 2

Q.17 Founder of the Rashtrakuta Dynasty was _____.

- Ans
- 1. Govinddurga
 - 2. Krishnadurga
 - 3. Dantidurga
 - 4. Amoghavarsha

Question Type : MCQ
Question ID : 264330133878
Option 1 ID : 264330524537
Option 2 ID : 264330524538
Option 3 ID : 264330524536
Option 4 ID : 264330524535
Status : Answered
Chosen Option : 3

Q.18 National institute of Kathak dance is located in _____.

- Ans
- 1. Meerut
 - 2. Varanasi
 - 3. Lucknow
 - 4. New Delhi

Question Type : MCQ
Question ID : 264330137011
Option 1 ID : 264330536689
Option 2 ID : 264330536688
Option 3 ID : 264330536687
Option 4 ID : 264330536690
Status : Answered
Chosen Option : 3

Q.19 The Deccan Riots of 1875 took place in _____ .

- Ans
- 1. Himachal Pradesh
 - 2. Bihar
 - 3. West Bengal
 - 4. Maharashtra

Question Type : MCQ
Question ID : 264330134071
Option 1 ID : 264330525307
Option 2 ID : 264330525309
Option 3 ID : 264330525310
Option 4 ID : 264330525308
Status : Answered
Chosen Option : 3

Q.20 As announced in the Budget 2022, the corporate surcharge was reduced from 12% to _____.

- Ans
- 1. 10%
 - 2. 7%
 - 3. 9%
 - 4. 5%

Question Type : MCQ
Question ID : 264330137735
Option 1 ID : 264330539547
Option 2 ID : 264330539549
Option 3 ID : 264330539550
Option 4 ID : 264330539548
Status : Answered
Chosen Option : 1

Q.21 "One Life is Not Enough" is written by which of the following authors?

- Ans
- 1. K. Natwar Singh
 - 2. Jhumpa Lahiri
 - 3. Faraz Ahmad
 - 4. Khushwant Singh

Question Type : MCQ
Question ID : 264330137728
Option 1 ID : 264330539519
Option 2 ID : 264330539522
Option 3 ID : 264330539521
Option 4 ID : 264330539520
Status : Answered
Chosen Option : 1

Q.22 Kalinga that was conquered by Ashoka is the ancient name of _____ .

- Ans
- 1. Coastal Orissa
 - 2. Coastal Karnataka
 - 3. Coastal Bengal
 - 4. Coastal Tamil Nadu

Question Type : MCQ
Question ID : 264330138892
Option 1 ID : 264330544176
Option 2 ID : 264330544177
Option 3 ID : 264330544175
Option 4 ID : 264330544178
Status : Answered
Chosen Option : 3

Q.23 The materials through which objects can be seen, but not clearly are known as _____ .

- Ans
- 1. conducting materials
 - 2. translucent materials
 - 3. transparent materials
 - 4. opaque materials

Question Type : MCQ
Question ID : 264330133872
Option 1 ID : 264330524514
Option 2 ID : 264330524512
Option 3 ID : 264330524511
Option 4 ID : 264330524513
Status : Answered
Chosen Option : 2

Q.24 "Gopuram" or temple entrance is a feature of which temple architecture?

- Ans
- 1. South Indian temple architecture
 - 2. Buddhist architecture
 - 3. Jain architecture
 - 4. North Indian temple architecture

Question Type : MCQ
Question ID : 264330134060
Option 1 ID : 264330525264
Option 2 ID : 264330525265
Option 3 ID : 264330525266
Option 4 ID : 264330525263
Status : Answered
Chosen Option : 1

Q.25 In which of the following articles, "Culture and Educational Rights" are mentioned?

- Ans
- 1. Article 25 – 28
 - 2. Article 23 – 24
 - 3. Article 19 – 22
 - 4. Article 29 – 30

Question Type : MCQ
Question ID : 264330137023
Option 1 ID : 264330536736
Option 2 ID : 264330536737
Option 3 ID : 264330536738
Option 4 ID : 264330536735
Status : Answered
Chosen Option : 4

Section : English Language and Comprehension

Q.1 Choose the word that can substitute the given group of words.
To renounce a throne

- Ans
- 1. Avow
 - 2. Abort
 - 3. Assert
 - 4. Abdicate

Question Type : MCQ
Question ID : 264330134334
Option 1 ID : 264330526323
Option 2 ID : 264330526324
Option 3 ID : 264330526325
Option 4 ID : 264330526326
Status : Answered
Chosen Option : 4

Q.2 A sentence has been given with a blank to be filled with an appropriate option. Choose the correct alternative.

I have _____ to understand your problem.

- Ans**
- 1. beginning
 - 2. began
 - 3. begin
 - 4. begun

Question Type : **MCQ**
Question ID : **264330135288**
Option 1 ID : **264330530067**
Option 2 ID : **264330530070**
Option 3 ID : **264330530068**
Option 4 ID : **264330530069**
Status : **Answered**
Chosen Option : **4**

Q.3 Select the most appropriate option to fill in the blank.

I am just saying that maybe you are letting emotion _____ your better judgment right now.

- Ans**
- 1. clamp
 - 2. cloud
 - 3. clog
 - 4. finger

Question Type : **MCQ**
Question ID : **264330135307**
Option 1 ID : **264330530142**
Option 2 ID : **264330530140**
Option 3 ID : **264330530141**
Option 4 ID : **264330530139**
Status : **Answered**
Chosen Option : **3**

Q.4 Select the appropriate antonym for the underlined word.

Many children still do not have access to quality education that will harness their inherent abilities and talent.

- Ans**
- 1. direct
 - 2. exploit
 - 3. handle
 - 4. misapply

Question Type : **MCQ**
Question ID : **264330135301**
Option 1 ID : **264330530118**
Option 2 ID : **264330530115**
Option 3 ID : **264330530116**
Option 4 ID : **264330530117**
Status : **Answered**
Chosen Option : **2**

Q.5 Choose the word that can substitute the given group of words.

A place where fruit trees are grown

- Ans
- 1. Orchard
 - 2. Dyke
 - 3. Botanical
 - 4. Cemetery

Question Type : MCQ
Question ID : 264330135297
Option 1 ID : 264330530099
Option 2 ID : 264330530102
Option 3 ID : 264330530100
Option 4 ID : 264330530101
Status : Answered
Chosen Option : 1

Q.6 Improve the underlined part of the sentence. Choose 'No improvement' as an answer if the sentence is grammatically correct.

The rise in temperature disturbs the rain cycle.

- Ans
- 1. was disturbed the rain order
 - 2. disturb the rainy cycle
 - 3. No improvement
 - 4. disturbing the rain cycle

Question Type : MCQ
Question ID : 264330135313
Option 1 ID : 264330530165
Option 2 ID : 264330530164
Option 3 ID : 264330530166
Option 4 ID : 264330530163
Status : Answered
Chosen Option : 3

Q.7 In the following question, out of the given four alternatives, select the alternative which best expresses the meaning of the Idiom/Phrase.

To fly into a rage

- Ans
- 1. To harm oneself
 - 2. To get very angry
 - 3. To make inappropriate gestures
 - 4. To be very excited

Question Type : MCQ
Question ID : 264330135303
Option 1 ID : 264330530126
Option 2 ID : 264330530125
Option 3 ID : 264330530123
Option 4 ID : 264330530124
Status : Answered
Chosen Option : 2

Q.8 Select the most appropriate option to substitute the bracketed segment in the given sentence. If there is no need to substitute it, select 'no substitution required'.

Some of them were nearly (as hard as ligament, and many an inch in length).

- Ans**
- 1. as hard as ligaments, and many were an inch long
 - 2. No substitution required
 - 3. hard as ligament, and many an inch at length
 - 4. as hard as a ligament, and many an inches in length

Question Type : **MCQ**
Question ID : **264330136513**
Option 1 ID : **264330534796**
Option 2 ID : **264330534798**
Option 3 ID : **264330534797**
Option 4 ID : **264330534795**
Status : **Answered**
Chosen Option : **4**

Q.9 Select the most appropriate option to fill in the blank.

His _____ of smoking in restaurants created a lot of issues in New York.

- Ans**
- 1. hatred
 - 2. reputation
 - 3. orbit
 - 4. habit

Question Type : **MCQ**
Question ID : **264330136845**
Option 1 ID : **264330536072**
Option 2 ID : **264330536071**
Option 3 ID : **264330536074**
Option 4 ID : **264330536073**
Status : **Answered**
Chosen Option : **4**

Q.10 Select the appropriate synonym for the underlined word.

There are actually many different versions of "Cinderella."

- Ans**
- 1. Problems
 - 2. Features
 - 3. Variations
 - 4. Signals

Question Type : **MCQ**
Question ID : **264330135298**
Option 1 ID : **264330530106**
Option 2 ID : **264330530104**
Option 3 ID : **264330530103**
Option 4 ID : **264330530105**
Status : **Answered**
Chosen Option : **3**

Q.11 A sentence has been given with a blank to be filled with an appropriate option. Choose the correct alternative.
The small amount of fusion fuel _____ to be heated to huge temperatures.

- Ans
- 1. needing
 - 2. need
 - 3. needs
 - 4. needful

Question Type : MCQ
Question ID : 264330136880
Option 1 ID : 264330536210
Option 2 ID : 264330536208
Option 3 ID : 264330536207
Option 4 ID : 264330536209
Status : Answered
Chosen Option : 3

Q.12 Identify the segment that contains a grammatical error. If there is no error, select 'No error'.

His struggles were becoming/ more and more frenzier,/ a wild look creeping into his blue eyes.

- Ans
- 1. His struggles were becoming
 - 2. more and more frenzier,
 - 3. No error
 - 4. a wild look creeping into his blue eyes.

Question Type : MCQ
Question ID : 264330136510
Option 1 ID : 264330534783
Option 2 ID : 264330534784
Option 3 ID : 264330534786
Option 4 ID : 264330534785
Status : Answered
Chosen Option : 2

Q.13 Improve the underlined part of the sentence. Choose 'No improvement' as an answer if the sentence is grammatically correct.
I have to work in the morning, but I is freer in the afternoon.

- Ans
- 1. is freed
 - 2. No improvement
 - 3. am frees
 - 4. am free

Question Type : MCQ
Question ID : 264330134531
Option 1 ID : 264330527083
Option 2 ID : 264330527086
Option 3 ID : 264330527084
Option 4 ID : 264330527085
Status : Answered
Chosen Option : 4

Q.14 Choose the word that is opposite in meaning to the given word.
Suspicion

- Ans
- 1. Niggle
 - 2. Tremor
 - 3. Conviction
 - 4. Incertitude

Question Type : MCQ
Question ID : 264330134546
Option 1 ID : 264330527141
Option 2 ID : 264330527142
Option 3 ID : 264330527140
Option 4 ID : 264330527139
Status : Answered
Chosen Option : 1

Q.15 Choose the incorrectly spelt word.

- Ans
- 1. Loss
 - 2. Losare
 - 3. Local
 - 4. Loose

Question Type : MCQ
Question ID : 264330135304
Option 1 ID : 264330530129
Option 2 ID : 264330530127
Option 3 ID : 264330530130
Option 4 ID : 264330530128
Status : Answered
Chosen Option : 2

Q.16 In the following question, out of the given four alternatives, select the alternative which best expresses the meaning of the Idiom/Phrase.
To button one's lips

- Ans
- 1. To rain heavily
 - 2. To advance in harmony
 - 3. To keep silence
 - 4. To kidnap somebody

Question Type : MCQ
Question ID : 264330134340
Option 1 ID : 264330526348
Option 2 ID : 264330526347
Option 3 ID : 264330526349
Option 4 ID : 264330526350
Status : Answered
Chosen Option : 3

Q.17 Choose the word that means the same as the given word.

Backstab

- Ans
- 1. Bleary
 - 2. Berate
 - 3. Betray
 - 4. Blare

Question Type : MCQ
Question ID : 264330136864
Option 1 ID : 264330536146
Option 2 ID : 264330536144
Option 3 ID : 264330536145
Option 4 ID : 264330536143
Status : Answered
Chosen Option : 3

Q.18 Find the part of the given sentence that has an error in it. If there is no error, choose 'No error'.

Largest farmers usually have more money, social power and local influence.

- Ans
- 1. Largest farmers usually
 - 2. No error
 - 3. have more money, social power
 - 4. and local influence.

Question Type : MCQ
Question ID : 264330135284
Option 1 ID : 264330530051
Option 2 ID : 264330530054
Option 3 ID : 264330530052
Option 4 ID : 264330530053
Status : Answered
Chosen Option : 1

Q.19 Choose the sentence with no spelling error.

- Ans
- 1. We can't blame a bad government budget.
 - 2. We can't blame a bad governmnet budget.
 - 3. We can't blame a bad government budget.
 - 4. We can't blamme a bad government buget.

Question Type : MCQ
Question ID : 264330136844
Option 1 ID : 264330536070
Option 2 ID : 264330536067
Option 3 ID : 264330536068
Option 4 ID : 264330536069
Status : Answered
Chosen Option : 3

Q.20 Find the part of the given sentence that has an error in it. If there is no error, choose 'No error'.

I want all the culprits to be punished immediate.

- Ans
- 1. the culprits to
 - 2. No error
 - 3. I want all
 - 4. be punished immediate.

Question Type : MCQ
Question ID : 264330134399
Option 1 ID : 264330526576
Option 2 ID : 264330526578
Option 3 ID : 264330526575
Option 4 ID : 264330526577
Status : Answered
Chosen Option : 4

Comprehension:

In the following passage some of the words have been deleted. Read the passage carefully and select the correct answer for the given blank out of the four alternatives.

An 'occupational disease' is any disease (1)_____ primarily by exposure at work (2)_____ a physical, organisational, chemical or biological risk (3)_____ or to a combination of these factors. Occupational diseases are (4)_____ those listed in national legislation as resulting from exposure to risk factors at (5)_____.

SubQuestion No : 21

Q.21 Select the most appropriate option to fill in blank number 1.

- Ans
- 1. abated
 - 2. caused
 - 3. posed
 - 4. flawed

Question Type : MCQ
Question ID : 264330134537
Option 1 ID : 264330527103
Option 2 ID : 264330527104
Option 3 ID : 264330527106
Option 4 ID : 264330527105
Status : Answered
Chosen Option : 2



Comprehension:

In the following passage some of the words have been deleted. Read the passage carefully and select the correct answer for the given blank out of the four alternatives.

An 'occupational disease' is any disease (1)_____ primarily by exposure at work (2)_____ a physical, organisational, chemical or biological risk (3)_____ or to a combination of these factors. Occupational diseases are (4)_____ those listed in national legislation as resulting from exposure to risk factors at (5)_____.

SubQuestion No : 22

Q.22 Select the most appropriate option to fill in blank number 2.

- Ans
- 1. in
 - 2. on
 - 3. of
 - 4. to

Question Type : MCQ

Question ID : 264330134538

Option 1 ID : 264330527107

Option 2 ID : 264330527110

Option 3 ID : 264330527108

Option 4 ID : 264330527109

Status : Answered

Chosen Option : 4

Comprehension:

In the following passage some of the words have been deleted. Read the passage carefully and select the correct answer for the given blank out of the four alternatives.

An 'occupational disease' is any disease (1)_____ primarily by exposure at work (2)_____ a physical, organisational, chemical or biological risk (3)_____ or to a combination of these factors. Occupational diseases are (4)_____ those listed in national legislation as resulting from exposure to risk factors at (5)_____.

SubQuestion No : 23

Q.23 Select the most appropriate option to fill in blank number 3.

- Ans
- 1. exposure
 - 2. part
 - 3. maker
 - 4. factor

Question Type : MCQ

Question ID : 264330134539

Option 1 ID : 264330527112

Option 2 ID : 264330527114

Option 3 ID : 264330527111

Option 4 ID : 264330527113

Status : Answered

Chosen Option : 4

Comprehension:

In the following passage some of the words have been deleted. Read the passage carefully and select the correct answer for the given blank out of the four alternatives.

An 'occupational disease' is any disease (1)_____ primarily by exposure at work (2)_____ a physical, organisational, chemical or biological risk (3)_____ or to a combination of these factors. Occupational diseases are (4)_____ those listed in national legislation as resulting from exposure to risk factors at (5)_____.

SubQuestion No : 24

Q.24 Select the most appropriate option to fill in blank number 4.

- Ans
- 1. radically
 - 2. oddly
 - 3. mostly
 - 4. manually

Question Type : MCQ

Question ID : 264330134540

Option 1 ID : 264330527116

Option 2 ID : 264330527117

Option 3 ID : 264330527118

Option 4 ID : 264330527115

Status : Answered

Chosen Option : 3

Comprehension:

In the following passage some of the words have been deleted. Read the passage carefully and select the correct answer for the given blank out of the four alternatives.

An 'occupational disease' is any disease (1)_____ primarily by exposure at work (2)_____ a physical, organisational, chemical or biological risk (3)_____ or to a combination of these factors. Occupational diseases are (4)_____ those listed in national legislation as resulting from exposure to risk factors at (5)_____.

SubQuestion No : 25

Q.25 Select the most appropriate option to fill in blank number 5.

- Ans
- 1. work
 - 2. bank
 - 3. office
 - 4. home

Question Type : MCQ

Question ID : 264330134541

Option 1 ID : 264330527121

Option 2 ID : 264330527119

Option 3 ID : 264330527122

Option 4 ID : 264330527120

Status : Answered

Chosen Option : 1