



SSC MTS **SHIFT – 2 (17-05-2023)**

- ★ **Latest Govt Job updates**
- ★ **Private Job updates**
- ★ **Free Mock tests available**

Visit - teachingninja.in

Multi Tasking Non Technical Staff and Havaladar CBIC and CBN Examination 2022

Roll Number	
Candidate Name	
Venue Name	
Exam Date	17/05/2023
Exam Time	12:00 PM - 2:00 PM
Subject	MTS Non Tech Havaladar CBIC and CBN Examination 2022

Section : Numerical and Mathematical Ability

Q.1 14 people can do work in 28 days. In how many days, can 8 people complete double the work?

- Ans
- 1. 55 days
 - 2. 98 days
 - 3. 80 days
 - 4. 32 days

Question Type : MCQ

Question ID : 264330135383

Option 1 ID : 264330530440

Option 2 ID : 264330530439

Option 3 ID : 264330530441

Option 4 ID : 264330530442

Status : Answered

Chosen Option : 2

Q.2 A solid hemisphere of radius 8 cm is melted into N identical cone whose radius is 4 cm and height is 2 cm. Then, what is the value of N?

- Ans
- 1. 26
 - 2. 10
 - 3. 32
 - 4. 25

Question Type : MCQ

Question ID : 264330135084

Option 1 ID : 264330529272

Option 2 ID : 264330529271

Option 3 ID : 264330529274

Option 4 ID : 264330529273

Status : Answered

Chosen Option : 3

Q.3 After allowing 15% discount, a dealer wishes to sell a motor for Rs.3570. What should be the marked price of the motor?

- Ans**
- 1. Rs.3900
 - 2. Rs.4000
 - 3. Rs.4200
 - 4. Rs.4800

Question Type : **MCQ**
Question ID : **264330133680**
Option 1 ID : **264330523746**
Option 2 ID : **264330523743**
Option 3 ID : **264330523744**
Option 4 ID : **264330523745**
Status : **Answered**
Chosen Option : **3**

Q.4 At what rate percent per annum will a sum of money triples in 20 years on simple interest?

- Ans**
- 1. 10% per annum
 - 2. 12% per annum
 - 3. 18% per annum
 - 4. 20% per annum

Question Type : **MCQ**
Question ID : **264330138358**
Option 1 ID : **264330542039**
Option 2 ID : **264330542041**
Option 3 ID : **264330542042**
Option 4 ID : **264330542040**
Status : **Answered**
Chosen Option : **1**

Q.5 Alloy X contains 70% copper and 30% zinc. Alloy Y contains 40% copper, 25% zinc and 35% aluminum. Alloy X and Y are mixed in the ratio of 1 : 3. What is the ratio of copper and zinc in the newly formed alloy?

- Ans**
- 1. 19 : 33
 - 2. 11 : 32
 - 3. 38 : 21
 - 4. 19 : 21

Question Type : **MCQ**
Question ID : **264330133682**
Option 1 ID : **264330523753**
Option 2 ID : **264330523752**
Option 3 ID : **264330523754**
Option 4 ID : **264330523751**
Status : **Answered**
Chosen Option : **3**

Q.6 Five bells commence tolling together and toll at intervals of 5, 10, 15, 20 and 25 seconds respectively. In 1 hour 20 minutes, how many times do they toll together?

- Ans**
- 1. 20 times
 - 2. 15 times
 - 3. 14 times
 - 4. 17 times

Question Type : **MCQ**
Question ID : **264330138436**
Option 1 ID : **264330542354**
Option 2 ID : **264330542353**
Option 3 ID : **264330542351**
Option 4 ID : **264330542352**
Status : **Answered**
Chosen Option : **4**

Q.7 The following table shows yearly production of scooters (in thousands) in different factories. In which year the total production of scooters of all factories was equal to the yearly average number of scooters produced during 2015-2019?

Factory	Year				
	2015	2016	2017	2018	2019
A	25	30	15	23	16
B	14	24	12	17	20
C	20	41	17	21	13
D	40	39	35	32	41
E	16	15	22	15	12
Total	115	149	101	108	102

- Ans**
- 1. 2015
 - 2. 2017
 - 3. 2016
 - 4. 2018

Question Type : **MCQ**
Question ID : **264330133688**
Option 1 ID : **264330523775**
Option 2 ID : **264330523777**
Option 3 ID : **264330523776**
Option 4 ID : **264330523778**
Status : **Answered**
Chosen Option : **1**

Q.8 Simple Interest received by a person in 12 years on a principal of Rs. 12000 is 120 percent of the principal. What is the annual rate of interest?

- Ans**
- 1. 20 percent
 - 2. 12 percent
 - 3. 10 percent
 - 4. 5 percent

Question Type : **MCQ**
Question ID : **264330137655**
Option 1 ID : **264330539229**
Option 2 ID : **264330539230**
Option 3 ID : **264330539228**
Option 4 ID : **264330539227**
Status : **Answered**
Chosen Option : **3**

Q.9 A alone can do a work in 16 days and B alone can do the same work in 12 days. If they worked together on it for 4 days and then A left. How long did B take to finish the remaining work?

- Ans**
- 1. 7 days
 - 2. 5 days
 - 3. 6 days
 - 4. 8 days

Question Type : **MCQ**
Question ID : **264330138715**
Option 1 ID : **264330543468**
Option 2 ID : **264330543467**
Option 3 ID : **264330543469**
Option 4 ID : **264330543470**
Status : **Answered**
Chosen Option : **2**

Q.10 What is the average of first five multiples of 11?

- Ans**
- 1. 11
 - 2. 55
 - 3. 33
 - 4. 22

Question Type : **MCQ**
Question ID : **264330133675**
Option 1 ID : **264330523723**
Option 2 ID : **264330523725**
Option 3 ID : **264330523726**
Option 4 ID : **264330523724**
Status : **Answered**
Chosen Option : **3**

Q.11 Walking at the speed of 5 kmph, a man covers a certain distance in 3 hours. Running at a speed of 15 kmph the man will cover the same distance in:

- Ans**
- 1. 2 hours
 - 2. 1 hour
 - 3. 30 minutes
 - 4. 1 hour 30 minutes

Question Type : **MCQ**
Question ID : **264330133685**
Option 1 ID : **264330523766**
Option 2 ID : **264330523764**
Option 3 ID : **264330523763**
Option 4 ID : **264330523765**
Status : **Answered**
Chosen Option : **2**

Q.12 Rakesh incurs 4% loss by selling a TV for Rs.39216. At what price should the TV be sold to earn 4% profit?

- Ans
- 1. Rs.48560
 - 2. Rs.42484
 - 3. Rs.45600
 - 4. Rs.49780

Question Type : MCQ
Question ID : 264330133679
Option 1 ID : 264330523740
Option 2 ID : 264330523741
Option 3 ID : 264330523739
Option 4 ID : 264330523742
Status : Answered
Chosen Option : 2

Q.13 Find the loss percentage if : Cost price = Rs 4500 and Selling price = Rs 3900

- Ans
- 1. 13.3%
 - 2. 14.5%
 - 3. 14%
 - 4. 13%

Question Type : MCQ
Question ID : 264330135093
Option 1 ID : 264330529308
Option 2 ID : 264330529310
Option 3 ID : 264330529309
Option 4 ID : 264330529307
Status : Answered
Chosen Option : 1

Q.14 If a number A is 40 percent less than another number B and B is 20 percent more than 100, then what is the value of A?

- Ans
- 1. 58
 - 2. 84
 - 3. 72
 - 4. 66

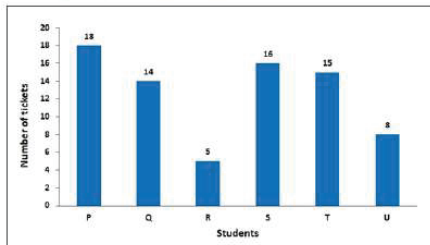
Question Type : MCQ
Question ID : 264330137650
Option 1 ID : 264330539209
Option 2 ID : 264330539208
Option 3 ID : 264330539207
Option 4 ID : 264330539210
Status : Answered
Chosen Option : 3

Q.15 The students in three classes are in a ratio of 3:7:8. If 6 students are increased in each class, the ratio changes to 11:23:26. Find the total number of students in the three classes before the increase.

- Ans
- 1. 162
 - 2. 112
 - 3. 90
 - 4. 144

Question Type : MCQ
Question ID : 264330135372
Option 1 ID : 264330530395
Option 2 ID : 264330530397
Option 3 ID : 264330530398
Option 4 ID : 264330530396
Status : Answered
Chosen Option : 1

Q.16 The following graph shows the number of tickets sold by 6 students P, Q, R, S, T and U during a fair. What percent of the total tickets were sold by Q, S and U?



- Ans
- 1. 40%
 - 2. 20%
 - 3. 30%
 - 4. 50%

Question Type : MCQ
Question ID : 264330133689
Option 1 ID : 264330523781
Option 2 ID : 264330523779
Option 3 ID : 264330523780
Option 4 ID : 264330523782
Status : Answered
Chosen Option : 4

Q.17 A cuboid is of dimensions 80 cm × 64 cm × 50 cm. How many small cubes with side 8 cm can be placed in the given cuboid?

- Ans
- 1. 480
 - 2. 700
 - 3. 1000
 - 4. 200

Question Type : MCQ
Question ID : 264330138720
Option 1 ID : 264330543490
Option 2 ID : 264330543489
Option 3 ID : 264330543487
Option 4 ID : 264330543488
Status : Answered
Chosen Option : 3

Q.18 If the diameter of a circle is 14 cm, find the area of the sector of the circle whose central angle measure 60 degree.

- Ans
- 1. 18.12 cm²
 - 2. 25.66 cm²
 - 3. 38.12 cm²
 - 4. 21.66 cm²

Question Type : MCQ
Question ID : 264330135387
Option 1 ID : 264330530455
Option 2 ID : 264330530458
Option 3 ID : 264330530456
Option 4 ID : 264330530457
Status : Answered
Chosen Option : 2

Q.19 What is the value of $0.4 \times 0.5 + 2 \times (0.10 - 0.5)$?

- Ans
- 1. 1
 - 2. 0.40
 - 3. 0
 - 4. -0.60

Question Type : MCQ
Question ID : 264330133673
Option 1 ID : 264330523717
Option 2 ID : 264330523715
Option 3 ID : 264330523718
Option 4 ID : 264330523716
Status : Answered
Chosen Option : 4

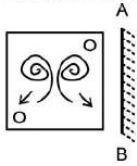
Q.20 A speeding car traveling at 40 km/hr decides to slow down to 30 km/hr after covering half the distance. What is the average speed?

- Ans
- 1. 30 km/hr
 - 2. $\frac{120}{7}$ km/hr
 - 3. $\frac{240}{7}$ km/hr
 - 4. 35 km/hr

Question Type : MCQ
Question ID : 264330135091
Option 1 ID : 264330529301
Option 2 ID : 264330529302
Option 3 ID : 264330529299
Option 4 ID : 264330529300
Status : Answered
Chosen Option : 3

Section : Reasoning Ability and Problem Solving

Q.1 Select the correct mirror image of the given figure when the mirror is placed at AB as shown below.




Ans


✗ 1.




✗ 2.



✗ 3.



✓ 4.



Question Type : MCQ

Question ID : 264330133404

Option 1 ID : 264330522649

Option 2 ID : 264330522650

Option 3 ID : 264330522647

Option 4 ID : 264330522648

Status : Answered

Chosen Option : 4

Q.2 Select the option that is related to the third number in the same way as the second number is related to the first number.

5 : 125 :: 8 : ?

Ans ✓ 1. 512

✗ 2. 576

✗ 3. 343

✗ 4. 216

Question Type : MCQ

Question ID : 264330137574

Option 1 ID : 264330538904

Option 2 ID : 264330538906

Option 3 ID : 264330538903

Option 4 ID : 264330538905

Status : Answered

Chosen Option : 1

Q.3 Study the given pattern carefully and select the number that can replace the question mark (?) in it.

First row- 6, 216, 180

Second row- 8, 512, 448

Third row- 10, 1000, ?

- Ans**
- 1. 800
 - 2. 1100
 - 3. 900
 - 4. 1300

Question Type : **MCQ**
Question ID : **264330133400**
Option 1 ID : **264330522632**
Option 2 ID : **264330522631**
Option 3 ID : **264330522633**
Option 4 ID : **264330522634**
Status : **Answered**
Chosen Option : **3**

Q.4 In a certain code language, 'SPEAKER' is written as 'RQDBJFQ'. How will 'MOBILE' be written in that language?

- Ans**
- 1. LPAJKS
 - 2. LSPJKS
 - 3. LPSJAK
 - 4. LPAJKF

Question Type : **MCQ**
Question ID : **264330133369**
Option 1 ID : **264330522510**
Option 2 ID : **264330522509**
Option 3 ID : **264330522507**
Option 4 ID : **264330522508**
Status : **Answered**
Chosen Option : **4**

Q.5 Two Statements are given followed by two conclusions numbered I and II. Assuming the statements to be true, even if they seem to be at variance with commonly known facts, decide which of the conclusions logically follow(s) from the statements.

Statements:

Some kings are rich.

Some rich are proud.

Conclusions:

I. Some kings are not proud.

II. Some rich are not proud.

- Ans**
- 1. Only conclusion II follows
 - 2. Neither conclusion I nor II follows
 - 3. Both conclusions I and II follow
 - 4. Only conclusion I follows

Question Type : **MCQ**
Question ID : **264330133395**
Option 1 ID : **264330522612**
Option 2 ID : **264330522614**
Option 3 ID : **264330522613**
Option 4 ID : **264330522611**
Status : **Answered**
Chosen Option : **1**

Q.6 Six sisters Hina, Ishita, Jena, Kamla, Lalita, Meena are sitting in two rows. Three of them face north and the other three face south. Sisters sitting in the same row face the same direction. Meena is facing south and is not sitting in the corner. Lalita is facing Hina who is sitting to the right of Meena. Ishita is to the immediate right of Jena. Who sits opposite Ishita?

- Ans**
- 1. Hina
 - 2. Meena
 - 3. Lalita
 - 4. Kamla

Question Type : **MCQ**
Question ID : **264330133393**
Option 1 ID : **264330522603**
Option 2 ID : **264330522605**
Option 3 ID : **264330522606**
Option 4 ID : **264330522604**
Status : **Answered**
Chosen Option : **4**

Q.7 In a certain code language, 'HERO' is coded as '7, 4, 17, 14', 'ICON' is coded as '8, 2, 14, 13'. What is the code for 'JOIN' in that code language?

- Ans**
- 1. 8, 14, 9, 13
 - 2. 9, 14, 8, 13
 - 3. 9, 14, 9, 13
 - 4. 10, 14, 8, 13

Question Type : **MCQ**
Question ID : **264330138503**
Option 1 ID : **264330542622**
Option 2 ID : **264330542621**
Option 3 ID : **264330542620**
Option 4 ID : **264330542619**
Status : **Answered**
Chosen Option : **2**

Q.8 Which two numbers should be interchanged to make the given equation correct?

$$84 \div 6 + 16 - 14 \times 2 = 10$$

- Ans**
- 1. 6 and 14
 - 2. 2 and 84
 - 3. 10 and 14
 - 4. 6 and 10

Question Type : **MCQ**
Question ID : **264330133401**
Option 1 ID : **264330522637**
Option 2 ID : **264330522636**
Option 3 ID : **264330522635**
Option 4 ID : **264330522638**
Status : **Answered**
Chosen Option : **1**

Q.9 Which of the following letter clusters will replace the blanks in the given series?

stss_ssstsss_tss__stssssst

- Ans**
- 1. tsss
 - 2. sstt
 - 3. ssst
 - 4. ttss

Question Type : **MCQ**
Question ID : **264330133386**
Option 1 ID : **264330522577**
Option 2 ID : **264330522575**
Option 3 ID : **264330522576**
Option 4 ID : **264330522578**
Status : **Answered**
Chosen Option : 1

Q.10 Which of the following numbers will replace the question mark (?) in the given series?

158, 160, 164, 170, 178, 188, 200, ?

- Ans**
- 1. 210
 - 2. 215
 - 3. 214
 - 4. 230

Question Type : **MCQ**
Question ID : **264330133398**
Option 1 ID : **264330522623**
Option 2 ID : **264330522625**
Option 3 ID : **264330522626**
Option 4 ID : **264330522624**
Status : **Answered**
Chosen Option : 3

Q.11 Six ladies Aditi, Pinki, Rina, Minal, Sneha and Zoya are sitting in a straight row facing North. Sneha and Zoya are in the centre. Aditi and Pinki are at the corners. Rina is sitting to the immediate left of Aditi. Who is sitting to the immediate right of Pinki?

- Ans**
- 1. Zoya
 - 2. Sneha
 - 3. Aditi
 - 4. Minal

Question Type : **MCQ**
Question ID : **264330133392**
Option 1 ID : **264330522599**
Option 2 ID : **264330522601**
Option 3 ID : **264330522602**
Option 4 ID : **264330522600**
Status : **Answered**
Chosen Option : 4

Q.12 Six brothers Aman, Bunty, Chandu, Deepak, Emad and Faisal, each has a different height. Bunty is taller than only three brothers. Faisal is only taller than Deepak. Chandu is shorter than Aman only. Who is the fourth tallest among the brothers?

- Ans**
- 1. Deepak
 - 2. Emad
 - 3. Chandu
 - 4. Bunty

Question Type : **MCQ**
Question ID : **264330133394**
Option 1 ID : **264330522608**
Option 2 ID : **264330522609**
Option 3 ID : **264330522610**
Option 4 ID : **264330522607**
Status : **Answered**
Chosen Option : **2**

Q.13 Select the option that is related to the third letter cluster in the same way as the second letter cluster is related to the first letter cluster.

KITCHEN : TIKCNEH :: PLUMBER : ?

- Ans**
- 1. ULPRMBE
 - 2. ULPMREB
 - 3. ULPREMB
 - 4. ULPBREM

Question Type : **MCQ**
Question ID : **264330133387**
Option 1 ID : **264330522581**
Option 2 ID : **264330522580**
Option 3 ID : **264330522579**
Option 4 ID : **264330522582**
Status : **Answered**
Chosen Option : **2**

Q.14 Two Statements are given followed by two conclusions numbered I and II. Assuming the statements to be true, even if they seem to be at variance with commonly known facts, decide which of the conclusions logically follow(s) from the statements.

Statements:

No girl is a horse.

Rachel is a girl.

Conclusions:

I. Rachel is not a horse.

II. All girls are not Rachel.

- Ans**
- 1. Both conclusions I and II follow
 - 2. Neither conclusion I nor II follows
 - 3. Only conclusion I follows
 - 4. Only conclusion II follows

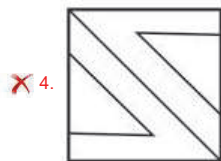
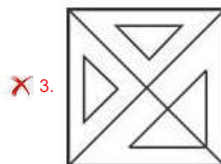
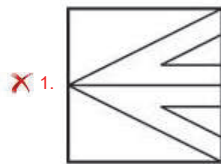
Question Type : **MCQ**
Question ID : **264330133396**
Option 1 ID : **264330522617**
Option 2 ID : **264330522618**
Option 3 ID : **264330522615**
Option 4 ID : **264330522616**
Status : **Answered**
Chosen Option : **1**

Q.15 Select the option figure in which the given figure (X) is embedded as its part (rotation is NOT allowed).



X

Ans



Teachingninja.in

Question Type : MCQ

Question ID : 264330133403

Option 1 ID : 264330522643

Option 2 ID : 264330522646

Option 3 ID : 264330522645

Option 4 ID : 264330522644

Status : Answered

Chosen Option : 2

Q.16 In a certain code language, 'FALF' is written as 'HCJD'. How will 'OEMC' be written in that language?

Ans

✗ 1. QGAK

✓ 2. QGKA

✗ 3. QKAG

✗ 4. QKGA

Question Type : MCQ

Question ID : 264330137565

Option 1 ID : 264330538868

Option 2 ID : 264330538870

Option 3 ID : 264330538867

Option 4 ID : 264330538869

Status : Answered

Chosen Option : 2

Q.17 Select the option that is related to the third letter cluster in the same way as the second letter cluster is related to the first letter cluster.

TREE : USDD :: SOAP : ?

- Ans**
- 1. TZPO
 - 2. TZNQ
 - 3. TPZO
 - 4. TNQZ

Question Type : MCQ

Question ID : 264330133388

Option 1 ID : 264330522584

Option 2 ID : 264330522583

Option 3 ID : 264330522586

Option 4 ID : 264330522585

Status : Answered

Chosen Option : 3

Q.18 After interchanging the given two signs what will be the values of equation (I) and (II) respectively?

× and –

I. $18 \times 8 - 6 + 3 + 4$

II. $7 - 8 \times 4 + 2 + 15$

- Ans**
- 1. 89 and 6
 - 2. 6 and 69
 - 3. 18 and 10
 - 4. –8 and 10

Question Type : MCQ

Question ID : 264330138473

Option 1 ID : 264330542502

Option 2 ID : 264330542499

Option 3 ID : 264330542501

Option 4 ID : 264330542500

Status : Answered

Chosen Option : 2

Q.19 Which of the following numbers will replace the question mark (?) in the given series?

15, 16, 32, 35, 140, 145, ?

- Ans**
- 1. 910
 - 2. 870
 - 3. 840
 - 4. 790

Question Type : MCQ

Question ID : 264330137572

Option 1 ID : 264330538898

Option 2 ID : 264330538895


Option 3 ID : 264330538896

Option 4 ID : 264330538897

Status : Answered

Chosen Option : 2

Q.20 Select the option figure that will replace the question mark (?) in the figure given below to complete the pattern.
(rotation not allowed)



Ans

1.



2.



3.



4.



Question Type : MCQ

Question ID : 264330133405

Option 1 ID : 264330522652

Option 2 ID : 264330522653

Option 3 ID : 264330522651

Option 4 ID : 264330522654

Status : Answered

Chosen Option : 3

Section : General Awareness

Q.1 Which among the following rulers adopted the title devaputra?

1. Hoyasala

2. Kushana

3. Chola

4. Saka

Question Type : MCQ

Question ID : 264330137750

Option 1 ID : 264330539608

Option 2 ID : 264330539610

Option 3 ID : 264330539609

Option 4 ID : 264330539607

Status : Not Answered

Chosen Option : --

Q.2 What was the theme of International Yoga Day (2022)?

- Ans
- 1. Yoga for Good Body
 - 2. Yoga for Humanity
 - 3. Yoga for Good Mind
 - 4. Yoga for Life

Question Type : MCQ
Question ID : 264330133890
Option 1 ID : 264330524584
Option 2 ID : 264330524586
Option 3 ID : 264330524583
Option 4 ID : 264330524585
Status : Answered
Chosen Option : 2

Q.3 Basketball game is played between two teams of _____ players each.

- Ans
- 1. five
 - 2. six
 - 3. eight
 - 4. four

Question Type : MCQ
Question ID : 264330133884
Option 1 ID : 264330524559
Option 2 ID : 264330524560
Option 3 ID : 264330524562
Option 4 ID : 264330524561
Status : Answered
Chosen Option : 1

Q.4 According to the first National Multidimensional Poverty Index by NITI Aayog, which state has the maximum percentage of poor people?

- Ans
- 1. Madhya Pradesh
 - 2. Uttar Pradesh
 - 3. Jharkhand
 - 4. Bihar

Question Type : MCQ
Question ID : 264330137407
Option 1 ID : 264330538258
Option 2 ID : 264330538256
Option 3 ID : 264330538255
Option 4 ID : 264330538257
Status : Answered
Chosen Option : 4

Q.5 Editor of a Marathi newspaper "Kesari" was _____.

- Ans
- 1. Bipin Chandra Pal
 - 2. Aurobindo Ghosh
 - 3. Lala Lajpat Rai
 - 4. Bal Gangadhar Tilak

Question Type : MCQ
Question ID : 264330133905
Option 1 ID : 264330524645
Option 2 ID : 264330524646
Option 3 ID : 264330524643
Option 4 ID : 264330524644
Status : Answered
Chosen Option : 4

Q.6 In which of the following articles, "Right of minorities to establish and administer educational institution" is mentioned?

- Ans
- 1. Article 29
 - 2. Article 31
 - 3. Article 30
 - 4. Article 28

Question Type : MCQ
Question ID : 264330133893
Option 1 ID : 264330524596
Option 2 ID : 264330524598
Option 3 ID : 264330524597
Option 4 ID : 264330524595
Status : Answered
Chosen Option : 4

Q.7 The broad, green part of the leaf is called _____.

- Ans
- 1. lamina
 - 2. petiole
 - 3. veins
 - 4. midrib

Question Type : MCQ
Question ID : 264330133894
Option 1 ID : 264330524601
Option 2 ID : 264330524599
Option 3 ID : 264330524600
Option 4 ID : 264330524602
Status : Answered
Chosen Option : 2

Q.8 According to _____ law, heat produced by an electric current is directly proportional to the resistance of the conductor, the square of the current, and the time for which it flows.

- Ans**
- 1. Hooke's
 - 2. Charles's
 - 3. Faraday's
 - 4. Joule's

Question Type : **MCQ**
Question ID : **264330137741**
Option 1 ID : **264330539572**
Option 2 ID : **264330539574**
Option 3 ID : **264330539573**
Option 4 ID : **264330539571**
Status : **Answered**
Chosen Option : **4**

Q.9 The Ilbert Bill was passed during the term of Lord Ripon to bring Indian and European magistracy on equal footing in _____.

- Ans**
- 1. 1876
 - 2. 1883
 - 3. 1871
 - 4. 1892

Question Type : **MCQ**
Question ID : **264330138236**
Option 1 ID : **264330541551**
Option 2 ID : **264330541552**
Option 3 ID : **264330541554**
Option 4 ID : **264330541553**
Status : **Answered**
Chosen Option : **2**

Q.10 The Khangchendzonga Biosphere Reserve is located in which of the following states?

- Ans**
- 1. Manipur
 - 2. Assam
 - 3. Sikkim
 - 4. Kerala

Question Type : **MCQ**
Question ID : **264330137743**
Option 1 ID : **264330539581**
Option 2 ID : **264330539579**
Option 3 ID : **264330539582**
Option 4 ID : **264330539580**
Status : **Answered**
Chosen Option : **3**

Q.11 Seasonal reversal in the wind direction during a year refers to _____.

- Ans
- 1. Monsoon
 - 2. Emission
 - 3. Breeze
 - 4. Climate

Question Type : MCQ
Question ID : 264330133899
Option 1 ID : 264330524622
Option 2 ID : 264330524621
Option 3 ID : 264330524619
Option 4 ID : 264330524620
Status : Answered
Chosen Option : 3

Q.12 Kumari Kamala was awarded with Padma Bhushan in 1970. She is a preeminent artist of the _____ tradition of the dance.

- Ans
- 1. Vazhuvoor
 - 2. Kuchipudi
 - 3. Tamzara
 - 4. Kurdish

Question Type : MCQ
Question ID : 264330137755
Option 1 ID : 264330539629
Option 2 ID : 264330539628
Option 3 ID : 264330539627
Option 4 ID : 264330539630
Status : Not Answered
Chosen Option : --

Q.13 The Nobel Prize in Physiology or Medicine 2022 is awarded to _____.

- Ans
- 1. Giorgia Meloni
 - 2. Svante Paabo
 - 3. Ales Bialiatski
 - 4. Valeri Polyakov

Question Type : MCQ
Question ID : 264330133889
Option 1 ID : 264330524579
Option 2 ID : 264330524580
Option 3 ID : 264330524582
Option 4 ID : 264330524581
Status : Answered
Chosen Option : 2

Q.14 The Vadhavan Port is located in _____.

- Ans
- 1. Kerala
 - 2. Tamil Nadu
 - 3. West Bengal
 - 4. Maharashtra

Question Type : MCQ
Question ID : 264330137745
Option 1 ID : 264330539590
Option 2 ID : 264330539588
Option 3 ID : 264330539587
Option 4 ID : 264330539589
Status : Answered
Chosen Option : 4

Q.15 The Kuiper Belt is a ring of icy rocks & dust bodies just outside the orbit of _____.

- Ans
- 1. Saturn
 - 2. Venus
 - 3. Jupiter
 - 4. Neptune

Question Type : MCQ
Question ID : 264330137744
Option 1 ID : 264330539585
Option 2 ID : 264330539586
Option 3 ID : 264330539583
Option 4 ID : 264330539584
Status : Answered
Chosen Option : 3

Q.16 The Merdeka Cup is associated with which of the following sports?

- Ans
- 1. Golf
 - 2. Hockey
 - 3. Chess
 - 4. Football

Question Type : MCQ
Question ID : 264330137759
Option 1 ID : 264330539644
Option 2 ID : 264330539645
Option 3 ID : 264330539646
Option 4 ID : 264330539643
Status : Answered
Chosen Option : 1

Q.17 Which of the following is NOT part of six school of Indian Philosophy?

- Ans
- 1. Samkhya
 - 2. Yoga
 - 3. Nyaya
 - 4. Dravida

Question Type : MCQ
Question ID : 264330133902
Option 1 ID : 264330524633
Option 2 ID : 264330524632
Option 3 ID : 264330524631
Option 4 ID : 264330524634
Status : Answered
Chosen Option : 4

Q.18 Indian economy is seen growing at _____ per cent in the current fiscal, finance minister Nirmala Sitharaman said while presenting the Union Budget 2022.

- Ans
- 1. 6.5
 - 2. 7.4
 - 3. 5.3
 - 4. 9.2

Question Type : MCQ
Question ID : 264330137760
Option 1 ID : 264330539650
Option 2 ID : 264330539649
Option 3 ID : 264330539648
Option 4 ID : 264330539647
Status : Answered
Chosen Option : 4

Q.19 According to the Mediation Bill, 2021, the mediation process must be completed within 180 days, which may be extended by another _____ days by the parties.

- Ans
- 1. 220
 - 2. 120
 - 3. 200
 - 4. 180

Question Type : MCQ
Question ID : 264330138222
Option 1 ID : 264330541498
Option 2 ID : 264330541495
Option 3 ID : 264330541497
Option 4 ID : 264330541496
Status : Answered
Chosen Option : 4

Q.20 The six – day Khajuraho Dance festival is celebrated in which of the following state?

- Ans
- 1. Haryana
 - 2. Madhya Pradesh
 - 3. Assam
 - 4. Kerala

Question Type : MCQ
Question ID : 264330133882
Option 1 ID : 264330524551
Option 2 ID : 264330524552
Option 3 ID : 264330524554
Option 4 ID : 264330524553
Status : Answered
Chosen Option : 2

Q.21 The first population census in India was conducted in _____ .

- Ans
- 1. 1872
 - 2. 1870
 - 3. 1862
 - 4. 1865

Question Type : MCQ
Question ID : 264330133875
Option 1 ID : 264330524524
Option 2 ID : 264330524523
Option 3 ID : 264330524526
Option 4 ID : 264330524525
Status : Answered
Chosen Option : 1

Q.22 Sri Deepak Mazumdar received the Sangeet Natak Akademi Award for the year _____ .

- Ans
- 1. 2016
 - 2. 2019
 - 3. 2017
 - 4. 2018

Question Type : MCQ
Question ID : 264330133881
Option 1 ID : 264330524547
Option 2 ID : 264330524550
Option 3 ID : 264330524548
Option 4 ID : 264330524549
Status : Not Answered
Chosen Option : --

Q.23 Who among the following built the Hawa Mahal in Jaipur?

- Ans
- 1. Maharaja Narinder Singh
 - 2. Krishnarajendra Wadiyar IV
 - 3. Maharaja Sawai Pratap Singh
 - 4. Raja Man Singh - I

Question Type : MCQ
Question ID : 264330138225
Option 1 ID : 264330541508
Option 2 ID : 264330541507
Option 3 ID : 264330541509
Option 4 ID : 264330541510
Status : Answered
Chosen Option : 3

Q.24 Annapurna Devi was known to practice which musical instrument?

- Ans
- 1. Surbahar
 - 2. Sarod
 - 3. Violin
 - 4. Bamboo Flute

Question Type : MCQ
Question ID : 264330133887
Option 1 ID : 264330524572
Option 2 ID : 264330524574
Option 3 ID : 264330524571
Option 4 ID : 264330524573
Status : Not Answered
Chosen Option : --

Q.25 "India at Risk" is written by which of the following authors?

- Ans
- 1. Jaswant Singh
 - 2. Khushwant Singh
 - 3. Natwar Singh
 - 4. Vijay Darda

Question Type : MCQ
Question ID : 264330137753
Option 1 ID : 264330539621
Option 2 ID : 264330539619
Option 3 ID : 264330539622
Option 4 ID : 264330539620
Status : Answered
Chosen Option : 4

Section : English Language and Comprehension

Q.1 Select the most appropriate meaning of the given idiom.

Between a rock and a hard place

Ans 1. Stuck between two very bad options

2. Willing to do anything

3. On the point of achievement

4.

Avoiding the main topic, not speaking directly about the issue

Question Type : MCQ
Question ID : 264330136103
Option 1 ID : 264330533221
Option 2 ID : 264330533219
Option 3 ID : 264330533220
Option 4 ID : 264330533222
Status : Answered
Chosen Option : 1

Q.2 Select the most appropriate option to substitute the bracketed segment in the given sentence. If there is no need to substitute it, select 'no substitution required'.

The only course of action to (fend of the loud clamour off conspiracy theories) is to keep everyone fully informed.

Ans 1. fend off the loud clamour of conspiracy theories

2. No substitution required

3. fend off the loud clamour off conspiracy theories

4. fend of the loud clamour of conspiracy theories

Question Type : MCQ
Question ID : 264330135797
Option 1 ID : 264330532065
Option 2 ID : 264330532066
Option 3 ID : 264330532063
Option 4 ID : 264330532064
Status : Answered
Chosen Option : 1

Q.3 In the following question, out of the given four alternatives, select the alternative which best expresses the meaning of the Idiom/Phrase.

To bear the brunt of

Ans 1. An inexperienced person

2. For one's sake

3. To endure the impact of something

4. To become free from

Question Type : MCQ
Question ID : 264330134367
Option 1 ID : 264330526454
Option 2 ID : 264330526451
Option 3 ID : 264330526453
Option 4 ID : 264330526452
Status : Answered
Chosen Option : 3

Q.4 Find the part of the given sentence that has an error in it. If there is no error, choose 'No error'.

You can find these books into the extreme corner of this shelf.

Ans ✓ 1. books into the extreme

✗ 2. corner of this shelf.

✗ 3. You can find these

✗ 4. No error

Question Type : MCQ

Question ID : 264330134348

Option 1 ID : 264330526380

Option 2 ID : 264330526381

Option 3 ID : 264330526379

Option 4 ID : 264330526382

Status : Answered

Chosen Option : 1

Q.5 Select the most appropriate option to fill in the blank.

Enzymes can _____ starches into sugars and proteins into amino acids.

Ans ✗ 1. cover

✓ 2. convert

✗ 3. covert

✗ 4. conserve

Question Type : MCQ

Question ID : 264330134370

Option 1 ID : 264330526464

Option 2 ID : 264330526466

Option 3 ID : 264330526465

Option 4 ID : 264330526463

Status : Answered

Chosen Option : 2

Q.6 Find the part of the given sentence that has an error in it. If there is no error, choose 'No error'.

Mothers can pass the HIV virus to their newborns during delivery as well, WHO says.

Ans ✓ 1. as well, WHO says.

✗ 2. Mothers can pass the HIV virus to

✗ 3. No error

✗ 4. their newborns during delivery

Question Type : MCQ

Question ID : 264330135178

Option 1 ID : 264330529645

Option 2 ID : 264330529643

Option 3 ID : 264330529646

Option 4 ID : 264330529644

Status : Answered

Chosen Option : 1

Q.7 Identify the segment that contains a grammatical error. If there is no error, select 'No error'.
And how amorous you become / when your courtship with the / muses is going stronger.

- Ans**
- 1. No Error
 - 2. when your courtship with the
 - 3. muses is going stronger.
 - 4. And how amorous you become

Question Type : **MCQ**
Question ID : **264330135794**
Option 1 ID : **264330532054**
Option 2 ID : **264330532052**
Option 3 ID : **264330532053**
Option 4 ID : **264330532051**
Status : **Not Answered**
Chosen Option : --

Q.8 Choose the word that can substitute the given group of words.
One who is 100 years old or older

- Ans**
- 1. Centenarian
 - 2. Immortal
 - 3. Mortal
 - 4. Sententia

Question Type : **MCQ**
Question ID : **264330134361**
Option 1 ID : **264330526427**
Option 2 ID : **264330526428**
Option 3 ID : **264330526430**
Option 4 ID : **264330526429**
Status : **Answered**
Chosen Option : 1

Q.9 A sentence has been given with a blank to be filled with an appropriate option. Choose the correct alternative.
The royal messengers _____ out last night.

- Ans**
- 1. goes
 - 2. go
 - 3. gone
 - 4. went

Question Type : **MCQ**
Question ID : **264330134352**
Option 1 ID : **264330526395**
Option 2 ID : **264330526398**
Option 3 ID : **264330526397**
Option 4 ID : **264330526396**
Status : **Answered**
Chosen Option : 4

Q.10 Select the most appropriate option to fill in the blank.
He _____ his teeth against the curse on his tongue.

- Ans
- 1. dropped
 - 2. unclasped
 - 3. yielded
 - 4. clenched

Question Type : **MCQ**
Question ID : **264330134371**
Option 1 ID : **264330526470**
Option 2 ID : **264330526468**
Option 3 ID : **264330526467**
Option 4 ID : **264330526469**
Status : **Answered**
Chosen Option : **4**

Q.11 Choose the incorrectly spelt word.

- Ans
- 1. Pleasurre
 - 2. Slogan
 - 3. Heaven
 - 4. Brinjal

Question Type : **MCQ**
Question ID : **264330134368**
Option 1 ID : **264330526457**
Option 2 ID : **264330526456**
Option 3 ID : **264330526455**
Option 4 ID : **264330526458**
Status : **Answered**
Chosen Option : **1**

Q.12 Choose the word that means the same as the given word.
Villainous

- Ans
- 1. Wholesome
 - 2. Lucid
 - 3. Nefarious
 - 4. Famous

Question Type : **MCQ**
Question ID : **264330134389**
Option 1 ID : **264330526538**
Option 2 ID : **264330526537**
Option 3 ID : **264330526535**
Option 4 ID : **264330526536**
Status : **Answered**
Chosen Option : **3**

Q.13 Select the most appropriate antonym of the given word.

Culpable

- Ans
- 1. Rigorous
 - 2. Reasonable
 - 3. Innocent
 - 4. Edible

Question Type : MCQ
Question ID : 264330136605
Option 1 ID : 264330535149
Option 2 ID : 264330535148
Option 3 ID : 264330535150
Option 4 ID : 264330535147
Status : Answered
Chosen Option : 3

Q.14 Improve the underlined part of the sentence. Choose 'No improvement' as an answer if the sentence is grammatically correct.
The sea wall protected the village in the waves.

- Ans
- 1. No improvement
 - 2. village from
 - 3. village through
 - 4. village by

Question Type : MCQ
Question ID : 264330134323
Option 1 ID : 264330526286
Option 2 ID : 264330526283
Option 3 ID : 264330526284
Option 4 ID : 264330526285
Status : Answered
Chosen Option : 2

Q.15 Select the appropriate synonym for the underlined word.
John says, "I am serious."

- Ans
- 1. safe
 - 2. severe
 - 3. comical
 - 4. light

Question Type : MCQ
Question ID : 264330134362
Option 1 ID : 264330526431
Option 2 ID : 264330526432
Option 3 ID : 264330526433
Option 4 ID : 264330526434
Status : Answered
Chosen Option : 2

Q.16 Select the most appropriate word for the given group of words.

A large, tall cupboard in which clothes may be hung or stored

- Ans
- 1. Wardrobe
 - 2. Hypergamy
 - 3. Gibber
 - 4. Honorary

Question Type : MCQ
Question ID : 264330136097
Option 1 ID : 264330533196
Option 2 ID : 264330533197
Option 3 ID : 264330533195
Option 4 ID : 264330533198
Status : Answered
Chosen Option : 1

Q.17 Choose the sentence with no spelling error.

- Ans
- 1. He wondered about lots of things.
 - 2. He wondered about lotts of things.
 - 3. He wondared about lots of things.
 - 4. He wondered about lots of thinggs.

Question Type : MCQ
Question ID : 264330134369
Option 1 ID : 264330526462
Option 2 ID : 264330526460
Option 3 ID : 264330526461
Option 4 ID : 264330526459
Status : Answered
Chosen Option : 1

Q.18 A sentence has been given with a blank to be filled with an appropriate option. Choose the correct alternative.

I _____ only a few steps before I was forced to stop.

- Ans
- 1. had walked
 - 2. have walked
 - 3. walk
 - 4. walked

Question Type : MCQ
Question ID : 264330134353
Option 1 ID : 264330526400
Option 2 ID : 264330526399
Option 3 ID : 264330526402
Option 4 ID : 264330526401
Status : Answered
Chosen Option : 4

Q.19 Select the appropriate antonym for the underlined word.
A mysterious glowing girl has informed him of the death.

- Ans 1. evident
 2. cryptic
 3. critical
 4. murky

Question Type : MCQ
Question ID : 264330134365
Option 1 ID : 264330526446
Option 2 ID : 264330526444
Option 3 ID : 264330526445
Option 4 ID : 264330526443
Status : Answered
Chosen Option : 1

Q.20 Improve the underlined part of the sentence. Choose 'No improvement' as an answer if the sentence is grammatically correct.
Dr. Mark said I can came to his office on Friday or Saturday of next week.

- Ans 1. No improvement
 2. coming to his office at
 3. comes to his office in
 4. come to his office on

Question Type : MCQ
Question ID : 264330134351
Option 1 ID : 264330526394
Option 2 ID : 264330526392
Option 3 ID : 264330526393
Option 4 ID : 264330526391
Status : Answered
Chosen Option : 4

Comprehension:

In the following passage some words have been deleted. Fill in the blanks with the help of the alternatives given. Select the most appropriate option for each number.

"Why?" said Harry in surprise. "There is a (1) _____, Harry Potter. A plot to make most terrible things (2) _____ at Hogwarts School of Witchcraft and Wizardry (3) _____," whispered Dobby, suddenly trembling all over. "Dobby has (4) _____ months, sir. Harry Potter (5) _____ in peril."

SubQuestion No : 21

Q.21 Select the most appropriate option to fill in blank number 1.

- Ans 1. paper
 2. plot
 3. notebook
 4. diary

Question Type : MCQ
Question ID : 264330136596
Option 1 ID : 264330535111
Option 2 ID : 264330535112
Option 3 ID : 264330535113
Option 4 ID : 264330535114
Status : Answered
Chosen Option : 2

Comprehension:

In the following passage some words have been deleted. Fill in the blanks with the help of the alternatives given. Select the most appropriate option for each number.

"Why?" said Harry in surprise. "There is a (1) _____, Harry Potter. A plot to make most terrible things (2) _____ at Hogwarts School of Witchcraft and Wizardry (3) _____," whispered Dobby, suddenly trembling all over. "Dobby has (4) _____ months, sir. Harry Potter (5) _____ in peril."

SubQuestion No : 22

Q.22 Select the most appropriate option to fill in blank number 2.

Ans

- 1. happen
- 2. happens
- 3. happening
- 4. happened

Question Type : MCQ

Question ID : 264330136597

Option 1 ID : 264330535117

Option 2 ID : 264330535115

Option 3 ID : 264330535118

Option 4 ID : 264330535116

Status : Answered

Chosen Option : 1

Comprehension:

In the following passage some words have been deleted. Fill in the blanks with the help of the alternatives given. Select the most appropriate option for each number.

"Why?" said Harry in surprise. "There is a (1) _____, Harry Potter. A plot to make most terrible things (2) _____ at Hogwarts School of Witchcraft and Wizardry (3) _____," whispered Dobby, suddenly trembling all over. "Dobby has (4) _____ months, sir. Harry Potter (5) _____ in peril."

SubQuestion No : 23

Q.23 Select the most appropriate option to fill in blank number 3.

Ans

- 1. those years
- 2. that year
- 3. the year
- 4. this year

Question Type : MCQ

Question ID : 264330136598

Option 1 ID : 264330535121

Option 2 ID : 264330535120

Option 3 ID : 264330535119

Option 4 ID : 264330535122

Status : Answered

Chosen Option : 4

Comprehension:

In the following passage some words have been deleted. Fill in the blanks with the help of the alternatives given. Select the most appropriate option for each number.

"Why?" said Harry in surprise. "There is a (1) _____, Harry Potter. A plot to make most terrible things (2) _____ at Hogwarts School of Witchcraft and Wizardry (3) _____," whispered Dobby, suddenly trembling all over. "Dobby has (4) _____ months, sir. Harry Potter (5) _____ in peril.

SubQuestion No : 24

Q.24 Select the most appropriate option to fill in blank number 4.

- Ans**
- 1. known it for
 - 2. had knowing for
 - 3. had acknowledging for
 - 4. been known since

Question Type : **MCQ**
Question ID : **264330136599**
Option 1 ID : **264330535123**
Option 2 ID : **264330535125**
Option 3 ID : **264330535126**
Option 4 ID : **264330535124**
Status : **Answered**
Chosen Option : **1**

Comprehension:

In the following passage some words have been deleted. Fill in the blanks with the help of the alternatives given. Select the most appropriate option for each number.

"Why?" said Harry in surprise. "There is a (1) _____, Harry Potter. A plot to make most terrible things (2) _____ at Hogwarts School of Witchcraft and Wizardry (3) _____," whispered Dobby, suddenly trembling all over. "Dobby has (4) _____ months, sir. Harry Potter (5) _____ in peril.

SubQuestion No : 25

Q.25 Select the most appropriate option to fill in blank number 5.

- Ans**
- 1. must not insert himself
 - 2. must not put his self
 - 3. might not put oneself
 - 4. must not put himself

Question Type : **MCQ**
Question ID : **264330136600**
Option 1 ID : **264330535130**
Option 2 ID : **264330535129**
Option 3 ID : **264330535127**
Option 4 ID : **264330535128**
Status : **Answered**
Chosen Option : **4**