



SSC MTS **SHIFT – 3 (17-05-2023)**

- ★ **Latest Govt Job updates**
- ★ **Private Job updates**
- ★ **Free Mock tests available**

**Visit - [teachingninja.in](https://teachingninja.in)**

## Multi Tasking Non Technical Staff and Havaldar CBIC and CBN Examination 2022

Roll Number	
Candidate Name	
Venue Name	
Exam Date	17/05/2023
Exam Time	3:30 PM - 5:00 PM
Subject	MTS Non Tech Havaldar CBIC and CBN Examination 2022

Section : Numerical and Mathematical Ability

Q.1 40 percent of the cost price of an article is equal to the 24 percent of its selling price. What is the profit percentage?

- Ans
- 1. 50 percent
  - 2. 66.66 percent
  - 3. 52.5 percent
  - 4. 60 percent

Question Type : MCQ

Question ID : 264330137630

Option 1 ID : 264330539129

Option 2 ID : 264330539128

Option 3 ID : 264330539130

Option 4 ID : 264330539127

Status : Answered

Chosen Option : 2

Q.2 What is the value of  $\frac{13 \times 4 - 26}{54 - 7 \times 4}$  ?

- Ans
- 1. 1
  - 2. -1
  - 3. 0
  - 4. 10

Question Type : MCQ

Question ID : 264330137619

Option 1 ID : 264330539084

Option 2 ID : 264330539083

Option 3 ID : 264330539085

Option 4 ID : 264330539086

Status : Answered

Chosen Option : 1

**Q.3** A alone can do  $(1/10)$  part of a work in 8 hours. B alone can do  $(1/5)$  part of same work in 4 hours. If they work together, then how many hours will they take to complete  $(9/16)$  part of the same work?

- Ans
- 1. 9 hours
  - 2. 5 hours
  - 3. 4 hours
  - 4. 8 hours

Question Type : MCQ  
Question ID : 264330137153  
Option 1 ID : 264330537255  
Option 2 ID : 264330537256  
Option 3 ID : 264330537257  
Option 4 ID : 264330537258  
Status : Answered  
Chosen Option : 1

**Q.4** An object travels 20 m in 5 seconds and then another 25 m in 10 seconds. What is the average speed?

- Ans
- 1. 5 m/sec
  - 2. 3 m/sec
  - 3. 4 m/sec
  - 4. 2 m/sec

Question Type : MCQ  
Question ID : 264330141012  
Option 1 ID : 264330552398  
Option 2 ID : 264330552397  
Option 3 ID : 264330552395  
Option 4 ID : 264330552396  
Status : Answered  
Chosen Option : 2

**Q.5** Reenal bought an AC for Rs. 28500 and paid Rs. 600 for transportation. Then she sold it for Rs. 30264. What is her gain%?

- Ans
- 1. 8%
  - 2. 4%
  - 3. 5%
  - 4. 10%

Question Type : MCQ  
Question ID : 264330135116  
Option 1 ID : 264330529401  
Option 2 ID : 264330529402  
Option 3 ID : 264330529400  
Option 4 ID : 264330529399  
Status : Answered  
Chosen Option : 2

**Q.6** A girl wants to plant trees in her garden in rows in such a way that the number of trees in each row to be the same. There are 10 rows and the number of trees in each row is 12, what is the number of trees in each row, if there are 5 more rows?

- Ans**
- 1. 6
  - 2. 8
  - 3. 10
  - 4. 12

Question Type : **MCQ**  
Question ID : 264330135119  
Option 1 ID : 264330529414  
Option 2 ID : 264330529413  
Option 3 ID : 264330529411  
Option 4 ID : 264330529412  
Status : **Answered**  
Chosen Option : 2

**Q.7** A wholesaler marks his goods at 35% above the cost price but allows a discount of 15% at the time of sale. His gain is:

- Ans**
- 1. 24.85%
  - 2. 14.75%
  - 3. 20.45%
  - 4. 25.50%

Question Type : **MCQ**  
Question ID : 264330135117  
Option 1 ID : 264330529403  
Option 2 ID : 264330529404  
Option 3 ID : 264330529406  
Option 4 ID : 264330529405  
Status : **Answered**  
Chosen Option : 3

**Q.8** The value of  $8 + \{[12 - (8 \div 2)] \times (1/4)\}$  is:

- Ans**
- 1. 6
  - 2. 10
  - 3. 8
  - 4. 2

Question Type : **MCQ**  
Question ID : 264330135108  
Option 1 ID : 264330529370  
Option 2 ID : 264330529367  
Option 3 ID : 264330529368  
Option 4 ID : 264330529369  
Status : **Answered**  
Chosen Option : 2

**Q.9** The ratio of the outer and the inner circumferences of a circular path is 11 : 7. If path is 20 metres wide, then what is the radius of the inner circle?

- Ans**
- ✓ 1. 35 metres
  - ✗ 2. 20 metres
  - ✗ 3. 55 metres
  - ✗ 4. 65 metres

Question Type : **MCQ**  
Question ID : **264330137168**  
Option 1 ID : **264330537318**  
Option 2 ID : **264330537315**  
Option 3 ID : **264330537317**  
Option 4 ID : **264330537316**  
Status : **Answered**  
Chosen Option : **1**

**Q.10** If 20% of a number is  $(\frac{1}{6})$ th of another number, what is the ratio of first number to the second number?

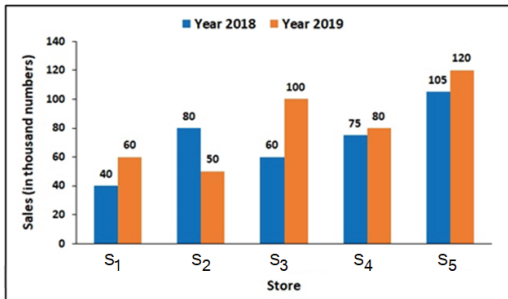
- Ans**
- ✗ 1. 4:5
  - ✗ 2. 5:3
  - ✗ 3. 4:7
  - ✓ 4. 5:6

Question Type : **MCQ**  
Question ID : **264330135118**  
Option 1 ID : **264330529407**  
Option 2 ID : **264330529408**  
Option 3 ID : **264330529410**  
Option 4 ID : **264330529409**  
Status : **Answered**  
Chosen Option : **4**



Q.11 The following bar graph shows the sales of cell phones (in thousand numbers) from five stores of a company during two consecutive years 2018 and 2019.

What is the ratio of the total sale of store  $S_3$  for both years to the total sale of store  $S_1$  for both years?



- Ans
- 1. 4:5
  - 2. 8:5
  - 3. 7:4
  - 4. 3:7

Question Type : MCQ

Question ID : 264330135126

Option 1 ID : 264330529440

Option 2 ID : 264330529439

Option 3 ID : 264330529441

Option 4 ID : 264330529442

Status : Answered

Chosen Option : 2

Q.12 In covering a distance of 50 km, Somya takes 1 hour more than Sunny. If Somya doubles his speed, then he would take 1 hour less than Sunny. Somya's speed is:

- Ans
- 1. 18.4 km/hr
  - 2. 15.6 km/hr
  - 3. 12.5 km/hr
  - 4. 14.8 km/hr

Question Type : MCQ

Question ID : 264330135122

Option 1 ID : 264330529423

Option 2 ID : 264330529424

Option 3 ID : 264330529426

Option 4 ID : 264330529425

Status : Answered

Chosen Option : 3

**Q.13** The following table shows the number of employees in 5 different companies from the year 2012 to 2018. In the year 2015, the number of employees in company C is how much percent less than company E?

Year/ Company	A	B	C	D	E
2012	242	215	223	211	177
2013	245	163	165	213	211
2014	231	191	221	241	215
2015	198	188	222	223	250
2016	197	240	175	221	254
2017	177	245	268	198	268
2018	158	230	213	215	218

- Ans
- 1. 28%
  - 2. 16%
  - 3. 11.2%
  - 4. 18.8%

Question Type : MCQ  
Question ID : 264330138451  
Option 1 ID : 264330542411  
Option 2 ID : 264330542414  
Option 3 ID : 264330542412  
Option 4 ID : 264330542413  
Status : Answered  
Chosen Option : 3

**Q.14** The radius of a cylinder is 14 cm. If the height of the cylinder is four times of its radius, then what is the curved surface area of the cylinder?

- Ans
- 1. 4694 cm<sup>2</sup>
  - 2. 5546 cm<sup>2</sup>
  - 3. 4928 cm<sup>2</sup>
  - 4. 5214 cm<sup>2</sup>

Question Type : MCQ  
Question ID : 264330139089  
Option 1 ID : 264330544966  
Option 2 ID : 264330544963  
Option 3 ID : 264330544964  
Option 4 ID : 264330544965  
Status : Answered  
Chosen Option : 3

Q.15  $48 \div 4 + A \times 2 - 8 = 14$ , find out the value of A.

- Ans
- 1. 8
  - 2. 5
  - 3. 10
  - 4. 14

Question Type : MCQ  
Question ID : 264330138435  
Option 1 ID : 264330542350  
Option 2 ID : 264330542347  
Option 3 ID : 264330542348  
Option 4 ID : 264330542349  
Status : Answered  
Chosen Option : 2

Q.16 Rs. 6000 is lent at the rate of 8 percent per annum on compound interest (compounded quarterly). What will be the compound interest of 6 months?

- Ans
- 1. Rs. 268.6
  - 2. Rs. 190.5
  - 3. Rs. 242.4
  - 4. Rs. 164.6

Question Type : MCQ  
Question ID : 264330139067  
Option 1 ID : 264330544877  
Option 2 ID : 264330544878  
Option 3 ID : 264330544875  
Option 4 ID : 264330544876  
Status : Answered  
Chosen Option : 3

Q.17 A alone can complete a work in 25 days and B alone can complete the same work in 50 days. If both of them work together, then in 9 days what percent work of the total work will be completed?

- Ans
- 1. 45 percent
  - 2. 60 percent
  - 3. 49 percent
  - 4. 54 percent

Question Type : MCQ  
Question ID : 264330139076  
Option 1 ID : 264330544913  
Option 2 ID : 264330544911  
Option 3 ID : 264330544914  
Option 4 ID : 264330544912  
Status : Answered  
Chosen Option : 2



**Q.18** The average of 10 numbers is 8. If each number is multiplied by 10, then the new average will be:

- Ans**
- 1. 80
  - 2. 18
  - 3. 8
  - 4. 50

Question Type : **MCQ**  
Question ID : 264330135111  
Option 1 ID : 264330529381  
Option 2 ID : 264330529380  
Option 3 ID : 264330529379  
Option 4 ID : 264330529382  
Status : **Answered**  
Chosen Option : 1

**Q.19** Find the sum of money invested by a man in a scheme which offers Compound Interest(compounding annually) at a 6% rate of interest per annum if Compound Interest for 2 years is Rs.618.

- Ans**
- 1. Rs.5000
  - 2. Rs.4000
  - 3. Rs.7000
  - 4. Rs.9000

Question Type : **MCQ**  
Question ID : 264330135425  
Option 1 ID : 264330530610  
Option 2 ID : 264330530609  
Option 3 ID : 264330530608  
Option 4 ID : 264330530607  
Status : **Answered**  
Chosen Option : 1

**Q.20** In a class, if 55% of the students are boys and the number of girls is 90, then find the number of boys.

- Ans**
- 1. 120
  - 2. 135
  - 3. 198
  - 4. 110

Question Type : **MCQ**  
Question ID : 264330135418  
Option 1 ID : 264330530579  
Option 2 ID : 264330530581  
Option 3 ID : 264330530582  
Option 4 ID : 264330530580  
Status : **Answered**  
Chosen Option : 4

Section : Reasoning Ability and Problem Solving

**Q.1** Which of the following numbers will replace the question mark (?) in the given series?

53, 60, 67, 74, 81, 88, ?

- Ans**
- 1. 95
  - 2. 93
  - 3. 98
  - 4. 104

Question Type : **MCQ**  
Question ID : 264330135012  
Option 1 ID : 264330528983  
Option 2 ID : 264330528984  
Option 3 ID : 264330528985  
Option 4 ID : 264330528986  
Status : **Answered**  
Chosen Option : 1

**Q.2** Select the option that is related to the fifth number in the same way as the second number is related to the first number and fourth number is related to third number.

5 : 50 :: 17 : 170 :: 19 : ?

- Ans**
- 1. 200
  - 2. 180
  - 3. 190
  - 4. 210

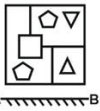
Question Type : **MCQ**  
Question ID : 264330135630  
Option 1 ID : 264330531420  
Option 2 ID : 264330531419  
Option 3 ID : 264330531421  
Option 4 ID : 264330531422  
Status : **Answered**  
Chosen Option : 3

**Q.3** In a certain code language, 'FIELD' is written as 'LOKRJ' and 'GLOBE' is written as 'MRUHK'. How will 'GLASS' be written in that language?

- Ans**
- 1. MRGZZ
  - 2. MRHYY
  - 3. MRGY Y
  - 4. MSGYY

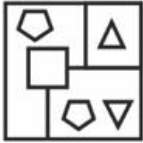
Question Type : **MCQ**  
Question ID : 264330133510  
Option 1 ID : 264330523074  
Option 2 ID : 264330523073  
Option 3 ID : 264330523071  
Option 4 ID : 264330523072  
Status : **Answered**  
Chosen Option : 3

**Q.4** If a mirror is placed on the line AB, then out of the option figures which figure will be the right image of the question figure?

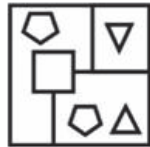


**Ans**

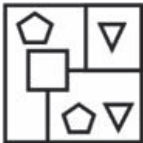
✗ 1.



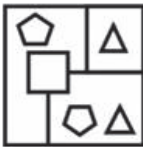
✓ 2.



✗ 3.



✗ 4.



Teachingninja.in

Question Type : MCQ

Question ID : 264330138559

Option 1 ID : 264330542844

Option 2 ID : 264330542846

Option 3 ID : 264330542845

Option 4 ID : 264330542843

Status : Answered

Chosen Option : 1

**Q.5** In a certain code language, 'JAPAN' is written as 'KZPZO'. How will 'GROUP' be written in that language?

**Ans**

✗ 1. HOQTQ

✗ 2. HQQTO

✗ 3. HOTOQ

✓ 4. HQOTQ

Question Type : MCQ

Question ID : 264330134982

Option 1 ID : 264330528865

Option 2 ID : 264330528863

Option 3 ID : 264330528866

Option 4 ID : 264330528864

Status : Answered

Chosen Option : 4

**Q.6** Study the given pattern carefully and select the number that can replace the question mark (?) in it.

First row- 68, 56, 44

Second row- 245, 233, 221

Third row- 97, 85, ?

**Ans**  1. 89

2. 90

3. 73

4. 93

Question Type : **MCQ**

Question ID : 264330135014

Option 1 ID : 264330528992

Option 2 ID : 264330528994

Option 3 ID : 264330528991

Option 4 ID : 264330528993

Status : **Answered**

Chosen Option : 3

**Q.7** In a certain code language, 'EAR' is written as '24'. How will 'ICY' be written in that language?

**Ans**  1. 34

2. 42

3. 37

4. 38

Question Type : **MCQ**

Question ID : 264330137856

Option 1 ID : 264330540033

Option 2 ID : 264330540031

Option 3 ID : 264330540032

Option 4 ID : 264330540034

Status : **Answered**

Chosen Option : 3

**Q.8** Ayaan, Prashant, Ritu, Neeta, Sneha, and Zain are sitting in a row facing south. Sneha and Zain are in the centre. Ayaan and Prashant are at the ends. Ritu is sitting to the immediate left of Ayaan. Who is to the immediate right of Prashant?

**Ans**  1. Neeta

2. Sneha

3. Ritu

4. Ayaan

Question Type : **MCQ**

Question ID : 264330135006

Option 1 ID : 264330528959

Option 2 ID : 264330528961

Option 3 ID : 264330528960

Option 4 ID : 264330528962

Status : **Answered**

Chosen Option : 1

Q.9 Which two numbers should be interchanged to make the given equation correct?

$$5 \times 7 - 4 + 21 \div 6 = 29$$

- Ans
- 1. 6 and 5
  - 2. 5 and 4
  - 3. 6 and 7
  - 4. 21 and 29

Question Type : MCQ

Question ID : 264330135015

Option 1 ID : 264330528996

Option 2 ID : 264330528995

Option 3 ID : 264330528998

Option 4 ID : 264330528997

Status : Answered

Chosen Option : 3

Q.10 R is taller than M. M is taller than P. S is taller than R. H is shorter than P. U is taller than N and shorter than H. Who among these is the tallest?

- Ans
- 1. S
  - 2. M
  - 3. U
  - 4. R

Question Type : MCQ

Question ID : 264330135008

Option 1 ID : 264330528970

Option 2 ID : 264330528968

Option 3 ID : 264330528967

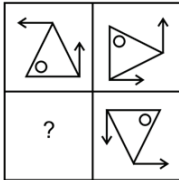
Option 4 ID : 264330528969

Status : Answered

Chosen Option : 1

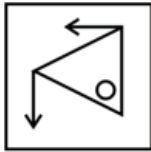


Q.11 Select the option figure that will replace the question mark (?) in the figure given below to complete the pattern.  
(rotation is not allowed)

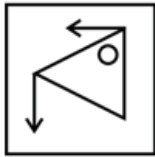


Ans

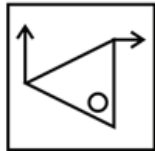
✓ 1.



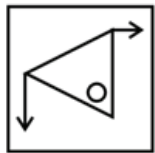
✗ 2.



✗ 3.



✗ 4.



Teachingninja.in

Question Type : MCQ

Question ID : 264330135019

Option 1 ID : 264330529012

Option 2 ID : 264330529014

Option 3 ID : 264330529013

Option 4 ID : 264330529011

Status : Answered

Chosen Option : 1

Q.12 In the following question, select the missing number of the given series.

43, 42, 39, 34, 27, ?

- Ans
- 1. 16
  - 2. 18
  - 3. 21
  - 4. 20

Question Type : MCQ  
Question ID : 264330135628  
Option 1 ID : 264330531414  
Option 2 ID : 264330531412  
Option 3 ID : 264330531413  
Option 4 ID : 264330531411  
Status : Answered  
Chosen Option : 2

Q.13 P, Q, R, S and T are sitting around a circular table facing the centre. R is sitting to the immediate left of T. Q is sitting to the immediate left of S and to the immediate right of T. Who is sitting to the immediate right of S?

- Ans
- 1. Q
  - 2. R
  - 3. P
  - 4. T

Question Type : MCQ  
Question ID : 264330135007  
Option 1 ID : 264330528964  
Option 2 ID : 264330528965  
Option 3 ID : 264330528963  
Option 4 ID : 264330528966  
Status : Answered  
Chosen Option : 3

Q.14 Select the option that is related to the third letter cluster in the same way as the second letter cluster is related to the first letter cluster.

AFN : BDQ :: DLR : ?

- Ans
- 1. EUJ
  - 2. JUN
  - 3. UJE
  - 4. EJU

Question Type : MCQ  
Question ID : 264330135000  
Option 1 ID : 264330528936  
Option 2 ID : 264330528938  
Option 3 ID : 264330528937  
Option 4 ID : 264330528935  
Status : Answered  
Chosen Option : 4

Q.15 Select the option figure in which the given figure is embedded. (rotation is NOT allowed)



Ans

✗ 1.



✗ 2.



✗ 3.



✓ 4.



Teachingninja.in

Question Type : MCQ

Question ID : 264330138558

Option 1 ID : 264330542839

Option 2 ID : 264330542840

Option 3 ID : 264330542842

Option 4 ID : 264330542841

Status : Answered

Chosen Option : 4



Q.16 By Interchanging the given two numbers which of the following equation will be not correct?

8 and 2

I.  $8 \times 4 - 6 + 3 + 2 = 14$

II.  $6 - 8 \times 3 + 2 + 1 = 9$

Ans

- 1. Only II
- 2. Only I
- 3. Both I and II
- 4. Neither I nor II

Question Type : MCQ

Question ID : 264330138846

Option 1 ID : 264330543992

Option 2 ID : 264330543991

Option 3 ID : 264330543993

Option 4 ID : 264330543994

Status : Answered

Chosen Option : 1

Q.17 Select the option that is related to the third word in the same way as the second word is related to the first word.

House : Room :: World : ?

Ans

- 1. Continent
- 2. Bed
- 3. Pencil
- 4. Face

Question Type : MCQ

Question ID : 264330135001

Option 1 ID : 264330528939

Option 2 ID : 264330528942

Option 3 ID : 264330528940

Option 4 ID : 264330528941

Status : Answered

Chosen Option : 1



**Q.18** Three statements are given followed by two conclusions numbered I and II. Assuming the statements to be true, even if they seem to be at variance with commonly known facts, decide which of the conclusions logically follow(s) from the statements.

Statements:

All ocean are oil.

All oil are milk.

All milk are water.

Conclusions:

I. Some water are milk.

II. All milk are ocean.

Ans  1. Neither conclusion I nor II follows

2. Only conclusion II follows

3. Both conclusions I and II follow

4. Only conclusion I follows

Question Type : MCQ

Question ID : 264330135010

Option 1 ID : 264330528978

Option 2 ID : 264330528976

Option 3 ID : 264330528977

Option 4 ID : 264330528975

Status : Answered

Chosen Option : 4

**Q.19** Which of the following letters will replace the question mark (?) in the given series?

L, N, R, X, F, P, ?

Ans  1. S

2. B

3. F

4. M

Question Type : MCQ

Question ID : 264330134998

Option 1 ID : 264330528929

Option 2 ID : 264330528928

Option 3 ID : 264330528930

Option 4 ID : 264330528927

Status : Answered

Chosen Option : 2

**Q.20** Two statements are given followed by two conclusions numbered I and II. Assuming the statements to be true, even if they seem to be at variance with commonly known facts, decide which of the conclusions logically follow(s) from the statements.

Statements:

All bells are birds.

Some bells are toys.

Conclusions:

I. No bird is a toy.

II. Some toys are birds.

- Ans**
- 1. Both conclusions I and II follow
  - 2. Neither conclusion I nor II follows
  - 3. Only conclusion II follows
  - 4. Only conclusion I follows

Question Type : **MCQ**  
Question ID : **264330135009**  
Option 1 ID : **264330528973**  
Option 2 ID : **264330528974**  
Option 3 ID : **264330528972**  
Option 4 ID : **264330528971**  
Status : **Answered**  
Chosen Option : **3**

Section : General Awareness

**Q.1** India has celebrated 76<sup>th</sup> Independence day in which year?

- Ans**
- 1. 2021
  - 2. 2018
  - 3. 2022
  - 4. 2019

Question Type : **MCQ**  
Question ID : **264330138322**  
Option 1 ID : **264330541896**  
Option 2 ID : **264330541898**  
Option 3 ID : **264330541895**  
Option 4 ID : **264330541897**  
Status : **Answered**  
Chosen Option : **3**

Q.2 Which article of the Indian constitution enshrines the right against exploitation?

- Ans
- 1. Article 27 and 28
  - 2. Article 23 and 24
  - 3. Article 21
  - 4. Article 15

Question Type : MCQ  
Question ID : 264330134689  
Option 1 ID : 264330527712  
Option 2 ID : 264330527714  
Option 3 ID : 264330527713  
Option 4 ID : 264330527711  
Status : Answered  
Chosen Option : 2

Q.3 In February 2022, Cabinet approved implementation of Ayushman Bharat Digital Mission. Which ministry of central government launched the Ayushman Bharat Yojana across the country?

- Ans
- 1. Ministry of Education
  - 2. Ministry of Health and Family Welfare
  - 3. Ministry of Women and Child Development
  - 4. Ministry of Ayush

Question Type : MCQ  
Question ID : 264330134669  
Option 1 ID : 264330527632  
Option 2 ID : 264330527633  
Option 3 ID : 264330527631  
Option 4 ID : 264330527634  
Status : Answered  
Chosen Option : 2

Q.4 Major Dhyan Chand was famous for which sport?

- Ans
- 1. Polo
  - 2. Field hockey
  - 3. Football
  - 4. Volleyball

Question Type : MCQ  
Question ID : 264330134691  
Option 1 ID : 264330527722  
Option 2 ID : 264330527721  
Option 3 ID : 264330527719  
Option 4 ID : 264330527720  
Status : Answered  
Chosen Option : 2

Q.5 As per census 2011, what is the position of Maharashtra with respect to the total population in India?

- Ans
- 1. Fourth
  - 2. Second
  - 3. Third
  - 4. First

Question Type : MCQ  
Question ID : 264330135495  
Option 1 ID : 264330530890  
Option 2 ID : 264330530888  
Option 3 ID : 264330530889  
Option 4 ID : 264330530887  
Status : Answered  
Chosen Option : 2

Q.6 \_\_\_\_\_ refers to a method adopted by the Central Bank to persuade or convince the commercial banks to advance credit in the economic interest of the country.

- Ans
- 1. Marginal Standing Facility
  - 2. Credit Rationing
  - 3. Moral Suasion
  - 4. Margin Requirements

Question Type : MCQ  
Question ID : 264330134668  
Option 1 ID : 264330527627  
Option 2 ID : 264330527628  
Option 3 ID : 264330527630  
Option 4 ID : 264330527629  
Status : Not Answered  
Chosen Option : -

Q.7 Negative ions that consist of a single atom are named by adding the suffix \_\_\_\_\_ to the stem of the name of the element.

- Ans
- 1. -OUS
  - 2. -ic
  - 3. -onium
  - 4. -ide

Question Type : MCQ  
Question ID : 264330135489  
Option 1 ID : 264330530864  
Option 2 ID : 264330530866  
Option 3 ID : 264330530863  
Option 4 ID : 264330530865  
Status : Answered  
Chosen Option : 1

Q.8 Four ashrams were recognised by Brahmins around the time when Jainism and Buddhism were becoming popular. Which of the following was NOT a recognised ashrama?

- Ans
- 1. Parmarth
  - 2. Grihastha
  - 3. Vanaprastha
  - 4. Brahmacharya

Question Type : MCQ  
Question ID : 264330138342  
Option 1 ID : 264330541977  
Option 2 ID : 264330541976  
Option 3 ID : 264330541978  
Option 4 ID : 264330541975  
Status : Answered  
Chosen Option : 1

Q.9 Cytology is the study of \_\_\_\_\_.

- Ans
- 1. Cells
  - 2. Chloroplasts
  - 3. Tissues
  - 4. Genes

Question Type : MCQ  
Question ID : 264330134675  
Option 1 ID : 264330527656  
Option 2 ID : 264330527657  
Option 3 ID : 264330527655  
Option 4 ID : 264330527658  
Status : Answered  
Chosen Option : 1

Q.10 Which among the following is an example of Angiosperm in Plant Kingdom?

- Ans
- 1. Chara
  - 2. Tomato
  - 3. Pinus
  - 4. Funaria

Question Type : MCQ  
Question ID : 264330135491  
Option 1 ID : 264330530872  
Option 2 ID : 264330530874  
Option 3 ID : 264330530871  
Option 4 ID : 264330530873  
Status : Not Answered  
Chosen Option : -

Q.11 Olympic Winter Games Beijing 2022 took place in \_\_\_\_\_.

- Ans
- 1. January
  - 2. April
  - 3. February
  - 4. March

Question Type : MCQ  
Question ID : 264330135507  
Option 1 ID : 264330530935  
Option 2 ID : 264330530938  
Option 3 ID : 264330530936  
Option 4 ID : 264330530937  
Status : Answered  
Chosen Option : 3

Q.12 Who among the following was awarded with 'Padma Vibhushan' in the year 1986 and choreographed famous song 'Kahe Chhed Mohe' from the movie Devdas and 'Mohe Rang Do Laal' from Bajirao Mastani?

- Ans
- 1. Uday Shankar
  - 2. Kelucharan Mohapatra
  - 3. Birju Maharaj
  - 4. Bipin Singh

Question Type : MCQ  
Question ID : 264330134663  
Option 1 ID : 264330527608  
Option 2 ID : 264330527609  
Option 3 ID : 264330527607  
Option 4 ID : 264330527610  
Status : Answered  
Chosen Option : 3

Q.13 Ustad Zakir Hussain is one of the greatest exponents of \_\_\_\_\_.

- Ans
- 1. Tabla
  - 2. Shehnai
  - 3. Violin
  - 4. Sitar

Question Type : MCQ  
Question ID : 264330134687  
Option 1 ID : 264330527706  
Option 2 ID : 264330527703  
Option 3 ID : 264330527704  
Option 4 ID : 264330527705  
Status : Answered  
Chosen Option : 1

Q.14 The founder of Brahma Sabha was \_\_\_\_\_.

- Ans
- 1. Raja Ram Mohan Roy
  - 2. Keshab Chandra Sen
  - 3. Radhakanta Deb
  - 4. Rabindranath Tagore

Question Type : MCQ  
Question ID : 264330138919  
Option 1 ID : 264330544283  
Option 2 ID : 264330544286  
Option 3 ID : 264330544285  
Option 4 ID : 264330544284  
Status : Answered  
Chosen Option : 1

Q.15 Which of the following is a traditional folk dance of Rajasthan?

- Ans
- 1. Giddha
  - 2. Bihu
  - 3. Ghoomar
  - 4. Bhangra

Question Type : MCQ  
Question ID : 264330134671  
Option 1 ID : 264330527639  
Option 2 ID : 264330527642  
Option 3 ID : 264330527641  
Option 4 ID : 264330527640  
Status : Answered  
Chosen Option : 3

Q.16 According to 2011 Census, what is the population density of India?

- Ans
- 1. 482 persons per square kilometre
  - 2. 495 persons per square kilometre
  - 3. 356 persons per square kilometre
  - 4. 382 persons per square kilometre

Question Type : MCQ  
Question ID : 264330137930  
Option 1 ID : 264330540330  
Option 2 ID : 264330540328  
Option 3 ID : 264330540329  
Option 4 ID : 264330540327  
Status : Answered  
Chosen Option : 4



Q.17 The Himalayan mountain range is a type of \_\_\_\_\_.

- Ans
- 1. residual mountains
  - 2. block mountains
  - 3. fold mountains
  - 4. accumulated mountains

Question Type : MCQ  
Question ID : 264330134679  
Option 1 ID : 264330527672  
Option 2 ID : 264330527673  
Option 3 ID : 264330527671  
Option 4 ID : 264330527674  
Status : Answered  
Chosen Option : 3

Q.18 Who is the supreme commander of the defence forces of India?

- Ans
- 1. Prime minister of India
  - 2. President of India
  - 3. Chief Justice of India
  - 4. Chief of Army Staff

Question Type : MCQ  
Question ID : 264330138907  
Option 1 ID : 264330544237  
Option 2 ID : 264330544236  
Option 3 ID : 264330544235  
Option 4 ID : 264330544238  
Status : Answered  
Chosen Option : 2

Q.19 The Centre scrapped Article 370 of the Constitution in 2019. This article granted special status to \_\_\_\_\_.

- Ans
- 1. Jammu and Kashmir
  - 2. Himachal Pradesh
  - 3. Punjab
  - 4. Uttar Pradesh

Question Type : MCQ  
Question ID : 264330134690  
Option 1 ID : 264330527715  
Option 2 ID : 264330527716  
Option 3 ID : 264330527718  
Option 4 ID : 264330527717  
Status : Answered  
Chosen Option : 1

Q.20 When volcano erupts on Earth, the erupted material is typically a liquid rock known as \_\_\_\_\_.

- Ans
- 1. Lava
  - 2. Hailstone
  - 3. Mercury
  - 4. Plasma

Question Type : MCQ  
Question ID : 264330135492  
Option 1 ID : 264330530877  
Option 2 ID : 264330530875  
Option 3 ID : 264330530878  
Option 4 ID : 264330530876  
Status : Answered  
Chosen Option : 1

Q.21 The Third Battle of Panipat took place in \_\_\_\_\_.

- Ans
- 1. 1761
  - 2. 1754
  - 3. 1765
  - 4. 1757

Question Type : MCQ  
Question ID : 264330135498  
Option 1 ID : 264330530899  
Option 2 ID : 264330530902  
Option 3 ID : 264330530901  
Option 4 ID : 264330530900  
Status : Answered  
Chosen Option : 1

Q.22 'Long Walk to Freedom' is an autobiography of \_\_\_\_\_.

- Ans
- 1. Benjamin Franklin
  - 2. Nelson Mandela
  - 3. Mahatma Gandhi
  - 4. Jawaharlal Nehru

Question Type : MCQ  
Question ID : 264330134661  
Option 1 ID : 264330527602  
Option 2 ID : 264330527600  
Option 3 ID : 264330527599  
Option 4 ID : 264330527601  
Status : Answered  
Chosen Option : 2

Q.23 Which among the following soils is also known as Regur soil?

- Ans
- 1. Peaty
  - 2. Alluvial
  - 3. Laterite
  - 4. Black

Question Type : MCQ  
Question ID : 264330134653  
Option 1 ID : 264330527568  
Option 2 ID : 264330527570  
Option 3 ID : 264330527569  
Option 4 ID : 264330527567  
Status : Answered  
Chosen Option : 2

Q.24 The Amaravati School of art was developed under the patronage of \_\_\_\_\_.

- Ans
- 1. Palas
  - 2. Cheras
  - 3. Cholas
  - 4. Satavahanas

Question Type : MCQ  
Question ID : 264330138898  
Option 1 ID : 264330544202  
Option 2 ID : 264330544201  
Option 3 ID : 264330544199  
Option 4 ID : 264330544200  
Status : Not Answered  
Chosen Option :-

Q.25 The split in Indian National Congress occured in \_\_\_\_\_.

- Ans
- 1. 1905
  - 2. 1907
  - 3. 1903
  - 4. 1901

Question Type : MCQ  
Question ID : 264330138345  
Option 1 ID : 264330541989  
Option 2 ID : 264330541990  
Option 3 ID : 264330541988  
Option 4 ID : 264330541987  
Status : Answered  
Chosen Option : 2

Section : English Language and Comprehension

**Q.1** In the following question, out of the given four alternatives, select the alternative which best expresses the meaning of the Idiom/Phrase.

To mind one's P's and Q's

- Ans**
- 1. To be polite and careful in one's behaviour and speech
  - 2. To write English alphabets accurately
  - 3. To supervise something carefully
  - 4. To make amends after a fight

Question Type : **MCQ**  
Question ID : **264330135276**  
Option 1 ID : **264330530021**  
Option 2 ID : **264330530020**  
Option 3 ID : **264330530022**  
Option 4 ID : **264330530019**  
Status : **Answered**  
Chosen Option : **1**

**Q.2** Select the appropriate synonym for the underlined word.

Photosynthesis can be hindered by extreme temperatures.

- Ans**
- 1. gained
  - 2. revert
  - 3. tolerated
  - 4. discouraged

Question Type : **MCQ**  
Question ID : **264330134813**  
Option 1 ID : **264330528191**  
Option 2 ID : **264330528193**  
Option 3 ID : **264330528194**  
Option 4 ID : **264330528192**  
Status : **Answered**  
Chosen Option : **2**



**Q.3** Identify the segment that contains a grammatical error. If there is no error, select 'No error'

Droughts effect water supply in Southern/ Spain, which is increasingly turning towards/ seawater desalination to meet its water needs.

**Ans** ✓ 1. Droughts effect water supply in Southern

✗ 2. No error

✗ 3. Spain, which is increasingly turning towards

✗ 4. seawater desalination to meet its water needs.

Question Type : **MCQ**

Question ID : **264330136291**

Option 1 ID : **264330533943**

Option 2 ID : **264330533946**

Option 3 ID : **264330533944**

Option 4 ID : **264330533945**

Status : **Answered**

Chosen Option : **1**

**Q.4** Select the most appropriate option to substitute the bracketed segment in the given sentence. If there is no need to substitute it, select 'no substitution required'.

We were asked by (Jane's aunt where she was last night.)

**Ans** ✓ 1. No substitution required

✗ 2. Jane aunt's where she was last night?

✗ 3. Jane's aunt where was she was last night?

✗ 4. Jane's aunt where was she last night.

Question Type : **MCQ**

Question ID : **264330136294**

Option 1 ID : **264330533958**

Option 2 ID : **264330533956**

Option 3 ID : **264330533957**

Option 4 ID : **264330533955**

Status : **Answered**

Chosen Option : **4**



Q.5 Choose the word that is opposite in meaning to the given word.

Absorb

- Ans
- 1. Dwindle
  - 2. Permit
  - 3. Dismiss
  - 4. Reconcile

Question Type : MCQ  
Question ID : 264330136865  
Option 1 ID : 264330536150  
Option 2 ID : 264330536147  
Option 3 ID : 264330536149  
Option 4 ID : 264330536148  
Status : Answered  
Chosen Option : 2

Q.6 Improve the underlined part of the sentence. Choose 'No improvement' as an answer if the sentence is grammatically correct.

This has sharp decreased the cases of water-borne diseases.

- Ans
- 1. No improvement
  - 2. sharply decreased
  - 3. sharp decrease
  - 4. sharper decreases

Question Type : MCQ  
Question ID : 264330134828  
Option 1 ID : 264330528254  
Option 2 ID : 264330528252  
Option 3 ID : 264330528251  
Option 4 ID : 264330528253  
Status : Answered  
Chosen Option : 2



Teachingninja.in

Q.7 Select the appropriate antonym for the underlined word.

We will brush out the damp hair.

- Ans
- 1. saturated
  - 2. sticky
  - 3. droughty
  - 4. moist

Question Type : MCQ  
Question ID : 264330134816  
Option 1 ID : 264330528206  
Option 2 ID : 264330528203  
Option 3 ID : 264330528205  
Option 4 ID : 264330528204  
Status : Answered  
Chosen Option : 3

Q.8 Fill in the blank with the most appropriate option.

Then Bheeshma entered their lives with his \_\_\_\_\_ lion's laugh.

- Ans
- 1. narrow
  - 2. moment
  - 3. elephantine
  - 4. large

Question Type : MCQ  
Question ID : 264330136715  
Option 1 ID : 264330535571  
Option 2 ID : 264330535573  
Option 3 ID : 264330535574  
Option 4 ID : 264330535572  
Status : Answered  
Chosen Option : 4

Q.9 A sentence has been given with a blank to be filled with an appropriate option. Choose the correct alternative.  
Nigeria \_\_\_\_\_ restrictions in place since 2015 in a bid to boost local production.

- Ans
- 1. has had
  - 2. have had
  - 3. have has
  - 4. had has

Question Type : MCQ  
Question ID : 264330136776  
Option 1 ID : 264330535809  
Option 2 ID : 264330535807  
Option 3 ID : 264330535810  
Option 4 ID : 264330535808  
Status : Answered  
Chosen Option : 1

Q.10 Improve the underlined part of the sentence. Choose 'No improvement' as an answer if the sentence is grammatically correct.  
The loft is fill in hay for the winter.

- Ans
- 1. fill with
  - 2. filled with
  - 3. fills with
  - 4. No improvement

Question Type : MCQ  
Question ID : 264330134454  
Option 1 ID : 264330526787  
Option 2 ID : 264330526788  
Option 3 ID : 264330526789  
Option 4 ID : 264330526790  
Status : Answered  
Chosen Option : 2

Q.11 Find the part of the given sentence that has an error in it. If there is no error, choose 'No error'.

Until few decades ago, researchers believed the moon was completely dry.

- Ans
- 1. researchers believed the moon
  - 2. No error
  - 3. was completely dry.
  - 4. Until few decades ago,

Question Type : MCQ  
Question ID : 264330134799  
Option 1 ID : 264330528140  
Option 2 ID : 264330528142  
Option 3 ID : 264330528141  
Option 4 ID : 264330528139  
Status : Answered  
Chosen Option : 1

Q.12 Find the part of the given sentence that has an error in it. If there is no error, choose 'No error'.

We don't know exactly when first stars formed.

- Ans
- 1. We don't know
  - 2. No error
  - 3. exactly when first
  - 4. stars formed.

Question Type : MCQ  
Question ID : 264330135309  
Option 1 ID : 264330530147  
Option 2 ID : 264330530150  
Option 3 ID : 264330530148  
Option 4 ID : 264330530149  
Status : Answered  
Chosen Option : 4



Q.13 Choose the word that can substitute the given group of words.

A ground where the last funeral rites are performed

- Ans
- 1. Crematorium
  - 2. Tomb
  - 3. Mortuary
  - 4. Barracks

Question Type : MCQ  
Question ID : 264330135270  
Option 1 ID : 264330529997  
Option 2 ID : 264330529998  
Option 3 ID : 264330529996  
Option 4 ID : 264330529995  
Status : Answered  
Chosen Option : 1

Q.14 Select the most appropriate option to fill in the blank.

Some health experts optimistically argue that disinfecting indoor spaces with light could be a \_\_\_\_\_.

- Ans
- 1. interchanger
  - 2. game-changer
  - 3. hand over
  - 4. roundabout

Question Type : MCQ  
Question ID : 264330134822  
Option 1 ID : 264330528228  
Option 2 ID : 264330528230  
Option 3 ID : 264330528229  
Option 4 ID : 264330528227  
Status : Answered  
Chosen Option : 2



Q.15 Choose the word that can substitute the given group of words.

Liabile to catch fire easily

- Ans
- 1. Agnostic
  - 2. Inflammable
  - 3. Venial
  - 4. Incombustible

Question Type : MCQ  
Question ID : 264330134812  
Option 1 ID : 264330528187  
Option 2 ID : 264330528188  
Option 3 ID : 264330528190  
Option 4 ID : 264330528189  
Status : Answered  
Chosen Option : 2

Q.16 Four sentences are given, out of which three have spelling errors. Choose the sentence with all correctly spelt words.

- Ans
- 1.  
The person who received the alert doesn't know when it happened.
  - 2. Life is complicated, and there's a lot to be grateful for.
  - 3.  
The goal of this endeiviator is to create significant ties for your city.
  - 4.  
Never interrupt an earnest or apparently interesting conversation.

Question Type : MCQ  
Question ID : 264330136714  
Option 1 ID : 264330535568  
Option 2 ID : 264330535570  
Option 3 ID : 264330535569  
Option 4 ID : 264330535567  
Status : Answered  
Chosen Option : 1



**Q.17** Select the most appropriate synonym to substitute the bracketed word in the given sentence.  
So can our community leaders come up with a plan of action to help (alleviate) this problem?

- Ans**
- 1. Aggravate
  - 2. Falter
  - 3. Altruistic
  - 4. Diminish

Question Type : **MCQ**  
Question ID : **264330136734**  
Option 1 ID : **264330535646**  
Option 2 ID : **264330535644**  
Option 3 ID : **264330535643**  
Option 4 ID : **264330535645**  
Status : **Answered**  
Chosen Option : **4**

**Q.18** In the following question, out of the given four alternatives, select the alternative which best expresses the meaning of the Idiom/Phrase.

Hard/tough nut to crack

- Ans**
- 1. A difficult person, problem or situation
  - 2. To understand clearly
  - 3. Not being able to enjoy oneself
  - 4. Good for nothing

Question Type : **MCQ**  
Question ID : **264330134818**  
Option 1 ID : **264330528211**  
Option 2 ID : **264330528214**  
Option 3 ID : **264330528213**  
Option 4 ID : **264330528212**  
Status : **Answered**  
Chosen Option : **1**

**Q.19** A sentence has been given with a blank to be filled with an appropriate option. Choose the correct alternative.

I did not \_\_\_\_\_ everyone all at once.

- Ans**
- 1. losing
  - 2. lose
  - 3. lost
  - 4. loose

Question Type : **MCQ**  
Question ID : **264330134803**  
Option 1 ID : **264330528158**  
Option 2 ID : **264330528155**  
Option 3 ID : **264330528156**  
Option 4 ID : **264330528157**  
Status : **Answered**  
Chosen Option : **2**

Q.20 Choose the incorrectly spelt word.

- Ans
- 1. Positon
  - 2. Source
  - 3. Serious
  - 4. Continue

Question Type : MCQ  
Question ID : 264330134819  
Option 1 ID : 264330528216  
Option 2 ID : 264330528217  
Option 3 ID : 264330528215  
Option 4 ID : 264330528218  
Status : Answered  
Chosen Option : 1

**Comprehension:**

In the following passage some of the words have been deleted. Read the passage carefully and select the correct answer for the given blank out of the four alternatives.

Gardenia is one of the most (1) \_\_\_\_\_ flowers, producing one of the most beloved scents in the garden world. Fall or spring is the best time to (2) \_\_\_\_\_ this shrub in warmer climates. It also (3) \_\_\_\_\_ a fragrant houseplant, though it can be fussy about indoor humidity. Container plants can be (4) \_\_\_\_\_ outdoors during summer and returned to moderate indoor temperatures in the (5) \_\_\_\_\_.

SubQuestion No : 21

Q.21 Select the most appropriate option to fill in the blank No. 1.

- Ans
- 1. fragrant
  - 2. soluble
  - 3. stenchy
  - 4. polluted

Question Type : MCQ  
Question ID : 264330136856  
Option 1 ID : 264330536113  
Option 2 ID : 264330536112  
Option 3 ID : 264330536111  
Option 4 ID : 264330536114  
Status : Answered  
Chosen Option : 1

**Comprehension:**

In the following passage some of the words have been deleted. Read the passage carefully and select the correct answer for the given blank out of the four alternatives.

Gardenia is one of the most (1) \_\_\_\_\_ flowers, producing one of the most beloved scents in the garden world. Fall or spring is the best time to (2) \_\_\_\_\_ this shrub in warmer climates. It also (3) \_\_\_\_\_ a fragrant houseplant, though it can be fussy about indoor humidity. Container plants can be (4) \_\_\_\_\_ outdoors during summer and returned to moderate indoor temperatures in the (5) \_\_\_\_\_.

**SubQuestion No : 22**

**Q.22** Select the most appropriate option to fill in the blank No. 2.

- Ans
- 1. train
  - 2. plant
  - 3. host
  - 4. stamp

Question Type : MCQ  
Question ID : 264330136857  
Option 1 ID : 264330536115  
Option 2 ID : 264330536118  
Option 3 ID : 264330536116  
Option 4 ID : 264330536117  
Status : Answered  
Chosen Option : 2

**Comprehension:**

In the following passage some of the words have been deleted. Read the passage carefully and select the correct answer for the given blank out of the four alternatives.

Gardenia is one of the most (1) \_\_\_\_\_ flowers, producing one of the most beloved scents in the garden world. Fall or spring is the best time to (2) \_\_\_\_\_ this shrub in warmer climates. It also (3) \_\_\_\_\_ a fragrant houseplant, though it can be fussy about indoor humidity. Container plants can be (4) \_\_\_\_\_ outdoors during summer and returned to moderate indoor temperatures in the (5) \_\_\_\_\_.

**SubQuestion No : 23**

**Q.23** Select the most appropriate option to fill in the blank No. 3.

- Ans
- 1. make
  - 2. made
  - 3. making
  - 4. makes

Question Type : MCQ  
Question ID : 264330136858  
Option 1 ID : 264330536119  
Option 2 ID : 264330536120  
Option 3 ID : 264330536121  
Option 4 ID : 264330536122  
Status : Answered  
Chosen Option : 4

**Comprehension:**

In the following passage some of the words have been deleted. Read the passage carefully and select the correct answer for the given blank out of the four alternatives.

Gardenia is one of the most (1) \_\_\_\_\_ flowers, producing one of the most beloved scents in the garden world. Fall or spring is the best time to (2) \_\_\_\_\_ this shrub in warmer climates. It also (3) \_\_\_\_\_ a fragrant houseplant, though it can be fussy about indoor humidity. Container plants can be (4) \_\_\_\_\_ outdoors during summer and returned to moderate indoor temperatures in the (5) \_\_\_\_\_.

**SubQuestion No : 24**

**Q.24** Select the most appropriate option to fill in the blank No. 4.

- Ans
- 1. placed
  - 2. classified
  - 3. sailed
  - 4. sorted

Question Type : MCQ  
Question ID : 264330136859  
Option 1 ID : 264330536124  
Option 2 ID : 264330536126  
Option 3 ID : 264330536123  
Option 4 ID : 264330536125  
Status : Answered  
Chosen Option : 1

**Comprehension:**

In the following passage some of the words have been deleted. Read the passage carefully and select the correct answer for the given blank out of the four alternatives.

Gardenia is one of the most (1) \_\_\_\_\_ flowers, producing one of the most beloved scents in the garden world. Fall or spring is the best time to (2) \_\_\_\_\_ this shrub in warmer climates. It also (3) \_\_\_\_\_ a fragrant houseplant, though it can be fussy about indoor humidity. Container plants can be (4) \_\_\_\_\_ outdoors during summer and returned to moderate indoor temperatures in the (5) \_\_\_\_\_.

**SubQuestion No : 25**

**Q.25** Select the most appropriate option to fill in the blank No. 5.

- Ans
- 1. arena
  - 2. fall
  - 3. climate
  - 4. tropics

Question Type : MCQ  
Question ID : 264330136860  
Option 1 ID : 264330536129  
Option 2 ID : 264330536130  
Option 3 ID : 264330536128  
Option 4 ID : 264330536127  
Status : Answered  
Chosen Option : 2