



SSC MTS **SHIFT – 1 (18-05-2023)**

- ★ **Latest Govt Job updates**
- ★ **Private Job updates**
- ★ **Free Mock tests available**

**Visit - [teachingninja.in](https://teachingninja.in)**

## Multi Tasking Non Technical Staff and Havaldar CBIC and CBN Examination 2022

Roll Number	
Candidate Name	
Venue Name	
Exam Date	18/05/2023
Exam Time	9:00 AM - 10:30 AM
Subject	MTS Non Tech Havaldar CBIC and CBN Examination 2022

### Section : Numerical and Mathematical Ability

**Q.1** The longest side of the obtuse triangle is 7 cm and the other two sides of the triangle are 4 cm and 5 cm. Find the area of the triangle.

- Ans
- 1.  $1\sqrt{3} \text{ cm}^2$
  - 2.  $6\sqrt{3} \text{ cm}^2$
  - 3.  $3\sqrt{2} \text{ cm}^2$
  - 4.  $4\sqrt{6} \text{ cm}^2$

Question Type : MCQ  
Question ID : 264330135409  
Option 1 ID : 264330530546  
Option 2 ID : 264330530544  
Option 3 ID : 264330530545  
Option 4 ID : 264330530543  
Status : Answered  
Chosen Option : 4

**Q.2** What is the value of  $2[3.5 \times 3.5 + 2.5 \times 2.5]$ ?

- Ans
- 1. 39
  - 2. 37
  - 3. 38
  - 4. 36

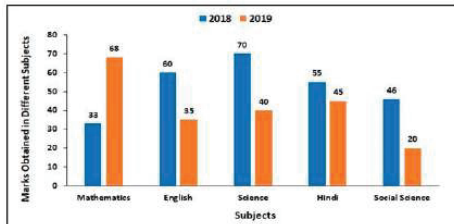
Question Type : MCQ  
Question ID : 264330137891  
Option 1 ID : 264330540174  
Option 2 ID : 264330540172  
Option 3 ID : 264330540173  
Option 4 ID : 264330540171  
Status : Answered  
Chosen Option : 2

Q.3 What is the third proportion of the numbers 15 and 30?

- Ans
- 1. 45
  - 2. 50
  - 3. 40
  - 4. 60

Question Type : MCQ  
Question ID : 264330133785  
Option 1 ID : 264330524165  
Option 2 ID : 264330524164  
Option 3 ID : 264330524163  
Option 4 ID : 264330524166  
Status : Answered  
Chosen Option : 4

Q.4 The following bar graph shows the marks of a student from 5 different subjects in 2018 and 2019. Find the ratio of total marks of 2018 to the total marks of 2019.



- Ans
- 1. 66 : 23
  - 2. 80 : 3
  - 3. 44 : 15
  - 4. 33 : 26

Question Type : MCQ  
Question ID : 264330133792  
Option 1 ID : 264330524193  
Option 2 ID : 264330524194  
Option 3 ID : 264330524192  
Option 4 ID : 264330524191  
Status : Answered  
Chosen Option : 4

Q.5 X alone can finish a work in 18 days, Y alone can finish the same work in 9 days. If X, Y and Z together can finish the same work in 4 days, then in how many days Z alone can finish the work?

- Ans
- 1. 12 days
  - 2. 10 days
  - 3. 14 days
  - 4. 16 days

Question Type : MCQ  
Question ID : 264330138740  
Option 1 ID : 264330543568  
Option 2 ID : 264330543567  
Option 3 ID : 264330543569  
Option 4 ID : 264330543570  
Status : Answered  
Chosen Option : 1

Q.6 The value of  $14 + [100 \div \{60 \div (18 \div 6)\}]$  of 400 is :

- Ans
- 1. 2020
  - 2. 2014
  - 3. 2015
  - 4. 2000

Question Type : MCQ  
Question ID : 264330133776  
Option 1 ID : 264330524130  
Option 2 ID : 264330524128  
Option 3 ID : 264330524129  
Option 4 ID : 264330524127  
Status : Answered  
Chosen Option : 2

Q.7 A purchased two articles for Rs 400 and Rs.600 respectively and sold at gains of 10% and 20% respectively. What was his overall gain percentage?

- Ans
- 1. 16%
  - 2. 20%
  - 3. 18%
  - 4. 15%

Question Type : MCQ  
Question ID : 264330133782  
Option 1 ID : 264330524152  
Option 2 ID : 264330524154  
Option 3 ID : 264330524153  
Option 4 ID : 264330524151  
Status : Answered  
Chosen Option : 1

Q.8 In a field 8 workers complete a task in 22 days. If this task is to be completed in 44 days, then how many workers will be required?

- Ans
- 1. 3
  - 2. 5
  - 3. 2
  - 4. 4

Question Type : MCQ  
Question ID : 264330135405  
Option 1 ID : 264330530527  
Option 2 ID : 264330530529  
Option 3 ID : 264330530530  
Option 4 ID : 264330530528  
Status : Answered  
Chosen Option : 4

**Q.9** The product of LCM and HCF of two numbers is 208. If one number is 78, then what is the other number?

- Ans**
- 1. 13
  - 2. 52
  - 3. 26
  - 4. 39

Question Type : **MCQ**  
Question ID : **264330138348**  
Option 1 ID : **264330541999**  
Option 2 ID : **264330542002**  
Option 3 ID : **264330542000**  
Option 4 ID : **264330542001**  
Status : **Answered**  
Chosen Option : **3**

**Q.10** A sum of Rs.7500 amounts to Rs.15000 in two years at compound interest calculated annually. How much will Rs.7500 become in four years?

- Ans**
- 1. Rs.60000
  - 2. Rs.30000
  - 3. Rs.50000
  - 4. Rs.45000

Question Type : **MCQ**  
Question ID : **264330133787**  
Option 1 ID : **264330524173**  
Option 2 ID : **264330524171**  
Option 3 ID : **264330524174**  
Option 4 ID : **264330524172**  
Status : **Answered**  
Chosen Option : **4**

**Q.11** An article was sold at a loss of 14%. If it was sold for Rs. 756 more, then there would have been a gain of 7%. Find the cost price of the article.

- Ans**
- 1. Rs. 3600
  - 2. Rs. 2300
  - 3. Rs. 5000
  - 4. Rs. 3000

Question Type : **MCQ**  
Question ID : **264330135375**  
Option 1 ID : **264330530407**  
Option 2 ID : **264330530408**  
Option 3 ID : **264330530409**  
Option 4 ID : **264330530410**  
Status : **Answered**  
Chosen Option : **1**

**Q.12** 2 cubes each of volumes  $125 \text{ cm}^3$  are joined end to end. The surface area of the resulting cuboid is:

- Ans**
- 1.  $325 \text{ cm}^2$
  - 2.  $350 \text{ cm}^2$
  - 3.  $125 \text{ cm}^2$
  - 4.  $250 \text{ cm}^2$

Question Type : MCQ  
Question ID : 264330138745  
Option 1 ID : 264330543589  
Option 2 ID : 264330543590  
Option 3 ID : 264330543587  
Option 4 ID : 264330543588  
Status : Answered  
Chosen Option : 4

**Q.13** An auto rickshaw travels 20 km from point P to Q then 25 km from Q to R. The total time took was 1 hour 30 minutes.  
What was the average speed of the auto rickshaw?

- Ans**
- 1. 15 km/hr
  - 2. 30 km/hr
  - 3. 45 km/hr
  - 4. 60 km/hr

Question Type : MCQ  
Question ID : 264330138729  
Option 1 ID : 264330543525  
Option 2 ID : 264330543523  
Option 3 ID : 264330543524  
Option 4 ID : 264330543526  
Status : Answered  
Chosen Option : 2

**Q.14** If the salary of A is 60% less than that of B, then by how much percent is the salary of B more than that of A?

- Ans**
- 1. 60%
  - 2. 40%
  - 3. 150%
  - 4. 120%

Question Type : MCQ  
Question ID : 264330133780  
Option 1 ID : 264330524145  
Option 2 ID : 264330524144  
Option 3 ID : 264330524146  
Option 4 ID : 264330524143  
Status : Answered  
Chosen Option : 3

**Q.15** A sum of Rs. 11064 gives an interest of Rs. 2766 in x years at 5% per annum simple interest. What will be the value of x?

- Ans**
- 1. 3
  - 2. 2
  - 3. 4
  - 4. 5

Question Type : **MCQ**  
Question ID : **264330138402**  
Option 1 ID : **264330542216**  
Option 2 ID : **264330542217**  
Option 3 ID : **264330542215**  
Option 4 ID : **264330542218**  
Status : **Answered**  
Chosen Option : 4

**Q.16** If the cost price of a refrigerator is Rs.17200 and the loss percentage is 8%, then what is the selling price (in Rs.) of the refrigerator?

- Ans**
- 1. Rs.15824
  - 2. Rs.14564
  - 3. Rs.14444
  - 4. Rs.15500

Question Type : **MCQ**  
Question ID : **264330133783**  
Option 1 ID : **264330524157**  
Option 2 ID : **264330524158**  
Option 3 ID : **264330524155**  
Option 4 ID : **264330524156**  
Status : **Answered**  
Chosen Option : 1



Q.17 The table given below shows the production of television and fridge by different companies.

Companies	Television	Fridge
P	80	100
Q	70	50
R	60	40
S	50	70
T	90	55

Which of the following statement is NOT correct?

I. The difference between average production of television and fridge by R and the average production of television and fridge by S are 10.

II. The production of television and fridge by P is 20 percent of the production of television by T.

- Ans
- 1. Both I and II
  - 2. Neither I nor II
  - 3. Only I
  - 4. Only II

Question Type : MCQ  
Question ID : 264330137892  
Option 1 ID : 264330540177  
Option 2 ID : 264330540178  
Option 3 ID : 264330540175  
Option 4 ID : 264330540176  
Status : Answered  
Chosen Option : 1

Q.18 The speed of a bus is 108 km/hr. Find the distance covered by the bus in 2 seconds.

- Ans
- 1. 16 m
  - 2. 30 m
  - 3. 20 m
  - 4. 60 m

Question Type : MCQ  
Question ID : 264330133788  
Option 1 ID : 264330524176  
Option 2 ID : 264330524175  
Option 3 ID : 264330524178  
Option 4 ID : 264330524177  
Status : Answered  
Chosen Option : 4



**Q.19** Three numbers are in the ratio 4 : 5 : 7. The sum of the smallest and largest numbers is 44. What is the second smallest number?

- Ans**
- 1. 28
  - 2. 32
  - 3. 20
  - 4. 24

Question Type : **MCQ**  
Question ID : **264330133784**  
Option 1 ID : **264330524162**  
Option 2 ID : **264330524160**  
Option 3 ID : **264330524159**  
Option 4 ID : **264330524161**  
Status : **Answered**  
Chosen Option : **3**

**Q.20** A student scored 77, 80, 88, 73 and 62 marks out of 100 in five subjects. What are his average marks?

- Ans**
- 1. 74
  - 2. 76
  - 3. 75
  - 4. 78

Question Type : **MCQ**  
Question ID : **264330133778**  
Option 1 ID : **264330524135**  
Option 2 ID : **264330524137**  
Option 3 ID : **264330524138**  
Option 4 ID : **264330524136**  
Status : **Answered**  
Chosen Option : **2**

Section : Reasoning Ability and Problem Solving

**Q.1** Which of the following letter cluster will replace the question mark (?) in the given series?

ND, KA, HX, EU, ?

- Ans**
- 1. AR
  - 2. BS
  - 3. BT
  - 4. BR

Question Type : **MCQ**  
Question ID : **264330133486**  
Option 1 ID : **264330522977**  
Option 2 ID : **264330522975**  
Option 3 ID : **264330522978**  
Option 4 ID : **264330522976**  
Status : **Answered**  
Chosen Option : **4**

**Q.2** Five girls Anita, Babita, Chamma, Daina and Erica are of different ages. Anita is younger than only Daina and Erica. Erica is younger to Daina. Chamma is youngest. Who is the fourth oldest?

- Ans**
- 1. Daina
  - 2. Erica
  - 3. Chamma
  - 4. Babita

Question Type : **MCQ**  
Question ID : **264330133494**  
Option 1 ID : **264330523010**  
Option 2 ID : **264330523008**  
Option 3 ID : **264330523009**  
Option 4 ID : **264330523007**  
Status : **Answered**  
Chosen Option : **4**

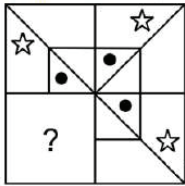
**Q.3** In a certain code language, 'NATURE' is written as 'MASUQE'. How will 'POTATO' be written in that language?

- Ans**
- 1. OOSASO
  - 2. OPSAOS
  - 3. OSPAOS
  - 4. OSSASO

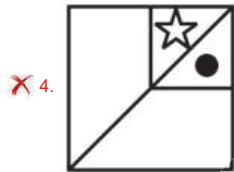
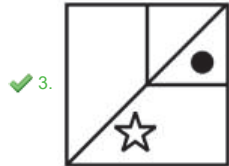
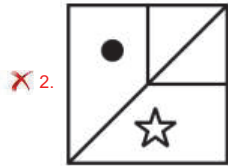
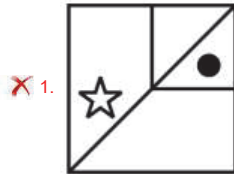
Question Type : **MCQ**  
Question ID : **264330137541**  
Option 1 ID : **264330538774**  
Option 2 ID : **264330538772**  
Option 3 ID : **264330538771**  
Option 4 ID : **264330538773**  
Status : **Answered**  
Chosen Option : **1**



**Q.4** Select the option figure that will replace the question mark (?) in the figure given below to complete the pattern.  
(rotation is not allowed)



Ans



Teachingninja.in

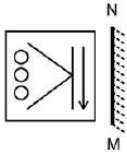
Question Type : MCQ  
 Question ID : 264330133505  
 Option 1 ID : 264330523052  
 Option 2 ID : 264330523051  
 Option 3 ID : 264330523053  
 Option 4 ID : 264330523054  
 Status : Answered  
 Chosen Option : 3

**Q.5** Five friends Alpha, Beta, Gamma, Rho and Theta are arranged in a row facing north but not necessarily in the same order. Beta sits at left end of the row. Only two people are sitting between Alpha and Gamma. Alpha sits immediate next to the Beta and Rho sits second to the right of Beta. Who sits between Rho and Gamma?

- Ans
- 1. Alpha
  - 2. Theta
  - 3. Beta
  - 4. No one

Question Type : MCQ  
 Question ID : 264330133492  
 Option 1 ID : 264330523002  
 Option 2 ID : 264330523001  
 Option 3 ID : 264330522999  
 Option 4 ID : 264330523000  
 Status : Answered  
 Chosen Option : 2

**Q.6** Select the correct mirror image of the given figure when the mirror MN is placed to the right side of the figure.



Ans

- 1.
- 2.
- 3.
- 4.

Question Type : MCQ  
 Question ID : 264330137806  
 Option 1 ID : 264330539834  
 Option 2 ID : 264330539833  
 Option 3 ID : 264330539831  
 Option 4 ID : 264330539832  
 Status : Answered  
 Chosen Option : 1

**Q.7** By Interchanging the given two numbers which of the following equation will be not correct?

9 and 3

I.  $7 \times 4 + 2 - 9 + 3 = 22$

II.  $9 + 4 - 6 \times 3 + 2 = -10$

**Ans**  1. Only I

2. Both I and II

3. Only II

4. Neither I nor II

Question Type : MCQ

Question ID : 264330138515

Option 1 ID : 264330542667

Option 2 ID : 264330542669

Option 3 ID : 264330542668

Option 4 ID : 264330542670

Status : Answered

Chosen Option : 2

**Q.8** Two Statements are given followed by two conclusions numbered I and II. Assuming the statements to be true, even if they seem to be at variance with commonly known facts, decide which of the conclusions logically follow(s) from the statements.

Statements:

No astronaut is tall.

Some tall are blue.

Conclusions:

I. Some astronauts are blue.

II. No tall is an astronaut.

**Ans**  1. Only conclusion I follows.

2. Both conclusions I and II follow.

3. Neither conclusion I nor II follow.

4. Only conclusion II follows.

Question Type : MCQ

Question ID : 264330133495

Option 1 ID : 264330523011

Option 2 ID : 264330523013

Option 3 ID : 264330523014

Option 4 ID : 264330523012

Status : Answered

Chosen Option : 4

**Q.9** Which of the following numbers will replace the question mark (?) in the given series?

46, 36, 28, 22, 18, ?

**Ans** ✓ 1. 16

✗ 2. 14

✗ 3. 15

✗ 4. 13

Question Type : **MCQ**

Question ID : **264330133497**

Option 1 ID : **264330523019**

Option 2 ID : **264330523022**

Option 3 ID : **264330523020**

Option 4 ID : **264330523021**

Status : **Answered**

Chosen Option : 1

**Q.10** In a certain code language, 'TYPE' is written as 'SXOD'. How will 'SING' be written in that language?

**Ans** ✗ 1. RMHF

✗ 2. RFHM

✓ 3. RHMF

✗ 4. MRHF

Question Type : **MCQ**

Question ID : **264330133390**

Option 1 ID : **264330522592**

Option 2 ID : **264330522593**

Option 3 ID : **264330522591**

Option 4 ID : **264330522594**

Status : **Answered**

Chosen Option : 3

**Q.11** Select the set in which the numbers are related in the same way as are the numbers of the following sets.(NOTE :

Operations should be performed on the whole numbers, without breaking down the numbers into its constituent digits.

E.g 13 – Operations on 13 such as adding /subtracting /multiplying etc. to 13 can be performed. Breaking down 13 into

1 and 3 and then performing mathematical operations on 1 and 3 is not allowed)

(13, 28, 58)

(16, 34, 70)

**Ans** ✗ 1. (15, 32, 64)

✗ 2. (18, 36, 110)

✓ 3. (11, 24, 50)

✗ 4. (12, 26, 56)

Question Type : **MCQ**

Question ID : **264330133500**

Option 1 ID : **264330523031**

Option 2 ID : **264330523032**

Option 3 ID : **264330523033**

Option 4 ID : **264330523034**

Status : **Answered**

Chosen Option : 3

**Q.12** Select the option that is related to the third number in the same way as the second number is related to the first number.  
8 : 514 :: 6 : ?

- Ans**
- 1. 228
  - 2. 208
  - 3. 218
  - 4. 238

Question Type : **MCQ**  
Question ID : **264330133499**  
Option 1 ID : **264330523029**  
Option 2 ID : **264330523028**  
Option 3 ID : **264330523027**  
Option 4 ID : **264330523030**  
Status : **Answered**  
Chosen Option : **3**

**Q.13** In a certain code language, 'FINGER' is written as '69147518' and 'DOG' is written as '4157'. How will 'FOREST' be written in that language?

- Ans**
- 1. 6151851820
  - 2. 6151851921
  - 3. 6151751920
  - 4. 6151851920

Question Type : **MCQ**  
Question ID : **264330137349**  
Option 1 ID : **264330538025**  
Option 2 ID : **264330538024**  
Option 3 ID : **264330538026**  
Option 4 ID : **264330538023**  
Status : **Answered**  
Chosen Option : **4**

**Q.14** Two Statements are given followed by two conclusions numbered I and II. Assuming the statements to be true, even if they seem to be at variance with commonly known facts, decide which of the conclusions logically follow(s) from the statements.

Statements:

All mobiles are electronic items.

Some telephones are electronic items.

Conclusions:

I. No mobile is a telephone.

II. Some mobile are telephones.

- Ans**
- 1. Both conclusions I and II follow.
  - 2. Only conclusion I follows.
  - 3. Only conclusion II follows.
  - 4. neither conclusion I nor II follows.

Question Type : **MCQ**  
Question ID : **264330133496**  
Option 1 ID : **264330523017**  
Option 2 ID : **264330523015**  
Option 3 ID : **264330523016**  
Option 4 ID : **264330523018**  
Status : **Answered**  
Chosen Option : **1**

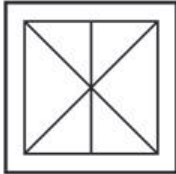
Q.15 Select the option figure in which the given figure (X) is embedded as its part (rotation is NOT allowed).



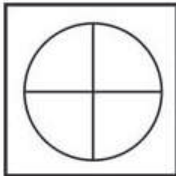
X

Ans

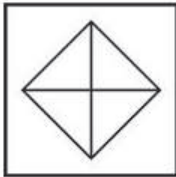
✗ 1.



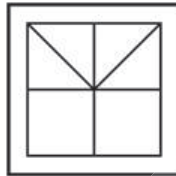
✗ 2.



✗ 3.



✓ 4.



Teachingninja.in

Question Type : MCQ

Question ID : 264330137805

Option 1 ID : 264330539827

Option 2 ID : 264330539829

Option 3 ID : 264330539828

Option 4 ID : 264330539830

Status : Answered

Chosen Option : 4

Q.16 Select the option that is related to the third word in the same way as the second word is related to the first word.

Cricket : Pitch :: Golf : ?

Ans

✗ 1. Arena

✗ 2. Track

✗ 3. Court

✓ 4. Course

Question Type : MCQ

Question ID : 264330133488

Option 1 ID : 264330522984

Option 2 ID : 264330522986

Option 3 ID : 264330522985

Option 4 ID : 264330522983

Status : Answered

Chosen Option : 4



Q.17 Which of the following numbers will replace the question mark (?) in the given series?

47, 48, 44, 53, 37, ?

- Ans
- 1. 52
  - 2. 64
  - 3. 62
  - 4. 55

Question Type : MCQ  
Question ID : 264330133498  
Option 1 ID : 264330523023  
Option 2 ID : 264330523026  
Option 3 ID : 264330523024  
Option 4 ID : 264330523025  
Status : Answered  
Chosen Option : 3

Q.18 Select the option that is related to the third word in the same way as the second word is related to the first word.

Bear : Growl :: Elephant : ?

- Ans
- 1. Bray
  - 2. Roar
  - 3. Trumpet
  - 4. Hiss

Question Type : MCQ  
Question ID : 264330133487  
Option 1 ID : 264330522979  
Option 2 ID : 264330522981  
Option 3 ID : 264330522980  
Option 4 ID : 264330522982  
Status : Answered  
Chosen Option : 3

Q.19 Which of the mathematical signs should be interchanged in the below equation to make it mathematically correct?

$4 + 32 + 8 \times 9 - 5 = 35$

- Ans
- 1.  $\times$  and  $-$
  - 2.  $+$  and  $+$
  - 3.  $\div$  and  $\times$
  - 4.  $\times$  and  $+$

Question Type : MCQ  
Question ID : 264330133501  
Option 1 ID : 264330523038  
Option 2 ID : 264330523036  
Option 3 ID : 264330523035  
Option 4 ID : 264330523037  
Status : Answered  
Chosen Option : 2

**Q.20** In an examination hall seven students Aditi, Cindy, Jeanie, Kirti, Niti, Preeti, and Sweety are sitting in a row facing North but not necessarily in the same order. Cindy sits third to the right of Sweety. Aditi and Preeti are immediate neighbours of Cindy. More than two persons sit between Preeti and Sweety. Jeanie is the only neighbour of Niti. Jeanie sits to the right of Aditi. What is the position of Niti with respect to Kirti?

- Ans**
- 1. Fifth to the left
  - 2. Fifth to the right
  - 3. Third to the right
  - 4. Third to the left

Question Type : **MCQ**  
Question ID : **264330133493**  
Option 1 ID : **264330523006**  
Option 2 ID : **264330523004**  
Option 3 ID : **264330523003**  
Option 4 ID : **264330523005**  
Status : **Answered**  
Chosen Option : **1**

Section : General Awareness

**Q.1** Which among the following statements is incorrect?

- Ans**
- 1. An increase in bank rate will decrease the money supply.
  - 2. Lower the Cash Reserve Ratio (CRR), lower will be the liquidity in the system.
  - 3. Higher the Cash Reserve Ratio (CRR), lower will be the liquidity in the system.
  - 4. Lower the Statutory Liquidity Ratio (SLR), higher will be the liquidity in the system.

Question Type : **MCQ**  
Question ID : **264330137085**  
Option 1 ID : **264330536986**  
Option 2 ID : **264330536984**  
Option 3 ID : **264330536983**  
Option 4 ID : **264330536985**  
Status : **Answered**  
Chosen Option : **3**

**Q.2** \_\_\_\_\_ is the world's largest tropical rainforest.

- Ans**
- 1. Amazon
  - 2. Prairies
  - 3. Daintree
  - 4. Congo

Question Type : **MCQ**  
Question ID : **264330133964**  
Option 1 ID : **264330524881**  
Option 2 ID : **264330524879**  
Option 3 ID : **264330524882**  
Option 4 ID : **264330524880**  
Status : **Answered**  
Chosen Option : **1**

Q.3 Which among the following are commonly known as blood thinners?

- Ans
- 1. Anticoagulants
  - 2. Antibiotics
  - 3. Anticaking agent
  - 4. Antibodies

Question Type : MCQ  
Question ID : 264330133963  
Option 1 ID : 264330524876  
Option 2 ID : 264330524877  
Option 3 ID : 264330524875  
Option 4 ID : 264330524878  
Status : Answered  
Chosen Option : 4

Q.4 Which foreign invader surrendered his territories to Chandragupta Maurya?

- Ans
- 1. Menander
  - 2. Demosthenes
  - 3. Seleucus Nicator
  - 4. Gondophernes

Question Type : MCQ  
Question ID : 264330137907  
Option 1 ID : 264330540236  
Option 2 ID : 264330540235  
Option 3 ID : 264330540237  
Option 4 ID : 264330540238  
Status : Answered  
Chosen Option : 4

Q.5 Soham is suffering from goitre. Which deficiency is the most common cause of it?

- Ans
- 1. Deficiency of Protein
  - 2. Deficiency of Vitamin A
  - 3. Deficiency of Iodine
  - 4. Deficiency of Iron

Question Type : MCQ  
Question ID : 264330133962  
Option 1 ID : 264330524873  
Option 2 ID : 264330524871  
Option 3 ID : 264330524872  
Option 4 ID : 264330524874  
Status : Answered  
Chosen Option : 3

Q.6 Which among the following is a covalent compound?

- Ans
- 1. Hydrogen chloride
  - 2. Magnesium hydroxide
  - 3. Calcium carbonate
  - 4. Sodium chloride

Question Type : MCQ  
Question ID : 264330133961  
Option 1 ID : 264330524868  
Option 2 ID : 264330524870  
Option 3 ID : 264330524869  
Option 4 ID : 264330524867  
Status : Answered  
Chosen Option : 4

Q.7 "And then One Day: A Memoir" is an autobiography of which of the following Bollywood star?

- Ans
- 1. Shahrukh Khan
  - 2. Naseeruddin Shah
  - 3. Karan Johar
  - 4. Priyanka Chopra

Question Type : MCQ  
Question ID : 264330137078  
Option 1 ID : 264330536956  
Option 2 ID : 264330536957  
Option 3 ID : 264330536955  
Option 4 ID : 264330536958  
Status : Answered  
Chosen Option : 3

Q.8 In the sport of \_\_\_\_\_, two teams of five players each attempt to score points by putting the ball into a hoop that is 10 feet off the ground.

- Ans
- 1. Badminton
  - 2. Rugby
  - 3. Basketball
  - 4. Lawn tennis

Question Type : MCQ  
Question ID : 264330133978  
Option 1 ID : 264330524935  
Option 2 ID : 264330524938  
Option 3 ID : 264330524936  
Option 4 ID : 264330524937  
Status : Answered  
Chosen Option : 3

Q.9 The Superintendence, control and conduct of all election to the municipalities is responsibility of the \_\_\_\_\_.

- Ans
- 1. State Election Commission
  - 2. Governor of State
  - 3. Election Commission of India
  - 4. Home Ministry of State

Question Type : MCQ  
Question ID : 264330138282  
Option 1 ID : 264330541736  
Option 2 ID : 264330541738  
Option 3 ID : 264330541735  
Option 4 ID : 264330541737  
Status : Answered  
Chosen Option : 3

Q.10 Which festival marks the triumph of Goddess Durga over the demon king Mahishasura?

- Ans
- 1. Diwali
  - 2. Janmashtami
  - 3. Holi
  - 4. Navratri

Question Type : MCQ  
Question ID : 264330137897  
Option 1 ID : 264330540197  
Option 2 ID : 264330540198  
Option 3 ID : 264330540195  
Option 4 ID : 264330540196  
Status : Answered  
Chosen Option : 4

Q.11 Who launched the SAMRIDDHI (Strengthening and Augmentation of Municipal Revenue for Infrastructure Development) scheme in October 2022 for Delhi, India?

- Ans
- 1. Chief Minister of Delhi
  - 2. Lieutenant Governor of Delhi
  - 3. President of India
  - 4. Prime Minister of India

Question Type : MCQ  
Question ID : 264330133956  
Option 1 ID : 264330524850  
Option 2 ID : 264330524849  
Option 3 ID : 264330524848  
Option 4 ID : 264330524847  
Status : Answered  
Chosen Option : 4

Q.12 Who was the founder of Dharma Sabha?

- Ans
- 1. Raja Ram Mohan Roy
  - 2. Dadoba Pandurang
  - 3. R.G. Bhandarkar
  - 4. Radhakanta Deb

Question Type : MCQ  
Question ID : 264330137910  
Option 1 ID : 264330540247  
Option 2 ID : 264330540249  
Option 3 ID : 264330540248  
Option 4 ID : 264330540250  
Status : Answered  
Chosen Option : 1

Q.13 Kalamandalam Kalyanikutty Amma is known to create the formal structure and ornamentation of the \_\_\_\_\_ dance form.

- Ans
- 1. Kathakali
  - 2. Bharatnatyam
  - 3. Kuchipudi
  - 4. Mohiniyattam

Question Type : MCQ  
Question ID : 264330137080  
Option 1 ID : 264330536966  
Option 2 ID : 264330536965  
Option 3 ID : 264330536963  
Option 4 ID : 264330536964  
Status : Answered  
Chosen Option : 3

Q.14 With respect to human geography, TFR stands for \_\_\_\_\_.

- Ans
- 1. Total Finance Rate
  - 2. Total Fall Rate
  - 3. Total Female Ratio
  - 4. Total Fertility Rate

Question Type : MCQ  
Question ID : 264330134680  
Option 1 ID : 264330527675  
Option 2 ID : 264330527678  
Option 3 ID : 264330527676  
Option 4 ID : 264330527677  
Status : Answered  
Chosen Option : 4

Q.15 "Bombay" Jayashri Ramnath is a famous \_\_\_\_\_ singer of India.

- Ans
- 1. Carnatic
  - 2. Folk
  - 3. Jazz
  - 4. Hip-hop

Question Type : MCQ  
Question ID : 264330133974  
Option 1 ID : 264330524922  
Option 2 ID : 264330524919  
Option 3 ID : 264330524920  
Option 4 ID : 264330524921  
Status : Answered  
Chosen Option : 3

Q.16 Panthi dance form is associated with \_\_\_\_\_ state of India.

- Ans
- 1. Maharashtra
  - 2. Chhattisgarh
  - 3. Kerala
  - 4. Punjab

Question Type : MCQ  
Question ID : 264330133958  
Option 1 ID : 264330524858  
Option 2 ID : 264330524857  
Option 3 ID : 264330524856  
Option 4 ID : 264330524855  
Status : Answered  
Chosen Option : 2

Q.17 Who among the following was a famous ruler of the Pandya dynasty of South India?

- Ans
- 1. Nedunjelidan II
  - 2. Karikala
  - 3. Ashoka
  - 4. Nizam Shah

Question Type : MCQ  
Question ID : 264330133970  
Option 1 ID : 264330524906  
Option 2 ID : 264330524903  
Option 3 ID : 264330524905  
Option 4 ID : 264330524904  
Status : Answered  
Chosen Option : 2

Q.18 Part XVI of the Indian constitution deals with \_\_\_\_\_.

- Ans
- 1. Elections
  - 2. Special provisions related to certain classes
  - 3. Constitutional amendments
  - 4. Special provisions related to municipal corporation

Question Type : MCQ  
Question ID : 264330133976  
Option 1 ID : 264330524930  
Option 2 ID : 264330524927  
Option 3 ID : 264330524929  
Option 4 ID : 264330524928  
Status : Answered  
Chosen Option : 1

Q.19 According to Census 2011, what is the total literacy rate in India (approximately)?

- Ans
- 1. 65%
  - 2. 74%
  - 3. 62%
  - 4. 81%

Question Type : MCQ  
Question ID : 264330137722  
Option 1 ID : 264330539498  
Option 2 ID : 264330539496  
Option 3 ID : 264330539495  
Option 4 ID : 264330539497  
Status : Answered  
Chosen Option : 3

Q.20 The Hindu College was established in Benaras in \_\_\_\_\_.

- Ans
- 1. 1785
  - 2. 1786
  - 3. 1791
  - 4. 1784

Question Type : MCQ  
Question ID : 264330138294  
Option 1 ID : 264330541783  
Option 2 ID : 264330541784  
Option 3 ID : 264330541785  
Option 4 ID : 264330541786  
Status : Answered  
Chosen Option : 4



Q.21 Which Indian cricketer is also known as 'The Wall'?

- Ans
- 1. Kapil Dev
  - 2. Rahul Dravid
  - 3. Sachin Tendulkar
  - 4. Mahendra Singh Dhoni

Question Type : MCQ  
Question ID : 264330133979  
Option 1 ID : 264330524940  
Option 2 ID : 264330524939  
Option 3 ID : 264330524941  
Option 4 ID : 264330524942  
Status : Answered  
Chosen Option : 2

Q.22 Which among the following crops is an example of Kharif crop?

- Ans
- 1. Wheat
  - 2. Rice
  - 3. Barley
  - 4. Mustard

Question Type : MCQ  
Question ID : 264330137070  
Option 1 ID : 264330536924  
Option 2 ID : 264330536923  
Option 3 ID : 264330536925  
Option 4 ID : 264330536926  
Status : Answered  
Chosen Option : 4

Q.23 As of November 2022, who is the Speaker of Lok Sabha?

- Ans
- 1. Droupadi Murmu
  - 2. Narendra Modi
  - 3. Om Birla
  - 4. Amit Shah

Question Type : MCQ  
Question ID : 264330133977  
Option 1 ID : 264330524933  
Option 2 ID : 264330524932  
Option 3 ID : 264330524934  
Option 4 ID : 264330524931  
Status : Answered  
Chosen Option : 3

Q.24 Which is a major tributary of Bhagirathi river?

- Ans
- 1. Bhilangna
  - 2. Dhauliganga
  - 3. Pindar
  - 4. Bishenganga

Question Type : MCQ  
Question ID : 264330133966  
Option 1 ID : 264330524887  
Option 2 ID : 264330524889  
Option 3 ID : 264330524888  
Option 4 ID : 264330524890  
Status : Answered  
Chosen Option : 4

Q.25 How many UNESCO Natural World Heritage sites are there in India?

- Ans
- 1. Seven
  - 2. Four
  - 3. Six
  - 4. Five

Question Type : MCQ  
Question ID : 264330138273  
Option 1 ID : 264330541702  
Option 2 ID : 264330541699  
Option 3 ID : 264330541701  
Option 4 ID : 264330541700  
Status : Answered  
Chosen Option : 3

Section : English Language and Comprehension

Q.1 Select the most appropriate synonym to substitute the bracketed word in the given sentence.

Confession had always rested on a clear distinction between mortal and (venial) sins.

- Ans
- 1. Genial
  - 2. Pardonable
  - 3. Major
  - 4. Intolerable

Question Type : MCQ  
Question ID : 264330136308  
Option 1 ID : 264330534010  
Option 2 ID : 264330534009  
Option 3 ID : 264330534007  
Option 4 ID : 264330534008  
Status : Answered  
Chosen Option : 2

Q.2 Fill in the blank with the most appropriate option.

Sam knew who those people were; the figure in front was \_\_\_\_\_ his cousin.

- Ans
- 1. by mistake
  - 2. at mistake
  - 3. unmistakably
  - 4. mistaken of

Question Type : MCQ  
Question ID : 264330136391  
Option 1 ID : 264330534334  
Option 2 ID : 264330534331  
Option 3 ID : 264330534333  
Option 4 ID : 264330534332  
Status : Answered  
Chosen Option : 1

Q.3 Choose the incorrectly spelt word.

- Ans
- 1. Insigt
  - 2. Supply
  - 3. Optical
  - 4. Cares

Question Type : MCQ  
Question ID : 264330134446  
Option 1 ID : 264330526758  
Option 2 ID : 264330526755  
Option 3 ID : 264330526756  
Option 4 ID : 264330526757  
Status : Answered  
Chosen Option : 1

Q.4 Identify the segment that contains a grammatical error. If there is no error, select 'No error'.

Rapid climate warming in / the tundra biome have been linked / to increasing shrub dominance.

- Ans
- 1. No error
  - 2. Rapid climate warming in
  - 3. the tundra biome have been linked
  - 4. to increasing shrub dominance.

Question Type : MCQ  
Question ID : 264330136057  
Option 1 ID : 264330533046  
Option 2 ID : 264330533043  
Option 3 ID : 264330533044  
Option 4 ID : 264330533045  
Status : Answered  
Chosen Option : 4

**Q.5** A sentence has been given with a blank to be filled with an appropriate option. Choose the correct alternative.  
Farms are increasingly turning to automation for \_\_\_\_\_ reasons.

- Ans
- 1. many
  - 2. most
  - 3. much
  - 4. little

Question Type : MCQ  
Question ID : 264330134430  
Option 1 ID : 264330526697  
Option 2 ID : 264330526696  
Option 3 ID : 264330526698  
Option 4 ID : 264330526695  
Status : Answered  
Chosen Option : 1

**Q.6** Select the appropriate synonym for the underlined word.  
I didn't have time to give them proof.

- Ans
- 1. evidence
  - 2. guess
  - 3. snap
  - 4. charge

Question Type : MCQ  
Question ID : 264330134440  
Option 1 ID : 264330526734  
Option 2 ID : 264330526731  
Option 3 ID : 264330526732  
Option 4 ID : 264330526733  
Status : Answered  
Chosen Option : 1

**Q.7** Select the most appropriate option to fill in the blank.  
Participate in a mock interview to prepare for \_\_\_\_\_ on your feet and formulating answers under pressure.

- Ans
- 1. thinking
  - 2. blocking
  - 3. cursing
  - 4. building

Question Type : MCQ  
Question ID : 264330134449  
Option 1 ID : 264330526767  
Option 2 ID : 264330526769  
Option 3 ID : 264330526768  
Option 4 ID : 264330526770  
Status : Answered  
Chosen Option : 1

**Q.8** Improve the underlined part of the sentence. Choose 'No improvement' as an answer if the sentence is grammatically correct.  
She blew out the candle and gone to sleep.

- Ans
- 1. went to sleeps
  - 2. go to sleep
  - 3. went to sleep
  - 4. No improvement

Question Type : MCQ  
Question ID : 264330134350  
Option 1 ID : 264330526387  
Option 2 ID : 264330526389  
Option 3 ID : 264330526388  
Option 4 ID : 264330526390  
Status : Answered  
Chosen Option : 3

**Q.9** In the following question, out of the given four alternatives, select the alternative which best expresses the meaning of the Idiom/Phrase.  
At all costs

- Ans
- 1. Not to be trifled with
  - 2. Whatever is needed to achieve something
  - 3. To be master of
  - 4. An expensive purchase

Question Type : MCQ  
Question ID : 264330134445  
Option 1 ID : 264330526753  
Option 2 ID : 264330526752  
Option 3 ID : 264330526754  
Option 4 ID : 264330526751  
Status : Answered  
Chosen Option : 2

**Q.10** Find the part of the given sentence that has an error in it. If there is no error, choose 'No error'.  
Tax dispute settlement might not work out in the desired scale.

- Ans
- 1. might not work out in
  - 2. the desired scale.
  - 3. Tax dispute settlement
  - 4. No error

Question Type : MCQ  
Question ID : 264330134426  
Option 1 ID : 264330526680  
Option 2 ID : 264330526681  
Option 3 ID : 264330526679  
Option 4 ID : 264330526682  
Status : Answered  
Chosen Option : 1

Q.11 Choose the word that can substitute the given group of words.  
A unit to measure light

- Ans  1. Lumen  
 2. Watt  
 3. Horse-power  
 4. Ampere

Question Type : MCQ  
Question ID : 264330134439  
Option 1 ID : 264330526729  
Option 2 ID : 264330526728  
Option 3 ID : 264330526730  
Option 4 ID : 264330526727  
Status : Answered  
Chosen Option : 4

Q.12 Improve the underlined part of the sentence. Choose 'No improvement' as an answer if the sentence is grammatically correct.  
Cell phones keeps loved ones and those nearby them well connected.

- Ans  1. No improvement  
 2. keeping loved and nearby  
 3. kept love and near  
 4. keep loved ones and those near

Question Type : MCQ  
Question ID : 264330134429  
Option 1 ID : 264330526694  
Option 2 ID : 264330526692  
Option 3 ID : 264330526691  
Option 4 ID : 264330526693  
Status : Answered  
Chosen Option : 4

Q.13 Select the most appropriate antonym of the given word.

Discreet

- Ans  1. Release  
 2. Zenith  
 3. Open  
 4. Lose

Question Type : MCQ  
Question ID : 264330136657  
Option 1 ID : 264330535350  
Option 2 ID : 264330535349  
Option 3 ID : 264330535348  
Option 4 ID : 264330535347  
Status : Answered  
Chosen Option : 4

Q.14 Fill in the blank with the most appropriate option.

He had moved about two inches when several things happened in very \_\_\_\_\_ succession.

- Ans
- 1. brief
  - 2. desperate
  - 3. quick
  - 4. absurd

Question Type : MCQ  
Question ID : 264330136263  
Option 1 ID : 264330533837  
Option 2 ID : 264330533835  
Option 3 ID : 264330533836  
Option 4 ID : 264330533838  
Status : Answered  
Chosen Option : 3

Q.15 In the following question, out of the given four alternatives, select the alternative which best expresses the meaning of the Idiom/Phrase.  
Rolling in cash

- Ans
- 1. Have a large quantity of money
  - 2. A business magnate
  - 3. Buying things on interest
  - 4. To borrow a costly attire

Question Type : MCQ  
Question ID : 264330134444  
Option 1 ID : 264330526748  
Option 2 ID : 264330526750  
Option 3 ID : 264330526747  
Option 4 ID : 264330526749  
Status : Answered  
Chosen Option : 3

Q.16 Choose the word that can substitute the given group of words.  
Destruction of a fetus

- Ans
- 1. Fratricide
  - 2. Ellipse
  - 3. Abhor
  - 4. Feticide

Question Type : MCQ  
Question ID : 264330134438  
Option 1 ID : 264330526725  
Option 2 ID : 264330526726  
Option 3 ID : 264330526723  
Option 4 ID : 264330526724  
Status : Answered  
Chosen Option : 4

Q.17 Find the part of the given sentence that has an error in it. If there is no error, choose 'No error'.

The benefits of rebuilding healthy, fertile soil are clear.

- Ans
- 1. healthy, fertile soil
  - 2. The benefits of rebuilding
  - 3. No error
  - 4. are clear.

Question Type : MCQ  
Question ID : 264330135204  
Option 1 ID : 264330529744  
Option 2 ID : 264330529743  
Option 3 ID : 264330529746  
Option 4 ID : 264330529745  
Status : Answered  
Chosen Option : 4

Q.18 Select the appropriate antonym for the underlined word.  
The peach-tree is most productive when the roots are kept near the surface.

- Ans
- 1. futile
  - 2. lush
  - 3. potent
  - 4. fertile

Question Type : MCQ  
Question ID : 264330134443  
Option 1 ID : 264330526746  
Option 2 ID : 264330526744  
Option 3 ID : 264330526745  
Option 4 ID : 264330526743  
Status : Answered  
Chosen Option : 1

Q.19 Select the most appropriate option to substitute the bracketed segment in the given sentence. If there is no need to substitute it, select 'no substitution required'.  
(Beside myself, the only English people) there were Keith and Doreen.

- Ans
- 1. Besides I, the only English speaking people
  - 2. No substitution required
  - 3. Besides myself, the only English people
  - 4. Beside me, the only English people

Question Type : MCQ  
Question ID : 264330136060  
Option 1 ID : 264330533056  
Option 2 ID : 264330533058  
Option 3 ID : 264330533057  
Option 4 ID : 264330533055  
Status : Answered  
Chosen Option : 4



**Q.20** Four sentences are given, out of which three have spelling errors. Choose the sentence with all correctly spelt words.

- Ans**
- 1. I don't know weather to eat it or rubb it on.
  - 2. Goodbye untill later now, foks. Have a good night.
  - 3. She always says something humerous.
  - 4.  
Had I known what was coming, I could have prepared myself better.

Question Type : **MCQ**  
Question ID : **264330136262**  
Option 1 ID : **264330533832**  
Option 2 ID : **264330533834**  
Option 3 ID : **264330533831**  
Option 4 ID : **264330533833**  
Status : **Answered**  
Chosen Option : **4**

**Comprehension:**

In the following passage some words have been deleted. Fill in the blanks with the help of the alternatives given. Select the most appropriate option for each number.

By the (1) \_\_\_\_\_ we reach puberty, the world has reached us and (2) \_\_\_\_\_ us to a greater extent than we realize. (3) \_\_\_\_\_ family, friends, school, and society in general (4) \_\_\_\_\_ -by word and example-how to be. But people (5) \_\_\_\_\_ leaders at that moment when they decide for themselves how to be.

**SubQuestion No : 21**

**Q.21** Select the most appropriate option to fill in blank number 1.

- Ans**
- 1. time
  - 2. moment
  - 3. age
  - 4. era

Question Type : **MCQ**  
Question ID : **264330136648**  
Option 1 ID : **264330535312**  
Option 2 ID : **264330535314**  
Option 3 ID : **264330535313**  
Option 4 ID : **264330535311**  
Status : **Answered**  
Chosen Option : **1**

**Comprehension:**

In the following passage some words have been deleted. Fill in the blanks with the help of the alternatives given. Select the most appropriate option for each number.

By the (1) \_\_\_\_\_ we reach puberty, the world has reached us and (2) \_\_\_\_\_ us to a greater extent than we realize. (3) \_\_\_\_\_ family, friends, school, and society in general (4) \_\_\_\_\_ -by word and example-how to be. But people (5) \_\_\_\_\_ leaders at that moment when they decide for themselves how to be.

**SubQuestion No : 22**

**Q.22** Select the most appropriate option to fill in blank number 2.

- Ans
- 1. shapes
  - 2. shaped
  - 3. contours
  - 4. formats

Question Type : MCQ

Question ID : 264330136649

Option 1 ID : 264330535315

Option 2 ID : 264330535318

Option 3 ID : 264330535316

Option 4 ID : 264330535317

Status : Answered

Chosen Option : 2

**Comprehension:**

In the following passage some words have been deleted. Fill in the blanks with the help of the alternatives given. Select the most appropriate option for each number.

By the (1) \_\_\_\_\_ we reach puberty, the world has reached us and (2) \_\_\_\_\_ us to a greater extent than we realize. (3) \_\_\_\_\_ family, friends, school, and society in general (4) \_\_\_\_\_ -by word and example-how to be. But people (5) \_\_\_\_\_ leaders at that moment when they decide for themselves how to be.

**SubQuestion No : 23**

**Q.23** Select the most appropriate option to fill in blank number 3.

- Ans
- 1. Their
  - 2. Her
  - 3. There
  - 4. Our

Question Type : MCQ

Question ID : 264330136650

Option 1 ID : 264330535321

Option 2 ID : 264330535320

Option 3 ID : 264330535322

Option 4 ID : 264330535319

Status : Answered

Chosen Option : 4

**Comprehension:**

In the following passage some words have been deleted. Fill in the blanks with the help of the alternatives given. Select the most appropriate option for each number.

By the (1) \_\_\_\_\_ we reach puberty, the world has reached us and (2) \_\_\_\_\_ us to a greater extent than we realize. (3) \_\_\_\_\_ family, friends, school, and society in general (4) \_\_\_\_\_ -by word and example-how to be. But people (5) \_\_\_\_\_ leaders at that moment when they decide for themselves how to be.

**SubQuestion No : 24**

**Q.24** Select the most appropriate option to fill in blank number 4.

- Ans**
- 1. have tell us
  - 2. have told us
  - 3. has told us
  - 4. have been told us

Question Type : MCQ  
Question ID : 264330136651  
Option 1 ID : 264330535326  
Option 2 ID : 264330535325  
Option 3 ID : 264330535323  
Option 4 ID : 264330535324  
Status : Answered  
Chosen Option : 2

**Comprehension:**

In the following passage some words have been deleted. Fill in the blanks with the help of the alternatives given. Select the most appropriate option for each number.

By the (1) \_\_\_\_\_ we reach puberty, the world has reached us and (2) \_\_\_\_\_ us to a greater extent than we realize. (3) \_\_\_\_\_ family, friends, school, and society in general (4) \_\_\_\_\_ -by word and example-how to be. But people (5) \_\_\_\_\_ leaders at that moment when they decide for themselves how to be.

**SubQuestion No : 25**

**Q.25** Select the most appropriate option to fill in blank number 5.

- Ans**
- 1. onset to became
  - 2. begin to become
  - 3. began to become
  - 4. start to became

Question Type : MCQ  
Question ID : 264330136652  
Option 1 ID : 264330535330  
Option 2 ID : 264330535328  
Option 3 ID : 264330535327  
Option 4 ID : 264330535329  
Status : Answered  
Chosen Option : 4