



SSC MTS **SHIFT – 2 (18-05-2023)**

- ★ **Latest Govt Job updates**
- ★ **Private Job updates**
- ★ **Free Mock tests available**

Visit - teachingninja.in

Multi Tasking Non Technical Staff and Havaladar CBIC and CBN Examination 2022

Roll Number	
Candidate Name	
Venue Name	
Exam Date	18/05/2023
Exam Time	12:00 PM - 2:00 PM
Subject	MTS Non Tech Havaladar CBIC and CBN Examination 2022

Section : Numerical and Mathematical Ability

Q.1 In a box containing 45 bulbs, 12 are found to be defective. What is the ratio of the good bulbs to the total bulbs in the box?

- Ans**
- 1. 8:13
 - 2. 5:8
 - 3. 7:11
 - 4. 11:15

Question Type : MCQ

Question ID : 264330138734

Option 1 ID : 264330543545

Option 2 ID : 264330543546

Option 3 ID : 264330543544

Option 4 ID : 264330543543

Status : Answered

Chosen Option : 4

Q.2 What will be the simple interest on a principal of Rs. 980 for 4 years at the rate of 12 percent per annum?

- Ans**
- 1. Rs. 430.4
 - 2. Rs. 470.4
 - 3. Rs. 460.4
 - 4. Rs. 380.4

Question Type : MCQ

Question ID : 264330137675

Option 1 ID : 264330539309

Option 2 ID : 264330539310

Option 3 ID : 264330539308

Option 4 ID : 264330539307

Status : Answered

Chosen Option : 2

Q.3 60 percent of 40 percent of a number is equal to 150. What is the 20 percent of that number?

- Ans
- 1. 175
 - 2. 145
 - 3. 200
 - 4. 125

Question Type : MCQ
Question ID : 264330137670
Option 1 ID : 264330539290
Option 2 ID : 264330539289
Option 3 ID : 264330539287
Option 4 ID : 264330539288
Status : Answered
Chosen Option : 4

Q.4 A can do a work in 6 days, which B alone can do in 8 days. In how many days they together can do it

- Ans
- 1. $\frac{24}{7}$ days
 - 2. $\frac{25}{7}$ days
 - 3. $\frac{27}{4}$ days
 - 4. $\frac{22}{3}$ days

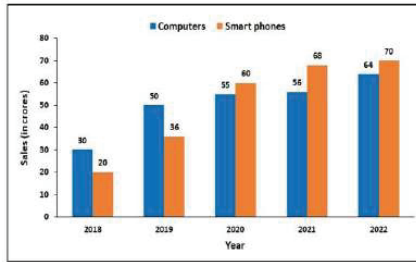
Question Type : MCQ
Question ID : 264330135102
Option 1 ID : 264330529343
Option 2 ID : 264330529344
Option 3 ID : 264330529346
Option 4 ID : 264330529345
Status : Answered
Chosen Option : 1

Q.5 In a college, the ratio of the number of boys to girls is 3:8. If there are 180 boys, then how many girls are in the college?

- Ans
- 1. 380
 - 2. 480
 - 3. 660
 - 4. 420

Question Type : MCQ
Question ID : 264330138735
Option 1 ID : 264330543549
Option 2 ID : 264330543548
Option 3 ID : 264330543547
Option 4 ID : 264330543550
Status : Answered
Chosen Option : 2

Q.6 The following graph shows the sales(in crores) of computers and smart phones in a country during the year 2018 to 2022. What is the difference between the average sale of computer and average sale of smart phones during these years?



- Ans
- 1. 1 crores
 - 2. 0.5 crores
 - 3. 0.2 crores
 - 4. 0.8 crores

Question Type : MCQ
Question ID : 264330138742
Option 1 ID : 264330543577
Option 2 ID : 264330543576
Option 3 ID : 264330543575
Option 4 ID : 264330543578
Status : Answered
Chosen Option : 3

Q.7 In a 255 L mixture of milk & water, the ratio of milk and water is 4:1. Find the quantity of water required to make the ratio of milk & water 4:3.

- Ans
- 1. 94 litres
 - 2. 51 litres
 - 3. 102 litres
 - 4. 55 litres

Question Type : MCQ
Question ID : 264330135134
Option 1 ID : 264330529472
Option 2 ID : 264330529471
Option 3 ID : 264330529473
Option 4 ID : 264330529474
Status : Answered
Chosen Option : 3

Q.8 The circumference of base of a cylinder is 28π cm. If the height of cylinder is 17 cm, then what will be the curved surface area of cylinder?

- Ans
- 1. $372\pi \text{ cm}^2$
 - 2. $436\pi \text{ cm}^2$
 - 3. $524\pi \text{ cm}^2$
 - 4. $476\pi \text{ cm}^2$

Question Type : MCQ
Question ID : 264330137188
Option 1 ID : 264330537395
Option 2 ID : 264330537396
Option 3 ID : 264330537398
Option 4 ID : 264330537397
Status : Answered
Chosen Option : 4

Q.9 The table below shows the number of the AC that was sold by the showroom in the year 2013 to 2016.
How much percent of AC sold by showroom B in 2014 is less than that of showroom D in 2016?

Showroom	Years			
	2013	2014	2015	2016
A	100	54	98	72
B	180	92	105	88
C	120	122	100	140
D	60	152	80	100

- Ans
- 1. 10%
 - 2. 14%
 - 3. 8%
 - 4. 12%

Question Type : MCQ
Question ID : 264330133596
Option 1 ID : 264330523408
Option 2 ID : 264330523410
Option 3 ID : 264330523407
Option 4 ID : 264330523409
Status : Answered
Chosen Option : 3

Q.10 The value of $3 \times \left[\{(11 - 3) \div (1/2) \text{ of } 8\} + 15 \div 3 \right]$ is:

- Ans
- 1. 15
 - 2. 19
 - 3. 21
 - 4. 30

Question Type : MCQ
Question ID : 264330133582
Option 1 ID : 264330523353
Option 2 ID : 264330523354
Option 3 ID : 264330523352
Option 4 ID : 264330523351
Status : Answered
Chosen Option : 3

Q.11 Rs. 2400 is lent at the rate of 10 percent per annum. Which of the following statement(s) is/are correct?

I. The compound interest (compounding annually) for 3 years is Rs. 794.4.

II. The difference between simple interest and compound interest (compounding annually) after 3 years is Rs. 75.8

Ans 1. None of the statements are correct

2. Only statement I is correct

3. Only statement II is correct

4. Both statement I and II are correct

Question Type : MCQ

Question ID : 264330137676

Option 1 ID : 264330539314

Option 2 ID : 264330539311

Option 3 ID : 264330539312

Option 4 ID : 264330539313

Status : Answered

Chosen Option : 2

Q.12 A vendor expects a gain of 15% on his cost price. If in a month, his sale was of Rs. 138000, then what was his profit?

Ans 1. Rs. 18000

2. Rs. 15500

3. Rs. 12000

4. Rs. 13800

Question Type : MCQ

Question ID : 264330141023

Option 1 ID : 264330552441

Option 2 ID : 264330552442

Option 3 ID : 264330552439

Option 4 ID : 264330552440

Status : Answered

Chosen Option : 1

Q.13 $P = (8 + 8) \times (8 + 8) \times (8 \times 8)$

Find out the value of P.

Ans 1. 512

2. 1120

3. 1024

4. 1440

Question Type : MCQ

Question ID : 264330138724

Option 1 ID : 264330543503

Option 2 ID : 264330543506

Option 3 ID : 264330543504

Option 4 ID : 264330543505

Status : Answered

Chosen Option : 3

Q.14 63 men can complete a work in 30 days. In how many days 21 men will do the same work?

- Ans**
- 1. 70 days
 - 2. 85 days
 - 3. 90 days
 - 4. 88 days

Question Type : **MCQ**
Question ID : **264330138427**
Option 1 ID : **264330542315**
Option 2 ID : **264330542317**
Option 3 ID : **264330542318**
Option 4 ID : **264330542316**
Status : **Answered**
Chosen Option : **3**

Q.15 Find the area of the trapezium whose parallel sides measure 14 cm, and 18 cm and the distance between parallel sides is 15 cm.

- Ans**
- 1. 310 cm^2
 - 2. 300 cm^2
 - 3. 220 cm^2
 - 4. 240 cm^2

Question Type : **MCQ**
Question ID : **264330138431**
Option 1 ID : **264330542333**
Option 2 ID : **264330542334**
Option 3 ID : **264330542331**
Option 4 ID : **264330542332**
Status : **Answered**
Chosen Option : **4**

Q.16 A distributor of an AC company allowed a 5% discount when a shopkeeper book an order of 40 AC's with marked price Rs. 24500 per AC. The total value in the invoice is:

- Ans**
- 1. Rs. 931000
 - 2. Rs. 980000
 - 3. Rs. 964000
 - 4. Rs. 890000

Question Type : **MCQ**
Question ID : **264330138733**
Option 1 ID : **264330543541**
Option 2 ID : **264330543539**
Option 3 ID : **264330543542**
Option 4 ID : **264330543540**
Status : **Answered**
Chosen Option : **1**

Q.17 A train travelling at 180 km/hr overtakes a car travelling at 108 km/hr in 5 seconds. What is the length of the train?

- Ans
- 1. 200 meters
 - 2. 100 meters
 - 3. 120 meters
 - 4. 150 meters

Question Type : MCQ
Question ID : 264330138738
Option 1 ID : 264330543560
Option 2 ID : 264330543562
Option 3 ID : 264330543559
Option 4 ID : 264330543561
Status : Answered
Chosen Option : 2

Q.18 Which is the least number divisible by 6, 18, 20 and 32?

- Ans
- 1. 108
 - 2. 640
 - 3. 1440
 - 4. 360

Question Type : MCQ
Question ID : 264330140996
Option 1 ID : 264330552331
Option 2 ID : 264330552333
Option 3 ID : 264330552334
Option 4 ID : 264330552332
Status : Answered
Chosen Option : 3

Q.19 Suman incurred a loss of 35% on selling an article for Rs. 41275. What was the cost price of the article?

- Ans
- 1. Rs. 48675
 - 2. Rs. 63500
 - 3. Rs. 54020
 - 4. Rs. 45910

Question Type : MCQ
Question ID : 264330138732
Option 1 ID : 264330543538
Option 2 ID : 264330543535
Option 3 ID : 264330543537
Option 4 ID : 264330543536
Status : Answered
Chosen Option : 2

Q.20 Find the curved surface area of cone of radius 12 cm and slant height 14 cm. (Use $\pi = 3.14$)

- Ans
- 1. 4325.5 cm²
 - 2. 527.52 cm²
 - 3. 5436.6 cm²
 - 4. 501.54 cm²

Question Type : MCQ
Question ID : 264330135107
Option 1 ID : 264330529365
Option 2 ID : 264330529364
Option 3 ID : 264330529366
Option 4 ID : 264330529363
Status : Answered
Chosen Option : 2

Section : Reasoning Ability and Problem Solving

Q.1 After interchanging which two signs, the value of the given equation will be '1'?

$$3 \div 1 + 6 \times 2 - 5$$

- Ans
- 1. + and -
 - 2. ÷ and +
 - 3. × and -
 - 4. ÷ and ×

Question Type : MCQ
Question ID : 264330138598
Option 1 ID : 264330542999
Option 2 ID : 264330543000
Option 3 ID : 264330543001
Option 4 ID : 264330543002
Status : Answered
Chosen Option : 4

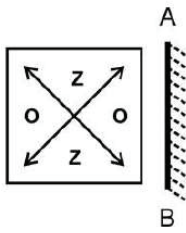
Q.2 In the following question, select the missing number of the given series.

144, 140, 132, 116, 84, ?

- Ans
- 1. 30
 - 2. 20
 - 3. 29
 - 4. 25

Question Type : MCQ
Question ID : 264330138595
Option 1 ID : 264330542990
Option 2 ID : 264330542987
Option 3 ID : 264330542989
Option 4 ID : 264330542988
Status : Answered
Chosen Option : 2

Q.3 Select the correct mirror image of the given figure when the mirror is placed at AB as shown below.

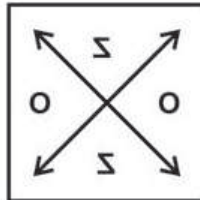


Ans

✗ 1.



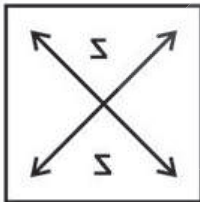
✓ 2.



✗ 3.



✗ 4.



Question Type : MCQ

Question ID : 264330133338

Option 1 ID : 264330522388

Option 2 ID : 264330522389

Option 3 ID : 264330522387

Option 4 ID : 264330522390

Status : Answered

Chosen Option : 2

Q.4 A series is given with one term missing. Select the correct alternative from the given ones that will complete the series.

MCHQ, LYGM, KUFJ, ?, IMDA

- Ans**
- 1. JQFE
 - 2. JRFF
 - 3. JQEE
 - 4. JREF

Question Type : **MCQ**
Question ID : **264330138582**
Option 1 ID : **264330542936**
Option 2 ID : **264330542938**
Option 3 ID : **264330542937**
Option 4 ID : **264330542935**
Status : **Answered**
Chosen Option : **3**

Q.5 In the following question below are given some statements followed by some conclusions based on those statements. Taking the given statements to be true even if they seem to be at variance from commonly known facts. Read all the conclusions and then decide which of the given conclusion logically follows the given statements.

Statements:

I. Some L are G.

II. All M are L.

Conclusion:

I. All L are M.

II. Some G are not M.

III. No M is G.

- Ans**
- 1. Both conclusions I and II follows
 - 2. Neither conclusion follows
 - 3. Both conclusions I and III follows
 - 4. Both conclusions II and III follows

Question Type : **MCQ**
Question ID : **264330138593**
Option 1 ID : **264330542982**
Option 2 ID : **264330542979**
Option 3 ID : **264330542980**
Option 4 ID : **264330542981**
Status : **Answered**
Chosen Option : **2**

Q.6 In a certain code language, 'ROYAL' is coded as 'HWUKN'. What is the code for 'SEEMS' in that code language?

- Ans**
- 1. OJAAO
 - 2. OIBBO
 - 3. OIAAO
 - 4. OIAAP

Question Type : **MCQ**
Question ID : **264330138483**
Option 1 ID : **264330542540**
Option 2 ID : **264330542542**
Option 3 ID : **264330542541**
Option 4 ID : **264330542539**
Status : **Answered**
Chosen Option : **3**

Q.7 In the following question below are given some statements followed by some conclusions based on those statements. Taking the given statements to be true even if they seem to be at variance from commonly known facts. Read all the conclusions and then decide which of the given conclusion logically follows the given statements.

Statements:

I. All P are M.

II. No P is R.

Conclusion:

I. Some R are not P.

II. Some M are not R.

- Ans**
- 1. Only conclusion I follows
 - 2. Only conclusion II follows
 - 3. Neither conclusion follows
 - 4. Both conclusions I and II follows

Question Type : MCQ

Question ID : 264330138592

Option 1 ID : 264330542975

Option 2 ID : 264330542976

Option 3 ID : 264330542978

Option 4 ID : 264330542977

Status : Answered

Chosen Option : 1

Q.8 In a certain code language, 'HORN' is written as '8695' and 'LURP' is written as '3397'. How will 'BLUE' be written in that language?

- Ans**
- 1. 2365
 - 2. 2553
 - 3. 5223
 - 4. 2335

Question Type : MCQ

Question ID : 264330135027

Option 1 ID : 264330529044

Option 2 ID : 264330529043

Option 3 ID : 264330529045

Option 4 ID : 264330529046

Status : Answered

Chosen Option : 4

Q.9 Select the option that is related to the third number in the same way as the second number is related to the first number.
12 : 132 :: 16 : ?

- Ans**
- 1. 167
 - 2. 215
 - 3. 176
 - 4. 135

Question Type : MCQ

Question ID : 264330137596

Option 1 ID : 264330538994

Option 2 ID : 264330538993

Option 3 ID : 264330538992

Option 4 ID : 264330538991

Status : Answered

Chosen Option : 3

Q.10 In a certain code language, 'FANS' is coded as 'JERW'. What is the code for 'HERO' in that code language?

- Ans
- 1. LIWS
 - 2. LIVT
 - 3. LJVS
 - 4. LIVS

Question Type : MCQ
Question ID : 264330138523
Option 1 ID : 264330542700
Option 2 ID : 264330542701
Option 3 ID : 264330542699
Option 4 ID : 264330542702
Status : Answered
Chosen Option : 4

Q.11 Which of the following numbers will replace the question mark (?) in the given series?
85, 105, 126, 148, 171, 195, ?

- Ans
- 1. 530
 - 2. 220
 - 3. 420
 - 4. 280

Question Type : MCQ
Question ID : 264330137594
Option 1 ID : 264330538986
Option 2 ID : 264330538985
Option 3 ID : 264330538983
Option 4 ID : 264330538984
Status : Answered
Chosen Option : 2

Q.12 Select the option that is related to the fifth term in the same way as the second term is related to the first term and fourth term is related to third term.

TBA : SZX :: KRB : JPY :: GOT : ?

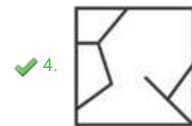
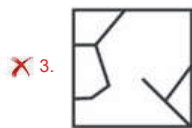
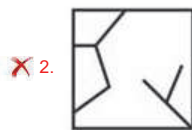
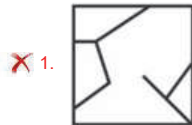
- Ans
- 1. FNQ
 - 2. FMR
 - 3. FMQ
 - 4. FNR

Question Type : MCQ
Question ID : 264330138585
Option 1 ID : 264330542949
Option 2 ID : 264330542950
Option 3 ID : 264330542947
Option 4 ID : 264330542948
Status : Answered
Chosen Option : 3

Q.13 Which answer figure will complete the pattern in the question figure?



Ans



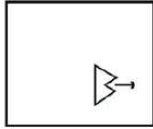
Question Type : MCQ
Question ID : 264330138602
Option 1 ID : 264330543017
Option 2 ID : 264330543018
Option 3 ID : 264330543015
Option 4 ID : 264330543016
Status : Answered
Chosen Option : 4

Q.14 Six girls Priya, Muskan, Rani, Sirjana, Tina and Laxmi are sitting in a row facing towards south (not necessarily in the same order). Muskan is second to the right of Tina. Sirjana is second to the left of Tina. Laxmi is second to the left of Rani. Rani is to the immediate right of Muskan. Who is sitting to the immediate right of Priya?

- Ans
- ✗ 1. Muskan
 - ✗ 2. Sirjana
 - ✓ 3. Tina
 - ✗ 4. Laxmi

Question Type : MCQ
Question ID : 264330138590
Option 1 ID : 264330542967
Option 2 ID : 264330542970
Option 3 ID : 264330542969
Option 4 ID : 264330542968
Status : Answered
Chosen Option : 3

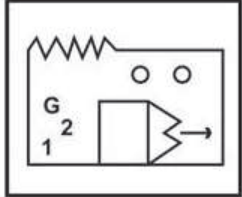
Q.15 Select the option figure in which the given figure (X) is embedded as its part (rotation is NOT allowed).



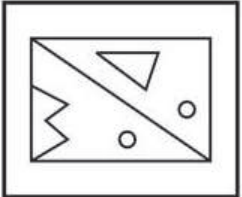
X

Ans

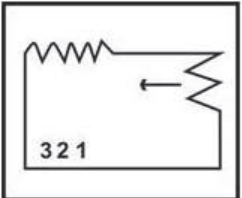
✓ 1.




✗ 2.



✗ 3.



✗ 4.



Question Type : MCQ

Question ID : 264330133337

Option 1 ID : 264330522383

Option 2 ID : 264330522386

Option 3 ID : 264330522384

Option 4 ID : 264330522385

Status : Answered

Chosen Option : 1

Q.16 Select the option that is related to the fifth term in the same way as the second term is related to the first term and fourth term is related to third term.

KIT : PNY :: PFC : UKH :: ANG : ?

- Ans**
- 1. FSK
 - 2. ESK
 - 3. ESL
 - 4. FSL

Question Type : MCQ

Question ID : 264330138584

Option 1 ID : 264330542944

Option 2 ID : 264330542943

Option 3 ID : 264330542945

Option 4 ID : 264330542946

Status : Answered

Chosen Option : 4

Q.17 If A denotes 'addition', B denotes 'multiplication', C denotes 'subtraction', and D denotes 'division', then what will be the value of the following equation?

$7 C 8 A (6 D 3) = ?$

- Ans**
- 1. 5
 - 2. 3
 - 3. 7
 - 4. 1

Question Type : MCQ

Question ID : 264330137599

Option 1 ID : 264330539003

Option 2 ID : 264330539006

Option 3 ID : 264330539005

Option 4 ID : 264330539004

Status : Answered

Chosen Option : 2

Q.18 Price of five cars C1, C2, C3, C4 and C5 are compared. Price of C1 is the least. No two cars have the same price. Price of C3 is less than C5, C2 and C4. Price of neither C5 nor C2 is the highest. Price of C5 is less than C2. Price of how many cars is more than the price of C4?

- Ans**
- 1. 2
 - 2. 4
 - 3. 1
 - 4. 0

Question Type : MCQ

Question ID : 264330138591

Option 1 ID : 264330542972

Option 2 ID : 264330542974

Option 3 ID : 264330542971

Option 4 ID : 264330542973

Status : Answered

Chosen Option : 4

Q.19 In a certain code language, 'MOTION' is coded as 'NNUHPM'. What is the code for 'NORMAL' in that code language?

- Ans**
- 1. ONSLBL
 - 2. ONSLBK
 - 3. ONSLCK
 - 4. ONTLCK

Question Type : **MCQ**
Question ID : **264330137090**
Option 1 ID : **264330537005**
Option 2 ID : **264330537003**
Option 3 ID : **264330537004**
Option 4 ID : **264330537006**
Status : **Answered**
Chosen Option : **2**

Q.20 Select the option that is related to the third word in the same way as the second word is related to the first word.
Jurisdiction : Authority :: Quandary : ?

- Ans**
- 1. Decisive
 - 2. Certain
 - 3. Dilemma
 - 4. Surety

Question Type : **MCQ**
Question ID : **264330135021**
Option 1 ID : **264330529022**
Option 2 ID : **264330529021**
Option 3 ID : **264330529019**
Option 4 ID : **264330529020**
Status : **Answered**
Chosen Option : **3**

Section : General Awareness

Q.1 Who promoted the worship of God in Punjab, India as Nirankar (Formless)?

- Ans**
- 1. Baba Dayal Das
 - 2. Guru Gobind Singh
 - 3. Baba Ram Singh
 - 4. Maharaja Ranjit Singh

Question Type : **MCQ**
Question ID : **264330133664**
Option 1 ID : **264330523679**
Option 2 ID : **264330523681**
Option 3 ID : **264330523680**
Option 4 ID : **264330523682**
Status : **Answered**
Chosen Option : **2**

Q.2 Who among the following is a Sarangi player?

- Ans
- 1. Pandit Krishna Maharaj
 - 2. Ustad Shakoor Khan
 - 3. Sandeep Das
 - 4. Anuradha Paudwal

Question Type : MCQ
Question ID : 264330138655
Option 1 ID : 264330543230
Option 2 ID : 264330543227
Option 3 ID : 264330543228
Option 4 ID : 264330543229
Status : Answered
Chosen Option : 2

Q.3 What does the Surrogacy (Regulation) Bill, 2016 prohibit?

- Ans
- 1. Women aged between 23 to 50 as surrogates
 - 2. Married women as surrogates
 - 3. Divorced women as surrogates
 - 4. Commercial Surrogacy

Question Type : MCQ
Question ID : 264330137762
Option 1 ID : 264330539655
Option 2 ID : 264330539657
Option 3 ID : 264330539658
Option 4 ID : 264330539656
Status : Answered
Chosen Option : 4

Q.4 A report named "Payments Vision 2025" is released by which institution?

- Ans
- 1. Ministry of Finance
 - 2. NITI Aayog
 - 3. Reserve Bank of India
 - 4. Ministry of Corporate Affairs

Question Type : MCQ
Question ID : 264330138658
Option 1 ID : 264330543239
Option 2 ID : 264330543242
Option 3 ID : 264330543241
Option 4 ID : 264330543240
Status : Not Answered
Chosen Option : --

Q.5 During October – November, the apparent movement of sun is towards the _____.

- Ans
- 1. North
 - 2. North-East
 - 3. North-West
 - 4. South

Question Type : **MCQ**
Question ID : **264330138667**
Option 1 ID : **264330543275**
Option 2 ID : **264330543278**
Option 3 ID : **264330543277**
Option 4 ID : **264330543276**
Status : **Not Answered**
Chosen Option : --

Q.6 The Third Battle of Panipat was fought between _____.

- Ans
- 1. Afghans and Mughals
 - 2. Afghans and Turks
 - 3. Marathas and Afghans
 - 4. Marathas and Mughals

Question Type : **MCQ**
Question ID : **264330137776**
Option 1 ID : **264330539713**
Option 2 ID : **264330539714**
Option 3 ID : **264330539711**
Option 4 ID : **264330539712**
Status : **Answered**
Chosen Option : 4

Q.7 'The Race of My Life: An Autobiography' is written by which famous athlete?

- Ans
- 1. Rajwinder Kaur
 - 2. Milkha Singh
 - 3. Nitender Rawat
 - 4. PV Sindhu

Question Type : **MCQ**
Question ID : **264330138251**
Option 1 ID : **264330541613**
Option 2 ID : **264330541614**
Option 3 ID : **264330541612**
Option 4 ID : **264330541611**
Status : **Answered**
Chosen Option : 2

Q.8 The star athlete Jwala Gutta is associated with which sport?

- Ans
- 1. Table Tennis
 - 2. Squash
 - 3. Lawn Tennis
 - 4. Badminton

Question Type : MCQ
Question ID : 264330137784
Option 1 ID : 264330539746
Option 2 ID : 264330539743
Option 3 ID : 264330539745
Option 4 ID : 264330539744
Status : Answered
Chosen Option : 4

Q.9 The bodies of living organism are made of tiny units called _____.

- Ans
- 1. genes
 - 2. centrioles
 - 3. buds
 - 4. cells

Question Type : MCQ
Question ID : 264330138662
Option 1 ID : 264330543256
Option 2 ID : 264330543257
Option 3 ID : 264330543255
Option 4 ID : 264330543258
Status : Answered
Chosen Option : 4

Q.10 Volleyball is played by two teams of _____ players each.

- Ans
- 1. eight
 - 2. five
 - 3. seven
 - 4. six

Question Type : MCQ
Question ID : 264330138652
Option 1 ID : 264330543218
Option 2 ID : 264330543215
Option 3 ID : 264330543217
Option 4 ID : 264330543216
Status : Answered
Chosen Option : 4

Q.11 What is the characteristic of isotopes?

- Ans
- 1. Same neutron and same proton
 - 2. Same atomic number and different mass number
 - 3. Same atomic number and same mass number
 - 4. Same neutron and different proton

Question Type : MCQ
Question ID : 264330137766
Option 1 ID : 264330539674
Option 2 ID : 264330539672
Option 3 ID : 264330539671
Option 4 ID : 264330539673
Status : Answered
Chosen Option : 2

Q.12 The long term objective of National Population Policy (NPP) 2000 is to achieve a stable population by _____ with sustainable economic growth, social development and environmental protection.

- Ans
- 1. 2045
 - 2. 2035
 - 3. 2025
 - 4. 2055

Question Type : MCQ
Question ID : 264330138891
Option 1 ID : 264330544173
Option 2 ID : 264330544172
Option 3 ID : 264330544171
Option 4 ID : 264330544174
Status : Not Answered
Chosen Option : --

Q.13 Hauz-i-Sultani was constructed by _____.

- Ans
- 1. Iltutmish
 - 2. Sikandar Lodi
 - 3. Babur
 - 4. Akbar

Question Type : MCQ
Question ID : 264330137765
Option 1 ID : 264330539668
Option 2 ID : 264330539669
Option 3 ID : 264330539667
Option 4 ID : 264330539670
Status : Answered
Chosen Option : 2

Q.14 Which type of farming is practiced to meet the needs of the farmer's family?

- Ans
- 1. Pisciculture farming
 - 2. Subsistence farming
 - 3. Commercial farming
 - 4. Sericulture farming

Question Type : MCQ
Question ID : 264330138263
Option 1 ID : 264330541662
Option 2 ID : 264330541661
Option 3 ID : 264330541659
Option 4 ID : 264330541660
Status : Marked For Review
Chosen Option : 3

Q.15 Which of the following articles of the Indian constitution is related to "Organisation of village panchayats"?

- Ans
- 1. Article 43
 - 2. Article 40
 - 3. Article 42
 - 4. Article 41

Question Type : MCQ
Question ID : 264330138661
Option 1 ID : 264330543254
Option 2 ID : 264330543251
Option 3 ID : 264330543253
Option 4 ID : 264330543252
Status : Answered
Chosen Option : 2

Q.16 Who, with the help of Kautilya, overthrew Dhanananda, the last Nanda ruler?

- Ans
- 1. Kalashoka
 - 2. Chandragupta Maurya
 - 3. Ashoka
 - 4. Akbar

Question Type : MCQ
Question ID : 264330133661
Option 1 ID : 264330523670
Option 2 ID : 264330523669
Option 3 ID : 264330523667
Option 4 ID : 264330523668
Status : Answered
Chosen Option : 2

Q.17 Who built the Red Fort in Delhi?

- Ans
- 1. Jahangir
 - 2. Babur
 - 3. Shah Jahan
 - 4. Humayun

Question Type : MCQ
Question ID : 264330137775
Option 1 ID : 264330539710
Option 2 ID : 264330539709
Option 3 ID : 264330539708
Option 4 ID : 264330539707
Status : Answered
Chosen Option : 3

Q.18 Angela Merkel who recently won UN refugee prize is _____.

- Ans
- 1. UN High Commissioner for Refugees
 - 2. Secretary-General of United Nations
 - 3. President of Ukraine
 - 4. Former German Chancellor

Question Type : MCQ
Question ID : 264330138657
Option 1 ID : 264330543237
Option 2 ID : 264330543238
Option 3 ID : 264330543236
Option 4 ID : 264330543235
Status : Answered
Chosen Option : 4

Q.19 Which of the following is used as an antacid to neutralize stomach acidity?

- Ans
- 1. Iodoform
 - 2. Morphine
 - 3. Chlorine
 - 4. Magnesium Hydroxide

Question Type : MCQ
Question ID : 264330137768
Option 1 ID : 264330539682
Option 2 ID : 264330539681
Option 3 ID : 264330539680
Option 4 ID : 264330539679
Status : Answered
Chosen Option : 4

Q.20 As per census 2011, which state of India has the least population?

- Ans
- 1. Sikkim
 - 2. Kerala
 - 3. Chhattisgarh
 - 4. Bihar

Question Type : MCQ
Question ID : 264330133659
Option 1 ID : 264330523661
Option 2 ID : 264330523660
Option 3 ID : 264330523659
Option 4 ID : 264330523662
Status : Answered
Chosen Option : 1

Q.21 Dhangar dance comes from the Dhangar community of _____.

- Ans
- 1. Andhra Pradesh
 - 2. Gujarat
 - 3. Tamil Nadu
 - 4. Goa

Question Type : MCQ
Question ID : 264330138649
Option 1 ID : 264330543204
Option 2 ID : 264330543205
Option 3 ID : 264330543203
Option 4 ID : 264330543206
Status : Not Answered
Chosen Option : --

Q.22 Change in the inventory of a firm is treated as _____.

- Ans
- 1. Disinvestment
 - 2. Investment
 - 3. Liability
 - 4. Asset

Question Type : MCQ
Question ID : 264330138256
Option 1 ID : 264330541634
Option 2 ID : 264330541632
Option 3 ID : 264330541631
Option 4 ID : 264330541633
Status : Not Answered
Chosen Option : --

Q.23 Which of the following ocean is the smallest in the world?

- Ans
- 1. Pacific Ocean
 - 2. Arctic Ocean
 - 3. Indian Ocean
 - 4. Atlantic Ocean

Question Type : MCQ
Question ID : 264330137769
Option 1 ID : 264330539684
Option 2 ID : 264330539683
Option 3 ID : 264330539686
Option 4 ID : 264330539685
Status : Answered
Chosen Option : 2

Q.24 Bastar Dussehra is a famous festival of _____ state of India.

- Ans
- 1. Chhattisgarh
 - 2. Manipur
 - 3. Bihar
 - 4. Arunachal Pradesh

Question Type : MCQ
Question ID : 264330133651
Option 1 ID : 264330523627
Option 2 ID : 264330523630
Option 3 ID : 264330523629
Option 4 ID : 264330523628
Status : Answered
Chosen Option : 1

Q.25 Who among the following was awarded the prestigious title of 'Nriyacharya' conferred by the Maharaja of Manipur?

- Ans
- 1. Guru Bipin Singh
 - 2. Rukmini Devi
 - 3. Uday Shankar
 - 4. Guru Kelucharan Mohapatra

Question Type : MCQ
Question ID : 264330138253
Option 1 ID : 264330541620
Option 2 ID : 264330541621
Option 3 ID : 264330541622
Option 4 ID : 264330541619
Status : Marked For Review
Chosen Option : 1

Section : English Language and Comprehension

Q.1 Improve the underlined part of the sentence. Choose 'No improvement' as an answer if the sentence is grammatically correct.

It's going to rain today whether you like it or not.

- Ans
- 1. you likened it
 - 2. you liked it
 - 3. you likes it
 - 4. No improvement

Question Type : MCQ
Question ID : 264330136825
Option 1 ID : 264330535997
Option 2 ID : 264330535996
Option 3 ID : 264330535995
Option 4 ID : 264330535998
Status : Answered
Chosen Option : 4

Q.2 Select the most appropriate option to fill in the blank.

_____ food consumption can affect our bodies' immune systems.

- Ans
- 1. Unhygienic
 - 2. Nutritious
 - 3. Sanitary
 - 4. Unwise

Question Type : MCQ
Question ID : 264330136794
Option 1 ID : 264330535877
Option 2 ID : 264330535876
Option 3 ID : 264330535878
Option 4 ID : 264330535875
Status : Answered
Chosen Option : 1

Q.3 Select the most appropriate antonym of the given word.

Maladroit

- Ans
- 1. Skilful
 - 2. Arrogant
 - 3. Inept
 - 4. Awkward

Question Type : MCQ
Question ID : 264330136231
Option 1 ID : 264330533711
Option 2 ID : 264330533714
Option 3 ID : 264330533713
Option 4 ID : 264330533712
Status : Marked For Review
Chosen Option : 1

Q.4 Improve the underlined part of the sentence. Choose 'No improvement' as an answer if the sentence is grammatically correct.

Many restaurants serve compliment bread with the meal.

- Ans**
- 1. serve compliment
 - 2. No improvement
 - 3. serves complimentary
 - 4. serve complimentary

Question Type : **MCQ**
Question ID : **264330135285**
Option 1 ID : **264330530055**
Option 2 ID : **264330530058**
Option 3 ID : **264330530057**
Option 4 ID : **264330530056**
Status : **Answered**
Chosen Option : **4**

Q.5 Select the most appropriate word for the given group of words.

To forbid something, especially by law

- Ans**
- 1. Propound
 - 2. Proscribe
 - 3. Quench
 - 4. Quarantine

Question Type : **MCQ**
Question ID : **264330136227**
Option 1 ID : **264330533697**
Option 2 ID : **264330533698**
Option 3 ID : **264330533696**
Option 4 ID : **264330533695**
Status : **Marked For Review**
Chosen Option : **4**

Q.6 In the following question, out of the given four alternatives, select the alternative which best expresses the meaning of the Idiom/Phrase.

Bark up the wrong tree

- Ans**
- 1. To invest one's money in wrong business
 - 2. To scold someone for the mistake they have not done
 - 3. To reach at a wrong address
 - 4.

To waste one's energy or effort by pursuing the wrong thing

Question Type : **MCQ**
Question ID : **264330136790**
Option 1 ID : **264330535861**
Option 2 ID : **264330535862**
Option 3 ID : **264330535860**
Option 4 ID : **264330535859**
Status : **Marked For Review**
Chosen Option : **4**

Q.7 Select the appropriate antonym for the underlined word.
We frequently congratulate people on their accomplishment in becoming famous, but we seldom ever talk about the price of fame.

- Ans**
- 1. Execution
 - 2. Feat
 - 3. Fiasco
 - 4. Triumph

Question Type : **MCQ**
Question ID : **264330136788**
Option 1 ID : **264330535854**
Option 2 ID : **264330535851**
Option 3 ID : **264330535852**
Option 4 ID : **264330535853**
Status : **Answered**
Chosen Option : **2**

Q.8 Choose the sentence with no spelling error.

- Ans**
- 1. Sneha caught it and frouned.
 - 2. Sneha caught it and frownned.
 - 3. Sneha cuaght it and frowned.
 - 4. Sneha caught it and frownned.

Question Type : **MCQ**
Question ID : **264330134317**
Option 1 ID : **264330526262**
Option 2 ID : **264330526259**
Option 3 ID : **264330526260**
Option 4 ID : **264330526261**
Status : **Answered**
Chosen Option : **4**

Q.9 Select the appropriate synonym for the underlined word.

The physics of laser-driven fusion is very complex.

- Ans**
- 1. Convoluted
 - 2. Streamline
 - 3. Simplified
 - 4. Modest

Question Type : **MCQ**
Question ID : **264330136785**
Option 1 ID : **264330535840**
Option 2 ID : **264330535839**
Option 3 ID : **264330535841**
Option 4 ID : **264330535842**
Status : **Answered**
Chosen Option : **1**

Q.10 Choose the word that can substitute the given group of words.

Impossible to change or reverse

- Ans
- 1. Irrevocable
 - 2. Order
 - 3. Coerce
 - 4. Intimidate

Question Type : MCQ
Question ID : 264330136784
Option 1 ID : 264330535838
Option 2 ID : 264330535836
Option 3 ID : 264330535837
Option 4 ID : 264330535835
Status : Answered
Chosen Option : 1

Q.11 Improve the underlined part of the sentence. Choose 'No improvement' as an answer if the sentence is grammatically correct.

You can't bought anything with one cent anymore.

- Ans
- 1. should not bought anything
 - 2. No improvement
 - 3. could not buying anything
 - 4. can't buy anything

Question Type : MCQ
Question ID : 264330136800
Option 1 ID : 264330535900
Option 2 ID : 264330535902
Option 3 ID : 264330535899
Option 4 ID : 264330535901
Status : Answered
Chosen Option : 4

Q.12 A sentence has been given with a blank to be filled with an appropriate option. Choose the correct alternative.

I don't remember exactly when the clouds rolled in and _____ you from me.

- Ans
- 1. steal
 - 2. stole
 - 3. stealing
 - 4. stolen

Question Type : MCQ
Question ID : 264330134301
Option 1 ID : 264330526202
Option 2 ID : 264330526200
Option 3 ID : 264330526199
Option 4 ID : 264330526201
Status : Answered
Chosen Option : 2

Q.13 Find the part of the given sentence that has an error in it. If there is no error, choose 'No error'.

It's your carelessness that makes me went crazy all the time.

- Ans
- 1. crazy all the time.
 - 2. that makes me went
 - 3. No error
 - 4. It's your carelessness

Question Type : MCQ
Question ID : 264330134772
Option 1 ID : 264330528037
Option 2 ID : 264330528036
Option 3 ID : 264330528038
Option 4 ID : 264330528035
Status : Answered
Chosen Option : 2

Q.14 Select the most appropriate meaning of the given idiom.

Queer somebody's pitch

- Ans
- 1. A secret plan
 - 2. Upset someone's plans
 - 3. To make an exaggerated statement
 - 4. To come out successfully

Question Type : MCQ
Question ID : 264330136233
Option 1 ID : 264330533721
Option 2 ID : 264330533720
Option 3 ID : 264330533722
Option 4 ID : 264330533719
Status : Answered
Chosen Option : 3

Q.15 Select the most appropriate option to fill in the blank.

"The Boarded Window" is a horror story about a man who has to _____ with his wife's death.

- Ans
- 1. deal
 - 2. dwell
 - 3. drill
 - 4. deed

Question Type : MCQ
Question ID : 264330134318
Option 1 ID : 264330526263
Option 2 ID : 264330526265
Option 3 ID : 264330526264
Option 4 ID : 264330526266
Status : Answered
Chosen Option : 1

Q.16 Find the part of the given sentence that has an error in it. If there is no error, choose 'No error'.
The government have a rudimentary plan for an ecosystem for defence startups to fast-forward innovation.

- Ans**
- 1. to fast-forward innovation.
 - 2. an ecosystem for defence startups
 - 3. The government have a rudimentary plan for
 - 4. No error

Question Type : **MCQ**
Question ID : **264330136771**
Option 1 ID : **264330535789**
Option 2 ID : **264330535788**
Option 3 ID : **264330535787**
Option 4 ID : **264330535790**
Status : **Answered**
Chosen Option : **3**

Q.17 Choose the incorrectly spelt word.

- Ans**
- 1. Shocker
 - 2. Tram
 - 3. Booking
 - 4. Rubing

Question Type : **MCQ**
Question ID : **264330136791**
Option 1 ID : **264330535864**
Option 2 ID : **264330535866**
Option 3 ID : **264330535865**
Option 4 ID : **264330535863**
Status : **Answered**
Chosen Option : **4**

Q.18 Choose the word that means the same as the given word.
Upsetting

- Ans**
- 1. Dreamy
 - 2. Aware
 - 3. Amusing
 - 4. Perturbing

Question Type : **MCQ**
Question ID : **264330134337**
Option 1 ID : **264330526338**
Option 2 ID : **264330526337**
Option 3 ID : **264330526336**
Option 4 ID : **264330526335**
Status : **Answered**
Chosen Option : **4**

Q.19 Find the part of the given sentence that has an error in it. If there is no error, choose 'No error'.
When you're chatting on the phone, do it in the living room instead off the kitchen.

- Ans**
- 1. No error
 - 2. When you're chatting on
 - 3. the phone, do it in the living room
 - 4. instead off the kitchen.

Question Type : **MCQ**
Question ID : **264330136822**
Option 1 ID : **264330535986**
Option 2 ID : **264330535983**
Option 3 ID : **264330535984**
Option 4 ID : **264330535985**
Status : **Answered**
Chosen Option : **4**

Q.20 A sentence has been given with a blank to be filled with an appropriate option. Choose the correct alternative.
Sam was 24 years old when he _____ to California.

- Ans**
- 1. moving
 - 2. moves
 - 3. moved
 - 4. movement

Question Type : **MCQ**
Question ID : **264330136775**
Option 1 ID : **264330535803**
Option 2 ID : **264330535804**
Option 3 ID : **264330535805**
Option 4 ID : **264330535806**
Status : **Answered**
Chosen Option : **3**



Comprehension:

In the following passage some words have been deleted. Fill in the blanks with the help of the alternatives given. Select the most appropriate option for each number.

One of the myths (1) _____ with the Great Wall of China is that it is the only man-made (2) _____ that can be seen from the moon with the naked eye. The (3) _____ originated in Richard Halliburton's 1938 book Second Book of Marvels. However, this myth is simply not true. Richard Halliburton's claim was contradicted (4) _____ astronauts Neil Armstrongby and Yang Liwei. A more (5) _____ assumption would be to say that the Great Wall can be visible from a low orbit of the earth which is not unique in this regard as many other artificial constructions can be seen from that height.

SubQuestion No : 21

Q.21 Select the most appropriate option to fill in blank number 1.

- Ans
- 1. disassociated
 - 2. organized
 - 3. depreciated
 - 4. associated

Question Type : MCQ
Question ID : 264330136222
Option 1 ID : 264330533677
Option 2 ID : 264330533676
Option 3 ID : 264330533675
Option 4 ID : 264330533678
Status : Answered
Chosen Option : 4

Comprehension:

In the following passage some words have been deleted. Fill in the blanks with the help of the alternatives given. Select the most appropriate option for each number.

One of the myths (1) _____ with the Great Wall of China is that it is the only man-made (2) _____ that can be seen from the moon with the naked eye. The (3) _____ originated in Richard Halliburton's 1938 book Second Book of Marvels. However, this myth is simply not true. Richard Halliburton's claim was contradicted (4) _____ astronauts Neil Armstrongby and Yang Liwei. A more (5) _____ assumption would be to say that the Great Wall can be visible from a low orbit of the earth which is not unique in this regard as many other artificial constructions can be seen from that height.

SubQuestion No : 22

Q.22 Select the most appropriate option to fill in blank number 2.

- Ans
- 1. structure
 - 2. contracture
 - 3. conjecture
 - 4. sculpture

Question Type : MCQ
Question ID : 264330136223
Option 1 ID : 264330533679
Option 2 ID : 264330533681
Option 3 ID : 264330533682
Option 4 ID : 264330533680
Status : Answered
Chosen Option : 1

Comprehension:

In the following passage some words have been deleted. Fill in the blanks with the help of the alternatives given. Select the most appropriate option for each number.

One of the myths (1) _____ with the Great Wall of China is that it is the only man-made (2) _____ that can be seen from the moon with the naked eye. The (3) _____ originated in Richard Halliburton's 1938 book Second Book of Marvels. However, this myth is simply not true. Richard Halliburton's claim was contradicted (4) _____ astronauts Neil Armstrongby and Yang Liwei. A more (5) _____ assumption would be to say that the Great Wall can be visible from a low orbit of the earth which is not unique in this regard as many other artificial constructions can be seen from that height.

SubQuestion No : 23

Q.23 Select the most appropriate option to fill in blank number 3.

- Ans
- 1. lagend
 - 2. verity
 - 3. legend
 - 4. candour

Question Type : MCQ
Question ID : 264330136224
Option 1 ID : 264330533684
Option 2 ID : 264330533683
Option 3 ID : 264330533685
Option 4 ID : 264330533686
Status : Answered
Chosen Option : 2

Comprehension:

In the following passage some words have been deleted. Fill in the blanks with the help of the alternatives given. Select the most appropriate option for each number.

One of the myths (1) _____ with the Great Wall of China is that it is the only man-made (2) _____ that can be seen from the moon with the naked eye. The (3) _____ originated in Richard Halliburton's 1938 book Second Book of Marvels. However, this myth is simply not true. Richard Halliburton's claim was contradicted (4) _____ astronauts Neil Armstrongby and Yang Liwei. A more (5) _____ assumption would be to say that the Great Wall can be visible from a low orbit of the earth which is not unique in this regard as many other artificial constructions can be seen from that height.

SubQuestion No : 24

Q.24 Select the most appropriate option to fill in blank number 4.

- Ans
- 1. from
 - 2. by
 - 3. under
 - 4. in

Question Type : MCQ
Question ID : 264330136225
Option 1 ID : 264330533689
Option 2 ID : 264330533688
Option 3 ID : 264330533690
Option 4 ID : 264330533687
Status : Answered
Chosen Option : 2

Comprehension:

In the following passage some words have been deleted. Fill in the blanks with the help of the alternatives given. Select the most appropriate option for each number.

One of the myths (1) _____ with the Great Wall of China is that it is the only man-made (2) _____ that can be seen from the moon with the naked eye. The (3) _____ originated in Richard Halliburton's 1938 book Second Book of Marvels. However, this myth is simply not true. Richard Halliburton's claim was contradicted (4) _____ astronauts Neil Armstrong and Yang Liwei. A more (5) _____ assumption would be to say that the Great Wall can be visible from a low orbit of the earth which is not unique in this regard as many other artificial constructions can be seen from that height.

SubQuestion No : 25

Q.25 Select the most appropriate option to fill in blank number 5.

- Ans**
- 1. apprehensible
 - 2. accessible
 - 3. permissible
 - 4. plausible

Question Type : **MCQ**

Question ID : **264330136226**

Option 1 ID : **264330533693**

Option 2 ID : **264330533691**

Option 3 ID : **264330533692**

Option 4 ID : **264330533694**

Status : **Answered**

Chosen Option : **4**

