



SSC MTS **SHIFT – 3 (18-05-2023)**

- ★ **Latest Govt Job updates**
- ★ **Private Job updates**
- ★ **Free Mock tests available**

Visit - teachingninja.in

Multi Tasking Non Technical Staff and Havaldar CBIC and CBN Examination 2022

| | |
|----------------|---|
| Roll Number | |
| Candidate Name | |
| Venue Name | |
| Exam Date | 18/05/2023 |
| Exam Time | 3:30 PM - 5:00 PM |
| Subject | MTS Non Tech Havaldar CBIC and CBN Examination 2022 |

Section : Numerical and Mathematical Ability

Q.1 The value of $\{\frac{3}{4} \text{ of } 60 \div 9\} \times 0.02$ is:

- Ans
- 1. 0.10
 - 2. 0.20
 - 3. 0.05
 - 4. 0.02

Question Type : MCQ

Question ID : 264330134081

Option 1 ID : 264330525349

Option 2 ID : 264330525350

Option 3 ID : 264330525348

Option 4 ID : 264330525347

Status : Answered

Chosen Option : 1

Q.2 The sum of three numbers is 126. If the ratio of the first to third is 3:7 and that of second to third is 4:7, then what is the second number?

- Ans
- 1. 36
 - 2. 27
 - 3. 63
 - 4. 56

Question Type : MCQ

Question ID : 264330134089

Option 1 ID : 264330525381

Option 2 ID : 264330525379

Option 3 ID : 264330525380

Option 4 ID : 264330525382

Status : Answered

Chosen Option : 1

Q.3 How many solid spherical balls each of 33 cm radius can be made out of a solid spherical ball of radius 66 cm?

- Ans
- 1. 8
 - 2. 4
 - 3. 7
 - 4. 3

Question Type : **MCQ**
Question ID : **264330135389**
Option 1 ID : **264330530464**
Option 2 ID : **264330530465**
Option 3 ID : **264330530466**
Option 4 ID : **264330530463**
Status : **Answered**
Chosen Option : 1

Q.4 The salaries of Kabir and Vicky are in the ratio 5:2. If the increments of 20% and 12% are allowed respectively in their salaries, then what will be new ratio of their salaries?

- Ans
- 1. 25:73
 - 2. 81:28
 - 3. 75:28
 - 4. 91:25

Question Type : **MCQ**
Question ID : **264330134090**
Option 1 ID : **264330525384**
Option 2 ID : **264330525385**
Option 3 ID : **264330525383**
Option 4 ID : **264330525386**
Status : **Answered**
Chosen Option : 3

Q.5 A truck travels 40 km in first hour and 50 km in second hour. What is the average speed of truck?

- Ans
- 1. 45 km/hr
 - 2. 40 km/hr
 - 3. 48 km/hr
 - 4. 50 km/hr

Question Type : **MCQ**
Question ID : **264330138439**
Option 1 ID : **264330542366**
Option 2 ID : **264330542363**
Option 3 ID : **264330542365**
Option 4 ID : **264330542364**
Status : **Answered**
Chosen Option : 1

Q.6 Meena complete a journey in 33 hours. She travels one-fourth distance of the journey at the speed of 60 km/hr and remaining distance at 40 km/hr. What is the total journey in km?

- Ans**
- 1. 1220 km
 - 2. 480 km
 - 3. 1440 km
 - 4. 680 km

Question Type : **MCQ**
Question ID : **264330134093**
Option 1 ID : **264330525397**
Option 2 ID : **264330525395**
Option 3 ID : **264330525398**
Option 4 ID : **264330525396**
Status : **Answered**
Chosen Option : **3**

Q.7 Two successive price increases of 15% and 40% of an article are equivalent to a single price increase of:

- Ans**
- 1. 61%
 - 2. 52%
 - 3. 55%
 - 4. 60%

Question Type : **MCQ**
Question ID : **264330138730**
Option 1 ID : **264330543529**
Option 2 ID : **264330543530**
Option 3 ID : **264330543528**
Option 4 ID : **264330543527**
Status : **Answered**
Chosen Option : **1**

Q.8 P, Q and R alone can complete a piece of work in 30 hours, 10 hours and 15 hours respectively. In how much time they will finish the work, if they worked together?

- Ans**
- 1. 5 hours
 - 2. 4 hours
 - 3. 8 hours
 - 4. 10 hours

Question Type : **MCQ**
Question ID : **264330138739**
Option 1 ID : **264330543563**
Option 2 ID : **264330543564**
Option 3 ID : **264330543566**
Option 4 ID : **264330543565**
Status : **Answered**
Chosen Option : **1**

Q.9 A sum becomes Rs. 14,400 in 3 years and Rs. 15,500 in 4 years at simple interest. Find the sum.

- Ans
- 1. Rs. 11,100
 - 2. Rs. 10,000
 - 3. Rs. 10,080
 - 4. Rs. 20,000

Question Type : MCQ
Question ID : 264330138380
Option 1 ID : 264330542129
Option 2 ID : 264330542128
Option 3 ID : 264330542127
Option 4 ID : 264330542130
Status : Answered
Chosen Option : 1

Q.10 If the diagonal of a square is 18.4 cm, then the area of that square is:

- Ans
- 1. 84.64 cm²
 - 2. 338.56 cm²
 - 3. 324.42 cm²
 - 4. 169.28 cm²

Question Type : MCQ
Question ID : 264330138743
Option 1 ID : 264330543582
Option 2 ID : 264330543580
Option 3 ID : 264330543579
Option 4 ID : 264330543581
Status : Answered
Chosen Option : 4

Q.11 The average age of P, Q and R is 19 years and that of P and Q is 20 years. R's present age is:

- Ans
- 1. 17 years
 - 2. 15 years
 - 3. 20 years
 - 4. 22 years

Question Type : MCQ
Question ID : 264330134083
Option 1 ID : 264330525357
Option 2 ID : 264330525358
Option 3 ID : 264330525355
Option 4 ID : 264330525356
Status : Answered
Chosen Option : 1

Q.12 The table given below shows the income of two companies P and Q in seven years.

| Years | P | Q |
|-------|-----|-----|
| Y1 | 200 | 250 |
| Y2 | 350 | 150 |
| Y3 | 500 | 650 |
| Y4 | 650 | 450 |
| Y5 | 600 | 550 |
| Y6 | 450 | 700 |
| Y7 | 400 | 500 |

Which of the following statement is NOT correct?

I. The income of P in year Y1 is 20 percent less than the income of Q in the year Y1.

II. The ratio of total income of P to the total income of Q in all years are 63 : 64.

- Ans
- 1. Only I
 - 2. Only II
 - 3. Both I and II
 - 4. Neither I nor II

Question Type : MCQ
Question ID : 264330137663
Option 1 ID : 264330539259
Option 2 ID : 264330539260
Option 3 ID : 264330539261
Option 4 ID : 264330539262
Status : Answered
Chosen Option : 2

Q.13 Rohit buys an old bat for Rs. 1280 and spends Rs. 120 on its repairing. If he sells it for Rs. 1050, then what is the loss percentage?

- Ans
- 1. 40 percent
 - 2. 25 percent
 - 3. 20 percent
 - 4. 30 percent

Question Type : MCQ
Question ID : 264330137159
Option 1 ID : 264330537279
Option 2 ID : 264330537281
Option 3 ID : 264330537282
Option 4 ID : 264330537280
Status : Answered
Chosen Option : 2

Q.14 What is the value of $2[1.5 \times 1.5 + 0.5 \times 0.5]$?

- Ans
- 1. 4.5
 - 2. 4
 - 3. 10
 - 4. 5

Question Type : MCQ
Question ID : 264330137662
Option 1 ID : 264330539256
Option 2 ID : 264330539255
Option 3 ID : 264330539258
Option 4 ID : 264330539257
Status : Answered
Chosen Option : 4

Q.15 A refrigerator and a washing machine were sold for Rs. 24000 each. If the refrigerator was sold at a gain of 20% and the washing machine at a loss of 20%. What is the overall profit or loss percent in the whole transaction?

- Ans
- 1. 4% profit
 - 2. 5% profit
 - 3. 4% loss
 - 4. 5% loss

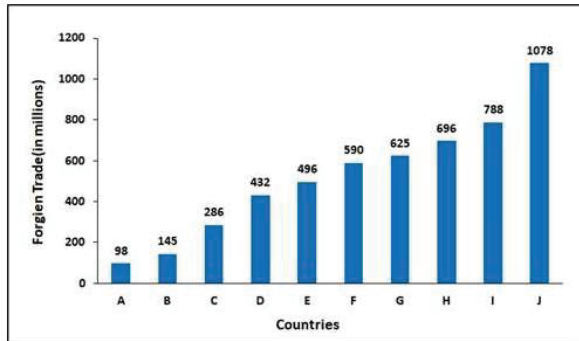
Question Type : MCQ
Question ID : 264330134087
Option 1 ID : 264330525371
Option 2 ID : 264330525372
Option 3 ID : 264330525373
Option 4 ID : 264330525374
Status : Answered
Chosen Option : 3

Q.16 A alone can do $\frac{1}{4}$ part of the work in 12 days. B alone can do $\frac{1}{5}$ part of the work in 4 days. In how many days can A and B together can do the same work?

- Ans
- 1. $\frac{330}{13}$ days
 - 2. $\frac{240}{17}$ days
 - 3. $\frac{210}{4}$ days
 - 4. $\frac{255}{7}$ days

Question Type : MCQ
Question ID : 264330135384
Option 1 ID : 264330530445
Option 2 ID : 264330530444
Option 3 ID : 264330530446
Option 4 ID : 264330530443
Status : Answered
Chosen Option : 2

Q.17 The below bar graph shows the Foreign trade by countries for the years 2015-2016.
What was the ratio of minimum trade and maximum trade?



- Ans
- 1. 8:5
 - 2. 1:11
 - 3. 4:11
 - 4. 3:14

Question Type : MCQ
Question ID : 264330134097
Option 1 ID : 264330525413
Option 2 ID : 264330525414
Option 3 ID : 264330525412
Option 4 ID : 264330525411
Status : Answered
Chosen Option : 2

Q.18 Applied to a bill for Rs. 10000 the difference between a discount of 20% and two successive discounts of 16% and 4% is:

- Ans
- 1. Rs. 19.36
 - 2. Rs. 64
 - 3. Rs. 72
 - 4. Rs. 22.32

Question Type : MCQ
Question ID : 264330134088
Option 1 ID : 264330525375
Option 2 ID : 264330525376
Option 3 ID : 264330525378
Option 4 ID : 264330525377
Status : Answered
Chosen Option : 2

Q.19 What is the HCF of 225 and 425?

- Ans
- 1. 5
 - 2. 17
 - 3. 25
 - 4. 9

Question Type : MCQ
Question ID : 264330138726
Option 1 ID : 264330543511
Option 2 ID : 264330543513
Option 3 ID : 264330543512
Option 4 ID : 264330543514
Status : Answered
Chosen Option : 3

Q.20 What will be the compound interest on Rs. 21000 at the rate of 10% per annum for 6 months compounded half-yearly?

- Ans
- 1. Rs. 1680
 - 2. Rs. 1050
 - 3. Rs. 1850
 - 4. Rs. 1250

Question Type : MCQ
Question ID : 264330138737
Option 1 ID : 264330543557
Option 2 ID : 264330543555
Option 3 ID : 264330543556
Option 4 ID : 264330543558
Status : Answered
Chosen Option : 2

Section : Reasoning Ability and Problem Solving

Q.1 In the following question, select the missing number of the given series.

200, 174, 148, 122, 96, ?

- Ans
- 1. 71
 - 2. 80
 - 3. 70
 - 4. 74

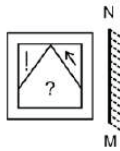
Question Type : MCQ
Question ID : 264330138594
Option 1 ID : 264330542986
Option 2 ID : 264330542985
Option 3 ID : 264330542984
Option 4 ID : 264330542983
Status : Answered
Chosen Option : 3

Q.2 In a certain code language, 'COSTLY' is written as '3P19U12Z'. How will 'EXTEND' be written in that language?

- Ans**
- ✓ 1. 5Y20F14E
 - ✗ 2. 5Y20G14E
 - ✗ 3. 5Y30F14E
 - ✗ 4. 5X20F14E

Question Type : **MCQ**
Question ID : **264330138813**
Option 1 ID : **264330543861**
Option 2 ID : **264330543860**
Option 3 ID : **264330543859**
Option 4 ID : **264330543862**
Status : **Answered**
Chosen Option : 1

Q.3 Select the correct mirror image of the given figure when the mirror MN is placed to the right side of the figure.



Ans

- ✗ 1.
- ✗ 2.
- ✓ 3.
- ✗ 4.

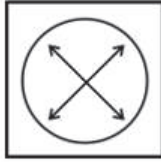
Question Type : **MCQ**
Question ID : **264330137579**
Option 1 ID : **264330538923**
Option 2 ID : **264330538925**
Option 3 ID : **264330538924**
Option 4 ID : **264330538926**
Status : **Answered**
Chosen Option : 3

Q.4 Select the option figure in which the given figure (X) is embedded as its part (rotation is NOT allowed).



Ans

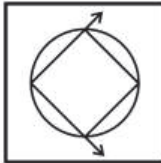
✗ 1.



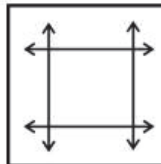
✗ 2.



✗ 3.



✓ 4.



Teachingninja.in

Question Type : MCQ

Question ID : 264330137578

Option 1 ID : 264330538919

Option 2 ID : 264330538920

Option 3 ID : 264330538921

Option 4 ID : 264330538922

Status : Answered

Chosen Option : 4

Q.5 After interchanging the given two signs what will be the values of equation (I) and (II) respectively?

+ and -

I. $18 + 3 + 6 \times 2 - 8$

II. $15 \times 3 - 45 + 5 + 30$

Ans 1. 24 and 2

2. 3 and 25

3. 2 and 66

4. 2 and 24

Question Type : **MCQ**

Question ID : **264330138494**

Option 1 ID : **264330542585**

Option 2 ID : **264330542586**

Option 3 ID : **264330542583**

Option 4 ID : **264330542584**

Status : **Answered**

Chosen Option : 4

Q.6 Two Statements are given followed by two conclusions numbered I and II. Assuming the statements to be true, even if they seem to be at variance with commonly known facts, decide which of the conclusions logically follow (s) from the statements.

Statements:

Some pens are black.

No black is blue.

Conclusions:

I. No pen is blue.

II. Some pens are not black.

Ans 1. Only conclusion II follows

2. Both conclusions I and II follow

3. Only conclusion I follows

4. Neither conclusion I nor II follows

Question Type : **MCQ**

Question ID : **264330133705**

Option 1 ID : **264330523844**

Option 2 ID : **264330523845**

Option 3 ID : **264330523843**

Option 4 ID : **264330523846**

Status : **Answered**

Chosen Option : 1

Q.7 Three Statements are given followed by two conclusions numbered I and II. Assuming the statements to be true, even if they seem to be at variance with commonly known facts, decide which of the conclusions logically follow (s) from the statements.

Statements:

Some nachos are patties.

Some patties are pastries.

No pastry is a chocolate.

Conclusions:

I. No nacho is a chocolate.

II. Some nachos are pastries.

- Ans**
- 1. Only conclusion II follows
 - 2. Only conclusion I follows
 - 3. Neither conclusion I nor II follows
 - 4. Both conclusions I and II follow

Question Type : **MCQ**

Question ID : **264330133706**

Option 1 ID : **264330523848**

Option 2 ID : **264330523847**

Option 3 ID : **264330523850**

Option 4 ID : **264330523849**

Status : **Answered**

Chosen Option : **3**

Q.8 Select the option that is related to the fifth number in the same way as the second number is related to the first number and fourth number is related to third number.

18 : 190 :: 20 : 210 :: 22 : ?

- Ans**
- 1. 230
 - 2. 210
 - 3. 190
 - 4. 200

Question Type : **MCQ**

Question ID : **264330138596**

Option 1 ID : **264330542993**

Option 2 ID : **264330542992**

Option 3 ID : **264330542994**

Option 4 ID : **264330542991**

Status : **Answered**

Chosen Option : **1**

Q.9 M, N, O, P, Q, and R are seated at a circular table facing each other. O is to the immediate left of R and N is second to the left of O. M is second to the left of Q. Who sits immediately between R and M?

- Ans**
- 1. Q
 - 2. P
 - 3. O
 - 4. N

Question Type : **MCQ**

Question ID : **264330133703**

Option 1 ID : **264330523837**

Option 2 ID : **264330523835**

Option 3 ID : **264330523836**

Option 4 ID : **264330523838**

Status : **Answered**

Chosen Option : **2**

Q.10 Which of the following numbers will replace the question mark (?) in the given series?

46, 50, 58, 70, 86, 106, ?

Ans 1. 280

2. 130

3. 150

4. 140

Question Type : **MCQ**

Question ID : **264330133708**

Option 1 ID : **264330523856**

Option 2 ID : **264330523858**

Option 3 ID : **264330523857**

Option 4 ID : **264330523855**

Status : **Answered**

Chosen Option : **2**

Q.11 Seven students M, N, O, P, Q, R and S are standing in ascending order of their heights during morning assembly. The shortest person stands at the front of the assembly line and the tallest person stands at the back of the line. M stands immediately behind Q and immediately in front of P. Only two students are standing in between R and S. N is taller than only one student. R is not the shortest. Who is the tallest student?

Ans 1. R

2. O

3. M

4. P

Question Type : **MCQ**

Question ID : **264330133704**

Option 1 ID : **264330523840**

Option 2 ID : **264330523842**

Option 3 ID : **264330523841**

Option 4 ID : **264330523839**

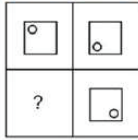
Status : **Answered**

Chosen Option : **4**



Teachingninja.in

Q.12 Select the option figure that will replace the question mark (?) in the figure given below to complete the pattern (rotation is not allowed).



Ans

- 1.
- 2.
- 3.
- 4.

Question Type : **MCQ**
Question ID : **264330133715**
Option 1 ID : **264330523883**
Option 2 ID : **264330523885**
Option 3 ID : **264330523886**
Option 4 ID : **264330523884**
Status : **Answered**
Chosen Option : **3**

Q.13 Which of the following letter will replace the question mark (?) in the given series?

E, J, O, T, Y, D, ?

Ans

- 1. **I**
- 2. **R**
- 3. **O**
- 4. **M**

Question Type : **MCQ**
Question ID : **264330133696**
Option 1 ID : **264330523808**
Option 2 ID : **264330523810**
Option 3 ID : **264330523809**
Option 4 ID : **264330523807**
Status : **Answered**
Chosen Option : **1**

Q.14 Select the option that is related to the third word in the same way as the second word is related to the first word.
Hyderabad : Telangana :: Gangtok : ?

- Ans
- 1. Uttarakhand
 - 2. Sikkim
 - 3. Kerala
 - 4. Goa

Question Type : **MCQ**
Question ID : **264330133697**
Option 1 ID : **264330523814**
Option 2 ID : **264330523813**
Option 3 ID : **264330523811**
Option 4 ID : **264330523812**
Status : **Answered**
Chosen Option : **2**

Q.15 Study the given pattern carefully and select the number that can replace the question mark (?) in it.
First row- 11, 19, 27
Second row- 17, 25, 33
Third row- 23, 31, ?

- Ans
- 1. 39
 - 2. 14
 - 3. 33
 - 4. 40

Question Type : **MCQ**
Question ID : **264330133710**
Option 1 ID : **264330523864**
Option 2 ID : **264330523865**
Option 3 ID : **264330523866**
Option 4 ID : **264330523863**
Status : **Answered**
Chosen Option : **1**

Q.16 Five men Ankit, Bishal, Chandler, Daksh and Joey are sitting at a horizontal table facing north. Ankit is to the immediate left of Daksh who is not at the corner. Joey is exactly in between Bishal and Chandler. Who is sitting at the leftmost end?

- Ans
- 1. Bishal
 - 2. Chandler
 - 3. Ankit
 - 4. Joey

Question Type : **MCQ**
Question ID : **264330133702**
Option 1 ID : **264330523832**
Option 2 ID : **264330523834**
Option 3 ID : **264330523831**
Option 4 ID : **264330523833**
Status : **Answered**
Chosen Option : **3**

Q.17 In a certain code language, 'RIVER' is written as 'SJWFS' and 'BROWN' is written as 'CSPXO'. How will 'PRESS' be written in that language?

- Ans**
- 1. GSFRR
 - 2. QSFTT
 - 3. QSFUU
 - 4. QSGTT

Question Type : **MCQ**
Question ID : **264330133470**
Option 1 ID : **264330522914**
Option 2 ID : **264330522911**
Option 3 ID : **264330522913**
Option 4 ID : **264330522912**
Status : **Answered**
Chosen Option : **2**

Q.18 Select the option that is related to the third word in the same way as the second word is related to the first word.
Hydrogen : Element :: Carbon Dioxide : ?

- Ans**
- 1. Compound
 - 2. Liquid
 - 3. Organ
 - 4. Fruit

Question Type : **MCQ**
Question ID : **264330133698**
Option 1 ID : **264330523815**
Option 2 ID : **264330523818**
Option 3 ID : **264330523816**
Option 4 ID : **264330523817**
Status : **Answered**
Chosen Option : **1**

Q.19 In a certain code language, 'UKSH' is written as '8TL21'. How will 'GAIN' be written in that language?

- Ans**
- 1. 15JB7
 - 2. 14JB7
 - 3. 14JB8
 - 4. 14J7B

Question Type : **MCQ**
Question ID : **264330137792**
Option 1 ID : **264330539778**
Option 2 ID : **264330539775**
Option 3 ID : **264330539777**
Option 4 ID : **264330539776**
Status : **Answered**
Chosen Option : **2**

Q.20 Which two numbers should be interchanged to make the given equation correct?

$$12 \div 72 \times 3 - 13 = 5$$

- Ans
- 1. 13 and 5
 - 2. 13 and 3
 - 3. 12 and 3
 - 4. 12 and 72

Question Type : MCQ
Question ID : 264330133711
Option 1 ID : 264330523867
Option 2 ID : 264330523870
Option 3 ID : 264330523868
Option 4 ID : 264330523869
Status : Answered
Chosen Option : 4

Section : General Awareness

Q.1 With reference to the MGNREGA scheme, how many days of guaranteed wage employment is provided to rural unskilled labour?

- Ans
- 1. 100
 - 2. 150
 - 3. 120
 - 4. 90

Question Type : MCQ
Question ID : 264330134056
Option 1 ID : 264330525248
Option 2 ID : 264330525250
Option 3 ID : 264330525249
Option 4 ID : 264330525247
Status : Answered
Chosen Option : 1

Q.2 In 1600, the East India company acquired a charter from _____.

- Ans
- 1. Queen Elizabeth I
 - 2. King Edward VI
 - 3. King Henry IV
 - 4. Queen Victoria

Question Type : MCQ
Question ID : 264330138269
Option 1 ID : 264330541683
Option 2 ID : 264330541684
Option 3 ID : 264330541686
Option 4 ID : 264330541685
Status : Answered
Chosen Option : 1

Q.3 The Council of States shall consist of _____ members to be nominated by the President.

- Ans
- 1. six
 - 2. ten
 - 3. twelve
 - 4. five

Question Type : MCQ
Question ID : 264330134077
Option 1 ID : 264330525334
Option 2 ID : 264330525332
Option 3 ID : 264330525333
Option 4 ID : 264330525331
Status : Answered
Chosen Option : 3

Q.4 Plant cell has a big central _____ unlike a number of small _____ in animal cells.

- Ans
- 1. Vacuole, vacuoles
 - 2. Cell wall, cell walls
 - 3. Tissue, tissues
 - 4. Cell membrane, cell membranes

Question Type : MCQ
Question ID : 264330138663
Option 1 ID : 264330543260
Option 2 ID : 264330543261
Option 3 ID : 264330543259
Option 4 ID : 264330543262
Status : Answered
Chosen Option : 1

Q.5 Among the following, which of these are an example of capital receipt?

- Ans
- 1. Rent and commission received
 - 2. Sale of goods and rent
 - 3. Commission and dividend received
 - 4. Borrowings and loan recovery

Question Type : MCQ
Question ID : 264330137918
Option 1 ID : 264330540281
Option 2 ID : 264330540280
Option 3 ID : 264330540282
Option 4 ID : 264330540279
Status : Answered
Chosen Option : 1

Q.6 Which kathak dancer was awarded with Padma Shri and Sangeet Natak Akademi Award?

- Ans
- 1. Hema Malini
 - 2. Sitara Devi
 - 3. Kaushalya Reddy
 - 4. Sridevi

Question Type : MCQ
Question ID : 264330137913
Option 1 ID : 264330540260
Option 2 ID : 264330540259
Option 3 ID : 264330540262
Option 4 ID : 264330540261
Status : Answered
Chosen Option : 2

Q.7 "Playing It My Way" is an autobiography of _____.

- Ans
- 1. M S Dhoni
 - 2. Rahul Dravid
 - 3. Sachin Tendulkar
 - 4. Yuvraj Singh

Question Type : MCQ
Question ID : 264330137911
Option 1 ID : 264330540251
Option 2 ID : 264330540252
Option 3 ID : 264330540254
Option 4 ID : 264330540253
Status : Answered
Chosen Option : 3

Q.8 According to Census 2011, which among the following has the minimum population density?

- Ans
- 1. Chandigarh
 - 2. Andhra Pradesh
 - 3. Arunachal Pradesh
 - 4. Sikkim

Question Type : MCQ
Question ID : 264330134655
Option 1 ID : 264330527576
Option 2 ID : 264330527577
Option 3 ID : 264330527575
Option 4 ID : 264330527578
Status : Answered
Chosen Option : 3

Q.9 India is set to surpass _____ to become the world's most populous country by 2023, says a report by the United Nations.

- Ans
- 1. United States of America
 - 2. Indonesia
 - 3. Pakistan
 - 4. China

Question Type : MCQ
Question ID : 264330137772
Option 1 ID : 264330539695
Option 2 ID : 264330539698
Option 3 ID : 264330539697
Option 4 ID : 264330539696
Status : Answered
Chosen Option : 4

Q.10 A temporary alliance of groups or parties is called a _____.

- Ans
- 1. Veto
 - 2. Coalition
 - 3. Constituency
 - 4. Federalism

Question Type : MCQ
Question ID : 264330138257
Option 1 ID : 264330541638
Option 2 ID : 264330541635
Option 3 ID : 264330541637
Option 4 ID : 264330541636
Status : Answered
Chosen Option : 2

Q.11 Which of the following Indian singers has won a Grammy award?

- Ans
- 1. Kumar Sanu
 - 2. Arijit Singh
 - 3. Mohammed Rafi
 - 4. A R Rahman

Question Type : MCQ
Question ID : 264330134074
Option 1 ID : 264330525321
Option 2 ID : 264330525320
Option 3 ID : 264330525322
Option 4 ID : 264330525319
Status : Answered
Chosen Option : 4

Q.12 Annie Besant laid the foundation of the Central Hindu College in _____ in 1898 where both Hindu religion and Western scientific subjects were taught.

- Ans
- 1. Pune
 - 2. Chennai
 - 3. Benaras
 - 4. Kolkata

Question Type : MCQ
Question ID : 264330137752
Option 1 ID : 264330539618
Option 2 ID : 264330539617
Option 3 ID : 264330539616
Option 4 ID : 264330539615
Status : Answered
Chosen Option : 3

Q.13 Article 356 and 360 in the Indian constitution are the articles based on _____ .

- Ans
- 1. regional languages
 - 2. amendment of the constitution
 - 3. emergency provisions
 - 4. elections

Question Type : MCQ
Question ID : 264330134076
Option 1 ID : 264330525330
Option 2 ID : 264330525329
Option 3 ID : 264330525327
Option 4 ID : 264330525328
Status : Answered
Chosen Option : 3

Q.14 Sachin Tendulkar received the "Bharat Ratna Award" in which year?

- Ans
- 1. 2012
 - 2. 2011
 - 3. 2013
 - 4. 2014

Question Type : MCQ
Question ID : 264330138653
Option 1 ID : 264330543220
Option 2 ID : 264330543219
Option 3 ID : 264330543221
Option 4 ID : 264330543222
Status : Answered
Chosen Option : 3

Q.15 Sultan Muhammad Ghori defeated Prithviraja III in _____.

- Ans
- 1. 1191
 - 2. 1211
 - 3. 1192
 - 4. 1195

Question Type : MCQ
Question ID : 264330138671
Option 1 ID : 264330543291
Option 2 ID : 264330543294
Option 3 ID : 264330543292
Option 4 ID : 264330543293
Status : Answered
Chosen Option : 3

Q.16 How many white squares are there on a chessboard?

- Ans
- 1. 64
 - 2. 204
 - 3. 22
 - 4. 32

Question Type : MCQ
Question ID : 264330134078
Option 1 ID : 264330525336
Option 2 ID : 264330525338
Option 3 ID : 264330525337
Option 4 ID : 264330525335
Status : Answered
Chosen Option : 4

Q.17 Which vitamin is soluble in water?

- Ans
- 1. Vitamin-D
 - 2. Vitamin-E
 - 3. Vitamin-A
 - 4. Vitamin-C

Question Type : MCQ
Question ID : 264330134062
Option 1 ID : 264330525273
Option 2 ID : 264330525274
Option 3 ID : 264330525272
Option 4 ID : 264330525271
Status : Answered
Chosen Option : 4

Q.18 The breaking up of the rocks on the earth's surface is called as _____.

- Ans
- 1. weathering
 - 2. stacking
 - 3. meandering
 - 4. sorting

Question Type : MCQ
Question ID : 264330138664
Option 1 ID : 264330543264
Option 2 ID : 264330543266
Option 3 ID : 264330543263
Option 4 ID : 264330543265
Status : Answered
Chosen Option : 1

Q.19 The Elephanta Caves are located in which state?

- Ans
- 1. Gujarat
 - 2. Rajasthan
 - 3. Maharashtra
 - 4. Karnataka

Question Type : MCQ
Question ID : 264330138248
Option 1 ID : 264330541600
Option 2 ID : 264330541599
Option 3 ID : 264330541601
Option 4 ID : 264330541602
Status : Answered
Chosen Option : 3

Q.20 Kuchipudi is a classical dance of which state?

- Ans
- 1. Tamil Nadu
 - 2. Andhra Pradesh
 - 3. Kerala
 - 4. Bihar

Question Type : MCQ
Question ID : 264330134058
Option 1 ID : 264330525257
Option 2 ID : 264330525258
Option 3 ID : 264330525255
Option 4 ID : 264330525256
Status : Answered
Chosen Option : 2

Q.21 The Himalayan Mountain range was formed by the collision of _____ .

- Ans
- 1. African Plate and Australian Plate
 - 2. Indian Plate and African Plate
 - 3. Eurasian Plate and African Plate
 - 4. Indian Plate and Eurasian Plate

Question Type : MCQ
Question ID : 264330134066
Option 1 ID : 264330525287
Option 2 ID : 264330525289
Option 3 ID : 264330525290
Option 4 ID : 264330525288
Status : Answered
Chosen Option : 3

Q.22 The basic unit of speed of an object is _____ .

- Ans
- 1. metre per km (m/km)
 - 2. metre per hour (m/h)
 - 3. metre per second (m/s)
 - 4. metre per minute (m/m)

Question Type : MCQ
Question ID : 264330138665
Option 1 ID : 264330543270
Option 2 ID : 264330543269
Option 3 ID : 264330543267
Option 4 ID : 264330543268
Status : Answered
Chosen Option : 3

Q.23 Kicheri is a harvest festival and involves ritual bathing, celebrated majorly in _____ .

- Ans
- 1. Madhya Pradesh
 - 2. Haryana
 - 3. Uttar Pradesh
 - 4. Gujarat

Question Type : MCQ
Question ID : 264330137739
Option 1 ID : 264330539563
Option 2 ID : 264330539565
Option 3 ID : 264330539564
Option 4 ID : 264330539566
Status : Answered
Chosen Option : 1

Q.24 In which of the following methods of irrigation, the water falls drop by drop directly near the roots?

- Ans
- 1. Manual irrigation
 - 2. Sprinkler system
 - 3. Lateral move irrigation
 - 4. Drip system

Question Type : MCQ
Question ID : 264330137903
Option 1 ID : 264330540220
Option 2 ID : 264330540221
Option 3 ID : 264330540219
Option 4 ID : 264330540222
Status : Answered
Chosen Option : 4

Q.25 Who among the following was defeated in the Battle of Kannauj in 1540?

- Ans
- 1. Humayun
 - 2. Akbar
 - 3. Hemu
 - 4. Sher Shah

Question Type : MCQ
Question ID : 264330137749
Option 1 ID : 264330539604
Option 2 ID : 264330539605
Option 3 ID : 264330539603
Option 4 ID : 264330539606
Status : Answered
Chosen Option : 1

Section : English Language and Comprehension

Q.1 A sentence has been given with a blank to be filled with an appropriate option. Choose the correct alternative.
The victim was _____ in the back of his head.

- Ans
- 1. shot
 - 2. shooting
 - 3. shoot
 - 4. shooted

Question Type : MCQ
Question ID : 264330134534
Option 1 ID : 264330527098
Option 2 ID : 264330527096
Option 3 ID : 264330527097
Option 4 ID : 264330527095
Status : Answered
Chosen Option : 1

Q.2 Select the most appropriate option to fill in the blank.
Although she has used the typewriter since she was eleven years old, she is rather _____ than rapid.

- Ans
- 1. hasty
 - 2. careful
 - 3. energetic
 - 4. heedless

Question Type : MCQ
Question ID : 264330134553
Option 1 ID : 264330527168
Option 2 ID : 264330527170
Option 3 ID : 264330527167
Option 4 ID : 264330527169
Status : Answered
Chosen Option : 1

Q.3 Select the most appropriate option to substitute the bracketed segment in the given sentence. If there is no need to substitute it, select 'no substitution required'.

(I wouldn't date him if I was you), he doesn't seem like a good person.

- Ans
- 1. I wouldn't has dated him if I were you,
 - 2. I will not date him if I were you, not
 - 3. No substitution required
 - 4. I wouldn't have dated him if I were you,

Question Type : MCQ
Question ID : 264330136216
Option 1 ID : 264330533656
Option 2 ID : 264330533657
Option 3 ID : 264330533658
Option 4 ID : 264330533655
Status : Answered
Chosen Option : 4

Q.4 Select the appropriate synonym for the underlined word.
They have no reason to trust you.

- Ans
- 1. condemn
 - 2. dispute
 - 3. doubt
 - 4. believe

Question Type : MCQ
Question ID : 264330134544
Option 1 ID : 264330527131
Option 2 ID : 264330527133
Option 3 ID : 264330527134
Option 4 ID : 264330527132
Status : Answered
Chosen Option : 4

Q.5 Improve the underlined part of the sentence. Choose 'No improvement' as an answer if the sentence is grammatically correct.

There has been a spate of some unfortunately events in Madurai.

- Ans**
- 1. unfortunate events
 - 2. unfortunately event
 - 3. No improvement
 - 4. unfortunate some events

Question Type : **MCQ**
Question ID : **264330134724**
Option 1 ID : **264330527851**
Option 2 ID : **264330527852**
Option 3 ID : **264330527854**
Option 4 ID : **264330527853**
Status : **Answered**
Chosen Option : 1

Q.6 In the following question, out of the given four alternatives, select the alternative which best expresses the meaning of the Idiom/Phrase.

Get the ball rolling

- Ans**
- 1. Get everyone's vote
 - 2. Behave in a crazy manner
 - 3. Collect one's belongings
 - 4. Set an activity in motion

Question Type : **MCQ**
Question ID : **264330136789**
Option 1 ID : **264330535856**
Option 2 ID : **264330535857**
Option 3 ID : **264330535858**
Option 4 ID : **264330535855**
Status : **Answered**
Chosen Option : 4

Q.7 Select the wrongly spelt word.

- Ans**
- 1. Contradictory
 - 2. Disgusting
 - 3. Enclosed
 - 4. Sizeable

Question Type : **MCQ**
Question ID : **264330136106**
Option 1 ID : **264330533234**
Option 2 ID : **264330533231**
Option 3 ID : **264330533233**
Option 4 ID : **264330533232**
Status : **Answered**
Chosen Option : 2

Q.8 Choose the word that can substitute the given group of words.

A circular house made of blocks of hard snow

- Ans
- 1. Igloo
 - 2. Nest
 - 3. Hutch
 - 4. Hut

Question Type : MCQ
Question ID : 264330136783
Option 1 ID : 264330535831
Option 2 ID : 264330535833
Option 3 ID : 264330535834
Option 4 ID : 264330535832
Status : Answered
Chosen Option : 1

Q.9 Find the part of the given sentence that has an error in it. If there is no error, choose 'No error'.

All of the farmers I interviewed shared three things on common.

- Ans
- 1. All of the farmers I
 - 2. interviewed shared three
 - 3. No error
 - 4. things on common.

Question Type : MCQ
Question ID : 264330135179
Option 1 ID : 264330529647
Option 2 ID : 264330529648
Option 3 ID : 264330529650
Option 4 ID : 264330529649
Status : Answered
Chosen Option : 4

Q.10 Choose the incorrectly spelt word.

- Ans
- 1. Common
 - 2. Friying
 - 3. Hazard
 - 4. Addition

Question Type : MCQ
Question ID : 264330134550
Option 1 ID : 264330527155
Option 2 ID : 264330527158
Option 3 ID : 264330527157
Option 4 ID : 264330527156
Status : Answered
Chosen Option : 2

Q.11 Select the most appropriate option to fill in the blank.
Without vision, the process of conceptualisation can become _____ task for any individual.

- Ans**
- 1. a gregarious
 - 2. an onerous
 - 3. a contrarious
 - 4. a lively

Question Type : **MCQ**
Question ID : **264330136107**
Option 1 ID : **264330533235**
Option 2 ID : **264330533238**
Option 3 ID : **264330533237**
Option 4 ID : **264330533236**
Status : **Answered**
Chosen Option : **2**

Q.12 Fill in the blank with the most appropriate option.
Earlier I'd thought that it was for my sake, but then I learnt _____ Arjun the power to resist her.

- Ans**
- 1. what has gave
 - 2. what gives
 - 3. what give
 - 4. what gave

Question Type : **MCQ**
Question ID : **264330136246**
Option 1 ID : **264330533774**
Option 2 ID : **264330533772**
Option 3 ID : **264330533771**
Option 4 ID : **264330533773**
Status : **Answered**
Chosen Option : **4**

Q.13 Find the part of the given sentence that has an error in it. If there is no error, choose 'No error'.
You will get a discount on this products, if you buy one more outfit.

- Ans**
- 1. No error
 - 2. on this products, if
 - 3. You will get a discount
 - 4. you buy one more outfit.

Question Type : **MCQ**
Question ID : **264330134530**
Option 1 ID : **264330527082**
Option 2 ID : **264330527080**
Option 3 ID : **264330527079**
Option 4 ID : **264330527081**
Status : **Answered**
Chosen Option : **2**

Q.14 Choose the word that can substitute the given group of words.
A man who is womanish in his habits

- Ans
- 1. Fastidious
 - 2. Henpecked
 - 3. Stoic
 - 4. Effeminate

Question Type : MCQ
Question ID : 264330134543
Option 1 ID : 264330527127
Option 2 ID : 264330527128
Option 3 ID : 264330527130
Option 4 ID : 264330527129
Status : Answered
Chosen Option : 4

Q.15 Select the most appropriate synonym to substitute the bracketed word in the given sentence.

They have also tested fully (autonomous) landings and semi-autonomous take-offs for the gas-powered rotorcraft.

- Ans
- 1. Occlude
 - 2. Obstruct
 - 3. Unanimous
 - 4. Independent

Question Type : MCQ
Question ID : 264330136230
Option 1 ID : 264330533709
Option 2 ID : 264330533707
Option 3 ID : 264330533708
Option 4 ID : 264330533710
Status : Answered
Chosen Option : 4

Q.16 Improve the underlined part of the sentence. Choose 'No improvement' as an answer if the sentence is grammatically correct.
Your parcel should arrived at three days.

- Ans
- 1. arrive in three
 - 2. arrive in third
 - 3. No improvement
 - 4. arrive in the third

Question Type : MCQ
Question ID : 264330134402
Option 1 ID : 264330526589
Option 2 ID : 264330526587
Option 3 ID : 264330526590
Option 4 ID : 264330526588
Status : Answered
Chosen Option : 1

Q.17 Select the most appropriate antonym of the given word.

Administer

- Ans
- 1. Steady
 - 2. Forego
 - 3. Entertaining
 - 4. Pictural

Question Type : MCQ
Question ID : 264330136631
Option 1 ID : 264330535247
Option 2 ID : 264330535249
Option 3 ID : 264330535248
Option 4 ID : 264330535250
Status : Answered
Chosen Option : 2

Q.18 In the following question, out of the given four alternatives, select the alternative which best expresses the meaning of the Idiom/Phrase.
To go a long way

- Ans
- 1. To become successful in life
 - 2. To join a foreign company
 - 3. To avoid short cuts
 - 4. To go on a long drive

Question Type : MCQ
Question ID : 264330134549
Option 1 ID : 264330527151
Option 2 ID : 264330527152
Option 3 ID : 264330527154
Option 4 ID : 264330527153
Status : Answered
Chosen Option : 1

Q.19 Identify the segment that contains a grammatical error. If there is no error, select 'No error'

Do not be put of by the/ mathematical equation, because/ this is really not very complicated.

- Ans
- 1. Do not be put of by the
 - 2. this is really not very complicated.
 - 3. mathematical equation, because
 - 4. No error

Question Type : MCQ
Question ID : 264330136213
Option 1 ID : 264330533643
Option 2 ID : 264330533645
Option 3 ID : 264330533644
Option 4 ID : 264330533646
Status : Answered
Chosen Option : 1

Q.20 Select the appropriate antonym for the underlined word.
Sam was looking gloomy, and downcast, and Meg in tears.

- Ans
- 1. plain
 - 2. sullen
 - 3. morose
 - 4. buoyant

Question Type : **MCQ**
Question ID : **264330134547**
Option 1 ID : **264330527144**
Option 2 ID : **264330527146**
Option 3 ID : **264330527145**
Option 4 ID : **264330527143**
Status : **Answered**
Chosen Option : **4**

Comprehension:

In the following passage some words have been deleted. Fill in the blanks with the help of the alternatives given. Select the most appropriate option for each number.

It was this (1) _____ that made John so particularly unusual, even for a wizard. This scar was (2) _____ hint of John's very mysterious past, of the reason (3) _____ the Samuel's doorstep eleven years (4) _____. At the age of one, John (5) _____ a curse from the greatest Dark sorcerer of all time.

SubQuestion No : 21

Q.21 Select the most appropriate option to fill in blank number 1.

- Ans
- 1. blister
 - 2. scar
 - 3. scab
 - 4. defect

Question Type : **MCQ**
Question ID : **264330136622**
Option 1 ID : **264330535212**
Option 2 ID : **264330535213**
Option 3 ID : **264330535214**
Option 4 ID : **264330535211**
Status : **Answered**
Chosen Option : **2**



Comprehension:

In the following passage some words have been deleted. Fill in the blanks with the help of the alternatives given. Select the most appropriate option for each number.

It was this (1) _____ that made John so particularly unusual, even for a wizard. This scar was (2) _____ hint of John's very mysterious past, of the reason (3) _____ the Samuel's doorstep eleven years (4) _____. At the age of one, John (5) _____ a curse from the greatest Dark sorcerer of all time.

SubQuestion No : 22

Q.22 Select the most appropriate option to fill in blank number 2.

- Ans**
- 1. the only
 - 2. that only
 - 3. the alone
 - 4. that individual

Question Type : **MCQ**

Question ID : **264330136623**

Option 1 ID : **264330535215**

Option 2 ID : **264330535216**

Option 3 ID : **264330535218**

Option 4 ID : **264330535217**

Status : **Answered**

Chosen Option : 1

Comprehension:

In the following passage some words have been deleted. Fill in the blanks with the help of the alternatives given. Select the most appropriate option for each number.

It was this (1) _____ that made John so particularly unusual, even for a wizard. This scar was (2) _____ hint of John's very mysterious past, of the reason (3) _____ the Samuel's doorstep eleven years (4) _____. At the age of one, John (5) _____ a curse from the greatest Dark sorcerer of all time.

SubQuestion No : 23

Q.23 Select the most appropriate option to fill in blank number 3.

- Ans**
- 1. he had been left on
 - 2. he had been left up
 - 3. he have been left on
 - 4. he was been left in

Question Type : **MCQ**

Question ID : **264330136624**

Option 1 ID : **264330535221**

Option 2 ID : **264330535219**

Option 3 ID : **264330535220**

Option 4 ID : **264330535222**

Status : **Answered**

Chosen Option : 1

Comprehension:

In the following passage some words have been deleted. Fill in the blanks with the help of the alternatives given. Select the most appropriate option for each number.

It was this (1) _____ that made John so particularly unusual, even for a wizard. This scar was (2) _____ hint of John's very mysterious past, of the reason (3) _____ the Samuel's doorstep eleven years (4) _____. At the age of one, John (5) _____ a curse from the greatest Dark sorcerer of all time.

SubQuestion No : 24

Q.24 Select the most appropriate option to fill in blank number 4.

- Ans
- 1. ago
 - 2. prior
 - 3. before
 - 4. sooner

Question Type : MCQ
Question ID : 264330136625
Option 1 ID : 264330535226
Option 2 ID : 264330535224
Option 3 ID : 264330535225
Option 4 ID : 264330535223
Status : Answered
Chosen Option : 1

Comprehension:

In the following passage some words have been deleted. Fill in the blanks with the help of the alternatives given. Select the most appropriate option for each number.

It was this (1) _____ that made John so particularly unusual, even for a wizard. This scar was (2) _____ hint of John's very mysterious past, of the reason (3) _____ the Samuel's doorstep eleven years (4) _____. At the age of one, John (5) _____ a curse from the greatest Dark sorcerer of all time.

SubQuestion No : 25

Q.25 Select the most appropriate option to fill in blank number 5.

- Ans
- 1. has had someway survived
 - 2. had somehow existed through
 - 3. have somehow survived
 - 4. had somehow survived

Question Type : MCQ
Question ID : 264330136626
Option 1 ID : 264330535230
Option 2 ID : 264330535227
Option 3 ID : 264330535229
Option 4 ID : 264330535228
Status : Answered
Chosen Option : 4