



SSC MTS **SHIFT – 1 (19-06-2023)**

- ★ Latest Govt Job updates
- ★ Private Job updates
- ★ Free Mock tests available

Visit - [teachingninja.in](https://teachingninja.in)

## Multi Tasking Non Technical Staff and Havaladar CBIC and CBN Examination 2022

Roll Number	
Candidate Name	
Venue Name	
Exam Date	19/06/2023
Exam Time	9:00 AM - 10:30 AM
Subject	MTS Non Tech Havaladar CBIC and CBN Examination 2022

Section : Numerical and Mathematical Ability

Q.1 The length, breadth and height of a cuboid are 4 cm, 6 cm and 10 cm respectively. Find the total surface area.

- Ans
- 1. 222 cm<sup>2</sup>
  - 2. 244 cm<sup>2</sup>
  - 3. 248 cm<sup>2</sup>
  - 4. 144 cm<sup>2</sup>

Question Type : MCQ

Question ID : 264330138432

Option 1 ID : 264330542338

Option 2 ID : 264330542337

Option 3 ID : 264330542336

Option 4 ID : 264330542335

Status : Answered

Chosen Option : 3

Q.2 What is the value of  $\frac{1}{7} \times \frac{1}{8} \div \frac{72}{51}$  of  $\left(\frac{1}{9} + \frac{1}{8}\right) + \left(\frac{63}{56} \times \frac{48}{72}\right)$  ?

- Ans
- 1. 21/56
  - 2. 19/56
  - 3. 15/56
  - 4. 45/56

Question Type : MCQ

Question ID : 264330139928

Option 1 ID : 264330548092

Option 2 ID : 264330548091

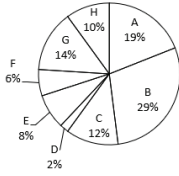
Option 3 ID : 264330548093

Option 4 ID : 264330548094

Status : Answered

Chosen Option : 4

- Q.3** The pie chart given below shows the number of boys in 8 schools. The total number of boys in all these 8 schools is 10000. Number of boys in a particular school is shown as a percent of total number of boys in all these 8 schools.



What is the ratio of central angle formed by sector C, D and F together to the central angle formed by sector A, G and H together?

- Ans**
- 1. 44 : 21
  - 2. 19 : 44
  - 3. 17 : 39
  - 4. 20 : 43

Question Type : MCQ  
 Question ID : 264330140172  
 Option 1 ID : 264330549069  
 Option 2 ID : 264330549067  
 Option 3 ID : 264330549068  
 Option 4 ID : 264330549070  
 Status : Answered  
 Chosen Option : 3

- Q.4** The table given below shows the marked price and selling price of 6 articles.

Articles	Marked price	Selling price
A	750	650
B	600	450
C	650	500
D	450	400
E	850	650
F	350	300

Discount Percentage =  $[(\text{Marked price} - \text{Selling price}) / \text{Marked price}] \times 100$

Which of the following sequence is correct of discount percentage?

- Ans**
- 1. B > E > C > F > D > A
  - 2. B > E > C > F > A > D
  - 3. D > A > F > C > E > B
  - 4. E > C > B > F > A > D

Question Type : MCQ  
 Question ID : 264330140191  
 Option 1 ID : 264330549143  
 Option 2 ID : 264330549145  
 Option 3 ID : 264330549146  
 Option 4 ID : 264330549144  
 Status : Answered  
 Chosen Option : 3

Q.5 A = Rs 6000 is invested at simple interest for 5 years and annual rate of interest is 15 percent.  
B = Rs. 5000 is invested at simple interest for 2 years and annual rate of interest is 20 percent.  
What is the ratio of interests earned in A and B respectively?

- Ans
- 1. 9 : 4
  - 2. 16 : 5
  - 3. 18 : 11
  - 4. 19 : 12

Question Type : MCQ  
Question ID : 264330139619  
Option 1 ID : 264330546892  
Option 2 ID : 264330546891  
Option 3 ID : 264330546894  
Option 4 ID : 264330546893  
Status : Answered  
Chosen Option : 3

Q.6 What is the value of  $\frac{43 \times 2 - 21 \text{ of } 4}{28 - 7 \text{ of } 5 + 9}$  ?

- Ans
- 1. 3
  - 2. 1
  - 3. 4
  - 4. 2

Question Type : MCQ  
Question ID : 264330139967  
Option 1 ID : 264330548249  
Option 2 ID : 264330548247  
Option 3 ID : 264330548250  
Option 4 ID : 264330548248  
Status : Answered  
Chosen Option : 3

Q.7 If  $(P/2) = (Q/5) = (R/6)$ , then what is the value of  $P^2 : (P + Q)^2 : (Q + R)^2$

- Ans
- 1. 10 : 56 : 169
  - 2. 16 : 10 : 125
  - 3. 4 : 49 : 121
  - 4. 9 : 64 : 144

Question Type : MCQ  
Question ID : 264330140247  
Option 1 ID : 264330549369  
Option 2 ID : 264330549370  
Option 3 ID : 264330549367  
Option 4 ID : 264330549368  
Status : Answered  
Chosen Option : 3

**Q.8** 40 men can construct a building in 100 days. How long will it take 80 men to do this work?

- Ans**
- 1. 80 days
  - 2. 60 days
  - 3. 40 days
  - 4. 50 days

Question Type : **MCQ**  
Question ID : 264330140836  
Option 1 ID : 264330551693  
Option 2 ID : 264330551694  
Option 3 ID : 264330551692  
Option 4 ID : 264330551691  
Status : **Answered**  
Chosen Option : 4

**Q.9** What will be the area of a rectangular field of length 45 cm and breadth 32 cm?

- Ans**
- 1. 1340 cm<sup>2</sup>
  - 2. 1440 cm<sup>2</sup>
  - 3. 1120 cm<sup>2</sup>
  - 4. 1450 cm<sup>2</sup>

Question Type : **MCQ**  
Question ID : 264330140794  
Option 1 ID : 264330551525  
Option 2 ID : 264330551524  
Option 3 ID : 264330551523  
Option 4 ID : 264330551526  
Status : **Answered**  
Chosen Option : 2

**Q.10** The Least Common Multiple of three different numbers is 40. Which of the following cannot be their Highest Common Factor?

- Ans**
- 1. 10
  - 2. 20
  - 3. 25
  - 4. 5

Question Type : **MCQ**  
Question ID : 264330140254  
Option 1 ID : 264330549398  
Option 2 ID : 264330549397  
Option 3 ID : 264330549396  
Option 4 ID : 264330549395  
Status : **Answered**  
Chosen Option : 3

**Q.11** The average of marks obtained by S1 and S2 is 30 more than the average marks obtained by S2 and S3. If the marks obtained by S3 is 50, then what are the marks obtained by S1?

- Ans**
- 1. 80
  - 2. 105
  - 3. 95
  - 4. 110

Question Type : MCQ  
Question ID : 264330140635  
Option 1 ID : 264330550887  
Option 2 ID : 264330550890  
Option 3 ID : 264330550888  
Option 4 ID : 264330550889  
Status : Answered  
Chosen Option : 3

**Q.12** Cost price of an article is Rs. 2650. If the loss percentage is 16 percent, then what is the selling price of the article?

- Ans**
- 1. Rs. 2448
  - 2. Rs. 2316
  - 3. Rs. 2226
  - 4. Rs. 2048

Question Type : MCQ  
Question ID : 264330139937  
Option 1 ID : 264330548127  
Option 2 ID : 264330548129  
Option 3 ID : 264330548128  
Option 4 ID : 264330548130  
Status : Answered  
Chosen Option : 3

**Q.13** Three partners P, Q and R share profit such that 4 times of the P's share is equal to 5 times of the Q's share and equal to 8 times of the R's share. What is the ratio of the profits of P, Q and R respectively?

- Ans**
- 1. 15 : 9 : 8
  - 2. 14 : 7 : 9
  - 3. 10 : 8 : 5
  - 4. 12 : 8 : 7

Question Type : MCQ  
Question ID : 264330139617  
Option 1 ID : 264330546886  
Option 2 ID : 264330546885  
Option 3 ID : 264330546883  
Option 4 ID : 264330546884  
Status : Answered  
Chosen Option : 3

**Q.14** An item is sold at two successive discounts of 20 percent and 20 percent. The selling price of article after second discount is Rs. 3616. If it is sold only at one discount of 20 percent, then what will be the selling price of the article?

- Ans**
- 1. Rs. 5200
  - 2. Rs. 3960
  - 3. Rs. 4520
  - 4. Rs. 4080

Question Type : **MCQ**  
Question ID : 264330140545  
Option 1 ID : 264330550535  
Option 2 ID : 264330550538  
Option 3 ID : 264330550537  
Option 4 ID : 264330550536  
Status : **Answered**  
Chosen Option : 3

**Q.15** A certain sum of money becomes triple of itself in 8 years at simple interest. In how many years it will become five times of itself?

- Ans**
- 1. 10 years
  - 2. 7 years
  - 3. 16 years
  - 4. 12 years

Question Type : **MCQ**  
Question ID : 264330140163  
Option 1 ID : 264330549032  
Option 2 ID : 264330549031  
Option 3 ID : 264330549034  
Option 4 ID : 264330549033  
Status : **Answered**  
Chosen Option : 4

**Q.16** Two boats are travelling at the speed of 36 km/hr and 54 km/hr respectively towards each other. What will be the distance between the two boats one second before they collide?

- Ans**
- 1. 25 metres
  - 2. 35 metres
  - 3. 40 metres
  - 4. 15 metres

Question Type : **MCQ**  
Question ID : 264330140535  
Option 1 ID : 264330550495  
Option 2 ID : 264330550497  
Option 3 ID : 264330550498  
Option 4 ID : 264330550496  
Status : **Answered**  
Chosen Option : 1

**Q.17** Shreyas can complete  $\frac{4}{5}$  part of a work in 16 days. Ruchi is 2.5 times as efficient as Shreyas. In how many days will Ruchi alone complete the same work?

- Ans**
- 1. 8 days
  - 2. 9 days
  - 3. 12.5 days
  - 4. 10 days

Question Type : MCQ  
Question ID : 264330139589  
Option 1 ID : 264330546773  
Option 2 ID : 264330546772  
Option 3 ID : 264330546771  
Option 4 ID : 264330546774  
Status : Answered  
Chosen Option : 1

**Q.18** A is 5 times of B. B is how much percentage less than A?

- Ans**
- 1. 60 percent
  - 2. 80 percent
  - 3. 52.5 percent
  - 4. 83.33 percent

Question Type : MCQ  
Question ID : 264330140636  
Option 1 ID : 264330550891  
Option 2 ID : 264330550892  
Option 3 ID : 264330550893  
Option 4 ID : 264330550894  
Status : Answered  
Chosen Option : 2

**Q.19** A trader buys two articles for Rs. 4000 each article. If he earns a profit of 10 percent on one and losses 30 percent on the other, then what will be his overall loss percentage?

- Ans**
- 1. 10 percent
  - 2. 20 percent
  - 3. 15 percent
  - 4. 5 percent

Question Type : MCQ  
Question ID : 264330139023  
Option 1 ID : 264330544700  
Option 2 ID : 264330544699  
Option 3 ID : 264330544701  
Option 4 ID : 264330544702  
Status : Answered  
Chosen Option : 3



Q.20 The average of the set of scores 512, 528, 556, 584 and 615 is:

- Ans
- 1. 530
  - 2. 586
  - 3. 600
  - 4. 559

Question Type : MCQ  
Question ID : 264330139039  
Option 1 ID : 264330544763  
Option 2 ID : 264330544765  
Option 3 ID : 264330544766  
Option 4 ID : 264330544764  
Status : Answered  
Chosen Option : 4

Section : Reasoning Ability and Problem Solving

Q.1 In a certain code language, 'BONUS' is written as '215142119'. How will 'FANCY' be written in that language?

- Ans
- 1. 6113425
  - 2. 6114352
  - 3. 6114325
  - 4. 6113452

Question Type : MCQ  
Question ID : 264330140416  
Option 1 ID : 264330550046  
Option 2 ID : 264330550044  
Option 3 ID : 264330550045  
Option 4 ID : 264330550043  
Status : Answered  
Chosen Option : 3

Q.2 In a certain code language, 'HOME' is written as 'MOHE'. How will 'CALM' be written in that language?

- Ans
- 1. LAMC
  - 2. MACL
  - 3. LBCM
  - 4. LACM

Question Type : MCQ  
Question ID : 264330140415  
Option 1 ID : 264330550040  
Option 2 ID : 264330550039  
Option 3 ID : 264330550041  
Option 4 ID : 264330550042  
Status : Answered  
Chosen Option : 4

**Q.3** Three statements are given followed by two conclusions numbered I and II. Assuming the statements to be true, even if they seem to be at variance with commonly known facts, decide which of the conclusions logically follow(s) from the statements.

Statements:

All trees are flowers.

All flowers are petals.

Some petals are leaves.

Conclusions:

I. All trees are petals.

II. Some petals are flowers.

- Ans**
- 1. Only conclusion II follows
  - 2. Neither conclusion I nor II follows
  - 3. Only conclusion I follows
  - 4. Both conclusions I and II follow

Question Type : MCQ

Question ID : 264330138777

Option 1 ID : 264330543716

Option 2 ID : 264330543718

Option 3 ID : 264330543715

Option 4 ID : 264330543717

Status : Answered

Chosen Option : 4

**Q.4** Select the option that is related to the third word in the same way as the second word is related to the first word.  
Canada : Ottawa :: Italy : ?

- Ans**
- 1. Paris
  - 2. Rome
  - 3. London
  - 4. Wellington

Question Type : MCQ

Question ID : 264330140454

Option 1 ID : 264330550196

Option 2 ID : 264330550195

Option 3 ID : 264330550197

Option 4 ID : 264330550198

Status : Answered

Chosen Option : 2

**Q.5** In a certain code language, 'BHAKTI' is coded as 'GSIZFA'. What is the code for 'BIKCR' in that code language?

- Ans**
- 1. QDAJHA
  - 2. PDAJGA
  - 3. QDAJGA
  - 4. PDAJFA

Question Type : MCQ  
Question ID : 264330140981  
Option 1 ID : 264330552271  
Option 2 ID : 264330552272  
Option 3 ID : 264330552274  
Option 4 ID : 264330552273  
Status : Answered  
Chosen Option : 3

**Q.6** Seven friends H, J, K, L, M, N, and O are sitting around a circular table facing the centre. H is sitting to the immediate right of L. N is sitting exactly between J and K. M sits to the immediate left of O. N sits second to the left of M. Who sits to the immediate right of O?

- Ans**
- 1. J
  - 2. L
  - 3. H
  - 4. N

Question Type : MCQ  
Question ID : 264330138774  
Option 1 ID : 264330543705  
Option 2 ID : 264330543704  
Option 3 ID : 264330543703  
Option 4 ID : 264330543706  
Status : Answered  
Chosen Option : 3



**Q.7** Two Statements are given followed by two conclusions numbered I and II. Assuming the statements to be true, even if they seem to be at variance with commonly known facts, decide which of the conclusions logically follow(s) from the statements.

Statements:

All notebooks are pencils.

Some pens are notebooks.

Conclusions:

I. All pens are pencils.

II. Some pencils are pens.

- Ans**
- 1. Only conclusion II follows.
  - 2. Neither conclusion I nor II follow.
  - 3. Only conclusion I follows.
  - 4. Both conclusions I and II follow.

Question Type : MCQ

Question ID : 264330140441

Option 1 ID : 264330550144

Option 2 ID : 264330550146

Option 3 ID : 264330550143

Option 4 ID : 264330550145

Status : Answered

Chosen Option : 1

**Q.8** Seven players Virat, Rahul, Rohit, Surya, Hardik, Rishabh and Deepak are sitting around a circular table facing towards the centre (not necessarily in the same order). Rohit is second to the left of Virat. Virat is fourth to the right of Deepak. Hardik is to immediate left of Deepak. Surya is not the immediate neighbour of Rohit. Rishabh is second to the right of Hardik. Who is fourth to the right of Hardik?

- Ans**
- 1. Surya
  - 2. Deepak
  - 3. Virat
  - 4. Rahul

Question Type : MCQ

Question ID : 264330139977

Option 1 ID : 264330548289

Option 2 ID : 264330548290

Option 3 ID : 264330548287

Option 4 ID : 264330548288

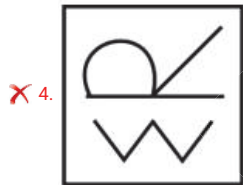
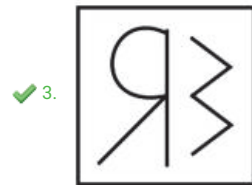
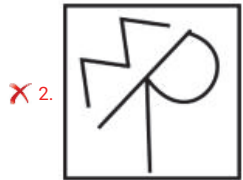
Status : Answered

Chosen Option : 3

Q.9 Select the correct mirror image of the given figure when the mirror MN is placed to the right side of the figure.



Ans



Teachingninja.in

Question Type : MCQ

Question ID : 264330138785

Option 1 ID : 264330543750

Option 2 ID : 264330543747

Option 3 ID : 264330543748

Option 4 ID : 264330543749

Status : Answered

Chosen Option : 3

**Q.10** Select the option in which the numbers shares the same relationship in set as that shared by the numbers in the given set.  
(NOTE: Operations should be performed on the whole numbers, without breaking down the numbers into its constituent digits. E.g.13 – Operations on 13 such as adding /subtracting /multiplying etc. to 13 can be performed. Breaking down 13 into 1 and 3 and then performing mathematical operations on 1 and 3 is not allowed)

(2, 3, 5)  
(5, 7, 11)

- Ans**
- 1. (4, 6, 7)
  - 2. (5, 10, 11)
  - 3. (11, 13, 17)
  - 4. (12, 15, 18)

Question Type : MCQ  
Question ID : 264330139985  
Option 1 ID : 264330548319  
Option 2 ID : 264330548320  
Option 3 ID : 264330548321  
Option 4 ID : 264330548322  
Status : Answered  
Chosen Option : 3

**Q.11** Which of the following letter cluster will replace the question mark (?) in the given series?  
PB, RZ, TX, VV, ?

- Ans**
- 1. XT
  - 2. YU
  - 3. XU
  - 4. YT

Question Type : MCQ  
Question ID : 264330140032  
Option 1 ID : 264330548508  
Option 2 ID : 264330548510  
Option 3 ID : 264330548509  
Option 4 ID : 264330548507  
Status : Answered  
Chosen Option : 3



Q.12 By Interchanging the given two numbers which of the following equation will be correct?

8 and 4

- Ans
- 1.  $4 + 8 \times 2 - 3 = 20$
  - 2.  $8 - 4 + 6 = 9$
  - 3.  $4 + 3 \times 8 - 2 = 21$
  - 4.  $4 \div 2 + 8 \times 3 = 16$

Question Type : MCQ  
Question ID : 264330139564  
Option 1 ID : 264330546674  
Option 2 ID : 264330546672  
Option 3 ID : 264330546671  
Option 4 ID : 264330546673  
Status : Answered  
Chosen Option : 4

Q.13 Which of the following numbers will replace the question mark (?) in the given series?

72, 78, 89, 95, 106, 112, 123, ?

- Ans
- 1. 200
  - 2. 129
  - 3. 85
  - 4. 140

Question Type : MCQ  
Question ID : 264330140084  
Option 1 ID : 264330548716  
Option 2 ID : 264330548715  
Option 3 ID : 264330548717  
Option 4 ID : 264330548718  
Status : Answered  
Chosen Option : 3

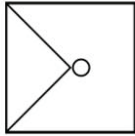
Q.14 Which of the following numbers will replace the question mark (?) in the given series?

3, 7, 15, 31, 63, 127, 255, ?

- Ans
- 1. 520
  - 2. 510
  - 3. 511
  - 4. 560

Question Type : MCQ  
Question ID : 264330135360  
Option 1 ID : 264330530349  
Option 2 ID : 264330530347  
Option 3 ID : 264330530348  
Option 4 ID : 264330530350  
Status : Answered  
Chosen Option : 3

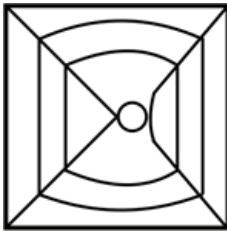
Q.15 Select the option figure in which the given figure (X) is embedded as its part (rotation is NOT allowed).



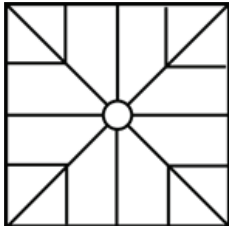
(X)

Ans

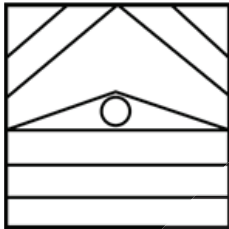
✓ 1.



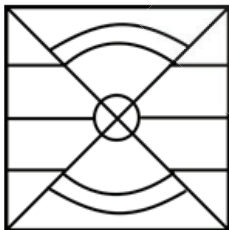
✗ 2.



✗ 3.



✗ 4.



Question Type : MCQ

Question ID : 264330140449

Option 1 ID : 264330550177

Option 2 ID : 264330550178

Option 3 ID : 264330550176

Option 4 ID : 264330550175

Status : Answered

Chosen Option : 1



**Q.16** Select the option that is related to the third number in the same way as the second number is related to the first number.

64 : 512 :: 81 : ?

- Ans**
- 1. 730
  - 2. 727
  - 3. 729
  - 4. 728

Question Type : MCQ

Question ID : 264330140425

Option 1 ID : 264330550082

Option 2 ID : 264330550081

Option 3 ID : 264330550080

Option 4 ID : 264330550079

Status : Answered

Chosen Option : 3

**Q.17** Select the option that is related to the third word in the same way as the second word is related to the first word.

Resistance : Ohm :: Energy : ?

- Ans**
- 1. Joule
  - 2. Mho
  - 3. Mole
  - 4. Ampere

Question Type : MCQ

Question ID : 264330140473

Option 1 ID : 264330550271

Option 2 ID : 264330550272

Option 3 ID : 264330550274

Option 4 ID : 264330550273

Status : Answered

Chosen Option : 1

**Q.18** Amongst seven girls I, II, III, IV, V, VI and VII, each has a different age. VI is elder than only III. II is younger than only VII. IV is older than four other girls. I is younger than V. Who is the fourth eldest among the girls?

- Ans**
- 1. V
  - 2. IV
  - 3. VI
  - 4. III

Question Type : MCQ

Question ID : 264330140141

Option 1 ID : 264330548945

Option 2 ID : 264330548944

Option 3 ID : 264330548946

Option 4 ID : 264330548943

Status : Answered

Chosen Option : 3

Q.19 Which two numbers should be interchanged to make the given equation correct?

$$7 - 5 + 4 \times 2 = 25$$

- Ans
- 1. 25 and 7
  - 2. 4 and 2
  - 3. 5 and 2
  - 4. 7 and 5

Question Type : MCQ

Question ID : 264330140148

Option 1 ID : 264330548974

Option 2 ID : 264330548973

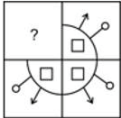
Option 3 ID : 264330548971

Option 4 ID : 264330548972

Status : Answered

Chosen Option : 3

Q.20 Select the option figure that will replace the question mark (?) in the figure given below to complete the pattern.  
(rotation is not allowed)



Ans

- 1.
- 2.
- 3.
- 4.

Question Type : MCQ

Question ID : 264330140031

Option 1 ID : 264330548505

Option 2 ID : 264330548506

Option 3 ID : 264330548504

Option 4 ID : 264330548503

Status : Answered

Chosen Option : 2

Q.1 How many types of revenue receipts exist in the economy?

- Ans
- 1. Three
  - 2. Five
  - 3. Four
  - 4. Two

Question Type : MCQ  
Question ID : 264330139758  
Option 1 ID : 264330547449  
Option 2 ID : 264330547447  
Option 3 ID : 264330547450  
Option 4 ID : 264330547448  
Status : Answered  
Chosen Option : 1

Q.2 Which of the following tribe belongs to Indo-European Linguistic family?

- Ans
- 1. Korwa
  - 2. Bhili
  - 3. Gondi
  - 4. Garo

Question Type : MCQ  
Question ID : 264330139768  
Option 1 ID : 264330547489  
Option 2 ID : 264330547487  
Option 3 ID : 264330547488  
Option 4 ID : 264330547490  
Status : Answered  
Chosen Option : 2

Q.3 The Muslim Women (Protection of Rights on Marriage) Act, 2019 declares the instant divorce granted by pronouncement of talaq three times as void and illegal. It provides for imprisonment for a term up to \_\_\_\_\_ and fine to the husband who practiced instant Triple Talaq.

- Ans
- 1. 2 years
  - 2. 4 years
  - 3. 3 years
  - 4. 5 years

Question Type : MCQ  
Question ID : 264330140293  
Option 1 ID : 264330549553  
Option 2 ID : 264330549551  
Option 3 ID : 264330549554  
Option 4 ID : 264330549552  
Status : Answered  
Chosen Option : 4

Q.4 The last Mughal Emperor who was sent to Jail in Rangoon was \_\_\_\_\_ .

- Ans
- 1. Alamgir II
  - 2. Shah Alam II
  - 3. Akbar shah II
  - 4. Bahadur Shah Zafar

Question Type : MCQ  
Question ID : 264330139696  
Option 1 ID : 264330547202  
Option 2 ID : 264330547201  
Option 3 ID : 264330547199  
Option 4 ID : 264330547200  
Status : Answered  
Chosen Option : 4

Q.5 Which part of the Indian constitution talks about the Union Territories?

- Ans
- 1. Part X
  - 2. Part VIII
  - 3. Part XI
  - 4. Part VI

Question Type : MCQ  
Question ID : 264330140746  
Option 1 ID : 264330551332  
Option 2 ID : 264330551334  
Option 3 ID : 264330551333  
Option 4 ID : 264330551331  
Status : Not Answered  
Chosen Option : --

Q.6 FIFA World Cup is associated with \_\_\_\_\_ sport.

- Ans
- 1. Rugby
  - 2. Fencing
  - 3. Hockey
  - 4. Football

Question Type : MCQ  
Question ID : 264330140928  
Option 1 ID : 264330552060  
Option 2 ID : 264330552062  
Option 3 ID : 264330552059  
Option 4 ID : 264330552061  
Status : Answered  
Chosen Option : 4

Q.7 The terms Kumi-Kata, Shintai, Ukemi are associated with which sports?

- Ans
- 1. Judo
  - 2. Fencing
  - 3. Wrestling
  - 4. Polo

Question Type : MCQ  
Question ID : 264330139727  
Option 1 ID : 264330547324  
Option 2 ID : 264330547326  
Option 3 ID : 264330547323  
Option 4 ID : 264330547325  
Status : Answered  
Chosen Option : 1

Q.8 Which of the following is celebrated as birth anniversary of Gautama Buddha?

- Ans
- 1. Maha Shivaratri
  - 2. Vesak
  - 3. Holika Dahan
  - 4. Pongal

Question Type : MCQ  
Question ID : 264330140654  
Option 1 ID : 264330550964  
Option 2 ID : 264330550965  
Option 3 ID : 264330550963  
Option 4 ID : 264330550966  
Status : Answered  
Chosen Option : 2

Q.9 Which among the following dance forms of India is associated with Odisha?

- Ans
- 1. Kathak
  - 2. Ghumar
  - 3. Chhau
  - 4. Bhangra

Question Type : MCQ  
Question ID : 264330140908  
Option 1 ID : 264330551979  
Option 2 ID : 264330551982  
Option 3 ID : 264330551980  
Option 4 ID : 264330551981  
Status : Answered  
Chosen Option : 3

Q.10 According to the 2011 census, the sex ratio for India's population is \_\_\_\_\_.

- Ans
- 1. 943
  - 2. 966
  - 3. 867
  - 4. 984

Question Type : MCQ  
Question ID : 264330140762  
Option 1 ID : 264330551395  
Option 2 ID : 264330551396  
Option 3 ID : 264330551398  
Option 4 ID : 264330551397  
Status : Answered  
Chosen Option : 1

Q.11 Islamic style of architecture is also known as \_\_\_\_\_ style.

- Ans
- 1. Mehrab
  - 2. Yashmak
  - 3. Hegira
  - 4. Alim

Question Type : MCQ  
Question ID : 264330140910  
Option 1 ID : 264330551989  
Option 2 ID : 264330551990  
Option 3 ID : 264330551987  
Option 4 ID : 264330551988  
Status : Answered  
Chosen Option : 1

Q.12 All human beings have \_\_\_\_\_ pairs of chromosomes in the nuclei of their cells.

- Ans
- 1. 41
  - 2. 11
  - 3. 33
  - 4. 23

Question Type : MCQ  
Question ID : 264330138985  
Option 1 ID : 264330544550  
Option 2 ID : 264330544547  
Option 3 ID : 264330544549  
Option 4 ID : 264330544548  
Status : Answered  
Chosen Option : 4

Q.13 Which of the following vitamins helps our body to use calcium for bones and teeth?

- Ans
- 1. Vitamin A
  - 2. Vitamin E
  - 3. Vitamin C
  - 4. Vitamin D

Question Type : MCQ  
Question ID : 264330139661  
Option 1 ID : 264330547061  
Option 2 ID : 264330547059  
Option 3 ID : 264330547062  
Option 4 ID : 264330547060  
Status : Answered  
Chosen Option : 4

Q.14 Minal wrote an essay on the largest moon of Saturn. Which among the following moons is it?

- Ans
- 1. Europa
  - 2. Titan
  - 3. Atlas
  - 4. Carme

Question Type : MCQ  
Question ID : 264330140734  
Option 1 ID : 264330551285  
Option 2 ID : 264330551284  
Option 3 ID : 264330551286  
Option 4 ID : 264330551283  
Status : Answered  
Chosen Option : 2

Q.15 Who administers the Union Territories of India?

- Ans
- 1. President
  - 2. Prime Minister
  - 3. Member of Legislative Assembly
  - 4. Chief Minister

Question Type : MCQ  
Question ID : 264330140747  
Option 1 ID : 264330551336  
Option 2 ID : 264330551335  
Option 3 ID : 264330551337  
Option 4 ID : 264330551338  
Status : Answered  
Chosen Option : 1

Q.16 'Romancing with Life' is an autobiography of the evergreen star \_\_\_\_\_ .

- Ans
- 1. Kishore Kumar
  - 2. Shashi Kapoor
  - 3. Dev Anand
  - 4. Dilip Kumar

Question Type : MCQ  
Question ID : 264330139678  
Option 1 ID : 264330547128  
Option 2 ID : 264330547127  
Option 3 ID : 264330547129  
Option 4 ID : 264330547130  
Status : Answered  
Chosen Option : 1

Q.17 When was the Battle of Talikota fought?

- Ans
- 1. 1542
  - 2. 1565
  - 3. 1556
  - 4. 1576

Question Type : MCQ  
Question ID : 264330140356  
Option 1 ID : 264330549803  
Option 2 ID : 264330549804  
Option 3 ID : 264330549806  
Option 4 ID : 264330549805  
Status : Not Answered  
Chosen Option : --

Q.18 Mahatma Gandhi called off the Non – cooperation Movement in February 1922 after which incident?

- Ans
- 1. Chauri Chaura Incident
  - 2. Bomb Blast in central assembly
  - 3. Kakori train robbery
  - 4. Jallianwala Bagh Massacre

Question Type : MCQ  
Question ID : 264330139722  
Option 1 ID : 264330547303  
Option 2 ID : 264330547304  
Option 3 ID : 264330547305  
Option 4 ID : 264330547306  
Status : Answered  
Chosen Option : 4



Q.19 Which famous ruler was known as the "Second Ashoka"?

- Ans
- 1. Kanishka
  - 2. Chandragupta II
  - 3. Milinda
  - 4. Rudradaman I

Question Type : MCQ  
Question ID : 264330140664  
Option 1 ID : 264330551003  
Option 2 ID : 264330551005  
Option 3 ID : 264330551004  
Option 4 ID : 264330551006  
Status : Answered  
Chosen Option : 2

Q.20 Which among the following is a noble chemical element of science periodic table?

- Ans
- 1. Nitrogen
  - 2. Helium
  - 3. Cobalt
  - 4. Scandium

Question Type : MCQ  
Question ID : 264330140731  
Option 1 ID : 264330551274  
Option 2 ID : 264330551273  
Option 3 ID : 264330551271  
Option 4 ID : 264330551272  
Status : Answered  
Chosen Option : 2

Q.21 Which among the following is a tributary of river Narmada?

- Ans
- 1. Betwa
  - 2. Koyna
  - 3. Ken
  - 4. Tawa

Question Type : MCQ  
Question ID : 264330140941  
Option 1 ID : 264330552113  
Option 2 ID : 264330552114  
Option 3 ID : 264330552112  
Option 4 ID : 264330552111  
Status : Answered  
Chosen Option : 3

Q.22 Which among the following memoir is based on ex-Prime Minister Dr Manmohan Singh?

- Ans
- 1. The Change We Choose
  - 2. A Prime Minister to Remember
  - 3. The Accidental Prime Minister
  - 4. The Prime Minister

Question Type : MCQ  
Question ID : 264330140923  
Option 1 ID : 264330552039  
Option 2 ID : 264330552042  
Option 3 ID : 264330552040  
Option 4 ID : 264330552041  
Status : Answered  
Chosen Option : 3

Q.23 Which of the following is NOT an example of Mass Media?

- Ans
- 1. Newspapers
  - 2. Door to door campaign
  - 3. Television
  - 4. Radio

Question Type : MCQ  
Question ID : 264330139883  
Option 1 ID : 264330547911  
Option 2 ID : 264330547912  
Option 3 ID : 264330547914  
Option 4 ID : 264330547913  
Status : Answered  
Chosen Option : 2

Q.24 Which layer of the soil has maximum concentration of humus?

- Ans
- 1. Weathered rock material
  - 2. Top soil
  - 3. Parent rock
  - 4. Sub soil

Question Type : MCQ  
Question ID : 264330140899  
Option 1 ID : 264330551944  
Option 2 ID : 264330551946  
Option 3 ID : 264330551943  
Option 4 ID : 264330551945  
Status : Not Answered  
Chosen Option : --

**Q.25** The Union Minister of Petroleum and Natural Gas, Hardeep Singh Puri, in October 2022 inaugurated Asia's largest Compressed Bio Gas (CBG) plant in \_\_\_\_\_.

- Ans**
- 1. Punjab
  - 2. Chandigarh
  - 3. Delhi
  - 4. Rajasthan

Question Type : MCQ  
Question ID : 264330140342  
Option 1 ID : 264330549750  
Option 2 ID : 264330549747  
Option 3 ID : 264330549748  
Option 4 ID : 264330549749  
Status : Answered  
Chosen Option : 1

Section : English Language and Comprehension

**Q.1** Identify the segment that contains a grammatical error. If there is no error, select 'No error'.

There is not one/ that have not/ been duplicated.

- Ans**
- 1. There is not one
  - 2. No error
  - 3. been duplicated.
  - 4. that have not

Question Type : MCQ  
Question ID : 264330136535  
Option 1 ID : 264330534879  
Option 2 ID : 264330534882  
Option 3 ID : 264330534881  
Option 4 ID : 264330534880  
Status : Answered  
Chosen Option : 4



Q.2 Choose the word that can substitute the given group of words.

A person, who travels in spacecraft

- Ans
- 1. Astronaut
  - 2. Cadet
  - 3. Ghetto
  - 4. Voyeur

Question Type : MCQ  
Question ID : 264330135549  
Option 1 ID : 264330531098  
Option 2 ID : 264330531097  
Option 3 ID : 264330531095  
Option 4 ID : 264330531096  
Status : Answered  
Chosen Option : 1

Q.3 Choose the sentence with no spelling error.

- Ans
- 1. Price is the monetry vullue placed on a product.
  - 2. Price is the monitary value placed on a product.
  - 3. Price is the monetary value placed on a product.
  - 4. Price is the monetary value plased on a product.

Question Type : MCQ  
Question ID : 264330135175  
Option 1 ID : 264330529633  
Option 2 ID : 264330529631  
Option 3 ID : 264330529634  
Option 4 ID : 264330529632  
Status : Answered  
Chosen Option : 3

Q.4 Fill in the blank with the most appropriate choice.

His students from his time at Manchester University remember his lectures as extraordinarily \_\_\_\_\_.

- Ans
- 1. ballistic
  - 2. flaccid
  - 3. rancid
  - 4. lucid

Question Type : MCQ  
Question ID : 264330135843  
Option 1 ID : 264330532242  
Option 2 ID : 264330532241  
Option 3 ID : 264330532239  
Option 4 ID : 264330532240  
Status : Answered  
Chosen Option : 1

Q.5 Select the most appropriate word for the given group of words.

A group of ants

- Ans
- 1. Bushel
  - 2. Pack
  - 3. Colony
  - 4. Comb

Question Type : MCQ  
Question ID : 264330136425  
Option 1 ID : 264330534459  
Option 2 ID : 264330534462  
Option 3 ID : 264330534460  
Option 4 ID : 264330534461  
Status : Answered  
Chosen Option : 3

Q.6 Improve the underlined part of the sentence. Choose 'No improvement' as an answer if the sentence is grammatically correct.

If you want to have two cats, a male and a female will usually gotten along.

- Ans
- 1. will usual get
  - 2. will usually get
  - 3. will usually got
  - 4. No improvement



Question Type : MCQ  
Question ID : 264330141181  
Option 1 ID : 264330553064  
Option 2 ID : 264330553063  
Option 3 ID : 264330553065  
Option 4 ID : 264330553066  
Status : Answered  
Chosen Option : 3

Q.7 Find the part of the given sentence that has an error in it. If there is no error, choose 'No error'.

A long hoped-for revival in private investment has not take place.

- Ans
- 1. not take place.
  - 2. No error
  - 3. in private investment has
  - 4. A long hoped-for revival

Question Type : MCQ  
Question ID : 264330135231  
Option 1 ID : 264330529849  
Option 2 ID : 264330529850  
Option 3 ID : 264330529848  
Option 4 ID : 264330529847  
Status : Answered  
Chosen Option : 1

Q.8 Fill in the blank with the most appropriate option.

Be present \_\_\_\_\_ the moment.

- Ans
- 1. to
  - 2. in
  - 3. upon
  - 4. on

Question Type : MCQ  
Question ID : 264330135747  
Option 1 ID : 264330531872  
Option 2 ID : 264330531874  
Option 3 ID : 264330531873  
Option 4 ID : 264330531871  
Status : Answered  
Chosen Option : 1

Q.9 Select the appropriate synonym for the underlined word.

The symbols were useless to him.

- Ans
- 1. worthless
  - 2. successful
  - 3. valuable
  - 4. reachable

Question Type : MCQ  
Question ID : 264330141178  
Option 1 ID : 264330553053  
Option 2 ID : 264330553051  
Option 3 ID : 264330553054  
Option 4 ID : 264330553052  
Status : Answered  
Chosen Option : 1

Q.10 Select the most appropriate option to fill in the blank.

Still, this is a Frank Black album, with its \_\_\_\_\_ references and abstruse lyrics.

- Ans
- 1. informal
  - 2. apparent
  - 3. obscure
  - 4. intelligent

Question Type : MCQ  
Question ID : 264330135826  
Option 1 ID : 264330532178  
Option 2 ID : 264330532177  
Option 3 ID : 264330532175  
Option 4 ID : 264330532176  
Status : Answered  
Chosen Option : 1

Q.11 Select the most appropriate meaning of the given idiom.

Hit the hay

- Ans
- 1. To take revenge
  - 2. To go to bed
  - 3. To buy or sell something
  - 4. A sarcastic response

Question Type : MCQ  
Question ID : 264330136129  
Option 1 ID : 264330533320  
Option 2 ID : 264330533322  
Option 3 ID : 264330533319  
Option 4 ID : 264330533321  
Status : Answered  
Chosen Option : 1



Q.12 Improve the underlined part of the sentence. Choose 'No improvement' as an answer if the sentence is grammatically correct.

In the summer, the bear eaten a lot of berries.

- Ans
- 1. have ate a lot
  - 2. No improvement
  - 3. eat a lot
  - 4. eats a lot

Question Type : MCQ  
Question ID : 264330135538  
Option 1 ID : 264330531057  
Option 2 ID : 264330531058  
Option 3 ID : 264330531056  
Option 4 ID : 264330531055  
Status : Answered  
Chosen Option : 4

Q.13 Select the correctly spelt word.

- Ans
- 1. Plagiarism
  - 2. Plagiarsm
  - 3. Plageriasm
  - 4. Plagerism



Question Type : MCQ  
Question ID : 264330136765  
Option 1 ID : 264330535764  
Option 2 ID : 264330535765  
Option 3 ID : 264330535766  
Option 4 ID : 264330535763  
Status : Answered  
Chosen Option : 4

Q.14 Select the most appropriate option to fill in the blank.

The event, promised to be a grand show, will see a display of grit, \_\_\_\_\_ and mettle.

- Ans
- 1. zenith
  - 2. umbrage
  - 3. zeal
  - 4. tyro

Question Type : MCQ  
Question ID : 264330135688  
Option 1 ID : 264330531645  
Option 2 ID : 264330531646  
Option 3 ID : 264330531644  
Option 4 ID : 264330531643  
Status : Answered  
Chosen Option : 1



Q.15 Select the appropriate synonym for the underlined word.

She couldn't really be irritated with him.

- Ans
- 1. obliged
  - 2. delighted
  - 3. pleased
  - 4. annoyed

Question Type : MCQ  
Question ID : 264330135246  
Option 1 ID : 264330529904  
Option 2 ID : 264330529903  
Option 3 ID : 264330529906  
Option 4 ID : 264330529905  
Status : Answered  
Chosen Option : 4

Q.16 Select the most appropriate antonym of the given word.

Complicate

- Ans
- 1. Dominate
  - 2. Healthy
  - 3. Multiply
  - 4. Enlighten

Question Type : MCQ  
Question ID : 264330136283  
Option 1 ID : 264330533913  
Option 2 ID : 264330533911  
Option 3 ID : 264330533914  
Option 4 ID : 264330533912  
Status : Answered  
Chosen Option : 2

**Q.17** Select the most appropriate meaning of the bracketed idiom in the given sentence.  
He bought (a baker's dozen) of biscuits.

- Ans**
- 1. Fifteen
  - 2. Ten
  - 3. Thirteen
  - 4. Twelve

Question Type : **MCQ**  
Question ID : **264330136764**  
Option 1 ID : **264330535762**  
Option 2 ID : **264330535761**  
Option 3 ID : **264330535759**  
Option 4 ID : **264330535760**  
Status : **Answered**  
Chosen Option : **4**

**Q.18** Select the most appropriate option to substitute the bracketed segment in the given sentence. If there is no need to substitute it, select 'no substitution required'.

(Hardly had I started mowing the lawn that) it started raining.

- Ans**
- 1. No sooner did I started mowing the lawn than
  - 2. No substitution required
  - 3. Hardly had I started mowing the lawn when
  - 4. Hardly did I start mowing the lawn than

Question Type : **MCQ**  
Question ID : **264330136487**  
Option 1 ID : **264330534695**  
Option 2 ID : **264330534698**  
Option 3 ID : **264330534696**  
Option 4 ID : **264330534697**  
Status : **Answered**  
Chosen Option : **3**

**Q.19** Identify the segment that contains a grammatical error. If there is no error, select 'No error'.

These include the nature/ documentaries, including/ The Blue Planet and Planet Earth.

- Ans**
- 1. No error
  - 2. The Blue Planet and Planet Earth.
  - 3. documentaries, including
  - 4. These include the nature

Question Type : **MCQ**  
Question ID : **264330136537**  
Option 1 ID : **264330534890**  
Option 2 ID : **264330534889**  
Option 3 ID : **264330534888**  
Option 4 ID : **264330534887**  
Status : **Answered**  
Chosen Option : **3**

Q.20 Select the appropriate antonym for the underlined word.

Our children need vital lessons in wealth management.

- Ans
- 1. healthy
  - 2. organic
  - 3. superfluous
  - 4. clever

Question Type : MCQ  
Question ID : 264330135656  
Option 1 ID : 264330531520  
Option 2 ID : 264330531519  
Option 3 ID : 264330531522  
Option 4 ID : 264330531521  
Status : Answered  
Chosen Option : 3

**Comprehension:**

In the following passage some words have been deleted. Fill in the blanks with the help of the alternatives given. Select the most appropriate option for each number.

Each went his way, the prince to (1) \_\_\_\_\_ the ways of the court, the brahmin to (2) \_\_\_\_\_ with Parasuram, the renowned scholar-warrior. He mastered (3) \_\_\_\_\_, married a virtuous woman, and (4) \_\_\_\_\_ a beautiful son. (5) \_\_\_\_\_ poor, he was proud of his learning.

SubQuestion No : 21

Q.21 Select the most appropriate option to fill in blank number 1.

- Ans
- 1. receive
  - 2. cram
  - 3. absorb
  - 4. learn

Question Type : MCQ  
Question ID : 264330136274  
Option 1 ID : 264330533878  
Option 2 ID : 264330533875  
Option 3 ID : 264330533877  
Option 4 ID : 264330533876  
Status : Answered  
Chosen Option : 4

**Comprehension:**

In the following passage some words have been deleted. Fill in the blanks with the help of the alternatives given. Select the most appropriate option for each number.

Each went his way, the prince to (1) \_\_\_\_\_ the ways of the court, the brahmin to (2) \_\_\_\_\_ with Parasuram, the renowned scholar-warrior. He mastered (3) \_\_\_\_\_, married a virtuous woman, and (4) \_\_\_\_\_ a beautiful son. (5) \_\_\_\_\_ poor, he was proud of his learning.

**SubQuestion No : 22**

**Q.22** Select the most appropriate option to fill in blank number 2.

- Ans**
- 1. study further
  - 2. study across
  - 3. study former
  - 4. study another

Question Type : MCQ  
Question ID : 264330136275  
Option 1 ID : 264330533879  
Option 2 ID : 264330533881  
Option 3 ID : 264330533880  
Option 4 ID : 264330533882  
Status : Answered  
Chosen Option : 1

**Comprehension:**

In the following passage some words have been deleted. Fill in the blanks with the help of the alternatives given. Select the most appropriate option for each number.

Each went his way, the prince to (1) \_\_\_\_\_ the ways of the court, the brahmin to (2) \_\_\_\_\_ with Parasuram, the renowned scholar-warrior. He mastered (3) \_\_\_\_\_, married a virtuous woman, and (4) \_\_\_\_\_ a beautiful son. (5) \_\_\_\_\_ poor, he was proud of his learning.

**SubQuestion No : 23**

**Q.23** Select the most appropriate option to fill in blank number 3.

- Ans**
- 1. the attitude of war
  - 2. the arts of war
  - 3. the art even craft of war
  - 4. the supplies of war

Question Type : MCQ  
Question ID : 264330136276  
Option 1 ID : 264330533885  
Option 2 ID : 264330533886  
Option 3 ID : 264330533883  
Option 4 ID : 264330533884  
Status : Answered  
Chosen Option : 2

**Comprehension:**

In the following passage some words have been deleted. Fill in the blanks with the help of the alternatives given. Select the most appropriate option for each number.

Each went his way, the prince to (1) \_\_\_\_\_ the ways of the court, the brahmin to (2) \_\_\_\_\_ with Parasuram, the renowned scholar-warrior. He mastered (3) \_\_\_\_\_, married a virtuous woman, and (4) \_\_\_\_\_ a beautiful son. (5) \_\_\_\_\_ poor, he was proud of his learning.

**SubQuestion No : 24**

**Q.24** Select the most appropriate option to fill in blank number 4.

- Ans
- 1. given
  - 2. had
  - 3. has
  - 4. have

Question Type : MCQ  
Question ID : 264330136277  
Option 1 ID : 264330533890  
Option 2 ID : 264330533887  
Option 3 ID : 264330533889  
Option 4 ID : 264330533888  
Status : Answered  
Chosen Option : 2

**Comprehension:**

In the following passage some words have been deleted. Fill in the blanks with the help of the alternatives given. Select the most appropriate option for each number.

Each went his way, the prince to (1) \_\_\_\_\_ the ways of the court, the brahmin to (2) \_\_\_\_\_ with Parasuram, the renowned scholar-warrior. He mastered (3) \_\_\_\_\_, married a virtuous woman, and (4) \_\_\_\_\_ a beautiful son. (5) \_\_\_\_\_ poor, he was proud of his learning.

**SubQuestion No : 25**

**Q.25** Select the most appropriate option to fill in blank number 5.

- Ans
- 1. Though
  - 2. So
  - 3. Because
  - 4. Even

Question Type : MCQ  
Question ID : 264330136278  
Option 1 ID : 264330533893  
Option 2 ID : 264330533894  
Option 3 ID : 264330533892  
Option 4 ID : 264330533891  
Status : Answered  
Chosen Option : 4