



SSC MTS **SHIFT – 1 (19-05-2023)**

- ★ **Latest Govt Job updates**
- ★ **Private Job updates**
- ★ **Free Mock tests available**

Visit - teachingninja.in

Multi Tasking Non Technical Staff and Havaladar CBIC and CBN Examination 2022

Roll Number	
Candidate Name	
Venue Name	
Exam Date	19/05/2023
Exam Time	9:00 AM - 10:30 AM
Subject	MTS Non Tech Havaladar CBIC and CBN Examination 2022

Section : Numerical and Mathematical Ability

Q.1 The product of two numbers is 38025 and their Highest Common Factor is 65. What is the Least Common Multiple of these numbers?

- Ans
- 1. 455
 - 2. 585
 - 3. 715
 - 4. 435

Question Type : MCQ

Question ID : 264330137338

Option 1 ID : 264330537980

Option 2 ID : 264330537981

Option 3 ID : 264330537979

Option 4 ID : 264330537982

Status : Answered

Chosen Option : 2

Q.2 The volume of a cube is 2.197 cm^3 . Find the side of the cube.

- Ans
- 1. 1.3 cm
 - 2. 1.4 cm
 - 3. 1.1 cm
 - 4. 1.2 cm

Question Type : MCQ

Question ID : 264330135149

Option 1 ID : 264330529532

Option 2 ID : 264330529531

Option 3 ID : 264330529533

Option 4 ID : 264330529534

Status : Answered

Chosen Option : 1

Q.3 The ratio of Mohit's and Sunil's present age is 4 : 5. Mohit is 7 years younger than Sunil. What will be the ratio of Mohit's age to Sunil's age after 7 years?

- Ans
- 1. 7 : 8
 - 2. 5 : 6
 - 3. 6 : 7
 - 4. 8 : 9

Question Type : MCQ
Question ID : 264330137330
Option 1 ID : 264330537948
Option 2 ID : 264330537950
Option 3 ID : 264330537947
Option 4 ID : 264330537949
Status : Answered
Chosen Option : 2

Q.4 Find the difference between compound interest (compounding annually) and simple interest on a sum of Rs. 56,000 for two years at 15% per annum.

- Ans
- 1. Rs. 1300
 - 2. Rs. 2410
 - 3. Rs. 1100
 - 4. Rs. 1260

Question Type : MCQ
Question ID : 264330133767
Option 1 ID : 264330524092
Option 2 ID : 264330524093
Option 3 ID : 264330524094
Option 4 ID : 264330524091
Status : Answered
Chosen Option : 4

Q.5 Shivam purchased two watches, first for Rs. 12000 and the second for Rs. 10000. He sold both the watches, first one at the profit of 10 percent and the second at a loss of 10 percent. What is the overall profit or loss?

- Ans
- 1. 2.25 percent profit
 - 2. 2.25 percent loss
 - 3. 0.909 percent profit
 - 4. 0.909 percent loss

Question Type : MCQ
Question ID : 264330137329
Option 1 ID : 264330537944
Option 2 ID : 264330537943
Option 3 ID : 264330537946
Option 4 ID : 264330537945
Status : Answered
Chosen Option : 3

Q.6 A alone can complete a work in 16 days and B alone can complete the same work in 96 days. In how many days both A and B together can complete the same work?

- Ans**
- 1. 88/13 days
 - 2. 96/7 days
 - 3. 96/13 days
 - 4. 88/14 days

Question Type : **MCQ**
Question ID : **264330135145**
Option 1 ID : **264330529517**
Option 2 ID : **264330529515**
Option 3 ID : **264330529516**
Option 4 ID : **264330529518**
Status : **Answered**
Chosen Option : 2

Q.7 In an office 70% of the staff is male, 70% of the males and 30% of the females voted for Anuj. Find the percentage of the people who voted for Anuj.

- Ans**
- 1. 56%
 - 2. 58%
 - 3. 52%
 - 4. 54%

Question Type : **MCQ**
Question ID : **264330133760**
Option 1 ID : **264330524063**
Option 2 ID : **264330524065**
Option 3 ID : **264330524066**
Option 4 ID : **264330524064**
Status : **Answered**
Chosen Option : 2

Q.8 What is the value of x, if $(\frac{1}{2})$ of 20 + $(\frac{1}{4})$ of 28 - $(\frac{1}{3})$ of x = 10?

- Ans**
- 1. 21
 - 2. 7
 - 3. 28
 - 4. 10

Question Type : **MCQ**
Question ID : **264330133628**
Option 1 ID : **264330523535**
Option 2 ID : **264330523536**
Option 3 ID : **264330523538**
Option 4 ID : **264330523537**
Status : **Answered**
Chosen Option : 1

Q.9 Two numbers are in the ratio 9 : 7. If their HCF is 6, find their LCM.

- Ans
- 1. 189
 - 2. 126
 - 3. 378
 - 4. 252

Question Type : MCQ
Question ID : 264330135414
Option 1 ID : 264330530565
Option 2 ID : 264330530563
Option 3 ID : 264330530564
Option 4 ID : 264330530566
Status : Answered
Chosen Option : 3

Q.10 On selling a car, a person gives a discount of 8 percent. If he gives a discount of 4 percent, then he receives Rs. 7200 more than in the case of 8 percent discount. What is the marked price of car?

- Ans
- 1. Rs. 150000
 - 2. Rs. 160000
 - 3. Rs. 180000
 - 4. Rs. 110000

Question Type : MCQ
Question ID : 264330137334
Option 1 ID : 264330537963
Option 2 ID : 264330537965
Option 3 ID : 264330537964
Option 4 ID : 264330537966
Status : Answered
Chosen Option : 3

Q.11 Two stations L and M are 720 km apart from each other. A train leaves from L to M and simultaneously another train leaves from M to L. Both trains meet after 24 hours. If the speed of the first train is 10 km/hr more than the second train, then what is the speed of the slower train?

- Ans
- 1. 20 km/hr
 - 2. 16 km/hr
 - 3. 14 km/hr
 - 4. 10 km/hr

Question Type : MCQ
Question ID : 264330137323
Option 1 ID : 264330537922
Option 2 ID : 264330537919
Option 3 ID : 264330537920
Option 4 ID : 264330537921
Status : Answered
Chosen Option : 4

Q.12 A bag contains Rs. 840 in the form of 2 rupee, 5 rupee and 10 rupee coins. The number of coins of 2 rupee, 5 rupee and 10 rupee are in the ratio of 5 : 7 : 6. What is the total number of coins in the bag?

- Ans
- 1. 158
 - 2. 132
 - 3. 102
 - 4. 144

Question Type : **MCQ**
Question ID : **264330137331**
Option 1 ID : **264330537952**
Option 2 ID : **264330537951**
Option 3 ID : **264330537953**
Option 4 ID : **264330537954**
Status : **Answered**
Chosen Option : **4**

Q.13 A and B together can finish a work in 7.2 hours. If B alone can finish the same work in 18 hours, then A alone can do it in:

- Ans
- 1. 18 hours
 - 2. 12 hours
 - 3. 10 hours
 - 4. 15 hours

Question Type : **MCQ**
Question ID : **264330138450**
Option 1 ID : **264330542407**
Option 2 ID : **264330542409**
Option 3 ID : **264330542408**
Option 4 ID : **264330542410**
Status : **Answered**
Chosen Option : **2**

Q.14 The following table shows the expenditure of a company (in lakh rupees) per annum over the given years. What is the difference between the total expenditure on transport and total expenditure on salary in the given years?

Year	Item of Expenditure			
	Fuel	Transport	Salary	Tax
2011	100	150	400	60
2012	92	140	380	64
2013	84	145	420	74
2014	102	155	450	78
2015	110	158	490	84

- Ans
- 1. Rs.1392 lakh
 - 2. Rs.896 lakh
 - 3. Rs.2140 lakh
 - 4. Rs.748 lakh

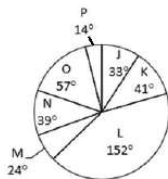
Question Type : **MCQ**
Question ID : **264330133642**
Option 1 ID : **264330523591**
Option 2 ID : **264330523592**
Option 3 ID : **264330523593**
Option 4 ID : **264330523594**
Status : **Answered**
Chosen Option : **1**

Q.15 If the volume of a cylinder is 5000 m^3 and its radius is 10 meter, then what is the approximate curved surface area of the cylinder? ($\pi = 3.14$)

- Ans
- 1. 954 m^2
 - 2. 1024 m^2
 - 3. 1000 m^2
 - 4. 968 m^2

Question Type : **MCQ**
Question ID : **264330138455**
Option 1 ID : **264330542430**
Option 2 ID : **264330542428**
Option 3 ID : **264330542427**
Option 4 ID : **264330542429**
Status : **Answered**
Chosen Option : **3**

Q.16 The pie chart given below shows the sales of 7 different companies. The total sales of all these 7 companies are 1080. The sale of a particular company is shown in terms of degree with respect to the total sales of all these 7 companies.



What is the ratio of the total sales of J, L, M and N to the total sales of K, N, O and P?

- Ans
- 1. 151 : 248
 - 2. 129 : 252
 - 3. 248 : 151
 - 4. 231 : 149

Question Type : **MCQ**
Question ID : **264330137342**
Option 1 ID : **264330537995**
Option 2 ID : **264330537998**
Option 3 ID : **264330537997**
Option 4 ID : **264330537996**
Status : **Answered**
Chosen Option : **3**

Q.17 The average weight of A, B and C is 40 kg. If the average weight of A and B is 35 kg and that of B and C is 31 kg, then what is the weight of B?

- Ans
- 1. 12 kg
 - 2. 50 kg
 - 3. 24 kg
 - 4. 36 kg

Question Type : **MCQ**
Question ID : **264330137324**
Option 1 ID : **264330537923**
Option 2 ID : **264330537924**
Option 3 ID : **264330537926**
Option 4 ID : **264330537925**
Status : **Answered**
Chosen Option : **1**

Q.18 What is the simple interest on Rs. 14400 for 12 months, if the rate of the interest be 11% per annum?

- Ans**
- 1. Rs. 1440
 - 2. Rs. 1680
 - 3. Rs. 1331
 - 4. Rs. 1584

Question Type : **MCQ**
Question ID : **264330138047**
Option 1 ID : **264330540796**
Option 2 ID : **264330540798**
Option 3 ID : **264330540797**
Option 4 ID : **264330540795**
Status : **Answered**
Chosen Option : **4**

Q.19 Ajay buys a scooter for Rs. 7560 and spends Rs. 540 on its repair. He sells it for Rs. 9000. What is his gain percent?

- Ans**
- 1. 8.33%
 - 2. 9.09%
 - 3. 11.11%
 - 4. 6.25%

Question Type : **MCQ**
Question ID : **264330138375**
Option 1 ID : **264330542110**
Option 2 ID : **264330542108**
Option 3 ID : **264330542107**
Option 4 ID : **264330542109**
Status : **Answered**
Chosen Option : **3**

Q.20 A train runs at an average speed of 85 km/hr. Find the time taken by the train to cover a distance of 1275 km.

- Ans**
- 1. 15 hours
 - 2. 14 hours
 - 3. 17 hours
 - 4. 12 hours

Question Type : **MCQ**
Question ID : **264330135069**
Option 1 ID : **264330529214**
Option 2 ID : **264330529212**
Option 3 ID : **264330529213**
Option 4 ID : **264330529211**
Status : **Answered**
Chosen Option : **1**

Section : Reasoning Ability and Problem Solving

Q.1 Eight players Anil, Kamal, Ram, Sanjay, Aakash, Vivek, Rahul and Ramu are sitting around a circular table facing towards the centre (not necessarily in the same order). Sanjay is second to the left of Anil. Rahul is fourth to the right of Anil. Ram is not the immediate neighbour of Rahul or Sanjay. Aakash is second to the right of Ram. Kamal is second to the right of Vivek. Who is third to the right of Ramu?

- Ans**
- 1. Vivek
 - 2. Sanjay
 - 3. Rahul
 - 4. Kamal

Question Type : **MCQ**
Question ID : **264330137373**
Option 1 ID : **264330538120**
Option 2 ID : **264330538121**
Option 3 ID : **264330538122**
Option 4 ID : **264330538119**
Status : **Answered**
Chosen Option : 1

Q.2 Which of the following numbers will replace the question mark (?) in the given series?
59, 63, 71, 83, 99, ?

- Ans**
- 1. 117
 - 2. 118
 - 3. 121
 - 4. 119

Question Type : **MCQ**
Question ID : **264330133477**
Option 1 ID : **264330522939**
Option 2 ID : **264330522942**
Option 3 ID : **264330522941**
Option 4 ID : **264330522940**
Status : **Answered**
Chosen Option : 4

Q.3 Marks of five girls Mansi, Kajal, Reetu, Tina and Riya are compared. Marks of Riya are less than Mansi but more than Tina. Marks of Reetu are less than Tina, Riya and Mansi. Marks of Kajal are less than Reetu. Marks of how many girls are less than the marks of Tina?

- Ans**
- 1. 2
 - 2. 1
 - 3. 4
 - 4. 3

Question Type : **MCQ**
Question ID : **264330137375**
Option 1 ID : **264330538130**
Option 2 ID : **264330538129**
Option 3 ID : **264330538128**
Option 4 ID : **264330538127**
Status : **Answered**
Chosen Option : 1

Q.4 Select the option figure in which the given figure (X) is embedded as its part (rotation is NOT allowed).



X

Ans

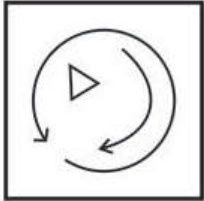
✗ 1.



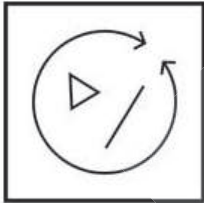
✓ 2.



✗ 3.



✗ 4.



Question Type : MCQ

Question ID : 264330133383

Option 1 ID : 264330522564

Option 2 ID : 264330522566

Option 3 ID : 264330522565

Option 4 ID : 264330522563

Status : Answered

Chosen Option : 2

Q.5 If A denotes 'addition', B denotes 'multiplication', C denotes 'subtraction', and D denotes 'division', then what will be the value of the following equation?
 $15 C 9 A 7 B 2 = ?$

Ans ✓ 1. 20

✗ 2. 15

✗ 3. 45

✗ 4. 36

Question Type : **MCQ**

Question ID : **264330137848**

Option 1 ID : **264330540000**

Option 2 ID : **264330540002**

Option 3 ID : **264330539999**

Option 4 ID : **264330540001**


Status : **Answered**

Chosen Option : 1

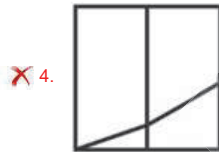
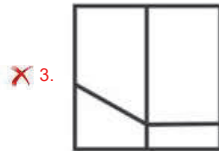
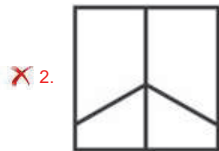
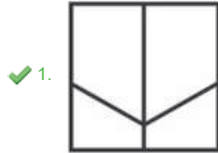


Teachingninja.in

Q.6 Which answer figure will complete the pattern in the question figure?



Ans



Teachingninja.in

Question Type : MCQ

Question ID : 264330137386

Option 1 ID : 264330538171

Option 2 ID : 264330538173

Option 3 ID : 264330538174

Option 4 ID : 264330538172

Status : Answered

Chosen Option : 1

Q.7 Select the option in which the numbers shares the same relationship in set as that shared by the numbers in the given set.
(NOTE: Operations should be performed on the whole numbers, without breaking down the numbers into its constituent digits. E.g.13 – Operations on 13 such as adding /subtracting /multiplying etc. to 13 can be performed. Breaking down 13 into 1 and 3 and then performing mathematical operations on 1 and 3 is not allowed)

(15, 25, 35)

(45, 55, 65)

Ans ✓ 1. (55, 65, 75)

✗ 2. (45, 55, 70)

✗ 3. (55, 75, 85)

✗ 4. (55, 60, 70)

Question Type : **MCQ**

Question ID : **264330137381**

Option 1 ID : **264330538154**

Option 2 ID : **264330538153**

Option 3 ID : **264330538152**

Option 4 ID : **264330538151**

Status : **Answered**

Chosen Option : **1**

Q.8 In the following question, select the missing number of the given series.

36, 73, 147, 295, 591, ?

Ans ✗ 1. 1163

✗ 2. 1188

✓ 3. 1183

✗ 4. 1197

Question Type : **MCQ**

Question ID : **264330137379**

Option 1 ID : **264330538146**

Option 2 ID : **264330538144**

Option 3 ID : **264330538143**

Option 4 ID : **264330538145**

Status : **Answered**

Chosen Option : **3**



Q.9 In the following question below are given some statements followed by some conclusions based on those statements. Taking the given statements to be true even if they seem to be at variance from commonly known facts. Read all the conclusions and then decide which of the given conclusion logically follows the given statements.

Statements:

I. Some M are N.

II. No J is N.

Conclusion:

I. No N is J.

II. Some N are M.

III. All J are M.

- Ans**
- 1. Both conclusions I and III follows
 - 2. Only conclusion II follows
 - 3. Both conclusions I and II follows
 - 4. Both conclusions II and III follows

Question Type : MCQ
Question ID : 264330137377
Option 1 ID : 264330538138
Option 2 ID : 264330538135
Option 3 ID : 264330538137
Option 4 ID : 264330538136
Status : Answered
Chosen Option : 3

Q.10 In a certain code language, 'SOWHF' is written as 'PLTEC'. How will 'TQMGD' be written in that language?

- Ans**
- 1. QNJDE
 - 2. QNDJD
 - 3. QNJDA
 - 4. QJNDD

Question Type : MCQ
Question ID : 264330133531
Option 1 ID : 264330523155
Option 2 ID : 264330523157
Option 3 ID : 264330523156
Option 4 ID : 264330523158
Status : Answered
Chosen Option : 3

Q.11 Select the option that is related to the fifth term in the same way as the second term is related to the first term and fourth term is related to third term.

NP3 : PS27 :: AQ4 : CT64 :: FE5 : ?

- Ans**
- 1. HH125
 - 2. HI125
 - 3. II125
 - 4. IH125

Question Type : **MCQ**
Question ID : **264330137367**
Option 1 ID : **264330538097**
Option 2 ID : **264330538098**
Option 3 ID : **264330538095**
Option 4 ID : **264330538096**
Status : **Answered**
Chosen Option : **1**

Q.12 Eight boys Anil, Kamal, Ram, Sanjay, Aakash, Vivek, Rahul and Ramu are sitting around a circular table facing opposite to the centre (not necessarily in the same order). Ram is the immediate neighbour of both Ramu and Anil. Sanjay is third to the right of Ramu. Ramu is second to the right of Anil. Ram is second to the left of Kamal. Vivek is not the immediate neighbour of Anil. Aakash is second to the right of Ramu. Who is second to the right of Vivek?

- Ans**
- 1. Anil
 - 2. Rahul
 - 3. Sanjay
 - 4. Aakash

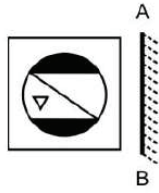
Question Type : **MCQ**
Question ID : **264330137374**
Option 1 ID : **264330538126**
Option 2 ID : **264330538124**
Option 3 ID : **264330538123**
Option 4 ID : **264330538125**
Status : **Answered**
Chosen Option : **1**

Q.13 In a certain code language, 'HED' is coded as '160', 'FBG' is coded as '84'. What is the code for 'BEJ' in that code language?

- Ans**
- 1. 60
 - 2. 100
 - 3. 80
 - 4. 120

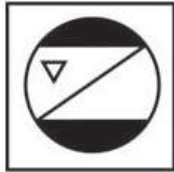
Question Type : **MCQ**
Question ID : **264330137520**
Option 1 ID : **264330538688**
Option 2 ID : **264330538690**
Option 3 ID : **264330538689**
Option 4 ID : **264330538687**
Status : **Answered**
Chosen Option : **2**

Q.14 Select the correct mirror image of the given figure when the mirror is placed at AB as shown below.



Ans

✗ 1.



✗ 2.



✓ 3.



✗ 4.



Teachingninja.in

Question Type : MCQ

Question ID : 264330133384

Option 1 ID : 264330522567

Option 2 ID : 264330522570

Option 3 ID : 264330522569

Option 4 ID : 264330522568

Status : Answered

Chosen Option : 1

Q.15 In a certain code language, 'AGEING' is written as '1H23OH'. How will 'UTOPIA' be written in that language?

- Ans
- 1. 5U4R31
 - 2. 54UQ31
 - 3. 5U4Q31
 - 4. 5S4R31

Question Type : MCQ
Question ID : 264330134937
Option 1 ID : 264330528685
Option 2 ID : 264330528684
Option 3 ID : 264330528683
Option 4 ID : 264330528686
Status : Answered
Chosen Option : 3

Q.16 In the following question below are given some statements followed by some conclusions based on those statements. Taking the given statements to be true even if they seem to be at variance from commonly known facts. Read all the conclusions and then decide which of the given conclusion logically follows the given statements.

Statements:

I. All S are F.

II. Some S are H.

Conclusion:

I. Some F are not S.

II. Some H are S.

- Ans
- 1. Only conclusion I follows
 - 2. Neither conclusion follows
 - 3. Only conclusion II follows
 - 4. Both conclusions I and II follows

Question Type : MCQ
Question ID : 264330137376
Option 1 ID : 264330538131
Option 2 ID : 264330538134
Option 3 ID : 264330538132
Option 4 ID : 264330538133
Status : Answered
Chosen Option : 3

Q.17 Select the option that is related to the fifth term in the same way as the second term is related to the first term and fourth term is related to third term.

AF14 : FO28 :: RH13 : WQ27 :: LC26 : ?

- Ans
- 1. QL40
 - 2. QM40
 - 3. QL54
 - 4. QM54

Question Type : MCQ
Question ID : 264330137368
Option 1 ID : 264330538100
Option 2 ID : 264330538101
Option 3 ID : 264330538102
Option 4 ID : 264330538099
Status : Answered
Chosen Option : 3

Q.18 After interchanging the given two signs, what will be the value of the given equation?

$$\times \text{ and } + ; 68 \times 17 + 34 + 2 - 18$$

- Ans
- 1. 54
 - 2. 60
 - 3. 46
 - 4. 35

Question Type : MCQ
Question ID : 264330137382
Option 1 ID : 264330538155
Option 2 ID : 264330538156
Option 3 ID : 264330538157
Option 4 ID : 264330538158
Status : Answered
Chosen Option : 1

Q.19 A series is given with one term missing. Select the correct alternative from the given ones that will complete the series.

RAQ, TCS, VEU, ?, ZIY

- Ans
- 1. XHW
 - 2. XHX
 - 3. XGW
 - 4. XGX

Question Type : MCQ
Question ID : 264330137365
Option 1 ID : 264330538088
Option 2 ID : 264330538090
Option 3 ID : 264330538087
Option 4 ID : 264330538089
Status : Answered
Chosen Option : 4

Q.20 Select the option that is related to the third number in the same way as the second number is related to the first number.

434 : 33 :: 125 : ?

- Ans
- 1. 30
 - 2. 27
 - 3. 21
 - 4. 24

Question Type : MCQ
Question ID : 264330133479
Option 1 ID : 264330522950
Option 2 ID : 264330522949
Option 3 ID : 264330522947
Option 4 ID : 264330522948
Status : Answered
Chosen Option : 4

Section : General Awareness

Q.1 The festival of Makar Sankranti is devoted to which of the following gods?

Ans 1. Surya

2. Vishnu

3. Indra

4. Shiva

Question Type : MCQ

Question ID : 264330133857

Option 1 ID : 264330524454

Option 2 ID : 264330524452

Option 3 ID : 264330524453

Option 4 ID : 264330524451

Status : Not Answered

Chosen Option : --

Q.2 Which of the following is a tertiary consumer?

Ans 1. Grass

2. Snake

3. Frog

4. Grasshopper

Question Type : MCQ

Question ID : 264330133938

Option 1 ID : 264330524775

Option 2 ID : 264330524778

Option 3 ID : 264330524777

Option 4 ID : 264330524776

Status : Answered

Chosen Option : 2

Q.3 Who among the following is widely credited for introducing new forms of music, theatrical performance, language and the 'Sattriya' Dance?

Ans 1. Padma Subrahmanyam

2. Srimanta Sankardev

3. Uday Shankar

4. Shovana Narayan

Question Type : MCQ

Question ID : 264330134025

Option 1 ID : 264330525125

Option 2 ID : 264330525123

Option 3 ID : 264330525126

Option 4 ID : 264330525124

Status : Not Answered

Chosen Option : --

Q.4 Which of the following period is referred as the period of population explosion in India?

- Ans
- 1. 1951 – 1981
 - 2. Post 1981 till present
 - 3. 1901 – 1921
 - 4. 1921 – 1951

Question Type : **MCQ**
Question ID : **264330138265**
Option 1 ID : **264330541669**
Option 2 ID : **264330541670**
Option 3 ID : **264330541667**
Option 4 ID : **264330541668**
Status : **Not Answered**
Chosen Option : --

Q.5 Which country shares a sea-line border with India?

- Ans
- 1. Maldives
 - 2. Philippines
 - 3. Fiji
 - 4. Pakistan

Question Type : **MCQ**
Question ID : **264330133660**
Option 1 ID : **264330523666**
Option 2 ID : **264330523665**
Option 3 ID : **264330523663**
Option 4 ID : **264330523664**
Status : **Answered**
Chosen Option : 1

Q.6 Which of the following ancient site is NOT situated in India?

- Ans
- 1. Hunsgi
 - 2. Hallur
 - 3. Inamgaon
 - 4. Mehrgarh

Question Type : **MCQ**
Question ID : **264330133877**
Option 1 ID : **264330524534**
Option 2 ID : **264330524532**
Option 3 ID : **264330524531**
Option 4 ID : **264330524533**
Status : **Answered**
Chosen Option : 4

Q.7 The objective of Simon Commission was to _____.

- Ans
- 1. decide India's Political future
 - 2. decide India's Religious future
 - 3. decide India's Educational future
 - 4. decide India's economical future

Question Type : MCQ
Question ID : 264330133880
Option 1 ID : 264330524544
Option 2 ID : 264330524546
Option 3 ID : 264330524545
Option 4 ID : 264330524543
Status : Answered
Chosen Option : 1

Q.8 Which act of British Parliament was also known as East India Company Act 1793?

- Ans
- 1. The Government of India Act, 1793
 - 2. The Charter Act, 1793
 - 3. The Regulating Act, 1793
 - 4. The Indian Councils Act, 1793

Question Type : MCQ
Question ID : 264330137959
Option 1 ID : 264330540445
Option 2 ID : 264330540443
Option 3 ID : 264330540446
Option 4 ID : 264330540444
Status : Answered
Chosen Option : 3

Q.9 The largest ocean on Earth is the _____.

- Ans
- 1. Pacific Ocean
 - 2. Atlantic Ocean
 - 3. Arctic Ocean
 - 4. Indian Ocean

Question Type : MCQ
Question ID : 264330133939
Option 1 ID : 264330524780
Option 2 ID : 264330524779
Option 3 ID : 264330524781
Option 4 ID : 264330524782
Status : Answered
Chosen Option : 1

Q.10 The Financial Action Task Force (FATF) in October 2022 has excluded which country from the grey list of global watchdog on terror financing and money laundering?

- Ans
- 1. Bangladesh
 - 2. North Korea
 - 3. China
 - 4. Pakistan

Question Type : MCQ
Question ID : 264330137396
Option 1 ID : 264330538212
Option 2 ID : 264330538211
Option 3 ID : 264330538214
Option 4 ID : 264330538213
Status : Answered
Chosen Option : 4

Q.11 Which Bill passed in the Lok Sabha in 2022 is for unification of three Municipal Corporations in one of the States/Union Territories of India?

- Ans
- 1. Karnataka Municipal Corporation (Amendment) Bill
 - 2. Chandigarh Municipal Corporation (Amendment) Bill
 - 3. Puducherry Municipal Corporation (Amendment) Bill
 - 4. Delhi Municipal Corporation (Amendment) Bill

Question Type : MCQ
Question ID : 264330137945
Option 1 ID : 264330540389
Option 2 ID : 264330540390
Option 3 ID : 264330540388
Option 4 ID : 264330540387
Status : Not Answered
Chosen Option : --

Q.12 What does it mean when an object has a positive charge?

- Ans
- 1. It has more electrons than protons
 - 2. It has more protons than electrons
 - 3. It has more neutrons than electrons
 - 4. It has more neutrons than protons

Question Type : MCQ
Question ID : 264330133936
Option 1 ID : 264330524767
Option 2 ID : 264330524769
Option 3 ID : 264330524770
Option 4 ID : 264330524768
Status : Answered
Chosen Option : 2

Q.13 The Mormugao Port is located in which of the following states?

- Ans
- 1. Tamil Nadu
 - 2. West Bengal
 - 3. Maharashtra
 - 4. Goa

Question Type : MCQ
Question ID : 264330134015
Option 1 ID : 264330525083
Option 2 ID : 264330525086
Option 3 ID : 264330525084
Option 4 ID : 264330525085
Status : Answered
Chosen Option : 4

Q.14 Which among the following is a public sector bank?

- Ans
- 1. Axis Bank
 - 2. ICICI Bank
 - 3. Bank of Baroda
 - 4. Yes Bank

Question Type : MCQ
Question ID : 264330134030
Option 1 ID : 264330525144
Option 2 ID : 264330525145
Option 3 ID : 264330525143
Option 4 ID : 264330525146
Status : Answered
Chosen Option : 3

Q.15 Predominant theme of Manipuri dance is _____.

- Ans
- 1. devotion
 - 2. warfare
 - 3. patriotism
 - 4. bravery

Question Type : MCQ
Question ID : 264330137387
Option 1 ID : 264330538177
Option 2 ID : 264330538176
Option 3 ID : 264330538175
Option 4 ID : 264330538178
Status : Answered
Chosen Option : 3

Q.16 Asad Ali Khan was an Indian musician who played _____.

- Ans
- 1. Flute
 - 2. Sitar
 - 3. Santoor
 - 4. Rudra Veena

Question Type : MCQ
Question ID : 264330137393
Option 1 ID : 264330538200
Option 2 ID : 264330538201
Option 3 ID : 264330538202
Option 4 ID : 264330538199
Status : Answered
Chosen Option : 4

Q.17 Who among the following is the author of "Flood of Fire"?

- Ans
- 1. Arunima Sinha
 - 2. Tarun Khanna
 - 3. Amitav Ghosh
 - 4. Twinkle Khanna

Question Type : MCQ
Question ID : 264330134023
Option 1 ID : 264330525116
Option 2 ID : 264330525118
Option 3 ID : 264330525115
Option 4 ID : 264330525117
Status : Not Answered
Chosen Option : --

Q.18 Insufficient exposure to sunlight causes deficiency of which vitamin?

- Ans
- 1. Vitamin E and K
 - 2. Vitamin A
 - 3. Vitamin D
 - 4. Vitamin C

Question Type : MCQ
Question ID : 264330137400
Option 1 ID : 264330538229
Option 2 ID : 264330538227
Option 3 ID : 264330538230
Option 4 ID : 264330538228
Status : Answered
Chosen Option : 3

Q.19 Article 40 of the Indian constitution is related with _____.

- Ans
- 1. Protection of life
 - 2. Organisation of village panchayats
 - 3. Uniform civil code for the citizens
 - 4. Freedom to manage religious affairs

Question Type : MCQ
Question ID : 264330137399
Option 1 ID : 264330538225
Option 2 ID : 264330538223
Option 3 ID : 264330538224
Option 4 ID : 264330538226
Status : Answered
Chosen Option : 2

Q.20 Around 2000 years ago _____ became the second capital of the Kushanas.

- Ans
- 1. Patliputra
 - 2. Madurai
 - 3. Vaishali
 - 4. Mathura

Question Type : MCQ
Question ID : 264330133945
Option 1 ID : 264330524806
Option 2 ID : 264330524804
Option 3 ID : 264330524805
Option 4 ID : 264330524803
Status : Answered
Chosen Option : 1

Q.21 In terms of area, India is the _____ largest country in the world.

- Ans
- 1. seventh
 - 2. third
 - 3. ninth
 - 4. sixth

Question Type : MCQ
Question ID : 264330137405
Option 1 ID : 264330538249
Option 2 ID : 264330538247
Option 3 ID : 264330538248
Option 4 ID : 264330538250
Status : Answered
Chosen Option : 1

Q.22 Who is the only Cricket Player to win "Major Dhyan Chand Khel Ratna Award 2021"?

- Ans
- 1. Mithali Raj
 - 2. Virat Kohli
 - 3. Rohit Sharma
 - 4. Harmanpreet Kaur

Question Type : MCQ
Question ID : 264330137390
Option 1 ID : 264330538189
Option 2 ID : 264330538188
Option 3 ID : 264330538187
Option 4 ID : 264330538190
Status : Not Answered
Chosen Option : --

Q.23 Who among the following is/was a famous track and field sprinter of India?

- Ans
- 1. Major Dhyan Chand
 - 2. T. C. Yohannan
 - 3. Mahesh Bhupathi
 - 4. Milkha Singh

Question Type : MCQ
Question ID : 264330133954
Option 1 ID : 264330524841
Option 2 ID : 264330524842
Option 3 ID : 264330524840
Option 4 ID : 264330524839
Status : Answered
Chosen Option : 4

Q.24 _____ take oath as the 50th Chief Justice of India on November 9, 2022.

- Ans
- 1. Justice D.Y. Chandrachud
 - 2. Justice Ranjan Gogoi
 - 3. Justice U.U. Lalit
 - 4. Justice N.V. Ramana

Question Type : MCQ
Question ID : 264330137395
Option 1 ID : 264330538207
Option 2 ID : 264330538210
Option 3 ID : 264330538208
Option 4 ID : 264330538209
Status : Answered
Chosen Option : 1

Q.25 In Buddhist architecture, which among the following are meditation cells and living quarters for the monks?

- Ans
- 1. Viharas
 - 2. Chaitya Grihas
 - 3. Pietra dura
 - 4. Stupas

Question Type : MCQ
Question ID : 264330137948
Option 1 ID : 264330540401
Option 2 ID : 264330540399
Option 3 ID : 264330540402
Option 4 ID : 264330540400
Status : Answered
Chosen Option : 4

Section : English Language and Comprehension

Q.1 Choose the sentence with no spelling error.

- Ans
- 1. Take it up, and write your own story.
 - 2. Take it up, and writte your on story.
 - 3. Take it up, and write your own story.
 - 4. Take it up, and write your own story.

Question Type : MCQ
Question ID : 264330134343
Option 1 ID : 264330526362
Option 2 ID : 264330526361
Option 3 ID : 264330526359
Option 4 ID : 264330526360
Status : Answered
Chosen Option : 3

Q.2 In the following question, out of the given four alternatives, select the alternative which best expresses the meaning of the Idiom/Phrase.
Pros and cons

- Ans
- 1. Undecided on a topic
 - 2. Doubtful
 - 3. To advance in harmony
 - 4. Arguments for and against something

Question Type : MCQ
Question ID : 264330134418
Option 1 ID : 264330526648
Option 2 ID : 264330526647
Option 3 ID : 264330526649
Option 4 ID : 264330526650
Status : Answered
Chosen Option : 4

Q.3 Select the word segment that substitutes (replaces) the bracketed word segment correctly and completes the sentence meaningfully. Select the option 'no correction required' if the sentence is correct as given.

I received word that you (were attempting) to contact me.

Ans ✓ 1. No correction required

✗ 2. were strike

✗ 3. has attempting

✗ 4. was attempting

Question Type : MCQ

Question ID : 264330136616

Option 1 ID : 264330535194

Option 2 ID : 264330535192

Option 3 ID : 264330535193

Option 4 ID : 264330535191

Status : Answered

Chosen Option : 1

Q.4 Select the most appropriate word for the given group of words.

The action or offence of speaking sacrilegiously about God or sacred things; profane talk

Ans ✓ 1. Blasphemy

✗ 2. Extempore

✗ 3. Ephemeral

✗ 4. Crusade

Question Type : MCQ

Question ID : 264330135808

Option 1 ID : 264330532103

Option 2 ID : 264330532105

Option 3 ID : 264330532106

Option 4 ID : 264330532104

Status : Answered

Chosen Option : 1

Q.5 Select the most appropriate option to fill in the blank.

If someone does not stop the political _____ in that country, a civil war is likely to break out soon.

Ans ✓ 1. rhetoric

✗ 2. anaphoric

✗ 3. aleatoric

✗ 4. historic

Question Type : MCQ

Question ID : 264330135799

Option 1 ID : 264330532074

Option 2 ID : 264330532071

Option 3 ID : 264330532073

Option 4 ID : 264330532072

Status : Answered

Chosen Option : 1

Q.6 Choose the word that can substitute the given group of words.
The science of foretelling events by mapping stars

- Ans
- 1. Astrophysics
 - 2. Astronomy
 - 3. Astrology
 - 4. Astrobiology

Question Type : MCQ
Question ID : 264330134412
Option 1 ID : 264330526625
Option 2 ID : 264330526623
Option 3 ID : 264330526624
Option 4 ID : 264330526626
Status : Answered
Chosen Option : 2

Q.7 Improve the underlined part of the sentence. Choose 'No improvement' as an answer if the sentence is grammatically correct.

The candidate win the voting by a narrow margin.

- Ans
- 1. wins the voted
 - 2. won the vote
 - 3. win a vote
 - 4. No improvement

Question Type : MCQ
Question ID : 264330134723
Option 1 ID : 264330527849
Option 2 ID : 264330527848
Option 3 ID : 264330527847
Option 4 ID : 264330527850
Status : Answered
Chosen Option : 2

Q.8 Select the correctly spelt word.

- Ans
- 1. Minusulle
 - 2. Minsculee
 - 3. Manscule
 - 4. Minuscule

Question Type : MCQ
Question ID : 264330135815
Option 1 ID : 264330532134
Option 2 ID : 264330532133
Option 3 ID : 264330532132
Option 4 ID : 264330532131
Status : Not Answered
Chosen Option : --

Q.9 Select the most appropriate option to substitute the bracketed segment in the given sentence. If there is no need to substitute it, select 'no substitution required'.
(Plots to dispose him came) to nothing.

- Ans**
- 1. No substitution required
 - 2. Plots to dispose off him comes
 - 3. Plots to dispose of him came
 - 4. Plots which dispose him came

Question Type : **MCQ**
Question ID : **264330136036**
Option 1 ID : **264330532966**
Option 2 ID : **264330532964**
Option 3 ID : **264330532963**
Option 4 ID : **264330532965**
Status : **Answered**
Chosen Option : **3**

Q.10 Select the most appropriate synonym of the given word.

Contrite

- Ans**
- 1. persistent
 - 2. adverting
 - 3. renitent
 - 4. remorseful

Question Type : **MCQ**
Question ID : **264330135809**
Option 1 ID : **264330532107**
Option 2 ID : **264330532108**
Option 3 ID : **264330532109**
Option 4 ID : **264330532110**
Status : **Not Answered**
Chosen Option : **--**

Q.11 A sentence has been given with a blank to be filled with an appropriate option. Choose the correct alternative.

I was always greeted _____ wherever I went in the country.

- Ans**
- 1. warm
 - 2. warmly
 - 3. warming
 - 4. warmth

Question Type : **MCQ**
Question ID : **264330134327**
Option 1 ID : **264330526300**
Option 2 ID : **264330526301**
Option 3 ID : **264330526302**
Option 4 ID : **264330526299**
Status : **Answered**
Chosen Option : **2**

Q.12 Select the most appropriate option to fill in the blank.

The technical vocabulary and foreign words make this text a little more _____.

- Ans
- 1. difficult
 - 2. futile
 - 3. stagnant
 - 4. feasible

Question Type : MCQ
Question ID : 264330134344
Option 1 ID : 264330526364
Option 2 ID : 264330526363
Option 3 ID : 264330526365
Option 4 ID : 264330526366
Status : Answered
Chosen Option : 1

Q.13 Select the most appropriate antonym of the given word.

Tangle

- Ans
- 1. Jam
 - 2. Labyrinth
 - 3. Simple
 - 4. Coil

Question Type : MCQ
Question ID : 264330136402
Option 1 ID : 264330534374
Option 2 ID : 264330534371
Option 3 ID : 264330534373
Option 4 ID : 264330534372
Status : Not Answered
Chosen Option : --

Q.14 Fill in the blank with the most appropriate choice.

Hard to believe that these people can justify and _____ such sickening behaviour!

- Ans
- 1. rationalize
 - 2. essentialize
 - 3. scandalize
 - 4. tantalize

Question Type : MCQ
Question ID : 264330135818
Option 1 ID : 264330532146
Option 2 ID : 264330532145
Option 3 ID : 264330532144
Option 4 ID : 264330532143
Status : Answered
Chosen Option : 1

Q.15 Select the most appropriate antonym to substitute the (bracketed) word in the given sentence.
The negotiations have gotten nowhere, and I see no reason to (continue) with this pointless exercise.

- Ans**
- 1. halt
 - 2. vivacious
 - 3. coagulate
 - 4. agitate

Question Type : **MCQ**
Question ID : **264330135812**
Option 1 ID : **264330532121**
Option 2 ID : **264330532122**
Option 3 ID : **264330532120**
Option 4 ID : **264330532119**
Status : **Answered**
Chosen Option : 1

Q.16 Select the most appropriate meaning of the bracketed idiom in the given sentence.
Did you know David went to school with my brother? It's (a small world), isn't it?

- Ans**
- 1. Overwhelmed by what is happening in the moment
 - 2. Meeting someone not expected to be at a certain place
 - 3. A two-person conflict where both people are at fault
 - 4. An aggressive and bold confrontation

Question Type : **MCQ**
Question ID : **264330135814**
Option 1 ID : **264330532130**
Option 2 ID : **264330532127**
Option 3 ID : **264330532128**
Option 4 ID : **264330532129**
Status : **Answered**
Chosen Option : 1

Q.17 Find the part of the given sentence that has an error in it. If there is no error, choose 'No error'.
Fires in California is sounding alarm bells that cannot be ignored.

- Ans**
- 1. sounding alarm bells
 - 2. that cannot be ignored.
 - 3. Fires in California is
 - 4. No error

Question Type : **MCQ**
Question ID : **264330134823**
Option 1 ID : **264330528232**
Option 2 ID : **264330528233**
Option 3 ID : **264330528231**
Option 4 ID : **264330528234**
Status : **Answered**
Chosen Option : 3

Q.18 Choose the word that means the same as the given word.
Appropriate

- Ans 1. Polarize
 2. Competent
 3. Informal
 4. Gentle

Question Type : **MCQ**
Question ID : **264330134363**
Option 1 ID : **264330526438**
Option 2 ID : **264330526437**
Option 3 ID : **264330526436**
Option 4 ID : **264330526435**
Status : **Not Answered**
Chosen Option : --

Q.19 Identify the segment that contains a grammatical error. If there is no error, select 'No error'.
He consolidated control over all the / provinces of the Great Britain and some / of northern Gaul while Maximian dealt with other uprisings.

- Ans 1.
of northern Gaul while Maximian dealt with other uprisings.
 2. No Error
 3. He consolidated control over all the
 4. provinces of the Great Britain and some

Question Type : **MCQ**
Question ID : **264330135795**
Option 1 ID : **264330532057**
Option 2 ID : **264330532058**
Option 3 ID : **264330532055**
Option 4 ID : **264330532056**
Status : **Answered**
Chosen Option : 1

Q.20 Identify the segment that contains a grammatical error. If there is no error, select 'No error'.

Police could not catch / the gunman as he ran off / so very fastly into the woods.

- Ans 1. the gunman as he ran off
 2. Police could not catch
 3. No error
 4. so very fastly into the woods.

Question Type : **MCQ**
Question ID : **264330136613**
Option 1 ID : **264330535180**
Option 2 ID : **264330535179**
Option 3 ID : **264330535182**
Option 4 ID : **264330535181**
Status : **Answered**
Chosen Option : 4

Comprehension:

In the following passage some words have been deleted. Fill in the blanks with the help of the alternatives given. Select the most appropriate option for each number.

Were the stories we told each (1) _____ true? Who knows? At the best of (2) _____, a story is a slippery thing. (3) _____ no one had told us this (4) _____ one, though it was the tale we most (5) _____ to know.

SubQuestion No : 21

Q.21 Select the most appropriate option to fill in blank number 1.

- Ans
- 1. of us
 - 2. one other
 - 3. another
 - 4. other

Question Type : MCQ
Question ID : 264330136393
Option 1 ID : 264330534335
Option 2 ID : 264330534338
Option 3 ID : 264330534337
Option 4 ID : 264330534336
Status : Answered
Chosen Option : 4

Comprehension:

In the following passage some words have been deleted. Fill in the blanks with the help of the alternatives given. Select the most appropriate option for each number.

Were the stories we told each (1) _____ true? Who knows? At the best of (2) _____, a story is a slippery thing. (3) _____ no one had told us this (4) _____ one, though it was the tale we most (5) _____ to know.

SubQuestion No : 22

Q.22 Select the most appropriate option to fill in blank number 2.

- Ans
- 1. time
 - 2. schedule
 - 3. clock
 - 4. times

Question Type : MCQ
Question ID : 264330136394
Option 1 ID : 264330534339
Option 2 ID : 264330534340
Option 3 ID : 264330534341
Option 4 ID : 264330534342
Status : Answered
Chosen Option : 1

Comprehension:

In the following passage some words have been deleted. Fill in the blanks with the help of the alternatives given. Select the most appropriate option for each number.

Were the stories we told each (1) _____ true? Who knows? At the best of (2) _____, a story is a slippery thing. (3) _____ no one had told us this (4) _____ one, though it was the tale we most (5) _____ to know.

SubQuestion No : 23

Q.23 Select the most appropriate option to fill in blank number 3.

- Ans**
- 1. May by
 - 2. Could be
 - 3. Certainly
 - 4. Might be

Question Type : **MCQ**
Question ID : **264330136395**
Option 1 ID : **264330534344**
Option 2 ID : **264330534345**
Option 3 ID : **264330534343**
Option 4 ID : **264330534346**
Status : **Answered**
Chosen Option : **3**

Comprehension:

In the following passage some words have been deleted. Fill in the blanks with the help of the alternatives given. Select the most appropriate option for each number.

Were the stories we told each (1) _____ true? Who knows? At the best of (2) _____, a story is a slippery thing. (3) _____ no one had told us this (4) _____ one, though it was the tale we most (5) _____ to know.

SubQuestion No : 24

Q.24 Select the most appropriate option to fill in blank number 4.

- Ans**
- 1. in particular
 - 2. particular
 - 3. especial
 - 4. accurate

Question Type : **MCQ**
Question ID : **264330136396**
Option 1 ID : **264330534347**
Option 2 ID : **264330534349**
Option 3 ID : **264330534350**
Option 4 ID : **264330534348**
Status : **Answered**
Chosen Option : **2**

Comprehension:

In the following passage some words have been deleted. Fill in the blanks with the help of the alternatives given. Select the most appropriate option for each number.

Were the stories we told each (1) _____ true? Who knows? At the best of (2) _____, a story is a slippery thing. (3) _____ no one had told us this (4) _____ one, though it was the tale we most (5) _____ to know.

SubQuestion No : 25

Q.25 Select the most appropriate option to fill in blank number 5.

- Ans**
- 1. concern
 - 2. needed
 - 3. had
 - 4. require

Question Type : **MCQ**

Question ID : **264330136397**

Option 1 ID : **264330534354**

Option 2 ID : **264330534353**

Option 3 ID : **264330534351**

Option 4 ID : **264330534352**

Status : **Answered**

Chosen Option : **2**



Teachingninja.in