



SSC MTS **SHIFT – 1 (20-06-2023)**

- ★ **Latest Govt Job updates**
- ★ **Private Job updates**
- ★ **Free Mock tests available**

**Visit - [teachingninja.in](https://teachingninja.in)**

## Multi Tasking Non Technical Staff and Havaldar CBIC and CBN Examination 2022

Roll Number	
Candidate Name	
Venue Name	
Exam Date	20/06/2023
Exam Time	9:00 AM - 10:30 AM
Subject	MTS Non Tech Havaldar CBIC and CBN Examination 2022

### Section : Numerical and Mathematical Ability

**Q.1** Two taps J and L can fill a tank alone in 10 minutes and 12 minutes respectively. If an outlet tap K is opened and all three taps work together, then the same tank will be filled in 15 minutes. How much time will tap K alone take to empty the same tank?

- Ans**
- ✓ 1. 60/7 minutes
  - ✗ 2. 58/11 minutes
  - ✗ 3. 56/3 minutes
  - ✗ 4. 52/3 minutes

Question Type : **MCQ**  
Question ID : 264330140632  
Option 1 ID : 264330550878  
Option 2 ID : 264330550876  
Option 3 ID : 264330550877  
Option 4 ID : 264330550875  
Status : **Answered**  
Chosen Option : 1

**Q.2** A person lent certain sum of money at the annual rate of 8 percent on simple interest and the interest received in 9 years is Rs. 560 less than the sum lent. What is the sum lent?

- Ans**
- ✓ 1. Rs. 2000
  - ✗ 2. Rs. 1120
  - ✗ 3. Rs. 1000
  - ✗ 4. Rs. 560

Question Type : **MCQ**  
Question ID : 264330140593  
Option 1 ID : 264330550725  
Option 2 ID : 264330550723  
Option 3 ID : 264330550724  
Option 4 ID : 264330550726  
Status : **Answered**  
Chosen Option : 1

**Q.3** Sapna bought book at a sale for Rs. 573.18, she received 18% discount on the MRP. What is the MRP of the book?

- Ans**
- 1. Rs. 649
  - 2. Rs. 799
  - 3. Rs. 749
  - 4. Rs. 699

Question Type : **MCQ**  
Question ID : **264330140829**  
Option 1 ID : **264330551664**  
Option 2 ID : **264330551663**  
Option 3 ID : **264330551666**  
Option 4 ID : **264330551665**  
Status : **Answered**  
Chosen Option : **4**

**Q.4** Suraj starts his journey from point Q at 2 p.m. He drives the car at the speed of 40 km/hr for first three hours and complete the remaining journey at the speed of 30 km/hr. If Rahul starts moving towards Suraj at 6 p.m. from point Q at the speed of 80 km/hr, then at what time he will catch Suraj?

- Ans**
- 1. 9 : 36 pm
  - 2. 9 : 00 pm
  - 3. 9 : 15 pm
  - 4. 10 : 06 pm

Question Type : **MCQ**  
Question ID : **264330140195**  
Option 1 ID : **264330549160**  
Option 2 ID : **264330549161**  
Option 3 ID : **264330549162**  
Option 4 ID : **264330549159**  
Status : **Answered**  
Chosen Option : **2**

**Q.5** Container I and Container II have milk and water in the ratio of 4 : 5 and 8 : 3 respectively. In what ratio Container I and Container II should be mixed to get a new mixture in which milk and water are in the ratio of 9 : 11?

- Ans**
- 1. 549 : 11
  - 2. 49 : 121
  - 3. 519 : 11
  - 4. 47 : 121

Question Type : **MCQ**  
Question ID : **264330139597**  
Option 1 ID : **264330546803**  
Option 2 ID : **264330546805**  
Option 3 ID : **264330546804**  
Option 4 ID : **264330546806**  
Status : **Answered**  
Chosen Option : **2**

**Q.6** A group of boys has an average weight of 42 kg. One boy weighing 48 kg leaves the group and another boy weighing 38 kg joins the group. If the average now becomes 41 kg, then how many boys are there in the group?

- Ans**
- 1. 6
  - 2. 10
  - 3. 8
  - 4. 12

Question Type : **MCQ**  
Question ID : **264330139632**  
Option 1 ID : **264330546946**  
Option 2 ID : **264330546944**  
Option 3 ID : **264330546943**  
Option 4 ID : **264330546945**  
Status : **Answered**  
Chosen Option : **2**

**Q.7** If 50 percent of a number is 80, then what will be the 250 percent of that number?

- Ans**
- 1. 440
  - 2. 400
  - 3. 480
  - 4. 360

Question Type : **MCQ**  
Question ID : **264330140218**  
Option 1 ID : **264330549254**  
Option 2 ID : **264330549251**  
Option 3 ID : **264330549252**  
Option 4 ID : **264330549253**  
Status : **Answered**  
Chosen Option : **2**



Teachingninja.in

**Q.8** The table given below shows the cost price and selling price of 5 different articles.

Article	Cost price	Selling price
A	500	600
B	700	750
C	600	800
D	400	700
E	300	800

What is the ratio of total cost price to total selling price of all articles?

- Ans
- 1. 49 : 72
  - 2. 50 : 39
  - 3. 37 : 50
  - 4. 50 : 73

Question Type : MCQ

Question ID : 264330140601

Option 1 ID : 264330550755

Option 2 ID : 264330550758

Option 3 ID : 264330550757

Option 4 ID : 264330550756

Status : Answered

Chosen Option : 4

**Q.9** What is the least number which when divided by 8, 10, 12 and 18 leaves a remainder 5 in each case?

- Ans
- 1. 408
  - 2. 397
  - 3. 365
  - 4. 371

Question Type : MCQ

Question ID : 264330139603

Option 1 ID : 264330546828

Option 2 ID : 264330546830

Option 3 ID : 264330546829

Option 4 ID : 264330546827

Status : Answered

Chosen Option : 3

Q.10 What is the value of  $\frac{44-13+17-21+45-24}{12 \div 4 - 3 \times 4 - 6 \times 2}$ ?

- Ans
- 1. -1
  - 2. 1
  - 3. -2
  - 4. 2

Question Type : MCQ  
Question ID : 264330139644  
Option 1 ID : 264330546994  
Option 2 ID : 264330546993  
Option 3 ID : 264330546991  
Option 4 ID : 264330546992  
Status : Answered  
Chosen Option : 4

Q.11 The perimeter of the top of a rectangular table is 56 metre and its area is 192 metre<sup>2</sup>. What is the length of its diagonal?

- Ans
- 1. 20 metre
  - 2. 16 metre
  - 3. 22 metre
  - 4. 18 metre

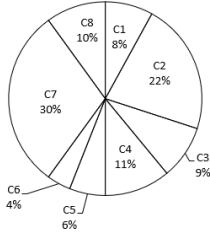
Question Type : MCQ  
Question ID : 264330139945  
Option 1 ID : 264330548162  
Option 2 ID : 264330548161  
Option 3 ID : 264330548159  
Option 4 ID : 264330548160  
Status : Answered  
Chosen Option : 1

Q.12 What is the value of  $\left[ \frac{1}{5} + \left\{ \frac{1}{6} \text{ of } \left( \frac{42}{35} \div \frac{6}{25} \right) - \left( \frac{2}{7} \times \frac{6}{5} \div \frac{18}{42} \right) \right\} + \frac{19}{30} \right]$ ?

- Ans
- 1. 11/15
  - 2. 17/15
  - 3. 14/15
  - 4. 13/15

Question Type : MCQ  
Question ID : 264330139908  
Option 1 ID : 264330548012  
Option 2 ID : 264330548013  
Option 3 ID : 264330548011  
Option 4 ID : 264330548014  
Status : Answered  
Chosen Option : 4

**Q.13** The pie chart given below shows the number of cars sold by 8 different companies. The total number of cars sold by all these 8 companies are 2,000. Number of cars sold by a particular company is shown as a percent of total number of cars sold by all these 8 companies.



The average number of cars sold by C1 and C2 is how much percent less than the average number of cars sold by C7 and C8?

- Ans**
- 1. 33.33 percent
  - 2. 66.66 percent
  - 3. 16.66 percent
  - 4. 25 percent

Question Type : MCQ

Question ID : 264330139950

Option 1 ID : 264330548182

Option 2 ID : 264330548181

Option 3 ID : 264330548180

Option 4 ID : 264330548179

Status : Answered

Chosen Option : 4

**Q.14** 8 women can complete a work in 15 days. If 2 women are employed, then in how many days the work will be completed?

- Ans**
- 1. 60 days
  - 2. 80 days
  - 3. 64 days
  - 4. 44 days

Question Type : MCQ

Question ID : 264330140239

Option 1 ID : 264330549335

Option 2 ID : 264330549337

Option 3 ID : 264330549338

Option 4 ID : 264330549336

Status : Answered

Chosen Option : 1

**Q.15** By selling a water heater for Rs. 320, the shopkeeper incurs a loss of 20%. If he wants to earn a profit of 20%, at what price should he sell the water heater?

- Ans**
- 1. Rs. 105
  - 2. Rs. 400
  - 3. Rs. 480
  - 4. Rs. 100

Question Type : **MCQ**  
Question ID : **264330140805**  
Option 1 ID : **264330551570**  
Option 2 ID : **264330551568**  
Option 3 ID : **264330551567**  
Option 4 ID : **264330551569**  
Status : **Answered**  
Chosen Option : **3**

**Q.16** A man bought two flats for Rs. 6075000 each. He sold, one flat at 10% gain and other at 15% loss. How much percent he gain or lose in the whole?

- Ans**
- 1. 2.5% loss
  - 2. 3% gain
  - 3. 5% gain
  - 4. 5% loss

Question Type : **MCQ**  
Question ID : **264330140827**  
Option 1 ID : **264330551656**  
Option 2 ID : **264330551658**  
Option 3 ID : **264330551655**  
Option 4 ID : **264330551657**  
Status : **Answered**  
Chosen Option : **4**

**Q.17** In what ratio rice of Rs. 20 per kg be mixed with rice of Rs. 34 per kg, so that the mixture is worth Rs. 28 per kg?

- Ans**
- 1. 4:1
  - 2. 3:4
  - 3. 2:3
  - 4. 1:3

Question Type : **MCQ**  
Question ID : **264330133819**  
Option 1 ID : **264330524299**  
Option 2 ID : **264330524301**  
Option 3 ID : **264330524302**  
Option 4 ID : **264330524300**  
Status : **Answered**  
Chosen Option : **2**



Q.18 If  $A : B : C = 2 : 3 : 5$ , then what is the value of  $(A + B) : (B + C) : (C + A)$ ?

- Ans
- 1.  $5 : 8 : 7$
  - 2.  $9 : 10 : 12$
  - 3.  $6 : 9 : 14$
  - 4.  $8 : 15 : 14$

Question Type : MCQ  
Question ID : 264330140161  
Option 1 ID : 264330549023  
Option 2 ID : 264330549025  
Option 3 ID : 264330549024  
Option 4 ID : 264330549026  
Status : Answered  
Chosen Option : 1

Q.19 The length of a cuboid is half of its breadth and the height of cuboid is thrice of its breadth. If the breadth of the cuboid is 12 cm, then what is the total surface area of cuboid?

- Ans
- 1.  $1320 \text{ cm}^2$
  - 2.  $1440 \text{ cm}^2$
  - 3.  $1560 \text{ cm}^2$
  - 4.  $1680 \text{ cm}^2$

Question Type : MCQ  
Question ID : 264330139641  
Option 1 ID : 264330546979  
Option 2 ID : 264330546982  
Option 3 ID : 264330546980  
Option 4 ID : 264330546981  
Status : Answered  
Chosen Option : 2

Q.20 On a certain sum the compound interest (compounding annually) for fourth year is Rs. 15000 and the compound interest (compounding annually) for sixth year is Rs. 25350. What is the rate of interest per annum?

- Ans
- 1. 40 percent
  - 2. 35 percent
  - 3. 25 percent
  - 4. 30 percent

Question Type : MCQ  
Question ID : 264330140642  
Option 1 ID : 264330550918  
Option 2 ID : 264330550917  
Option 3 ID : 264330550916  
Option 4 ID : 264330550915  
Status : Answered  
Chosen Option : 4

Section : Reasoning Ability and Problem Solving

**Q.1** In a certain code language, 'NOTICE' is coded as 'LMRFZB'. What is the code for 'PARENT' in that code language?

- Ans**
- ✓ 1. NYPBKQ
  - ✗ 2. NYPCLR
  - ✗ 3. NYPBKR
  - ✗ 4. NYQBKQ

Question Type : **MCQ**  
Question ID : 264330139571  
Option 1 ID : 264330546701  
Option 2 ID : 264330546699  
Option 3 ID : 264330546700  
Option 4 ID : 264330546702  
Status : **Answered**  
Chosen Option : 1

**Q.2** Two Statements are given followed by two conclusions numbered I and II. Assuming the statements to be true, even if they seem to be at variance with commonly known facts, decide which of the conclusions logically follow(s) from the statements.

Statements:

- All boxes are cube.
- All cubes are squares.

Conclusions:

- I. Some boxes are squares.
- II. Some squares are not cube.

- Ans**
- ✗ 1. Neither conclusion I nor II follows
  - ✗ 2. Only conclusion II follows
  - ✗ 3. Both conclusions I and II follow
  - ✓ 4. Only conclusion I follows

Question Type : **MCQ**  
Question ID : 264330140082  
Option 1 ID : 264330548710  
Option 2 ID : 264330548708  
Option 3 ID : 264330548709  
Option 4 ID : 264330548707  
Status : **Answered**  
Chosen Option : 1

**Q.3** Which of the following numbers will replace the question mark (?) in the given series?  
59, 63, 72, 88, 113, ?

- Ans**
- 1. 139
  - 2. 149
  - 3. 141
  - 4. 159

Question Type : **MCQ**  
Question ID : **264330140105**  
Option 1 ID : **264330548799**  
Option 2 ID : **264330548800**  
Option 3 ID : **264330548802**  
Option 4 ID : **264330548801**  
Status : **Answered**  
Chosen Option : **2**

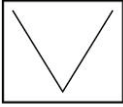
**Q.4** Which of the mathematical signs should be interchanged in the below equation to make it mathematically correct?  
 $14 + 63 \div 7 - 21 \times 35 = 140$

- Ans**
- 1. + and -
  - 2.  $\div$  and  $\times$
  - 3. - and  $\times$
  - 4. + and  $\times$

Question Type : **MCQ**  
Question ID : **264330140467**  
Option 1 ID : **264330550249**  
Option 2 ID : **264330550248**  
Option 3 ID : **264330550250**  
Option 4 ID : **264330550247**  
Status : **Answered**  
Chosen Option : **4**



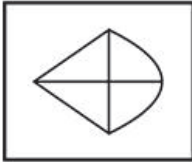
Q.5 Select the option figure in which the given figure (X) is embedded as its part (rotation is NOT allowed).



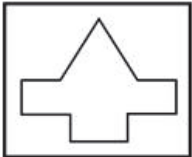
X

Ans

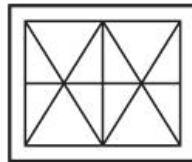
✗ 1.



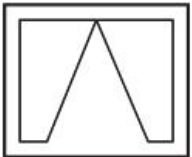
✗ 2.



✓ 3.



✗ 4.



Teachingninja.in

Question Type : MCQ

Question ID : 264330140008

Option 1 ID : 264330548413

Option 2 ID : 264330548414

Option 3 ID : 264330548412

Option 4 ID : 264330548411

Status : Answered

Chosen Option : 3

**Q.6** Three statements are given followed by two conclusions numbered I and II. Assuming the statements to be true, even if they seem to be at variance with commonly known facts, decide which of the conclusions logically follow(s) from the statements.

Statements:

Some mobiles are land.

Some land are wide.

All wide are tall.

Conclusions:

I. Some mobiles are tall.

II. All tall are wide.

**Ans** ✓ 1. Neither conclusion I nor II follows

✗ 2. Only conclusion II follows

✗ 3. Both conclusions I and II follow

✗ 4. Only conclusion I follows

Question Type : MCQ

Question ID : 264330140422

Option 1 ID : 264330550070

Option 2 ID : 264330550068

Option 3 ID : 264330550069

Option 4 ID : 264330550067

Status : Answered

Chosen Option : 1

**Q.7** In the following question, select the missing number of the given series.

55, 38, 21, 4, -13, ?

**Ans** ✓ 1. -30

✗ 2. -18

✗ 3. -28

✗ 4. -20

Question Type : MCQ

Question ID : 264330140064

Option 1 ID : 264330548638

Option 2 ID : 264330548635

Option 3 ID : 264330548637

Option 4 ID : 264330548636

Status : Answered

Chosen Option : 1

**Q.8** Select the option that is related to the third word in the same way as the second word is related to the first word.  
Bees : Buzz :: Ducks : ?

- Ans**
- 1. Croak
  - 2. Chirp
  - 3. Bleat
  - 4. Quack

Question Type : **MCQ**  
Question ID : **264330140433**  
Option 1 ID : **264330550111**  
Option 2 ID : **264330550114**  
Option 3 ID : **264330550112**  
Option 4 ID : **264330550113**  
Status : **Answered**  
Chosen Option : **4**

**Q.9** Select the option that is related to the third number in the same way as the second number is related to the first number.  
110 : 23 :: 85 : ?

- Ans**
- 1. 17
  - 2. 13
  - 3. 18
  - 4. 47

Question Type : **MCQ**  
Question ID : **264330135361**  
Option 1 ID : **264330530352**  
Option 2 ID : **264330530351**  
Option 3 ID : **264330530353**  
Option 4 ID : **264330530354**  
Status : **Answered**  
Chosen Option : **3**

**Q.10** In a certain code language, 'PARK' is written as 'QCSM' and 'FREE' is written as 'GTFG'. How will 'FAME' be written in that language?

- Ans**
- 1. GCNG
  - 2. GCOF
  - 3. CGNF
  - 4. HCNG

Question Type : **MCQ**  
Question ID : **264330140116**  
Option 1 ID : **264330548845**  
Option 2 ID : **264330548844**  
Option 3 ID : **264330548846**  
Option 4 ID : **264330548843**  
Status : **Answered**  
Chosen Option : **1**

Q.11 Which of the following letter will replace the question mark (?) in the given series?

J, N, H, P, F, R, D, T, B, ?

- Ans
- 1. O
  - 2. V
  - 3. M
  - 4. U

Question Type : MCQ

Question ID : 264330139991

Option 1 ID : 264330548345

Option 2 ID : 264330548346

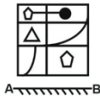
Option 3 ID : 264330548343

Option 4 ID : 264330548344

Status : Answered

Chosen Option : 2

Q.12 If a mirror is placed on the line AB, then out of the option figures which figure will be the right image of the question figure?



Ans

- 1.
- 2.
- 3.
- 4.

Question Type : MCQ

Question ID : 264330140994

Option 1 ID : 264330552324

Option 2 ID : 264330552325

Option 3 ID : 264330552326

Option 4 ID : 264330552323

Status : Answered

Chosen Option : 3

**Q.13** Anuj, Bala, Charanjit, Danish, Endrew, Farooq, Garvit, and Himesh are sitting around a square table facing the centre of the table. Four of them are sitting at each of the corners, while the other four are sitting at the exact centre of each of the sides.

Endrew who sits middle of a side, sits to the fourth left of the Garvit. Only one person sits between Garvit and Farooq.

Bala is immediate neighbour of Endrew. Only three people sit between Bala and Anuj. Bala is not a neighbour of

Farooq. Himesh sits to the immediate left of Charanjit. Charanjit sits to the third right of Endrew.

Who sits third to the right of Danish?

**Ans**  1. Charanjit

2. Himesh

3. Bala

4. Garvit

Question Type : **MCQ**

Question ID : **264330140479**

Option 1 ID : **264330550295**

Option 2 ID : **264330550297**

Option 3 ID : **264330550296**

Option 4 ID : **264330550298**

Status : **Answered**

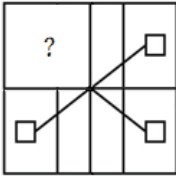
Chosen Option : **2**



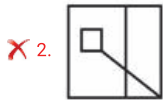
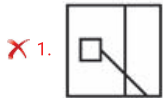
Teachingninja.in



Q.14 Which answer figure will complete the pattern in the question figure?



Ans



Question Type : MCQ

Question ID : 264330140072

Option 1 ID : 264330548670

Option 2 ID : 264330548669

Option 3 ID : 264330548667

Option 4 ID : 264330548668

Status : Answered

Chosen Option : 3

Q.15 Study the given pattern carefully and select the number that can replace the question mark (?) in it.

First row- 60, 20, 10

Second row- 90, 30, 15

Third row- 36, 12, ?

Ans

✓ 1. 6

✗ 2. 8

✗ 3. 4

✗ 4. 5

Question Type : MCQ

Question ID : 264330140426

Option 1 ID : 264330550085

Option 2 ID : 264330550084

Option 3 ID : 264330550086

Option 4 ID : 264330550083

Status : Answered

Chosen Option : 1

Q.16 Select the option that is related to the third word in the same way as the second word is related to the first word.

Thyroid : Iodine :: Night blindness : ?

- Ans
- 1. Vitamin D
  - 2. Vitamin B
  - 3. Vitamin C
  - 4. Vitamin A

Question Type : MCQ  
Question ID : 264330140474  
Option 1 ID : 264330550278  
Option 2 ID : 264330550276  
Option 3 ID : 264330550277  
Option 4 ID : 264330550275  
Status : Answered  
Chosen Option : 4

Q.17 Six friends X, Y, J, M, N, and O are standing in a queue facing north. Y is immediately behind O. J is standing at the end of the queue. M stands exactly in between N and X. Y does not stand after X. Who stands fourth from the start of the queue?

- Ans
- 1. Y
  - 2. N
  - 3. X
  - 4. M

Question Type : MCQ  
Question ID : 264330140418  
Option 1 ID : 264330550054  
Option 2 ID : 264330550052  
Option 3 ID : 264330550053  
Option 4 ID : 264330550051  
Status : Answered  
Chosen Option : 4

Q.18 In a certain code language, 'RAT' is written as 'SCW'. How will 'COW' be written in that language?

- Ans
- 1. DZQ
  - 2. DQR
  - 3. DYZ
  - 4. DQZ

Question Type : MCQ  
Question ID : 264330137566  
Option 1 ID : 264330538872  
Option 2 ID : 264330538874  
Option 3 ID : 264330538873  
Option 4 ID : 264330538871  
Status : Answered  
Chosen Option : 4

Q.19 By interchanging the given two signs which of the following equation will be not correct?

+ and ×

I.  $15 + 5 \div 1 - 9 \times 4 = 70$

II.  $18 \times 17 + 3 - 6 \div 2 = 133$

Ans

✓ 1. Only II

✗ 2. Only I

✗ 3. Neither I nor II

✗ 4. Both I and II

Question Type : MCQ

Question ID : 264330140992

Option 1 ID : 264330552316

Option 2 ID : 264330552315

Option 3 ID : 264330552318

Option 4 ID : 264330552317

Status : Answered

Chosen Option : 1

Q.20 Amongst seven sisters I, II, III, IV, V, VI and VII, each has a different height. I is shorter than only one sister. II is only taller than VII. Three sisters are shorter than IV and three are taller than her. V is not the tallest. III is shorter than VI but taller than V. Who is the third shortest among the sisters?

Ans

✗ 1. VI

✗ 2. IV

✓ 3. V

✗ 4. I

Question Type : MCQ

Question ID : 264330140081

Option 1 ID : 264330548703

Option 2 ID : 264330548705

Option 3 ID : 264330548706

Option 4 ID : 264330548704

Status : Answered

Chosen Option : 3

Section : General Awareness

Q.1 Which of the following books is authored by Indu Sundaresan?

- Ans
- 1. The Secret of the Nagas
  - 2. The One You Cannot Have
  - 3. The Feast of Roses
  - 4. Ajaya: Rise of Kali

Question Type : MCQ  
Question ID : 264330140886  
Option 1 ID : 264330551893  
Option 2 ID : 264330551891  
Option 3 ID : 264330551892  
Option 4 ID : 264330551894  
Status : Answered  
Chosen Option : 1

Q.2 Respect for the National Flag and National Anthem is a \_\_\_\_\_ of every Indian citizen.

- Ans
- 1. Fundamental Duty
  - 2. Legal Right
  - 3. Directive Principles of State Policy
  - 4. Fundamental Right

Question Type : MCQ  
Question ID : 264330140387  
Option 1 ID : 264330549929  
Option 2 ID : 264330549928  
Option 3 ID : 264330549927  
Option 4 ID : 264330549930  
Status : Answered  
Chosen Option : 1

Q.3 What was the purpose behind the Pillars of Ashoka?

- Ans
- 1. To spread the dharma policies
  - 2. To spread bherighosha
  - 3. To spread sectarian faith
  - 4. To spread mass conversion

Question Type : MCQ  
Question ID : 264330140380  
Option 1 ID : 264330549900  
Option 2 ID : 264330549899  
Option 3 ID : 264330549901  
Option 4 ID : 264330549902  
Status : Answered  
Chosen Option : 1

Q.4 Which player was widely known by the name of Flying Sikh?

- Ans
- 1. Arshdeep Singh
  - 2. Harbhajan Singh
  - 3. Yuvraj Singh
  - 4. Milkha Singh

Question Type : MCQ  
Question ID : 264330140674  
Option 1 ID : 264330551044  
Option 2 ID : 264330551046  
Option 3 ID : 264330551045  
Option 4 ID : 264330551043  
Status : Answered  
Chosen Option : 4

Q.5 Hai-Hak Dance is associated with which state?

- Ans
- 1. Sikkim
  - 2. Rajasthan
  - 3. Tripura
  - 4. Andhra Pradesh

Question Type : MCQ  
Question ID : 264330139866  
Option 1 ID : 264330547843  
Option 2 ID : 264330547846  
Option 3 ID : 264330547844  
Option 4 ID : 264330547845  
Status : Answered  
Chosen Option : 3

Q.6 The Hindustan Socialist Republican Association (HSRA) was founded in \_\_\_\_\_ .

- Ans
- 1. 1917
  - 2. 1922
  - 3. 1924
  - 4. 1928

Question Type : MCQ  
Question ID : 264330140383  
Option 1 ID : 264330549912  
Option 2 ID : 264330549914  
Option 3 ID : 264330549911  
Option 4 ID : 264330549913  
Status : Answered  
Chosen Option : 1

Q.7 Currency notes and coins are called \_\_\_\_\_.

- Ans
- 1. fiat money
  - 2. near money
  - 3. fiduciary money
  - 4. commodity money

Question Type : MCQ  
Question ID : 264330138981  
Option 1 ID : 264330544531  
Option 2 ID : 264330544532  
Option 3 ID : 264330544534  
Option 4 ID : 264330544533  
Status : Answered  
Chosen Option : 1

Q.8 What is the capital of India's neighbouring country Afghanistan?

- Ans
- 1. Kandahar
  - 2. Kabul
  - 3. Kathmandu
  - 4. Karachi

Question Type : MCQ  
Question ID : 264330140713  
Option 1 ID : 264330551201  
Option 2 ID : 264330551202  
Option 3 ID : 264330551200  
Option 4 ID : 264330551199  
Status : Answered  
Chosen Option : 2

Q.9 Which of the following is "NOT" a biosphere reserve in India?

- Ans
- 1. Cold Desert
  - 2. Sunderbans
  - 3. Gir Forest
  - 4. Nilgiri

Question Type : MCQ  
Question ID : 264330139884  
Option 1 ID : 264330547917  
Option 2 ID : 264330547915  
Option 3 ID : 264330547918  
Option 4 ID : 264330547916  
Status : Answered  
Chosen Option : 1

Q.10 "PM POSHAN" Scheme is implemented by which ministry?

- Ans
- 1. Ministry of Women & Child Development
  - 2. Ministry of Education
  - 3. Ministry of Social Justice
  - 4. Ministry of Agriculture & Farmers Welfare

Question Type : MCQ  
Question ID : 264330139732  
Option 1 ID : 264330547346  
Option 2 ID : 264330547344  
Option 3 ID : 264330547345  
Option 4 ID : 264330547343  
Status : Answered  
Chosen Option : 3

Q.11 Which of the following article of Indian constitution is related with "Promotion of International Peace and security"?

- Ans
- 1. Article 43
  - 2. Article 51
  - 3. Article 40
  - 4. Article 47

Question Type : MCQ  
Question ID : 264330139710  
Option 1 ID : 264330547257  
Option 2 ID : 264330547258  
Option 3 ID : 264330547255  
Option 4 ID : 264330547256  
Status : Answered  
Chosen Option : 2

Q.12 Indian musician Jagjit Singh is credited for the revival of \_\_\_\_\_ genre of music/poetry.

- Ans
- 1. Sufi
  - 2. Latin
  - 3. Ghazal
  - 4. Jazz

Question Type : MCQ  
Question ID : 264330140924  
Option 1 ID : 264330552045  
Option 2 ID : 264330552044  
Option 3 ID : 264330552046  
Option 4 ID : 264330552043  
Status : Answered  
Chosen Option : 3

Q.13 The "Double Dome" feature of Indo-Islamic architecture was introduced by which dynasty of Delhi Sultanate?

- Ans
- 1. Slave Dynasty
  - 2. Lodi Dynasty
  - 3. Khilji Dynasty
  - 4. Tughlaq Dynasty

Question Type : MCQ  
Question ID : 264330140680  
Option 1 ID : 264330551070  
Option 2 ID : 264330551069  
Option 3 ID : 264330551068  
Option 4 ID : 264330551067  
Status : Answered  
Chosen Option : 1

Q.14 Which cell organelles help in intracellular digestion and are known as the "suicidal bags" of the cell?

- Ans
- 1. Chloroplasts
  - 2. Centrosome
  - 3. Golgi bodies
  - 4. Lysosome

Question Type : MCQ  
Question ID : 264330140657  
Option 1 ID : 264330550978  
Option 2 ID : 264330550975  
Option 3 ID : 264330550976  
Option 4 ID : 264330550977  
Status : Answered  
Chosen Option : 4

Q.15 Which of the following is an example of an artificial ecosystem?

- Ans
- 1. Aquariums
  - 2. Grasslands
  - 3. Desert
  - 4. Coral reefs

Question Type : MCQ  
Question ID : 264330140658  
Option 1 ID : 264330550981  
Option 2 ID : 264330550980  
Option 3 ID : 264330550982  
Option 4 ID : 264330550979  
Status : Answered  
Chosen Option : 1



Q.16 Which of the following has been awarded "Major Dhyan Chand Khel Ratna Award 2021" for Wrestling?

- Ans
- 1. Sunil Chhetri
  - 2. Neeraj Chopra
  - 3. Manpreet Singh
  - 4. Ravi Kumar

Question Type : MCQ  
Question ID : 264330139651  
Option 1 ID : 264330547021  
Option 2 ID : 264330547020  
Option 3 ID : 264330547022  
Option 4 ID : 264330547019  
Status : Answered  
Chosen Option : 4

Q.17 The point on the surface, nearest to the focus of the earthquake, is called \_\_\_\_\_.

- Ans
- 1. semi centre
  - 2. epicentre
  - 3. hypocentre
  - 4. centrepiece

Question Type : MCQ  
Question ID : 264330140759  
Option 1 ID : 264330551385  
Option 2 ID : 264330551384  
Option 3 ID : 264330551383  
Option 4 ID : 264330551386  
Status : Answered  
Chosen Option : 2

Q.18 Which among the following festivals is associated with Arunachal Pradesh?

- Ans
- 1. Ugadi
  - 2. Pongal
  - 3. Wangala
  - 4. Solung

Question Type : MCQ  
Question ID : 264330140909  
Option 1 ID : 264330551985  
Option 2 ID : 264330551986  
Option 3 ID : 264330551983  
Option 4 ID : 264330551984  
Status : Answered  
Chosen Option : 4

Q.19 The Indian National Congress was established when 72 delegates from all over the country met at Bombay in December \_\_\_\_\_.

- Ans
- 1. 1858
  - 2. 1890
  - 3. 1872
  - 4. 1885

Question Type : MCQ  
Question ID : 264330141061  
Option 1 ID : 264330552594  
Option 2 ID : 264330552592  
Option 3 ID : 264330552593  
Option 4 ID : 264330552591  
Status : Answered  
Chosen Option : 4

Q.20 Gangaur festival of Rajasthan is associated with which god and goddess?

- Ans
- 1. Lord Surya and Goddess Prabha
  - 2. Lord Shiva and Goddess Parwati
  - 3. Lord Vishnu and Goddess Lakshmi
  - 4. Lord Rama and Goddess Sita

Question Type : MCQ  
Question ID : 264330140882  
Option 1 ID : 264330551878  
Option 2 ID : 264330551875  
Option 3 ID : 264330551877  
Option 4 ID : 264330551876  
Status : Answered  
Chosen Option : 2

Q.21 Which of the following novels is written by Chetan Bhagat?

- Ans
- 1. Our Story Needs No Filter
  - 2. The White Tiger
  - 3. The 3 Mistakes of My Life
  - 4. Untouchables

Question Type : MCQ  
Question ID : 264330139703  
Option 1 ID : 264330547229  
Option 2 ID : 264330547230  
Option 3 ID : 264330547227  
Option 4 ID : 264330547228  
Status : Answered  
Chosen Option : 3

Q.22 In which type of farming the land is used for growing food and fodder crops and rearing livestock?

- Ans
- 1. Plantation agriculture
  - 2. Mixed farming
  - 3. Subsistence farming
  - 4. Shifting cultivation

Question Type : MCQ  
Question ID : 264330139690  
Option 1 ID : 264330547175  
Option 2 ID : 264330547177  
Option 3 ID : 264330547178  
Option 4 ID : 264330547176  
Status : Answered  
Chosen Option : 1

Q.23 Bhakti saints, Nayanars were devotees of which of the following gods?

- Ans
- 1. Vishnu
  - 2. Shiva
  - 3. Indra
  - 4. Murugan

Question Type : MCQ  
Question ID : 264330140289  
Option 1 ID : 264330549535  
Option 2 ID : 264330549537  
Option 3 ID : 264330549538  
Option 4 ID : 264330549536  
Status : Answered  
Chosen Option : 1

Q.24 "The Invisible Man" is a science fiction novel written by famous author \_\_\_\_\_.

- Ans
- 1. Herbert George Wells
  - 2. William Shakespeare
  - 3. Agatha Christie
  - 4. Jules Verne

Question Type : MCQ  
Question ID : 264330140718  
Option 1 ID : 264330551219  
Option 2 ID : 264330551221  
Option 3 ID : 264330551220  
Option 4 ID : 264330551222  
Status : Answered  
Chosen Option : 4

Q.25 How many countries share land boundaries with India?

- Ans
- 1. Eight
  - 2. Six
  - 3. Seven
  - 4. Five

Question Type : MCQ  
Question ID : 264330138990  
Option 1 ID : 264330544570  
Option 2 ID : 264330544568  
Option 3 ID : 264330544569  
Option 4 ID : 264330544567  
Status : Answered  
Chosen Option : 3

Section : English Language and Comprehension

Q.1 The statement below has been given with bracketed text. Select the option with correct idiom for the bracketed text.  
She started repaying the money she borrowed from me, but the amount she returned me is (insignificant compared) to what she still owes.

- Ans
- 1. eat out of your hand
  - 2. jaw dropping
  - 3. an eye for an eye
  - 4. a drop in a bucket

Question Type : MCQ  
Question ID : 264330136130  
Option 1 ID : 264330533323  
Option 2 ID : 264330533325  
Option 3 ID : 264330533324  
Option 4 ID : 264330533326  
Status : Answered  
Chosen Option : 4



Q.2 Select the most appropriate meaning of the given idiom.

To eat crow

- Ans
- 1. To take money back
  - 2. To admit that one is wrong
  - 3. To take great care
  - 4. To become non-vegetarian

Question Type : MCQ

Question ID : 264330136155

Option 1 ID : 264330533422

Option 2 ID : 264330533421

Option 3 ID : 264330533420

Option 4 ID : 264330533419

Status : Answered

Chosen Option : 2

Q.3 Select the most appropriate option to fill in the blank.

The wounds on my back are no longer fresh, but, somehow, they still \_\_\_\_\_.

- Ans
- 1. revamp
  - 2. barge
  - 3. enrich
  - 4. hurt

Question Type : MCQ

Question ID : 264330135255

Option 1 ID : 264330529940

Option 2 ID : 264330529942

Option 3 ID : 264330529939

Option 4 ID : 264330529941

Status : Answered

Chosen Option : 4



Q.4 Four sentences are given, out of which three have spelling errors. Choose the sentence with all correctly spelt words.

Ans  1.

Their skilled colleague soon satisfied them that they were wrong.

2.

It was a letter that was shot throught with the writer's personality.

3. There is plenty of student accomodation in Edinburgh.

4.

He advised the government not to persue a gas deal with that company.

Question Type : MCQ

Question ID : 264330136132

Option 1 ID : 264330533334

Option 2 ID : 264330533333

Option 3 ID : 264330533331

Option 4 ID : 264330533332

Status : Answered

Chosen Option : 1

Q.5 Select the most appropriate synonym of the given word.

Support

Ans  1. Bolster

2. Spine

3. Refuse

4. Release

Question Type : MCQ

Question ID : 264330135731

Option 1 ID : 264330531808

Option 2 ID : 264330531810

Option 3 ID : 264330531807

Option 4 ID : 264330531809

Status : Answered

Chosen Option : 1

Q.6 Choose the incorrectly spelt word.

Ans  1. Slim

2. Wsated

3. Interest

4. Count

Question Type : MCQ

Question ID : 264330141183

Option 1 ID : 264330553074

Option 2 ID : 264330553072

Option 3 ID : 264330553071

Option 4 ID : 264330553073

Status : Answered

Chosen Option : 2

**Q.7** Identify the segment that contains a grammatical error. If there is no error, select 'No error'.  
Time is the greater / eraser, both of / sorrow and of joy.

- Ans**
- 1. eraser, both of
  - 2. Time is the greater
  - 3. sorrow and of joy.
  - 4. No error

Question Type : **MCQ**  
Question ID : **264330135846**  
Option 1 ID : **264330532252**  
Option 2 ID : **264330532251**  
Option 3 ID : **264330532253**  
Option 4 ID : **264330532254**  
Status : **Answered**  
Chosen Option : **2**

**Q.8** Identify the segment that contains a grammatical error. If there is no error, select 'No error'

He spent a great deal of time/ writing on his legal pad and aggressive/ underlining whatever he was writing.

- Ans**
- 1. writing on his legal pad and aggressive
  - 2. underlining whatever he was writing.
  - 3. He spent a great deal of time
  - 4. No error

Question Type : **MCQ**  
Question ID : **264330135663**  
Option 1 ID : **264330531548**  
Option 2 ID : **264330531549**  
Option 3 ID : **264330531547**  
Option 4 ID : **264330531550**  
Status : **Answered**  
Chosen Option : **3**

**Q.9** Fill in the blank with the most appropriate option.

I was \_\_\_\_\_ and was suddenly woken up by the loud noise of crackers bursting.

- Ans**
- 1. fast asleep
  - 2. quite asleep
  - 3. quiet asleep
  - 4. long asleep

Question Type : **MCQ**  
Question ID : **264330135713**  
Option 1 ID : **264330531742**  
Option 2 ID : **264330531740**  
Option 3 ID : **264330531739**  
Option 4 ID : **264330531741**  
Status : **Answered**  
Chosen Option : **3**

Q.10 Select the most appropriate antonym of the given word.

Incompetence

- Ans
- 1. Caustic
  - 2. Interfere
  - 3. Attitude
  - 4. Efficient

Question Type : MCQ  
Question ID : 264330135759  
Option 1 ID : 264330531917  
Option 2 ID : 264330531918  
Option 3 ID : 264330531915  
Option 4 ID : 264330531916  
Status : Answered  
Chosen Option : 4

Q.11 Identify the segment that contains a grammatical error. If there is no error, select 'No error'.

'I'm going to get / start on some / homework,' said the professor angrily.

- Ans
- 1. start on some
  - 2. homework,' said the professor angrily.
  - 3. I'm going to get
  - 4. No error

Question Type : MCQ  
Question ID : 264330136163  
Option 1 ID : 264330533452  
Option 2 ID : 264330533453  
Option 3 ID : 264330533451  
Option 4 ID : 264330533454  
Status : Answered  
Chosen Option : 1

Q.12 Select the word segment that substitutes (replaces) the bracketed word segment correctly and completes the sentence meaningfully. Select the option 'no correction required' if the sentence is correct as given.

She (had a reputation) brilliance.

- Ans
- 1. No correction required
  - 2. have a reputation for
  - 3. has a reputation for
  - 4. has a reputation of

Question Type : MCQ  
Question ID : 264330135848  
Option 1 ID : 264330532262  
Option 2 ID : 264330532260  
Option 3 ID : 264330532259  
Option 4 ID : 264330532261  
Status : Answered  
Chosen Option : 3



Q.13 Choose the word that means the same as the given word.

Habitant

- Ans
- ✓ 1. Denizen
  - ✗ 2. Endemic
  - ✗ 3. Transient
  - ✗ 4. Exile

Question Type : MCQ  
Question ID : 264330135654  
Option 1 ID : 264330531514  
Option 2 ID : 264330531512  
Option 3 ID : 264330531513  
Option 4 ID : 264330531511  
Status : Answered  
Chosen Option : 1

Q.14 Select the most appropriate word for the given group of words.

A building where animals are butchered

- Ans
- ✓ 1. Abattoir
  - ✗ 2. Arbitrator
  - ✗ 3. Apologue
  - ✗ 4. Apostate



Question Type : MCQ  
Question ID : 264330135678  
Option 1 ID : 264330531606  
Option 2 ID : 264330531603  
Option 3 ID : 264330531604  
Option 4 ID : 264330531605  
Status : Answered  
Chosen Option : 1

**Q.15** Select the word from the options which is exactly opposite in meaning to the bracketed word given in the sentence below.

Hermione was pointing to the (nearest) window.

- Ans**
- 1. convenient
  - 2. remote
  - 3. adjacent
  - 4. abutting

Question Type : MCQ  
Question ID : 264330136128  
Option 1 ID : 264330533316  
Option 2 ID : 264330533317  
Option 3 ID : 264330533315  
Option 4 ID : 264330533318  
Status : Answered  
Chosen Option : 4

**Q.16** Fill in the blank with the most appropriate option.

He ruled well but \_\_\_\_\_, making closer friends with justice than with mercy.

- Ans**
- 1. watchfully
  - 2. watching
  - 3. watch
  - 4. watches

Question Type : MCQ  
Question ID : 264330136142  
Option 1 ID : 264330533374  
Option 2 ID : 264330533371  
Option 3 ID : 264330533372  
Option 4 ID : 264330533373  
Status : Answered  
Chosen Option : 1

**Q.17** Select the word segment that substitutes (replaces) the bracketed word segment correctly and completes the sentence meaningfully. Select the option 'no correction required' if the sentence is correct as given.

He was pleased to see them, especially as (Alice was disposed off to) be sympathetic rather than critical.

- Ans**
- 1. Alice was disposed of to
  - 2. Alice was disposed to of
  - 3. Alice was inclined to
  - 4. No correction required

Question Type : MCQ  
Question ID : 264330136166  
Option 1 ID : 264330533464  
Option 2 ID : 264330533465  
Option 3 ID : 264330533463  
Option 4 ID : 264330533466  
Status : Answered  
Chosen Option : 4

Q.18 Fill in the blank with the most appropriate option.

Though poor, he \_\_\_\_\_ proud of his learning.

- Ans
- 1. have been
  - 2. were
  - 3. could became
  - 4. was

Question Type : MCQ  
Question ID : 264330136141  
Option 1 ID : 264330533369  
Option 2 ID : 264330533368  
Option 3 ID : 264330533370  
Option 4 ID : 264330533367  
Status : Answered  
Chosen Option : 4

Q.19 Select the word segment that substitutes (replaces) the bracketed word segment correctly and completes the sentence meaningfully. Select the option 'no correction required' if the sentence is correct as given.  
(The big the house), the more difficult it is to maintain it.

- Ans
- 1. The big house
  - 2. The bigger the house
  - 3. No correction required
  - 4. The biggest the house

Question Type : MCQ  
Question ID : 264330135849  
Option 1 ID : 264330532264  
Option 2 ID : 264330532265  
Option 3 ID : 264330532266  
Option 4 ID : 264330532263  
Status : Answered  
Chosen Option : 2

Q.20 Select the most appropriate word for the given group of words.

Having a sharply strong taste or smell

- Ans
- 1. Satire
  - 2. Alchemy
  - 3. Pungent
  - 4. Remorse

Question Type : MCQ  
Question ID : 264330136757  
Option 1 ID : 264330535732  
Option 2 ID : 264330535731  
Option 3 ID : 264330535734  
Option 4 ID : 264330535733  
Status : Answered  
Chosen Option : 3

**Comprehension:**

In the following passage some words have been deleted. Fill in the blanks with the help of the alternatives given. Select the most appropriate option for each number.

Do you live in a house? You might be (1) \_\_\_\_\_ to learn that there are many, many kinds of (2) \_\_\_\_\_. Most people in the United States are used to live in houses made of wood or bricks. But many people around the world live in houses made of grass, dirt, or cloth.

In the Great Rift Valley of Eritrea, the nomadic people who are in the Atrtribe build their houses of straw. Their houses are shaped like (3) \_\_\_\_\_ – half spheres. The homes are small and cool. The people can move their houses when they want to move. Since the people are (4) \_\_\_\_\_, they move often. They (5) \_\_\_\_\_ their animals to new places in order to find food.

**SubQuestion No : 21**

**Q.21** Select the most appropriate option to fill in the blank No. 1.

- Ans**
- 1. soaked
  - 2. calculable
  - 3. certain
  - 4. surprised

Question Type : MCQ

Question ID : 264330135828

Option 1 ID : 264330532182

Option 2 ID : 264330532179

Option 3 ID : 264330532180

Option 4 ID : 264330532181

Status : Answered

Chosen Option : 4

**Comprehension:**

In the following passage some words have been deleted. Fill in the blanks with the help of the alternatives given. Select the most appropriate option for each number.

Do you live in a house? You might be (1) \_\_\_\_\_ to learn that there are many, many kinds of (2) \_\_\_\_\_. Most people in the United States are used to live in houses made of wood or bricks. But many people around the world live in houses made of grass, dirt, or cloth.

In the Great Rift Valley of Eritrea, the nomadic people who are in the Atrtribe build their houses of straw. Their houses are shaped like (3) \_\_\_\_\_ – half spheres. The homes are small and cool. The people can move their houses when they want to move. Since the people are (4) \_\_\_\_\_, they move often. They (5) \_\_\_\_\_ their animals to new places in order to find food.

**SubQuestion No : 22**

**Q.22** Select the most appropriate option to fill in the blank No. 2.

- Ans**
- 1. backhouses
  - 2. bead houses
  - 3. houses
  - 4. birdhouses

Question Type : MCQ

Question ID : 264330135829

Option 1 ID : 264330532183

Option 2 ID : 264330532185

Option 3 ID : 264330532184

Option 4 ID : 264330532186

Status : Answered

Chosen Option : 3

**Comprehension:**

In the following passage some words have been deleted. Fill in the blanks with the help of the alternatives given. Select the most appropriate option for each number.

Do you live in a house? You might be (1) \_\_\_\_\_ to learn that there are many, many kinds of (2) \_\_\_\_\_. Most people in the United States are used to live in houses made of wood or bricks. But many people around the world live in houses made of grass, dirt, or cloth.

In the Great Rift Valley of Eritrea, the nomadic people who are in the Atrtribe build their houses of straw. Their houses are shaped like (3) \_\_\_\_\_ – half spheres. The homes are small and cool. The people can move their houses when they want to move. Since the people are (4) \_\_\_\_\_, they move often. They (5) \_\_\_\_\_ their animals to new places in order to find food.

**SubQuestion No : 23**

**Q.23** Select the most appropriate option to fill in the blank No. 3.

- Ans**
- 1. pantheon
  - 2. vault
  - 3. stars
  - 4. domes

Question Type : MCQ

Question ID : 264330135830

Option 1 ID : 264330532189

Option 2 ID : 264330532187

Option 3 ID : 264330532190

Option 4 ID : 264330532188

Status : Answered

Chosen Option : 4

**Comprehension:**

In the following passage some words have been deleted. Fill in the blanks with the help of the alternatives given. Select the most appropriate option for each number.

Do you live in a house? You might be (1) \_\_\_\_\_ to learn that there are many, many kinds of (2) \_\_\_\_\_. Most people in the United States are used to live in houses made of wood or bricks. But many people around the world live in houses made of grass, dirt, or cloth.

In the Great Rift Valley of Eritrea, the nomadic people who are in the Atrtribe build their houses of straw. Their houses are shaped like (3) \_\_\_\_\_ – half spheres. The homes are small and cool. The people can move their houses when they want to move. Since the people are (4) \_\_\_\_\_, they move often. They (5) \_\_\_\_\_ their animals to new places in order to find food.

**SubQuestion No : 24**

**Q.24** Select the most appropriate option to fill in the blank No. 4.

- Ans**
- 1. nomads
  - 2. lost
  - 3. creative
  - 4. ill

Question Type : MCQ

Question ID : 264330135831

Option 1 ID : 264330532193

Option 2 ID : 264330532191

Option 3 ID : 264330532194

Option 4 ID : 264330532192

Status : Answered

Chosen Option : 1

**Comprehension:**

In the following passage some words have been deleted. Fill in the blanks with the help of the alternatives given. Select the most appropriate option for each number.

Do you live in a house? You might be (1) \_\_\_\_\_ to learn that there are many, many kinds of (2) \_\_\_\_\_. Most people in the United States are used to live in houses made of wood or bricks. But many people around the world live in houses made of grass, dirt, or cloth.

In the Great Rift Valley of Eritrea, the nomadic people who are in the Atribe build their houses of straw. Their houses are shaped like (3) \_\_\_\_\_ – half spheres. The homes are small and cool. The people can move their houses when they want to move. Since the people are (4) \_\_\_\_\_, they move often. They (5) \_\_\_\_\_ their animals to new places in order to find food.

**SubQuestion No : 25**

**Q.25** Select the most appropriate option to fill in the blank No. 5.

- Ans**
- 1. share
  - 2. take
  - 3. offer
  - 4. fetch

Question Type : **MCQ**

Question ID : **264330135832**

Option 1 ID : **264330532197**

Option 2 ID : **264330532195**

Option 3 ID : **264330532198**

Option 4 ID : **264330532196**

Status : **Answered**

Chosen Option : **2**

