



- ★ Latest Govt Job updates
- ★ Private Job updates
- ★ Free Mock tests available

Visit - teachingninja.in

Selection Post Phase IX 2021 Graduate level

Roll Number	
Candidate Name	
Venue Name	
Exam Date	15/03/2022
Exam Time	3:00 PM - 4:00 PM
Subject	Selection Post Graduate Level

Section : General Intelligence

Q.1 Select the option that is related to the third term in the same way as the second term is related to the first term.

AMOUNT : QWYKXJ :: MARKET :: ?

- Ans
- 1. INEAOX
 - 2. EIONXA
 - 3. EOIXNA
 - 4. IENOAX

Question ID : 65497840491

Status : Not Attempted and
Marked For Review

Chosen Option : --

Q.2 Select the combination of letters that when sequentially placed in the blanks of the given series will complete the series.

L_RTLP_T_PR_L_RT

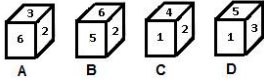
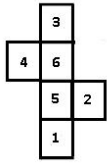
- Ans
- 1. P, L, R, T, P
 - 2. T, P, L, R, T
 - 3. T, L, P, T, R
 - 4. P, R, L, T, P

Question ID : 65497840605

Status : Answered

Chosen Option : 4

Q.3 Select the box(es) that can be formed by folding the given sheet along the lines (the numbers are shown to indicate the sides only).



- Ans
- 1. Only D
 - 2. Only A
 - 3. A and B
 - 4. A and C

Question ID : 65497840615
 Status : Answered
 Chosen Option : 3

Q.4 Which two signs should be interchanged to make the given equation correct?

$$306 \div 17 + 4 - 50 \times 8 = 30$$

- Ans
- 1. + and -
 - 2. + and \times
 - 3. + and \times
 - 4. \times and -

Question ID : 65497840613
 Status : Answered
 Chosen Option : 2

Q.5 Select the correct option that indicates the arrangement of the given words in the order in which they appear in an English dictionary.

1. Champion
2. Collinear
3. Charges
4. Condition
5. College

- Ans
- 1. 1, 5, 3, 2, 4
 - 2. 1, 3, 5, 2, 4
 - 3. 1, 3, 5, 4, 2
 - 4. 1, 2, 3, 4, 5

Question ID : 65497840595
 Status : Answered
 Chosen Option : 2

Q.6 Read the given statements and conclusions carefully. Assuming that the information given in the statements is true, even if it appears to be at variance with commonly known facts, decide which of the given conclusions logically follow(s) from the statements.

Statements:

No television is a candle.
All candles are boats.

Conclusions:

- I. No television is a boat.
- II. No boat is a television.
- III. Some boats are candles.
- IV. All boats are candles.

- Ans**
- 1. Only conclusion I follows.
 - 2. Only conclusion III follows.
 - 3. Both conclusions I and II follow.
 - 4. Both conclusions I and IV follow.

Question ID : 65497840712
Status : Answered
Chosen Option : 2

Q.7 Select the option that is related to the third word in the same way as the second word is related to the first word.

Seismology : Earthquakes : : Entomology : ?

- Ans**
- 1. Skulls
 - 2. Eggs
 - 3. Insects
 - 4. Shells

Question ID : 65497840597
Status : Answered
Chosen Option : 3

Q.8 In a certain code language, 'MARKET' is written as 'DJNOWB'. How will 'DETAIL' be written in that language?

- Ans**
- 1. HADQOF
 - 2. AHQDFO
 - 3. HGDWOL
 - 4. BAXQIF

Question ID : 65497840701
Status : Not Attempted and Marked For Review
Chosen Option : --

Q.9 In a certain code language, 'SIGN' is coded as '3614' and 'RISK' is coded as '7639'. How will 'KING' be coded in that language?

- Ans**
- 1. 3461
 - 2. 3641
 - 3. 9641
 - 4. 9614

Question ID : 65497840704
Status : Answered
Chosen Option : 3

Q.10 Read the given statements and conclusions carefully. Assuming that the information given in the statements is true, even if it appears to be at variance with commonly known facts, decide which of the given conclusions logically follow(s) from the statements.

Statements:

All rhombuses are tangents.

All chords are tangents.

Conclusions:

I. Some rhombuses being chords is a possibility.

II. Some tangents are rhombuses.

- Ans
- 1. Neither conclusion I nor II follows
 - 2. Only conclusion I follows
 - 3. Both conclusions I and II follow
 - 4. Only conclusion II follows

Question ID : 65497840507

Status : Answered

Chosen Option : 3

Q.11 Select the option that is related to the third number in the same way as the second number is related to the first number and the sixth number is related to the fifth number.

7 : 44 :: 6 : ? :: 9 : 76

- Ans
- 1. 32
 - 2. 33
 - 3. 34
 - 4. 31

Question ID : 65497840510

Status : Answered

Chosen Option : 1

Q.12 Select the correct mirror image of the given combination when the mirror is placed at PQ as shown.

S P E C T R U M

P

Q

- Ans
- 1. M U R T C E P S
 - 2. M U R C T E P S
 - 3. 2 Ɂ E 1 C Ɂ U W
 - 4. 2 Ɂ E C 1 Ɂ U W

Question ID : 65497840617

Status : Answered

Chosen Option : 1

Q.13 A is married to B, whose sister C is the daughter of D. E is the son of D and has only one sister. F is the niece of E. D has three children. C is unmarried. How is A related to F?

- Ans
- 1. Grandmother
 - 2. Father
 - 3. Aunt
 - 4. Mother

Question ID : 65497840607

Status : Answered

Chosen Option : 4

Q.14 In a certain code language, 'LATEX' is written as 'OFGJC', and 'RIGHT' is written as 'INTSG. How will 'SMILE' be written in that language?

- Ans
- 1. HNJNO
 - 2. HNONJ
 - 3. HJNON
 - 4. HNNOJ

Question ID : 65497840499
Status : Answered
Chosen Option : 2

Q.15 'X % Y' means 'X is the son of Y';
'X ∨ Y' means 'X is the wife of Y';
'X ∩ Y' means 'X is the brother of Y';
'X ∪ Y' means 'X is the mother of Y';
'X ≠ Y' means 'X is the sister of Y'.
Which of the following relations is true based on the relations in the given equation?
'K ∪ L ∩ N ∨ M % S ∨ T'

- Ans
- 1. M is the son-in-law of K.
 - 2. L is the brother of M.
 - 3. T is the father of N.
 - 4. K is the wife of T.

Question ID : 65497840506
Status : Answered
Chosen Option : 1

Q.16 In a certain code language, 'GROUP' is coded as '415202613', and 'SOUND' is coded as '162026111'. How will 'FRESH' be coded in that language?

- Ans
- 1. 31510165
 - 2. 31051165
 - 3. 30151651
 - 4. 35110651

Question ID : 65497840603
Status : Marked For Review
Chosen Option : 1

Q.17 उस विकल्प का चयन करें जो तीसरे शब्द से उसी प्रकार संबंधित है, जिस प्रकार दूसरा शब्द पहले शब्द से संबंधित है।

वंचित : पुनर्स्थापित :: विलक्षण : ?

- Ans
- 1. पारंपरिक
 - 2. अनोखा
 - 3. परिचित
 - 4. असामान्य

Question ID : 65497840700
Status : Answered
Chosen Option : 1

Q.18 Select the option that is related to the third term in the same way as the second term is related to the first term.

TABLE : ALBTE :: WATCH : ?

- Ans
- 1. ACHTW
 - 2. AHCWT
 - 3. ATCHW
 - 4. ACTWH

Question ID : 65497840696
Status : Answered
Chosen Option : 4

Q.19 Select the number from among the given options that can replace the question mark (?) in the following series.

14, 25, 37, 53, 96, 155, ?

- Ans
- 1. 369
 - 2. 396
 - 3. 339
 - 4. 393

Question ID : 65497840713
Status : Not Attempted and Marked For Review
Chosen Option : --

Q.20 Select the combination of letters that when sequentially placed in the blanks of the given series will complete the series.

P _ QU _ V _ T _ URVPTQ _ R _ P _ QU _ V

- Ans
- 1. P, T, Q, R, T, V, R, U
 - 2. R, T, P, Q, T, U, R, V
 - 3. T, P, R, Q, T, U, V, R
 - 4. T, R, P, Q, U, V, T, R

Question ID : 65497840504
Status : Answered
Chosen Option : 4

Q.21 In a certain code language, 'MARGIN' is written as 'NDWEEH', and 'SERIES' is written as 'THWGAM'. How will 'LARGER' be written in that language?

- Ans
- 1. MDWEAL
 - 2. KDEMLI
 - 3. KDMEIL
 - 4. KXMIIX

Question ID : 65497840600
Status : Answered
Chosen Option : 1

Q.22 Select the correct option that indicates the arrangement of the given words in the order in which they appear in an English dictionary.

1. Services
2. Sensational
3. Semesters
4. Systematic
5. Selections
6. Synergy

- Ans
- 1. 5, 2, 3, 6, 1, 4
 - 2. 5, 2, 3, 1, 6, 4
 - 3. 5, 3, 2, 1, 6, 4
 - 4. 5, 4, 1, 3, 2, 6

Question ID : 65497840698

Status : Answered

Chosen Option : 3

Q.23 In a certain code language, 'REASON' is coded as '69', and 'CLAIMS' is coded as '55'. How will 'ACTION' be coded in that language?

- Ans
- 1. 79
 - 2. 69
 - 3. 89
 - 4. 59

Question ID : 65497840502

Status : Not Answered

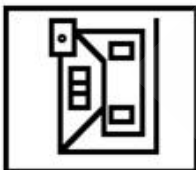
Chosen Option : --

Q.24 Select the option in which the given figure is embedded (rotation is NOT allowed).



Ans

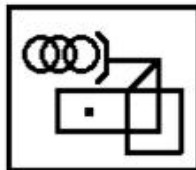
1.



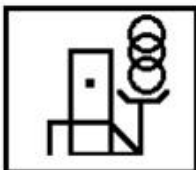
2.



3.



4.

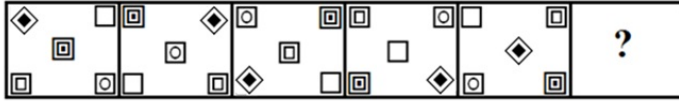


Question ID : 65497840514

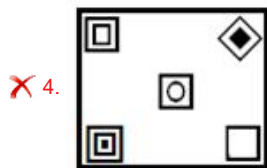
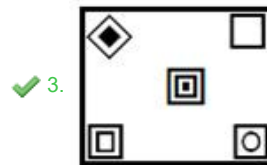
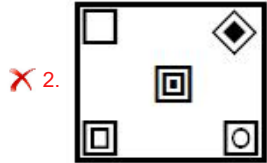
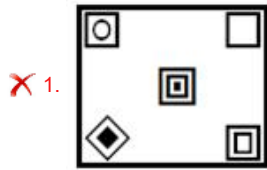
Status : Answered

Chosen Option : 2

Q.25 Select the figure from among the given options that can replace the question mark (?) in the following series.



Ans



Question ID : 65497840716
Status : Answered
Chosen Option : 3

Section : English Language

Q.1 Select the option that expresses the given sentence in reported speech.

The lawyer said to the witness, "Tell the court what you saw on Saturday night."

- Ans
- ✗ 1. The lawyer told the witness to tell the court what you saw on Saturday night.
 - ✗ 2. The lawyer asked the witness to tell the court what you have seen on Saturday night.
 - ✓ 3. The lawyer asked the witness to tell the court what he had seen on Saturday night.
 - ✗ 4. The lawyer ordered the witness to tell the court what I had seen on Saturday night.

Question ID : 65497840519
Status : Answered
Chosen Option : 3

Q.2 Select the most appropriate ANTONYM of the given word.

Diminish

- Ans
- ✗ 1. Abate
 - ✗ 2. Recede
 - ✗ 3. Curtail
 - ✓ 4. Extend

Question ID : 65497840629
Status : Answered
Chosen Option : 4

Q.3 Select the INCORRECTLY spelt word.

- Ans 1. Enthusiasm
 2. Entity
 3. Exceptional
 4. Eminent

Question ID : 65497840734

Status : Not Attempted and Marked For Review

Chosen Option : --

Q.4 Select the option that can be used as a one-word substitute for the given group of words.

The dark shape and outline of something visible against a bright background

- Ans 1. Mirage
 2. Silhouette
 3. Image
 4. Shadow

Question ID : 65497840529

Status : Not Attempted and Marked For Review

Chosen Option : --

Q.5 Sentences of a paragraph are given below in jumbled order. Arrange the sentences in the correct order to form a meaningful and coherent paragraph.

- A. Besides, it is also an occasion to commemorate the signing of the Ramsar Convention on wetlands in 1971.
B. World Wetland Day is celebrated on 2 February to raise awareness about the critical importance of wetlands.
C. Unfortunately, these valuable wetlands are disappearing three times faster than the forest areas.
D. The Convention upholds the wetlands as the world's most economically valuable ecosystems.

- Ans 1. BADC
 2. DCAB
 3. BCDA
 4. DABC

Question ID : 65497840627

Status : Answered

Chosen Option : 1

Q.6 Select the option that expresses the given sentence in indirect speech.

I said to her, "What brought you here?"

- Ans 1. I asked her what had brought her there.
 2. I asked her what had brought her here.
 3. I asked her that what brought her here.
 4. I asked her what brought her there.

Question ID : 65497840724

Status : Answered

Chosen Option : 1

Q.7 Select the most appropriate option to fill in the blank.

The tribals of India are _____ still a neglected lot.

- Ans
- 1. by and large
 - 2. over and above
 - 3. all in all
 - 4. by and by

Question ID : 65497840728
Status : Answered
Chosen Option : 1

Q.8 Select the option that expresses the given sentence in active voice.

A guarantee has been given by the new government to make the long-promised reforms a reality.

- Ans
- 1. The new government had given a guarantee to make the long-promised reforms a reality.
 - 2. The guarantee had given a new government to make the long-promised reforms a reality.
 - 3. The new government has given a guarantee to make the long-promised reforms a reality.
 - 4. The new government has given the long-promised reforms a reality to make a guarantee.

Question ID : 65497840518
Status : Answered
Chosen Option : 3

Q.9 Select the option that expresses the given sentence in passive voice.

Touts cheat tourists so now they are careful.

- Ans
- 1. Tourists were cheated by touts so now they are careful.
 - 2. Tourists is cheated by touts so now they are careful.
 - 3. Tourists are cheated by touts so now they are careful.
 - 4. Tourists are being cheated by touts so now they are careful.

Question ID : 65497840619
Status : Answered
Chosen Option : 3

Q.10 Select the option that will improve the underlined part of the given sentence. In case no improvement is needed, select 'No improvement required'.

If you had listened to me, you will not be in trouble now.

- Ans
- 1. will not have been
 - 2. would not be
 - 3. would not being
 - 4. No improvement required

Question ID : 65497840725
Status : Answered
Chosen Option : 2

Q.11 Select the most appropriate synonym of the given word.

Contemptible

- Ans 1. Abhorrent
 2. Admirable
 3. Adamant
 4. Ambiguous

Question ID : 65497840730
Status : Answered
Chosen Option : 2

Q.12 The following sentence has been split into four segments. Identify the segment that contains a grammatical error.

Parents expect / children to / comply by / their wishes.

- Ans 1. their wishes
 2. children to
 3. Parents expect
 4. comply by

Question ID : 65497840720
Status : Answered
Chosen Option : 4

Q.13 Select the most appropriate meaning of the given idiom.

Out of the blue

- Ans 1. Completely unexpected
 2. Belonging to nobility
 3. Emerge victorious
 4. Carefully planned

Question ID : 65497840630
Status : Answered
Chosen Option : 1

Q.14 Select the most appropriate option that can substitute the underlined segment in the given sentence. If there is no need to substitute it, select 'No substitution required'.

He stepped on to the encrusted snow and began to slither and slide forward, stamping his foot from time to time to ascertain how it was sturdy.

- Ans 1. how sturdy it was
 2. what was sturdy
 3. No substitution required
 4. how was it sturdy

Question ID : 65497840522
Status : Answered
Chosen Option : 1

Q.15 Select the most appropriate option to fill in the blank.

The chairman apprised the members _____ the company's current financial status.

- Ans
- 1. to
 - 2. off
 - 3. of
 - 4. with

Question ID : 65497840523

Status : Marked For Review

Chosen Option : 4

Comprehension:

Read the given passage and answer the questions that follow.

In the late spring of 1930, Philip Rider came to the abandoned lighthouse at the mouth of the river Adder on the Essex coast. He was a painter of birds and of nature. He was afflicted with a hunched back and a deformed, twisted hand. Rider loved all creatures. His heart was filled with pity and understanding. He had mastered his handicap, but he could not master the rejection he suffered because of his appearance. People shunned him as evil. This drove him into seclusion.

One November afternoon, a child approached his lighthouse studio. In her arms, she carried a burden. She was no more than twelve, slender, dirty, nervous and timid as a bird, but beneath the dirt, as beautiful as a fairy. She seemed frightened of the ugly man she had come to see. But, she had heard somewhere in the swamp-land, that this man who lived in the lighthouse had magic that could heal injured things.

She had never seen Rider before and was close to fleeing in panic when she saw him. She stood there staring, but his voice was deep and kind when he spoke to her. "What is it, child?" She timidly moved forward. The thing she carried in her arms was a large white bird, and it was quite still. The girl placed it in his arms. "Is it still alive?" she asked. "Yes. Yes, I think so. Come in, child, come in." Rider went inside bearing the bird, which he placed upon a table, where it moved feebly.

Curiosity overcame fear. The little girl followed and found herself in a room warmed by a coal fire, with many coloured pictures on the walls. The bird fluttered. With his good right hand Rider spread one of its immense white wings. Rider looked and marvelled, and said, "Child, where did you find it?"

"In the marsh, sir. What – what is it, sir?"

"It is a snow goose from Canada. But how in heaven did it come here?"

Concerned, she said, "Can you heal it, sir?"

"Yes, yes," said Rider. "We will try. Come, you shall help me."

There were scissors and bandages and splints on a shelf. He was marvellously deft, even with the crooked hand. He said, "Ah, she has been shot, poor thing. Her leg is broken, and also the wing tip, but not badly. We will bandage the wing closer to her body, so that she cannot move it until it has set, and then make a splint for the poor leg."

"We will call her the 'Lost Princess'. And in a few days, she will be much better." He reached into his pocket and produced a handful of grains. The snow goose opened its round yellow eyes and nibbled at it. The child laughed with delight.

SubQuestion No : 16

Q.16 Rider was 'marvellously deft'. This means that he was:

- Ans
- 1. skillful
 - 2. awkward
 - 3. inept
 - 4. sincere

Question ID : 65497840643

Status : Marked For Review

Chosen Option : 3

Comprehension:

Read the given passage and answer the questions that follow.

In the late spring of 1930, Philip Rider came to the abandoned lighthouse at the mouth of the river Adder on the Essex coast. He was a painter of birds and of nature. He was afflicted with a hunched back and a deformed, twisted hand. Rider loved all creatures. His heart was filled with pity and understanding. He had mastered his handicap, but he could not master the rejection he suffered because of his appearance. People shunned him as evil. This drove him into seclusion.

One November afternoon, a child approached his lighthouse studio. In her arms, she carried a burden. She was no more than twelve, slender, dirty, nervous and timid as a bird, but beneath the dirt, as beautiful as a fairy. She seemed frightened of the ugly man she had come to see. But, she had heard somewhere in the swamp-land, that this man who lived in the lighthouse had magic that could heal injured things.

She had never seen Rider before and was close to fleeing in panic when she saw him. She stood there staring, but his voice was deep and kind when he spoke to her. "What is it, child?" She timidly moved forward. The thing she carried in her arms was a large white bird, and it was quite still. The girl placed it in his arms. "Is it still alive?" she asked. "Yes. Yes, I think so. Come in, child, come in." Rider went inside bearing the bird, which he placed upon a table, where it moved feebly.

Curiosity overcame fear. The little girl followed and found herself in a room warmed by a coal fire, with many coloured pictures on the walls. The bird fluttered. With his good right hand Rider spread one of its immense white wings. Rider looked and marvelled, and said, "Child, where did you find it?"

"In the marsh, sir. What – what is it, sir?"

"It is a snow goose from Canada. But how in heaven did it come here?"

Concerned, she said, "Can you heal it, sir?"

"Yes, yes," said Rider. "We will try. Come, you shall help me."

There were scissors and bandages and splints on a shelf. He was marvellously deft, even with the crooked hand. He said, "Ah, she has been shot, poor thing. Her leg is broken, and also the wing tip, but not badly. We will bandage the wing closer to her body, so that she cannot move it until it has set, and then make a splint for the poor leg."

"We will call her the 'Lost Princess'. And in a few days, she will be much better." He reached into his pocket and produced a handful of grains. The snow goose opened its round yellow eyes and nibbled at it. The child laughed with delight.

SubQuestion No : 17

Q.17 Which of the following words does NOT describe the girl aptly?

- Ans
- 1. Beautiful
 - 2. Curious
 - 3. Unkind
 - 4. Nervous

Question ID : 65497840641

Status : Answered

Chosen Option : 3

Comprehension:

Read the given passage and answer the questions that follow.

In the late spring of 1930, Philip Rider came to the abandoned lighthouse at the mouth of the river Adder on the Essex coast. He was a painter of birds and of nature. He was afflicted with a hunched back and a deformed, twisted hand. Rider loved all creatures. His heart was filled with pity and understanding. He had mastered his handicap, but he could not master the rejection he suffered because of his appearance. People shunned him as evil. This drove him into seclusion.

One November afternoon, a child approached his lighthouse studio. In her arms, she carried a burden. She was no more than twelve, slender, dirty, nervous and timid as a bird, but beneath the dirt, as beautiful as a fairy. She seemed frightened of the ugly man she had come to see. But, she had heard somewhere in the swamp-land, that this man who lived in the lighthouse had magic that could heal injured things.

She had never seen Rider before and was close to fleeing in panic when she saw him. She stood there staring, but his voice was deep and kind when he spoke to her. "What is it, child?" She timidly moved forward. The thing she carried in her arms was a large white bird, and it was quite still. The girl placed it in his arms. "Is it still alive?" she asked. "Yes. Yes, I think so. Come in, child, come in." Rider went inside bearing the bird, which he placed upon a table, where it moved feebly.

Curiosity overcame fear. The little girl followed and found herself in a room warmed by a coal fire, with many coloured pictures on the walls. The bird fluttered. With his good right hand Rider spread one of its immense white wings. Rider looked and marvelled, and said, "Child, where did you find it?"

"In the marsh, sir. What – what is it, sir?"

"It is a snow goose from Canada. But how in heaven did it come here?"

Concerned, she said, "Can you heal it, sir?"

"Yes, yes," said Rider. "We will try. Come, you shall help me."

There were scissors and bandages and splints on a shelf. He was marvellously deft, even with the crooked hand. He said, "Ah, she has been shot, poor thing. Her leg is broken, and also the wing tip, but not badly. We will bandage the wing closer to her body, so that she cannot move it until it has set, and then make a splint for the poor leg."

"We will call her the 'Lost Princess'. And in a few days, she will be much better." He reached into his pocket and produced a handful of grains. The snow goose opened its round yellow eyes and nibbled at it. The child laughed with delight.

SubQuestion No : 18

Q.18 Which of the following is true keeping in mind the character of Philip Rider?

- Ans 1. A little learning is a dangerous thing.
2. Appearances are deceptive.
3. A picture is worth a thousand words.
4. Actions speak louder than words.

Question ID : 65497840644

Status : Answered

Chosen Option : 2

Comprehension:

Read the given passage and answer the questions that follow.

In the late spring of 1930, Philip Rider came to the abandoned lighthouse at the mouth of the river Adder on the Essex coast. He was a painter of birds and of nature. He was afflicted with a hunched back and a deformed, twisted hand. Rider loved all creatures. His heart was filled with pity and understanding. He had mastered his handicap, but he could not master the rejection he suffered because of his appearance. People shunned him as evil. This drove him into seclusion.

One November afternoon, a child approached his lighthouse studio. In her arms, she carried a burden. She was no more than twelve, slender, dirty, nervous and timid as a bird, but beneath the dirt, as beautiful as a fairy. She seemed frightened of the ugly man she had come to see. But, she had heard somewhere in the swamp-land, that this man who lived in the lighthouse had magic that could heal injured things.

She had never seen Rider before and was close to fleeing in panic when she saw him. She stood there staring, but his voice was deep and kind when he spoke to her. "What is it, child?" She timidly moved forward. The thing she carried in her arms was a large white bird, and it was quite still. The girl placed it in his arms. "Is it still alive?" she asked. "Yes. Yes, I think so. Come in, child, come in." Rider went inside bearing the bird, which he placed upon a table, where it moved feebly.

Curiosity overcame fear. The little girl followed and found herself in a room warmed by a coal fire, with many coloured pictures on the walls. The bird fluttered. With his good right hand Rider spread one of its immense white wings. Rider looked and marvelled, and said, "Child, where did you find it?"

"In the marsh, sir. What – what is it, sir?"

"It is a snow goose from Canada. But how in heaven did it come here?"

Concerned, she said, "Can you heal it, sir?"

"Yes, yes," said Rider. "We will try. Come, you shall help me."

There were scissors and bandages and splints on a shelf. He was marvellously deft, even with the crooked hand. He said, "Ah, she has been shot, poor thing. Her leg is broken, and also the wing tip, but not badly. We will bandage the wing closer to her body, so that she cannot move it until it has set, and then make a splint for the poor leg."

"We will call her the 'Lost Princess'. And in a few days, she will be much better." He reached into his pocket and produced a handful of grains. The snow goose opened its round yellow eyes and nibbled at it. The child laughed with delight.

SubQuestion No : 19

Q.19 Why did the girl bring the injured bird to Rider?

- Ans**
- 1. She wanted to find out what bird it was.
 - 2. She could not carry the heavy burden any more.
 - 3. She wanted Rider to keep the bird as a pet.
 - 4. She believed Rider could heal it with his magic.

Question ID : 65497840642

Status : Answered

Chosen Option : 4

Comprehension:

Read the given passage and answer the questions that follow.

In the late spring of 1930, Philip Rider came to the abandoned lighthouse at the mouth of the river Adder on the Essex coast. He was a painter of birds and of nature. He was afflicted with a hunched back and a deformed, twisted hand. Rider loved all creatures. His heart was filled with pity and understanding. He had mastered his handicap, but he could not master the rejection he suffered because of his appearance. People shunned him as evil. This drove him into seclusion.

One November afternoon, a child approached his lighthouse studio. In her arms, she carried a burden. She was no more than twelve, slender, dirty, nervous and timid as a bird, but beneath the dirt, as beautiful as a fairy. She seemed frightened of the ugly man she had come to see. But, she had heard somewhere in the swamp-land, that this man who lived in the lighthouse had magic that could heal injured things.

She had never seen Rider before and was close to fleeing in panic when she saw him. She stood there staring, but his voice was deep and kind when he spoke to her. "What is it, child?" She timidly moved forward. The thing she carried in her arms was a large white bird, and it was quite still. The girl placed it in his arms. "Is it still alive?" she asked. "Yes. Yes, I think so. Come in, child, come in." Rider went inside bearing the bird, which he placed upon a table, where it moved feebly.

Curiosity overcame fear. The little girl followed and found herself in a room warmed by a coal fire, with many coloured pictures on the walls. The bird fluttered. With his good right hand Rider spread one of its immense white wings. Rider looked and marvelled, and said, "Child, where did you find it?"

"In the marsh, sir. What – what is it, sir?"

"It is a snow goose from Canada. But how in heaven did it come here?"

Concerned, she said, "Can you heal it, sir?"

"Yes, yes," said Rider. "We will try. Come, you shall help me."

There were scissors and bandages and splints on a shelf. He was marvellously deft, even with the crooked hand. He said, "Ah, she has been shot, poor thing. Her leg is broken, and also the wing tip, but not badly. We will bandage the wing closer to her body, so that she cannot move it until it has set, and then make a splint for the poor leg."

"We will call her the 'Lost Princess'. And in a few days, she will be much better." He reached into his pocket and produced a handful of grains. The snow goose opened its round yellow eyes and nibbled at it. The child laughed with delight.

SubQuestion No : 20**Q.20 Why did Rider choose to live in the abandoned lighthouse?**

- Ans 1. He enjoyed the view of the river.
2. Human society had rejected him.
3. He hated the sight of people.
4. He wanted to paint in privacy.

Question ID : 65497840640

Status : Answered

Chosen Option : 2

Comprehension:

In the following passage, some words have been deleted. Read the passage carefully and select the most appropriate option to fill in each blank.

It should come as no surprise that bees know a lot about honey. They aren't only honey producers; (1) _____ are also consumers, and pretty sophisticated ones at that. Offer a sick bee (2) _____ varieties of honey, for example, and it will choose the one that (3) _____ fights off its infection. Components in honey can help bees live longer, (4) _____ their tolerance of harsh conditions such as intense cold and increase their (5) _____ to fight off infections and heal wounds.

SubQuestion No : 21**Q.21 Select the most appropriate option to fill in the blank no. 1.**

- Ans 1. they
2. it
3. them
4. we

Question ID : 65497840532

Status : Answered

Chosen Option : 1

Comprehension:

In the following passage, some words have been deleted. Read the passage carefully and select the most appropriate option to fill in each blank.

It should come as no surprise that bees know a lot about honey. They aren't only honey producers; (1) _____ are also consumers, and pretty sophisticated ones at that. Offer a sick bee (2) _____ varieties of honey, for example, and it will choose the one that (3) _____ fights off its infection. Components in honey can help bees live longer, (4) _____ their tolerance of harsh conditions such as intense cold and increase their (5) _____ to fight off infections and heal wounds.

SubQuestion No : 22

Q.22 Select the most appropriate option to fill in the blank no. 2.

- Ans
- 1. similar
 - 2. singular
 - 3. parallel
 - 4. different

Question ID : 65497840533
Status : Answered
Chosen Option : 4

Comprehension:

In the following passage, some words have been deleted. Read the passage carefully and select the most appropriate option to fill in each blank.

It should come as no surprise that bees know a lot about honey. They aren't only honey producers; (1) _____ are also consumers, and pretty sophisticated ones at that. Offer a sick bee (2) _____ varieties of honey, for example, and it will choose the one that (3) _____ fights off its infection. Components in honey can help bees live longer, (4) _____ their tolerance of harsh conditions such as intense cold and increase their (5) _____ to fight off infections and heal wounds.

SubQuestion No : 23

Q.23 Select the most appropriate option to fill in the blank no. 3.

- Ans
- 1. more
 - 2. most
 - 3. best
 - 4. better

Question ID : 65497840534
Status : Answered
Chosen Option : 4

Comprehension:

In the following passage, some words have been deleted. Read the passage carefully and select the most appropriate option to fill in each blank.

It should come as no surprise that bees know a lot about honey. They aren't only honey producers; (1) _____ are also consumers, and pretty sophisticated ones at that. Offer a sick bee (2) _____ varieties of honey, for example, and it will choose the one that (3) _____ fights off its infection. Components in honey can help bees live longer, (4) _____ their tolerance of harsh conditions such as intense cold and increase their (5) _____ to fight off infections and heal wounds.

SubQuestion No : 24

Q.24 Select the most appropriate option to fill in the blank no. 4.

- Ans
- 1. boosting
 - 2. boosts
 - 3. boosted
 - 4. boost

Question ID : 65497840535
Status : Answered
Chosen Option : 4

Comprehension:

In the following passage, some words have been deleted. Read the passage carefully and select the most appropriate option to fill in each blank.

It should come as no surprise that bees know a lot about honey. They aren't only honey producers; (1) _____ are also consumers, and pretty sophisticated ones at that. Offer a sick bee (2) _____ varieties of honey, for example, and it will choose the one that (3) _____ fights off its infection. Components in honey can help bees live longer, (4) _____ their tolerance of harsh conditions such as intense cold and increase their (5) _____ to fight off infections and heal wounds.

SubQuestion No : 25

Q.25 Select the most appropriate option to fill in the blank no. 5.

- Ans 1. talent
 2. aptitude
 3. ability
 4. skill

Question ID : 65497840536
Status : Answered
Chosen Option : 3

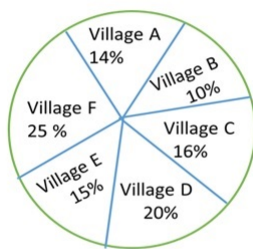
Section : Quantitative Aptitude

Q.1 एक कार और एक बस एक ही दिशा में चल रही थीं। सुबह 7:30 a.m. पर 72 km/h की चाल से चल रही कार बस से 4.2 km पीछे थी। सुबह 8.15 a.m. पर कार बस से 15.8 km आगे थी। कार की चाल और बस की चाल का अनुपात क्या है?

- Ans 1. 36 : 17
 2. 27 : 17
 3. 9 : 4
 4. 9 : 5

Question ID : 65497840760
Status : Not Attempted and Marked For Review
Chosen Option : --

Q.2 Study the given pie chart that represents the percentage population of six villages A, B, C, D, E and F in 2020, and answer the question that follows.



Village	Percentage of population below poverty line
A	30
B	45
C	55
D	60
E	58
F	40

If the population below poverty line in village D is 42,000, then the total population in all the six villages taken together is:

- Ans 1. 3,00,000
 2. 3,50,000
 3. 2,95,000
 4. 2,80,000

Question ID : 65497840668
Status : Answered
Chosen Option : 2

Q.3 By selling an article for ₹425.25, there is a loss of 5.5%. If the same article is sold for ₹465.75, then what is the profit per cent?

- Ans**
- 1. 3.5%
 - 2. 3%
 - 3. 4%
 - 4. 5.5%

Question ID : 65497840754
Status : Marked For Review
Chosen Option : 2

Q.4 What is the radius (in m) of a circular field whose area is equal to six times the area of a triangular field whose sides are 35 m, 53 m and 66 m? (Take $\pi = \frac{22}{7}$).

- Ans**
- 1. 42
 - 2. $14\sqrt{3}$
 - 3. $14\sqrt{6}$
 - 4. 21

Question ID : 65497840557
Status : Not Attempted and Marked For Review
Chosen Option : --

Q.5 If $(x + 4)^3 + (2x + 1)^3 + (2x + 5)^3 = (6x + 3)(x + 4)(2x + 5)$, then what is the value of x ?

- Ans**
- 1. 1
 - 2. -2
 - 3. 2
 - 4. -1

Question ID : 65497840662
Status : Answered
Chosen Option : 2

Q.6 A sells an article to B at 20% loss, who further sells it to C at 18% profit. Later on, C sells it to D at 10% profit. If C has a profit of ₹944, then how much is the loss to A?

- Ans**
- 1. ₹2,500
 - 2. ₹2,000
 - 3. ₹1,750
 - 4. ₹1,600

Question ID : 65497840551
Status : Not Attempted and Marked For Review
Chosen Option : --

Q.7 It is given that $\triangle ABC \sim \triangle XYZ$ and Area $\triangle ABC$: Area $\triangle XYZ = 81 : 25$. If $AB = 18$ cm, $BC = 10$ cm, $CA = 15$ cm, then what is the side XZ (in cm)?

- Ans**
- 1. $\frac{10}{3}$
 - 2. $\frac{75}{16}$
 - 3. $\frac{15}{4}$
 - 4. $\frac{25}{3}$

Question ID : 65497840664
Status : Answered
Chosen Option : 4

Q.8 P can do one-fourth piece of some work in 18 days. She completed 37.5% of that work and left it. Q completed the remaining work in 40 days. Working together they will complete $\left(\frac{17}{48}\right)$ part of the same work in:

- Ans**
- 1. 6 days
 - 2. 10 days
 - 3. 12 days
 - 4. 8 days

Question ID : 65497840555
Status : Not Attempted and Marked For Review
Chosen Option : --

Q.9 If the 9-digit number $4x92y6588$ is exactly divisible by 99 ($x + y < 10$), then what is the value of $2(y - x)$?

- Ans**
- 1. -2
 - 2. -1
 - 3. 2
 - 4. 1

Question ID : 65497840646
Status : Not Attempted and Marked For Review
Chosen Option : --

Q.10 If a 4-digit number $273x$ is divisible by 12 and a 7-digit number $y854z06$ is divisible by 11, then what is the value of $(x + y + z)$?

- Ans**
- 1. 12
 - 2. 6
 - 3. 20
 - 4. 18

Question ID : 65497840747
Status : Answered
Chosen Option : 4

Q.11 A trader sold an article for ₹440 after giving 12% discount on its marked price. Had he not given the discount, he would have earned a profit of 25%. What is the cost price (in ₹) of the article?

- Ans**
- 1. 400
 - 2. 350
 - 3. 420
 - 4. 380

Question ID : 65497840751
Status : Answered
Chosen Option : 1

Q.12 In a class of 50 students, 40% are boys and the remaining are girls. The average score of the girls in a test is 60% more than that of the boys. If the average score of all the boys and girls in the class is 51, then what is the average score of the boys?

- Ans**
- 1. 39.5
 - 2. 32.5
 - 3. 35.5
 - 4. 37.5

Question ID : 65497840647
Status : Answered
Chosen Option : 4

Q.13 Sulabh saves 25% of his income. If his income increases by 40% and expenditure increases by 45%, then by what per cent will his savings increase or decrease?

- Ans**
- 1. Decreases by 20%
 - 2. Decreases by 5%
 - 3. Increases by 25%
 - 4. Increases by 20%

Question ID : 65497840753
Status : Answered
Chosen Option : 3

Q.14 At what rate percentage per annum will ₹14,400 amount to ₹15,876 in one year, if interest is compounded half-yearly?

- Ans**
- 1. 10%
 - 2. 12%
 - 3. 15%
 - 4. 8%

Question ID : 65497840656
Status : Answered
Chosen Option : 1

Q.15 If x is a real quantity, what is the minimum value of $(16 \cos^2 x + 9 \sec^2 x)$?

- Ans
- 1. 24
 - 2. 20
 - 3. 30
 - 4. 40

Question ID : 65497840665
Status : Answered
Chosen Option : 1

Q.16 If $3x(3x - 8) + y(y + 1) + 4z^2 - 2z + 16\frac{1}{2} = 0$, then what is the value of $(6x + y + 2z)$?

- Ans
- 1. 2
 - 2. 6
 - 3. 8
 - 4. 4

Question ID : 65497840558
Status : Answered
Chosen Option : 3

Q.17 The income of a company increases by $x\%$ per year. If its income is ₹31,25,000 in the year 2019, and the income in 2017 was ₹20,00,000, then what is the value of x ?

- Ans
- 1. 18
 - 2. 15
 - 3. 20
 - 4. 25

Question ID : 65497840650
Status : Marked For Review
Chosen Option : 1

Q.18 If $\sec(5\alpha - 15^\circ) = \operatorname{cosec}(15^\circ - 2\alpha)$, then the value of $\cos 3\alpha + \sin 2\alpha + \cot \alpha$ is:

- Ans
- 1. $\frac{3\sqrt{3}}{2}$
 - 2. $\frac{\sqrt{3}(\sqrt{3}-1)}{2}$
 - 3. $\frac{\sqrt{3}}{2}$
 - 4. $\frac{\sqrt{3}(\sqrt{3}+1)}{2}$

Question ID : 65497840564
Status : Answered
Chosen Option : 1

Q.19 If $x^8 - 34x^4 + 1 = 0, x > 0$, then what is the value of $x^6 + \frac{1}{x^6}$?

- Ans
- 1. 192
 - 2. 198
 - 3. 188
 - 4. 194

Question ID : 65497840763
Status : Answered
Chosen Option : 2

Q.20 A certain sum is divided among A, B, C and D such that the ratio of the shares of A : B = 1 : 3; B : C = 2 : 5; C : D = 2 : 3. If the difference between the shares of B and D is ₹6,435, then the total sum (in ₹) is:

- Ans
- 1. 14,775
 - 2. 15,477
 - 3. 17,457
 - 4. 17,745

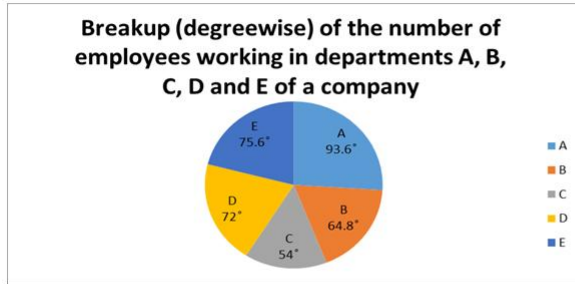
Question ID : 65497840655
Status : Answered
Chosen Option : 4

Q.21 In vessels X and Y, the ratios of acid and water are 3 : 7 and 1 : 3, respectively. The contents of X and Y are mixed in the ratio of 1 : 2 to get a solution in which acid and water are in the ratio a : b. What is the value of $\frac{b+a}{b-a}$?

- Ans
- 1. $\frac{15}{7}$
 - 2. $\frac{12}{7}$
 - 3. $\frac{13}{7}$
 - 4. $\frac{11}{7}$

Question ID : 65497840552
Status : Answered
Chosen Option : 4

Q.22 Study the given graph and answer the question that follows.



Number of employees in Department B = 432

If the ratio of the male and female employees working in department A is 5 : 11, and 40% of the employees in department C are females, then what is the ratio of the number of female employees in department A to that of male employees in department C?

- Ans
- ✓ 1. 143 : 72
 - ✗ 2. 100 : 91
 - ✗ 3. 113 : 75
 - ✗ 4. 111 : 124

Question ID : 65497840567
Status : Not Answered
Chosen Option : --

Q.23 Study the given table and answer the question that follows.

The table shows the income and expenditure of companies A and B from 2015 to 2019 (in ₹ crore).

Year	Company A		Company B	
	Income	Expenditure	Income	Expenditure
2015	110	90	160	120
2016	150	125	180	125
2017	200	140	225	140
2018	240	175	320	275
2019	300	220	360	300

The difference (in ₹ crore) between the total income of company B in 2015 and 2017 and the total expenditure of company A in 2016 and 2018 is x . The value of x lies between:

- Ans
- ✓ 1. 80 and 90
 - ✗ 2. 60 and 70
 - ✗ 3. 70 and 80
 - ✗ 4. 90 and 100

Question ID : 65497840769
Status : Answered
Chosen Option : 1

Q.24 The average weight of some children in a group is 43 kg. If 4 children, whose weights are 49.2 kg, 48.8 kg, 51.4 kg and 50.6 kg, join the group, the average weight of all the children now increases by $\frac{1}{2}$ kg. The number of children, initially, in the group is:

- Ans
- ✗ 1. 56
 - ✓ 2. 52
 - ✗ 3. 54
 - ✗ 4. 50

Question ID : 65497840546
Status : Answered
Chosen Option : 4

Q.25 In ΔABC , O is the incentre and $\angle BOC = 129^\circ$. The measure of $\angle BAC$ is:

- Ans
- 1. 73°
 - 2. 70°
 - 3. 78°
 - 4. 51°

Question ID : 65497840765
Status : Answered
Chosen Option : 3

Section : General awareness

Q.1 Who among the following received Padma Bhushan 2022?

- Ans
- 1. Padmaja Reddy
 - 2. Kongsam Ibomcha Singh
 - 3. Victor Banerjee
 - 4. Lourembam Bino Devi

Question ID : 65497840791
Status : Not Answered
Chosen Option : --

Q.2 'Resolved: Uniting Nations in a Divided World' is a memoir of who among the following former UN Secretary Generals?

- Ans
- 1. Boutros Boutros-Ghali
 - 2. Ban Ki-Moon
 - 3. Kofi Annan
 - 4. Javier Pérez de Cuéllar

Question ID : 65497840586
Status : Answered
Chosen Option : 2

Q.3 The Advocate General of each state of India is appointed by:

- Ans
- 1. the Chief Minister of the State
 - 2. the Prime Minister of India
 - 3. the President of India
 - 4. the Governor of the State

Question ID : 65497840795
Status : Answered
Chosen Option : 4

Q.4 The National Programme for Civil Services Capacity Building ('NPCSCB') – 'Mission Karmayogi' was launched with the objective of enhancing governance through Civil Service Capacity Building. Which of the following is NOT one of the six pillars of this programme?

- Ans
- 1. Policy framework
 - 2. Physical fitness framework
 - 3. Digital learning framework
 - 4. Competency framework

Question ID : 65497840572
Status : Not Answered
Chosen Option : --

Q.5 In 1943, some of the younger leaders in which district of Maharashtra set up a parallel government (Prati Sarkar), with volunteer corps (Seba dals) and village units (Tufan dals)?

- Ans
- 1. Kolhapur
 - 2. Satara
 - 3. Sangali
 - 4. Solapur

Question ID : 65497840687
Status : Not Answered
Chosen Option : --

Q.6 In which of the following years was the Rashtriya Madhyamik Shiksha Abhiyan (RMSA) scheme launched by the Government of India?

- Ans
- 1. 2009
 - 2. 2006
 - 3. 2008
 - 4. 2007

Question ID : 65497840775
Status : Not Answered
Chosen Option : --

Q.7 Different species of Plasmodium (a tiny protozoan) are responsible for different types of malaria, of these, malignant malaria which is the most serious is caused by _____.

- Ans
- 1. plasmodium malaria
 - 2. plasmodium calciparum
 - 3. plasmodium vivax
 - 4. plasmodium falciparum

Question ID : 65497840679
Status : Not Answered
Chosen Option : --

Q.8 As per India Census 2011, which of the 22 languages specified in the Eighth Schedule of the Constitution of India is spoken by least number of people?

- Ans
- 1. Nepali
 - 2. Manipuri
 - 3. Sanskrit
 - 4. Sindhi

Question ID : 65497840682
Status : Not Answered
Chosen Option : --

Q.9 What is the term used for a non-living part of an ecosystem that shapes its environment?

- Ans
- 1. Biotic factor
 - 2. Abiotic factor
 - 3. Cosmic factor
 - 4. Amnionic factor

Question ID : 65497840780
Status : Answered
Chosen Option : 2

Q.10 The official name (in English) of Bangladesh is:

- Ans
- 1. Bangladesh Democratic Republic
 - 2. Federal Bangladesh Republic
 - 3. Union of Bangladesh
 - 4. People's Republic of Bangladesh

Question ID : 65497840785
Status : Answered
Chosen Option : 4

Q.11 The rate of change of _____ of an object is its acceleration.

- Ans
- 1. position
 - 2. displacement
 - 3. momentum
 - 4. velocity

Question ID : 65497840574
Status : Answered
Chosen Option : 3

Q.12 While adopting the Constitution of India in 1949, by which Article of the Constitution of India, the Indian Independence Act, 1947, and the Government of India Act, 1935, together with all enactments amending or supplementing the latter Act, EXCEPT the Abolition of Privy Council Jurisdiction Act, 1949 was repealed?

- Ans
- 1. 394
 - 2. 393
 - 3. 392
 - 4. 395

Question ID : 65497840692
Status : Not Answered
Chosen Option : --

Q.13 In December 2021, which of the following countries announced that it will no longer censor films released in cinemas, the country's latest effort to boost its brand as a liberal hub attractive to foreigners?

- Ans
- 1. Bangladesh
 - 2. Pakistan
 - 3. Myanmar
 - 4. United Arab Emirates

Question ID : 65497840675
Status : Answered
Chosen Option : 4

Q.14 In which of the following Indian states were the remains of the ancient Vikramshila University discovered?

- Ans
- 1. Rajasthan
 - 2. Bihar
 - 3. Telangana
 - 4. Odisha

Question ID : 65497840786
Status : Answered
Chosen Option : 2

Q.15 Which of the following is NOT a characteristic of Aves (birds) class of animals?

- Ans
- 1. The skin is dry without glands except the oil gland at the base of the tail.
 - 2. They possess beak.
 - 3. The hind limbs are modified into wings.
 - 4. The presence of feathers and most of them can fly except flightless birds.

Question ID : 65497840677
Status : Not Answered
Chosen Option : --

Q.16 On 6th February 2022, which of the following countries became the first to play 1000 one-day internationals (ODI) cricket?

- Ans
- 1. Australia
 - 2. India
 - 3. England
 - 4. Pakistan

Question ID : 65497840694
Status : Not Answered
Chosen Option : --

Q.17 Who among the following got Padma Vibhushan Award 2022 under the civil service category?

- Ans
- 1. Guruprasad Mohapatra
 - 2. Bipin Rawat
 - 3. Rajiv Mehrishi
 - 4. Natrajan Chandrasekaran

Question ID : 65497840690
Status : Answered
Chosen Option : 2

Q.18 In which of the following countries did the former prime minister Lal Bahadur Shastri die?

- Ans
- 1. China
 - 2. Afghanistan
 - 3. Canada
 - 4. Uzbekistan

Question ID : 65497840788
Status : Not Answered
Chosen Option : --

Q.19 Ugadi Pachadi is a famous dish that is associated with the Ugadi festival of south India. How many different types of ingredients does it contain?

- Ans
- 1. Six
 - 2. Four
 - 3. Five
 - 4. Seven

Question ID : 65497840569
Status : Not Answered
Chosen Option : --

Q.20 Mohiniyattam dance emotes a play through dancing and singing where the song is customarily in which of the following languages?

- Ans
- 1. Tamil
 - 2. Manipravala
 - 3. Sanskrit
 - 4. Malayalam

Question ID : 65497840670
Status : Answered
Chosen Option : 2

Q.21 Which of the following statements is correct?

- Ans
- 1. Viticulture is the cultivation of grapes.
 - 2. Viticulture is the commercial rearing of silk worms.
 - 3. Viticulture is the growing of vegetables, flowers and fruits for commercial use.
 - 4. Viticulture is the breeding of fish in specially constructed tanks and ponds.

Question ID : 65497840579
Status : Answered
Chosen Option : 1

Q.22 The feature of joint sitting of two houses of the Parliament in the Constitution of India has been adopted from the Constitution of _____.

- Ans
- 1. The US
 - 2. Germany
 - 3. Australia
 - 4. USSR

Question ID : 65497840589
Status : Answered
Chosen Option : 1

Q.23 Mahendragiri Hills are located in _____.

- Ans
- 1. Himachal Pradesh
 - 2. Tamil Nadu
 - 3. Odisha
 - 4. Maharashtra

Question ID : 65497840774
Status : Answered
Chosen Option : 2

Q.24 One of the most important descriptions of the city of Vijayanagara in the fifteenth century comes from who among the following diplomats who visited India from Herat?

- Ans
- 1. Marco Polo
 - 2. Ibn Battuta
 - 3. Shaikh Ali Hazin
 - 4. Abdur Razzaq Samarqandi

Question ID : 65497840583
Status : Not Answered
Chosen Option : --

Q.25 Chenab river of north India originates from the confluence of which of the following two rivers?

- Ans**
- 1. Indus and Sutlej
 - 2. Chandra and Bhaga
 - 3. Zaskar and Shyok
 - 4. Nubra and Hunza

Question ID : **65497840578**
Status : **Answered**
Chosen Option : **1**



Teachingninja.in