



RRB GROUP - D **SHIFT – 3 (20-09-2018)**

- ★ **Latest Govt Job updates**
- ★ **Private Job updates**
- ★ **Free Mock tests available**

Visit - teachingninja.in



RAILWAY RECRUITMENT BOARDS

रेलवे भर्ती बोर्ड

Level-1 Posts CEN-02/2018

Participant ID:	142012092080014
Participants Name:	SIDHARTH SANKAR BHUYAN
Test Center Name:	ION Digital Zone iDZ 2 Chinamushidiwada
Test Date:	20/09/2018
Test Time:	4:00 PM - 5:30 PM
Subject:	Level 1

- Options shown in green color with a tick icon are correct
- Chosen option on top right of the question indicates the option selected by the candidate
- The numbers indicated against the Question ID and Option ID are the numbers to be noted and used for raising objections

Q.1 The equation $2\text{Cu} + \text{O}_2 \rightarrow 2\text{CuO}$ is an example of a ____ reaction.

- Ans
- 1. displacement
 - 2. decomposition
 - 3. double displacement
 - 4. combination

Question ID : 67891370
Option 1 ID : 678913278
Option 2 ID : 678913280
Option 3 ID : 678913277
Option 4 ID : 678913279
Status : Answered
Chosen Option : 4

Q.2 Read the given question and decide which of the following statements is/are sufficient to answer the question.

What is the value of z?

Statements:

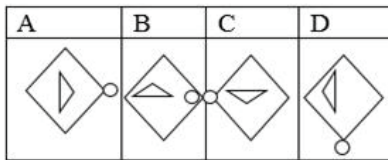
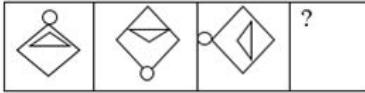
- $z^2 + (-1) = 0$
- $z = \sqrt{n}$, n is a natural number

- Ans
- 1. Neither 1 nor 2 is sufficient.
 - 2. Only 2 is sufficient.
 - 3. Both 1 and 2 are sufficient.
 - 4. Only 1 is sufficient.

Question ID : 67891343
Option 1 ID : 678913171
Option 2 ID : 678913170
Option 3 ID : 678913172
Option 4 ID : 678913169
Status : Answered
Chosen Option : 4

Q.3

Select the option that can replace the question mark (?) in the following series.



- Ans 1. C
 2. A
 3. B
 4. D

Question ID : 67891346
Option 1 ID : 678913183
Option 2 ID : 678913181
Option 3 ID : 678913184
Option 4 ID : 678913182
Status : Answered
Chosen Option : 2

Q.4 In a class, 5% students are absent on a particular day. If the number of students present is 38, the total strength of the class on that day is:

- Ans 1. 45
 2. 50
 3. 40
 4. 33

Question ID : 67891310
Option 1 ID : 67891339
Option 2 ID : 67891340
Option 3 ID : 67891338
Option 4 ID : 67891337
Status : Answered
Chosen Option : 3

Q.5 Choose the word that does NOT belong to the group.

- Ans 1. Bharatanatyam
 2. Odissi
 3. Hip-hop
 4. Kathakali

Question ID : 67891326
Option 1 ID : 678913101
Option 2 ID : 678913103
Option 3 ID : 678913104
Option 4 ID : 678913102
Status : Answered
Chosen Option : 3

Q.6 A can do a piece of work in 8 hours while B alone can do it in 12 hours. Both A and B working together can finish the work in time?

- Ans
- 1. 10 hours
 - 2. 4 hours
 - 3. $\frac{24}{5}$ hours
 - 4. $\frac{21}{4}$ hours

Question ID : 67891313
Option 1 ID : 67891349
Option 2 ID : 67891350
Option 3 ID : 67891352
Option 4 ID : 67891351
Status : Answered
Chosen Option : 3

Q.7 In desert plants, a thick waxy coating called _____ is present on the epidermis.

- Ans
- 1. cutin
 - 2. lignin
 - 3. cellulose
 - 4. fats

Question ID : 67891376
Option 1 ID : 678913302
Option 2 ID : 678913301
Option 3 ID : 678913304
Option 4 ID : 678913303
Status : Not Answered
Chosen Option : --

Q.8 Who among the following became the first Asian and the first individual from Assam to be nominated for the Heritage Heroes Award-2016 by the International Union for Conservation of Nature (IUCN)?

- Ans
- 1. Mohan Lal
 - 2. Trisha Krishnan
 - 3. Henry Blogg
 - 4. Bibhuti Lahkar

Question ID : 67891388
Option 1 ID : 678913350
Option 2 ID : 678913352
Option 3 ID : 678913349
Option 4 ID : 678913351
Status : Not Answered
Chosen Option : --

Q.9 $\frac{0.12 \div 0.15}{2} = ?$

- Ans
- 1. 0.04
 - 2. 0.004
 - 3. 0.4
 - 4. 4

Question ID : 6789132
Option 1 ID : 6789135

Option 2 ID : 6789137
Option 3 ID : 6789136
Option 4 ID : 6789138
Status : Answered
Chosen Option : 3





Q.1 ଗୋଟିଏ ସମକୋଣୀ ତ୍ରିଭୁଜର ଗୋଟିଏ ସ୍ପଷ୍ଟକୋଣ ହେଉଛି 58° | ଅନ୍ୟ ସ୍ପଷ୍ଟକୋଣଟିର ମୂଲ୍ୟ କେତେ?

- Ans
- 1. 35°
 - 2. 12°
 - 3. 22°
 - 4. 32°

Question ID : 67891321
Option 1 ID : 67891384
Option 2 ID : 67891381
Option 3 ID : 67891383
Option 4 ID : 67891382
Status : Answered
Chosen Option : 4

Q.1 ନିମ୍ନଲିଖିତ ଶବ୍ଦଗୁଡ଼ିକ ପାଇଁ ସବୁଠୁ ଉପଯୁକ୍ତ ଭେଦ୍ ତାଳଗ୍ରାମ ବାଛିନ୍ତୁ |

ଚେରୀ, ଆୟୁ, ଫଳଗୁଡ଼ିକ

- Ans
- 1. 
 - 2. 
 - 3. 
 - 4. 

Question ID : 67891351
Option 1 ID : 678913201
Option 2 ID : 678913202
Option 3 ID : 678913204
Option 4 ID : 678913203
Status : Answered
Chosen Option : 4

Q.1 The Manitoulin Island is located in:

- Ans
- 1. United States
 - 2. Australia
 - 3. United Kingdom
 - 4. Canada

Question ID : 67891397
Option 1 ID : 678913386
Option 2 ID : 678913388
Option 3 ID : 678913387
Option 4 ID : 678913385
Status : Not Answered
Chosen Option : --

Q.1 You are given a question and two statements. Identify which of the statements is/are necessary/sufficient to answer the question.

3

Nita has balls of three colors. Can we say how many Yellow balls she has?





Statements:

1. There are six balls
2. One third of the balls are blue
3. Half of the balls are red

- Ans
- 1. Statement 2 alone is sufficient
 - 2. Statement 1 alone is sufficient
 - 3. Statement 1 and 2 together are not sufficient
 - 4. Statements 1,2 and 3 together are necessary

Question ID : 67891342
Option 1 ID : 678913166
Option 2 ID : 678913165
Option 3 ID : 678913167
Option 4 ID : 678913168
Status : Answered
Chosen Option : 4

Q.1
4 କେଉଁଟି ଭିନ୍ନ ଦାଖଲ କର।

A	B	C	D
			

- Ans
- 1. A
 - 2. C
 - 3. B
 - 4. D

Question ID : 67891349
Option 1 ID : 678913193
Option 2 ID : 678913196
Option 3 ID : 678913194
Option 4 ID : 678913195
Status : Answered
Chosen Option : 2

Q.1
5 The male reproductive parts of the flower are called _____.

- Ans
- 1. carpels
 - 2. stamens
 - 3. sepals
 - 4. petals

Question ID : 67891379
Option 1 ID : 678913316
Option 2 ID : 678913315
Option 3 ID : 678913313
Option 4 ID : 678913314
Status : Answered
Chosen Option : 2

Q.1
6 The speed of light in a medium of refractive index 1.5 is _____.

- Ans
- 1. 1.2×10^8 m/s
 - 2. 1.5×10^8 m/s
 - 3. 3.0×10^8 m/s
 - 4. 2.0×10^8 m/s

Question ID : 67891364
Option 1 ID : 678913253
Option 2 ID : 678913254
Option 3 ID : 678913256
Option 4 ID : 678913255
Status : Answered
Chosen Option : 4

Q.1
7 Where did Union HRD Minister Prakash Javadekar launch the 'Swasth Bache, Swasth Bharat' program?

- Ans
- 1. Mysore
 - 2. Kochi
 - 3. Thiruvananthapuram
 - 4. Hyderabad

Question ID : 67891391
Option 1 ID : 678913363
Option 2 ID : 678913361
Option 3 ID : 678913364
Option 4 ID : 678913362
Status : Not Answered
Chosen Option : --

Q.1
8 Toray Industries (India) Private Limited, a Japanese company producing industrial products, has started the construction of its new facility in which of the following states?

- Ans
- 1. Tamil Nadu
 - 2. Maharashtra
 - 3. Karnataka
 - 4. Andhra Pradesh

Question ID : 67891398
Option 1 ID : 678913390
Option 2 ID : 678913392
Option 3 ID : 678913389
Option 4 ID : 678913391
Status : Not Answered
Chosen Option : --

Q.1
9 To hear distinct echoes, the minimum distance of the obstacle from the source of sound must be _____.

- Ans
- 1. 17.2 m

- 2. 172 m
- 3. 34.4 m
- 4. 344 m

Question ID : 67891363
Option 1 ID : 678913251
Option 2 ID : 678913252
Option 3 ID : 678913249
Option 4 ID : 678913250
Status : Answered
Chosen Option : 1

Q.2
0 In which state is Bansagar Dam located?

- Ans
- 1. Maharashtra
 - 2. Gujarat
 - 3. Andhra Pradesh
 - 4. Madhya Pradesh

Question ID : 67891396
Option 1 ID : 678913382
Option 2 ID : 678913381
Option 3 ID : 678913384
Option 4 ID : 678913383
Status : Answered
Chosen Option : 1

Q.2 A man has to cover a distance of 40 kms. He walks 16 kms at the speed of 4 kms/hr and the rest is covered by Tonga. If
1 he had covered 16 kms by Tonga and the rest by walking at the speed of 4 kms/hr, then he would have taken 1 hour more Find the speed of the Tonga.

- Ans
- 1. 16km/h
 - 2. 8km/h
 - 3. 12km/h
 - 4. 10km/h

Question ID : 67891315
Option 1 ID : 67891357
Option 2 ID : 67891359
Option 3 ID : 67891360
Option 4 ID : 67891358
Status : Answered
Chosen Option : 2

Q.2
2 Find the odd one out.

ϕ	θ	β	D
A	B	C	D

- Ans
- 1. D
 - 2. C
 - 3. B
 - 4. A

Question ID : 67891347
Option 1 ID : 678913188
Option 2 ID : 678913187
Option 3 ID : 678913186
Option 4 ID : 678913185
Status : Answered
Chosen Option : 1

Q.2 Consider the given statement followed by two conclusions numbered I and II. Assume the statement to be true, then
3 consider the two conclusions together and decide which of them logically follows beyond a reasonable doubt from the information given in the statement.

Statement:

- Some parks are circles.
- Some circles are crossroads.

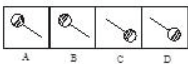
Conclusions:

- I. All crossroads are circles.
II. All crossroads are parks.

- Ans 1. Both the conclusions follow
 2. Only conclusion I follows
 3. Only conclusion II follows
 4. Neither I nor II follows

Question ID : 67891328
Option 1 ID : 678913110
Option 2 ID : 678913111
Option 3 ID : 678913109
Option 4 ID : 678913112
Status : Answered
Chosen Option : 4

Q.2 Choose the mirror image for the following figure when the mirror is kept at the MN line.
4



- Ans 1. A
 2. C
 3. B
 4. D

Question ID : 67891355
Option 1 ID : 678913217
Option 2 ID : 678913219
Option 3 ID : 678913218
Option 4 ID : 678913220
Status : Answered
Chosen Option : 3

Q.2 Which Bollywood superstar was honoured with the 24th Crystal Award at the World Economic Forum (WEF-2018) in
5 Davos, Switzerland?

- Ans 1. Salman Khan
 2. Akshay Kumar
 3. Shahrukh Khan

✗ 4. Aamir Khan

Question ID : 67891385
Option 1 ID : 678913337
Option 2 ID : 678913339
Option 3 ID : 678913338
Option 4 ID : 678913340
Status : Answered
Chosen Option : 3

Q.2
6 ବ୍ୟାପକ ଭାବରେ ଆଦୃତ ଅନ୍ୟତମ ନିୟମ ଅନୁଯାୟୀ ପୃଥିବୀର ବାୟୁମଣ୍ଡଳ, ପୃଥିବୀର କୌଣସି ଜୀବର ଉଚ୍ଚତ୍ର ପୂର୍ବରୁ ଏହାର ନିର୍ମୂଳ ଥିଲା:

- Ans
- ✗ 1. O_2, NH_3, CH_4 ଏବଂ ଜଳୀୟ ବାଷ୍ପ
 - ✓ 2. H_2, CO_2, NH_3 ଏବଂ CH_4
 - ✗ 3. H_2S, CH_4 ଏବଂ NH_3
 - ✗ 4. ଓଜୋନ , CH_4, O_2 ଏବଂ ଜଳୀୟ ବାଷ୍ପ

Question ID : 67891380
Option 1 ID : 678913318
Option 2 ID : 678913317
Option 3 ID : 678913320
Option 4 ID : 678913319
Status : Not Answered
Chosen Option : --

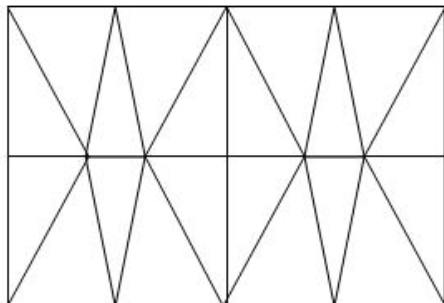
Q.2
7 If $3\sec^2 x - 2\tan^2 x = 6$ and $0^\circ \leq x \leq 90^\circ$ then $x = ?$

- Ans
- ✓ 1. 60°
 - ✗ 2. 30°
 - ✗ 3. 45°
 - ✗ 4. 90°



Question ID : 67891324
Option 1 ID : 67891394
Option 2 ID : 67891393
Option 3 ID : 67891395
Option 4 ID : 67891396
Status : Answered
Chosen Option : 1

Q.2
8 How many triangles are there in the following figure?



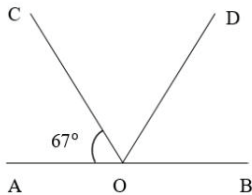
- Ans
- ✗ 1. 20
 - ✗ 2. 21

✓ 3. 26

✗ 4. 24

Question ID : 67891352
Option 1 ID : 678913208
Option 2 ID : 678913205
Option 3 ID : 678913206
Option 4 ID : 678913207
Status : Answered
Chosen Option : 3

Q.2 In the Given figure, AOB is a straight line. $\angle AOC = 67^\circ$ and OD is the bisector of $\angle BOC$. What is the value of $\angle BOD$ in degrees?



- Ans
- ✓ 1. 56.5°
 - ✗ 2. 55°
 - ✗ 3. 55.5°
 - ✗ 4. 56°

Question ID : 67891322
Option 1 ID : 67891388
Option 2 ID : 67891385
Option 3 ID : 67891386
Option 4 ID : 67891387
Status : Answered
Chosen Option : 1

Q.3 One picometre is equal to

- Ans
- ✗ 1. 10^{12} m
 - ✗ 2. 10^{11} m
 - ✗ 3. 10^{-11} m
 - ✓ 4. 10^{-12} m

Question ID : 67891375
Option 1 ID : 678913297
Option 2 ID : 678913299
Option 3 ID : 678913300
Option 4 ID : 678913298
Status : Answered
Chosen Option : 4

Q.3 The 2018 edition of the World Sustainable Development Summit (WSDS 2018) was held at Vigyan Bhawan in New Delhi with the theme:

- Ans
- ✗ 1. Partnerships for a Sustainable Development
 - ✗ 2. World Sustainable Development Partnerships
 - ✓ 3. Partnerships for a Resilient Planet
 - ✗ 4. Partnerships for a World with Sustainable Development

Question ID : 678913100

Option 1 ID : 678913399
Option 2 ID : 678913400
Option 3 ID : 678913398
Option 4 ID : 678913397
Status : Answered
Chosen Option : 4

Q.3 Read the given statement(s) and conclusions carefully and select which of the conclusions logically follow(s) from the statement(s).
2

Statement: All gifts are dolls. All dolls are toys.

Conclusions:

1. All gifts are toys
2. Some toys are gifts

Ans 1. Only (2) follows
 2. Both (1) & (2) follows
 3. Only (1) follows
 4. Either (1) or (2) follows

Question ID : 67891331
Option 1 ID : 678913122
Option 2 ID : 678913124
Option 3 ID : 678913121
Option 4 ID : 678913123
Status : Answered
Chosen Option : 2

Q.3 Which of the following type of tissues is capable of cell division?
3

Ans 1. Meristematic tissue
 2. Sclerenchyma
 3. Parenchyma
 4. Collenchyma

Question ID : 67891377
Option 1 ID : 678913307
Option 2 ID : 678913308
Option 3 ID : 678913305
Option 4 ID : 678913306
Status : Answered
Chosen Option : 1

Q.3 If $\frac{7}{16}$ of the weight of a brick is $\frac{21}{8}$ kg, then $\frac{5}{12}$ of the weight of the brick will be:
4

Ans 1. $\frac{10}{3}$ kg
 2. $\frac{3}{5}$ kg
 3. $\frac{3}{10}$ kg
 4. $\frac{5}{2}$ kg

Question ID : 6789137

Option 1 ID : 67891327
Option 2 ID : 67891326
Option 3 ID : 67891328
Option 4 ID : 67891325
Status : Answered
Chosen Option : 4

Q.3
5 $\frac{5^{0.25} \times (125)^{0.25}}{(256)^{0.1} \times (256)^{0.15}} = ?$

- Ans
- 1. 5
 - 2. $\frac{4}{5}$
 - 3. 4
 - 4. $\frac{5}{4}$

Question ID : 6789136
Option 1 ID : 67891324
Option 2 ID : 67891321
Option 3 ID : 67891323
Option 4 ID : 67891322
Status : Answered
Chosen Option : 4

Q.3
6 The HCF of 64, 28 and 96 is:

- Ans
- 1. 2
 - 2. 4
 - 3. 1
 - 4. 8



Question ID : 6789135
Option 1 ID : 67891317
Option 2 ID : 67891318
Option 3 ID : 67891320
Option 4 ID : 67891319
Status : Answered
Chosen Option : 2

Q.3
7 Who is the CEO of Infosys as of July 2018?

- Ans
- 1. Salil Parekh
 - 2. C. P. Gurnani
 - 3. Rajesh Gopinathan
 - 4. Nitin Prasad

Question ID : 67891389
Option 1 ID : 678913354
Option 2 ID : 678913353
Option 3 ID : 678913355
Option 4 ID : 678913356
Status : Answered
Chosen Option : 1

Q.3
8 Find the next term in the following series.

B-2, E-5, H-8, K-11, _____ ?

- Ans 1. N-14
 2. Z-26
 3. O-15
 4. N-12

Question ID : 67891337
Option 1 ID : 678913145
Option 2 ID : 678913148
Option 3 ID : 678913147
Option 4 ID : 678913146
Status : Answered
Chosen Option : 1

Q.3
9 Which of the following sports is Amal Raj related to?

- Ans 1. Table Tennis
 2. Shooting
 3. Hockey
 4. Athletics

Question ID : 67891383
Option 1 ID : 678913329
Option 2 ID : 678913332
Option 3 ID : 678913331
Option 4 ID : 678913330
Status : Not Answered
Chosen Option : --

Q.4
0 What will be the next term in this series?

DW, EV, FU, _____.

- Ans 1. GT
 2. HT
 3. UT
 4. ST

Question ID : 67891338
Option 1 ID : 678913149
Option 2 ID : 678913151
Option 3 ID : 678913152
Option 4 ID : 678913150
Status : Answered
Chosen Option : 1

Q.4
1 Plants can get rid of excess of water by _____.

- Ans 1. circulation
 2. respiration
 3. transpiration
 4. excretion

Question ID : 67891378
Option 1 ID : 678913312
Option 2 ID : 678913309
Option 3 ID : 678913311

Option 4 ID : 678913310
Status : Answered
Chosen Option : 2

Q.4
2 ନିତରଣକ ନିୟମ କେଉଁ କଣିକାଗୁଡ଼ିକ ପାଇଁ ଠିକ୍ ଗୁଣ୍ଟ ?

- Ans
- 1. ଧାରଭାବରେ ଗତି କରୁଥିବା
 - 2. ଆଲୋକ ର ପରିବେଗ ସହିତ ତୁଳନାୟ ପରିବେଗରେ ଗତି କରୁଥିବା
 - 3. ଅଧିକ ପରିବେଗ ସହିତ ଗତି କରୁଥିବା
 - 4. ସ୍ଥିରଥିବା

Question ID : 67891357
Option 1 ID : 678913226
Option 2 ID : 678913228
Option 3 ID : 678913227
Option 4 ID : 678913225
Status : Answered
Chosen Option : 2

Q.4 According to the World Bank, what percentage of new bank accounts, opened globally during the period 2014-2017, are
3 from India?

- Ans
- 1. 61%
 - 2. 49%
 - 3. 41%
 - 4. 55%

Question ID : 67891399
Option 1 ID : 678913396
Option 2 ID : 678913395
Option 3 ID : 678913394
Option 4 ID : 678913393
Status : Not Answered
Chosen Option : --

Q.4 Two pipes A and B can fill a tank in 45 hours and 36 hours, respectively. If both the pipes are opened simultaneously,
4 how much time will be taken to fill the tank?

- Ans
- 1. 20 hours
 - 2. 2 hours
 - 3. 10 hours
 - 4. 5 hours

Question ID : 67891318
Option 1 ID : 67891369
Option 2 ID : 67891372
Option 3 ID : 67891370
Option 4 ID : 67891371
Status : Answered
Chosen Option : 1


Q.4 The Asian Games, also known as Asiad, is a multi-sport event held every _____ years among athletes from all over
5 Asia.

- Ans
- 1. five
 - 2. three
 - 3. four
 - 4. two

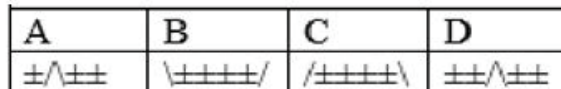
Question ID : 67891381
Option 1 ID : 678913321
Option 2 ID : 678913323
Option 3 ID : 678913324
Option 4 ID : 678913322
Status : Answered
Chosen Option : 3

Q.4
6 Select the option figure that will complete the series of question figures.

Question figures:



Option Figures:



- Ans
- 1. C
 - 2. D
 - 3. B
 - 4. A

Question ID : 67891345
Option 1 ID : 678913180
Option 2 ID : 678913178
Option 3 ID : 678913179
Option 4 ID : 678913177
Status : Answered
Chosen Option : 2

Q.4
7 Father is 5 years older than mother. Mother's present age is three times that of her daughter. Daughter is now 12 years old. What was father's age at the time of daughter's birth

- Ans
- 1. 31 years
 - 2. 29 years
 - 3. 25 years
 - 4. 32 years

Question ID : 67891319
Option 1 ID : 67891376
Option 2 ID : 67891374
Option 3 ID : 67891373
Option 4 ID : 67891375
Status : Answered
Chosen Option : 2

Q.4
8 Which Indian state has approved one percent reservation for orphans in government jobs?

- Ans
- 1. Uttar Pradesh
 - 2. Delhi
 - 3. Rajasthan

✓ 4. Maharashtra

Question ID : 67891392
Option 1 ID : 678913366
Option 2 ID : 678913367
Option 3 ID : 678913365
Option 4 ID : 678913368
Status : Answered
Chosen Option : 4

Q.4 The present red blood cells (RBC) count of a person is 54000 and it increases at a rate of 5% per day. What would be
9 the RBC count after two days?

Ans ✓ 1. 59535
✗ 2. 60001
✗ 3. 60000
✗ 4. 58535

Question ID : 67891312
Option 1 ID : 67891347
Option 2 ID : 67891348
Option 3 ID : 67891346
Option 4 ID : 67891345
Status : Answered
Chosen Option : 1

Q.5 Which one of the following is the functional group in Propanone?
0

Ans ✓ 1. Ketone
✗ 2. Carboxylic acid
✗ 3. Alcohol
✗ 4. Aldehyde

Question ID : 67891373
Option 1 ID : 678913291
Option 2 ID : 678913292
Option 3 ID : 678913289
Option 4 ID : 678913290
Status : Answered
Chosen Option : 1

Q.5 Akhil walks 2 km towards East and then turns left and walks 2 km. In which direction is he with respect to his initial
1 position?

Ans ✓ 1. North-East
✗ 2. South-West
✗ 3. South-East
✗ 4. North-West

Question ID : 67891353
Option 1 ID : 678913209
Option 2 ID : 678913212
Option 3 ID : 678913211
Option 4 ID : 678913210
Status : Answered
Chosen Option : 1

Q.5 Sravan is facing North-East. He first turns 45° anticlockwise, then 90° anticlockwise and then 180° clockwise. In which
2 direction he is facing now?

- Ans
- 1. West
 - 2. East
 - 3. North
 - 4. South

Question ID : 67891354
Option 1 ID : 678913214
Option 2 ID : 678913213
Option 3 ID : 678913216
Option 4 ID : 678913215
Status : Answered
Chosen Option : 2

Q.5
3 Find the next term in this series

A1Z, E5V, I9R, _____.

- Ans
- 1. N13M
 - 2. O12L
 - 3. M13N
 - 4. L12O

Question ID : 67891339
Option 1 ID : 678913153
Option 2 ID : 678913156
Option 3 ID : 678913154
Option 4 ID : 678913155
Status : Answered
Chosen Option : 3

Q.5
4 The mass of the earth is close to _____.

- Ans
- 1. 6×10^{25} kg
 - 2. 6×10^{24} kg
 - 3. 6×10^{22} kg
 - 4. 6×10^{23} kg

Question ID : 67891356
Option 1 ID : 678913224
Option 2 ID : 678913223
Option 3 ID : 678913221
Option 4 ID : 678913222
Status : Not Answered
Chosen Option : --

Q.5
5 Name the compound represented by the formula $Al_2(SO_4)_3$.

- Ans
- 1. Aluminium sulphite
 - 2. Aluminium sulphide
 - 3. Aluminium sulphuroxide
 - 4. Aluminium sulphate

Question ID : 67891367
Option 1 ID : 678913268

Option 2 ID : 678913265
Option 3 ID : 678913267
Option 4 ID : 678913266
Status : Answered
Chosen Option : 4

Q.5 Which Indian has been crowned Miss Teen Universe 2017 at Managua, the capital of Nicaragua?
6

- Ans
- 1. Simran Khosla
 - 2. Nisha Dutt
 - 3. Neeru Chadha
 - 4. Srishti Kaur

Question ID : 67891387
Option 1 ID : 678913347
Option 2 ID : 678913346
Option 3 ID : 678913348
Option 4 ID : 678913345
Status : Not Answered
Chosen Option : --

Q.5 A constant current of 1.0 A is maintained in a resistor of 12 Ω . The amount of charge that flows through this resistor in
7 one minute will be _____.

- Ans
- 1. 30 C
 - 2. 12 C
 - 3. 60 C.
 - 4. 1 C

Question ID : 67891366
Option 1 ID : 678913263
Option 2 ID : 678913262
Option 3 ID : 678913264
Option 4 ID : 678913261
Status : Answered
Chosen Option : 3

Q.5 A train travelling at the rate of 66 km/h crosses a 410 m long platform in 30 seconds. How long was the train?
8

- Ans
- 1. 240 m
 - 2. 140 m
 - 3. 180 m
 - 4. 160 m

Question ID : 67891314
Option 1 ID : 67891353
Option 2 ID : 67891355
Option 3 ID : 67891356
Option 4 ID : 67891354
Status : Answered
Chosen Option : 2

Q.5 What was the theme of the 26th World Book Fair held in New Delhi from 6-14 January 2018?
9

- Ans
- 1. Crime Against Women Issues
 - 2. Child Abuse Issues
 - 3. Cruelty Against Animals Issues

✓ 4. Environment-related Issues

Question ID : 67891386
Option 1 ID : 678913342
Option 2 ID : 678913343
Option 3 ID : 678913341
Option 4 ID : 678913344
Status : Answered
Chosen Option : 2

Q.6 Read the given statement(s) and conclusions carefully and select which of the conclusions logically follow(s) from the statement(s).

Statement:

- All pink are flowers.
- All flowers are fragrant.

Conclusions:

1. Some flowers are pink.
2. Some fragrant are flowers.

- Ans
- ✗ 1. Only conclusion 1 follows.
 - ✗ 2. Neither conclusion follows.
 - ✗ 3. Only conclusion 2 follows.
 - ✓ 4. All conclusions follow.

Question ID : 67891329
Option 1 ID : 678913115
Option 2 ID : 678913116
Option 3 ID : 678913113
Option 4 ID : 678913114
Status : Answered
Chosen Option : 4

Q.6 What will be the direction of a magnetic field if an alpha particle projected towards the east is deflected towards the north by a magnetic field?

- Ans
- ✗ 1. Towards South
 - ✗ 2. Upward
 - ✗ 3. Towards East
 - ✓ 4. Downwards

Question ID : 67891368
Option 1 ID : 678913271
Option 2 ID : 678913269
Option 3 ID : 678913272
Option 4 ID : 678913270
Status : Not Answered
Chosen Option : --

Q.6 $\frac{3}{-4}$ _____ $\frac{-5}{6}$ (compare)

- Ans
- ✗ 1. \geq
 - ✗ 2. $<$
 - ✓ 3. $>$
 - ✗ 4. $=$

Question ID : 6789138
Option 1 ID : 67891332

Option 2 ID : 67891330
Option 3 ID : 67891329
Option 4 ID : 67891331
Status : Answered
Chosen Option : 3

Q.6 India's first underground museum was opened to the public at _____ in New Delhi on 2 October 2016.
3

- Ans
- 1. Purana Qila
 - 2. Sansad Bhavan
 - 3. Qutub Minar
 - 4. Rashtrapati Bhavan

Question ID : 67891390
Option 1 ID : 678913359
Option 2 ID : 678913358
Option 3 ID : 678913360
Option 4 ID : 678913357
Status : Not Answered
Chosen Option : --

Q.6 Which of the following teams lifted the Indian Premier League (IPL) trophy for the third time by defeating Rising Pune Supergiant in the title clash at Hyderabad on 21st May 2017?
4

- Ans
- 1. Chennai Super Kings
 - 2. Mumbai Indians
 - 3. Sunrisers Hyderabad
 - 4. Delhi Daredevils

Question ID : 67891382
Option 1 ID : 678913328
Option 2 ID : 678913325
Option 3 ID : 678913326
Option 4 ID : 678913327
Status : Answered
Chosen Option : 2

Q.6
5



In which year the sales of Store C is less compared to the other two years

- Ans
- 1. Year 1
 - 2. The sales is consistent over the three years
 - 3. Year 3
 - 4. Year 2

Question ID : 67891340
Option 1 ID : 678913157
Option 2 ID : 678913160
Option 3 ID : 678913158

Option 4 ID : 678913159
Status : Answered
Chosen Option : 3

Q.6 Ram scored 40% marks and failed by 20 marks. Aditya scored 45 % marks and obtained 30 marks more than those of
6 required to pass. The pass percentage is?

- Ans 1. 33%
 2. 43%
 3. 38%
 4. 42%

Question ID : 6789139
Option 1 ID : 67891333
Option 2 ID : 67891335
Option 3 ID : 67891334
Option 4 ID : 67891336
Status : Answered
Chosen Option : 4

Q.6 Find the odd one out
7

A	B	C	D
T20H8	R18J10	P15L11	N14N14

- Ans 1. A
 2. C
 3. B
 4. D

Question ID : 67891348
Option 1 ID : 678913189
Option 2 ID : 678913191
Option 3 ID : 678913190
Option 4 ID : 678913192
Status : Answered
Chosen Option : 2

Q.6 In which year did the Boston Tea Party take place?
8

- Ans 1. 1773
 2. 1776
 3. 1775
 4. 1774

Question ID : 67891395
Option 1 ID : 678913377
Option 2 ID : 678913380
Option 3 ID : 678913379
Option 4 ID : 678913378
Status : Not Answered
Chosen Option : --

Q.6 _____ of an object is constant and does not change from place to place.
9

- Ans
- 1. Velocity
 - 2. Weight
 - 3. Mass
 - 4. Momentum

Question ID : 67891358
Option 1 ID : 678913231
Option 2 ID : 678913229
Option 3 ID : 678913230
Option 4 ID : 678913232
Status : Answered
Chosen Option : 3

Q.7 Consider the given statement(s) and decide which of the given assumption(s) is/are implicit in the statement.

0

Statement:

Children below age of 5 years should not be given any writing home-work.

Assumptions:

- I. Their hands are yet to form co-ordination to hold pencil / writing material for long.
- II. They are very young to be introduced to writing skills.

- Ans
- 1. Both I and II are implicit
 - 2. Neither I nor II is implicit
 - 3. Only II is implicit
 - 4. Only I is implicit

Question ID : 67891334
Option 1 ID : 678913136
Option 2 ID : 678913135
Option 3 ID : 678913134
Option 4 ID : 678913133
Status : Answered
Chosen Option : 1

Q.7 15 November 2018 is a Thursday. 15 November 2021 will be a _____.

1

- Ans
- 1. Sunday
 - 2. Monday
 - 3. Saturday
 - 4. Friday

Question ID : 67891316
Option 1 ID : 67891363
Option 2 ID : 67891364
Option 3 ID : 67891362
Option 4 ID : 67891361
Status : Answered
Chosen Option : 2

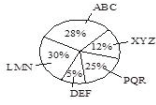
Q.7 How many elements were known when Mendeleev started his work?

2

- Ans
- 1. 66
 - 2. 63
 - 3. 64
 - 4. 65

Question ID : 67891374
Option 1 ID : 678913293
Option 2 ID : 678913294
Option 3 ID : 678913295
Option 4 ID : 678913296
Status : Answered
Chosen Option : 2

Q.7 The given pie chart shows information about the mobile phone manufacturing companies in India. The total number of
3 mobile phone units manufactured is 12,40,000.



How many units of mobile phones were manufactured by company 'PQR'?

- Ans 1. 6,20,000
 2. 3,10,000
 3. 30,1000
 4. 12,40,000

Question ID : 67891341
Option 1 ID : 678913162
Option 2 ID : 678913161
Option 3 ID : 678913164
Option 4 ID : 678913163
Status : Answered
Chosen Option : 2

Q.7
4 ଟ୍ରିପିଟକ କେଉଁ ଧର୍ମର ପବିତ୍ର ଶାସ୍ତ୍ର?

- Ans 1. ଜୈନ
 2. ବୌଦ୍ଧ
 3. ହିନ୍ଦୁ
 4. ଜୋରାସ୍ତ୍ର

Question ID : 67891394
Option 1 ID : 678913374
Option 2 ID : 678913376
Option 3 ID : 678913373
Option 4 ID : 678913375
Status : Answered
Chosen Option : 1

Q.7 Consider the following statement and conclusions labeled I and II and decide which of the conclusions logically follows
5 from the statement.

Statement:

The physical education teacher selects two athletes and two badminton players to represent the school.

Conclusions:

- I. There is going to be an athletic and badminton event.
II. The teacher favours only those students he has selected.

- Ans 1. Both the conclusions follow
 2. Conclusion II alone follows
 3. Neither conclusion I nor II follows

✓ 4. Conclusion I alone follows

Question ID : 67891335
Option 1 ID : 678913139
Option 2 ID : 678913138
Option 3 ID : 678913140
Option 4 ID : 678913137
Status : Answered
Chosen Option : 1

Q.7
6 ମୂଲ୍ୟନ ₹ 15000 ନିବେଶ କଲେ ପାଞ୍ଚ ବର୍ଷରେ ₹ 4500 ସରଳସ୍ୱଧ ମିଳେ। ସ୍ୱଧ ହାର କେତେ?

- Ans 1. 3.2%
2. 3%
3. 3.6%
4. 4%

Note: For this question, discrepancy is found in question/answer. So, This question is ignored for all candidates.

Question ID : 67891311
Option 1 ID : 67891342
Option 2 ID : 67891341
Option 3 ID : 67891343
Option 4 ID : 67891344
Status : Answered
Chosen Option : 3

Q.7
7 Find the next letter in the following series.

E, G, I, L, O, S, _____ ?

- Ans 1. T
 2. Z
 3. B
 4. W

Question ID : 67891336
Option 1 ID : 678913142
Option 2 ID : 678913143
Option 3 ID : 678913141
Option 4 ID : 678913144
Status : Answered
Chosen Option : 4

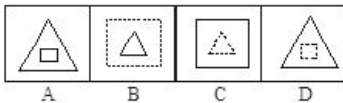
Q.7
8

Which answer figure will come next in the given problem figure series?

Problem figures:



Answer figures:



- Ans
- 1. D
 - 2. A
 - 3. C
 - 4. B

Question ID : 67891344
Option 1 ID : 678913176
Option 2 ID : 678913173
Option 3 ID : 678913175
Option 4 ID : 678913174
Status : Answered
Chosen Option : 4

Q.7 Pointing to Seetha, Ganesh said, "I am the son of the only daughter of her grandmother". How is Ganesh related to Seetha?

- Ans
- 1. Brother
 - 2. Uncle
 - 3. Nephew
 - 4. Son

Question ID : 67891330
Option 1 ID : 678913118
Option 2 ID : 678913120
Option 3 ID : 678913119
Option 4 ID : 678913117
Status : Answered
Chosen Option : 1

Q.8 An 800-kg car is moving at a speed of 90 km/h. It takes 5 s to stop after the brakes are applied. The force applied by the brakes will be _____.

- Ans
- 1. 3000 N
 - 2. 4000 N
 - 3. 1000 N
 - 4. 2000 N

Question ID : 67891359
Option 1 ID : 678913235
Option 2 ID : 678913236
Option 3 ID : 678913233
Option 4 ID : 678913234
Status : Answered

Chosen Option : 2

Q.8
1 ନିମ୍ନସ୍ଥ ମଧ୍ୟରୁ କେଉଁ ସଂଖ୍ୟାଟି ପରିମେୟ ସଂଖ୍ୟା ରୁହେଁ?

- Ans
- 1. π
 - 2. $\sqrt[3]{1728}$
 - 3. 2.487627287
 - 4. 8.36712846781

Question ID : 6789133
Option 1 ID : 6789139
Option 2 ID : 67891312
Option 3 ID : 67891310
Option 4 ID : 67891311
Status : Answered
Chosen Option : 2

Q.8
2 $78 - [5 + 3 \text{ of } (25 - 2 \times 10)] = ?$

- Ans
- 1. 58
 - 2. 38
 - 3. 48
 - 4. 56

Question ID : 6789131
Option 1 ID : 6789133
Option 2 ID : 6789134
Option 3 ID : 6789132
Option 4 ID : 6789131
Status : Answered
Chosen Option : 1

Q.8
3 What day of the week was 2nd October 2010?

- Ans
- 1. Saturday
 - 2. Thursday
 - 3. Sunday
 - 4. Friday

Question ID : 67891320
Option 1 ID : 67891379
Option 2 ID : 67891377
Option 3 ID : 67891380
Option 4 ID : 67891378
Status : Answered
Chosen Option : 1

Q.8
4 Lata points out to a picture and says, "She is my father's wife's son's wife." Whom Lata is pointing to?

- Ans
- 1. Her sister
 - 2. Her cousin
 - 3. Her sister-in-law
 - 4. Her aunt

Question ID : 67891327

Option 1 ID : 678913105
Option 2 ID : 678913107
Option 3 ID : 678913106
Option 4 ID : 678913108
Status : Answered
Chosen Option : 3

Q.8
5 Who was appointed as the State Election Commissioner for Uttar Pradesh on 18th January, 2018?

- Ans
- 1. Ved Prakash Verma
 - 2. T Venkatesh
 - 3. Manoj Kumar
 - 4. SK Agarwal

Question ID : 67891393
Option 1 ID : 678913372
Option 2 ID : 678913371
Option 3 ID : 678913369
Option 4 ID : 678913370
Status : Answered
Chosen Option : 1

Q.8
6 छात्रों के एक समूह द्वारा एक स्थानीय क्षेत्र के 20 घरों पर किए गए एक सर्वेक्षण में घरेलू परिवार के सदस्यों की संख्या से संबंधित निम्नलिखित आवृत्ति सारणी के परिणाम प्राप्त हुए हैं:

परिवार का आकार	परिवारों की संख्या
1- 3	7
3- 5	9
5- 7	2
7- 9	1
9- 11	1

इन आंकड़ों का बहुलक ज्ञात कीजिए।

- Ans
- 1. 3.286
 - 2. 3.628
 - 3. 3.444
 - 4. 3.571

Question ID : 67891325
Option 1 ID : 67891397
Option 2 ID : 678913100
Option 3 ID : 67891398
Option 4 ID : 67891399
Status : Answered
Chosen Option : 4

Q.8
7 $(72)^2 = 51x4$ Find the value of x.

- Ans
- 1. 9
 - 2. 2
 - 3. 7
 - 4. 8

Question ID : 6789134
Option 1 ID : 67891315
Option 2 ID : 67891316

Option 3 ID : 67891313
Option 4 ID : 67891314
Status : Answered
Chosen Option : 4

Q.8 How many bricks 20cm x 10cm will be required to have the floor of a hall 16 metres long and 10 meters wide?

8

- Ans 1. 8000
 2. 8500
 3. 8400
 4. 9000

Question ID : 67891317
Option 1 ID : 67891365
Option 2 ID : 67891366
Option 3 ID : 67891367
Option 4 ID : 67891368
Status : Answered
Chosen Option : 1

Q.8 A horizontal force of 10 N displaces a 5 kg object through a distance of

9

2 m in the direction of force. The work done by the force will be _____.

- Ans 1. 20 J
 2. 10 J
 3. 5 J
 4. 50 J

Question ID : 67891361
Option 1 ID : 678913243
Option 2 ID : 678913242
Option 3 ID : 678913241
Option 4 ID : 678913244
Status : Answered
Chosen Option : 1

Q.9 Which one of the following is an amphoteric oxide?

0

- Ans 1. Al_2O_3
 2. CO_2
 3. SO_2
 4. CuO

Question ID : 67891372
Option 1 ID : 678913287
Option 2 ID : 678913285
Option 3 ID : 678913286
Option 4 ID : 678913288
Status : Answered
Chosen Option : 1

Q.9 Which of the following is NOT a compound?

1

- Ans 1. Nitrogen peroxide
 2. Ammonia
 3. Water

✓ 4. Chlorine

Question ID : 67891369
Option 1 ID : 678913274
Option 2 ID : 678913276
Option 3 ID : 678913273
Option 4 ID : 678913275
Status : Answered
Chosen Option : 4

Q.9
2 One kWh is equal to _____.

- Ans
- ✗ 1. 3.6×10^9 J
 - ✗ 2. 3.6×10^7 J
 - ✓ 3. 3.6×10^6 J
 - ✗ 4. 3.6×10^8 J

Question ID : 67891360
Option 1 ID : 678913240
Option 2 ID : 678913238
Option 3 ID : 678913237
Option 4 ID : 678913239
Status : Answered
Chosen Option : 3

Q.9
3 Mean of the data 2, x, 7, 3, y, 9, 6 is 6 where x and y are constants. If x is replaced by $3x+1$ and y is replaced by $y+3$, the mean increases by 2. Find the value of x.

- Ans
- ✗ 1. 8
 - ✓ 2. 5
 - ✗ 3. 10
 - ✗ 4. 7

Question ID : 67891323
Option 1 ID : 67891389
Option 2 ID : 67891390
Option 3 ID : 67891391
Option 4 ID : 67891392
Status : Not Answered
Chosen Option : --

Q.9
4 When a retarding force 'F' is applied in the opposite direction, the angle between the two directions will be _____.

- Ans
- ✗ 1. 30°
 - ✗ 2. 60°
 - ✓ 3. 180°
 - ✗ 4. 90°

Question ID : 67891362
Option 1 ID : 678913245
Option 2 ID : 678913246
Option 3 ID : 678913248
Option 4 ID : 678913247
Status : Answered
Chosen Option : 3

Q.9
5 ब्रिटिश शासन से भारत की स्वतंत्रता की 70 वीं वर्षगांठ के उपलक्ष्य में, प्रधानमंत्री नरेंद्र मोदी ने _____ रैली के लिए '70 साल आज़ादी याद करो कुर्बानी' नामक एक थीम गीत जारी किया था।

- Ans
- 1. युवा यात्रा
 - 2. कुर्बानी यात्रा
 - 3. आज़ादी यात्रा
 - 4. तिरंगा यात्रा

Question ID : 67891384
 Option 1 ID : 678913334
 Option 2 ID : 678913335
 Option 3 ID : 678913333
 Option 4 ID : 678913336
 Status : Answered
 Chosen Option : 3

Q.9 What is exchanged between the reactants during a double decomposition reaction?

- Ans
- 1. Electrons
 - 2. Atoms
 - 3. Ions
 - 4. Molecules

Question ID : 67891371
 Option 1 ID : 678913283
 Option 2 ID : 678913281
 Option 3 ID : 678913282
 Option 4 ID : 678913284
 Status : Answered
 Chosen Option : 4

Q.9 ଦୁଇଟି ଅନୁମାନ । ଏବଂ ॥ ସହିତ ଏକ ଚକ୍ରି ବିଆପାତକି । ଚକ୍ରି ଏବଂ ଅନୁମାନଗୁଡ଼ିକୁ ବିଚାର କରନ୍ତୁ ଏବଂ କେଉଁ ଅନୁମାନଟି ବା ଅନୁମାନଗୁଡ଼ିକ ଚକ୍ରିରେ ଅନ୍ତର୍ନିହିତ ଅଛି ସ୍ଥିର କରନ୍ତୁ ।

7
 ଚକ୍ରି:
 ଆମେ ଏଠୁଥିବା ଚକୋସିଷମ ମଣିଷ ଏବଂ ଅନ୍ୟ ନାଟିମାନଙ୍କ ପାଇଁ ପ୍ରାକୃତିକ ସେବା ପୋଷାକପାଏ ପାଠ୍ୟ ଆମର ସ୍ୱାସ୍ଥ୍ୟ ,ନାବନଧାରଣର ମାନ ଏବଂ ବଂଚିବା ପାଇଁ କରୁଥା ଅଟେ ।
 ଅନୁମାନଗୁଡ଼ିକ:
 I. ଆମେ ଗ୍ରହଣ କରୁଥିବା ବାୟୁର ଆମ ବଶନକଙ୍କ ଅଙ୍ଗାରକାୟୁ ଏବଂ ଅନ୍ୟ ପ୍ରକୃତିର ନିନିଷ ଅଲଗା କରିଥାଏ ଏବଂ ଆମର ବାୟୁ ଚାପମାପ୍ରାୟ ଅଣ୍ଡା ରଖିଥାଏ ।
 II. ଆମର ଅନ୍ତରାଳ ଗୁଡ଼ିକ ଝଟ ଚୋମାନର କଳ ଏବଂକିତ କରି ରଖିଥାଏ ,ତାକୁ ପରିଷ୍କାର କରିଥାଏ ,ନମାପାଣିର ପ୍ରଦୂଷକଗୁଡ଼ିକ ଅନ୍ତରୀକାରକ କରିଥାଏ ଏବଂ ଏହି ପରିଷ୍କାର କଳ ସହିତ ଆମର ନବନାୟା ଶରତ୍ତଂଚେର୍ତୁ ଆମେ ଆମର ପିତବା ପାଣି ପାତଥାତ (ପୁଣି ଶକ୍ତି ପୋଷାକପାଏ ।

- Ans
- 1. କେବଳ ଅନୁମାନ II ଅନ୍ତର୍ନିହିତ ଅଟେ
 - 2. ଉଭୟ ଅନୁମାନ I ଏବଂ II ଅନ୍ତର୍ନିହିତ ଅଟେ
 - 3. କେବଳ ଅନୁମାନ I ଅନ୍ତର୍ନିହିତ ଅଟେ
 - 4. ଅନୁମାନ I ଏବଂ II କୌଣସିକି ଅନୁମାନ ଅନ୍ତର୍ନିହିତ ନାହିଁ

Question ID : 67891333
 Option 1 ID : 678913130
 Option 2 ID : 678913132
 Option 3 ID : 678913129
 Option 4 ID : 678913131
 Status : Not Answered
 Chosen Option : --

Q.9 A resistor of length L and area of cross-section A has a resistance R. Another resistors, of the same material, of length $\frac{L}{2}$ and area of cross-section, 2A will have a resistance of _____.

- Ans
- 1. R/2
 - 2. 2R
 - 3. R/4

Question ID : 67891365
Option 1 ID : 678913260
Option 2 ID : 678913257
Option 3 ID : 678913259
Option 4 ID : 678913258
Status : Answered
Chosen Option : 3

Q.9 Consider the given statement to be true even if it seems to be at variance with the commonly known facts and decide which of the given conclusions logically follow(s) from the statement.

Statement: In a recent study, it has been observed that those who exercise 5 days a week are less prone to life style diseases.

Conclusions:

- I. Physical fitness is important for a healthy living.
- II. Exercising 6 days a week would cause health problems.

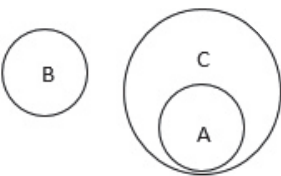
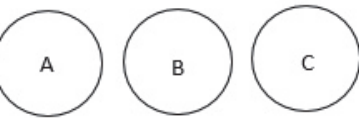
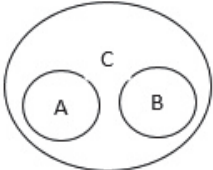
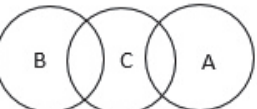
- Ans
- 1. Neither conclusion I nor II follows.
 - 2. Only conclusion I follows.
 - 3. Only conclusion II follows.
 - 4. Both conclusions I and II follow.

Question ID : 67891332
Option 1 ID : 678913127
Option 2 ID : 678913125
Option 3 ID : 678913126
Option 4 ID : 678913128
Status : Answered
Chosen Option : 2

Q.1 Which of the following Venn diagrams correctly represents the relationship between the following classes?

- A) Hand
- B) Legs
- C) Body

Ans

- 1. 
- 2. 
- 3. 
- 4. 

Question ID : 67891350
Option 1 ID : 678913198
Option 2 ID : 678913200
Option 3 ID : 678913197
Option 4 ID : 678913199
Status : Answered
Chosen Option : 3



Teachingninja.in