



RRB GROUP - D **SHIFT – 1** (22-09-2018)

- ★ Latest Govt Job updates
- ★ Private Job updates
- ★ Free Mock tests available

Visit - teachingninja.in



RAILWAY RECRUITMENT BOARDS

रेलवे भर्ती बोर्ड

Level-1 Posts CEN-02/2018

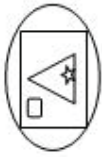
Participant ID:	202013091760227
Participants Name:	ASHISH NATH
Test Center Name:	iON Digital Zone iDZ Model Village Naharlagun Itanagar
Test Date:	22/09/2018
Test Time:	9:00 AM - 10:30 AM
Subject:	Level 1

1. Options shown in green color with a tick icon are correct
2. Chosen option on top right of the question indicates the option selected by the candidate
3. The numbers indicated against the Question ID and Option ID are the numbers to be noted and used for raising objections

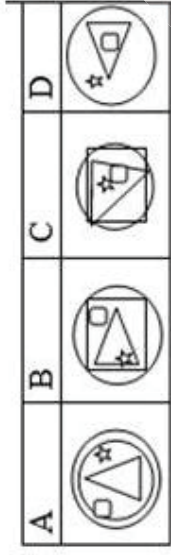
Q.1

Which of the option figures bears the closest resemblance to the question figure?

Question Figure:



Option Figures:



- Ans
- 1. C
 - 2. D
 - 3. A
 - 4. B

Question ID : 6913521248
Option 1 ID : 6913524991
Option 2 ID : 6913524992
Option 3 ID : 6913524989
Option 4 ID : 6913524990

Status : Answered

Chosen Option : 4

Q.2 Who among the following has been conferred the National Kalidas Samman award in 2018?

Ans

- ✓ 1. Anjolie Ela Menon
✗ 2. Girish Karnad
✗ 3. Mallika Sarabhai
✗ 4. Shabana Azmi

Question ID : 6913521284
Option 1 ID : 6913525135
Option 2 ID : 6913525134
Option 3 ID : 6913525136
Option 4 ID : 6913525133

Status : Answered
Chosen Option : 4

Q.3 The chemical formula of Iron (III) oxide is _____.

- Ans ✓ 1. FeO
✗ 2. Fe₃O₄
✗ 3. Fe₃O₃
✓ 4. Fe₂O₃

Question ID : 6913521256
Option 1 ID : 6913525024
Option 2 ID : 6913525023
Option 3 ID : 6913525022
Option 4 ID : 6913525021

Status : Not Answered
Chosen Option : --

Q.4 Find the odd man out: Si, P, Ge, and As,

- Ans ✗ 1. Si
✗ 2. As

✓ 3. P

✗ 4. Ge

Question ID : 6913521263
Option 1 ID : 6913525049
Option 2 ID : 6913525052
Option 3 ID : 6913525051
Option 4 ID : 6913525050

Status : Answered

Chosen Option : 3

Q.5 The sum of the first 2007 terms of the sequence 1, 2, 3, 4, 1, 2, 3, 4, _____ is:

Ans ✗ 1. 5013

✓ 2. 5016

✗ 3. 5020

✗ 4. 5107

Question ID : 6913521221
Option 1 ID : 6913524882
Option 2 ID : 6913524881
Option 3 ID : 6913524883
Option 4 ID : 6913524884

Status : Answered

Chosen Option : 3

Q.6 ₹ 1,125 invested for 3 months gave an interest of ₹ 27. What was the simple rate of interest per annum?

Ans ✗ 1. 12%

✓ 2. 9.6%

✗ 3. 7.2%

✗ 4. 2.4%

Question ID : 6913521210



Option 1 ID : 6913524840
Option 2 ID : 6913524839
Option 3 ID : 6913524838
Option 4 ID : 6913524837

Status : Answered

Chosen Option : 2

Q.7 Which union ministry has launched nation-wide training programme for Elected Women Representatives (EWRs) of Panchayats?

- Ans
- 1. Ministry of Panchayati Raj
 - 2. Ministry of External Affairs
 - 3. Ministry of Women and Child Development
 - 4. Ministry of Culture

Question ID : 6913521292
Option 1 ID : 6913525165
Option 2 ID : 6913525168
Option 3 ID : 6913525167
Option 4 ID : 6913525166

Status : Answered

Chosen Option : 3

Q.8 Find the odd one out.

+	×	-	" "
A	B	C	D

- Ans
- 1. C
 - 2. D
 - 3. A
 - 4. B



Question ID : 6913521244
Option 1 ID : 6913524975
Option 2 ID : 6913524976
Option 3 ID : 6913524973
Option 4 ID : 6913524974

Status : Answered

Chosen Option : 2

Q.9 Where is 'The Gateway of India' located?

- Ans
- 1. Chennai
 - 2. Jaipur
 - 3. New Delhi
 - 4. Mumbai

Question ID : 6913521286
Option 1 ID : 6913525142
Option 2 ID : 6913525144
Option 3 ID : 6913525141
Option 4 ID : 6913525143

Status : Answered

Chosen Option : 4

Q.10 A mobile when sold at a gain of 6% yields ₹ 870 more than when it is sold at a loss of 6%. What is the cost price of the mobile phone?

- Ans
- 1. ₹ 7250
 - 2. ₹ 6265
 - 3. ₹ 6000
 - 4. ₹ 7000

Question ID : 6913521209
Option 1 ID : 6913524833



Option 2 ID : 6913524835
Option 3 ID : 6913524836
Option 4 ID : 6913524834

Status : Not Attempted and Marked For Review
Chosen Option : --

Q.11 A 1.5 m tall boy observes a pole. The angle of elevation of the top of the pole is 30° from the eyes of the boy. Then he approaches the pole by 7.3 m. Now the angle of elevation is 45° . Find the height of the pole from the ground.

Take $\sqrt{3} = 1.73$

- Ans
- 1. 8.5 m
 - 2. 11.5 m
 - 3. 10 m
 - 4. 11 m

Question ID : 6913521225
Option 1 ID : 6913524897
Option 2 ID : 6913524900
Option 3 ID : 6913524898
Option 4 ID : 6913524899

Status : Not Answered
Chosen Option : --

Q.12 According to Whittakers classification, organisms belonging to the kingdom _____ do not have a well defined nucleus.

- Ans
- 1. Protista
 - 2. Fungi
 - 3. Monera
 - 4. Plantae

Question ID : 6913521280
Option 1 ID : 6913525118
Option 2 ID : 6913525119
Option 3 ID : 6913525117

Option 4 ID : 6913525120

Status : Answered

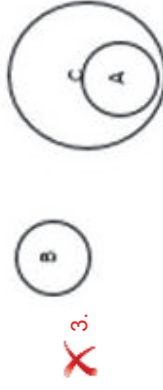
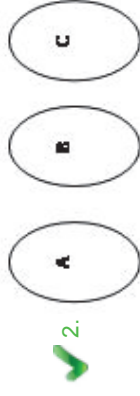
Chosen Option : 1

Q.13 Which of the following correctly represents the relationship between

A) Car

B) Park

C) Satellite



Ans

Question ID : 6913521250

Option 1 ID : 6913524998

Option 2 ID : 6913524997
Option 3 ID : 6913524999
Option 4 ID : 6913525000
Status : Answered
Chosen Option : 2

Q.14 A current of 0.5 A is maintained in a resistor of $10\ \Omega$. The amount of charge flowing through the resistor in one minute

is:

- Ans 1. 30 C
 2. 5 C
 3. 0.5 C
 4. 20 C

Question ID : 6913521265
Option 1 ID : 6913525060
Option 2 ID : 6913525058
Option 3 ID : 6913525057
Option 4 ID : 6913525059

Status : Not Attempted and Marked For Review
Chosen Option : --

Q.15 The time taken for the tail end of a train to cross a pole is 53 seconds. If the length of the train is 110 m and speed of the train is 36 km/hr, find the initial distance of the pole from the front end of the train.

- Ans 1. 420 m
 2. 530 m
 3. 640 m
 4. 1798 m

Question ID : 6913521213
Option 1 ID : 6913524850
Option 2 ID : 6913524849
Option 3 ID : 6913524851
Option 4 ID : 6913524852

Q.16 Find the $\frac{13}{16}$ worth of land whose $\frac{9}{7}$ worth is ₹ 10116.

- Ans
- 1. ₹ 6391.75
 - 2. ₹ 6394.75
 - 3. ₹ 6392.75
 - 4. ₹ 6302.75

Question ID : 6913521203
 Option 1 ID : 6913524811
 Option 2 ID : 6913524812
 Option 3 ID : 6913524809
 Option 4 ID : 6913524810

Status : Answered

Chosen Option : 3

Q.17 Shaan's current age is four years less than 1.6 times that of Uddalak's. 26 years ago, Uddalak's age was one year less than half of Shaan's age. What is Shaan's present age in years?

- Ans
- 1. 84
 - 2. 76
 - 3. 68
 - 4. 60

Question ID : 6913521220
 Option 1 ID : 6913524877
 Option 2 ID : 6913524879
 Option 3 ID : 6913524878
 Option 4 ID : 6913524880

Status : Not Attempted and Marked For Review

Chosen Option : --



Q.18 The mega event Global Entrepreneurship Summit (GES-2017) in Hyderabad was co-hosted by NITI Aayog. What is the full form of NITI?

- Ans
- 1. Nation Institute Teaching India
 - 2. National Institution for Transforming India
 - 3. National India Transforming Information
 - 4. National Institution Towards India

Question ID : 6913521290
Option 1 ID : 6913525160
Option 2 ID : 6913525157
Option 3 ID : 6913525159
Option 4 ID : 6913525158

Status : Answered
Chosen Option : 2

Q.19 If "LAME" is coded as JYKC, How "MINE" would be written in this code?

- Ans
- 1. KGLC
 - 2. KHGC
 - 3. KLGK
 - 4. KJGC

Question ID : 6913521231
Option 1 ID : 6913524921
Option 2 ID : 6913524923
Option 3 ID : 6913524922
Option 4 ID : 6913524924

Status : Answered
Chosen Option : 1

Q.20 If an electric iron rated 1000W is operated for 3 hours/day, find the total energy consumed in 30 days in Kwh.

- Ans
- 1. 90000

2. 9000
 3. 90
 4. 900

Question ID : 6913521269
Option 1 ID : 6913525073
Option 2 ID : 6913525074
Option 3 ID : 6913525075
Option 4 ID : 6913525076

Status : Not Answered
Chosen Option : --

Q.21 $70 \div 5 \times (10 - 8 \div 2) \div 3 = ?$

- Ans 1. 28
 2. 3
 3. $\frac{1}{3}$
 4. 7



Teachingninja.in

Question ID : 6913521204
Option 1 ID : 6913524815
Option 2 ID : 6913524816
Option 3 ID : 6913524814
Option 4 ID : 6913524813

Status : Answered
Chosen Option : 1

Q.22 Frictional force acts _____.

- Ans 1. Against the direction of the force
 2. At any angle to the direction of the force.
 3. In the direction of the force

X 4. Perpendicular to the direction of the force

Question ID : 6913521270
Option 1 ID : 6913525077
Option 2 ID : 6913525079
Option 3 ID : 6913525078
Option 4 ID : 6913525080

Status : Answered
Chosen Option : 1

Q.23 Can you tell which argument is strong?

Statement:

Should government take priority linking rivers?

Arguments:

- I. Yes, in the long run this will entirely eradicate water shortages in remote areas.
- II. No, we shouldn't contaminate water and the rivers will naturally take its course

Ans

- X** 1. Both I and II are strong
- X** 2. Only argument II is strong
- ✓** 3. Only argument I is strong
- X** 4. Only argument II is strong

Question ID : 6913521235
Option 1 ID : 6913524940
Option 2 ID : 6913524938
Option 3 ID : 6913524937
Option 4 ID : 6913524939



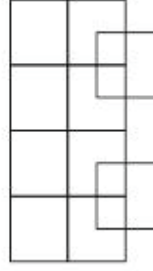
Q.24 The elements with atomic numbers 35, 53 and 85 are _____.

- Ans
- 1. noble gases
 - 2. halides
 - 3. alkaline
 - 4. halogens

Question ID : 6913521268
Option 1 ID : 6913525070
Option 2 ID : 6913525069
Option 3 ID : 6913525071
Option 4 ID : 6913525072

Status : Answered
Chosen Option : 4

Q.25 Find the number of squares in the following figure.



- Ans
- 1. 18
 - 2. 16
 - 3. 17
 - 4. 19

Question ID : 6913521251
Option 1 ID : 6913525003
Option 2 ID : 6913525001

Option 3 ID : 6913525002
Option 4 ID : 6913525004
Status : Answered
Chosen Option : 3

Q.26 Find the odd one out

A	B	C	D
W23	I10	L12	Q17

Ans 1. D
 2. B
 3. A
 4. C

Question ID : 6913521249
Option 1 ID : 6913524995
Option 2 ID : 6913524994
Option 3 ID : 6913524993
Option 4 ID : 6913524996
Status : Answered
Chosen Option : 2

Q.27 If the perimeter of a circular plot is equal to that of a square plot, then the ratio of their respective areas is:

Ans 1. 6 : 11
 2. 7 : 11
 3. 12 : 11

✓ 4. 14 : 11

Question ID : 6913521216
Option 1 ID : 6913524862
Option 2 ID : 6913524861
Option 3 ID : 6913524863
Option 4 ID : 6913524864

Status : Not Attempted and Marked For Review
Chosen Option : --

Q.28 The largest wind energy plant in Kanyakumari generates ___ MW of electricity.

- Ans
1. 480
 2. 380
 3. 400
 4. 360

Note: For this question, discrepancy is found in question/answer. So, This question is ignored for all candidates.

Question ID : 6913521261
Option 1 ID : 6913525044
Option 2 ID : 6913525042
Option 3 ID : 6913525043
Option 4 ID : 6913525041

Status : Not Answered
Chosen Option : --

Q.29 The mass number of an isotope of an element is 298. If its nucleus has 189 neutrons, what is its atomic number?

- Ans
1. 487.0
 2. 189.0
 3. 109.0
 4. 298.0

Question ID : 6913521260



Option 1 ID : 6913525040
Option 2 ID : 6913525038
Option 3 ID : 6913525039
Option 4 ID : 6913525037

Status : Answered

Chosen Option : 1

Q.30 In a triangle ABC, points D and E are lying on AB and AC, respectively. DE is also parallel to the base BC. O is the intersection of BE and CD. If AD : DB = 4 : 3 find the ratio of DO to DC?

- Ans
- 1. 5 : 7
 - 2. 4 : 11
 - 3. 5 : 12
 - 4. 3 : 7

Question ID : 6913521208
Option 1 ID : 6913524832
Option 2 ID : 6913524830
Option 3 ID : 6913524829
Option 4 ID : 6913524831

Status : Not Answered

Chosen Option : --

Q.31 Three flood gates A, B and C can fill a reservoir in 6 hours. After working at it together for 2 hours, flood gate C is closed. Flood gates A and B can fill the remaining part in 7 hours. The number of hours taken by flood gate C alone to fill the reservoir is:

- Ans
- 1. 16
 - 2. 10
 - 3. 14
 - 4. 12

Question ID : 6913521217
Option 1 ID : 6913524868
Option 2 ID : 6913524865

Option 3 ID : 6913524867
Option 4 ID : 6913524866

Status : Not Attempted and Marked For Review
Chosen Option : --

Q.32 Ace Indian cueist _____ won the 2017 IBSF World Billiards Championship held at Doha.

- Ans
- 1. Ashok Shandilya
 - 2. Subhash Agarwal
 - 3. Geet Sethi
 - 4. Pankaj Advani

Question ID : 6913521289
Option 1 ID : 6913525154
Option 2 ID : 6913525156
Option 3 ID : 6913525153
Option 4 ID : 6913525155

Status : Not Answered
Chosen Option : --

Q.33 Who among the following has been appointed the Chef de Mission of the Indian contingent for the Asian Games 2018?

- Ans
- 1. Ramkishore Singh
 - 2. Rajeev Mehta
 - 3. Brij Bhushan Sharan Singh
 - 4. Dig Vijay Singh

Question ID : 6913521283
Option 1 ID : 6913525129
Option 2 ID : 6913525131
Option 3 ID : 6913525132
Option 4 ID : 6913525130

Status : Not Answered



Chosen Option : --

Q.34 Odometer is an instrument used to measure:

- Ans 1. Direction
 2. Distance
 3. Odour
 4. Speed

Question ID : 6913521257
Option 1 ID : 6913525028
Option 2 ID : 6913525026
Option 3 ID : 6913525027
Option 4 ID : 6913525025

Status : Answered

Chosen Option : 2

Q.35 What is the horizontal mirror image of REST?

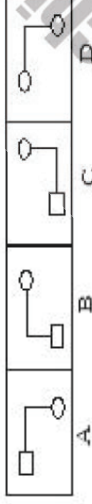
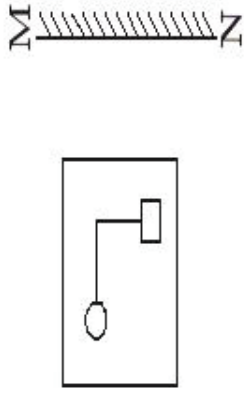
REST	T23R	BE2L	REST
A	B	C	D

- Ans 1. B
 2. D
 3. A
 4. C

Question ID : 6913521242
Option 1 ID : 6913524966
Option 2 ID : 6913524968

Option 3 ID : 6913524965
Option 4 ID : 6913524967
Status : Answered
Chosen Option : 4

Q.36 Choose the mirror image for the following figure when the mirror is kept at the MN line.

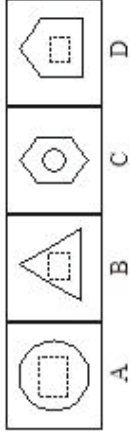


Ans ~~1. D~~
✓ 2. B
~~3. C~~
~~4. A~~

Question ID : 6913521255
Option 1 ID : 6913525020
Option 2 ID : 6913525018
Option 3 ID : 6913525019
Option 4 ID : 6913525017
Status : Answered
Chosen Option : 2

Q.37

Find the odd one out.



- Ans ~~X~~ 1. A
✓ 2. C
~~X~~ 3. B
~~X~~ 4. D

Question ID : 6913521247
Option 1 ID : 6913524985
Option 2 ID : 6913524987
Option 3 ID : 6913524986
Option 4 ID : 6913524988

Status : Answered
Chosen Option : 2

Q.38 The hydrochloric acid secreted by the gastric glands facilitates the action of the enzyme _____.

- Ans ~~X~~ 1. Amylase
~~X~~ 2. Trypsin
~~X~~ 3. Lipase
✓ 4. Pepsin

Question ID : 6913521278
Option 1 ID : 6913525111
Option 2 ID : 6913525110
Option 3 ID : 6913525112
Option 4 ID : 6913525109

Status : Answered
Chosen Option : 1



Q.39 If '+' means '-', '-' means 'x', 'x' means '÷', '÷' means '+', and 'x' means '÷', then what is the value of $23 - 4 + 15 \times 3 \div 10$?

- Ans
- 1. 110
 - 2. 95
 - 3. 97
 - 4. 100

Question ID : 6913521237
Option 1 ID : 6913524948
Option 2 ID : 6913524946
Option 3 ID : 6913524945
Option 4 ID : 6913524947

Status : Answered
Chosen Option : 3

Q.40 If TEEN is written as 205514, then what is code for ENTER?

- Ans
- 1. 51420518
 - 2. 51520618
 - 3. 51420618
 - 4. 51520518

Question ID : 6913521229
Option 1 ID : 6913524913
Option 2 ID : 6913524916
Option 3 ID : 6913524914
Option 4 ID : 6913524915

Status : Answered
Chosen Option : 1

Q.41 When a bullet is fired from a gun the kinetic energy of the bullet is _____.

- Ans
- 1. Less than the gun

- 2. Is incomparable
- 3. More than the gun
- 4. Equal to the gun

Question ID : 6913521274
Option 1 ID : 6913525093
Option 2 ID : 6913525096
Option 3 ID : 6913525095
Option 4 ID : 6913525094
Status : Answered
Chosen Option : 2

Q.42 The square root of 13.69 is _____.

- Ans
- 1. 0.37
 - 2. 0.037
 - 3. 3.7
 - 4. 37



Question ID : 6913521202
Option 1 ID : 6913524806
Option 2 ID : 6913524808
Option 3 ID : 6913524807
Option 4 ID : 6913524805
Status : Answered
Chosen Option : 1

Q.43 Which actor's autobiography is titled as 'Khullam Khulla'?

- Ans
- 1. Ranbir Kapoor
 - 2. Raj Kapoor
 - 3. Rishi Kapoor

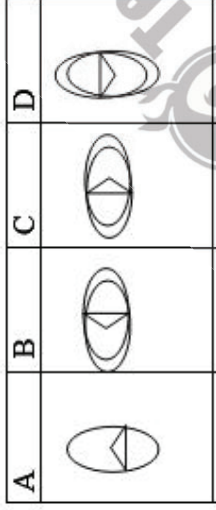
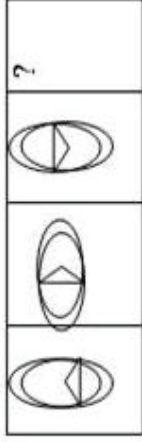
X 4. Rajiv Kapoor

Question ID : 6913521285
Option 1 ID : 6913525138
Option 2 ID : 6913525137
Option 3 ID : 6913525140
Option 4 ID : 6913525139

Status : Answered

Chosen Option : 3

Q.44 Select the option that can replace the question mark (?) in the following series.



Ans **X** 1. A
X 2. D
X 3. C
✓ 4. B

Question ID : 6913521246
Option 1 ID : 6913524981
Option 2 ID : 6913524984
Option 3 ID : 6913524983
Option 4 ID : 6913524982



Status : **Answered**
Chosen Option : **4**

Q.45 A truck falls off a ledge and drops to the ground in 0.8 secs. How high is the ledge from the ground?($g=10\text{m/s}^2$)

- Ans
- 1. 0.32m
 - 2. 320m
 - 3. 3.2m
 - 4. 32m

Question ID : 6913521272
Option 1 ID : 6913525087
Option 2 ID : 6913525088
Option 3 ID : 6913525086
Option 4 ID : 6913525085

Status : **Not Answered**
Chosen Option : **--**

Q.46 The HCF of 54, 66 and 90 is:

- Ans
- 1. 6
 - 2. 9
 - 3. 4
 - 4. 3

Question ID : 6913521205
Option 1 ID : 6913524818
Option 2 ID : 6913524817
Option 3 ID : 6913524819
Option 4 ID : 6913524820

Status : **Answered**
Chosen Option : **1**

Q.47

Given is a statement followed by two arguments numbered I and II. Consider the statement and the arguments and decide which of the arguments is/are strong.

Statement:

Are games to be made compulsory for primary students?

Arguments:

I. Yes, games are important for physical development.

II. No, games waste the academic time of the students, thus making them weaker in academics.

Ans

- 1. Both argument I and II are strong.
- 2. Only argument II is strong.
- 3. Neither argument I nor II is strong.
- 4. Only argument I is strong.

Question ID : 6913521232
Option 1 ID : 6913524928
Option 2 ID : 6913524926
Option 3 ID : 6913524927
Option 4 ID : 6913524925
Status : Answered
Chosen Option : 4

Q.48 Who was the first female CEO of Lloyd's of London?

Ans

- 1. Deanna M. Mulligan
- 2. Beth E. Mooney
- 3. Anna Manning
- 4. Inga Beale

Question ID : 6913521298
Option 1 ID : 6913525192
Option 2 ID : 6913525190
Option 3 ID : 6913525189
Option 4 ID : 6913525191

Status : Not Answered
Chosen Option : --

Q.49 Using the below statements can we verify the conclusions?





Statement:

- All diagrams are figures
- All figures are three dimensions

Conclusions:

1. All three dimensions are diagrams
2. All figures are diagrams

Ans

-  1. All the conclusions follow
 2. No conclusion follow
 3. Only conclusion 1 follows
 4. Only conclusion 2 follows

Question ID : 6913521230
Option 1 ID : 6913524918
Option 2 ID : 6913524920



Option 3 ID : 6913524919
Option 4 ID : 6913524917
Status : Answered
Chosen Option : 2

Q.50 The process where electricity is passed through 10% NaCl is called _____.

- Ans
- 1. Hall – Heroult process
 - 2. Chlor-alkali process
 - 3. Bayers process
 - 4. Chlor-salt process

Question ID : 6913521259
Option 1 ID : 6913525036
Option 2 ID : 6913525033
Option 3 ID : 6913525035
Option 4 ID : 6913525034
Status : Not Answered
Chosen Option : --

Q.51 Name three elements that have a Single electro outermost Shells?

- Ans
- 1. Magnesium , Helium , Neon
 - 2. Magnesium , Calcium , Barium
 - 3. Helium , Neon , Argon
 - 4. Lithium , Sodium , Potassium

Question ID : 6913521275
Option 1 ID : 6913525100
Option 2 ID : 6913525099
Option 3 ID : 6913525098
Option 4 ID : 6913525097



Status : Answered
Chosen Option : 4

Q.52 The Pulichintala Hydroelectric Project is on which river?

- Ans
- 1. Penna
 - 2. Krishna
 - 3. Kaveri
 - 4. Godavari

Question ID : 6913521296
Option 1 ID : 6913525183
Option 2 ID : 6913525181
Option 3 ID : 6913525184
Option 4 ID : 6913525182

Status : Answered
Chosen Option : 2

Q.53 $5.52 - 2.3^2 + 0.8^3 \times 0.12 \div 0.4^4 - 3.14 = ?$

- Ans
- 1. 0.42
 - 2. 0.51
 - 3. -0.51
 - 4. -0.63

Question ID : 6913521206
Option 1 ID : 6913524824
Option 2 ID : 6913524821
Option 3 ID : 6913524822
Option 4 ID : 6913524823

Status : Not Answered
Chosen Option : --

Q.54

Solution A has a pH of 6 , Solution B has a pH of 8 and Solution C has a pH of 2, which solution has the most hydrogen ion concentration?

- Ans
- 1. B
 - 2. A
 - 3. C
 - 4. None have hydrogen ions

Question ID : 6913521264
Option 1 ID : 6913525054
Option 2 ID : 6913525053
Option 3 ID : 6913525055
Option 4 ID : 6913525056
Status : Answered
Chosen Option : 4

Q.55 Find the next number in the following series.

10, 16, 25, 37, ?

- Ans
- 1. 42
 - 2. 50
 - 3. 52
 - 4. 45

Question ID : 6913521236
Option 1 ID : 6913524944
Option 2 ID : 6913524942
Option 3 ID : 6913524943
Option 4 ID : 6913524941
Status : Answered
Chosen Option : 3

Q.56 Who inaugurated Global Entrepreneurship Summit (GES-2017) in Hyderabad jointly with PM Narendra Modi?

Ans

- ✓ 1. Ivanka Trump
- ✗ 2. Ivana Trump
- ✗ 3. Melanie Trump
- ✗ 4. Donald Trump

Question ID : 6913521288
Option 1 ID : 6913525151
Option 2 ID : 6913525150
Option 3 ID : 6913525152
Option 4 ID : 6913525149

Status : Answered

Chosen Option : 1

Q.57 The mean of the observations $x, x + 3, x + 5, x + 8, x + 9$ is 9 . What is the mean of the last three observations?

Ans

- ✗ 1. $\frac{31}{3}$
- ✗ 2. $\frac{32}{3}$
- ✓ 3. $\frac{34}{3}$
- ✗ 4. $\frac{35}{3}$

Question ID : 6913521223
Option 1 ID : 6913524889
Option 2 ID : 6913524890
Option 3 ID : 6913524891
Option 4 ID : 6913524892

Status : Answered

Chosen Option : 3

Q.58 Sumana introduces Mahesh and Kumresh as her son's uncle's sons. The boys are Sumana's _____.



Ans 1. friends

2. nephews

3. cousins

4. nieces

Question ID : 6913521227
Option 1 ID : 6913524906
Option 2 ID : 6913524908
Option 3 ID : 6913524905
Option 4 ID : 6913524907

Status : Answered
Chosen Option : 2

Q.59 Which state government will set up the world's first IT campus for differently-abled persons?

Ans 1. Haryana

2. Andhra Pradesh

3. Telangana

4. West Bengal

Question ID : 6913521291
Option 1 ID : 6913525164
Option 2 ID : 6913525161
Option 3 ID : 6913525162
Option 4 ID : 6913525163

Status : Not Answered
Chosen Option : --

Q.60 Raghuvir obtained an average of 25 marks in 12 tests. Rumela has been maintaining an average of 23 marks so far, but she has taken only 8 of the tests. How much does Rumela have to score on an average in the remaining 4 tests to match Raghuvir's performance?

Ans 1. 26

- ~~X~~ 2. 28
- ~~X~~ 3. 27
- ✓ 4. 29

Question ID : 6913521224
Option 1 ID : 6913524893
Option 2 ID : 6913524895
Option 3 ID : 6913524894
Option 4 ID : 6913524896

Status : Answered
Chosen Option : 4

Q.61 The oxides of carbon, nitrogen and Sulphur that are released on burning fossil fuels are

- Ans
- ✓ 1. Acidic oxides
 - ~~X~~ 2. Neutral oxides
 - ~~X~~ 3. Amphoteric oxides
 - ~~X~~ 4. Basic oxides



Question ID : 6913521262
Option 1 ID : 6913525047
Option 2 ID : 6913525048
Option 3 ID : 6913525046
Option 4 ID : 6913525045

Status : Not Answered
Chosen Option : --

Q.62 Two bones can be connected to each other by another type of connective tissue called the _____.

- Ans
- ~~X~~ 1. Tendons
 - ~~X~~ 2. Cartilage
 - ~~X~~ 3. Matrix

✓ 4. Ligament

Question ID : 6913521277
Option 1 ID : 6913525108
Option 2 ID : 6913525106
Option 3 ID : 6913525105
Option 4 ID : 6913525107
Status : Answered
Chosen Option : 1

Q.63 By working 8 hours a day, Ram writes a book in 18 days. How many hours should he work per day to complete this work in 12 days?

- Ans
- ✗ 1. 9 hours
 - ✗ 2. 10 hours
 - ✓ 3. 12 hours
 - ✗ 4. 15 hours

Question ID : 6913521214
Option 1 ID : 6913524856
Option 2 ID : 6913524854
Option 3 ID : 6913524853
Option 4 ID : 6913524855
Status : Answered
Chosen Option : 3

Q.64 Who among the following was appointed as a whole-time member of market regulator Securities and Exchange Board of India (SEBI) on 7 November 2017?

- Ans
- ✓ 1. Sanjeev Kaushik
 - ✗ 2. U.K. Sinha
 - ✗ 3. Neelam Damodaran
 - ✗ 4. V. Ramakrishnan

Question ID : 6913521299
Option 1 ID : 6913525196
Option 2 ID : 6913525193
Option 3 ID : 6913525194
Option 4 ID : 6913525195

Status : Answered

Chosen Option : 4

Q.65 Suresh is facing the south-west direction. He turns 135° clockwise and then turns 45° in the anti-clockwise direction. Which direction is he facing now?

- Ans
- ✓ 1. North-West
 - ✗ 2. South
 - ✗ 3. North-East
 - ✗ 4. North

Question ID : 6913521254
Option 1 ID : 6913525013
Option 2 ID : 6913525015
Option 3 ID : 6913525014
Option 4 ID : 6913525016

Status : Answered

Chosen Option : 1

Q.66 Who amongst the following won the Best FIFA Men's Player Award 2017?

- Ans
- ✗ 1. Lionel Messi
 - ✗ 2. Neymar Jr.
 - ✓ 3. Cristiano Ronaldo
 - ✗ 4. Wayne Rooney

Question ID : 6913521282
Option 1 ID : 6913525126
Option 2 ID : 6913525125



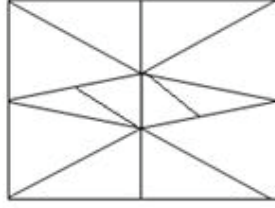
Option 3 ID : 6913525127
Option 4 ID : 6913525128
Status : Answered
Chosen Option : 4

Q.67 Who was the founder of the Pratihara dynasty?

- Ans
- 1. Narasimhadeva I
 - 2. Harishchandra
 - 3. Harshvardhan
 - 4. Ramachandra

Question ID : 6913521295
Option 1 ID : 6913525177
Option 2 ID : 6913525179
Option 3 ID : 6913525178
Option 4 ID : 6913525180
Status : Answered
Chosen Option : 4

Q.68 How many triangles are there in the following figure?



- Ans
- 1. 17
 - 2. 14
 - 3. 13

✓ 4. 16

Question ID : 6913521252
Option 1 ID : 6913525008
Option 2 ID : 6913525005
Option 3 ID : 6913525006
Option 4 ID : 6913525007
Status : Answered
Chosen Option : 4

Q.69 The element with atomic number 57 belongs to:

- Ans
- 1. s-block
 - 2. d-block
 - 3. f-block
 - 4. p-block

Question ID : 6913521271
Option 1 ID : 6913525082
Option 2 ID : 6913525081
Option 3 ID : 6913525084
Option 4 ID : 6913525083
Status : Answered
Chosen Option : 4

Q.70 Aihole Inscription is associated with which of the following rulers?

- Ans
- 1. Vikramaditya
 - 2. Pulakesin II
 - 3. Akbar
 - 4. Ashoka

Question ID : 6913521294



Option 1 ID : 6913525175
Option 2 ID : 6913525174
Option 3 ID : 6913525176
Option 4 ID : 6913525173

Status : Not Answered

Chosen Option : --

Q.71 There are a red, b yellow and c green tokens in a bag. If $a : b :: 13 : 10$, $b : c :: 6 : 13$, then $a : b : c$ is given by:

- Ans
- 1. 13 : 6 : 10
 - 2. 13 : 6 : 13
 - 3. 39 : 30 : 65
 - 4. 13 : 60 : 13

Question ID : 6913521212
Option 1 ID : 6913524848
Option 2 ID : 6913524845
Option 3 ID : 6913524846
Option 4 ID : 6913524847

Status : Answered

Chosen Option : 3

Q.72

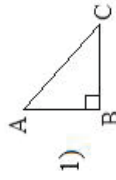


Read the given question and decide which of the following information is sufficient to answer the question.

Question:

What is the area of triangle ABC?

Information:



2) AB = 12 cm; BC = 12 cm

- Ans
- 1. Only 1 is sufficient.
 - 2. Both 1 and 2 are sufficient.
 - 3. Only 2 is sufficient.
 - 4. Either 1 or 2 is sufficient.

Question ID : 6913521243
Option 1 ID : 6913524969
Option 2 ID : 6913524972
Option 3 ID : 6913524970
Option 4 ID : 6913524971

Status : Answered

Chosen Option : 2

Q.73 The dehydrating agent used in the conversion of ethanol to ethene is _____

- Ans
- 1. Heat
 - 2. Concentrated Sulphuric acid
 - 3. Nickel

~~X~~ 4. Sunlight

Question ID : 6913521266
Option 1 ID : 6913525063
Option 2 ID : 6913525062
Option 3 ID : 6913525061
Option 4 ID : 6913525064

Status : Answered

Chosen Option : 1

Q.74 In which state is the oldest oil field of India?

Ans 1. Assam

~~X~~ 2. Punjab

~~X~~ 3. Maharashtra

~~X~~ 4. Gujarat

Question ID : 6913521297
Option 1 ID : 6913525186
Option 2 ID : 6913525185
Option 3 ID : 6913525187
Option 4 ID : 6913525188

Status : Answered

Chosen Option : 1

Q.75 Find the next term in this series.

14, 42, 126, _____.

Ans ~~X~~ 1. 370

2. 378

~~X~~ 3. 376

~~X~~ 4. 375

Question ID : 6913521238
Option 1 ID : 6913524952
Option 2 ID : 6913524950
Option 3 ID : 6913524951
Option 4 ID : 6913524949

Status : Not Attempted and Marked For Review
Chosen Option : --

Q.76 Saraswathi and Gauri are sisters. How is Gauri's brother related to Saraswathi's father's father?

- Ans
- 1. Grand-daughter
 - 2. Uncle
 - 3. Grandson
 - 4. Son

Question ID : 6913521226
Option 1 ID : 6913524902
Option 2 ID : 6913524904
Option 3 ID : 6913524903
Option 4 ID : 6913524901

Status : Answered
Chosen Option : 3

Q.77 What day would it be on 29th March 2020?

- Ans
- 1. Friday
 - 2. Monday
 - 3. Sunday
 - 4. Saturday

Question ID : 6913521218
Option 1 ID : 6913524872



Option 2 ID : 6913524870
Option 3 ID : 6913524869
Option 4 ID : 6913524871

Status : Not Answered
Chosen Option : --

Q.78 Who was the second Indian women footballer to win the Arjuna Award?

Ans 1. Oinam Bembem Devi

2. Aditi Chauhan

3. Bala Devi

4. Mithali Raj

Question ID : 6913521281
Option 1 ID : 6913525124
Option 2 ID : 6913525121
Option 3 ID : 6913525123
Option 4 ID : 6913525122

Status : Answered
Chosen Option : 1

Q.79 Given is a statement followed by two assumptions numbered I and II. Consider the statement and the following assumptions and decide which of the assumptions is/are implicit in the statement.

Statement:

“One of the reasons of obesity is bingeing on junk food”, says a mom to her daughter.

Assumptions:

I. Junk food causes obesity.

II. Rita and Gita are mom and daughter.

Ans 1. Both assumptions I and II are implicit.

- 2. Only assumption I is implicit.
- 3. Only assumption II is implicit.
- 4. Neither assumption I nor II is implicit.

Question ID : 6913521233
Option 1 ID : 6913524932
Option 2 ID : 6913524929
Option 3 ID : 6913524930
Option 4 ID : 6913524931
Status : Answered
Chosen Option : 2

Q.80 Rakesh and Ranjit can complete a task in 4 and 6 days, respectively when working alone. Ranjit started working on the task, and was joined by Rakesh after 2 days. How many days will they require to complete the remaining work?

- Ans
- 1. 1.6
 - 2. 0.8
 - 3. 2
 - 4. 1.2

Question ID : 6913521215
Option 1 ID : 6913524860
Option 2 ID : 6913524858
Option 3 ID : 6913524857
Option 4 ID : 6913524859
Status : Answered
Chosen Option : 1

Q.81 A ladder of length 13 metres is placed against the wall and the foot of the ladder is 6.5 metres from the wall. What is the angle of elevation of the ladder leaning against a wall?

- Ans
- 1. 105°
 - 2. 30°

3. 45°
 4. 60°

Question ID : 6913521222
Option 1 ID : 6913524888
Option 2 ID : 6913524885
Option 3 ID : 6913524886
Option 4 ID : 6913524887
Status : Not Answered
Chosen Option : --

Q.82 How many leap years are there in a period of 100 years?

- Ans 1. 23
 2. 22
 3. 24
 4. 25

Question ID : 6913521219
Option 1 ID : 6913524873
Option 2 ID : 6913524874
Option 3 ID : 6913524875
Option 4 ID : 6913524876
Status : Answered
Chosen Option : 4

Q.83 What is the GDP growth rate for India in 2018-19 projected by IMF?

- Ans 1. 8.5%
 2. 7.3%
 3. 9%
 4. 6%

Question ID : 6913521300



Option 1 ID : 6913525199
Option 2 ID : 6913525197
Option 3 ID : 6913525198
Option 4 ID : 6913525200
Status : Answered
Chosen Option : 2

Q.84 Which assumptions are implied from the below statement?

The headmistress called for a meeting for all parents and teaching staff to discuss fee structure

Assumptions:

- I. There is a plan to revamp fee structure
 - II. To arrive at a common consent
- Ans ~~X~~ 1. Only II is implicit
~~X~~ 2. Only I is implicit
✓ 3. Both I and II are implicit
~~X~~ 4. Neither I nor II is implicit

Question ID : 6913521234
Option 1 ID : 6913524934
Option 2 ID : 6913524933
Option 3 ID : 6913524936
Option 4 ID : 6913524935
Status : Answered
Chosen Option : 3

Q.85

In the series below one of the sequence is wrong. Find out the wrong option:

1003000005, 2000400000, 3000400006,
4000006000000008

- Ans
- 1. 2000400000
 - 2. 4000006000000008
 - 3. 1003000005
 - 4. 3000400006

Question ID : 6913521239
Option 1 ID : 6913524955
Option 2 ID : 6913524954
Option 3 ID : 6913524956
Option 4 ID : 6913524953
Status : Not Answered
Chosen Option : --

Q.86 Who is the first chief commercial officer (CCO) of Bajaj Auto Ltd.?

- Ans
- 1. Ramesh Maheshwari
 - 2. Sumeet Narang
 - 3. Rakesh Sharma
 - 4. Eric Vas

Question ID : 6913521287
Option 1 ID : 6913525147
Option 2 ID : 6913525148
Option 3 ID : 6913525146
Option 4 ID : 6913525145
Status : Answered
Chosen Option : 1

Q.87



If $(x + y):(x - y) = 5:1$ then $(x^2 + y^2):(x^2 - y^2) = ?$

Ans

- 1. 8:17
- 2. 13:5
- 3. 25:9
- 4. 16:1

Question ID : 6913521207

Option 1 ID : 6913524827

Option 2 ID : 6913524826

Option 3 ID : 6913524825

Option 4 ID : 6913524828

Status : Not Answered

Chosen Option : --

Q.88 The tissue providing nutrition to the embryo in the uterus is the _____.

Ans

- 1. Fallopian tube
- 2. Oviduct
- 3. Placenta
- 4. Villi

Question ID : 6913521276

Option 1 ID : 6913525101

Option 2 ID : 6913525102

Option 3 ID : 6913525104

Option 4 ID : 6913525103

Status : Answered

Chosen Option : 1

Q.89 The cost of same valued 15 tickets is ₹ 9. What will be the cost of 30 tickets?

Ans

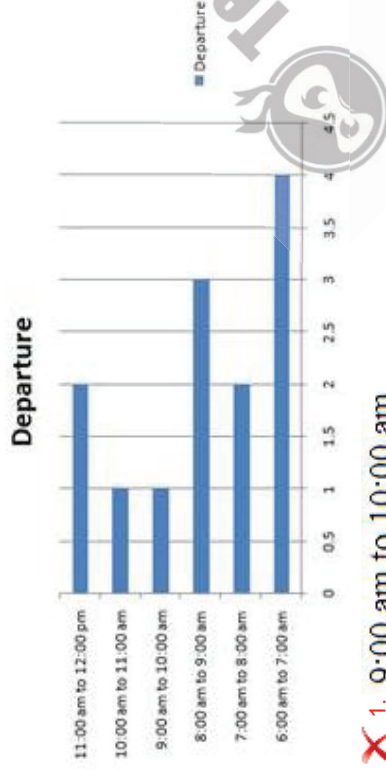
- 1. ₹ 19

- 2. ₹ 15
- 3. ₹ 18
- 4. ₹ 16

Question ID : 6913521201
 Option 1 ID : 6913524801
 Option 2 ID : 6913524803
 Option 3 ID : 6913524802
 Option 4 ID : 6913524804

Status : Answered
 Chosen Option : 3

Q.90 As per the below chart, during which hour there is maximum number of departure?



- Ans
- 1. 9:00 am to 10:00 am
 - 2. 7:00 am to 8:00 am
 - 3. 6:00 am to 7:00 am
 - 4. 8:00 am to 9:00 am

Question ID : 6913521240
 Option 1 ID : 6913524959
 Option 2 ID : 6913524958
 Option 3 ID : 6913524960

Option 4 ID : 6913524957
Status : Answered
Chosen Option : 3

Q.91 The compound interest on ₹ 31250 at 8% per annum for $2\frac{3}{4}$ years is ?

- Ans
- 1. ₹ 7337
 - 2. ₹ 7387
 - 3. ₹ 7800
 - 4. ₹ 7300

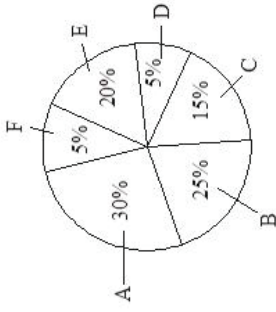
Question ID : 6913521211
Option 1 ID : 6913524841
Option 2 ID : 6913524842
Option 3 ID : 6913524844
Option 4 ID : 6913524843
Status : Not Answered
Chosen Option : --

Q.92 _____ never occurs singly in nature.

- Ans
- 1. Momentum
 - 2. Force
 - 3. Velocity
 - 4. Pressure

Question ID : 6913521258
Option 1 ID : 6913525029
Option 2 ID : 6913525031
Option 3 ID : 6913525030
Option 4 ID : 6913525032
Status : Not Answered
Chosen Option : --

Q.93 The given pie chart shows information about Non-Performing Assets (NPA) processed by the various banks of India till December 2017.



If the total NPAs under all the banks are worth ₹ 300 lakh crores, then NPAs worth how much (in ₹ lakh crores) does Bank 'E' contain till December 2017?

- Ans
- 1. 20
 - 2. 60
 - 3. 40
 - 4. 80

Question ID : 6913521241
Option 1 ID : 6913524961
Option 2 ID : 6913524963
Option 3 ID : 6913524962
Option 4 ID : 6913524964
Status : Answered
Chosen Option : 2

Q.94 _____ can reproduce by budding.

- Ans
- 1. Hydra
 - 2. Earthworms
 - 3. Lobsters
 - 4. Starfish

Question ID : 6913521279
Option 1 ID : 6913525114
Option 2 ID : 6913525116
Option 3 ID : 6913525113
Option 4 ID : 6913525115

Status : Answered

Chosen Option : 1

Q.95 Which of the answer figures will come next in following problem figure series?

Problem figure:



Answer figures:



- Ans 1. **A**
2. **B**
3. **D**
4. **C**

Note: For this question, discrepancy is found in question/answer. So, This question is ignored for all candidates.





Question ID : 6913521253

Option 1 ID : 6913525009
Option 2 ID : 6913525010
Option 3 ID : 6913525012
Option 4 ID : 6913525011

Status : Not Answered

Chosen Option : --

Q.96 Who was the Chairman of the Drafting committee of Indian Constitution?

- Ans
1. Jawaharlal Nehru 
 2. Dr.B.R.Ambedkar 
 3. Vallabhai Patel 
 4. Dr. Rajendra Prasad 

Question ID : 6913521293
Option 1 ID : 6913525170
Option 2 ID : 6913525171
Option 3 ID : 6913525172
Option 4 ID : 6913525169

Status : Answered

Chosen Option : 2

Q.97

Which figure follows next?

/±£¥*	*\±£¥	£¥*/±	?
-------	-------	-------	---

A	B	C	D
£¥*/±	£¥** \	£¥*±	±£¥*\

- Ans
- 1. A
 - 2. B
 - 3. D
 - 4. C

Question ID : 6913521245
 Option 1 ID : 6913524977
 Option 2 ID : 6913524979
 Option 3 ID : 6913524978
 Option 4 ID : 6913524980
 Status : Answered
 Chosen Option : 3

Q.98 The size of the image formed by a converging mirror when object is placed at principal focus is ____.

- Ans 1. highly magnified

- ~~X~~ 2. diminished
- ~~X~~ 3. of the same size
- ~~X~~ 4. point image

Question ID : 6913521273
Option 1 ID : 6913525091
Option 2 ID : 6913525089
Option 3 ID : 6913525092
Option 4 ID : 6913525090
Status : Answered
Chosen Option : 3

Q.99 Read the given statement(s) and conclusions carefully and select which of the conclusions logically follow(s) from the statement(s).

Statement:

- All wool are yarn
- Some wool are rough

Conclusions:

- I. All rough are wool
- II. Some Yarn are rough

- Ans**
- ~~X~~ 1. Both conclusions follow.
 - ~~X~~ 2. Only conclusion I follows.
 - ~~X~~ 3. Neither I nor II follows.
 - ✓ 4. Only conclusion II follows.

Question ID : 6913521228
Option 1 ID : 6913524910
Option 2 ID : 6913524911

Option 3 ID : 6913524912
Option 4 ID : 6913524909
Status : Answered
Chosen Option : 4

Q.100 A galvanometer is used to:

- Ans
- 1. detect the direction of light
 - 2. detect the direction of sound
 - 3. detect the direction of current
 - 4. detect the direction of magnetic induction

Question ID : 6913521267
Option 1 ID : 6913525066
Option 2 ID : 6913525065
Option 3 ID : 6913525067
Option 4 ID : 6913525068
Status : Answered
Chosen Option : 4



Teachingninja.in