



**SSC CHSL TIER – I – Shift - 1 - 04-08-2021**

-  **Latest Govt Job updates**
-  **Private Job updates**
-  **Free Mock tests available**

**Visit - [teachingninja.in](https://teachingninja.in)**

## 100 Questions

---

**Que. 1** In the following question, the given sentence has four parts marked P, Q, R, and S. Choose the part of the sentence with the error and mark it as your answer. If there is no error, mark 'No error (S)' as your answer.

The government need to adopt (P) / a multi-year expenditure outlook (Q) / while preparing the budget. (R) / No error (S)

1. P
2. Q
3. R
4. S

**Testbook Solution** Correct Option - 1

---

**Que. 2** Directions. Identify the segment of the sentence which contains the grammatical error. If there is no error mark 'No error' as your answer.

If I were/ (A) the Education Minister of the country,/ (B) I will introduce/ (C) a student-centric curriculum. (D)

1. A
2. B
3. C
4. D
5. No error

**Testbook Solution** Correct Option - 3

---

**Que. 3** Select the most appropriate ANTONYM of the given word.

Wry

1. Cynical
2. Ironic
3. Polite
4. Deceive

**Testbook Solution** Correct Option - 3

---

**Que. 4** In the following question, out of the four alternatives, choose the word which best expresses the meaning of the given word and click the button corresponding to it.

Malignant

1. Benign
2. Promising
3. Harmful
4. Favourable

**Testbook Solution** Correct Option - 3

---

**Que. 5** In the following question, out of the four alternatives, choose the alternative which best expresses the meaning of the given Idiom/Phrase.

On tenterhooks

1. Survive on medical support
2. In a disorganized manner
3. In anxious suspense
4. Plea for financial help

**Testbook Solution** Correct Option - 3

---

**Que. 6** Select the option that is the passive form of the sentence.

This man has stolen the clothes from the wardrobe.

1. The clothes from the wardrobe have been stolen by this man.
2. The clothes from the wardrobe has been stolen by this man.
3. The clothes from the wardrobe have being stolen by this man.
4. The clothes from the wardrobe were stolen by this man.

**Testbook Solution** Correct Option - 1

---

**Que. 7** **Direction:** Find the misspelled word from the given option.

1. noticeable
2. temporary
3. effect
4. untill

**Testbook Solution** Correct Option - 4

---

**Que. 8** **Direction:** In the following question, a sentence is given in Direct/Indirect speech. Out of the four alternatives choose the one which best expresses the sentence in Indirect/Direct Speech.

He said, "I can afford to throw tantrums but you cannot."

1. He said that he could afford to throw tantrums but I could not.
2. He said that he was able to throw tantrums but I cannot.
3. He said that he can afford to throw tantrums but I could not.
4. He said that he can afford to throw tantrums but I can't.

**Testbook Solution** Correct Option - 1

---

**Que. 9** **Directions:** Out of the four alternatives choose the one which can be substituted for the given sentence.

Government by rich:

1. Oligarchy
2. Aristocracy
3. Pantisocracy
4. Plutocracy

**Testbook Solution** Correct Option - 4

---

**Que. 10** In the following question, four words are given out of which one word is correctly spelt. Find the correctly spelt word.

1. Superstitious
2. Supersticious
3. Supertitious
4. Supersticous

**Testbook Solution** Correct Option - 1

---

**Que. 11** In the following passage, some of the words have been left out. Read the passage carefully and select the correct answer for the given blank out of the four alternatives.

Good health is one of the most \_\_\_\_\_(1)\_\_\_\_\_ and basic essential needs of all human beings. That is why the third of the seventeen Sustainable Development Goals \_\_\_\_\_(2)\_\_\_\_\_ by the world leaders last year aims to \_\_\_\_\_(3)\_\_\_\_\_ good health for all. The Indian constitution also recognizes good health as one of the fundamental rights guaranteed under the right to life. For India to fulfil its dream of \_\_\_\_\_(4)\_\_\_\_\_ a developed and prosperous nation it must take care of the most important of its \_\_\_\_\_(5)\_\_\_\_\_ i.e. its human capital.

Which of the following word fits the blank labeled as (1)?

1. fundamental
2. expansive
3. widen
4. accelerating

**Testbook Solution** Correct Option - 1

---

**Que. 12** Which of the following word fits the blank labeled as (2)?

1. invented
2. escaped
3. adopted
4. spreading

**Testbook Solution** Correct Option - 3

---

**Que. 13** Which of the following word fits the blank labeled as (3)?

1. brought
2. ensure
3. prevent
4. associate

**Testbook Solution** Correct Option - 2

---

**Que. 14** Which of the following word fits the blank labeled as (4)?

1. became
2. become
3. becoming
4. becomes

**Testbook Solution** Correct Option - 3

---

**Que. 15** Which of the following word fits the blank labeled as (5)?

1. forces
2. ties
3. partnership
4. resources

**Testbook Solution** Correct Option - 4

**Que. 16** Directions: Given below are four sentences in jumbled order. Pick the option that gives their correct order.

- A. Sometimes he even prescribed remedies for ailing pets.
- B. Raghav owned a small pet shop.
- C. He also dealt in fish food and birdseed.
- D. He sold cats, dogs, birds and fish in his shop.

- 1. ACDB
- 2. BDCA
- 3. DABC
- 4. CBAD

**Testbook Solution** Correct Option - 2

---

**Que. 17** In the following question, out of the four alternatives, select the alternative which best expresses the meaning of the idiom/phrase.

A shot in the arm

- 1. Get hit by something.
- 2. Lose physical strength.
- 3. Lose motivation to do a task.
- 4. An encouraging stimulus.

**Testbook Solution** Correct Option - 4

---

**Que. 18** Select the correct one-word for the given group of words:

One who has obstinate and narrow religious views

- 1. Bigot
- 2. Philosopher
- 3. Theologian
- 4. Audible

**Testbook Solution** Correct Option - 1

---

**Que. 19** Given below are four jumbled sentences. Select the option that gives their correct order.

- A. They didn't want to run things like other kings, so they decided to change night into day and day into night.
- B. Anyone who disobeyed would be punished with death.
- C. In the Kingdom of Fools, both the king and the minister were idiots.
- D. They ordered that everyone should be awake at night and run their businesses only after dark.

- 1. CADB
- 2. DACB
- 3. ADBC
- 4. ABCD

**Testbook Solution** Correct Option - 1

---

**Que. 20** Select the most appropriate antonym of the given word.

MEAGRE

- 1. common
- 2. scarce

3. plentiful
4. minor

**Testbook Solution** Correct Option - 3

---

**Que. 21** Tick the correct synonyms:

Credulous

1. Incredible
2. Of the same creed
3. Gullible
4. none of the above

**Testbook Solution** Correct Option - 3

---

**Que. 22** Select the most appropriate option to substitute the underlined segment in the given sentence. If there is no need to substitute it, select "No substitution".

The prisoner was looking about an opportunity to escape.

1. looking after
2. looking up
3. looking for
4. No substitution

**Testbook Solution** Correct Option - 3

---

**Que. 23** Directions: Select the most appropriate word to fill in the blank.

A nuclear engineer must focus his \_\_\_\_\_ attention to monitor the reactor.

1. least
2. utmost
3. minimal
4. slightest

**Testbook Solution** Correct Option - 2

---

**Que. 24** Select the alternative that will improve the underlined part of the sentence and in case there is no improvement, select "No Improvement".

The Akshardham temple is worth seeing temple in Delhi.

1. one of the worth seeing temples
2. a temple worth seeing
3. a temple of worth being seen
4. No Improvement

**Testbook Solution** Correct Option - 2

---


**Que. 25** Directions: Select the most appropriate word to fill in the blank.

After a long day at work, there is nothing I \_\_\_\_\_ more than a long hot bath.

1. fury
2. relish
3. rage
4. anger

**Testbook Solution** Correct Option - 2

**Que. 26** Select the option that is related to the third term in the same way as the second term is related to the first term.



- 1.
- 2.
- 3.
- 4.

**Testbook Solution** Correct Option - 2

**Que. 27** Arrange the given words in the sequence in which they occur in the dictionary.

1. Hook
  2. Highway
  3. Honesty
  4. Hypothesis
  5. Highlight
1. 53214
  2. 25431
  3. 52314
  4. 43125

**Testbook Solution** Correct Option - 3

**Que. 28** Rahul said, 'The boy in the photograph is the brother of the daughter of my paternal grandfather's only son'. How is the boy in the picture related to Rahul?

1. Father
2. Nephew
3. Cousin
4. Brother

**Testbook Solution** Correct Option - 4

**Que. 29** In a certain code language, "LENGTH" is coded as "JVIPGN", then How will "STARTS" be written in that code language?

1. UUTCVV
2. UVSBVU
3. UVCTVU
4. UVTCVU

**Testbook Solution** Correct Option - 4

---

**Que. 30** Four word-pairs have been given, out of which three are alike in some manner and one is different. Select the odd one.

1. Unique
2. Exclusive
3. Rare
4. Extinct

**Testbook Solution** Correct Option - 4

---

**Que. 31** In a certain code language DOUBT is written as TQBSL, FLAME then in that code language is written as:

1. KZIGH
2. IGHKZ
3. ZKIGH
4. ZKIHG

**Testbook Solution** Correct Option - 3

---

**Que. 32** In a certain code language, 'STOCK' is written as '340' and 'TENT' is written as '236'. How will 'DOUBLE' be written in that code language?

1. 332
2. 352
3. 354
4. 238

**Testbook Solution** Correct Option - 3

---

**Que. 33** Find the missing number from the given alternatives.

4	52	6
3	34	5
7	?	6

1. 85
2. 68
3. 45
4. 90

**Testbook Solution** Correct Option - 1

---

**Que. 34** If in a certain coding language, 'COVAXIN' is written as '14-9-24-1-22-15-3'. How will 'SPUTNIK' be written in that code language?

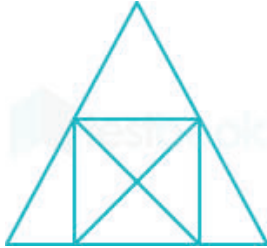
1. 11-9-14-20-21-16-18
2. 11-9-14-20-21-16-19
3. 19-16-5-9-3-5-16-19



4. 11-9-20-14-21-16-19

**Testbook Solution** Correct Option - 2

**Que. 35** How many triangles are there in the given figure?



1. 18
2. 15
3. 13
4. 14

**Testbook Solution** Correct Option - 4

**Que. 36** A series is given with one term missing. Select the correct alternative from the given ones that will complete the series.

O, M, R, K, U, I, ?


1. X
2. Y
3. V
4. W

**Testbook Solution** Correct Option - 1

**Que. 37** Which of the answer figure is exactly the mirror image of the given figure, when the mirror is placed on the line AB.



- 1.
- 2.



**Testbook Solution** Correct Option - 4

**Que. 38** Select the option which is related to the third word in the same way as the second word is related to the first word.

Temperature : kelvin :: Electric current : ?

1. Candela
2. Mole
3. Length
4. Ampere

**Testbook Solution** Correct Option - 4

**Que. 39** Which of the numbers should be interchanged so as to make the equation correct?

$$49 \times 7 \div 14 + 25 - 27 = 0$$

1. 27, 14
2. 14, 49
3. 25, 49
4. 25, 27

**Testbook Solution** Correct Option - 2

**Que. 40** Select the odd word from the given alternatives.

1. Hepatitis
2. Chickenpox
3. Smallpox
4. Kala-azar

**Testbook Solution** Correct Option - 4

**Que. 41** What will be the next term in the following series:

$$4, 5, 12, 39, 160, ?$$

1. 625
2. 805
3. 730
4. 820

**Testbook Solution** Correct Option - 2

**Que. 42** The management divides Rs 15000 among the teacher A, B, and C such that A's share to B's share are in the ratio 5 : 2 & B's share to C's share are in the ratio 7 : 13. How much amount will 'B' receive?

receive?

1. Rs 2800
2. Rs 1400
3. Rs 5000
4. Rs 3200

**Testbook Solution** Correct Option - 1

---

**Que. 43** A series is given in the following question. Find the term that will replace the question mark.  
3, 5, 15, 41, ?

1. 19
2. 72
3. 91
4. 85

**Testbook Solution** Correct Option - 3

---

**Que. 44** When the following figure is folded to form a cube, how many dots lie opposite the face bearing four dots?



1. 1
2. 3
3. 6
4. 2

**Testbook Solution** Correct Option - 1

---

**Que. 45** In the following question below are given some statements followed by some conclusions based on those statements. Taking the given statements to be true even if they seem to be at variance from commonly known facts. Read all the conclusions and then decide which of the given conclusion logically follows the given statements.

**Statements:**

- I. Some A are K.
- II. Some M are K.
- III. No M is J.

**Conclusions:**

- I. Some J are not M.
  - II. Some M are A.
  - III. No K is A.
1. Only conclusion I follows
  2. Both conclusion I and III follows
  3. Neither conclusion I, II and III follows

4. Both conclusion I and II follows

**Testbook Solution** Correct Option - 1

**Que. 46** From the given answer figures, select the one in which the question figure is hidden/embedded.  
(Rotation is not allowed)



1.



2.



3.



4.



**Testbook Solution** Correct Option - 4

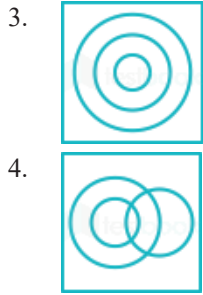
**Que. 47** Find the best relationship among the three classes in the following diagrams:  
Women, Widow, Professor

1.



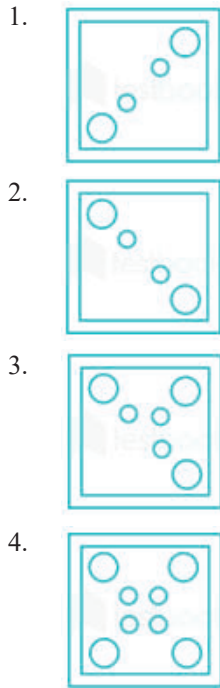
2.





**Testbook Solution** Correct Option - 4

**Que. 48** A piece of paper is folded and punched as shown below in the question figures. From the given answer figures, indicate how it will appear when opened?



**Testbook Solution** Correct Option - 4

**Que. 49** Select the related number from the given alternatives.

$$2 : 3 :: 11 : ?$$

1. 15
2. 20
3. 121
4. 120

**Testbook Solution** Correct Option - 4

**Que. 50**

Select the option that is related to the third letter-cluster in the same way as the second letter-cluster is related to the first letter-cluster.

DUST : WFHG :: BASE : ?

1. HZHE
2. YZHV
3. VHZY
4. DWES

**Testbook Solution** Correct Option - 2

---

**Que. 51** By melting a hemisphere having radius 6.3 cm is converted into a cylinder. If the radius of the cylinder is 9 cm then find the height of the cylinder

1. 34.52 cm
2. 41.16 cm
3. 46.38 cm
4. 54.76 cm

**Testbook Solution** Correct Option - 2

---

**Que. 52** If the speed of a boat in still water is 13 km/h and speed of stream is 9 km/h then find the total time taken by boat to cover 88 km downstream and 22 km upstream.

1. 9.5 hours
2. 10.5 hours
3. 7.5 hours
4. 12.5 hours

**Testbook Solution** Correct Option - 1

---

**Que. 53** If A is 150% of B and B is 40% of C and  $A + B + C$  is 20 then find the value of  $2B + 3C - 5A$ .

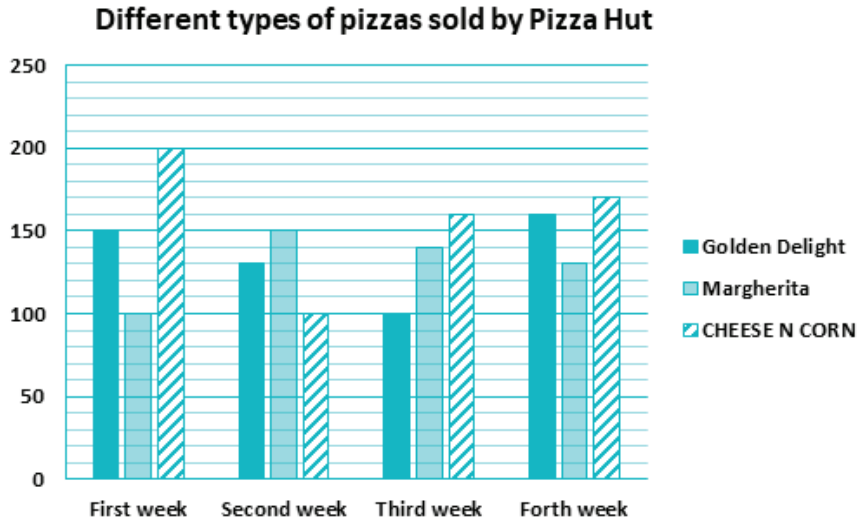
1. 10
2. 12
3. 8
4. 15

**Testbook Solution** Correct Option - 3

---

**Que. 54** **Direction:** Study the given bar graph and answer the following questions accordingly.

The bar graph shows the three different types of pizzas sold by Pizza Hut in four different weeks.



The number of Golden Delight pizzas sold in the first and second week is what percent more/less than the number of CHEESE N CORN pizzas sold in the first and second week?

1. 7.14% more
2. 6.66% less
3. 6.66% more
4. 7.14% less

**Testbook Solution** Correct Option - 2

**Que. 55** The diameter of a pizza is 28 cm. If  $(\frac{1}{4})^{\text{th}}$  part of the pizza has been removed then find the circumference of the remaining part.

1. 78 cm
2. 94 cm
3. 70 cm
4. 82 cm

**Testbook Solution** Correct Option - 2

**Que. 56** If the radii of two circles is 6.5 cm and 9.3 cm then find the difference between the circumference of the circles.

1. 17.6 cm
2. 16.8 cm
3. 19.2 cm
4. 15.6 cm

**Testbook Solution** Correct Option - 1

**Que. 57** A person covers  $(\frac{1}{5})^{\text{th}}$  of the distance by 20 km/h,  $(\frac{1}{4})^{\text{th}}$  of the distance by 10 km/h and remaining distance by 60 km/h. Find average speed of the person.

1. 36 km/h
2. 32.45 km/h
3. 31.57 km/h
4. 39 km/h

**Testbook Solution** Correct Option - 3

**Que. 58** A person deposits Rs. 7000 rupees for 2 years at 8% per annum on simple interest and he deposits Rs. 10,000 for the same rate and same time on compounded interest. Then find the total interest earned by the person after 2 years.

1. Rs. 2784
2. Rs. 2460
3. Rs. 2889
4. Rs. 2680

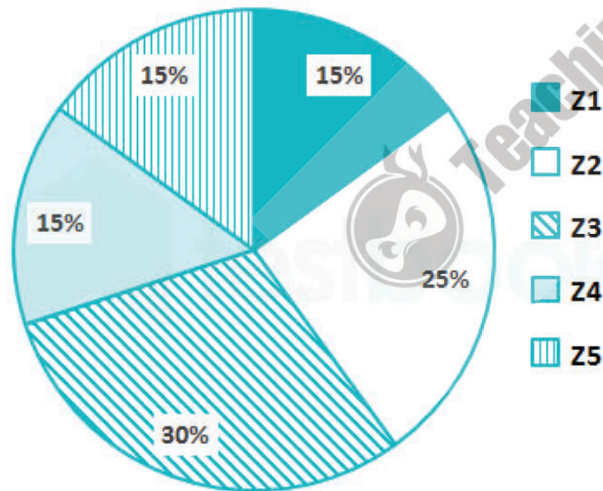
**Testbook Solution** Correct Option - 1

**Que. 59** If  $A : B = 11 : 7$ ,  $B : C = 4 : 19$  then find  $A : B : C$ .

1. 33 : 21 : 76
2. 33 : 14 : 19
3. 44 : 28 : 133
4. 22 : 28 : 57

**Testbook Solution** Correct Option - 3

**Que. 60** The pie chart given below shows the number of tigers in different zoos. The number of tigers in a particular zoo are shown as a percentage of total number of tiger in all the zoos together.



What is the difference in central angle of the sectors for Z1 and Z3?

1.  $18^\circ$
2.  $72^\circ$
3.  $36^\circ$
4.  $54^\circ$

**Testbook Solution** Correct Option - 4

**Que. 61** A kite's rope is 158 meter and its angle of elevation is  $30^\circ$ . Find the height of the kite.

1. 68 meter
2. 84 meter
3.  $79\sqrt{3}$  meter
4. 79 meter



**Testbook Solution** Correct Option - 4

---

**Que. 62** If the height of an equilateral triangle is 3.464 cm. Find the perimeter of the triangle.

1. 12 cm
2. 8 cm
3. 9 cm
4. 14 cm

**Testbook Solution** Correct Option - 1

---

**Que. 63** If a person sells a book for Rs. 1170 then there will be a 22% loss find the profit or loss when the book is sold for Rs. 1450.

1. 8.33% profit
2. 6.67% loss
3. 8.33% loss
4. 3.33% loss

**Testbook Solution** Correct Option - 4

---

**Que. 64** Find the simplified form of  $\frac{(x^4+x^2+1)}{(x^2+x+1)}$

1.  $x^2 + 1$
2.  $x^2 - x + 1$
3.  $x^2 - 1$
4.  $x^2 + x + 1$

**Testbook Solution** Correct Option - 2

---

**Que. 65** A can fill the tank in 6 min. and B can empty the filled tank in 10 min. If both time pipes are opened simultaneously then find the time taken by both the pipes to fill the tank.

1. 12 min
2. 18 min
3. 15 min
4. 20 min

**Testbook Solution** Correct Option - 3

---

**Que. 66** If  $(x + 1/x)^3 = 27$  then find the value of  $x^2 + 1/x^2$ .

1. 11
2. 9
3. 7
4. 15

**Testbook Solution** Correct Option - 3

---

**Que. 67** What is the ratio between the number of Margherita pizzas sold in third and fourth weeks, and the number of CHEESE N CORN pizzas sold in first and third weeks?

1. 3 : 4
2. 4 : 3

3. 1 : 4
4. 3 : 5

**Testbook Solution** Correct Option - 1

---

**Que. 68** If  $\cos\theta = \frac{4x}{(1+4x^2)}$  then find the value of  $\sin\theta$ .

1.  $\frac{1}{(1+4x^2)}$
2.  $\frac{x}{(1-4x^2)}$
3.  $\frac{1-4x^2}{(1+4x^2)}$
4.  $\frac{4x}{(1-4x^2)}$

**Testbook Solution** Correct Option - 3

---

**Que. 69** If  $a + b = p$  and  $ab = pq$  then find the value of  $a^4 + b^4$ .

1.  $p^4 + 2p^2q^2 - 4p^3q$
2.  $p^4 - 2p^2q^2 - 4p^3$
3.  $p^4 + 2p^2q^2 + 4p^3$
4.  $p^4 - 2p^2q^2 + 4p^3$

**Testbook Solution** Correct Option - 1

---

**Que. 70** If in a  $\triangle ABC$ , right angle at A a perpendicular AD is drawn from A on side BC such that  $AD = 8.4$  cm,  $BD = 4.8$  cm then find the length of side BC.

1. 18 cm
2. 13.5 cm
3. 14 cm
4. 19.5 cm

**Testbook Solution** Correct Option - 4

---

**Que. 71** Find the value of  $13 + 13 \times 7 - 6 \times 12 - [3 + 15 \div 3 - 6 \text{ of } (1/2) - 1]$

1. 25
2. 28
3. 30
4. -33

**Testbook Solution** Correct Option - 2

---

**Que. 72** The marked price of one dozen articles is Rs. 125 and discount% on each article is 25%. Find how much articles can be purchased in Rs. 750.

1. 84
2. 108
3. 72
4. 96

**Testbook Solution** Correct Option - 4

---

**Que. 73** Find the largest 5 digit no which is completely divisible by 5, 21, 16, and 8.

1. 99120
2. 99480
3. 99630
4. 99720

**Testbook Solution** Correct Option - 1

---

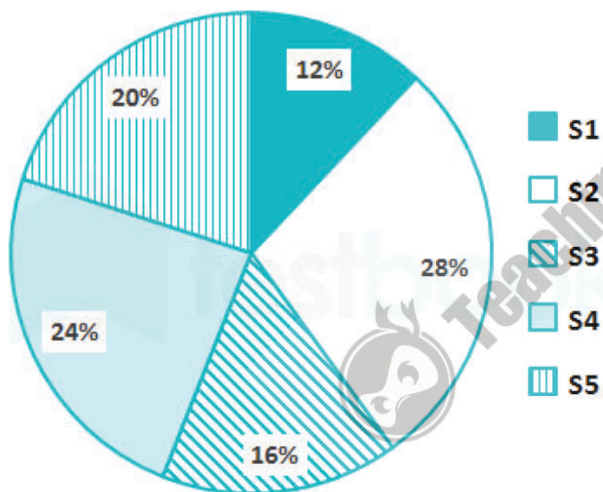
**Que. 74** If  $\sin \theta - \cos \theta = 0$  then find the value of  $\cot \theta$ .

1. 0
2.  $\sqrt{3}$
3.  $1/\sqrt{3}$
4. 1

**Testbook Solution** Correct Option - 4

---

**Que. 75** The pie chart given below shows the number of female students in different subjects. The number of female students in a particular subject are shown as a percentage of total number of female students in all the subjects together.



If the total number of female students are 3600, then what is the difference in number of female students in subjects S1 and S4?

1. 412
2. 400
3. 432
4. 456

**Testbook Solution** Correct Option - 3

---

**Que. 76** Who has won the Rabindranath Tagore Literary Prize 2020?

1. Fang Fang
2. Raj Kamal Jha
3. R C Bhargava
4. Dinyar Patel

**Testbook Solution** Correct Option - 2

**Que. 77** Sabarimala is located in which of the following states?

1. Kerala
2. Andhra Pradesh
3. Tamil Nadu
4. Odisha

**Testbook Solution** Correct Option - 1

---

**Que. 78** Where is the headquarters of SBI in India?

1. Bengaluru
2. Mumbai
3. Delhi
4. Vadodara

**Testbook Solution** Correct Option - 2

---

**Que. 79** Harihara and Bukka were founders of which one of the following empires?

1. Pratihara
2. Rashtrakuta
3. Chola
4. Vijaynagar

**Testbook Solution** Correct Option - 4

---

**Que. 80** SI unit of pressure is

1. pascal
2. newton
3. joule
4. watt

**Testbook Solution** Correct Option - 1

---

**Que. 81** Who was elected as a FIFA Council member in April 2019?

1. Rajiv Mehrishi
2. Sushilkumar Shinde
3. Praful Patel
4. Dhananjay Munde

**Testbook Solution** Correct Option - 3

---

**Que. 82** Who was recently appointed as the first Lokpal of India?

1. M. N. Venkatachaliah
2. Anna Hazare
3. Pinaki Chandra Ghosh
4. Veerappa Moily

**Testbook Solution** Correct Option - 3

---

**Que. 83** Bihu is the most important festival in the state of:

1. Assam

2. Mizoram
3. Manipur
4. None

**Testbook Solution** Correct Option - 1

---

**Que. 84** What is the chemical formula of Dry Ice?

1. CO
2. H<sub>2</sub>O
3. H<sub>2</sub>O<sub>2</sub>
4. CO<sub>2</sub>

**Testbook Solution** Correct Option - 4

---

**Que. 85** The finance commission was setup under the Constitutional Article of-

1. Article-288
2. Article-280
3. Article-285
4. Article-283

**Testbook Solution** Correct Option - 2

---

**Que. 86** Which of the followings is NOT a rich source of Vitamin B12?

1. Fish
2. Sunlight
3. Egg
4. Meat

**Testbook Solution** Correct Option - 2

---

**Que. 87** On which date, Telangana state Foundation Day is observed?

1. 30-May
2. 31-May
3. 2-Jun
4. 4-Jun

**Testbook Solution** Correct Option - 3

---

**Que. 88** The third battle of Panipat was fought in ?

1. 1761
2. 1739
3. 1526
4. 1556

**Testbook Solution** Correct Option - 1

---

**Que. 89** Which of the following shortcut is used to print document?

1. Ctrl + C
2. Ctrl + L
3. Ctrl + Z

4. Ctrl + P

**Testbook Solution** Correct Option - 4

---

**Que. 90** In which of the following states, the country's first transgender university will be set up?

1. Uttar Pradesh
2. Rajasthan
3. Gujarat
4. Himachal Pradesh

**Testbook Solution** Correct Option - 1

---

**Que. 91** According to Article 81, of Indian Constitution what is the maximum strength of members of Parliament in the Lok Sabha?

1. 530
2. 510
3. 532
4. 552

**Testbook Solution** Correct Option - 4

---

**Que. 92** The first official languages commission was formed under the chairmanship of-

1. B.G. Kher
2. J.V. Kriplani
3. Shankar Nayar
4. Pattabhi Sitaramayya

**Testbook Solution** Correct Option - 1

---

**Que. 93** Which country is also known as 'Land of Midnight Sun'?

1. Greenland
2. Iceland
3. Ireland
4. Norway

**Testbook Solution** Correct Option - 4

---

**Que. 94** Indonesia's Mount Merapi volcano on which island erupted in January 2021?

1. Baffin Island
2. Java island
3. Ellesmere Island
4. Vancouver Island

**Testbook Solution** Correct Option - 2

---

**Que. 95** Who among the following has been appointed as the President of FICCI for 2020-21? (Dec)

1. Sunil Mittal
2. Dilip Sanghavi
3. Uday Kotak
4. Uday Shankar

**Testbook Solution** Correct Option - 4

---

**Que. 96** In which of the following Indian cities, the country's first tyre park will be launched by the transport corporation of its respective state?

1. Faridabad
2. Ahmedabad
3. Mumbai
4. Kolkata

**Testbook Solution** Correct Option - 4

---

**Que. 97** 'The Commonwealth of Cricket' is a book written by

1. Ruskin Bond
2. Sunil Gavaskar
3. Ramachandra Guha
4. Sourav Ganguly

**Testbook Solution** Correct Option - 3

---

**Que. 98** In Jan 2021, who became the first woman umpire to officiate at a men's Test match cricket?

1. Kathy Cross
2. GS Lakshmi
3. Claire Polosak
4. Lauren Agenbag

**Testbook Solution** Correct Option - 3

---

**Que. 99** When did the first demonetisation take place in India?

1. 1978
2. 2016
3. 1948
4. 1946

**Testbook Solution** Correct Option - 4

---

**Que. 100** In Jan 2021, who among the following sworn in as the Chief Justice of Andhra Pradesh High Court?

1. Aditya Nath Das
2. Arup Kumar Goswami
3. Praveen Prakash
4. J.K. Maheswari

**Testbook Solution** Correct Option - 2