



SSC CHSL TIRE – I – Shift - 3 - 04-08-2023

-  **Latest Govt Job updates**
-  **Private Job updates**
-  **Free Mock tests available**

Visit - teachingninja.in

Exam Date	04/08/2023
Exam Time	2:30 PM - 3:30 PM
Subject	CHSL Exam 2023 Tier I

Section : English Language

Q.1 Select the appropriate ANTONYM of the underlined word to fill in the blank.
I wanted to ask if you have an/a _____ bank account. Mine has been dormant for a year.

- Ans
- 1. quick
 - 2. side
 - 3. inert
 - 4. active

Question ID : 264330149756
Status : Answered
Chosen Option : 4

Q.2 Identify the INCORRECTLY spelt word in the following sentence.
Staying healthy and exercising daily enhances an athlete's ability.

- Ans
- 1. athlete's
 - 2. exercising
 - 3. healthy
 - 4. enhances

Question ID : 264330141312
Status : Answered
Chosen Option : 1

Q.3 Select the most appropriate idiom for the given statement.

One who hurries up always gets the best.

- Ans
- 1. The early bird catches the worm.
 - 2. His bark is worse than his bite.
 - 3. Forewarned is forearmed.
 - 4. Brevity is the soul of wit.

Question ID : 264330144312
Status : Answered
Chosen Option : 1

Q.4 Select the most appropriate ANTONYM of the given word.

Despicable

- Ans
- 1. Offensive
 - 2. Rational
 - 3. Deplorable
 - 4. Admirable

Question ID : 264330144253
Status : Answered
Chosen Option : 1

Q.5 Select the option that expresses the given sentence in passive voice.

You should apply for the job before the deadline.

- Ans
- 1. You should be applying for the job before the deadline is.
 - 2. The job should be applied for before the deadline.
 - 3. The job could be applied for after the deadline.
 - 4. The deadline should not be crossed for the job application.

Question ID : 264330142569
Status : Answered
Chosen Option : 2

Q.6 Select the most appropriate ANTONYM of the given word.

Liab

- Ans
- 1. Responsible
 - 2. Tending
 - 3. Peaceful
 - 4. Invulnerable

Question ID : 264330150196
Status : Answered
Chosen Option : 4

Q.7 Select the option that expresses the given sentence in active voice.

Was the painting stolen by the thief?

- Ans
- 1. Was the painting being stolen by the thief?
 - 2. Did not the thief steal the painting?
 - 3. Was the thief not stealing the painting?
 - 4. Did the thief steal the painting?

Question ID : 264330142572
Status : Answered
Chosen Option : 4

Q.8 Parts of a sentence are given below in jumbled order. Arrange the parts in the correct order to form a meaningful sentence.

- P. that a glance from the window seemed simply to prove
- Q. with such dignity of motion
- R. the great Pullman was whirling onward
- S. that the plains of Texas were pouring eastward

- Ans
- 1. PRQS
 - 2. RQPS
 - 3. RQSP
 - 4. RPQS

Question ID : 264330149712
Status : Answered
Chosen Option : 2

Q.9 The following sentence has been divided into four parts. One of them contains an error. Select the part that contains the error from the given options.
Honesty / is / a best / policy.

- Ans
- 1. policy
 - 2. is
 - 3. a best
 - 4. Honesty

Question ID : 264330147555
Status : Answered
Chosen Option : 3

Q.10 Parts of a sentence are given below in jumbled order. Select the option that arranges the parts in the correct order to form a meaningful sentence.

- A) based on the
- B) we live in
- C) nation that
- D) our nationality is

- Ans
- 1. A, B, C, D
 - 2. B, C, A, D
 - 3. D, A, C, B
 - 4. C, D, A, B

Question ID : 264330143911
Status : Answered
Chosen Option : 3

Q.11 Select the option that can be used as a one-word substitute for the given group of words.

Done without conscious control; unintentional

- Ans
- 1. Invincible
 - 2. Invoke
 - 3. Invitro
 - 4. Involuntary

Question ID : 264330143637
Status : Answered
Chosen Option : 4

Q.12 Select the INCORRECTLY spelt word.

- Ans
- 1. Overwelming
 - 2. Repetition
 - 3. Audacious
 - 4. Persistent

Question ID : 264330143238
Status : Answered
Chosen Option : 1

Q.13 Select the most appropriate ANTONYM to substitute the underlined word in the following sentence.

They realised that the ghost was imperturbable.

- Ans
- 1. startling
 - 2. contaminating
 - 3. exasperating
 - 4. excitable

Question ID : 264330148928
Status : Answered
Chosen Option : 4

Q.14 Select the most appropriate idiom to fill in the blank.
When I was in Italy for a tour, the tourist guide provided by Azim was _____.
Because of him, the whole tour was successful.

- Ans
- 1. looking for a needle in a haystack
 - 2. burning the midnight oil
 - 3. worth his weight in gold
 - 4. armed to the teeth

Question ID : 264330143234
Status : Answered
Chosen Option : 4

Q.15 The following sentence has been divided into parts. One of them may contain an error.
Select the part that contains the error from the given options.
The current state of the literature / on the efficacy under cognitive-behavioural therapy / for individuals with generalised anxiety disorder / suggests that it is a promising treatment option.

- Ans
- 1. The current state of the literature
 - 2. suggests that it is a promising treatment option.
 - 3. on the efficacy under cognitive-behavioural therapy
 - 4. for individuals with generalised anxiety disorder

Question ID : 264330143929
Status : Answered
Chosen Option : 3

Q.16 The following sentence has been split into four segments. Identify the segment that contains a grammatical error.
Poonam usually sits / in a first row in the / weekend conference / hall every week.

- Ans
- 1. Poonam usually sits
 - 2. in a first row in the
 - 3. hall every week
 - 4. weekend conference

Question ID : 264330147606
Status : Answered
Chosen Option : 2

Q.17 Select the option that can be used as a one-word substitute for the underlined group of words in the following sentence.

Denmark has a type of government where power is held by the wealthiest members of society.

- Ans
- 1. plutocracy
 - 2. monarchy
 - 3. democracy
 - 4. oligarchy

Question ID : 264330149592
Status : Answered
Chosen Option : 1

Q.18 Select the most appropriate option to fill in the blank.

The _____ of the crime scene made it difficult for investigators to gather evidence.

- Ans
- 1. set
 - 2. cite
 - 3. sleight
 - 4. site

Question ID : 264330147549
Status : Answered
Chosen Option : 4

Q.19 Select the option that can be used as a one-word substitute for the underlined segment.

The company was known for its deserving respect or admiration business practices and honest and fair ethical standards.

- Ans
- 1. honourable
 - 2. decent
 - 3. respectable
 - 4. trustworthy

Question ID : 264330149812
Status : Answered
Chosen Option : 1

Q.20 Select the most appropriate ANTONYM of the underlined word in the given sentence.
She was in a state of ecstasy when she came to know that her son received a visa on his first attempt.

- Ans
- 1. Agony
 - 2. Inspiration
 - 3. Joyfulness
 - 4. Abash

Question ID : 264330143226
Status : Answered
Chosen Option : 1

Comprehension:

In the following passage, some words have been deleted. Read the passage carefully and select the most appropriate option to fill in each blank.

In a busy bus station, there is a little girl sitting all (1)_____ on a bench. She stares at the floor as all the busy travellers rush (2)_____ her. Some of the people are in such a big hurry that they do not (3)_____ her. Other people look at her, but continue running to where they need to go. After some time, a man stops next to the girl. He is very tired after a long day of work, and he just wants to get to his home as quickly as (4)_____ so that he can be with his family. But he cannot just leave this little girl alone. He cannot see her (5)_____ anywhere. The little girl is no older than his own little daughter

SubQuestion No : 21

Q.21 Select the most appropriate option to fill in blank number 1.

- Ans
- 1. just
 - 2. unique
 - 3. sole
 - 4. alone

Question ID : 264330143894
Status : Answered
Chosen Option : 4

Comprehension:

In the following passage, some words have been deleted. Read the passage carefully and select the most appropriate option to fill in each blank.

In a busy bus station, there is a little girl sitting all (1)_____ on a bench. She stares at the floor as all the busy travellers rush (2)_____ her. Some of the people are in such a big hurry that they do not (3)_____ her. Other people look at her, but continue running to where they need to go. After some time, a man stops next to the girl. He is very tired after a long day of work, and he just wants to get to his home as quickly as (4)_____ so that he can be with his family. But he cannot just leave this little girl alone. He cannot see her (5)_____ anywhere. The little girl is no older than his own little daughter

SubQuestion No : 22

Q.22 Select the most appropriate option to fill in blank number 2.

- Ans
- 1. around
 - 2. henceforth
 - 3. on
 - 4. above

Question ID : 264330143895
Status : Answered
Chosen Option : 1

Comprehension:

In the following passage, some words have been deleted. Read the passage carefully and select the most appropriate option to fill in each blank.

In a busy bus station, there is a little girl sitting all (1)_____ on a bench. She stares at the floor as all the busy travellers rush (2)_____ her. Some of the people are in such a big hurry that they do not (3)_____ her. Other people look at her, but continue running to where they need to go. After some time, a man stops next to the girl. He is very tired after a long day of work, and he just wants to get to his home as quickly as (4)_____ so that he can be with his family. But he cannot just leave this little girl alone. He cannot see her (5)_____ anywhere. The little girl is no older than his own little daughter

SubQuestion No : 23

Q.23 Select the most appropriate option to fill in blank number 3.

Ans 1. detect

2. notice

3. neglect

4. inflict

Question ID : 264330143896
Status : Answered
Chosen Option : 2

Comprehension:

In the following passage, some words have been deleted. Read the passage carefully and select the most appropriate option to fill in each blank.

In a busy bus station, there is a little girl sitting all (1)_____ on a bench. She stares at the floor as all the busy travellers rush (2)_____ her. Some of the people are in such a big hurry that they do not (3)_____ her. Other people look at her, but continue running to where they need to go. After some time, a man stops next to the girl. He is very tired after a long day of work, and he just wants to get to his home as quickly as (4)_____ so that he can be with his family. But he cannot just leave this little girl alone. He cannot see her (5)_____ anywhere. The little girl is no older than his own little daughter

SubQuestion No : 24

Q.24 Select the most appropriate option to fill in blank number 4.

Ans 1. believable

2. possible

3. potential

4. credible

Question ID : 264330143897
Status : Answered
Chosen Option : 2

Comprehension:

In the following passage, some words have been deleted. Read the passage carefully and select the most appropriate option to fill in each blank.

In a busy bus station, there is a little girl sitting all (1)_____ on a bench. She stares at the floor as all the busy travellers rush (2)_____ her. Some of the people are in such a big hurry that they do not (3)_____ her. Other people look at her, but continue running to where they need to go. After some time, a man stops next to the girl. He is very tired after a long day of work, and he just wants to get to his home as quickly as (4)_____ so that he can be with his family. But he cannot just leave this little girl alone. He cannot see her (5)_____ anywhere. The little girl is no older than his own little daughter

SubQuestion No : 25

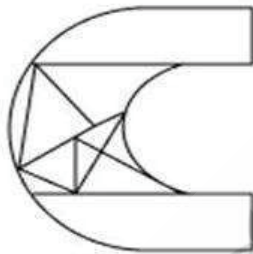
Q.25 Select the most appropriate option to fill in the blank 5.

- Ans 1. parents
 2. self
 3. relatives
 4. friends

Question ID : 264330143898
Status : Answered
Chosen Option : 1

Section : General Intelligence

Q.1 How many triangles are there in the given figure?



- Ans 1. 8
 2. 6
 3. 5
 4. 7

Question ID : 264330146923
Status : Answered
Chosen Option : 1

Q.2 Read the given statements and conclusions carefully. You have to take the given statements to be true even if they seem to be at variance from commonly known facts. You have to decide which conclusion/s logically definitely follow/s from the given statements.

Statements: Some Erasers are Papers. Some Papers are Clips. All Clips are Hair.

Conclusions: (I) All Papers are Hair.

(II) Some Erasers are Clips.

- Ans**
- 1. Both conclusions (I) and (II) definitely follow.
 - 2. Only conclusion (II) definitely follows.
 - 3. Both conclusions (I) and (II) definitely do not follow.
 - 4. Only conclusion (I) definitely follows.

Question ID : 264330155138
Status : Answered
Chosen Option : 3

Q.3 Find out the correct alternative that when filled in the blanks in the same sequence will make the series logically complete.

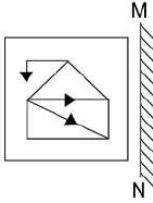
B_RG FK_F JIX_ NGA_ _EDC

- Ans**
- 1. NUFER
 - 2. MUEDR
 - 3. NVDEQ
 - 4. MVEFQ

Question ID : 264330146627
Status : Answered
Chosen Option : 2

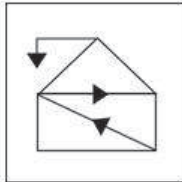


Q.4 Select the correct mirror image of the given figure when the mirror is placed at MN as shown.

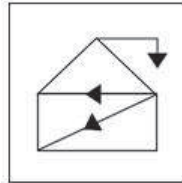


Ans

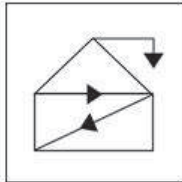
✗ 1.



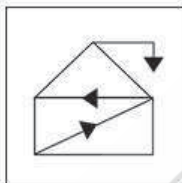
✓ 2.



✗ 3.



✗ 4.



Question ID : 264330146465
Status : Answered
Chosen Option : 2

Q.5 Select the triad in which the numbers are related in the same way as are the numbers of the following triads.

4 - 18 - 5

7 - 20 - 3

(NOTE: Operations should be performed on the whole numbers, without breaking down the numbers into its constituent digits. E.g. 13 - Operations on 13 such as adding / subtracting / multiplying etc. to 13 can be performed. Breaking down 13 into 1 and 3 and then performing mathematical operations on 1 and 3 is not allowed)

Ans

✗ 1. 8 - 11 - 3

✓ 2. 6 - 16 - 2

✗ 3. 5 - 21 - 8

✗ 4. 7 - 12 - 8

Question ID : 264330147361
Status : Answered
Chosen Option : 2

Q.6 The position of how many letters will remain unchanged if each letter in the word TANGLED is arranged in alphabetical order?

- Ans**
- 1. One
 - 2. None
 - 3. Two
 - 4. Three

Question ID : 264330146631
Status : Answered
Chosen Option : 3

Q.7 AFHD is related to DIKG in a certain way based on the English alphabetical order. In the same way, GLN] is related to JOQM. To which of the following is MRTP related to, following the same logic?

- Ans**
- 1. PVWS
 - 2. PVUS
 - 3. PUWS
 - 4. PUVS

Question ID : 264330147311
Status : Answered
Chosen Option : 3

Q.8 23 is related to 45 following a certain logic. Following the same logic, 54 is related to 76. To which of the following is 67 related, following the same logic?

- Ans**
- 1. 83
 - 2. 89
 - 3. 86
 - 4. 79

Question ID : 264330147034
Status : Answered
Chosen Option : 2

Q.9 ETL is related to CVN in a certain way based on the English alphabetical order. In the same way, BOI is related to DMG. To which of the following is JUN related following the same logic?

- Ans**
- 1. ITM
 - 2. LWP
 - 3. HSL
 - 4. LSP

Question ID : 264330152074
Status : Answered
Chosen Option : 4

Q.10 In a certain code language,
A + B means 'A is the mother of B'
A - B means 'A is the brother of B'
A × B means 'A is the wife of B'
A ÷ B means 'A is the father of B'
Based on the above, how is K related to N if 'K × L ÷ M + N - O'?

- Ans
- 1. Brother's wife
 - 2. Mother's mother
 - 3. Wife's father
 - 4. Father's brother

Question ID : 264330147211
Status : Answered
Chosen Option : 2

Q.11 In a certain code language, 'FOX' is coded as 'SJA' and 'CRIPPLE' is coded as 'VGPIIMT'. How will 'MOVEMENT' be coded in that language?

- Ans
- 1. LJCSLTKE
 - 2. LJCTLTKE
 - 3. LJCTLTJE
 - 4. LJCTLTKE

Question ID : 264330146380
Status : Not Attempted and Marked For Review
Chosen Option : --

Q.12 Select the term from among the given options that can replace the question mark (?) in the following series based on the English alphabetical order.

QNR, WRU, CVX, IZA, ?

- Ans
- 1. ODD
 - 2. PHD
 - 3. OHD
 - 4. PND

Question ID : 264330146937
Status : Answered
Chosen Option : 1

Q.13 What will come in the place of the question mark (?) in the following equation, if '+' and '-' are interchanged and '×' and '÷' are interchanged?

$9 \div 6 - 136 \times 8 + 13 = ?$

- Ans
- 1. 52
 - 2. 58
 - 3. 26
 - 4. 40

Question ID : 264330147451
Status : Answered
Chosen Option : 2

Q.14 Select the pair of letter-clusters which follows the same pattern as that followed by the two sets of pair of letter clusters given below.

Both pairs of letter-clusters follow the same pattern.

AHK : ZSP

PSW : KHD

Ans ✓ 1. JNO : QML

✗ 2. ABC : TWV

✗ 3. JDE : QPO

✗ 4. SVM : IFY

Question ID : 264330147111

Status : Answered

Chosen Option : 1

Q.15 Which number will replace the question mark (?) to complete the given series?

0, 2, 6, 12, ?, 30, 42

Ans ✗ 1. 24

✗ 2. 22

✗ 3. 21

✓ 4. 20

Question ID : 264330150693

Status : Answered

Chosen Option : 4

Q.16 Which letter-cluster should come in place of ? in the given series based on the English alphabetical order?

CKZ , GOD , KSH , ? , SAP

Ans ✓ 1. OWL

✗ 2. PXL

✗ 3. MVM

✗ 4. MVN

Question ID : 264330147071

Status : Answered

Chosen Option : 1

Q.17 What will come in the place of '?' in the following equation, if '+' and '-' are interchanged and 'x' and '÷' are interchanged?

$89 \div 7 - 42 \times 7 + 5 = ?$

Ans ✗ 1. 426

✓ 2. 624

✗ 3. 264

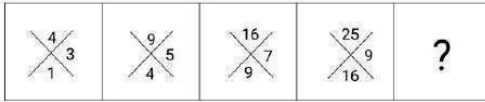
✗ 4. 246

Question ID : 264330147387

Status : Answered

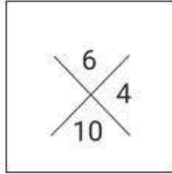
Chosen Option : 2

Q.18 Identify the figure given in the options which when put in place of the question mark (?) will logically complete the series.

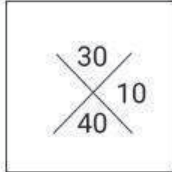


Ans

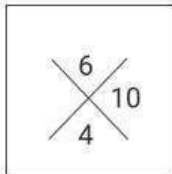
1.



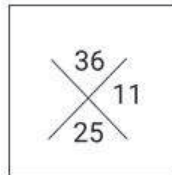
2.



3.



4.



Question ID : 264330147248
Status : Answered
Chosen Option : 4

Q.19 If 11 October 1969 is Saturday, then what will be the day of the week on 29 November 1977?

Ans 1. Monday

2. Tuesday

3. Friday

4. Sunday

Question ID : 264330146644
Status : Answered
Chosen Option : 2

Q.20 Three of the following four letter-clusters are alike in a certain way and thus form a group. Which is the one that does NOT belong to that group?

- Ans
- 1. CFI
 - 2. JMA
 - 3. LOR
 - 4. UXA

Question ID : 264330147090
Status : Answered
Chosen Option : 2

Q.21 Select the number from among the given options that can replace the question mark (?) in the following series.

976, 488, 244, 122, ?

- Ans
- 1. 61
 - 2. 60
 - 3. 62
 - 4. 58

Question ID : 264330146899
Status : Answered
Chosen Option : 1

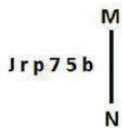
Q.22 Four number pairs have been given out of which three are alike in some manner and one is different. Select the one that is different.

(NOTE : Operations should be performed on the whole numbers, without breaking down the numbers into its constituent digits. E.g. 13 – Operations on 13 such as adding /deleting /multiplying etc. to 13 can be performed. Breaking down 13 into 1 and 3 and then performing mathematical operations on 1 and 3 is not allowed.)

- Ans
- 1. 134 – 109
 - 2. 88 – 63
 - 3. 77 – 52
 - 4. 165 – 150

Question ID : 264330152442
Status : Answered
Chosen Option : 4

Q.23 Select the correct mirror image of the given figure when the mirror is placed at MN as shown below.



- Ans
- 1. d 7 5 q 1 l
 - 2. d 2 7 d 1 l
 - 3. d 2 7 q 1 l
 - 4. q 5 7 q 1 l

Question ID : 264330146675
Status : Answered
Chosen Option : 3

Q.24 What should come in place of X in the given series?

11 17 29 47 71 X

- Ans
- 1. 101
 - 2. 99
 - 3. 95
 - 4. 100

Question ID : 264330152158
Status : Answered
Chosen Option : 1

Q.25 M is married to N. N is the daughter of U. U is married to S. S is the sister of P. P is the son of Q. R is the mother of S.

How is N related to Q?

- Ans
- 1. Daughter's daughter
 - 2. Sister's daughter
 - 3. Daughter
 - 4. Son's daughter

Question ID : 264330146096
Status : Answered
Chosen Option : 4

Section : Quantitative Aptitude

Q.1 The table shows the number of cars rejected and the percentage of those accepted by quality control department, out of the total number of cars assembled by four machines A, B, C and D.

Machine	Number of Cars rejected	Percentage of acceptance of cars
A	840	86
B	600	90
C	550	90
D	1000	80

How many cars assembled by machine C were accepted?

- Ans
- 1. 5400
 - 2. 7560
 - 3. 4950
 - 4. 5160

Question ID : 264330150939
Status : Answered
Chosen Option : 3

Q.2 Find the value of $(a^3 + b^3 + c^3 - 3abc)$, where $a = 335, b = 215$ and $c = 180$.

- Ans
- 1. 14472250
 - 2. 15421320
 - 3. 14502230
 - 4. 15452630

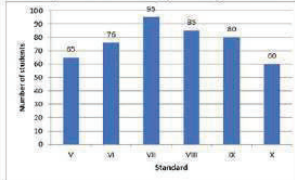
Question ID : 264330148072
Status : Answered
Chosen Option : 1

Q.3 15 boys can complete a task in 28 days. In how many days can 21 boys complete the same task?

- Ans
- 1. 20
 - 2. 18
 - 3. 21
 - 4. 24

Question ID : 264330147669
Status : Answered
Chosen Option : 1

Q.4 The following bar graph represents the total number of students in different standards in a school. Study the graph carefully and answer the question given below:



The number of students in Xth standard is what per cent less than the number of students in VIIth standard? (correct up to two decimal places)

- Ans
- 1. 36.84%
 - 2. 58.33%
 - 3. 28.33%
 - 4. 46.84%

Question ID : 264330150551
Status : Answered
Chosen Option : 1

Q.5 PQ is a chord of a circle. The tangent XR at X on the circle cuts PQ produced at R. If $XR = 12$ cm, $PQ = x$ cm, $QR = x - 2$ cm, then x (in cm) is:

- Ans
- 1. 7
 - 2. 6
 - 3. 10
 - 4. 14

Question ID : 264330147735
Status : Answered
Chosen Option : 3

Q.6 A person walked from his house to a supermarket at the rate of 10 kmph and walked back at the rate of 5 kmph. For the whole journey, he took 1 hour 30 minutes. Find the distance from his house to the supermarket (in km):

- Ans
- 1. 10
 - 2. 5
 - 3. 6
 - 4. 8

Question ID : 264330147758
Status : Answered
Chosen Option : 2

Q.7 Ashok invested ₹18,000 for 3 years at 5% compound interest in a post office. If the interest is compounded once in a year, what sum will he get after 3 years?

- Ans
- 1. ₹22,961.50
 - 2. ₹20,837.25
 - 3. ₹22,6291.75
 - 4. ₹21,926.00

Question ID : 264330148244
Status : Answered
Chosen Option : 2

Q.8 If Aashima travels a certain distance with a speed of 80 km/h in 5 hours. Then how many hours (rounded off to 1 decimal point) approximately will she take to cover the same distance with a speed of 150 km/h?

- Ans
- 1. 2.7 hours
 - 2. 8.3 hours
 - 3. 3 hours
 - 4. 3.5 hours

Question ID : 264330148266
Status : Answered
Chosen Option : 1

Q.9 MN is the diameter of a circle with centre O. P and S are two points on the circumference of the circle on either side of MN, such that $\angle PMN = 50^\circ$ and $\angle MNS = 35^\circ$. What is the degree measure of the difference of $\angle PMS$ and $\angle PNS$?

- Ans
- 1. 25°
 - 2. 55°
 - 3. 65°
 - 4. 30°

Question ID : 264330147799
Status : Answered
Chosen Option : 4

Q.10 If $\left(x + \frac{1}{x}\right) = 7$ and $x > 1$, what is the value of $\left(x^3 - \frac{1}{x^3}\right)$?

- Ans
- 1. $174\sqrt{5}$
 - 2. $164\sqrt{5}$
 - 3. $154\sqrt{5}$
 - 4. $144\sqrt{5}$

Question ID : 264330147811
Status : Answered
Chosen Option : 4

Q.11 What is the value of x, if $3 : 8 :: x : 12$?

- Ans
- 1. 9
 - 2. $\frac{5}{2}$
 - 3. 5
 - 4. $\frac{9}{2}$

Question ID : 264330146451
Status : Answered
Chosen Option : 4

Q.12 The distance between the centres of two circles having radii of 24 cm and 18 cm, respectively, is 48 cm. Find the length (in cm) of a/an transverse/indirect common tangent to the two circles.

- Ans
- 1. $16\sqrt{2}$
 - 2. $18\sqrt{2}$
 - 3. $6\sqrt{15}$
 - 4. $10\sqrt{5}$

Question ID : 264330146831
Status : Answered
Chosen Option : 3

Q.13 A shopkeeper usually makes one big besan laddoo (spherical in shape) with a radius of 9 cm. With the same laddoo, how many besan laddoos of radius 3 cm can be made? (Use $\pi = \frac{22}{7}$)

- Ans
- 1. 9
 - 2. 18
 - 3. 36
 - 4. 27

Question ID : 264330148096
Status : Answered
Chosen Option : 4

Q.14 $\triangle ABC \sim \triangle PQR$, $AB = 12$ cm, $PQ = 18$ cm and the perimeter of $\triangle ABC$ is 45 cm. Find the perimeter of $\triangle PQR$.

- Ans
- 1. 60 cm
 - 2. 30 cm
 - 3. 67.5 cm
 - 4. 70 cm

Question ID : 264330147642
Status : Answered
Chosen Option : 3

Q.15 The average weight of a group of 12 children is 66 kg. If 2 children, X and Y, replace A and B, the new average weight becomes 65 kg. The weight of A = weight of B and the weight of X = weight of Y. Another child, C, is included in the group, and the new average weight remains 65 kg. Weight of C = weight of X. Find the weight of A.

- Ans
- 1. 69 kg
 - 2. 72 kg
 - 3. 71 kg
 - 4. 67 kg

Question ID : 264330150030
Status : Marked For Review
Chosen Option : 3

Q.16 A candidate who gets 20% of the marks in an examination fails by 30 marks. But another candidate who gets 32% marks, gets 42 marks more than necessary for passing. Find the maximum number of marks.

- Ans
- 1. 500
 - 2. 700
 - 3. 400
 - 4. 600

Question ID : 264330147723
Status : Answered
Chosen Option : 4

Q.17 The simple interest on ₹986 for a certain period of time is less than the simple interest on ₹1,296 for the same period of time at the rate of 5% simple interest by ₹62. For how many years was each sum of money invested?

- Ans
- 1. 6
 - 2. 3
 - 3. 5
 - 4. 4

Question ID : 264330151051
Status : Answered
Chosen Option : 4

Q.18 When a number is divided by 7, leaves 1 as the remainder. When the cube of this number is divided by 7, what will be the remainder?

- Ans
- 1. 4
 - 2. 2
 - 3. 3
 - 4. 1

Question ID : 264330148163
Status : Answered
Chosen Option : 4

Q.19 If $(y - \frac{1}{y}) = 9$, find the value of $(y^3 - \frac{1}{y^3})$.

- Ans
- 1. 766
 - 2. 756
 - 3. 702
 - 4. 729

Question ID : 264330146848
Status : Answered
Chosen Option : 2

Q.20 If the cost price of a book is 92% of its selling price, then what is the percentage profit on the sale of the book (correct up to two decimal places)?

- Ans
- 1. 8.25%
 - 2. 8.69%
 - 3. 8.00%
 - 4. 8.53%

Question ID : 264330147893
Status : Answered
Chosen Option : 2

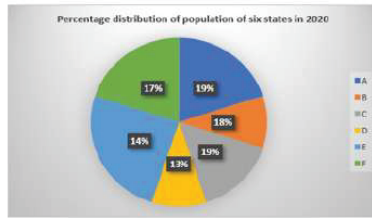
Q.21 If $\sec \theta + \tan \theta = \sqrt{3}$, then the positive value of $\sin \theta + \cos \theta$ is:

- Ans
- 1. $\frac{(1 + \sqrt{3})}{2}$
 - 2. $\frac{2}{\sqrt{3}}$
 - 3. $\frac{\sqrt{3}}{2}$
 - 4. $\frac{2}{(1 + \sqrt{3})}$

Question ID : 264330148874
Status : Answered
Chosen Option : 1



Q.22 In the given pie chart, the percentage distribution of the population of six states in 2020 is given. Study the pie chart and answer the question that follows.



The percentage of population employed in government jobs is given in the following table.

State	Percentage of population doing government jobs
A	42
B	32
C	12
D	30
E	28
F	35

What is the ratio of the population doing government jobs in state E to the population doing government jobs in state A?

- Ans
- 1. 23 : 96
 - 2. 13 : 37
 - 3. 28 : 57
 - 4. 29 : 39

Question ID : 264330149338
 Status : Answered
 Chosen Option : 3

Q.23 A dealer gives a 7% discount on the marked price and gives 1 article free for buying every 25 articles and thus gains 25%. Find the percentage increase in the marked price above the cost price (round up to two decimal places).

- Ans
- 1. 39.78%
 - 2. 37.88%
 - 3. 1.4%
 - 4. 38.87%

Question ID : 264330147624
 Status : Answered
 Chosen Option : 1

Q.24 Evaluate: $8 \sec^2 45^\circ + 20 \sin^2 30^\circ + 15 \tan 45^\circ$

- Ans
- 1. 43
 - 2. 28
 - 3. 36
 - 4. 32

Question ID : 264330147807
 Status : Answered
 Chosen Option : 3

Q.25 Let ABC be a triangle right-angled at B. If $\angle C = 60^\circ$ and $AB = 3$ cm, then find the lengths of BC and AC, respectively.

- Ans
- 1. $\sqrt{3}$ cm, $2\sqrt{3}$ cm
 - 2. 9 cm, $4\sqrt{3}$ cm
 - 3. 3 cm, $2\sqrt{3}$ cm
 - 4. $\sqrt{3}$ cm, $4\sqrt{3}$ cm

Question ID : 264330148157
Status : Answered
Chosen Option : 1

Section : General Awareness

Q.1 Which of the following ethnic groups is the largest in Myanmar?

- Ans
- 1. Karen
 - 2. Bamar
 - 3. Rohingya
 - 4. Shan

Question ID : 264330150291
Status : Answered
Chosen Option : 2

Q.2 Which Five Year Plan in India was based on the Harrod-Domar Model?

- Ans
- 1. 4th Five Year Plan
 - 2. 3rd Five Year Plan
 - 3. 1st Five Year Plan
 - 4. 2nd Five Year Plan

Question ID : 264330144711
Status : Answered
Chosen Option : 3

Q.3 In 1937, who along with Sir Christopher Ingold proposed nucleophilic substitution reactions of alkyl halides and related compounds?

- Ans
- 1. Sergei Winogradsky
 - 2. Victor Grignard
 - 3. Edward Davies Hughes
 - 4. Jacobus Hendricus

Question ID : 264330145588
Status : Answered
Chosen Option : 3

Q.4 Who among the following Indian cricketers won the ICC Men's T20I Cricketer of the Year award for 2022?

- Ans
- 1. Ishan Kishan
 - 2. Surya Kumar Yadav
 - 3. Bhuvaneshwar Kumar
 - 4. Shubhman Gill

Question ID : 264330145968
Status : Answered
Chosen Option : 4

Q.5 Who among the following started Shivaji Festival to generate nationalism among the common people?

- Ans
- 1. Aurobindo Ghosh
 - 2. Surendranath Banerjee
 - 3. Lokmanya Tilak
 - 4. Gopal Krishna Gokhale

Question ID : 264330148587
Status : Not Answered
Chosen Option : --

Q.6 The Kudremukh Mines are located in which of the following states?

- Ans
- 1. Karnataka
 - 2. Chhattisgarh
 - 3. Maharashtra
 - 4. Odisha

Question ID : 264330149360
Status : Not Answered
Chosen Option : --

Q.7 Which of the following states of India has topped the medals tally in the 4th Khelo India youth games, which were held in 2022?

- Ans
- 1. Haryana
 - 2. Kerala
 - 3. Uttar Pradesh
 - 4. Karnataka

Question ID : 264330154821
Status : Answered
Chosen Option : 1

Q.8 Where was the first jute mill set up in India?

- Ans
- 1. Mumbai
 - 2. Rishra
 - 3. Chennai
 - 4. Haryana

Question ID : 264330150300
Status : Answered
Chosen Option : 2

Q.9 The relation between atm and bar is:

- Ans
- 1. 1 atm = 10^5 bar
 - 2. 1 atm = 1.013×10^5 bar
 - 3. 1 atm = 1 bar
 - 4. 1 atm = 1.013 bar

Question ID : 264330145810
Status : Marked For Review
Chosen Option : 2

Q.10 Which of the following chemical compounds, that is used as a food preservative in some sauces and beverages, retains their natural colour and protects against bacteria?

- Ans
- 1. Dihydroxy benzene
 - 2. Hydrazine hydrate
 - 3. Potassium meta bisulphite
 - 4. Monosodium glutamate

Question ID : 264330150726
Status : Answered
Chosen Option : 4

Q.11 Who founded the Tuluva dynasty of the Vijayanagar Empire?

- Ans
- 1. Achyut Deva Raya
 - 2. Deva Raya I
 - 3. Krishna Deva Raya
 - 4. Narsimha Deva Raya

Question ID : 264330150094
Status : Answered
Chosen Option : 3

Q.12 _____ is the one organisation which is representing the entire cooperative movement in India.

- Ans
- 1. NCUI
 - 2. NFCSF
 - 3. TRIFED
 - 4. NABARD

Question ID : 264330146113
Status : Answered
Chosen Option : 1

Q.13 In 1987, an Action Research Programme was launched by NABARD with _____ based on which a pilot project for linking 500 SHGs with banks was launched.

- Ans
- 1. MYRADA
 - 2. IREDA
 - 3. AMFI
 - 4. PFRDA

Question ID : 264330145705
Status : Not Answered
Chosen Option : --

Q.14 The traditional singing of 'Nat' is associated with _____ Dance.

- Ans
- 1. Kathak
 - 2. Manipuri
 - 3. Odissi
 - 4. Chhau

Question ID : 264330145758
Status : Not Answered
Chosen Option : --

Q.15 Which of the following statements is INCORRECT with regard to microfinance?

- Ans
- 1. MFIs are those organizations, other than banks, that provide micro financial services.
 - 2. MFIs are banks that provide micro financial services.
 - 3. Microfinance involves provision of loans to micro, small and medium enterprises.
 - 4. The RBI is the regulatory body for Micro Finance Institutions (MFIs).

Question ID : 264330145852
Status : Not Answered
Chosen Option : --

Q.16 R Muthukannammal was awarded Padma Shri 2022 for which of the following dance forms?

- Ans
- 1. Sadir
 - 2. Sattriya
 - 3. Kathakali
 - 4. Mohiniyattam

Question ID : 264330148693
Status : Answered
Chosen Option : 2

Q.17 The term 'leg bye' is associated with _____.

- Ans
- 1. Cricket
 - 2. Hockey
 - 3. Badminton
 - 4. Football

Question ID : 264330146008
Status : Answered
Chosen Option : 1

Q.18 The Weapons of Mass Destruction and their Delivery Systems (Prohibition of Unlawful Activities) Amendment Act 2022 has amended _____.

- Ans
- 1. Weapons, Hazardous Chemicals and Destructions Act, 2010
 - 2. Hazardous, Weapons of Mass Destruction Prohibition Act, 2014
 - 3. Biochemical Mass Destruction Prohibition Act, 2007
 - 4. Weapons of Mass Destruction and their Delivery Systems (Prohibition of Unlawful Activities) Act, 2005

Question ID : 264330145956
Status : Answered
Chosen Option : 4

Q.19 Which of the following words is NOT mentioned in the Indian Constitution?

- Ans
- 1. Secular
 - 2. Republic
 - 3. Federalism
 - 4. Socialist

Question ID : 264330150354
Status : Answered
Chosen Option : 3

Q.20 Which of the following legends of Indian Music is awarded with Bharat Ratna?

- Ans
- 1. Lata Mangeshkar
 - 2. Usha Uthup
 - 3. Asha Bhosle
 - 4. Kishore Kumar

Question ID : 264330144776
Status : Answered
Chosen Option : 1

Q.21 The second Anglo-Mysore War came to an end by signing which of the following treaties?

- Ans
- 1. The Treaty of Arcot
 - 2. The Treaty of Madras
 - 3. The Treaty of Wandiwash
 - 4. The Treaty of Mangalore

Question ID : 264330150097
Status : Answered
Chosen Option : 4

Q.22 Value of wheat in flour is a part of _____ method of measurement of its national income.

- Ans
- 1. income
 - 2. circular income
 - 3. expenditure
 - 4. value added

Question ID : 264330144706
Status : Answered
Chosen Option : 4

Q.23 When were the Fundamental Duties first added in the Indian Constitution?

- Ans
- 1. 1973
 - 2. 1976
 - 3. 1975
 - 4. 1974

Question ID : 264330146548
Status : Answered
Chosen Option : 2

Q.24 What is the alternative name of black cotton soil found in Maharashtra?

- Ans
- 1. Chernozem
 - 2. Cumulose soil
 - 3. Regur
 - 4. Reh

Question ID : 264330144488
Status : Answered
Chosen Option : 3

Q.25 Nongkrem festival of Meghalaya is celebrated by which of the following tribes?

- Ans
- 1. Galo tribe
 - 2. Tutsa tribe
 - 3. Aptani tribe
 - 4. Khasi tribe

Question ID : 264330148656
Status : Answered
Chosen Option : 4



Teachingninja.in