



SSC CHSL TIER – I – Shift - 3 - 13-10-2020

- ★ Latest Govt Job updates
- ★ Private Job updates
- ★ Free Mock tests available

Visit - teachingninja.in

Combined Higher Secondary Level Examination 2019 Tier I

Roll Number	
Candidate Name	
Venue Name	
Exam Date	13/10/2020
Exam Time	4:00 PM - 5:00 PM
Subject	CHSL Tier 1

Section : English Language (Basic Knowledge)

Q.1 Select the correctly spelt word.

- Ans
- 1. Restaurent
 - 2. Memmoir
 - 3. Business
 - 4. Stuidious

Question ID : 8161612250
Status : Answered
Chosen Option : 3

Q.2 Select the synonym of the given word.

Nebulous

- Ans
- 1. Faith
 - 2. Stable
 - 3. Dearly
 - 4. Vague

Question ID : 8161612255
Status : Answered
Chosen Option : 2

Q.3 Select the most appropriate ANTONYM of the given word.

METROPOLITAN

- Ans
- 1. Federal
 - 2. National
 - 3. Provincial
 - 4. Insular

Question ID : 8161612247
Status : Answered
Chosen Option : 3

Q.4 Select the most appropriate option to fill in the blank in the given sentence.

A _____ of small stones is called a mosaic.

- Ans
- 1. structure
 - 2. mound
 - 3. pattern
 - 4. design

Question ID : 8161612257
Status : Answered
Chosen Option : 3

Comprehension:

In the following passage some words have been deleted. Fill in the blanks with the help of the alternatives given. Select the most appropriate option for each blank.

A city, predominantly made of red sandstone, Fatehpur Sikri (1)_____ founded in the 16th century by the Mughal Emperor, Akbar. It is essentially a fortified city (2)_____ had been the capital of Akbar (3)_____ fifteen years. Now a UNESCO world heritage site (4)_____ a famous tourist attraction, it is a fine (5)_____ of Mughal architecture.

SubQuestion No : 5

Q.5 Select the most appropriate option to fill in blank number 1.

- Ans
- 1. was
 - 2. had
 - 3. were
 - 4. is

Question ID : 8161612237
Status : Answered
Chosen Option : 1

Comprehension:

In the following passage some words have been deleted. Fill in the blanks with the help of the alternatives given. Select the most appropriate option for each blank.

A city, predominantly made of red sandstone, Fatehpur Sikri (1)_____ founded in the 16th century by the Mughal Emperor, Akbar. It is essentially a fortified city (2)_____ had been the capital of Akbar (3)_____ fifteen years. Now a UNESCO world heritage site (4)_____ a famous tourist attraction, it is a fine (5)_____ of Mughal architecture.

SubQuestion No : 6

Q.6 Select the most appropriate option to fill in blank number 2.

- Ans
- 1. which
 - 2. where
 - 3. what
 - 4. who

Question ID : 8161612238
Status : Answered
Chosen Option : 1

Comprehension:

In the following passage some words have been deleted. Fill in the blanks with the help of the alternatives given. Select the most appropriate option for each blank.

A city, predominantly made of red sandstone, Fatehpur Sikri (1)_____ founded in the 16th century by the Mughal Emperor, Akbar. It is essentially a fortified city (2)_____ had been the capital of Akbar (3)_____ fifteen years. Now a UNESCO world heritage site (4)_____ a famous tourist attraction, it is a fine (5)_____ of Mughal architecture.

SubQuestion No : 7

Q.7 Select the most appropriate option to fill in blank number 3.

- Ans
- 1. by
 - 2. since
 - 3. for
 - 4. from

Question ID : 8161612239

Status : Answered

Chosen Option : 3

Comprehension:

In the following passage some words have been deleted. Fill in the blanks with the help of the alternatives given. Select the most appropriate option for each blank.

A city, predominantly made of red sandstone, Fatehpur Sikri (1)_____ founded in the 16th century by the Mughal Emperor, Akbar. It is essentially a fortified city (2)_____ had been the capital of Akbar (3)_____ fifteen years. Now a UNESCO world heritage site (4)_____ a famous tourist attraction, it is a fine (5)_____ of Mughal architecture.

SubQuestion No : 8

Q.8 Select the most appropriate option to fill in blank number 4.

- Ans
- 1. and
 - 2. but
 - 3. nor
 - 4. if

Question ID : 8161612240

Status : Answered

Chosen Option : 1

Comprehension:

In the following passage some words have been deleted. Fill in the blanks with the help of the alternatives given. Select the most appropriate option for each blank.

A city, predominantly made of red sandstone, Fatehpur Sikri (1)_____ founded in the 16th century by the Mughal Emperor, Akbar. It is essentially a fortified city (2)_____ had been the capital of Akbar (3)_____ fifteen years. Now a UNESCO world heritage site (4)_____ a famous tourist attraction, it is a fine (5)_____ of Mughal architecture.

SubQuestion No : 9

Q.9 Select the most appropriate option to fill in blank number 5.

- Ans
- 1. example
 - 2. ruin
 - 3. infrastructure
 - 4. organization

Question ID : 8161612241

Status : Answered

Chosen Option : 1

Q.10 Given below are four jumbled sentences. Select the option that gives their correct order.

- A. They grew cabbages and carrots in their back yard.
- B. The family was very poor and was always hungry because there was a war on.
- C. They also had a chicken, which provided the family with eggs, but still they were hungry.
- D. Their country had been invaded by a foreign army.

- Ans
- 1. DABC
 - 2. CADB
 - 3. CDAB
 - 4. BDAC

Question ID : 8161612242
Status : Answered
Chosen Option : 4

Q.11 Select the most appropriate option to substitute the underlined segment in the given sentence. If there is no need to substitute it, select No improvement.

Since it falls on the floor, her dog, a black Labrador, gulped the biscuit down.

- Ans
- 1. Since it fell
 - 2. Because it is falling
 - 3. As it have fallen
 - 4. No improvement

Question ID : 8161612245
Status : Answered
Chosen Option : 1

Q.12 Select the option that is the passive form of the given sentence.

The police brought a search warrant when they raided his house.

- Ans
- 1. A search warrant had been brought when the police raided his house.
 - 2. The police had raided his house and brought a search warrant.
 - 3. A search warrant was brought by the police when they raided his house.
 - 4. A search warrant was brought when they raided his house by the police.

Question ID : 8161612232
Status : Answered
Chosen Option : 3

Q.13 Select the most appropriate ANTONYM of the given word.

INSTANT

- Ans
- 1. Similar
 - 2. Gradual
 - 3. Prompt
 - 4. Diverse

Question ID : 8161612246
Status : Answered
Chosen Option : 2

Q.14 Select the word which means the same as the group of words given.

Tending to associate with others of one's kind

- Ans
- 1. Genial
 - 2. Congruous
 - 3. Harmonious
 - 4. Gregarious

Question ID : 8161612253
Status : Answered
Chosen Option : 2

Q.15 Select the most appropriate option to substitute the underlined segment in the given sentence. If there is no need to substitute it, select No improvement.

This is a class who is expected to do exceptionally well in the quiz next week.

- Ans
- 1. which is expected to do
 - 2. No improvement
 - 3. that is expecting to done
 - 4. which are expecting to be doing

Question ID : 8161612244
Status : Answered
Chosen Option : 1

Q.16 Select the most appropriate option to fill in the blank in the given sentence.

The performances of the notable dancers and guest artists _____ the audience.

- Ans
- 1. occupied
 - 2. absorbed
 - 3. immersed
 - 4. enthralled

Question ID : 8161612256
Status : Answered
Chosen Option : 4

Q.17 Select the word which means the same as the group of words given.

Lasting for a very short time

- Ans
- 1. Endless
 - 2. Illusory
 - 3. Ephemeral
 - 4. Infinite

Question ID : 8161612252
Status : Answered
Chosen Option : 3

Q.18 Select the most appropriate synonym of the given word.

RIND

- Ans 1. Peel
 2. Petal
 3. Leaf
 4. Shade

Question ID : 8161612254
Status : Not Answered
Chosen Option : --

Q.19 Select the INCORRECTLY spelt word.

- Ans 1. Inclusion
 2. Excess
 3. Discriminatory
 4. Supporters

Question ID : 8161612251
Status : Answered
Chosen Option : 4

Q.20 Identify the segment in the given sentence which contains the grammatical error.

Most of voters in Taiwan seem to have once again voted for the democratic party and President Tsai Ing-wen.

- Ans 1. once again voted for
 2. the democratic party
 3. in Taiwan seem to have
 4. Most of voters

Question ID : 8161612235
Status : Answered
Chosen Option : 3

Q.21 Select the option that is the direct form of the given sentence.

Nidhi exclaimed that it was a beautiful painting.

- Ans 1. Nidhi said to the artist in surprise, "How beautiful you made that painting!"
 2. Nidhi exclaimed, "What a beautiful painting!"
 3. Nidhi told him in wonder, "How beautiful!"
 4. Nidhi said to the artist, "That looks like a beautiful painting!"

Question ID : 8161612233
Status : Answered
Chosen Option : 2

Q.22 Identify the segment in the given sentence which contains the grammatical error.

We noticed that most of the shoppers in the mall looking for packets of ready to cook food.

- Ans
- 1. packets of ready to cook food
 - 2. most of the shoppers
 - 3. in the mall looking for
 - 4. We noticed that

Question ID : 8161612234
Status : Answered
Chosen Option : 3

Q.23 Select the most appropriate meaning of the underlined idiom in the given sentence.

Akshay is likely to take the heat for having miscalculated the expenses.

- Ans
- 1. scold everyone
 - 2. receive criticism
 - 3. feel very hot
 - 4. enjoy warm climate

Question ID : 8161612248
Status : Answered
Chosen Option : 2

Q.24 Select the most appropriate meaning of the idiom.

To have a gut feeling

- Ans
- 1. To suffer from inflammation
 - 2. To feel an instinct or intuition
 - 3. To experience discomfort
 - 4. To have pain in the abdomen

Question ID : 8161612249
Status : Answered
Chosen Option : 2

Q.25 Given below are four jumbled sentences. Select the option that gives their correct order.

- A. I sow a seed.
- B. I saw the sapling.
- C. I saw the sprout.
- D. I saw the plant.

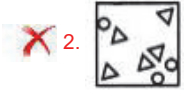
- Ans
- 1. ACBD
 - 2. DBAC
 - 3. CABD
 - 4. ABCD

Question ID : 8161612243
Status : Answered
Chosen Option : 1

Q.1 The sequence of folding a piece of paper and the manner in which the folded paper has been cut is shown in the following figures. How would this paper look when unfolded?



Ans



Question ID : 8161612280

Status : Answered

Chosen Option : 3



Teachingninja.in

Q.2 Select the correct mirror image of the given figure when the mirror is placed to the right side of the figure.



Ans

1.




2.



3.



4.



Question ID : 8161612281
Status : Answered
Chosen Option : 2

Q.3 Four letter-clusters have been given, out of which three are alike in some manner and one is different. Select the one that is different.

Ans

1. ADGPI

2. ECVMU

3. OMKLU

4. VDCKA

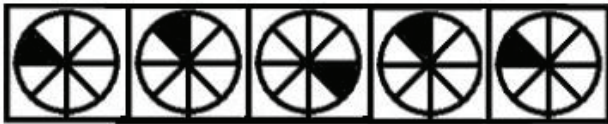
Question ID : 8161612273
Status : Marked For Review
Chosen Option : 1

Q.4 In a certain code language, KNOWLEDGE is written as DEEGKLNOW. How will SERIAL be written as in the same language?

- Ans
- 1. AEILRS
 - 2. AELIRS
 - 3. AEILRM
 - 4. AEIRLM

Question ID : 8161612266
Status : Answered
Chosen Option : 1

Q.5 Select the figure that will come next in the following figure series.



- Ans
- 1.
 - 2.
 - 3.
 - 4.

Question ID : 8161612277
Status : Answered
Chosen Option : 3

Q.6 Select the combination of letters that when sequentially placed in the gaps of the given letter series will complete the series.

abcc__ab__de__ccd_eab__de

- Ans
- 1. ccdabdccddde
 - 2. ddeccdabdccd
 - 3. ddeccdabdccc
 - 4. ddecbdccdcda

Question ID : 8161612270
Status : Answered
Chosen Option : 2

Q.7 Select the letter cluster that will replace the question mark (?) in the following series.

JAM, KEL, LIK, ?, NUI

- Ans
- 1. MEJ
 - 2. JEM
 - 3. MOJ
 - 4. MAJ

Question ID : 8161612274
Status : Answered
Chosen Option : 3

Q.8 In a certain code language, IF is written as 225 and BUT is written as 1849. How will SLIP be written as in that language?

- Ans
- 1. 1336
 - 2. 3163
 - 3. 3136
 - 4. 6313

Question ID : 8161612267
Status : Answered
Chosen Option : 3

Q.9 Find the missing number from the below options.

16	30	18
4	34	?
10	32	40

- Ans
- 1. 62
 - 2. 22
 - 3. 38
 - 4. 58

Question ID : 8161612261
Status : Not Attempted and Marked For Review
Chosen Option : --

Q.10 Pointing to a picture of Rajiv, a lady Neena said, "His sister's father is the only son of my father-in-law." How is Neena related to Rajiv?

- Ans
- 1. Mother
 - 2. Granddaughter
 - 3. Paternal Grandmother
 - 4. Sister

Question ID : 8161612271
Status : Answered
Chosen Option : 1

Q.11 Select the option in which the words in the word-pair shares the same relationship as that shared by the given word-pair.

Tiger : Felidae

- Ans**
- 1. Lion : Leporidae
 - 2. Rabbit : Bovidae
 - 3. Whale : Cetacea
 - 4. Elephant : Canidae

Question ID : 8161612272
Status : Answered
Chosen Option : 3

Q.12 A boy has a total of ₹740 in the denominations of two rupee, five rupee, ten rupee and twenty rupee notes. If the number of each denomination is equal, what is the total number of notes the boy has?

- Ans**
- 1. 80
 - 2. 20
 - 3. 40
 - 4. 60

Question ID : 8161612260
Status : Answered
Chosen Option : 1

Q.13 Read the given statements and conclusions carefully. Assuming that the information given in the statements is true, even if it appears to be at variance with commonly known facts, decide which of the given conclusions logically follow(s) from the statements.

Statements:

- I. Some men are animals.
- II. All trees are rivers.
- III. All animals are trees.

Conclusions:

- I. Some men are rivers.
- II. All rivers are animals.
- III. All rivers are men.
- IV. All men are trees.

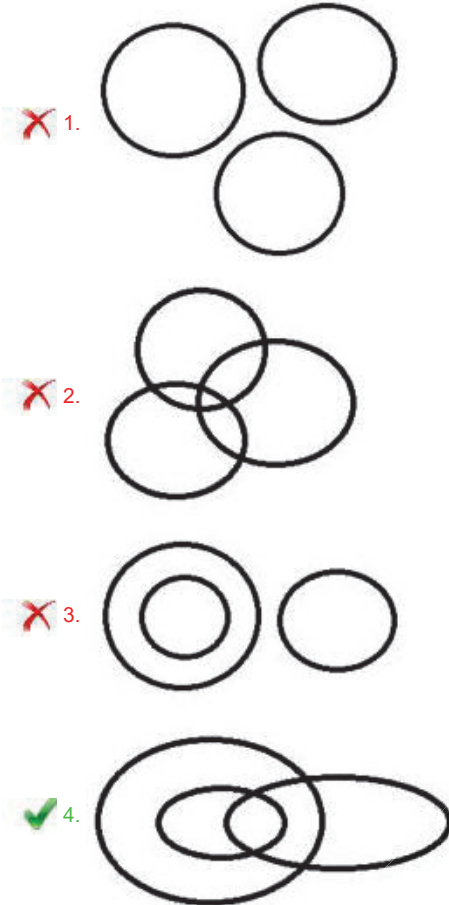
- Ans**
- 1. Only conclusion IV follows
 - 2. Only conclusions I and II follow
 - 3. Only conclusion I follows
 - 4. Only conclusions III and II follow

Question ID : 8161612275
Status : Answered
Chosen Option : 3

Q.14 Select the Venn diagram that best represents the relationship between the following classes.

Doctors, Neurosurgeons, Female

Ans



Question ID : 8161612282

Status : Answered

Chosen Option : 4

Q.15 Which two signs should be interchanged in the given equation to make it correct?

$$4 - 7 \times 28 + 12 \div 3 = 4$$

Ans

1. \times and $+$
2. $-$ and \div
3. \times and \div
4. \times and $-$

Question ID : 8161612259

Status : Answered

Chosen Option : 4

Q.16 Select the number that will come next in the following series.

6, 9, 13, 21, 38, 71, ?

Ans 1. 129

2. 101

3. 99

4. 121

Question ID : 8161612263

Status : Answered

Chosen Option : 1

Q.17 Select the correct alternative to indicate the arrangement of the following words in a logical and meaningful order.

1. State
2. Village
3. District
4. City
5. Country

Ans 1. 1,3,5,2,4

2. 1,3,5,4,2

3. 2,4,3,1,5

4. 4,3,5,2,1

Question ID : 8161612265

Status : Answered

Chosen Option : 3

Q.18 Select the option that is related to the third term in the same way as the second term is related to the first term.

EASY : DDNF :: MAKE : ?

Ans 1. NXPX

2. LDFL

3. LFDL

4. XXPN

Question ID : 8161612268

Status : Answered


Chosen Option : 2

Q.19 Select the option in which the given figure is embedded. (Rotation is NOT allowed)

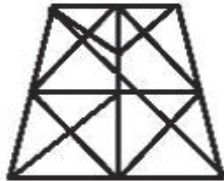


Ans

1.



2.



3.



4.



Question ID : 8161612279
Status : Answered
Chosen Option : 1

Q.20 Select the option in which the number set shares the same relationship as that shared by the given number set.
(6, 42, 1890)

Ans

1. (7, 23, 1069)

2. (2, 6, 54)

3. (9, 102, 1190)

4. (4, 20, 420)

Question ID : 8161612262
Status : Answered
Chosen Option : 2

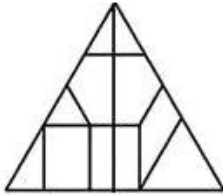
Q.21 Select the option that is related to the third term in the same way as the second term is related to the first term.

AIDS : VIRUS :: MALARIA : ?

- Ans 1. Parasite
 2. Virus
 3. Nematodes
 4. Bacteria

Question ID : 8161612269
Status : Answered
Chosen Option : 1

Q.22 How many triangles are there in the given figure?



- Ans 1. 12
 2. 10
 3. 8
 4. 15

Question ID : 8161612278
Status : Answered
Chosen Option : 2

Q.23 Rahul is three times as old as Amar. Amber was half the age of Rahul three years ago. After four years from now, Rahul will be 43. What are the present ages of Amar and Amber?

- Ans 1. 38, 21
 2. 13, 18
 3. 39, 21
 4. 13, 21

Question ID : 8161612258
Status : Answered
Chosen Option : 2

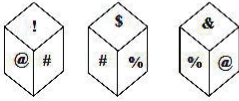
Q.24 Study the given pattern carefully and select the number that can replace the question mark (?) in it.

(1, 2, 2) (7, 35, 5) (12, 96, ?)

- Ans 1. 7
 2. 8
 3. 9
 4. 11

Question ID : 8161612264
Status : Answered
Chosen Option : 2

Q.25 Three different positions of the same dice are shown. Select the symbol that will be on the face opposite to the one having '!':



- Ans
- 1. &
 - 2. #
 - 3. %
 - 4. \$

Question ID : 8161612276
Status : Answered
Chosen Option : 3

Section : Quantitative Aptitude(Basic Arithmetic Skill)

Q.1 In ΔPQR , S and T are mid-points of PQ and PR, respectively. If $\angle QPR = 75^\circ$ and $\angle PRQ = 40^\circ$, then $\angle TSQ$ is:

- Ans
- 1. 115°
 - 2. 105°
 - 3. 120°
 - 4. 135°

Question ID : 8161612295
Status : Answered
Chosen Option : 1

Q.2 If $\tan x = \frac{m}{n}$ and $0^\circ \leq x \leq 90^\circ$, then the value of $(\sin x + \cos x)$ is:

- Ans
- 1. $\frac{1}{\sqrt{m^2+n^2}}$
 - 2. $\sqrt{m^2-n^2}$
 - 3. $\frac{1}{\sqrt{m^2-n^2}}$
 - 4. $\frac{m+n}{\sqrt{m^2+n^2}}$

Question ID : 8161612301
Status : Answered
Chosen Option : 4

Q.3 The value of $(72 + 34) \div 2 + \{[(75 \div 15) + 6] \times 2\}$ is:

- Ans
- 1. 74
 - 2. 75
 - 3. 86
 - 4. 78

Question ID : 8161612300
Status : Answered
Chosen Option : 2

Q.4 Find the factors of the expression $3x^2 - 5x - 8$.

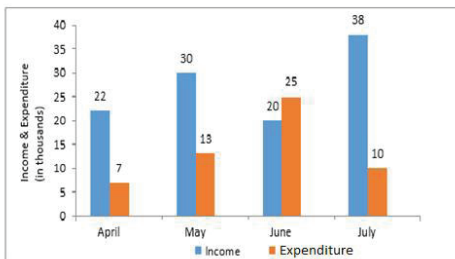
- Ans
- 1. $(x + 1)$ and $(3x + 8)$
 - 2. $(x + 1)$ and $(3x - 8)$
 - 3. $(x - 1)$ and $(3x + 8)$
 - 4. $(x - 1)$ and $(3x - 8)$

Question ID : 8161612297

Status : Answered

Chosen Option : 2

Q.5 The given bar graph represents the income and expenditure of a person during the four consecutive months, April to July, 2019.



What is the percentage difference between the total income and the total expenditure with respect to the total income?

- Ans
- 1. 50%
 - 2. 65%
 - 3. 60%
 - 4. 70%

Question ID : 8161612306

Status : Answered

Chosen Option : 1

Q.6 If 40% of a number is less than its 60% by 30, then the 20% of that number is:

- Ans
- 1. 40
 - 2. 60
 - 3. 30
 - 4. 50

Question ID : 8161612288

Status : Answered

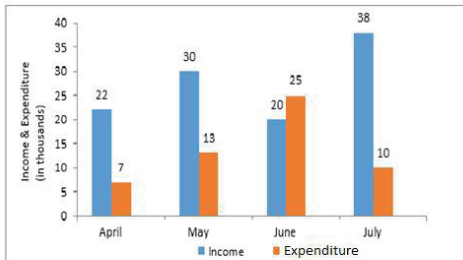
Chosen Option : 3

Q.7 If the average of 35 numbers is 22, the average of the first 17 numbers is 19, and the average of the last 17 numbers is 20, then the 18th number is:

- Ans**
- 1. 132
 - 2. 108
 - 3. 133
 - 4. 107

Question ID : 8161612286
Status : Answered
Chosen Option : 4

Q.8 The given bar graph represents the income and expenditure of a person during the four consecutive months, April to July, 2019.



What is the percentage of the total expenditure of the total income?

- Ans**
- 1. 20%
 - 2. 50%
 - 3. 40%
 - 4. 30%

Question ID : 8161612307
Status : Answered
Chosen Option : 2

Q.9 If $xy = 16$ and $x^2 + y^2 = 32$, then the value of $(x + y)$ is:

- Ans**
- 1. ± 10
 - 2. ± 4
 - 3. ± 8
 - 4. ± 6

Question ID : 8161612298
Status : Answered
Chosen Option : 3

Q.10 If $\sin x - \cos x = 0$, then the value of $(\sin^3 x - \cos^3 x)$ is:

- Ans
- 1. 1
 - 2. 2
 - 3. 0
 - 4. 4

Question ID : 8161612303
Status : Answered
Chosen Option : 3

Q.11 If Ravi sells an old scooter for ₹18,000, then his loss incurred is 10%. If he sells it to gain a profit of 15%, then the selling price is:

- Ans
- 1. ₹20,000
 - 2. ₹23,000
 - 3. ₹24,000
 - 4. ₹22,000

Question ID : 8161612289
Status : Answered
Chosen Option : 2

Q.12 The compound interest and the amount obtained, on a certain sum of money are ₹820 and ₹8,820 respectively after 2 years. If the rate of interest compounded yearly, then the rate of interest is:

- Ans
- 1. 8%
 - 2. 7%
 - 3. 6%
 - 4. 5%

Question ID : 8161612291
Status : Answered
Chosen Option : 4

Q.13 In a circle two equal and parallel chords are 6 cm apart and lie on the opposite sides of the centre of the circle. If the length of each chord is 8 cm, then the radius of the circle is:

- Ans
- 1. 3 cm
 - 2. 7 cm
 - 3. 5 cm
 - 4. 2 cm

Question ID : 8161612293
Status : Answered
Chosen Option : 3

Q.14 To a circle with centre at O, two tangents AP and AQ are drawn from an external point A. If the $\angle PAQ = 80^\circ$, then the $\angle POQ$ is:

- Ans
- 1. 80°
 - 2. 70°
 - 3. 90°
 - 4. 100°

Question ID : 8161612292
Status : Answered
Chosen Option : 4

Q.15 If $a + b = 10$ and $\frac{3}{7}$ of $ab = 9$, then the value of $a^3 + b^3$ is:

- Ans
- 1. 350
 - 2. 370
 - 3. 270
 - 4. 360

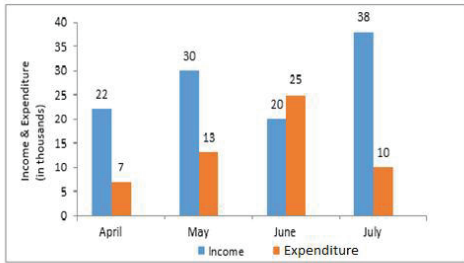
Question ID : 8161612296
Status : Answered
Chosen Option : 3

Q.16 $\frac{\cot x}{1 + \operatorname{cosec} x} + \frac{1 + \operatorname{cosec} x}{\cot x}$ is equal to:

- Ans
- 1. $2 \sin x$
 - 2. $2 \cos x$
 - 3. $2 \operatorname{cosec} x$
 - 4. $2 \sec x$

Question ID : 8161612302
Status : Answered
Chosen Option : 4

Q.17 The given bar graph represents the income and expenditure of a person during the four consecutive months, April to July, 2019.



What is the average expenditure of the person?

- Ans
- 1. ₹17,250
 - 2. ₹15,570
 - 3. ₹13,750
 - 4. ₹17,520

Question ID : 8161612305

Status : Answered

Chosen Option : 3

Q.18 In a $\triangle ABC$, DE is parallel to BC where D and E are the points on AB and AC , respectively and $AD = 4$ cm, $DB = 8$ cm, $AE = 3$ cm. Length of EC is:

- Ans
- 1. 5 cm
 - 2. 6 cm
 - 3. 9 cm
 - 4. 7 cm

Question ID : 8161612294

Status : Answered

Chosen Option : 2

Q.19 If $2794p561$ is divisible by 9, then the value of p is:

- Ans
- 1. 3
 - 2. 2
 - 3. 0
 - 4. 4

Question ID : 8161612299

Status : Answered

Chosen Option : 2

Q.20 If the measures of the sides of a cuboid are 8 cm, 6 cm and 10 cm, then the volume (in cm^3) of the cuboid, is:

- Ans
- 1. 840
 - 2. 480
 - 3. 540
 - 4. 680

Question ID : 8161612285
Status : Answered
Chosen Option : 2

Q.21 A train that is running at the speed of 72 km/h crosses an electric pole in 36 seconds. The length of the train (in metres) is:

- Ans
- 1. 620 m
 - 2. 720 m
 - 3. 460 m
 - 4. 360 m

Question ID : 8161612284
Status : Answered
Chosen Option : 2

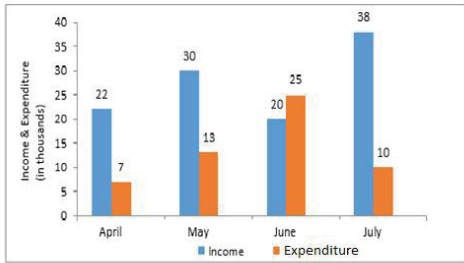
Q.22 Tap A can fill a tank in 6 hours, tap B can fill the same tank in 8 hours and tap C can empty the same tank in 4 hours. If all three taps A, B and C are opened together, then how much time (in hours) will be taken to fill the tank?

- Ans
- 1. 30
 - 2. 20
 - 3. 24
 - 4. 28

Question ID : 8161612283
Status : Answered
Chosen Option : 3



Q.23 The given bar graph represents the income and expenditure of a person during the four consecutive months, April to July, 2019.



What is the average income of the person?

- Ans
- 1. ₹20,500
 - 2. ₹27,500
 - 3. ₹25,500
 - 4. ₹17,500

Question ID : 8161612304

Status : Answered

Chosen Option : 2

Q.24 If $a : b = 3 : 5$ and $b : c = 2 : 3$, then the proportion $a : b : c$ is:

- Ans
- 1. 3 : 5 : 3
 - 2. 3 : 10 : 3
 - 3. 3 : 10 : 15
 - 4. 6 : 10 : 15

Question ID : 8161612290

Status : Answered

Chosen Option : 4

Q.25 The marked price and cost price of a book are ₹850 and ₹748, respectively. The discount in percentage is:

- Ans
- 1. 8%
 - 2. 15%
 - 3. 12%
 - 4. 10%

Question ID : 8161612287

Status : Answered

Chosen Option : 3

Section : General Awareness

Q.1 Which Indian economist was appointed as the Chief Economist of the World Bank from 2012 to 2016?

- Ans
- 1. Jagdish Bhagwati
 - 2. Kaushik Basu
 - 3. Indraprasad Gordhanbhai Patel
 - 4. Raghuram Rajan

Question ID : 8161612316
Status : Answered
Chosen Option : 2

Q.2 Which of the following temples has Panchayatana Style of architecture?

- Ans
- 1. Dashavatara Temple
 - 2. Sun Temple
 - 3. Brihadeeswara Temple
 - 4. Kashi Vishwanath temple

Question ID : 8161612311
Status : Not Answered
Chosen Option : --

Q.3 Which former badminton player of India was awarded the 'Sportstar Lifetime Achievement Award' in February 2019?

- Ans
- 1. Prakash Padukone
 - 2. Pullela Gopichand
 - 3. Chetan Anand
 - 4. Sanave Thomas

Question ID : 8161612332
Status : Answered
Chosen Option : 1

Q.4 What is the chemical name of 'oil of vitriol'?

- Ans
- 1. Methyl alcohol
 - 2. Calcium hydroxide
 - 3. Sodium chloride
 - 4. Sulfuric acid

Question ID : 8161612317
Status : Answered
Chosen Option : 1

Q.5 Which planet is made up of thick white and yellowish clouds of sulfuric acid?

- Ans
- 1. Uranus
 - 2. Venus
 - 3. Neptune
 - 4. Mars

Question ID : 8161612318
Status : Answered
Chosen Option : 3

Q.6 In which language were the Mughal court chronicles written?

- Ans
- 1. Sanskrit
 - 2. Hindi
 - 3. Urdu
 - 4. Persian

Question ID : 8161612324
Status : Answered
Chosen Option : 4

Q.7 As per state census 2011, which of the following is the least populous state of India?

- Ans
- 1. Kerala
 - 2. Sikkim
 - 3. Odisha
 - 4. Tamil Nadu

Question ID : 8161612320
Status : Answered
Chosen Option : 2

Q.8 Which child activist became the first Indian to be awarded the 'Changemaker Award 2019' (given by the Bill and Melinda Gates Foundation) for her work towards abolition of child marriage in Rajasthan?

- Ans
- 1. Kanchan Upadhaya
 - 2. Ridhima Pandey
 - 3. Payal Jangid
 - 4. Ayushi Dholakia

Question ID : 8161612327
Status : Answered
Chosen Option : 3

Q.9 Which Indian mountain looks like a giant pyramid and has a flat summit area and two peaks?

- Ans
- 1. Saltoro Kangri
 - 2. Mamostang Kangri
 - 3. Nanda Devi
 - 4. Kamet

Question ID : 8161612322
Status : Not Answered
Chosen Option : --

Q.10 Which of the following prominent leaders wrote the book 'Citizen Delhi: My Life, My Times'?

- Ans
- 1. Sheila Dikshit
 - 2. Arvind Kejriwal
 - 3. Harsh Vardhan
 - 4. Arun Jaitley

Question ID : 8161612326
Status : Answered
Chosen Option : 1

Q.11 Which of the following pairs is INCORRECTLY matched?

- Ans
- 1. Bharat Sanchar Nigam Limited – Miniratna
 - 2. Indian Oil Corporation Limited – Maharatna
 - 3. Airport Authority of India – Navratna
 - 4. Hindustan Aeronautics Limited – Navratna

Question ID : 8161612315
Status : Answered
Chosen Option : 1

Q.12 Who designed the first analog computer in India?

- Ans
- 1. Subodh Chandra Das Gupta
 - 2. Deb Kumar Bose
 - 3. Samarendra Kumar Mitra
 - 4. Bimal Kumar Bhattacharyya

Question ID : 8161612309
Status : Not Answered
Chosen Option : --

Q.13 Which of the following monuments has NOT been notified as a National Geo-heritage Monument by the Geological Survey of India (GSI)?

- Ans
- 1. Pillow Lava in Iron Ore belt at Nomira, Odisha
 - 2. Nagahill Ophiolite site near Pungro, Nagaland
 - 3. Peninsular Gneiss Lalbagh, Karnataka
 - 4. Gingee Fort Villupuram District, Tamil Nadu

Question ID : 8161612323
Status : Answered
Chosen Option : 4

Q.14 On which date did Indian National Congress pass the Resolution of 'Poorna Swaraj' (total independence) at the Lahore Session?

- Ans
- 1. 21 December 1929
 - 2. 19 December 1929
 - 3. 26 December 1929
 - 4. 15 December 1929

Question ID : 8161612325
Status : Answered
Chosen Option : 1

Q.15 Which instrument records the waves reaching the surface during an earthquake?

- Ans
- 1. Seismograph
 - 2. Chronometer
 - 3. Barograph
 - 4. Manometer

Question ID : 8161612321
Status : Answered
Chosen Option : 1

Q.16 Which player became the first Indian brand ambassador of La Liga (the top tier of Spanish club football) in December 2019?

- Ans
- 1. Virat Kohli
 - 2. Sachin Tendulkar
 - 3. Mahendra Singh Dhoni
 - 4. Rohit Sharma

Question ID : 8161612331
Status : Not Answered
Chosen Option : --

Q.17 On December 2019, the Prime Minister of _____ announced the commencement of the 'Gandhi Citizenship Education Award' to be given every year.

- Ans
- 1. Bhutan
 - 2. Japan
 - 3. Portugal
 - 4. France

Question ID : 8161612313
Status : Not Answered
Chosen Option : --

Q.18 Which festival marks the beginning of the Tibetan New Year?

- Ans
- 1. Saga Dawa Festival
 - 2. Ongkor Festival
 - 3. Losar festival
 - 4. Shoton Festival

Question ID : 8161612310
Status : Not Answered
Chosen Option : --

Q.19 When was the 'Rajiv Gandhi Khel Ratna Award' instituted?

- Ans
- 1. 1993-94
 - 2. 1991-92
 - 3. 1985-86
 - 4. 2002-03

Question ID : 8161612330
Status : Answered
Chosen Option : 1

Q.20 What was India's rank in the world in terms of military power as per the 'Global Firepower Nations Index 2019'?

- Ans
- 1. 4th
 - 2. 9th
 - 3. 3rd
 - 4. 5th

Question ID : 8161612314
Status : Answered
Chosen Option : 1

Q.21 Who was sworn in as the 11th Chief Minister of Jharkhand on 29 December 2019?

- Ans 1. Hemant Soren
 2. Shibu Soren
 3. Raghubar Das
 4. Alamgir Alam

Question ID : 8161612312
Status : Answered
Chosen Option : 1

Q.22 In DASD, what is the full form of 'A'?

- Ans 1. Access
 2. Around
 3. Accessible
 4. Arithmetic

Question ID : 8161612308
Status : Not Answered
Chosen Option : --

Q.23 Which scientist arranged the Periodic Table of Elements in the order of increasing atomic masses?

- Ans 1. Dmitri Mendeleev
 2. Henry Moseley
 3. Robert Boyle
 4. William Ramsay

Question ID : 8161612319
Status : Answered
Chosen Option : 1

Q.24 In which year did Motilal Nehru (Chairman) and eight other Congress leaders draft a constitution for India?

- Ans 1. 1928
 2. 1925
 3. 1930
 4. 1950

Question ID : 8161612328
Status : Answered
Chosen Option : 2

Q.25 What is the provision of Article 49 of the Constitution of India?

- Ans
- 1. Provision for free and compulsory education for children
 - 2. Promotion of international peace and security
 - 3. Prohibition of employment of children (Under the age of 14) in factories and mines
 - 4. Protection of monuments and places and objects of natural importance

Question ID : 8161612329

Status : Answered

Chosen Option : 4



Teachingninja.in