



SSC CHSL TIER – I – Shift - 3 - 18-03-2020

- ★ Latest Govt Job updates
- ★ Private Job updates
- ★ Free Mock tests available

Visit - teachingninja.in

Combined Higher Secondary Level Examination 2019 Tier I

Roll Number	
Candidate Name	
Venue Name	
Exam Date	18/03/2020
Exam Time	4:00 PM - 5:00 PM
Subject	CHSL Tier 1

Section : English Language (Basic Knowledge)

Q.1 In the sentence identify the segment which contains the grammatical error.

The simplest way to get proper recognition are through doing things with dedication and sincerity.

- Ans
- 1. are through doing things
 - 2. with dictation and sincerity
 - 3. to get proper recognition
 - 4. The simplest way

Question ID : 8161611595
Status : Answered
Chosen Option : 1

Q.2 Select the most appropriate meaning of the given idiom.

Cut to the chase

- Ans
- 1. Stopping unexpectedly and missing the chase
 - 2. Talking about the important point and leaving out the detail
 - 3. Cutting long pieces and spoiling the dish cooked
 - 4. Sleeping long hours and spoiling the health

Question ID : 8161611610
Status : Answered
Chosen Option : 2

Q.3 Select the most appropriate synonym of the given word.

EXPLICIT

- Ans
- 1. Compatible
 - 2. Unintelligible
 - 3. Equivocal
 - 4. Lucid

Question ID : 8161611616
Status : Answered
Chosen Option : 4

Q.4 Select the word which means the same as the group of words given.

A person who speaks always in praise of himself

- Ans
- 1. Conventionalist
 - 2. Egotist
 - 3. Nationalist
 - 4. Evangelist

Question ID : **8161611614**
Status : **Answered**
Chosen Option : **2**

Comprehension:

In the following passage some words have been deleted. Fill in the blanks with the help of the alternatives given. Select the most appropriate option for each blank.

Everyone wants to be happy. I also want to be happy (1)_____ that's when I am at my best. I know that happiness comes from (2)_____ me, not from outside. The (3)_____ tools I will have to learn to use here will only work if I understand that I'm in (4)_____ of my thoughts, actions and emotions and if I'm willing to do some simple exercises on a (5)_____ basis.

SubQuestion No : 5

Q.5 Select the most appropriate option for blank No. 1.

- Ans
- 1. until
 - 2. nevertheless
 - 3. because
 - 4. unless

Question ID : **8161611598**
Status : **Answered**
Chosen Option : **3**

Comprehension:

In the following passage some words have been deleted. Fill in the blanks with the help of the alternatives given. Select the most appropriate option for each blank.

Everyone wants to be happy. I also want to be happy (1)_____ that's when I am at my best. I know that happiness comes from (2)_____ me, not from outside. The (3)_____ tools I will have to learn to use here will only work if I understand that I'm in (4)_____ of my thoughts, actions and emotions and if I'm willing to do some simple exercises on a (5)_____ basis.

SubQuestion No : 6

Q.6 Select the most appropriate option for blank No. 2.

- Ans
- 1. within
 - 2. for
 - 3. on
 - 4. around

Question ID : **8161611599**
Status : **Answered**
Chosen Option : **1**

Comprehension:

In the following passage some words have been deleted. Fill in the blanks with the help of the alternatives given. Select the most appropriate option for each blank.

Everyone wants to be happy. I also want to be happy (1)_____ that's when I am at my best. I know that happiness comes from (2)_____ me, not from outside. The (3)_____ tools I will have to learn to use here will only work if I understand that I'm in (4)_____ of my thoughts, actions and emotions and if I'm willing to do some simple exercises on a (5)_____ basis.

SubQuestion No : 7

Q.7 Select the most appropriate option for blank No. 3.

- Ans 1. stable
 2. powerful
 3. effortless
 4. affective

Question ID : 8161611600
Status : Answered
Chosen Option : 2

Comprehension:

In the following passage some words have been deleted. Fill in the blanks with the help of the alternatives given. Select the most appropriate option for each blank.

Everyone wants to be happy. I also want to be happy (1)_____ that's when I am at my best. I know that happiness comes from (2)_____ me, not from outside. The (3)_____ tools I will have to learn to use here will only work if I understand that I'm in (4)_____ of my thoughts, actions and emotions and if I'm willing to do some simple exercises on a (5)_____ basis.

SubQuestion No : 8

Q.8 Select the most appropriate option for blank No. 4.

- Ans 1. frame
 2. custody
 3. structure
 4. charge

Question ID : 8161611601
Status : Answered
Chosen Option : 4

Comprehension:

In the following passage some words have been deleted. Fill in the blanks with the help of the alternatives given. Select the most appropriate option for each blank.

Everyone wants to be happy. I also want to be happy (1)_____ that's when I am at my best. I know that happiness comes from (2)_____ me, not from outside. The (3)_____ tools I will have to learn to use here will only work if I understand that I'm in (4)_____ of my thoughts, actions and emotions and if I'm willing to do some simple exercises on a (5)_____ basis.

SubQuestion No : 9

Q.9 Select the most appropriate option for blank No. 5.

- Ans
- 1. temporary
 - 2. regular
 - 3. stimulant
 - 4. legal

Question ID : 8161611602
Status : Answered
Chosen Option : 2

Q.10 Select the most appropriate option to substitute the underlined segment in the given sentence. If there is no need to substitute it, select 'No improvement'.

As long as they are here, Hari won't attend the training.

- Ans
- 1. So far as
 - 2. So long so
 - 3. As long that
 - 4. No improvement

Question ID : 8161611606
Status : Answered
Chosen Option : 4

Q.11 Select the most appropriate ANTONYM of the given word.

CLOUDY

- Ans
- 1. Vague
 - 2. Transparent
 - 3. Indefinite
 - 4. Murky

Question ID : 8161611607
Status : Answered
Chosen Option : 2

Q.12 Select the correct passive form of the given sentence.

Sheetal might have misplaced Mohan's wallet in their rush.

- Ans
- 1. Mohan's wallet might have been misplaced by Sheetal in their rush.
 - 2. Mohan's wallet may have been misplaced by Sheetal in their rush.
 - 3. Mohan's wallet may be misplaced by Sheetal in their rush.
 - 4. Mohan's wallet might be misplaced by Sheetal in their rush.

Question ID : 8161611593
Status : Answered
Chosen Option : 1

Q.13 Given below are four jumbled sentences. Out of the given options select the one that gives their correct order.

- A. Though John found none, he was not ready to give in.
- B. He continued the search till noon.
- C. John wanted to have a big well dug.
- D. He searched around for workers who would do the job for him without pay.

- Ans
- 1. DCAB
 - 2. CADB
 - 3. CDBA
 - 4. CDAB

Question ID : 8161611603
Status : Answered
Chosen Option : 4

Q.14 Select the correct indirect form of the given sentence.

The storekeeper asked the security, "Did you see the torch I kept here?"

- Ans
- 1. The storekeeper asked the security whether he had seen the torch he had kept there.
 - 2. The storekeeper asked the security whether he saw the torch he had kept there.
 - 3. The storekeeper asked the security if he saw the torch he kept there.
 - 4. The storekeeper asked the security if had he seen the torch he kept there.

Question ID : 8161611594
Status : Answered
Chosen Option : 1

Q.15 Select the word which means the same as the group of words given.

Painless death given to patients to relieve suffering.

- Ans
- 1. Euphemism
 - 2. Euphoria
 - 3. Euthanasia
 - 4. Euphoria

Question ID : 8161611613
Status : Answered
Chosen Option : 4

Q.16 Select the most appropriate word to fill in the blank.

People readily accept any _____ of their leaders if supported by the media.

- Ans
- 1. concession
 - 2. compromise
 - 3. dispute
 - 4. argument

Question ID : 8161611617
Status : Answered
Chosen Option : 2

Q.17 Select the most appropriate ANTONYM of the given word.

PLACATE

- Ans
- 1. Propitiate
 - 2. Enrage
 - 3. Appease
 - 4. Conciliate

Question ID : 8161611608
Status : Answered
Chosen Option : 2

Q.18 Select the most appropriate option to substitute the underlined segment in the given sentence. If there is no need to substitute it, select 'No improvement'.

Lot of times she advised him for not being lazy for completing such a tough task.

- Ans
- 1. A lot of times
 - 2. Much of time
 - 3. A lot of time
 - 4. No improvement

Question ID : 8161611605
Status : Answered
Chosen Option : 3

Q.19 Select the most appropriate synonym of the given word.

INSTIGATE

- Ans
- 1. Kindle
 - 2. Imbibe
 - 3. Instill
 - 4. Stagnate

Question ID : 8161611615
Status : Answered
Chosen Option : 2

Q.20 Select the wrongly spelt word.

- Ans 1. Envioronment
 2. Pollutant
 3. Residual
 4. Solvent

Question ID : 8161611611
Status : Answered
Chosen Option : 1

Q.21 In the sentence identify the segment which contains the grammatical error.

The man with a lost eye have been accused for murder of two girls in his neighbourhood.

- Ans 1. have been accused for
 2. The man with a lost eye
 3. in his neighbourhood
 4. murder of two girls

Question ID : 8161611596
Status : Answered
Chosen Option : 4

Q.22 Select the most appropriate meaning of the given idiom.

Keep a civil tongue

- Ans 1. Express dissent mildly
 2. Speak with great politeness
 3. Argue with soft words
 4. Maintain silence when needed

Question ID : 8161611609
Status : Answered
Chosen Option : 3

Q.23 Select the most appropriate word to fill in the blank.

Success is the _____ of taking risks, everybody knows.

- Ans 1. tension
 2. pressure
 3. burden
 4. by-product

Question ID : 8161611618
Status : Answered
Chosen Option : 4

Q.24 Select the wrongly spelt word.

- Ans 1. Allopathy
 2. Homoeopathy
 3. Naturopathy
 4. Telepathy

Question ID : 8161611612
Status : Answered
Chosen Option : 2

Q.25 Given below are four jumbled sentences. Out of the given options select the one that gives their correct order.

- A. When Franco was young; he would stay at sea all night.
B. Every morning, he would arrive with a big catch of fresh fish and sell it in the market.
C. Franco was a fisherman who lived on the beach.
D. He had been fishing for as long as he could remember.

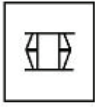
- Ans 1. CDBA
 2. CDAB
 3. CBDA
 4. DCAB

Question ID : 8161611604
Status : Answered
Chosen Option : 2

Section : General Intelligence

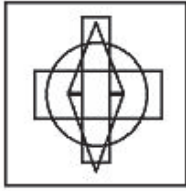


Q.1 Select the option in which the given figure is embedded. (Rotation is not allowed)

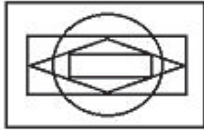


Ans

✓ 1.



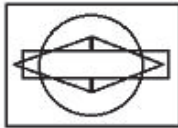
✗ 2.



✗ 3.



✗ 4.



Question ID : 8161611640

Status : Answered

Chosen Option : 1



Teachingninja.in

Q.2 Select the option figure that can replace the question mark (?) in the following series.

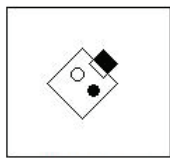


FIGURE 1

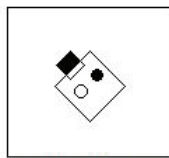


FIGURE 2

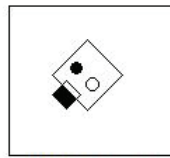


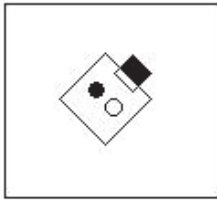
FIGURE 3



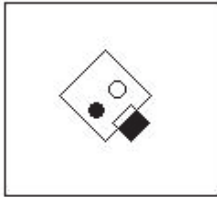
FIGURE 4

Ans

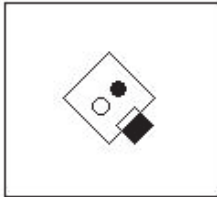
1.



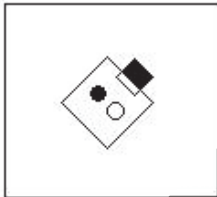
2.



3.



4.



Teachingninja.in

Question ID : 8161611638
Status : Answered
Chosen Option : 2

Q.3 In a certain code language, SUM is coded as 62 and POT is coded as 66. How will HULK be coded as in that language?

Ans 1. 132

2. 130

3. 120

4. 112

Question ID : 8161611628
Status : Answered
Chosen Option : 2

Q.4 The sum of the ages of 4 friends A, B, C and D is 70 years. What would be the total of their ages 5 years later?

- Ans**
- 1. 90
 - 2. 65
 - 3. 85
 - 4. 75

Question ID : 8161611619
Status : Answered
Chosen Option : 1

Q.5 Four letter-clusters have been given, out of which three are alike in some manner and one is different. Select the odd letter-cluster.

- Ans**
- 1. LMH
 - 2. UVS
 - 3. HIF
 - 4. YZW

Question ID : 8161611634
Status : Answered
Chosen Option : 1

Q.6 If A is the sister of B, C is the father of D, L is the paternal uncle of D and B is the sister of L, then how is A related to D?

- Ans**
- 1. Mother
 - 2. Paternal aunt
 - 3. Sister
 - 4. Paternal grandmother

Question ID : 8161611632
Status : Answered
Chosen Option : 2

Q.7 Select the number that can replace the question mark (?) in the following series.

2, 7, 23, 72, 220, ?

- Ans**
- 1. 500
 - 2. 600
 - 3. 665
 - 4. 472

Question ID : 8161611624
Status : Answered
Chosen Option : 3

Q.8 Select the option that is related to the third word in the same way as the second word is related to the first word.

Needle : Sew :: Auger : ?

- Ans**
- 1. View
 - 2. Feed
 - 3. Dig
 - 4. Bore

Question ID : 8161611630
Status : Answered
Chosen Option : 3

Q.9 Select the correct combination of mathematical signs to replace 'A' sequentially and balance the following equation.

16 A 8 A 6 A 3 A 4

- Ans**
- 1. $\times, =, -, \div$
 - 2. $\div, \times, =, -$
 - 3. $\div, \times, =, \times$
 - 4. $\times, \div, +, =$

Question ID : 8161611620
Status : Answered
Chosen Option : 3

Q.10 Select the option in which the numbers share the same relationship as that shared by the given number-pair.

50 : 357

- Ans**
- 1. 18 : 133
 - 2. 15 : 115
 - 3. 17 : 136
 - 4. 20 : 153

Question ID : 8161611621
Status : Answered
Chosen Option : 1

Q.11 Four words have been given, out of which three are alike in some manner and one is different. Select the odd one.

- Ans**
- 1. Stag
 - 2. Larva
 - 3. Nymph
 - 4. Foal

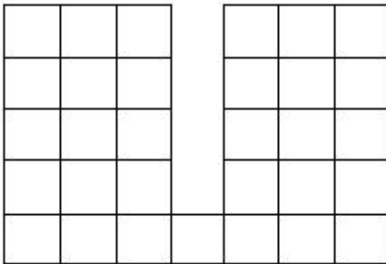
Question ID : 8161611635
Status : Answered
Chosen Option : 1

Q.12 The six faces of a dice have been marked with the letters A, B, C, D, E and F. If A is adjacent to B, C and E, then which of the following statements is true?

- Ans
- 1. A is adjacent to D.
 - 2. A is adjacent to F.
 - 3. B is adjacent to E.
 - 4. D is adjacent to F.

Question ID : 8161611637
Status : Answered
Chosen Option : 4

Q.13 How many squares are there in the following figure?



- Ans
- 1. 39
 - 2. 53
 - 3. 48
 - 4. 60

Question ID : 8161611639
Status : Answered
Chosen Option : 3

Q.14 Study the given pattern carefully and select the number that can replace the question mark (?) in it.

26	25	?
4 6	7 1	5 3

- Ans
- 1. 17
 - 2. 19
 - 3. 24
 - 4. 22

Question ID : 8161611623
Status : Answered
Chosen Option : 3

Q.15 Arrange the given words in a logical and meaningful sequence.

1. Sun
2. Asteroid
3. Planet
4. Galaxy

- Ans
- 1. 4, 1, 3, 2
 - 2. 3, 1, 4, 2
 - 3. 2, 3, 4, 1
 - 4. 4, 1, 3, 2

Question ID : 8161611626
Status : Answered
Chosen Option : 4

Q.16 Select the combination of letters that when sequentially placed in the blanks of the given letter series will complete the series.

_ _ m _ o z n z _ _ n o _ _ z z m

- Ans
- 1. zznzmzn
 - 2. zznznzm
 - 3. nznznzn
 - 4. znzmznn

Question ID : 8161611631
Status : Answered
Chosen Option : 1

Q.17 Four number-pairs have been given, out of which three are alike in some manner and one is different. Select the number-pair that is different from the rest.

- Ans
- 1. 198 : 981
 - 2. 132 : 321
 - 3. 246 : 426
 - 4. 954 : 549

Question ID : 8161611625
Status : Answered
Chosen Option : 3

Q.18 Select the option in which the numbers are related in the same way as are the numbers in the given set.

(12, 96, 8)

- Ans**
- 1. (7, 63, 9)
 - 2. (15, 50, 5)
 - 3. (8, 40, 6)
 - 4. (13, 39, 4)

Question ID : **8161611622**
Status : **Answered**
Chosen Option : **1**

Q.19 Select the option in which the words share the same relationship as that shared by the given pair of words.

Cow : Byre

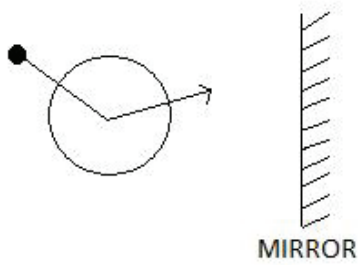
- Ans**
- 1. Owl : Barn
 - 2. Stag : Doe
 - 3. Nun : Monk
 - 4. Rat : Rodent

Question ID : **8161611633**
Status : **Answered**
Chosen Option : **1**



TeachingNinja.in

Q.20 Select the correct mirror image of the given figure.



Ans

- 1.
- 2.
- 3.
- 4.



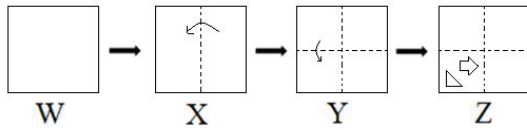
Teachingninja.in

Question ID : 8161611642

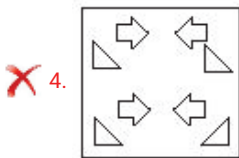
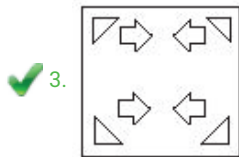
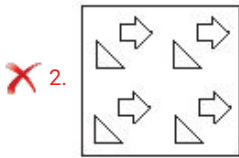
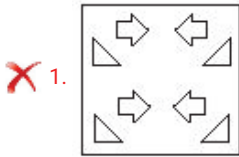
Status : Answered

Chosen Option : 3

Q.21 The sequence of folding a paper and the manner in which the folded paper has been cut is shown in the following figures. How would this paper look when unfolded?



Ans



Question ID : 8161611641
 Status : Answered
 Chosen Option : 3

Q.22 Select the option that is related to the third letter-cluster in the same way as the second letter-cluster is related to the first letter-cluster.

CELH : GANF :: BUPO : ?

1. HUML

2. XYNQ

3. FQRM

4. DYXH

Question ID : 8161611629
 Status : Answered
 Chosen Option : 3

Q.23 Read the given statements and conclusions carefully. Assuming that the information given in the statements is true, even if it appears to be at variance with commonly known facts, decide which of the given conclusions logically follow from the statements.

Statements:

1. Some buns are tarts
2. All tarts are pastries.
3. All pastries are breads.

Conclusions:

- I. Some breads are buns.
- II. Some pastries are buns.
- III. Some tarts are buns.
- IV. Some buns are breads.

- Ans**
- 1. Only conclusions I and IV follow.
 - 2. Only conclusions II and III follow.
 - 3. All the conclusions follow.
 - 4. Only conclusions I and II follow.

Question ID : 8161611636
Status : Answered
Chosen Option : 3

Q.24 In a certain code language, 'JACKET' is written as 'MEHQLB'. How will 'BLAZER' be written as in that language?

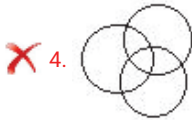
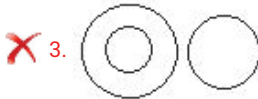
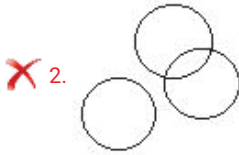
- Ans**
- 1. EPFFLZ
 - 2. DOEFLZ
 - 3. DQPGLY
 - 4. EQFGLY

Question ID : 8161611627
Status : Answered
Chosen Option : 1

Q.25 Select the Venn diagram that best represents the relationship between the following classes.

Guitar, Instrument, Thermometer

Ans



Question ID : 8161611643
Status : Answered
Chosen Option : 1

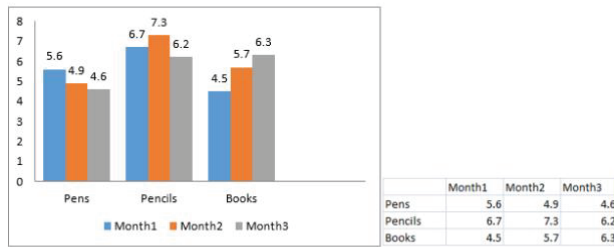
Section : Quantitative Aptitude(Basic Arithmetic Skill)

Q.1 If $\cos x = \frac{3}{5}$, then find the value of $\sin x - \sin^3 x$.

- Ans
- ✗ 1. 0.476
 - ✓ 2. 0.288
 - ✗ 3. 0.358
 - ✗ 4. 0.389

Question ID : 8161611664
Status : Answered
Chosen Option : 2

Q.2 The following chart shows the sales (in thousands) of pens, pencils and books in month1, month2 and month3. Answer the question based on the chart.

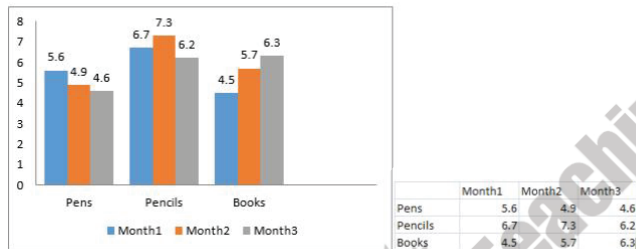


Which product has the highest percentage of sales, and in which month (among all months)?

- Ans**
- 1. Pens; Month 1
 - 2. Pencils; Month 2
 - 3. Pencils; Month 3
 - 4. Books; Month 3

Question ID : **8161611668**
 Status : **Answered**
 Chosen Option : **2**

Q.3 The following chart shows the sales (in thousands) of pens, pencils and books in month1, month2 and month3. Answer the question based on the chart.



Which month has the highest sales?

- Ans**
- 1. Month 1 and Month 3
 - 2. Month 1
 - 3. Month 3
 - 4. Month 2

Question ID : **8161611666**
 Status : **Answered**
 Chosen Option : **4**

Q.4 The perimeter of an isosceles triangle is 90 cm. If the base is 26 cm, then find the length of the equal sides.

- Ans**
- 1. 42 cm
 - 2. 32 cm
 - 3. 30 cm
 - 4. 40 cm

Question ID : **8161611655**
 Status : **Answered**
 Chosen Option : **2**

Q.5 The shadow of a tree is $\frac{1}{\sqrt{3}}$ times the length of the tree. Find the angle of elevation.

- Ans
- 1. 30°
 - 2. 90°
 - 3. 45°
 - 4. 60°

Question ID : 8161611663
Status : Answered
Chosen Option : 4

Q.6 If $\sin\theta = 0.96$, then find $\cot\theta$.

- Ans
- 1. 0.2916
 - 2. 0.4563
 - 3. 0.4876
 - 4. 0.3456

Question ID : 8161611662
Status : Answered
Chosen Option : 1

Q.7 If $2(a^2 + b^2) = (a + b)^2$ then,

- Ans
- 1. $a = b$
 - 2. $b = 2a$
 - 3. $a = 2b$
 - 4. $a = -b$

Question ID : 8161611657
Status : Answered
Chosen Option : 1

Q.8 The average salary of a person for the months of February, March, April and May is ₹12,000, and that for the months March, April, May and June is ₹3,000. If his salary for the month of June is ₹8,000, then what is his salary for the month of February?

- Ans
- 1. ₹4,500
 - 2. ₹5,500
 - 3. ₹4,000
 - 4. ₹5,000

Question ID : 8161611647
Status : Answered
Chosen Option : 3

Q.9 A train covers a distance in 30 min if it runs at a speed of 54 km/h on an average. The speed at which the train must run to reduce the time of the journey to 20 min is:

- Ans
- 1. 60 km/h
 - 2. none of these
 - 3. 81 km/h
 - 4. 75 km/h

Question ID : 8161611645
Status : Answered
Chosen Option : 3

Q.10 In an isosceles right-angled triangle, the perimeter is 30 m. Find its area (Approximate)

- Ans
- 1. 38.63 m²
 - 2. 40 m²
 - 3. 39.60 m²
 - 4. 37.86 m²

Question ID : 8161611656
Status : Answered
Chosen Option : 3

Q.11 Which of the following options is divisible by 3?

- Ans
- 1. 3745932
 - 2. 4539763
 - 3. 2362735
 - 4. 6342589

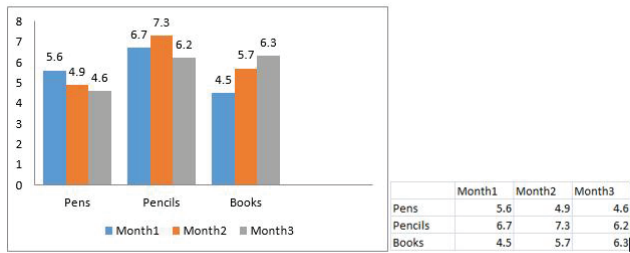
Question ID : 8161611660
Status : Answered
Chosen Option : 1

Q.12 If $x^3 + y^3 = 16$ and $x + y = 4$, then find the value of $x^4 + y^4$.

- Ans
- 1. 26
 - 2. 28
 - 3. 36
 - 4. 32

Question ID : 8161611658
Status : Answered
Chosen Option : 4

Q.13 The following chart shows the sales (in thousands) of pens, pencils and books in month1, month2 and month3. Answer the question based on the chart.



What is the average number of pens sold in the 3 months?

- Ans**
- 1. 3987
 - 2. 4935
 - 3. 5033
 - 4. 5432

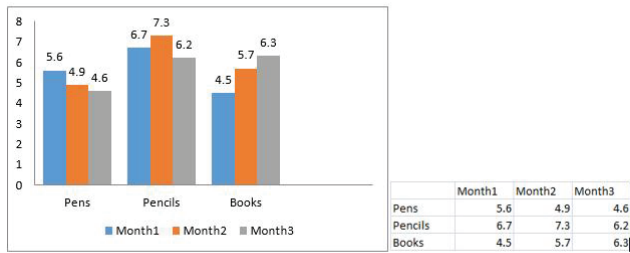
Question ID : 8161611667
 Status : Answered
 Chosen Option : 3

Q.14 P can do a work in 10 days and Q can do the same work in 15 days. If they work on it together for 3 days, then the fraction of the work that is left is:

- Ans**
- 1. $\frac{1}{2}$
 - 2. $\frac{1}{3}$
 - 3. $\frac{2}{3}$
 - 4. $\frac{4}{3}$

Question ID : 8161611644
 Status : Answered
 Chosen Option : 1

Q.15 The following chart shows the sales (in thousands) of pens, pencils and books in month1, month2 and month3. Answer the question based on the chart.



Which product has the highest sales in all 3 months?

- Ans**
- 1. Pens and Books
 - 2. Books
 - 3. Pens
 - 4. Pencils

Question ID : 8161611665
Status : Answered
Chosen Option : 1

Q.16 The length of a rectangular plot is five times of its breadth. If the area of the rectangular plot is 2000 m^2 , then what is the breadth of the rectangular plot?

- Ans**
- 1. 10 m
 - 2. 20 m
 - 3. 30 m
 - 4. 40 m

Question ID : 8161611646
Status : Answered
Chosen Option : 2

Q.17 In an election, candidate X got 70% of the overall valid votes. If 20% of the overall votes were declared invalid and the total numbers of votes is 640000, then find the number of valid votes polled in favour of the candidate.

- Ans**
- 1. 400000
 - 2. 358000
 - 3. 450000
 - 4. 358400

Question ID : 8161611649
Status : Answered
Chosen Option : 4

Q.18 A single discount equivalent to the discount series of 25%, 15% and 10% is:

- Ans
- 1. 25%
 - 2. 30%
 - 3. 42.6%
 - 4. 40.2%

Question ID : 8161611648
Status : Answered
Chosen Option : 3

Q.19 Two numbers are respectively 25% and 60% more than a third number. The ratio of the two numbers is:

- Ans
- 1. 21 : 31
 - 2. 20 : 35
 - 3. 20 : 30
 - 4. 25 : 32

Question ID : 8161611651
Status : Answered
Chosen Option : 4

Q.20 Find the value of x , if $21^{\sqrt{x}} + 20^{\sqrt{x}} = 29^{\sqrt{x}}$.

- Ans
- 1. 2
 - 2. 3
 - 3. 0
 - 4. 4

Question ID : 8161611659
Status : Answered
Chosen Option : 4

Q.21 A tradesman marks his products 35% above the cost price and allows his customers 15% reduction on their bills. What percentage of profit does he make?

- Ans
- 1. 14.25
 - 2. 14
 - 3. 14.75
 - 4. 14.10

Question ID : 8161611650
Status : Answered
Chosen Option : 3

Q.22 A person borrows ₹7,000 for 3 years at 5% p.a. simple interest. He immediately lends it to another person at $6\frac{1}{3}\%$ p.a for 3 years. Find his gain in the transaction per year.

- Ans
- 1. ₹92
 - 2. ₹95.33
 - 3. ₹93.33
 - 4. ₹90

Question ID : 8161611652
Status : Answered
Chosen Option : 3

Q.23 Two circles with the same centre P have radii 7.5 cm and 4.4 cm. Through a point A of the larger circle, a tangent is drawn to the smaller circle touching it at B. Find AC (Approximate in cm).

- Ans
- 1. 13 cm
 - 2. 14 cm
 - 3. 14.27 cm
 - 4. 12.14 cm

Question ID : 8161611653
Status : Answered
Chosen Option : 4

Q.24 The value of $1 + 3 + 5 + 7 + \dots (2n - 1)$ is:

- Ans
- 1. $(2n - 1) \times (2n - 1)$
 - 2. $\frac{n}{2}$
 - 3. $\frac{n(n + 1)}{2}$
 - 4. $n \times n$

Question ID : 8161611661
Status : Answered
Chosen Option : 1

Q.25 Two small circular grounds of diameters 42 m and 26 m are to be replaced by a bigger circular ground. What would be the radius of the new ground if the new ground has the same area as the two small grounds?

- Ans
- 1. 23 m
 - 2. 25.01 m
 - 3. 24.69 m
 - 4. 25 m

Question ID : 8161611654
Status : Answered
Chosen Option : 3

Q.1 Name the filmmaker who made the Hindi film, 'Chhapaak', based on the story of an acid attack victim.

- Ans
- 1. Deepika Padukone
 - 2. Meghna Gulzar
 - 3. Rani Mukherji
 - 4. Yash Chopra

Question ID : 8161611673
Status : Answered
Chosen Option : 2

Q.2 Kudankulam Nuclear Power Plant in Tamil Nadu is set up in collaboration with:

- Ans
- 1. France
 - 2. Australia
 - 3. US
 - 4. Russia

Question ID : 8161611675
Status : Answered
Chosen Option : 4

Q.3 Who won the 'ICC Cricketer of the Year', 'ICC Test Player of the Year' and 'ICC ODI Player of the Year' in 2018?

- Ans
- 1. Shikhar Dhawan
 - 2. Rishabh Pant
 - 3. Rohit Sharma
 - 4. Virat Kohli

Question ID : 8161611691
Status : Answered
Chosen Option : 4

Q.4 Through a smart movement using a pawn, Himat Masani outshone grandmaster NR Visakh. Which game are we talking about?

- Ans
- 1. Shooting
 - 2. Chess
 - 3. Carrom
 - 4. Table Tennis

Question ID : 8161611693
Status : Answered
Chosen Option : 2

Q.5 Which of the following is the SI unit of thermodynamic temperature?

- Ans
- 1. Kelvin
 - 2. Fahrenheit
 - 3. Radian
 - 4. Celsius

Question ID : 8161611678
Status : Answered
Chosen Option : 1

Q.6 Who is known as the 'Father of the Nation' in India?

- Ans
- 1. Bhim Rao Ambedkar
 - 2. Mohandas Karamchand Gandhi
 - 3. Swami Vivekananda
 - 4. Mahadev Govind Ranade

Question ID : 8161611687
Status : Answered
Chosen Option : 2

Q.7 In which of the following place, are the Dilwara temples of Jainism located?

- Ans
- 1. Indore
 - 2. Bhubaneswar
 - 3. Jaipur
 - 4. Mount Abu

Question ID : 8161611671
Status : Answered
Chosen Option : 1

Q.8 Identify the INCORRECT statement about Public Distribution System (PDS) in India.

- Ans
- 1. Those living below poverty line get food grains at subsidised prices.
 - 2. PDS has been abandoned in the country since 2007.
 - 3. From 1997, PDS became TPDS for targeted consumers.
 - 4. PDS was envisaged in 1967 as a price support programme to help consumers.

Question ID : 8161611677
Status : Answered
Chosen Option : 2

Q.9 Identify the correctly matched pair of the founder and the social/socio-religious organisation founded.

- Ans
- 1. Raja Ram Mohan Ray – Arya Samaj
 - 2. Rama Krishna Paramahansa – Ramakrishna Mission
 - 3. Dayanand Saraswati – Brahmo Samaj
 - 4. Swami Vivekananda – Ramakrishna Mission

Question ID : 8161611686
Status : Answered
Chosen Option : 4

Q.10 Who is the head of the government of a state in India?

- Ans
- 1. Prime Minister
 - 2. Governor
 - 3. Chief Minister
 - 4. Speaker of the Assembly

Question ID : 8161611690
Status : Answered
Chosen Option : 3

Q.11 Which part of a plant cell traps sunlight to make sugar?

- Ans
- 1. Leucoplast
 - 2. Chromoplast
 - 3. Chloroplast
 - 4. Starch grain

Question ID : 8161611679
Status : Answered
Chosen Option : 3

Q.12 The first Education Minister of Independent India was _____.

- Ans
- 1. Abul Kalam Azad
 - 2. Triguna Sen
 - 3. Pranab Mukherjee
 - 4. Indira Gandhi

Question ID : 8161611689
Status : Answered
Chosen Option : 1

Q.13 Which unit of the computer is considered as the brain of the computer?

- Ans
- 1. Input unit
 - 2. CPU
 - 3. Memory unit
 - 4. Output unit

Question ID : 8161611669
Status : Answered
Chosen Option : 2

Q.14 In which year did Lord Curzon order the partition of Bengal?

- Ans
- 1. 1945
 - 2. 1905
 - 3. 1915
 - 4. 1930

Question ID : 8161611685
Status : Answered
Chosen Option : 3

Q.15 In which state of India does the sunrise first appear?

- Ans
- 1. Arunachal Pradesh
 - 2. West Bengal
 - 3. Meghalaya
 - 4. Odisha

Question ID : 8161611684
Status : Answered
Chosen Option : 4

Q.16 Sankranti, the harvest festival, is celebrated in the month of Magh of the Hindu calendar and is known by different names in different parts of India. What is it called in Gujarat?

- Ans
- 1. Uttarayan
 - 2. Pana Sankranti
 - 3. Lohri
 - 4. Maghi

Question ID : 8161611672
Status : Answered
Chosen Option : 2

Q.17 What is the chemical name of the salt found abundantly in seawater?

- Ans
- 1. Sodium Tartrate
 - 2. Sodium Acetate
 - 3. Sodium Chloride
 - 4. Sodium Nitrite

Question ID : 8161611681
Status : Answered
Chosen Option : 3

Q.18 When did the Prime Minister of India declare the country as 'Open Defecation Free'?

- Ans
- 1. 67th Republic day
 - 2. 72nd Independence day
 - 3. Mahatma Gandhi's 150th birth anniversary
 - 4. Mahatma Gandhi's 70th death anniversary

Question ID : 8161611674
Status : Answered
Chosen Option : 2

Q.19 Which of the following options correctly defines a firewall (in the context of computing)?

- Ans
- 1. It is a hardware device.
 - 2. It is a combination of software and hardware-based devices to permit any and every network transmission.
 - 3. It is a combination of both, software and hardware devices to permit or deny network transmission based on a set of rules.
 - 4. It is the name of a software.

Question ID : 8161611670
Status : Answered
Chosen Option : 4

Q.20 Pablo Picasso, Claude Monet, Salvador Dali, Vincent Van Gogh were famous for their_____.

- Ans
- 1. social work
 - 2. artwork
 - 3. western music
 - 4. ballet performances

Question ID : 8161611688
Status : Answered
Chosen Option : 2

Q.21 To scale Mount Everest, mountaineers need to go to _____.

- Ans
- 1. Bhutan
 - 2. Nepal
 - 3. Afghanistan
 - 4. Myanmar

Question ID : 8161611682
Status : Answered
Chosen Option : 2

Q.22 The pH of a liquid was found to be 7. Which liquid is it likely to be?

- Ans
- 1. Saline
 - 2. Alkali
 - 3. Water
 - 4. Acid

Question ID : 8161611680
Status : Answered
Chosen Option : 3

Q.23 In which year was the Soil Survey of India established to carry out scientific surveys of soils?

- Ans
- 1. 1947
 - 2. 1950
 - 3. 1962
 - 4. 1956

Question ID : 8161611683
Status : Answered
Chosen Option : 3

Q.24 With which of the following sports/games is Smriti Mandhana associated?

- Ans
- 1. Table Tennis
 - 2. Hockey
 - 3. Lawn Tennis
 - 4. Cricket

Question ID : 8161611692
Status : Answered
Chosen Option : 1

Q.25 Which of the following is the apex banking institution of India that regulates the monetary policy?

- Ans
- 1. State Bank of India
 - 2. Bank of India
 - 3. Reserve Bank of India
 - 4. Axis Bank

Question ID : 8161611676

Status : Answered

Chosen Option : 1



Teachingninja.in