



Teachingninja.in

DSSSB PRT 29 Mar 2022 Shift 2 Paper

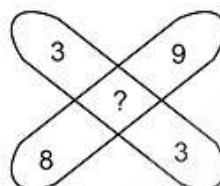
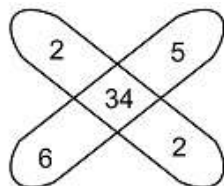
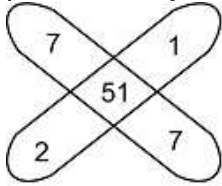
- ★ Latest Govt Job updates
- ★ Private Job updates
- ★ Free Mock tests available

Visit - teachingninja.in

Test Date	29/03/2022
Test Time	12:30 PM - 2:30 PM
Subject	ASSISTANT TEACHER PRIMARY

Section : Mental Ability

Q.1 Which of the given options fits correctly in the blank space to exhibit the similar pattern shown by the three sets below?



- Ans
- A. 75
 - B. 81
 - C. 26
 - D. 61

Question ID : 75322913375

Q.2 Select the option that is related to the third term on the same basis as the second term is related to the first term.
A2B : F42G :: I90J : ?

- Ans
- A. L156M
 - B. P272Q
 - C. O240P
 - D. N210O

Question ID : 75322913367

Q.3 Eight friends P through W are sitting around a circular table facing the centre. P, Q and R are sitting at alternate places with P in the middle. S is sitting just opposite of P. T is sitting to the immediate right of Q. U is sitting in between T and S. W is sitting to the immediate left of R. Who is sitting to the opposite of T?

- Ans
- A. P
 - B. U
 - C. R
 - D. W

1034357197

Question ID : 75322913371

Q.4 In this question, two statements have been given followed by two conclusions numbered I and II. Assuming that all information in the statements are true, analyze the two conclusions together and determine whether any of them logically and definitely follow(s) from the information given in the statements.

Statement I: All pens are highlighters.
Statement II: No highlighter is marker.

Conclusion I: All markers are highlighters.
Conclusion II: Some pens are markers.

- Ans A. Only II follows
 B. Only I follows
 C. Neither I nor II follows
 D. Both I and II follows

Question ID : 75322913372

Q.5 Naman travelled a distance of 75 m towards north, then turned to left and walked for 15 m. He again turned to his left and continued walking. In which direction was he finally moving?

- Ans A. South
 B. North
 C. South-East
 D. South-West

Question ID : 75322913378

Q.6 'L × M' का अर्थ है कि L, M की पत्नी है।
'L - M' का अर्थ है कि L, M का भाई है।
यदि 'P × Q - R', निम्नलिखित में से कौन सा असत्य है?

- Ans A. Q, P का पति है
 B. P, R के भाई की पत्नी है।
 C. Q और R सहोदर हैं
 D. R, P का पति है

Question ID : 75322913370

Q.7 Out of the given options, three are similar in a certain manner. However, one option is NOT like the other three. Select the option which is different from the rest.




Image A

Image B

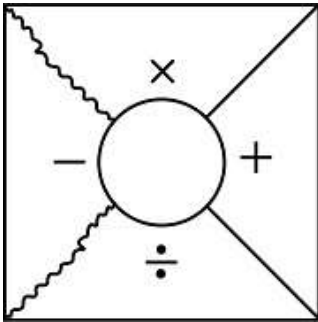
Image C

Image D

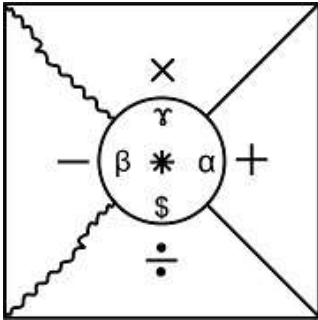
- Ans A. Image C
 B. Image B
 C. Image A
 D. Image D

Question ID : 75322913380

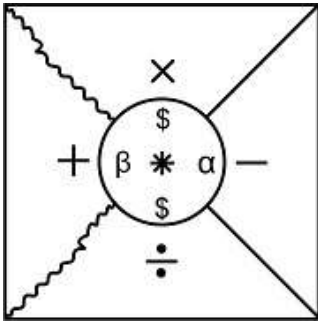
Q.8 From the given answer figures, select the one in which the question figure is hidden/embedded.



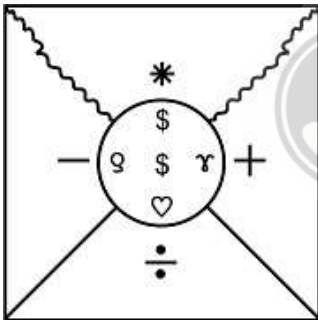
Ans A. D
IMAGE



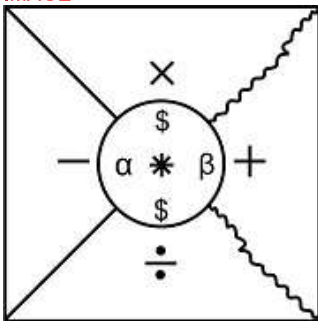
B. A
IMAGE



C. C
IMAGE



D. B
IMAGE



Question ID : 75322913381

Q.9 If $S = 6$, $T = 3$, $U = 8$ and $V = 96$, then $V \div U \times T + S = ?$

- Ans A. 42
 B. 64
 C. 18
 D. 12

Question ID : 75322913374

Q.10 Find the wrong term in the following letter series:
BUDE, ESFH, HQHK, KOJN, OMLP

- Ans A. ESFH
 B. KOJN
 C. HQHK
 D. OMLP

Question ID : 75322913364

Q.11 Six Friends Peter, Jack, Jill, Patrick, Sam and Andrew are sitting on circular table facing the centre. Jack is sitting to the immediate left of Peter. Jill is sitting to the opposite of Jack. Patrick can't sit adjacent to Jill. Sam is sitting just between Patrick and Jill. Who is sitting to the immediate left of Jack?

- Ans A. Peter
 B. Andrew
 C. Sam
 D. Patrick

Question ID : 75322913369

Q.12 Which one of the following four words in the given options cannot be formed by using the letters of the word 'REASONING'?

- Ans A. SEASON
 B. RESIN
 C. GRIN
 D. NEON

Question ID : 75322913363

Q.13 A watch is positioned in a way that at 4 pm the minute hand points towards North-west direction. In which direction does the hour hand points at 9 pm?

- Ans A. North-East
 B. South-East
 C. South-West
 D. North-West

Question ID : 75322913377

Q.14 Out of the given options, three are similar in a certain manner. However, one option is NOT like the other three. Select the option which is different from the rest.

- Ans A. Shampoo
 B. After Shave Lotion
 C. Shaving Cream
 D. Razor

Question ID : 75322913365

Q.15 In a certain code language, 'BAT' is written as 'YZG'. How will 'STRANGLE' be written in same code?

- Ans
- A. HGEZMTUV
 - B. HJIZMTUV
 - C. HGIZNTRV
 - D. HGIZMTOV

Question ID : 75322913368

Q.16 In this question, three statements have been given followed by two conclusions numbered I and II. Assuming that all information in the statements are true, analyze the two conclusions together and determine whether any of them logically and definitely follow(s) from the information given in the statements.

Statement I: Some models are actors.

Statement II: All actors are artists.

Statement III: Some artists are beauticians.

Conclusion I: Some models are beauticians.

Conclusion II: Some artists are models.

- Ans
- A. Only II follows
 - B. Neither I nor II follows
 - C. Only I follows
 - D. Both I and II follows

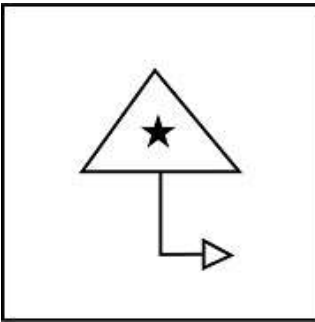
Question ID : 75322913373

Q.17 Select the option that is related to the third term on the same basis as the second term is related to the first term:
BRAG : CQBF :: RIFT : ?

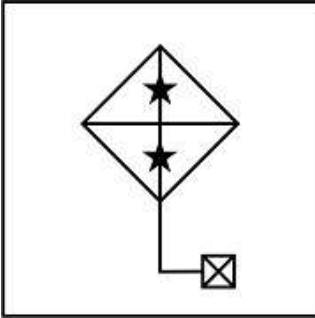
- Ans
- A. SHGS
 - B. QJEU
 - C. SJGU
 - D. QHES

Question ID : 75322913366

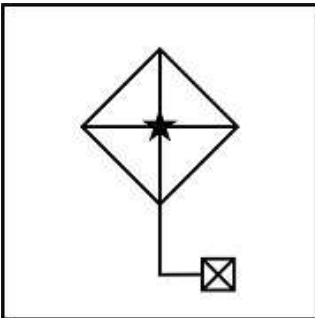
Q.18 From the given answer figures, select the one in which the question figure is hidden/embedded.



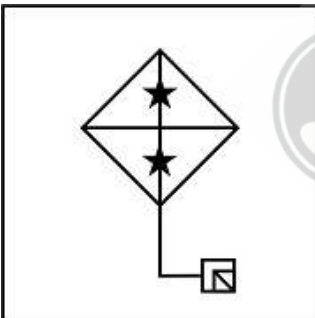
Ans A, B
IMAGE



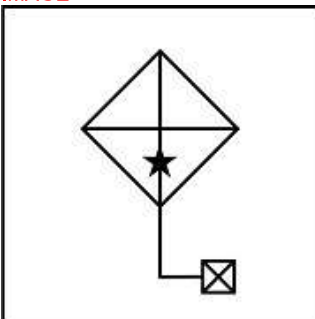
B, A
IMAGE



C, D
IMAGE



D, C
IMAGE



Question ID : 75322913382

Q.19 Out of the given options, three are similar in a certain manner. However, one option is NOT like the other three. Select the option which is different from the rest.

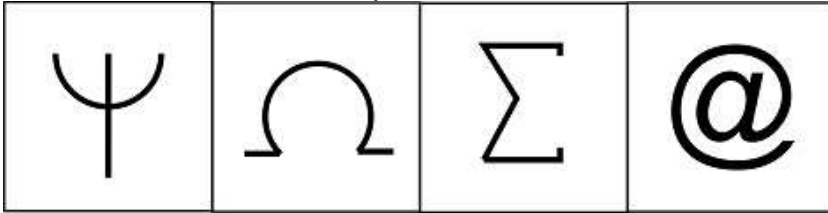


Image A

Image B

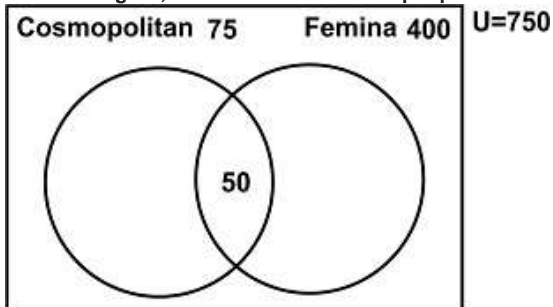
Image C

Image D

- Ans A. Image D
 B. Image A
 C. Image B
 D. Image C

Question ID : 75322913379

Q.20 From the figure, find out the number of people who do not read any magazine.



- Ans A. 275
 B. 225
 C. 300
 D. 325

Question ID : 75322913376

Section : General Awareness

Q.1 The India-Bangladesh Friendship Pipeline Project will connect Siliguri to which of the following cities in Bangladesh?

- Ans A. Khulna
 B. Parbatipur
 C. Sylhet
 D. Chittagong

Question ID : 75322913392

Q.2 The Peace Treaty between Rana Amar Singh I and Jehangir was signed in the year _____.

- Ans A. 1605
 B. 1620
 C. 1610
 D. 1615

Question ID : 75322913394

Q.3 Myanmar is how many minutes ahead of India with respect to time zones?

- Ans A. 45 minutes
 B. 60 minutes
 C. 90 minutes
 D. 30 minutes

Question ID : 75322913390

Q.4 निम्नलिखित में से कौन सा परिवर्तन भारत के संविधान के दूसरे संशोधन द्वारा किया गया था?

- Ans A. संसदीय निर्वाचन क्षेत्र के लिए ऊपरी जनसंख्या सीमा को हटाया गया।
 B. अनुसूची 9 का परिचय
 C. समवर्ती सूची में संशोधन
 D. संपत्ति अधिकार पर प्रतिबंध

Question ID : 75322913400

Q.5 In which year did Sania Mirza win her first Grand Slam title?

- Ans A. 2006
 B. 2009
 C. 2008
 D. 2007

Question ID : 75322913401

Q.6 The Carnival in Goa is held during which month?

- Ans A. February-March
 B. November-December
 C. October-November
 D. April-May

Question ID : 75322913383

Q.7 Who among the following is the author of the Brihat Samhita?

- Ans A. Varahamihira
 B. Kalhana
 C. Aśvaghoṣa
 D. Panini

Question ID : 75322913395

Q.8 The Human Right to Water and Sanitation was recognised by the United Nations in the year _____.

- Ans A. 2010
 B. 2008
 C. 2011
 D. 2009

Question ID : 75322913389

Q.9 The term Kankar with regards to soil refers to:

- Ans A. presence of nodular Calcium Carbonate.
 B. deposition by wind activities.
 C. dead, organic matter present in soil.
 D. deficiency of Nitrogen, Potash, Lime and Humus.

Question ID : 75322913391

Q.10 The Economic Survey of 2021-22 (India) has allotted what amount for the forthcoming census?

- Ans A. INR 4828 Crore
 B. INR 3768 Crore
 C. INR 5225 Crore
 D. INR 2500 Crore

Question ID : 75322913386

Q.11 The Madai Festival is popularly associated with which state?

- Ans A. Uttarakhand
 B. Chhattisgarh
 C. Andhra Pradesh
 D. Assam

Question ID : 75322913384

Q.12 The Narcotic drugs and Psychotropic Substances Act in India was passed in which year?

- Ans A. 1985
 B. 1978
 C. 1980
 D. 1976

Question ID : 75322913399

Q.13 The Union Budget of 2021-22 announced setting up of which of the following programmes to boost the digital architecture of the country?

- Ans A. National Digital Education Architecture (NDEAR)
 B. Bharat Broadband Network (BBNL)
 C. Centre for Excellence for Internet of Things (CoE-IT)
 D. Digital Saksharta Abhiyaan (DISHA)

Question ID : 75322913385

Q.14 Who is the current Permanent Representative of India to the UN as of August 2021?

- Ans A. Vikas Swarup
 B. Syed Akbaruddin
 C. Nirupam Sen
 D. T.S. Tirumurti

Question ID : 75322913397

Q.15 India is not a founding member of which of the following organisations?

- Ans
- A. Asian Development Bank
 - B. Food and Agriculture Organisation of the United Nations
 - C. Colombo Plan
 - D. International Maritime Organization

Question ID : 75322913396

Q.16 Medicine derived from the cinchona bark is used for treating which illness?

- Ans
- A. Typhoid
 - B. Cholera
 - C. Tuberculosis
 - D. Malaria

Question ID : 75322913388

Q.17 The regnal title of "Jahangir" was adopted by which Mughal emperor?

- Ans
- A. Shahab-ud-din Muhammad Khurram
 - B. Muhi-ud-din Muhammad
 - C. Nur-ud-din Muhammad Salim
 - D. Jalal-ud-din Muhammad

Question ID : 75322913393

Q.18 Indian Olympian Sajan Prakash represents India in which of the following sports?

- Ans
- A. Athletics
 - B. Weight Lifting
 - C. Boxing
 - D. Swimming

Question ID : 75322913402

Q.19 Water stored in which of the following metal vessels helps with the decontamination of water creating a natural purification process?

- Ans
- A. Copper
 - B. Iron
 - C. Lead
 - D. Brass

Question ID : 75322913387

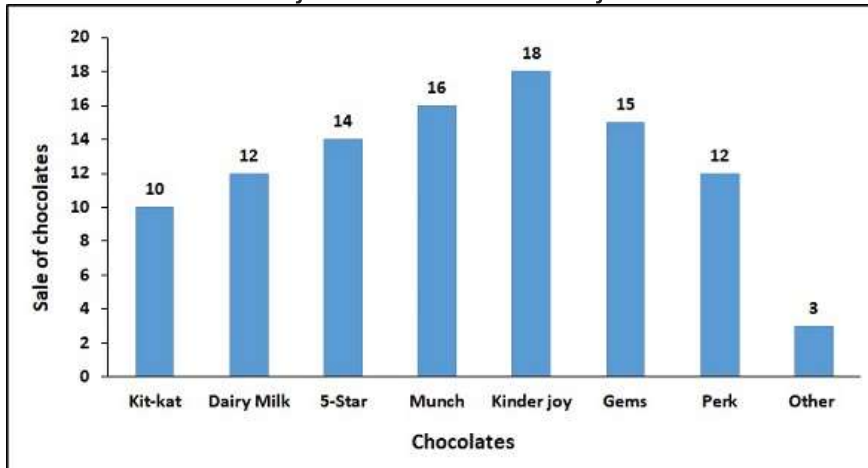
Q.20 Which of the following achievements can be attributed to Vikram Sarabhai?

- Ans
- A. Contribution to Magneto chemistry and physical chemistry.
 - B. Contributions to quantum theory and cosmic radiation.
 - C. Starting a project for the fabrication and launch of an India satellite.
 - D. Discovering a formula that helps to analyse the structure and evolution of celestial objects.

Question ID : 75322913398

Section : Arithmetic Ability

Q.1 Sales of chocolates on any day of shop is represented by graph. On certain day total sale of chocolates were 10000, but due to shortage of supply, the shopkeeper has only 500 Kit-kat available. If Kit-kat is not available then customers chooses to buy Dairy Milk. Find the number of dairy milk chocolates sold that day.



- Ans A. 1300
 B. 1700
 C. 1500
 D. 1200

Question ID : 75322913422

Q.2 The production of wheat and rice in a region are given below. In how many years the production of rice is more than 20% as compared to wheat produced that year?

Year	Wheat (in metric tonnes)	Rice (in metric tonnes)
2015	10	15
2016	15	20
2017	18	22
2018	22	25
2019	25	30
2020	28	34

- Ans A. 2
 B. 5
 C. 4
 D. 3

Question ID : 75322913420

Q.3 Ramesh runs 66.8 kmph. How many metres does he run in five minutes?

- Ans A. 5567 m
 B. 5667 m
 C. 5657 m
 D. 5676 m

Question ID : 75322913415

Q.4 A hollow spherical metallic ball has an internal diameter 19 cm and is 0.5 cm thick. If weight of 10 cubic cm metal is 2 kg then, find the total weight of the ball. (use $\pi = 3,14$)

- Ans A. 119.42kg
 B. 96 kg
 C. 95 kg
 D. 95.266 kg

Question ID : 75322913419

Q.5 Find the missing term of the given expression: $19.678 + 348.91 - ? = 278.63$

- Ans A. 89.958
 B. 68.958
 C. 99.958
 D. 78.895

Question ID : 75322913403

Q.6 What will be the value of 9876543 when divided by 25 ?

- Ans A. 181434.8
 B. 395061.72
 C. 395661.72
 D. 395000

Question ID : 75322913407

Q.7 Find the amount to be paid back on a loan of Rs. 22,500 at 6.5% per annum for 2 years.

- Ans A. Rs.25245
 B. Rs.25425
 C. Rs.23425
 D. Rs.25545

Question ID : 75322913414

Q.8 If $m:n = 2:3$ and $x : y = 4:5$, then the value of $10mx + 4ny : 5mx + 3ny$ is _____.

- Ans A. 28:15
 B. 17:28
 C. 28:17
 D. 15:28

Question ID : 75322913413

Q.9 Difference of two numbers is 2280. If 10.5% of one number is 15.5% of the other number, find the two numbers.

- Ans A. 7086, 4878
 B. 7068, 4788
 C. 7068, 4878
 D. 7086, 4788

Question ID : 75322913410

Q.10 What is the length of the longest rod that can be placed in a room 10 m long, 8 m broad and 6 m high?

- Ans A. $4\sqrt{2}$ m
 B. $10\sqrt{2}$ m
 C. $5\sqrt{2}$ m
 D. $15\sqrt{2}$ m

Question ID : 75322913418

Q.11 Evaluate : 24% of 350 + 35% of 180.

- Ans A. 153
 B. 157
 C. 143
 D. 147

Question ID : 75322913409

Q.12 Find the value of the expression : $(1/2) + (1/6) + (1/12) + (1/20) + (1/30) + (1/42) + (1/56) + (1/72) + (1/90)$.

- Ans A. 0.009
 B. 0.9
 C. 0.0009
 D. 0.09

Question ID : 75322913406

Q.13 A shopkeeper buys 120 T-shirts, each at Rs. 400. He sold 40 T-shirts at 8% profit. If he wants profit to be 10%, then he should sell the remaining T-shirts at what profit percent?

- Ans A. 14%
 B. 13%
 C. 12%
 D. 11%

Question ID : 75322913411

Q.14 What will replace x?. If $(49 \times 14)^3 \div (28 \times 21)^3 \times (54432) \div 36 = 7$ raised to the power x.

- Ans A. 3
 B. 4
 C. 2
 D. 5

Question ID : 75322913404

Q.15 Two men A and B walk from P to Q, a distance of 28 km, at 4kmph and 3 kmph respectively. A reaches Q, returns immediately and meets B at R. The distance from P to R is _____.

- Ans A. 22 km
 B. 28 km
 C. 26 km
 D. 24 km

Question ID : 75322913416

Q.16 The average of salary of all the employees in an organization is Rs 25,000. The average salary of 10 employees is Rs 30,000 and the average salary of the rest is Rs 15,000. The total number of employees in the organisation is _____.

- Ans
- A. 13
 - B. 25
 - C. 15
 - D. 20

Question ID : 75322913408

Q.17 A, B and C can complete a piece of work in 32, 16 and 40 days respectively. Working together, they will complete the same work in _____ days.

- Ans
- A. 190/11
 - B. 160/13
 - C. 160/19
 - D. 190/13

Question ID : 75322913417

Q.18 Evaluate : $[(25 \times 5 - 15) \times \{(10 \div 2) \times \sqrt{1225 - (675 \div 25)}\}]$

- Ans
- A. 16280
 - B. 15480
 - C. 15280
 - D. 16480

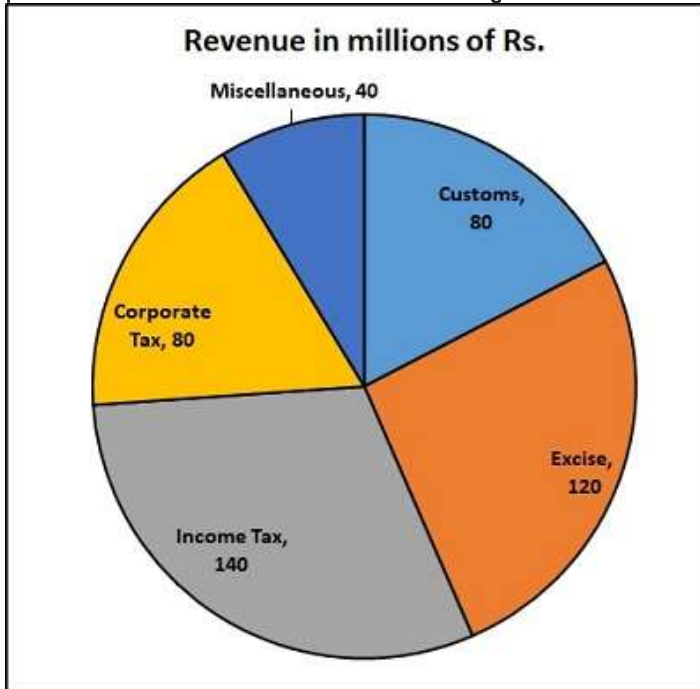
Question ID : 75322913405

Q.19 The monthly income of two persons are in ratio 5:7 and their monthly expenditures are in ratio 5:9. If each saves Rs. 1500 per month, find their monthly incomes.

- Ans
- A. Rs.3600 & Rs. 4000
 - B. Rs. 3000, & Rs. 4000
 - C. Rs. 3000 & Rs. 4200
 - D. Rs.2500 & Rs. 4200

Question ID : 75322913412

Q.20 Collection of taxes by a Government in the financial year 2019 - 2020 is shown in the pie chart. Find the difference between central angles of excise and miscellaneous.



- Ans**
- A. 90.2 degree
 - B. 60 degree
 - C. 90 degree
 - D. 62.6 degree

Question ID : 75322913421

Section : General English

Q.1 Select the word segment that substitutes (replaces) the bracketed word segment correctly and completes the sentence meaningfully. Select the option 'no correction required' if the sentence is correct as given.

Airspace (remained largely closed in Netherlands and Germany).

- Ans**
- A. remains largely closed in the Netherlands and the Germany
 - B. remained largely closed in the Netherlands and Germany
 - C. No correction required
 - D. remains largely closed in Netherlands and Germany

Question ID : 75322913426

Q.2 Four words are given, out of which only one word is spelt correctly. Choose the correctly spelt word.

- Ans**
- A. propriety
 - B. propariety
 - C. propriaty
 - D. propriety

Question ID : 75322913433

Q.3 The sentence below has been divided into three parts. Select the part of the sentence that has an error. If the sentence has no error, select the option 'No Error'.

But hardly did she reach/ the county seat when/ she was arrested and put in jail.

- Ans
- A. she was arrested and put in jail.
 - B. the county seat when
 - C. No Error
 - D. But hardly did she reach

Question ID : 75322913423

Q.4 Select the most appropriate 'one word ' for the expressions given below

A person who writes beautiful writing

- Ans
- A. Cartographer
 - B. Choreographer
 - C. Calligrapher
 - D. Cacographer

Question ID : 75322913437

Q.5 Select the word segment that substitutes (replaces) the bracketed word segment correctly and completes the sentence meaningfully. Select the option 'no correction required' if the sentence is correct as given.

(Rivers also provide a means of disposing waste,) and act as a transport medium.

- Ans
- A. Rivers provide a means of disposing the waste,
 - B. No correction required
 - C. Rivers also provide a means of disposing of waste,
 - D. Rivers provide means of disposing waste,

Question ID : 75322913425

Q.6 Fill in the blank with the most appropriate choice

Their _____ credits aside, the two were classic movie-world shady characters.

- Ans
- A. eschew
 - B. erudite
 - C. esoteric
 - D. estimable

Question ID : 75322913427

Q.7 Select the most appropriate meaning of the given idiom/phrase

Add fuel to the fire

- Ans
- A. Whenever something is done to make a bad situation even worse than it is
 - B. To believe someone, even though you might have some doubts
 - C. A peaceful period of time that comes before a more difficult and/or more busy period
 - D. Giving someone news or information that will disappoint them

Question ID : 75322913435

Q.8 The question below consist of a set of labelled (P, Q, R, S) sentences. Out of four options given, select the most logical order of the sentences which form a paragraph.

By the early part of 1939 the German dictator Adolf Hitler had become determined to invade and occupy Poland.

P. In a secret protocol of this pact, the Germans and the Soviets agreed that Poland should be divided between them, with the western third of the country going to Germany and the eastern two-thirds being taken over by the U.S.S.R.

Q. Hitler intended to invade Poland anyway, but first he had to neutralize the possibility that the Soviet Union would resist the invasion of its western neighbour.

R. Poland, for its part, had guarantees of French and British military support should it be attacked by Germany.

S. Secret negotiations led on August 23–24 to the signing of the German-Soviet Nonaggression Pact in Moscow.

Having achieved this cynical agreement, the other provisions of which stupefied Europe even without divulgence of the secret protocol, Hitler thought that Germany could attack Poland with no danger of Soviet or British intervention and gave orders for the invasion to start on August 26.

- Ans
- A. RSPQ
 - B. RQPS
 - C. RPSQ
 - D. RQSP

Question ID : 75322913430

Q.9 Select the most appropriate idiom/phrase of the given meaning

Including nearly everything possible.

- Ans
- A. Every cloud has a silver lining
 - B. Everything but the kitchen sink
 - C. Ever and anon
 - D. Even a broken clock is right twice a day

Question ID : 75322913436

Q.10 Some parts of a sentence have been jumbled up, and labelled P, Q, R and S. Select the option that gives the correct sequence in which these parts can be rearranged to form a meaningful and grammatically correct sentence.

A lot of people
P. one particular
Q. are biased towards
R. most newspapers
S. think that
 political party.

- Ans
- A. SPQR
 - B. SRQP
 - C. PQRS
 - D. RQPS

Question ID : 75322913429

Q.11 Select the word that is similar in meaning (SYNONYM) to the word given below

delirium

- Ans A. indifference
 B. apathy
 C. hysteria
 D. calmness

Question ID : 75322913432

Q.12 Select the word that is opposite in meaning (ANTONYM) to the word given below

aggravate

- Ans A. grate
 B. provoke
 C. exasperate
 D. soothe

Question ID : 75322913431

Q.13 Four words are given, out of which only one word is spelt incorrectly. Choose the incorrectly spelt word.

- Ans A. perasive
 B. pragmatic
 C. plausible
 D. phenomena

Question ID : 75322913434

Q.14 The sentence below has been divided into three parts. Select the part of the sentence that has an error. If the sentence has no error, select the option 'No Error'.

In tropical and sub-tropical/ areas, malaria is one of/ the world's biggest killer.

- Ans A. No Error
 B. In tropical and sub-tropical
 C. areas, malaria is one of
 D. the world's biggest killer.

Question ID : 75322913424

Q.15 Fill in the blank with the most appropriate choice

We can use evidence from the present to _____ about the past.

- Ans A. foment
 B. alight
 C. fluctuate
 D. extrapolate

Question ID : 75322913428

Comprehension:

Read the passage carefully and choose the best answer to each question out of the four alternatives

When schools opened in Texas this fall, some of the favourites were missing from the cafeteria menus. Sodas and candy bars had been banned for grade schoolers, chips and cookies were mini-size and the all time favourite, the French fry, was given just one more year before it too would be banned. Wave of protest could be heard everywhere; and students weren't the only one. All the staff, along with the principal complained about being forced to act as "nutrition police". Parents and kids exchanged schoolyard rumours about Twinkies being confiscated from lunch boxes. Nearly everyone, addicted to the revenues that vending machines bring in, yelled that there wouldn't be enough money for activities like band camp and choir trips. Angry e-mails poured into the mailbox of Susan Combs, who had imposed the new rules.

SubQuestion No : 16

Q.16 According to the passage, which of the following option is incorrect? Choose one option.

- Ans A. The main conspirator in the ban process were the school staff.
- B. Sodas and candy bars were immediately banned when schools across the state reopened.
- C. The protestor ranged from the students and school staff to vending machine operators.
- D. Twinkies was one of the items which was banned.

Question ID : 75322913440

Comprehension:

Read the passage carefully and choose the best answer to each question out of the four alternatives

When schools opened in Texas this fall, some of the favourites were missing from the cafeteria menus. Sodas and candy bars had been banned for grade schoolers, chips and cookies were mini-size and the all time favourite, the French fry, was given just one more year before it too would be banned. Wave of protest could be heard everywhere; and students weren't the only one. All the staff, along with the principal complained about being forced to act as "nutrition police". Parents and kids exchanged schoolyard rumours about Twinkies being confiscated from lunch boxes. Nearly everyone, addicted to the revenues that vending machines bring in, yelled that there wouldn't be enough money for activities like band camp and choir trips. Angry e-mails poured into the mailbox of Susan Combs, who had imposed the new rules.

SubQuestion No : 17

Q.17 Who in the passage is regarded as the "nutrition police"?

- Ans A. Vending machine operators
- B. Susan Combs
- C. The school staff
- D. Parents

Question ID : 75322913442

Comprehension:

Read the passage carefully and choose the best answer to each question out of the four alternatives

When schools opened in Texas this fall, some of the favourites were missing from the cafeteria menus. Sodas and candy bars had been banned for grade schoolers, chips and cookies were mini-size and the all time favourite, the French fry, was given just one more year before it too would be banned. Wave of protest could be heard everywhere; and students weren't the only one. All the staff, along with the principal complained about being forced to act as "nutrition police". Parents and kids exchanged schoolyard rumours about Twinkies being confiscated from lunch boxes. Nearly everyone, addicted to the revenues that vending machines bring in, yelled that there wouldn't be enough money for activities like band camp and choir trips. Angry e-mails poured into the mailbox of Susan Combs, who had imposed the new rules.

SubQuestion No : 18

Q.18 Who was responsible for the ban on the unhealthy and obesity inducing foods?

- Ans
- A. Parents in the country
 - B. The state of Washington
 - C. Principal and school staff
 - D. Susan Combs

Question ID : 75322913443

Comprehension:

Read the passage carefully and choose the best answer to each question out of the four alternatives

When schools opened in Texas this fall, some of the favourites were missing from the cafeteria menus. Sodas and candy bars had been banned for grade schoolers, chips and cookies were mini-size and the all time favourite, the French fry, was given just one more year before it too would be banned. Wave of protest could be heard everywhere; and students weren't the only one. All the staff, along with the principal complained about being forced to act as "nutrition police". Parents and kids exchanged schoolyard rumours about Twinkies being confiscated from lunch boxes. Nearly everyone, addicted to the revenues that vending machines bring in, yelled that there wouldn't be enough money for activities like band camp and choir trips. Angry e-mails poured into the mailbox of Susan Combs, who had imposed the new rules.

SubQuestion No : 19

Q.19 Which of the following item was not removed from the cafeterias when schools across the state reopened in fall?

- Ans
- A. Candy Bars
 - B. Twinkies
 - C. Sodas
 - D. French Fry

Question ID : 75322913441

Comprehension:

Read the passage carefully and choose the best answer to each question out of the four alternatives

When schools opened in Texas this fall, some of the favourites were missing from the cafeteria menus. Sodas and candy bars had been banned for grade schoolers, chips and cookies were mini-size and the all time favourite, the French fry, was given just one more year before it too would be banned. Wave of protest could be heard everywhere; and students weren't the only one. All the staff, along with the principal complained about being forced to act as "nutrition police". Parents and kids exchanged schoolyard rumours about Twinkies being confiscated from lunch boxes. Nearly everyone, addicted to the revenues that vending machines bring in, yelled that there wouldn't be enough money for activities like band camp and choir trips. Angry e-mails poured into the mailbox of Susan Combs, who had imposed the new rules.

SubQuestion No : 20

Q.20 The ban on certain food items in the cafeteria menus was imposed in which state?

- Ans A. Texas
 B. California
 C. Florida
 D. Washington

Question ID : 75322913439

Section : General Hindi

Q.1 निम्नलिखित प्रश्न में, चार विकल्पों में से, उस विकल्प का चयन करें जो दिए गए शब्द के सही संधि-विच्छेद का विकल्प हो।
संरक्षण

- Ans A. सं + आरक्षण
 B. सम् + रक्षण
 C. संर + क्षण
 D. सं + रक्षण

Question ID : 75322913444

Q.2 निम्नलिखित प्रश्न में, चार विकल्पों में से, उस विकल्प का चयन करें जो प्रत्यय से बने शब्द का सही विकल्प हो।

- Ans A. गँवार
 B. चौराहा
 C. अलगरज
 D. नास्तिक

Question ID : 75322913446

Q.3 निम्नलिखित प्रश्न में, चार विकल्पों में से, उस विकल्प का चयन करें जो दिए गए शब्द के लिए सही द्विगु समास के विग्रह का विकल्प हो।
त्रयम्बकेश्वर

- Ans A. तीन का ईश्वर
 B. तीन लोकों का ईश्वर
 C. त्रिकोण वाला ईश्वर
 D. तीन लोकों के लोग

Question ID : 75322913445

Q.4 निम्नलिखित प्रश्न में, चार विकल्पों में से, उस विकल्प का चयन करें जो दिए गए शब्द का स्त्रीलिंग रूप वाला विकल्प है।
चौधरी

- Ans A. चौधरीन
 B. चौधारी
 C. चौधारिन
 D. चौधराइन

Question ID : 75322913451

Q.5 निम्नलिखित प्रश्न में, चार विकल्पों में से, उस विकल्प का चयन करें जो दिए गए वाक्य के अनुसार सर्वनाम के भेद का सही विकल्प है।
मैं (स्वयं) गाड़ी चला सकती हूँ।

- Ans A. प्रश्नवाचक
 B. अनिश्चयवाचक
 C. संबंधवाचक
 D. निजवाचक

Question ID : 75322913453

Q.6 निम्नलिखित प्रश्न में, चार विकल्पों में से, उस विकल्प का चयन करें जो सही वाक्य भेद का विकल्प हो।
जो आदमी समझदार है वह अपने भविष्य का ध्यान रखता है।

- Ans A. सरल वाक्य
 B. मिश्र वाक्य
 C. संयुक्त वाक्य
 D. निषेधवाचक वाक्य

Question ID : 75322913454

Q.7 निम्नलिखित प्रश्न में, चार विकल्पों में से, उस सही विकल्प का चयन करें जो वाक्यांशों के लिए एक शब्द का विकल्प हो।
एक ही समय में उत्पन्न होनेवाला

- Ans A. समसामयिक
 B. समकालीन
 C. सजातीय
 D. मासिक

Question ID : 75322913450

Q.8 निम्नलिखित प्रश्न में, चार विकल्पों में से, उस विकल्प का चयन करें जो दिए गए लोकोक्ति का सही अर्थ वाला विकल्प है।
तीर नहीं तो तुक्का ही सही

- Ans A. पूरा नहीं तो जो कुछ मिल जाए उसी में संतोष करना
 B. काम में व्यर्थ दखल देना
 C. सबसे अलग विचार रखना
 D. अनियंत्रित व्यक्ति का आना

Question ID : 75322913456

Q.9 निम्नलिखित प्रश्न में, चार विकल्पों में से, उस विकल्प का चयन करें जो दी गई मुहावरे का सही अर्थ वाला विकल्प है।
कोल्हू का बैल होना

- Ans A. हर समय श्रम करने वाला
 B. परेशान करना
 C. तैयार होना
 D. चुगली करना

Question ID : 75322913457

Q.10 निम्नलिखित प्रश्न में, चार विकल्पों में से, उस विकल्प का चयन करें जो बहुवचन रूप का सबसे अच्छा विकल्प है।

- Ans A. किशन
 B. बाल
 C. सत्य
 D. आकाश

Question ID : 75322913452

Q.11 निम्नलिखित प्रश्न में, चार विकल्पों में से, उस विकल्प का चयन करें जो विलोम शब्द का सबसे अच्छा विकल्प है।
ओजस्वी

- Ans A. तेजस्वी
 B. बदसूरत
 C. निस्तेज
 D. सुंदर

Question ID : 75322913449

Q.12 निम्नलिखित प्रश्न में, चार विकल्पों में से, उस विकल्प का चयन करें जो दिए गए शब्द-युग्म के सही अर्थ वाला विकल्प हो।
शकल-शक्ल

- Ans A. टुकड़ा-चेहरा
 B. मल-चेहरा
 C. टुकड़ा-लाज
 D. लाज-चेहरा

Question ID : 75322913447

Q.13 निम्नलिखित प्रश्न में, चार विकल्पों में से, उस विकल्प का चयन करें जो दी गई मुहावरे का सही अर्थ वाला विकल्प है।
कुँए में भांग पड़ना

- Ans A. बदल जाना
 B. ज़िम्मेदारी लेना
 C. आँख बचाकर खिसक जाना
 D. सबकी बुद्धि मारी जाना

Question ID : 75322913458

Q.14 निम्नलिखित प्रश्न में, चार विकल्पों में से, उस विकल्प का चयन करें जो दिए गए शब्द के पर्यायवाची शब्द का सही विकल्प नहीं है।
उपमा

- Ans A. मधवा
 B. सादृश्य
 C. समानता
 D. तुलना

Question ID : 75322913448

Q.15 निम्नलिखित प्रश्न में, चार विकल्पों में से, उस विकल्प का चयन करें जो विराम चिह्न युक्त वाक्य का सही विकल्प हो।

- Ans A. अरे वाह! यह सुंदर चित्र किसने बनाया है?
 B. अरे वाह यह सुंदर चित्र किसने बनाया है।
 C. अरे वाह... यह सुंदर चित्र किसने बनाया है?
 D. अरे वाह यह सुंदर चित्र किसने बनाया है?

Question ID : 75322913455

Comprehension:

नीचे दिए गये गद्यांश को ध्यानपूर्वक पढ़ें और चार विकल्पों में से प्रत्येक प्रश्न का सर्वोत्तम उत्तर चुनें।

विद्वानों का यह कथन बहुत ठीक है कि विनम्रता के बिना स्वतंत्रता का कोई अर्थ नहीं। इस बात को सब लोग मानते हैं कि आत्मसंस्कार के लिए थोड़ी-बहुत मानसिक स्वतंत्रता परमावश्यक है-चाहे उस स्वतंत्रता में अभिमान और नम्रता दोनों का मेल हो। यह बात तो निश्चित है कि जो मनुष्य मर्यादापूर्वक जीवन व्यतीत करना चाहता है, उसके लिए वह गुण अनिवार्य है, जिससे आत्मनिर्भरता आती है और जिससे अपने पैरों के बल खड़ा होना आता है। युवा को यह सदा स्मरण रखना चाहिए कि वह बहुत कम बातें जानता है, अपने ही आदर्श से वह बहुत नीचे है और उसकी आकांक्षाएँ उसकी योग्यता से कहीं बढ़ी हुई हैं। उसे इस बात का ध्यान रखना चाहिए कि वह अपने बड़ों का सम्मान करे, छोटों और बराबर वालों से कोमलता का व्यवहार करे, ये बातें आत्ममर्यादा के लिए आवश्यक हैं।

SubQuestion No : 16

Q.16 अनुच्छेद के अनुसार किसके बिना स्वतंत्रता का कोई अर्थ नहीं है?

- Ans A. अभिमान
 B. गुण
 C. विनम्रता
 D. संस्कार

Question ID : 75322913460

Comprehension:

नीचे दिए गये गद्यांश को ध्यानपूर्वक पढ़ें और चार विकल्पों में से प्रत्येक प्रश्न का सर्वोत्तम उत्तर चुनें।

विद्वानों का यह कथन बहुत ठीक है कि विनम्रता के बिना स्वतंत्रता का कोई अर्थ नहीं। इस बात को सब लोग मानते हैं कि आत्मसंस्कार के लिए थोड़ी-बहुत मानसिक स्वतंत्रता परमावश्यक है-चाहे उस स्वतंत्रता में अभिमान और नम्रता दोनों का मेल हो। यह बात तो निश्चित है कि जो मनुष्य मर्यादापूर्वक जीवन व्यतीत करना चाहता है, उसके लिए वह गुण अनिवार्य है, जिससे आत्मनिर्भरता आती है और जिससे अपने पैरों के बल खड़ा होना आता है। युवा को यह सदा स्मरण रखना चाहिए कि वह बहुत कम बातें जानता है, अपने ही आदर्श से वह बहुत नीचे है और उसकी आकांक्षाएँ उसकी योग्यता से कहीं बढ़ी हुई हैं। उसे इस बात का ध्यान रखना चाहिए कि वह अपने बड़ों का सम्मान करे, छोटों और बराबर वालों से कोमलता का व्यवहार करे, ये बातें आत्ममर्यादा के लिए आवश्यक हैं।

SubQuestion No : 17

Q.17 इस अनुच्छेद का कोई उपयुक्त शीर्षक-

- Ans A. अभिमान और नम्रता
 B. आदर्श
 C. अपने पैरों के बल खड़ा होना
 D. विनम्रता का महत्त्व

Question ID : 75322913464

Comprehension:

नीचे दिए गये गद्यांश को ध्यानपूर्वक पढ़ें और चार विकल्पों में से प्रत्येक प्रश्न का सर्वोत्तम उत्तर चुनें।

विद्वानों का यह कथन बहुत ठीक है कि विनम्रता के बिना स्वतंत्रता का कोई अर्थ नहीं। इस बात को सब लोग मानते हैं कि आत्मसंस्कार के लिए थोड़ी-बहुत मानसिक स्वतंत्रता परमावश्यक है-चाहे उस स्वतंत्रता में अभिमान और नम्रता दोनों का मेल हो। यह बात तो निश्चित है कि जो मनुष्य मर्यादापूर्वक जीवन व्यतीत करना चाहता है, उसके लिए वह गुण अनिवार्य है, जिससे आत्मनिर्भरता आती है और जिससे अपने पैरों के बल खड़ा होना आता है। युवा को यह सदा स्मरण रखना चाहिए कि वह बहुत कम बातें जानता है, अपने ही आदर्श से वह बहुत नीचे है और उसकी आकांक्षाएँ उसकी योग्यता से कहीं बढ़ी हुई हैं। उसे इस बात का ध्यान रखना चाहिए कि वह अपने बड़ों का सम्मान करे, छोटों और बराबर वालों से कोमलता का व्यवहार करे, ये बातें आत्ममर्यादा के लिए आवश्यक हैं।

SubQuestion No : 18

Q.18 इनमें से कौन-सा आदर्श का विलोम शब्द है?

- Ans A. नमूना
 B. मानक
 C. प्रतिमान
 D. अनादर्श

Question ID : 75322913463

Comprehension:

नीचे दिए गये गद्यांश को ध्यानपूर्वक पढ़ें और चार विकल्पों में से प्रत्येक प्रश्न का सर्वोत्तम उत्तर चुनें।

विद्वानों का यह कथन बहुत ठीक है कि विनम्रता के बिना स्वतंत्रता का कोई अर्थ नहीं। इस बात को सब लोग मानते हैं कि आत्मसंस्कार के लिए थोड़ी-बहुत मानसिक स्वतंत्रता परमावश्यक है-चाहे उस स्वतंत्रता में अभिमान और नम्रता दोनों का मेल हो। यह बात तो निश्चित है कि जो मनुष्य मर्यादापूर्वक जीवन व्यतीत करना चाहता है, उसके लिए वह गुण अनिवार्य है, जिससे आत्मनिर्भरता आती है और जिससे अपने पैरों के बल खड़ा होना आता है। युवा को यह सदा स्मरण रखना चाहिए कि वह बहुत कम बातें जानता है, अपने ही आदर्श से वह बहुत नीचे है और उसकी आकांक्षाएँ उसकी योग्यता से कहीं बढ़ी हुई हैं। उसे इस बात का ध्यान रखना चाहिए कि वह अपने बड़ों का सम्मान करे, छोटों और बराबर वालों से कोमलता का व्यवहार करे, ये बातें आत्ममर्यादा के लिए आवश्यक हैं।

SubQuestion No : 19

Q.19 मर्यादापूर्वक जीवन व्यतीत करने के लिए कौन-सा गुण आवश्यक है?

- Ans A. जिससे आत्ममर्यादा ना हो
 B. जिससे स्वाभिमानी ना हो
 C. जिससे आत्मनिर्भरता मिले
 D. जिससे योग्यताएँ कम हो

Question ID : 75322913462

Comprehension:

नीचे दिए गये गद्यांश को ध्यानपूर्वक पढ़ें और चार विकल्पों में से प्रत्येक प्रश्न का सर्वोत्तम उत्तर चुनें।

विद्वानों का यह कथन बहुत ठीक है कि विनम्रता के बिना स्वतंत्रता का कोई अर्थ नहीं। इस बात को सब लोग मानते हैं कि आत्मसंस्कार के लिए थोड़ी-बहुत मानसिक स्वतंत्रता परमावश्यक है-चाहे उस स्वतंत्रता में अभिमान और नम्रता दोनों का मेल हो। यह बात तो निश्चित है कि जो मनुष्य मर्यादापूर्वक जीवन व्यतीत करना चाहता है, उसके लिए वह गुण अनिवार्य है, जिससे आत्मनिर्भरता आती है और जिससे अपने पैरों के बल खड़ा होना आता है। युवा को यह सदा स्मरण रखना चाहिए कि वह बहुत कम बातें जानता है, अपने ही आदर्श से वह बहुत नीचे है और उसकी आकांक्षाएँ उसकी योग्यता से कहीं बढ़ी हुई हैं। उसे इस बात का ध्यान रखना चाहिए कि वह अपने बड़ों का सम्मान करे, छोटों और बराबर वालों से कोमलता का व्यवहार करे, ये बातें आत्ममर्यादा के लिए आवश्यक हैं।

SubQuestion No : 20

Q.20 सभी के अनुसार आत्मसंस्कार के लिए किसकी बहुत आवश्यकता है?

- Ans A. आकांक्षाएँ
 B. स्मरण शक्ति
 C. मानसिक परतंत्रता
 D. मानसिक स्वतंत्रता

Question ID : 75322913461

Section : Discipline1

Q.1 Which of the following be defined as a progressive series of orderly, coherent changes leading towards the goal of maturity?

- Ans A. Adolescence
 B. Development
 C. Growth
 D. Maturation

Question ID : 75322913466

Q.2 At which of the following level does the child tries to build abstract knowledge in affective domain?

- Ans A. Valuing
 B. Responding
 C. Organizing
 D. Characterizing

Question ID : 75322913474

Q.3 Which states that development spreads over the body from head to foot. Changes in structure and function can first be observed in the head, then trunk and finally, the legs

- Ans A. Proximodistal principle
 B. Orthogenetic principle
 C. Cognitive principle
 D. Cephalocaudal principle

Question ID : 75322913467

Q.4 निम्नलिखित में से कौन सा अधिगम प्रक्रिया की विशेषता नहीं है?

- Ans A. पुराने अनुभवों का अलगाव
 B. अनुभवों में विकास और वृद्धि
 C. पुराने अनुभवों का संशोधन
 D. नए अनुभवों का निर्माण

Question ID : 75322913480

Q.5 निम्नलिखित में से कौन सा अधिगम का उत्पाद नहीं है?

- Ans A. प्रेरक कौशल
 B. प्रतिवर्त क्रिया
 C. हाव-भाव
 D. मनोभाव

Question ID : 75322913483

Q.6 In _____, a child organizes his knowledge. The child compares, elaborates and relates what he learns. This domain refers to the tracking of growth in feelings or emotional areas throughout the learning experience.

- Ans A. Knowledge domain
 B. Affective domain
 C. Psychomotor domain
 D. Cognitive domain

Question ID : 75322913473

Q.7 Which of the following is not a characteristic of learning?

- Ans A. Learning works in isolation
 B. Learning is universal and continuous
 C. Learning is organizing experience
 D. Learning is comprehensive

Question ID : 75322913484

Q.8 Which of the following is called as a pre-school stage?

- Ans A. Adolescence
 B. Early childhood
 C. Later childhood
 D. Infancy

Question ID : 75322913471

Q.9 Interpretation of what is taught in the class falls under which category of Bloom's Taxonomy?

- Ans A. Knowledge
 B. Application
 C. Comprehension
 D. Evaluation

Question ID : 75322913475

Q.10 Which of the following refers to the increase in size, number of cells and it is quantitative improvement in a child?

- Ans A. Growth
 B. Maturation
 C. Development
 D. Adolescence

Question ID : 75322913465

Q.11 The learning outcomes such as speed and timing come under which level of Psychomotor domain?

- Ans A. Manipulation
 B. Articulation
 C. Naturalization
 D. Imitation

Question ID : 75322913477

Q.12 The internalization of values comes under:

- Ans A. Organizing
 B. Responding
 C. Characterizing
 D. Valuing

Question ID : 75322913478

Q.13 Which of the following is shortest than all developmental stages?

- Ans A. Later childhood
 B. Adolescence
 C. Infancy
 D. Adulthood

Question ID : 75322913469

Q.14 The general tendency for the development of motor skills to start at the centre of an organism and radiate outwards from there is known as:

- Ans A. Orthogenetic principle
 B. Proximodistal principle
 C. Cephalocaudal principle
 D. Cognitive principle

Question ID : 75322913468

Q.15 Socialization begins during which of the following stage? In this stage the individual may engage in playing side-by-side, before directly interacting with others.

- Ans A. Babyhood
 B. Adulthood
 C. Adolescence
 D. Infancy

Question ID : 75322913470

Q.16 When a very bright light falls on our eyes, we immediately close our eyelids, such a behaviour is called as:

- Ans A. Growth
 B. Experience
 C. Learning
 D. Reflex actions

Question ID : 75322913481

Q.17 The term "society" is rooted in Latin word societas which means:

- Ans A. Family
 B. Friends
 C. Friends and ally
 D. Community

Question ID : 75322913472

Q.18 The teacher showed a film on The Mughals to the students rather than teaching them through textbooks. The teacher was successful in attaining the attention of students as she worked on:

- Ans A. Affective domain
 B. Comprehension
 C. Cognitive domain
 D. Psychomotor domain

Question ID : 75322913476

Q.19 Which of the following is a process of behaviour modification through experiences, exercise and efforts?

- Ans A. Learning
 B. Practicing
 C. Knowing
 D. Remembering

Question ID : 75322913479

Q.20 A child start crying when she/he feels hungry, we feel like resting when tired, such a behaviour is called as:

- Ans A. Experience
 B. Growth
 C. Reflex actions
 D. Biological instincts

Question ID : 75322913482

Section : Discipline2

Q.1 Programme of Action (PoA), under the National Policy on Education (NPE), 1986 was set up in:

- Ans A. 1966
 B. 1964
 C. 2000
 D. 1992

Question ID : 75322913501

Q.2 The University Education Commission was set up in 1948 under the chairmanship of:

- Ans A. Lal Bahadur Shastri
 B. Jawaharlal Nehru
 C. B.R. Ambedkar
 D. Dr. S. Radhakrishnan

Question ID : 75322913500

Q.3 Which of the following is not a determinant of social structure of Indian society?

- Ans A. Traditional occupation
 B. Education
 C. Religion culture
 D. Hereditary caste group

Question ID : 75322913490

Q.4 Indian society is divided into 4 major castes. Which one of the following is not one of them?

- Ans A. Shudra
 B. Vaishya
 C. Pandit
 D. Kshatriya

Question ID : 75322913489

Q.5 Aurobindo gave a atmavidhya as a type of knowledge, what do you mean by atmavidhya?

- Ans
- A. Knowledge by intimate direct contact
 - B. Knowledge by separate direct contact
 - C. Separate knowledge by indirect contact
 - D. Knowledge by identity

Question ID : 75322913502

Q.6 Learning covers all domains – Cognitive, Affective and Psychomotor- of human behaviour. Which characteristic of learning is highlighted in the above statement?

- Ans
- A. Learning is universal and continuous
 - B. Learning is comprehensive
 - C. Learning is change in response or behaviour may be favourable or unfavourable
 - D. Learning is organizing experience

Question ID : 75322913485

Q.7 Which of the following term used by the psychiatric community to diagnose people who feel their biological body doesn't match with their sense of self or gender identity?

- Ans
- A. Masculinity
 - B. Transsexual
 - C. Transgender
 - D. Gender identity

Question ID : 75322913494

Q.8 Which of the following is not an advantage of traditional perspective of curriculum?

- Ans
- A. Offers quality instruction
 - B. Develops problem solving and critical thinking skills
 - C. Scheduled and properly carried out lectures
 - D. Offers active mode of learning in classroom

Question ID : 75322913504

Q.9 कौन सा शब्द भविष्य की पीढ़ियों को बेहतर बनाने के लिए वांछित आनुवंशिक विशेषताओं के चयन को संदर्भित करता है, आमतौर पर मनुष्यों के संदर्भ में?

- Ans
- A. विरासत
 - B. आनुवंशिकी (जीनकोलोजी)
 - C. युजनिक्स
 - D. जीवविज्ञान

Question ID : 75322913498

Q.10 What is the structure of Indian society?

- Ans
- A. Oligarchy
 - B. Autocratic
 - C. Monarchy
 - D. Democratic

Question ID : 75322913491

Q.11 Which of the following is a process by which efforts are made to ensure equal opportunities for all, regardless of their background?

- Ans
- A. Equity
 - B. Equality
 - C. Social inclusion
 - D. Social exclusion

Question ID : 75322913496

Q.12 निम्नलिखित में से किस प्रकार के पाठ्यचर्या में ऐसे अनुभव शामिल होते हैं जिन्हें जानबूझकर विद्यालय, महाविद्यालय या विश्वविद्यालय संगठन द्वारा शिक्षार्थियों को प्रदान करने की योजना बनाई जाती है?

- Ans
- A. प्रत्यक्ष (ओवर्ट) पाठ्यचर्या
 - B. प्रच्छन्न पाठ्यचर्या
 - C. निहित पाठ्यचर्या
 - D. शून्य पाठ्यचर्या

Question ID : 75322913499

Q.13 The concept of Basic Education was given by:

- Ans
- A. Rabindranath Tagore
 - B. Dr. S. Radhakrishnan
 - C. B.R Ambedkar
 - D. Mahatma Gandhi

Question ID : 75322913503

Q.14 Which of the following process removes the disabled from the mainstream of the general population through killing, mutilating, burning, exiling and abandoning?

- Ans
- A. Social inclusion
 - B. Feticide
 - C. Extermination
 - D. Euthanasia

Question ID : 75322913497

Q.15 Which of the following is the way in which men and women are treated or behave differently in society, either with their own gender or with each other.

- Ans
- A. Gender dynamics
 - B. Gender equality
 - C. Gender development
 - D. Gender stereotype

Question ID : 75322913493

Q.16 Social change cannot be avoided, we all need change in life and change is the law of nature. Which characteristic of social change is highlighted in the above statement?

- Ans
- A. Uneven
 - B. Unplanned
 - C. Inevitable
 - D. Universal

Question ID : 75322913492

Q.17 Kasturba Gandhi Balika Vidyalaya was set up with an objective of:

- Ans A. Providing residential facilities to the upper primary schools for the girls from SC,ST,OBC and Muslim communities.
- B. Providing opportunity to the children for enhancing their creativity
- C. Enhancing enrolment retention
- D. Providing right to the children for getting free and compulsory education

Question ID : 75322913487

Q.18 Which of the following projects aims at addressing the lower enrolment of girls in engineering college?

- Ans A. National Means cum Merit Scholarship Scheme
- B. SPQEM
- C. UDAAN
- D. Setting model schools

Question ID : 75322913488

Q.19 We do not learn anything and everything that comes in our way in a haphazard manner. Which characteristic of learning is mentioned in the above statement?

- Ans A. Learning is purposive or goal directed
- B. Learning is change in response or behaviour may be favourable or unfavourable
- C. Learning is organizing experience
- D. Learning is comprehensive

Question ID : 75322913486

Q.20 Which of the following is a problem in body function or structure?

- Ans A. Disability
- B. Impairment
- C. Special needs
- D. Handicapped

Question ID : 75322913495

Section : Discipline3

Q.1 निम्नलिखित में से कौन सी भाषा की विशेषता नहीं है?

- Ans A. स्वर
- B. अर्जित व्यवहार
- C. सीखा हुआ
- D. स्थिर

Question ID : 75322913516

Q.2 The observer observes the group passively from a distance without his/her presence in the group. Such process takes place in:

- Ans A. Participant observation
- B. Assignments
- C. Peer Assessment
- D. Non-participant observation

Question ID : 75322913511

Q.3 निम्नलिखित में से कौन एक छात्र के काम का क्रमबद्ध संगठित संग्रह है जो एक विशिष्ट अवधि को कवर करता है?

- Ans A. आकलन
 B. परियोजना कार्य
 C. पोर्टफोलियो
 D. वाद-विवाद

Question ID : 75322913512

Q.4 पारंपरिक शिक्षण और अधिगम निम्न पर आधारित है:

- Ans A. रचनावाद
 B. व्यवहारवाद
 C. सहूलियत
 D. प्रकृतिवाद

Question ID : 75322913507

Q.5 Who amongst the following are major proponents of constructivism?

- Ans A. Piaget and Vygotsky
 B. Skinner and Watson
 C. Piaget and Skinner
 D. Watson and Piaget

Question ID : 75322913524

Q.6 Which of the following involves a rich control on grammar, vocabulary, content, punctuation as well as abilities to organize thoughts coherently?

- Ans A. Writing
 B. Speaking
 C. Reading
 D. Listening

Question ID : 75322913515

Q.7 Which of the following is the earliest form of communication used by the child?

- Ans A. One word
 B. Cooing
 C. Babbling
 D. Crying

Question ID : 75322913519

Q.8 According to which policy, the main goal of Mathematics education in school is the mathematisation of the child's thought process?

- Ans A. NCF 2021
 B. NCF2000
 C. NCF 2005
 D. NCF 1964

Question ID : 75322913522

Q.9 Who amongst the following are major proponents of behaviourism?

- Ans A. Piaget and Skinner
 B. Watson and Piaget
 C. Piaget and Vygotsky
 D. Skinner and Watson

Question ID : 75322913523

Q.10 In which of the following, teachers may suggest resources and learners may learn at home using ICT for instance by using a video?

- Ans A. Distributed learning
 B. Flipped learning
 C. Blended learning
 D. Traditional learning

Question ID : 75322913508

Q.11 निम्नलिखित में से कौन देखभालकर्ता की भूमिका नहीं है?

- Ans A. ब्लैक बोर्ड की मदद से उन्हें गिनती और अक्षर याद दिलाएं
 B. मनमोहक लोरी गाएं
 C. बच्चे को खिलौने और घरेलू सामान दिखाएं
 D. उनकी भाषा सरल रखें

Question ID : 75322913521

Q.12 निम्नलिखित में से कौन सा उपागम ICT का उपयोग करने के लिए कौशल के विकास के बारे में बात करता है?

- Ans A. डिजिटलीकरण
 B. हार्डवेयर कौशल
 C. प्रौद्योगिकी साक्षरता
 D. सॉफ्टवेयर कौशल

Question ID : 75322913505

Q.13 In which of the following approach does the teacher facilitate collaborative learning, manage information, application, etc?

- Ans A. Technology literacy approach
 B. Software development approach
 C. Knowledge creation approach
 D. Knowledge deepening approach

Question ID : 75322913506

Q.14 Which of the following is the most important function of language?

- Ans A. Dreaming
 B. Playing
 C. Problem solving
 D. Communication

Question ID : 75322913513

Q.15 Which of the following is about the role of technology in representing content, through processes like magnification, simulation, virtualisation, etc?

- Ans
- A. Content knowledge
 - B. Technology knowledge
 - C. Pedagogy content knowledge
 - D. Technology content knowledge

Question ID : 75322913509

Q.16 There is no relationship between the words of a language and its meaning. Which of the following characteristic of language is highlighted in the above statement?

- Ans
- A. Learnt
 - B. Arbitrary
 - C. Static
 - D. Acquired behaviour

Question ID : 75322913517

Q.17 Which of the following serves as an essential component of the learning process in order to promote and enhance further learning?

- Ans
- A. Assessment of learning
 - B. Assessment in learning
 - C. Assessment and evaluation
 - D. Assessment for learning

Question ID : 75322913510

Q.18 Which of the following is a vowel like sound?

- Ans
- A. Cooing
 - B. Babbling
 - C. Crying
 - D. Mooing

Question ID : 75322913518

Q.19 Which of the following is called as traditional objectives of language teaching?

- Ans
- A. Learning skills
 - B. Reading and writing
 - C. Listening, Speaking, Writing and Reading skills
 - D. Listening, Speaking, Reading and Writing skills

Question ID : 75322913514

Q.20 Which of the following statements is false?

- Ans
- A. All new-borns are most responsive to the sound of the human voice which shows that we have an inborn ability to learn language
 - B. The biological factors include the genetic make-up of the child.
 - C. All children go through the different stages while acquiring language depending on the language they speak
 - D. All children go through the same stages while acquiring language

Question ID : 75322913520

Section : Discipline4

Q.1 Which of the following action verb is not an objective of the cognitive domain?

- Ans A. Identify
 B. Compare
 C. Construct
 D. State

Question ID : 75322913529

Q.2 Through which of the following tests does the weaknesses of students identified and special classes provided to them?

- Ans A. Remedial test
 B. Formative test
 C. Summative test
 D. Diagnostic test

Question ID : 75322913541

Q.3 Which of the following uses the knowledge and skills to help in improving the environment. It includes feeling of concerns, need to initiate action, voluntary participation in activities related to environment protection?

- Ans A. Learning through the environment
 B. Learning for the environment
 C. Learning in the environment
 D. Learning about the environment

Question ID : 75322913528

Q.4 निम्नलिखित में से किसे इतिहास की विशेषता नहीं कहा जा सकता है?

- Ans A. निर्जीव चीजों से चिंतित
 B. घटनाओं का वस्तुनिष्ठ रिकॉर्ड
 C. अतीत के आलोक में वर्तमान का अध्ययन
 D. वर्तमान की व्याख्या करता है

Question ID : 75322913532

Q.5 Which of the following approach is related to problem-solving that uses a practical method or various shortcuts?

- Ans A. Traditional approach
 B. Heuristic approach
 C. Behaviourist approach
 D. Constructivist approach

Question ID : 75322913540

Q.6 Which psychologist uses the processes of assimilation and accommodation in his theory?

- Ans A. Erikson
 B. Vygotsky
 C. Jean Piaget
 D. Stanley Hall

Question ID : 75322913542

Q.7 In Jean Piaget's theory of cognitive development, which of the following stages extends from the birth to acquisition of language?

- Ans
- A. Concrete operational stage
 - B. Pre-operational stage
 - C. Formal operational stage
 - D. Sensori-motor stage

Question ID : 75322913544

Q.8 Which of the following is not a graphic art?

- Ans
- A. Dancing
 - B. Design
 - C. Painting
 - D. Drawing

Question ID : 75322913536

Q.9 This process involves altering one's existing schemas, or ideas, as a result of new information or new experiences. The following is an example of this process.

Tom's mother introduced Tom to his neighbour's dog and told him that this animal has four legs and a tail. Next time he saw a cat on the road and called it a dog. His mother explained him the difference between a cat and a dog. Now Tom knows the difference between a cat and a dog. This process is called as:

- Ans
- A. Equilibrium
 - B. Schemas
 - C. Accommodation
 - D. Assimilation

Question ID : 75322913543

Q.10 कौन निगमनात्मक उपागम का समर्थन करता है? वे यह भी मानते हैं कि पर्यावरणीय उत्तेजनाओं के प्रति हमारी प्रतिक्रियाएँ हमारे कार्यों को आकार देती हैं।

- Ans
- A. प्रकृतिवाद
 - B. प्रैग्मटिस्ट
 - C. रचनावादी
 - D. बिहेवियरिस्ट

Question ID : 75322913525

Q.11 Which of the following is not a core value of art education?

- Ans
- A. Appreciating similarities
 - B. Gender stereotyping
 - C. Celebrating differences
 - D. Social responsibility

Question ID : 75322913535

Q.12 निम्नलिखित में से किसे सॉक्रेटिक विधि के रूप में जाना जाता है?

- Ans
- A. वैज्ञानिक उपागम
 - B. राष्ट्रवादी उपागम
 - C. उत्तर आधुनिकतावादी उपागम
 - D. द्वंद्वत्मक उपागम

Question ID : 75322913534

Q.13 Which of the following means the evaluation procedure should assess all the three cognitive, psychomotor and affective domains as well?

- Ans A. Continuous
 B. Formative assessment
 C. Comprehensive
 D. Holistic assessment

Question ID : 75322913531

Q.14 Which of the following is a value oriented education?

- Ans A. Physical education
 B. Science
 C. Mathematics
 D. Environmental education

Question ID : 75322913530

Q.15 During which stage of school must we tackle problems of posture particularly—sitting, standing and while reading or writing of a student?

- Ans A. Primary stage
 B. Elementary stage
 C. Secondary stage
 D. Higher secondary stage

Question ID : 75322913538

Q.16 निम्नलिखित में से कौन इतिहास पढ़ाने का उद्देश्य नहीं है?

- Ans A. समय, स्थान और समाज की उचित अवधारणाएं प्रदान करना
 B. सहिष्णुता सिखाना
 C. आत्म-समझ और अहंकेन्द्रवाद को बढ़ावा देना
 D. शिक्षार्थियों की बौद्धिक क्षमताओं को मजबूत करना

Question ID : 75322913533

Q.17 निम्नलिखित में से कौन सा शारीरिक शिक्षा का महत्व/विशेषता नहीं है?

- Ans A. छात्र की अक्षमता को बढ़ावा देना
 B. तथ्यात्मक चिंतन का विकास
 C. जिम्मेदार नागरिक की तैयारी
 D. छात्रों को रटने की परंपरा से दूर रखना

Question ID : 75322913539

Q.18 Which of the following includes knowledge of components of environment. Such as knowledge of social institutions, their structure and function, local traditions, customs, culture, etc?

- Ans A. Learning for the environment
 B. Learning through the environment
 C. Learning about the environment
 D. Learning in the environment

Question ID : 75322913527

Q.19 Which of the following is not an importance of art education in elementary education?

- Ans A. Increases the aspect of judging others
 B. To develop free expression
 C. Appreciation of beauty
 D. Practical aptitude

Question ID : 75322913537

Q.20 Who supports the inductive approach?

- Ans A. Behaviourists
 B. Pragmatists
 C. Constructivists
 D. Naturalists

Question ID : 75322913526

Section : Discipline5

Q.1 Which of the following is not a major component in the syllabus of Work education?

- Ans A. Health and health science
 B. Entrepreneurship
 C. Food and nutrition
 D. Community work

Question ID : 75322913556

Q.2 Which of the following is not an aim of physical education?

- Ans A. Social adaptability
 B. Mental balance
 C. Physical development
 D. Critical thinking

Question ID : 75322913549

Q.3 Under which stage of Jean Piaget's cognitive development a child engages in symbolic play and manipulate symbols?

- Ans A. Sensori-motor stage
 B. Formal operational stage
 C. Pre-operational stage
 D. Concrete operational stage

Question ID : 75322913546

Q.4 The Olympic Games are held once after every how many years?

- Ans A. 3 years
 B. 5 years
 C. 4 years
 D. 2 years

Question ID : 75322913554

Q.5 Work and education must be integrated. Which of the following pointed out it's absence in formal school education?

- Ans A. National curriculum framework
 B. Orientalists
 C. Wood Dispatch
 D. Kothari commission

Question ID : 75322913555

Q.6 Which of the following is best suited for 'web of relations'?

- Ans A. School
 B. Society
 C. Family
 D. Friendship

Question ID : 75322913563

Q.7 In which of the following aspect does the child fail to understand the true relationships between cause and effect?

- Ans A. Deductive reasoning
 B. Transductive reasoning
 C. Inductive reasoning
 D. Conservatism

Question ID : 75322913548

Q.8 Which of the following is not an importance of physical education?

- Ans A. Human body can be developed in good proportion
 B. Aggressiveness can be enhanced
 C. leisure time can be utilized properly
 D. Provides knowledge about health

Question ID : 75322913553

Q.9 निम्नलिखित में से कौन सा पहलू हमें अपने जीवन के अनुभवों से ज्ञान और विवेक इकट्ठा करने में मदद करता है?

- Ans A. आध्यात्मिक क्षमता
 B. मानसिक क्षमता
 C. संवेगनात्मक क्षमता
 D. शारीरिक क्षमता

Question ID : 75322913560

Q.10 A child's understanding that objects continue to exist even though he or she cannot see or hear them is called as:

- Ans A. Object permanency
 B. Permanency
 C. Tangible objects
 D. sensori-stability

Question ID : 75322913545

Q.11 Who spoke about including productive work as the medium of education in the education process compulsorily?

- Ans A. Mahatma Gandhi
 B. Jawaharlal Nehru
 C. Dr. B.R. Ambedkar
 D. Rabindranath Tagore

Question ID : 75322913557

Q.12 Which of the following is the basic unit of any community and society which acts as joining institution between individual and society?

- Ans A. School
 B. College
 C. Friends
 D. Family

Question ID : 75322913564

Q.13 In which of the following In this method for a particular task the students decide themselves the objective, prepare, plan, collect the required resources to attain their goal?

- Ans A. Project Method
 B. Practical Method
 C. Observation/Method
 D. Demonstration method

Question ID : 75322913559

Q.14 Personality is a combination of four factors, which of the following is not one of them?

- Ans A. Heredity
 B. Gender
 C. Culture
 D. Environment

Question ID : 75322913561

Q.15 Which of the following method of work education proceeds from general to specific, the validity of the rules related to that activity is also proved through examples.

- Ans A. Observation/Method
 B. Practical Method
 C. Project Method
 D. Demonstration method

Question ID : 75322913558

Q.16 Children think that the stars twinkle in the sky because they are happy, this concept is called as:

- Ans A. Transductive thinking
 B. Egocentrism
 C. Animism
 D. Conservatism

Question ID : 75322913547

Q.17 Chess, carom, horse riding, education campus, hunting and folk dance will fall under which of the following?

- Ans A. Games and Sports
 B. Self defense activities
 C. Rhythmics
 D. Recreational activities

Question ID : 75322913551

Q.18 The ability to manage the problems and manage the work falls under which of the following?

- Ans A. Communication skills
 B. Numeracy skills
 C. Language skills
 D. Soft skills

Question ID : 75322913562

Q.19 ऑक्सीजन और ऊतकों को वितरित करने की क्षमता निरंतर अवधि के दौरान अपशिष्ट को हटाने के लिए शुष्क होती है। लंबी दौड़ और तैरना इस घटक को मापने के लिए नियोजित तरीके हैं। वे किस घटक के बारे में बात कर रहे हैं?

- Ans A. नम्यता
 B. धैर्य
 C. ताकत
 D. गति

Question ID : 75322913552

Q.20 Gymnastics, Lezioms Dance, mass physical training and Dumb bell will fall under which of the following?

- Ans A. Games and Sports
 B. Corrective Exercises
 C. Self defense activities
 D. Rhythmics

Question ID : 75322913550