



Teachingninja.in

DSSSB PRT 7 March 2022 Shift 1 Paper

- ★ Latest Govt Job updates
- ★ Private Job updates
- ★ Free Mock tests available

Visit - teachingninja.in

70 Questions





Que. 1 Select the letter-cluster from among the given options that can replace the question mark (?) in the following series.

MCN, NCO, OCP, PCQ, ?

1. OCQ
2. PQR
3. PCS
4. QCR

Correct Option - 4

Que. 2 Which of the following Venn diagrams best represents the relationship between Indians, Mumbaikars, and Maharashtrians?

1. 
2. 
3. 
4. 

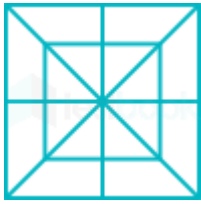
Correct Option - 4

Que. 3 Amit walked 40 metres towards west and took a left turn and walked 40 metres. He then took a left turn and walked 40 metres and again took a right turn and walked 40 metres. How far is Amit now from the starting point?

1. None of these
2. 80 metres
3. 60 metres
4. 70 metres

Correct Option - 2

Que. 4 Find the number of squares in the following figure:



1. 8 squares
2. 10 squares
3. 12 squares
4. 6 squares

Correct Option - 2

Que. 5 From the given answer figures, select the one in which the question figure is hidden/embedded?



- 1.
- 2.
- 3.
- 4.

Correct Option - 4

Que. 6 8 people P, Q, R, M, N, X, Y and Z are sitting around a circular table facing towards the centre of the table. Z is sitting third right to the P. M is immediate right to the P. Between R and Y only two persons are sitting and both are not neighbours of M. N is sitting third right to the Y. X is not a neighbour of R.

Who is sitting fourth left to the R?

1. X
2. P
3. M
4. Y

Correct Option - 2

Que. 7 Who is sitting between Z and Q?

1. N
2. X
3. P
4. R

Correct Option - 4

Que. 8 Sreetin is playing a secret word game in which FIRE is written as DGPC, then what will SHOT be written as?

1. QFMR
2. QRST
3. PQRS
4. SNGR

Correct Option - 1

Que. 9 Which of the answer figures is exactly the water image of the given figure?

LAUNCHING
P //////////////// Q

1. LAUNCHING
2. LAUNCHING
3. LAUNCHING
4. LAUNCHING

Correct Option - 2

Que. 10 Select the number from among the given options that can replace the question mark (?) in the following series.

2, 6, 18, 54, ?

1. 162
2. 94
3. 84
4. 104

Correct Option - 1

Que. 11 The first woman President of United Nations General Assembly was

1. Margaret Thatcher
2. Vijayalakshmi Pandit
3. Eleanor Roosevelt
4. Sirimavo Bandaranaike

Correct Option - 2

Que. 12 Who became the first Indian woman to win two individual Olympic medals?

1. Mirabai Chanu
2. PV Sindhu
3. Karnam Malleswari
4. Saina Nehwal

Correct Option - 2

Que. 13 Who built the Konark Sun Temple?

1. Narasimha Deva I
2. Ashoka
3. Rajaraja Chola I
4. King Devaraya II

Correct Option - 1

Que. 14 Which of the following Indian states has the maximum number of common borders with other Indian states?

1. Rajasthan
2. Andhra Pradesh
3. Uttar Pradesh
4. Madhya Pradesh

Correct Option - 3

Que. 15 On which day is 'World No-Tobacco Day' celebrated?

1. 30th June
2. 31st March
3. 30th May
4. 31st May

Correct Option - 4

Que. 16 Which is the longest National Highway of India?

1. National highway 4
2. National highway 2
3. National highway 6
4. National highway 44

Correct Option - 4

Que. 17 Phulkari, Kantha and Chikankari are famous forms of _____ in Haryana.

1. Dance
2. Painting
3. Music
4. Embroidery

Correct Option - 4

Que. 18 Which dynasty came after the Khilji dynasty?

1. Slave Dynasty

2. Tughlaq Dynasty
3. Lodi Dynasty
4. None of the above

Correct Option - 2

Que. 19 Sarva Shiksha Abhiyan was pioneered by which of the following former Prime Ministers?

1. H. D. Deve Gowda
2. V P Singh
3. Atal Bihari Vajpayee
4. Manmohan Singh

Correct Option - 3

Que. 20 Article 21-A of the Constitution of India is related to

1. Prohibition of Child Labour
2. Right to Education
3. Person with Disability Act
4. Child Rights

Correct Option - 2

Que. 21 HCF of two numbers is 11 and their LCM is 693. If one number is 77, find the other number ?

1. 94
2. 89
3. 99
4. 92

Correct Option - 3

Que. 22 A student secures 82% marks in an examination. His marks in 4 subjects were 69, 99, 71, 92. Find his marks in 5th subject.

1. 96
2. 79
3. 94
4. 100

Correct Option - 2

Que. 23 Ram covers first 45 km at the speed of 15 km/hr. He covers next 40 km at the speed of 20 km/hr. He covers next 60 km at the speed of 30 km/hr. What is the average speed of Ram?

1. $96/5$ km/hr
2. $145/7$ km/hr
3. $83/3$ km/hr
4. $121/9$ km/hr

Correct Option - 2

Que. 24 Ram sold two cycles each for Rs. 990. If there is a profit of 10% on one cycle and 10% loss on other, then what is the total purchase price of two cycles ?

1. Rs. 2000

2. Rs. 1980
3. Rs. 891
4. Rs. 1090

Correct Option - 1

Que. 25 4 men and 6 women finish a job in 8 days, while 3 men and 7 women finish it in 10 days. 10 women working together will finish it in:

1. 60 days
2. 40 days
3. 20 days
4. 30 days

Correct Option - 2

Que. 26 A room 15 m long requires 7500 tiles, each 15 cm by 12 cm, to cover the entire floor, then the breadth of the room is

1. 7 m
2. 9 m
3. 13 m
4. 17 m

Correct Option - 2

Que. 27 A solid metallic right circular cylinder has diameter 32 cm and height 9 cm. It is melted and recast into a solid sphere. What is the radius (in cm) of the sphere?

1. 25
2. 12
3. 10
4. 14

Correct Option - 2

Que. 28 The given table shows the number of people who joined four different gyms in Delhi during 2014 to 2018.

GYM → YEAR ↓	A	B	C	D
2014	190	113	95	176
2015	210	227	310	277
2016	183	161	191	239
2017	169	117	225	196
2018	278	269	213	293

By what approximate percentage is the number of people who joined gym A in 2018 greater than that who joined gym D in 2016?

1. 16
2. 14
3. 10

4. 12

Correct Option - 1

Que. 29 Two numbers are in the ratio 2 : 3. If 5 is subtracted from the first number and six is added to the second number, then the ratio becomes 5 : 12. What would the ratio become when eight is added to each number?

1. 14 : 19
2. 19 : 14
3. 14 : 11
4. 11 : 14

Correct Option - 1

Que. 30 The average weight of a group of 20 boys was calculated to be 65 kg and it was later discovered that the weight of a boy was misread as 76 kg instead of the correct weight 66 kg. The correct average weight was:

1. 66 kg
2. 63 kg
3. 65.5 kg
4. 64.5 kg

Correct Option - 4

Que. 31 दिए गए वाक्य का काल ज्ञात कीजिए।

वह स्कूल जा चुकी थी।

1. अपूर्ण भूतकाल
2. सामान्य भूतकाल
3. पूर्ण भूतकाल
4. संदिग्ध भूतकाल

Correct Option - 3

Que. 32 'उसके सम्मुख कोई टिक नहीं पा रहा।' इसमें रेखांकित शब्द का विलोम बताइए।

1. पीछे
2. साथ
3. प्रमुख
4. विमुख

Correct Option - 4

Que. 33 दिये गए वाक्य में रेखांकित शब्द का विलोम क्या होगा?

मन निश्छल और गतिमान है।

1. खल
2. छल
3. चंचल
4. सुलभ

Correct Option - 2

Que. 34 दिए गए शब्द का पर्यायवाची शब्द बताइए।

अमृत

1. आम्र
2. मठ
3. व्योम
4. पीयूष

Correct Option - 4

Que. 35 दिए गए विराम चिह्नों में से लोप चिह्न ज्ञात कीजिए।

1. ,
2. :
3. ...
4. ;

Correct Option - 3

Que. 36 निम्नलिखित प्रश्न में, चार विकल्पों में से, दिए गए शब्द का सही पुल्लिंग रूप वाला विकल्प चुनिए।

भिक्षुणी

1. भिखारी
2. भिक्षुक
3. भिक्षुका
4. भिक्षुणे

Correct Option - 2

Que. 37 दिया गया वाक्य किस पक्ष का उदाहरण है, ज्ञात कीजिए।

फल मेज पर है।

1. पूर्ण
2. नित्य
3. स्थितयात्मक पक्ष
4. अपूर्ण

Correct Option - 3

Que. 38 निर्देश: निम्नलिखित गद्यांश को ध्यानपूर्वक पढ़कर दिए गए प्रश्नों के उत्तर दीजिए -

लोक साहित्य वह साहित्य है जो जनमानस की चित्तवृत्तियों से संबंधित है। यह मानव मन की उपज है। लोक साहित्य शब्द दो शब्दों से मिलकर बना है लोक और साहित्य। लोक का अर्थ है जन सामान्य वर्ग और साहित्य का अर्थ है उस जन सामान्य वर्ग की संपूर्ण भावनाओं की अभिव्यक्ति। लोक साहित्य किसी भी समाज, वर्ग या समूह के सामूहिक जीवन का दर्पण होता है। इसमें किसी व्यक्ति विशेष का चिंतन, विवेचन या विश्लेषण नहीं होता बल्कि सामूहिक चेतना, अनुभवों, संवेदनाओं की अभिव्यक्ति रहती है। किसी भी समाज के इतिहास और संस्कृति को समझने के लिए लोक साहित्य का अध्ययन आवश्यक होता है। मानवता का वास्तविक इतिहास लोक साहित्य के आधार पर ही निर्मित होता है। लोक साहित्य लोक का साहित्य है, लोक चेतना का साहित्य है, लोक मानस और लोक संस्कृति का साहित्य है, लोगों के जीवन अनुभवों का सत्य है। यह सहज, सरल, अनौपचारिक और आडंबर रहित साहित्य है। इसमें आम जनता के रीति-रिवाज, विधि-विधान, क्रियाकलाप, विश्वास, प्रथाएं, परंपराएं आदि सभी कुछ समाहित रहता है। लोक साहित्य लोक

जीवन को प्रतिध्वनित करने वाला साहित्य है। यह साहित्य मौखिक है तथा कृत्रिमता और आडंबर से कोसों दूर है। इसमें आमजन के हास-परिहास तथा दैनिक क्रियाकलापों का स्वाभाविक वर्णन मिलता है।

लोक साहित्य किससे कोसों दूर है?

1. मौलिकता और सरलता से
2. औपचारिकता और मौलिकता से
3. रूढ़िवादिता और सरलता से
4. कृत्रिमता और आडंबर से

Correct Option - 4

Que. 39 लोक साहित्य नहीं है -

1. मानवता के इतिहास का वास्तविक आधार
2. लिखित साहित्य
3. सामूहिक जीवन का दर्पण
4. आडम्बर रहित साहित्य

Correct Option - 2

Que. 40 उपर्युक्त गद्यांश का उचित शीर्षक होगा -

1. लोक साहित्य का स्वरूप
2. लोक जीवन के विविध आयाम
3. लोक साहित्य और परम्परागत साहित्य में अंतर
4. लोक साहित्य की जटिलताएँ

Correct Option - 1

Que. 41 **Direction:** Select the option that is opposite in meaning to the given word and mark your response accordingly.

Resist

1. support
2. oppose
3. avoid
4. cancel

Correct Option - 1

Que. 42 **Directions:** Select the most appropriate antonym of the given word.

PRECIOUS

1. costly
2. rare
3. simple
4. cheap

Correct Option - 4

Que. 43 Choose a suitable phrasal verb to fill in the blank.

The protestors are determined and they are not likely to _____.

1. give in
2. give away
3. give off
4. give out

Correct Option - 1

Que. 44 Directions: Select the most appropriate option to substitute the underlined segment in the given sentence. If there is no need to substitute it, select 'No substitution required'.

You must return back the book you borrowed last month.

1. must be returned back
2. No substitution required
3. must return
4. must be returned

Correct Option - 3

Que. 45 Fill in the blank with the most appropriate word.

I _____ for my bag everywhere but couldn't find it.

1. look
2. am looking
3. have been looking
4. looked

Correct Option - 4

Que. 46 Fill in the blank with the correct phrasal verb.

The doctor _____ hope when the patient started sinking.

1. gave away
2. gave up
3. gave on
4. gave off

Correct Option - 2

Que. 47 Direction: In the question given below, a part of the sentence is italicized and underlined. Below are given alternatives to the italicized part which may improve the sentence. Choose the correct alternatives. In case no improvement is needed, option 'No improvement' is the answer.

His father won't be able to leave for Varanasi until they have arrived.

1. until they arrive
2. until they will have arrived
3. until they will arrive
4. No Improvement

Correct Option - 1

Que. 48 Direction: Read the following passage and answer the below questions.

India is one of the most disaster-prone countries in the world. Its location and geographical features render it to a number of natural hazards. Since the dawn of time, disasters, whether natural or man-made, have been a part of man's evolution. Tsunamis, cyclones, earthquakes, floods, accidents, plane crashes, forest fires, chemical disasters, and other natural disasters frequently strike without notice, leading to massive loss

of life and property. A disaster is an event that causes sudden disruption to the normal life of a society and causes damage to property and lives to such an extent that normal social-economic mechanisms available to a society are inadequate to restore normalcy. Disaster management refers to the strategies and actions put in place to lessen and prevent the effects of a disaster. The local community is the first responder to the disaster. The word “disaster management” refers to all aspects of catastrophe mitigation, including preventive and protective measures, preparedness, and relief activities. There is Sendai Framework which was the first major agreement to it. The second category is activity post-disaster recovery in which response, rehabilitation, and reconstruction are all included. Search and rescue evacuation, meeting the victims’ basic needs, and rapid medical support from regional, national, and international authorities were all part of the response phase. The disaster preparedness and planning procedure are the most effective at a grass-root level. In resource-scarce countries, ex-ante risk assuages investment in development planning is critical for decreasing disaster damage. It would be prudent to go from a risk-blind to a risk-informed investment decision. We cannot prevent disasters, but we can strive their severity and arm ourselves with knowledge so that too many lives are spared.

What is a disaster according to the passage?

1. A natural occurrence only.
2. A man-made event that causes sudden disruption.
3. An event that causes a lot of harm or damage.
4. A predetermination activity.

Correct Option - 3

Que. 49 Sendai Framework is related to?

1. Ozone Depletion
2. Biodiversity Conservation
3. Disaster Risk Reduction
4. Global Warming

Correct Option - 3

Que. 50 Which of the following is true in the context of the passage?

1. People have become indifferent to disaster.
2. Man-made disaster occur more frequently than natural disasters.
3. Analysis of previous disaster will help us cope with future ones.
4. The disaster readiness and planning commitment are the most constructive at foundational level.

Correct Option - 4

Que. 51 Most of the children speak the first meaningful word at the age of

1. 3 months
2. 6 months
3. 35-40 months
4. 10-13 months

Correct Option - 4

Que. 52 Physical trauma during pregnancy may cause

1. Mental retardation
2. Blindness
3. Deafness
4. All of these

Correct Option - 1

Que. 53 Research on newborn's sensory capabilities indicate that:

1. The world is a confusing jumble of sensations for newborns.
2. Newborns can do many things including recognizing voices, colours and smells.
3. Newborn's vision is as highly developed as adult's vision.
4. Only hearing is fully functioning at birth.

Correct Option - 2

Que. 54 Girls are more mature in certain physical features than boys of the same age during

1. infancy
2. childhood
3. adolescence
4. all of these

Correct Option - 3

Que. 55 Which of the following statement about the 'ShaGun' e-portal under the SSA scheme is incorrect?

1. It provides vital information related to the availability of nearby schools
2. It focuses only on elementary level of education
3. It provides information on the following schemes of MHRD
4. It provides information on digital knowledge resources

Correct Option - 2

Que. 56 Which of the following initiatives has not been recommended by NEP in order to boost digital education?

1. Pilot studies for online education
2. Digital infrastructure
3. Training and incentives for teachers
4. Single model of learning the concepts

Correct Option - 4

Que. 57 As per Piaget, the children in this stage could demonstrate the conservation of quantities despite the shape. This stage is known as:

1. Formal operational
2. Sensory motor
3. Concrete operational
4. Preoperational

Correct Option - 3

Que. 58 By playing continuously with a toy animal, an infant begins to understand what the object is and recall their experiences associated with that toy. Piaget labeled this understanding as:

1. Imaginative play
2. Object permanence
3. Egocentrism
4. Reversibility

Correct Option - 2

Que. 59 Which of the following stages is not the part of Bruner's Cognitive Development Theory ?

1. Enactive stage
2. Iconic stage
3. Intuitive stage
4. Symbolic stage

Correct Option - 3

Que. 60 Which of the following are criticisms of Kohlberg's theory?

- A. Kohlberg proposed a theory without taking gender differences into consideration
 - B. Kohlberg proposed that moral reasoning is developmental
 - C. Kohlberg did not account for cultural differences in moral reasoning
 - D. Kohlberg give six clear cut stage of moral development in three levels
1. A, B and C
 2. C and D
 3. B and D
 4. B, C and D

Correct Option - 1

Que. 61 Individual accountability is seen in this type of learning

1. Collaborative learning
2. Observational learning
3. Co-operative learning
4. Conditional learning

Correct Option - 3

Que. 62 "Educational Psychology is that branch of psychology which deals with teaching and learning."
This statement is given by:

1. Woodworth
2. Skinner
3. Simpson
4. Pavlov

Correct Option - 2

Que. 63 'The development process of childhood gives an idea of the future life of human beings in the same way as the morning gives cognizance of the condition of the whole day', which psychologist has this statement?

1. Piaget
2. Skinner
3. Milton
4. Pavlov

Correct Option - 3

Que. 64 Which of the following statement(s) regarding the term ICT is/are True?

P: ICT is the abbreviation of Information and Collaboration Technology, meaning technology related to information and collaboration, such as computers and the Internet.

Q: The gap between people with effective access to ICT and those with very limited or no access at all, its termed as digital divide.

1. Neither P and Q
2. P only
3. P and Q
4. Q only

Correct Option - 4

Que. 65 Wardha Scheme of basic education recommended:

1. to remove the teaching of English from the early years.
2. that English teaching is essential from the early years.
3. private tuition should be given for English learning.
4. english should be removed from the entire curriculum.

Correct Option - 1

Que. 66 NEP gave a new direction for the overall improvements of the evaluation system called _____

1. CEC
2. PARAKH
3. DIKSHA
4. AICTE

Correct Option - 2

Que. 67 Which one of the following statements about teaching is not correct?

1. Teaching is an interactive process.
2. Teaching is a tripolar process.
3. Teaching is an effect - directed process.
4. Teaching is a process confined only to the classrooms.

Correct Option - 4

Que. 68 Study the following statements and choose the correct answer

(I) Both normal and disabled children study in special schools.

(II) Disabled children of a particular category study in special schools.

1. I) correct, (II) wrong
2. (I) wrong, (II) correct
3. (I) and (II) correct
4. (I) and (II) wrong

Correct Option - 2

Que. 69 Which of these statements describe the concept of 'gender roles'?

1. The social roles and responsibilities that are considered appropriate for men and women in a culture.
2. The absence of discrimination on the basis of a person's sex.
3. Contrasts with gender blindness.

4. Numerical concepts are concerned with relative equality in terms of numbers.

Correct Option - 1

Que. 70 What is the full form of NIOS?

1. National Institute of Open Schooling
2. National Indian Open Schooling
3. Native Indian Open School
4. National Institute of Open Shelf

Correct Option - 1



Teachingninja.in