



# Teachingninja.in

**DSSSB PRT 27 Mar 2022 Shift 2 Paper**

- ★ Latest Govt Job updates
- ★ Private Job updates
- ★ Free Mock tests available

**Visit - [teachingninja.in](https://teachingninja.in)**

Test Date	27/03/2022
Test Time	12:30 PM - 2:30 PM
Subject	Assistant Teacher (Primary)

## Section : Mental Ability

Q.1 If 'PLATE' is coded as '11-15-26-7-22', then how will you code 'PLANTIFF'?

Ans  A. 11-15-26-13-7-18-21-21

B. 11-15-26-18-7-18-21-21

C. 11-15-26-13-8-18-21-21

D. 11-15-26-13-7-16-21-21

Question ID : 75322912964

Q.2 उस विकल्प का चयन करें जो तीसरे पद से उसी प्रकार से संबंधित है जिस प्रकार से दूसरा पद पहले पद से संबंधित है।

IOP : MKR :: LRD : ?

Ans  A. MSA

B. OUB

C. PNF

D. NTE

Question ID : 75322912963

Q.3 In this question, three statements have been given followed by two conclusions numbered I and II. Assuming that all information in the statements are true, analyze the two conclusions together and determine whether any of them logically and definitely follow(s) from the information given in the statements.

Statement I: All inverters are electronics.

Statement II: Some electronics are portable devices.

Statement III: Some inverters are generators.

Conclusion I: All generators are electronics.

Conclusion II: Some inverters are portable devices.

Ans  A. Only I follows

B. Only II follows

C. Both I and II follows

D. Neither I nor II follows

Question ID : 75322912969

Q.4 छह मित्र A से F तक उत्तर की ओर मुख करके एक रौ में बैठे हैं। A अंतिम बाएं छोर पर बैठा है। B, अंतिम दाएं से बैठे व्यक्ति से एक स्थान छोड़के सीट पर बैठा है। C, B के एक स्थान छोड़के बैठा है, लेकिन अंतिम छोर पर नहीं बैठा है। D, B के बगल में नहीं बैठ सकता है। E, C के बगल में बैठा है। बाएं से 5वें स्थान पर कौन बैठा है?

Ans  A. F

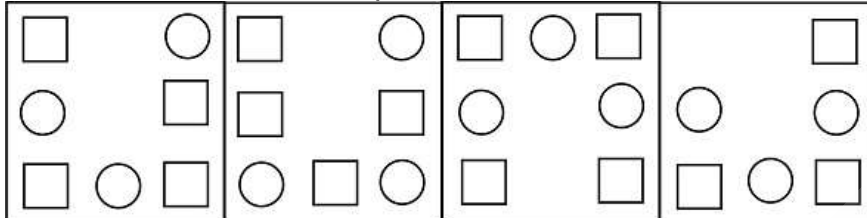
B. D

C. E

D. B

Question ID : 75322912967

Q.5 Out of the given options, three are similar in a certain manner. However, one option is NOT like the other three. Select the option which is different from the rest.



(1)

(2)

(3)

(4)

Ans  A. 4

B. 3

C. 1

D. 2

Question ID : 75322912976

Q.6 In this question, two statements have been given followed by two conclusions numbered I and II. Assuming that all information in the statements are true, analyze the two conclusions together and determine whether any of them logically and definitely follow(s) from the information given in the statements.

Statement I: Some cakes are muffins.

Statement II: All muffins are chocolates.

Conclusion I: Some cakes are chocolates.

Conclusion II: All chocolates are muffins.

Ans  A. Only II follows

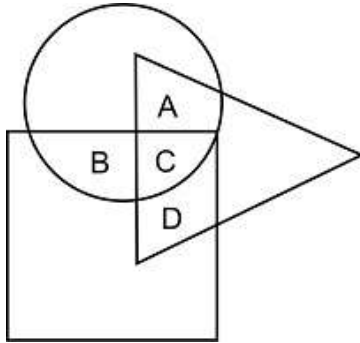
B. Both I and II follows

C. Only I follows

D. Neither I nor II follows

Question ID : 75322912968

Q.7 In the following diagram, the triangle represents MBA students, the circle represents doctors and the square represents PhD holders. Which region represents MBA students who are PhD holders but not doctors?



- Ans
- A. C
  - B. D
  - C. A
  - D. B

Question ID : 75322912972

Q.8 Which one of the following is correct? Choose the correct mathematical operators in place of the hash # sign.  
144 # 6 # 8 # 3

- Ans
- A.  $\times, =, \div$
  - B.  $\times, \div, =$
  - C.  $\div, \times, =$
  - D.  $\div, =, \times$

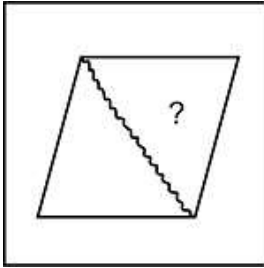
Question ID : 75322912970

Q.9 From her painting class, Ganga went 37 km to the North and then she turned West and covered 16 km. Then she turned South and covered 7 km and made a final turn to east covering 16 km. In which direction is she from her painting class?

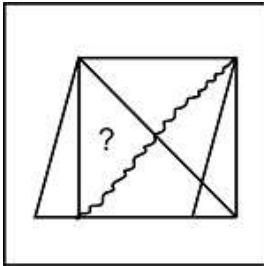
- Ans
- A. North
  - B. West
  - C. East
  - D. South

Question ID : 75322912974

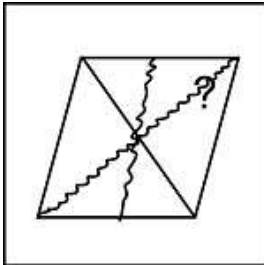
**Q.10** From the given answer figures, select the one in which the question figure is hidden/embedded.



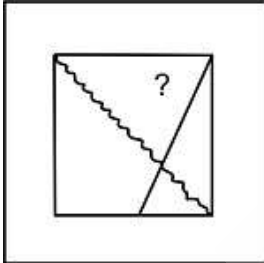
Ans  A. A  
IMAGE



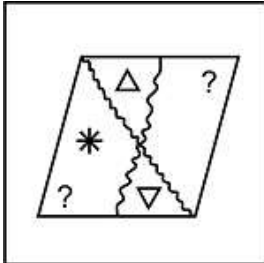
B. D  
IMAGE



C. B  
IMAGE



D. C  
IMAGE



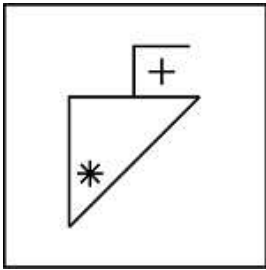
Question ID : 75322912977

**Q.11** Select the option that is related to the third term on the same basis as the second term is related to the first term.  
DELHI : CDKGH :: SIKKIM : ?

- Ans  A. RHJJHL  
 B. RHJLHJ  
 C. RHHJL  
 D. RJHJHL

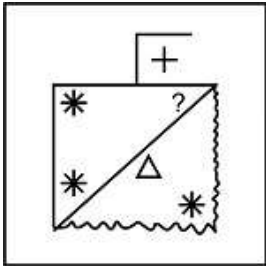
Question ID : 75322912962

**Q.12** From the given answer figures, select the one in which the question figure is hidden/embedded.



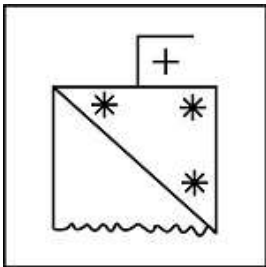
Ans  A, C

IMAGE



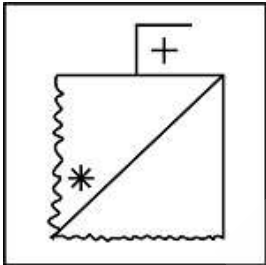
B, A

IMAGE



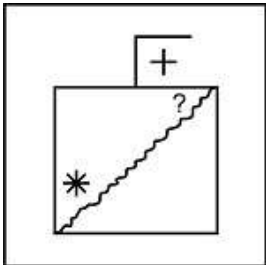
C, D

IMAGE




D, B

IMAGE



Question ID : 75322912978

Q.13 Out of the given options, three are similar in a certain manner. However, one option is NOT like the other three. Select the option which is different from the rest.



(1)

(2)

(3)

(4)

- Ans
- A. 1
  - B. 4
  - C. 3
  - D. 2

Question ID : 75322912975

Q.14 Rearrange the letters given below to form a meaningful word and select from the given alternatives, the word which is almost opposite in meaning to the word so formed.  
E, F, N, G, D, E, N, I, A

- Ans
- A. PLANGENT
  - B. SONOROUS
  - C. STILLY
  - D. CLAMOROUS

Question ID : 75322912960

Q.15 Of the five localities, A, C, B, J and L situated in a vicinity to each other, A is to the West of C, B is to the South of A, L is to the North of C and J is to the East of L. Then, in which direction J is with respect to B?

- Ans
- A. North-West
  - B. South-East
  - C. North-East
  - D. South-West

Question ID : 75322912973

Q.16 Manav is the brother's son of Akash. Akash is the only sibling of Samarth. Pawan is Akash's father. How is Manav related to Pawan?

- Ans
- A. Son's son
  - B. Father's father
  - C. Son
  - D. Father

Question ID : 75322912965

Q.17 Which of the given options fits correctly in the blank space to exhibit the similar pattern shown by the three sets below?

3		4		9	
25	2	81	?	121	2

- Ans
- A. 7
  - B. 9
  - C. 5
  - D. 6

Question ID : 75322912971

Q.18 Find the missing letter in the following series:  
P, M, J, G, ?, A

- Ans
- A. K
  - B. C
  - C. D
  - D. H

Question ID : 75322912959

Q.19 Out of the given options, three are similar in a certain manner. However, one option is NOT like the other three. Select the option which is different from the rest.

- Ans
- A. Accountancy
  - B. Chemistry
  - C. Biology
  - D. Physics

Question ID : 75322912961

Q.20 Arrange the following in a logical and meaningful order.

1. Print Application and Appointment Receipt.
2. Register in the Passport Seva Online Portal.
3. Login with the login credentials.
4. Apply.
5. Fill and submit the application.
6. Pay and Schedule Appointment.
7. Visit the appointment spot for verification.

- Ans
- A. 4, 1, 2, 5, 6, 3, 7
  - B. 2, 7, 4, 6, 5, 1, 3
  - C. 2, 3, 4, 1, 6, 5, 7
  - D. 2, 3, 4, 5, 6, 1, 7

Question ID : 75322912966

Section : General Awareness



Q.1 The Ashvamedha yajna was a \_\_\_\_\_ sacrifice by ancient Indian kings to prove their imperial sovereignty.

- Ans  A. Elephant  
 B. Horse  
 C. Buffalo  
 D. Goat

Question ID : 75322912989

Q.2 The Sawlakin folk dance originated in which of the following states?

- Ans  A. Nagaland  
 B. Assam  
 C. Mizoram  
 D. Arunachal Pradesh

Question ID : 75322912980

Q.3 What was the total number of signatories of the Indian Constitution?

- Ans  A. 284  
 B. 272  
 C. 264  
 D. 256

Question ID : 75322912995

Q.4 इंटरप्रेटर ऑफ मालडीज \_\_\_\_\_ द्वारा लिखी गई लघु कथाओं का एक संग्रह है।

- Ans  A. झुम्पा लाहिड़ी  
 B. शोभा डे  
 C. कमला भसीन  
 D. चित्रा बैनर्जी दिवाकरूणी

Question ID : 75322912994

Q.5 How many grand Prix F1 World Championships has India hosted as of 2021?

- Ans  A. 3  
 B. 4  
 C. 5  
 D. 2

Question ID : 75322912997

Q.6 The Kandariya Mahadev Temple was built under the patronage of which Rajput clan?

- Ans  A. The Rathods of Kannauj  
 B. The Chandellas of Bundelkhand  
 C. The Chauhans of Delhi and Ajmer  
 D. The Sisodiyas of Mewar

Question ID : 75322912991

Q.7 Which of the following concepts is used in GPS for determining the position of objects?

- Ans
- A. Magnetism
  - B. Wetting
  - C. Triangulation
  - D. Ranging

Question ID : 75322912983

Q.8 The patterns of colours that are formed by a kaleidoscope when held against a light source, are formed by which of the following phenomena?

- Ans
- A. Deflection of Light
  - B. Refraction of Light
  - C. Diffraction of Light
  - D. Reflection of Light

Question ID : 75322912984

Q.9 शशि थरूर का द ग्रेट इंडियन नॉवेल निम्नलिखित में से किस भारतीय महाकाव्य पर आधारित है?

- Ans
- A. रामायण
  - B. बुद्धचरित
  - C. महाभारत
  - D. अर्थशास्त्र

Question ID : 75322912992

Q.10 The concept of suspension of Fundamental Rights during emergency in India was influenced by the constitution of which country?

- Ans
- A. France
  - B. Japan
  - C. United Kingdom
  - D. Germany

Question ID : 75322912996

Q.11 Home in the World: A Memoir is a book by \_\_\_\_\_ .

- Ans
- A. P.C Mahalanobis
  - B. Abhijit Banerjee
  - C. Kaushik Basu
  - D. Amartya Sen

Question ID : 75322912993

Q.12 The Koshi river enters into India through which state?

- Ans
- A. Sikkim
  - B. Himachal Pradesh
  - C. Bihar
  - D. Uttar Pradesh

Question ID : 75322912986

Q.13 The Mahanadi river has its source in which of the following states?

- Ans  A. Chhattisgarh  
 B. Jharkhand  
 C. Madhya Pradesh  
 D. Andhra Pradesh

Question ID : 75322912987

Q.14 The Buddh International Circuit for F1 racing was shut down by which of the following authorities?

- Ans  A. Gurugram Metropolitan Development Authority  
 B. National Highways authority of India  
 C. Yamuna Expressway Industrial development authority  
 D. Haryana Urban Development Authority

Question ID : 75322912998

Q.15 Which is the highest peak of the Pir Panjal Range?

- Ans  A. Manimahesh Kailash Peak  
 B. Mount Deo Tibba  
 C. Mount Indrasan  
 D. Pir Kanthi

Question ID : 75322912988

Q.16 यवनराज्य शिलालेख निम्नलिखित में से किस स्थल पर खोजा गया था?

- Ans  A. कन्नौज  
 B. मदुरई  
 C. मधेरा  
 D. पाटलिपुत्र

Question ID : 75322912990

Q.17 According to data collected by the IMF World Economic Outlook, what is India's contribution to world GDP in FY 2019-2020?

- Ans  A. 5.62%  
 B. 4.00%  
 C. 3.25%  
 D. 7.50%

Question ID : 75322912982

Q.18 Who constitutes the Finance Commission under article 280 of the Indian Constitution?

- Ans  A. President  
 B. Finance Minister  
 C. Chief Economic Advisor  
 D. Prime Minister

Question ID : 75322912981

Q.19 The state of Tripura can be associated with which of the following folk dances?

- Ans  A. Rangma  
 B. Hojagiri  
 C. Yak Chaam  
 D. Dol Cholam

Question ID : 75322912979

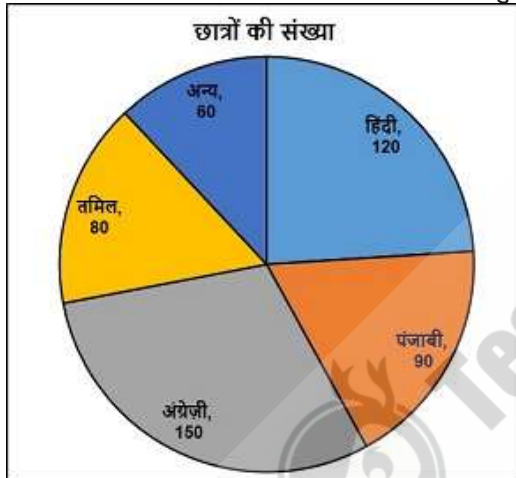
Q.20 Which of the following kitchen ingredients can be used to depress the freezing point of water?

- Ans  A. Vinegar  
 B. Baking Soda  
 C. Baking powder  
 D. Salt

Question ID : 75322912985

Section : Arithmetic Ability

Q.1 एक विद्यालय में विभिन्न विषय रखने वाले छात्रों को नीचे दिए गए पाई-चार्ट द्वारा दर्शाया गया है। 'पंजाबी' रखने वाले छात्रों का प्रतिशत 'अन्य' विषय रखने वालों की तुलना में कितने प्रतिशत अधिक है?



- Ans  A. 6%  
 B. 8%  
 C. 12%  
 D. 10%

Question ID : 75322913016

Q.2  $x\%$  of (  $35\%$  of  $600$  ) =  $35.7$  , find  $x$ .

- Ans  A. 15  
 B. 18  
 C. 17  
 D. 16

Question ID : 75322913006

Q.3 Two men start running at the same time in the same direction at a speed of 12 km/hr and 15 km/hr respectively. In what time they will be 10 km apart?

- Ans  A. 200 minutes  
 B. 220 minutes  
 C. 210 minutes  
 D. 180 minutes

Question ID : 75322913011

Q.4 Find the simple interest on Rs. 18,000 at 8.5 % per annum for a period of 3 years.

- Ans  A. Rs. 4650  
 B. Rs.4950  
 C. Rs.4509  
 D. Rs. 4590

Question ID : 75322913010

Q.5 The average of first 10 multiples of 11 is \_\_\_\_\_.

- Ans  A. 60.5  
 B. 55.5  
 C. 60  
 D. 55

Question ID : 75322913004

Q.6 45% of 1050 - 72.5 =

- Ans  A. 471  
 B. 400.5  
 C. 472  
 D. 400

Question ID : 75322913005

Q.7 Raju completed the science project in 20 days. How many days will Guru take to complete the same work if he is 25% more efficient than Raju?

- Ans  A. 16 days  
 B. 14 days  
 C. 10 days  
 D. 12 days

Question ID : 75322913013

Q.8 Find the value following expression at  $p = 4/3$  . If  $(4p - 3) \times (4p \times p + 4p + 9) \times (9p \times p - 16)$ .

- Ans  A. 0  
 B. 2  
 C. 3  
 D. 1

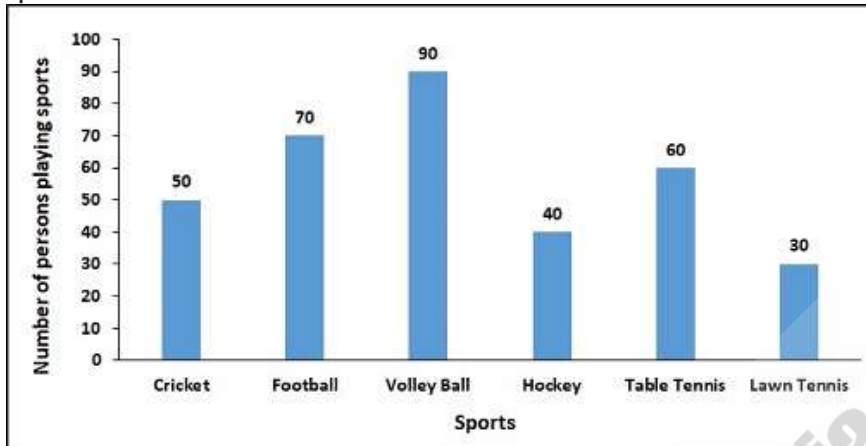
Question ID : 75322913000

Q.9 The correct expression for  $7.\overline{4646464646}$  \_\_\_\_\_ in the fractional form.

- Ans  A.  $\frac{739}{99}$   
 B.  $\frac{693}{99}$   
 C.  $\frac{639}{99}$   
 D.  $\frac{793}{99}$

Question ID : 75322913003

Q.10 Number of persons playing different sports in a society are shown by the Bar graph. If only 10% of total are playing cricket, then find the number of persons not playing any sports.



- Ans  A. 120  
 B. 160  
 C. 180  
 D. 140

Question ID : 75322913017

Q.11 The HCF of two numbers is 13. Which of the following can never be their LCM?

- Ans  A. 62  
 B. 65  
 C. 78  
 D. 52

Question ID : 75322913001

Q.12 The length of the longest pole that can be placed on the floor of a room is 24m and the length of the longest pole that can be placed in a room is 25 m. What is the height of the room?

- Ans  A. 7m  
 B. 5m  
 C. 11m  
 D. 9m

Question ID : 75322913015

Q.13 Find the value of  $x$  :  $4x(1/x) \times \sqrt{x} = 8$

- Ans  A. 2  
 B. 1  
 C.  $1/4$   
 D.  $3/4$

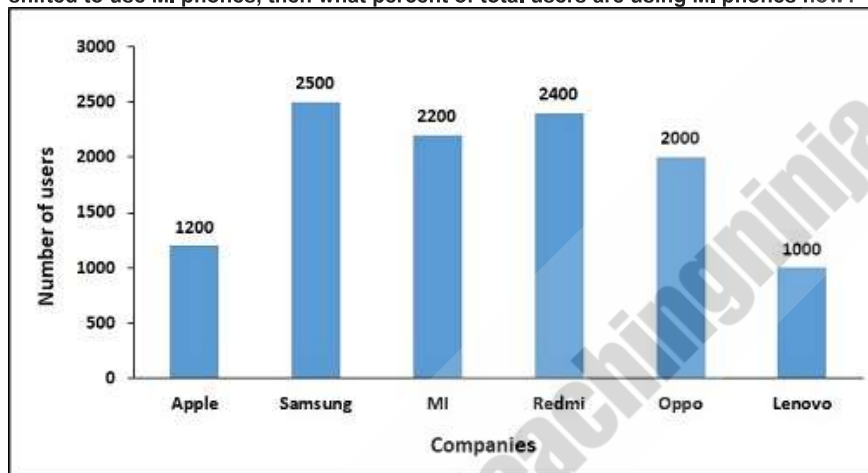
Question ID : 75322912999

Q.14 If surface area of a sphere is  $1232 \text{ cm}^2$ , then its diameter is \_\_\_\_\_. (Take  $\pi = 22/7$ )

- Ans  A. 14 cm  
 B.  $10\sqrt{2}$  cm  
 C.  $12\sqrt{2}$  cm  
 D.  $14\sqrt{2}$  cm

Question ID : 75322913014

Q.15 A survey of number of users of android phones of different companies was conducted in a locality which was represented by a Bar graph as shown. If 50% of Samsung users shifted to use MI phones, then what percent of total users are using MI phones now?



- Ans  A. 32%  
 B. 32.53%  
 C. 30%  
 D. 30.53%

Question ID : 75322913018

Q.16 Ronak weighs 86.7 kg. If he reduces his weight in the ratio 5:3, then his new weight will be \_\_\_\_\_.

- Ans  A. 56.02kg  
 B. 52.02kg  
 C. 54.18kg  
 D. 50.02kg

Question ID : 75322913008

Q.17 When a second hand car is sold for Rs. 180000 the owner loses 25%. At what price it must be sold in order to get a gain of 25%?

- Ans
- A. Rs.200000
  - B. Rs.250000
  - C. Rs.270000
  - D. Rs.300000

Question ID : 75322913007

Q.18 A shopkeeper has three different types of milk of volume 1755 litres, 3783 litres, 1599 litres. Find the least number of vessels of equal size required to store all without mixing.

- Ans
- A. 173
  - B. 182
  - C. 183
  - D. 172

Question ID : 75322913002

Q.19 The ratio of number of boys to the number of girls in a college of 720 students is 4:5. If 20 new girls are joined in the college, find how many new boys may be admitted so that the ratio of the number of boys to the number of girls may change to 4:3.

- Ans
- A. 40
  - B. 140
  - C. 80
  - D. 240

Question ID : 75322913009

Q.20 The ratio between the speeds of a bus and car is 5:8. If the car travels 180 km in 2.5 hours, find the speed of the bus.

- Ans
- A. 30 km/hr
  - B. 45 km/hr
  - C. 50 km/hr
  - D. 35 km/hr

Question ID : 75322913012

Section : General English

Q.1 Select the most appropriate idiom/phrase of the given meaning

To make a mistake

- Ans
- A. Dark Horse
  - B. Doggy bag
  - C. Drop the ball
  - D. Done to death

Question ID : 75322913032



Q.2 Four words are given, out of which only one word is spelt correctly. Choose the correctly spelt word.

- Ans  A. coalecese  
 B. coalesce  
 C. coalase  
 D. coelesce

Question ID : 75322913029

Q.3 Select the most appropriate 'one word ' for the expressions given below

Urging or requesting (someone) solemnly or earnestly to do something

- Ans  A. Gazette  
 B. Elegy  
 C. Adjure  
 D. Endowment

Question ID : 75322913033

Q.4 Fill in the blank with the most appropriate choice

The scenes are \_\_\_\_\_ pastorals of peasant and aristocratic life during the period.

- Ans  A. artless  
 B. bombastic  
 C. bucolic  
 D. audacious

Question ID : 75322913024

Q.5 Select the word that is opposite in meaning (ANTONYM) to the word given below

disenable

- Ans  A. maim  
 B. assuage  
 C. disable  
 D. prostrate

Question ID : 75322913027

Q.6 The sentence below has been divided into three parts. Select the part of the sentence that has an error. If the sentence has no error, select the option 'No Error'.

My local authority spends a lot of/ money simply trying to issue a court/ summonses and pursuing people for non-payment.

- Ans  A. No Error  
 B. My local authority spends a lot of  
 C. money simply trying to issue a court  
 D. summonses and pursuing people for non-payment.

Question ID : 75322913020

Q.7 Four words are given, out of which only one word is spelt incorrectly. Choose the incorrectly spelt word.

- Ans  A. repudiate  
 B. rescind  
 C. prevail  
 D. relavent

Question ID : 75322913030

Q.8 Select the word segment that substitutes (replaces) the bracketed word segment correctly and completes the sentence meaningfully. Select the option 'no correction required' if the sentence is correct as given.

He said (that, it'd been raining since that) afternoon.

- Ans  A. that, it'd been raining from  
 B. No correction required  
 C. that it'd been raining since that  
 D. "It'd been raining since that

Question ID : 75322913021

Q.9 The sentence below has been divided into three parts. Select the part of the sentence that has an error. If the sentence has no error, select the option 'No Error'.

The essential difference/ between Sara and I is in/ our attitude to money.

- Ans  A. No Error  
 B. between Sara and I is in  
 C. our attitude to money.  
 D. The essential difference

Question ID : 75322913019

Q.10 Fill in the blank with the most appropriate choice

Yet do not esteem him as an enemy, but \_\_\_\_\_ him as a brother.

- Ans  A. abate  
 B. aggrandize  
 C. abscond  
 D. admonish

Question ID : 75322913023

Q.11 Some parts of a sentence have been jumbled up, and labelled P, Q, R and S. Select the option that gives the correct sequence in which these parts can be rearranged to form a meaningful and grammatically correct sentence.

So many children  
P. brutalized by years  
Q. crimes have  
R. themselves been  
S. who commit violent  
of abuse and neglect.

- Ans  A. SRQP  
 B. SPQR  
 C. SQRP  
 D. SPRQ

Question ID : 75322913025

Q.12 Select the word that is similar in meaning (SYNONYM) to the word given below

subsidize

- Ans  A. waggish  
 B. arbitrary  
 C. contribute  
 D. erratic

Question ID : 75322913028

Q.13 The question below consist of a set of labelled (P, Q, R, S) sentences. Out of four options given, select the most logical order of the sentences which form a paragraph.

Early in the Nazi regime of Adolf Hitler, Anne's father, Otto Frank (1889–1980), a German businessman, took his wife and two daughters to live in Amsterdam.

P. That day she began writing in the book: "I hope I will be able to confide everything to you, as I have never been able to confide in anyone, and I hope you will be a great source of comfort and support."

Q. On June 12, 1942, she received a red-and-white plaid diary for her 13th birthday.

R. In 1941, after German forces occupied the Netherlands, Anne was compelled to transfer from a public school to a Jewish one.

S. When Anne's sister, Margot, was faced with deportation (supposedly to a forced-labour camp), the Franks went into hiding on July 6, 1942, in the backroom office and warehouse of Otto Frank's food-products business.

With the aid of a few non-Jewish friends, among them Miep Gies, who smuggled in food and other supplies, the Frank family and four other Jews—Hermann and Auguste van Pels and their son, Peter, and Fritz Pfeffer—lived confined to the "secret annex."

- Ans  A. RQSP  
 B. RSPQ  
 C. RQPS  
 D. RPSQ

Question ID : 75322913026

Q.14 Select the word segment that substitutes (replaces) the bracketed word segment correctly and completes the sentence meaningfully. Select the option 'no correction required' if the sentence is correct as given.

A natural-born mechanic and tinkerer, (he kept many an old flivver on) the road.

- Ans  A. No correction required  
 B. he keeps many an old flivvers on  
 C. he kept many an old flivvers on  
 D. he kept many old flivver on

Question ID : 75322913022

Q.15 Select the most appropriate meaning of the given idiom/phrase

A blessing in disguise

- Ans  A. Something that's abundant in quantity and/or cheap; something that's easily acquired  
 B. Something good that isn't recognized by first  
 C. An action or task that is simple to do  
 D. Something that is very pricey; expensive

Question ID : 75322913031

**Comprehension:**

Read the passage carefully and choose the best answer to each question out of the four alternatives

All viruses are made up of two kinds of substance. First, all viruses contain proteins. Proteins are chemical substances that occur in all living creatures. A particle, or molecule, of a protein consists of a long chain of substances called amino acids. There are about 20 different kinds of amino acid in proteins. These can be arranged in any order on the protein chain. Different kinds of plant or animal contain proteins with different arrangements of amino acids. The protein generally forms the outer coat of a virus. This outer layer of protein encloses the second kind of substance found in all viruses - nucleic acid.

**SubQuestion No : 16**

**Q.16** It is stated in the passage that proteins \_\_\_\_\_.

- Ans**
- A. are the only substance found in viruses
  - B. are found in all living creatures
  - C. are also known as amino acids
  - D. are not found in plant based life forms

Question ID : 75322913039

**Comprehension:**

Read the passage carefully and choose the best answer to each question out of the four alternatives

All viruses are made up of two kinds of substance. First, all viruses contain proteins. Proteins are chemical substances that occur in all living creatures. A particle, or molecule, of a protein consists of a long chain of substances called amino acids. There are about 20 different kinds of amino acid in proteins. These can be arranged in any order on the protein chain. Different kinds of plant or animal contain proteins with different arrangements of amino acids. The protein generally forms the outer coat of a virus. This outer layer of protein encloses the second kind of substance found in all viruses - nucleic acid.

**SubQuestion No : 17**

**Q.17** According to the passage, which of the following option is incorrect? Choose one option.

- Ans**
- A. Different kinds of plant or animal contain proteins with different arrangements of amino acids.
  - B. All viruses are made up of proteins.
  - C. The second type of substance found in all viruses is nucleic acid.
  - D. Proteins are chemical substances that occur in all living creatures of the animal kingdom only.

Question ID : 75322913036

**Comprehension:**

Read the passage carefully and choose the best answer to each question out of the four alternatives

All viruses are made up of two kinds of substance. First, all viruses contain proteins. Proteins are chemical substances that occur in all living creatures. A particle, or molecule, of a protein consists of a long chain of substances called amino acids. There are about 20 different kinds of amino acid in proteins. These can be arranged in any order on the protein chain. Different kinds of plant or animal contain proteins with different arrangements of amino acids. The protein generally forms the outer coat of a virus. This outer layer of protein encloses the second kind of substance found in all viruses - nucleic acid.

**SubQuestion No : 18**

**Q.18** It is stated in the passage that amino acid \_\_\_\_\_.

- Ans**
- A. is a molecular chain in which protein is found
  - B. are of 20 different kinds arranged in a similar pattern across all life forms
  - C. forms the outer coat of the virus
  - D. are about 20 different kinds.

Question ID : 75322913038

**Comprehension:**

Read the passage carefully and choose the best answer to each question out of the four alternatives

All viruses are made up of two kinds of substance. First, all viruses contain proteins. Proteins are chemical substances that occur in all living creatures. A particle, or molecule, of a protein consists of a long chain of substances called amino acids. There are about 20 different kinds of amino acid in proteins. These can be arranged in any order on the protein chain. Different kinds of plant or animal contain proteins with different arrangements of amino acids. The protein generally forms the outer coat of a virus. This outer layer of protein encloses the second kind of substance found in all viruses - nucleic acid.

**SubQuestion No : 19**

**Q.19** How many kinds of amino acids can be found in proteins?

- Ans  A. 25  
 B. 30  
 C. 10  
 D. 20

Question ID : 75322913035

**Comprehension:**

Read the passage carefully and choose the best answer to each question out of the four alternatives

All viruses are made up of two kinds of substance. First, all viruses contain proteins. Proteins are chemical substances that occur in all living creatures. A particle, or molecule, of a protein consists of a long chain of substances called amino acids. There are about 20 different kinds of amino acid in proteins. These can be arranged in any order on the protein chain. Different kinds of plant or animal contain proteins with different arrangements of amino acids. The protein generally forms the outer coat of a virus. This outer layer of protein encloses the second kind of substance found in all viruses - nucleic acid.

**SubQuestion No : 20**

**Q.20** How many substances is a virus made of?

- Ans  A. three  
 B. four  
 C. one  
 D. two

Question ID : 75322913037

## Section : General Hindi

**Q.1** निम्नलिखित प्रश्न में, चार विकल्पों में से, उस विकल्प का चयन करें जो बहुवचन रूप का सबसे अच्छा विकल्प है।

- Ans  A. बुराई  
 B. अक्षत  
 C. गली  
 D. सोना

Question ID : 75322913048

Q.2 निम्नलिखित प्रश्न में, चार विकल्पों में से, उस विकल्प का चयन करें जो विलोम शब्द का सबसे अच्छा विकल्प है।

मिथ्या

- Ans  A. गलत  
 B. सत्य  
 C. असत्य  
 D. झूठ

Question ID : 75322913044

Q.3 निम्नलिखित प्रश्न में, चार विकल्पों में से, उस सही विकल्प का चयन करें जो वाक्यांशों के लिए एक शब्द का विकल्प हो।  
आग से झूलसा हुआ

- Ans  A. यज्ञ  
 B. अनन्य  
 C. आत्मघाती  
 D. अनलदग्ध

Question ID : 75322913045

Q.4 निम्नलिखित प्रश्न में, चार विकल्पों में से, उस विकल्प का चयन करें जो दी गई मुहावरे का सही अर्थ वाला विकल्प है।  
थैली खोलना

- Ans  A. सर्वत्र होना  
 B. स्पष्ट कहना  
 C. लाभ होना  
 D. जी खोलकर खर्च करना

Question ID : 75322913054

Q.5 निम्नलिखित प्रश्न में, चार विकल्पों में से, उस विकल्प का चयन करें जो विराम चिह्न युक्त वाक्य का सही विकल्प हो।

- Ans  A. माताजी ने बच्चों से कहा, जो मेरी बात मानेगा, उसे मिठाई मिलेगी।  
 B. माताजी ने बच्चों से कहा-जो मेरी बात मानेगा उसे मिठाई मिलेगी।  
 C. माताजी ने बच्चों से कहा जो मेरी बात मानेगा उसे मिठाई मिलेगी।  
 D. माताजी ने बच्चों से कहा, "जो मेरी बात मानेगा उसे मिठाई मिलेगी।"

Question ID : 75322913051

Q.6 निम्नलिखित प्रश्न में, चार विकल्पों में से, उस विकल्प का चयन करें जो पुल्लिंग रूप वाला विकल्प है।

- Ans  A. नाक  
 B. तुला  
 C. झगड़ा  
 D. हथेली

Question ID : 75322913047

Q.7 निम्नलिखित प्रश्न में, चार विकल्पों में से, उस विकल्प का चयन करें जो उपसर्ग से बने शब्द का सही विकल्प नहीं हो।

- Ans  A. घटिया  
 B. पर्याप्त  
 C. नगण्य  
 D. कुरीति

Question ID : 75322913042

Q.8 निम्नलिखित प्रश्न में, चार विकल्पों में से, उस सही विकल्प का चयन करें जो रिक्त स्थान के लिए उपयुक्त शब्द का सही विकल्प है।  
 जहाँ भाषाओं का \_\_\_\_\_ होता है, वहाँ वास्तव में विभिन्न जनपदों के हृदय ही मिलते हैं।

- Ans  A. रहस्य  
 B. अलगाव  
 C. मतभेद  
 D. मिलन

Question ID : 75322913046

Q.9 निम्नलिखित प्रश्न में, चार विकल्पों में से, उस विकल्प का चयन करें जो दिए गए लोकोक्ति का सही अर्थ वाला विकल्प है।  
 आठ कनौजिए नौ चूल्हे

- Ans  A. सबसे अलग  
 B. फूट होना  
 C. लाभ की आशा न होना  
 D. विपरीत आचरण

Question ID : 75322913052

Q.10 निम्नलिखित प्रश्न में, चार विकल्पों में से, उस विकल्प का चयन करें जो दिए गए शब्द-युग्म के अर्थ का सबसे अच्छा विकल्प है।  
 रद-रद्द

- Ans  A. लीन-खराब  
 B. झगडा-खराब  
 C. दांत-लीन  
 D. दांत-खराब

Question ID : 75322913050

Q.11 निम्नलिखित प्रश्न में, चार विकल्पों में से, उस विकल्प का चयन करें जो दिए गए शब्द के लिए सही बहुव्रीहि समास के विग्रह का विकल्प हो।  
 दुरात्मा

- Ans  A. दूर से आत्मा  
 B. दूर की आत्मा  
 C. बुरी आत्मा वाला  
 D. डर का आत्मा

Question ID : 75322913041

Q.12 निम्नलिखित प्रश्न में, चार विकल्पों में से, उस विकल्प का चयन करें जो दी गई मुहावरे का सही अर्थ वाला विकल्प है।  
नचा देना

- Ans  A. बेइज्जत करना  
 B. घबरा जाना  
 C. बहुत परेशान कर देना  
 D. लज्जित करना

Question ID : 75322913053

Q.13 निम्नलिखित प्रश्न में, चार विकल्पों में से, उस विकल्प का चयन करें जो दिए गए शब्द के सही संधि विच्छेद का विकल्प हो।  
सदाचार

- Ans  A. सत् + आचार  
 B. सद + आचार  
 C. सदा + आचार  
 D. सदा + चार

Question ID : 75322913040

Q.14 निम्नलिखित प्रश्न में, चार विकल्पों में से, उस विकल्प का चयन करें जो दिए गए शब्द के पर्यायवाची शब्द का सही विकल्प नहीं है।  
गरुड़

- Ans  A. वैनतेय  
 B. खगेश  
 C. विघ्नेश  
 D. पक्षिराज

Question ID : 75322913043

Q.15 निम्नलिखित प्रश्न में, चार विकल्पों में से, उस विकल्प का चयन करें जो उत्तम पुरुष वाचक सर्वनाम शब्द का सबसे अच्छा विकल्प है।

- Ans  A. उनको  
 B. उन्हें  
 C. हम  
 D. आपको

Question ID : 75322913049

#### Comprehension:

नीचे दिए गये गद्यांश को ध्यानपूर्वक पढ़ें और चार विकल्पों में से प्रत्येक प्रश्न का सर्वोत्तम उत्तर चुनें।  
मनुष्य के जीवन में लक्ष्य का होना बहुत आवश्यक है। लक्ष्य के बिना जीवन दिशाहीन तथा व्यर्थ ही है। बिना लक्ष्य के जीवन में इधर-उधर भटकते रहिये कुछ भी प्राप्त नहीं कर पाओगे। यदि कुछ करना चाहते तो पहले अपना एक लक्ष्य बनाओ और उस पर कार्य करो। वास्तव में जीवन उसी का सार्थक है जिसमें परिस्थितियों को बदलने का साहस है। गांधीजी कहते थे कुछ न करने से अच्छा है, कुछ करना। जो कुछ करता है वही सफल-असफल होता है। हर इंसान की अपनी-अपनी क्षमता होती है और उसी के अनुसार वह लक्ष्य निर्धारित करता है। जैसे विद्यार्थी का लक्ष्य है सर्वाधिक अंक प्राप्त करना तो नौकरी करने वालों का लक्ष्य होगा पदोन्नति प्राप्त करना। इसी तरह किसी महिला का लक्ष्य आत्मनिर्भर होना हो सकता है।

#### SubQuestion No : 16

Q.16 इनमें से कौन-सा लक्ष्य का समानार्थी शब्द नहीं है?

- Ans  A. ध्येय  
 B. उद्देश्य  
 C. प्रयोजन  
 D. अलक्ष्य

Question ID : 75322913059



**Comprehension:**

नीचे दिए गये गद्यांश को ध्यानपूर्वक पढ़ें और चार विकल्पों में से प्रत्येक प्रश्न का सर्वोत्तम उत्तर चुनें। मनुष्य के जीवन में लक्ष्य का होना बहुत आवश्यक है। लक्ष्य के बिना जीवन दिशाहीन तथा व्यर्थ ही है। बिना लक्ष्य के जीवन में इधर-उधर भटकते रहिये कुछ भी प्राप्त नहीं कर पाओगे। यदि कुछ करना चाहते तो पहले अपना एक लक्ष्य बनाओ और उस पर कार्य करो। वास्तव में जीवन उसी का सार्थक है जिसमें परिस्थितियों को बदलने का साहस है। गांधीजी कहते थे कुछ न करने से अच्छा है, कुछ करना। जो कुछ करता है वही सफल-असफल होता है। हर इंसान की अपनी-अपनी क्षमता होती है और उसी के अनुसार वह लक्ष्य निर्धारित करता है। जैसे विद्यार्थी का लक्ष्य है सर्वाधिक अंक प्राप्त करना तो नौकरी करने वालों का लक्ष्य होगा पदोन्नति प्राप्त करना। इसी तरह किसी महिला का लक्ष्य आत्मनिर्भर होना हो सकता है।

**SubQuestion No : 17****Q.17** प्रत्येक व्यक्ति अपना लक्ष्य किसके अनुसार निर्धारित करता है?

- Ans
- A. अपनी दुर्बलता
  - B. अपने अंक
  - C. अपने पद
  - D. अपनी क्षमता

Question ID : 75322913058

**Comprehension:**

नीचे दिए गये गद्यांश को ध्यानपूर्वक पढ़ें और चार विकल्पों में से प्रत्येक प्रश्न का सर्वोत्तम उत्तर चुनें। मनुष्य के जीवन में लक्ष्य का होना बहुत आवश्यक है। लक्ष्य के बिना जीवन दिशाहीन तथा व्यर्थ ही है। बिना लक्ष्य के जीवन में इधर-उधर भटकते रहिये कुछ भी प्राप्त नहीं कर पाओगे। यदि कुछ करना चाहते तो पहले अपना एक लक्ष्य बनाओ और उस पर कार्य करो। वास्तव में जीवन उसी का सार्थक है जिसमें परिस्थितियों को बदलने का साहस है। गांधीजी कहते थे कुछ न करने से अच्छा है, कुछ करना। जो कुछ करता है वही सफल-असफल होता है। हर इंसान की अपनी-अपनी क्षमता होती है और उसी के अनुसार वह लक्ष्य निर्धारित करता है। जैसे विद्यार्थी का लक्ष्य है सर्वाधिक अंक प्राप्त करना तो नौकरी करने वालों का लक्ष्य होगा पदोन्नति प्राप्त करना। इसी तरह किसी महिला का लक्ष्य आत्मनिर्भर होना हो सकता है।

**SubQuestion No : 18****Q.18** इस अनुच्छेद का कोई उपयुक्त शीर्षक-

- Ans
- A. पदोन्नति प्राप्त करना
  - B. परिस्थितियों को बदलना
  - C. सफल-असफल व्यक्ति
  - D. जीवन में लक्ष्य का महत्व

Question ID : 75322913060

**Comprehension:**

नीचे दिए गये गद्यांश को ध्यानपूर्वक पढ़ें और चार विकल्पों में से प्रत्येक प्रश्न का सर्वोत्तम उत्तर चुनें। मनुष्य के जीवन में लक्ष्य का होना बहुत आवश्यक है। लक्ष्य के बिना जीवन दिशाहीन तथा व्यर्थ ही है। बिना लक्ष्य के जीवन में इधर-उधर भटकते रहिये कुछ भी प्राप्त नहीं कर पाओगे। यदि कुछ करना चाहते तो पहले अपना एक लक्ष्य बनाओ और उस पर कार्य करो। वास्तव में जीवन उसी का सार्थक है जिसमें परिस्थितियों को बदलने का साहस है। गांधीजी कहते थे कुछ न करने से अच्छा है, कुछ करना। जो कुछ करता है वही सफल-असफल होता है। हर इंसान की अपनी-अपनी क्षमता होती है और उसी के अनुसार वह लक्ष्य निर्धारित करता है। जैसे विद्यार्थी का लक्ष्य है सर्वाधिक अंक प्राप्त करना तो नौकरी करने वालों का लक्ष्य होगा पदोन्नति प्राप्त करना। इसी तरह किसी महिला का लक्ष्य आत्मनिर्भर होना हो सकता है।

**SubQuestion No : 19****Q.19** किसके जीवन को सार्थक जीवन कहा गया है?

- Ans
- A. जिसमें परिस्थितियों को बदलने की हिम्मत है
  - B. जो पथ भ्रष्ट है
  - C. जिसका कोई लक्ष्य नहीं है
  - D. जो परिस्थितियों के अनुसार स्वयं को बदल देता है

Question ID : 75322913057

**Comprehension:**

नीचे दिए गये गद्यांश को ध्यानपूर्वक पढ़ें और चार विकल्पों में से प्रत्येक प्रश्न का सर्वोत्तम उत्तर चुनें। मनुष्य के जीवन में लक्ष्य का होना बहुत आवश्यक है। लक्ष्य के बिना जीवन दिशाहीन तथा व्यर्थ ही है। बिना लक्ष्य के जीवन में इधर-उधर भटकते रहिये कुछ भी प्राप्त नहीं कर पाओगे। यदि कुछ करना चाहते तो पहले अपना एक लक्ष्य बनाओ और उस पर कार्य करो। वास्तव में जीवन उसी का सार्थक है जिसमें परिस्थितियों को बदलने का साहस है। गांधीजी कहते थे कुछ न करने से अच्छा है, कुछ करना। जो कुछ करता है वही सफल-असफल होता है। हर इंसान की अपनी-अपनी क्षमता होती है और उसी के अनुसार वह लक्ष्य निर्धारित करता है। जैसे विद्यार्थी का लक्ष्य है सर्वाधिक अंक प्राप्त करना तो नौकरी करने वालों का लक्ष्य होगा पदोन्नति प्राप्त करना। इसी तरह किसी महिला का लक्ष्य आत्मनिर्भर होना हो सकता है।

**SubQuestion No : 20****Q.20 अनुच्छेद के अनुसार किसके बिना जीवन दिशाहीन तथा व्यर्थ है?**

- Ans
- A. मित्र
  - B. नौकरी
  - C. परिवार
  - D. लक्ष्य

Question ID : 75322913056

**Section : Discipline1****Q.1 "Object Permanence" is a major characteristic of which stage of child development ?**

- Ans
- A. Early-childhood
  - B. Infancy
  - C. Middle-childhood
  - D. Adulthood

Question ID : 75322913067

**Q.2 This refers to the learners active attention to the stimuli and his/her motivation to learn.**

- Ans
- A. Responding
  - B. Organization
  - C. Valuing
  - D. Receiving

Question ID : 75322913073

**Q.3 Kida at this stage understand that if you break a candy into smaller pieces it will be the same amount as when the candy was whole. Identify the stage.**

- Ans
- A. Pre-operational stage
  - B. Sensory motor stage
  - C. Formal operational stage
  - D. Concrete operational stage

Question ID : 75322913064

**Q.4 Children in a democratic culture tends to acquire democratic values and attitudes. This statement clarifies the role of \_\_\_\_\_ factor affecting learning.**

- Ans
- A. Emotional
  - B. Psychological
  - C. Cultural
  - D. Environmental

Question ID : 75322913080

Q.5 A child may have a schema about a type of animal, ex : Dog. Suddenly, the child went awestruck when he encounters a new, big and different breed of dog again. So, in this case the child is \_\_\_\_\_ the new information into his existing schema about dog.

- Ans
- A. Transforming
  - B. Assimilating
  - C. Manipulating
  - D. Accommodating

Question ID : 75322913068

Q.6 Whose sociocultural theory of learning explains that learning occurs during social interactions between individuals ?

- Ans
- A. Piaget
  - B. Socrates
  - C. Pavlov
  - D. Vygotsky

Question ID : 75322913076

Q.7 Identify the period from the day of conception till the birth of the child.

- Ans
- A. Pre-natal period
  - B. Infancy
  - C. Late-childhood
  - D. Early- childhood

Question ID : 75322913061

Q.8 The affective domain includes the manner in which we deal the things \_\_\_\_\_.

- Ans
- A. Psychologically
  - B. Spiritually
  - C. Analytically
  - D. Emotionally

Question ID : 75322913070

Q.9 According to Jean Piaget, the child acquires the skill of using symbols, languages at which stage ?

- Ans
- A. Sensory motor stage
  - B. Formal operational stage
  - C. Pre-operational stage
  - D. Concrete operational stage

Question ID : 75322913062

Q.10 If the school atmosphere is \_\_\_\_\_, it adversely affects the learning process.

- Ans
- A. Disciplined
  - B. Harmonious
  - C. Positive
  - D. Unconducive

Question ID : 75322913078

Q.11 The cognitive domain involves \_\_\_\_\_ and the development of \_\_\_\_\_ skills.

- Ans
- A. Singing skills, dance
  - B. Knowledge, writing
  - C. Theory, drawing
  - D. Knowledge, intellectual

Question ID : 75322913069

Q.12 Which amongst the following is "not" a socio-cultural factor affecting learning process ?

- Ans
- A. Handwriting
  - B. Gender
  - C. Language
  - D. Income level

Question ID : 75322913077

Q.13 In which domain the hierarchy ranges from reflexes and basic movement to non discursive communication and meaningfully expressive activity ?

- Ans
- A. Cognitive
  - B. Synthesis
  - C. Affective
  - D. Psychomotor

Question ID : 75322913074

Q.14 "इलाका और पड़ोस" किस कारक के अंतर्गत आता है जो अधिगम को प्रभावित करता है?

- Ans
- A. पर्यावरणीय
  - B. सांस्कृतिक
  - C. संवेगनात्मक
  - D. सामाजिक

Question ID : 75322913079

Q.15 Which period is a time of sudden diverse, confusing, frightening mood swings ?

- Ans
- A. Adolescence
  - B. Infancy
  - C. Early-childhood
  - D. Adulthood

Question ID : 75322913065

Q.16 "Peer-Pressure" is a type of which factor that affects learning ?

- Ans
- A. Cultural factor
  - B. Emotional factor
  - C. Social factor
  - D. Personal factor

Question ID : 75322913075

Q.17 The period just after the babyhood for about a year and a half is known as\_\_\_\_\_.

- Ans  A. Adulthood  
 B. Pre-school childhood  
 C. Toddlerhood  
 D. Adolescence

Question ID : 75322913063

Q.18 Jean Piaget theory of cognitive development has \_\_\_\_\_ stages.

- Ans  A. 2  
 B. 4  
 C. 3  
 D. 10

Question ID : 75322913066

Q.19 The psycho-motor domain includes physical movements, coordination and use of the \_\_\_\_\_ skills.

- Ans  A. Motor  
 B. Knowledge  
 C. Mathematics  
 D. Subject

Question ID : 75322913071

Q.20 एक सुसंगत या अद्वितीय नया संपूर्ण बनाने के लिए भागों को एक साथ रखने की क्षमता को \_\_\_\_\_ के रूप में जाना जाता है।

- Ans  A. विश्लेषण  
 B. बनाना  
 C. मूल्यांकन करना  
 D. संश्लेषण

Question ID : 75322913072

Section : Discipline2

Q.1 Curriculum development "does not" include :-

- Ans  A. Organising the learning experiences  
 B. Writing research papers  
 C. Selecting the content  
 D. Evaluating the learning outcomes

Question ID : 75322913097

Q.2 PIED stands for :-

- Ans  A. Project Integrated Education For The Disabled.  
 B. Project Implement Education For The Disabled.  
 C. Project Integrated Education  
 D. Project Integrated Education For The Disabilities.

Question ID : 75322913094

Q.3 यह परिसंपत्ति या सेवा कार्यो को सार्वजनिक से निजी स्वामित्व या नियंत्रण में स्थानांतरित करने और बंद क्षेत्रों को केवल निजी क्षेत्र में खोलने के लिए संदर्भित करता है।

- Ans
- A. वैश्वीकरण
  - B. निवारण
  - C. उदारीकरण
  - D. निजीकरण

Question ID : 75322913088

Q.4 "समावेशी शिक्षा" के महत्व के बारे में गलत कथन का चयन करें।

- Ans
- A. यह स्वीकृति की भावना को विकसित करता है।
  - B. यह नागरिक अधिकारों का समर्थन करता है।
  - C. यह मतभेदों को और अधिक "अलग" बनाता है।
  - D. यह अधिगम के अनुभवों को बेहतर बनाता है।

Question ID : 75322913093

Q.5 Identify which one of the following is not a type of "curriculum".

- Ans
- A. Class curriculum
  - B. Excluded curriculum
  - C. Explicit curriculum
  - D. Hidden curriculum

Question ID : 75322913096

Q.6 Which amongst the following "Article" provides the provision for early childhood care and education to children below the age of 6 years ?

- Ans
- A. Article 15
  - B. Article 21A
  - C. Article 45
  - D. Article 14

Question ID : 75322913084

Q.7 A child who can understand multiple languages shows the importance of \_\_\_\_ factor influencing learning.

- Ans
- A. Age-factor
  - B. Psychological factor
  - C. Socio-cultural factor
  - D. Environmental factor

Question ID : 75322913082

Q.8 एक \_\_\_\_\_ को तकनीकी नवाचार और बढ़ते मानव अंतर्संबंध और वैश्वीकरण की विशेषता के रूप में परिभाषित किया गया है। यह जीवन प्रत्याशा में वृद्धि, साक्षरता और लैंगिक समानता जैसे परिवर्तन लाता है, जिससे प्राकृतिक संतुलन आता है।

- Ans
- A. समकालीन समाज
  - B. आवासीय सोसायटी
  - C. एजुकेशनल कैम्पस सोसाइटी
  - D. भारतीय समाज

Question ID : 75322913083

Q.9 The term "Curriculum" has been derived from a Latin word "Currere" which means :-

- Ans  A. Race express  
 B. Race  
 C. Race cause  
 D. Race course

Question ID : 75322913099

Q.10 Which amongst the following is "not" a main component of Curriculum ?

- Ans  A. Objectives  
 B. Research  
 C. Content  
 D. Learning experiences

Question ID : 75322913095

Q.11 Socio-cultural factors can influence a child learning in \_\_\_\_ ways.

- Ans  A. Both ways Negative as well as Positive  
 B. Negative ways  
 C. Only positive ways  
 D. Positive ways

Question ID : 75322913081

Q.12 Which of the following is "not" a correct way to stop Gender Inequality?

- Ans  A. By creating equal job opportunities.  
 B. By ceasing child marriages.  
 C. By promoting human rights.  
 D. By setting different gender roles and duties.

Question ID : 75322913090

Q.13 Priyanka is suffering from "dyslexia". So, which of the following characteristic will she show ?

- Ans  A. Lack of motor-abilities  
 B. Divergent thinking.  
 C. Attention deficit disorder.  
 D. Inability to read fluently.

Question ID : 75322913092

Q.14 \_\_\_\_ is the condition of being arranged in social strata or classes within a group.

- Ans  A. Social Stratification  
 B. Social Classification  
 C. Social Belongingness  
 D. Social Equilibrium

Question ID : 75322913085

Q.15 \_\_\_\_\_ is the comprehensive and integrated flagship programme, of the Government of India, to attain the Universal Elementary Education(UEE) in the country in a mission mode.

- Ans
- A. Nayee Talim
  - B. Eklavya Model
  - C. Sarva-Shiksha Abhiyan
  - D. National Policy of Education 1986

Question ID : 75322913087

Q.16 The traditional curriculum was centered around whom and who predominates in it ?

- Ans
- A. School-centered, School
  - B. Teacher-centered, Both
  - C. Subject- centered , Teacher
  - D. Child- centered, Child

Question ID : 75322913100

Q.17 Who gave the following definition of 'Curriculum'?  
"Curriculum" should be conceived as an epitome of the rounded whole of the knowledge and experience of the human race."

- Ans
- A. Morroe
  - B. Crow and Crow
  - C. Frobel
  - D. Cunningham

Question ID : 75322913098

Q.18 "The act of ensuring that all children despite their differences, receive the opportunity of being part of the same classroom as other children of their age."

- Ans
- A. Disable education
  - B. Inclusive education
  - C. Primary education
  - D. Subjective education

Question ID : 75322913091

Q.19 Which amongst the following "does not" comes under the importance of diversity?

- Ans
- A. It fosters the feeling of unity.
  - B. It creates emotional disharmony among people.
  - C. It helps to empathize people.
  - D. It helps people to share their experiences.

Question ID : 75322913089

Q.20 Which amongst the following is "not" a cause of linguistic differences in our country?

- Ans
- A. Geographical Causes
  - B. Political Causes
  - C. Moral Causes
  - D. Economic Causes

Question ID : 75322913086



Q.1 ICT promotes \_\_\_\_\_ and \_\_\_\_\_ skills.

Ans  A. High order thinking and reasoning skills

B. Debating and Extempore skills

C. Cooking and Gardening skills

D. Writing and Speaking skills

Question ID : 75322913106

Q.2 A child brought up in a Bihari Family ( where all members of the house communicate with each other in Bihari )so, the child will automatically grow up learning the same language. Identify that the language learnt by child within his family environment will be his/her :-

Ans  A. First language

B. Regional language

C. School language

D. Second language

Question ID : 75322913109

Q.3 Vinod is teaching mathematics in a priamry school. Choose the most important aspect of his lesson plan.

Ans  A. Following the sequence of text-book.

B. Providing opportunities to children to allow construction of concepts through inductive method.

C. Giving children extra home-work.

D. Writing activities and extra-questions for further references.

Question ID : 75322913120

Q.4 The use of objective based teaching and testing does not include :-

Ans  A. Apparent expected student outcomes

B. Assured assessments validity.

C. Clear curriculum definition

D. Ambiguity over syllabus.

Question ID : 75322913108

Q.5 साक्षी एक विद्यालय में पढ़ा रही है। निम्नलिखित गुण का चयन करें जो उसे एक 'पारंपरिक शिक्षक' से अलग बनाता है।

Ans  A. वह पढ़ाते समय शिक्षण सहायक सामग्री का उपयोग नहीं करती है।

B. वह चाक और टॉक विधि को बढ़ावा देती है।

C. वह ICT से परिचित है।

D. वह शिक्षण के निगमनात्मक उपागम का उपयोग करती है।

Question ID : 75322913102

Q.6 One-word stage in language acquisition is known as \_\_\_\_\_.

Ans  A. Monostage

B. Telegraphic stage.

C. Holophrastic stage

D. Cooing stage

Question ID : 75322913117

Q.7 Which one of the following is not an "objective of using ICT in education"?

- Ans  A. To hide transparency in education system  
 B. To ameliorate the quality of teaching in remote areas  
 C. To provide accessibility through online medium of education.  
 D. To eliminate the wastage of manual labour done by teachers.

Question ID : 75322913101

Q.8 The child learns his \_\_\_\_\_ language primarily from \_\_\_\_\_ and \_\_\_\_\_.

- Ans  A. first, parents and caretakers.  
 B. second, school and family.  
 C. first, school and community.  
 D. second, parents and grandparents

Question ID : 75322913110

Q.9 Identify the correct sequence of general objectives of teaching and learning the English language ?

- Ans  A. SRLW  
 B. LRSW  
 C. RSLW  
 D. LSRW

Question ID : 75322913112

Q.10 Which of the following "does not" comes under the use of ICT in education ?

- Ans  A. It helps a teacher to teach creatively.  
 B. It makes teaching-learning monochromatic.  
 C. It expedite sharing of resources.  
 D. It shifts the outlook of the learner from hard work to smart work.

Question ID : 75322913103

Q.11 Identify the best strategy to explain that  $\frac{1}{4}$  is less than  $\frac{1}{3}$ .

- Ans  A. Using LCM method.  
 B. Using paper strips.  
 C. Using number chart.  
 D. Using clay toys.

Question ID : 75322913119

Q.12 OBPTA Model stands for :-

- Ans  A. Objective Based Plan Team Association  
 B. Objective Based Planning, Teaching and Assessment.  
 C. Objective Based Part Time Assessment.  
 D. Objective Based Part Test Analysis.

Question ID : 75322913107

Q.13 "Babbling" stage of language acquisition in a baby is between :-

- Ans  A. 9 to 12 months  
 B. 4 to 7 years old  
 C. 0 to 3 months old  
 D. 6 to 8 months old

Question ID : 75322913114

Q.14 Choose the statement which best describes "ICT in Education".

- Ans  A. ICT makes teaching learning more effective.  
 B. ICT acts as a liability for creating diversity in the classroom atmosphere.  
 C. ICT makes young learners lethargic.  
 D. ICT is a cost-expensive technology.

Question ID : 75322913105

Q.15 Which statement is "incorrect" in regards to objectives of "Teaching Mathematics" at primary level ?

- Ans  A. Children should learn to enjoy mathematics.  
 B. Inculcating a feeling of aversion towards mathematics among children.  
 C. To develop logical thinking among the children.  
 D. Making mathematics a part of children's real life experience.

Question ID : 75322913118

Q.16 निम्नलिखित में से कौन सी "मातृभाषा" की विशेषता "नहीं" है?

- Ans  A. मुख्य केंद्रबिंदु संचार पर है।  
 B. इसमें व्याकरण के नियमों और निर्देशों की आवश्यकता नहीं होती है।  
 C. यह सहज और एक प्राकृतिक प्रक्रिया है।  
 D. इसे औपचारिक शिक्षण स्थिति में ही पढ़ाया जा सकता है।

Question ID : 75322913111

Q.17 To enhance the language acquisition skills in 2 to 3 years children, the parents should not :-

- Ans  A. Chastise the child.  
 B. Ask the child yes or no questions.  
 C. Talk to them.  
 D. Encourage the child to use new words.

Question ID : 75322913116

Q.18 निम्नलिखित में से कौन सा "व्याकरण-अनुवाद विधि" के गुण के अंतर्गत आता है?

- Ans  A. यह शिक्षार्थियों से आत्मविश्वास को त्याग देता है।  
 B. इस पद्धति में नए शब्दों का प्रतिपादन शिक्षार्थी को बोधगम्य समझ प्रदान करता है।  
 C. यह विधि केवल पढ़ने और लिखने के कौशल पर केंद्रित है।  
 D. मातृभाषा पर जोर और इसलिए लक्ष्य भाषा की उपेक्षा की जाती है।

Question ID : 75322913113

Q.19 ICT stands for \_\_\_\_ and a byte consists \_\_\_\_ bits.

- Ans  A. Information and communication technology, 8  
 B. Inter-connected term, 16  
 C. Intra-communication technology, 10  
 D. International community terminology, 6

Question ID : 75322913104

Q.20 Language delay in a child "cannot" result from\_\_\_\_\_.

- Ans  A. Hereditary diseases  
 B. A Hearing Impairment  
 C. Autism  
 D. Mental Retardation

Question ID : 75322913115

Section : Discipline4

Q.1 Depression, self-harm, anxiety disorders , eating disorders are all examples of \_\_\_\_ health problems faced by children.

- Ans  A. Physical  
 B. Spiritual  
 C. Emotional  
 D. Intellectual

Question ID : 75322913139

Q.2 निम्नलिखित कथनों में से "शिक्षा में नाटक और कला" की आवश्यकता के बारे में एक का चयन करें?

- Ans  A. यह छात्रों को उनके वातावरण के समीप लाता है।  
 B. इससे छात्र अध्ययन से दूर हो जाते हैं।  
 C. यह छात्रों को शिक्षण-अधिगम का आनंद लेने में सक्षम बनाता है।  
 D. यह छात्रों को अधिक आत्मविश्वासी और अच्छी तरह से तैयार होने में सहायता करता है।

Question ID : 75322913132

Q.3 \_\_\_\_\_ is a teaching technique that focuses on the investigation of real-world problems using mathematics as a tool to make sense of the situation and map out possible solutions.

- Ans  A. The 5E lesson model  
 B. Mathematical modeling method  
 C. Demonstration method  
 D. The CRA model

Question ID : 75322913121

Q.4 Soma wants to teach about "EQUITY" in her classroom. Choose the most suitable method of teaching for her.

- Ans  A. Project Method  
 B. Question-Answer Method  
 C. Assigning field work  
 D. Chalk and Talk Method

Question ID : 75322913130

Q.5 दी गई गतिविधियों में से सबसे अच्छी गतिविधि का चयन करें जिसमें बच्चा "स्थानिक अवधारणाओं" की अपनी समझ विकसित कर सकेगा।

- Ans
- A. मानचित्र पर शहरों का पता लगाना।
  - B. रंगोली आरेखण/ बनाना।
  - C. सूर्योदय के समय का अवलोकन करना।
  - D. संख्या रेखा पर संख्याओं का प्रतिनिधित्व करना।

Question ID : 75322913122

Q.6 \_\_\_\_\_ in the "Gardening" is done to provide support for plant stems.

- Ans
- A. Staking
  - B. Culling
  - C. Deadheading
  - D. Fertilizing

Question ID : 75322913135

Q.7 Physical education has evolved as a \_\_\_\_\_ subject over time and its scope is not \_\_\_\_\_.

- Ans
- A. Theory, Unconfined
  - B. Practical, Narrower
  - C. Monotonous, Broader
  - D. Multi-disciplinary, Confined

Question ID : 75322913136

Q.8 Which one of these is "not" an example of problems faced by a social studies teacher ?

- Ans
- A. Being professional with students and maintaining a healthy gap.
  - B. Lack of resources available
  - C. Dealing with controversial topics
  - D. Making real life connections with the topics.

Question ID : 75322913129

Q.9 Parents and Community Resources can help primary children to understand E.V.S better by :-

- Ans
- A. Giving them a research project.
  - B. Giving them extra-homework.
  - C. Engaging them in real-life activities related to environment.
  - D. Telling them to play indoors.

Question ID : 75322913124

Q.10 Choose the most favourable statement about Social Science.

- Ans
- A. It does not focus on homogeneity.
  - B. It is subjective.
  - C. it is not concerned with diverse concerns of the society.
  - D. It promotes the foundation for an analytical and creative mindset.

Question ID : 75322913128

Q.11 Choose the incorrect statement about "Objectives of Physical Education".

- Ans  A. Reinforcement of malign fitness habits in our lifestyle.  
 B. Development of Socio-Psychological aspects like Leadership, Team-Spirit.  
 C. Development of motor abilities like strength, speed, endurance and flexibility.  
 D. Physical growth and development.

Question ID : 75322913134

Q.12 उस कथन का चयन करें जो प्राथमिक विद्यालय में "योग के लाभ" का वर्णन नहीं करता है।

- Ans  A. छात्रों की याददाश्त और ध्यान में सुधार करता है।  
 B. छात्रों की रोग प्रतिरोधक क्षमता को बढ़ाता है।  
 C. छात्रों को वजन बनाए रखने में मदद करता है।  
 D. छात्र के आत्मविश्वास और सम्मान में कमी लाता है।

Question ID : 75322913137

Q.13 इनमें से किसे छात्रों के बीच रचनात्मक अभिव्यक्ति को प्रोत्साहित करने में एक शिक्षक की भूमिका के रूप में "नहीं" स्वीकार किया जाता है?

- Ans  A. उनकी पसंद के अनुकूल।  
 B. छात्रों को अन्वेषण करने देना।  
 C. उन्हें अपने स्वयं के समूह बनाने के लिए स्वीकृति देना।  
 D. उनके असामान्य विचारों के लिए उन पर चिल्लाना।

Question ID : 75322913131

Q.14 \_\_\_\_\_ refers to the process through which we learn about the culture we live in.

- Ans  A. Deculturation  
 B. Enculturation  
 C. Pre-culturation  
 D. Unculturation

Question ID : 75322913133

Q.15 नेहा evs में फसल के प्रकारों के बारे में पढ़ाना चाहती है, तो निम्नलिखित में से उसके लिए सबसे उपयुक्त शिक्षण पद्धति क्या होगी?

- Ans  A. परियोजना विधि  
 B. चाक और टॉक विधि  
 C. चर्चा विधि  
 D. प्रदर्शन विधि

Question ID : 75322913125

Q.16 For teaching of EVS you are organising a field trip for "Plant Study". What according to you doesnot comes under the objectives of this field trip?

- Ans  A. observing and recording the differences in their external features.  
 B. ambiguity during classification of them on the basis of diversity seen.  
 C. identification of the familiar plants by their names.  
 D. recall the differences in shape, size, patterns and texture of them.

Question ID : 75322913126

Q.17 Textbook of E.V.S is child-centered, so that the children learn by \_\_\_\_\_ and not by \_\_\_\_\_.

- Ans  A. Knowledge, Skills  
 B. Exploring, Rote learning  
 C. Theory, Practical  
 D. Research, Subject

Question ID : 75322913123

Q.18 By using local resources, teachers can help students to \_\_\_\_\_ their own knowledge, develop \_\_\_\_\_ providing them direct learning experiences.

- Ans  A. Construct, Skills and Values  
 B. Skills and Values, Deconstruct  
 C. observe, rules and duties  
 D. receive, rules and duties

Question ID : 75322913127

Q.19 सबसे उपयुक्त कथन का चयन करें जो "बच्चों में अच्छे संवेगनात्मक स्वास्थ्य को बढ़ावा देने" के सर्वोत्तम तरीके का वर्णन करता हो।

- Ans  A. बच्चे को उसके खेलने के लिए पर्याप्त समय न देने देना।  
 B. स्थानीय गतिविधियों में भाग लेने के दौरान बच्चे को निष्क्रिय रहने देना।  
 C. स्वस्थ जीवन शैली का पालन करने में बच्चे को निरंतर परिश्रमी होने देना।  
 D. बच्चे को अपने परिवार के साथ संचार में असंगति उत्पन्न करने की अनुमति देकर।

Question ID : 75322913138

Q.20 \_\_\_\_\_ aims to provide young people with accurate, age appropriate and culturally relevant information; promote healthy attitudes and develop skills to enable them to respond to real-life situations effectively.

- Ans  A. Adolescence Education  
 B. Youth Education  
 C. Juvenile Education  
 D. Adult Education

Question ID : 75322913140

Section : Discipline5

Q.1 How can a teacher help adolescents ?

- Ans  A. By being capricious to them.  
 B. By establishing peer-pressure in their environment.  
 C. By expressing respect, care and love to them.  
 D. By discouraging them to talk on certain topics.

Question ID : 75322913144

Q.2 Rashi is physically inactive. She can have :-

- Ans  A. Slow learning.  
 B. Autism  
 C. Dyslexia  
 D. Increased risk for diseases.

Question ID : 75322913145

Q.3 Classroom physical activity cannot benefit students by :-

- Ans  A. Easing their disruptive behaviour in classroom.  
 B. Enhancing their concentration.  
 C. Debilitating their academic performance.  
 D. Refining their motivation and engagement in learning process.

Question ID : 75322913150

Q.4 विद्यालय निम्न द्वारा छात्रों के शारीरिक स्वास्थ्य को बढ़ावा दे सकते हैं: -

- Ans  A. खेल के कक्षा घंटे को समय-सारणी से निकालना।  
 B. अंतर और बाहरी विद्यालय खेलों का समर्थन करना।  
 C. सभा में शायद ही कभी P.T करना।  
 D. शैक्षणिक विषयों को अतिरिक्त समय देना।

Question ID : 75322913146

Q.5 निम्नलिखित में से कौन सा कथन कार्य शिक्षा के महत्व के अंतर्गत नहीं आता है?

- Ans  A. यह भोजन, पोषण और स्वच्छता आदि के बारे में जानकारी प्रदान करता है।  
 B. यह आवश्यक जीवन कौशल के विकास में सुधार करता है।  
 C. यह सामाजिक रूप से वांछनीय मूल्यों को विकसित करने में मदद करता है।  
 D. यह छात्रों को श्रमिकों और मजदूरों का अपमान करना सिखाता है।

Question ID : 75322913154

Q.6 रोटी कमाने के उद्देश्य से काम में व्यस्त होना \_\_\_\_\_ का पर्याय है।

- Ans  A. उत्पादन  
 B. काम  
 C. व्यापार  
 D. आजीविका

Question ID : 75322913155

Q.7 The SMC does not ensure :-

- Ans  A. Appointment of teachers.  
 B. Content of lesson planning.  
 C. Welfare of teachers and staff.  
 D. Fees and other charges.

Question ID : 75322913160



Q.8 Choose the incorrect statement in regards to "work education".

- Ans  A. It creates asymmetrical coordination between hand and brain.  
 B. It stabilizes problem-solving, critical thinking skills.  
 C. Inculcates professional readiness.  
 D. It is based on the principle of learning by doing.

Question ID : 75322913152

Q.9 \_\_\_\_\_ is a multi-component approach by which schools use all opportunities for students to make them physically active for more than 60 minutes each day.

- Ans  A. CEPAP  
 B. CSPAP  
 C. CWADP  
 D. CWDPA

Question ID : 75322913149

Q.10 Which one of these is "not" an example of "In-service training for teachers"?

- Ans  A. Workshop  
 B. Seminar  
 C. Hands-on training  
 D. Exhibition

Question ID : 75322913157

Q.11 शिक्षकों के लिए सेवाकालीन प्रशिक्षण में भी बहुत सारी समस्याएं हैं। निम्नलिखित कथनों में से सबसे उपयुक्त विकल्प का चयन करें जो सबसे उपयुक्त रूप से उसी का वर्णन करता है।

- Ans  A. सेवाकालीन शिक्षा कार्यक्रम पूंजी गहन है और अधिकांश प्रतिभागी स्व-प्रायोजित हैं।  
 B. सेवाकालीन शिक्षा कार्यक्रम शिक्षकों के व्यावसायिक विकास में सहायता प्रदान करता है  
 C. सेवाकालीन शिक्षा कार्यक्रम हमारी शिक्षा प्रणाली में योग्य और प्रशिक्षित शिक्षकों की आपूर्ति करता है।  
 D. सेवाकालीन शिक्षा कार्यक्रम भाग लेने वाले संकाय सदस्यों के लिए अतिरिक्त आय के स्रोत के रूप में कार्य करता है।

Question ID : 75322913156

Q.12 Adolescence education can help to :-

- Ans  A. Create slighter job-opportunities.  
 B. Vitalize life.  
 C. Stir up harmful behaviour.  
 D. Promote early marriages.

Question ID : 75322913143

Q.13 AEP, 2005 stands for :-

- Ans  A. Adolescence Equality Programme.  
 B. Adolescence Education Programme.  
 C. Adolescence Equality Plan.  
 D. Adolescence Education Plan.

Question ID : 75322913142

**Q.14 CSPAP stands for :-**

- Ans  A. Compound School Physical Action Plan.  
 B. Compound School Plan Action Program.  
 C. Comprehensive School Part Analysis Program.  
 D. Comprehensive School Physical Activity Program.

Question ID : 75322913148

**Q.15 The effective implementation of Work Education programme in schools should not comprise which of the following dimension?**

- Ans  A. Exhibition for parents.  
 B. Provision of funds and availability of resources – both expertise and materials.  
 C. Scheme of work for the year.  
 D. Orientation programmes for teachers.

Question ID : 75322913153

**Q.16 "Needing to release energy, with sudden outbursts of activity" is an emotional characteristic displayed by :-**

- Ans  A. An Adolescent  
 B. An Adult  
 C. A Gifted child  
 D. A slow learner

Question ID : 75322913141

**Q.17 Carl Rogers believed that the self-concept was made of 3 different parts. Identify the wrong type of part.**

- Ans  A. Self-esteem  
 B. Self-discovery  
 C. Self image  
 D. Ideal-self

Question ID : 75322913158

**Q.18 Schools are in a unique position to help students attain the nationally recommended \_\_\_\_ or more of moderate to vigorous physical activity daily.**

- Ans  A. 30 minutes  
 B. 45 minutes  
 C. 15 minutes  
 D. 60 minutes

Question ID : 75322913147

**Q.19 निम्नलिखित में से कौन विद्यालयों में PTA आयोजित करने के प्रमुख प्रयोजन और उद्देश्यों के अंतर्गत नहीं आता है?**

- Ans  A. बच्चे के गृह जीवन के मानकों को ऊपर उठाने के लिए।  
 B. घर और विद्यालय को निकट संपर्क में लाने के लिए।  
 C. विद्यालय के आयोजनों में उनकी भागीदारी को बढ़ावा देना।  
 D. बच्चों हेतु असुरक्षित कानूनों और सुरक्षा के लिए।

Question ID : 75322913159

**Q.20** In reference to work education programme a child's brain should be educated through

- Ans**
- A. Arms
  - B. Eyes
  - C. Legs
  - D. Hand

Question ID : 75322913151

